

Constable (GD) in CAPFs, NIA, SSF and Rifleman (GD) in Assam Rifles Examination, 2018

Roll No. :	www.GovtJobsAlert.In
Registration No.	
Name :	
Exam Venue :	
Exam Time :	
Exam Date :	01/03/2019

Section : General Section

Q.1 If SQUARE is coded as TSXEWK, then TRIANGLE will be coded as _____.

- Ans
- 1. UTLESNSM
 - 2. UTLFSMSM
 - 3. UTLESMSN
 - 4. UTLESMSM

Question ID : 9895808146
Chosen Option : 1

Q.2 U, V, W, X, Y and Z are seated in a circle facing the centre such that each one is facing another one. X is between Z and V. U is second to the left of X and second to the right of Y. Who is facing X?

- Ans
- 1. Y
 - 2. W
 - 3. U
 - 4. Z

Question ID : 9895808147
Chosen Option : 4

Q.3 Select the fraction that will next in the following series.

$$\frac{2}{3}, \frac{4}{5}, \frac{6}{7}, \frac{8}{9}, \frac{10}{11}, \frac{12}{13}, \underline{\hspace{2cm}}$$

- Ans
- 1. $\frac{13}{15}$
 - 2. $\frac{13}{14}$
 - 3. $\frac{14}{15}$
 - 4. $\frac{14}{16}$

Question ID : 9895808152
Chosen Option : 2

Q.4

The statements below are followed by three conclusions labeled I, II and III. Assuming that the information in the statements is true, even if it appears to be at variance with generally established facts, decide which conclusion(s) logically and definitely follow(s) from the information given in the statements.

Statements:

All balls are boats.

All boats are cars.

Conclusions:

I. Some cars are balls.

II. All balls are cars.

III. All cars are balls.

- Ans 1. All the conclusions follow.
 2. Only conclusion III follows.
 3. Only conclusions I and II follow.
 4. Only conclusions II and III follow.


Question ID : 9895808150
Chosen Option : 1

Q.5 Select the number-pair that is different from the rest.

- Ans 1. 7 – 345
 2. 5 – 125
 3. 9 – 729
 4. 3 – 27

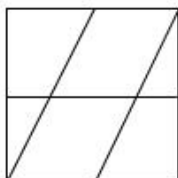
Question ID : 9895808155
Chosen Option : 2

Q.6 Select the option in which the given figure is embedded.



- Ans 1.
- 2.
- 3.

4.



Question ID : 9895808159
Chosen Option : 2

Q.7 Four words have been given out of which three are alike in some manner, while one is different. Choose the odd one.

- Ans 1. Volt
 2. Power
 3. Volume
 4. Force

Question ID : 9895808141
Chosen Option : 2

Q.8 Select the word-pair that is analogous to the given word-pair.

France : Paris

- Ans 1. India : Mumbai
 2. Cuba : Havana
 3. Iran : Rial
 4. China : Yuan

Question ID : 9895808143
Chosen Option : 1

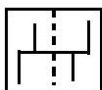
Q.9 Select the number that DOES NOT belong to the following group.

3, 6, 9, 12, 15, 18, 21, 24, 28, 30

- Ans 1. 30
 2. 28
 3. 15
 4. 18

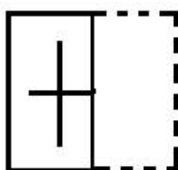
Question ID : 9895808153
Chosen Option : 1

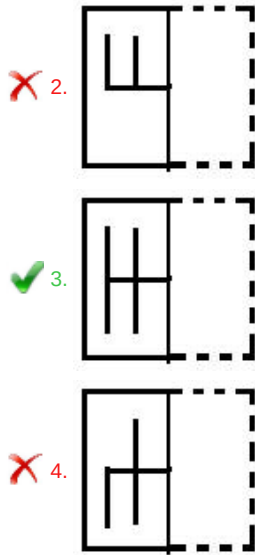
Q.1 A square transparent sheet with a pattern is given. Select from among the four alternatives how the pattern would appear when the transparent sheet is folded at the dotted line.



Ans

1.





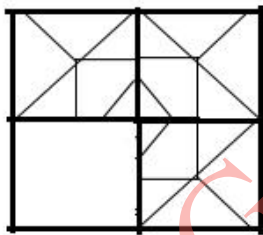
Question ID : 9895808162
Chosen Option : 3

Q.1 Six friends, P, Q, R, S, T and U, are sitting in a closed circle facing the centre such that each one is facing another one. P is facing S. R is between P and Q. U is between P and T who is sitting right of S. Who is sitting to the immediate right of R?

- Ans
- 1. S
 - 2. T
 - 3. P
 - 4. Q

Question ID : 9895808148
Chosen Option : 2

Q.1 Select the correct option to complete the following pattern.




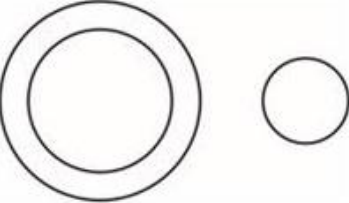
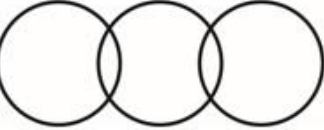

- Ans
- 1.
 - 2.
 - 3.
 - 4.

Question ID : 9895808160

Q.1 ₃ Select the Venn diagram that best illustrates the relationship between the three given classes.

Flowers, Red, Clothes

Ans

1. 
2. 
3. 
4. 

Question ID : 9895808163
Chosen Option : 1

Q.1 ₄ Which two signs need to be interchanged to make the given equation correct?

$$100 \div 10 \times 100 - 10 + 100 = 910$$

1. + and -
2. + and ÷
3. × and -
4. ÷ and ×

Question ID : 9895808156
Chosen Option : 2

Q.1 ₅ Select the option that is related to the third term in the same way as the second term is related to the first term.

Where : Place :: When : _____

1. Why
2. There
3. Time
4. Then

Question ID : 9895808144
Chosen Option : 2

Q.1 ₆

Select the option that is related to the third number in the same way as the second number is related to the first number.

9 : 100 :: 13 : _____

- Ans
- 1. 130
 - 2. 169
 - 3. 144
 - 4. 196

Question ID : 9895808154
Chosen Option : 1

Q.1 Four pairs of words have been given, out of which three are alike in some manner, while one is different. Choose out the odd one.

- Ans
- 1. Brother : Sister
 - 2. Lion : Lioness
 - 3. Cock : Hen
 - 4. Bear : Cub

Question ID : 9895808142
Chosen Option : 1

Q.1 Choose the option that most closely resembles the mirror image of the given word when mirror is placed at right side.

8

AIM

- Ans
- 1. MIA
 - 2. WIA
 - 3. AIW
 - 4. AIM

Question ID : 9895808161
Chosen Option : 4

Q.1 Read the given statements and conclusion carefully and decide which of the following options is true with respect to the given conclusion.

9

Statements:

The Gateway of India is in Mumbai.

Mumbai is in India.

Conclusion:

The Gateway of India is in India.

- Ans
- 1. Probably false
 - 2. True
 - 3. Probably true
 - 4. False

Question ID : 9895808151
Chosen Option : 2

Q.2 Diya have five subjects in her academics namely A, B, C, D and E. She studies them from Monday to Friday of a week.

0

On each day, only one subject will be studied. D or E should not be either the first or last to be studied. E should be immediately followed by C. B should be studied immediately after D. One subject will be studied between A and B.

Then which subject she immediately reads after Monday?

- Ans
- 1. E
 - 2. B
 - 3. D

✗ 4. A

Question ID : 9895808149
Chosen Option : 2

Q.2
1 Select the term that will come in the following series.

PC, RF, TI, VL, XO, _____.

- Ans
- ✗ 1. YQ
 - ✓ 2. ZR
 - ✗ 3. YR
 - ✗ 4. ZQ

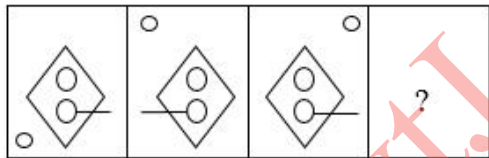
Question ID : 9895808139
Chosen Option : 1

Q.2
2 Identify the odd one from the following.

- Ans
- ✗ 1. HJL
 - ✗ 2. PRT
 - ✗ 3. VXZ
 - ✓ 4. CFG

Question ID : 9895808140
Chosen Option : 2

Q.2
3 Select the figure that will come next in the following series.



Ans

- ✗ 1.
- ✗ 2.
- ✗ 3.
- ✓ 4.

Question ID : 9895808158
Chosen Option : 1

Q.2 In the following number series, two numbers have been put within brackets. Study the series carefully and select the correct alternative with respect to the series.

1, 1, 2, 6, 24, (121), 720, (5040), 40320

Ans 1.

The first bracketed number (from the left) is incorrect and the second is correct.

- 2. Both the bracketed numbers are incorrect.
- 3. Both the bracketed numbers are correct.
- 4.

The first bracketed number (from the left) is correct and the second is incorrect.

Question ID : 9895808157
Chosen Option : 2

Q.2 If D = 3, G = 6, and FUN = 38, then PRESIDENT = _____.

- Ans 1. 110
 2. 119
 3. 100
 4. 101

Question ID : 9895808145
Chosen Option : 2

Q.2 The production of a commodity through natural process is an activity associated to which sector of the Indian Economy?

- Ans 1. Primary
 2. Secondary
 3. Quaternary
 4. Tertiary

Question ID : 9895807212
Chosen Option : 1

Q.2 'Theyyam' is a popular dance form of which of the following states?

- Ans 1. Kerala
 2. Manipur
 3. Gujarat
 4. Karnataka

Question ID : 9895807203
Chosen Option : 1

Q.2 Riboflavin present in fish is also known as:

- Ans 1. Vitamin K
 2. Vitamin B2
 3. Vitamin B12
 4. Vitamin C

Question ID : 9895807218
Chosen Option : 4

Q.2
9 'Azadirachta indica' is the botanical name of which evergreen tree found in the Indian sub-continent?

- Ans
- 1. Pine tree
 - 2. Curry tree
 - 3. Hibiscus tree
 - 4. Margosa tree

Question ID : 9895807219
Chosen Option : 1

Q.3
0 Which disease among the given options spreads via pigs?

- Ans
- 1. Nipah
 - 2. Zika
 - 3. Plague
 - 4. Swine flu

Question ID : 9895807221
Chosen Option : 1

Q.3
1 The movement of a horse drawn carriage is an example of which principle of physics?

- Ans
- 1. Avogadro's law
 - 2. Newton's third law of motion
 - 3. Ohm's law
 - 4. Archimedes principle

Question ID : 9895807217
Chosen Option : 4

Q.3
2 The festival of 'Hareli' is celebrated in which of the following Indian states?

- Ans
- 1. Punjab
 - 2. Madhya Pradesh
 - 3. Chhattisgarh
 - 4. Odisha

Question ID : 9895807204
Chosen Option : 1

Q.3
3 'Vijay Amritraj' was a legendary Indian player associated with which of the following sports?

- Ans
- 1. Rifle shooting
 - 2. Lawn tennis
 - 3. Badminton
 - 4. Swimming

Question ID : 9895807206

Chosen Option : 3

Q.3
4 Which mountain pass in the world has the highest motorable road in the world?

- Ans
- 1. Dhungria-La
 - 2. Jelep-La
 - 3. Nathu-La
 - 4. Shipki-La

Question ID : 9895807223

Chosen Option : 4

Q.3
5 What is India's rank in the World Bank's Human Capital Index (HCI) rankings as of Feb 2019?

- Ans
- 1. 104
 - 2. 124
 - 3. 115
 - 4. 126

Question ID : 9895807224

Chosen Option : 1

Q.3
6 Who is the cofounder of IndiGo Airlines?

- Ans
- 1. Pawan Munjal
 - 2. Rahul Bhatia
 - 3. Kiran Majumdar Shaw
 - 4. Y C Deveshwar

Question ID : 9895807208

Chosen Option : 2

Q.3
7 Which city will host the upcoming Winter Olympic Games scheduled in 2022?

- Ans
- 1. Paris
 - 2. Beijing
 - 3. Los Angeles
 - 4. Tokyo

Question ID : 9895807207

Chosen Option : 1

Q.3
8 As of January 2019, what is the number of articles in the Indian constitution?

- Ans
- 1. 431
 - 2. 448
 - 3. 402
 - 4. 395

Question ID : 9895807214

Chosen Option : 3

Q.3 Fiscal policy is based on the economic theory given by which of the following economist?

9

- Ans
- 1. Adam Smith
 - 2. Milton Friedman
 - 3. John Nash
 - 4. John Maynard Keynes

Question ID : 9895807211
Chosen Option : 2

Q.4
0 In which layer of the earth's atmosphere is the ozone layer found?

- Ans
- 1. Troposphere
 - 2. Stratosphere
 - 3. Mesosphere
 - 4. Exosphere

Question ID : 9895807220
Chosen Option : 2

Q.4
1 What was the capital of the French colony in India?

- Ans
- 1. Pondicherry
 - 2. Cochin
 - 3. Goa
 - 4. Calicut

Question ID : 9895807227
Chosen Option : 1

Q.4
2 Which famous Indian personality is the founder of 'Paani Foundation'?

- Ans
- 1. Ranveer Singh
 - 2. Salman Khan
 - 3. Shah Rukh Khan
 - 4. Amir Khan

Question ID : 9895807210
Chosen Option : 2

Q.4
3 With the commencement of the 7th century, who ascended the throne of Thaneshwar and Kannauj?

- Ans
- 1. Harshavardhana
 - 2. Krishnadeva
 - 3. Rajendra Chola I
 - 4. ChandraGupta II

Question ID : 9895807225
Chosen Option : 2

Q.4
4 'The Legend of Laxmi Prasad' was the title of a book written by which one of the following authors?

- Ans
- 1. Arundhati Roy

- 2. Jhumpa Lahiri
- 3. Shobha De
- 4. Twinkle Khanna

Question ID : 9895807209
Chosen Option : 2

Q.4
5 The National Food Security Act was passed in which of the following years?

- Ans
- 1. 2012
 - 2. 2013
 - 3. 2011
 - 4. 2014

Question ID : 9895807213
Chosen Option : 2

Q.4
6 'Talatal Ghar' is a historical monument situated in which of the following Indian states?

- Ans
- 1. Assam
 - 2. West Bengal
 - 3. Sikkim
 - 4. Odisha

Question ID : 9895807205
Chosen Option : 3

Q.4
7 The Consumer Protection Bill, 2018 has replaced the Consumer Protection Act of which of the given years?

- Ans
- 1. 1991
 - 2. 1986
 - 3. 1981
 - 4. 1978

Question ID : 9895807215
Chosen Option : 1

Q.4
8 Which among the following is the longest river in South India?

- Ans
- 1. Godavari
 - 2. Narmada
 - 3. Tungabhadra
 - 4. Krishna

Question ID : 9895807222
Chosen Option : 1

Q.4
9 'Tulsidas', a poet who lived during the medieval times of Indian history, wrote 'Ramcharitmanas' in which of the following languages?

- Ans
- 1. Sanskrit
 - 2. Pali
 - 3. Awadhi
 - 4. Prakrit

Question ID : 9895807226
Chosen Option : 1

Q.5₀ As on 2018, which is the world's largest political party in terms of primary membership?

- Ans
- 1. National republican Party US
 - 2. The Bharatiya Janta Party
 - 3. The Democratic Party of the US
 - 4. The Conservative Party of UK

Question ID : 9895807216
Chosen Option : 2

Q.5₁ By Selling a TV for ₹8500 a person loses 15%. In order to gain of 5%, Selling price of TV should be:

- Ans
- 1. ₹9,000
 - 2. ₹10,000
 - 3. ₹10,500
 - 4. ₹9,500

Question ID : 9895807534
Chosen Option : 1

Q.5₂ The difference between upper limit and lower limit of the class interval is called as:

- Ans
- 1. Mode
 - 2. Class size
 - 3. Frequency distribution
 - 4. Range

Question ID : 9895807549
Chosen Option : 2

Q.5₃ If $(x+y):(x-y)=3:2$ then $(x^2+y^2):(x^2-y^2)$ is in the ratio of :

- Ans
- 1. 12:13
 - 2. 5:12
 - 3. 24:5
 - 4. 13:12

Question ID : 9895807548
Chosen Option : 2

Q.5₄ The areas of two squares are 16:9. The ratio of their perimeter is:

- Ans
- 1. 9:16
 - 2. 12:16
 - 3. 16:12
 - 4. 9:12

Question ID : 9895807545

Chosen Option : 1

Q.5 Rama and Hari can together finish a piece of work in 15 day. Rama works twice as fast as Hari, then Hari alone can finish work in :

- Ans
- 1. 25 days
 - 2. 45 days
 - 3. 20 days
 - 4. 30 days

Question ID : 9895807540
Chosen Option : 4

Q.5 The compound interest on an amount for 2 years at 5% per annum compounded annually is ₹205. The simple interest is:

- Ans
- 1. ₹210
 - 2. ₹200
 - 3. ₹250
 - 4. ₹220

Question ID : 9895807538
Chosen Option : 1

Q.5 The Area of a rectangle is 27 m^2 and its length is 3 times of its breadth. The perimeter of the rectangle is:

- Ans
- 1. 28cm
 - 2. 12cm
 - 3. 42cm
 - 4. 24cm

Question ID : 9895807544
Chosen Option : 1

Q.5 A train is moving at 72 km/hrs. The distance covers in 15 minutes by the train is:

- Ans
- 1. 27 km
 - 2. 18 km
 - 3. 36 km
 - 4. 28 km

Question ID : 9895807541
Chosen Option : 2

Q.5 Shopkeeper selling on article for ₹46 loses 8%. In order to gain of 6%, what should be the selling price of the article?

- Ans
- 1. ₹85
 - 2. ₹65
 - 3. ₹56
 - 4. ₹53

Question ID : 9895807533
Chosen Option : 3

Q.6

0 The value of $30 \div 6 \times 5$ of $(2 + 3) - 12(3 \times 2)$ is equal to:

- Ans 1. 35
 2. 53
 3. 82
 4. 28

Question ID : 9895807529
 Chosen Option : 1

Q.6 In a class, the average age of 40 students is 12 years when teacher's age is included to it, the average increases by 1. The age of teacher is :

- Ans 1. 51 years
 2. 68 years
 3. 53 years
 4. 48 years

Question ID : 9895807531
 Chosen Option : 4

Q.6 Study the Table Properly and answer by interpreting the data

2 The table shows the percentage population of five districts in a state below poverty line and the proportion of males and females.

District	Percentage of population below poverty line	Proportion of Male and Female	
		Below poverty line (M:F)	Above poverty line (M:F)
D1	15	2:3	3:2
D2	18	3:4	7:5
D3	20	2:5	3:4
D4	25	5:2	4:3
D5	12	3:7	2:7

If the total population in the district D_3 is 40,000, then what is the population of below poverty line in the district D_3 ?

- Ans 1. 10,000
 2. 8,000
 3. 5,000
 4. 12,000

Question ID : 9895807551
 Chosen Option : 1

Q.6 Study the Table Properly and answer by interpreting the data

3 The table shows the percentage population of five districts in a state below poverty line and the proportion of males and females.

District	Percentage of population below poverty line	Proportion of Male and Female	
		Below poverty line (M:F)	Above poverty line (M:F)
D1	15	2:3	3:2
D2	18	3:4	7:5
D3	20	2:5	3:4
D4	25	5:2	4:3
D5	12	3:7	2:7

The total population in D_1 is 30,000. The number of female under below poverty line in the district D_1 is:

- Ans 1. 2500

- 2. 3500
- 3. 2700
- 4. 1800

Question ID : 9895807552
Chosen Option : 2

Q.6 In how many years, a sum will be thrice of it at the rate of interest 5% per annum?

- 4
- Ans 1. 40 years
- 2. 30 years
 - 3. 25 years
 - 4. 20 years

Question ID : 9895807537
Chosen Option : 4

Q.6 'A' pipe can empty a tank in 20 minutes. The second pipe 'B' has a diameter twice as that of 'A'. If both A & B pipe are attached to the tank how much time will be required to empty the tank?

- 5
- Ans 1. $10\frac{1}{2}$ minutes
- 2. $6\frac{2}{3}$ minutes
 - 3. 25 minutes
 - 4. 15 minutes

Question ID : 9895807539
Chosen Option : 1

Q.6 Study the Table Properly and answer by interpreting the data

6 The table shows the percentage population of five districts in a state below poverty line and the proportion of males and females.

District	Percentage of population below poverty line	Proportion of Male and Female	
		Below poverty line (M:F)	Above poverty line (M:F)
D1	15	2:3	3:2
D2	18	3:4	7:5
D3	20	2:5	3:4
D4	25	5:2	4:3
D5	12	3:7	2:7

If the total population of district D₄ is 35000, then what is the number of females above the poverty line in the district D₄?

- Ans 1. 14,240
- 2. 10,500
 - 3. 11,250
 - 4. 12,450

Question ID : 9895807550
Chosen Option : 2

Q.6 Two numbers are less than a third number by 25 and 36 respectively. The percentage of first number less than second number is:

- 7
- Ans 1. 11%
- 2. 52%

3. 61%

4. 18%

Question ID : 9895807536
Chosen Option : 1

Q.6 In a university, the number of students studying science, mathematics and language are in the ratio of 2:4:9. If the number of students in Science, Mathematics and Language be increased 10%, 20% and 40% respectively. What will be the new ratio?

- Ans 1. 11:24:63
 2. 24:11:63
 3. 12:23:63
 4. 63:11:24

Question ID : 9895807546
Chosen Option : 3

Q.6 A wheel makes 4000 revolution is covering a distance of 60km. The radius of the wheel is:

- Ans 1. 8m
 2. 2.39 m
 3. 4.68m
 4. 8.25m

Question ID : 9895807543
Chosen Option : 4

Q.7 A trader allows two successive discounts of 5% each on the marked price of a sofa set for ₹24,500. The selling price of sofa set is :

- Ans 1. ₹1,163.75
 2. ₹22,111.25
 3. ₹23,274.75
 4. ₹23,275

Question ID : 9895807535
Chosen Option : 2

Q.7 The HCF and LCM of two numbers are 12 and 240 respectively. If one of the number is 24, what is the another number

- Ans 1. 228
 2. 144
 3. 264
 4. 120

Question ID : 9895807528
Chosen Option : 1

Q.7 In class IX, the average of marks in science for six students was 48. After result declared, it was found in case of one student, the marks 45 were misread as 54. The correct average is :

- Ans 1. 46.40
 2. 46.50
 3. 76.50
 4. 64.39

Question ID : 9895807532
Chosen Option : 1

Q.7 Two numbers are 20% and 40% more than the third number respectively. The ratio of the first and second number is:
3

- Ans
- 1. 7:5
 - 2. 7:6
 - 3. 5:7
 - 4. 6:7

Question ID : 9895807547
Chosen Option : 1

Q.7 The distance between two stations is 500 km. A train starts from station 'A' at 9 am and travels towards station 'B' at 60 km/hrs. Another train starts from station 'B' at 10 am and travels towards 'A' at 40 km/hrs. At what time both the train meet to each other.
4

- Ans
- 1. 1.36 PM
 - 2. 12.45 PM
 - 3. 3.36 PM
 - 4. 2.24 PM

Question ID : 9895807542
Chosen Option : 2

Q.7 The value of $25 \text{ of } 4 - 30 + (2^2 + 18)$ is:
5

- Ans
- 1. 84
 - 2. 92
 - 3. 37
 - 4. 23

Question ID : 9895807530
Chosen Option : 4

Section : English Language

Q.1 Select the antonym of the given word.

CONVENE

- Ans
- 1. Disperse
 - 2. Gather
 - 3. Summon
 - 4. Request

Question ID : 9895807869
Chosen Option : 1

Q.2 Select the correctly spelt word.

- Ans
- 1. Supplementary
 - 2. Supplementery
 - 3. Suplementary

4. Supplementary

Question ID : 9895807875
Chosen Option : 3

Q.3 Select the most appropriate option to substitute the underlined segment in the given sentence. If there is no need to substitute it, select No improvement.

Those who are travelling today by train may have delayed in reaching their destinations.

- Ans 1. travelling today by train may get delayed
 2. travel today by train may get delayed
 3. travelling today in train may get delayed
 4. No improvement

Question ID : 9895807858
Chosen Option : 2

Comprehension:

In the following passage some words have been deleted. Fill in the blanks with the help of the alternatives given.

"Success begins in the mind." This is a wonderful quote to explain the power of having (1) _____ in yourself. Since (2) _____ wants success, they all try their best. Sometimes they will (3) _____ failure, but that's what life is. Ups and downs are a part of it. All you need is to take that failure in your (4) _____ learn from it and never forget it. It doesn't matter how or where you come from, success happens to those who (5) _____ hands with difficulties.

SubQuestion No : 4

Q.4 Select the most appropriate option that will fill in the blank number 1.

- Ans 1. disgust
 2. doubt
 3. faith
 4. discard

Question ID : 9895807862
Chosen Option : 2

Comprehension:

In the following passage some words have been deleted. Fill in the blanks with the help of the alternatives given.

"Success begins in the mind." This is a wonderful quote to explain the power of having (1) _____ in yourself. Since (2) _____ wants success, they all try their best. Sometimes they will (3) _____ failure, but that's what life is. Ups and downs are a part of it. All you need is to take that failure in your (4) _____ learn from it and never forget it. It doesn't matter how or where you come from, success happens to those who (5) _____ hands with difficulties.

SubQuestion No : 5

Q.5 Select the most appropriate option that will fill in the blank number 2.

- Ans
- 1. someone
 - 2. each
 - 3. everyone
 - 4. anyone

Question ID : 9895807863
Chosen Option : 3

Comprehension:

In the following passage some words have been deleted. Fill in the blanks with the help of the alternatives given.

"Success begins in the mind." This is a wonderful quote to explain the power of having (1) _____ in yourself. Since (2) _____ wants success, they all try their best. Sometimes they will (3) _____ failure, but that's what life is. Ups and downs are a part of it. All you need is to take that failure in your (4) _____ learn from it and never forget it. It doesn't matter how or where you come from, success happens to those who (5) _____ hands with difficulties.

SubQuestion No : 6

Q.6

Select the most appropriate option that will fill in

the blank number 3.

- Ans
- 1. clash
 - 2. encounter
 - 3. see
 - 4. oppose

Question ID : 9895807864
Chosen Option : 1

Comprehension:

In the following passage some words have been deleted. Fill in the blanks with the help of the alternatives given.

"Success begins in the mind." This is a wonderful quote to explain the power of having (1) _____ in yourself. Since (2) _____ wants success, they all try their best. Sometimes they will (3) _____ failure, but that's what life is. Ups and downs are a part of it. All you need is to take that failure in your (4) _____ learn from it and never forget it. It doesn't matter how or where you come from, success happens to those who (5) _____ hands with difficulties.

SubQuestion No : 7

Q.7 Select the most appropriate option that will fill in the blank number 4.

- Ans
- 1. run
 - 2. stride
 - 3. walk
 - 4. wing

Question ID : 9895807865
Chosen Option : 3

Comprehension:

In the following passage some words have been deleted. Fill in the blanks with the help of the alternatives given.

"Success begins in the mind." This is a wonderful quote to explain the power of having (1) _____ in yourself. Since (2) _____ wants success, they all try their best. Sometimes they will (3) _____ failure, but that's what life is. Ups and downs are a part of it. All you need is to take that failure in your (4) _____ learn from it and never forget it. It doesn't matter how or where you come from, success happens to those who (5) _____ hands with difficulties.

SubQuestion No : 8

Q.8 Select the most appropriate option that will fill in the blank number 5.

- Ans
- 1. move
 - 2. avoid
 - 3. see
 - 4. shake

Question ID : 9895807866

Chosen Option : 4

Q.9 Select the most appropriate option to fill in the blank.

Whenever he refers to his friends he is pleased but when he talks of his foes he is _____.

- Ans
- 1. serene
 - 2. possessed
 - 3. interested
 - 4. unhappy

Question ID : 9895807860

Chosen Option : 3

Q.10 Select the word which means the same as the group of words given.

A person who is indifferent to the pains and pleasures of life.

- Ans
- 1. Solitary
 - 2. Stoic
 - 3. Introvert
 - 4. Social

Question ID : 9895807874

Chosen Option : 1

Q.1
1 Select the synonym of the given word.

AFFINITY

- Ans
- 1. Decency
 - 2. Empathy
 - 3. Beauty
 - 4. Monotony

Question ID : 9895807867

Chosen Option : 4

Q.1
2 Select the most appropriate word to fill in the blank.

You can master anything by the usual process of learning and practicing it _____.

- Ans
- 1. regularly
 - 2. occasionally
 - 3. annually
 - 4. temporarily

Question ID : 9895807877

Chosen Option : 1

Q.1
3 Select the most appropriate option to substitute the underlined segment in the given sentence. If there is no need to substitute it, select No improvement.

On the academic front you are likely to outshine others and take up a better career.

- Ans
- 1. you should likely to outshine others
 - 2. you were likely to outshine others
 - 3. you are likely for outshine other
 - 4. No improvement

Question ID : 9895807857

Chosen Option : 1

Q.1
4 Select the most appropriate option to fill in the blank.

My forefinger is still _____ where I caught it in the door this morning.

- Ans
- 1. damaged
 - 2. scorched
 - 3. bruised
 - 4. burnt

Question ID : 9895807859

Chosen Option : 2

Q.1

5 Select the most appropriate word to fill in the blank.

Your parents may get _____ with your lifestyle and demand a change in it.

- Ans
- 1. pleased
 - 2. annoyed
 - 3. satisfied
 - 4. fulfilled

Question ID : 9895807878
Chosen Option : 3

Q.1
6 Select the synonym of the given word.

CUMBERSOME

- Ans
- 1. Graceful
 - 2. Heavy
 - 3. Virtuous
 - 4. Wonderful

Question ID : 9895807868
Chosen Option : 1

Q.1
7 Select the option that means the same as the given idiom.

Call it a day

- Ans
- 1. Disagreeing on everything someone is saying
 - 2. Agreeing to reveal some secret information
 - 3. Attempting to do an impossible task
 - 4. Decide or agree to stop doing something

Question ID : 9895807871
Chosen Option : 3

Q.1
8 Select the correctly spelt word.

- Ans
- 1. Bugett
 - 2. Budget
 - 3. Badjet
 - 4. Budget

Question ID : 9895807876
Chosen Option : 2

Q.1
9 Select the word which means the same as the group of words given.

One who does a thing for pleasure and not as a profession

- Ans
- 1. Amateur

- 2. Sportsperson
- 3. Volunteer
- 4. Athlete

Question ID : 9895807873
Chosen Option : 2

Q.2
0 Select the antonym of the given word.

CONCUR

- Ans
- 1. Lead
 - 2. Contribute
 - 3. Distribute
 - 4. Disagree

Question ID : 9895807870
Chosen Option : 3

Q.2
1 From the given options, identify the segment in the sentence which contains the grammatical error.

You are invite to build a better community by planting a seed of peace within and a tree outside.

- Ans
- 1. You are invite to
 - 2. by planting a seed of peace
 - 3. within and a tree outside
 - 4. build a better community

Question ID : 9895807853
Chosen Option : 1

Q.2
2 Select the option that means the same as the given idiom.

To hang together

- Ans
- 1. to take a swing in a garden
 - 2. To be connected with each other
 - 3. To keep holding on to something
 - 4. To be over telephone with a friend

Question ID : 9895807872
Chosen Option : 1

Q.2
3 Select the most appropriate option to substitute the underlined segment in the given sentence. If there is no need to substitute it, select No improvement.

Statistical measure which track the money-saving behaviour haven't improved much.

- Ans
- 1. No improvement
 - 2. measures which track the money-saving behaviour
 - 3. measure which tracks money-saving behaviours
 - 4. measures what track the money-saving behaviour

Question ID : 9895807856
Chosen Option : 1

Q.2 From the given options, identify the segment in the sentence which contains the grammatical error.
4

While we would like all Indian children to go to school, we need to ponder why they does not.

- Ans
- 1. While we would like
 - 2. Indian children to go to school
 - 3. why they does not
 - 4. we need to ponder

Question ID : 9895807854
Chosen Option : 2

Q.2 From the given options, identify the segment in the sentence which contains the grammatical error.
5

In India, the various practices and norms from bank's transactions are laid down by the RBI only.

- Ans
- 1. are laid down
 - 2. by the RBI only
 - 3. norms from bank's transactions
 - 4. the various practices

Question ID : 9895807855
Chosen Option : 3

Section : Hindi Language

Q.1 निम्नलिखित में से उस विकल्प का चयन करें जो 'जान हथेली पर रखना' मुहावरे का अर्थ व्यक्त करता है।

- Ans
- 1. जान कीमती होना
 - 2. जीवन को संकट में डालना
 - 3. जान को हथेली के उपर रखना
 - 4. सुविधाजनक कार्य करना

Question ID : 9895806652
Chosen Option : --

Q.2 दिए गए वाक्य में रेखांकित खंड को प्रतिस्थापित करने के लिए उपयुक्त विकल्प का चयन करें।

सीता के लव और कुश दो बेटे थे।

- Ans
- 1. तनय
 - 2. वत्सला
 - 3. प्यारे
 - 4. तनया

Question ID : 9895806635
Chosen Option : --

Q.3 दिए गए वाक्य में रेखांकित खंड को प्रतिस्थापित करने के लिए उपयुक्त विकल्प का चयन करें।

सचिव ने अध्यक्ष के गले में फूलों की एक माला डाली।

- Ans
- 1. समन्वयक
 - 2. निर्देशक
 - 3. सभापति
 - 4. मंत्री

Question ID : 9895806634
Chosen Option : --

Q.4 रिक्त स्थान को भरने के लिए उपयुक्त शब्द का चयन करें।

चोर के पीछे पुलिस भागी _____ उसे पकड़ नहीं पाई।

- Ans
- 1. अभी
 - 2. या
 - 3. परंतु
 - 4. अन्यथा

Question ID : 9895806639
Chosen Option : --

Q.5 निम्नलिखित में से उस विकल्प का चयन करें जो 'फूँक-फूँक कर कदम रखना' मुहावरे का अर्थ व्यक्त करता है।

- Ans
- 1. फूँक मार कर कदम बढ़ाना
 - 2. आवेग में काम करना
 - 3. तनिक भी अच्छा न लगना
 - 4. सोच समझ कर काम करना

Question ID : 9895806651
Chosen Option : --

Q.6 दिए गए वाक्य का वह भाग ज्ञात करें जिसमें कोई त्रुटि है।
आप सायं मेरे घर अवश्य आएँ मैं तुम लोगों को कुछ कीमती पुस्तकें भेंट करूँगा।

- Ans
- 1. कुछ कीमती पुस्तकें भेंट करूँगा।
 - 2. आप सायं
 - 3. मैं तुम लोगों को
 - 4. मेरे घर अवश्य आएँ

Question ID : 9895806633
Chosen Option : --

Q.7 दिए गए वाक्य में रेखांकित खंड को प्रतिस्थापित करने के लिए उपयुक्त विकल्प का चयन करें।

तुम्हारी बातों का कोई प्रमाण नहीं है।

- Ans
- 1. उदाहरण
 - 2. साक्ष्य
 - 3. सत्य

✓ 4. तर्क

Question ID : 9895806636
Chosen Option : --

Q.8 दिये गये वाक्यांश के लिए एक शब्द दीजिये।

जिसे जीता न जा सके

- Ans
- ✓ 1. अजेय
 - ✗ 2. अजर
 - ✗ 3. अविस्मरणीय
 - ✗ 4. अनंत

Question ID : 9895806654
Chosen Option : --

Q.9 दिए गए शब्द का विलोम चुनें।

व्योम

- Ans
- ✓ 1. आकाश
 - ✗ 2. धरा
 - ✗ 3. राजा
 - ✗ 4. पक्षी

Question ID : 9895806647
Chosen Option : --

Q.1 दिए गए वाक्य का वह भाग ज्ञात करें जिसमें कोई त्रुटि है।

0 पहले दो दिन तो सुधा ने कृष्णा को सामने से गुजरते देखा था लेकिन वह तो तड़के ही निकल जाता था।

- Ans
- ✗ 1. लेकिन वह तो तड़के ही
 - ✗ 2. निकल जाता था।
 - ✓ 3. पहले दो दिन तो सुधा ने
 - ✗ 4. कृष्णा को सामने से गुजरते देखा था

Question ID : 9895806631
Chosen Option : --

Q.1 दिए गए शब्द के पर्यायवाची शब्द का चयन करें।

स्वर्ण

- Ans
- ✗ 1. करी
 - ✓ 2. सुमन
 - ✗ 3. नीरद
 - ✗ 4. कंचन

Question ID : 9895806650

Q.1₂ दिए गए शब्द के पर्यायवाची शब्द का चयन करें।

महादेव

- Ans
- 1. ब्रह्मा
 - 2. विष्णु
 - 3. शंकर
 - 4. कृष्ण

Question ID : 9895806649

Chosen Option : --

Q.1₃ रिक्त स्थान को भरने के लिए उपयुक्त शब्द का चयन करें।

माँ ने डाँटकर मुझसे _____।

- Ans
- 1. खाया
 - 2. नाचा
 - 3. पूछा
 - 4. भागा

Question ID : 9895806637

Chosen Option : --

Comprehension:

निम्नलिखित गद्यांश के रिक्त स्थानों की पूर्ति गद्यांश के नीचे दिए गए प्रश्नों के अनुसार कीजिए -

नैतिक मूल्यों के माध्यम से राष्ट्र निर्माण की शिक्षा देना शिक्षा व्यवस्था का प्रथम एवं महत्वपूर्ण _____ (1) है। निर्माण शब्द का शाब्दिक अर्थ है किसी रचना को बनाने के लिए एक खाका तैयार करना, आवश्यक _____ (2) जुटाना और कठिन परिश्रम के साथ खाके के अनुसार संरचना तैयार करना। इसी प्रक्रिया में समय लगता है, धैर्य, प्रतीक्षा और _____ (3) की आवश्यकता होती है। शिक्षा राष्ट्र निर्माण का एक उपक्रम है, जिसके माध्यम से हम अधिकतम _____ (4) तक निर्माण कर सकते हैं, बशर्ते कि इसके लिए हमारे प्रयास और _____ (5) मजबूत हों। दूरदृष्टि और नियोजन के बिना रचनात्मक युवा मस्तिष्कों में राष्ट्रनिर्माण का बीज नहीं डाला जा सकता।

SubQuestion No : 14

Q.1₄ गद्यांश में संकेतित रिक्त स्थान (1) के लिए उपयुक्त शब्द होगा

- Ans
- 1. दायित्व

- 2. उपदेश
- 3. कदम
- 4. साहस

Question ID : 9895806642
Chosen Option : --

Comprehension:

निम्नलिखित गद्यांश के रिक्त स्थानों की पूर्ति गद्यांश के नीचे दिए गए प्रश्नों के अनुसार कीजिए -

नैतिक मूल्यों के माध्यम से राष्ट्र निर्माण की शिक्षा देना शिक्षा व्यवस्था का प्रथम एवं महत्वपूर्ण _____ (1) है। निर्माण शब्द का शाब्दिक अर्थ है किसी रचना को बनाने के लिए एक खाका तैयार करना, आवश्यक _____ (2) जुटाना और कठिन परिश्रम के साथ खाके के अनुसार संरचना तैयार करना। इसी प्रक्रिया में समय लगता है, धैर्य, प्रतीक्षा और _____ (3) की आवश्यकता होती है। शिक्षा राष्ट्र निर्माण का एक उपक्रम है, जिसके माध्यम से हम अधिकतम _____ (4) तक निर्माण कर सकते हैं, बशर्ते कि इसके लिए हमारे प्रयास और _____ (5) मजबूत हों। दूरदृष्टि और नियोजन के बिना रचनात्मक युवा मस्तिष्कों में राष्ट्रनिर्माण का बीज नहीं डाला जा सकता।

SubQuestion No : 15

Q.1 गद्यांश में संकेतित रिक्त स्थान (2) के लिए उपयुक्त शब्द होगा

- Ans
- 1. मनुष्य
 - 2. भीड़
 - 3. संसाधक
 - 4. संसाधन

Question ID : 9895806643
Chosen Option : --

Comprehension:

निम्नलिखित गद्यांश के रिक्त स्थानों की पूर्ति गद्यांश के नीचे दिए गए प्रश्नों के अनुसार कीजिए -

नैतिक मूल्यों के माध्यम से राष्ट्र निर्माण की शिक्षा देना शिक्षा व्यवस्था का प्रथम एवं महत्वपूर्ण _____(1) है। निर्माण शब्द का शाब्दिक अर्थ है किसी रचना को बनाने के लिए एक खाका तैयार करना, आवश्यक _____(2) जुटाना और कठिन परिश्रम के साथ खाके के अनुसार संरचना तैयार करना। इसी प्रक्रिया में समय लगता है, धैर्य, प्रतीक्षा और _____(3) की आवश्यकता होती है। शिक्षा राष्ट्र निर्माण का एक उपक्रम है, जिसके माध्यम से हम अधिकतम _____(4) तक निर्माण कर सकते हैं, बशर्ते कि इसके लिए हमारे प्रयास और _____(5) मजबूत हों। दूरदृष्टि और नियोजन के बिना रचनात्मक युवा मस्तिष्कों में राष्ट्रनिर्माण का बीज नहीं डाला जा सकता।

SubQuestion No : 16

Q.1
6 गद्यांश में संकेतित रिक्त स्थान (3) के लिए उपयुक्त शब्द होगा

- Ans
- 1. काल
 - 2. सामग्री
 - 3. समय
 - 4. परिश्रम

Question ID : 9895806644
Chosen Option : --

Comprehension:

निम्नलिखित गद्यांश के रिक्त स्थानों की पूर्ति गद्यांश के नीचे दिए गए प्रश्नों के अनुसार कीजिए -

नैतिक मूल्यों के माध्यम से राष्ट्र निर्माण की शिक्षा देना शिक्षा व्यवस्था का प्रथम एवं महत्वपूर्ण _____(1) है। निर्माण शब्द का शाब्दिक अर्थ है किसी रचना को बनाने के लिए एक खाका तैयार करना, आवश्यक _____(2) जुटाना और कठिन परिश्रम के साथ खाके के अनुसार संरचना तैयार करना। इसी प्रक्रिया में समय लगता है, धैर्य, प्रतीक्षा और _____(3) की आवश्यकता होती है। शिक्षा राष्ट्र निर्माण का एक उपक्रम है, जिसके माध्यम से हम अधिकतम _____(4) तक निर्माण कर सकते हैं, बशर्ते कि इसके लिए हमारे प्रयास और _____(5) मजबूत हों। दूरदृष्टि और नियोजन के बिना रचनात्मक युवा मस्तिष्कों में राष्ट्रनिर्माण का बीज नहीं डाला जा सकता।

SubQuestion No : 17

Q.1
7 गद्यांश में संकेतित रिक्त स्थान (4) के लिए उपयुक्त शब्द होगा

- Ans
- 1. सामर्थ्य
 - 2. बुद्धि
 - 3. भावना
 - 4. बल

Question ID : 9895806645
Chosen Option : --

Comprehension:

निम्नलिखित गद्यांश के रिक्त स्थानों की पूर्ति गद्यांश के नीचे दिए गए प्रश्नों के अनुसार कीजिए -

नैतिक मूल्यों के माध्यम से राष्ट्र निर्माण की शिक्षा देना शिक्षा व्यवस्था का प्रथम एवं महत्वपूर्ण _____ (1) है। निर्माण शब्द का शाब्दिक अर्थ है किसी रचना को बनाने के लिए एक खाका तैयार करना, आवश्यक _____ (2) जुटाना और कठिन परिश्रम के साथ खाके के अनुसार संरचना तैयार करना। इसी प्रक्रिया में समय लगता है, धैर्य, प्रतीक्षा और _____ (3) की आवश्यकता होती है। शिक्षा राष्ट्र निर्माण का एक उपक्रम है, जिसके माध्यम से हम अधिकतम _____ (4) तक निर्माण कर सकते हैं, बशर्ते कि इसके लिए हमारे प्रयास और _____ (5) मजबूत हों। दूरदृष्टि और नियोजन के बिना रचनात्मक युवा मस्तिष्कों में राष्ट्रनिर्माण का बीज नहीं डाला जा सकता।

SubQuestion No : 18

Q.1
8 गद्यांश में संकेतित रिक्त स्थान (5) के लिए उपयुक्त शब्द होगा

- Ans
- 1. कल्पना
 - 2. महत्वाकांक्षा
 - 3. सपना
 - 4. इच्छाशक्ति

Question ID : 9895806646
Chosen Option : --

Q.1
9 दिए गए वाक्य का वह भाग जात करें जिसमें कोई त्रुटि है।

मैंने राम को सभी महत्वपूर्ण प्रश्नों के उत्तर बताए परन्तु उसे कुछ समझ में न आया।

- Ans
- 1. उत्तर बताए परन्तु
 - 2. सभी महत्वपूर्ण प्रश्नों के

3. उसे कुछ समझ में न आया।

4. मैंने राम को

Question ID : 9895806632
Chosen Option : --

Q.2
0 रिक्त स्थान को भरने के लिए उपयुक्त शब्द का चयन करें।

किसी ने दरवाजा _____ है।

Ans 1. फड़फड़ाया

2. खटखटाया

3. हनहनाया

4. बिलबिलाया

Question ID : 9895806638
Chosen Option : --

Q.2
1 सही वर्तनी वाले शब्द का चयन करें।

Ans 1. विध्वांस

2. वीध्वांस

3. विध्वंस

4. विधवंस

Question ID : 9895806655
Chosen Option : --

Q.2
2 सही वर्तनी वाले शब्द का चयन करें।

Ans 1. श्रद्धालू

2. श्रद्धलु

3. शर्धालू

4. श्रद्धालु

Question ID : 9895806656
Chosen Option : --

Q.2
3 दिए गए शब्द का विलोम चुनें।

सामान्य

Ans 1. आम

2. विशेष

3. सामने

4. अन्य

Question ID : 9895806648
Chosen Option : --

Q.2
4 रिक्त स्थान को भरने के लिए उपयुक्त शब्द का चयन करें।

_____ विद्यार्थियों को पढ़ाता है।

- Ans
- 1. वकील
 - 2. बागवान
 - 3. अभियंता
 - 4. अध्यापक

Question ID : 9895806640
Chosen Option : --

Q.2
5 दिये गये वाक्यांश के लिए एक शब्द दीजिये।

जिसे भुलाया न जा सके

- Ans
- 1. अविस्मरणीय
 - 2. अज्ञेय
 - 3. विस्मरणीय
 - 4. भूलनीय

Question ID : 9895806653
Chosen Option : --