

Constable (GD) in CAPFs, NIA, SSF and Rifleman (GD) in Assam Rifles Examination, 2018

Roll No. :	www.GovtJobsAlert.In
Registration No.	
Name :	
Exam Venue :	iON Digital Zone iDZ Kanti
Exam Time :	12:30 PM - 2:00 PM
Exam Date :	01/03/2019

Section : General Section

Q.1 Select the option that is related to the third term in the same way as the second term is related to the first term.

Man : Mammal :: Butterfly : _____

- Ans
- 1. Caterpillar
 - 2. Insect
 - 3. Bird
 - 4. Reptile

Question ID : 9895808169
Chosen Option : 1

Q.2 Select the option that is related to the third term in the same way as the second term is related to the first term.

KN : $\frac{121}{196}$:: RU : _____

- Ans
- 1. $\frac{256}{400}$
 - 2. $\frac{256}{196}$
 - 3. $\frac{324}{144}$
 - 4. $\frac{324}{441}$

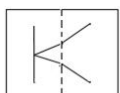
Question ID : 9895808179
Chosen Option : 2

Q.3 If SCIENCE is coded as 14 and MATHS is coded as 10, then what will be the code for EXAMINATION?

- Ans
- 1. 21
 - 2. 22
 - 3. 11
 - 4. 23

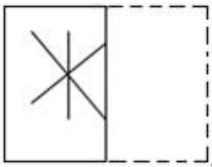
Question ID : 9895808170
Chosen Option : 4

Q.4 A square transparent sheet with a pattern is given. Select from among the four alternatives how the pattern would appear when the transparent sheet is folded at the dotted line.

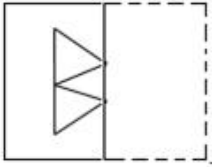


Ans

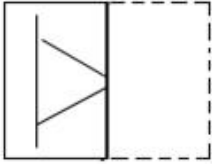
1.



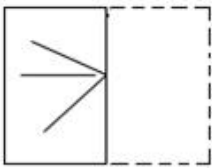
2.



3.



4.



Question ID : 9895808187
Chosen Option : 1

Q.5 Select the number-pair that is different from the rest.

- Ans 1. 7 – 49
 2. 16 – 256
 3. 12 – 144
 4. 13 – 196

Question ID : 9895808180
Chosen Option : 4

Q.6 Six friends, Anitha, Punitha, Chithra, Deepthi, Harini and Vani, are sitting in a field. Anitha and Punitha are from the Green house, whereas the rest belong to the Red house. Deepthi and Vani are tall, whereas the others are short. Anitha, Chithra and Deepthi are wearing saris, whereas the others are wearing frocks.

Who among them is tall and from the Red house but not wearing a sari?

- Ans 1. Deepthi
 2. Anitha
 3. Vani
 4. Chithra

Question ID : 9895808174
Chosen Option : 3

Q.7 Read the given statements and conclusion carefully and decide which of the following options is true with respect to the given conclusion.

Statements:

Men who are handsome are generally of the intellectual type.

Vikram is handsome.

Conclusion:

Vikram is intellectual.

- Ans 1. Probably false

2. Probably true

3. True

4. False

Question ID : 9895808176
Chosen Option : 3

Q.8 Which two signs/numbers need to be interchanged to make the given equation correct?

$$8 \div 2 + 4 = 10$$

Ans 1. \div and $+$, 8 and 4

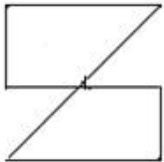
2. \div and $+$

3. $+$ and \div , 8 and 2

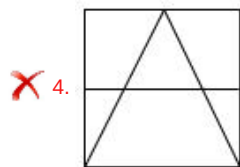
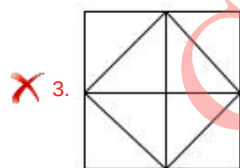
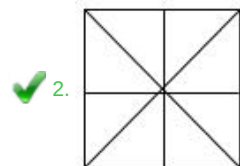
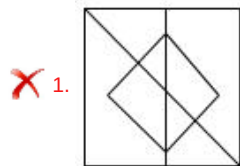
4. $+$ and \div , 2 and 4

Question ID : 9895808181
Chosen Option : 3

Q.9 Select the option in which the given figure is embedded.



Ans



Question ID : 9895808184
Chosen Option : 3

Q.1 Choose the option that most closely resembles the mirror image of the given word when mirror is placed at right side.

0
NATION

Ans 1. NOITAI

2. IATION

3. NOITAN

4. NATION

Question ID : 9895808186
Chosen Option : 1

Q.1 The statements below are followed by two conclusions labeled I and II. Assuming that the information in the statements is true, even if it appears to be at variance with generally established facts, decide which conclusion(s) logically and definitely follow(s) from the information given in the statements.

Statements:

Some girls are women.

No woman is brown.

Conclusions:

I. Some girls are not brown.

II. Some women are girls.

- Ans**
- 1. Only conclusion II follows.
 - 2. Only conclusion I follows.
 - 3. Both conclusions I and II follow.
 - 4. Neither conclusion I nor II follows.

Question ID : 9895808175
Chosen Option : 2

Q.1 Seven friends — Ajith, Bala, Hari, David, Raja, Sekar and Guna — are sitting around a circular table. David is not the neighbour of Hari and Raja. Ajith is the neighbour of Bala and Hari. Guna, who is second to the left of David, is the neighbour of Sekar and Raja.

What is the position of Hari?

- Ans**
- 1. To the immediate left of Ajith
 - 2. To the immediate right of Raja
 - 3. Third to the left of Sekar
 - 4. Second to the left of Bala

Question ID : 9895808172
Chosen Option : 2

Q.1 Select the number that will come next in the following series.

1, 5, 9, 17, 25, 37, 49, 65, 81, _____

- Ans**
- 1. 99
 - 2. 110
 - 3. 100
 - 4. 101

Question ID : 9895808177
Chosen Option : 4

Q.1 Four words have been given out of which three are alike in some manner, while one is different. Choose the odd one.

- Ans**
- 1. Cub
 - 2. Sty
 - 3. Hive
 - 4. Kennel

Question ID : 9895808166
Chosen Option : 2

Q.1
5 Select the word-pair that is analogous to the given word-pair.

Bird : Fly

- Ans
- 1. Cat : Kitten
 - 2. Fox : Vixen
 - 3. Cattle : Herd
 - 4. Horse : Gallop

Question ID : 9895808168
Chosen Option : 4

Q.1
6 Select the number that DOES NOT belong to the following group.

1, 2, 6, 21, 88, 446, 2676

- Ans
- 1. 6
 - 2. 446
 - 3. 21
 - 4. 88

Question ID : 9895808178
Chosen Option : 3



Q.1
7 Seven students are standing in a row. B is standing to the left of C and to the right of A. D is standing to the right of E and to the left of A. F is standing to the right of C and to the left of G. Who is standing in the middle?

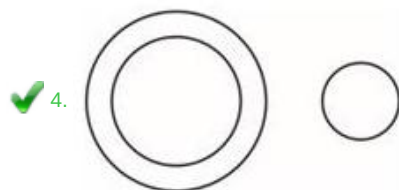
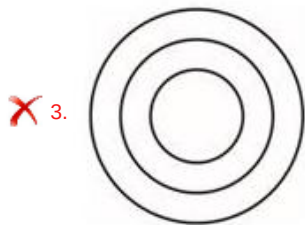
- Ans
- 1. F
 - 2. D
 - 3. G
 - 4. B

Question ID : 9895808173
Chosen Option : 4

Q.1
8 Select the Venn diagram that best illustrates the relationship between the three given classes.

Carrot, Vegetables, Meat

- Ans
- 1. 
 - 2. 



Question ID : 9895808188
Chosen Option : 2

Q.1 In the following fraction series, two fractions have been put within brackets. Study the series carefully and select the correct alternative with respect to the series.

$$\frac{2}{\sqrt{5}} + \frac{4}{5} + \frac{6}{5\sqrt{5}} + \left(\frac{8}{25}\right) + \frac{10}{25\sqrt{5}} + \frac{12}{125} + \left(\frac{14}{125\sqrt{5}}\right)$$

Ans 1. Both the bracketed fractions are incorrect.

2.

The first bracketed fraction (from the left) is correct and the second is incorrect.

3.

The first bracketed fraction (from the left) is incorrect and the second is correct.

4. Both the bracketed fractions are correct.

Question ID : 9895808182
Chosen Option : 1

Q.2 Select the term that will come next in the following series.

BMO, EOQ, HQS, KSU, _____.

Ans 1. MTV

2. NUW

3. NTV

4. NVW

Question ID : 9895808164
Chosen Option : 1

Q.2 Identify the odd one from the following.

Ans 1. kmn

2. prt

3. bdf

4. suw

Question ID : 9895808165
Chosen Option : 1

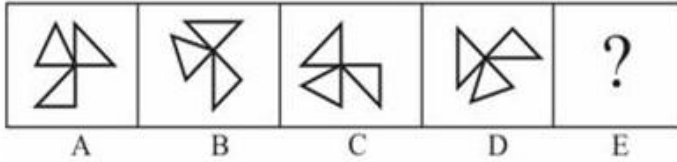
Q.2 Four pairs of words have been given, out of which three are alike in some manner, while one is different. Choose out the odd one.

Ans 1. Distance : Odometer

- 2. Wind : Taseometer
- 3. Current : Ammeter
- 4. Humidity : Hygrometer

Question ID : 9895808167
Chosen Option : 1

Q.2 ₃ Select the figure that will come next in the following series.



Ans

- 1.
- 2.
- 3.
- 4.

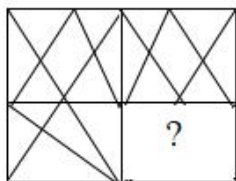
Question ID : 9895808183
Chosen Option : 3

Q.2 ₄ If E is denoted by F, D is denoted by B, R is denoted by K, U is denoted by V, T is denoted by I, A is denoted by C, G is denoted by X and H is denoted by W, then how will the word DAUGHTER be written?

- Ans
- 1. BCWXVIFK
 - 2. BCWXWFIK
 - 3. BCVXWIKF
 - 4. BCVXWIFK

Question ID : 9895808171
Chosen Option : 4

Q.2 ₅ Select the correct option to complete the following pattern.



Ans

- 1.



Question ID : 9895808185
Chosen Option : 3

Q.2
6 Which of the following is a contagious disease?

- Ans 1. Diabetes
 2. Stroke
 3. Tuberculosis
 4. Asthma

Question ID : 9895807246
Chosen Option : 2

Q.2
7 In which year was the constitution of Jammu and Kashmir adopted?

- Ans 1. 1954
 2. 1950
 3. 1956
 4. 1958

Question ID : 9895807239
Chosen Option : 3

Q.2
8 A group of fish is called a:

- Ans 1. school
 2. army
 3. standard
 4. bus

Question ID : 9895807244
Chosen Option : 2

Q.2
9 Inspired by the constitution of which of the given nations has India added the feature of 'Directive Principles' in its constitution?

- Ans 1. USA
 2. Germany
 3. Ireland
 4. Russia

Question ID : 9895807241
Chosen Option : 4

Q.3
0 On which day is the World Population Day celebrated?

- Ans 1. 2nd June

- 2. 15th August
- 3. 5th September
- 4. 11th July

Question ID : 9895807249
Chosen Option : 1

Q.3 What was the approximate distance that Mahatma Gandhi marched for the Salt Satyagraha Movement?

1

- Ans
- 1. 241 miles
 - 2. 350 miles
 - 3. 400 miles
 - 4. 123 miles

Question ID : 9895807252
Chosen Option : 3

Q.3 The Bretton Woods Agreement led to the creation of which one of the following institutions?

2

- Ans
- 1. United Nations
 - 2. United Nations Educational, Scientific and Cultural Organization
 - 3. International Monetary Fund
 - 4. International Labour Organization

Question ID : 9895807237
Chosen Option : 1

Q.3 What is the national sport of China?

3

- Ans
- 1. Cricket
 - 2. Football
 - 3. Rugby
 - 4. Table Tennis

Question ID : 9895807232
Chosen Option : 3

Q.3 What is the first age in the prehistoric period called?

4

- Ans
- 1. Palaeolithic age
 - 2. Metal age
 - 3. Copper age
 - 4. Neolithic age

Question ID : 9895807250
Chosen Option : 4

Q.3 On which date is the International Mountain Day celebrated?

5

- Ans
- 1. 14th November

2. 11th December

3. 2nd October

4. 13th January

Question ID : 9895807248
Chosen Option : 2

Q.3
6 Who is the author of the book 'Flight of Pigeon'?

Ans 1. Shobha Dey

2. Gita Piramal

3. Sudha Murthy

4. Ruskin Bond

Question ID : 9895807234
Chosen Option : 4

Q.3
7 The run-and-touch game of 'Kho Kho' originated in which Indian state?

Ans 1. Kerala

2. Jammu and Kashmir

3. Goa

4. Maharashtra

Question ID : 9895807231
Chosen Option : 1

Q.3
8 The Living Root Bridges are a rare ecological phenomenon seen in which state of India?

Ans 1. West Bengal

2. Meghalaya

3. Sikkim

4. Mizoram

Question ID : 9895807245
Chosen Option : 1

Q.3
9 The yolk of an egg contains more than 90% of which of the given vitamins?

Ans 1. Vitamin C

2. Vitamin B12

3. Vitamin K

4. Vitamin A

Question ID : 9895807243
Chosen Option : 1

Q.4
0 A seesaw is an example of which concept of physics?

Ans 1. Current

2. Time

3. Electricity

4. Force

Question ID : 9895807242
Chosen Option : 2

Q.4 While trying to promote growth by tax cuts as the fiscal policy, which type of policy is the government trying to follow?

1

Ans 1. Expansionary

2. Contractionary

3. Easy money

4. Tight money

Question ID : 9895807236
Chosen Option : 1

Q.4 Who among the following has been conferred the Rajiv Gandhi National Sadbhavana Award 2018?

2

Ans 1. Anna Hazare

2. Medha Patkar

3. Kailash Satyarthi

4. Gopalkrishna Gandhi

Question ID : 9895807235
Chosen Option : 2

Q.4 Urs Festival in Ajmer commemorates the death anniversary of which Sufi Saint?

3

Ans 1. Khwaja Moinuddin Chisti

2. Hazarat Nizamuddin

3. Mian Mir

4. Salim Chishti

Question ID : 9895807229
Chosen Option : 2

Q.4 'Kunbi Dance' is a popular dance associated with which Indian state?

4

Ans 1. Mizoram

2. Sikkim

3. Jammu and Kashmir

4. Goa

Question ID : 9895807228
Chosen Option : 1

Q.4 Who was the legendary co-founder and retired chairman of Indian tech giant Infosys?

5

Ans 1. Ashish Goel

2. N R Narayan Murthy

3. Yashish Dahiya

4. Navneet Singh,

Question ID : 9895807233
Chosen Option : 2

Q.4 What do we call the stock of food grains purchased by the Government of India from the farmers through the Food Corporation of India (FCI)?

- Ans 1. Incentivized stock
 2. Return stock
 3. Subsidized stock
 4. Buffer stock

Question ID : 9895807238
Chosen Option : 4

Q.4 In which year did the French traveller François Bernier arrive in India?

- Ans 1. 1656
 2. 1658
 3. 1678
 4. 1662

Question ID : 9895807251
Chosen Option : 4

Q.4 What does the 103rd constitutional amendment deal with?

- Ans 1. Women's reservation
 2. Economic reservation
 3. Right to education
 4. Right against exploitation

Question ID : 9895807240
Chosen Option : 4

Q.4 In which year did Emperor Akbar build the Buland Darwaja?

- Ans 1. 1502
 2. 1526
 3. 1534
 4. 1601

Question ID : 9895807230
Chosen Option : 4

Q.5 Which of the following is the longest river in Europe?

- Ans 1. Mekong
 2. Zambezi
 3. Sepik
 4. Volga

Question ID : 9895807247

Chosen Option : 3

Q.5 A, B and C can do a piece of work in 20, 40 and 80 days respectively. In how many days can A do the work if he is assisted by B and C on every third day?

- Ans**
- 1. 7 days
 - 2. 15 days
 - 3. 18 days
 - 4. 16 days

Question ID : 9895807569
Chosen Option : 2

Q.5 Case A. In a certain store, the profit is 340% of the cost.
Case B. If the cost increases by 32% but the selling price remains constant, approximately what percentage of the selling price is the profit in case A?

- Ans**
- 1. 100%
 - 2. 32%
 - 3. 70%
 - 4. 320%

Question ID : 9895807562
Chosen Option : 4

Q.5 A circle, with radius 8 cm, which has the area equal to the area of a triangle with base 8 cm. Then the length of the corresponding altitude of triangle is:

- Ans**
- 1. 38π cm
 - 2. 16π cm
 - 3. 8π cm
 - 4. 18π cm

Question ID : 9895807572
Chosen Option : 3

Q.5 The captain of a cricket team of 11 members is 28 years old and the wicket keeper is 4 years older than him. If the ages of these two are excluded, the average age of the remaining players is two years less than the average age of the whole team. What is the average age of the team?

- Ans**
- 1. 15 years
 - 2. 22 years
 - 3. 21 years
 - 4. 29 years

Question ID : 9895807557
Chosen Option : 2

Q.5 Two numbers are respectively 25% and 50% more than a third number. The ratio of the first number to second number is:

- Ans**
- 1. 1:2
 - 2. 2:1
 - 3. 6:5
 - 4. 5:6

Question ID : 9895807563
Chosen Option : 1

Q.5
6 $\frac{4^2 + 4}{5} + 5 \times 2 - 3$ of 4 is

- Ans
- 1. 9
 - 2. 3
 - 3. 6
 - 4. 2

Question ID : 9895807554
Chosen Option : 4

Q.5
7 A hollow iron pipe is 28 cm long and its external diameter is 10 cm. If the thickness of the pipe is 2 cm and iron weighs 5 g/cm³, then the weight of the pipe is:

- Ans
- 1. 70.4 g
 - 2. 7.04 g
 - 3. 74 g
 - 4. 7.40 g

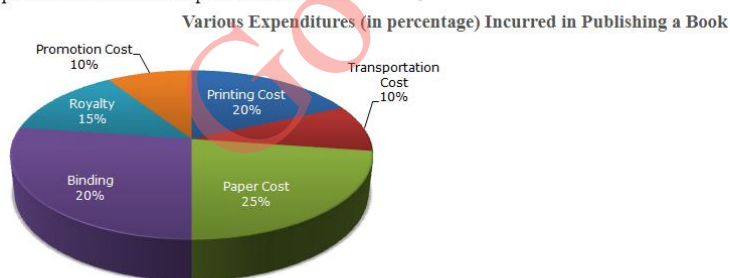
Question ID : 9895807573
Chosen Option : 1

Q.5
8 A train can travel 50% faster than a car. Both start from point A at the same time and reach point B, 60 km away from point A, at the same time. On the way, however, the train lost about 12.5 min while stopping at the stations. The speed of the car is:

- Ans
- 1. 130 km/h
 - 2. 100 km/h
 - 3. 110 km/h
 - 4. 96 km/h

Question ID : 9895807571
Chosen Option : 4

Q.5
9 The following pie-chart shows the percentage distribution of the expenditure incurred in publishing a book. Study the pie-chart and answer the questions based on it.



Royalty on the book is less than the paper cost by:

- Ans
- 1. 25%
 - 2. 30%
 - 3. 50%
 - 4. 40%

Question ID : 9895807577
Chosen Option : 3

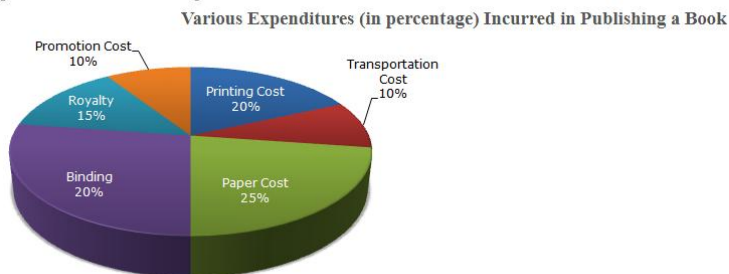
Q.6
0 If the mean of the observations $x, x + 4, x + 5, x + 7, x + 9$ is 9, then the mean of the last three observations is:

Ans

- 1. 7
- 2. 10
- 3. 11
- 4. 8

Question ID : **9895807559**
Chosen Option : 4

Q.6 The following pie-chart shows the percentage distribution of the expenditure incurred in publishing a book. Study the pie-chart and answer the questions based on it.



What is the central angle of the sector corresponding to the expenditure incurred on binding?

- Ans**
- 1. 72°
 - 2. 90°
 - 3. 48°
 - 4. 70°

Question ID : **9895807576**
Chosen Option : 2

Q.6 A family consists of two grandparents, three parents and four grandchildren. The average age of the grandparents is 65 years, that of the parents is 32 years and that of the grandchildren is 8 years. What is the average age of the family?

- Ans**
- 1. None of these
 - 2. $28\frac{2}{3}$ years
 - 3. 28 years
 - 4. $28\frac{1}{3}$ years

Question ID : **9895807556**
Chosen Option : 3

Q.6 A person has planned to sell his old typewriter for ₹4500, he would lose 10%. To gain 20% of profit, he should sell it for:

- Ans**
- 1. ₹6000
 - 2. ₹7000
 - 3. ₹7200
 - 4. ₹8500

Question ID : **9895807561**
Chosen Option : 1

Q.6 Salaries of Ravi and Sumit are in the ratio 2:3. If the salary of each is increased by ₹3000, the new ratio becomes 35:50. What is Sumit's new salary?

- Ans**
- 1. ₹18,000
 - 2. ₹21,000

3. ₹27,000

4. ₹30,000

Question ID : 9895807565

Chosen Option : 2

Q.6 The compound interest on ₹40,000 at 6% per annum is ₹4,944. What is the period (in years) for which the amount is invested?

Ans 1. 5 years

2. 4 years

3. 3 years

4. 2 years

Question ID : 9895807567

Chosen Option : 2

Q.6 A hall is 15 m long and 12 m broad. If the sum of the areas of the floor and the ceiling is equal to the sum of the areas of four walls, the volume (in m^3) of the hall is:

Ans 1. 1600

2. 900

3. 1200

4. 720

Question ID : 9895807574

Chosen Option : 4

Q.6 If a person had walked at the speed of 15 km/h instead of 10 km/h, he would have walked 25 km more. The actual distance travelled by him was:

Ans 1. 70 km

2. 56 km

3. 50 km

4. 80 km

Question ID : 9895807570

Chosen Option : 1

Q.6 Raman paid ₹13,300 as simple interest after 9 years. He had borrowed some money at the rate of 6% for first two years, at 9% for next three years and at 14% for rest of the period. How much money (in ₹) did he borrow?

Ans 1. 10,000

2. 14,000

3. 12,500

4. 12,000

Question ID : 9895807566

Chosen Option : 3

Q.6 If 15 workers can earn ₹1,800 in 10 days. Find the earning (in ₹) of 5 workers in 8 days.

Ans 1. 400

2. 360

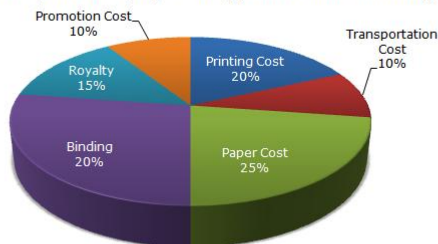
3. 540

4. 480

Question ID : 9895807568
Chosen Option : 2

Q.7 The following pie-chart shows the percentage distribution of the expenditure incurred in publishing a book. Study the pie-chart and answer the questions based on it.

Various Expenditures (in percentage) Incurred in Publishing a Book



Question:

If for a certain quantity of books, the publisher has to pay ₹30,600 as printing cost, then what will be amount of paper cost to be paid for these books?

- Ans
- 1. ₹28,250
 - 2. ₹38,250
 - 3. ₹38,000
 - 4. ₹30,250

Question ID : 9895807575
Chosen Option : 1

Q.7 Find the greatest number that will divide 47, 95 and 187 so as to leave the same remainder in each case.

- Ans
- 1. 7
 - 2. 13
 - 3. 9
 - 4. 4

Question ID : 9895807553
Chosen Option : 4

Q.7 Raj got a new chair at 35% discount. Had Raj got no discount, Raj would have had to pay ₹238 more. How much did Raj pay for the chair?

- Ans
- 1. ₹452
 - 2. ₹442
 - 3. ₹416
 - 4. ₹424

Question ID : 9895807558
Chosen Option : 2

Q.7 In a mixture of 60 L, the ratio of milk and water is 2:3, then the quantity of water in the mixture is:

- Ans
- 1. 20 L
 - 2. 45 L
 - 3. 36 L
 - 4. 16 L

Question ID : 9895807564
Chosen Option : 3

Q.7
4 What percentage of numbers from 1 to 80 have 1 or 9 in the units digit?

- Ans
- 1. 1%
 - 2. 20%
 - 3. 21%
 - 4. 14%

Question ID : 9895807560
Chosen Option : 3

Q.7
5 Simplify:

$$8.65 - [4 + 0.5 \text{ of } (8.8 - 2.3 \times 3.5)]$$

- Ans
- 1. 4.725
 - 2. 4.275
 - 3. 3.275
 - 4. 4.527

Question ID : 9895807555
Chosen Option : 3

Section : English Language

Q.1 Select the word which means the same as the group of words given.

Someone in love with himself.

- Ans
- 1. Philologist
 - 2. Humanist
 - 3. Narcissist
 - 4. Philanthropist

Question ID : 9895807900
Chosen Option : 2

Q.2 From the given options, identify the segment in the sentence which contains the grammatical error.

The book provide ample guidance and practice in learning English conversations effectively for all age groups.

- Ans
- 1. The book provide
 - 2. for all age groups
 - 3. ample guidance and practice
 - 4. in learning English conversations

Question ID : 9895807880
Chosen Option : 4

Q.3 Select the most appropriate option to fill in the blank.

Sometimes a person's intelligence is not fully appreciated _____ he/she gets an opportunity.

- Ans
- 1. upto
 - 2. later

3. until
 4. unless

Question ID : 9895807886
Chosen Option : 1

Q.4 Select the most appropriate option to substitute the underlined segment in the given sentence. If there is no need to substitute it, select No improvement.

Passengers are requested to go for security check before they proceed to board the flight.

- Ans 1. are request to go for
 2. are requests to go for
 3. are requesting to go for
 4. No improvement

Question ID : 9895807884
Chosen Option : 1

Q.5 Select the most appropriate option to substitute the underlined segment in the given sentence. If there is no need to substitute it, select No improvement.

My neighbour along with his children is going tonight to watch a movie based over the life of martyrs.

- Ans 1. a movie based on the life of martyrs
 2. No improvement
 3. a movie basing on life of martyrs
 4. a movie base on the life of martyrs

Question ID : 9895807882
Chosen Option : 1

Comprehension:

GovtJobsAlert.In

In the following passage some words have been deleted. Fill in the blanks with the help of the alternatives given.

Obesity can be (1) _____ by eating healthy food and increasing physical activity. There is no need to alter the quantity of the food but the quality of the food must be (2) _____ and improvised. Avoiding red meat, oily food, extra fats in form of ghee, butter etc. can dramatically help to reduce the weight. Moreover, if the right eating is accompanied (3) _____ physical work out, it becomes the perfect way to lose weight and stay healthy. In some patients (4) _____ is also carried out. The choice of the treatment (5) _____ on various factors and the decision is taken by the physician by thoroughly examining the patient.

SubQuestion No : 6

Q.6 Select the most appropriate option that will fill in the blank number 1.

- Ans
- 1. magnified
 - 2. destroyed
 - 3. tolerated
 - 4. managed

Question ID : 9895807888
Chosen Option : 4

Comprehension:

In the following passage some words have been deleted. Fill in the blanks with the help of the alternatives given.

Obesity can be (1) _____ by eating healthy food and increasing physical activity. There is no need to alter the quantity of the food but the quality of the food must be (2) _____ and improvised. Avoiding red meat, oily food, extra fats in form of ghee, butter etc. can dramatically help to reduce the weight. Moreover, if the right eating is accompanied (3) _____ physical work out, it becomes the perfect way to lose weight and stay healthy. In some patients (4) _____ is also carried out. The choice of the treatment (5) _____ on various factors and the decision is taken by the physician by thoroughly examining the patient.

SubQuestion No : 7

Q.7 Select the most appropriate option that will fill in the blank number 2.

- Ans
- 1. checked
 - 2. decreased
 - 3. distinguished
 - 4. satisfied

Question ID : 9895807889
Chosen Option : 1

Comprehension:

In the following passage some words have been deleted. Fill in the blanks with the help of the alternatives given.

Obesity can be (1) _____ by eating healthy food and increasing physical activity. There is no need to alter the quantity of the food but the quality of the food must be (2) _____ and improvised. Avoiding red meat, oily food, extra fats in form of ghee, butter etc. can dramatically help to reduce the weight. Moreover, if the right eating is accompanied (3) _____ physical work out, it becomes the perfect way to lose weight and stay healthy. In some patients (4) _____ is also carried out. The choice of the treatment (5) _____ on various factors and the decision is taken by the physician by thoroughly examining the patient.

SubQuestion No : 8

Q.8 Select the most appropriate option that will fill in the blank number 3.

- Ans
- 1. with
 - 2. of
 - 3. at
 - 4. for

Question ID : 9895807890
Chosen Option : 4

Comprehension:

In the following passage some words have been deleted. Fill in the blanks with the help of the alternatives given.

Obesity can be (1) _____ by eating healthy food and increasing physical activity. There is no need to alter the quantity of the food but the quality of the food must be (2) _____ and improvised. Avoiding red meat, oily food, extra fats in form of ghee, butter etc. can dramatically help to reduce the weight. Moreover, if the right eating is accompanied (3) _____ physical work out, it becomes the perfect way to lose weight and stay healthy. In some patients (4) _____ is also carried out. The choice of the treatment (5) _____ on various factors and the decision is taken by the physician by thoroughly examining the patient.

SubQuestion No : 9

Q.9 Select the most appropriate option that will fill in the blank number 4.

- Ans
- 1. amputation
 - 2. surgery
 - 3. segmentation
 - 4. dissection

Question ID : 9895807891
Chosen Option : 3

Comprehension:

In the following passage some words have been deleted. Fill in the blanks with the help of the alternatives given.

Obesity can be (1) _____ by eating healthy food and increasing physical activity. There is no need to alter the quantity of the food but the quality of the food must be (2) _____ and improvised. Avoiding red meat, oily food, extra fats in form of ghee, butter etc. can dramatically help to reduce the weight. Moreover, if the right eating is accompanied (3) _____ physical work out, it becomes the perfect way to lose weight and stay healthy. In some patients (4) _____ is also carried out. The choice of the treatment (5) _____ on various factors and the decision is taken by the physician by thoroughly examining the patient.

SubQuestion No : 10

Q.1
0 Select the most appropriate option that will fill in the blank number 5.

- Ans
- 1. avoids
 - 2. depends
 - 3. ignores
 - 4. loathes

Question ID : 9895807892
Chosen Option : 2

Q.1
1 Select the option that means the same as the given idiom.

To pull oneself together

- Ans
- 1. To hide important facts and reasons
 - 2. To put necessary matters on the table
 - 3. To keep working constantly with attention
 - 4. To calm oneself and begin to think or act

Question ID : 9895807898
Chosen Option : 1

Q.1
2 Select the correctly spelt word.

- Ans
- 1. Rehearsal
 - 2. Rehersal

- 3. Reehersal
- 4. Rehearsel

Question ID : 9895807901
Chosen Option : 4

Q.1
3 Select the option that means the same as the given idiom.

To be fair and square

- Ans
- 1. To be fair in colour
 - 2. To be honest
 - 3. To be good at drawing
 - 4. To be in a good physique

Question ID : 9895807897
Chosen Option : 2

Q.1
4 Select the most appropriate option to substitute the underlined segment in the given sentence. If there is no need to substitute it, select No improvement.

No sooner he has returned to home than his boss called him for an urgent meeting.

- Ans
- 1. No sooner had he returned home
 - 2. No sooner he returned to home
 - 3. No sooner he have returned to home
 - 4. No improvement

Question ID : 9895807883
Chosen Option : 4

Q.1
5 Select the antonym of the given word.

EXTRAVAGANT

- Ans
- 1. Economical
 - 2. Factual
 - 3. Untrue
 - 4. Wonderful

Question ID : 9895807896
Chosen Option : 1

Q.1
6 Select the most appropriate word to fill in the blank.

A person's individual risk for many diseases most often _____ from a combination of genes, environment and lifestyle.

- Ans
- 1. stems
 - 2. checks
 - 3. diagnoses
 - 4. stops

Question ID : 9895807904
Chosen Option : 4

Q.1
7 Select the most appropriate option to fill in the blank.

People can only form new habits when they _____ particular patterns of behaviour.

- Ans
- 1. has adopted
 - 2. having adopted
 - 3. had adopted
 - 4. have adopted

Question ID : 9895807885
Chosen Option : 3

Q.1
8 From the given options, identify the segment in the sentence which contains the grammatical error.

Taking the help of people with rich experience of life will saves you much time and effort.

- Ans
- 1. Taking the help of
 - 2. much time and effort
 - 3. people with rich experience
 - 4. will saves you

Question ID : 9895807881
Chosen Option : 4

Q.1
9 Select the synonym of the given word.

STRAY

- Ans
- 1. Slight
 - 2. Wander
 - 3. Steady
 - 4. Gruesome

Question ID : 9895807894
Chosen Option : 1

Q.2
0 From the given options, identify the segment in the sentence which contains the grammatical error.

Just because you are learning a language does not mean you need to limiting your thinking.

- Ans
- 1. does not mean
 - 2. need to limiting your thinking
 - 3. Just because
 - 4. you are learning a language

Question ID : 9895807879
Chosen Option : 2

Q.2
1 Select the most appropriate word to fill in the blank.

This is a good time for all of us to _____ a new year's party.

- Ans
- 1. collect

- 2. initiate
- 3. invite
- 4. organize

Question ID : 9895807903
Chosen Option : 4

Q.2
2 Select the word which means the same as the group of words given.

A large number of fish swimming together.

- Ans
- 1. Herd
 - 2. Pack
 - 3. Mob
 - 4. Shoal

Question ID : 9895807899
Chosen Option : 2

Q.2
3 Select the synonym of the given word.

ADULTERATED

- Ans
- 1. Combined
 - 2. Fused
 - 3. Contaminated
 - 4. Concentrated

Question ID : 9895807893
Chosen Option : 4

Q.2
4 Select the correctly spelt word.

- Ans
- 1. Quantetative
 - 2. Quantitativ
 - 3. Quantitative
 - 4. Quantitative

Question ID : 9895807902
Chosen Option : 1

Q.2
5 Select the antonym of the given word.

BENIGN

- Ans
- 1. Hostile
 - 2. Amiable
 - 3. Mild
 - 4. Genial

Question ID : 9895807895
Chosen Option : 3

Section : Hindi Language

Q.1 निम्नलिखित में से उस विकल्प का चयन करें जो 'बाएँ हाथ का खेल होना' मुहावरे का अर्थ व्यक्त करता है।

- Ans
- 1. आसान कार्य
 - 2. मुश्किल कार्य
 - 3. असंभव
 - 4. बाएँ हाथ से खेलना

Question ID : 9895806677
Chosen Option : --

Comprehension:

निम्नलिखित गद्यांश के रिक्त स्थानों की पूर्ति गद्यांश के नीचे दिए गए प्रश्नों के अनुसार कीजिए -

महादेवी ने इसी समाज में मजबूती से पाँव रोपकर अपने _____ (1) की खोज की थी। व्यक्तित्व की खोज ही नहीं, उसकी _____ (2) की खोज भी। कदाचित इसी कारण उनकी भावुकता में भी एक _____ (3) है, तरलता में भी एक आंतरिक प्रतिरोध है, जो उनकी कविता से अधिक उनके गद्य में उजागर होता है। कविता में तो उसे प्रेरित करने वाले विशिष्ट भाव-प्रसंग का, उसके लौकिक _____ (4) का अक्सर पता नहीं चलता। गद्य में वही कवित्व ठोस वस्तु स्थितियों से, स्वयं पढ़ने वाले की जीवनानुभूति से पग-पग आलोकित परिभाषित होता चलता है। महादेवी का गद्य अंतर्जगत और बहिर्जगत का एक अत्यंत रोचक और _____ (5) संवाद घटित कराने वाला गद्य है।

SubQuestion No : 2

Q.2 गद्यांश में संकेतित रिक्त स्थान (1) के लिए उपयुक्त शब्द होगा

- Ans
- 1. महत्व
 - 2. संक्षिप्त
 - 3. व्यक्तिव
 - 4. अपनत्व

Question ID : 9895806668
Chosen Option : --

Comprehension:

निम्नलिखित गद्यांश के रिक्त स्थानों की पूर्ति गद्यांश के नीचे दिए गए प्रश्नों के अनुसार कीजिए -

महादेवी ने इसी समाज में मजबूती से पाँव रोपकर अपने _____(1) की खोज की थी। व्यक्तित्व की खोज ही नहीं, उसकी _____(2) की खोज भी। कदाचित इसी कारण उनकी भावुकता में भी एक _____(3) है, तरलता में भी एक आंतरिक प्रतिरोध है, जो उनकी कविता से अधिक उनके गद्य में उजागर होता है। कविता में तो उसे प्रेरित करने वाले विशिष्ट भाव-प्रसंग का, उसके लौकिक _____(4) का अक्सर पता नहीं चलता। गद्य में वही कवित्व ठोस वस्तु स्थितियों से, स्वयं पढ़ने वाले की जीवनानुभूति से पग-पग आलोकित परिभाषित होता चलता है। महादेवी का गद्य अंतर्जगत और बहिर्जगत का एक अत्यंत रोचक और _____(5) संवाद घटित कराने वाला गद्य है।

SubQuestion No : 3

Q.3 गद्यांश में संकेतित रिक्त स्थान (2) के लिए उपयुक्त शब्द होगा

- Ans
- 1. परोक्षता
 - 2. प्रसन्नता
 - 3. सार्थकता
 - 4. विफलता

Question ID : 9895806669
Chosen Option : --

Comprehension:

निम्नलिखित गद्यांश के रिक्त स्थानों की पूर्ति गद्यांश के नीचे दिए गए प्रश्नों के अनुसार कीजिए -

महादेवी ने इसी समाज में मजबूती से पाँव रोपकर अपने _____(1) की खोज की थी। व्यक्तित्व की खोज ही नहीं, उसकी _____(2) की खोज भी। कदाचित इसी कारण उनकी भावुकता में भी एक _____(3) है, तरलता में भी एक आंतरिक प्रतिरोध है, जो उनकी कविता से अधिक उनके गद्य में उजागर होता है। कविता में तो उसे प्रेरित करने वाले विशिष्ट भाव-प्रसंग का, उसके लौकिक _____(4) का अक्सर पता नहीं चलता। गद्य में वही कवित्व ठोस वस्तु स्थितियों से, स्वयं पढ़ने वाले की जीवनानुभूति से पग-पग आलोकित परिभाषित होता चलता है। महादेवी का गद्य अंतर्जगत और बहिर्जगत का एक अत्यंत रोचक और _____(5) संवाद घटित कराने वाला गद्य है।

SubQuestion No : 4

Q.4 गद्यांश में संकेतित रिक्त स्थान (3) के लिए उपयुक्त शब्द होगा

- Ans
- 1. कठोरता
 - 2. दृढ़ता
 - 3. निष्ठुरता
 - 4. तरलता

Question ID : 9895806670
Chosen Option : --

Comprehension:

निम्नलिखित गद्यांश के रिक्त स्थानों की पूर्ति गद्यांश के नीचे दिए गए प्रश्नों के अनुसार कीजिए -

महादेवी ने इसी समाज में मजबूती से पाँव रोपकर अपने _____(1) की खोज की थी। व्यक्तित्व की खोज ही नहीं, उसकी _____(2) की खोज भी। कदाचित इसी कारण उनकी भावुकता में भी एक _____(3) है, तरलता में भी एक आंतरिक प्रतिरोध है, जो उनकी कविता से अधिक उनके गद्य में उजागर होता है। कविता में तो उसे प्रेरित करने वाले विशिष्ट भाव-प्रसंग का, उसके लौकिक _____(4) का अक्सर पता नहीं चलता। गद्य में वही कवित्व ठोस वस्तु स्थितियों से, स्वयं पढ़ने वाले की जीवनानुभूति से पग-पग आलोकित परिभाषित होता चलता है। महादेवी का गद्य अंतर्जगत और बहिर्जगत का एक अत्यंत रोचक और _____(5) संवाद घटित कराने वाला गद्य है।

SubQuestion No : 5

Q.5 गद्यांश में संकेतित रिक्त स्थान (4) के लिए उपयुक्त शब्द होगा

- Ans
- 1. विकार
 - 2. आधार
 - 3. औजार
 - 4. आभार

Question ID : 9895806671
Chosen Option : --

Comprehension:

निम्नलिखित गद्यांश के रिक्त स्थानों की पूर्ति गद्यांश के नीचे दिए गए प्रश्नों के अनुसार कीजिए -

महादेवी ने इसी समाज में मजबूती से पाँव रोपकर अपने _____(1) की खोज की थी। व्यक्तित्व की खोज ही नहीं, उसकी _____(2) की खोज भी। कदाचित इसी कारण उनकी भावुकता में भी एक _____(3) है, तरलता में भी एक आंतरिक प्रतिरोध है, जो उनकी कविता से अधिक उनके गद्य में उजागर होता है। कविता में तो उसे प्रेरित करने वाले विशिष्ट भाव-प्रसंग का, उसके लौकिक _____(4) का अक्सर पता नहीं चलता। गद्य में वही कवित्व ठोस वस्तु स्थितियों से, स्वयं पढ़ने वाले की जीवनानुभूति से पग-पग आलोकित परिभाषित होता चलता है। महादेवी का गद्य अंतर्जगत और बहिर्जगत का एक अत्यंत रोचक और _____(5) संवाद घटित कराने वाला गद्य है।

SubQuestion No : 6

Q.6 गद्यांश में संकेतित रिक्त स्थान (5) के लिए उपयुक्त शब्द होगा

- Ans
- 1. अमार्मिक
 - 2. भौतिक
 - 3. अलौकिक
 - 4. मार्मिक

Question ID : 9895806672
Chosen Option : --

Q.7 दिए गए वाक्य में रेखांकित खंड को प्रतिस्थापित करने के लिए उपयुक्त विकल्प का चयन करें।
कुणाल अपने धन का भरपूर दुरुपयोग करता है।

- Ans
- 1. संचय
 - 2. व्यय
 - 3. अपव्यय
 - 4. मितव्यय

Question ID : 9895806662
Chosen Option : --

Q.8 दिए गए वाक्य में रेखांकित खंड को प्रतिस्थापित करने के लिए उपयुक्त विकल्प का चयन करें।
सड़क पर पड़ी लावारिस जिस पर संदेह हो, वस्तु को छूना नहीं चाहिए।

- Ans
- 1. अशक्त
 - 2. संदिग्ध
 - 3. मुमुक्षु
 - 4. शिल्प

Question ID : 9895806661
Chosen Option : --

Q.9 दिए गए शब्द का विलोम चुनें।

बहुज

- Ans
- 1. ज्ञानी
 - 2. अगम्य
 - 3. अल्पज
 - 4. विज्ञ

Question ID : 9895806673
Chosen Option : --

Q.10 दिए गए वाक्य का वह भाग ज्ञात करें जिसमें कोई त्रुटि है।

मोहन का आम का बगीचा बड़ी ही सुन्दर है।

- Ans
- 1. सुन्दर है।
 - 2. आम का बगीचा
 - 3. बड़ी ही
 - 4. मोहन का

Question ID : 9895806658
Chosen Option : --

Q.11 निम्नलिखित में से उस विकल्प का चयन करें जो 'बाल-बाल बचना' मुहावरे का अर्थ व्यक्त करता है।

- Ans
- 1. बालों को बचाना
 - 2. आसानी से बचना
 - 3. संकट से कठिनाई से बचना
 - 4. कठिनाई होना

Question ID : 9895806678
Chosen Option : --

Q.12 रिक्त स्थान को भरने के लिए उपयुक्त शब्द का चयन करें।

मेरे जीवन का लक्ष्य बहुत _____ है।

- Ans
- 1. ऊँचा
 - 2. मलिन
 - 3. खराब
 - 4. चौड़ा

Question ID : 9895806666
Chosen Option : --

Q.1
3 रिक्त स्थान को भरने के लिए उपयुक्त शब्द का चयन करें।

तुमने मेहनत नहीं की इसलिए _____ हुए।

- Ans
- 1. मेहमान
 - 2. पागल
 - 3. सफल
 - 4. असफल

Question ID : 9895806663
Chosen Option : --

Q.1
4 दिए गए शब्द के पर्यायवाची शब्द का चयन करें।

आभूषण

- Ans
- 1. अंलकार
 - 2. सलिल
 - 3. समास
 - 4. वसुंधरा

Question ID : 9895806676
Chosen Option : --

Q.1
5 दिये गये वाक्यांश के लिए एक शब्द दीजिये।

जिसके समान कोई दूसरा न हो

- Ans
- 1. अद्वितीय
 - 2. दंडनीय
 - 3. तुलनीय
 - 4. गोपनीय

Question ID : 9895806679
Chosen Option : --

Q.1
6 दिए गए शब्द का विलोम चुनें।

शोक

- Ans
- 1. दुख
 - 2. हर्ष
 - 3. सौभाग्य
 - 4. दुर्भाग्य

Question ID : 9895806674
Chosen Option : --

Q.1

7 दिये गये वाक्यांश के लिए एक शब्द दीजिये।

काम से जी चुराने वाला

- Ans
- 1. कर्मठ
 - 2. मेहनती
 - 3. कामचोर
 - 4. निर्लेज्ज

Question ID : 9895806680
Chosen Option : --

Q.1 दिए गए वाक्य का वह भाग ज्ञात करें जिसमें कोई त्रुटि है।

मंदिर जाने से पूर्व भक्त मानव एक फूलों की माला बाजार से लाया।

- Ans
- 1. एक फूलों की माला
 - 2. भक्त मानव
 - 3. बाजार से लाया।
 - 4. मंदिर जाने से पूर्व

Question ID : 9895806659
Chosen Option : --

Q.1 रिक्त स्थान को भरने के लिए उपयुक्त शब्द का चयन करें।

वसंत ऋतुओं का _____ है।

- Ans
- 1. मामा
 - 2. राजा
 - 3. भाई
 - 4. नाना

Question ID : 9895806664
Chosen Option : --

Q.2 दिए गए वाक्य का वह भाग ज्ञात करें जिसमें कोई त्रुटि है।

जो व्यक्ति अधिक परिश्रम नहीं करता वे परीक्षा में सफलता प्राप्त नहीं करता।

- Ans
- 1. अधिक परिश्रम नहीं करता
 - 2. जो व्यक्ति
 - 3. सफलता प्राप्त नहीं करता।
 - 4. वे परीक्षा में

Question ID : 9895806657
Chosen Option : --

Q.2

1 दिए गए वाक्य में रेखांकित खंड को प्रतिस्थापित करने के लिए उपयुक्त विकल्प का चयन करें।

भगवान कृष्ण भूत, वर्तमान और भविष्य को देखने वाले थे।

- Ans
- 1. सूक्ष्मदर्शी
 - 2. त्रिकालदर्शी
 - 3. दूरदर्शी
 - 4. पारदर्शी

Question ID : 9895806660
Chosen Option : --

Q.2
2 सही वर्तनी वाले शब्द का चयन करें।

- Ans
- 1. अतीथिगृह
 - 2. अतिथीगृह
 - 3. अतिथिगृह
 - 4. अतिथिग्रह

Question ID : 9895806681
Chosen Option : --

Q.2
3 दिए गए शब्द के पर्यायवाची शब्द का चयन करें।

क्षति

- Ans
- 1. हानि
 - 2. हार
 - 3. श्रुति
 - 4. क्षमता

Question ID : 9895806675
Chosen Option : --

Q.2
4 रिक्त स्थान को भरने के लिए उपयुक्त शब्द का चयन करें।

कृपया कूड़ेदान _____ प्रयोग करें।

- Ans
- 1. में
 - 2. से
 - 3. का
 - 4. पर

Question ID : 9895806665
Chosen Option : --

Q.2
5 सही वर्तनी वाले शब्द का चयन करें।

- Ans
- 1. ननिआल

- 2. ननिहाल
- 3. ननीहाल
- 4. नानीहाल

Question ID : 9895806682
Chosen Option : --

GovtJobsAlert.In