

Constable (GD) in CAPFs, NIA, SSF and Rifleman (GD) in Assam Rifles Examination, 2018



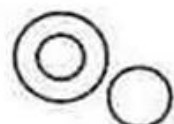

Roll No. :	www.GovtJobsAlert.In
Registration No.	
Name :	
Exam Venue :	iON Digital Zone iDZ Kozhikode
Exam Time :	9:00 AM - 10:30 AM
Exam Date :	03/03/2019

Section : General Section

Q.1 Select the Venn diagram that best illustrates the relationship between the three given classes.

Keyboard, Monitor, Mouse

Ans

- ✗ 1. 
- ✓ 2. 
- ✗ 3. 
- ✗ 4. 

Question ID : 9895808313
Chosen Option : 1

Q.2 Find the missing number from the below options.



- Ans
- ✗ 1. 12
- ✗ 2. 48
- ✓ 3. 24
- ✗ 4. 56

Question ID : 9895808306
Chosen Option : 3

Q.3

Choose the option that most closely resembles the mirror image of the given figure when mirror is placed at right side.

Questions Figure:



Ans

1.




2.



3.



4.



Question ID : 9895808311
Chosen Option : 2

Q.4 Select the option that is related to the fourth term in the same way as the first term is related to the second term.

MNQR : LMPQ :: ? : RSVW

Ans

1. STWX

2. WYTS

3. SVWY

4. VTWY

Question ID : 9895808294
Chosen Option : 1

Q.5 If RED is coded as 19, then how WED would be coded?

Ans

1. 21

2. 28

3. 22

4. 24

Question ID : 9895808296
Chosen Option : 4

Q.6 A, B, C, D, E, F, G and H are sitting around a round table facing the centre. D is fourth to the right of H and second to the left of B. F is fourth to the right of B. C is fourth to the right of E, who is not an immediate right of B or D. A is not an immediate neighbour of D.

In which of the following combinations is the third person sitting in between the first and the second persons?

Ans

1. CBA

2. ABC

3. GCD

4. AHE

Question ID : 9895808298

Chosen Option : 3

Q.7 Select the option that is related to the third term in the same way as the second term is related to the first term.

Television : Telecast :: Radio : ?

- Ans 1. Broadcast
 2. Friendship
 3. Compose
 4. Talking

Question ID : 9895808292
 Chosen Option : 1

Q.8 In a certain code "SMART" is written as "RKXNO", How is "GREAT" written in that code?

- Ans 1. BGFWO
 2. FPBWO
 3. RPFGW
 4. FPBWR

Question ID : 9895808295
 Chosen Option : 2

Q.9 Choose the option which completes the given figure series



Ans

- 1.
- 2.
- 3.
- 4.

Question ID : 9895808308
 Chosen Option : 4

Q.1 Select the option that is related to the Third term in the same way as the first term is related to the second term.

0

42 : 72 :: 12 : ?

- Ans 1. 30
 2. 43

3. 35

4. 48

Question ID : 9895808304

Chosen Option : 4

Q.1 Select the option that is related to the third term in the same way as the first term is related to the second term.

1

Mango : Fruit : : Potato : ?

Ans 1. Flower

2. Fruit

3. Vegetable

4. Stem

Question ID : 9895808293

Chosen Option : 3

Q.1 Four words have been given out of which three are alike in some manner, while one is different. Choose the odd one.

2

Ans 1. Dumb

2. Sinus

3. Deaf

4. Blind

Question ID : 9895808291

Chosen Option : 1

Q.1 Sonam is older than Renu. komal is younger than Renu. Priya is older than Sonam. Who is the eldest of them?

3

Ans 1. Sonam

2. Renu

3. Priya

4. Komal

Question ID : 9895808299

Chosen Option : 4

Q.1 Four options have been given out of which three are alike in some manner, while one is different. Choose the odd one.

4

Ans 1. 2248

2. 3036

3. 1258

4. 3196

Question ID : 9895808305

Chosen Option : 2

Q.1

5

The statements below are followed by two conclusions labeled I and II. Assuming that the information in the statements is true, even if it appears to be at variance with generally established facts, decide which conclusion(s) logically and definitely follow(s) from the information given in the statements.

Statements:

All roses are fruits.
All fruits are trees.

Conclusions:

- I. All trees are roses.
- II. Some fruits are roses.

- Ans
- 1. Both Conclusions I and II follow
 - 2. Either Conclusion I or II follows
 - 3. Only Conclusion I follows
 - 4. Only Conclusion II follows

Question ID : 9895808301
Chosen Option : 1

Q.1 Select the correct option that will fill in the blank and complete the series.

14, 18, 24, 32, 42, ?

- Ans
- 1. 54
 - 2. 50
 - 3. 52
 - 4. 48

Question ID : 9895808303
Chosen Option : 1

Q.1 Four letter clusters have been given out of which three are alike in some manner, while one is different. Choose the odd one.

- Ans
- 1. KMP
 - 2. ACF
 - 3. TVY
 - 4. BCG

Question ID : 9895808290
Chosen Option : 4

Q.1 The statements below are followed by two conclusions labeled I and II. Assuming that the information in the statements is true, even if it appears to be at variance with generally established facts, decide which conclusion(s) logically and definitely follow(s) from the information given in the statements.

Statements:

Some grapes are mangoes.
All mangoes are apples.

Conclusions:

- I. Some mangoes are grapes.
- II. All apples are grapes.

- Ans
- 1. Only Conclusion I follows
 - 2. Either Conclusion I or II follows
 - 3. Both Conclusions I and II follow
 - 4. Only Conclusion II follows

Question ID : 9895808300
Chosen Option : 1

Q.1 Select the correct option that will fill in the blank and complete the series.

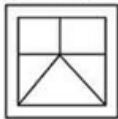
117, 107, 92, 72, _____.

- Ans
- 1. 42
 - 2. 47
 - 3. 37
 - 4. 52

Question ID : 9895808302
Chosen Option : 2

Q.2 Choose the option figure in which the problem figure is hidden/embedded.

Question Figure:



- Ans
- 1.
 - 2.
 - 3.
 - 4.

Question ID : 9895808310
Chosen Option : 4

Q.2 Select the correct option that will fill in the blank and complete the series.

A, G, L, P, S, _____.

- Ans
- 1. W
 - 2. U
 - 3. X
 - 4. Y

Question ID : 9895808289
Chosen Option : 2

Q.2 P, M, D, A, F, H, R and B are sitting around a circle facing at the centre. R is fourth to the right of A, who is third to the right of P. M is second to the left of H, who is second to the left of P. D is third to the right of B.

Which of the following pairs are immediate neighbors of B?

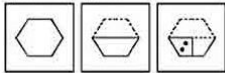
- Ans
- 1. AP
 - 2. MP

- 3. AF
- 4. FM

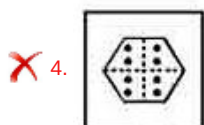
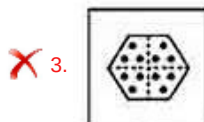
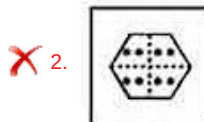
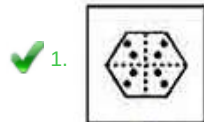
Question ID : 9895808297
Chosen Option : 2

Q.2 A piece of paper is folded and cut as shown below in the question figures, how will it appear when opened?
3

Questions Figure:



Ans



Question ID : 9895808312
Chosen Option : 1

Q.2 If '+' means 'x', '-' means '+', 'x' means '+' and '+' means '-', then find the value of the following equation:-
4

$$21 \div 8 + 2 - 12 \times 3 = ?$$

- Ans
- 1. 13.5
 - 2. 14
 - 3. 10
 - 4. 9

Question ID : 9895808307
Chosen Option : 1

Q.2 Which of the following answer figure will complete the given figure?
5

Question Figure:



Ans





Question ID : 9895808309
Chosen Option : 3

Q.2
6 The Supreme Court was established at Fort William in _____ as the Apex Court in 1774.

- Ans
- 1. Delhi
 - 2. Shimla
 - 3. Mumbai
 - 4. Kolkata

Question ID : 9895807366
Chosen Option : 1

Q.2
7 Who won the 2018 US Open Men's Tennis?

- Ans
- 1. Andy Murray
 - 2. Rafael Nadal
 - 3. Novak Djokovic
 - 4. Roger Federer

Question ID : 9895807357
Chosen Option : 2

Q.2
8 The Union Budget 2018 allocated _____ for food processing, which was almost double of the allocation in the previous year's budget.

- Ans
- 1. ₹2,900 crore
 - 2. ₹1,400 crore
 - 3. ₹1,900 crore
 - 4. ₹2,400 crore

Question ID : 9895807362
Chosen Option : 4

Q.2
9 In the 2018 Sultan Azlan Shah Cup, India beat which country 4-1 to come at the fifth place?

- Ans
- 1. Australia
 - 2. Malaysia
 - 3. Ireland
 - 4. Pakistan

Question ID : 9895807356
Chosen Option : 1

Q.3
0 Who did Mughal Emperor Babur defeat in the Battle of Ghagra in 1529?

- Ans
- 1. Yusuf Adil Shah
 - 2. Mahmud Lodi
 - 3. Dilawar Khan Husain
 - 4. Qasim Barid I

Question ID : 9895807377

Chosen Option : 2

Q.3
1 The mandible is part of the _____.

- Ans
- 1. hand
 - 2. arm
 - 3. skull
 - 4. pelvic girdle

Question ID : 9895807371

Chosen Option : 3

Q.3
2 _____ is an important copper ore mineral.

- Ans
- 1. Galena
 - 2. Cassiterite
 - 3. Cinnabar
 - 4. Chalcocite

Question ID : 9895807370

Chosen Option : 3

Q.3
3 The GDP growth rate for the fiscal year 2017-2018 was pegged at _____ by the Economic Survey report 2017-18.

- Ans
- 1. 8.25%
 - 2. 7.25%
 - 3. 5.75%
 - 4. 6.75%

Question ID : 9895807361

Chosen Option : 2

Q.3
4 Which of the following is the southernmost of the Lakshadweep islands?

- Ans
- 1. Bitra
 - 2. Kavaratti
 - 3. Amini
 - 4. Minicoy

Question ID : 9895807373

Chosen Option : 2

Q.3
5 Name the type of folk songs of Sikkim which describe the natural beauty of the state.

- Ans
- 1. Gha To Kito

- 2. Mando
- 3. Khubakeshei
- 4. Deknni

Question ID : 9895807353
Chosen Option : 3

Q.3
6 Studies on political and social inequalities in democracy show that:

- Ans
- 1. Dictatorship is better than democracy
 - 2. Inequalities do not exist in dictatorships
 - 3. Inequalities exist in democracies
 - 4. Democracy deters development

Question ID : 9895807364
Chosen Option : 1

Q.3
7 Name the first Indian to become a member of the British Parliament.

- Ans
- 1. Pilloo Mody
 - 2. Dadabhai Naoroji
 - 3. Bhikaiji Cama
 - 4. Jamshetji Tata

Question ID : 9895807376
Chosen Option : 3

Q.3
8 Which of the following dances is a dance form from Madhya Pradesh?

- Ans
- 1. Lezim
 - 2. Chiraw
 - 3. Ottam Thullal
 - 4. Macha

Question ID : 9895807355
Chosen Option : 2

Q.3
9 Who founded the Maurya dynasty after defeating Dhana Nanda?

- Ans
- 1. Bindusara
 - 2. Ashoka
 - 3. Kunala
 - 4. Chandragupta

Question ID : 9895807375
Chosen Option : 4

Q.4
0 Weber is the unit of _____.

- Ans
- 1. electric conductance
 - 2. magnetic flux

3. magnetic flux density

4. capacitance

Question ID : 9895807368

Chosen Option : 3

Q.4
1 The formula of Acetonitrile is _____.

Ans 1. CH_3OCN

2. C_2N_2

3. CH_3CN

4. CH_2CHCN

Question ID : 9895807369

Chosen Option : 3

Q.4
2 Which of the following is a correct equation of motion?

Ans 1. $u = v + at^2$

2. $2s = (v - u)t$

3. $2s = 2ut + at^2$

4. $v^2 + u^2 = 2as$

Question ID : 9895807367

Chosen Option : 3

Q.4
3 Which of the following Indian National political parties is reputed to be one of the oldest, founded in 1885 and has experienced many splits?

Ans 1. Communist Party of India – Marxist (CPI-M)

2. Nationalist Congress Party (NCP)

3. Indian National Congress (INC)

4. Bahujan Samaj Party (BSP)

Question ID : 9895807365

Chosen Option : 3

Q.4
4 Losar Festival is celebrated by the people of the _____ tribe.

Ans 1. Khasi

2. Kodava

3. Munda

4. Monpa

Question ID : 9895807354

Chosen Option : 3

Q.4
5 Ganymede is by far the largest moon in our solar system orbits around the planet _____.

Ans 1. Uranus

2. Neptune

3. Jupiter

4. Saturn

Question ID : 9895807374
Chosen Option : 3

Q.4
6 Which Bharat Ratna recipient's birthday is celebrated as Engineer's Day?

Ans 1. Abdul Kalam Azad

2. J R D Tata

3. M Visvesvaraya

4. C V Raman

Question ID : 9895807358
Chosen Option : 3

Q.4
7 Which of the following rivers flows into the Arabian Sea?

Ans 1. Mahi

2. Krishna

3. Penna

4. Rushikulya

Question ID : 9895807372
Chosen Option : 3

Q.4
8 Which book by Kiran Desai is a tale of a young man named Sampath Chawla?

Ans 1. Hullabaloo in the Guava Orchard

2. Selection Day

3. An Equal Music

4. It Happens for a Reason

Question ID : 9895807359
Chosen Option : 4

Q.4
9 Minimum Support Price for 2018-19 for Paddy of the Common variety is set at _____.

Ans 1. ₹2,430 per quintal

2. ₹1,750 per quintal

3. ₹5,150 per quintal

4. ₹1,950 per quintal

Question ID : 9895807363
Chosen Option : 1

Q.5
0 Which is the first ever known autobiography of an Indian woman?

Ans 1. My reminences

2. Beyond the jungle

3. Amar Jiban

4. City of 2 gateways

Question ID : 9895807360
Chosen Option : 3

Q.5₁ Simplify : $5 - 6.5 \div 13 + 2.3 \times 0.8 + 0.4$

- Ans 1. 6.83
 2. 6.74
 3. 7.38
 4. 5.38

Question ID : 9895807679
Chosen Option : 3

Q.5₂ A car travels 60km in the first hour , 65km in the second hour , 70km in the third hour, then the average speed of the car is

- Ans 1. 66 km/hr
 2. 62 km/hr
 3. 56 km/hr
 4. 65 km/hr

Question ID : 9895807696
Chosen Option : 3

Q.5₃ Amit borrowed ₹8000 from a money lender with Simple interest for as many years as the rate of interest. If he paid ₹2000 as interest at the end of loan period, what was the rate of interest?

- Ans 1. 5%
 2. 7%
 3. 6%
 4. 8%

Question ID : 9895807691
Chosen Option : 2

Q.5₄ Average of 'n' observations is 38, average of 'n' other observations is 42 and average of remaining 'n' observations is 55. Average of all the observations is:

- Ans 1. 45
 2. 35
 3. 55
 4. 40

Question ID : 9895807682
Chosen Option : 3

Q.5₅ I sold an article for ₹8800 thus gained 10%. For what amount should I sell it to get 15% profit?

- Ans 1. ₹9,400
 2. ₹9,300
 3. ₹9,200
 4. ₹9,500

Question ID : 9895807687

Chosen Option : 1

Q.5
6 Simplify : $8 + 3 - \left(\frac{5}{2} \times \frac{1}{3}\right)$ of $\frac{12}{5} + \frac{4}{3} \times \frac{3}{8}$

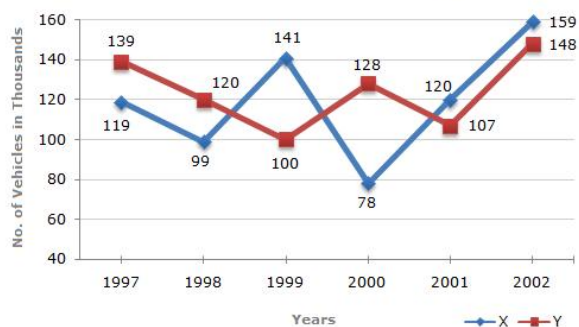
- Ans 1. 9.5
 2. 10
 3. 9
 4. 19

Question ID : 9895807680

Chosen Option : 3

Q.5
7 Study the following line graph and answer the question based on it.

Number of Vehicles Manufactured by Two companies over the Years (Number in Thousands)



What is the difference between the total productions of the two companies from 1997 to 2000?

- Ans 1. 40000
 2. 50000
 3. 30000
 4. 60000

Question ID : 9895807700

Chosen Option : 3

Q.5
8 A, B and C can do a piece of work in 12, 15 and 30 days respectively. If they do a work together, find the ratio in which the amount is to be distributed

- Ans 1. 4 : 5 : 2
 2. 2 : 5 : 4
 3. 2 : 4 : 5
 4. 5 : 4 : 2

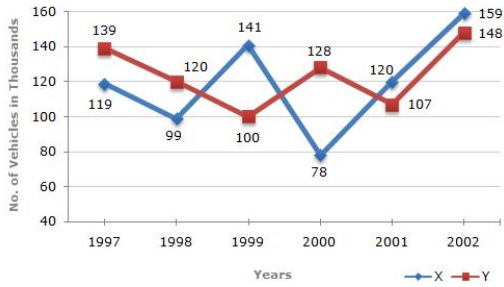
Question ID : 9895807694

Chosen Option : 2

Q.5
9

Study the following line graph and answer the question based on it.

Number of Vehicles Manufactured by Two companies over the Years (Number in Thousands)



In which of the following years, the difference between the productions of Companies X and Y was the minimum among the given years?

- Ans
- 1. 1997
 - 2. 2000
 - 3. 2002
 - 4. 1999

Question ID : 9895807702
Chosen Option : 3

Q.6 Ramu got a new table for 25% discount. Had he got no discount, Ramu would have had to pay ₹185 more. How much did Ramu pay for the table?

- Ans
- 1. ₹535
 - 2. ₹545
 - 3. ₹555
 - 4. ₹565

Question ID : 9895807683
Chosen Option : 3

Q.6 In an examination, a student has to secure 35% of the maximum marks to pass. One student got 70 marks and failed by 170 marks. The maximum marks in the examination are

- Ans
- 1. 400
 - 2. 300
 - 3. 500
 - 4. 200

Question ID : 9895807685
Chosen Option : 1

Q.6 The length and breadth of a rectangle are in the ratio 8:3. Find Its area if perimeter is 132 cm.

- Ans
- 1. 864 cm²
 - 2. 684 cm²
 - 3. 648 cm²
 - 4. 846 cm²

Question ID : 9895807698
Chosen Option : 4

Q.6 Two cylindrical cans has the base of the same size. The diameter of each is 14cm. The height of one can is 10cm and another 20cm. Find the ratio of their volumes.

- Ans
- 1. 3 : 2
 - 2. 2 : 3
 - 3. 1 : 2
 - 4. 2 : 1

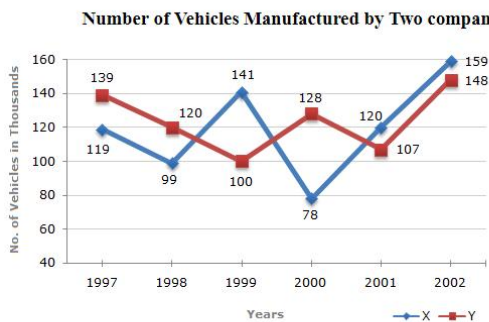
Question ID : 9895807699
Chosen Option : 1

Q.6 The ratio between two natural number is 3:4 , find the smallest number which must be added so that the ratio becomes 4:5 and the sum of the numbers will be 27.

- Ans
- 1. 5
 - 2. 6
 - 3. 4
 - 4. 3

Question ID : 9895807689
Chosen Option : 2

Q.6 Study the following line graph and answer the question based on it.



The production of Company Y in 1998 was approximately what percent of the production of Company X in the same year

- Ans
- 1. 212.1%
 - 2. 211.2%
 - 3. 112.2%
 - 4. 121.2%

Question ID : 9895807701
Chosen Option : 4

Q.6 A alone can do a piece of work in 12 days and B alone in 16 days. They undertook to do the work for ₹350. How much will B get ?

- Ans
- 1. ₹150
 - 2. ₹200
 - 3. ₹250
 - 4. ₹180

Question ID : 9895807693
Chosen Option : 2

Q.6 The mean of a set of eight numbers is 63. If one of the numbers is discarded, the mean of the remaining numbers is 58. The value of discarded number is

- Ans
- 1. 88
 - 2. 89

3. 78

4. 98

Question ID : 9895807684
Chosen Option : 3

Q.6
8 Average of first eight multiples of 8 is

Ans 1. 36

2. 46

3. 32

4. 72

Question ID : 9895807681
Chosen Option : 1

Q.6
9 A shop keeper reduces the selling price of an article by 39, a gain of 10% turns in to a loss of 3%, then the original price of the article is?

Ans 1. ₹350

2. ₹300

3. ₹250

4. ₹200

Question ID : 9895807686
Chosen Option : 1

Q.7
0 The differences between the circumference and diameter of a circle is 60 cm, then radius is

Ans 1. 12 cm

2. 13 cm

3. 14 cm

4. 15 cm

Question ID : 9895807697
Chosen Option : 1

Q.7
1 The population of Varanasi is 2,25,000. If the annual birth rate and death rate are 9 % and 7 %, calculate the population of city after 2 years.

Ans 1. 432090

2. 423900

3. 243090

4. 234090

Question ID : 9895807692
Chosen Option : 3

Q.7
2 The ratio between 2 numbers is 4:5 and the sum of their squares is 1025 , then the numbers are

Ans 1. 20 and 25

2. 24 and 30

3. 8 and 10

4. 40 and 50

Question ID : 9895807688

Chosen Option : 2

Q.7 A car travels a certain distance at a speed of 120km/hr in 4 hours. What should be the speed of the car if the car covers 3 the same distance in 3 hours 20 minutes.

- Ans
- 1. 142 km/hr
 - 2. 140 km/hr
 - 3. 124 km/hr
 - 4. 144 km/hr

Question ID : 9895807695

Chosen Option : 3

Q.7 Three persons A, B and C can complete one round of a circular track in 8, 15 and 20 minutes respectively. If they start together at 8 A.M from a certain point, at which time will they be together again at the starting point?

- Ans
- 1. 10 AM
 - 2. 12 Noon
 - 3. 11 AM
 - 4. 9 AM

Question ID : 9895807678

Chosen Option : 4

Q.7 The ratio of the ages of Arun and Anand is 3:1. After 5 years Arun age will be 5 more than two times of Anand's age. 5 Then the present age of Arun is

- Ans
- 1. 40
 - 2. 30
 - 3. 35
 - 4. 25

Question ID : 9895807690

Chosen Option : 3

Section : English Language

Q.1 Select the most appropriate option to substitute the underlined segment in the given sentence. If there is no need to substitute it, select No improvement.

He welcomed the audience with a heartfelt gratitude for their kind presence on the day of the social gathering in the college.

- Ans
- 1. No Improvement
 - 2. for their kind presences
 - 3. of their kind presence
 - 4. for their kind present

Question ID : 9895808014

Chosen Option : 3

Q.2 Select the most appropriate option to substitute the underlined segment in the given sentence. If there is no need to substitute it, select No improvement.

My cousin won't be able to leave for Mumbai until his parents will have arrived.

- Ans
- 1. until his parents will arrive
 - 2. until his parents arrive
 - 3. until his parents won't arrive

4. No Improvement

Question ID : 9895808012
Chosen Option : 2

Q.3 Select the most appropriate option to fill in the blank.

There is no prediction that _____ how fast dehydration can affect your general health.

- Ans
- 1. have been showing
 - 2. have show
 - 3. shows
 - 4. showed

Question ID : 9895808016
Chosen Option : 1

Q.4 Select the synonym of the given word.

FLIMSY

- Ans
- 1. general
 - 2. coarse
 - 3. sturdy
 - 4. Feeble

Question ID : 9895808023
Chosen Option : 3

Q.5 From the given options, identify the segment in the sentence which contains the grammatical error.

The researchers have discovered numerous sample of decorated sandstone, including chapel art depicting the Egyptian goddess.

- Ans
- 1. researchers have discovered
 - 2. including chapel art
 - 3. depicting the Egyptian goddess
 - 4. numerous sample of decorated sandstone

Question ID : 9895808011
Chosen Option : 3

Q.6 Select the most appropriate option to fill in the blank.

Leadership _____ a rational approach to achieve success in any task.

- Ans
- 1. requiring
 - 2. require
 - 3. required
 - 4. requires

Question ID : 9895808015
Chosen Option : 4

Q.7

Select the word which means the same as the group of words given.

Incapable of failure or error.

- Ans
- 1. Incurable
 - 2. Incurable
 - 3. Infallible
 - 4. Irredeemable

Question ID : 9895808030
Chosen Option : 3

Q.8 Select the correctly spelt word.

- Ans
- 1. Miscelleneous
 - 2. Miscellaneous
 - 3. Miscellaneius
 - 4. Miscelaneous

Question ID : 9895808031
Chosen Option : 1

Q.9 From the given options, identify the segment in the sentence which contains the grammatical error.

In the modern world, the computer is an amazing gift to mankind for doing two thing effortlessly.

- Ans
- 1. the computer is
 - 2. an amazing gift
 - 3. In the modern world
 - 4. for doing two thing effortlessly.

Question ID : 9895808010
Chosen Option : 4

Q.1 Select the most appropriate word to fill in the blank.

Humans have a natural _____ to coordinate their movements with music.

- Ans
- 1. disability
 - 2. direction
 - 3. order
 - 4. tendency

Question ID : 9895808033
Chosen Option : 4

Comprehension:

In the following passage some words have been deleted. Fill in the blanks with the help of the alternatives given.

The concept of sustainable development provides a (1) _____ for the integration of environmental policies and development strategies. Sustainable development (2) _____ to meet the needs and aspirations of the present without compromising the (3) _____ to meet those in the future. In other words, sustainable development is a (4) _____ of change in which the exploitation of resources, the direction of investments, technological development and institutional changes are all in harmony and (5) _____ both current and future potential to meet human needs and objectives.

SubQuestion No : 11

Q.1
1 Select the most appropriate option that will fill in the blank number 1.

- Ans
- 1. comparison
 - 2. framework
 - 3. figure
 - 4. provision

Question ID : 9895808018
Chosen Option : 4

Comprehension:

In the following passage some words have been deleted. Fill in the blanks with the help of the alternatives given.

The concept of sustainable development provides a (1) _____ for the integration of environmental policies and development strategies. Sustainable development (2) _____ to meet the needs and aspirations of the present without compromising the (3) _____ to meet those in the future. In other words, sustainable development is a (4) _____ of change in which the exploitation of resources, the direction of investments, technological development and institutional changes are all in harmony and (5) _____ both current and future potential to meet human needs and objectives.

SubQuestion No : 12

Q.1
2 Select the most appropriate option that will fill in the blank number 2.

- Ans
- 1. diverts
 - 2. seeks
 - 3. rejects
 - 4. distracts

Question ID : 9895808019
Chosen Option : 4

Comprehension:

In the following passage some words have been deleted. Fill in the blanks with the help of the alternatives given.

The concept of sustainable development provides a (1) _____ for the integration of environmental policies and development strategies. Sustainable development (2) _____ to meet the needs and aspirations of the present without compromising the (3) _____ to meet those in the future. In other words, sustainable development is a (4) _____ of change in which the exploitation of resources, the direction of investments, technological development and institutional changes are all in harmony and (5) _____ both current and future potential to meet human needs and objectives.

SubQuestion No : 13

Q.1
3 Select the most appropriate option that will fill in the blank number 3.

- Ans
- 1. invention
 - 2. operation
 - 3. production
 - 4. orientation

Question ID : 9895808020

Chosen Option : 1

Comprehension:

In the following passage some words have been deleted. Fill in the blanks with the help of the alternatives given.

The concept of sustainable development provides a (1) _____ for the integration of environmental policies and development strategies. Sustainable development (2) _____ to meet the needs and aspirations of the present without compromising the (3) _____ to meet those in the future. In other words, sustainable development is a (4) _____ of change in which the exploitation of resources, the direction of investments, technological development and institutional changes are all in harmony and (5) _____ both current and future potential to meet human needs and objectives.

SubQuestion No : 14

Q.1
4 Select the most appropriate option that will fill in the blank number 4.

- Ans
- 1. progress
 - 2. permission
 - 3. process
 - 4. sample

Question ID : 9895808021

Chosen Option : 1

Comprehension:

In the following passage some words have been deleted. Fill in the blanks with the help of the alternatives given.

The concept of sustainable development provides a (1) _____ for the integration of environmental policies and development strategies. Sustainable development (2) _____ to meet the needs and aspirations of the present without compromising the (3) _____ to meet those in the future. In other words, sustainable development is a (4) _____ of change in which the exploitation of resources, the direction of investments, technological development and institutional changes are all in harmony and (5) _____ both current and future potential to meet human needs and objectives.

SubQuestion No : 15

Q.1
5 Select the most appropriate option that will fill in the blank number 5.

- Ans
- 1. dismiss
 - 2. enhance
 - 3. resist
 - 4. relieve

Question ID : 9895808022
Chosen Option : 2

Q.1
6 Select the synonym of the given word.

BREACH

- Ans
- 1. Restriction
 - 2. Violation
 - 3. Settlement
 - 4. Restraint

Question ID : 9895808024
Chosen Option : 3

Q.1
7 Select the most appropriate option to substitute the underlined segment in the given sentence. If there is no need to substitute it, select No improvement.

Some people are so good that a mere looks at them pleases you a lot.

- Ans
- 1. No Improvement
 - 2. a mere look at their pleases you
 - 3. a mere looks at them pleases you
 - 4. a mere look at them pleases you

Question ID : 9895808013
Chosen Option : 3

Q.1
8 Select the most appropriate word to fill in the blank.

There is a high degree of _____ from e - mail based to social -media based messaging globally.

- Ans
- 1. transition
 - 2. process
 - 3. transaction

4. method

Question ID : 9895808034
Chosen Option : 3

Q.1
9 Select the word which means the same as the group of words given.

A cold - blooded vertebrate typically living on land but breeding in water.

- Ans
- 1. Fish
 - 2. Amphibians
 - 3. Mammals
 - 4. Reptiles

Question ID : 9895808029
Chosen Option : 3

Q.2
0 Select the antonym of the given word.

LOGICAL

- Ans
- 1. Practical
 - 2. Contradictory
 - 3. Sensible
 - 4. Useful

Question ID : 9895808025
Chosen Option : 3

Q.2
1 Select the option that means the same as the given idiom.

Apples and Oranges.

- Ans
- 1. Two unlike things or people
 - 2. People working together on a project
 - 3. People with similar approaches
 - 4. Two similar situations with likely results

Question ID : 9895808028
Chosen Option : 4

Q.2
2 From the given options, identify the segment in the sentence which contains the grammatical error.

A clear and defined perception enabled her to dismissed the suggestion given by some people around her.

- Ans
- 1. suggestion given by
 - 2. clear and defined
 - 3. some people around her.
 - 4. enabled her to dismissed

Question ID : 9895808009
Chosen Option : 1

Q.2
3

Select the antonym of the given word.

PAUCITY

- Ans
- 1. Scarcity
 - 2. Surplus
 - 3. Availability
 - 4. Shortage

Question ID : 9895808026
Chosen Option : 4

Q.2
4 Select the correctly spelt word.

- Ans
- 1. Refrigerator
 - 2. Refreegerator
 - 3. Refrigerator
 - 4. Refridgerator

Question ID : 9895808032
Chosen Option : 3

Q.2
5 Select the option that means the same as the given idiom.

To burn the midnight oil.

- Ans
- 1. To eat something at midnight
 - 2. To use oil for burning a lamp
 - 3. To work till very late in the night
 - 4. To fight with someone at midnight

Question ID : 9895808027
Chosen Option : 1

Section : Hindi Language

Q.1 सही वर्तनी वाले शब्द का चयन करें।

- Ans
- 1. मखनचोर
 - 2. माखनचौर
 - 3. माकनचोर
 - 4. माखनचोर

Question ID : 9895806811
Chosen Option : --

Q.2 निम्नलिखित में से उस विकल्प का चयन करें जो 'हरी झंडी दिखाना' मुहावरे का अर्थ व्यक्त करता है।

- Ans
- 1. पीछे चलने का संकेत देना
 - 2. हरियाली होने का संकेत होना

✗ 3. आगे बढ़ने का संकेत देना

✗ 4. पीछे होने का संकेत देना

Question ID : 9895806807
Chosen Option : --

Q.3 दिये गये वाक्यांश के लिए एक शब्द दीजिये।

जिसका कोई आधार न हो

- Ans
- ✓ 1. मूलाधार
 - ✗ 2. मूसलाधार
 - ✗ 3. निराधार
 - ✗ 4. साधार

Question ID : 9895806809
Chosen Option : --

Q.4 दिए गए शब्द के पर्यायवाची शब्द का चयन करें।

व्यवधान

- Ans
- ✗ 1. मिलन
 - ✗ 2. बाधा
 - ✗ 3. प्रीति
 - ✓ 4. भ्रमण

Question ID : 9895806805
Chosen Option : --

Q.5 रिक्त स्थान को भरने के लिए उपयुक्त शब्द का चयन करें।

बागों में _____ खिलते हैं।

- Ans
- ✗ 1. भौरे
 - ✗ 2. फूल
 - ✓ 3. पक्षी
 - ✗ 4. लड़के

Question ID : 9895806796
Chosen Option : --

Comprehension:

निम्नलिखित गद्यांश के रिक्त स्थानों की पूर्ति गद्यांश के नीचे दिए गए प्रश्नों के अनुसार कीजिए-

प्रदूषण आज के समय का सबसे बड़ा _____ (1) है। प्रदूषण के बढ़ने से धरती पर बहुत सी _____ (2) पैदा हो गयीं जिसे समय रहते न _____ (3) गया तो वो दिन दूर नहीं जब धीरे- धीरे सब खतम हो जायेगा। प्रदूषण के तत्त्व _____ (4) द्वारा उत्पन्न किये गये पदार्थ या वेस्ट मटेरियल होते हैं जो प्राकृतिक संसाधन जैसे कि वायु, जल और भूमि आदि को प्रदूषित करते हैं। प्रदूषण जहरीली गैस, कीटनाशक, शाकनाशी, ध्वनि, कार्बनिक मिश्रण, रेडियोधर्मी _____ (5) हो सकते हैं।

SubQuestion No : 6

Q.6 गद्यांश में संकेतित रिक्त स्थान (1) के लिए उपयुक्त शब्द होगा।

- Ans
- 1. अभिशाप
 - 2. सफलता
 - 3. कर्तव्य
 - 4. वरदान

Question ID : 9895806798

Chosen Option : --

Comprehension:

निम्नलिखित गद्यांश के रिक्त स्थानों की पूर्ति गद्यांश के नीचे दिए गए प्रश्नों के अनुसार कीजिए-

प्रदूषण आज के समय का सबसे बड़ा _____ (1) है। प्रदूषण के बढ़ने से धरती पर बहुत सी _____ (2) पैदा हो गयीं जिसे समय रहते न _____ (3) गया तो वो दिन दूर नहीं जब धीरे- धीरे सब खतम हो जायेगा। प्रदूषण के तत्त्व _____ (4) द्वारा उत्पन्न किये गये पदार्थ या वेस्ट मटेरियल होते हैं जो प्राकृतिक संसाधन जैसे कि वायु, जल और भूमि आदि को प्रदूषित करते हैं। प्रदूषण जहरीली गैस, कीटनाशक, शाकनाशी, ध्वनि, कार्बनिक मिश्रण, रेडियोधर्मी _____ (5) हो सकते हैं।

SubQuestion No : 7

Q.7 गद्यांश में संकेतित रिक्त स्थान (2) के लिए उपयुक्त शब्द होगा।

- Ans
- 1. कथाएं
 - 2. घटनाएं
 - 3. उम्मीदें

4. समस्याएं

Question ID : 9895806799
Chosen Option : --

Comprehension:

निम्नलिखित गद्यांश के रिक्त स्थानों की पूर्ति गद्यांश के नीचे दिए गए प्रश्नों के अनुसार कीजिए-

प्रदूषण आज के समय का सबसे बड़ा _____ (1) है। प्रदूषण के बढ़ने से धरती पर बहुत सी _____ (2) पैदा हो गयीं जिसे समय रहते न _____ (3) गया तो वो दिन दूर नहीं जब धीरे- धीरे सब खतम हो जायेगा। प्रदूषण के तत्त्व _____ (4) द्वारा उत्पन्न किये गये पदार्थ या वेस्ट मटेरियल होते हैं जो प्राकृतिक संसाधन जैसे कि वायु, जल और भूमि आदि को प्रदूषित करते हैं। प्रदूषण जहरीली गैस, कीटनाशक, शाकनाशी, ध्वनि, कार्बनिक मिश्रण, रेडियोधर्मी _____ (5) हो सकते हैं।

SubQuestion No : 8

Q.8 गद्यांश में संकेतित रिक्त स्थान (3) के लिए उपयुक्त शब्द होगा।

- Ans
- 1. उठाया
 - 2. रोका
 - 3. बढ़ाया
 - 4. लगाया

Question ID : 9895806800
Chosen Option : --

Comprehension:

निम्नलिखित गद्यांश के रिक्त स्थानों की पूर्ति गद्यांश के नीचे दिए गए प्रश्नों के अनुसार कीजिए-

प्रदूषण आज के समय का सबसे बड़ा _____ (1) है। प्रदूषण के बढ़ने से धरती पर बहुत सी _____ (2) पैदा हो गयीं जिसे समय रहते न _____ (3) गया तो वो दिन दूर नहीं जब धीरे- धीरे सब खतम हो जायेगा। प्रदूषण के तत्त्व _____ (4) द्वारा उत्पन्न किये गये पदार्थ या वेस्ट मटेरियल होते हैं जो प्राकृतिक संसाधन जैसे कि वायु, जल और भूमि आदि को प्रदूषित करते हैं। प्रदूषण जहरीली गैस, कीटनाशक, शाकनाशी, ध्वनि, कार्बनिक मिश्रण, रेडियोधर्मी _____ (5) हो सकते हैं।

SubQuestion No : 9

Q.9

गद्यांश में संकेतित रिक्त स्थान (4) के लिए उपयुक्त शब्द होगा।

- Ans
- 1. पहाड़ों
 - 2. पेड़ों
 - 3. मनुष्यों
 - 4. नदियों

Question ID : 9895806801
Chosen Option : --

Comprehension:

निम्नलिखित गद्यांश के रिक्त स्थानों की पूर्ति गद्यांश के नीचे दिए गए प्रश्नों के अनुसार कीजिए-

प्रदूषण आज के समय का सबसे बड़ा _____ (1) है। प्रदूषण के बढ़ने से धरती पर बहुत सी _____ (2) पैदा हो गयीं जिसे समय रहते न _____ (3) गया तो वो दिन दूर नहीं जब धीरे- धीरे सब खतम हो जायेगा। प्रदूषण के तत्त्व _____ (4) द्वारा उत्पन्न किये गये पदार्थ या वेस्ट मटेरियल होते हैं जो प्राकृतिक संसाधन जैसे कि वायु, जल और भूमि आदि को प्रदूषित करते हैं। प्रदूषण जहरीली गैस, कीटनाशक, शाकनाशी, ध्वनि, कार्बनिक मिश्रण, रेडियोधर्मी _____ (5) हो सकते हैं।

SubQuestion No : 10

Q.1 गद्यांश में संकेतित रिक्त स्थान (5) के लिए उपयुक्त शब्द होगा।

- Ans
- 1. हथियार
 - 2. पदार्थ
 - 3. यथार्थ
 - 4. विचार

Question ID : 9895806802
Chosen Option : --

Q.1 दिए गए वाक्य का वह भाग ज्ञात करें जिसमें कोई त्रुटि है।

लोकतंत्र एक राजनीतिक व्यवस्था है जो लोगों को सम्मान मानती है।

- Ans
- 1. सम्मान मानती है।
 - 2. लोकतंत्र एक
 - 3. जो लोगों को
 - 4. राजनीतिक व्यवस्था है

Question ID : 9895806787
Chosen Option : --

Q.1
2 रिक्त स्थान को भरने के लिए उपयुक्त शब्द का चयन करें।

बाहर लकड़ी के _____ पड़े हुए हैं।

Ans

- 1. झुंड
- 2. मलबे
- 3. समूह
- 4. गड्ढर

Question ID : 9895806795
Chosen Option : --

Q.1
3 दिए गए वाक्य में रेखांकित खंड को प्रतिस्थापित करने के लिए उपयुक्त विकल्प का चयन करें।

वह पिछले वर्ष हरिद्वार गया था।

Ans

- 1. गत
- 2. आगामी
- 3. गया
- 4. भावी

Question ID : 9895806792
Chosen Option : --

Q.1
4 दिए गए वाक्य का वह भाग ज्ञात करें जिसमें कोई त्रुटि है।

विज्ञान के युग ने समय की महत्व बहुत बढ़ा दिया है।

Ans

- 1. विज्ञान के
- 2. युग ने
- 3. समय की महत्व
- 4. बहुत बढ़ा दिया है।

Question ID : 9895806789
Chosen Option : --

Q.1
5 निम्नलिखित में से उस विकल्प का चयन करें जो 'त्रिशंकु होना' मुहावरे का अर्थ व्यक्त करता है।

Ans

- 1. शंकालु होना
- 2. अधर में लटकना
- 3. इधर-उधर होना
- 4. सब जगह रहने वाला

Question ID : 9895806808
Chosen Option : --

Q.1 दिए गए वाक्य में रेखांकित खंड को प्रतिस्थापित करने के लिए उपयुक्त विकल्प का चयन करें।

अर्जुन के षोडश वर्षीय पुत्र अभिमन्यु ने चक्रव्यूह तोड़ा।

- Ans
- 1. वीर
 - 2. सोलह
 - 3. छह
 - 4. जवान

Question ID : 9895806791
Chosen Option : --

Q.1 सही वर्तनी वाले शब्द का चयन करें।

- Ans
- 1. भूलक्कड़
 - 2. भुल्ककड़
 - 3. भुलक्कड़
 - 4. भुलककड़

Question ID : 9895806812
Chosen Option : --

Q.1 दिए गए वाक्य का वह भाग जात करें जिसमें कोई त्रुटि है।

समूहों के लोगों की आपसी मेल-मिलाप के तौर-तरीकों का जटिल स्वरूप ही समाज है।

- Ans
- 1. समाज है।
 - 2. जटिल स्वरूप ही
 - 3. समूहों के लोगों की
 - 4. आपसी मेल-मिलाप के तौर-तरीकों का

Question ID : 9895806788
Chosen Option : --

Q.1 दिये गये वाक्यांश के लिए एक शब्द दीजिये।

इतिहास से संबंधित

- Ans
- 1. इतिहासिक
 - 2. सैद्धांतिक
 - 3. पौराणिक
 - 4. ऐतिहासिक

Question ID : 9895806810
Chosen Option : --

Q.2
0 दिए गए शब्द के पर्यायवाची शब्द का चयन करें।

अवगुण

- Ans
- 1. द्वेष
 - 2. गुण
 - 3. प्रेम
 - 4. दोष

Question ID : 9895806806
Chosen Option : --

Q.2
1 रिक्त स्थान को भरने के लिए उपयुक्त शब्द का चयन करें।

सैनिक देश की _____ करते हैं।

- Ans
- 1. दवा
 - 2. निर्माण
 - 3. रक्षा
 - 4. वकालत

Question ID : 9895806794
Chosen Option : --

Q.2
2 दिए गए शब्द का विलोम चुनें।

निशा

- Ans
- 1. दशा
 - 2. दवा
 - 3. दिवा
 - 4. दिशा

Question ID : 9895806804
Chosen Option : --

Q.2
3 दिए गए वाक्य में रेखांकित खंड को प्रतिस्थापित करने के लिए उपयुक्त विकल्प का चयन करें।

शीतल वायु चल रही है।

- Ans
- 1. ठंडी
 - 2. सुगंधि
 - 3. अनल
 - 4. सुरभि

Question ID : 9895806790
Chosen Option : --

Q.2
4 रिक्त स्थान को भरने के लिए उपयुक्त शब्द का चयन करें।

पुस्तक का _____ फट गया।

- Ans
- 1. पन्ना
 - 2. अक्षर
 - 3. व्याकरण
 - 4. रंग

Question ID : 9895806793
Chosen Option : --

Q.2
5 दिए गए शब्द का विलोम चुनें।

असफल

- Ans
- 1. विफल
 - 2. सफल
 - 3. सरल
 - 4. अफल

Question ID : 9895806803
Chosen Option : --

GovtJobsAlert.In