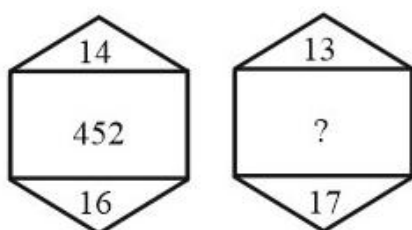


Constable (GD) in CAPFs, NIA, SSF and Rifleman (GD) in Assam Rifles Examination, 2018

Roll No. :	www.GovtJobsAlert.In
Registration No.	
Name :	
Exam Venue :	ION Digital Zone iDZ Madhyamgram
Exam Time :	9:00 AM - 10:30 AM
Exam Date :	06/03/2019

Section : General Section

Q.1 Find the missing number from the below options.



- Ans
- 1. 456
 - 2. 440
 - 3. 458
 - 4. 400

Question ID : 9895808607
Chosen Option : 3

Q.2 Select the option that is related to the third term in the same way as the second term is related to the first term.

ROSEBERRY: SEBERRYRO :: BEAUTIFUL : ?

- Ans
- 1. AUTIFULBE
 - 2. TIFULBEAU
 - 3. EAUTIFULB
 - 4. UTIFULBEA

Question ID : 9895808595
Chosen Option : 1

Q.3 Four options have been given out of which three are alike in some manner, while one is different. Choose the odd one.

- Ans
- 1. 2348
 - 2. 6388
 - 3. 1238
 - 4. 3568

Question ID : 9895808606
Chosen Option : 1

Q.4

Four boys A, B, C, D and four girls P, Q, R, S are playing merry go round in such a way that they face the centre and form a circle. No two girls or no two boys are next to each other. A is to the immediate left of R, who is opposite to Q. P and Q have only C between them. P is opposite to S, who is to the immediate right of B.

If B is the only person between R and S, then who is opposite B?

- Ans
- 1. Q
 - 2. A
 - 3. D
 - 4. C

Question ID : 9895808599
Chosen Option : 4

Q.5 Select the correct option that will fill in the blank and complete the series.

AB, BA, ABC, CBA, ABCD, _____.

- Ans
- 1. CABD
 - 2. BACD
 - 3. DCBA
 - 4. ACBD

Question ID : 9895808590
Chosen Option : 3

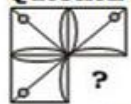
Q.6 In a certain code, TIM is coded as RGK, then how is PAINE coded in the same way?

- Ans
- 1. NGYCL
 - 2. NYGLC
 - 3. NYGCL
 - 4. NGYLC

Question ID : 9895808596
Chosen Option : 2

Q.7 Which of the following answer figure will complete the given figure?

Question figure:



- Ans
- 1.
 - 2.
 - 3.
 - 4.

Question ID : 9895808610
Chosen Option : 3

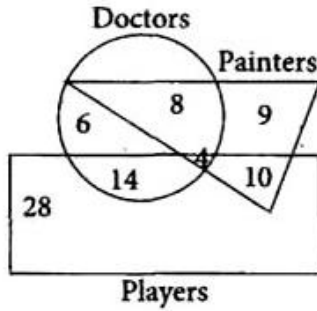
Q.8 Select the option that is related to the Third term in the same way as the second term is related to the first term.

10 : 30 :: 68 : ?

- Ans
- 1. 112
 - 2. 120
 - 3. 100
 - 4. 130

Question ID : 9895808605
Chosen Option : 1

Q.9 Study the diagram carefully and answer the given questions.



How many painters are neither doctors nor players?

- Ans
- 1. 10
 - 2. 8
 - 3. 9
 - 4. 6

Question ID : 9895808614
Chosen Option : 3

Q.1 Four letter clusters have been given out of which three are alike in some manner, while one is different. Choose the odd one.

- Ans
- 1. STaY
 - 2. AWaY
 - 3. TRaY
 - 4. CLaY

Question ID : 9895808591
Chosen Option : 2

Q.1 Select the correct option that will fill in the blank and complete the series.

0.3, 0.8, 2.3, 4.8, _____

- Ans
- 1. 7.3
 - 2. 8.3
 - 3. 7.5
 - 4. 6.5

Question ID : 9895808604
Chosen Option : 2

Q.1
2

A, M, P, D, Q, R, W and B are sitting around a circle facing at the centre. D is fourth to the left of A who is third to the right of M. P is third to the left of Q who is third to the left of M. R is third to the right of W who is second to the right of B.

In which of the following pairs is the second person sitting to the immediate right of the first person?

- Ans
- 1. QB
 - 2. RM
 - 3. MD
 - 4. AB

Question ID : 9895808598
Chosen Option : 2

Q.1
3 Four brothers P, Q, R and S go to a hotel. They book four hotel rooms numbered 301, 302, 303 and 304. Sum of room numbers of P and R is 603 and the sum of room numbers of R and S is 604. What is the sum of room numbers of P, Q and R?

- Ans
- 1. 907
 - 2. 905
 - 3. 903
 - 4. 904

Question ID : 9895808600
Chosen Option : 2

Q.1
4 Select the correct option that will fill in the blank and complete the series.

2, 7, 5, 10, 8, 13, _____

- Ans
- 1. 15
 - 2. 9
 - 3. 11
 - 4. 38

Question ID : 9895808603
Chosen Option : 3

Q.1
5 If PT is written as 8-10, how will NLR be written?

- Ans
- 1. 7-6-12
 - 2. 7-6-9
 - 3. 7-6-8
 - 4. 8-6-11

Question ID : 9895808597
Chosen Option : 2

Q.1
6 Select the correct combination of mathematical signs to replace ** signs and to balance the given equation:

$530 * 2 * 3 * 5 * 800$

- Ans
- 1. $\div - - =$
 - 2. $+ + \times =$
 - 3. $\div + - =$
 - 4. $\div \times + =$

Question ID : 9895808608
Chosen Option : 4

Q.1 The statements below are followed by two conclusions labeled I and II. Assuming that the information in the statements is true, even if it appears to be at variance with generally established facts, decide which conclusion(s) logically and definitely follow(s) from the information given in the statements.

Statements:

Some shirts are socks.

No sock is red.

Conclusion:

I. Some socks are shirts.

II. No shirt is red.

- Ans**
- 1. Neither conclusion I nor II follows
 - 2. Either conclusion I or II follows
 - 3. Only conclusion II follows
 - 4. Only conclusion I follows

Question ID : 9895808602
Chosen Option : 4

Q.1 Choose the option figure in which the problem figure is hidden/embedded.

Question figure

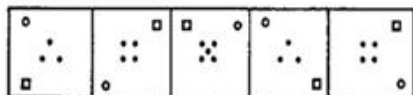


- Ans**
- 1.
 - 2.
 - 3.
 - 4.

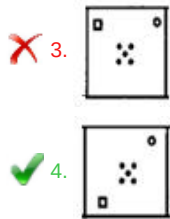
Question ID : 9895808611
Chosen Option : 1

Q.1 Choose the option which completes the given figure series.

Question Figure



- Ans**
- 1.
 - 2.



Question ID : 9895808609
Chosen Option : 4

Q.2 Select the related word pair from the given alternatives.

Teeth : Cut :: _____ : _____

- Ans 1. Food : Smell
 2. Tubelight : Heat
 3. Legs : Walk
 4. Broom : Fly

Question ID : 9895808593
Chosen Option : 3

Q.2 A piece of paper is folded and cut as shown below in the question figures, indicate how it will appear when opened.

Question Figure:



- Ans 1.
- 2.
- 3.
- 4.

Question ID : 9895808613
Chosen Option : 3

Q.2 Select the related word pair from the given alternatives.

Celsius : Temperature :: _____ : _____

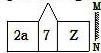
- Ans 1. Bank note : Office
 2. Kilometer : Distance
 3. Bulb : Electric current
 4. Meter : Water

Question ID : 9895808594
Chosen Option : 2

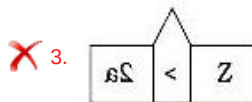
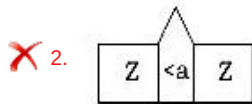
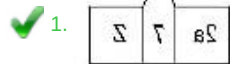
Q.2 Choose the option that most closely resembles the mirror image of the given figure when mirror is placed at right side.

3

Question Figure:



Ans



Question ID : 9895808612
Chosen Option : 1

Q.2 The statements below are followed by conclusions labeled I, II, III and IV. Assuming that the information in the statements is true, even if it appears to be at variance with generally established facts, decide which conclusion(s) logically and definitely follow(s) from the information given in the statements.

4

Statements:

All Iris are Cornea.

Some Cornea are Lens.

All Lens are Retina.

Conclusions:

I. Some Retina are Cornea

II. Some Retina are Iris

III. Some Lens are Iris

IV. Some Cornea are Retina

Ans

✓ 1. Only I and IV follow

✗ 2. None follows

✗ 3. Only III and IV follow

✗ 4. Only I and II follow

Question ID : 9895808601
Chosen Option : 4

Q.2 Four words have been given out of which three are alike in some manner, while one is different. Choose the odd one.

5

Ans

✗ 1. Quran

✓ 2. Jewish

✗ 3. Bible

✗ 4. Bhagavad Gita

Question ID : 9895808592
Chosen Option : 2

Q.2
6 The _____ are the triangular muscles of the shoulder.

- Ans
- 1. Masseter
 - 2. Achilles tendon
 - 3. Deltoids
 - 4. Sartorius

Question ID : 9895807521
Chosen Option : 3

Q.2
7 Which of the following rivers is NOT a tributary of the Krishna?

- Ans
- 1. Koyna
 - 2. Bhima
 - 3. Venna
 - 4. Betwa

Question ID : 9895807522
Chosen Option : 4

Q.2
8 _____ alloy consists of nickel, copper and zinc.

- Ans
- 1. Bell Metal
 - 2. Solder
 - 3. German silver
 - 4. Rose Metal

Question ID : 9895807520
Chosen Option : 3

Q.2
9 The relation between the period of a simple pendulum 'T' and its length 'L' is _____. ('g' is acceleration due to gravity)

- Ans
- 1. $T=2\pi \sqrt{L/g}$
 - 2. $T=4\pi \sqrt{g/L}$
 - 3. $T=2\pi \sqrt{g/L}$
 - 4. $T=4\pi \sqrt{L/g}$

Question ID : 9895807517
Chosen Option : 2

Q.3
0 Who was the first and the most important king of the Rashtrakuta dynasty of Karnataka who defeated the Chalukyas of Badami?

- Ans
- 1. Harihara I
 - 2. Uttama
 - 3. Dantidurga
 - 4. Bindusara

Question ID : 9895807525
Chosen Option : 3

Q.3
1 The Bhangra dance form is popular in which state?

- Ans 1. Puducherry
 2. Punjab
 3. Rajasthan
 4. Maharashtra

Question ID : 9895807505
Chosen Option : 2

Q.3
2 The Union Budget 2018 allocated ₹ 5,750 crore to _____.

- Ans 1. the National Livelihood Mission
 2. the Ujjwala Yojana
 3. Operation Green
 4. the Saubhagya Yojna

Question ID : 9895807512
Chosen Option : 2

Q.3
3 Which Maratha warrior died in the successful defence of the Sinhagad fort fighting against the Mughal army?

- Ans 1. Tanaji Malusare
 2. Baji Pasalkar
 3. Chimaji Appa
 4. Baji Prabhu Deshpande

Question ID : 9895807527
Chosen Option : 4

Q.3
4 The concept of the Freedom of trade in India's Constitution is adopted from the Constitution of which country?

- Ans 1. United Kingdom
 2. Ireland
 3. United States
 4. Australia

Question ID : 9895807514
Chosen Option : 3

Q.3
5 In which amendment to the constitution were the Bodo, Dogri, Santhali and Maithli added to the list of recognised languages?

- Ans 1. 73rd Constitution Amendment Act of 2003
 2. 103rd Constitution Amendment Act, 2018
 3. 92nd Constitution Amendment Act of 2003
 4. 101st Constitution Amendment Act, 2016

Question ID : 9895807515
Chosen Option : 1

Q.3
6 Which freedom fighters were hanged for the Kakori conspiracy case?

- Ans 1. Chittaranjan Das and Vasudev Balwant Phadke

- 2. Khudiram Bose and Chandra Shekhar Azad
- 3. Ram Prasad Bismil and Ashfaqulla Khan
- 4. Krishnaji Gopal Karve and Bagha Jatin

Question ID : 9895807526
Chosen Option : 3

Q.3
7 Minimum Support Price for 2018-19 for Cotton of the Medium Staple variety is set at _____.

- Ans
- 1. ₹ 5,150 per quintal
 - 2. ₹ 2,897 per quintal
 - 3. ₹ 2,430 per quintal
 - 4. ₹ 1,950 per quintal

Question ID : 9895807513
Chosen Option : 1

Q.3
8 Which element is placed in the 5th Period and IIA Group of the periodic table?

- Ans
- 1. Tellurium (At no 52)
 - 2. Lead (At no 82)
 - 3. Barium (At no 56)
 - 4. Strontium (At no 38)

Question ID : 9895807519
Chosen Option : 2

Q.3
9 The prefix ' _____ ' is equal to a factor of 10^{15} .

- Ans
- 1. atto
 - 2. peta
 - 3. exa
 - 4. femto

Question ID : 9895807518
Chosen Option : 1

Q.4
0 Which Indian won the Gold in Women's freestyle wrestling, 50 kg, at the 2018 Asian Games?

- Ans
- 1. Sakshi Malik
 - 2. Vinesh Phogat
 - 3. Kavita Devi
 - 4. Babita Kumari

Question ID : 9895807506
Chosen Option : 2

Q.4
1 Which tribal festival in Chhattisgarh is dedicated to goddess Kesharpal Kesharpalin Devi, one of the tribal deities?

- Ans
- 1. Madai
 - 2. Puli Kali

3. Minjar

4. Sarhul

Question ID : 9895807504

Chosen Option : 2

Q.4
2 The Zoji La Pass is in which mountain range?

Ans 1. Ladakh Range

2. Zaskar Range

3. Dhauladhar Range

4. East Karakoram Range

Question ID : 9895807523

Chosen Option : 1

Q.4
3 The best examples of which script are found in the rock-cut edicts of Asoka?

Ans 1. Grantha

2. Brahmi

3. Kadamba

4. Sharada

Question ID : 9895807503

Chosen Option : 2

Q.4
4 Mutual Funds asset base in India stood at _____ at end of November 2018.

Ans 1. ₹ 31 lakh crore

2. ₹ 47 lakh crore

3. ₹ 19 lakh crore

4. ₹ 24 lakh crore

Question ID : 9895807511

Chosen Option : 4

Q.4
5 India defeated the team from which country in the final to win the under 19 Cricket World Cup, 2018?

Ans 1. Australia

2. South Africa

3. England

4. Pakistan

Question ID : 9895807507

Chosen Option : 1

Q.4
6 Who won the Miss World title in 1997?

Ans 1. Reita Faria

2. Tara Anne Fonseca

3. Diana Hayden

4. Zeenat Aman

Question ID : 9895807510
Chosen Option : 1

Q.4
7 The atmosphere of Mars is mostly composed of _____.

- Ans
- 1. Carbon dioxide
 - 2. Oxygen
 - 3. Hydrogen
 - 4. Ammonia

Question ID : 9895807524
Chosen Option : 1

Q.4
8 The Elephant is a symbol of which Indian political party?

- Ans
- 1. Rashtriya Janata Dal
 - 2. Communist Party of India
 - 3. National Congress Party
 - 4. Bahujan Samaj Party

Question ID : 9895807516
Chosen Option : 4

Q.4
9 Who is the author of the, 'Byomkesh Bakshi Stories'?

- Ans
- 1. Satyajit Ray
 - 2. David Davidar
 - 3. Sharadindu Bandyopadhyay
 - 4. Ritwik Ghatak

Question ID : 9895807509
Chosen Option : 1

Q.5
0 All of the following siblings have won the Dadasaheb Phalke Award, EXCEPT _____.

- Ans
- 1. Raj Kapoor and Shashi Kapoor
 - 2. Lata Mangeshkar and Asha Bhosle
 - 3. Mahesh Bhatt and Vikram Bhatt
 - 4. B R Chopra and Yash Chopra

Question ID : 9895807508
Chosen Option : 2

Q.5
1 If a man cuts the grass of a lawn in T minutes, what part of the lawn can he cut in 30 minutes?

- Ans
- 1. T-30
 - 2. 30/T
 - 3. 30-T
 - 4. T/30

Question ID : 9895807844

Chosen Option : 2

Q.5 A sum of ₹ 5000 is invested for two years under compound interest at 10% p.a, interest being compounded annually.

2 The interest earned (in ₹) is:

- Ans
- 1. 500
 - 2. 1000
 - 3. 1050
 - 4. 2100

Question ID : 9895807842

Chosen Option : 3

Q.5 Study the following table carefully to answer the questions given below.

Marks obtained by three students A,B and C in three subjects out of 100			
Student	Subjects		
	Math	Sci	Eng
A	88	86	66
B	65	74	78
C	72	68	84

What is the difference between A's and C's total marks in the exam?

- Ans
- 1. 16
 - 2. 13
 - 3. 22
 - 4. 15

Question ID : 9895807852

Chosen Option : 1

Q.5 The base area of a cuboid is 34 sq cm. and height is 3.5 cm. What is the volume of cuboid?

4

- Ans
- 1. 125 cm³
 - 2. 97 cm³
 - 3. 119 cm³
 - 4. 108 cm³

Question ID : 9895807848

Chosen Option : 3

Q.5 Sixty percent of the rats included in a particular experiment were female rats. If some of the rats died during the experiment and 30% of rats died were male, what was the ratio of the death rate among the male rats to the death rate among the female rats?

5

- Ans
- 1. 3 : 4
 - 2. 6 : 7
 - 3. 9 : 14
 - 4. 9 : 16

Question ID : 9895807835

Chosen Option : 1

Q.5
6

In what proportion must a grocer mix one kind of bajra at ₹ 45 per kg with another at ₹ 32 per kg in order that by selling the mixture at ₹ 48 per kg he may make a profit of 20%?

- Ans
- 1. 7 : 5
 - 2. 9 : 5
 - 3. 8 : 5
 - 4. 4 : 1

Question ID : 9895807838
Chosen Option : 3

Q.5
7 John travels $\frac{2}{3}$ rd of a distance by bike and remaining 6 km on foot. How many km does he travels in the whole journey?

- Ans
- 1. 26 km
 - 2. 18 km
 - 3. 28 km
 - 4. 14 km

Question ID : 9895807846
Chosen Option : 2

Q.5
8 Study the following table carefully to answer the questions given below.

Marks obtained by three students A,B and C in three subjects out of 100			
Student	Subjects		
	Math	Sci	Eng
A	88	86	66
B	65	74	78
C	72	68	84

The total marks obtained by 'A' in all the subjects together is:

- Ans
- 1. 260
 - 2. 228
 - 3. 240
 - 4. 242

Question ID : 9895807851
Chosen Option : 3

Q.5
9 A sum of ₹ 10000 is lent partly at 8% and remaining at 10% per annum. If the yearly interest on the average is 9.2%, then both parts are respectively.

- Ans
- 1. ₹ 4000 and ₹ 6000
 - 2. ₹ 5500 and ₹ 4500
 - 3. ₹ 5000 and ₹ 5000
 - 4. ₹ 4500 and ₹ 5500

Question ID : 9895807841
Chosen Option : 3

Q.6
0

A pipe can fill a cistern in 20 minutes whereas the cistern when full can be emptied by a leak in 28 minutes. When both are opened, the time taken to fill the cistern is:

- Ans
- 1. 80 min
 - 2. 60 min
 - 3. 48 min
 - 4. 70 min

Question ID : 9895807843
Chosen Option : 4

Q.6
1 What should come in place of question mark (?) in the following questions?

$$(140 + 80 \times 2 - 24) \div (80 + 20 \times 3 - 40) = ?$$

- Ans
- 1. 2.76
 - 2. 0.276
 - 3. 276
 - 4. -27.6

Question ID : 9895807830
Chosen Option : 1

Q.6
2 By selling 20 metres of cloth, a man gains the selling price of 4 metres of cloth. The gain percent is:

- Ans
- 1. 20 %
 - 2. 15 %
 - 3. 22 %
 - 4. 25 %

Question ID : 9895807837
Chosen Option : 4

Q.6
3 The speed of train in going from Bhopal to Varanasi is 100 kmph while when coming back from Varanasi to Bhopal, its speed is 80 kmph. What is the average speed during the whole journey? (correct to two decimal places)

- Ans
- 1. 90.52 kmph
 - 2. 88.89 kmph
 - 3. 78.56 kmph
 - 4. 86.53 kmph

Question ID : 9895807832
Chosen Option : 2

Q.6
4 The value of $\frac{1}{3} + \frac{6}{7} \div \frac{6}{3} + \frac{8}{9} - \frac{2}{3} \times \frac{4}{3}$ is:

- Ans
- 1. $\frac{9}{21}$
 - 2. $\frac{16}{21}$

3. $\frac{17}{21}$

4. $\frac{15}{21}$

Question ID : 9895807829

Chosen Option : 2

Q.6
5 What is the L.C.M. of $\frac{10}{21}$, $\frac{20}{63}$, $\frac{55}{56}$?

Ans 1. $\frac{5}{504}$

2. $\frac{220}{7}$

3. $\frac{5}{7}$

4. $\frac{220}{504}$

Question ID : 9895807828

Chosen Option : 2

Q.6
6 A person purchases a silk cloth of length 50 m and width 1 m at the rate of ₹ 250 per sq m and a cotton cloth of length 40 m and width 2m at the rate of ₹ 200 per sq m. What is the difference between the prices of two cloths?

Ans 1. ₹ 3500

2. ₹ 3200

3. ₹ 4100

4. ₹ 3950

Question ID : 9895807847

Chosen Option : 1

Q.6
7 The marked price of a bike is ₹ 33,600. The retailer announced a discount of 16% on the occasion of Holi. What amount a customer will have to pay for the bike?

Ans 1. ₹ 28224

2. ₹ 5976

3. ₹ 5376

4. ₹ 20224

Question ID : 9895807833

Chosen Option : 1

Q.6
8 A train passes the platform in 18 seconds and a man standing on the platform in 8 seconds. If the length of the train is 100 metres, the length of the platform is:

Ans 1. 125 m

2. 140 m

3. 150 m

4. 130 m

Question ID : 9895807845
Chosen Option : 1

Q.6 Ram buys articles at 70 for ₹ 890 and sold at 60 for ₹ 890. What is his gain percent?

- Ans
- 1. $17\frac{1}{3}\%$
 - 2. 20%
 - 3. $16\frac{2}{3}\%$
 - 4. 25%

Question ID : 9895807836
Chosen Option : 3

Q.7 Study the following table carefully to answer the questions given below.

Marks obtained by three students A,B and C in three subjects out of 100			
Student	Subjects		
	Math	Sci	Eng
A	88	86	66
B	65	74	78
C	72	68	84

The average marks obtained by all the students in Maths is:

- Ans
- 1. 81
 - 2. 79
 - 3. 75
 - 4. 87

Question ID : 9895807850
Chosen Option : 3

Q.7 If $\frac{a}{b} = \frac{2}{3}$, then the value of $(5a^3 - 2a^2b) : (3ab^2 - b^3)$ is :

- Ans
- 1. 34 : 19
 - 2. 16 : 27
 - 3. 32 : 29
 - 4. 27 : 16

Question ID : 9895807840
Chosen Option : 2

Q.7 If the length of a rectangle is increased in the ratio 4 : 5 and its breadth is decreased in the ratio 3 : 2, then its area will be decreased in the ratio _____

- Ans
- 1. 10 : 3
 - 2. 6 : 5
 - 3. 4 : 3
 - 4. 2 : 1

Question ID : 9895807849

Chosen Option : 4

Q.7
3 What is the fourth proportional to 3, 7 and 15?

- Ans
- 1. 45
 - 2. 35
 - 3. 25
 - 4. 30

Question ID : 9895807839
Chosen Option : 2

Q.7
4 Virat kohli has certain batting average of 9 innings. In the tenth innings he scored 106 runs thereby increasing his average by 6 runs. His new batting average is:

- Ans
- 1. 46
 - 2. 52
 - 3. 56
 - 4. 48

Question ID : 9895807831
Chosen Option : 1

Q.7
5 A dice is rolled two times. Find the probability of getting a composite number on first roll and a prime number on second roll?

- Ans
- 1. $\frac{1}{6}$
 - 2. $\frac{1}{9}$
 - 3. $\frac{1}{4}$
 - 4. $\frac{1}{2}$

Question ID : 9895807834
Chosen Option : 1

Section : English Language

Q.1 Select the synonym of the given word.

MADNESS

- Ans
- 1. Wisdom
 - 2. Balance
 - 3. Insanity
 - 4. Stability

Question ID : 9895808730
Chosen Option : 3

Q.2 Select the antonym of the given word.

RELUCTANT

- Ans 1. Opposed
 2. Unwilling
 3. Willing
 4. Unenthusiastic

Question ID : 9895808732
Chosen Option : 4

Q.3 Select the most appropriate option to substitute the underlined segment in the given sentence. If there is no need to substitute it, select No substitution required.

The two sisters look quite different in each other.

- Ans 1. different from each other
 2. different as each other
 3. No substitution required
 4. different with one another

Question ID : 9895808719
Chosen Option : 1

Q.4 Select the most appropriate word to fill in the blank.

I was astounded at his _____ knowledge about the continent of Africa.

- Ans 1. Colossal
 2. Vast
 3. Grave
 4. Massive

Question ID : 9895808739
Chosen Option : 4

Q.5 Select the meaning of the given idiom.

Bring to one's knees

- Ans 1. to support someone
 2. to trouble someone
 3. to request to bend
 4. to force to submit

Question ID : 9895808734
Chosen Option : 4

Q.6 Select the meaning of the given idiom.

Cool as Cucumber

- Ans 1. to be aggressive
 2. to be clever
 3. to be smart
 4. to be calm

Question ID : 9895808733

Chosen Option : 3

Q.7 Select the antonym of the given word.

LAMENT

- Ans
- 1. Rejoice
 - 2. Regret
 - 3. Grieve
 - 4. Mourn

Question ID : 9895808731

Chosen Option : 3

Q.8 Select the word which means the same as the group of words given.

Someone who wishes to destroy the existing government and laws

- Ans
- 1. Anarchist
 - 2. Hermit
 - 3. Pacifist
 - 4. Patriot

Question ID : 9895808735

Chosen Option : 4

Q.9 Select the most appropriate word to fill in the blank.

The _____ of the minister's statement cannot be verified by people who have no access to official records.

- Ans
- 1. rejection
 - 2. ambiguity
 - 3. approval
 - 4. validity

Question ID : 9895808740

Chosen Option : 3

Q.1 Identify the segment in the sentence which contains the grammatical error from the given options.

0

Seeds of mustard plants give us oil and the leave are used as a vegetable.

- Ans
- 1. leave are used
 - 2. as a vegetable
 - 3. give us oil
 - 4. Seeds of

Question ID : 9895808715

Chosen Option : 1

Q.1 Select the most appropriate option to substitute the underlined segment in the given sentence. If there is no need to substitute it, select No substitution required.

1

Our meals usually have at least one item make of some kinds of grain.

Ans

- 1. made of some kind
- 2. making of any kinds
- 3. makes of kind
- 4. No substitution required

Question ID : 9895808718
Chosen Option : 3

Q.1
2 Select the word which means the same as the group of words given.

A person who is recovering after an illness or medical treatment

- Ans
- 1. Healthy
 - 2. Convalescent
 - 3. Altruist
 - 4. Athlete

Question ID : 9895808736
Chosen Option : 3

Comprehension:

In the following passage some words have been deleted. Fill in the blanks with the help of the alternatives given. Select the most appropriate option for each number.

Those of us who live in (1) _____ covered with forests and surrounded (2) _____ hills may find it difficult to (3) _____ what a desert is really like. The (4) _____ belief is that it is (5) _____ endless stretch of sand where no rain falls and, therefore, no vegetation grows.

SubQuestion No : 13

Q.1
3 Select the most appropriate option that will fill in the blank number 1.

- Ans
- 1. cities
 - 2. territory
 - 3. regions
 - 4. quarters

Question ID : 9895808724
Chosen Option : 4

Comprehension:

In the following passage some words have been deleted. Fill in the blanks with the help of the alternatives given. Select the most appropriate option for each number.

Those of us who live in (1) _____ covered with forests and surrounded (2) _____ hills may find it difficult to (3) _____ what a desert is really like. The (4) _____ belief is that it is (5) _____ endless stretch of sand where no rain falls and, therefore, no vegetation grows.

SubQuestion No : 14

Q.1
4 Select the most appropriate option that will fill in the blank number 2.

- Ans
- 1. for
 - 2. with
 - 3. from
 - 4. by

Question ID : 9895808725
Chosen Option : 4

Comprehension:

In the following passage some words have been deleted. Fill in the blanks with the help of the alternatives given. Select the most appropriate option for each number.

Those of us who live in (1) _____ covered with forests and surrounded (2) _____ hills may find it difficult to (3) _____ what a desert is really like. The (4) _____ belief is that it is (5) _____ endless stretch of sand where no rain falls and, therefore, no vegetation grows.

SubQuestion No : 15

Q.1
5 Select the most appropriate option that will fill in the blank number 3.

- Ans
- 1. calculate
 - 2. look
 - 3. imagine
 - 4. feel

Question ID : 9895808726
Chosen Option : 2

Comprehension:

In the following passage some words have been deleted. Fill in the blanks with the help of the alternatives given. Select the most appropriate option for each number.

Those of us who live in (1) _____ covered with forests and surrounded (2) _____ hills may find it difficult to (3) _____ what a desert is really like. The (4) _____ belief is that it is (5) _____ endless stretch of sand where no rain falls and, therefore, no vegetation grows.

SubQuestion No : 16

Q.1
6 Select the most appropriate option that will fill in the blank number 4.

- Ans
- 1. attractive
 - 2. fake
 - 3. popular
 - 4. noted

Question ID : 9895808727

Chosen Option : 3

Comprehension:

In the following passage some words have been deleted. Fill in the blanks with the help of the alternatives given. Select the most appropriate option for each number.

Those of us who live in (1) _____ covered with forests and surrounded (2) _____ hills may find it difficult to (3) _____ what a desert is really like. The (4) _____ belief is that it is (5) _____ endless stretch of sand where no rain falls and, therefore, no vegetation grows.

SubQuestion No : 17

Q.1
7 Select the most appropriate option that will fill in the blank number 5.

- Ans
- 1. the
 - 2. an
 - 3. a
 - 4. no article needed

Question ID : 9895808728

Chosen Option : 2

Q.1
8 Identify the segment in the sentence which contains the grammatical error from the given options.

The thin wire that giving off light is called the filament.

- Ans
- 1. light is called
 - 2. the filament
 - 3. The thin wire
 - 4. giving off

Question ID : 9895808716

Chosen Option : 4

Q.1
9 Select the wrongly spelt word.

- Ans
- 1. Committee
 - 2. Concious
 - 3. Corruption
 - 4. Completely

Question ID : 9895808738

Chosen Option : 1

Q.2
0 Select the wrongly spelt word.

- Ans
- 1. Sergeant
 - 2. Secretary
 - 3. Surely
 - 4. Scenary

Question ID : 9895808737
Chosen Option : 4

Q.2
1 Select the most appropriate word to fill in the blank.

Among the _____ kinds, the most common ant is black or red.

- Ans
- 1. much
 - 2. various
 - 3. separate
 - 4. lots of

Question ID : 9895808721
Chosen Option : 4

Q.2
2 Identify the segment in the sentence which contains the grammatical error from the given options.

The jute plant is normal harvested when it is at flowering stage.

- Ans
- 1. flowering
 - 2. is normal
 - 3. The jute plant
 - 4. when it is

Question ID : 9895808717
Chosen Option : 2

Q.2
3 Select the synonym of the given word.

LUCID

- Ans
- 1. Unclear
 - 2. Clear
 - 3. Ambiguous
 - 4. Confusing

Question ID : 9895808729
Chosen Option : 3

Q.2
4 Select the most appropriate word to fill in the blank.

This seems to be a _____ rifle.

- Ans
- 1. soldiers
 - 2. soldier'
 - 3. soldier
 - 4. soldier's

Question ID : 9895808722
Chosen Option : 4

Q.2
5 Select the most appropriate option to substitute the underlined segment in the given sentence. If there is no need to substitute it, select No substitution required.

Tea leaves is separate from the liquid with a strainer, while preparing tea.

- Ans
- 1. are separated from
 - 2. were separating to
 - 3. was separate to
 - 4. No substitution required

Question ID : 9895808720
Chosen Option : 2

Section : Hindi Language

Q.1 'डकार जाना' मुहावरे का अर्थ है-

- Ans
- 1. खुलेआम कहना
 - 2. हानि उठाना
 - 3. कठिन काम
 - 4. हड़प लेना

Question ID : 9895806964
Chosen Option : --

Q.2 दिए गए वाक्य का वह भाग ज्ञात करें जिसमें कोई त्रुटि है।

यदि आप अपनी और अपनी परिवार की भलाई चाहते हो तो यहाँ से चले जाओ।

- Ans
- 1. और अपनी परिवार की
 - 2. भलाई चाहते हो
 - 3. तो यहाँ से चले जाओ।
 - 4. यदि आप अपनी

Question ID : 9895806945
Chosen Option : --

Q.3 दिए गए वाक्य का वह भाग ज्ञात करें जिसमें कोई त्रुटि है।

श्याम की खराब स्थिति को देखकर मुझे दुःख और क्षोभ हुए।

- Ans
- 1. और क्षोभ हुए।
 - 2. श्याम की
 - 3. खराब स्थिति को देखकर
 - 4. मुझे दुःख

Question ID : 9895806944
Chosen Option : --

Q.4 'अठखेलियाँ सूझना' मुहावरे का अर्थ है-

- Ans
- 1. मजाक उड़ाना

- 2. ईर्ष्या करना
- 3. ट्यंग्य करना
- 4. दिल्लगी करना

Question ID : 9895806963
Chosen Option : --

Q.5 सही वर्तनी वाले शब्द का चयन करें।

- Ans
- 1. दिवश
 - 2. दिवस
 - 3. दीवस
 - 4. दीवास

Question ID : 9895806968
Chosen Option : --

Q.6 दिए गए वाक्य में रेखांकित खंड को प्रतिस्थापित करने के लिए उपयुक्त विकल्प का चयन करें।

उसकी शिकायत पूर्णतया सही थी।

- Ans
- 1. अक्षरशः
 - 2. प्रतिशब्द
 - 3. लगभग
 - 4. अधिकतम

Question ID : 9895806947
Chosen Option : --

Q.7 दिए गए शब्द का विलोम चुनें।

मांसाहारी

- Ans
- 1. शाकाहारी
 - 2. बलिहारी
 - 3. निरंकारी
 - 4. निराहार

Question ID : 9895806960
Chosen Option : --

Q.8 रिक्त स्थान को भरने के लिए उपयुक्त शब्द का चयन करें।

आजकल चोरों _____ गिरोह सक्रिय है।

- Ans
- 1. पर
 - 2. को
 - 3. का
 - 4. से

Question ID : 9895806949

Chosen Option : --

Q.9 दिये गये वाक्यांश के लिए एक शब्द दीजिये।

रास्ता दिखाने वाला

Ans

- 1. दूरदर्शी
- 2. मार्गदर्शक
- 3. समदर्शी
- 4. राहपथिक

Question ID : 9895806965

Chosen Option : --

Q.1₀ दिये गये वाक्यांश के लिए एक शब्द दीजिये।

तीव्र बुद्धि वाला

Ans

- 1. मंदबुद्धि
- 2. कुशाग्रबुद्धि
- 3. दुर्बुद्धि
- 4. अल्पबुद्धि

Question ID : 9895806966

Chosen Option : --

Q.1₁ दिए गए शब्द के पर्यायवाची शब्द का चयन करें।

विपत्ति

Ans

- 1. कष्ट
- 2. जटिल
- 3. मुसीबत
- 4. जटा

Question ID : 9895806962

Chosen Option : --

Q.1₂ सही वर्तनी वाले शब्द का चयन करें।

Ans

- 1. साक्षार
- 2. सक्षर
- 3. साक्षर
- 4. शाक्षर

Question ID : 9895806967

Chosen Option : --

Q.1
3 रिक्त स्थान को भरने के लिए उपयुक्त शब्द का चयन करें।

एक विद्वान ने परीक्षा की _____ आग से की है।

- Ans
- 1. तुल्य
 - 2. उपेक्षा
 - 3. अपेक्षा
 - 4. तुलना

Question ID : 9895806950
Chosen Option : --

Q.1
4 रिक्त स्थान को भरने के लिए उपयुक्त शब्द का चयन करें।

मैं पौधे _____ रहा हूँ।

- Ans
- 1. जगा
 - 2. खा
 - 3. लगा
 - 4. भगा

Question ID : 9895806951
Chosen Option : --

Q.1
5 रिक्त स्थान को भरने के लिए उपयुक्त शब्द का चयन करें।

लगता है आज _____ होगी।

- Ans
- 1. सूर्य
 - 2. दिन
 - 3. बादल
 - 4. वर्षा

Question ID : 9895806952
Chosen Option : --

Q.1
6 दिए गए वाक्य का वह भाग ज्ञात करें जिसमें कोई त्रुटि है।

कक्षा के सभी छात्र गुरु जी की आदर करते हैं।

- Ans
- 1. सभी छात्र
 - 2. कक्षा के
 - 3. करते हैं।
 - 4. गुरु जी की आदर

Question ID : 9895806943
Chosen Option : --

Q.1
7

दिए गए वाक्य में रेखांकित खंड को प्रतिस्थापित करने के लिए उपयुक्त विकल्प का चयन करें।

जीवन में उन्नति चाहते हो तो परिश्रम करो।

- Ans 1. उच्चता
 2. विकास
 3. अग्रगण्य
 4. अग्रसर

Question ID : 9895806946
Chosen Option : --

Q.1 दिए गए वाक्य में रेखांकित खंड को प्रतिस्थापित करने के लिए उपयुक्त विकल्प का चयन करें।

जिसने मन रूपी मतवाले हाथी को वश में कर लिया वही सच्चा शूरवीर है।

- Ans 1. मदमस्त
 2. व्याकुल
 3. आकुल
 4. उद्विग्न

Question ID : 9895806948
Chosen Option : --

Comprehension:

निम्नलिखित गद्यांश के रिक्त स्थानों की पूर्ति गद्यांश के नीचे दिए गए प्रश्नों के अनुसार कीजिए-

किताबें हमारी सबसे अच्छी _____ (1) हैं। किताबें आत्मा और मन के लिए भोजन हैं। पुस्तकें हमारे दुखों में हमें _____ (2) दे सकती हैं और जीवन की चिंताओं को भूलने में मदद कर सकती हैं। ये जीवन में _____ (3) का रहस्य सिखाती हैं। ये जीवन के अंधेरे में _____ (4) दिखाती हैं। ये हमें सिखाती हैं कि बुराई पर अच्छाई की _____ (5) होती है।

SubQuestion No : 19

Q.1 गद्यांश में संकेतित रिक्त स्थान (1) के लिए उपयुक्त शब्द होगा।

- Ans 1. दुश्मन
 2. सहपाठी
 3. सहकर्मी
 4. दोस्त

Question ID : 9895806954
Chosen Option : --

Comprehension:

निम्नलिखित गद्यांश के रिक्त स्थानों की पूर्ति गद्यांश के नीचे दिए गए प्रश्नों के अनुसार कीजिए-

किताबें हमारी सबसे अच्छी _____ (1) हैं। किताबें आत्मा और मन के लिए भोजन हैं। पुस्तकें हमारे दुखों में हमें _____ (2) दे सकती हैं और जीवन की चिंताओं को भूलने में मदद कर सकती हैं। ये जीवन में _____ (3) का रहस्य सिखाती हैं। ये जीवन के अंधेरे में _____ (4) दिखाती हैं। ये हमें सिखाती हैं कि बुराई पर अच्छाई की _____ (5) होती है।

SubQuestion No : 20

Q.2
0 गद्यांश में संकेतित रिक्त स्थान (2) के लिए उपयुक्त शब्द होगा।

- Ans
- 1. तकलीफ
 - 2. अशांति
 - 3. सांत्वना
 - 4. वेदना

Question ID : 9895806955
Chosen Option : --

Comprehension:

निम्नलिखित गद्यांश के रिक्त स्थानों की पूर्ति गद्यांश के नीचे दिए गए प्रश्नों के अनुसार कीजिए-

किताबें हमारी सबसे अच्छी _____ (1) हैं। किताबें आत्मा और मन के लिए भोजन हैं। पुस्तकें हमारे दुखों में हमें _____ (2) दे सकती हैं और जीवन की चिंताओं को भूलने में मदद कर सकती हैं। ये जीवन में _____ (3) का रहस्य सिखाती हैं। ये जीवन के अंधेरे में _____ (4) दिखाती हैं। ये हमें सिखाती हैं कि बुराई पर अच्छाई की _____ (5) होती है।

SubQuestion No : 21

Q.2
1 गद्यांश में संकेतित रिक्त स्थान (3) के लिए उपयुक्त शब्द होगा।

- Ans
- 1. विफलता
 - 2. दरिद्रता
 - 3. निष्फलता
 - 4. सफलता

Question ID : 9895806956
Chosen Option : --

Comprehension:

निम्नलिखित गद्यांश के रिक्त स्थानों की पूर्ति गद्यांश के नीचे दिए गए प्रश्नों के अनुसार कीजिए-

किताबें हमारी सबसे अच्छी _____ (1) हैं। किताबें आत्मा और मन के लिए भोजन हैं। पुस्तकें हमारे दुखों में हमें _____ (2) दे सकती हैं और जीवन की चिंताओं को भूलने में मदद कर सकती हैं। ये जीवन में _____ (3) का रहस्य सिखाती हैं। ये जीवन के अंधेरे में _____ (4) दिखाती हैं। ये हमें सिखाती हैं कि बुराई पर अच्छाई की _____ (5) होती है।

SubQuestion No : 22

Q.2 गद्यांश में संकेतित रिक्त स्थान (4) के लिए उपयुक्त शब्द होगा।

- Ans
- 1. भय
 - 2. भ्रम
 - 3. आशंका
 - 4. रोशनी

Question ID : 9895806957
Chosen Option : --

Comprehension:

निम्नलिखित गद्यांश के रिक्त स्थानों की पूर्ति गद्यांश के नीचे दिए गए प्रश्नों के अनुसार कीजिए-

किताबें हमारी सबसे अच्छी _____ (1) हैं। किताबें आत्मा और मन के लिए भोजन हैं। पुस्तकें हमारे दुखों में हमें _____ (2) दे सकती हैं और जीवन की चिंताओं को भूलने में मदद कर सकती हैं। ये जीवन में _____ (3) का रहस्य सिखाती हैं। ये जीवन के अंधेरे में _____ (4) दिखाती हैं। ये हमें सिखाती हैं कि बुराई पर अच्छाई की _____ (5) होती है।

SubQuestion No : 23

Q.3 गद्यांश में संकेतित रिक्त स्थान (5) के लिए उपयुक्त शब्द होगा।

- Ans
- 1. अजय
 - 2. विजेता
 - 3. पराजय
 - 4. विजय

Question ID : 9895806958
Chosen Option : --

Q.4 'शाश्वत' का विलोम शब्द है-

- Ans
- 1. स्वस्थ
 - 2. क्षणिक

✓ 3. चिरंतन

✗ 4. अस्थायी

Question ID : 9895806959

Chosen Option : --

Q.2
5 दिए गए शब्द के पर्यायवाची शब्द का चयन करें।

खग

Ans

✗ 1. तोता

✗ 2. कबूतर

✓ 3. पशु

✗ 4. पक्षी

Question ID : 9895806961

Chosen Option : --

GovtJobsAlert.In