

## Constable (GD) in CAPFs, NIA, SSF and Rifleman (GD) in Assam Rifles Examination, 2018

|                  |  |
|------------------|--|
| Roll No. :       | <a href="http://www.GovtJobsAlert.In">www.GovtJobsAlert.In</a> |
| Registration No. |  |
| Name :           |  |
| Exam Venue :     | iON Digital Zone iDZ Borjhar                                   |
| Exam Time :      | 12:30 PM - 2:00 PM   |
| Exam Date :      | 06/03/2019   |

Section : General Section

**Q.1** The statements below are followed by two conclusions labeled I and II. Assuming that the information in the statements is true, even if it appears to be at variance with generally established facts, decide which conclusion(s) logically and definitely follow(s) from the information given in the statements.

**Statements:**

All Strong are animals.  
Some animals are Tigers.  
All Tigers are Sharp.

**Conclusions:**

- I. Some Strong are Sharp.  
II. No Strong is Sharp.

- Ans**
- 1. Neither conclusion I nor II follows
  - 2. Either conclusion I or II follows
  - 3. Only conclusion I follows
  - 4. Only conclusion II follows

Question ID : 9895808627  
Chosen Option : 1

**Q.2** The statements below are followed by conclusions labeled I, II and III. Assuming that the information in the statements is true, even if it appears to be at variance with generally established facts, decide which conclusion(s) logically and definitely follow(s) from the information given in the statements.

**Statements:**

All twenty are thirty.  
All thirty are forty.  
All forty are sixty.  
All sixty are seventy.

**Conclusions:**

- I. Some forty are thirty.  
II. Some seventy are sixty.  
III. No thirty is twenty.

- Ans**
- 1. Only I and III follow
  - 2. Only I and II follow
  - 3. Only II and III follow
  - 4. All, I, II and III follow

Question ID : 9895808626

Chosen Option : 2

Q.3 Select the correct option that will fill in the blank and complete the series.

T, R, P, N, L, \_\_\_\_\_, \_\_\_\_\_

- Ans
- 1. J, H
  - 2. J, G
  - 3. K, H
  - 4. K, I

Question ID : 9895808615  
Chosen Option : 1

Q.4 Four letter clusters have been given out of which three are alike in some manner, while one is different. Choose the odd one.

- Ans
- 1. GHJK
  - 2. RUVX
  - 3. FIJL
  - 4. MPQS

Question ID : 9895808616  
Chosen Option : 1

Q.5 Choose the option that most closely resembles the mirror image of the given figure when mirror is placed at right side.

Question Figure:



- Ans
- 1.
  - 2.
  - 3.
  - 4.

Question ID : 9895808637  
Chosen Option : 2

Q.6 M, N, O and P are playing cards sitting opposite each other. M is on the right of N and P is on the left of O. Then which of the following are partners?

- Ans
- 1. P and O
  - 2. M and N
  - 3. M and P
  - 4. N and P

Question ID : 9895808625  
Chosen Option : 4

**Q.7** Eight people A, B, C, D, E, F, G and H are sitting around a circular table. A and B are facing towards the centre while the other six people are facing opposite the centre. A is sitting second to the right of H. B sits third to the left of A. D sits second to the right of G. G is neither immediate neighbor of B nor A. E and F are immediate neighbors and are facing outside.

Who is sitting second to the left of G?

- Ans
- 1. C
  - 2. B
  - 3. D
  - 4. F

Question ID : 9895808623  
Chosen Option : 1

**Q.8** Find the missing number from the below options.

|    |    |
|----|----|
| 72 | 18 |
| 54 |    |
| 64 | ?  |
| 38 |    |

- Ans
- 1. 18
  - 2. 24
  - 3. 26
  - 4. 22

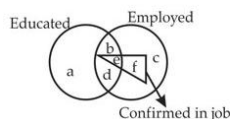
Question ID : 9895808632  
Chosen Option : 3

**Q.9** In a certain code, SACK is coded as RZBJ, then how is AMOUNT coded in the same way?

- Ans
- 1. ZLTNMS
  - 2. ZLNTMS
  - 3. ZLNSMT
  - 4. ZLNMTS

Question ID : 9895808621  
Chosen Option : 2

**Q.1** Read the given figure and find the region representing persons who are educated and employed but not confirmed in job.



- Ans
- 1. bd
  - 2. ac
  - 3. abc
  - 4. adc

Question ID : 9895808639  
Chosen Option : 1

**Q.1** Select the option that is related to the third term in the same way as the second term is related to the first term.

1 Day : Night :: Morning : \_\_\_\_\_

- Ans
- 1. Star
  - 2. Planet
  - 3. Evening
  - 4. Air

Question ID : 9895808619  
Chosen Option : 3

Q.1 Four words have been given out of which three are alike in some manner, while one is different. Choose the odd one.

2

- Ans
- 1. Basket
  - 2. Bag
  - 3. Bowl
  - 4. Wheelbarrow

Question ID : 9895808617  
Chosen Option : 4

Q.1 Select the option that is related to the third term in the same way as the second term is related to the first term.

3

India : Country :: Delhi : \_\_\_\_\_

- Ans
- 1. Red Fort
  - 2. Continent
  - 3. Capital
  - 4. District

Question ID : 9895808618  
Chosen Option : 3

Q.1 Select the correct combination of mathematical signs to replace\*\* signs and to balance the given equation.

4

$32 * 8 * 14 * 7 * 16$

- Ans
- 1.  $+ = \div \times$
  - 2.  $\times - + =$
  - 3.  $- \times \div =$
  - 4.  $\div \times - =$

Question ID : 9895808633  
Chosen Option : 1

Q.1 Select the option that is related to the third term in the same way as the second term is related to the first term.

5

MATE : NATE :: FATE : ?

- Ans
- 1. JATE
  - 2. LATE
  - 3. CATE
  - 4. UATE

Question ID : 9895808620  
Chosen Option : 3

Q.1 Select the option that is related to the Third term in the same way as the second term is related to the first term.

6

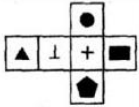
13 : 196 :: 9 : ?

- Ans
- 1. 100

- 2. 131
- 3. 111
- 4. 121

Question ID : 9895808630  
Chosen Option : 1

Q.1  
7 The following figure is folded to form a box. Which symbol will appear on the opposite side of ▲ ?



- Ans
- 1. +
  - 2. ●
  - 3. ■
  - 4. ⊥

Question ID : 9895808638  
Chosen Option : 1

Q.1  
8 Select the correct option that will fill in the blank and complete the series.

18, 36, 108, 432, 2160, \_\_\_\_\_

- Ans
- 1. 15200
  - 2. 12960
  - 3. 12690
  - 4. 14200

Question ID : 9895808628  
Chosen Option : 2

Q.1  
9 Which of the following answer figure will complete the given figure?

Question Figure:



- Ans
- 1.
  - 2.
  - 3.
  - 4.

Question ID : 9895808635  
Chosen Option : 1

Q.2  
0 Six kids are sitting in two rows facing north. Their names are Fuji, Ukain, Yam and Krish, Charlie, Mac. Fuji and Mac are sitting diagonally opposite. Ukain is in the top row and to the immediate right of Fuji. Krish is second to the left of Mac while Yam and Krish are not in the same row.

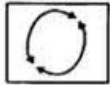
Who is sitting opposite to Charlie?

- Ans
- 1. Yam
  - 2. Ukain
  - 3. Krish
  - 4. Fuji

Question ID : 9895808624  
Chosen Option : 3

Q.2  
1 Choose the option figure in which the problem figure is hidden/embedded.

Question Figure:

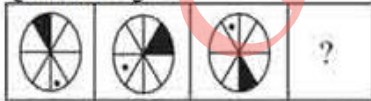


- Ans
- 1.
  - 2.
  - 3.
  - 4.

Question ID : 9895808636  
Chosen Option : 3

Q.2  
2 Choose the option which completes the given figure series.

Question Figure:



- Ans
- 1.
  - 2.
  - 3.
  - 4.



Question ID : 9895808634  
Chosen Option : 1

Q.2  
3 Select the correct option that will fill in the blank and complete the series.

52, 56, 65, 81, 106, \_\_\_\_\_

- Ans
- 1. 122
  - 2. 132
  - 3. 140
  - 4. 142

Question ID : 9895808629  
Chosen Option : 2

Q.2  
4 Four options have been given out of which three are alike in some manner, while one is different. Choose the odd one.

- Ans
- 1. 36-59
  - 2. 32-41
  - 3. 51-24
  - 4. 61-34

Question ID : 9895808631  
Chosen Option : 2

Q.2  
5 If B is coded as 2, F is coded as 8, C is coded as 4, G is coded as 3, H is coded as 0, A is coded as 1, and N is coded as 7, then what is the coded form of HNCGB?

- Ans
- 1. 07432
  - 2. 04237
  - 3. 07423
  - 4. 07243

Question ID : 9895808622  
Chosen Option : 1

Q.2  
6 Which element is used for making solar cells?

- Ans
- 1. Sulphur
  - 2. Sodium
  - 3. Silver
  - 4. Silicon

Question ID : 9895808483  
Chosen Option : 4

Q.2  
7 In which state is Vishwa Mitra Ka Tila situated?

- Ans
- 1. Punjab
  - 2. Haryana
  - 3. Uttaranchal
  - 4. Rajasthan

Question ID : 9895808466  
Chosen Option : 3

Q.2  
8 On which river is the Hirakud Dam situated?

- Ans
- 1. Kaveri
  - 2. Mahanadi
  - 3. Sutlej
  - 4. Bhagirathi

Question ID : 9895808486  
Chosen Option : 1

Q.2  
9 A \_\_\_\_\_ is a formal document containing an order of the court to the Government issued only by the High Court or the Supreme Court of India.

- Ans
- 1. Claim
  - 2. Covenant
  - 3. Summon
  - 4. Writ

Question ID : 9895808476  
Chosen Option : 3

Q.3  
0 Which goods from India dominated the international textile markets before the age of mechanised industries?

- Ans
- 1. Woollen goods
  - 2. Cotton goods
  - 3. Silk goods
  - 4. Silk and cotton goods

Question ID : 9895808487  
Chosen Option : 4

Q.3  
1 Who was the world's first woman amputee to climb Mount Vinson?

- Ans
- 1. Premlata Agarwal
  - 2. Bachendri Pal
  - 3. Santosh Yadav
  - 4. Arunima Sinha

Question ID : 9895808469  
Chosen Option : 3

Q.3  
2 When goods are produced by exploiting natural resources, it is an activity associated with:

- Ans
- 1. primary sector
  - 2. secondary sector
  - 3. service sector
  - 4. tertiary sector

Question ID : 9895808474  
Chosen Option : 3

Q.3  
3 The magazine in which Mahatma Gandhi mentioned what he wanted the Constitution to do is:



- Ans
- 1. Harijan
  - 2. Young India
  - 3. Navajivan
  - 4. Oriental Magazine

Question ID : 9895808477  
Chosen Option : 4

Q.3  
4 Tooth decay starts when the pH of our mouth is:

- Ans
- 1. higher than 6.5
  - 2. higher than 7.5
  - 3. lower than 5.5
  - 4. higher than 5.5

Question ID : 9895808479  
Chosen Option : 1

Q.3  
5 The soil ideal for growing cotton is:

- Ans
- 1. laterite soil
  - 2. arid soil
  - 3. black soil
  - 4. alluvial soil

Question ID : 9895808484  
Chosen Option : 3

Q.3  
6 Who has been conferred with the rank of the Commander of the Order of the British Empire in 2018?

- Ans
- 1. Tjinder Singh
  - 2. Talvin Singh
  - 3. Nitin Sawhney
  - 4. Rajinder Rai

Question ID : 9895808467  
Chosen Option : 3

Q.3  
7 A system in which local farmers were allowed to cultivate temporarily within a plantation is known as:

- Ans
- 1. intensive cultivation
  - 2. shifting cultivation
  - 3. extensive cultivation
  - 4. taungya cultivation

Question ID : 9895808489  
Chosen Option : 2

Q.3  
8 Who directed the film 'Bhuvan Shome'?

- Ans
- 1. Satyajit Ray

2. Buddhadeb Dasgupta

3. Mrinal Sen

4. Ritwik Ghatak

Question ID : 9895808472  
Chosen Option : 4

Q.3  
9 Which of the following options is a martial arts form associated with Tamil Nadu?

Ans  1. Thoda

2. Thang-ta

3. Silambam

4. Kalari Payattu

Question ID : 9895808468  
Chosen Option : 4

Q.4  
0 Which event is marked as an Intangible Cultural Heritage of Humanity by UNESCO?

Ans  1. Tarnetar Mela

2. Pushkar Mela

3. Suraj Kund Mela

4. Kumbh Mela

Question ID : 9895808465  
Chosen Option : 4

Q.4  
1 Which organization is under the Ministry of Statistics, Planning and Programme Implementation?

Ans  1. National Survey Organisation

2. Central Survey Organisation

3. Central Sample Survey Organisation

4. National Sample Survey Organisation

Question ID : 9895808475  
Chosen Option : 4

Q.4  
2 Which gas shields the surface of the earth from ultraviolet radiation from the sun?

Ans  1. Nitrogen

2. Oxygen

3. Carbon dioxide

4. Ozone

Question ID : 9895808482  
Chosen Option : 4

Q.4  
3 What is grown as a kharif crop in the northern and rabi crop in the southern part of India?

Ans  1. Linseed

2. Sesamum

- 3. Mustard
- 4. Groundnut

Question ID : 9895808485  
Chosen Option : 4

Q.4  
4 The book "In my mother's house" is written by \_\_\_\_\_.

- Ans
- 1. Sharika Thiranagama
  - 2. Nihal De Silva
  - 3. Shyam Selvadurai
  - 4. Rajiva Wijesinha

Question ID : 9895808471  
Chosen Option : 2

Q.4  
5 Who was the first one to use a glass prism to obtain the spectrum of sunlight?

- Ans
- 1. James Clerk Maxwell
  - 2. Albert Einstein
  - 3. Isaac Newton
  - 4. Hans Christian Oersted

Question ID : 9895808481  
Chosen Option : 2

Q.4  
6 What is deposited on iron in the process of Galvanization?

- Ans
- 1. tin
  - 2. aluminium
  - 3. zinc
  - 4. copper

Question ID : 9895808480  
Chosen Option : 2

Q.4  
7 The Imperial Forest Research Institute was set up in 1906 in:

- Ans
- 1. Bhopal
  - 2. Bangalore
  - 3. Almora
  - 4. Dehradun

Question ID : 9895808488  
Chosen Option : 1

Q.4  
8 Any section of citizens with a distinct language or culture have a right to \_\_\_\_\_ it.

- Ans
- 1. Uproot
  - 2. Conserve
  - 3. Annihilate
  - 4. Squander

Question ID : 9895808478  
Chosen Option : 2

Q.4  
9 Which award is given for contribution towards national integration?

- Ans
- 1. Sardar Patel Award
  - 2. Rajiv Gandhi Award
  - 3. Tilak Award
  - 4. Gita Chopra Award

Question ID : 9895808470  
Chosen Option : 3

Q.5  
0 Who is the founder of Grameen Bank?

- Ans
- 1. Muhammad Yunus
  - 2. Abdullah Abu Sayed
  - 3. Anu Muhammad
  - 4. Atiur Rahman

Question ID : 9895808473  
Chosen Option : 3

Q.5  
1 What should come in place of question mark (?) in the following questions?

$$383 \div 25 \times 2.5 + 12 = ?$$

- Ans
- 1. 124.24
  - 2. 50.30
  - 3. 222.14
  - 4. 68.30

Question ID : 9895808666  
Chosen Option : 3

Q.5  
2 The average of 50 number is 36. If two numbers, namely 63 and 65 are discarded, the average of the remaining numbers is (Correct to two decimal places)

- Ans
- 1. 36.50
  - 2. 32.50
  - 3. 33.75
  - 4. 34.83

Question ID : 9895808668  
Chosen Option : 3

Q.5  
3 Yashwant buys candies at 15 for ₹40 and sells them at 30 for ₹50. What is his gain or loss percent?

- Ans
- 1. 40 % Loss
  - 2. 37.5% Profit
  - 3. 36 % Profit
  - 4. 37.5% Loss

Question ID : 9895808673  
Chosen Option : 1

Q.5 In how many years will a sum of money become sixteen times itself at 30% p.a. simple interest?  
4

- Ans
- 1. 25
  - 2. 40
  - 3. 50
  - 4. 30

Question ID : 9895808678  
Chosen Option : 4

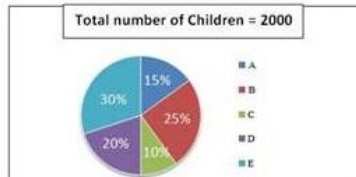
Q.5 Rohit and Dinesh are 64 km apart. Rohit can walk at a speed of 15 km/hr and Dinesh at the speed of 17 km/hr. In how many hours will they meet if they are travelling towards each other?  
5

- Ans
- 1. 2 hour
  - 2. 1.5 hour
  - 3. 3 hour
  - 4. 2.5 hour

Question ID : 9895808683  
Chosen Option : 2

Q.5 Study the following pie-charts carefully to answer the questions.  
6

Percentage break-up of number of children in five different villages



What is the respective ratio of total number of children from village A to village C ?

- Ans
- 1. 3:5
  - 2. 2:3
  - 3. 1:3
  - 4. 3:2

Question ID : 9895808687  
Chosen Option : 2

Q.5 If  $\frac{a}{b} = \frac{7}{9}$ ,  $\frac{b}{c} = \frac{3}{5}$  then the value of a : b : c is  
7

- Ans
- 1. 7:3:15
  - 2. 21:27:42
  - 3. 7:9:5
  - 4. 7:9:15

Question ID : 9895808677  
Chosen Option : 1



Q.5 The numbers of visitors every hour in a shop from 1 p.m. to 8 p.m. on Monday were recorded as 7, 10, 15, 22, 6, 4 and 8

13. The arithmetic mean of visitors is:

- Ans
- 1. 11
  - 2. 9
  - 3. 13
  - 4. 10

Question ID : 9895808671  
Chosen Option : 1

Q.5 A student gets 60% of the maximum marks. If he gets 50% more than the passing mark, then the passing mark is-what

9 percentage of the maximum marks?

- Ans
- 1. 50%
  - 2. 37.5%
  - 3. 75%
  - 4. 40%

Question ID : 9895808672  
Chosen Option : 4

Q.6 Two trains running in opposite directions cross a man standing on the platform in 25 seconds and 32 seconds

0 respectively and they cross each other in 30 seconds. The ratio of their speed is:

- Ans
- 1. 5 : 6
  - 2. 2 : 5
  - 3. 1 : 3
  - 4. 4 : 3

Question ID : 9895808682  
Chosen Option : 2

Q.6 Find the total surface area of a cube whose volume is  $64 \text{ cm}^3$ .

1

- Ans
- 1.  $16 \text{ cm}^2$
  - 2.  $84 \text{ cm}^2$
  - 3.  $64 \text{ cm}^2$
  - 4.  $96 \text{ cm}^2$

Question ID : 9895808686  
Chosen Option : 1

Q.6 A frog was, at the bottom of a 80 m deep well. It attempted to come out of it by jumping. In each jump it covered 1.15

2 m but slipped down by 0.75 m. The number of jumps after which it would out of the well is:

- Ans
- 1. 199
  - 2. 201
  - 3. 198
  - 4. 200

Question ID : 9895808680  
Chosen Option : 2

Q.6 The length and breadth of a painting is 15 cm and 10 cm respectively. A 1 cm wide boarder is made around the painting.

3 What is the area of boarder?



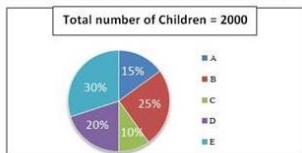
- Ans
- 1. 60 sq cm.
  - 2. 45 sq cm.
  - 3. 16 sq cm.
  - 4. 54 sq cm.

Question ID : 9895808685  
Chosen Option : 3

Q.6 Study the following pie-charts carefully to answer the questions.

4

Percentage break-up of number of children in five different villages



If 70 percent children from village D go to school then what is the number of children attending school from village D ?

- Ans
- 1. 360
  - 2. 320
  - 3. 280
  - 4. 400

Question ID : 9895808688  
Chosen Option : 3

Q.6 A dealer allows his customers a discount of 25% and still gains 25%. If an article costs ₹1600 to the dealer, then its marked price (nearest to one rupee) is:

5

- Ans
- 1. ₹2600
  - 2. ₹2667
  - 3. ₹2000
  - 4. ₹2050

Question ID : 9895808670  
Chosen Option : 3

Q.6 What should come in place of question mark (?) in the following questions?

6

$$1.5 \times 78 \div 0.5 = ?$$

- Ans
- 1. 238
  - 2. 234
  - 3. 216
  - 4. 243

Question ID : 9895808667  
Chosen Option : 3

Q.6 Which of the following schemes of computing interest yields the maximum interest for a year?

7

- Ans
- 1. Interest compounded every year at 24%.p.a.
  - 2.

Interest compounded every six months at 12% for every-6 months

- 3. Interest compounded per quarter 6% per quarter.
- 4. Interest compounded monthly at 2% per month.

Question ID : 9895808679  
Chosen Option : 4

Q.6 The average age of Indian cricket team playing in the Capetown test match is 28 years. If the average age of 10 player  
8 besides the caption is 27.8 years, then the age of the Caption is:

- Ans
- 1. 30 Years
  - 2. 25 Years
  - 3. 26 Years
  - 4. 31 Years

Question ID : 9895808669  
Chosen Option : 1

Q.6 What is the perpendicular distance (in cm) between the parallel sides of a trapezium whose area is 108 sq cm. and the  
9 lengths of the parallel sides are 9 cm and 36 cm?

- Ans
- 1. 4.8 cm
  - 2. 3.6 cm
  - 3. 7 cm
  - 4. 6 cm

Question ID : 9895808684  
Chosen Option : 2

Q.7 Two bottles A and B contain diluted acid. In bottle A, the amount of water is double the amount of acid while in bottle  
0 B, the amount of acid is 3 times that of water. How much mixture (in litres) should be taken from each bottle A and B  
respectively in order to prepare 5 liters diluted acid containing equal amount of acid and water?

- Ans
- 1. 3,2
  - 2. 1,4
  - 3. 2,3
  - 4. 4,1

Question ID : 9895808676  
Chosen Option : 3

Q.7 A can do a certain job in 12 days. B is 60% more efficient than A. To do the same job B alone would take?  
1

- Ans
- 1. 8 days
  - 2.  $7\frac{1}{2}$  days
  - 3. 7 days
  - 4. 10 days

Question ID : 9895808681  
Chosen Option : 1

Q.7 The smallest perfect square number divisible by each of 6 and 12 is:  
2

- Ans
- 1. 196

2. 108

3. 36

4. 144

Question ID : 9895808665

Chosen Option : 3

Q.7  
3 The third proportional to 9 and 15 is:

Ans  1. 25

2. 18

3. 36

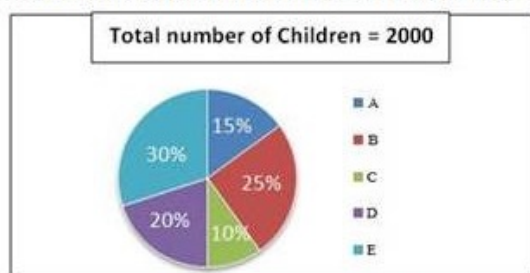
4. 27

Question ID : 9895808675

Chosen Option : 2

Q.7  
4 Study the following pie-charts carefully to answer the questions.

Percentage break-up of number of children in five different villages



What is the total number of children in villages B and E ?

Ans  1. 1400

2. 1145

3. 1200

4. 1100

Question ID : 9895808689

Chosen Option : 3

Q.7  
5 Oranges are purchased at the rate of 7 oranges for ₹3. At what price one hundred oranges should be sold so that the profit is 33% ?

Ans  1. ₹58

2. ₹56

3. ₹60

4. ₹57

Question ID : 9895808674

Chosen Option : 3

Section : English Language

Q.1

Select the most appropriate word to fill in the blank.

Some tribes have rich and unique cultural traditions, \_\_\_\_\_ their own language.

- Ans
- 1. include
  - 2. included
  - 3. inclusive
  - 4. including

Question ID : 9895808747  
Chosen Option : 4

Q.2 Select the meaning of the given idiom.

Piping hot

- Ans
- 1. Extremely angry
  - 2. Steaming hot
  - 3. Not too hot
  - 4. Lukewarm

Question ID : 9895808760  
Chosen Option : 1

Q.3 Select the most appropriate word to fill in the blank.

\_\_\_\_\_ many people lived in the cities, others living in the countryside grew crops.

- Ans
- 1. Whether
  - 2. Among
  - 3. About
  - 4. While

Question ID : 9895808748  
Chosen Option : 4

Q.4 Identify the segment in the sentence which contains the grammatical error from the given options.

It was in the oceans that life begins almost 3.5 billion years ago.

- Ans
- 1. life begins
  - 2. It was
  - 3. years ago
  - 4. in the oceans

Question ID : 9895808743  
Chosen Option : 1

Q.5 Select the wrongly spelt word.

- Ans
- 1. Occasion
  - 2. Discipline
  - 3. Neccessary
  - 4. Consensus

Question ID : 9895808763

Chosen Option : 3

Q.6 Select the most appropriate word to fill in the blank.

In his address to the villagers the minister \_\_\_\_\_ certain measures being taken for improving their quality of life.

- Ans
- 1. staged
  - 2. highlighted
  - 3. learnt
  - 4. stepped

Question ID : 9895808766

Chosen Option : 2

Q.7 Select the antonym of the given word.

FACILITATE

- Ans
- 1. Comfort
  - 2. Ease
  - 3. Aid
  - 4. Hinder

Question ID : 9895808758

Chosen Option : 4

Q.8 Select the synonym of the given word.

REMORSE

- Ans
- 1. Joy
  - 2. Delight
  - 3. Regret
  - 4. Solace

Question ID : 9895808755

Chosen Option : 3

Q.9 Select the most appropriate word to fill in the blank.

The unemployment problem, as \_\_\_\_\_ by people, is not severe among the educated women.

- Ans
- 1. solved
  - 2. decided
  - 3. demanded
  - 4. perceived

Question ID : 9895808765

Chosen Option : 4

Q.1 Select the most appropriate option to substitute the underlined segment in the given sentence. If there is no need to substitute it, select No substitution required.

Amoeba is a microscopic single-celled organism found in pond water.

- Ans
- 1. organism found with



2. organisms find in

3. No substitution required

4. organisms finds in

Question ID : 9895808746

Chosen Option : 3

Comprehension:

In the following passage some words have been deleted. Fill in the blanks with the help of the alternatives given. Select the most appropriate option for each number.

Advertisements (1) \_\_\_\_\_ our attention to various products and describe (2) \_\_\_\_\_ positively so that we become (3) \_\_\_\_\_ in buying them. Advertising is all (4) \_\_\_\_\_ building brands. At a very basic level, 'branding' means (5) \_\_\_\_\_ a product with a particular name or sign.

SubQuestion No : 11

Q.1  
1 Select the most appropriate option that will fill in the blank number 1.

- Ans
- 1. turn
  - 2. hook
  - 3. pull
  - 4. draw

Question ID : 9895808750

Chosen Option : 3

Comprehension:

In the following passage some words have been deleted. Fill in the blanks with the help of the alternatives given. Select the most appropriate option for each number.

Advertisements (1) \_\_\_\_\_ our attention to various products and describe (2) \_\_\_\_\_ positively so that we become (3) \_\_\_\_\_ in buying them. Advertising is all (4) \_\_\_\_\_ building brands. At a very basic level, 'branding' means (5) \_\_\_\_\_ a product with a particular name or sign.

SubQuestion No : 12

Q.1  
2 Select the most appropriate option that will fill in the blank number 2.

- Ans
- 1. they
  - 2. themselves
  - 3. it
  - 4. them

Question ID : 9895808751

Chosen Option : 4

Comprehension:



In the following passage some words have been deleted. Fill in the blanks with the help of the alternatives given. Select the most appropriate option for each number.

Advertisements (1) \_\_\_\_\_ our attention to various products and describe (2) \_\_\_\_\_ positively so that we become (3) \_\_\_\_\_ in buying them. Advertising is all (4) \_\_\_\_\_ building brands. At a very basic level, 'branding' means (5) \_\_\_\_\_ a product with a particular name or sign.

SubQuestion No : 13

Q.1  
3 Select the most appropriate option that will fill in the blank number 3.

- Ans
- 1. interested
  - 2. partial
  - 3. touched
  - 4. biased

Question ID : 9895808752  
Chosen Option : 1

Comprehension:

In the following passage some words have been deleted. Fill in the blanks with the help of the alternatives given. Select the most appropriate option for each number.

Advertisements (1) \_\_\_\_\_ our attention to various products and describe (2) \_\_\_\_\_ positively so that we become (3) \_\_\_\_\_ in buying them. Advertising is all (4) \_\_\_\_\_ building brands. At a very basic level, 'branding' means (5) \_\_\_\_\_ a product with a particular name or sign.

SubQuestion No : 14

Q.1  
4 Select the most appropriate option that will fill in the blank number 4.

- Ans
- 1. for
  - 2. about
  - 3. in
  - 4. across

Question ID : 9895808753  
Chosen Option : 2

Comprehension:

In the following passage some words have been deleted. Fill in the blanks with the help of the alternatives given. Select the most appropriate option for each number.

Advertisements (1) \_\_\_\_\_ our attention to various products and describe (2) \_\_\_\_\_ positively so that we become (3) \_\_\_\_\_ in buying them. Advertising is all (4) \_\_\_\_\_ building brands. At a very basic level, 'branding' means (5) \_\_\_\_\_ a product with a particular name or sign.

SubQuestion No : 15

Q.1  
5 Select the most appropriate option that will fill in the blank number 5.

- Ans
- 1. stamping
  - 2. posing
  - 3. sticking
  - 4. molding

Question ID : 9895808754  
Chosen Option : 1

Q.1  
6 Select the most appropriate option to substitute the underlined segment in the given sentence. If there is no need to substitute it, select No substitution required.

Normally bacteria are present in our mouth but it is not harmful to us.

- Ans
- 1. so they are not
  - 2. and it is not
  - 3. but they are not
  - 4. No substitution required

Question ID : 9895808745  
Chosen Option : 3

Q.1  
7 Select the word which means the same as the group of words given.

One who can easily be deceived/cheated

- Ans
- 1. Modest
  - 2. Veteran
  - 3. Gullible
  - 4. Prudent

Question ID : 9895808762  
Chosen Option : 3

Q.1  
8 Select the synonym of the given word.

Valiant

- Ans
- 1. Enthusiastic
  - 2. Courageous
  - 3. Frightened
  - 4. Scared

Question ID : 9895808756  
Chosen Option : 2

Q.1  
9 Select the most appropriate option to substitute the underlined segment in the given sentence. If there is no need to substitute it, select No substitution required.

Water and minerals presented to the soil are absorbed by the roots.

- Ans
- 1. present in the soil
  - 2. presented at the soil

- 3. present for the soil
- 4. No substitution required

Question ID : 9895808744  
Chosen Option : 1

Q.2  
0 Select the wrongly spelt word.

- Ans
- 1. Mischievous
  - 2. Milenium
  - 3. Minimum
  - 4. Miniscule

Question ID : 9895808764  
Chosen Option : 1

Q.2  
1 Identify the segment in the sentence which contains the grammatical error from the given options.

People's demand are ever growing but the availability of land is limited.

- Ans
- 1. availability of
  - 2. People's demand
  - 3. is limited
  - 4. ever growing

Question ID : 9895808742  
Chosen Option : 4

Q.2  
2 Select the word which means the same as the group of words given.

One who knows everything

- Ans
- 1. Incredible
  - 2. Omnipresent
  - 3. Omniscient
  - 4. Omnipotent

Question ID : 9895808761  
Chosen Option : 3

Q.2  
3 Select the meaning of the given idiom.

Call it a day

- Ans
- 1. time to quit
  - 2. an unending dream
  - 3. name a day
  - 4. a nightmare

Question ID : 9895808759  
Chosen Option : 3

Q.2  
4 Select the antonym of the given word.

CRITICIZE

- Ans
- 1. Commend
  - 2. Censure
  - 3. Condemn
  - 4. Respect

Question ID : 9895808757  
Chosen Option : 4

Q.2  
5 Identify the segment in the sentence which contains the grammatical error from the given options.

Time and technology are two important factors that which change substances into resources.

- Ans
- 1. that which change
  - 2. Time and technology
  - 3. two important factors
  - 4. into resources

Question ID : 9895808741  
Chosen Option : 1

Section : Hindi Language

Q.1 'मैदान मारना' मुहावरे का अर्थ है-

- Ans
- 1. संघर्ष करना
  - 2. जमीन नापना
  - 3. भाग जाना
  - 4. लड़ाई जीतना

Question ID : 9895806990  
Chosen Option : --

Q.2 दिए गए वाक्य का वह भाग ज्ञात करें जिसमें कोई त्रुटि है।

में आवश्यक परिस्थितियों की उत्पन्न हो जाने के कारण बैठक में उपस्थित नहीं हो सकता।

- Ans
- 1. में आवश्यक
  - 2. बैठक में
  - 3. परिस्थितियों की उत्पन्न हो जाने के कारण
  - 4. उपस्थित नहीं हो सकता।

Question ID : 9895806969  
Chosen Option : --

Q.3 दिए गए वाक्य में रेखांकित खंड को प्रतिस्थापित करने के लिए उपयुक्त विकल्प का चयन करें।

जीने का कुछ तो उद्देश्य होना चाहिए।

- Ans
- 1. प्रयोजन



- 2. साधन
- 3. प्रवर्तन
- 4. प्रबोधन

Question ID : 9895806974  
Chosen Option : --

Q.4 दिए गए वाक्य में रेखांकित खंड को प्रतिस्थापित करने के लिए उपयुक्त विकल्प का चयन करें।

विष्णु के अनेक अभिधान हैं।

- Ans
- 1. लीला
  - 2. नाम
  - 3. धाम
  - 4. रूप

Question ID : 9895806972  
Chosen Option : --

Q.5 रिक्त स्थान को भरने के लिए उपयुक्त शब्द का चयन करें।

अध्ययन से ज्ञान बढ़ता है, आर्थिक शक्ति मजबूत होती है \_\_\_\_\_ यश प्राप्त होता है।

- Ans
- 1. पर्याप्त
  - 2. बहुत
  - 3. और
  - 4. ढेर-सा

Question ID : 9895806976  
Chosen Option : --

Q.6 रिक्त स्थान को भरने के लिए उपयुक्त शब्द का चयन करें।

बड़े दुख की बात है \_\_\_\_\_ आप जैसे स्नेही मित्र के घर भी मैं विवाह के अवसर पर न आ सका।

- Ans
- 1. आत्मीय
  - 2. मैं
  - 3. हम
  - 4. कि

Question ID : 9895806975  
Chosen Option : --

Q.7 दिये गये वाक्यांश के लिए एक शब्द दीजिये।

व्याकरण जानने वाला

- Ans
- 1. वैयाकरण
  - 2. दार्शनिक
  - 3. काव्यशास्त्री
  - 4. आचार्य

Question ID : 9895806991  
Chosen Option : --

Q.8 दिए गए वाक्य का वह भाग ज्ञात करें जिसमें कोई त्रुटि है।

मनुष्य का आवश्यकताओं के लिए तो बहुत कुछ है परंतु उसके लोभ के लिए कुछ भी नहीं है।

Ans

- ✓ 1. मनुष्य का आवश्यकताओं के लिए  
✗ 2. परंतु उसके लोभ के लिए  
✗ 3. तो बहुत कुछ है  
✗ 4. कुछ भी नहीं है।

Question ID : 9895806970  
Chosen Option : --

Q.9 दिए गए शब्द का विलोम चुनें।

आत्मघात

Ans

- ✓ 1. आत्मरक्षा  
✗ 2. आत्मविश्वास  
✗ 3. आत्मबल  
✗ 4. आत्मज्ञान

Question ID : 9895806985  
Chosen Option : --

Q.10 दिए गए वाक्य में रेखांकित खंड को प्रतिस्थापित करने के लिए उपयुक्त विकल्प का चयन करें।

प्राचार्य महोदय ने उसे घर जाने की अनुमति प्रदान कर दी।

Ans

- ✗ 1. अनुज्ञा  
✗ 2. प्रजा  
✗ 3. अवज्ञा  
✓ 4. आज्ञा

Question ID : 9895806973  
Chosen Option : --

Comprehension:

निम्नलिखित गद्यांश के रिक्त स्थानों की पूर्ति गद्यांश के नीचे दिए गए प्रश्नों के अनुसार कीजिए-

विश्व पर्यावरण दिवस हर साल 5 जून को पूरे विश्व में पर्यावरण सुरक्षा हेतु जनता में \_\_\_\_\_ (1) का प्रसार करने के लिए मनाया जाता है। भारत सरकार पर्यावरण को सुधारने के लिए काफी अभियान \_\_\_\_\_ (2) है। हाल ही में स्वच्छ भारत \_\_\_\_\_ (3) शुरू किया गया है। सरकार के साथ साथ \_\_\_\_\_ (4) आदमी को भी प्रण लेना चाहिए की वो वातावरण को साफ रखे। छोटी सी \_\_\_\_\_ (5) से हम अपने और अपने आस-पास के वातावरण को साफ रख सकते हैं।



SubQuestion No : 11

Q.1  
1 गद्यांश में संकेतित रिक्त स्थान (1) के लिए उपयुक्त शब्द होगा।

- Ans
- 1. जागरूकता
  - 2. समानता
  - 3. अज्ञानता
  - 4. स्वाधीनता

Question ID : 9895806980  
Chosen Option : --

Comprehension:

निम्नलिखित गद्यांश के रिक्त स्थानों की पूर्ति गद्यांश के नीचे दिए गए प्रश्नों के अनुसार कीजिए-

विश्व पर्यावरण दिवस हर साल 5 जून को पूरे विश्व में पर्यावरण सुरक्षा हेतु जनता में \_\_\_\_\_ (1) का प्रसार करने के लिए मनाया जाता है। भारत सरकार पर्यावरण को सुधारने के लिए काफी अभियान \_\_\_\_\_ (2) है। हाल ही में स्वच्छ भारत \_\_\_\_\_ (3) शुरू किया गया है। सरकार के साथ साथ \_\_\_\_\_ (4) आदमी को भी प्रण लेना चाहिए की वो वातावरण को साफ रखे। छोटी सी \_\_\_\_\_ (5) से हम अपने और अपने आस-पास के वातावरण को साफ रख सकते हैं।

SubQuestion No : 12

Q.1  
2 गद्यांश में संकेतित रिक्त स्थान (2) के लिए उपयुक्त शब्द होगा।

- Ans
- 1. बताती
  - 2. मनाती
  - 3. चलाती
  - 4. सजाती

Question ID : 9895806981  
Chosen Option : --

Comprehension:

निम्नलिखित गद्यांश के रिक्त स्थानों की पूर्ति गद्यांश के नीचे दिए गए प्रश्नों के अनुसार कीजिए-

विश्व पर्यावरण दिवस हर साल 5 जून को पूरे विश्व में पर्यावरण सुरक्षा हेतु जनता में \_\_\_\_\_ (1) का प्रसार करने के लिए मनाया जाता है। भारत सरकार पर्यावरण को सुधारने के लिए काफी अभियान \_\_\_\_\_ (2) है। हाल ही में स्वच्छ भारत \_\_\_\_\_ (3) शुरू किया गया है। सरकार के साथ साथ \_\_\_\_\_ (4) आदमी को भी प्रण लेना चाहिए की वो वातावरण को साफ रखे। छोटी सी \_\_\_\_\_ (5) से हम अपने और अपने आस-पास के वातावरण को साफ रख सकते हैं।

SubQuestion No : 13

Q.1  
3 गद्यांश में संकेतित रिक्त स्थान (3) के लिए उपयुक्त शब्द होगा।

- Ans
- 1. उत्सव
  - 2. अभियान
  - 3. अभिमान
  - 4. मनोरंजन

Question ID : 9895806982  
Chosen Option : --

Comprehension:

निम्नलिखित गद्यांश के रिक्त स्थानों की पूर्ति गद्यांश के नीचे दिए गए प्रश्नों के अनुसार कीजिए-

विश्व पर्यावरण दिवस हर साल 5 जून को पूरे विश्व में पर्यावरण सुरक्षा हेतु जनता में \_\_\_\_\_ (1) का प्रसार करने के लिए मनाया जाता है। भारत सरकार पर्यावरण को सुधारने के लिए काफी अभियान \_\_\_\_\_ (2) है। हाल ही में स्वच्छ भारत \_\_\_\_\_ (3) शुरू किया गया है। सरकार के साथ साथ \_\_\_\_\_ (4) आदमी को भी प्रण लेना चाहिए की वो वातावरण को साफ़ रखे। छोटी सी \_\_\_\_\_ (5) से हम अपने और अपने आस-पास के वातावरण को साफ़ रख सकते हैं।

SubQuestion No : 14

Q.1  
4 गद्यांश में संकेतित रिक्त स्थान (4) के लिए उपयुक्त शब्द होगा।

- Ans
- 1. आम
  - 2. गरीब
  - 3. अमीर
  - 4. खास

Question ID : 9895806983  
Chosen Option : --

Comprehension:

निम्नलिखित गद्यांश के रिक्त स्थानों की पूर्ति गद्यांश के नीचे दिए गए प्रश्नों के अनुसार कीजिए-

विश्व पर्यावरण दिवस हर साल 5 जून को पूरे विश्व में पर्यावरण सुरक्षा हेतु जनता में \_\_\_\_\_ (1) का प्रसार करने के लिए मनाया जाता है। भारत सरकार पर्यावरण को सुधारने के लिए काफी अभियान \_\_\_\_\_ (2) है। हाल ही में स्वच्छ भारत \_\_\_\_\_ (3) शुरू किया गया है। सरकार के साथ साथ \_\_\_\_\_ (4) आदमी को भी प्रण लेना चाहिए की वो वातावरण को साफ़ रखे। छोटी सी \_\_\_\_\_ (5) से हम अपने और अपने आस-पास के वातावरण को साफ़ रख सकते हैं।

SubQuestion No : 15

Q.1  
5 गद्यांश में संकेतित रिक्त स्थान (5) के लिए उपयुक्त शब्द होगा।

- Ans
- 1. चहल
  - 2. पहल
  - 3. टहल
  - 4. प्रयास

Question ID : 9895806984  
Chosen Option : --

Q.1  
6 रिक्त स्थान को भरने के लिए उपयुक्त शब्द का चयन करें।

26 जनवरी का दिन हमारे देशवासियों के लिए \_\_\_\_\_ पर्व है।

- Ans
- 1. सामाजिक
  - 2. धार्मिक
  - 3. राष्ट्रीय
  - 4. आध्यात्मिक

Question ID : 9895806977  
Chosen Option : --

Q.1  
7 दिए गए वाक्य का वह भाग ज्ञात करें जिसमें कोई त्रुटि है।

तुष्टीकरण की नीति अपनाकर न व्यक्ति आगे बढ़ सकती है और न राष्ट्र।

- Ans
- 1. तुष्टीकरण की नीति
  - 2. न व्यक्ति आगे बढ़ सकती है
  - 3. अपनाकर
  - 4. और न राष्ट्र।

Question ID : 9895806971  
Chosen Option : --

Q.1  
8

दिए गए शब्द का विलोम चुनें।

अल्पायु

- Ans
- 1. घायल
  - 2. दीर्घायु
  - 3. अजर
  - 4. दयालु

Question ID : 9895806986  
Chosen Option : --

Q.1  
9 'एक उदर से जन्म' लेने वालों के लिए एक शब्द प्रयुक्त होता है-

- Ans
- 1. सहोदर
  - 2. पेट
  - 3. उत्तम
  - 4. समान

Question ID : 9895806992  
Chosen Option : --

Q.2  
0 'कमल' का पर्यायवाची शब्द है-

- Ans
- 1. फूल
  - 2. कनक
  - 3. सुरभि
  - 4. जलज

Question ID : 9895806988  
Chosen Option : --

Q.2  
1 सही वर्तनी वाले शब्द का चयन करें।

- Ans
- 1. सैनिक
  - 2. सैनीक
  - 3. सेनिक
  - 4. सेनीक

Question ID : 9895806993  
Chosen Option : --

Q.2  
2 रिक्त स्थान को भरने के लिए उपयुक्त शब्द का चयन करें।

गोपाल आजकल चित्रकला का \_\_\_\_\_ कर रहा है।

- Ans
- 1. अभ्यास
  - 2. व्यायाम
  - 3. आयास



✗ 4. प्रयास

Question ID : 9895806978

Chosen Option : --

Q.2  
3 दिए गए शब्द के पर्यायवाची शब्द का चयन करें।

मृग

- Ans
- ✗ 1. बादल
  - ✓ 2. हिरण
  - ✗ 3. हाथी
  - ✗ 4. पवन

Question ID : 9895806987

Chosen Option : --

Q.2  
4 'बट्टा लगाना' मुहावरे का अर्थ है-

- Ans
- ✓ 1. अपमान होना
  - ✗ 2. कलंक लगाना
  - ✗ 3. सम्मान होना
  - ✗ 4. झूठ बोलना

Question ID : 9895806989

Chosen Option : --

Q.2  
5 सही वर्तनी वाले शब्द का चयन करें।

- Ans
- ✗ 1. अभयस्थ
  - ✗ 2. अभयस्थ
  - ✗ 3. अभियस्थ
  - ✓ 4. अभ्यस्त

Question ID : 9895806994

Chosen Option : --