

Constable (GD) in CAPFs, NIA, SSF and Rifleman (GD) in Assam Rifles Examination, 2018

Roll No. :	www.GovtJobsAlert.In
Registration No.	
Name :	
Exam Venue :	ION Digital Zone iDZ Sirsakala Bhilai-3
Exam Time :	4:00 PM - 5:30 PM
Exam Date :	06/03/2019

Section : General Section

Q.1 The statements below are followed by conclusions labeled I, II and III. Assuming that the information in the statements is true, even if it appears to be at variance with generally established facts, decide which conclusion(s) logically and definitely follow(s) from the information given in the statements.

Statements:

Some women are weaks.

Some weaks are female.

All female are iron.

All iron are gold.

Conclusions:

I. Some weaks are iron.

II. Some gold are weaks.

III. Some women are female.

- Ans**
- 1. All, I, II and III follow
 - 2. Only II and III follow
 - 3. Only I and III follow
 - 4. Only I and II follow

Question ID : 9895808651

Chosen Option : 4

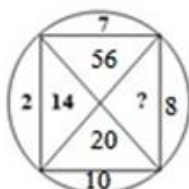
Q.2 Four options have been given out of which three are alike in some manner, while one is different. Choose the odd one.

- Ans**
- 1. 125
 - 2. 75
 - 3. 729
 - 4. 1331

Question ID : 9895808656

Chosen Option : 2

Q.3 Find the missing number from the below options.



- Ans 1. 80
 2. 70
 3. 140
 4. 77

Question ID : 9895808657
Chosen Option : 1

Q.4 Select the correct option that will fill in the blank and complete the series.

21, 43, 85, 171, 341, _____

- Ans 1. 683
 2. 675
 3. 684
 4. 680

Question ID : 9895808653
Chosen Option : 1

Q.5 Four words have been given out of which three are alike in some manner, while one is different. Choose the odd one.

- Ans 1. Robbery
 2. Snobbery
 3. Larceny
 4. Burglary

Question ID : 9895808642
Chosen Option : 1

Q.6 Which of the following answer figure will complete the given figure?

Question figure:



- Ans 1.
- 2.
- 3.
- 4.

Question ID : 9895808660
Chosen Option : 4

Q.7 Four letter clusters have been given out of which three are alike in some manner, while one is different. Choose the odd one.

- Ans 1. YZBE
 2. DEGJ

3. JKNQ

4. QRTW

Question ID : 9895808641
Chosen Option : 3

Q.8 Select the related word pair from the given alternatives.

Afghanistan : Kabul :: _____ : _____

Ans 1. Iran : Dublin

2. Nepal : Monaco

3. Pakistan : Islam Nagar

4. China: Beijing

Question ID : 9895808643
Chosen Option : 4

Q.9 Find the missing analogous numbers pair :

1000 : 121 ::?

Ans 1. 64 : 8

2. 125 : 36

3. 27 : 64

4. 343 : 81

Question ID : 9895808655
Chosen Option : 2

Q.10 Choose the option figure in which the problem figure is hidden/embedded.

Question figure:



Ans 1.

2.

3.

4.

Question ID : 9895808661
Chosen Option : 2

Q.1
1

Select the related word pair from the given alternatives.

Month : Year :: _____ : _____

- Ans
- 1. Litre : Liquid
 - 2. Speed : Vehicle
 - 3. Time : Distance
 - 4. Minute : Hour

Question ID : 9895808644
Chosen Option : 4

Q.1 The statements below are followed by two conclusions labeled I and II. Assuming that the information in the statements is true, even if it appears to be at variance with generally established facts, decide which conclusion(s) logically and definitely follow(s) from the information given in the statements.

Statements:

Some teaspoons are glasses.

All teddies are teaspoons.

Conclusions:

I. Some teddies are glasses.

II. Some glasses are teddies.

- Ans
- 1. Either I or II follows
 - 2. Only conclusion II follows
 - 3. Only conclusion I follows
 - 4. Neither I nor II follows

Question ID : 9895808652
Chosen Option : 4

Q.1 Select the option that is related to the third term in the same way as the second term is related to the first term.

3

GPLS : 54 :: WGSK : _____

- Ans
- 1. 70
 - 2. 60
 - 3. 65
 - 4. 53

Question ID : 9895808645
Chosen Option : 2

Q.1 In a certain code, NAP is coded as MZO, then how is SNEEZE coded in the same way as:

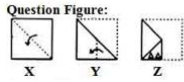
4

- Ans
- 1. RQDFYG
 - 2. RMDDYD
 - 3. RMDFYD
 - 4. RNDDYD

Question ID : 9895808646
Chosen Option : 2

Q.1
5

A piece of paper is folded and cut as shown below in the question figures. From the given answer figures, how will it appear when opened?



Ans

- 1.
- 2.
- 3.
- 4.

Question ID : 9895808663
Chosen Option : 1

Q.1 Select the correct combination of mathematical signs to replace '**' signs and to balance the given equation:

6

$$54 * 6 * 5 * 14$$

Ans

- 1. $+ \div =$
- 2. $= \times +$
- 3. $- = \times$
- 4. $\div + =$

Question ID : 9895808658
Chosen Option : 4

Q.1 Choose the option that most closely resembles the mirror image of the given figure when mirror is placed at left side.

7



Ans

- 1.
- 2.
- 3.
- 4.

Question ID : 9895808662
Chosen Option : 2

Q.1 In a class of 35 children, Ameya's rank is sixth from the top. Annie is seven ranks below Ameya. What is Annie's rank from the bottom?

8

Ans

- 1. 22

2. 20

3. 23

4. 19

Question ID : 9895808650

Chosen Option : 3

Q.1 Select the correct option that will fill in the blank and complete the series.

$$\frac{3}{2}, \frac{5}{2}, \frac{7}{2}, \frac{9}{2}, \frac{11}{2}, ?$$

Ans

1. $\frac{12}{2}$

2. $\frac{17}{2}$

3. $\frac{13}{2}$

4. $\frac{10}{2}$

Question ID : 9895808654

Chosen Option : 3

Q.2 Six kids are sitting in two rows facing north. Their names are Fuji, Ukain, Yam and Krish, Charlie, Mac. Fuji and Mac are sitting diagonally opposite. Ukain is in the top row and to the immediate right of Fuji. Krish is second to the left of Mac while Yam and Krish are not in the same row.

Who is sitting diagonally opposite to Yam?

Ans

1. Charlie

2. Krish

3. Ukain

4. Mac

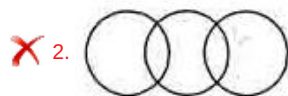
Question ID : 9895808649

Chosen Option : 1

Q.2 Select the Venn diagram that best illustrates the relationship between the three given classes.

Clothes, T-shirt, Trousers

Ans



✗ 4.



Question ID : 9895808664
Chosen Option : 1

Q.2 Select the correct option that will fill in the blank and complete the series.

FKP, GMQ, HOR, ?

- Ans
- 1. IQS
 - 2. IRT
 - 3. JNK
 - 4. JYI

Question ID : 9895808640
Chosen Option : 1

Q.2 If NAMAN is written as 12321 and VINESH as 671489, how will NIMESH be written?

- Ans
- 1. 174583
 - 2. 173486
 - 3. 167893
 - 4. 173489

Question ID : 9895808647
Chosen Option : 4

Q.2 Eight people A, B, C, D, E, F, G and H are sitting around a circular table. A and B are facing towards the center while the other six people are facing opposite the center. A is sitting second to the right of H. B sits third to the left of A. D sits second to the right of G. G is neither immediate neighbour of B nor A. E and F are immediate neighbours and are facing outside.

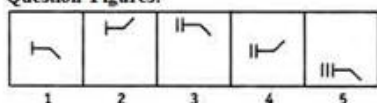
What is the position of C with respect to D?

- Ans
- 1. Third to the right
 - 2. Fourth to the left
 - 3. Fourth to the right
 - 4. Third to the left

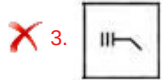
Question ID : 9895808648
Chosen Option : 1

Q.2 Choose the option which comes next in the given figure series.

Question Figures:



- Ans
- 1.



Question ID : 9895808659
Chosen Option : 4

Q.2
6 Which hormone is secreted by the pituitary gland?

- Ans 1. Adrenaline
 2. Growth hormone
 3. Insulin
 4. Thyroxin

Question ID : 9895808508
Chosen Option : 2

Q.2
7 Most classical dances of India combine three main facets namely, "Bhava", "Raga" and "_____".

- Ans 1. Svasara
 2. Tala
 3. Sopana
 4. Mala

Question ID : 9895808492
Chosen Option : 2

Q.2
8 National Youth Day is celebrated on the birthday of:

- Ans 1. Swami Vivekananda
 2. Swami Abhedananda
 3. Swami Ashokananda
 4. Swami Rajesgwaranand Maharaj

Question ID : 9895808496
Chosen Option : 1

Q.2
9 Which of the following reasons for why construction of huge dams is opposed?

- Ans 1. They are not cost effective
 2. No support in producing hydroelectricity
 3. Lack of manual labour
 4. Large scale displacement of peasants and tribals

Question ID : 9895808507
Chosen Option : 4

Q.3
0 Who has been Honoured with Ashoka Chakra at the 69th Republic Day 2018?

- Ans
- 1. Hangpan Dada
 - 2. Mukund Varadarajan
 - 3. Mohan Goswami
 - 4. Jyoti Prakash Nirala

Question ID : 9895808495
Chosen Option : 2

Q.3
1 How many members were there in the Constituent Assembly that wrote the Indian Constitution?

- Ans
- 1. 199
 - 2. 299
 - 3. 298
 - 4. 198

Question ID : 9895808501
Chosen Option : 3

Q.3
2 Which of the following policy falls under right to work?

- Ans
- 1. Mahatma Gandhi National Rural Employment Guarantee Act
 - 2. Ayushman Bharat
 - 3. Pradhan Mantri Ujjwal Yojna
 - 4. Saubhagya Scheme

Question ID : 9895808500
Chosen Option : 1

Q.3
3 Which of the following sea ports declined after the emergence of East India Company?

- Ans
- 1. Calcutta
 - 2. Bombay
 - 3. Vishakapatnam
 - 4. Surat

Question ID : 9895808512
Chosen Option : 3

Q.3
4 Which type of farming is practiced in areas of high population pressure on land?

- Ans
- 1. Extensive subsistence farming
 - 2. Commercial farming
 - 3. Primitive subsistence farming
 - 4. Intensive subsistence farming

Question ID : 9895808510
Chosen Option : 4

Q.3
5 The festival associated with the worship of the sun, rivers and ponds is:

- Ans 1. Makar Sankranti
 2. Chhath
 3. Diwali
 4. Teej

Question ID : 9895808491
Chosen Option : 4

Q.3
6 The major economic attribute for comparing countries is their:

- Ans 1. income
 2. human development index
 3. population
 4. mortality rate

Question ID : 9895808499
Chosen Option : 1

Q.3
7 On which river is the Bhakra Nangal Dam situated?

- Ans 1. Sutlej
 2. Ravi
 3. Jhelum
 4. Chenab

Question ID : 9895808511
Chosen Option : 4

Q.3
8 Detention of political prisoners without trial for two years was a feature of:

- Ans 1. Rowlatt Act
 2. East India Stock Dividend Redemption Act
 3. British India Regulating Act
 4. Government of India Act

Question ID : 9895808514
Chosen Option : 1

Q.3
9 Mushrooms and other micro organisms feed on dead plant and animal tissues and convert them into _____.

- Ans 1. Sod
 2. Peat
 3. Clod
 4. Humus

Question ID : 9895808505
Chosen Option : 3

Q.4
0 Which of the following Indian artists has been awarded the Lifetime Achievement Grammy Award?

- Ans 1. Zakir Hussain
 2. A.R Rahman

3. Ravi Shankar
 4. Lata Mangeshkar

Question ID : 9895808497
Chosen Option : 3

Q.4
1 Who set up the first iron and steel works in India in 1912 at Jamshedpur?

- Ans 1. R. J. Tata
 2. R. D. Tata
 3. D. J. Tata
 4. J. N. Tata

Question ID : 9895808513
Chosen Option : 4

Q.4
2 Which Indian state has made solar plants mandatory for housing societies, industries and other specified categories of buildings?

- Ans 1. Manipur
 2. Himachal Pradesh
 3. Nagaland
 4. Haryana

Question ID : 9895808509
Chosen Option : 4

Q.4
3 In which year was the Prime Minister Rozgar Yojana (PMRY) scheme launched?

- Ans 1. 1993
 2. 1995
 3. 1992
 4. 1994

Question ID : 9895808498
Chosen Option : 4

Q.4
4 Who is the fastest Asian to traverse the globe riding a bicycle?

- Ans 1. Vedangi Kulkarni
 2. Rameshwori Devi
 3. Mayuri Lute
 4. E Chaoba Devi

Question ID : 9895808494
Chosen Option : 1

Q.4
5 Which Indian cultural site is NOT included in the World Heritage List?

- Ans 1. Humayun's Tomb
 2. Red Fort Complex
 3. Qutub Minar
 4. Jama Masjid

Question ID : 9895808490
Chosen Option : 1

Q.4
6 Which gas is flushed in a bag of chips to prevent the chips from getting oxidized?

- Ans
- 1. Oxygen
 - 2. Nitrogen
 - 3. Hydrogen
 - 4. Helium

Question ID : 9895808504
Chosen Option : 4

Q.4
7 Dhop is a seasonal game played in:

- Ans
- 1. Meghalaya
 - 2. Nagaland
 - 3. Maharashtra
 - 4. Assam

Question ID : 9895808493
Chosen Option : 1

Q.4
8 Who was the founder chairperson of Central Social Welfare Board?

- Ans
- 1. G. Durgabai Deshmukh
 - 2. Aruna Asaf Ali
 - 3. Annie Besant
 - 4. Sarojini Naidu

Question ID : 9895808503
Chosen Option : 1

Q.4
9 Which of the following High Courts has the largest number of seats?

- Ans
- 1. Mumbai High Court
 - 2. Kolkota High Court
 - 3. Allahabad High Court
 - 4. Guwahati High Court

Question ID : 9895808502
Chosen Option : 2

Q.5
0 Twinkling of stars is due to:

- Ans
- 1. atmospheric reflection
 - 2. scattering of light
 - 3. internal reflection
 - 4. atmospheric refraction

Question ID : 9895808506

Chosen Option : 4

Q.5 The average age of 3 persons is 30 years. If their ages are in the ratio of 3:5:7 respectively, then the age of the eldest person is:

- Ans
- 1. 25 Years
 - 2. 42 Years
 - 3. 28 Years
 - 4. 21 Years

Question ID : 9895808693

Chosen Option : 2

Q.5 The L.C.M. of two different numbers are 30. Which of the following cannot be their H.C.F.?

- Ans
- 1. 12
 - 2. 15
 - 3. 6
 - 4. 10

Question ID : 9895808690

Chosen Option : 1

Q.5 DIRECTIONS: What should come in place of question mark (?) in the following questions?

$$1072 + \{[8240 + (-9213)]\} - \{(2863 - (4329 - 2143))\} = ?$$

- Ans
- 1. 578
 - 2. -576
 - 3. 576
 - 4. -578

Question ID : 9895808692

Chosen Option : 4

Q.5 On a certain sum, rate of interest per annum for the first two years is 4%. The rate of interest for next four years is 6% and for the next three years is 8%. If total simple interest earned at the end of 9 years is ₹ 1120, then the sum is:

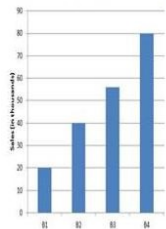
- Ans
- 1. ₹ 2240
 - 2. ₹ 1600
 - 3. ₹ 1800
 - 4. ₹ 2000

Question ID : 9895808703

Chosen Option : 3

Q.5
5

Sales of books from four shops (B1, B2, B3, B4) in thousands are given as below. Study the graph and answer the following questions.



If each shop can increase the sales of books by 10%, then the total number of books (in thousands) sold by all the shop are:

- Ans
- 1. 215.5
 - 2. 214.5
 - 3. 240.0
 - 4. 228.0

Question ID : 9895808714
Chosen Option : 2

Q.5
6 If ten men can do a job in ten days, what fraction of the job can be done by one man in one day?

- Ans
- 1. $\frac{1}{20}$
 - 2. $\frac{1}{10}$
 - 3. $\frac{1}{2}$
 - 4. $\frac{1}{100}$

Question ID : 9895808705
Chosen Option : 4

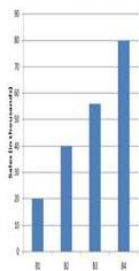
Q.5
7 In a colony 5 families have 1 child, 7 families have 2 children, 8 families have 3 children and 3 families have 4 children. What is the mode of the number of children.

- Ans
- 1. 4
 - 2. 8
 - 3. 5
 - 4. 3

Question ID : 9895808696
Chosen Option : 3

Q.5
8

Sales of books from four shops (B1, B2, B3, B4) in thousands are given as below. Study the graph and answer the following questions.



The number of shop in which sales of books are below the average level is:

- Ans
- 1. 2
 - 2. 4
 - 3. 1
 - 4. 3

Question ID : 9895808713
Chosen Option : 1

Q.5 What should come in place of question mark (?) in the following questions?

$$? = (45 \times 11) \div 3$$

- Ans
- 1. 162
 - 2. 165
 - 3. 144
 - 4. 235

Question ID : 9895808691
Chosen Option : 2

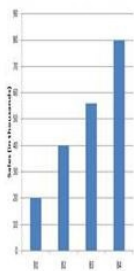
Q.6 If $x:y = 2:3$ then the value of $\frac{3x+2y}{9x+5y}$ will be:

- Ans
- 1. $\frac{4}{11}$
 - 2. $\frac{11}{2}$
 - 3. $\frac{1}{2}$
 - 4. $\frac{5}{14}$

Question ID : 9895808701
Chosen Option : 1

Q.6
1

Sales of books from four shops (B1, B2, B3, B4) in thousands are given as below. Study the graph and answer the following questions.



The average sales of book from shop B1, B2 and B4 is closest to:

- Ans
- 1. 43633
 - 2. 48333
 - 3. 46666
 - 4. 46333

Question ID : 9895808712
Chosen Option : 3

Q.6 The income of A and B are in the ratio 5: 3. The expenses of A, B and C are in the ratio of 8: 5: 2. If C spends 2000 and B saves ₹ 700, then A saves:

- Ans
- 1. ₹ 1000
 - 2. ₹ 1500
 - 3. ₹ 500
 - 4. ₹ 250

Question ID : 9895808700
Chosen Option : 2

Q.6 A dealer buys goods at 10% discount on its list price and sells 10% above the list price. His profit percent is:

- Ans
- 1. 20%
 - 2. $22\frac{2}{9}\%$
 - 3. $11\frac{11}{9}\%$
 - 4. 10%

Question ID : 9895808699
Chosen Option : 2

Q.6 The area of an equilateral triangle is $16\sqrt{3}$ sq cm. What is its perimeter?

- Ans
- 1. 16 cm
 - 2. 12 cm
 - 3. 24 cm
 - 4. 32 cm

Question ID : 9895808710
Chosen Option : 3

Q.6
5 Rekha sells a DVD player to Liza at a profit of 15% and Liza sells it Megha at a profit of 25%. If Megha pays ₹ 2875 for it, then what was the cost price for Rekha.

- Ans
- 1. ₹ 1800
 - 2. ₹ 2000
 - 3. ₹ 1500
 - 4. ₹ 1900

Question ID : 9895808698
Chosen Option : 2

Q.6
6 If the curved surface area of a sphere increased by 44%, then by what percentage would its volume increase?

- Ans
- 1. 20%
 - 2. 44%
 - 3. Cannot be determined
 - 4. 72.8%

Question ID : 9895808697
Chosen Option : 3

Q.6
7 A customer is given a discount of $2\frac{1}{2}\%$ on the marked price of an item. He purchased it in ₹ 39. Marked price of the item is:

- Ans
- 1. ₹ 36.5
 - 2. ₹ 42
 - 3. ₹ 40
 - 4. ₹ 41.5

Question ID : 9895808695
Chosen Option : 3

Q.6
8 A Train of 300 m length passes a pole in 15 second. What is the speed of the Train?

- Ans
- 1. 72 km/hr
 - 2. 75 km/hr
 - 3. 65 km/hr
 - 4. 60 km/hr

Question ID : 9895808708
Chosen Option : 1

Q.6
9 Smith travels along four sides of a square at speeds of 10, 12, 15 and 20 km/hr. The average speed of the Smith is:

- Ans
- 1. $13\frac{1}{3}$ km/hr
 - 2. $12\frac{1}{2}$ km/hr
 - 3. $14\frac{1}{4}$ km/hr

4. 10 km/hr

Question ID : 9895808707

Chosen Option : 3

Q.7
0 What will be the cost of fencing a circular garden of radius 35 m at the rate of ₹ 16 per meter? (Take $\pi = \frac{22}{7}$)

Ans 1. ₹ 3520

2. ₹ 3240

3. ₹ 2850

4. ₹ 3160

Question ID : 9895808711

Chosen Option : 1

Q.7
1 A solution of milk and water contains milk and water in the ratio of 3 : 2. Another solution of milk and water contains milk and water in the ratio of 2 : 1. Forty litres of the first solution is mixed with 30 litre of the second solution. The ratio of milk and water in the resultant solution is:

Ans 1. 22 : 13

2. 13 : 22

3. 6 : 5

4. 5 : 6

Question ID : 9895808702

Chosen Option : 1

Q.7
2 Had been one man less, then the number of days required to do a piece of work would have been one more. If the number of Man. Days required to complete the work is 56, how many workers were there?

Ans 1. 14

2. 9

3. 6

4. 8

Question ID : 9895808706

Chosen Option : 1

Q.7
3 A certain sum becomes ₹ 650 at the end of one year and ₹ 676 at the end of second year. The at compound interest sum is:

Ans 1. ₹ 560

2. ₹ 625

3. ₹ 600

4. ₹ 540

Question ID : 9895808704

Chosen Option : 1

Q.7
4 The average temperature on Friday, Saturday and Sunday was 26° and on Saturday, Sunday and Monday it was 24° . If on Monday it was exactly 25° . Then what was the temperature on Friday.

Ans 1. 33°

2. 32°

3. 30°

✓ 4. 31 °

Question ID : 9895808694
Chosen Option : 4

Q.7 A cylinder of height 4 cm and base radius 3 cm is melted to form a sphere. The radius of sphere is:

- Ans
- ✓ 1. 3 cm
 - ✗ 2. 3.5 cm
 - ✗ 3. 4 cm
 - ✗ 4. 2.5 cm

Question ID : 9895808709
Chosen Option : 1

Section : English Language

Q.1 Select the most appropriate option to substitute the underlined segment in the given sentence. If there is no need to substitute it, select No substitution required.

Whenever there is raining, desert flowers bloom and the sight can be rewarding.

- Ans
- ✓ 1. Whenever it rains
 - ✗ 2. No substitution required
 - ✗ 3. When its rains
 - ✗ 4. When raining

Question ID : 9895808770
Chosen Option : 1

Q.2 Select the synonym of the given word.

VAIN

- Ans
- ✗ 1. Useful
 - ✓ 2. Useless
 - ✗ 3. Nutritious
 - ✗ 4. Beneficial

Question ID : 9895808782
Chosen Option : 2

Q.3 Select the most appropriate word to fill in the blank.

He offered us _____ food items for lunch and we were happy.

- Ans
- ✓ 1. delicious
 - ✗ 2. pungent
 - ✗ 3. lucrative
 - ✗ 4. big

Question ID : 9895808792
Chosen Option : 1

Q.4

Select the meaning of the given idiom.

Play it safe

- Ans
- 1. play a game peacefully
 - 2. play indoors
 - 3. play for pleasure
 - 4. avoid risks

Question ID : 9895808786
Chosen Option : 4

Q.5 Select the most appropriate option to substitute the underlined segment in the given sentence. If there is no need to substitute it, select No substitution required.

As the tree comes crashing down, monkeys woke from its sleep and run from branch to branch.

- Ans
- 1. wakes from it sleep
 - 2. woke in their sleep
 - 3. No substitution required
 - 4. wake from their sleep

Question ID : 9895808771
Chosen Option : 4

Q.6 Identify the segment in the sentence which contains the grammatical error from the given options.

We used to keep large plates of fruit on a table nearer a window in the dining-room.

- Ans
- 1. We used to
 - 2. nearer a window
 - 3. on a table
 - 4. large plates of

Question ID : 9895808769
Chosen Option : 2

Q.7 Select the most appropriate word to fill in the blank.

The man insisted on buying the doves _____ he was fond of birds.

- Ans
- 1. because
 - 2. due to
 - 3. though
 - 4. as if

Question ID : 9895808774
Chosen Option : 1

Q.8 Select the wrongly spelt word.

- Ans
- 1. Perspiration
 - 2. Paralysis
 - 3. Plateform

4. Perseverance

Question ID : 9895808790
Chosen Option : 3

Q.9 Select the meaning of the given idiom.

Draw a Blank

- Ans 1. Unable to remember
 2. Be an artist
 3. Lose money
 4. Display skills

Question ID : 9895808785
Chosen Option : 1

Q.1₀ Select the most appropriate word to fill in the blank.

We went to see the butterfly farm _____ was very close to our hotel.

- Ans 1. It
 2. Us
 3. Them
 4. They

Question ID : 9895808773
Chosen Option : 1

Q.1₁ Select the most appropriate option to substitute the underlined segment in the given sentence. If there is no need to substitute it, select No substitution required.

The most pleasant way was to going and having a good dinner at some fine restaurant.

- Ans 1. was going to have
 2. No substitution required
 3. is to have gone and eat
 4. was to go and have

Question ID : 9895808772
Chosen Option : 4

Q.1₂ Identify the segment in the sentence which contains the grammatical error from the given options.

An ant uses it's feelers or antennae to 'talk' to other ants by passing messages through them.

- Ans 1. to other ants
 2. An ant
 3. it's feelers
 4. Through them

Question ID : 9895808767
Chosen Option : 3

Comprehension:

In the following passage some words have been deleted. Fill in the blanks with the help of the alternatives given. Select the most appropriate option for each number.

The National Aeronautics and Space Administration's (NASA) Viking Mission to Mars was (1) _____ of two spacecraft. Viking 1 and Viking 2, (2) _____ consisting of an orbiter and (3) _____ lander. The primary objectives (4) _____ to obtain images and samples (5) _____ the Martian surface and soil.

SubQuestion No : 13

Q.1
3 Select the most appropriate option that will fill in the blank number 1.

- Ans
- 1. composed
 - 2. making
 - 3. consist
 - 4. including

Question ID : 9895808776

Chosen Option : 1

Comprehension:

In the following passage some words have been deleted. Fill in the blanks with the help of the alternatives given. Select the most appropriate option for each number.

The National Aeronautics and Space Administration's (NASA) Viking Mission to Mars was (1) _____ of two spacecraft. Viking 1 and Viking 2, (2) _____ consisting of an orbiter and (3) _____ lander. The primary objectives (4) _____ to obtain images and samples (5) _____ the Martian surface and soil.

SubQuestion No : 14

Q.1
4 Select the most appropriate option that will fill in the blank number 2.

- Ans
- 1. both of
 - 2. one of
 - 3. equally
 - 4. each

Question ID : 9895808777

Chosen Option : 1

Comprehension:

In the following passage some words have been deleted. Fill in the blanks with the help of the alternatives given. Select the most appropriate option for each number.

The National Aeronautics and Space Administration's (NASA) Viking Mission to Mars was (1) _____ of two spacecraft. Viking 1 and Viking 2, (2) _____ consisting of an orbiter and (3) _____ lander. The primary objectives (4) _____ to obtain images and samples (5) _____ the Martian surface and soil.

SubQuestion No : 15

Q.1
5 Select the most appropriate option that will fill in the blank number 3.

- Ans
- 1. a
 - 2. the
 - 3. an
 - 4. No article required

Question ID : 9895808778
Chosen Option : 4

Comprehension:

In the following passage some words have been deleted. Fill in the blanks with the help of the alternatives given. Select the most appropriate option for each number.

The National Aeronautics and Space Administration's (NASA) Viking Mission to Mars was (1) _____ of two spacecraft. Viking 1 and Viking 2, (2) _____ consisting of an orbiter and (3) _____ lander. The primary objectives (4) _____ to obtain images and samples (5) _____ the Martian surface and soil.

SubQuestion No : 16

Q.1
6 Select the most appropriate option that will fill in the blank number 4.

- Ans
- 1. was
 - 2. were
 - 3. is
 - 4. has been

Question ID : 9895808779
Chosen Option : 1

Comprehension:

In the following passage some words have been deleted. Fill in the blanks with the help of the alternatives given. Select the most appropriate option for each number.

The National Aeronautics and Space Administration's (NASA) Viking Mission to Mars was (1) _____ of two spacecraft. Viking 1 and Viking 2, (2) _____ consisting of an orbiter and (3) _____ lander. The primary objectives (4) _____ to obtain images and samples (5) _____ the Martian surface and soil.

SubQuestion No : 17

Q.1
7 Select the most appropriate option that will fill in the blank number 5.

- Ans
- 1. on
 - 2. of
 - 3. for
 - 4. at

Question ID : 9895808780

Chosen Option : 2

Q.1
8 Select the antonym of the given word.

DESPAIR

- Ans
- 1. Hope
 - 2. Distress
 - 3. Hopelessness
 - 4. Desperation

Question ID : 9895808783

Chosen Option : 1

Q.1
9 Select the word which means the same as the group of words given.

A false or assumed identity

- Ans
- 1. Annals
 - 2. Alien
 - 3. Archive
 - 4. Alias

Question ID : 9895808788

Chosen Option : 2

Q.2
0 Select the synonym of the given word.

SUBSTANTIAL

- Ans
- 1. Considerable
 - 2. Worthless
 - 3. Slight
 - 4. Negligible

Question ID : 9895808781

Chosen Option : 1

Q.2
1 Select the most appropriate word to fill in the blank.

Last year the performance of this production unit was _____.

- Ans
- 1. fantastic
 - 2. tall
 - 3. staggered
 - 4. below

Question ID : 9895808791

Chosen Option : 3

Q.2
2 Select the antonym of the given word.

ARID

- Ans
- 1. Dry
 - 2. Scorched
 - 3. Wet
 - 4. Parched

Question ID : 9895808784
Chosen Option : 3

Q.2
3 Select the wrongly spelt word.

- Ans
- 1. Dilemma
 - 2. Disaster
 - 3. Disappear
 - 4. Develope

Question ID : 9895808789
Chosen Option : 1

Q.2
4 Select the word which means the same as the group of words given.

One who loves books

- Ans
- 1. Librarian
 - 2. Bibliophile
 - 3. Orator
 - 4. Veteran

Question ID : 9895808787
Chosen Option : 2

Q.2
5 Identify the segment in the sentence which contains the grammatical error from the given options.

The chameleon's tongue is too long that it keeps it folded in the mouth.

- Ans
- 1. too long that
 - 2. The chameleon's
 - 3. in the mouth
 - 4. it keeps

Question ID : 9895808768
Chosen Option : 1

Section : Hindi Language

Q.1 दिए गए वाक्य का वह भाग ज्ञात करें जिसमें कोई त्रुटि है।

वन के पशुओं को ऐसा लगा कि उन्हें भी एक अच्छा शासन व्यवस्था अपनानी चाहिए।

- Ans
- 1. एक अच्छा शासन व्यवस्था
 - 2. अपनानी चाहिए।
 - 3. वन के पशुओं को
 - 4. ऐसा लगा कि उन्हें भी

Question ID : 9895806997
Chosen Option : --

Q.2 'कृतज्ञ' का विलोम शब्द है-

- Ans
- 1. निष्ठुर
 - 2. प्रतिकूल
 - 3. कृतघ्न
 - 4. त्यागी

Question ID : 9895807012
Chosen Option : --

Q.3 'कल्पवृक्ष' का पर्यायवाची शब्द है-

- Ans
- 1. देववृक्ष
 - 2. पेड़
 - 3. तरु
 - 4. हरि

Question ID : 9895807013
Chosen Option : --

Q.4 रिक्त स्थान को भरने के लिए उपयुक्त शब्द का चयन करें।

मैं कल दिल्ली गया था _____ दो दिन बाद कलकत्ता जाऊंगा।

- Ans
- 1. अन्यथा
 - 2. और
 - 3. यद्यपि
 - 4. वरना

Question ID : 9895807001
Chosen Option : --

Q.5 'चैन की वंशी बजाना' मुहावरे का अर्थ है-

- Ans
- 1. खाली बैठना
 - 2. बांसुरी बजाना
 - 3. बेरोजगार होना
 - 4. मौज करना

Question ID : 9895807015
Chosen Option : --

Q.6 'लहू का घूँट पीकर रह जाना' मुहावरे का अर्थ है-

Ans

- 1. डर जाना
- 2. क्रोध करना
- 3. अपमान सहन कर लेना
- 4. क्रोध शांत होना

Question ID : 9895807016
Chosen Option : --

Q.7 'जिसके आने की तिथि मालूम न हो' शब्द समूह के लिए शब्द है-

- Ans
- 1. अतिथि
 - 2. विशिष्ट
 - 3. मनुष्य
 - 4. देवता

Question ID : 9895807018
Chosen Option : --

Q.8 सही वर्तनी वाले शब्द का चयन करें।

- Ans
- 1. कवयीत्रि
 - 2. कवयित्री
 - 3. कवीयित्री
 - 4. कवियत्री

Question ID : 9895807020
Chosen Option : --

Comprehension:

निम्नलिखित गद्यांश के रिक्त स्थानों की पूर्ति गद्यांश के नीचे दिए गए प्रश्नों के अनुसार कीजिए-

दीपावली को कई लोग घरों में _____ (1) बनाते हैं। इस दिन सब लोग सगे-सम्बन्धियों को _____ (2) देते हैं। बच्चे नए वस्त्र पहनते हैं। इस दिन घरों में तरह-तरह के _____ (3) बनते हैं। रात को सब लोग लक्ष्मी पूजन करके पटाखे _____ (4) हैं। इस दिन घर _____ (5) से रोशन किए जाते हैं।

SubQuestion No : 9

Q.9 गद्यांश में संकेतित रिक्त स्थान (1) के लिए उपयुक्त शब्द होगा।

- Ans
- 1. गुब्बारे
 - 2. चमोली
 - 3. रंगोली
 - 4. खटोली

Comprehension:

निम्नलिखित गद्यांश के रिक्त स्थानों की पूर्ति गद्यांश के नीचे दिए गए प्रश्नों के अनुसार कीजिए-

दीपावली को कई लोग घरों में _____ (1) बनाते हैं। इस दिन सब लोग सगे-सम्बन्धियों को _____ (2) देते हैं। बच्चे नए वस्त्र पहनते हैं। इस दिन घरों में तरह-तरह के _____ (3) बनते हैं। रात को सब लोग लक्ष्मी पूजन करके पटाखे _____ (4) हैं। इस दिन घर _____ (5) से रोशन किए जाते हैं।

SubQuestion No : 10

Q.1 गद्यांश में संकेतित रिक्त स्थान (2) के लिए उपयुक्त शब्द होगा।

- Ans
- 1. नमस्कार
 - 2. तिरष्कार
 - 3. प्रहार
 - 4. उपहार

Comprehension:

निम्नलिखित गद्यांश के रिक्त स्थानों की पूर्ति गद्यांश के नीचे दिए गए प्रश्नों के अनुसार कीजिए-

दीपावली को कई लोग घरों में _____ (1) बनाते हैं। इस दिन सब लोग सगे-सम्बन्धियों को _____ (2) देते हैं। बच्चे नए वस्त्र पहनते हैं। इस दिन घरों में तरह-तरह के _____ (3) बनते हैं। रात को सब लोग लक्ष्मी पूजन करके पटाखे _____ (4) हैं। इस दिन घर _____ (5) से रोशन किए जाते हैं।

SubQuestion No : 11

Q.1 गद्यांश में संकेतित रिक्त स्थान (3) के लिए उपयुक्त शब्द होगा।

- Ans
- 1. उपहार
 - 2. पकवान
 - 3. फल
 - 4. अनाज़

Comprehension:

निम्नलिखित गद्यांश के रिक्त स्थानों की पूर्ति गद्यांश के नीचे दिए गए प्रश्नों के अनुसार कीजिए-

दीपावली को कई लोग घरों में _____ (1) बनाते हैं। इस दिन सब लोग सगे-सम्बन्धियों को _____ (2) देते हैं। बच्चे नए वस्त्र पहनते हैं। इस दिन घरों में तरह-तरह के _____ (3) बनते हैं। रात को सब लोग लक्ष्मी पूजन करके पटाखे _____ (4) हैं। इस दिन घर _____ (5) से रोशन किए जाते हैं।

SubQuestion No : 12

Q.1
2 गद्यांश में संकेतित रिक्त स्थान (4) के लिए उपयुक्त शब्द होगा।

- Ans
- 1. दौड़ाते
 - 2. जलाते
 - 3. चलाते
 - 4. गिराते

Question ID : 9895807009

Chosen Option : --

Comprehension:

निम्नलिखित गद्यांश के रिक्त स्थानों की पूर्ति गद्यांश के नीचे दिए गए प्रश्नों के अनुसार कीजिए-

दीपावली को कई लोग घरों में _____ (1) बनाते हैं। इस दिन सब लोग सगे-सम्बन्धियों को _____ (2) देते हैं। बच्चे नए वस्त्र पहनते हैं। इस दिन घरों में तरह-तरह के _____ (3) बनते हैं। रात को सब लोग लक्ष्मी पूजन करके पटाखे _____ (4) हैं। इस दिन घर _____ (5) से रोशन किए जाते हैं।

SubQuestion No : 13

Q.1
3 गद्यांश में संकेतित रिक्त स्थान (5) के लिए उपयुक्त शब्द होगा।

- Ans
- 1. सफ़ाई
 - 2. अग्नि
 - 3. दीपक
 - 4. चमक

Question ID : 9895807010

Chosen Option : --

Q.1
4 'अर्वाचीन' का का विलोम शब्द चयन करें।

- Ans
- 1. नवीन
 - 2. प्राचीन

- 3. कठिन
- 4. आधुनिक

Question ID : 9895807011
Chosen Option : --

Q.1
5 रिक्त स्थान को भरने के लिए उपयुक्त शब्द का चयन करें।

वह मेरे पास नहीं आ सका _____ उसे बुखार था।

- Ans
- 1. इसलिए
 - 2. तथापि
 - 3. परन्तु
 - 4. क्योंकि

Question ID : 9895807002
Chosen Option : --

Q.1
6 दिए गए वाक्य का वह भाग ज्ञात करें जिसमें कोई त्रुटि है।

आदमी वहीं तक जाता है वहाँ तक जाने की उसमें क्षमता हो।

- Ans
- 1. जाता है
 - 2. उसमें क्षमता हो।
 - 3. आदमी वहीं तक
 - 4. वहाँ तक जाने की

Question ID : 9895806996
Chosen Option : --

Q.1
7 रिक्त स्थान को भरने के लिए उपयुक्त शब्द का चयन करें।

राधा वीणा बजा _____ है।

- Ans
- 1. रहि
 - 2. रहा
 - 3. रहे
 - 4. रही

Question ID : 9895807004
Chosen Option : --

Q.1
8 दिए गए वाक्य में रेखांकित खंड को प्रतिस्थापित करने के लिए उपयुक्त विकल्प का चयन करें।

तप करने वाला किसी की निंदा नहीं करता।

- Ans
- 1. वैष्णव
 - 2. दूरदर्शी
 - 3. तपस्वी

✗ 4. परोपकारी

Question ID : 9895806998
Chosen Option : --

Q.1 सही वर्तनी वाले शब्द का चयन करें।

- Ans
- ✓ 1. अद्वितिय
 - ✗ 2. अद्वीतिय
 - ✗ 3. आद्वीतीय
 - ✗ 4. अद्वितीय

Question ID : 9895807019
Chosen Option : --

Q.2 रिक्त स्थान को भरने के लिए उपयुक्त शब्द का चयन करें।

तिरंगा हमारे राष्ट्रीय स्वाभिमान _____ प्रतीक है।

- Ans
- ✗ 1. के
 - ✗ 2. का
 - ✗ 3. को
 - ✓ 4. की

Question ID : 9895807003
Chosen Option : --

Q.2 'शत्रु' का पर्यायवाची शब्द है-

- Ans
- ✗ 1. रिपु
 - ✗ 2. शार्दूल
 - ✓ 3. ईर्ष्यालु
 - ✗ 4. बन्धु

Question ID : 9895807014
Chosen Option : --

Q.2 दिए गए वाक्य में रेखांकित खंड को प्रतिस्थापित करने के लिए उपयुक्त विकल्प का चयन करें।

श्रवण कुमार की कहानी मर्म को छूने वाली है।

- Ans
- ✗ 1. मर्मस्पर्शी
 - ✓ 2. अतलदर्शी
 - ✗ 3. परामर्शी
 - ✗ 4. दूरदर्शी

Question ID : 9895806999
Chosen Option : --

Q.2
3 'आगे होने वाला' शब्द समूह के लिए एक शब्द प्रयुक्त होता है-

- Ans
- 1. अतीत
 - 2. उसी समय
 - 3. भावी
 - 4. तत्काल

Question ID : 9895807017
Chosen Option : --

Q.2
4 दिए गए वाक्य का वह भाग ज्ञात करें जिसमें कोई त्रुटि है।

डॉ. राजेन्द्र प्रसाद राजनीतिज्ञ होने का साथ-साथ भावप्रवण साहित्यकार भी थे।

- Ans
- 1. डॉ. राजेन्द्र प्रसाद
 - 2. भावप्रवण साहित्यकार
 - 3. राजनीतिज्ञ होने का साथ-साथ
 - 4. भी थे।

Question ID : 9895806995
Chosen Option : --

Q.2
5 दिए गए वाक्य में रेखांकित खंड को प्रतिस्थापित करने के लिए उपयुक्त विकल्प का चयन करें।

हमें शक्ति के अनुसार गरीबों की मदद करनी चाहिए।

- Ans
- 1. यथाभक्ति
 - 2. यथायोग्य
 - 3. यथासम्पत्ति
 - 4. यथाशक्ति

Question ID : 9895807000
Chosen Option : --