

Constable (GD) in CAPFs, NIA, SSF and Rifleman (GD) in Assam Rifles Examination, 2018

Roll No. :	www.GovtJobsAlert.In
Registration No.	
Name :	
Exam Venue :	iON Digital Zone iDZ Borjhar
Exam Time :	4:00 PM - 5:30 PM
Exam Date :	07/03/2019

Section : General Section

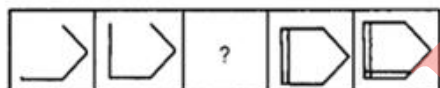
Q.1 Four letter clusters have been given out of which three are alike in some manner, while one is different. Choose the odd one.

- Ans
- 1. ROL
 - 2. GDA
 - 3. WYA
 - 4. FCZ

Question ID : 9895808819
Chosen Option : 3

Q.2 Choose the option figure which completes the given figure series

PROBLEM FIGURES



- Ans
- 1.
 - 2.
 - 3.
 - 4.

Question ID : 9895808837
Chosen Option : 1

Q.3 Select the option that is related to the third term in the same way as the second term is related to the first term.

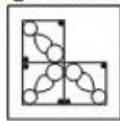
12 : 143 :: 100 : ?

- Ans
- 1. 1119
 - 2. 9999
 - 3. 1009
 - 4. 9789


Question ID : 9895808833
Chosen Option : 2

Q.4 Which of the following answer figure will complete the given figure?

Question figure:



Ans



Question ID : 9895808838
Chosen Option : 4

Q.5 P, Q, R, S, T, U and V are sitting around a circular table.

S is not neighbour of R or T.

P is neighbour of Q and R.

V, who is second to the left of S is the neighbour of T and U.

Which of the following is correct?

Ans

✗ 1. Can't be determined

✗ 2. Q is between R and T

✗ 3. S is to the immediate left of U

✓ 4. R is between P and T

Question ID : 9895808827
Chosen Option : 3

Q.6 The statements below are followed by two conclusions labeled I and II. Assuming that the information in the statements is true, even if it appears to be at variance with generally established facts, decide which conclusion(s) logically and definitely follow(s) from the information given in the statements.

Statements:

Some books are cards.

Some cards are pretty.

Conclusions :

I. Some books are pretty.

II. Some pretty are books.

Ans

- 1. Only conclusion II follows
- 2. Either I or II follows
- 3. Only conclusion I follows
- 4. Neither I nor II follows

Question ID : 9895808830
Chosen Option : 3

Q.7 Four boys A, B, C, D facing south and four girls P, Q, R, S facing north are to be seated in two rows with four chairs each. Boys and girls face each other. Further

- I. A does not sit at any of the extremes.
- II. B and S always sit in front of each other.
- III. R and Q are never adjacent to each other.
- IV. P is sitting in one of the extremes and doesn't want D to sit in front of her.

Who is sitting in front of A?

- Ans**
- 1. R or Q
 - 2. P or Q
 - 3. Q
 - 4. P

Question ID : 9895808826
Chosen Option : 4

Q.8 In a certain code, CAMP is coded as 16, And TRY as 9, then how is PILOT coded in the same way?

- Ans**
- 1. 24
 - 2. 49
 - 3. 25
 - 4. 36

Question ID : 9895808825
Chosen Option : 3

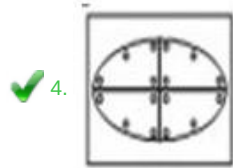
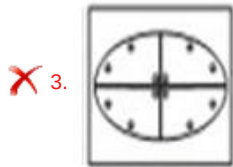
Q.9 A piece of paper is folded and cut as shown below in the question figures. From the given answer figures, how will it appear when opened?

Question figures:



Ans

- 1.
- 2.



Question ID : 9895808841
Chosen Option : 4

Q.1
0 If 'P' means '-', 'Q' means '+', 'R' means '+', and 'S' means '×', then:

525 Q 25 R 42 S 4 = ?

- Ans
- 1. 178
 - 2. 187
 - 3. 189
 - 4. 198

Question ID : 9895808836
Chosen Option : 3

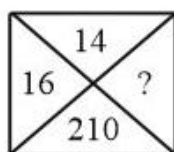
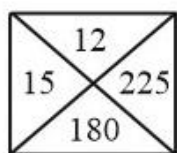
Q.1
1 Select the correct option that will fill in the blank and complete the series.

SL, MO, GR, ?

- Ans
- 1. CK
 - 2. AV
 - 3. HF
 - 4. AU

Question ID : 9895808818
Chosen Option : 3

Q.1
2 Find the missing number from the below options.



- Ans
- 1. 210
 - 2. 250
 - 3. 230
 - 4. 240

Question ID : 9895808835

Chosen Option : 4

Q.1 In a certain code, NO is coded as MO-NP, then how is PRO coded in the same way?

- Ans
- 1. OQ-QS-NP
 - 2. OQ-QR-NT
 - 3. OQ-QS-PN
 - 4. OS-QR-HT

Question ID : 9895808824

Chosen Option : 3

Q.1 Select the related word pair from the given alternatives.

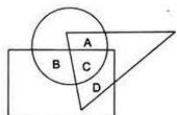
yrteop : poetry :: _____ : _____

- Ans
- 1. erhtyo : hetroy
 - 2. iroeth : theori
 - 3. ethory : hteory
 - 4. yroeht : theory

Question ID : 9895808823

Chosen Option : 4

Q.1 In the following diagram, the triangle represents doctors, the circle represents players and the rectangle represents singers. Which region represents doctors who are singers but not players?



- Ans
- 1. B
 - 2. C
 - 3. D
 - 4. A

Question ID : 9895808842

Chosen Option : 4

Q.1 The statements below are followed by two conclusions labeled I and II. Assuming that the information in the statements is true, even if it appears to be at variance with generally established facts, decide which conclusion(s) logically and definitely follow(s) from the information given in the statements.

Statements:

Some roses are red.

All reds are grass.

Some grass is green.

Conclusions:

I. Some roses are grass.

II. Some green is red.

- Ans
- 1. Only Conclusion I is true
 - 2. Only Conclusion II is true

3. Neither Conclusion I nor II is true

4. Both Conclusions I and II are true

Question ID : 9895808829

Chosen Option : 3

Q.1 Select the correct option that will fill in the blank and complete the series.

7

88, 98, 83, 103, 78, ?

Ans 1. 108

2. 115

3. 110

4. 107

Question ID : 9895808831

Chosen Option : 1

Q.1 Select the related word pair from the given alternatives.

8

Alzheimer : Brain :: _____ : _____

Ans 1. Diabetes : Ear

2. Cataract : Eyes

3. Scabies : Nose

4. Kidney : Liver

Question ID : 9895808822

Chosen Option : 4

Q.1 Select the related word pair from the given alternatives.

9

Books :: Stationary : _____

Ans 1. Fishmarket : Cloths

2. Vegetable : Grocery

3. Chairs : Furniture

4. Medicine : Nurse

Question ID : 9895808821

Chosen Option : 4

Q.2 The positions of Suman and Rajesh in a row are 12th from left and 8th from right respectively. If they interchange their

0

places, then Rajesh will be 17th from right. Find out the position of Suman from left and the total number of persons in

the group?

Ans 1. 21, 27

2. 21, 28

3. 25, 26

4. 20, 28

Question ID : 9895808828

Chosen Option : 3

Q.2 Select the correct option that will fill in the blank and complete the series.

12, 12, 13, 26, 28, 84, ?

- Ans
- 1. 93
 - 2. 87
 - 3. 84
 - 4. 95

Question ID : 9895808832
Chosen Option : 2

Q.2 Choose the option figure in which the problem figure is hidden/embedded.

Question figure



- Ans
- 1.
 - 2.
 - 3.
 - 4.

Question ID : 9895808839
Chosen Option : 3

Q.2 Four options have been given out of which three are alike in some manner, while one is different. Choose the odd one.

- 3
- Ans
- 1. 177
 - 2. 66
 - 3. 165
 - 4. 154

Question ID : 9895808834
Chosen Option : 3

Q.2 Which of the answer figure is exactly the mirror image of the given figure, when the mirror is placed on the line AB?

4

Question Figures:



- Ans
- 1.
 - 2.
 - 3.

✗ 4.



Question ID : 9895808840
Chosen Option : 2

Q.2
5 Four words have been given out of which three are alike in some manner, while one is different. Choose the odd one.

- Ans
- ✗ 1. Dictionary
 - ✗ 2. Article
 - ✓ 3. Calculator
 - ✗ 4. Encyclopedia

Question ID : 9895808820
Chosen Option : 4

Q.2
6 Which acid-base indicator can be prepared at home?

- Ans
- ✗ 1. Phenolphthalein
 - ✗ 2. Methyl orange
 - ✗ 3. Litmus
 - ✓ 4. Beetroot extract

Question ID : 9895808580
Chosen Option : 1

Q.2
7 What type of soil is the Khadar soil?

- Ans
- ✗ 1. Red soil
 - ✗ 2. Laterite soil
 - ✓ 3. Alluvial soil
 - ✗ 4. Black soil

Question ID : 9895808585
Chosen Option : 3

Q.2
8 Who painted the famous image of Bharat Mata in 1905?

- Ans
- ✓ 1. Abanindranath Tagore
 - ✗ 2. Natesa Sastri
 - ✗ 3. Ravi Varma
 - ✗ 4. Tarinicharan Chattopadhyay

Question ID : 9895808588
Chosen Option : 3

Q.2
9 Which device is used to draw magnetic field lines?

- Ans
- ✗ 1. Ammeter
 - ✗ 2. Electrometer
 - ✓ 3. Compass
 - ✗ 4. Voltmeter

Question ID : 9895808579
Chosen Option : 2

Q.3
0 The Kesar Saga is:

- Ans
- 1. Tamil epic
 - 2. Konkani epic
 - 3. Tibetan epic
 - 4. Bangla epic

Question ID : 9895808572
Chosen Option : 2

Q.3
1 Who was the first Indian woman engine driver with Northern Railways?

- Ans
- 1. Surekha Yadav
 - 2. Shail Mishra
 - 3. Laxmi Lakra
 - 4. Tulika Rani

Question ID : 9895808570
Chosen Option : 4

Q.3
2 Which crop is produced during the Zaid season?

- Ans
- 1. Bajra
 - 2. Wheat
 - 3. Maize
 - 4. Water melon

Question ID : 9895808586
Chosen Option : 1

Q.3
3 Which component of blood helps in the formation of blood clots?

- Ans
- 1. Veins
 - 2. Lymph
 - 3. Platelets
 - 4. Arteries

Question ID : 9895808582
Chosen Option : 3

Q.3
4 Which of the following words is NOT included in the preamble to the Constitution of India?

- Ans
- 1. religion
 - 2. secular
 - 3. Socialist
 - 4. equality

Question ID : 9895808577

Chosen Option : 1

Q.3
5 Which of the following are called amphibians of the plant kingdom?

- Ans
- 1. Thallophyta
 - 2. Gymnosperms
 - 3. Bryophyta
 - 4. Angiosperms

Question ID : 9895808583

Chosen Option : 4

Q.3
6 The spinning jenny was devised by:

- Ans
- 1. James Hargreaves
 - 2. Henry Luke
 - 3. T.E. Nicholson
 - 4. William Hungington

Question ID : 9895808589

Chosen Option : 4

Q.3
7 When was the Board of Control for Cricket in India (BCCI) formed?

- Ans
- 1. November 1929
 - 2. December 1931
 - 3. December 1928
 - 4. November 1930

Question ID : 9895808569

Chosen Option : 3

Q.3
8 Which of these is NOT an artificial ecosystem?

- Ans
- 1. Crop field
 - 2. Forest
 - 3. Garden
 - 4. Aquarium

Question ID : 9895808581

Chosen Option : 2

Q.3
9 "People have supreme right to make decisions on internal as well as external matters; no external power can dictate the government of India" this makes India _____

- Ans
- 1. Fraternal
 - 2. Socialist
 - 3. Secular
 - 4. Sovereign

Question ID : 9895808578

Chosen Option : 4

Q.4
0 Banks charge a higher interest rate on loans than what they offer on _____.

- Ans
- 1. Deposits
 - 2. Reserve
 - 3. Assets
 - 4. Collateral

Question ID : 9895808574
Chosen Option : 3

Q.4
1 India is a _____ type of federation and some states have more powers than others.

- Ans
- 1. Coming together
 - 2. Holding together
 - 3. Equal
 - 4. Hierarchical

Question ID : 9895808576
Chosen Option : 3

Q.4
2 Which monument was built by emperor Aurangzeb's son Azam Shah?

- Ans
- 1. Neela Gumbad
 - 2. Hawa Mahal
 - 3. Buland Darwaaza
 - 4. Bibi Ka Maqbara

Question ID : 9895808565
Chosen Option : 2

Q.4
3 Which of these is NOT an activity that is categorised as primary sector?

- Ans
- 1. Dairy
 - 2. Banking
 - 3. Forestry
 - 4. Agriculture

Question ID : 9895808575
Chosen Option : 2

Q.4
4 Which of the following were the first to start a trading station in Kerala?

- Ans
- 1. Portuguese traders
 - 2. English traders
 - 3. Dutch traders
 - 4. French traders

Question ID : 9895808587
Chosen Option : 1

Q.4
5 Who is known as the 'Flying Sikh of India'?

- Ans 1. Kulwinder Singh
 2. Milkha Singh
 3. Mahender Ahluwalia
 4. Gurinder Chadha

Question ID : 9895808568
Chosen Option : 2

Q.4
6 Cheraw is an old traditional dance form associated with:

- Ans 1. Tripura
 2. Nagaland
 3. Mizoram
 4. Manipur

Question ID : 9895808567
Chosen Option : 3

Q.4
7 Which soil is very useful for growing tea and coffee?

- Ans 1. Laterite soil
 2. Red soil
 3. Black soil
 4. Arid soil

Question ID : 9895808584
Chosen Option : 2

Q.4
8 Satyajit Ray was associated with:

- Ans 1. classical dance
 2. classical music
 3. commercial art
 4. film direction

Question ID : 9895808571
Chosen Option : 4

Q.4
9 Which is the most ancient style of Hindustani classical music?

- Ans 1. Qawali
 2. Dhrupad
 3. Sufiyana Kalam
 4. Ghazal

Question ID : 9895808566
Chosen Option : 3

Q.5
0 Prime Minister Narendra Modi launched Ayushman Bharat health insurance, world's largest government-funded healthcare scheme in _____ state in September 2018.

- Ans 1. Bihar

2. Chhattisgarh

3. Jharkhand

4. Uttarakhand

Question ID : 9895808573

Chosen Option : 4

Q.5
1 A and B can do a piece of work in 4 days and C and D in 3 days. In how many days will A, B, C and D do it together?

Ans

1. $\frac{12}{7}$ days

2. $\frac{7}{12}$ days

3. $\frac{2}{3}$ days

4. $\frac{3}{2}$ days

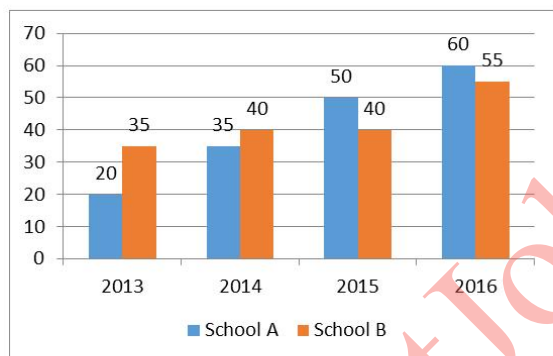
Question ID : 9895809009

Chosen Option : 3

Q.5 DIRECTIONS: Study the following graph and answer the given questions.

2

(Number of students admitted in two different school over the years:)



What was the difference between the total number of students admitted in the year 2015 and total number of students admitted in the year 2016?

Ans

1. 15

2. 25

3. 28

4. 22

Question ID : 9895809016

Chosen Option : 2

Q.5
3 If 5 girls can embroider a dress in 9 days, then the number of days taken by 3 girls to do it will be _____.

Ans

1. 15 days

2. 14 days

3. 10 days

4. 20 days

Question ID : 9895809008

Chosen Option : 4

Q.5
4 A Train of 225 m length passes a man sitting in a stationary train in 12.5 second. What is the speed of the Train?

- Ans
- 1. 12 m/s
 - 2. 24 m/s
 - 3. 18 m/s
 - 4. 14 m/s

Question ID : 9895809011
Chosen Option : 4

Q.5
5 Find the value of the following expression.

$$51 \div 3 \times 15 = ?$$

- Ans
- 1. 140
 - 2. 255
 - 3. 130
 - 4. 100

Question ID : 9895808995
Chosen Option : 3

Q.5
6 The average height of 8 persons decreases by 2.5 cm, when one person whose height is 170 cm is replaced by a new person. What is the height of the new person?

- Ans
- 1. 155 cm
 - 2. 150 cm
 - 3. 165 cm
 - 4. 160 cm

Question ID : 9895808997
Chosen Option : 3

Q.5
7 A girl takes 30 seconds to cover a distance of 300 meters by scooty. Her speed, in km/hr, is:

- Ans
- 1. 36 km/hr
 - 2. 24 km/hr
 - 3. 34 km/hr
 - 4. 26 km/hr

Question ID : 9895809010
Chosen Option : 1

Q.5
8 Bhavan invested two equal amounts at simple interest. He invested one amount at 15% p.a. and the other at 20% p.a. The total interest earned at the end of a year was ₹ 1400. The total amount invested (in ₹) was:

- Ans
- 1. 8000
 - 2. 5000
 - 3. 4000
 - 4. 10000

Question ID : 9895809006

Chosen Option : 3

Q.5 A wall of $12\text{ m} \times 8\text{ m}$ has a door of $3\text{ m} \times 1.5\text{ m}$ and two windows each of $1.5\text{ m} \times 1.5\text{ m}$. Find the area of wall that can be paint.

- Ans
- 1. 80 sq. cm
 - 2. 87 sq. cm
 - 3. 96 sq. cm
 - 4. 65 sq. cm

Question ID : 9895809012

Chosen Option : 4

Q.6 A person buys an article at $\frac{3}{4}$ of its value and sells it for 30% more than its value. What is his gain%?

- Ans
- 1. $73\frac{1}{3}\%$
 - 2. 75%
 - 3. 50%
 - 4. $65\frac{1}{3}\%$

Question ID : 9895809001

Chosen Option : 2

Q.6 Two numbers are in the ratio 7 : 9. On diminishing each of them by 20, the new ratio becomes 3 : 5. The difference between the original numbers is:

- Ans
- 1. 15
 - 2. 12
 - 3. 10
 - 4. 14

Question ID : 9895809005

Chosen Option : 2

Q.6 The compound interest on a certain sum for 2 years at 3% per annum is ₹ 101.50. On the same principal, what will be the simple interest at same rate in same time?

- Ans
- 1. ₹ 100
 - 2. ₹ 90
 - 3. ₹ 95.5
 - 4. ₹ 98.21

Question ID : 9895809007

Chosen Option : 3

Q.6 A shopkeeper allows an extra discount of 12% on a radio after giving an initial discount of 20%. If the final selling price of the radio is ₹ 704 then what is the marked price?

- Ans
- 1. ₹ 980
 - 2. ₹ 1000

3. ₹ 1200

4. ₹ 800

Question ID : 9895808998

Chosen Option : 3

Q.6
4 The average age of 6 men, whose ages are 42, 48, 65, 35, 55, 49 years is:

Ans 1. 49

2. 48

3. 47

4. 46

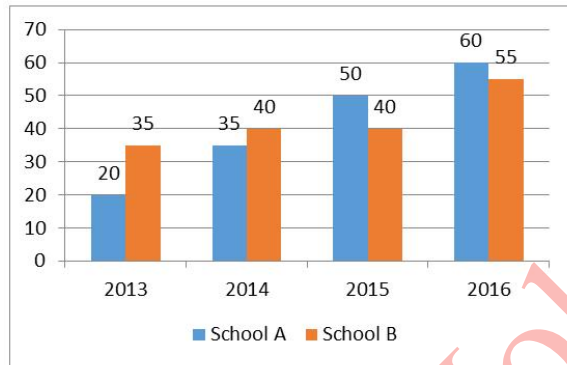
Question ID : 9895808996

Chosen Option : 3

Q.6 DIRECTIONS: Study the following graph and answer the given questions.

5

(Number of students admitted in two different School over the years:)



What was the ratio between the number of students admitted in school A in the year 2013 and the total number of students admitted in both the school together in the year 2016?

Ans 1. 4 : 19

2. 4 : 23

3. 21 : 5

4. 3 : 17

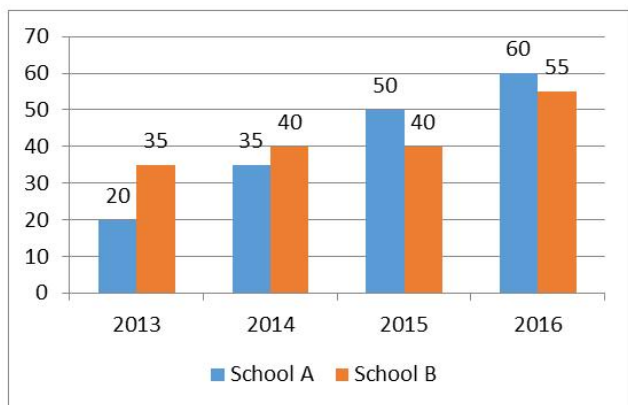
Question ID : 9895809017

Chosen Option : 2

Q.6
6

DIRECTIONS: Study the following graph and answer the given questions.

(Number of students admitted in two different school over the years:)



In which year the total number of students admitted in both the school together was the second lowest?

- Ans
- 1. 2013
 - 2. 2016
 - 3. 2014
 - 4. 2015

Question ID : 9895809015
Chosen Option : 3

Q.6 The mean of 22 observations is 35. It was later discovered that 16 and 24 are misread as 31 and 42. What is the correct mean?
7

- Ans
- 1. 33.5
 - 2. 31.5
 - 3. 32
 - 4. 34

Question ID : 9895808999
Chosen Option : 3

Q.6 If ?% of $\frac{2}{3} = \frac{1}{2}$ then the value of '?' is:
8

- Ans
- 1. 57
 - 2. 75
 - 3. 0.75
 - 4. 7.5

Question ID : 9895809000
Chosen Option : 3

Q.6 A rectangular farm has to be fenced on one long side, one short side and one diagonal. If the cost of fencing is ₹ 10 per meter, the area of the farm is 4800 m² and the short side is 60 m long, the cost of doing the job will be:
9

- Ans
- 1. ₹ 2100
 - 2. ₹ 1800
 - 3. ₹ 2400
 - 4. ₹ 3600

Question ID : 9895809013
Chosen Option : 3

Q.7₀ The perimeter of a right triangle is 30 cm and its hypotenuse is 13 cm. The area of the triangle is:

- Ans
- 1. 30 sq. cm
 - 2. 26 sq. cm
 - 3. 60 sq. cm
 - 4. 45 sq. cm

Question ID : 9895809014
Chosen Option : 3

Q.7₁ The ratio of A to B is 4 : 5 and that of B to C is 2 : 3. If A is equal to 240 then C is equal to:

- Ans
- 1. 450
 - 2. 420
 - 3. 300
 - 4. 150

Question ID : 9895809003
Chosen Option : 3

Q.7₂ Mohit sells a Almirah to Rohit at a profit of 11% and Rohit sells it to Neha at a profit of 20%. If Neha pays ₹ 6,200 for it, then the cost price of almirah for Mohit is:

- Ans
- 1. ₹ 4654.65
 - 2. ₹ 4244.65
 - 3. ₹ 4634.65
 - 4. ₹ 4184.65

Question ID : 9895809002
Chosen Option : 3

Q.7₃ The sum of three numbers is 65. If the ratio of the first to the second be 3 : 4 and that of the second to the third 2 : 3, then the second number is:

- Ans
- 1. 15
 - 2. 20
 - 3. 30
 - 4. 25

Question ID : 9895809004
Chosen Option : 3

Q.7₄ The value of the following expression.

$$(47 \times 588) \div (28 \times 120) = ?$$

- Ans
- 1. 6.284
 - 2. 8.285

3. 7.625

4. 8.225

Question ID : 9895808994
Chosen Option : 3

Q.7
5 The greatest number which divides 928, 1247 and 1653 exactly, is:

Ans 1. 23

2. 19

3. 29

4. 33

Question ID : 9895808993
Chosen Option : 3

Section : English Language

Q.1 Select the meaning of the given idiom.

To strain every nerve

Ans 1. To put maximum effort

2. To spoil relationship

3. To be unwell

4. To get away with

Question ID : 9895809139
Chosen Option : 3

Q.2 Select the word which means the same as the group of words given.

One who is indifferent to pleasure or pain

Ans 1. Stoic

2. Heroic

3. Garrulous

4. Stubborn

Question ID : 9895809141
Chosen Option : 3

Q.3 Identify the segment in the sentence which contains the grammatical error from the given options.

In fact, what we common termed as housework actually involves many different tasks.

Ans 1. involves

2. common termed

3. different tasks

4. In fact

Question ID : 9895809121

Chosen Option : 3

Q.4 Select the wrongly spelt word.

- Ans
- 1. Embarass
 - 2. Conscience
 - 3. Playwright
 - 4. Rhythm

Question ID : 9895809143

Chosen Option : 3

Q.5 Select the synonym of the given word.

PASSION

- Ans
- 1. Passivity
 - 2. Indifference
 - 3. Desire
 - 4. Hatred

Question ID : 9895809135

Chosen Option : 3

Q.6 Select the most appropriate word to fill in the blank.

In the 1980s, many women _____ the country spoke out against dowry deaths.

- Ans
- 1. through
 - 2. above
 - 3. over
 - 4. across

Question ID : 9895809127

Chosen Option : 1

Q.7 Select the word which means the same as the group of words given.

Happening or being done at exactly the same time

- Ans
- 1. Superfluous
 - 2. Immediate
 - 3. Obsolete
 - 4. Simultaneous

Question ID : 9895809140

Chosen Option : 3

Q.8 Select the most appropriate word to fill in the blank.

The Indian cricket team was in a _____ mood after winning the series.

Ans

- 1. jubilant
- 2. serene
- 3. anxious
- 4. glorious

Question ID : 9895809145
Chosen Option : 3

Q.9 Select the antonym of the given word.

ALIEN

- Ans
- 1. Unfamiliar
 - 2. Foreign
 - 3. Overseas
 - 4. Native

Question ID : 9895809136
Chosen Option : 3

Q.1
0 Select the meaning of the given idiom.

Fight shy of

- Ans
- 1. To be frightened
 - 2. To avoid encountering
 - 3. To be in an angry state
 - 4. To quarrel bitterly

Question ID : 9895809138
Chosen Option : 3

Comprehension:

In the following passage some words have been deleted. Fill in the blanks with the help of the alternatives given. Select the most appropriate option for each number.

Media is the plural of the word 'medium'. (1) _____ describes the various ways (2) _____ which we communicate in society. Because media refers (3) _____ all means of communication, everything (4) _____ from a phone call to the evening news on TV can be (5) _____ media.

SubQuestion No : 11

Q.1
1 Select the most appropriate option that will fill in the blank number 1.

- Ans
- 1. It
 - 2. These
 - 3. They

4. Its

Question ID : 9895809129
Chosen Option : 3

Comprehension:

In the following passage some words have been deleted. Fill in the blanks with the help of the alternatives given. Select the most appropriate option for each number.

Media is the plural of the word 'medium'. (1) _____ describes the various ways (2) _____ which we communicate in society. Because media refers (3) _____ all means of communication, everything (4) _____ from a phone call to the evening news on TV can be (5) _____ media.

SubQuestion No : 12

Q.1
2 Select the most appropriate option that will fill in the blank number 2.

- Ans
- 1. from
 - 2. with
 - 3. through
 - 4. for

Question ID : 9895809130
Chosen Option : 3

Comprehension:

In the following passage some words have been deleted. Fill in the blanks with the help of the alternatives given. Select the most appropriate option for each number.

Media is the plural of the word 'medium'. (1) _____ describes the various ways (2) _____ which we communicate in society. Because media refers (3) _____ all means of communication, everything (4) _____ from a phone call to the evening news on TV can be (5) _____ media.

SubQuestion No : 13

Q.1
3 Select the most appropriate option that will fill in the blank number 3.

- Ans
- 1. for
 - 2. about
 - 3. to
 - 4. in

Question ID : 9895809131
Chosen Option : 3

Comprehension:

In the following passage some words have been deleted. Fill in the blanks with the help of the alternatives given. Select the most appropriate option for each number.

Media is the plural of the word 'medium'. (1) _____ describes the various ways (2) _____ which we communicate in society. Because media refers (3) _____ all means of communication, everything (4) _____ from a phone call to the evening news on TV can be (5) _____ media.

SubQuestion No : 14

Q.1
4 Select the most appropriate option that will fill in the blank number 4.

- Ans
- 1. ranged
 - 2. ranges
 - 3. ranging
 - 4. is ranging

Question ID : 9895809132
Chosen Option : 3

Comprehension:

In the following passage some words have been deleted. Fill in the blanks with the help of the alternatives given. Select the most appropriate option for each number.

Media is the plural of the word 'medium'. (1) _____ describes the various ways (2) _____ which we communicate in society. Because media refers (3) _____ all means of communication, everything (4) _____ from a phone call to the evening news on TV can be (5) _____ media.

SubQuestion No : 15

Q.1
5 Select the most appropriate option that will fill in the blank number 5.

- Ans
- 1. called
 - 2. opted
 - 3. chosen
 - 4. certified

Question ID : 9895809133
Chosen Option : 3

Q.1
6 Select the most appropriate option to substitute the underlined segment in the given sentence. If there is no need to substitute it, select No substitution required.

Many families are so poor to bear the cost of educating their children.

- Ans
- 1. No substitution required
 - 2. too poor to

3. too much poor to

4. more poor for

Question ID : 9895809125
Chosen Option : 3

Q.1 Select the most appropriate option to substitute the underlined segment in the given sentence. If there is no need to substitute it, select No substitution required.

Many people believe that women make better nurses because they are patient and gentle.

- Ans
- 1. because they have been
 - 2. because they were
 - 3. No substitution required
 - 4. as they would

Question ID : 9895809123
Chosen Option : 2

Q.1 Select the most appropriate option to substitute the underlined segment in the given sentence. If there is no need to substitute it, select No substitution required.

In the nineteenth century, many new ideas about education and learning were being emerged.

- Ans
- 1. is emerging
 - 2. emerged
 - 3. No substitution required
 - 4. was emerging

Question ID : 9895809124
Chosen Option : 2

Q.1 Select the wrongly spelt word.

- Ans
- 1. Medieval
 - 2. Maintainance
 - 3. Manipulate
 - 4. Marriage

Question ID : 9895809142
Chosen Option : 3

Q.2 Select the most appropriate word to fill in the blank.

The unfortunate boy was _____ by the racing car.

- Ans
- 1. knocked about
 - 2. knocked at
 - 3. knocked down
 - 4. knocked back

Question ID : 9895809144
Chosen Option : 3

Q.2
1 Select the synonym of the given word.

RELEVANT

- Ans
- 1. Natural
 - 2. Realistic
 - 3. Unrelated
 - 4. Applicable

Question ID : 9895809134
Chosen Option : 2

Q.2
2 Select the most appropriate word to fill in the blank.

Different strategies have been used _____ awareness about education.

- Ans
- 1. spread
 - 2. to spread
 - 3. spreading
 - 4. to spreading

Question ID : 9895809126
Chosen Option : 2

Q.2
3 Identify the segment in the sentence which contains the grammatical error from the given options.

The government has set up Anganwadis or child-care centers in several village in the country.

- Ans
- 1. set up
 - 2. several village
 - 3. in the country.
 - 4. The government

Question ID : 9895809122
Chosen Option : 1

Q.2
4 Select the antonym of the given word.

APPARENT

- Ans
- 1. Hidden
 - 2. Likely
 - 3. Obvious
 - 4. Appealing

Question ID : 9895809137
Chosen Option : 3

Q.2
5 Identify the segment in the sentence which contains the grammatical error from the given options.

The political party that have the majority is called the ruling party.

Ans

- 1. ruling party
- 2. that have
- 3. The political
- 4. the majority

Question ID : 9895809120
Chosen Option : 2

Section : Hindi Language

Q.1 'गूँगे का गुड़' अर्थ के लिए सही मुहावरे का चयन करें।

- Ans
- 1. असंभव कार्य
 - 2. दुर्लभ वस्तु
 - 3. कीमती वस्तु
 - 4. अवर्णनीय अनुभव

Question ID : 9895807093
Chosen Option : --

Q.2 रिक्त स्थान को भरने के लिए उपयुक्त शब्द का चयन करें।

मनोज, नीरज और कविता खेल _____ हैं।

- Ans
- 1. रहीं
 - 2. रहे
 - 3. रही
 - 4. रहती

Question ID : 9895807079
Chosen Option : --

Q.3 सही वर्तनी वाले शब्द का चयन करें।

- Ans
- 1. आर्शिवाद
 - 2. बिमारी
 - 3. परिक्षा
 - 4. पारलौकिक

Question ID : 9895807097
Chosen Option : --

Q.4 'आत्मजा' का पर्यायवाची शब्द है -

- Ans
- 1. भार्या
 - 2. तनया

3. सुत

4. अंबा

Question ID : 9895807092
Chosen Option : --

Q.5 दिए गए वाक्य का वह भाग ज्ञात करें जिसमें कोई त्रुटि है।

हम अनेकों छोटे-बड़े वर्गों में बँटे हुए हैं।

Ans 1. हम अनेकों

2. छोटे-बड़े

3. वर्गों में

4. बँटे हुए हैं।

Question ID : 9895807073
Chosen Option : --

Q.6 दिए गए वाक्य में रेखांकित खंड को प्रतिस्थापित करने के लिए उपयुक्त विकल्प का चयन करें।

उसकी हरकतें गाँव वालों जैसी हैं।

Ans 1. गँवई

2. ग्रामीणों

3. गँवारू

4. अनपढ़ों

Question ID : 9895807076
Chosen Option : --

Q.7 'उपकार' का विलोम शब्द है-

Ans 1. परोपकार

2. मदद

3. अपकार

4. सहायता

Question ID : 9895807089
Chosen Option : --

Q.8 रिक्त स्थान को भरने के लिए उपयुक्त शब्द का चयन करें।

यह एक बहुत ही _____ समस्या है।

Ans 1. चिंतित

2. अच्छी

3. निश्चिन्त

4. गंभीर

Question ID : 9895807080
Chosen Option : --

Q.9 रिक्त स्थान को भरने के लिए उपयुक्त शब्द का चयन करें।

बच्चे की आँखों से आँसू बहने _____।

- Ans
- 1. हुए
 - 2. लगा
 - 3. लगे
 - 4. लगी

Question ID : 9895807081
Chosen Option : --

Q.1 'अधुनातन' का विलोम शब्द चयन करें।

- Ans
- 1. पुरातन
 - 2. आधुनिक
 - 3. नया
 - 4. अनावरण

Question ID : 9895807090
Chosen Option : --

Comprehension:

निम्नलिखित गद्यांश के रिक्त स्थानों की पूर्ति गद्यांश के नीचे दिए गए प्रश्नों के अनुसार कीजिए-

मनुष्य शारीरिक कष्ट से ही पीछे _____ (1) वाला प्राणी नहीं है। मानसिक क्लेश की संभावना से भी कर्मों की ओर प्रवृत्त होने का _____ (2) उसे नहीं होता। जिन बातों से समाज के बीच उपहास, निन्दा, अपमान इत्यादि का _____ (3) रहता है उन्हें अच्छा समझते हुए भी बहुत से लोग उनसे दूर रहते हैं। _____ (4) देखते हुए भी बहुत से लोग प्रथाओं का पालन इसलिए करते हैं कि नहीं करने से वे बुरे कहे जायेंगे। लोगों में उनका _____ (5) न रह जायेगा।

SubQuestion No : 11

Q.1 गद्यांश में संकेतित रिक्त स्थान (1) के लिए उपयुक्त शब्द होगा।

- Ans
- 1. हटने
 - 2. करने
 - 3. मिटने
 - 4. लगने

Question ID : 9895807084

Comprehension:

निम्नलिखित गद्यांश के रिक्त स्थानों की पूर्ति गद्यांश के नीचे दिए गए प्रश्नों के अनुसार कीजिए-

मनुष्य शारीरिक कष्ट से ही पीछे _____ (1) वाला प्राणी नहीं है। मानसिक क्लेश की संभावना से भी कर्मों की ओर प्रवृत्त होने का _____ (2) उसे नहीं होता। जिन बातों से समाज के बीच उपहास, निन्दा, अपमान इत्यादि का _____ (3) रहता है उन्हें अच्छा समझते हुए भी बहुत से लोग उनसे दूर रहते हैं। _____ (4) देखते हुए भी बहुत से लोग प्रथाओं का पालन इसलिए करते हैं कि नहीं करने से वे बुरे कहे जायेंगे। लोगों में उनका _____ (5) न रह जायेगा।

SubQuestion No : 12

Q.1
2 गद्यांश में संकेतित रिक्त स्थान (2) के लिए उपयुक्त शब्द होगा।

- Ans 1. इच्छा
 2. प्रेरणा
 3. लगन
 4. साहस

Question ID : 9895807085

Chosen Option : --

Comprehension:

निम्नलिखित गद्यांश के रिक्त स्थानों की पूर्ति गद्यांश के नीचे दिए गए प्रश्नों के अनुसार कीजिए-

मनुष्य शारीरिक कष्ट से ही पीछे _____ (1) वाला प्राणी नहीं है। मानसिक क्लेश की संभावना से भी कर्मों की ओर प्रवृत्त होने का _____ (2) उसे नहीं होता। जिन बातों से समाज के बीच उपहास, निन्दा, अपमान इत्यादि का _____ (3) रहता है उन्हें अच्छा समझते हुए भी बहुत से लोग उनसे दूर रहते हैं। _____ (4) देखते हुए भी बहुत से लोग प्रथाओं का पालन इसलिए करते हैं कि नहीं करने से वे बुरे कहे जायेंगे। लोगों में उनका _____ (5) न रह जायेगा।

SubQuestion No : 13

Q.1
3 गद्यांश में संकेतित रिक्त स्थान (3) के लिए उपयुक्त शब्द होगा।

- Ans 1. व्यथा
 2. घृणा
 3. भय

✓ 4. क्रोध

Question ID : 9895807086
Chosen Option : --

Comprehension:

निम्नलिखित गद्यांश के रिक्त स्थानों की पूर्ति गद्यांश के नीचे दिए गए प्रश्नों के अनुसार कीजिए-

मनुष्य शारीरिक कष्ट से ही पीछे _____ (1) वाला प्राणी नहीं है। मानसिक क्लेश की संभावना से भी कर्मों की ओर प्रवृत्त होने का _____ (2) उसे नहीं होता। जिन बातों से समाज के बीच उपहास, निन्दा, अपमान इत्यादि का _____ (3) रहता है उन्हें अच्छा समझते हुए भी बहुत से लोग उनसे दूर रहते हैं। _____ (4) देखते हुए भी बहुत से लोग प्रथाओं का पालन इसलिए करते हैं कि नहीं करने से वे बुरे कहे जायेंगे। लोगों में उनका _____ (5) न रह जायेगा।

SubQuestion No : 14

Q.1
4 गद्यांश में संकेतित रिक्त स्थान (4) के लिए उपयुक्त शब्द होगा।

- Ans ✓ 1. लाभ
✗ 2. स्वार्थ
✗ 3. हानि
✗ 4. यश

Question ID : 9895807087
Chosen Option : --

Comprehension:

निम्नलिखित गद्यांश के रिक्त स्थानों की पूर्ति गद्यांश के नीचे दिए गए प्रश्नों के अनुसार कीजिए-

मनुष्य शारीरिक कष्ट से ही पीछे _____ (1) वाला प्राणी नहीं है। मानसिक क्लेश की संभावना से भी कर्मों की ओर प्रवृत्त होने का _____ (2) उसे नहीं होता। जिन बातों से समाज के बीच उपहास, निन्दा, अपमान इत्यादि का _____ (3) रहता है उन्हें अच्छा समझते हुए भी बहुत से लोग उनसे दूर रहते हैं। _____ (4) देखते हुए भी बहुत से लोग प्रथाओं का पालन इसलिए करते हैं कि नहीं करने से वे बुरे कहे जायेंगे। लोगों में उनका _____ (5) न रह जायेगा।

SubQuestion No : 15

Q.1
5 गद्यांश में संकेतित रिक्त स्थान (5) के लिए उपयुक्त शब्द होगा।

Ans

- 1. निरादर
- 2. अपमान
- 3. संभव
- 4. सम्मान

Question ID : 9895807088
Chosen Option : --

Q.1 'बहुत अधिक अभावग्रस्त होना' अर्थ के लिए सही मुहावरे का चयन करें।

- Ans
- 1. आटा गीला होना
 - 2. मुँह उतरना
 - 3. दाने-दाने को तरसना
 - 4. पेट में चूहे कूदना

Question ID : 9895807094
Chosen Option : --

Q.1 'वातायन' का पर्यायवाची है-

- Ans
- 1. द्वार
 - 2. ताख
 - 3. गवाक्ष
 - 4. छत

Question ID : 9895807091
Chosen Option : --

Q.1 दिए गए वाक्य में रेखांकित खंड को प्रतिस्थापित करने के लिए उपयुक्त विकल्प का चयन करें।

मृत्यु जीवन का शाश्वत् सत्य है।

- Ans
- 1. एकमात्र
 - 2. अंतिम
 - 3. दुःखद
 - 4. चिरन्तन

Question ID : 9895807078
Chosen Option : --

Q.1 सही वर्तनी वाले शब्द का चयन करें।

- Ans
- 1. शिताब्दि
 - 2. शैताब्दी
 - 3. शताब्दी
 - 4. शताब्दि

Question ID : 9895807098
Chosen Option : --

Q.2
0 दिए गए वाक्य का वह भाग ज्ञात करें जिसमें कोई त्रुटि है।

पाखंड व दिखावा हमारे जीवन का अभिन्न अंग बन गयी है।

- Ans
- 1. अभिन्न अंग
 - 2. बन गयी है।
 - 3. हमारे जीवन का
 - 4. पाखंड व दिखावा

Question ID : 9895807074
Chosen Option : --

Q.2
1 रिक्त स्थान को भरने के लिए उपयुक्त शब्द का चयन करें।

_____ कपड़ा सिलना नहीं आता।

- Ans
- 1. उससे
 - 2. उसने
 - 3. उसे
 - 4. वे

Question ID : 9895807082
Chosen Option : --

Q.2
2 'सब जगह' के लिए एक शब्द है-

- Ans
- 1. सर्वेश
 - 2. सर्वत्र
 - 3. समदर्शी
 - 4. वायु

Question ID : 9895807095
Chosen Option : --

Q.2
3 दिए गए वाक्य का वह भाग ज्ञात करें जिसमें कोई त्रुटि है।

शिक्षित वर्ग की बेकारी श्रम का अवज्ञा के परिणाम का सबसे ज्वलंत उदाहरण है।

- Ans
- 1. शिक्षित वर्ग की बेकारी
 - 2. श्रम का अवज्ञा के परिणाम का
 - 3. उदाहरण है।
 - 4. सबसे ज्वलंत

Question ID : 9895807075
Chosen Option : --

Q.2
4 दिए गए वाक्य में रेखांकित खंड को प्रतिस्थापित करने के लिए उपयुक्त विकल्प का चयन करें।

'रामचरितमानस' की तुलना नहीं की जा सकती है।

- Ans
- 1. तुलनीय
 - 2. अचिंत्य
 - 3. अपकर्ष
 - 4. अतुलनीय

Question ID : 9895807077
Chosen Option : --

Q.2
5 'पंद्रह दिन में एक बार होने वाला' के लिए एक शब्द है-

- Ans
- 1. मासिक
 - 2. पाक्षिक
 - 3. वार्षिक
 - 4. अर्द्धवार्षिक

Question ID : 9895807096
Chosen Option : --

GovtJobsAlert.In