

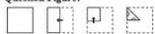
Constable (GD) in CAPFs, NIA, SSF and Rifleman (GD) in Assam Rifles Examination, 2018

Roll No. :	www.GovtJobsAlert.In
Registration No.	
Name :	
Exam Venue :	iON Digital Zone iDZ Anantapur
Exam Time :	9:00 AM - 10:30 AM
Exam Date :	09/03/2019

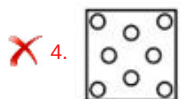
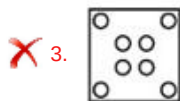
Section : General Section

Q.1 A piece of paper is folded and punched as shown below in the question figures. From the given answer figures, indicate how it will appear when opened.

Question Figure:



Ans



Question ID : 9895809271
Chosen Option : 2

Q.2 Select the correct option that will fill in the blank and complete the series.

FAV, HET, KIQ, _____

- Ans
- 1. RHS
 - 2. OMM
 - 3. DFB
 - 4. ONM

Question ID : 9895809248
Chosen Option : 2

Q.3 Choose the option figure in which the problem figure is hidden/embedded.

Question figure:



Ans



Question ID : 9895809269
Chosen Option : 3

Q.4 Select the correct option that will fill in the blank and complete the series.

173, 182, 198, 223, 259, _____

- Ans
- 1. 301
 - 2. 308
 - 3. 315
 - 4. 282

Question ID : 9895809261
Chosen Option : 2

Q.5 The statements below are followed by two conclusions labeled I and II. Assuming that the information in the statements is true, even if it appears to be at variance with generally established facts, decide which conclusion(s) logically and definitely follow(s) from the information given in the statements.

Statements:

All tents are houses.

All houses are bricks.

All bricks are stones.

Conclusions:

I. All bricks are houses.

II. Some stones are tents.

- Ans
- 1. Only conclusion II follows
 - 2. Only conclusion I follows
 - 3. Neither I nor II follows
 - 4. Either I or II follows

Question ID : 9895809260
Chosen Option : 3

Q.6 The heights of A and B are equal. C is shorter than A; D is shorter than E, but taller than B. Who is the tallest of all?

Ans

- 1. B
- 2. C
- 3. D
- 4. E

Question ID : 9895809258
Chosen Option : 4

Q.7 Find the missing number in the given analogy.

$$16 : 240 :: ? : 182$$

- Ans
- 1. 18
 - 2. 14
 - 3. 13
 - 4. 12

Question ID : 9895809263
Chosen Option : 2

Q.8 Select the option that is related to the third term in the same way as the second term is related to the first term.

BotH : NotT :: FotL : ?

- Ans
- 1. RotD
 - 2. RotT
 - 3. RotX
 - 4. AotH

Question ID : 9895809253
Chosen Option : 3

Q.9 If '+' means '÷', '-' means '×', '×' means '+', and '÷' means '-', then:

$$64 - 81 + 9 \times 4 = ?$$

- Ans
- 1. 570
 - 2. 630
 - 3. 580
 - 4. 510

Question ID : 9895809266
Chosen Option : 3

Q.10 Select the correct option that will fill in the blank and complete the series.

471, 479, 452, 516, 391, _____

- Ans
- 1. 508
 - 2. 627
 - 3. 616
 - 4. 607

Question ID : 9895809262
Chosen Option : 2

Q.1 Four words have been given out of which three are alike in some manner, while one is different. Choose the odd one.

- 1
 Ans 1. Proteins
 2. Drink
 3. Carbohydrates
 4. Fats

Question ID : 9895809250
 Chosen Option : 2

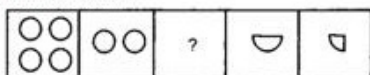
Q.1 Four letter clusters have been given, out of which three are alike in some manner, while one is different. Choose the odd one.

- 2
 Ans 1. KAR
 2. UFA
 3. IVO
 4. ACE

Question ID : 9895809249
 Chosen Option : 4

Q.1 Choose the option which completes the given figure series.

PROBLEM FIGURES



- 3
 Ans 1.
 2.
 3.
 4.

Question ID : 9895809267
 Chosen Option : 2

Q.1 The statements below are followed by two conclusions labeled I and II. Assuming that the information in the statements is true, even if it appears to be at variance with generally established facts, decide which conclusion(s) logically and definitely follow(s) from the information given in the statements.

Statements:

1. All keys are locks.
2. All locks are screws.
3. All doors are keys.

Conclusions:

- I. All screws are keys.
- II. Some locks are keys.

- 4
 Ans 1. Only conclusion II follows
 2. Either conclusion I or II follows

3. Neither conclusion I nor II follows

4. Only conclusion I follows

Question ID : 9895809259

Chosen Option : 1

Q.1
5 If IECGF is written as 95376 and CAHJ as 31810, how will QGMVJ be written?

Ans 1. 177132209

2. 177132208

3. 177122910

4. 177132210

Question ID : 9895809255

Chosen Option : 4

Q.1
6 K, L, M, N, O, P and Q are sitting along a circular table facing the centre.

(i) L sits between N and O.

(ii) K is third to the left of O.

(iii) Q is second to the left of M, who is to the immediate left of P.

Which is the correct position of L with respect of Q?

Ans 1. Second to the right

2. First to the left

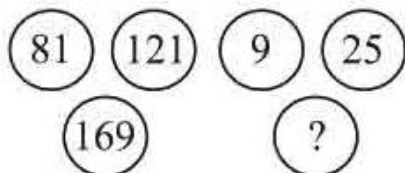
3. First to the right

4. Second to the left

Question ID : 9895809256

Chosen Option : 4

Q.1
7 Find the missing number from the below options.



Ans 1. 49

2. 81

3. 16

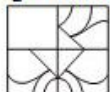
4. 36

Question ID : 9895809265

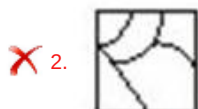
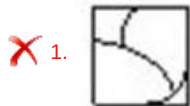
Chosen Option : 1

Q.1
8 Which of the following answer figure will complete the given figure?

Question figure:



Ans



Question ID : 9895809268
Chosen Option : 3

Q.1
9 Four options have been given out of which three are alike in some manner, while one is different. Choose the odd one.

- Ans
- ✗ 1. 446
 - ✗ 2. 824
 - ✓ 3. 259
 - ✗ 4. 617

Question ID : 9895809264
Chosen Option : 3

Q.2
0 A, B, C, D, E and F are sitting along the circle facing the centre.

- (i) B is an immediate neighbour of D.
- (ii) C is an immediate neighbour of A but is not an immediate neighbour of F.
- (iii) A is to the immediate left of B.

What is the position of E?

- Ans
- ✗ 1. To the immediate left of B
 - ✗ 2. Between A and B
 - ✗ 3. To the immediate right of C
 - ✓ 4. Second to the right of D

Question ID : 9895809257
Chosen Option : 3

Q.2
1 Select the related word pair from the given alternatives.





Glue : Paper :: _____ : _____

- Ans
- 1. Notebook : Colour
 - 2. Test : Notice board
 - 3. Cement : brick
 - 4. Paper : Wrapper

Question ID : 9895809252
Chosen Option : 3

Q.2
2 Select the Venn diagram that best illustrates the relationship between the three given classes.

Pens, Pencils , Books

- Ans
- 1. 
 - 2. 
 - 3. 
 - 4. 

Question ID : 9895809272
Chosen Option : 2

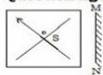
Q.2
3 In a certain code, SEVEN is coded as TFWFO, then how is NINE coded in the same way?



- Ans
- 1. OJOF
 - 2. OFJO
 - 3. OJFO
 - 4. OOJF

Question ID : 9895809254
Chosen Option : 1

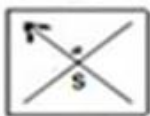
Q.2
4 Choose the option that most closely resembles the mirror image of the given figure when mirror is placed at right side.

Question figure:



- Ans
- 1. 
 - 2. 

✗ 3.



✓ 4.



Question ID : 9895809270
Chosen Option : 1

Q.2 Select the related word pair from the given alternatives.

5

Pond : Lake :: _____ : _____

- Ans
- ✓ 1. Hill : Mountain
 - ✗ 2. Church : Religion
 - ✗ 3. Stethoscope : Machine
 - ✗ 4. Gold : Ornament

Question ID : 9895809251
Chosen Option : 1

Q.2 Which of the following rivers does NOT flow into the Arabian sea?

6

- Ans
- ✗ 1. Narmada
 - ✗ 2. Sabarmati
 - ✓ 3. Tungabhadra
 - ✗ 4. Mandovi

Question ID : 9895809437
Chosen Option : 3

Q.2 Which bacteria is responsible for the formation of curd?

7

- Ans
- ✗ 1. Bacillus radiccicola
 - ✗ 2. Lactobacillus aureus
 - ✗ 3. Micrococcus
 - ✓ 4. Lactobacillus acidophillus

Question ID : 9895809431
Chosen Option : 4

Q.2 In the 2018 Union budget of India, what was the proportion of MSP (minimum support price) of agriculture products?

8

- Ans
- ✓ 1. 1.7 times the market rate
 - ✗ 2. 1.9 times the market rate
 - ✗ 3. 2.0 times the market rate
 - ✗ 4. 1.5 times the market rate

Question ID : 9895809445
Chosen Option : 4

Q.2

9 Keisabadi is a form of folk dance of _____ state in which only men can take part.

- Ans
- 1. Rajasthan
 - 2. Odisha
 - 3. Telangana
 - 4. Sikkim

Question ID : 9895809425
Chosen Option : 3

Q.3 The _____ and ideals of the Indian Constitution are reflected in the Preamble to the Constitution of India.

- Ans
- 1. Philosophy
 - 2. Laws
 - 3. Policies
 - 4. Acts

Question ID : 9895809440
Chosen Option : 2

Q.3 The share of the tertiary sector to the GDP has increased but the contribution of which sector to employment is the highest at present?

- Ans
- 1. Secondary
 - 2. Industry
 - 3. Information technology
 - 4. Primary

Question ID : 9895809447
Chosen Option : 4

Q.3 What is mandatory for any entity entering into a financial transaction of ₹ 2.5 lakh or more?

- Ans
- 1. PAN card
 - 2. Licence
 - 3. Aadhaar card
 - 4. Passport

Question ID : 9895809446
Chosen Option : 4

Q.3 Who has been renominated as the Chairman of the Lok Sabha Ethics Committee?

- Ans
- 1. LK Advani
 - 2. Ramesh Pokhriyal
 - 3. Sumitra Mahajan
 - 4. Chandrakant Khaire

Question ID : 9895809428
Chosen Option : 4

Q.3 Who won the Badminton World Federation World Tour Finals Tournament in December 2018?

Ans

- 1. Mahesh Bhupati
- 2. PV Sindhu
- 3. Nozomi Okuhara
- 4. Saina Nehwal

Question ID : 9895809430
Chosen Option : 2

Q.3
5 The deficiency of vitamin-A results in:

- Ans
- 1. rickets
 - 2. scurvy
 - 3. night blindness
 - 4. hair fall

Question ID : 9895809433
Chosen Option : 3

Q.3
6 The Lohri festival is mainly related to which state?

- Ans
- 1. Maharastra
 - 2. Uttar Pradesh
 - 3. Punjab
 - 4. Goa

Question ID : 9895809424
Chosen Option : 3

Q.3
7 Which of the following European countries is called 'the land of a thousand lakes'?

- Ans
- 1. Sweden
 - 2. Finland
 - 3. Norway
 - 4. Estonia

Question ID : 9895809423
Chosen Option : 2

Q.3
8 Who started the Bhoodan Movement or The Land Gift Movement in 1951?

- Ans
- 1. Indira Gandhi
 - 2. Vinobha Bhave
 - 3. Acharya Narendra Dev
 - 4. Mahatma Gandhi

Question ID : 9895809436
Chosen Option : 2

Q.3
9 The city of Dhillika (Delhi) was founded by the:

- Ans
- 1. Pariharas
 - 2. Chauhans

- 3. Pawars
- 4. Tomars

Question ID : 9895809443
Chosen Option : 2

Q.4
0 _____ is the most abundant element in the earth's crust.

- Ans
- 1. Carbon dioxide
 - 2. Hydrogen
 - 3. Silicon
 - 4. Oxygen

Question ID : 9895809434
Chosen Option : 1

Q.4
1 Which of the following rulers were closely associated with Yuehzi nomadic people?

- Ans
- 1. Dinnaga
 - 2. Shaka
 - 3. Pahalva
 - 4. Kushana

Question ID : 9895809442
Chosen Option : 3

Q.4
2 What is the 'Agenda 21' of the Rio Summit 1992 related to?

- Ans
- 1. Technology transfer mechanism to developing countries for 'clean – energy' production
 - 2. Sustainable development
 - 3. Combating the consequences of population explosion
 - 4. Mitigation norms of GHGs emission

Question ID : 9895809435
Chosen Option : 3

Q.4
3 Bees must collect nectar from approximately how many flowers to make one pound of honey?

- Ans
- 1. 20 million
 - 2. 10 thousand
 - 3. 50 milion
 - 4. 2 million

Question ID : 9895809432
Chosen Option : 1

Q.4
4 Article 368 is related to:

- Ans
- 1. centre-state relations
 - 2. constitutional amendments
 - 3. the Supreme Court

4. a state government

Question ID : 9895809441
Chosen Option : 1

Q.4
5 Whom does the constitution empower for the admission or establishment of new states?

- Ans 1. State Government
 2. Supreme Court
 3. Parliament
 4. Central Government

Question ID : 9895809439
Chosen Option : 4

Q.4
6 Who among the following was the first Indian woman to receive the Nobel Peace prize?

- Ans 1. Mother Teresa
 2. Nargis Dutt
 3. Indira Gandhi
 4. Sarojini Naidu

Question ID : 9895809427
Chosen Option : 1

Q.4
7 Which Indian IT expert is called 'the father of the Pentium processor'?

- Ans 1. Vinod Dham
 2. Biswamohan Pani
 3. Ajay Bhatt
 4. Anand Chandrashekher

Question ID : 9895809426
Chosen Option : 3

Q.4
8 Where did the first Asian Games begin?

- Ans 1. China
 2. Sri Lanka
 3. India
 4. Nepal

Question ID : 9895809429
Chosen Option : 3

Q.4
9 The pioneer of communism in India was:

- Ans 1. S. A Dange
 2. M. N Roy
 3. Nalin Gupta
 4. M. R Jayakar

Question ID : 9895809444

Chosen Option : 2

Q.5
0 Which of the following is the highest peak of Vindhya Range?

- Ans
- 1. Kalumar Peak
 - 2. Mahendragiri
 - 3. Pachmarhi
 - 4. Gurushikhar

Question ID : 9895809438

Chosen Option : 2

Q.5 Study the following table carefully and answer the questions given below it.

1 Number of candidates appearing for an interview for a post in Bank and percentage of candidates qualifying

Banks	Candidates Appearing	% of Candidates Qualifying
A	1500	14
B	2200	26
C	3000	17
D	980	20
E	1200	28
F	2500	21

What was the average number of candidates who appeared for the interview in bank A, C and E together?

- Ans
- 1. 2000
 - 2. 1800
 - 3. 1900
 - 4. 1500

Question ID : 9895809622

Chosen Option : 3

Q.5
2 A sell an article to B at a gain of 5% and B sell it to C at a gain of 10%. If C paid ₹ 462, what did it cost A?

- Ans
- 1. ₹ 400
 - 2. ₹ 500
 - 3. ₹ 480
 - 4. ₹ 320

Question ID : 9895809606

Chosen Option : 1

Q.5
3 The radius of in-circle of a triangle is 4 cm and the perimeter of the triangle is 20 cm. What is the area of the triangle?

- Ans
- 1. 40 sq. cm
 - 2. 36 sq. cm
 - 3. 80 sq. cm
 - 4. 20 sq. cm

Question ID : 9895809618

Chosen Option : 2

Q.5
4 A room is in the shape of cube and the length of the longest rod placed in it is $12\sqrt{3}$ m. The area of the floor is:

- Ans
- 1. 36 sq. m
 - 2. 144 sq. m
 - 3. 64 sq. m
 - 4. 96 sq. m

Question ID : 9895809619
Chosen Option : 2

Q.5
5 What is the maximum number of students among whom 63 pens and 140 copies can be distributed in such a way that each student gets the same number of pens and same number of exercise books?

- Ans
- 1. 5
 - 2. 2
 - 3. 7
 - 4. 3

Question ID : 9895809598
Chosen Option : 3

Q.5
6 A train passes a 60 metres long platform in 20 seconds and a man standing on the platform in 16 seconds. The speed of the train is:

- Ans
- 1. 40 kmph
 - 2. 50 kmph
 - 3. 38 kmph
 - 4. 54 kmph

Question ID : 9895809616
Chosen Option : 2

Q.5 Study the following table carefully and answer the questions given below it.

7 Number of candidates appearing for an interview for a post in Bank and percentage of candidates qualifying

Banks	Candidates Appearing	% of Candidates Qualifying
A	1500	14
B	2200	26
C	3000	17
D	980	20
E	1200	28
F	2500	21

What was the respective ratio of the number of candidates who qualified in bank A to the number of candidates who qualified in bank E?

- Ans
- 1. 5 : 6
 - 2. 2 : 5
 - 3. 3 : 7
 - 4. 5 : 8

Question ID : 9895809621
Chosen Option : 4

Q.5

8 A man travels from A to B at a speed of 50 km/hr and returns to A by increasing his speed by 30%. What is his average speed during the whole journey?

- Ans
- ✓ 1. $56\frac{12}{23}$ km/hr
 - ✗ 2. $57\frac{1}{2}$ km/hr
 - ✗ 3. $56\frac{2}{3}$ km/hr
 - ✗ 4. $52\frac{1}{3}$ km/hr

Question ID : 9895809615
Chosen Option : 2

Q.5 Study the following table carefully and answer the questions given below it.
9 Number of candidates appearing for an interview for a post in a Bank and percentage of candidates qualifying

Banks	Candidates Appearing	% of Candidates Qualifying
A	1500	14
B	2200	26
C	3000	17
D	980	20
E	1200	28
F	2500	21

The number of candidates who did not qualify in bank D was approximately what percent of the candidates who did not qualify in bank B?

- Ans
- ✗ 1. 51
 - ✗ 2. 42
 - ✓ 3. 48
 - ✗ 4. 44

Question ID : 9895809620
Chosen Option : 3

Q.6
0 What sum will fetch a simple interest of ₹ 25,410 in five and a half years at 6% p.a. rate of interest?

- Ans
- ✓ 1. ₹ 77,000
 - ✗ 2. ₹ 88,000
 - ✗ 3. ₹ 70,000
 - ✗ 4. ₹ 55,000

Question ID : 9895809611
Chosen Option : 2

Q.6
1 75% of a number x is equal to $\frac{2}{5}$ of another number y. What is the ratio between x and y?

- Ans
- ✗ 1. 1 : 5
 - ✗ 2. 13 : 8
 - ✓ 3. 8 : 15
 - ✗ 4. 1 : 3

Question ID : 9895809610
Chosen Option : 3

Q.6
2 The compound interest on a certain sum at 4% per annum (compounded annually) for 2 years is ₹ 102. On the same principal at the same rate for the same time, the simple interest will be:

- Ans
- 1. ₹ 100
 - 2. ₹ 99
 - 3. ₹ 98
 - 4. ₹ 101

Question ID : 9895809612
Chosen Option : 2

Q.6
3 If the cost price of an article is ₹ 200 and selling price of the same article is ₹ 225. Find the profit %.

- Ans
- 1. 15%
 - 2. 12.5%
 - 3. 25%
 - 4. 16%

Question ID : 9895809607
Chosen Option : 2

Q.6
4 $\sqrt{729} \times 56 \div 8 = ?$

- Ans
- 1. 198
 - 2. 138
 - 3. 189
 - 4. 142

Question ID : 9895809600
Chosen Option : 3

Q.6
5 Two numbers A and B are respectively 10% and 25% more than third number respectively. What is the ratio of A and B?

- Ans
- 1. 13 : 16
 - 2. 11 : 12
 - 3. 22 : 25
 - 4. 15 : 16

Question ID : 9895809609
Chosen Option : 1

Q.6
6 The average of two numbers is 6 and that of another three numbers is 8. The average of these five numbers is:

- Ans
- 1. 6.5
 - 2. 7.6
 - 3. 7.2
 - 4. 5.5

Question ID : 9895809601

Chosen Option : 3

Q.6 If 12 men can do a job in 7 days, what fraction of the job can be done by one man in one day?

- 7
- Ans
1. $\frac{1}{12}$
2. $\frac{7}{12}$
3. $\frac{1}{84}$
4. $\frac{12}{7}$

Question ID : 9895809613

Chosen Option : 4

Q.6 The marked price of a radio is ₹ 480. The shopkeeper allows a discount of 10% and still gains 8%. If no discount is allowed, then his gain percent is:

- 8
- Ans
1. 35%
2. 20%
3. 15%
4. 25%

Question ID : 9895809603

Chosen Option : 4

Q.6 If 20% of P = 30% of Q = $\frac{1}{6}$ of R, then P : Q : R is equal to:

- 9
- Ans
1. 1 : 2 : 4
2. 5 : 10 : 6
3. 15 : 10 : 18
4. 2 : 5 : 8

Question ID : 9895809608

Chosen Option : 3

Q.7 If two pipes function simultaneously, a tank is filled in 12 hours. One pipe fills the tank 10 hours faster than the other. How many hours does the faster pipe alone take to fill the tank?

- 0
- Ans
1. 12
2. 20
3. 15
4. 18

Question ID : 9895809614

Chosen Option : 3

Q.7 In a family of 4 members, if father earns ₹ 50,000, mother earns ₹ 32,000, son ₹ 25,000 and daughter monthly earns ₹ 20000 in a month, then the average income of family is given by:

- 1
- Ans
1. ₹ 31000

2. ₹ 28000

3. ₹ 32000

4. ₹ 31750

Question ID : 9895809602

Chosen Option : 4

Q.7
2 The value of the following expression:

150% of 15 + 75% of 75 is

Ans 1. 135

2. 78.75

3. 138

4. 75.75

Question ID : 9895809605

Chosen Option : 2

Q.7
3 If a carpenter increases each edge of a square wooden piece from 42 cm to 45 cm, the cost of wood is increased by ₹ 783. What is the rate of wood per sq. cm?

Ans 1. ₹ 3

2. ₹ 4

3. ₹ 4.5

4. ₹ 5

Question ID : 9895809617

Chosen Option : 1

Q.7
4 What is the Mode of the following data:

X	32	14	59	41	28	7	34	20
f(x)	8	4	12	8	10	16	15	9

Ans 1. 28

2. 14

3. 7

4. 59

Question ID : 9895809604

Chosen Option : 3

Q.7
5 $36 \times 15 - 56 \times 784 \div 112 = ?$

Ans 1. 158

2. 138

3. 148

4. 238

Question ID : 9895809599

Section : English Language

Q.1 Select the word which means the same as the group of words given.

A person giving too much attention to small details and wanting perfection.

- Ans
- 1. Studious
 - 2. Fanatic
 - 3. Fastidious
 - 4. Gullible

Question ID : 9895809795
Chosen Option : 1

Q.2 Select the antonym of the given word.

CONCISE

- Ans
- 1. Short
 - 2. Lengthy
 - 3. Succinct
 - 4. Brief

Question ID : 9895809790
Chosen Option : 2

Q.3 Select the most appropriate word to fill in the blank.

Finally, the prizes were _____ to all successful participants by the chief guest.

- Ans
- 1. distributed
 - 2. provided
 - 3. shared
 - 4. divided

Question ID : 9895809799
Chosen Option : 1

Q.4 Select the word which means the same as the group of words given.

A short interesting incident about a person

- Ans
- 1. Anecdote
 - 2. Drama
 - 3. Ballad
 - 4. Epitaph

Question ID : 9895809794
Chosen Option : 1

Q.5 Select the most appropriate word to fill in the blank.

As this Principal adopts a _____ approach towards the running of the school, the school is losing its prestige.

- Ans
- 1. proper

- 2. dilute
- 3. strict
- 4. casual

Question ID : 9895809798
Chosen Option : 2

Q.6 Select the meaning of the given idiom.

Miss the boat

- Ans
- 1. To miss the chance
 - 2. To take a risk
 - 3. To miss someone
 - 4. To drown

Question ID : 9895809793
Chosen Option : 4

Q.7 Select the meaning of the given idiom.

To burn one's fingers

- Ans
- 1. To have an unfavourable result
 - 2. To undergo pain
 - 3. To behave as if one is important
 - 4. To touch something hot

Question ID : 9895809792
Chosen Option : 2

Q.8 Select the most appropriate word to fill in the blank.

Most of the Himalayan rivers are perennial: they have water _____ the year.

- Ans
- 1. between
 - 2. throughout
 - 3. along
 - 4. across

Question ID : 9895809781
Chosen Option : 2

Q.9 Select the synonym of the given word.

ABUNDANT

- Ans
- 1. Plentiful
 - 2. Inadequate
 - 3. Lacking
 - 4. Scanty

Question ID : 9895809788

Chosen Option : 1

Q.1
0 Select the wrongly spelt word.

- Ans
- 1. Maneuver
 - 2. Maintenance
 - 3. Mathematics
 - 4. Liason

Question ID : 9895809797
Chosen Option : 2

Q.1
1 Select the most appropriate option to substitute the underlined segment in the given sentence. If there is no need to substitute it, select No substitution required.

The Deccan Plateau is a triangular landmass that lies to the south of the river Narmada.

- Ans
- 1. No substitution required
 - 2. are a triangle
 - 3. has a triangular
 - 4. are a mass

Question ID : 9895809779
Chosen Option : 2

Q.1
2 Select the wrongly spelt word.

- Ans
- 1. Prominent
 - 2. Professor
 - 3. Laboratory
 - 4. Knowlege

Question ID : 9895809796
Chosen Option : 4

Q.1
3 Select the most appropriate option to substitute the underlined segment in the given sentence. If there is no need to substitute it, select No substitution required.

The sun rises two hours earliest in Arunachal Pradesh as compared to Gujarat.

- Ans
- 1. two hours earlier
 - 2. two hour early
 - 3. two hours' early
 - 4. No substitution required

Question ID : 9895809777
Chosen Option : 1

Q.1
4 Identify the segment in the sentence which contains the grammatical error from the given options.

Agriculture is main occupation of the people living in the plains.

- Ans
- 1. living in
 - 2. is main occupation

3. the plains

4. of the people

Question ID : 9895809775

Chosen Option : 3

Q.1 Identify the segment in the sentence which contains the grammatical error from the given options.

5

India's relations with most countries of the world have remained cordial across the years.

Ans 1. with most countries

2. across the years

3. India's relations

4. of the world

Question ID : 9895809776

Chosen Option : 2

Q.1 Select the antonym of the given word.

6

DESPISE

Ans 1. Dislike

2. Contempt

3. Hate

4. Admire

Question ID : 9895809791

Chosen Option : 4

Q.1 Select the synonym of the given word.

7

ENORMOUS

Ans 1. Tiny

2. Huge

3. Dwarf

4. Negligible

Question ID : 9895809789

Chosen Option : 2

Q.1 Select the most appropriate word to fill in the blank.

8

The Chilika Lake is the _____ salt water lake in India.

Ans 1. largest

2. large

3. more larger

4. larger

Question ID : 9895809780

Chosen Option : 1

Q.1 Select the most appropriate option to substitute the underlined segment in the given sentence. If there is no need to substitute it, select No substitution required,

9

The Himalayas represent one of the more rugged mountain barriers of the world.

- Ans
- 1. one in the most
 - 2. one of the most
 - 3. No substitution required
 - 4. the more

Question ID : 9895809778
Chosen Option : 2

Comprehension:

In the following passage some words have been deleted. Fill in the blanks with the help of the alternatives given. Select the most appropriate option for each number.

The Narmada (1) _____ from the Amarkantak hills in Madhya Pradesh. It flows (2) _____ the west in a rift valley (3) _____ due to faulting. On its (4) _____ to the sea, the Narmada creates many (5) _____ locations.

SubQuestion No : 20

Q.2 Select the most appropriate option that will fill in the blank number 1.

0

- Ans
- 1. heads
 - 2. creates
 - 3. originates
 - 4. resides

Question ID : 9895809783
Chosen Option : 3

Comprehension:

In the following passage some words have been deleted. Fill in the blanks with the help of the alternatives given. Select the most appropriate option for each number.

The Narmada (1) _____ from the Amarkantak hills in Madhya Pradesh. It flows (2) _____ the west in a rift valley (3) _____ due to faulting. On its (4) _____ to the sea, the Narmada creates many (5) _____ locations.

SubQuestion No : 21

Q.2 Select the most appropriate option that will fill in the blank number 2.

1

- Ans
- 1. across
 - 2. facing
 - 3. against
 - 4. towards

Comprehension:

In the following passage some words have been deleted. Fill in the blanks with the help of the alternatives given. Select the most appropriate option for each number.

The Narmada (1) _____ from the Amarkantak hills in Madhya Pradesh. It flows (2) _____ the west in a rift valley (3) _____ due to faulting. On its (4) _____ to the sea, the Narmada creates many (5) _____ locations.

SubQuestion No : 22

Q.2
2 Select the most appropriate option that will fill in the blank number 3.

- Ans
- 1. forming
 - 2. form
 - 3. formed
 - 4. formation

Comprehension:

In the following passage some words have been deleted. Fill in the blanks with the help of the alternatives given. Select the most appropriate option for each number.

The Narmada (1) _____ from the Amarkantak hills in Madhya Pradesh. It flows (2) _____ the west in a rift valley (3) _____ due to faulting. On its (4) _____ to the sea, the Narmada creates many (5) _____ locations.

SubQuestion No : 23

Q.2
3 Select the most appropriate option that will fill in the blank number 4.

- Ans
- 1. road
 - 2. movement
 - 3. approach
 - 4. way

Comprehension:

In the following passage some words have been deleted. Fill in the blanks with the help of the alternatives given. Select the most appropriate option for each number.

The Narmada (1) _____ from the Amarkantak hills in Madhya Pradesh. It flows (2) _____ the west in a rift valley (3) _____ due to faulting. On its (4) _____ to the sea, the Narmada creates many (5) _____ locations.

SubQuestion No : 24

Q.2
4 Select the most appropriate option that will fill in the blank number 5.

- Ans
- 1. specific
 - 2. plain
 - 3. scenic
 - 4. ornamental

Question ID : 9895809787
Chosen Option : 1

Q.2
5 Identify the segment in the sentence which contains the grammatical error from the given options.

Human activities is leading to the gradual destruction of the rainforests.

- Ans
- 1. the gradual
 - 2. is leading
 - 3. Human activities
 - 4. the rainforests

Question ID : 9895809774
Chosen Option : 1

Section : Hindi Language

Q.1 'प्रेम' शब्द का विलोम शब्द है-

- Ans
- 1. स्नेह
 - 2. ईर्ष्या
 - 3. घृणा
 - 4. जलन

Question ID : 9895807193
Chosen Option : --

Q.2 'हाथ पाँव फूलना' मुहावरे का अर्थ है-

- Ans
- 1. भय से घबराना
 - 2. गुस्सा होना
 - 3. बीमार होना

✗ 4. भाग जाना

Question ID : 9895807198
Chosen Option : --

Q.3 'जिसको ईश्वर में विश्वास हो' के लिए एक शब्द है -

- Ans
- ✗ 1. सेवक
 - ✗ 2. आस्तिक
 - ✓ 3. भक्त
 - ✗ 4. पुजारी

Question ID : 9895807199
Chosen Option : --

Q.4 दिए गए वाक्य का वह भाग ज्ञात करें जिसमें कोई त्रुटि है।

कुछ प्रचलित बैंकिंग शब्दों को ज्यों-त्यों अपनाया गया है।

- Ans
- ✗ 1. ज्यों-त्यों
 - ✓ 2. कुछ प्रचलित
 - ✗ 3. अपनाया गया है।
 - ✗ 4. बैंकिंग शब्दों को

Question ID : 9895807179
Chosen Option : --

Q.5 सही वर्तनी वाले शब्द का चयन करें।

- Ans
- ✓ 1. आदरणीय
 - ✗ 2. आदरणिय
 - ✗ 3. अदरणीय
 - ✗ 4. अदरणिय

Question ID : 9895807202
Chosen Option : --

Q.6 रिक्त स्थान को भरने के लिए उपयुक्त शब्द का चयन करें।

भूखे को तो चन्द्र और सूर्य भी केवल आटे की बड़ी-बड़ी दो _____ से प्रतीत होते हैं।

- Ans
- ✗ 1. रोटियों
 - ✓ 2. गेंद
 - ✗ 3. गुड़ियाँ
 - ✗ 4. गोलियाँ

Question ID : 9895807185
Chosen Option : --

Q.7 सही वर्तनी वाले शब्द का चयन करें।

- Ans
- 1. सभापती
 - 2. साभापति
 - 3. सभीपति
 - 4. सभापति

Question ID : 9895807201

Chosen Option : --

Q.8 'जो बहुत कम जानता हो' के लिए एक शब्द है-

- Ans
- 1. अल्पज्ञ
 - 2. बुद्धिहीन
 - 3. अज्ञानी
 - 4. मूर्ख

Question ID : 9895807200

Chosen Option : --

Comprehension:

निम्नलिखित गद्यांश के रिक्त स्थानों की पूर्ति गद्यांश के नीचे दिए गए प्रश्नों के अनुसार कीजिए-

किसी भी राष्ट्र के कुछ _____ (1) प्रतीक, यथा ध्वज, गान आदि जैसे महत्वपूर्ण चिह्न होते हैं, जिनसे एक _____ (2) देश अपनी अस्मिता और प्रभुसत्ता उद्घोषित करता है और इससे ही वह _____ (3) आदर एवं विश्वास प्राप्त करता है। _____ (4) चिह्न हमारे देश की विशिष्ट मोहर हैं। यह देश-प्रेमियों के कुछ विचारों और मूल्यों का _____ (5) भी होता है।

SubQuestion No : 9

Q.9 गद्यांश में संकेतित रिक्त स्थान (1) के लिए उपयुक्त शब्द होगा।

- Ans
- 1. अवशिष्ट
 - 2. अशिष्ट
 - 3. विशिष्ट
 - 4. शिष्ट

Question ID : 9895807188

Chosen Option : --

Comprehension:

निम्नलिखित गद्यांश के रिक्त स्थानों की पूर्ति गद्यांश के नीचे दिए गए प्रश्नों के अनुसार कीजिए-

किसी भी राष्ट्र के कुछ _____ (1) प्रतीक, यथा ध्वज, गान आदि जैसे महत्वपूर्ण चिह्न होते हैं, जिनसे एक _____ (2) देश अपनी अस्मिता और प्रभुसत्ता उद्घोषित करता है और इससे ही वह _____ (3) आदर एवं विश्वास प्राप्त करता है। _____ (4) चिह्न हमारे देश की विशिष्ट मोहर हैं। यह देश-प्रेमियों के कुछ विचारों और मूल्यों का _____ (5) भी होता है।

SubQuestion No : 10

Q.1
0 गद्यांश में संकेतित रिक्त स्थान (2) के लिए उपयुक्त शब्द होगा।

- Ans
- 1. लोकतंत्र
 - 2. स्वतंत्र
 - 3. परतंत्र
 - 4. राजतंत्र

Question ID : 9895807189
Chosen Option : --

Comprehension:

निम्नलिखित गद्यांश के रिक्त स्थानों की पूर्ति गद्यांश के नीचे दिए गए प्रश्नों के अनुसार कीजिए-

किसी भी राष्ट्र के कुछ _____ (1) प्रतीक, यथा ध्वज, गान आदि जैसे महत्वपूर्ण चिह्न होते हैं, जिनसे एक _____ (2) देश अपनी अस्मिता और प्रभुसत्ता उद्घोषित करता है और इससे ही वह _____ (3) आदर एवं विश्वास प्राप्त करता है। _____ (4) चिह्न हमारे देश की विशिष्ट मोहर हैं। यह देश-प्रेमियों के कुछ विचारों और मूल्यों का _____ (5) भी होता है।

SubQuestion No : 11

Q.1
1 गद्यांश में संकेतित रिक्त स्थान (3) के लिए उपयुक्त शब्द होगा।

- Ans
- 1. सार्वजनिक
 - 2. भौतिक
 - 3. शारीरिक
 - 4. ऐकान्तिक

Question ID : 9895807190
Chosen Option : --

Comprehension:

निम्नलिखित गद्यांश के रिक्त स्थानों की पूर्ति गद्यांश के नीचे दिए गए प्रश्नों के अनुसार कीजिए-

किसी भी राष्ट्र के कुछ _____ (1) प्रतीक, यथा ध्वज, गान आदि जैसे महत्वपूर्ण चिह्न होते हैं, जिनसे एक _____ (2) देश अपनी अस्मिता और प्रभुसत्ता उदघोषित करता है और इससे ही वह _____ (3) आदर एवं विश्वास प्राप्त करता है। _____ (4) चिह्न हमारे देश की विशिष्ट मोहर हैं। यह देश-प्रेमियों के कुछ विचारों और मूल्यों का _____ (5) भी होता है।

SubQuestion No : 12

Q.1
2 गद्यांश में संकेतित रिक्त स्थान (4) के लिए उपयुक्त शब्द होगा।

- Ans
- 1. नागरिक
 - 2. शहरी
 - 3. राष्ट्रीय
 - 4. ग्रामीण

Question ID : 9895807191

Chosen Option : --

Comprehension:

निम्नलिखित गद्यांश के रिक्त स्थानों की पूर्ति गद्यांश के नीचे दिए गए प्रश्नों के अनुसार कीजिए-

किसी भी राष्ट्र के कुछ _____ (1) प्रतीक, यथा ध्वज, गान आदि जैसे महत्वपूर्ण चिह्न होते हैं, जिनसे एक _____ (2) देश अपनी अस्मिता और प्रभुसत्ता उदघोषित करता है और इससे ही वह _____ (3) आदर एवं विश्वास प्राप्त करता है। _____ (4) चिह्न हमारे देश की विशिष्ट मोहर हैं। यह देश-प्रेमियों के कुछ विचारों और मूल्यों का _____ (5) भी होता है।

SubQuestion No : 13

Q.1
3 गद्यांश में संकेतित रिक्त स्थान (5) के लिए उपयुक्त शब्द होगा।

- Ans
- 1. समीप
 - 2. प्रताप
 - 3. प्रतीक
 - 4. समान

Question ID : 9895807192

Chosen Option : --

Q.1
4

रिक्त स्थान को भरने के लिए उपयुक्त शब्द का चयन करें।

मैंने भाषण नहीं सुना _____ वह मेरे काम का नहीं था।

- Ans
- 1. अर्थात्
 - 2. कि
 - 3. क्योंकि
 - 4. इसीलिए

Question ID : 9895807183
Chosen Option : --

Q.1
5 'माता' का पर्यायवाची शब्द है-

- Ans
- 1. जननी
 - 2. माही
 - 3. स्त्री
 - 4. वनिता

Question ID : 9895807195
Chosen Option : --

Q.1
6 दिए गए वाक्य का वह भाग ज्ञात करें जिसमें कोई त्रुटि है।

विद्वानों का अतिरिक्त विद्यार्थियों द्वारा भी कोश का प्रयोग किया जा सकता है।

- Ans
- 1. विद्यार्थियों द्वारा भी
 - 2. विद्वानों का अतिरिक्त
 - 3. कोश का प्रयोग
 - 4. किया जा सकता है।

Question ID : 9895807178
Chosen Option : --

Q.1
7 'वन' का पर्यायवाची शब्द है-

- Ans
- 1. कानन
 - 2. भूदेव
 - 3. भूपति
 - 4. विटप

Question ID : 9895807196
Chosen Option : --

Q.1
8 दिए गए वाक्य में रेखांकित खंड को प्रतिस्थापित करने के लिए उपयुक्त विकल्प का चयन करें।

उस जलस्रोत को देखकर मेरा चित्त प्रफुल्ल हो गया।

- Ans
- 1. व्यथित

- 2. खिन्न
- 3. पीड़ित
- 4. प्रसन्न

Question ID : 9895807181
Chosen Option : --

Q.1 दिए गए वाक्य में रेखांकित खंड को प्रतिस्थापित करने के लिए उपयुक्त विकल्प का चयन करें।

कैकयी का हृदय अत्यन्त निष्ठुर था।

- Ans
- 1. कुठार
 - 2. कठोर
 - 3. कठिन
 - 4. कर्कश

Question ID : 9895807180
Chosen Option : --

Q.2 'शिष्ट' शब्द का विलोम शब्द है-

- Ans
- 1. दुर्जन
 - 2. शालीन
 - 3. विशिष्ट
 - 4. अशिष्ट

Question ID : 9895807194
Chosen Option : --

Q.2 'इंके की चोट पर कहना' मुहावरे का अर्थ है-

- Ans
- 1. क्रोधित होकर कहना
 - 2. खुलेआम कहना
 - 3. जोर से बोलना
 - 4. साधारण बात को बड़ा चढ़ा कर कहना

Question ID : 9895807197
Chosen Option : --

Q.2 रिक्त स्थान को भरने के लिए उपयुक्त शब्द का चयन करें।

राम को अनुत्तीर्ण होने की _____ है।

- Ans
- 1. आशंका
 - 2. आशा
 - 3. प्रत्याशा
 - 4. संदेह

Question ID : 9895807184

Chosen Option : --

Q.2 दिए गए वाक्य का वह भाग ज्ञात करें जिसमें कोई त्रुटि है।

यहाँ से उठकर वे अपने घर को ओर मुड़ने ही वाले थे।

Ans

- 1. घर को ओर
- 2. वे अपने
- 3. मुड़ने ही वाले थे।
- 4. यहाँ से उठकर

Question ID : 9895807177

Chosen Option : --

Q.2 दिए गए वाक्य में रेखांकित खंड को प्रतिस्थापित करने के लिए उपयुक्त विकल्प का चयन करें।

श्याम झगड़ालू है और दूसरों से ईर्ष्या करने वाला है।

Ans

- 1. ईर्ष्यालु
- 2. लड़ाकू
- 3. निंदनीय
- 4. झगड़ालू

Question ID : 9895807182

Chosen Option : --

Q.2 रिक्त स्थान को भरने के लिए उपयुक्त शब्द का चयन करें।

उत्साह एक यौगिक भाव है जिसमें साहस और आनंद का _____ रहता है।

Ans

- 1. विरोध
- 2. अंतर
- 3. मेल
- 4. जोड़

Question ID : 9895807186

Chosen Option : --