

Constable (GD) in CAPFs, NIA, SSF and Rifleman (GD) in Assam Rifles Examination, 2018

Roll No. :	www.GovtJobsAlert.In
Registration No.	
Name :	
Exam Venue :	iON Digital Zone iDZ Kozhikode
Exam Time :	12:30 PM - 2:00 PM
Exam Date :	09/03/2019

Section : General Section

Q.1 In a certain code, FORMAT is coded as CLOJXQ, then how is FONT coded in the same way?

- Ans
- 1. CLOQ
 - 2. CKLO
 - 3. CLKQ
 - 4. CKLQ

Question ID : 9895809279
Chosen Option : 3

Q.2 Select the Venn diagram that best illustrates the relationship between the three given classes.

Planet, Earth, Sun

- Ans
- 1.
 - 2.
 - 3.
 - 4.

Question ID : 9895809297
Chosen Option : 1

Q.3 If '+' means '×', '-' means '÷', '×' means '-', and '÷' means '+', then:

$$664 + 4 \div 34 \times 28 = ?$$

- Ans
- 1. 165
 - 2. 162
 - 3. 172
 - 4. 185

Question ID : 9895809291
Chosen Option : 3

Q.4 Select the option that is related to the third term in the same way as the second term is related to the first term.

mmnnrstt : nnoostuu :: eefghhij : ?

- Ans
- 1. fgghiijk
 - 2. higfiijk
 - 3. ffhgiijk
 - 4. ffghiijk

Question ID : 9895809278
Chosen Option : 4

Q.5 Select the related word pair from the given alternatives.

Entomology : Insects :: _____ : _____

- Ans
- 1. Oology : Shells
 - 2. Physiology : Plants
 - 3. Virology : Fungi
 - 4. Phycology : Algae

Question ID : 9895809277
Chosen Option : 1

Q.6 Anil is taller than Sunny who is shorter than Baby. Anil is taller than Bose who is shorter than Sunny. Baby is shorter than Anil. Who is the shortest?

- Ans
- 1. Bose
 - 2. Anil
 - 3. Baby
 - 4. Sunny

Question ID : 9895809283
Chosen Option : 3

Q.7 Select the correct option that will fill in the blank and complete the series.

14, 21, 42, 105, 315, ?

- Ans
- 1. 1002.5
 - 2. 1302.5
 - 3. 1202.5
 - 4. 1102.5

Question ID : 9895809286
Chosen Option : 3

Q.8 A, B, C, D, E, F and G are sitting around a circle facing at the centre. D is third to the left of A who is second to the left of F. E is not a neighbour of either F or D. C is third to left of B.

What is E's position with respect to F?

- Ans
- 1. Data inadequate
 - 2. Third to the left
 - 3. Second to the left
 - 4. Fourth to the left

Question ID : 9895809282
Chosen Option : 1

Q.9 Four options have been given out of which three are alike in some manner, while one is different. Choose the odd one.

- Ans 1. 14-13
 2. 13-12
 3. 11-14
 4. 08-17

Question ID : 9895809289
Chosen Option : 4

Q.1 Four words have been given out of which three are alike in some manner, while one is different. Choose the odd one.

- 0
Ans 1. Proprietorship
 2. Partnership
 3. Corporation
 4. Service

Question ID : 9895809275
Chosen Option : 4

Q.1 Select the correct option that will fill in the blank and complete the series.

- 1
J, N, R, V, _____
Ans 1. Z
 2. D
 3. G
 4. V

Question ID : 9895809273
Chosen Option : 3

Q.1 Select the related word pair from the given alternatives.

- 2
Eiffel Tower : France :: _____ : _____
Ans 1. Opera House: China
 2. Taj Mahal : India
 3. Statue Of Liberty : Australia
 4. Alhambra : Brazil

Question ID : 9895809276
Chosen Option : 2

Q.1 Four letter clusters have been given, out of which three are alike in some manner, while one is different. Choose the odd one.

- 3
Ans 1. IPQ
 2. UBC
 3. FGM
 4. RYZ

Question ID : 9895809274

Chosen Option : 3

Q.1 Select the correct option that will fill in the blank and complete the series.

4

25, 100, 200, 800, 1600, ?

- Ans
- 1. 8400
 - 2. 7400
 - 3. 6400
 - 4. 6600

Question ID : 9895809287

Chosen Option : 3

Q.1 Choose the option that most closely resembles the mirror image of the given figure when mirror is placed at right side.

5

Question Figure:



- Ans
- 1.
 - 2.
 - 3.
 - 4.

Question ID : 9895809295

Chosen Option : 2

Q.1 If RAYMOND is written as 2795431 and OLD as 461, how will DALMO be written?

6

- Ans
- 1. 17653
 - 2. 15764
 - 3. 17654
 - 4. 15476

Question ID : 9895809280

Chosen Option : 1

Q.1 Select the option that is related to the Third term in the same way as the second term is related to the first term.

7

12 : 62 :: 14 : _____

- Ans
- 1. 72
 - 2. 80
 - 3. 70
 - 4. 75

Question ID : 9895809288


Chosen Option : 1

Q.1
8 Choose the option figure in which the problem figure is hidden/embedded.

Question figure



Ans



Question ID : 9895809294
Chosen Option : 2

Q.1
9 The statements below are followed by two conclusions labeled I and II. Assuming that the information in the statements is true, even if it appears to be at variance with generally established facts, decide which conclusion(s) logically and definitely follow(s) from the information given in the statements.

Statements:

All houses are rivers.

All rivers are forest.

No forest is flower.

Conclusions:

I. No houses is flower.

II. No flower is houses.

Ans

1. Only conclusion II follows

2. Both Conclusions I and II follow

3. Only conclusion I follows

4. Either conclusion I or II follows

Question ID : 9895809284
Chosen Option : 4

Q.2
0 Which of the following answer figure will complete the given figure?

Question Figure:

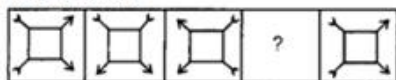


Ans

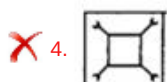
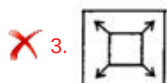
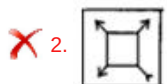


Q.2
1 Choose the option which completes the given figure series

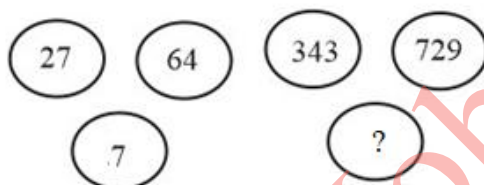
PROBLEM FIGURES



Ans



Q.2
2 Find the missing number from the below options.



Ans

✗ 1. 8

✗ 2. 9

✗ 3. 25

✓ 4. 16

Q.2
3 Mona, Kanak, John, Honey, Isha and Lara are watching a movie in a theater which has screen in the north. They are sitting in certain way.

(i) Only Kanak is sitting between Honey and John.

(ii) Lara is to the right of Mona who is sitting at extreme left.

(iii) Isha is to the immediate right of John.

Who is sitting at extreme right?

Ans

✗ 1. Kanak


✗ 2. Honey

✗ 3. John

✓ 4. Isha

Q.2
4 A piece of paper is folded and cut as shown below in the question figures. From the given answer figures, how will it appear when opened?

Question figures:



Ans



Question ID : 9895809296
Chosen Option : 4

Q.2
5 The statements below are followed by two conclusions labeled I and II. Assuming that the information in the statements is true, even if it appears to be at variance with generally established facts, decide which conclusion(s) logically and definitely follow(s) from the information given in the statements.

Statements:

Some beds are chairs.

All chairs are desks.

All desks are tables.

Conclusions:

I. Some tables are beds.

II. Some desks are beds.

Ans

1. Both Conclusions I and II follow

2. Only conclusion I follows

3. Either conclusion I or II follows

4. Only conclusion II follows

Question ID : 9895809285
Chosen Option : 1

Q.2
6 'Ottamthullal' is a dance associated with the state of:

Ans

1. Andhra Pradesh

2. Manipur

3. Kerala

4. Tamil Nadu

Question ID : 9895809448
Chosen Option : 3

Q.2
7 Indian policy analyst Sanjaya Baru published "*The Accidental Prime Minister*", a memoir, based on his experiences as a media advisor to _____.

Ans

1. Rahul Gandhi

2. Indira Gandhi

3. Narendra Modi

✓ 4. Manmohan Singh

Question ID : 9895809454
Chosen Option : 2

Q.2
8 A recent bank merger that has been announced includes Vijaya Bank, Dena Bank, and _____.

- Ans
- ✗ 1. Indian Overseas Bank
 - ✗ 2. State Bank of India
 - ✗ 3. State Bank of Mysore
 - ✓ 4. Bank of Baroda

Question ID : 9895809457
Chosen Option : 3

Q.2
9 Kedarnath Bhattacharya, a popular singer, is better known by the name _____.

- Ans
- ✓ 1. Kumar Sanu
 - ✗ 2. Kishore kumar
 - ✗ 3. Bappi Lahiri
 - ✗ 4. Arijit Singh

Question ID : 9895809449
Chosen Option : 1

Q.3
0 The 3 R's to save the environment are:

- Ans
- ✗ 1. repair, recycle, reuse
 - ✗ 2. reduce, recycle, repair
 - ✓ 3. reduce, recycle, reuse
 - ✗ 4. reduce, repair, reuse

Question ID : 9895809469
Chosen Option : 1

Q.3
1 The inbuilt variation in reproduction occurs due to sexual reproduction and errors due to:

- Ans
- ✗ 1. DNA matching
 - ✗ 2. DNA dividing
 - ✗ 3. DNA multiplying
 - ✓ 4. DNA copying

Question ID : 9895809465
Chosen Option : 1

Q.3
2 What is the objective of the Constitutional Right to Freedom of Religion in India?

- Ans
- ✗ 1. To sustain the principle of federalism
 - ✗ 2. To sustain the principle of frugalism
 - ✗ 3. To sustain the principle of capitalism
 - ✓ 4. To sustain the principle of secularism

Question ID : 9895809460
Chosen Option : 4

Q.3
3 Right to Freedom is guaranteed in the article _____.

- Ans
- 1. 11
 - 2. 15
 - 3. 19
 - 4. 21

Question ID : 9895809461
Chosen Option : 3

Q.3
4 The cheapest means of transport is:

- Ans
- 1. road
 - 2. waterways
 - 3. railways
 - 4. air

Question ID : 9895809467
Chosen Option : 3

Q.3
5 The Jallianwalla Bagh incident happened in:

- Ans
- 1. Punjab
 - 2. Kashmir
 - 3. Delhi
 - 4. Kerala

Question ID : 9895809472
Chosen Option : 4

Q.3
6 We can compare electric current in a conductor to:

- Ans
- 1. water current in rivers
 - 2. an inter-city train ride
 - 3. people walking in a street
 - 4. a bus ride in a city

Question ID : 9895809466
Chosen Option : 1

Q.3
7 How are Fiscal Policy and the Federal Reserve similar?

- Ans
- 1. They both have a Board of Governors
 - 2. They both use the same tools to fix economic problems
 - 3. They both try to promote economic stability
 - 4. They always must have Congressional approval before passing

Question ID : 9895809458

Chosen Option : 3

Q.3₈ The green plants in a terrestrial ecosystem capture about _____ of the energy of sunlight.

- Ans
- 1. 1%
 - 2. 4%
 - 3. 3%
 - 4. 2%

Question ID : 9895809468

Chosen Option : 2

Q.3₉ The power of Satyagraha emphasized the power of what:

- Ans
- 1. strength
 - 2. truth
 - 3. weakness
 - 4. poverty

Question ID : 9895809471

Chosen Option : 1

Q.4₀ The primary purpose of the RBI monetary policy is to maintain:

- Ans
- 1. exchange rate
 - 2. wealth
 - 3. price stability
 - 4. growth

Question ID : 9895809456

Chosen Option : 3

Q.4₁ _____ was known as a unit of measurement of land before the British rule, the size of the land varied, in Bengal the British standardised it to about one-third of an acre.

- Ans
- 1. Bigha
 - 2. lick
 - 3. Pace
 - 4. Fathom

Question ID : 9895809470

Chosen Option : 3

Q.4₂ The Sahitya Academy Award in English for 2017 was won by:

- Ans
- 1. Rana Ayub
 - 2. Mamang Dai
 - 3. Chetan Bhagat
 - 4. Shashi Tharoor

Question ID : 9895809453

Chosen Option : 4

Q.4
3 Nettle plants which grow in the wild protect themselves using:

- Ans
- 1. hair
 - 2. smell
 - 3. spray
 - 4. thorns

Question ID : 9895809464
Chosen Option : 2

Q.4
4 A statue of DMK leader _____ was unveiled in Chennai recently.

- Ans
- 1. M Karunanidhi
 - 2. J Jayalalitha
 - 3. MG Ramachandran
 - 4. MK Stalin

Question ID : 9895809455
Chosen Option : 1

Q.4
5 The 2019 Kumbh Mela is held on the site of confluence of the rivers Ganga, Yamuna and _____.

- Ans
- 1. Cauvery
 - 2. Brahmaputra
 - 3. Saraswati
 - 4. Godavari

Question ID : 9895809450
Chosen Option : 3

Q.4
6 Olympic Council of Asia (OCA) has chosen Japanese woman swimmer _____ as winner of Most Valuable Player (MVP) Trophy Award in 2018 Jakarta and Palembang Asian Games.

- Ans
- 1. Rikako Ikee
 - 2. Katsumi Nakamura
 - 3. Ryosuke Ire
 - 4. Zhang Lin

Question ID : 9895809452
Chosen Option : 3

Q.4
7 To test whether something is acidic or alkaline, we can use either a litmus paper or _____.

- Ans
- 1. soda ash
 - 2. sugar
 - 3. salt
 - 4. turmeric

Question ID : 9895809463
Chosen Option : 1

Q.4
8 As per the Constitution, India is also known as:

Ans

- 1. Bharat
- 2. Aryavarta
- 3. Hindustan
- 4. South Asia

Question ID : 9895809459
Chosen Option : 1

Q.4
9 Algae are useful for humankind because they:

- Ans
- 1. help to clean dirty places
 - 2. help to fix the ozone layer
 - 3. help to create more oxygen
 - 4. help to create more carbon dioxide

Question ID : 9895809462
Chosen Option : 3

Q.5
0 Name the new chief coach of the Indian cricket team till ICC World Cup 2019.

- Ans
- 1. Sunil Gavaskar
 - 2. Kapil Dev
 - 3. Ravi Shastri
 - 4. Anil Kumble

Question ID : 9895809451
Chosen Option : 4

Q.5
1 If a sum of ₹ 2000 is lent at 10% p.a. compound interest, what is the interest for the second year?

- Ans
- 1. ₹ 440
 - 2. ₹ 225
 - 3. ₹ 200
 - 4. ₹ 220

Question ID : 9895809637
Chosen Option : 2

Q.5
2 The average of 2 numbers is ab . If one of the number is a , the other is:

- Ans
- 1. $2b - a$
 - 2. $2ab - a$
 - 3. $2a - b$
 - 4. $2ab - b$

Question ID : 9895809626
Chosen Option : 4

Q.5
3 X is twice as good as workman as Y. Together, they finish the work in 18 days. In how many days can it be done by each separately?

- Ans
- 1. X = 27 days, Y = 54 days

- 2. X = 9 days, Y = 18 days
- 3. X = 21 days, Y = 42 days
- 4. X = 19 days, Y = 38 days

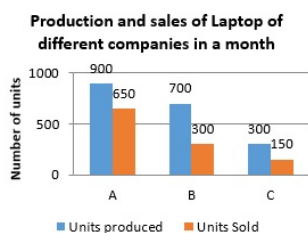
Question ID : 9895809638
Chosen Option : 2

Q.5
4 A, B and C contract a work for ₹ 550 together. A and B are supposed to do $\frac{7}{11}$ of the work. The amount that C gets is:

- Ans
- 1. ₹ 200
 - 2. ₹ 210
 - 3. ₹ 100
 - 4. ₹ 150

Question ID : 9895809639
Chosen Option : 4

Q.5
5 Study the following graph carefully to answer the questions given below.



Percentage of sale of units with respect to its production is between 40% and 43%, in case of company:

- Ans
- 1. B
 - 2. A
 - 3. C
 - 4. B and C both

Question ID : 9895809646
Chosen Option : 2

Q.5
6 In a circular garden of radius 15 m, a path of 2 m wide has to be made inside the garden at the rate of ₹ 24 per sq. m.

The cost of making the path is: (Take $\pi = \frac{22}{7}$)

- Ans
- 1. ₹ 3864
 - 2. ₹ 4100
 - 3. ₹ 4224
 - 4. ₹ 4355

Question ID : 9895809642
Chosen Option : 1

Q.5
7 The mode of a distribution is 24 and the mean is 60. What is its median?

- Ans
- 1. 48
 - 2. 50
 - 3. 51

4. 45

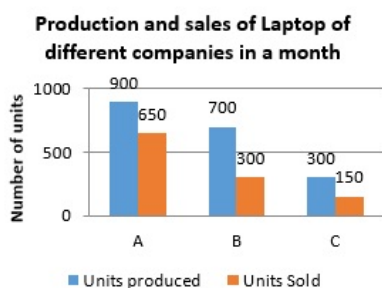
Question ID : 9895809629
Chosen Option : 1

Q.5
8 If 50% of a certain number is equal to $\frac{3}{4}$ th of another number, what is the ratio between the numbers?

- Ans 1. 3 : 2
 2. 2 : 5
 3. 5 : 2
 4. 3 : 4

Question ID : 9895809630
Chosen Option : 2

Q.5
9 Study the following graph carefully to answer the questions given below.



What is the average number of Units of laptop sold by all the Companies together?

- Ans 1. $410\frac{2}{3}$
 2. $391\frac{2}{3}$
 3. $366\frac{2}{3}$
 4. $366\frac{1}{3}$

Question ID : 9895809645
Chosen Option : 4

Q.6
0 ₹ 500 was invested at 12% per annum simple interest and a certain sum of money at 10% per annum simple interest. If the sum of the interests on both the sum after 4 years is ₹ 480, the other sum of money is:

- Ans 1. ₹ 750
 2. ₹ 600
 3. ₹ 550
 4. ₹ 450

Question ID : 9895809636
Chosen Option : 2

Q.6
1 When the price of a cycle is decreased by 20%, then the selling is increased by 20%. What is the impact on the receipt of the revenue?

- Ans 1. 5% profit

- 2. 4% profit
- 3. 4% loss
- 4. No profit no loss

Question ID : 9895809632
Chosen Option : 2

Q.6 Two adjacent sides of a parallelogram are 12 cm and 9 cm and one of the angle is 30°. Find the area of parallelogram.

- 2
- Ans
- 1. 96 sq. cm
 - 2. 108 sq. cm
 - 3. 54 sq. cm
 - 4. 27 sq. cm

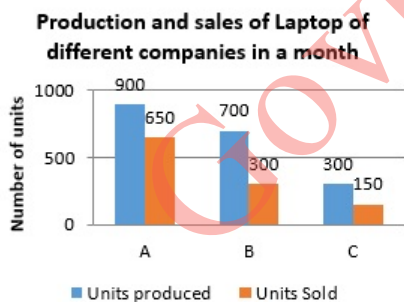
Question ID : 9895809643
Chosen Option : 3

Q.6 The LCM of 779, 943 and 123 is:

- 3
- Ans
- 1. 17917
 - 2. 53751
 - 3. 35834
 - 4. 71668

Question ID : 9895809623
Chosen Option : 3

Q.6 Study the following graph carefully to answer the questions given below.



What is the average number of Units produced by all the Companies together?

- Ans
- 1. $625\frac{1}{3}$
 - 2. $623\frac{1}{3}$
 - 3. $633\frac{2}{3}$
 - 4. $633\frac{1}{3}$

Question ID : 9895809647
Chosen Option : 1

5 If 20% of A = 35% of B, then A : B =

- Ans
- 1. 5 : 7
 - 2. 1 : 2
 - 3. 7 : 4
 - 4. 2 : 3

Question ID : 9895809633
Chosen Option : 1

Q.6 In a family of 4 adults and some minors, the average consumption of rice per head per month is 8.5 kg, while the average consumption for adults is 10 kg per head and for minor it is 5.5 kg per head. The number of minors in the family is:

- Ans
- 1. 5
 - 2. 4
 - 3. 2
 - 4. 3

Question ID : 9895809627
Chosen Option : 2

Q.6 The ratio of the present age of Mahesh and Ajay is 3 : 2 respectively. After 8 years, Ratio of their age will be 11 : 8.
7 What will be the present age of Mahesh's son if his age is half of the present age of Ajay?

- Ans
- 1. 12 years
 - 2. 18 years
 - 3. 16 years
 - 4. 15 years

Question ID : 9895809635
Chosen Option : 1

Q.6 A hollow cylinder with outer radius 4 cm and height 2 cm is made up of 1 cm thick metal sheet. What is the volume of
8 metal used? (Take $\pi = \frac{22}{7}$)

- Ans
- 1. 56 cm^3
 - 2. 40 cm^3
 - 3. 65 cm^3
 - 4. 44 cm^3

Question ID : 9895809644
Chosen Option : 3

Q.6 A shopkeeper organizes a sale on Friday, offering a discount of 23% on all items. Still, he makes a profit of 10% only.
9 By how much percentage CP was lower than MP?

- Ans
- 1. 20%
 - 2. 30%
 - 3. 10%
 - 4. 15%

Question ID : 9895809628

Chosen Option : 1

Q.7
0 Train A took 30 minute to cover a distance of 50 km. If the speed of train B is 40% faster than train A, then the ratio of the respective speed of the both train is:

- Ans
- 1. 5 : 7
 - 2. 3 : 5
 - 3. 5 : 3
 - 4. 7 : 5

Question ID : 9895809641

Chosen Option : 4

Q.7
1 The ratio of time taken by A and B to cover a certain distance is 7 : 9. The ratio of their respective speed will be:

- Ans
- 1. 9 : 7
 - 2. 3 : 7
 - 3. 7 : 3
 - 4. 7 : 9

Question ID : 9895809640

Chosen Option : 2

Q.7
2 The sides of a triangle are in the ratio 6 : 4 : 3 and its perimeter is 104 cm. The length of the longest side (in cm) is:

- Ans
- 1. 120
 - 2. 56
 - 3. 44
 - 4. 48

Question ID : 9895809634

Chosen Option : 1

Q.7
3 $\frac{4}{5} \div \frac{4}{5}$ of $\frac{1}{10} \times \frac{1}{20} = ?$

- Ans
- 1. $\frac{1}{2}$
 - 2. $\frac{1}{10}$
 - 3. $\frac{1}{15}$
 - 4. $\frac{1}{5}$

Question ID : 9895809624

Chosen Option : 1

Q.7
4 A person wants to sell an item at a profit of 20% but he sold it for ₹ 480 at a loss of 20%. At what price should have he sold it to get the required profit?

- Ans
- 1. ₹ 600
 - 2. ₹ 720

3. ₹ 840

4. ₹ 750

Question ID : 9895809631
Chosen Option : 3

Q.7 What approximate value should come in place of the question mark (?) in the following equation?
5

$$\left(\frac{1}{9} \div \frac{1}{9} \text{ of } \frac{1}{3}\right) \text{ of } \frac{1}{6} = ?$$

Ans

1. $\frac{1}{3}$

2. $\frac{1}{6}$

3. $\frac{1}{9}$

4. $\frac{1}{2}$

Question ID : 9895809625
Chosen Option : 4

Section : English Language

Q.1 Identify the segment in the sentence which contains the grammatical error from the given options.

Sujata and Kavita were sent to buy groceries for their neighborhood shop.

Ans

1. to buy

2. were sent

3. Sujata and Kavita

4. for their

Question ID : 9895809801
Chosen Option : 2

Q.2 Select the most appropriate word to fill in the blank.

All attempts to _____ our late leader have failed. People still love him and cherish his memory.

Ans

1. defame

2. demolish

3. distress

4. damage

Question ID : 9895809824
Chosen Option : 1

Q.3 Select the antonym of the given word.

EVIDENT

Ans

1. Noticeable

2. Obscure

3. Conspicuous

4. Apparent

Question ID : 9895809817
Chosen Option : 4

Q.4 Select the most appropriate word to fill in the blank.

When dams are built, thousands of people _____.

- Ans
- 1. were displaced
 - 2. are displaced
 - 3. is displaced
 - 4. was displaced

Question ID : 9895809807
Chosen Option : 2

Q.5 Select the meaning of the given idiom.

To beat about the bush

- Ans
- 1. To avoid coming to the point
 - 2. To talk too much
 - 3. To punish an innocent person
 - 4. To be aggressive

Question ID : 9895809819
Chosen Option : 4

Q.6 Select the wrongly spelt word.

- Ans
- 1. Glamourous
 - 2. Grandure
 - 3. Grievous
 - 4. Gauge

Question ID : 9895809822
Chosen Option : 1

Q.7 Select the antonym of the given word.

MOURNFUL

- Ans
- 1. Sorrowful
 - 2. Joyous
 - 3. Depressed
 - 4. Melancholy

Question ID : 9895809816
Chosen Option : 3

Q.8

Select the synonym of the given word.

ATTAIN

- Ans
- 1. Prosper
 - 2. Lose
 - 3. Achieve
 - 4. Abandon

Question ID : 9895809815
Chosen Option : 3

Q.9 Select the meaning of the given idiom.

To take heart

- Ans
- 1. To gain confidence
 - 2. To love everyone
 - 3. To take matter seriously
 - 4. To be emotional

Question ID : 9895809818
Chosen Option : 2

Q.10 Select the wrongly spelt word.

- Ans
- 1. Grateful
 - 2. Government
 - 3. Grandeur
 - 4. Guarantee

Question ID : 9895809823
Chosen Option : 1

Q.11 Select the word which means the same as the group of words given.

A person of unconventional and slightly strange views or behaviour

- Ans
- 1. Traditional
 - 2. Conventional
 - 3. Eccentric
 - 4. Wholesome

Question ID : 9895809820
Chosen Option : 2

Q.12 Select the most appropriate word to fill in the blank.

By her _____ manner, she made herself liked by everyone who met her.

- Ans
- 1. curious
 - 2. sublime
 - 3. winsome
 - 4. victorious

Question ID : 9895809825
Chosen Option : 4

Q.1 Select the most appropriate option to substitute the underlined segment in the given sentence. If there is no need to substitute it, select No substitution required.

3

Very often, the small farmers needed to borrowed money to meet high expenses.

- Ans
- 1. need to borrow
 - 2. needing to borrow
 - 3. No substitution required
 - 4. needs to borrow

Question ID : 9895809804
Chosen Option : 4

Q.1 Select the most appropriate option to substitute the underlined segment in the given sentence. If there is no need to substitute it, select No substitution required.

4

People in urban areas could have enter markets without stepping out of their homes via the Internet.

- Ans
- 1. could entered markets
 - 2. can enter markets
 - 3. can entered markets
 - 4. No substitution required

Question ID : 9895809803
Chosen Option : 2

Q.1 Select the most appropriate option to substitute the underlined segment in the given sentence. If there is no need to substitute it, select No substitution required.

5

The merchant distributes work among the weavers based on the orders received.

- Ans
- 1. among all of the weavers
 - 2. among weaver
 - 3. between weaver
 - 4. No substitution required

Question ID : 9895809805
Chosen Option : 3

Comprehension:

In the following passage some words have been deleted. Fill in the blanks with the help of the alternatives given. Select the most appropriate option for each number.

A dam is built across a river at sites where one can (1) _____ a lot of water. This forms (2) _____ reservoir and as the water collects, it (3) _____ vast areas of land. This is (4) _____ the wall of the dam across the river is high and the (5) _____ spreads over a large area.

SubQuestion No : 16

Q.1 Select the most appropriate option that will fill in the blank number 1

Ans

- 1. assemble
- 2. dispose
- 3. collect
- 4. flow

Question ID : 9895809809
Chosen Option : 3

Comprehension:

In the following passage some words have been deleted. Fill in the blanks with the help of the alternatives given. Select the most appropriate option for each number.

A dam is built across a river at sites where one can (1) _____ a lot of water. This forms (2) _____ reservoir and as the water collects, it (3) _____ vast areas of land. This is (4) _____ the wall of the dam across the river is high and the (5) _____ spreads over a large area.

SubQuestion No : 17

Q.1
7 Select the most appropriate option that will fill in the blank
number 2

- Ans
- 1. one
 - 2. the
 - 3. an
 - 4. a

Question ID : 9895809810
Chosen Option : 3

Comprehension:

In the following passage some words have been deleted. Fill in the blanks with the help of the alternatives given. Select the most appropriate option for each number.

A dam is built across a river at sites where one can (1) _____ a lot of water. This forms (2) _____ reservoir and as the water collects, it (3) _____ vast areas of land. This is (4) _____ the wall of the dam across the river is high and the (5) _____ spreads over a large area.

SubQuestion No : 18

Q.1
8 Select the most appropriate option that will fill in the blank
number 3

- Ans
- 1. ruins
 - 2. submerges
 - 3. separates
 - 4. divides

Question ID : 9895809811
Chosen Option : 1

Comprehension:

In the following passage some words have been deleted. Fill in the blanks with the help of the alternatives given. Select the most appropriate option for each number.

A dam is built across a river at sites where one can (1) _____ a lot of water. This forms (2) _____ reservoir and as the water collects, it (3) _____ vast areas of land. This is (4) _____ the wall of the dam across the river is high and the (5) _____ spreads over a large area.

SubQuestion No : 19

Q.1
9 Select the most appropriate option that will fill in the blank number 4

- Ans
- 1. though
 - 2. because
 - 3. yet
 - 4. so

Question ID : 9895809812
Chosen Option : 1

Comprehension:

In the following passage some words have been deleted. Fill in the blanks with the help of the alternatives given. Select the most appropriate option for each number.

A dam is built across a river at sites where one can (1) _____ a lot of water. This forms (2) _____ reservoir and as the water collects, it (3) _____ vast areas of land. This is (4) _____ the wall of the dam across the river is high and the (5) _____ spreads over a large area.

SubQuestion No : 20

Q.2
0 Select the most appropriate option that will fill in the blank number 5

- Ans
- 1. water
 - 2. land
 - 3. river
 - 4. dam

Question ID : 9895809813
Chosen Option : 1

Q.2
1 Select the synonym of the given word.

ANNOY

- Ans
- 1. Gratify
 - 2. Irritate
 - 3. Satisfy
 - 4. Please

Question ID : 9895809814

Chosen Option : 3

Q.2 Identify the segment in the sentence which contains the grammatical error from the given options.

2

One of the advantages of weekly markets is that much things are available at one place.

- Ans
- 1. one place
 - 2. much things
 - 3. weekly markets
 - 4. One of the

Question ID : 9895809800

Chosen Option : 3

Q.2 Identify the segment in the sentence which contains the grammatical error from the given options.

3

In clinics, you may have noticed sales representatives waiting with doctors.

- Ans
- 1. In clinics
 - 2. may have noticed
 - 3. waiting with
 - 4. sales representatives

Question ID : 9895809802

Chosen Option : 2

Q.2 Select the most appropriate word to fill in the blank.

4

The wages of daily workers are fixed according _____ their skills.

- Ans
- 1. from
 - 2. to
 - 3. of
 - 4. with

Question ID : 9895809806

Chosen Option : 1

Q.2 Select the word which means the same as the group of words given.

5

A solution or remedy for all difficulties or diseases.

- Ans
- 1. Ailment
 - 2. Riddle
 - 3. Panacea
 - 4. Dilemma

Question ID : 9895809821

Chosen Option : 2

Section : Hindi Language

Q.1 दिए गए वाक्य में रेखांकित खंड को प्रतिस्थापित करने के लिए उपयुक्त विकल्प का चयन करें।

राम और श्याम दोनों साथ काम करने वाले हैं।

- Ans
- 1. दूरदर्शी
 - 2. सहकर्मी
 - 3. सहपाठी
 - 4. दुराचारी

Question ID : 9895809934
Chosen Option : --

Q.2 रिक्त स्थान को भरने के लिए उपयुक्त शब्द का चयन करें।
जो अपराध करता है, वह _____ है।

- Ans
- 1. बुद्धिमान
 - 2. समझदार
 - 3. दण्डनीय
 - 4. होशियार

Question ID : 9895809937
Chosen Option : --

Q.3 रिक्त स्थान को भरने के लिए उपयुक्त शब्द का चयन करें।
उसने परीक्षा दी, किंतु उसे _____ नहीं मिली।

- Ans
- 1. योग्यता
 - 2. तारीख
 - 3. सफलता
 - 4. प्रतिभा

Question ID : 9895809939
Chosen Option : --

Q.4 'विधि' शब्द का विलोम शब्द है-

- Ans
- 1. निषेध
 - 2. नकारात्मक
 - 3. दंड
 - 4. निधि

Question ID : 9895809946
Chosen Option : --

Q.5 'सम्पत्ति' शब्द का विलोम शब्द है-

- Ans
- 1. समस्या
 - 2. धन
 - 3. विपत्ति
 - 4. कष्ट

Question ID : 9895809947

Chosen Option : --

Q.6 'कल पड़ना' मुहावरे का अर्थ है-

- Ans
- 1. पश्चाताप करना
 - 2. अस्थिर होना
 - 3. चैन मिलना
 - 4. चुप रहना

Question ID : 9895809951

Chosen Option : --

Q.7 दिए गए वाक्य का वह भाग ज्ञात करें जिसमें कोई त्रुटि है।

मानव जीवन की सार्थकता परहित के लिए बलिदान करने का भावना में निहित है।

- Ans
- 1. परहित के लिए
 - 2. मानव जीवन की सार्थकता
 - 3. में निहित है।
 - 4. बलिदान करने का भावना

Question ID : 9895809932

Chosen Option : --

Q.8 दिए गए वाक्य का वह भाग ज्ञात करें जिसमें कोई त्रुटि है।

गाँधी जी वकालत छोड़कर देश के स्वतंत्रता संग्राम पर कूद पड़े।

- Ans
- 1. गाँधी जी
 - 2. वकालत छोड़कर
 - 3. स्वतंत्रता संग्राम पर कूद पड़े।
 - 4. देश के

Question ID : 9895809931

Chosen Option : --

Q.9 सही वर्तनी वाले शब्द का चयन करें।

- Ans
- 1. अवश्यकता
 - 2. आवस्यकता
 - 3. आवश्यकता
 - 4. अवस्यकता

Question ID : 9895809955

Chosen Option : --

Q.10 सही वर्तनी वाले शब्द का चयन करें।

Ans

1. ओदार्य

2. औदारिता

3. औदार

4. औदार्य

Question ID : 9895809954

Chosen Option : --

Q.1 दिए गए वाक्य में रेखांकित खंड को प्रतिस्थापित करने के लिए उपयुक्त विकल्प का चयन करें।

हमारे विद्यालय में वर्ष में एक बार होने वाले समारोह की तैयारियाँ हो रही हैं।

Ans 1. त्रिमासिक

2. वार्षिक

3. त्रयोदशी

4. अर्द्धवार्षिक

Question ID : 9895809935

Chosen Option : --

Q.2 दिए गए वाक्य का वह भाग ज्ञात करें जिसमें कोई त्रुटि है।

घटना के समय वह सोने में जाने वाली थी किन्तु न जा सकी।

Ans 1. किन्तु न जा सकी।

2. घटना के समय

3. जाने वाली थी

4. वह सोने में

Question ID : 9895809930

Chosen Option : --

Q.3 'दूर की सोचने वाला' के लिए एक शब्द प्रयुक्त होता है-

Ans 1. ज्योतिषी

2. समदर्शी

3. भविष्यवक्ता

4. दूरदर्शी

Question ID : 9895809952

Chosen Option : --

Q.4 'गंगा' का पर्यायवाची शब्द है-

Ans 1. मंदाकिनी

2. नदी

3. कालिन्दी

4. सरिता

Question ID : 9895809948
Chosen Option : --

Q.1
5 रिक्त स्थान को भरने के लिए उपयुक्त शब्द का चयन करें।

जंगल में _____ अंधकार था।

Ans 1. महान

2. घना

3. अधिक

4. विशाल

Question ID : 9895809936
Chosen Option : --

Comprehension:

निम्नलिखित गद्यांश के रिक्त स्थानों की पूर्ति गद्यांश के नीचे दिए गए प्रश्नों के अनुसार कीजिए -

एक बार ऐसा हुआ कि गुजरात देश में बड़ा _____ (1) अकाल पड़ा। उन दिनों गुजरात में कवि भारवि रहते थे। उन्होंने सोचा इस अकाल में चलकर राजा भोज की ही _____ (2) लें, वह विद्वानों का _____ (3) करता है और धन भी देता है। कवि की स्त्री को यह बात _____ (4) आई और दोनों स्त्री-पुरुष राजा भोज के _____ (5) में जाने के लिए निकल पड़े।

SubQuestion No : 16

Q.1
6 गद्यांश में संकेतित रिक्त स्थान (1) के लिए उपयुक्त शब्द होगा-

Ans 1. भारी

2. अनिश्चित

3. हलका

4. निश्चित

Question ID : 9895809941
Chosen Option : --

Comprehension:

निम्नलिखित गद्यांश के रिक्त स्थानों की पूर्ति गद्यांश के नीचे दिए गए प्रश्नों के अनुसार कीजिए -

एक बार ऐसा हुआ कि गुजरात देश में बड़ा _____ (1) अकाल पड़ा। उन दिनों गुजरात में कवि भारवि रहते थे। उन्होंने सोचा इस अकाल में चलकर राजा भोज की ही _____ (2) लें, वह विद्वानों का _____ (3) करता है और धन भी देता है। कवि की स्त्री को यह बात _____ (4) आई और दोनों स्त्री-पुरुष राजा भोज के _____ (5) में जाने के लिए निकल पड़े।

SubQuestion No : 17

Q.1
7 गद्यांश में संकेतित रिक्त स्थान (2) के लिए उपयुक्त शब्द होगा-

- Ans
- 1. खबर
 - 2. समाचार
 - 3. सूचना
 - 4. शरण

Question ID : 9895809942
Chosen Option : --

Comprehension:

निम्नलिखित गद्यांश के रिक्त स्थानों की पूर्ति गद्यांश के नीचे दिए गए प्रश्नों के अनुसार कीजिए -

एक बार ऐसा हुआ कि गुजरात देश में बड़ा _____ (1) अकाल पड़ा। उन दिनों गुजरात में कवि भारवि रहते थे। उन्होंने सोचा इस अकाल में चलकर राजा भोज की ही _____ (2) लें, वह विद्वानों का _____ (3) करता है और धन भी देता है। कवि की स्त्री को यह बात _____ (4) आई और दोनों स्त्री-पुरुष राजा भोज के _____ (5) में जाने के लिए निकल पड़े।

SubQuestion No : 18

Q.1
8 गद्यांश में संकेतित रिक्त स्थान (3) के लिए
उपयुक्त शब्द होगा-

- Ans
- 1. तिरस्कार
 - 2. आदर
 - 3. निरादर
 - 4. अपमान

Question ID : 9895809943
Chosen Option : --

Comprehension:

निम्नलिखित गद्यांश के रिक्त स्थानों की
पूर्ति गद्यांश के नीचे दिए गए प्रश्नों के
अनुसार कीजिए -

एक बार ऐसा हुआ कि गुजरात देश में बड़ा
_____ (1) अकाल पड़ा। उन दिनों
गुजरात में कवि भारवि रहते थे। उन्होंने
सोचा इस अकाल में चलकर राजा भोज की
ही _____ (2) लें, वह विद्वानों का
_____ (3) करता है और धन भी देता
है। कवि की स्त्री को यह बात _____
(4) आई और दोनों स्त्री-पुरुष राजा भोज के
_____ (5) में जाने के लिए निकल पड़े।

SubQuestion No : 19

Q.1
9 गद्यांश में संकेतित रिक्त स्थान (4) के लिए
उपयुक्त शब्द होगा-

- Ans
- 1. नापसंद
 - 2. रोचक
 - 3. पसन्द
 - 4. अपसंद

Question ID : 9895809944
Chosen Option : --

Comprehension:

निम्नलिखित गद्यांश के रिक्त स्थानों की पूर्ति गद्यांश के नीचे दिए गए प्रश्नों के अनुसार कीजिए -

एक बार ऐसा हुआ कि गुजरात देश में बड़ा _____ (1) अकाल पड़ा। उन दिनों गुजरात में कवि भारवि रहते थे। उन्होंने सोचा इस अकाल में चलकर राजा भोज की ही _____ (2) लें, वह विद्वानों का _____ (3) करता है और धन भी देता है। कवि की स्त्री को यह बात _____ (4) आई और दोनों स्त्री-पुरुष राजा भोज के _____ (5) में जाने के लिए निकल पड़े।

SubQuestion No : 20

Q.2 गद्यांश में संकेतित रिक्त स्थान (5) के लिए उपयुक्त शब्द होगा-

- Ans
- 1. घाट
 - 2. घरबार
 - 3. दरबार
 - 4. गांव

Question ID : 9895809945
Chosen Option : --

Q.2 रिक्त स्थान को भरने के लिए उपयुक्त शब्द का चयन करें।

आचरण की सभ्यतामयी भाषा सदा _____ रहती है।

- Ans
- 1. कटु
 - 2. प्रखर
 - 3. मौन
 - 4. मुखर

Question ID : 9895809938
Chosen Option : --

Q.2 'जिसे छोड़ा न जा सके' के लिए एक शब्द प्रयुक्त होता है-

- Ans
- 1. असाधारण
 - 2. अपरिहार्य
 - 3. कठिन
 - 4. असामान्य

Question ID : 9895809953
Chosen Option : --

Q.2
3 'आँखे फेर लेना' मुहावरे का अर्थ है-

- Ans
- 1. गुस्सा होना
 - 2. प्रतिकूल होना
 - 3. क्रोधित होना
 - 4. धोखा देना

Question ID : 9895809950
Chosen Option : --

Q.2
4 दिए गए वाक्य में रेखांकित खंड को प्रतिस्थापित करने के लिए उपयुक्त विकल्प का चयन करें।

आगरा का ताजमहल ऐतिहासिक है, जो देखने योग्य है।

- Ans
- 1. सर्वप्रिय
 - 2. दर्शनीय
 - 3. ऐतिहासिक
 - 4. दिखावटी

Question ID : 9895809933
Chosen Option : --

Q.2
5 'सखा' का पर्यायवाची शब्द है-

- Ans
- 1. अखंड
 - 2. हमसफर
 - 3. मित्र
 - 4. राहगीर

Question ID : 9895809949
Chosen Option : --