

Constable (GD) in CAPFs, NIA, SSF and Rifleman (GD) in Assam Rifles Examination, 2018

Roll No. :	www.GovtJobsAlert.In
Registration No.	
Name :	
Exam Venue :	ION Digital Zone iDZ Perecherla
Exam Time :	12:30 PM - 2:00 PM
Exam Date :	11/02/2019

Section : General Section

Q.1 Identify the odd one from the following.

- Ans
- 1. EV
 - 2. DX
 - 3. HS
 - 4. KP

Question ID : 9895802451
Chosen Option : 4

Q.2 In the following number series, two numbers have been put within brackets. Study the series carefully and select the correct alternative with respect to the series.

3, 9, (27), 81, (243), 729, 2187

Ans

- 1. The first bracketed number (from the left) is correct and the second is incorrect.
- 2. The first bracketed number (from the left) is incorrect and the second is correct.
- 3. Both the bracketed numbers are incorrect.
- 4. Both the bracketed numbers are correct.

Question ID : 9895802467
Chosen Option : 2

Q.3 Seven employees, T, U, V, W, X, Y and Z, reach their factory in a particular sequence. Y reaches immediately before T but does not immediately follow W. V is the last one to reach. X immediately follows T and is subsequently followed by Z. W reaches before T. Who is the second to reach the factory?

- Ans
- 1. U
 - 2. W
 - 3. Z
 - 4. X

Question ID : 9895802459
Chosen Option : 3

Q.4

Read the given statements and conclusions carefully. Assuming that the information given in the statements is true, even if they appear to be at variance with commonly known facts, decide which of the conclusions logically follow(s) from the statements beyond reasonable doubt.

Statements:

No cat is a monkey.

No monkey is a cow.

Conclusions:

I. No cat is a cow.

II. Some cows are monkeys.

- Ans
- 1. Only conclusion II follows.
 - 2. Neither conclusion I nor conclusion II follows.
 - 3. Only conclusion I follows.
 - 4. Both conclusions I and II follow.

Question ID : 9895802460

Chosen Option : 3

Q.5 Select the term that will come next in the following series.

a, cd, fgh, jklm, opqrs, _____

- Ans
- 1. uvwxy
 - 2. tuvwx
 - 3. vwxyza
 - 4. uvwxyz

Question ID : 9895802449

Chosen Option : 4

Q.6 Identify the correct option to complete the following series.

5, 8, 13, 20, 29, _____, 53, 68, 85

- Ans
- 1. 40
 - 2. 35
 - 3. 36
 - 4. 39

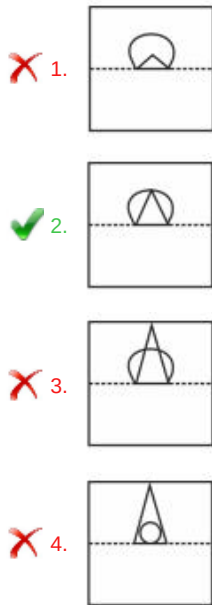
Question ID : 9895802463

Chosen Option : 1

Q.7 A square transparent sheet with a pattern is given. How will the pattern appear when the transparent sheet is folded along the dotted line?



Ans



Question ID : 9895802472
Chosen Option : 2

Q.8 Select the option that is related to the third term in the same way as the second term is related to the first term.

ACE : EIM :: DFH : ?

- Ans 1. HPL
 2. PLH
 3. PHL
 4. HLP

Question ID : 9895802453
Chosen Option : 4

Q.9 Identify the correct option to complete the following series.

50, 49, 47, 44, 40, 35, _____, 22

- Ans 1. 29
 2. 30
 3. 25
 4. 27

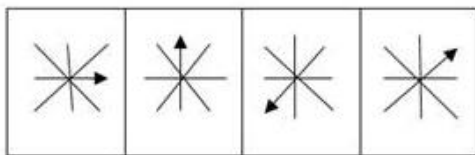
Question ID : 9895802462
Chosen Option : 4

Q.1 'Athletics' is related to 'Stadium' in the same way as 'Skating' is related to '_____'.
0

- Ans 1. Rink
 2. Track
 3. Ground
 4. Court

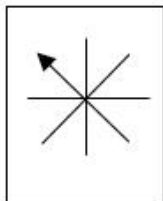
Question ID : 9895802454
Chosen Option : 2

Q.1 Select the figure that will come next in the following series.

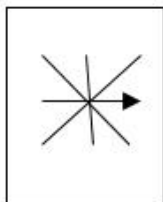


Ans

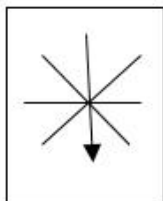
X 1.



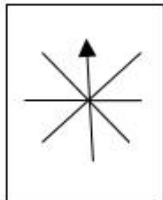
X 2.



✓ 3.



X 4.



Question ID : 9895802468
Chosen Option : 1

Q.1 Six students are sitting in a row. Akbar is to the left of the person sitting in the middle, but to the right of Sekar. Prakash is to the right of Deva, and Ram is to the right of Prakash. Ram is second from the person sitting in the middle. Who is the person sitting in the middle?

Ans

X 1. Sekar

X 2. Akbar

✓ 3. Deva

X 4. Ram

Question ID : 9895802457
Chosen Option : 3

Q.1 If KITCHEN is coded as LKWGMKU, then SHAMPOO will be coded as _____.

Ans

✓ 1. TJDQUUV

X 2. TJEQUUV

X 3. TJDQTUV

X 4. TJDQTUU

Question ID : 9895802456
Chosen Option : 2

Q.1
4 Identify the odd pair from the following.

- Ans
- 1. Bird : Nest
 - 2. Pig : Sty
 - 3. King : Palace
 - 4. Eagle : Swoop

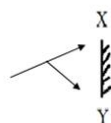
Question ID : 9895802452
Chosen Option : 1

Q.1
5 If B = 3 and H = 9, then SCHOOL = _____.

- Ans
- 1. 76
 - 2. 78
 - 3. 69
 - 4. 96

Question ID : 9895802455
Chosen Option : 3

Q.1
6 Choose the alternative which most closely resembles the mirror image of the given figure when mirror is placed at right side.



- Ans
- 1.
 - 2.
 - 3.
 - 4.

Question ID : 9895802471
Chosen Option : 3

Q.1
7 Select the option that is related to the third term in the same way as the second term is related to the first term.

$$\frac{5}{6} : 121 :: \frac{8}{9} : \underline{\hspace{2cm}}$$

- Ans
- 1. 300
 - 2. 289
 - 3. 145
 - 4. 356

Question ID : 9895802464
Chosen Option : 3

Q.1 The statements below are followed by two conclusions labeled I and II. Assuming that the information in the statements is true, even if it appears at variance with generally established facts, decide which conclusion(s) logically and definitely follow(s) from the information given in the statements.

Statements:

All papers are books.

All books are papaya.

Conclusion

I. All papers are papaya.

II. Some papayas are papers.

- Ans**
- 1. Only conclusion II follows.
 - 2. Both conclusions I and II follow.
 - 3. Only conclusion I follows.
 - 4. Neither conclusion I nor conclusion II follows.

Question ID : 9895802461
Chosen Option : 4

Q.1 A medical representative plans to visit each of six hospitals — A, B, C, D, E and F — exactly once during the course of one day. He is setting up his schedule for the day according to the following conditions:

i. He must visit A before B and E.

ii. He must visit B before D.

iii. The third hospital he visits must be C.

Which of the following could be the order in which the medical representative visits the six hospitals?

- Ans**
- 1. A, F, C, D, E, B
 - 2. C, E, A, B, D, F
 - 3. C, F, A, E, D, B
 - 4. A, B, C, D, E, F


Question ID : 9895802458
Chosen Option : 4

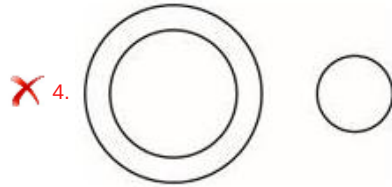
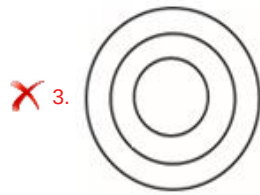
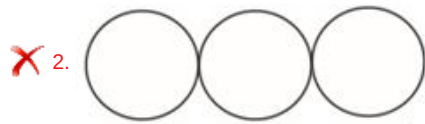
Q.2 Select the Venn diagram that best illustrates the relationship between the three given classes.

Languages, Hindi, Malayalam

Ans

1.





Question ID : 9895802473
Chosen Option : 1

Q.2
1 Identify the number that is different from the rest.

- Ans 1. 25
 2. 625
 3. 115
 4. 125

Question ID : 9895802465
Chosen Option : 2

Q.2
2 Identify the odd one from the following.

- Ans 1. Weight
 2. Small
 3. Volume
 4. Height

Question ID : 9895802450
Chosen Option : 2

Q.2
3 Which two signs need to be interchanged to make the given equation correct?

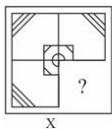
$$20 \div 20 + 20 - 20 \times 20 = 20$$

- Ans 1. + and \times
 2. \div and \times
 3. + and \div
 4. + and -

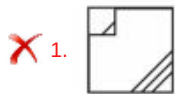
Question ID : 9895802466
Chosen Option : 2

Q.2
4

Select a figure from amongst the four alternatives, that when placed in the blank space (?) of figure X will complete the pattern. (Rotation is not allowed).



Ans

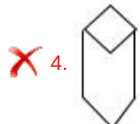
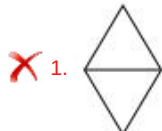


Question ID : 9895802470
Chosen Option : 1

Q.2 Select the option in which the given figure is embedded.



Ans



Question ID : 9895802469
Chosen Option : 2

Q.2 Prithvi Raj Chauhan was defeated at the hands of _____, in the battle of Tarain, 1192.

Ans

1. Umar II

2. Mohammad Ghori

3. Harun Al Rashid

4. Abu Bakr

Question ID : 9895803005

Chosen Option : 2

Q.2
7 The directional growth movement in plants due to touch is called _____.

- Ans
- 1. geotropism
 - 2. chemotropism
 - 3. thigmonasty
 - 4. phototropism

Question ID : 9895803027

Chosen Option : 1

Q.2
8 The largest backwater lake in Odisha is _____.

- Ans
- 1. Dal lake
 - 2. Wular lake
 - 3. Chilika lake
 - 4. Pulicat lake

Question ID : 9895803011

Chosen Option : 2

Q.2
9 Identify the author of the book "Straight from the heart"

- Ans
- 1. Saurav Ganguly
 - 2. Sachin Tendulkar
 - 3. M.S. Dhoni
 - 4. Kapil Dev

Question ID : 9895803021

Chosen Option : 2

Q.3
0 The All-India War Memorial, built in the memory of the Indian soldiers who laid down their lives in the First World War, is known today as _____.

- Ans
- 1. India Gate
 - 2. Char Minar
 - 3. Lal Qila
 - 4. Jama Masjid

Question ID : 9895803020

Chosen Option : 1

Q.3
1 When was the Planning Commission set up?

- Ans
- 1. 2000
 - 2. 2019
 - 3. 1950
 - 4. 1947

Question ID : 9895803013

Chosen Option : 1

Q.3
2 The three-tier system of local government does NOT include the _____.

- Ans
- 1. Panchayat Samiti
 - 2. Gram Panchayat
 - 3. Village Committee
 - 4. Zila Parishad

Question ID : 9895803017
Chosen Option : 3

Q.3
3 Name the famous Indian cricketer who wrote the book 'A Century Is Not Enough'.

- Ans
- 1. Virat Kohli
 - 2. Sachin Tendulkar
 - 3. Virender Sehwag
 - 4. Sourav Ganguly

Question ID : 9895803006
Chosen Option : 2

Q.3
4 _____ won the Miss World 2017 pageant.

- Ans
- 1. Yukta Mukhi
 - 2. Manushi Chillar
 - 3. Lara Dutta
 - 4. Anukreethy

Question ID : 9895803023
Chosen Option : 1

Q.3
5 The Statue of Unity in India is the world's tallest statue of _____.

- Ans
- 1. M.K Gandhi
 - 2. Vinoba Bhave
 - 3. Dr B.R Ambedkar
 - 4. Sardar Vallabhbhai Patel

Question ID : 9895803019
Chosen Option : 1

Q.3
6 The first lady Indian Air Force officer to fly MIG 21 is _____.

- Ans
- 1. Bhavna Sharma
 - 2. Anjali Gupta
 - 3. Khusboo Mehta
 - 4. Avani Chaturvedi

Question ID : 9895803022
Chosen Option : 2

Q.3
7 The deltas of the Mahanadi and the Godavari are rich in _____ soil.

- Ans
- 1. forest

- 2. black
- 3. alluvial
- 4. arid

Question ID : 9895803009
Chosen Option : 4

Q.3
8 Which of the following is the hardest substance?

- Ans
- 1. Silver
 - 2. Diamond
 - 3. Iron
 - 4. Coal

Question ID : 9895803010
Chosen Option : 3

Q.3
9 The United States of America adopted a democratic constitution in _____.

- Ans
- 1. 1787
 - 2. 1877
 - 3. 1932
 - 4. 2000

Question ID : 9895803016
Chosen Option : 3

Q.4
0 Which of the following is NOT a multicellular animal?

- Ans
- 1. Cat
 - 2. Horse
 - 3. Amoeba
 - 4. Human

Question ID : 9895803026
Chosen Option : 1

Q.4
1 A person with the blood group _____ is considered to be a universal donor.

- Ans
- 1. O negative
 - 2. O positive
 - 3. AB negative
 - 4. AB positive

Question ID : 9895803024
Chosen Option : 2

Q.4
2 In India, currency notes of ₹ 500 and ₹ 1,000 were declared invalid in the year?

- Ans
- 1. 1998
 - 2. 2019
 - 3. 2016

4. 2001

Question ID : 9895803014
Chosen Option : 3

Q.4
3 The smallest living bird is the _____.

- Ans
- 1. house sparrow
 - 2. dove
 - 3. hummingbird
 - 4. canary

Question ID : 9895803025
Chosen Option : 1

Q.4
4 In which battle Napoleon was defeated?

- Ans
- 1. Jena
 - 2. Arcole
 - 3. Waterloo
 - 4. Ligny

Question ID : 9895803003
Chosen Option : 1

Q.4
5 Which Hindi movie is based on the Indian hockey team on their first Olympic gold since India became independent?

- Ans
- 1. Gold
 - 2. MS Dhoni
 - 3. Chak De
 - 4. Lagaan

Question ID : 9895803007
Chosen Option : 4

Q.4
6 _____ is a dance form which represents a unique synthesis of Hindu and Muslim genius in art.

- Ans
- 1. Odissi
 - 2. Kathkali
 - 3. Kathak
 - 4. Manipuri

Question ID : 9895803018
Chosen Option : 3

Q.4
7 The National Rural Employment Guarantee Act was passed in _____.

- Ans
- 1. 2000
 - 2. 2019
 - 3. 2005
 - 4. 1900

Question ID : 9895803012

Chosen Option : 2

Q.4
8 Begum Hazrat Mahal is associated to which of the following revolts of India?

- Ans
- 1. Paik Revolt 1817
 - 2. Sepoy Mutiny 1857
 - 3. Gond Revolt 1941
 - 4. Moplah Revolt 1921

Question ID : 9895803004
Chosen Option : 1

Q.4
9 Which state has the largest coast line?

- Ans
- 1. Gujarat
 - 2. Karnataka
 - 3. Kerala
 - 4. Tamil Nadu

Question ID : 9895803008
Chosen Option : 1

Q.5
0 Which country gave universal suffrage since the 19th century?

- Ans
- 1. India
 - 2. Pakistan
 - 3. New Zealand
 - 4. Sri Lanka

Question ID : 9895803015
Chosen Option : 1

Q.5
1 The average weight of a group of 24 students increases by 2 kg when the weight of teacher is also included. If the initial average weight of the group of 24 students was 30 kg, then what is the weight of teacher?

- Ans
- 1. 80 kg
 - 2. 32 kg
 - 3. 92 kg
 - 4. 82 kg

Question ID : 9895804135
Chosen Option : 2

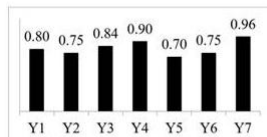
Q.5
2 What is the value of $\left(\frac{5}{2} \text{ of } 5 \div 4 - 2 \text{ of } \frac{1}{7} \div \frac{1}{7}\right)$?

- Ans
- 1. $\frac{17}{16}$
 - 2. $\frac{23}{18}$
 - 3. $\frac{13}{8}$

✓ 4. $\frac{9}{8}$

Question ID : 9895804132
Chosen Option : 1

Q.5 The bar chart given below shows the ratio of expenditure to revenue for seven consecutive years Y1, Y2, Y3, Y4, Y5, Y6 and Y7.



In which year is the profit highest?

- Ans
- 1. Y2
 - 2. Y6
 - 3. Cannot be determined
 - 4. Y5

Question ID : 9895804155
Chosen Option : 3

Q.5 If $P : Q : R = 5 : 3 : 6$, then what will be the ratio of $(P/Q) : (Q/R) : (R/P)$?

- Ans
- 1. 50 : 45 : 36
 - 2. 75 : 15 : 36
 - 3. 50 : 15 : 36
 - 4. 40 : 12 : 27

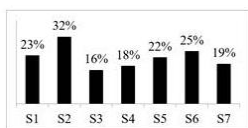
Question ID : 9895804141
Chosen Option : 1

Q.5 If the diameter of a circle increases by 15%, then what will be the percentage increase in its area?

- Ans
- 1. 32.25%
 - 2. 30.3%
 - 3. 35.75%
 - 4. 25%

Question ID : 9895804151
Chosen Option : 4

Q.5 The bar chart given below shows the amount of sugar used in making 7 different varieties of sweets S1, S2, S3, S4, S5, S6 and S7 has been shown as a percentage of total weight of the sweet.



The combined weight of sweet S5 and S3 is 300 kg. What is the total amount of sugar used in these two sweets together?

- Ans
- 1. 54 kg
 - 2. Cannot be determined
 - 3. 57 kg

4. 60 kg

Question ID : 9895804154
Chosen Option : 2

Q.5
7 The perimeter of a square and a circle are same. If the area of the circle is 1386 cm^2 , then what will be the area of the square?

- Ans
- 1. 1225 cm^2
 - 2. 1024 cm^2
 - 3. 841 cm^2
 - 4. 1089 cm^2

Question ID : 9895804150
Chosen Option : 3

Q.5
8 A : B = 5 : 8 and B : C = 11 : 13. If A = 110, then what is the value of C?

- Ans
- 1. 88
 - 2. 176
 - 3. 104
 - 4. 208

Question ID : 9895804143
Chosen Option : 1

Q.5
9 If Rohit can cover a distance of 1188 km in 22 hours, then what is the speed of Rohit?

- Ans
- 1. 15 m/s
 - 2. 54 m/s
 - 3. 25 m/s
 - 4. 48 m/s

Question ID : 9895804149
Chosen Option : 2

Q.6
0 The marked price of a chair and a table are in the ratio 2:3 respectively. The shopkeeper gives 20% discount on the chair. If the combined discount on both the chair and the table is 26%, then what will be the discount given on the table?

- Ans
- 1. 28%
 - 2. 30%
 - 3. 34%
 - 4. 32%

Question ID : 9895804136
Chosen Option : 1

Q.6
1 Mohit goes to his office at the speed of 10 m/s and returns to his home at the speed of $x \text{ km/hr}$. If average speed of Mohit for the whole journey is 12 m/s, then what is the value of x ?

- Ans
- 1. 15 km/hr
 - 2. 36 km/hr
 - 3. 54 km/hr
 - 4. 25 km/hr

Question ID : 9895804148

Chosen Option : 1

Q.6 If Highest common Factor of two numbers is 8, then which of the following cannot be their Least Common Multiple?

2

- Ans
- 1. 48
 - 2. 68
 - 3. 24
 - 4. 72

Question ID : 9895804131

Chosen Option : 4

Q.6 A alone can complete a work in 14 days and B alone can complete the same work in 21 days. A and B start the work together but A leaves the work after 4 days of the starting of work. In how many days B will complete the remaining work?

3

- Ans
- 1. 16 days
 - 2. 9 days
 - 3. 12 days
 - 4. 11 days

Question ID : 9895804147

Chosen Option : 1

Q.6 Rohit multiplies a number by 2 instead of dividing the number by 2. Resultant number is what percentage of the correct value?

4

- Ans
- 1. 50%
 - 2. 200%
 - 3. 300%
 - 4. 400%

Question ID : 9895804138

Chosen Option : 2

Q.6 If the side of a square increases by 20%, then what will be percent increase in its perimeter?

5

- Ans
- 1. 40%
 - 2. 80%
 - 3. 44%
 - 4. 20%

Question ID : 9895804152

Chosen Option : 2

Q.6 Selling price and cost price of an article are ₹ 1333 and ₹ 2150. What will be the loss percentage?

6

- Ans
- 1. 61.30%
 - 2. 48%
 - 3. 38%
 - 4. 54.4%

Question ID : 9895804139

Chosen Option : 1

Q.6
7 If A : B = 7 : 8 and B : C = 7 : 9, then what is the ratio of A : B : C?

- Ans
- 1. 56 : 49 : 72
 - 2. 56 : 72 : 49
 - 3. 49 : 56 : 72
 - 4. 72 : 56 : 49

Question ID : 9895804142
Chosen Option : 4

Q.6
8 P and Q together can complete a work in 105 days, Q and R together can complete the same work in 90 days, P and R together can complete the same work in 126 days. In how many days P, Q and R together can complete the same work?

- Ans
- 1. 76 days
 - 2. 74 days
 - 3. 72 days
 - 4. 70 days

Question ID : 9895804146
Chosen Option : 2

Q.6
9 What is the value of $7\frac{1}{4} + [6 + (5 - 8 \div 4) - 1]$?

- Ans
- 1. $\frac{61}{4}$
 - 2. $\frac{57}{4}$
 - 3. $\frac{29}{2}$
 - 4. $\frac{23}{2}$

Question ID : 9895804133
Chosen Option : 1

Q.7
0 A person purchased 12 bags of sugar at the rate of ₹ 1200 per bag, 8 bags at the rate of ₹ 1500 per bag and 10 bags at the rate of ₹ 2100 per bags. What will be the average cost of all the bags together?

- Ans
- 1. ₹ 1680
 - 2. ₹ 1420
 - 3. ₹ 1640
 - 4. ₹ 1580

Question ID : 9895804134
Chosen Option : 3

Q.7
1 A sum of ₹ 9800 gives simple interest of ₹ 4704 in 6 years. What will be the rate of interest per annum?

- Ans
- 1. 9%
 - 2. 8.5%
 - 3. 8%
 - 4. 7.5%

Question ID : 9895804144

Chosen Option : 4

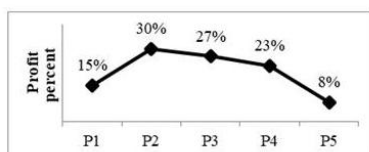
Q.7 In a Company, number of engineers doubles itself in every 2 years. In how much time will the number of engineers become 1024 times of its original number?

- Ans
- 1. 12 years
 - 2. 24 years
 - 3. 20 years
 - 4. 15 years

Question ID : 9895804145

Chosen Option : 2

Q.7 The line chart given below shows the profit percentage of a company on 5 different products P1, P2, P3, P4 and P5.



The expenditure of product P5 is ₹ 46000. What is revenue of product P5?

- Ans
- 1. ₹ 52780
 - 2. ₹ 4600
 - 3. ₹ 47360
 - 4. ₹ 9680

Question ID : 9895804153

Chosen Option : 4

Q.7 Rohan purchased tables at the rate of ₹ 275 per table. If he sells 16 tables for ₹ 5060, then what will be the profit percentage?

- Ans
- 1. 16%
 - 2. 13.04%
 - 3. 15%
 - 4. 12.5%

Question ID : 9895804140

Chosen Option : 2

Q.7 A bowler has taken 0, 3, 2, 1, 5, 3, 4, 5, 5, 2, 2, 0, 0, 1 and 2 wickets in 15 consecutive matches.

What is the median of the given data?

- Ans
- 1. 2
 - 2. 3
 - 3. 0
 - 4. 1

Question ID : 9895804137

Chosen Option : 2

Section : English Language

Q.1 Select the correctly spelt word.

- Ans 1. Changeable
 2. Chageable
 3. Changeble
 4. Changable

Question ID : 9895803697
Chosen Option : 2

Q.2 From the given options, identify the segment in the sentence which contains the grammatical error.

Does he like to go for sightseeing when he is in holiday?

- Ans 1. in holiday?
 2. Does he like
 3. to go for sightseeing
 4. when he is

Question ID : 9895803672
Chosen Option : 1

Q.3 Select the most appropriate option to substitute the underlined segment in the given sentence. If there is no need to substitute it, select No Improvement.

A Study has shown that the use of mobile data in India have increased 50 times over the last three years

- Ans 1. has increased 50 times
 2. No improvement
 3. Is increasing 50 times
 4. Has been increased to 50 times

Question ID : 9895803675
Chosen Option : 1

Q.4 Select the most appropriate word to fill in the blank.

While in Rome we must do as Romans _____.

- Ans 1. had done
 2. is doing
 3. was doing
 4. do

Question ID : 9895803678
Chosen Option : 2

Comprehension:

In the following passage some words have been deleted. Fill in the blanks with the help of the alternatives given.

Every day for a whole year, all kinds of holy men, hermits, scholars and nobles came, and related to the priests their deeds of __ (1) _____, and the priests in solemn council heard their claims. At last, they decided that the one who seemed to be the greatest lover of (2) _____ was a rich man who had that very year given all his (3) _____ to the poor. So they gave him the plate of gold, but when he took it in his hand, it turned into (4) _____ lead; though, when he dropped it on the floor, to his (5) _____, it became gold again.

SubQuestion No : 5

Q.5 Select the most appropriate option that will fill in the blank number 1.

- Ans
- 1. sympathy
 - 2. kindness
 - 3. happiness
 - 4. charity

Question ID : 9895803683

Chosen Option : 3

Comprehension:

In the following passage some words have been deleted. Fill in the blanks with the help of the alternatives given.

Every day for a whole year, all kinds of holy men, hermits, scholars and nobles came, and related to the priests their deeds of __ (1) _____, and the priests in solemn council heard their claims. At last, they decided that the one who seemed to be the greatest lover of (2) _____ was a rich man who had that very year given all his (3) _____ to the poor. So they gave him the plate of gold, but when he took it in his hand, it turned into (4) _____ lead; though, when he dropped it on the floor, to his (5) _____, it became gold again.

SubQuestion No : 6

Q.6 Select the most appropriate option that will fill in the blank number 2.

- Ans
- 1. women
 - 2. destitute
 - 3. mankind
 - 4. moneyless

Question ID : 9895803684

Chosen Option : 1

Comprehension:

In the following passage some words have been deleted. Fill in the blanks with the help of the alternatives given.

Every day for a whole year, all kinds of holy men, hermits, scholars and nobles came, and related to the priests their deeds of __ (1) _____, and the priests in solemn council heard their claims. At last, they decided that the one who seemed to be the greatest lover of (2) _____ was a rich man who had that very year given all his (3) _____ to the poor. So they gave him the plate of gold, but when he took it in his hand, it turned into (4) _____ lead; though, when he dropped it on the floor, to his (5) _____, it became gold again.

SubQuestion No : 7

Q.7 Select the most appropriate option that will fill in the blank number 3.

- Ans
- 1. time
 - 2. wealth
 - 3. energy
 - 4. life

Question ID : 9895803685

Chosen Option : 4

Comprehension:

In the following passage some words have been deleted. Fill in the blanks with the help of the alternatives given.

Every day for a whole year, all kinds of holy men, hermits, scholars and nobles came, and related to the priests their deeds of __ (1) _____, and the priests in solemn council heard their claims. At last, they decided that the one who seemed to be the greatest lover of (2) _____ was a rich man who had that very year given all his (3) _____ to the poor. So they gave him the plate of gold, but when he took it in his hand, it turned into (4) _____ lead; though, when he dropped it on the floor, to his (5) _____, it became gold again.

SubQuestion No : 8

Q.8 Select the most appropriate option that will fill in the blank number 4.

- Ans
- 1. valuable
 - 2. worthy
 - 3. worthless
 - 4. gold

Question ID : 9895803686

Chosen Option : 1

Comprehension:

In the following passage some words have been deleted. Fill in the blanks with the help of the alternatives given.

Every day for a whole year, all kinds of holy men, hermits, scholars and nobles came, and related to the priests their deeds of __ (1) _____, and the priests in solemn council heard their claims. At last, they decided that the one who seemed to be the greatest lover of (2) _____ was a rich man who had that very year given all his (3) _____ to the poor. So they gave him the plate of gold, but when he took it in his hand, it turned into (4) _____ lead; though, when he dropped it on the floor, to his (5) _____, it became gold again.

SubQuestion No : 9

Q.9 Select the most appropriate option that will fill in the blank number 5.

- Ans
- 1. admiration
 - 2. confusion
 - 3. amazement
 - 4. happiness

Question ID : 9895803687
Chosen Option : 4

Q.1 Select the most appropriate option to substitute the underlined segment in the given sentence. If there is no need to substitute it, select No Improvement.

She give me everything I asked for.

- Ans
- 1. gave myself everything
 - 2. Is giving me everything
 - 3. No Improvement
 - 4. gave me everything

Question ID : 9895803677
Chosen Option : 1

Q.1 Select the most appropriate word to fill in the blank.

They never _____ those who have done wrong.

- Ans
- 1. blame
 - 2. outcast
 - 3. condemn
 - 4. forgive

Question ID : 9895803681
Chosen Option : 2

Q.1 Select the synonym of the given word.

APPARENT

- Ans
- 1. Questionable

- 2. Obvious
- 3. Considerable
- 4. Doubtful

Question ID : 9895803690
Chosen Option : 4

Q.1
3 Select the most appropriate word to fill in the blank.

I make friends _____ I go.

- Ans
- 1. wherever
 - 2. whenever
 - 3. moreover
 - 4. however

Question ID : 9895803679
Chosen Option : 3

Q.1
4 Select the option that means the same as the given idiom.

In a nutshell

- Ans
- 1. In detail
 - 2. In writing
 - 3. In discussion
 - 4. In brief

Question ID : 9895803692
Chosen Option : 2

Q.1
5 From the given options, identify the segment in the sentence which contains the grammatical error.

She was known for her skills in dance and music; she is equal proficient in the allied art of painting.

- Ans
- 1. is equal proficient
 - 2. allied art of painting
 - 3. skills in dance
 - 4. was known

Question ID : 9895803673
Chosen Option : 1

Q.1
6 Select the word which means the same as the group of words given.

One who studies and cares about environment

- Ans
- 1. Biologist
 - 2. Anthropologist
 - 3. Ecologist
 - 4. Archeologist

Question ID : 9895803695
Chosen Option : 3

Q.1 Select the most appropriate option to substitute the underlined segment in the given sentence. If there is no need to substitute it, select No Improvement.

7

The football coach urged the team were give its best to the final match.

- Ans
- 1. To give its best
 - 2. That it give its best
 - 3. Try to give it best
 - 4. No Improvement.

Question ID : 9895803676
Chosen Option : 1

Q.1 From the given options, identify the segment in the sentence which contains the grammatical error.

8

The population of Sri Lanka are less than that of India.

- Ans
- 1. than that
 - 2. Sri Lanka are
 - 3. The population
 - 4. of India

Question ID : 9895803674
Chosen Option : 1

Q.1 Select the antonym of the given word.

9

HORIZONTAL

- Ans
- 1. Parallel
 - 2. Official
 - 3. Vertical
 - 4. Financial

Question ID : 9895803689
Chosen Option : 4

Q.2 Select the synonym of the given word.

0

CURATIVE

- Ans
- 1. Trembling
 - 2. Damaging
 - 3. Feeding
 - 4. Healing

Question ID : 9895803691
Chosen Option : 3

Q.2 Select the antonym of the given word.

1

ABOLISH

- Ans
- 1. Affirm
 - 2. Finish

3. Cancel

4. Build

Question ID : 9895803688

Chosen Option : 2

Q.2 Select the word which means the same as the group of words given.

A disease that is prevalent in a particular area

Ans 1. Genetic

2. Endemic

3. Contagious

4. Viral

Question ID : 9895803694

Chosen Option : 2

Q.2 Select the option that means the same as the given idiom.

To keep an eye on

Ans 1. To stare

2. To be cautious

3. To follow

4. To keep a watch

Question ID : 9895803693

Chosen Option : 4

Q.2 Select the correctly spelt word.

Ans 1. Millennium

2. Millenniumm

3. Millenium

4. Millennium

Question ID : 9895803696

Chosen Option : 3

Q.2 Select the most appropriate word to fill in the blank.

The Prime Minister was as good as his _____.

Ans 1. dress

2. sword

3. word

4. office

Question ID : 9895803680

Chosen Option : 1

Q.1 दिए गए वाक्य में रेखांकित खंड को प्रतिस्थापित करने के लिए सबसे उपयुक्त विकल्प का चयन करें।

यात्रा का प्रबन्ध शीघ्रता में हुआ था, अतः न तो उनके पास पर्याप्त वस्त्र थी और न ही धन का पूरा प्रबन्ध।

Ans 1.

न तो उनके पास पर्याप्त वस्त्र थे, और न ही धन की पूरा प्रबंध।

2.

न तो उनके पास पर्याप्त वस्त्र थे, और न ही धन का पूरा प्रबंध।

3.

न तो उनके पास पर्याप्त वस्त्र थे, और नही धन को पूरा प्रबंध।

4.

न तो उनके पास पर्याप्त वस्त्र थी और न ही धन को पूरा प्रबंध।

Question ID : 9895803444

Chosen Option : --

Q.2 दिए गए वाक्य का वह भाग ज्ञात करें जिसमें कोई त्रुटि है।

इतने वर्षों की उपरांत मिलने पर हम बहुत खुश हुए।

Ans 1. मिलने पर

2. इतने वर्षों की उपरांत

3. हम बहुत

4. खुश हुए।

Question ID : 9895803442

Chosen Option : --

Q.3 दिए गए शब्द के पर्यायवाची शब्द का चयन करें।

आगंतुक

Ans 1. अनुचर

2. अतिथि

3. आत्मज

4. अनोखा

Question ID : 9895803459

Chosen Option : --

Q.4 दिए गए शब्द के पर्यायवाची शब्द का चयन करें।

बिजली

Ans

- 1. रिपु
- 2. दामिनी
- 3. व्याध
- 4. वात

Question ID : 9895803458
Chosen Option : --

Q.5 रिक्त स्थान को भरने के लिए सबसे उपयुक्त शब्द का चयन करें।

_____ बारिश हो रही है।

- Ans
- 1. रिमझिम
 - 2. सिमसिम
 - 3. कलकल
 - 4. खड़खड़

Question ID : 9895803447
Chosen Option : --

Q.6 दिये गये वाक्यांश के लिए एक शब्द चुनिए।

जो देखने योग्य हो

- Ans
- 1. शोभनीय
 - 2. रमणीय
 - 3. प्रशंसनीय
 - 4. दर्शनीय

Question ID : 9895803462
Chosen Option : --

Q.7 रिक्त स्थान को भरने के लिए सबसे उपयुक्त शब्द का चयन करें।

आज प्रत्येक गाँव में _____ खोले जा रहे हैं।

- Ans
- 1. विश्वविद्यालय
 - 2. हवाई अड्डे
 - 3. विद्यालय
 - 4. बंदरगाह

Question ID : 9895803448
Chosen Option : --

Q.8 दिए गए शब्द का विलोम चुनें।

निर्माण

- Ans
- 1. अहित
 - 2. ध्वंस
 - 3. कोमल
 - 4. निश्चित

Question ID : 9895803457
Chosen Option : --

Q.9 सही वर्तनी वाले शब्द का चयन करें।

- Ans
- 1. आजनम
 - 2. अजन्मा
 - 3. अजम्ना
 - 4. अजनम

Question ID : 9895803465
Chosen Option : --

Q.1 रिक्त स्थान को भरने के लिए सबसे उपयुक्त शब्द का चयन करें।

घोड़ा _____ रहा है।

- Ans
- 1. कूक
 - 2. भौंक
 - 3. हिनहिना
 - 4. मिमिया

Question ID : 9895803449
Chosen Option : --

Comprehension:

दिए गए अनुच्छेद में कुछ शब्द हटा दिए गए हैं। दिए गए विकल्पों की सहायता से रिक्त स्थान भरें। प्रत्येक संख्या के लिए सबसे उपयुक्त विकल्प का चयन करें।

भाग्य परिवर्तन के लिए _____ (1) ही एकमात्र सहारा है। केवल इच्छाओं द्वारा वांछित फल की _____ (2) असंभव है। यदि व्यक्ति दिन में सपने देखता रहे, समुद्र के किनारे _____ (3) धरकर बैठा रहे तो कोई लाभ न होगा। परिश्रमी व्यक्ति ही गोता लगाकर अतुल संपत्ति पा सकता है। परिश्रम ही _____ (4) की कुंजी है। यह मनुष्य को स्वावलंबी व _____ (5) बनाती है।

SubQuestion No : 11

Q.1
1 गद्यांश में संकेतित रिक्त स्थान (1) के लिए उपयुक्त शब्द होगा -

- Ans
- 1. परिश्रम
 - 2. नींद
 - 3. आलस
 - 4. खाना

Question ID : 9895803451
Chosen Option : --

Comprehension:

दिए गए अनुच्छेद में कुछ शब्द हटा दिए गए हैं। दिए गए विकल्पों की सहायता से रिक्त स्थान भरें। प्रत्येक संख्या के लिए सबसे उपयुक्त विकल्प का चयन करें।

भाग्य परिवर्तन के लिए _____(1) ही एकमात्र सहारा है। केवल इच्छाओं द्वारा वांछित फल की _____(2) असंभव है। यदि व्यक्ति दिन में सपने देखता रहे, समुद्र के किनारे _____(3) धरकर बैठा रहे तो कोई लाभ न होगा। परिश्रमी व्यक्ति ही गोता लगाकर अतुल संपत्ति पा सकता है। परिश्रम ही _____(4) की कुंजी है। यह मनुष्य को स्वावलंबी व _____(5) बनाती है।

SubQuestion No : 12

Q.1
2 गद्यांश में संकेतित रिक्त स्थान (2) के लिए उपयुक्त शब्द होगा -

- Ans
- 1. गति
 - 2. प्राप्ति
 - 3. मौका
 - 4. लेख

Question ID : 9895803452
Chosen Option : --

Comprehension:

दिए गए अनुच्छेद में कुछ शब्द हटा दिए गए हैं। दिए गए विकल्पों की सहायता से रिक्त स्थान भरें। प्रत्येक संख्या के लिए सबसे उपयुक्त विकल्प का चयन करें।

भाग्य परिवर्तन के लिए _____(1) ही एकमात्र सहारा है। केवल इच्छाओं द्वारा वांछित फल की _____(2) असंभव है। यदि व्यक्ति दिन में सपने देखता रहे, समुद्र के किनारे _____(3) धरकर बैठा रहे तो कोई लाभ न होगा। परिश्रमी व्यक्ति ही गोता लगाकर अतुल संपत्ति पा सकता है। परिश्रम ही _____(4) की कुंजी है। यह मनुष्य को स्वावलंबी व _____(5) बनाती है।

SubQuestion No : 13

Q.1
3

गद्यांश में संकेतित रिक्त स्थान (3) के लिए उपयुक्त शब्द होगा -

- Ans
- 1. आँख पर आँख
 - 2. पैर पर पैर
 - 3. हाथ पर हाथ
 - 4. मुँह पर मुँह

Question ID : 9895803453
Chosen Option : --

Comprehension:

दिए गए अनुच्छेद में कुछ शब्द हटा दिए गए हैं। दिए गए विकल्पों की सहायता से रिक्त स्थान भरें। प्रत्येक संख्या के लिए सबसे उपयुक्त विकल्प का चयन करें।

भाग्य परिवर्तन के लिए _____(1) ही एकमात्र सहारा है। केवल इच्छाओं द्वारा वांछित फल की _____(2) असंभव है। यदि व्यक्ति दिन में सपने देखता रहे, समुद्र के किनारे _____(3) धरकर बैठा रहे तो कोई लाभ न होगा। परिश्रमी व्यक्ति ही गोता लगाकर अतुल संपत्ति पा सकता है। परिश्रम ही _____(4) की कुंजी है। यह मनुष्य को स्वावलंबी व _____(5) बनाती है।

SubQuestion No : 14

Q.1
4 गद्यांश में संकेतित रिक्त स्थान (4) के लिए उपयुक्त शब्द होगा -

- Ans
- 1. भाग्य
 - 2. सफलता
 - 3. प्रसन्नता
 - 4. विफलता

Question ID : 9895803454
Chosen Option : --

Comprehension:

दिए गए अनुच्छेद में कुछ शब्द हटा दिए गए हैं। दिए गए विकल्पों की सहायता से रिक्त स्थान भरें। प्रत्येक संख्या के लिए सबसे उपयुक्त विकल्प का चयन करें।

भाग्य परिवर्तन के लिए _____(1) ही एकमात्र सहारा है। केवल इच्छाओं द्वारा वांछित फल की _____(2) असंभव है। यदि व्यक्ति दिन में सपने देखता रहे, समुद्र के किनारे _____(3) धरकर बैठा रहे तो कोई लाभ न होगा। परिश्रमी व्यक्ति ही गोता लगाकर अतुल संपत्ति पा सकता है। परिश्रम ही _____(4) की कुंजी है। यह मनुष्य को स्वावलंबी व _____(5) बनाती है।

SubQuestion No : 15

Q.1
5

गद्यांश में संकेतित रिक्त स्थान (5) के लिए उपयुक्त शब्द होगा -

- Ans
- 1. आलसी
 - 2. उपेक्षित
 - 3. सुस्त
 - 4. स्वाभिमानि

Question ID : 9895803455
Chosen Option : --

Q.1
6 दिए गए वाक्य का वह भाग ज्ञात करें जिसमें कोई त्रुटि है।

युवक ही किसी देश को शक्ति का आधार होते हैं।

- Ans
- 1. युवक ही
 - 2. आधार होते हैं।
 - 3. किसी देश को
 - 4. शक्ति का

Question ID : 9895803440
Chosen Option : --

Q.1
7 निम्नलिखित में से उस विकल्प का चयन करें जो 'अपने मुँह मियाँ मिट्टू बनना' मुहावरे का अर्थ व्यक्त करता है।

- Ans
- 1. दूसरों की प्रशंसा करना
 - 2. अपनी प्रशंसा दूसरों से सुनना
 - 3. अपनी प्रशंसा स्वयं करना
 - 4. अपने मुँह से मिट्टू पकड़ना

Question ID : 9895803461
Chosen Option : --

Q.1
8 निम्नलिखित में से उस विकल्प का चयन करें जो 'अँगूठा दिखाना' मुहावरे का अर्थ व्यक्त करता है।

- Ans
- 1. हँसना
 - 2. चिढ़ाना
 - 3. मौके पर मना कर देना
 - 4. अँगूठा दिखाकर हँसी उड़ाना

Question ID : 9895803460
Chosen Option : --

Q.1
9

दिए गए वाक्य में रेखांकित खंड को प्रतिस्थापित करने के लिए सबसे उपयुक्त विकल्प का चयन करें।

छात्र जब परिश्रम के मार्ग पर चलता है, तो उसे सफलता व संतुष्टि का फल मिलती है।

Ans

- 1. फल मिलता है।
- 2. फल मिलते हैं।
- 3. फलों मिलना है।
- 4. फल मिलती हैं।

Question ID : 9895803443
Chosen Option : --

Q.2
0 दिए गये वाक्यांश के लिए एक शब्द चुनिए।

रात में घूमने वाला

Ans

- 1. शनिचर
- 2. निशाचर
- 3. दिनचर
- 4. खगचर

Question ID : 9895803463
Chosen Option : --

Q.2
1 दिए गए वाक्य में रेखांकित खंड को प्रतिस्थापित करने के लिए सबसे उपयुक्त विकल्प का चयन करें।

आज सुबह से बारिश हो रही है और बच्चा बारिश में नहा रहा है।

Ans

- 1. बच्चे बारिशों में नहा रहा है।
- 2. बच्चा बारिश में नहा रही है।
- 3. बच्चों बारिश में नहा रही है।
- 4. बच्चा बारिश में नहा रहा है।

Question ID : 9895803445
Chosen Option : --

Q.2
2 दिए गए वाक्य का वह भाग ज्ञात करें जिसमें कोई त्रुटि है।

आत्मसम्माननी व्यक्ति का हृदय में लोभ का भाव नहीं होता।

Ans

- 1. आत्मसम्माननी व्यक्ति का
- 2. नहीं होता।
- 3. लोभ का भाव

✗ 4. हृदय में

Question ID : 9895803441
Chosen Option : --

Q.2
3 रिक्त स्थान को भरने के लिए सबसे उपयुक्त शब्द का चयन करें।

सूर्य उदय के _____ में भी जाग जाता है।

- Ans
- ✓ 1. साथ
 - ✗ 2. ऊपर नीचे
 - ✗ 3. अंदर बाहर
 - ✗ 4. आगे पीछे

Question ID : 9895803446
Chosen Option : --

Q.2
4 दिए गए शब्द का विलोम चुनें।

उत्थान

- Ans
- ✗ 1. चलन
 - ✓ 2. गमन
 - ✗ 3. जड़
 - ✗ 4. पतन

Question ID : 9895803456
Chosen Option : --

Q.2
5 सही वर्तनी वाले शब्द का चयन करें।

- Ans
- ✗ 1. सर्वभक्षी
 - ✓ 2. सर्वभक्षी
 - ✗ 3. सरवभक्षी
 - ✗ 4. सरवभक्षी

Question ID : 9895803464
Chosen Option : --