

Constable (GD) in CAPFs, NIA, SSF and Rifleman (GD) in Assam Rifles Examination, 2018

Roll No. :	www.GovtJobsAlert.In
Registration No.	
Name :	
Exam Venue :	ION Digital Zone iDZ Atchutapuram
Exam Time :	4:00 PM - 5:30 PM
Exam Date :	11/02/2019

Section : General Section

Q.1 Find the next number in the given series.

101, 123, 147, 173, ?

- Ans
- 1. 236
 - 2. 214
 - 3. 201
 - 4. 223

Question ID : 9895802488

Chosen Option : 3

Q.2 A, B, C, D, E and F are six friends seating in a long bench. E and F are at the center while A and B are at the two extreme ends. C is sitting to the immediate left of A. Can you identify who is sitting to the immediate right of B?

- Ans
- 1. F
 - 2. C
 - 3. D
 - 4. E

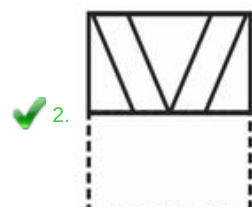
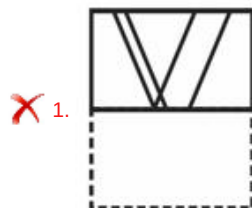
Question ID : 9895802482

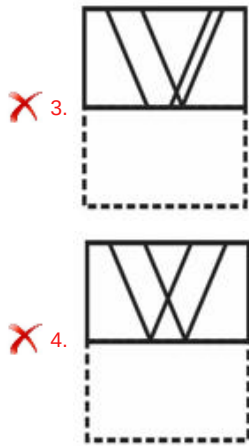
Chosen Option : 2

Q.3 A square transparent sheet with a pattern is given. How will the pattern appear when the transparent sheet is folded along the dotted line?



Ans





Question ID : 9895802497
Chosen Option : 4

Q.4 Select the option that will replace the question mark and complete the given pattern.



Ans

- 1.
- 2.
- 3.
- 4.

Question ID : 9895802494
Chosen Option : 4

Q.5 Select the option that is related to the third term in the same way as the second term is related to the first term.

144 : 12 :: 576 : ?

Ans

- 1. 21
- 2. 24
- 3. 28
- 4. 26

Question ID : 9895802489
Chosen Option : 2

Q.6 Find the next number in the given series.

2, 10, 84, ?

Ans

- 1. 1028
- 2. 1032
- 3. 1124

4. 1229

Question ID : 9895802487
Chosen Option : 2

Q.7 What will be the value of the following equation if '+' means 'addition', '-' means 'subtraction', '×' means 'multiplication' and '÷' means 'division'?

$$49 \times 7 - 3 \div 9 + 4 = ?$$

- Ans 1. 26
 2. 39
 3. 35
 4. 31

Question ID : 9895802492
Chosen Option : 1

Q.8 Six friends P, Q, R, S, T and U are sitting at a circular table facing the centre. S is sitting third to the left of T. R is not sitting between T and U. S is not the immediate neighbor of R. Q is seated second to the right of T. Who is sitting between U and Q?

- Ans 1. S
 2. R
 3. T
 4. P

Question ID : 9895802483
Chosen Option : 3

Q.9 Select the option that is analogous to the given pair.

Heart : Cardiology

- Ans 1. Plants : Zoology
 2. Disease : Hospital
 3. Phycology : Fungi
 4. Virus : Virology

Question ID : 9895802478
Chosen Option : 3

Q.1 Identify the figure from the options that has the given figure embedded in it.



- Ans 1.
 2.
 3.



Question ID : 9895802495
Chosen Option : 2

Q.1 Four numbers have been given out of which three are alike in some manner, while one is different. Choose the odd one.
1

- Ans
- 1. 48
 - 2. 68
 - 3. 72
 - 4. 96

Question ID : 9895802490
Chosen Option : 2

Q.1 Pick the odd one out.
2

- Ans
- 1. Observe
 - 2. Perceive
 - 3. Ignorance
 - 4. Detect

Question ID : 9895802476
Chosen Option : 2

Q.1 The statements below are followed by two conclusions labeled I and II.
3
Assuming that the information in the statements is true, even if it appears to be at variance with generally established facts, decide which conclusion(s) logically and definitely follow(s) from the information given in the statements.

Statements:

- 1) All women are girls.
- 2) Some girls are painters.

Conclusion:

- I. All girls are women.
- II. Some women are painters.

- Ans
- 1. Only conclusion II follows
 - 2. Only conclusion I follows
 - 3. Neither conclusion I nor II follows
 - 4. Both conclusions I and II follow

Question ID : 9895802485
Chosen Option : 2

Q.1
4

If in a certain code language the word POLITICAL is written as QNMHUHDZM, then in the same code language how will you write the word SOCIAL?

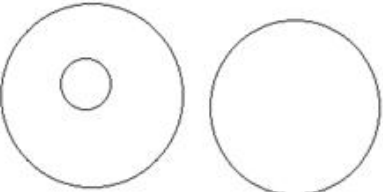
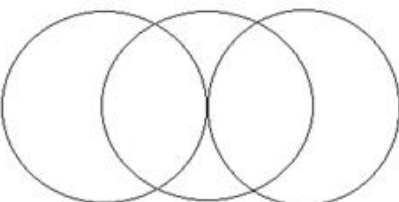

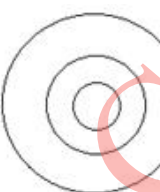
- Ans
- 1. DHBKTN
 - 2. TNDHBK
 - 3. DBKNTH
 - 4. NTHDBK

Question ID : 9895802480
Chosen Option : 2

Q.1
5 Select the Venn diagram that best represents the relationship among the given set of classes:

Metals, Silver, Gold

Ans

- 1. 
- 2. 
- 3. 
- 4. 

Question ID : 9895802498
Chosen Option : 3

Q.1
6 Complete the number triad:

12	20	28
21	19	?
31	21	11

- Ans
- 1. 12
 - 2. 8
 - 3. 15

✓ 4. 17

Question ID : 9895802491
Chosen Option : 4

Q.1 Pick the odd one out.
7

- Ans
- ✗ 1. OUA
 - ✗ 2. IOU
 - ✗ 3. AEI
 - ✓ 4. FGH

Question ID : 9895802475
Chosen Option : 4

Q.1 Select the option that is related to the third term in the same way as the second term is related to the first term.

8
PURSE : UPRES :: RAZOR : ?

- Ans
- ✗ 1. AZROR
 - ✓ 2. ARZRO
 - ✗ 3. AROZR
 - ✗ 4. ARRZO

Question ID : 9895802479
Chosen Option : 2

Q.1 Identify the mirror image of the following word when mirror is placed at right side.

- 9
INSOMNIA
- Ans
- ✓ 1. AINMSOINI
 - ✗ 2. INSONIIV
 - ✗ 3. INOSNIIV
 - ✗ 4. AINMSONI

Question ID : 9895802496
Chosen Option : 1

Q.2 If in a certain code language TERRACE is written as 70, then in the same code language how will you write the word
0 BALCONY?

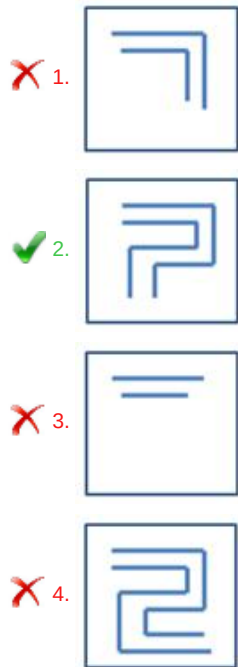
- Ans
- ✗ 1. 74
 - ✓ 2. 72
 - ✗ 3. 73
 - ✗ 4. 71

Question ID : 9895802481
Chosen Option : 2

Q.2 Which option will replace the question mark and complete the given figure series?
1



Ans



Question ID : 9895802493
Chosen Option : 4

Q.2
2 Five men P, Q, R S and T are reading a newspaper. The one who reads it first, gives it to T. The one who reads it last, had taken it from R. Q is not the first or last one to read it. There were two readers between P and R. Who is the third one to have read the newspaper?

- Ans
- 1. R
 - 2. P
 - 3. S
 - 4. Q

Question ID : 9895802484
Chosen Option : 3

Q.2
3

The statements below are followed by two conclusions labeled I and II.

Assuming that the information in the statements is true, even if it appears to be at variance with generally established facts, decide which conclusion(s) logically and definitely follow(s) from the information given in the statements.

Statements:

- 1) Some cats are goats.
- 2) All goats are cows.

Conclusion:

- I. All cows are goats.
- II. Some cats are cows.

- Ans 1. Only conclusion II follows
 2. Only conclusion I follows
 3. Either conclusion I or II follows
 4. Both conclusions I and II follow

Question ID : 9895802486
Chosen Option : 3

Q.2
4 Select the pair of letters that will follow next in the given series.

AB, GH, MN, ST, ?

- Ans 1. YZ
 2. VW
 3. XY
 4. UV

Question ID : 9895802474
Chosen Option : 1

Q.2
5 Identify the odd pair from the following.

- Ans 1. Man : Class
 2. Grapes : Bunch
 3. Bees : Swarm
 4. Flowers : Bouquet

Question ID : 9895802477
Chosen Option : 4

Q.2
6 Where is the Charminar located?

- Ans 1. Panaji
 2. Mumbai
 3. Sikandrabad

✓ 4. Hyderabad

Question ID : 9895803069

Chosen Option : 4

Q.2 ____ took a hat-trick (three wickets) in the first over of the match against Pakistan in 2006, becoming the first and, to date, only bowler to do so.

Ans ✓ 1. Irfan Pathan

✗ 2. Rohit Sharma

✗ 3. Sachin Tendulkar

✗ 4. Parthiv Patel

Question ID : 9895803073

Chosen Option : 1

Q.2 The Indian desert lies towards the western margins of the ____.

Ans ✓ 1. Aravalli Hills

✗ 2. Nilgiri Hills

✗ 3. Kaimur Hills

✗ 4. Himadri

Question ID : 9895803059

Chosen Option : 1

Q.2 M.K Gandhi attended highly official meeting with ____ on the behalf of the Indian National Congress on negotiating terms of Constitutional reforms on 5 March 1931

Ans ✓ 1. Lord Irwin

✗ 2. Lord Curzon

✗ 3. Lord Ripon

✗ 4. Lord Clive

Question ID : 9895803055

Chosen Option : 1

Q.3 Who is the acting President of the BCCI as on Feb 2019?

Ans ✓ 1. CK Khanna

✗ 2. Shashank Manohar

✗ 3. Anurag Thakur

✗ 4. Vinod Rai

Question ID : 9895803057

Chosen Option : 2

Q.3 ____ was the first woman Chief Election Commissioner of India.

Ans ✓ 1. Rama Devi

✗ 2. Nirmala Sitaraman

✗ 3. Meira Kumar

✗ 4. Pratibha Devi

Question ID : 9895803067

Chosen Option : 1

Q.3
2 Who was Governor of the Reserve Bank of India who submitted his resignation in Dec 2018?

- Ans
- 1. Urjit Patel
 - 2. Dr. Manmohan Singh
 - 3. P Chidambaram
 - 4. Narendra Modi

Question ID : 9895803071
Chosen Option : 4

Q.3
3 Which of the following are NOT a part of the circulatory system?

- Ans
- 1. Veins
 - 2. Arteries
 - 3. Villi
 - 4. Capillaries

Question ID : 9895803076
Chosen Option : 3

Q.3
4 Kharif crops can be described as the crops which are sown with the beginning of the _____ season.

- Ans
- 1. Rainy
 - 2. Summer
 - 3. Winter
 - 4. Spring

Question ID : 9895803062
Chosen Option : 1

Q.3
5 The book 'The Origin of Species' was written by _____.

- Ans
- 1. Louis Pasteur
 - 2. James Watson
 - 3. Charles Robert Darwin
 - 4. Jane Goodwill

Question ID : 9895803077
Chosen Option : 3

Q.3
6 Majuli, the largest riverine Island is found in which of the following rivers?

- Ans
- 1. Godavari
 - 2. Narmada
 - 3. Kaveri
 - 4. Brahmaputra

Question ID : 9895803061
Chosen Option : 1

Q.3

7 Who among the following is a famous singer of Hindustani classical music?

- Ans
- 1. Naina Devi
 - 2. Shubha Mudgal
 - 3. Rita Ganguli
 - 4. Poornima Sharma

Question ID : 9895803070
Chosen Option : 2

Q.3 Ag is the chemical symbol of an expensive, soft, white and lustrous metal which commonly known as _____.

8

- Ans
- 1. nickel
 - 2. mercury
 - 3. silver
 - 4. aluminium

Question ID : 9895803074
Chosen Option : 2

Q.3 _____ is the smallest bone in the human body.

9

- Ans
- 1. Ulna
 - 2. Carpals
 - 3. Radius
 - 4. Stapes

Question ID : 9895803075
Chosen Option : 4

Q.4 Sodium hydroxide is NOT used for _____.

0

- Ans
- 1. making soap
 - 2. preserving pickle
 - 3. degreasing metals
 - 4. making newspapers

Question ID : 9895803078
Chosen Option : 4

Q.4 Kathakali has its roots in the state of _____.

1

- Ans
- 1. Kerala
 - 2. Tamil Nadu
 - 3. Andhra Pradesh
 - 4. Karnataka

Question ID : 9895803068
Chosen Option : 4

Q.4 India and Srilanka are divided by _____.

2

Ans

- 1. Bering Strait
- 2. Hormuz Strait
- 3. Palk Strait
- 4. Gibraltar Strait

Question ID : 9895803060
Chosen Option : 3

Q.4
3 The Pakistani General _____ imposed military rule in his country in the year 1999.

- Ans
- 1. Ziauddin Butt
 - 2. Qamar Javed
 - 3. Parvez Musharraf
 - 4. Raheel Sharif

Question ID : 9895803065
Chosen Option : 3

Q.4
4 The Banaras Hindu University was founded by:

- Ans
- 1. Sir Syed Mohammad
 - 2. Pandit Madan Mohan Malaviya
 - 3. Jawaharlal Nehru
 - 4. Bal Gangadhar Tilak

Question ID : 9895803056
Chosen Option : 2

Q.4
5 The 2018 National Film Award for Best Actress was won by _____.

- Ans
- 1. Katrina Kaif
 - 2. Alia Bhatt
 - 3. Sridevi
 - 4. Deepika Padukone

Question ID : 9895803072
Chosen Option : 3

Q.4
6 In August 1858, the British parliament passed an act that set an end to the rule of the company. It was called _____.

- Ans
- 1. Kazis Act
 - 2. Indian Trusts Act
 - 3. Government of India Act
 - 4. Fort William Act

Question ID : 9895803054
Chosen Option : 4

Q.4
7 Which of the following Steel plants of India does NOT come under the Public Sector?

- Ans
- 1. Durgapur Steel Plant
 - 2. Bhilai Steel Plant

3. TISCO

4. Rourkela Steel Plant

Question ID : 9895803064
Chosen Option : 2

Q.4
8 The 2020 Olympic Games will be held in _____.

Ans 1. Rio de Janeiro

2. Tokyo

3. Paris

4. Beijing

Question ID : 9895803058
Chosen Option : 2

Q.4
9 The right of a person, party or nation to stop a certain decision or law is called _____.

Ans 1. veto

2. vote

3. authority

4. power of attorney

Question ID : 9895803066
Chosen Option : 3

Q.5
0 The Blue Revolution in India is related to _____.

Ans 1. fish production

2. jute production

3. agriculture

4. indigo production

Question ID : 9895803063
Chosen Option : 1

Q.5
1 The perimeter of a square and a circle are same. If the area of the circle is 2464 cm^2 , then what will be the area of the square?

Ans 1. 2116 cm^2

2. 1936 cm^2

3. 1764 cm^2

4. 1296 cm^2

Question ID : 9895804228
Chosen Option : 2

Q.5
2 The average of six numbers N_1, N_2, N_3, N_4, N_5 and N_6 is A. 5 is subtracted from each number. What is the new average?

Ans 1. $A - 5$

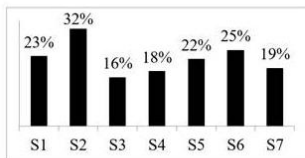
2. $A - 6$

3. $A - 10$

4. A – 30

Question ID : 9895804211
Chosen Option : 4

Q.5 The bar chart given below shows the amount of sugar used in making 7 different varieties of sweets S1, S2, S3, S4, S5, S6 and S7 has been shown as a percentage of total weight of the sweet.



The total weight of sweet S3 is 450 kg. What is the amount of sugar used in sweet S3?

- Ans 1. 72 kg
 2. 35 kg
 3. 25 kg
 4. 31 kg

Question ID : 9895804232
Chosen Option : 1

Q.5 The data given below shows the number of people who have saved a certain amount of money.

Savings (in ₹)	Number of people
5	1
15	3
20	4
25	2
30	1
35	1
40	2

What is the median of the given data?

- Ans 1. ₹ 25
 2. ₹ 22.5
 3. ₹ 20
 4. ₹ 17.5

Question ID : 9895804214
Chosen Option : 1

Q.5 A sum becomes 6 times of itself in 4 years at compound interest (interest is compounded annually). In how many years will the sum becomes 216 times of itself?

- Ans 1. 20
 2. 12
 3. 16
 4. 8

Question ID : 9895804222
Chosen Option : 3

Q.5

6 If the length of the diagonal of a square is 14 cm, then what will be area of the square?

- Ans
- 1. 98 cm^2
 - 2. 156 cm^2
 - 3. 40 cm^2
 - 4. 196 cm^2

Question ID : 9895804227
Chosen Option : 4

Q.5
7 If A is 25% less than B, then what will be the value of $(2B - A)/A$?

- Ans
- 1. $\frac{5}{3}$
 - 2. $\frac{3}{2}$
 - 3. $\frac{3}{4}$
 - 4. $\frac{5}{4}$

Question ID : 9895804215
Chosen Option : 1

Q.5
8 Height of right circular cylinder is 16 cm. If the diameter of its base is 3.5 cm, then what will be the volume of the cylinder?

- Ans
- 1. 616 cm^3
 - 2. 176 cm^3
 - 3. 154 cm^3
 - 4. 308 cm^3

Question ID : 9895804229
Chosen Option : 3

Q.5
9 Ravi, Manish and Naveen alone can complete a work in 30 days, 15 days and 10 days respectively. They start the work together but Ravi leaves the work after 2 days of the starting of the work and Manish leaves the work after 3 days more. In how many days Naveen will complete the remaining work?

- Ans
- 1. 3 days
 - 2. 4 days
 - 3. 2 days
 - 4. 1 day

Question ID : 9895804223
Chosen Option : 3

Q.6
0 What is the value of $\left(\frac{4+2+2-\frac{1}{2}\times\frac{1}{4}}{8-3\div\frac{1}{4}+6}\right)$?

Ans

1. $\frac{17}{16}$
 2. $\frac{15}{16}$
 3. $\frac{19}{16}$
 4. $\frac{31}{16}$

Question ID : 9895804210
Chosen Option : 4

Q.6 Sumit, Ravi and Puneet invest ₹ 45000, ₹ 81000 and ₹ 90000 respectively to start a business. At the end of the year the total profit is ₹ 4800. 30% of the total profit gives in charity and rest is divided among them. What will be the share of Sumit?

- Ans 1. ₹ 1310
 2. ₹ 1260
 3. ₹ 1400
 4. ₹ 700

Question ID : 9895804219
Chosen Option : 4

Q.6 If cost price of an article is 30% less than the selling price of that article, then what will be the profit percentage?
2

- Ans 1. 33.33%
 2. 37.5%
 3. 30%
 4. 42.86%

Question ID : 9895804216
Chosen Option : 1

Q.6 Piyush is running at the speed of 8 km/hr and he stops for 5 minutes to take rest at the end of every third km. What will be the time taken by Piyush to cover a distance of 56 km?
3

- Ans 1. 8 hr 20 minutes
 2. 8 hr
 3. 8 hr 30 minutes
 4. 7 hr

Question ID : 9895804226
Chosen Option : 3

Q.6 The average of 35, 39, 41, 46, 27 and x is 38. What is the value of x ?
4

- Ans 1. 38
 2. 44
 3. 40
 4. 42

Question ID : 9895804212
Chosen Option : 3

Q.6 The Least Common Multiple and Highest Common Factor of two numbers are 60 and 4 respectively. If their sum is 32,
5 then what will be the difference of these two numbers?

- Ans 1. 8
 2. 12
 3. 4
 4. 20

Question ID : 9895804208
Chosen Option : 2

Q.6 The line chart given below shows the ratio of imports to exports for a country for 5 consecutive years Y_1, Y_2, Y_3, Y_4
6 and Y_5 .



Which of the following statement is true?

- Ans 1. Data is Insufficient.
 2. Imports for year Y_3 are maximum for the given 5 years.
 3. Imports for year Y_1 are least for the given 5 years.
 4. Exports for year Y_3 are more than the exports for year Y_2 .

Question ID : 9895804231
Chosen Option : 3

Q.6 Puneet goes to his office at the speed of 60 km/hr and returns to his home at the speed of 90 km/hr. What will be the
7 average speed of Puneet for the whole journey?

- Ans 1. 20 m/s
 2. 30 m/s
 3. 25 m/s
 4. 72 m/s

Question ID : 9895804225
Chosen Option : 4

Q.6 What is the value of? $6\frac{1}{2} + 80 \div 40 - \frac{30}{7}$ of $(5 - \frac{1}{3})$
8

- Ans 1. $-\frac{23}{2}$
 2. $-\frac{21}{2}$
 3. $-\frac{17}{2}$
 4. $-\frac{13}{19}$

Question ID : 9895804209
Chosen Option : 3

Q.6 If Manoj purchases 324 toffees for ₹ 486, then how many toffees should he sell for ₹ 90 to earn 50% profit?
9

- Ans 1. 55

2. 60

3. 40

4. 45

Question ID : 9895804217

Chosen Option : 2

Q.7 0 After giving a discount of 20%, a shopkeeper earns 36% profit. Marked price is what percent more than the cost price?

Ans 1. 60%

2. 70%

3. 68%

4. 76%

Question ID : 9895804213

Chosen Option : 1

Q.7 1 A and B starts a business with investment of ₹ 28000 and ₹ 42000 respectively. A invests for 8 months and B invests for one year. If the total profit at the end of year is ₹ 21125, then what is the share of B?

Ans 1. ₹ 12625

2. ₹ 14285

3. ₹ 14625

4. ₹ 13575

Question ID : 9895804220

Chosen Option : 3

Q.7 2 The line chart given below shows the ratio of imports to exports for a country for 5 consecutive years Y_1, Y_2, Y_3, Y_4 and Y_5 .



If the imports for year Y_5 is ₹ 76000 crore, then what will be exports (in crores) for the year Y_5 ?

Ans 1. ₹ 80000

2. ₹ 84000

3. ₹ 82000

4. ₹ 78000

Question ID : 9895804230

Chosen Option : 3

Q.7 3 A sum of ₹ 10640 gives interest of ₹ 3724 in x years at 5% simple interest. What will be the value of x ?

Ans 1. 9 years

2. 6 years

3. 7 years

4. 8 years

Question ID : 9895804221

Chosen Option : 2

Q.7
4 If $x : y = 6 : 5$ and $z : y = 9 : 25$, then what is the ratio of $x : z$?

- Ans
- 1. 54 : 125
 - 2. 48 : 25
 - 3. 10 : 3
 - 4. 50 : 33

Question ID : 9895804218
Chosen Option : 3

Q.7
5 A alone can make a chair in 40 days and B alone can make the same chair in 24 days. If A and B are working on alternate days and A work on the first day, then in how many days the chair will be completed?

- Ans
- 1. 28 days
 - 2. 30 days
 - 3. 34 days
 - 4. 32 days

Question ID : 9895804224
Chosen Option : 3

Section : English Language

Q.1 Select the most appropriate word to fill in the blank.

The _____ of the museum showed us some ancient coins.

- Ans
- 1. controller
 - 2. collector
 - 3. conservator
 - 4. curator

Question ID : 9895803731
Chosen Option : 2

Q.2 Select the most appropriate synonym of the given word.

FOYER

- Ans
- 1. Lobby
 - 2. Bedroom
 - 3. Kitchen
 - 4. Verandah

Question ID : 9895803742
Chosen Option : 1

Q.3 Select the most appropriate word to fill in the blank.

They showed her the greatest _____.

- Ans
- 1. praise

2. respect

3. honour

4. tribute

Question ID : 9895803732

Chosen Option : 3

Q.4 Select the most appropriate meaning of the given idiom.

A blessing in disguise

Ans 1. A hidden misfortune

2. An apparent fortune

3. An apparent blessing

4. A hidden favour

Question ID : 9895803743

Chosen Option : 3

Q.5 Fill in the blanks with the most appropriate words.

_____ taught you such lessons as these?

Ans 1. What

2. Who

3. Which

4. Whom

Question ID : 9895803730

Chosen Option : 1

Q.6 Select the most appropriate option to substitute the underlined segment in the given sentence. If there is no need to substitute it, select No improvement.

The questions are so simple that a child can understand it.

Ans 1. is understanding them

2. No improvement.

3. can understand this

4. can understand them

Question ID : 9895803727

Chosen Option : 2

Q.7 Select the most appropriate option to substitute the underlined segment in the given sentence. If there is no need to substitute it, select No improvement.

The movie Uri tells the story of a surgical strike by the Indian army towards militants in POK.

Ans 1. against militants in POK

2. No improvement.

3. over militants at POK

4. for militants in POK

Question ID : 9895803726
Chosen Option : 3

Q.8 Select the correctly spelt word.

- Ans 1. Embarassment
 2. Embarrassmment
 3. Embarrasment
 4. Embarrassment

Question ID : 9895803747
Chosen Option : 1

Q.9 Select the most appropriate synonym of the given word.

FRUITFUL

- Ans 1. Productive
 2. Useless
 3. Juicy
 4. Barren

Question ID : 9895803741
Chosen Option : 1

Q.10 Select the most appropriate antonym of the given word.

CONVEX

- Ans 1. Concave
 2. Dense
 3. Transparent
 4. Opaque

Question ID : 9895803739
Chosen Option : 3

Q.11 Identify the segment in the sentence which contains the grammatical error from the given options.

The road was blocked since it was in repair.

- Ans 1. in repair
 2. since it was
 3. was blocked
 4. The road

Question ID : 9895803725
Chosen Option : 2

Q.1
2

Select the word which means the same as the group of words given.

A song written in the praise of God

- Ans
- 1. Epic
 - 2. Hymn
 - 3. Elegy
 - 4. Ode

Question ID : 9895803746
Chosen Option : 3

Q.1
3 Select the correctly spelt word.

- Ans
- 1. Hierarchy
 - 2. Hierarchy
 - 3. Hirarchy
 - 4. Hierarky

Question ID : 9895803748
Chosen Option : 3

Comprehension:

In the following passage some words have been deleted. Fill in the blanks with the help of the alternatives given.

There is some truth in the common saying that while dogs become attached to persons, cats are generally (1) _____ to places. A dog will follow his master anywhere, but a cat keeps to the (2) _____ it is used to; and even (3) _____ the house changes hand, the cat will remain there, so long as it is _____ treated (4) _____ by the new owners. A cat does not seem to be capable of (5) _____ often shown by a dog. It thinks most of its own comfort.

SubQuestion No : 14

Q.1
4 Fill in blank (1) with the most appropriate option.

- Ans
- 1. fond
 - 2. attached
 - 3. stuck
 - 4. held

Question ID : 9895803734
Chosen Option : 3

Comprehension:

In the following passage some words have been deleted. Fill in the blanks with the help of the alternatives given.

There is some truth in the common saying that while dogs become attached to persons, cats are generally (1) _____ to places. A dog will follow his master anywhere, but a cat keeps to the (2) _____ it is used to; and even (3) _____ the house changes hand, the cat will remain there, so long as it is _____ treated (4) _____ by the new owners. A cat does not seem to be capable of (5) _____ often shown by a dog. It thinks most of its own comfort.

SubQuestion No : 15

Q.1
5 Fill in blank (2) with the most appropriate option.

- Ans
- 1. master
 - 2. owner
 - 3. lady
 - 4. house

Question ID : 9895803735
Chosen Option : 3

Comprehension:

In the following passage some words have been deleted. Fill in the blanks with the help of the alternatives given.

There is some truth in the common saying that while dogs become attached to persons, cats are generally (1) _____ to places. A dog will follow his master anywhere, but a cat keeps to the (2) _____ it is used to; and even (3) _____ the house changes hand, the cat will remain there, so long as it is _____ treated (4) _____ by the new owners. A cat does not seem to be capable of (5) _____ often shown by a dog. It thinks most of its own comfort.

SubQuestion No : 16

Q.1
6 Fill in blank (3) with the most appropriate option.

- Ans
- 1. where
 - 2. then
 - 3. wherever
 - 4. when

Question ID : 9895803736
Chosen Option : 3

Comprehension:

In the following passage some words have been deleted. Fill in the blanks with the help of the alternatives given.

There is some truth in the common saying that while dogs become attached to persons, cats are generally (1) _____ to places. A dog will follow his master anywhere, but a cat keeps to the (2) _____ it is used to; and even (3) _____ the house changes hand, the cat will remain there, so long as it is _____ treated (4) _____ by the new owners. A cat does not seem to be capable of (5) _____ often shown by a dog. It thinks most of its own comfort.

SubQuestion No : 17

Q.1
7 Fill in blank (4) with the most appropriate option.

- Ans
- 1. harshly
 - 2. softly
 - 3. badly
 - 4. kindly

Question ID : 9895803737
Chosen Option : 3

Comprehension:

In the following passage some words have been deleted. Fill in the blanks with the help of the alternatives given.

There is some truth in the common saying that while dogs become attached to persons, cats are generally (1) _____ to places. A dog will follow his master anywhere, but a cat keeps to the (2) _____ it is used to; and even (3) _____ the house changes hand, the cat will remain there, so long as it is _____ treated (4) _____ by the new owners. A cat does not seem to be capable of (5) _____ often shown by a dog. It thinks most of its own comfort.

SubQuestion No : 18

Q.1
8 Fill in blank (5) with the most appropriate option.

- Ans
- 1. keenness
 - 2. kindness
 - 3. hatred
 - 4. loyalty

Question ID : 9895803738
Chosen Option : 2

Q.1
9 Identify the segment in the sentence which contains the grammatical error from the given options.

She complained about her weak eyes and lamented about the necessity from spectacles.

- Ans
- 1. her weak eyes
 - 2. lamented about
 - 3. She complained
 - 4. from spectacles

Question ID : 9895803724

Chosen Option : 3

Q.2
0 Select the most appropriate option to substitute the underlined segment in the given sentence. If there is no need to substitute it, select No improvement.

The furniture in this room are old and need to be replaced.

- Ans
- 1. are old and needing
 - 2. is old and needs
 - 3. No improvement.
 - 4. is old and need

Question ID : 9895803728

Chosen Option : 1

Q.2
1 Fill in the blanks with the most appropriate words.

Shakespeare _____ this play.

- Ans
- 1. has been writing
 - 2. write
 - 3. is writing
 - 4. wrote

Question ID : 9895803729

Chosen Option : 3

Q.2
2 Select the most appropriate meaning of the given idiom.

Cutting corners

- Ans
- 1. Making money
 - 2. Lending money
 - 3. Saving money
 - 4. Spending too much money

Question ID : 9895803744

Chosen Option : 3

Q.2
3 Select the most appropriate antonym of the given word.

LENIENT

- Ans
- 1. Defensive
 - 2. Helpful
 - 3. Generous
 - 4. Strict

Question ID : 9895803740

Chosen Option : 3

Q.2
4 Select the word which means the same as the group of words given.

A short speech at the end of a play

- Ans
- 1. Chorus
 - 2. Epilogue
 - 3. Eulogy
 - 4. Prologue

Question ID : 9895803745
Chosen Option : 3

Q.2
5 Identify the segment in the sentence which contains the grammatical error from the given options.

They visited the Qutub Minar, which is most attractive spot in Delhi.

- Ans
- 1. attractive spot
 - 2. They visited
 - 3. which is most
 - 4. in Delhi

Question ID : 9895803723
Chosen Option : 3

Section : Hindi Language

Q.1 सही वर्तनी वाले शब्द का चयन करें।

- Ans
- 1. प्रतिबर्ष
 - 2. परतीवर्ष
 - 3. प्रतिवर्श
 - 4. प्रतिवर्ष

Question ID : 9895803491
Chosen Option : --

Q.2 दिए गए शब्द के पर्यायवाची शब्द का चयन करें।

अमृत

- Ans
- 1. नीर
 - 2. विष
 - 3. रस
 - 4. पीयूष

Question ID : 9895803485
Chosen Option : --

Q.3

दिए गए वाक्य में रेखांकित खंड को प्रतिस्थापित करने के लिए सबसे उपयुक्त विकल्प का चयन करें।

जैसे ही मैंने शेर देखा, डर के मारे मेरा तो प्राण निकल गया।

- Ans
- 1. प्राण मेरे तो निकल गए।
 - 2. मेरे तो प्राण निकल गए।
 - 3. मेरा तो प्राण निकल गयी।
 - 4. मेरे तो प्राण निकल गया।

Question ID : 9895803468
Chosen Option : --

Q.4 दिए गए वाक्य में रेखांकित खंड को प्रतिस्थापित करने के लिए सबसे उपयुक्त विकल्प का चयन करें। मेरे दादाजी की चित्र बहुत पुराना है। यह चित्र मुझे बहुत प्रिय है।

- Ans
- 1. चित्र बहुत पुराना दादाजी को है।
 - 2. दादाजी की चित्र बहुत पुरानी है।
 - 3. दादाजी का चित्र बहुत पुरानी है।
 - 4. दादाजी का चित्र बहुत पुराना है।

Question ID : 9895803471
Chosen Option : --

Q.5 दिये गये वाक्यांश के लिए एक शब्द दीजिये।

अपनी हत्या करने वाला

- Ans
- 1. आत्मघाती
 - 2. पराघाती
 - 3. मित्रघाती
 - 4. सर्वघाती

Question ID : 9895803488
Chosen Option : --

Q.6 दिए गए वाक्य में रेखांकित खंड को प्रतिस्थापित करने के लिए सबसे उपयुक्त विकल्प का चयन करें।

वक्ताओं ने श्रोताओं की मन मोह लिया।

- Ans
- 1. श्रोताओं का मन मोह लिया।
 - 2. श्रोताओं को मन मोह लिया।
 - 3. श्रोताओं से मन मोह लिया।
 - 4. श्रोताओं के मन मोह लिया।

Question ID : 9895803470
Chosen Option : --

Comprehension:

दिए गए अनुच्छेद में कुछ शब्द हटा दिए गए हैं। दिए गए विकल्पों की सहायता से रिक्त स्थान भरें। प्रत्येक संख्या के लिए सबसे उपयुक्त विकल्प का चयन करें।

सफलता की देवी तिलक करने से पहले _____ (1) लेती है। वह उसी माथे पर _____ (2) करती है, जो श्रम की बूंदों से _____ (3) होता है। जो व्यक्ति श्रम से कतराते हैं और कर्त्तव्य से विमुख होते हैं वे विशेष सुविधा की _____ (4) करते हैं। उनके सपने कभी भी सफलता में परिणत नहीं हो सकते। इसलिए समय के देवता का सम्मान करने के लिए हर _____ (5) को अवसर बनाना तथा समय नियोजन करना आवश्यक है।

SubQuestion No : 7

Q.7 गद्यांश में संकेतित रिक्त स्थान (1) के लिए उपयुक्त शब्द होगा:

- Ans
- 1. तिलक
 - 2. परीक्षा
 - 3. पैसा
 - 4. भाग

Question ID : 9895803477

Chosen Option : --

Comprehension:

दिए गए अनुच्छेद में कुछ शब्द हटा दिए गए हैं। दिए गए विकल्पों की सहायता से रिक्त स्थान भरें। प्रत्येक संख्या के लिए सबसे उपयुक्त विकल्प का चयन करें।

सफलता की देवी तिलक करने से पहले _____ (1) लेती है। वह उसी माथे पर _____ (2) करती है, जो श्रम की बूंदों से _____ (3) होता है। जो व्यक्ति श्रम से कतराते हैं और कर्त्तव्य से विमुख होते हैं वे विशेष सुविधा की _____ (4) करते हैं। उनके सपने कभी भी सफलता में परिणत नहीं हो सकते। इसलिए समय के देवता का सम्मान करने के लिए हर _____ (5) को अवसर बनाना तथा समय नियोजन करना आवश्यक है।

SubQuestion No : 8

Q.8 गद्यांश में संकेतित रिक्त स्थान (2) के लिए उपयुक्त शब्द होगा:

- Ans
- 1. तिलक
 - 2. समय
 - 3. क्षेत्र
 - 4. आँखें

Question ID : 9895803478

Chosen Option : --

Comprehension:

दिए गए अनुच्छेद में कुछ शब्द हटा दिए गए हैं। दिए गए विकल्पों की सहायता से रिक्त स्थान भरें। प्रत्येक संख्या के लिए सबसे उपयुक्त विकल्प का चयन करें।

सफलता की देवी तिलक करने से पहले _____ (1) लेती है। वह उसी माथे पर _____ (2) करती है, जो श्रम की बूंदों से _____ (3) होता है। जो व्यक्ति श्रम से कतराते हैं और कर्तव्य से विमुख होते हैं वे विशेष सुविधा की _____ (4) करते हैं। उनके सपने कभी भी सफलता में परिणत नहीं हो सकते। इसलिए समय के देवता का सम्मान करने के लिए हर _____ (5) को अवसर बनाना तथा समय नियोजन करना आवश्यक है।

SubQuestion No : 9

Q.9 गद्यांश में संकेतित रिक्त स्थान (3) के लिए उपयुक्त शब्द होगा:

- Ans
- 1.
 - 2.
 - 3.
 - 4.

Question ID : 9895803479
Chosen Option : --

Comprehension:

दिए गए अनुच्छेद में कुछ शब्द हटा दिए गए हैं। दिए गए विकल्पों की सहायता से रिक्त स्थान भरें। प्रत्येक संख्या के लिए सबसे उपयुक्त विकल्प का चयन करें।

सफलता की देवी तिलक करने से पहले _____ (1) लेती है। वह उसी माथे पर _____ (2) करती है, जो श्रम की बूंदों से _____ (3) होता है। जो व्यक्ति श्रम से कतराते हैं और कर्तव्य से विमुख होते हैं वे विशेष सुविधा की _____ (4) करते हैं। उनके सपने कभी भी सफलता में परिणत नहीं हो सकते। इसलिए समय के देवता का सम्मान करने के लिए हर _____ (5) को अवसर बनाना तथा समय नियोजन करना आवश्यक है।

SubQuestion No : 10

Q.10

- Ans
- 1.
 - 2.
 - 3.
 - 4.

Question ID : 9895803480
Chosen Option : --

Comprehension:

दिए गए अनुच्छेद में कुछ शब्द हटा दिए गए हैं। दिए गए विकल्पों की सहायता से रिक्त स्थान भरें। प्रत्येक संख्या के लिए सबसे उपयुक्त विकल्प का चयन करें।

सफलता की देवी तिलक करने से पहले _____ (1) लेती है। वह उसी माथे पर _____ (2) करती है, जो श्रम की बूंदों से _____ (3) होता है। जो व्यक्ति श्रम से कतराते हैं और कर्त्तव्य से विमुख होते हैं वे विशेष सुविधा की _____ (4) करते हैं। उनके सपने कभी भी सफलता में परिणत नहीं हो सकते। इसलिए समय के देवता का सम्मान करने के लिए हर _____ (5) को अवसर बनाना तथा समय नियोजन करना आवश्यक है।

SubQuestion No : 11

Q.1

1

- Ans
- 1.
 - 2.
 - 3.
 - 4.

Question ID : 9895803481

Chosen Option : --

Q.1

2

- Ans
- 1.
 - 2.
 - 3.
 - 4.

Question ID : 9895803473

Chosen Option : --

Q.1

3

- Ans
- 1.
 - 2.
 - 3.
 - 4.

Question ID : 9895803475

Chosen Option : --

Q.1

4

- Ans
- 1.
 - 2.
 - 3.
 - 4.

Question ID : 9895803486

Chosen Option : --

Q.1

5

- Ans 1.
 2.
 3.
 4.

Question ID : 9895803490
Chosen Option : --

Q.1
6

- Ans 1.
 2.
 3.
 4.

Question ID : 9895803487
Chosen Option : --

Q.1
7

- Ans 1.
 2.
 3.
 4.

Question ID : 9895803466
Chosen Option : --

Q.1
8

- Ans 1.
 2.
 3.
 4.

Question ID : 9895803467
Chosen Option : --

Q.1
9

- Ans 1.
 2.
 3.
 4.

Question ID : 9895803484
Chosen Option : --

Q.2
0

- Ans 1.
 2.
 3.

4.

Question ID : 9895803472
Chosen Option : --

Q.2
1

- Ans 1.
 2.
 3.
 4.

Question ID : 9895803482
Chosen Option : --

Q.2
2

- Ans 1.
 2.
 3.
 4.

Question ID : 9895803483
Chosen Option : --

Q.2
3

- Ans 1.
 2.
 3.
 4.

Question ID : 9895803489
Chosen Option : --

Q.2
4

- Ans 1.
 2.
 3.
 4.

Question ID : 9895803469
Chosen Option : --

Q.2
5

- Ans 1.
 2.
 3.
 4.

Question ID : 9895803474
Chosen Option : --

GovtJobsAlert.In