

Constable (GD) in CAPFs, NIA, SSF and Rifleman (GD) in Assam Rifles Examination, 2018

Roll No. :	www.GovtJobsAlert.In
Registration No.	
Name :	
Exam Venue :	iON Digital Zone iDZ Ward No 1
Exam Time :	9:00 AM - 10:30 AM
Exam Date :	11/03/2019

Section : General Section

Q.1 J, A, G, E, V and F are sitting around a round table facing the centre. F is to the left of G, who is opposite A, V is between A and J. Who is to the left of E?

- Ans
- 1. V
 - 2. G
 - 3. A
 - 4. F

Question ID : 9895809332
Chosen Option : 2

Q.2 Which of the answer figure is exactly the mirror image of the given figure, when the mirror is placed on the line MN?

Question figure



- Ans
- 1.
 - 2.
 - 3.
 - 4.

Question ID : 9895809345
Chosen Option : 4

Q.3

The statements below are followed by two conclusions labeled I and II. Assuming that the information in the statements is true, even if it appears to be at variance with generally established facts, decide which conclusion(s) logically and definitely follow(s) from the information given in the statements.

Statement

1. All cans are jars.
2. No tins are cans.

Conclusion

- I. Some jars are tins.
- II. All tins are jars.

- Ans
1. Both I and II follow
 2. Neither I nor II follows
 3. Only conclusion II follows
 4. Only conclusion I follows

Question ID : 9895809334
Chosen Option : 1

Q.4 In a certain code, ADMIT is coded as BFPMY, then how is CARD coded in the same way?

- Ans
1. DUCH
 2. DCHU
 3. DCUH
 4. UCDH

Question ID : 9895809329
Chosen Option : 3

Q.5 G, H, I, J and K are sitting in a row. J is neither next to H nor K. J is NOT at the end. H is to the left of G. Who is to the left of K?

- Ans
1. J
 2. H
 3. I
 4. G

Question ID : 9895809331
Chosen Option : 4

Q.6 Select the option that is related to the third term in the same way as the second term is related to the first term.

Kangaroo : Hopping :: snake : _____

- Ans
1. Bite
 2. Walking
 3. Crawling
 4. Scrolling

Question ID : 9895809326
Chosen Option : 1

Q.7 Select the correct option that will fill in the blank and complete the series.

0.25, 1, _____, 4, 6.25, 9

- Ans
1. 2.25

- 2. 2
- 3. 2.75
- 4. 3

Question ID : 9895809336
Chosen Option : 1

Q.8 Select the related word pair from the given alternatives.

Crime : Criminology :: _____ : _____

- Ans
- 1. Heart : Hematology
 - 2. Flower : Floriculture
 - 3. Human behavior : Meteoricists
 - 4. Universe : Cosmology

Question ID : 9895809327
Chosen Option : 1

Q.9 If GREAT is written as 62149 and FINAL as 53047, how will REGAL be written?

- Ans
- 1. 26147
 - 2. 21647
 - 3. 22471
 - 4. 22674

Question ID : 9895809330
Chosen Option : 2

Q.1 A figure marked on transparent sheet is given and followed by four answer figures, one out of these four options resembles the figure, which is obtained by folding transparent sheet along the dotted line. This option is your answer.

Question Figures:

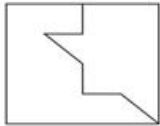


- Ans
- 1.
 - 2.
 - 3.
 - 4.

Question ID : 9895809346
Chosen Option : 2

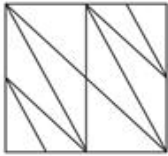
Q.1
1

Choose the option figure in which the problem figure is hidden/embedded.

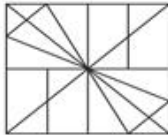


Ans

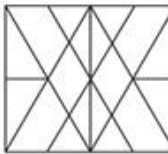
1.



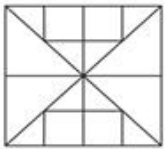
2.



3.



4.



Question ID : 9895809344
Chosen Option : 3

Q.1 Four options have been given out of which three are alike in some manner, while one is different. Choose the odd one.
2

Ans 1. 2321

2. 825

3. 1521

4. 968

Question ID : 9895809339
Chosen Option : 4

Q.1 Select the correct option that will fill in the blank and complete the series.
3

AA, BD, CI, DP, _____

Ans 1. EY

2. FR

3. ER

4. FY

Question ID : 9895809323
Chosen Option : 2

Q.1 Sonu is taller than Yatendra, Amit is taller than Sonu. Subhash is taller than Amit. Sattu is tallest of all. If they stand according to their height who will be exactly in the middle?
4

Ans 1. Sonu

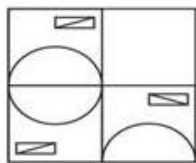
2. Subhash

3. Yatendra

✓ 4. Amit

Question ID : 9895809333
Chosen Option : 4

Q.1
5 Which of the following answer figure will complete the given figure?

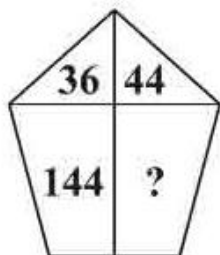


Ans



Question ID : 9895809343
Chosen Option : 2

Q.1
6 Find the missing number from the below options.



- Ans
- ✓ 1. 176
 - ✗ 2. 154
 - ✗ 3. 179
 - ✗ 4. 183

Question ID : 9895809340
Chosen Option : 2

Q.1
7 In the question two statements are given, followed by three conclusions, I, II and III. Assuming that the information in the statements is true, even if it appears to be at variance with generally established facts, decide which conclusion(s) logically and definitely follow(s) from the information given in the statements.

Statement

1. Some hills are dunes.
2. No dunes are mountains.

Conclusion

- I. Some dunes are hills.
- II. Some mountains are hills.
- III. All hills are mountains.

Ans

- 1. Only conclusion III follows
- 2. Only conclusion I follows
- 3. Only conclusion I and III follows
- 4. All conclusions I, II and III follow

Question ID : 9895809335
Chosen Option : 3

Q.1 Select the correct combination of mathematical signs to replace '**' signs and to balance the given equation:
8

$$44 * 6 * 12 * 3 * 20$$

- Ans
- 1. - + × =
 - 2. × ÷ + =
 - 3. ÷ × + =
 - 4. - × ÷ =

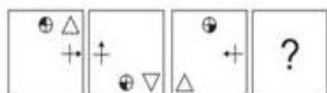
Question ID : 9895809341
Chosen Option : 4

Q.1 Four letter clusters have been given, out of which three are alike in some manner, while one is different. Choose the odd one.
9

- Ans
- 1. GCE
 - 2. PLN
 - 3. SJL
 - 4. JFH

Question ID : 9895809324
Chosen Option : 3

Q.2 Choose the option which completes the given figure series
0



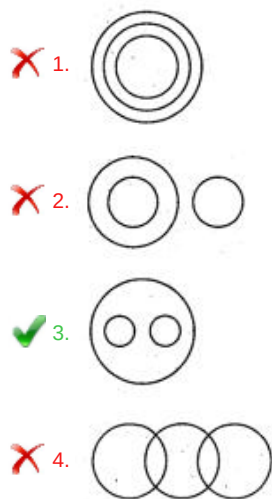
- Ans
- 1.
 - 2.
 - 3.
 - 4.

Question ID : 9895809342
Chosen Option : 4

Q.2 Select the Venn diagram that best illustrates the relationship between the three given classes.
1

Bachelor, Married, Person

Ans



Question ID : 9895809347
Chosen Option : 4

Q.2 Four words have been given, out of which three are alike in some manner, while one is different. Choose the odd one.
2

- Ans 1. Quill
 2. Esophagus
 3. Cranium
 4. Nasal bone

Question ID : 9895809325
Chosen Option : 4

Q.2 Select the correct option that will fill in the blank and complete the series.
3

32, 144, _____, 2916, 13122, 59049

- Ans 1. 846
 2. 684
 3. 648
 4. 864

Question ID : 9895809337
Chosen Option : 2

Q.2 Select the option that is related to the third term in the same way as the second term is related to the first term.
4

GHI : LKJ :: STU : ?

- Ans 1. ZXY
 2. XWV
 3. WVX
 4. UTV

Question ID : 9895809328
Chosen Option : 2

Q.2 Select the option that is related to the Third term in the same way as the second term is related to the first term.
5

22 : 333 :: 4444 : _____

- Ans 1. 5555
 2. 55555

3. 555

4. 55

Question ID : 9895809338
Chosen Option : 2

Q.2
6 The Chauri Chaura incident happened in the modern state of:

Ans 1. Uttar Pradesh

2. Delhi

3. Kerala

4. Madhya Pradesh

Question ID : 9895809522
Chosen Option : 1

Q.2
7 Extrusive rocks are a type of:

Ans 1. Sedimentary rocks

2. Fossil rocks

3. Metamorphic rocks

4. Igneous rocks

Question ID : 9895809517
Chosen Option : 1

Q.2
8 Which of the following suggestions to the Government about commercial lawsuits is indicated within the 2017-18 economic survey of India?

Ans 1. Should not make any changes in the number of lawsuits

2. Should increase the number of lawsuits

3. Should reduce the pendency of lawsuits

4.

Should appoint a committee to examine the number of lawsuits they file

Question ID : 9895809509
Chosen Option : 2

Q.2
9 All living organisms are classified into _____ kingdoms under the system proposed by Whittaker (1969).

Ans 1. Seven

2. Five

3. One

4. Three

Question ID : 9895809512
Chosen Option : 2

Q.3
0 The 2017 Sahitya Academy award for Malayalam was won by:

Ans 1. K. P Ramanunni

2. K. R Meera

3. Prabha Varma

4. Oomen Chandy

Question ID : 9895809503
Chosen Option : 2

Q.3
1 The Finance Commission in India is constituted by the _____ under article 280 of the Constitution.

- Ans
- 1. Supreme Court
 - 2. Parliament
 - 3. Prime Minister
 - 4. President

Question ID : 9895809506
Chosen Option : 1

Q.3
2 The only Indian Prime Minister to die outside India is:

- Ans
- 1. Indira Gandhi
 - 2. Lal Bahadur Shastri
 - 3. Morarji Desai
 - 4. Jawaharlal Nehru

Question ID : 9895809505
Chosen Option : 2

Q.3
3 In the central government budget, the annual financial statement shows:

- Ans
- 1.
The estimated money that has been earned by State Government of India
 - 2.
The estimated receipts and expenditures of the Government of India
 - 3.
The estimated money that has been spent by the Zilla Parishad
 - 4.
The estimated receipts and expenditures of the individual states

Question ID : 9895809510
Chosen Option : 2

Q.3
4 An instrument called the _____ measures the electric current in a circuit.

- Ans
- 1. Ammeter
 - 2. Ohmmeter
 - 3. Thermometer
 - 4. Gyroscope

Question ID : 9895809516
Chosen Option : 1

Q.3
5 _____ is the mark of quality for all industrial products in India.

- Ans
- 1. Agmark
 - 2. ISI

- 3. FPO
- 4. Ecomark

Question ID : 9895809511
Chosen Option : 2

Q.3
6 In the 2016 Olympics, _____ won the men's 100-meter sprint gold.

- Ans
- 1. Jesse De Grasse
 - 2. Usain Bolt
 - 3. William Blake
 - 4. Justin Gatlin

Question ID : 9895809501
Chosen Option : 2

Q.3
7 In India, the growth of anti-colonial movement led to:

- Ans
- 1. Sectarianism
 - 2. Conflict
 - 3. Diversity
 - 4. Unity

Question ID : 9895809521
Chosen Option : 2

Q.3
8 The Ajodhya Hills is located in:

- Ans
- 1. Uttar Pradesh
 - 2. Kerala
 - 3. Madhya Pradesh
 - 4. West Bengal

Question ID : 9895809500
Chosen Option : 4

Q.3
9 Kud is a form of dance from the state of _____.

- Ans
- 1. Jammu and Kashmir
 - 2. Gujarat
 - 3. West Bengal
 - 4. Kerala

Question ID : 9895809499
Chosen Option : 3

Q.4
0 _____ won the women's title in the 2018 US Open Tennis Championship finals.

- Ans
- 1. Martina Hingis
 - 2. Naomi Osaka
 - 3. Serena Williams
 - 4. Venus Williams

Question ID : 9895809502
Chosen Option : 2

Q.4
1 The property of Catenation is most readily predominant in:

- Ans
- 1. Silicon
 - 2. Nitrogen
 - 3. Carbon
 - 4. Sulphur

Question ID : 9895809513
Chosen Option : 2

Q.4
2 The precursor to the famous Odissi dance is:

- Ans
- 1. Kuchipudi
 - 2. Bhangra
 - 3. Bharatanatyam
 - 4. Gotipua

Question ID : 9895809498
Chosen Option : 4

Q.4
3 An ecosystem consists of:

- Ans
- 1. Only living organisms
 - 2. Living organisms and physical factors
 - 3. Only insects
 - 4. Only physical factors

Question ID : 9895809518
Chosen Option : 2

Q.4
4 Sour tasting food is _____ in nature.

- Ans
- 1. Acidic
 - 2. Neutral
 - 3. Basic
 - 4. Alkaline

Question ID : 9895809514
Chosen Option : 2

Q.4
5 The Dual System of Government in Bengal was the brainchild of _____.

- Ans
- 1. Lord Hastings
 - 2. Lord Ripon
 - 3. Lord Clive
 - 4. Lord Cornwallis

Question ID : 9895809520

Chosen Option : 2

Q.4
6 The Eighth Schedule of the Indian Constitution includes _____ languages.

- Ans
- 1. 22
 - 2. 25
 - 3. 2
 - 4. 100

Question ID : 9895809508
Chosen Option : 2

Q.4
7 Humans normally have _____ number of pairs of autosomes.

- Ans
- 1. 10
 - 2. 21
 - 3. 20
 - 4. 22

Question ID : 9895809515
Chosen Option : 2

Q.4
8 A good measure of biodiversity of an area is:

- Ans
- 1. The number of animals found there
 - 2. The number of trees found there
 - 3. The number of people found there
 - 4. The number of species found there

Question ID : 9895809519
Chosen Option : 2

Q.4
9 The union territories of India have been created because they are:

- Ans
- 1. Too small to be a state
 - 2. Have too many people to be a state
 - 3. Extremely large
 - 4. Too big to be a state

Question ID : 9895809507
Chosen Option : 2

Q.5
0 What was the time period of the most recent term served by the former Chief Economic Advisor, Arvind Subramanian?

- Ans
- 1. 2014-2018
 - 2. 2014-2017
 - 3. 2009-2014
 - 4. 2014-2016

Question ID : 9895809504
Chosen Option : 2

Q.5
1 The ratio between the speeds of two cars is 6 : 5. If the second car runs 600 km in 6 hours, then the speed of the first car is:

- Ans 1. 100 km/hr
 2. 120 km/hr
 3. 110 km/hr
 4. 90 km/hr

Question ID : 9895809693

Chosen Option : 2

Q.5
2 The mean of 23, 45, 64, 81 and 77 is:

- Ans 1. 56
 2. 58
 3. 54
 4. 52

Question ID : 9895809679

Chosen Option : 4

Q.5
3 The listed price of a product is ₹ 500. What shall be the sale price after successive discounts of 10% and 10%?

- Ans 1. ₹ 450
 2. ₹ 425
 3. ₹ 400
 4. ₹ 405

Question ID : 9895809678

Chosen Option : 1

Q.5
4 A and C, B and C and A, B and C can complete a work in 20, 12 and 8 days respectively. In how many days A and B together can complete that work?

- Ans 1. $\frac{65}{7}$ days
 2. $\frac{41}{3}$ days
 3. $\frac{71}{3}$ days
 4. $\frac{60}{7}$ days

Question ID : 9895809692

Chosen Option : 2

Q.5
5 A batsman scored 120 runs which included 15 fours and 2 sixes. What percent of runs scored by him running between the wickets?

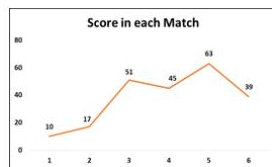
- Ans 1. 40%
 2. 35%
 3. 37.50%
 4. 25%

Question ID : 9895809681

Chosen Option : 1

Q.5
6

The line graph shows the scores of a batsman in 6 matches. In how many matches was his performance better than the previous match?



- Ans
- 1. 2
 - 2. 4
 - 3. 3
 - 4. 1

Question ID : 9895809695
Chosen Option : 1

Q.5
7 If $a : b = 2 : 3$, $b : c = 5 : 6$ and $c : d = 8 : 9$, then $a : d = ?$

- Ans
- 1. 42 : 81
 - 2. 44 : 81
 - 3. 37 : 81
 - 4. 40 : 81

Question ID : 9895809686
Chosen Option : 2

Q.5
8 The value of:

$$4 \div 2 + 3 \times 6 - 7 \text{ is:}$$

- Ans
- 1. 13
 - 2. 14
 - 3. 11
 - 4. 12

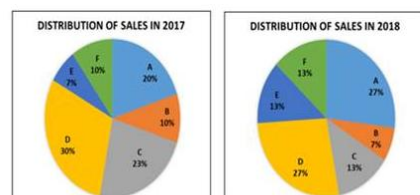
Question ID : 9895809675
Chosen Option : 1

Q.5
9 The difference between simple and compound interests compounded annually, on a certain sum of money for 2 years at 6% pa is ₹ 3.6. What is the sum?

- Ans
- 1. ₹ 800
 - 2. ₹ 750
 - 3. ₹ 1,000
 - 4. ₹ 1,250

Question ID : 9895809677
Chosen Option : 2

Q.6
0



The pie charts shows the percentage market share of different companies in the market for the year 2017 and 2018. The total sale increased from 150 crores to 225 crores during 2017 to 2018. What is the ratio of sales of Company D in the year 2018 to its sales in the year 2017?

- Ans 1. 16 : 21
 2. 21 : 16
 3. 27 : 20
 4. 20 : 27

Question ID : 9895809697
 Chosen Option : 1

Q.6 An article was bought for ₹ 400 and a repairing charge of ₹ 50 was paid on it. It is sold at a profit of 20%, after a discount of 10% on its marked price. The marked price is:

- Ans 1. ₹ 540
 2. ₹ 640
 3. ₹ 580
 4. ₹ 600

Question ID : 9895809683
 Chosen Option : 2

Q.6 The ratio of two numbers is 4 : 5 and the sum of their cubes is 1512. The square of their difference is:

- Ans 1. 2.25
 2. 4
 3. 2
 4. 1

Question ID : 9895809684
 Chosen Option : 1

Q.6 A right triangle contains the right angle between the sides 5 cm and 7 cm. A cone is generated by revolving about the side 5 cm. The volume of this cone is:

- Ans 1. $51\frac{2}{3}\pi \text{ cm}^3$
 2. $71\frac{2}{3}\pi \text{ cm}^3$
 3. $81\frac{2}{3}\pi \text{ cm}^3$
 4. $61\frac{2}{3}\pi \text{ cm}^3$

Question ID : 9895809690
 Chosen Option : 1

Q.6 A can complete a task in 8 days and B in 16 days respectively. If they work together for 3 days, then the remaining part of the work left is:

- Ans 1. $\frac{5}{16}$
 2. $\frac{9}{16}$
 3. $\frac{7}{16}$
 4. $\frac{11}{16}$

Question ID : 9895809691
 Chosen Option : 1

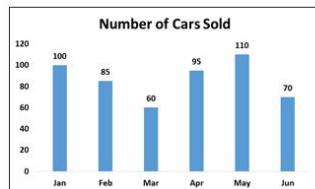
Q.6
5 A and B together have ₹ 1800. If $\frac{4}{3}$ of A's amount is equal to $\frac{2}{3}$ of B's amount, how much does B have?

- Ans
- 1. ₹ 1200
 - 2. ₹ 900
 - 3. ₹ 750
 - 4. ₹ 600

Question ID : 9895809685

Chosen Option : 2

Q.6
6 The bar graph shows the number of cars sold by a distributor in each month from January to June. How many more cars did he sell in the second quarter as compared to the first?



- Ans
- 1. 20
 - 2. 25
 - 3. 10
 - 4. 30

Question ID : 9895809696

Chosen Option : 2

Q.6
7 A hollow iron pipe is 10 cm long and its external diameter is 18 cm. If the thickness of the pipe is 2 cm and iron weighs 8.5 g/cm^3 , then the weight of the pipe from the following is closest to:

- Ans
- 1. 8.54 kg
 - 2. 9.54 kg
 - 3. 7.54 kg
 - 4. 5.54 kg

Question ID : 9895809688

Chosen Option : 2

Q.6
8 In the first 20 overs of a cricket game, the average run rate was 5.50, what should be the required average run rate in the remaining 30 overs to achieve a target of 290 runs?

- Ans
- 1. 5.75
 - 2. 6.5
 - 3. 6
 - 4. 6.25

Question ID : 9895809673

Chosen Option : 3

Q.6
9 A sum of money at simple interest amounts to ₹ 400 in 4 years and ₹ 420 in 5 years. What is the sum?

- Ans
- 1. ₹ 340
 - 2. ₹ 220
 - 3. ₹ 320
 - 4. ₹ 200

Question ID : 9895809687
Chosen Option : 2

Q.7
0 220 articles dropped in a water tank which is 52 m long and 47 m broad. If the average displacement of water by an article is 4.5 m^3 , then approximate rise in the water level will be:

- Ans
- 1. 40.5 cm
 - 2. 20.5 cm
 - 3. 12.5 cm
 - 4. 30.5 cm

Question ID : 9895809689
Chosen Option : 2

Q.7
1 x buys a scooter for ₹ 40,000 and spends ₹ 5,000 on its repair. He sells it for ₹ 54,000. What is the gain percent?

- Ans
- 1. 12.50%
 - 2. 20%
 - 3. 25%
 - 4. 15%

Question ID : 9895809682
Chosen Option : 3

Q.7
2 The average age of husband, wife and their child 4 years ago was 26 years and that of wife and child 3 years ago was 22 years. What is the present age of the husband?

- Ans
- 1. 44 years
 - 2. 46 years
 - 3. 42 years
 - 4. 40 years

Question ID : 9895809674
Chosen Option : 4

Q.7
3 What is the value of:

$$8 \times 3 \div 6 + 7 - 4 \times 2 \div 4 + 8 - 10 = ?$$

- Ans
- 1. 6
 - 2. 5
 - 3. 7
 - 4. 4

Question ID : 9895809676
Chosen Option : 3

Q.7
4 The HCF and LCM of 2 numbers are 2 and 60 respectively. If one of the numbers is 14 more than the other, then the smaller number is:

- Ans
- 1. 7
 - 2. 5
 - 3. 6
 - 4. 4

Question ID : 9895809680
Chosen Option : 2

Q.7 Two stations P and Q are 570 km apart on a straight line. One train starts from P at 5 a.m. and travels towards Q at 90 km/h. Another train starts from Q at 6 a.m. and travels towards P at a speed of 70 km/h. At what time will they meet?

- Ans
- 1. 11 a.m.
 - 2. 9 a.m.
 - 3. 1 p.m.
 - 4. 3 p.m.

Question ID : 9895809694
Chosen Option : 2

Section : English Language

Q.1 Select the meaning of the given idiom.

Hit a bad patch

- Ans
- 1. Came across stormy weather
 - 2. Had a bumpy car ride
 - 3. Went through many illnesses
 - 4. Experienced difficulty

Question ID : 9895809871
Chosen Option : 2

Q.2 Select the most appropriate word to fill in the blank.

These medicines are _____ for curing cold.

- Ans
- 1. natural
 - 2. effective
 - 3. powerful
 - 4. proper

Question ID : 9895809876
Chosen Option : 4

Q.3 Identify the segment in the sentence which contains the grammatical error from the given options.

Ships are made of iron and a parts of them remains under water.

- Ans
- 1. under water
 - 2. Ships are
 - 3. made of iron
 - 4. a parts of

Question ID : 9895809853
Chosen Option : 3

Q.4 Select the antonym of the given word.

DISTANT

- Ans
- 1. Beyond

- 2. Close
- 3. Remote
- 4. Far

Question ID : 9895809868
Chosen Option : 2

Q.5 Select the meaning of the given idiom.

Man of straw

- Ans
- 1. Weak
 - 2. Selfish
 - 3. Useless
 - 4. Stubborn

Question ID : 9895809870
Chosen Option : 1

Q.6 Select the wrongly spelt word.

- Ans
- 1. Inevitable
 - 2. Intelligence
 - 3. Idiosyncrasy
 - 4. Incredible

Question ID : 9895809874
Chosen Option : 3

Q.7 Select the most appropriate option to substitute the underlined segment in the given sentence. If there is no need to substitute it, select No substitution required.

A well-known animal living in Antarctica are a penguins.

- Ans
- 1. is a penguin
 - 2. No substitution required
 - 3. is the penguin
 - 4. are penguin

Question ID : 9895809857
Chosen Option : 4

Q.8 Select the most appropriate option to substitute the underlined segment in the given sentence. If there is no need to substitute it, select No substitution required.

The weather reports is prepared by the Meteorological Department of the Government.

- Ans
- 1. prepared
 - 2. is prepare
 - 3. are prepared
 - 4. No substitution required

Question ID : 9895809855
Chosen Option : 3

Q.9 Select the most appropriate word to fill in the blank.

I will write a letter to you _____ the dates of the programme.

- Ans
- 1. urging
 - 2. indicating
 - 3. involving
 - 4. propagating

Question ID : 9895809877
Chosen Option : 2

Comprehension:

In the following passage some words have been deleted. Fill in the blanks with the help of the alternatives given. Select the most appropriate option for each number.

Orissa was hit by a cyclone with a wind speed of 200 km/h on 18 October 1999. The cyclone (1) _____ 45,000 houses making 7,00,000 people homeless. (2) _____ 29 October the same year, a second cyclone (3) _____ a wind speed of 260 km/h hit Orissa again. It was (4) _____ by water waves about 9 metre high. Thousands of people (5) _____ their lives. Property worth crores of rupees was destroyed.

SubQuestion No : 10

Q.1
0 Select the most appropriate option that will fill in the blank number 1.

- Ans
- 1. smashed
 - 2. burst
 - 3. exploded
 - 4. crashed

Question ID : 9895809861
Chosen Option : 2

Comprehension:

In the following passage some words have been deleted. Fill in the blanks with the help of the alternatives given. Select the most appropriate option for each number.

Orissa was hit by a cyclone with a wind speed of 200 km/h on 18 October 1999. The cyclone (1) _____ 45,000 houses making 7,00,000 people homeless. (2) _____ 29 October the same year, a second cyclone (3) _____ a wind speed of 260 km/h hit Orissa again. It was (4) _____ by water waves about 9 metre high. Thousands of people (5) _____ their lives. Property worth crores of rupees was destroyed.

SubQuestion No : 11

Q.1
1 Select the most appropriate option that will fill in the blank number 2.

Ans

- 1. In
- 2. From
- 3. By
- 4. On

Question ID : 9895809862

Chosen Option : 1

Comprehension:

In the following passage some words have been deleted. Fill in the blanks with the help of the alternatives given. Select the most appropriate option for each number.

Orissa was hit by a cyclone with a wind speed of 200 km/h on 18 October 1999. The cyclone (1) _____ 45,000 houses making 7,00,000 people homeless. (2) _____ 29 October the same year, a second cyclone (3) _____ a wind speed of 260 km/h hit Orissa again. It was (4) _____ by water waves about 9 metre high. Thousands of people (5) _____ their lives. Property worth crores of rupees was destroyed.

SubQuestion No : 12

Q.1
2 Select the most appropriate option that will fill in the blank number 3.

- Ans
- 1. in
 - 2. from
 - 3. of
 - 4. with

Question ID : 9895809863

Chosen Option : 4

Comprehension:

In the following passage some words have been deleted. Fill in the blanks with the help of the alternatives given. Select the most appropriate option for each number.

Orissa was hit by a cyclone with a wind speed of 200 km/h on 18 October 1999. The cyclone (1) _____ 45,000 houses making 7,00,000 people homeless. (2) _____ 29 October the same year, a second cyclone (3) _____ a wind speed of 260 km/h hit Orissa again. It was (4) _____ by water waves about 9 metre high. Thousands of people (5) _____ their lives. Property worth crores of rupees was destroyed.

SubQuestion No : 13

Q.1
3 Select the most appropriate option that will fill in the blank number 4.

- Ans
- 1. accompanied
 - 2. increased
 - 3. started
 - 4. furnished

Question ID : 9895809864
Chosen Option : 2

Comprehension:

In the following passage some words have been deleted. Fill in the blanks with the help of the alternatives given. Select the most appropriate option for each number.

Orissa was hit by a cyclone with a wind speed of 200 km/h on 18 October 1999. The cyclone (1) _____ 45,000 houses making 7,00,000 people homeless. (2) _____ 29 October the same year, a second cyclone (3) _____ a wind speed of 260 km/h hit Orissa again. It was (4) _____ by water waves about 9 metre high. Thousands of people (5) _____ their lives. Property worth crores of rupees was destroyed.

SubQuestion No : 14

Q.1
4 Select the most appropriate option that will fill in the blank number 5.

- Ans
- 1. gave
 - 2. left
 - 3. finished
 - 4. lost

Question ID : 9895809865
Chosen Option : 4

Q.1
5 Select the antonym of the given word.

FLOOD

- Ans
- 1. Overflow
 - 2. Drought
 - 3. Outpouring
 - 4. Abundance

Question ID : 9895809869
Chosen Option : 4

Q.1
6 Select the most appropriate option to substitute the underlined segment in the given sentence. If there is no need to substitute it, select No substitution required.

Animals adapt themselves for survive in the conditions in which they live.

- Ans
- 1. to survive in
 - 2. by surviving in
 - 3. No substitution required
 - 4. for survival on

Question ID : 9895809856
Chosen Option : 1

Q.1
7

Select the most appropriate word to fill in the blank.

Emperors need more resources _____ kings because empires are larger than kingdoms.

- Ans
- 1. than
 - 2. of
 - 3. as
 - 4. for

Question ID : 9895809859
Chosen Option : 1

Q.1 Identify the segment in the sentence which contains the grammatical error from the given options.

8

When food gets spoil, it produces a foul smell.

- Ans
- 1. When food
 - 2. a foul smell
 - 3. it produces
 - 4. get spoil

Question ID : 9895809852
Chosen Option : 4

Q.1 Identify the segment in the sentence which contains the grammatical error from the given options.

9

The Qutub Minar in Delhi, the world heritage site, is more than 1600 years old.

- Ans
- 1. the world heritage site
 - 2. The Qutub Minar
 - 3. is more than
 - 4. 1600 years old

Question ID : 9895809854
Chosen Option : 2

Q.2 Select the word which means the same as the group of words given.

0

A person who is blamed for something that someone else has done.

- Ans
- 1. Volunteer
 - 2. Scapegoat
 - 3. Athlete
 - 4. Culprit

Question ID : 9895809872
Chosen Option : 1

Q.2 Select the word which means the same as the group of words given.

1

A person who knows and is able to use several languages.

- Ans
- 1. Polygamist
 - 2. Bilingual

3. Agnostic

4. Polyglot

Question ID : 9895809873

Chosen Option : 1

Q.2
2 Select the most appropriate word to fill in the blank.

The blue whale has the largest tongue which can weigh _____ an elephant.

Ans 1. many more as

2. as much as

3. much

4. more as

Question ID : 9895809858

Chosen Option : 2

Q.2
3 Select the wrongly spelt word.

Ans 1. Inevitable

2. Irresistible

3. Incredible

4. Incidentally

Question ID : 9895809875

Chosen Option : 2

Q.2
4 Select the synonym of the given word.

RELISH

Ans 1. Enjoy

2. Hate

3. Detest

4. Dislike

Question ID : 9895809867

Chosen Option : 2

Q.2
5 Select the synonym of the given word.

STUBBORN

Ans 1. Obstinate

2. Adaptable

3. Cooperative

4. Obedient

Question ID : 9895809866

Chosen Option : 2

Q.1 'चोली दामन का साथ' मुहावरे का सही अर्थ है -

- Ans
- 1. घनिष्ठ संबंध होना
 - 2. दुश्मनी
 - 3. मेल न होना
 - 4. कटु शत्रुता

Question ID : 98958010003
Chosen Option : --

Q.2 'बहुत-सी भाषाओं को जानने वाला' के लिए एक शब्द है-

- Ans
- 1. द्विभाषी
 - 2. प्रशासक
 - 3. बहुभाषाविद्
 - 4. अनुवादक

Question ID : 98958010004
Chosen Option : --

Q.3 दिए गए वाक्य में रेखांकित खंड को प्रतिस्थापित करने के लिए उपयुक्त विकल्प का चयन करें।

अब 'क्षय' जैसी प्राणन्तक बीमारी का इलाज भी सम्भव है।

- Ans
- 1. उपचार
 - 2. आधान
 - 3. समाचार
 - 4. समादान

Question ID : 9895809987
Chosen Option : --

Q.4 'सर्प' का पर्यावाची शब्द है-

- Ans
- 1. व्याल
 - 2. शार्दूल
 - 3. पतंग
 - 4. अहित

Question ID : 98958010000
Chosen Option : --

Q.5 रिक्त स्थान को भरने के लिए उपयुक्त शब्द का चयन करें।

सामाजिक कुरीतियों का एकमात्र कारण _____ है।

- Ans
- 1. अनजान
 - 2. अहंकार
 - 3. अज्ञान

✗ 4. अकड़

Question ID : 9895809990
Chosen Option : --

Q.6 रिक्त स्थान को भरने के लिए उपयुक्त शब्द का चयन करें।

मेरा ध्यान _____ भाई की ओर था।

- Ans
- ✓ 1. तुम
 - ✗ 2. हमारे
 - ✗ 3. हमें
 - ✗ 4. अपने

Question ID : 9895809991
Chosen Option : --

Q.7 सही वर्तनी वाले शब्द का चयन करें।

- Ans
- ✓ 1. सन्मुख
 - ✗ 2. सनमुख
 - ✗ 3. संमूख
 - ✗ 4. सम्मुख

Question ID : 98958010007
Chosen Option : --

Q.8 दिए गए वाक्य में रेखांकित खंड को प्रतिस्थापित करने के लिए उपयुक्त विकल्प का चयन करें।

आपके विद्वतापूर्ण व्याख्यान से मेरी शंका का निराकरण हो गया।

- Ans
- ✗ 1. समाधान
 - ✗ 2. संहार
 - ✓ 3. स्पष्टीकरण
 - ✗ 4. विवेचन

Question ID : 9895809986
Chosen Option : --

Q.9 रिक्त स्थान को भरने के लिए उपयुक्त शब्द का चयन करें।

वह _____ समझदार है।

- Ans
- ✓ 1. अधिक
 - ✗ 2. तीव्र
 - ✗ 3. बहुत
 - ✗ 4. मंद

Question ID : 9895809988
Chosen Option : --

Q.1
0 दिए गए वाक्य का वह भाग ज्ञात करें जिसमें कोई त्रुटि है।

हम में से अधिकतर व्यक्ति अनेक आदतों से बँधा हुए हैं।

- Ans
- 1. हम में से
 - 2. बँधा हुए हैं।
 - 3. अनेक आदतों से
 - 4. अधिकतर व्यक्ति

Question ID : 9895809983
Chosen Option : --

Q.1
1 'पत्थर' का पर्यावाची शब्द है-

- Ans
- 1. शैल
 - 2. अचल
 - 3. भूधर
 - 4. प्रस्तर

Question ID : 98958010001
Chosen Option : --

Q.1
2 'इष्ट' शब्द का विलोम शब्द है-

- Ans
- 1. अवनति
 - 2. बुरा
 - 3. अनिष्ट
 - 4. पतन

Question ID : 9895809998
Chosen Option : --

Q.1
3 सही वर्तनी वाले शब्द का चयन करें।

- Ans
- 1. परिवार
 - 2. परीवार
 - 3. प्ररिवार
 - 4. परिवार

Question ID : 98958010006
Chosen Option : --

Q.1
4 दिए गए वाक्य का वह भाग ज्ञात करें जिसमें कोई त्रुटि है।

बादशाह अकबर एक दिन शिकार खेलती हुई जंगल में भटक गए।

- Ans
- 1. शिकार खेलती हुई

- 2. जंगल में भटक गए।
- 3. बादशाह अकबर
- 4. एक दिन

Question ID : 9895809982
Chosen Option : --

Q.1
5 'पराधीन' शब्द का विलोम शब्द है-

- Ans
- 1. अर्वाचीन
 - 2. स्वाधीन
 - 3. अधीन
 - 4. प्राचीन

Question ID : 9895809999
Chosen Option : --

Q.1
6 दिए गए वाक्य का वह भाग ज्ञात करें जिसमें कोई त्रुटि है।

वर्तमान युग कम्प्यूटर तथा सूचना प्रोद्योगिकी की युग है।

- Ans
- 1. कम्प्यूटर तथा
 - 2. की युग है।
 - 3. सूचना प्रोद्योगिकी
 - 4. वर्तमान युग

Question ID : 9895809984
Chosen Option : --

Q.1
7 'जो भेदा या तोड़ा न जा सके' के लिए एक शब्द है-

- Ans
- 1. अभेद्य
 - 2. पारदर्शी
 - 3. अभेद
 - 4. नश्वर

Question ID : 98958010005
Chosen Option : --

Q.1
8 'अन्धे के हाथ बटेर लगना' मुहावरे का सही अर्थ है -

- Ans
- 1. हानि होना
 - 2. एकाएक लाभ होना
 - 3. अन्धे को सोना मिल जाना
 - 4. भविष्य की बात को जान लेना

Question ID : 98958010002

Comprehension:

निम्नलिखित गद्यांश के रिक्त स्थानों की पूर्ति गद्यांश के नीचे दिए गए प्रश्नों के अनुसार कीजिए-

विज्ञान के क्षेत्र में जाकर लोग धर्म की _____ (1) करने लगते हैं। धर्म पर _____ (2) का लक्षण लगाकर वैज्ञानिक अपने सत्यान्वेषी होने का गुणगान करते हैं। सच्चाई यह है कि धर्म और विज्ञान अलग-अलग होकर भी अलग-अलग नहीं हैं। दोनों का उद्देश्य _____ (3) का हित है। धर्म का _____ (4) मनुष्य के भीतर परोपकार, त्याग-बलिदान, करुणा और प्रेम का _____ (5) करके उसे सुंदर सामाजिक जीवन जीने योग्य बनाना है।

SubQuestion No : 19

Q.1 गद्यांश में संकेतित रिक्त स्थान (1) के लिए उपयुक्त शब्द होगा।

- Ans
- 1. उपेक्षा
 - 2. उत्प्रेक्षा
 - 3. उलाहना
 - 4. अपेक्षा

Question ID : 9895809993

Chosen Option : --

Comprehension:

निम्नलिखित गद्यांश के रिक्त स्थानों की पूर्ति गद्यांश के नीचे दिए गए प्रश्नों के अनुसार कीजिए-

विज्ञान के क्षेत्र में जाकर लोग धर्म की _____ (1) करने लगते हैं। धर्म पर _____ (2) का लक्षण लगाकर वैज्ञानिक अपने सत्यान्वेषी होने का गुणगान करते हैं। सच्चाई यह है कि धर्म और विज्ञान अलग-अलग होकर भी अलग-अलग नहीं हैं। दोनों का उद्देश्य _____ (3) का हित है। धर्म का _____ (4) मनुष्य के भीतर परोपकार, त्याग-बलिदान, करुणा और प्रेम का _____ (5) करके उसे सुंदर सामाजिक जीवन जीने योग्य बनाना है।

SubQuestion No : 20

Q.2 गद्यांश में संकेतित रिक्त स्थान (2) के लिए उपयुक्त शब्द होगा।

- Ans
- 1. अंधविश्वास
 - 2. कर्मठता
 - 3. मर्यादा
 - 4. विश्वास

Comprehension:

निम्नलिखित गद्यांश के रिक्त स्थानों की पूर्ति गद्यांश के नीचे दिए गए प्रश्नों के अनुसार कीजिए-

विज्ञान के क्षेत्र में जाकर लोग धर्म की _____ (1) करने लगते हैं। धर्म पर _____ (2) का लांछन लगाकर वैज्ञानिक अपने सत्यान्वेषी होने का गुणगान करते हैं। सच्चाई यह है कि धर्म और विज्ञान अलग-अलग होकर भी अलग-अलग नहीं हैं। दोनों का उद्देश्य _____ (3) का हित है। धर्म का _____ (4) मनुष्य के भीतर परोपकार, त्याग-बलिदान, करुणा और प्रेम का _____ (5) करके उसे सुंदर सामाजिक जीवन जीने योग्य बनाना है।

SubQuestion No : 21

Q.2
1 गद्यांश में संकेतित रिक्त स्थान (3) के लिए उपयुक्त शब्द होगा।

- Ans
- 1. इतिहास
 - 2. सामाजिक विज्ञान
 - 3. मनुष्य
 - 4. विज्ञान

Comprehension:

निम्नलिखित गद्यांश के रिक्त स्थानों की पूर्ति गद्यांश के नीचे दिए गए प्रश्नों के अनुसार कीजिए-

विज्ञान के क्षेत्र में जाकर लोग धर्म की _____ (1) करने लगते हैं। धर्म पर _____ (2) का लांछन लगाकर वैज्ञानिक अपने सत्यान्वेषी होने का गुणगान करते हैं। सच्चाई यह है कि धर्म और विज्ञान अलग-अलग होकर भी अलग-अलग नहीं हैं। दोनों का उद्देश्य _____ (3) का हित है। धर्म का _____ (4) मनुष्य के भीतर परोपकार, त्याग-बलिदान, करुणा और प्रेम का _____ (5) करके उसे सुंदर सामाजिक जीवन जीने योग्य बनाना है।

SubQuestion No : 22

Q.2
2 गद्यांश में संकेतित रिक्त स्थान (4) के लिए उपयुक्त शब्द होगा।

- Ans
- 1. लक्ष्य
 - 2. साक्ष्य
 - 3. लक्ष
 - 4. साधन

Question ID : 9895809996
Chosen Option : --

Comprehension:

निम्नलिखित गद्यांश के रिक्त स्थानों की पूर्ति गद्यांश के नीचे दिए गए प्रश्नों के अनुसार कीजिए-

विज्ञान के क्षेत्र में जाकर लोग धर्म की _____ (1) करने लगते हैं। धर्म पर _____ (2) का लक्षण लगाकर वैज्ञानिक अपने सत्यान्वेषी होने का गुणगान करते हैं। सच्चाई यह है कि धर्म और विज्ञान अलग-अलग होकर भी अलग-अलग नहीं हैं। दोनों का उद्देश्य _____ (3) का हित है। धर्म का _____ (4) मनुष्य के भीतर परोपकार, त्याग-बलिदान, करुणा और प्रेम का _____ (5) करके उसे सुंदर सामाजिक जीवन जीने योग्य बनाना है।

SubQuestion No : 23

Q.2
3 गद्यांश में संकेतित रिक्त स्थान (5) के लिए उपयुक्त शब्द होगा।

- Ans
- 1. प्रगति
 - 2. विनाश
 - 3. हास
 - 4. विकास

Question ID : 9895809997
Chosen Option : --

Q.2
4 दिए गए वाक्य में रेखांकित खंड को प्रतिस्थापित करने के लिए उपयुक्त विकल्प का चयन करें।
सुरेश और मोहन दोनों साथ-साथ पढ़ने वाले छात्र हैं।

- Ans
- 1. सहकर्मी
 - 2. परोपकारी
 - 3. स्वावलंबी
 - 4. सहपाठी

Question ID : 9895809985
Chosen Option : --

Q.2
5 रिक्त स्थान को भरने के लिए उपयुक्त शब्द का चयन करें।

हमारे समाज _____ अनेक कुरीतियाँ हैं।

- Ans
- 1. अंदर
 - 2. में
 - 3. भीतर
 - 4. बीच

GovtJobsAlert.In