

Constable (GD) in CAPFs, NIA, SSF and Rifleman (GD) in Assam Rifles Examination, 2018

Roll No. :	www.GovtJobsAlert.In
Registration No.	
Name :	
Exam Venue :	iON Digital Zone iDZ Kovilambakkam
Exam Time :	12:30 PM - 2:00 PM
Exam Date :	12/02/2019

Section : General Section

Q.1 Choose the option in which the figure marked 'X' is embedded.



X

Ans



Question ID : 9895804688
Chosen Option : 2

Q.2 Select the option that is related to the third term in the same way as the second term is related to the first term.

CGK : XTP :: GIM : ?

- Ans
- 1. TSN
 - 2. TPN
 - 3. TQN
 - 4. TRN

Question ID : 9895804672
Chosen Option : 4

Q.3 J, K, L, M, N and O are six teachers. Each one teaches a different subject out of Hindi, English, Math, Science, Social Science and Arts, not necessarily in the same order. Each of them teaches on only one day, from Monday to Saturday, not necessarily in the same order. J teaches Arts on Saturday. L teaches neither English nor Social Science, but he teaches on Thursday. Wednesday is reserved for Maths taught by K. O teaches Science a day before N. Social Science is taught a day before Arts. Which subject is taught by L?

- Ans 1. Hindi
 2. Maths
 3. Science
 4. Arts

Question ID : 9895804677
Chosen Option : 3

Q.4 In a certain code, TOUCH is written as 68. How will ERROR be written in that code?

- Ans 1. 61
 2. 54
 3. 59
 4. 55

Question ID : 9895804674
Chosen Option : 2

Q.5 Which number will follow next in the given number series?

3, 18, 48, 93, ?

- Ans 1. 247
 2. 147
 3. 153
 4. 202

Question ID : 9895804680
Chosen Option : 1

Q.6 Seven friends O, P, Q, R, S, T and U are watching a movie sitting in a row. S is sitting at one extreme end. Q is sitting second to the right of S. P is sitting between O and Q. U is not sitting at any extreme end. R is sitting to the left of T. Who is sitting at the extreme right end?

- Ans 1. R
 2. T
 3. P
 4. Q

Question ID : 9895804675
Chosen Option : 3

Q.7 Select the option that is related to the third term in the same way as the second term is related to the first term.

Lamb : Frisk :: Mouse : ?

- Ans 1. Strut
 2. Leap
 3. Scamper
 4. Swoop

Question ID : 9895804671
Chosen Option : 2

Q.8 Which one of the following letter clusters does NOT belong to the group?

- Ans 1. EG

- 2. AK
- 3. CI
- 4. FH

Question ID : 9895804668
Chosen Option : 2

Q.9 The statements below are followed by two conclusions labeled I and II. Assuming that the information in the statements is true, even if it appears to be at variance with generally established facts, decide which conclusion(s) logically and definitely follow(s) from the information given in the statements.

Statements:

- 1) Some monks are convicts.
- 2) Some convicts are soldiers.

Conclusion:

- I. Some convicts are monks.
- II. Some soldiers are convicts.

- Ans**
- 1. Only conclusion II follows.
 - 2. Neither conclusion I nor conclusion II follows.
 - 3. Only conclusion I follows.
 - 4. Both conclusions follow.

Question ID : 9895804679
Chosen Option : 2

Q.1 A square transparent sheet with a pattern is given. How will the pattern appear when the transparent sheet is folded along the dotted line?



Ans

- 1.
- 2.
- 3.
- 4.

Question ID : 9895804690
Chosen Option : 2

Q.1 Find out the two signs to be interchanged to make the following equation correct.

$$14 + 16 \times 14 - 7 \div 3 = 43$$

Ans

- 1. - and ÷
- 2. × and ÷
- 3. + and -
- 4. - and ×

Question ID : 9895804685
Chosen Option : 4

Q.1 Select the option that will correctly replace the question mark (?) in the given pattern.

17	15	13
7	6	5
66	51	?

- Ans
- 1. 17
 - 2. 45
 - 3. 38
 - 4. 19

Question ID : 9895804684
Chosen Option : 2

Q.1 Select the option that is related to the third number in the same way as the second number is related to the first number.

15 : 270 :: 13 : ?

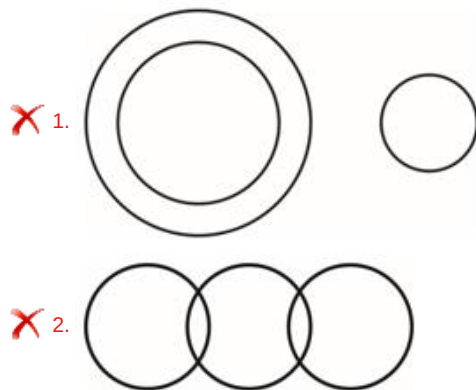
- Ans
- 1. 208
 - 2. 169
 - 3. 144
 - 4. 275

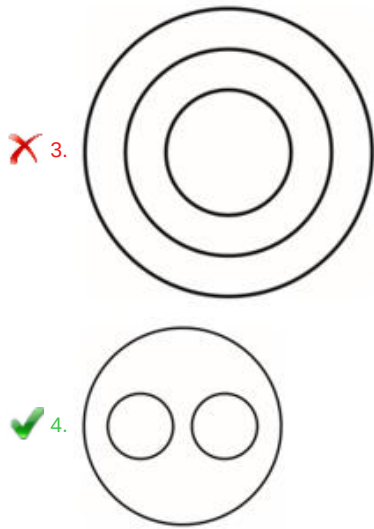
Question ID : 9895804682
Chosen Option : 2

Q.1 Select the Venn diagram that best represents the given set of classes.

Austria, Denmark, Countries

Ans





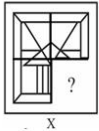
Question ID : 9895804691
Chosen Option : 2





Q.1 ₅ Choose the odd number out of the given options.

- Ans 1. 78
 2. 91
 3. 24
 4. 65

Question ID : 9895804683
Chosen Option : 3

Q.1 ₆ Select a figure from amongst the four alternatives that when placed in the blank space (?) of figure X will complete the pattern. (Rotation is not allowed).

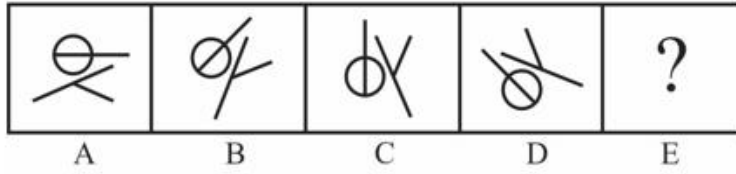


- Ans 1. 
2. 
3. 
4. 

Question ID : 9895804687
Chosen Option : 3

Q.1 ₇

Choose the option that would follow next in the given figure series.



Ans



Question ID : 9895804686
Chosen Option : 2

Q.1 Which number will follow next in the given number series?

7, 8, 16, 43, ?

- Ans 1. 109
 2. 107
 3. 113
 4. 111

Question ID : 9895804681
Chosen Option : 1

Q.1 Choose the option that most closely resembles the mirror image of the given word if mirror is placed at the right side.

RUPTURE

Ans



Question ID : 9895804689

Chosen Option : 4

Q.2 In a certain code, ASSUME is written as EMUASS. How will NEEDLE be written in that code?

- Ans
- 1. ELDEEN
 - 2. EJDNEE
 - 3. EDLNEE
 - 4. ELDNEE

Question ID : 9895804673

Chosen Option : 1

Q.2 The statements below are followed by two conclusions labeled I and II. Assuming that the information in the statements is true, even if it appears to be at variance with generally established facts, decide which conclusion(s) logically and definitely follow(s) from the information given in the statements.

Statements:

- 1) All butterflies are reptiles.
- 2) All reptiles are mammals.

Conclusion:

- I. All mammals are butterflies.
- II. All butterflies are mammals.

- Ans
- 1. Both conclusions follow.
 - 2. Either conclusion I or conclusion II follows.
 - 3. Only conclusion II follows.
 - 4. Only conclusion I follows.

Question ID : 9895804678

Chosen Option : 2

Q.2 Choose the odd one out of the given options.

- Ans
- 1. Fox
 - 2. Tiger
 - 3. Crocodile
 - 4. Lion

Question ID : 9895804669

Chosen Option : 3

Q.2 Eight friends A, B, C, D, E, F, G and H are sitting around a circular table facing each other for a lunch. A is opposite F and third to the right of B. G is between F and D. H is to the left of D. E is between C and A. Who is sitting second to the left of C?

- Ans
- 1. D
 - 2. F
 - 3. B
 - 4. A

Question ID : 9895804676

Chosen Option : 2

Q.2
4

Select the correct option that will fill in the blank and complete the series.

MHW, KJU, ILS, GNQ, ___?

- Ans
- 1. EPQ
 - 2. EPO
 - 3. FPO
 - 4. EOP

Question ID : 9895804667
Chosen Option : 3

Q.2 Select the option that is related to the third term in the same way as the second term is related to the first term.
5

Iran : Rial : : Iraq : ?

- Ans
- 1. War
 - 2. Dirham
 - 3. Dinar
 - 4. Rial

Question ID : 9895804670
Chosen Option : 3

Q.2 _____ is the outermost range of the Himalayas.
6

- Ans
- 1. Himadri
 - 2. Pir Panjal
 - 3. Kailash
 - 4. Shivalik

Question ID : 9895802429
Chosen Option : 2

Q.2 Which of the following is NOT a digital transaction in India?
7

- Ans
- 1. Cash transaction
 - 2. Credit card transaction
 - 3. PayTM
 - 4. ATM transaction

Question ID : 9895802434
Chosen Option : 2

Q.2 Who is called the "The iron man of India".
8

- Ans
- 1. Vallabhai Patel
 - 2. M.K Gandhi
 - 3. Bal Gangadhar Tilak
 - 4. Jawaharlal Nehru

Question ID : 9895802424
Chosen Option : 3

Q.2

9 _____ was an Indian film entry for 90th Oscar Award in 2018.

- Ans
- 1. Raazi
 - 2. Zero
 - 3. Newton
 - 4. Sanju

Question ID : 9895802442

Chosen Option : 4

Q.3₀ In a democracy, the ruling party is accountable to _____.

- Ans
- 1. the judiciary
 - 2. its leaders
 - 3. the opposition
 - 4. the people

Question ID : 9895802435

Chosen Option : 4

Q.3₁ The process by which similar genetically identical individuals can be produced is called _____.

- Ans
- 1. reproduction
 - 2. cloning
 - 3. scanning
 - 4. photosynthesis

Question ID : 9895802445

Chosen Option : 1

Q.3₂ Whose greatest achievement was the setting up of the Brahmo Samaj?

- Ans
- 1. B.R Ambedkar
 - 2. Aurobindo Gosh
 - 3. Raja Ram Mohan Roy
 - 4. Vivekanandha

Question ID : 9895802426

Chosen Option : 3

Q.3₃ Which of the following is NOT an amalgam?

- Ans
- 1. Solder
 - 2. Silver
 - 3. Bronze
 - 4. Brass

Question ID : 9895802448

Chosen Option : 1

Q.3₄ The resources obtained from biosphere and have life such as human beings, flora and fauna, fisheries, livestock etc. are called _____.

Ans

- 1. biotic resources
- 2. potential resources
- 3. abiotic resources
- 4. renewable resources

Question ID : 9895802430
Chosen Option : 1

Q.3
5 Rabi crops are sown in _____.

- Ans
- 1. April-May
 - 2. October-November
 - 3. May-June
 - 4. January-February

Question ID : 9895802432
Chosen Option : 1

Q.3
6 _____ aim(s) at creating self-employment opportunities in rural areas.

- Ans
- 1. The Rural Employment Generation Programme
 - 2. Anti-Poverty Programmes
 - 3. The Pradhan Mantri Ujjwala Yojana
 - 4. The Pradhan Mantri Gramodaya Yojana

Question ID : 9895802433
Chosen Option : 3

Q.3
7 The battle of Plassey was fought in the year _____.

- Ans
- 1. 1957
 - 2. 1900
 - 3. 1857
 - 4. 1757

Question ID : 9895802425
Chosen Option : 1

Q.3
8 Shankar's International Dolls Museum is situated in _____.

- Ans
- 1. Pune
 - 2. Kolkata
 - 3. Mumbai
 - 4. New Delhi

Question ID : 9895802438
Chosen Option : 1

Q.3
9 _____ discovered the solar system.

- Ans
- 1. Murphy
 - 2. Newton

3. Copernicus

4. Vasco Da Gama

Question ID : 9895802441
Chosen Option : 1

Q.4
0 _____ is/are responsible for water transportation in plants.

Ans 1. Chloroplast

2. Phloem

3. Veins

4. Xylem

Question ID : 9895802446
Chosen Option : 4

Q.4
1 _____ was the captain of the 1948 Indian national field hockey team that won the first gold in Olympics.

Ans 1. Akashdeep Singh

2. Sardar Singh

3. Kishan Lal

4. Manpreet Singh

Question ID : 9895802428
Chosen Option : 4

Q.4
2 The Chief of Election Commission is appointed by the _____.

Ans 1. Central Government

2. Central Government

3. Chief Justice of India

4. President of India

Question ID : 9895802436
Chosen Option : 4

Q.4
3 The book 'The Paradoxical Prime Minister' is written by _____.

Ans 1. Ashok Gehlot

2. Dr Man Mohan Singh

3. Jyotiraditya Scindia

4. Shashi Tharoor

Question ID : 9895802443
Chosen Option : 2

Q.4
4 What is NOT one of the main duties of the Election Commission?

Ans 1. Control and conduct elections

2. Supervise elections

3. Direct elections

4. Don't Conduct local elections

Question ID : 9895802437
Chosen Option : 3

Q.4
5 The famous shehnai player of India is _____.

- Ans
- 1. Bismillah Khan
 - 2. Ravi Shankar
 - 3. Latif Khan
 - 4. Hari Prasad

Question ID : 9895802439
Chosen Option : 1

Q.4
6 Which is NOT a part of the urinary system?

- Ans
- 1. Urinary bladder
 - 2. Ureter
 - 3. Bronchi
 - 4. Urethra

Question ID : 9895802447
Chosen Option : 2

Q.4
7 The Indian musician _____ has won an Academy Award.

- Ans
- 1. RD Barman
 - 2. AR Rahman
 - 3. Sonu Nigam
 - 4. Anu Malik

Question ID : 9895802440
Chosen Option : 2

Q.4
8 The _____ is the highest battlefield in the world.

- Ans
- 1. Gangotri Glacier
 - 2. Hari Parbat Glacier
 - 3. Nubra Glacier
 - 4. Siachin Glacier

Question ID : 9895802431
Chosen Option : 4

Q.4
9 _____ was the first Indian gymnast to win a gold medal at a global event.

- Ans
- 1. Hima Das
 - 2. Sakshi Malik
 - 3. Seema Punia
 - 4. Deepa Karmakar

Question ID : 9895802427
Chosen Option : 3

Q.5
0 Molecular formula of gold is _____.

- Ans 1. Au
 2. Ag
 3. G
 4. Al

Question ID : 9895802444
Chosen Option : 2

Q.5
1 A car covers a certain distance at a speed of 48 km/hr in 14 hours. How much time it will take to cover the same distance at the speed of 84 km/hr?

- Ans 1. 6 hr
 2. 8 hr
 3. 9 hr
 4. 12 hr

Question ID : 9895804301
Chosen Option : 2

Q.5
2 Marked price of an article is 60% more than its cost price. If the article is sold at a profit of 20%, then what will be the discount percentage?

- Ans 1. 37.5%
 2. 17.5%
 3. 15%
 4. 25%

Question ID : 9895804289
Chosen Option : 3

Q.5
3 12 persons can complete half of a work in 9 days. How many persons can complete the same work (whole) in 6 days?

- Ans 1. 36
 2. 45
 3. 48
 4. 42

Question ID : 9895804300
Chosen Option : 3

Q.5
4 If A is 20% less than B , then what will be the value of $(2B - A)/A$?

- Ans 1. $3/4$
 2. $3/2$
 3. $3/5$
 4. $4/3$

Question ID : 9895804291
Chosen Option : 2

Q.5
5 What is the value of $10 - [6 - 4 - (2 \div 1 - 2)]$?

- Ans 1. 10

- 2. 12
- 3. 14
- 4. 8

Question ID : 9895804285
Chosen Option : 4

Q.5
6 What is the value of $\left[22\frac{3}{4} \div \frac{14}{3} \text{ of } \left(8 - \frac{1}{5} + 4 - 2 \div \frac{1}{2}\right)\right]$?

- Ans
- 1. 3/7
 - 2. 91/213
 - 3. 5/8
 - 4. 91/199

Question ID : 9895804286
Chosen Option : 4

Q.5
7 After giving a discount of 25%, a shopkeeper earns 40% profit. Marked price is what percent more than the cost price?

- Ans
- 1. 80%
 - 2. 75%
 - 3. 86.67%
 - 4. 85%

Question ID : 9895804292
Chosen Option : 3

Q.5
8 Mohit starts moving from a place A and reaches the place B in 12 hours. He covers $\frac{1}{5}$ th part of the total distance at the speed of 6 km/hr and covers the remaining distance at the speed of 8 km/hr. What is the distance between A and B?

- Ans
- 1. 90 km
 - 2. 95 km
 - 3. 60 km
 - 4. 75 km

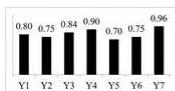
Question ID : 9895804302
Chosen Option : 3

Q.5
9 A sum of ₹ 4200 becomes ₹ 5082 in 3 years rate simple interest. What is the rate of interest per annum?

- Ans
- 1. 8%
 - 2. 9%
 - 3. 5%
 - 4. 7%

Question ID : 9895804297
Chosen Option : 2

Q.6
0 The bar chart given below shows the ratio of expenditure to revenue for seven consecutive years Y1, Y2, Y3, Y4, Y5, Y6 and Y7.



The profit percentage is lowest for which year?

Ans

- 1. Y4
- 2. Y7
- 3. Cannot be determined
- 4. Y3

Question ID : 9895804306
Chosen Option : 3

Q.6
1 The compound interest on a sum for 4th year is ₹6000 and compound interest for 5th year is ₹ 6750 (interest is compounded annually). What is the rate of interest?

- Ans
- 1. 25%
 - 2. 20%
 - 3. 12.5%
 - 4. 15%

Question ID : 9895804298
Chosen Option : 2

Q.6
2 What will be the ratio of Highest common Factor and Least Common Multiple of two numbers 16 and 20?

- Ans
- 1. 1 : 25
 - 2. 4 : 63
 - 3. 1 : 20
 - 4. 1 : 10

Question ID : 9895804284
Chosen Option : 3

Q.6
3 The sides of a triangle are in the ratio 4 : 3 : 2. If the perimeter of the triangle is 63 cm, then what will be the length of the largest side?

- Ans
- 1. 28 cm
 - 2. 35 cm
 - 3. 21 cm
 - 4. 42 cm

Question ID : 9895804295
Chosen Option : 4

Q.6
4 A and C together can complete a work in 120 days, C and E together can complete the same work in 80 days and A and E together can complete the same work in 160 days. In how many days A, C and E together can complete the same work?

- Ans
- 1. 120/13 days
 - 2. 480/13 days
 - 3. 240/13 days
 - 4. 960/13 days

Question ID : 9895804299
Chosen Option : 2

Q.6
5 Ramesh purchases 75 articles for ₹ 10800 and sells them at a loss equal to the selling price of 5 articles. What will be the selling price of one article?

- Ans
- 1. ₹ 156
 - 2. ₹ 135

3. ₹ 144

4. ₹ 132

Question ID : 9895804293
Chosen Option : 3

Q.6 The length, breadth and height of room is 16 metres, 12 metres and 15 metres. What will be the length of the largest rod
6 that can be placed in that room?

Ans 1. 20 metres

2. 18 metres

3. 25 metres

4. 24 metres

Question ID : 9895804304
Chosen Option : 3

Q.6 The volume of a right circular cone is 2464 cm^3 . If the height of cone is 12 cm, then what will be the radius of its base?
7

Ans 1. 12 cm

2. 8 cm

3. 14 cm

4. 10 cm

Question ID : 9895804303
Chosen Option : 3

Q.6 The volume of a right circular cone is 1232 cm^3 . If the height of cone is 24 cm, then what will be the radius of its base?
8

Ans 1. 9 cm

2. 7 cm

3. 8 cm

4. 5 cm

Question ID : 9895804305
Chosen Option : 3

Q.6 If a 12 years old boy is replaced by a new boy, then the average age of 18 boys increases by 1.5 years. What is the age
9 of the new boy?

Ans 1. 35 years

2. 37.5 years

3. 43 years

4. 39 years

Question ID : 9895804287
Chosen Option : 2

Q.7 The average of 8 numbers is 44. If a constant 'P' is added to each number, then average becomes 47. What is the value
0 of 'P'?

Ans 1. 21

2. 3

3. 8

4. 24

Question ID : 9895804288

Chosen Option : 2

Q.7
1 If $X : Y = 7 : 5$ and $Y : Z = 7 : 11$, then what is the ratio of $X : Y : Z$?

- Ans
- 1. 30 : 35 : 49
 - 2. 49 : 35 : 55
 - 3. 7 : 5 : 11
 - 4. 49 : 30 : 55

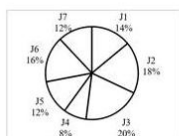
Question ID : 9895804294
Chosen Option : 3

Q.7
2 If $P : Q = 5 : 6$ and $R : Q = 25 : 9$, then what is the ratio of $P : R$?

- Ans
- 1. 10 : 13
 - 2. 10 : 3
 - 3. 3 : 10
 - 4. 13 : 10

Question ID : 9895804296
Chosen Option : 2

Q.7
3 The pie chart given below shows the time taken in 7 different procedures J1, J2, J3, J4, J5, J6 and J7 in making a car as a percentage of total time taken. The total time taken in making one car is 1200 hours.



What is the difference between the time taken in processes J1 and J4?

- Ans
- 1. 96 hours
 - 2. 72 hours
 - 3. 60 hours
 - 4. 84 hours

Question ID : 9895804308
Chosen Option : 1

Q.7
4 The data given below shows the number of people who have saved a certain amount of money.

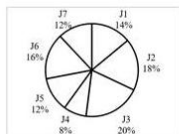
Savings (in ₹)	Number of people
5	1
15	3
20	4
25	2
30	1
35	1
40	2

What is the mean saving per person?

- Ans 1. ₹ 28.89
 2. ₹ 21.57
 3. ₹ 23.21
 4. ₹ 25.54

Question ID : 9895804290
 Chosen Option : 3

Q.7 The pie chart given below shows the time taken in 7 different procedures J1, J2, J3, J4, J5, J6 and J7 in making a car as a percentage of total time taken. The total time taken in making one car is 1200 hours.



What will be the total time taken in procedures J2 and J5?

- Ans 1. 396 hours
 2. 240 hours
 3. 312 hours
 4. 360 hours

Question ID : 9895804307
 Chosen Option : 3

Section : English Language

Q.1 Select the most appropriate word to fill in the blank.

The telephone was _____ by Alexander Graham Bell.

- Ans 1. discovered
 2. invented
 3. researched
 4. found

Question ID : 9895804164
 Chosen Option : 2

Q.2 Select the correctly spelt word.

- Ans 1. Acommodate
 2. Accomodate
 3. Akommodate
 4. Accommodate

Question ID : 9895804181
 Chosen Option : 4

Q.3 Select the option that means the same as the given idiom.

Like a cakewalk

- Ans 1. Not too easy
 2. Quite difficult

3. Extremely difficult

4. Extremely easy

Question ID : 9895804177

Chosen Option : 4

Q.4 From the given options, identify the segment in the sentence which contains the grammatical error.

On the eleventh hour, she retired from the contest, leaving the field open to her opponent.

Ans 1. retired from

2. to her opponent

3. On the eleventh hour

4. leaving the field

Question ID : 9895804156

Chosen Option : 3

Q.5 Select the option that means the same as the given idiom.

To be under the weather

Ans 1. To feel very cold

2. To not feel well

3. To feel very hot

4. To get very wet

Question ID : 9895804176

Chosen Option : 4

Q.6 Select the correctly spelt word.

Ans 1. Hanckerchief

2. Hangerchief

3. Hankerchief

4. Handkerchief

Question ID : 9895804180

Chosen Option : 4

Q.7 Select the antonym of the given word.

SAVAGE

Ans 1. Civilized

2. Tribal

3. Rustic

4. Stern

Question ID : 9895804172

Chosen Option : 1

Q.8

Select the most appropriate word to fill in the blank.

This question will be discussed at the meeting _____.

- Ans
- 1. yesterday
 - 2. tomorrow
 - 3. last year
 - 4. last week

Question ID : 9895804165
Chosen Option : 4

Q.9 Select the most appropriate option to substitute the underlined segment in the given sentence. If there is no need to substitute it, select No Improvement.

A city court ordered the immediate release of a professor described his arrest as illegal.

- Ans
- 1. describing his arrest
 - 2. No improvement
 - 3. describing their arrest
 - 4. describing an arrest

Question ID : 9895804160
Chosen Option : 3

Q.10 Select the most appropriate option to substitute the underlined segment in the given sentence. If there is no need to substitute it, select No Improvement.

Australia recorded its hot month in January with sweltering conditions expected to persist through April.

- Ans
- 1. its hotter month
 - 2. its hottest month
 - 3. No improvement
 - 4. its more hotter month

Question ID : 9895804159
Chosen Option : 2

Q.11 From the given options, identify the segment in the sentence which contains the grammatical error.

A woman's real character will always be more visible in his household than anywhere else.

- Ans
- 1. real character
 - 2. than anywhere else
 - 3. in his household
 - 4. will always be

Question ID : 9895804157
Chosen Option : 2

Comprehension:

In the following passage some words have been deleted. Fill in the blanks with the help of the alternatives given.

I have just _____ (1) that it is your birthday on Saturday and so I send you my best wishes. I hope the day itself will be _____ (2) and happy for you. May you be showered _____ (3) health and happiness for all the years to come. I take this opportunity of _____ (4) you from the bottom of my heart for all you have done for _____ (5).

SubQuestion No : 12

Q.1
2 Select the most appropriate option that will fill in the blank number 1.

- Ans
- 1. remembered
 - 2. remember
 - 3. remembering
 - 4. remembers

Question ID : 9895804167
Chosen Option : 2

Comprehension:

In the following passage some words have been deleted. Fill in the blanks with the help of the alternatives given.

I have just _____ (1) that it is your birthday on Saturday and so I send you my best wishes. I hope the day itself will be _____ (2) and happy for you. May you be showered _____ (3) health and happiness for all the years to come. I take this opportunity of _____ (4) you from the bottom of my heart for all you have done for _____ (5).

SubQuestion No : 13

Q.1
3 Select the most appropriate option that will fill in the blank number 2.

- Ans
- 1. suitable
 - 2. excited
 - 3. plentiful
 - 4. peaceful

Question ID : 9895804168
Chosen Option : 2

Comprehension:

In the following passage some words have been deleted. Fill in the blanks with the help of the alternatives given.

I have just _____ (1) that it is your birthday on Saturday and so I send you my best wishes. I hope the day itself will be _____ (2) and happy for you. May you be showered _____ (3) health and happiness for all the years to come. I take this opportunity of _____ (4) you from the bottom of my heart for all you have done for _____ (5).

SubQuestion No : 14

Q.1
4 Select the most appropriate option that will fill in the blank number 3.

- Ans
- 1. by
 - 2. with
 - 3. from
 - 4. of

Question ID : 9895804169
Chosen Option : 3

Comprehension:

In the following passage some words have been deleted. Fill in the blanks with the help of the alternatives given.

I have just _____ (1) that it is your birthday on Saturday and so I send you my best wishes. I hope the day itself will be _____ (2) and happy for you. May you be showered _____ (3) health and happiness for all the years to come. I take this opportunity of _____ (4) you from the bottom of my heart for all you have done for _____ (5).

SubQuestion No : 15

Q.1
5 Select the most appropriate option that will fill in the blank number 4.

- Ans
- 1. greeting
 - 2. thanking
 - 3. congratulating
 - 4. wishing

Question ID : 9895804170
Chosen Option : 2

Comprehension:

In the following passage some words have been deleted. Fill in the blanks with the help of the alternatives given.

I have just _____ (1) that it is your birthday on Saturday and so I send you my best wishes. I hope the day itself will be _____ (2) and happy for you. May you be showered _____ (3) health and happiness for all the years to come. I take this opportunity of _____ (4) you from the bottom of my heart for all you have done for _____ (5).

SubQuestion No : 16

Q.1
6 Select the most appropriate option that will fill in the blank number 5.

- Ans
- 1. me
 - 2. them
 - 3. him
 - 4. her

Question ID : 9895804171
Chosen Option : 3

Q.1
7 From the given options, identify the segment in the sentence which contains the grammatical error.

A great fortune in the hands of a fool are a great misfortune.

- Ans
- 1. A great fortune
 - 2. of a fool
 - 3. in the hands
 - 4. are a great

Question ID : 9895804158
Chosen Option : 3

Q.1
8 Select the most appropriate option to substitute the underlined segment in the given sentence. If there is no need to substitute it, select No Improvement.

As you make your way in the interior of Red Fort, lush green gardens greet you.

- Ans
- 1. into the interior of
 - 2. No improvement
 - 3. along the interior of
 - 4. on the interior of

Question ID : 9895804161
Chosen Option : 3

Q.1
9 Select the most appropriate word to fill in the blank.

The flight of birds _____ a pretty sight to watch.

- Ans
- 1. have
 - 2. are
 - 3. is
 - 4. has

Question ID : 9895804163

Chosen Option : 3

Q.2
0 Select the word which means the same as the group of words given.

One who repairs leaking water pipes.

- Ans
- 1. Blacksmith
 - 2. Carpenter
 - 3. Mason
 - 4. Plumber

Question ID : 9895804178

Chosen Option : 4

Q.2
1 Select the synonym of the given word

EVERLASTING

- Ans
- 1. Equal
 - 2. Eternal
 - 3. Especial
 - 4. Essential

Question ID : 9895804175

Chosen Option : 2

Q.2
2 Select the word which means the same as the group of words given.

One who treats skin diseases

- Ans
- 1. Cardiologist
 - 2. Dermatologist
 - 3. Radiologist
 - 4. Gynecologist

Question ID : 9895804179

Chosen Option : 2

Q.2
3 Select the antonym of the given word.

COMPULSORY

- Ans
- 1. Optional
 - 2. Essential
 - 3. Important
 - 4. Choice

Question ID : 9895804173

Chosen Option : 4

Q.2
4

Select the synonym of the given word.

FANATIC

- Ans 1. Enthusiast
 2. Fantastic
 3. Famed
 4. Great

Question ID : 9895804174
Chosen Option : 4

Q.2 Select the most appropriate word to fill in the blank.

Mother cuts vegetables _____ a knife.

- Ans 1. by
 2. from
 3. with
 4. off

Question ID : 9895804162
Chosen Option : 3

Section : Hindi Language

Q.1 रिक्त स्थान को भरने के लिए सबसे उपयुक्त शब्द का चयन करें।

ज्योति ने एक _____ गीत सुनाया।

- Ans 1. नमकीन
 2. खट्टा
 3. मधुर
 4. ठंडा

Question ID : 9895803527
Chosen Option : --

Q.2 दिए गए शब्द का विलोम चुनें।

स्तुति

- Ans 1. याद
 2. अपकार
 3. प्रशंसा
 4. निंदा

Question ID : 9895803535
Chosen Option : --

Q.3

दिए गए वाक्य का वह भाग ज्ञात करें जिसमें कोई त्रुटि है।

समाज में रहकर शक्तिशाली लोगों से बैर जाना ठीक नहीं होता।

- Ans
- 1. ठीक नहीं होता।
 - 2. समाज में रहकर
 - 3. शक्तिशाली लोगों से
 - 4. बैर जाना

Question ID : 9895803518
Chosen Option : --

Q.4 रिक्त स्थान को भरने के लिए सबसे उपयुक्त शब्द का चयन करें।

अंग का _____ है हिस्सा।

- Ans
- 1. वचन
 - 2. लिंग
 - 3. विलोम
 - 4. अर्थ

Question ID : 9895803525
Chosen Option : --

Q.5 रिक्त स्थान को भरने के लिए सबसे उपयुक्त शब्द का चयन करें।

मेज के _____ बिल्ली बैठी है।

- Ans
- 1. बाहर
 - 2. नीचे
 - 3. भीतर
 - 4. साथ

Question ID : 9895803526
Chosen Option : --

Q.6 दिए गए वाक्य में रेखांकित खंड को प्रतिस्थापित करने के लिए सबसे उपयुक्त विकल्प का चयन करें।

किसी वस्तु को तब तक नहीं फेंका जाता अब तक उसकी आवश्यकता बनी रहती है।

- Ans
- 1. कब तक उसकी आवश्यकता
 - 2. जब तक उसका आवश्यकता
 - 3. तब तक उसकी आवश्यकता
 - 4. जब तक उसकी आवश्यकता

Question ID : 9895803523
Chosen Option : --

Q.7

रिक्त स्थान को भरने के लिए सबसे उपयुक्त शब्द का चयन करें।

_____ लड़का बहुत चालाक है।

- Ans
- 1. उस
 - 2. आप
 - 3. हम
 - 4. वह

Question ID : 9895803524
Chosen Option : --

Q.8 दिये गये वाक्यांश के लिए एक शब्द चुनिए।

मांस खाने वाला

- Ans
- 1. सर्वहारी
 - 2. शाकाहारी
 - 3. मांसाहारी
 - 4. अल्पाहारी

Question ID : 9895803540
Chosen Option : --

Q.9 सही वर्तनी वाले शब्द का चयन करें।

- Ans
- 1. आलपायु
 - 2. अल्पायु
 - 3. अलपायु
 - 4. अल्पायू

Question ID : 9895803543
Chosen Option : --

Q.10 दिए गए शब्द के पर्यायवाची शब्द का चयन करें।

विभूति

- Ans
- 1. ऐश्वर्य
 - 2. अनुभूति
 - 3. सुंदरता
 - 4. प्रतिभूति

Question ID : 9895803536
Chosen Option : --

Q.11 दिए गए वाक्य में रेखांकित खंड को प्रतिस्थापित करने के लिए सबसे उपयुक्त विकल्प का चयन करें।

मुझे अभी अपना गृह कार्य पूरा करने हैं, नहीं तो गुरु जी से डाँट पड़ेगी।

Ans

- 1. गृहकार्य में पूरे करने हैं
- 2. गृहकार्य पूरे करना है
- 3. गृहकार्य पूरी करने हैं
- 4. गृहकार्य पूरा करना है

Question ID : 9895803522

Chosen Option : --

Q.1 दिए गए वाक्य का वह भाग जात करें जिसमें कोई त्रुटि है। मनुष्य की सफलता का रहस्य परिश्रम एवं अभ्यास ही है
2 और अभ्यास करके वह सफलता को प्राप्त पा लेता है।

Ans

- 1. परिश्रम एवं अभ्यास ही है
- 2. और अभ्यास करके वह
- 3. मनुष्य की सफलता का रहस्य
- 4. सफलता को प्राप्त पा लेता है।

Question ID : 9895803520

Chosen Option : --

Q.1 दिए गए वाक्य में रेखांकित खंड को प्रतिस्थापित करने के लिए सबसे उपयुक्त विकल्प का चयन करें।
अर्जुन ने धनुष से मछली का आँख पर निशाना लगाया।

Ans

- 1. मछली से धनुष की आँख पर
- 2. धनुष से मछली के आँख पर
- 3. धनुष से मछली की आँख पर
- 4. धनुष से मछली को आँख पर

Question ID : 9895803521

Chosen Option : --

Q.1 निम्नलिखित में से उस विकल्प का चयन करें जो ' उल्लू बनाना ' मुहावरे का अर्थ व्यक्त करता है।
4

Ans

- 1. बड़ाई करना
- 2. रात को जगाना
- 3. मूर्ख बनाना
- 4. उल्लू की तरह जागना

Question ID : 9895803538

Chosen Option : --

Comprehension:

दिए गए अनुच्छेद में कुछ शब्द हटा दिए गए हैं। दिए गए विकल्पों की सहायता से रिक्त स्थान भरें। प्रत्येक संख्या के लिए सबसे उपयुक्त विकल्प का चयन करें।

संसार में संपूर्ण अज्ञान नाम की वस्तु नहीं होती। अज्ञान अक्सर परिस्थितियों के _____ (1) बदलता रहता है। इसकी कोई एक सर्वमान्य _____ (2) नहीं हो सकती पर इतना तो तय है कि जिस समय यह व्यक्ति के _____ (3) पर हावी होता है, उस समय उसे यही लगता है कि वह _____ (4) का सबसे बड़ा जानी है और उसके पास हर एक वस्तु की मान्यता का _____ (5) है।

SubQuestion No : 15

Q.1
5 गद्यांश में संकेतित रिक्त स्थान (1) के लिए उपयुक्त शब्द होगा

- Ans
- 1. गुना
 - 2. अज्ञान
 - 3. अनुसार
 - 4. गणित

Question ID : 9895803529

Chosen Option : --

Comprehension:

दिए गए अनुच्छेद में कुछ शब्द हटा दिए गए हैं। दिए गए विकल्पों की सहायता से रिक्त स्थान भरें। प्रत्येक संख्या के लिए सबसे उपयुक्त विकल्प का चयन करें।

संसार में संपूर्ण अज्ञान नाम की वस्तु नहीं होती। अज्ञान अक्सर परिस्थितियों के _____ (1) बदलता रहता है। इसकी कोई एक सर्वमान्य _____ (2) नहीं हो सकती पर इतना तो तय है कि जिस समय यह व्यक्ति के _____ (3) पर हावी होता है, उस समय उसे यही लगता है कि वह _____ (4) का सबसे बड़ा जानी है और उसके पास हर एक वस्तु की मान्यता का _____ (5) है।

SubQuestion No : 16

Q.1
6 गद्यांश में संकेतित रिक्त स्थान (2) के लिए उपयुक्त शब्द होगा

- Ans
- 1. ऊँचाई
 - 2. छाँव
 - 3. जिंदगी
 - 4. परिभाषा

Question ID : 9895803530

Chosen Option : --

Comprehension:

दिए गए अनुच्छेद में कुछ शब्द हटा दिए गए हैं। दिए गए विकल्पों की सहायता से रिक्त स्थान भरें। प्रत्येक संख्या के लिए सबसे उपयुक्त विकल्प का चयन करें।

संसार में संपूर्ण अज्ञान नाम की वस्तु नहीं होती। अज्ञान अक्सर परिस्थितियों के _____ (1) बदलता रहता है। इसकी कोई एक सर्वमान्य _____ (2) नहीं हो सकती पर इतना तो तय है कि जिस समय यह व्यक्ति के _____ (3) पर हावी होता है, उस समय उसे यही लगता है कि वह _____ (4) का सबसे बड़ा जानी है और उसके पास हर एक वस्तु की मान्यता का _____ (5) है।

SubQuestion No : 17

Q.1
7 गद्यांश में संकेतित रिक्त स्थान (3) के लिए उपयुक्त शब्द होगा

- Ans
- 1. दिमाग
 - 2. बादल
 - 3. नाक
 - 4. निर्णय

Question ID : 9895803531
Chosen Option : --

Comprehension:

दिए गए अनुच्छेद में कुछ शब्द हटा दिए गए हैं। दिए गए विकल्पों की सहायता से रिक्त स्थान भरें। प्रत्येक संख्या के लिए सबसे उपयुक्त विकल्प का चयन करें।

संसार में संपूर्ण अज्ञान नाम की वस्तु नहीं होती। अज्ञान अक्सर परिस्थितियों के _____ (1) बदलता रहता है। इसकी कोई एक सर्वमान्य _____ (2) नहीं हो सकती पर इतना तो तय है कि जिस समय यह व्यक्ति के _____ (3) पर हावी होता है, उस समय उसे यही लगता है कि वह _____ (4) का सबसे बड़ा जानी है और उसके पास हर एक वस्तु की मान्यता का _____ (5) है।

SubQuestion No : 18

Q.1
8 गद्यांश में संकेतित रिक्त स्थान (4) के लिए उपयुक्त शब्द होगा

- Ans
- 1. संसार
 - 2. पहाड़
 - 3. कल
 - 4. निर्णय

Question ID : 9895803532
Chosen Option : --

Comprehension:

दिए गए अनुच्छेद में कुछ शब्द हटा दिए गए हैं। दिए गए विकल्पों की सहायता से रिक्त स्थान भरें। प्रत्येक संख्या के लिए सबसे उपयुक्त विकल्प का चयन करें।

संसार में संपूर्ण अज्ञान नाम की वस्तु नहीं होती। अज्ञान अक्सर परिस्थितियों के _____ (1) बदलता रहता है। इसकी कोई एक सर्वमान्य _____ (2) नहीं हो सकती पर इतना तो तय है कि जिस समय यह व्यक्ति के _____ (3) पर हावी होता है, उस समय उसे यही लगता है कि वह _____ (4) का सबसे बड़ा जानी है और उसके पास हर एक वस्तु की मान्यता का _____ (5) है।

SubQuestion No : 19

Q.1 9 गद्यांश में संकेतित रिक्त स्थान (5) के लिए उपयुक्त शब्द होगा

- Ans
- 1. शर्त
 - 2. बदलाव
 - 3. जल
 - 4. तर्क

Question ID : 9895803533
Chosen Option : --

Q.2 0 दिए गए शब्द का विलोम चुनें।

उत्कृष्ट

- Ans
- 1. कृष्ण
 - 2. कष्ट
 - 3. निकृष्ट
 - 4. संकरी

Question ID : 9895803534
Chosen Option : --

Q.2 1 सही वर्तनी वाले शब्द का चयन करें।

- Ans
- 1. जनमंध
 - 2. जन्मांध
 - 3. जनमाध
 - 4. जन्मांद

Question ID : 9895803542
Chosen Option : --

Q.2 2 निम्नलिखित में से उस विकल्प का चयन करें जो ' एक आँख न भाना ' मुहावरे का अर्थ व्यक्त करता है।

- Ans
- 1. काना होना
 - 2. एक आँख से देखना

3. बहुत अच्छा लगना

4. जरा भी अच्छा न लगना

Question ID : 9895803539
Chosen Option : --

Q.2
3 दिए गए शब्द के पर्यायवाची शब्द का चयन करें।

पुलिन

Ans 1. प्राचीन

2. नवीन

3. कगार

4. कुलीन

Question ID : 9895803537
Chosen Option : --

Q.2
4 दिये गये वाक्यांश के लिए एक शब्द चुनिए।

जो भूमि उपजाऊ न हो

Ans 1. बंजर

2. मैदान

3. उर्वर

4. दलदल

Question ID : 9895803541
Chosen Option : --

Q.2
5 दिए गए वाक्य का वह भाग ज्ञात करें जिसमें कोई त्रुटि है। सभी महिलाएँ तुम्हारी तरह हिम्मत वाला होती तो गुंडागर्दी की घटनाओं में वृद्धि न होती।

Ans 1. वृद्धि न होती।

2. हिम्मत वाला होती तो

3. सभी महिलाएँ तुम्हारी तरह

4. गुंडागर्दी की घटनाओं में

Question ID : 9895803519
Chosen Option : --