

VI/2018/ Selection Post Examination (17th Jan 2019, Shift-II)

Roll No. :	
Registration No.	
Name :	
Exam Venue :	iON Digital Zone IDZ Greater Noida
Exam Time :	1:00 PM - 2:00 PM
Exam Date :	17/01/2019

Section : Higher Secondary Level

Q.1 Select the most appropriate option to fill in the blank in the context.

She was so tired that she _____ asleep immediately.

- Ans
- 1. got
 - 2. went
 - 3. fell
 - 4. felt

Question ID : 5410784577

Status : Answered

Chosen Option : 3

Q.2

Kailash remembers that his brother Deepak's birthday falls after 20th May but before 28th May, while Geeta remembers

that Deepak's birthday falls before 22nd May but after 12th May. On what date Deepak's birthday falls?

- Ans
- 1. 20th May
 - 2. 21st May
 - 3. 22nd May
 - 4. Cannot be determined

Question ID : 5410784603

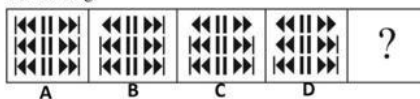
Status : Answered

Chosen Option : 2

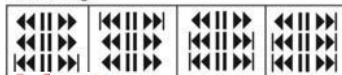
Q.3

Select the Answer Figure that will continue the series established by the four Problem Figures.

Problem Fig.



Answer Fig.



- Ans
- 1. 2
 - 2. 2
 - 3. 3
 - 4. 4

 2. 3

 3. 1

 4. 4


Question ID : 5410784543


Status : Answered


Chosen Option : 3

Q.4 Town P is to the east of town Q. Town R is to the south of town P. Town T is to the east of town R. Town T is towards which direction with respect to town P?

Ans  1. East

 2. South

 3. North-east

 4. South-east

Question ID : 5410784547

Status : Answered

Chosen Option : 4

Q.5 Select the most appropriate option to fill in the blank.

I helped my sister _____.

Ans 1. makes her project

2. her project to make

3. make her project

4. has made her project

Question ID : 5410784572

Status : Answered

Chosen Option : 1

Q.6 यदि एक समबाहु त्रिभुज की परिधि 12 सेमी है, और यदि इसका प्रत्येक पक्ष दोगुना है, तो गठित त्रिभुज की नई परिधि क्या है?

Ans 1. 60 से.मी.

2. 36 से.मी.

3. 50 से.मी.

4. 48 से.मी.


Question ID : 5410784608

Status : Answered

Chosen Option : 4

Q.7 The official foundation day of the Indian Air Force is:

Ans 1. 8th October

 2. 2nd October

3. 3rd October

4. 1st November

Question ID : 5410784627

Status : Answered

Chosen Option : 1

Q.8 The physico-chemical process used by green plants for converting light energy into chemical energy is known as _____.

- Ans 1. Catabolism
 2. Photosynthesis
 3. Anabolism
 4. Oxygenation

Question ID : 5410784619

Status : Answered

Chosen Option : 2

Q.9 Sunanda's mother's brother's son is Kritika, then, how Kritika is related to Sunanda?

- Ans 1. Cousin
 2. Aunt
 3. Grand Mother
 4. Mother

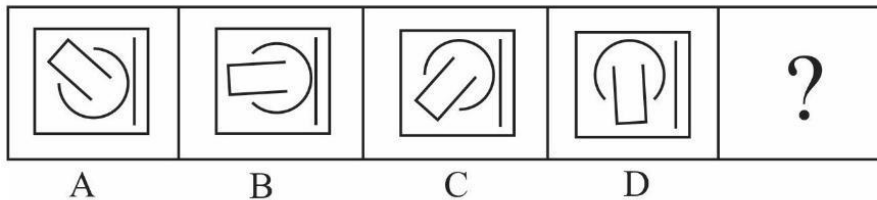
Question ID : 5410784551

Status : Answered

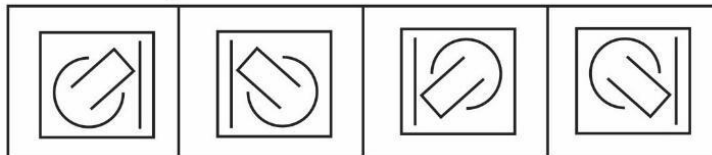
Chosen Option : 1

Q.1 The question consists of four Problem Figures marked A, B, C and D and four Answer Figure marked 1, 2, 3 and 4.
0 Select a figure from amongst the Answer Figure which will continue the series established by the four Problem Figures.

Problem Fig.



Answer Fig.



- Ans 1. 3
 2. 2
 3. 4
 4. 1

Question ID : 5410784558

Status : Answered

Chosen Option : 3

Q.1 If 'A+B' means 'A is the son of B', 'A-B' means 'A is the daughter of B', 'A&B' means 'A is the father of B' and 'A@B' means 'A is the mother of B', the what does P+R&Q-S mean?

- Ans
1. R is the daughter of Q
 2. P is the sister of Q
 3. S is the brother of Q
 - ✓ 4. S is the mother of P

Question ID : 5410784548

Status : Answered

Chosen Option : 4

Q.1 Two angles are supplementary and are in the ratio 2:3. What is the value of one of the larger angle?

- Ans
- ✗ 1. 80°
 - ✓ 2. 108°
 - ✗ 3. 240°
 - ✗ 4. 180°

Question ID : 5410784607

Status : Answered

Chosen Option : 2

Q.1 Who is the National Security Advisor of India?

- Ans
1. Pankaj Saran
 2. Brajesh Misra
 3. Ajit Doval
 4. Nripendra Misra

Question ID : 5410784630

Status : Answered

Chosen Option : 3

Q.1 Find out the number that does not fit in the following number series.

1, 2, 3, 7, 22, 155, 3310

- Ans
- ✗ 1. 22
 - ✓ 2. 3310
 - ✗ 3. 7
 - ✗ 4. 155

Question ID : 5410784542

Status : Answered
Chosen Option : 2

Q.1
5 Select the most appropriate option to fill in the blank in the context.

The door opened with a _____ sound.

- Ans
1. tinkling
 2. whistling
 3. murmuring
 4. creaking

Question ID : 5410784579
Status : Answered
Chosen Option : 4

Q.1
6 Which country is the second-largest producer of sugarcane in the world?

- Ans
1. China
 2. Pakistan
 3. India
 4. Brazil

Question ID : 5410784616
Status : Answered
Chosen Option : 3

Q.1
7 Which of the following refers to the life-sustaining chemical transformations within the cells of living organisms?

- Ans
1. Mentalism
 2. Spasm
 3. Reproduction
 4. Metabolism

Question ID : 5410784618
Status : Answered
Chosen Option : 4

Q.1
8 Vinayapitaka is a well known:

- Ans
1. Sufi text
 2. Buddhist text
 3. Jain text
 4. Valmiki text

Question ID : 5410784633
Status : Answered
Chosen Option : 2

Q.1
9 King Harsha's rule was effective during the period:

- Ans
- 1. 606-647 CE
 - 2. 234- 276 CE
 - 3. 111-176 CE
 - 4. 878-924 CE

Question ID : 5410784636
Status : Answered
Chosen Option : 1

Q.2
0 Select the most appropriate option to fill in the blank in the context.

He _____ the letter and put it in his bag.

- Ans
- 1. turned
 - 2. bent
 - 3. folded
 - 4. doubled

Question ID : 5410784578
Status : Answered
Chosen Option : 3

Q.2
1 India's first ever gold medal at the Youth Olympics was won by Jeremy Lalrinnunga. He contested in which event?

- Ans
- 1. 55 Kg, weightlifting
 - 2. 68 Kg, weightlifting
 - 3. 62 Kg, weightlifting
 - 4. 69 Kg, weightlifting

Question ID : 5410784632
Status : Not Answered
Chosen Option : --

Q.2
2 Deep walked 5 m towards North. Then he turned right and walked 5 m. Then he turned left and walked 5 m. Then he turned left and walked 10 m. Finally, he turned left and walked 15 m. In which direction is he from the starting position?

- Ans
- 1. South-West
 - 2. North
 - 3. South-East
 - 4. North-West

Question ID : 5410784546
Status : Answered
Chosen Option : 1

Q.2
3

What is the average of the following set of numbers?

91, 93, 95, 97, 99, 101

- Ans
- 1. 96
 - 2. 95.5
 - 3. 95
 - 4. 97

Question ID : 5410784597
Status : Answered
Chosen Option : 1

Q.2 The regulation of the internal environment to maintain a constant state is known as:

- Ans
- 1. Adaptability
 - 2. Flexibility
 - 3. Inertia
 - 4. Homeostasis

Question ID : 5410784617
Status : Answered
Chosen Option : 4

Q.2 Two pipes, A and B, can fill an empty cistern in 20 min and 40 min, respectively. Both the pipes are opened together, and after some time, pipe A is closed. If the cistern gets filled in 30 min, then for how long was pipe A kept open?

- Ans
- 1. 5 min
 - 2. 15 min
 - 3. 10 min
 - 4. 2 min

Question ID : 5410784602
Status : Answered
Chosen Option : 1

Q.2 The statements below are followed by two conclusions labelled I and II. Without resolving anything yourself, choose the conclusion(s) that logically follow(s) from the given statements.

Statements:

Irregularity is a cause for punishment in jobs.
Some irregular employees were fired from jobs.

Conclusions:

I: All fired employees are regular.
II: Those employees who have not been punished are regular.

- Ans
- 1. Neither conclusion I nor conclusion II follows.
 - 2. Only conclusion II follows.
 - 3. Both the conclusions follow.
 - 4. Only conclusion I follows.

Question ID : 5410784540

Status : Answered
Chosen Option : 2

Q.2
7 How many letters in the word 'PERSONIFICATION' occupy the same position in the word as they do in the English alphabet?

- Ans
- 1. 3
 - 2. 1
 - 3. 4
 - 4. 0

Question ID : 5410784554
Status : Answered
Chosen Option : 1

Q.2
8 From the below, select the sentence that is grammatically correct.

- Ans
- 1. Tractors are used by their fields to plough farmers.
 - 2. By farmers their tractors are used fields to plough.
 - 3. Their fields to plough tractors are used by farmers.
 - 4. Tractors are used by farmers to plough their fields

Question ID : 5410784573
Status : Answered
Chosen Option : 4

Q.2
9 Four words have been given out of which three are alike in some manner, while one is different. Choose out the odd one.

- Ans
- 1. Convict
 - 2. Den
 - 3. Hole
 - 4. Web

Question ID : 5410784544
Status : Answered
Chosen Option : 1

Q.3
0

The bar graph given below shows the foreign exchange reserves of a country (in million US \$) from 1991 - 1992 to 1998 - 1999.

Foreign Exchange Reserves Of a Country. (in million US \$)



Between 1991 - 1992 to 1998 - 1999, in which year were the country's foreign exchange reserves deplete by \$1200 MN as compared to the previous year?

- Ans
- 1. 1998-1999
 - 2. 1993-1994
 - 3. 1991-1992
 - 4. 1995-1996

Question ID : 5410784612

Status : Answered

Chosen Option : 2

Q.3
1 Who introduced Vernacular Press Act in 1878, which subjected newspapers published in Indian languages to a censorship?

- Ans
- 1. Lord Dalhousie
 - 2. Lord Duncan
 - 3. Lord Lytton
 - 4. Clement Atlee

Question ID : 5410784614

Status : Answered

Chosen Option : 3

Q.3
2 *Satyamev Jayate*, the phrase written on the National Emblem is taken from which of the following texts?

- Ans
- 1. Isa Upanishad
 - 2. Mundaka Upanishad
 - 3. Chhandogya Upanishad

4. Katha Upanishad

Question ID : 5410784624
Status : Answered
Chosen Option : 2

Q.3
3 A is thrice as good a workman as B. If B takes 45 days to finish a task, then how many days will A take to finish the same task?

- Ans
- 1. 20
 - 2. 30
 - 3. 5
 - 4. 15

Question ID : 5410784598
Status : Answered
Chosen Option : 4

Q.3
4 Which Indian state has introduced the Happiness Curriculum for school students?

- Ans
- 1. Odisha
 - 2. Jammu Kashmir
 - 3. Madhya Pradesh
 - 4. Delhi

Question ID : 5410784631
Status : Answered
Chosen Option : 4

Q.3
5 Select the correct direct form of the given sentence.

The boys asked the teacher if they were going to have a holiday the next day.

- Ans
- 1. The boys asked the teacher, "Were they going to have a holiday the next day?"
 - 2. The boys asked the teacher, "Are we going to have a holiday tomorrow?"
 - 3. The boys asked the teacher, "Do we have a holiday tomorrow?"
 - 4. The boys told the teacher, "We going to have a holiday tomorrow."

Question ID : 5410784571
Status : Answered
Chosen Option : 2

Q.3
6 Read the following paragraph carefully and answer the question given.

Five dolls in a shop are in a row on a shells. Teddy is to the left of Rabbit and to the right of Tortoise. Monkey is to the right of Rabbit. Baby doll is between Rabbit and Monkey.

Then which doll is placed Immediate right to Baby doll?

- Ans
- 1. Tortoise
 - 2. Rabbit
 - 3. Teddy
 - 4. Monkey

Question ID : 5410784552
Status : Answered
Chosen Option : 4

Q.3
7 Select the most appropriate word for the given group of words.

A partner in crime

- Ans
- 1. Accomplice
 - 2. Assistant
 - 3. Colleague
 - 4. Associate

Question ID : 5410784576
Status : Answered
Chosen Option : 1

Q.3
8 Select the word which is opposite in meaning to the word in capitals.

SUSPEND


- Ans
- 1. change
 - 2. continue
 - 3. interrupt
 - 4. cancel

Question ID : 5410784582
Status : Answered
Chosen Option : 2

Q.3
9 Select the correct active form of the given sentence.

For generations, the tradition of equating the visitors with God has been followed by our village.

- Ans
- 1. For generations, the visitors have followed the tradition of equating our village with God.
 - 2. For generations, our village has been following the tradition of equating the visitors with God.
 - 3. For generations, our village has followed the tradition of equating the visitors with God.

 4. For generations, our village was following the tradition of equating the visitors with God.

Question ID : 5410784568

Status : Answered

Chosen Option : 3

Q.4
0 A sum of ₹ 1,500 was divided between A and B. If $\frac{4}{5}$ of what A received was equal to $\frac{2}{5}$ of what B received, then what was the amount that B received?

- Ans
-  1. ₹ 1,000
 -  2. ₹ 700
 -  3. ₹ 500
 -  4. ₹ 600

Question ID : 5410784592

Status : Answered

Chosen Option : 1

Q.4
1 The cost price of a product was ₹ 150, and it was sold at a profit of 30%. What was the selling price of the product?

- Ans
-  1. ₹ 205
 -  2. ₹ 195
 -  3. ₹ 175
 -  4. ₹ 200

Question ID : 5410784594

Status : Answered

Chosen Option : 2





Q.4
2 The statements below are followed by two conclusions labelled I and II. Assuming that the information in the statements are true, even if it appears at variance from generally established facts, decide which conclusion(s) logically and definitely follow(s) from the information given in the statements.

Statements:

All sets are lotuses.
All lotuses are beds.
Some beds are lakes.

Conclusions:

I: Some lotuses are sets.
II: Some lakes are beds.

- Ans
-  1. Either conclusion I or conclusion II follows.
 -  2. Both the conclusions follow.
 -  3. Only conclusion I follows.
 -  4. Only conclusion II follows.

Question ID : 5410784539

Status : Answered

Chosen Option : 4

Q.4
3 In a certain code, FISH is written as 2118819. How will POND be written as in that code?

Ans

- 1. 11121323
- 2. 12213234
- 3. 1615144
- 4. 1616164

Question ID : 5410784537
Status : Answered
Chosen Option : 1

Q.4
4 What would be the result of the following expression

$$\frac{192 \times 192 \times 192 - 8 \times 8 \times 8}{192 \times 192 + 192 \times 8 + 8 \times 8}$$

- Ans
- 1. 200
 - 2. 184
 - 3. 1
 - 4. 4

Question ID : 5410784606
Status : Answered
Chosen Option : 2

Q.4
5 Select the correct indirect form of the given sentence.

Shobhit said, "Mohit often helps me with Mathematics."

- Ans
- 1. Shobhit said Mohit often helps me with Mathematics.
 - 2. Shobhit said that Mohit often helped him with Mathematics.
 - 3. Shobhit said that Mohit was often helping him with Mathematics.
 - 4. Shobhit said that Mohit often helped me with Mathematics.

Question ID : 5410784570
Status : Answered
Chosen Option : 2

Comprehension:

Read the following passage and answer the questions.

Spread across a mere 1km radius, Shani Shingnapur is a small town of about 200 houses in the Ahmednagar district of Maharashtra, India, where throngs of pilgrims come to offer their prayers to the Hindu god, Lord Shani.

Here, you will find one of the most venerated temples of Lord Shani in the country, and Shani Shingnapur residents unanimously put their faith in the deity as their protector. Due to a 300-year-old legend, no house in the village has doors. And this belief extends beyond the residential houses to nearly all the town's civic establishments, from hotels to the police station and even the bank. And there's not a single shop in Shani Shingnapur where you can buy locks and keys.

The Shani Shingnapur's shrine of Lord Shani is a 1.5 m black monolith installed on a platform without a cover from any side. Mustard oil ceaselessly pours out of a container suspended above the shrine, bathing the idol with the metaphorical dedication of his devotees. The temple remains open 24 hours a day, all year around.

Although, originally a humble abode to the deity, the much-visited temple is now administered by a trust that receives a substantial amount of donations from pilgrims and devotees. With time, the popularity of Shani Shingnapur has surged and the faith of the residents has strengthened.

Locals continue to live in simple and functional accommodations that are left open throughout the seasons, with mere doorframes for entrances. Curtains can provide some sense of privacy, and plywood sometimes guards the bottom half of the doorway to keep stray animals at bay. Locals go about their daily chores without worrying about the security of their houses and belongings; such is their staunch faith in Lord Shani that they even travel out of town for days without asking their neighbours to keep vigil.

"If someone has been dishonest or tries to steal in the village, that person would be unable to escape the punishments of Lord Shani and will bear the consequences of his actions," said Dyaneshwar Kudalkar, who runs a guest house catering to pilgrims.

"When we are protected to this extent, we need not worry about making external arrangements for safety. There have been instances where people have installed doors or latches in their houses and have suffered accidents, losses in business or bad luck."

SubQuestion No : 46

Q.4
6 What is unique about the town of Shani Singnapur?

- Ans
- 1. Many pilgrims come to visit the town from faraway places.
 - 2. The town has a temple to the deity Shani.
 - 3. There are no doors to the houses in the whole town.

4. The people of the town have great faith in lord Shani.

Question ID : 5410784562

Status : Answered

Chosen Option : 3

Comprehension:

Read the following passage and answer the questions.

Spread across a mere 1km radius, Shani Shingnapur is a small town of about 200 houses in the Ahmednagar district of Maharashtra, India, where throngs of pilgrims come to offer their prayers to the Hindu god, Lord Shani.

Here, you will find one of the most venerated temples of Lord Shani in the country, and Shani Shingnapur residents unanimously put their faith in the deity as their protector. Due to a 300-year-old legend, no house in the village has doors. And this belief extends beyond the residential houses to nearly all the town's civic establishments, from hotels to the police station and even the bank. And there's not a single shop in Shani Shingnapur where you can buy locks and keys.

The Shani Shingnapur's shrine of Lord Shani is a 1.5 m black monolith installed on a platform without a cover from any side. Mustard oil ceaselessly pours out of a container suspended above the shrine, bathing the idol with the metaphorical dedication of his devotees. The temple remains open 24 hours a day, all year around.

Although, originally a humble abode to the deity, the much-visited temple is now administered by a trust that receives a substantial amount of donations from pilgrims and devotees. With time, the popularity of Shani Shingnapur has surged and the faith of the residents has strengthened.

Locals continue to live in simple and functional accommodations that are left open throughout the seasons, with mere doorframes for entrances. Curtains can provide some sense of privacy, and plywood sometimes guards the bottom half of the doorway to keep stray animals at bay. Locals go about their daily chores without worrying about the security of their houses and belongings; such is their staunch faith in Lord Shani that they even travel out of town for days without asking their neighbours to keep vigil.

"If someone has been dishonest or tries to steal in the village, that person would be unable to escape the punishments of Lord Shani and will bear the consequences of his actions," said Dyaneshwar Kudalkar, who runs a guest house catering to pilgrims.

"When we are protected to this extent, we need not worry about making external arrangements for safety. There have been instances where people have installed doors or latches in their houses and have suffered accidents, losses in business or bad luck."

SubQuestion No : 47

Q.4
7 Why don't people of Shani Shingnapur lock their homes?

- Ans
1. They cannot buy locks in the market.
 2. They have great faith in lord Shani.
 3. People in the town are honest.
 4. They ask the neighbours to keep a watch.

Question ID : 5410784564

Status : Answered

Chosen Option : 2

Comprehension:

Read the following passage and answer the questions.

Spread across a mere 1km radius, Shani Shingnapur is a small town of about 200 houses in the Ahmednagar district of Maharashtra, India, where throngs of pilgrims come to offer their prayers to the Hindu god, Lord Shani.

Here, you will find one of the most venerated temples of Lord Shani in the country, and Shani Shingnapur residents unanimously put their faith in the deity as their protector. Due to a 300-year-old legend, no house in the village has doors. And this belief extends beyond the residential houses to nearly all the town's civic establishments, from hotels to the police station and even the bank. And there's not a single shop in Shani Shingnapur where you can buy locks and keys.

The Shani Shingnapur's shrine of Lord Shani is a 1.5 m black monolith installed on a platform without a cover from any side. Mustard oil ceaselessly pours out of a container suspended above the shrine, bathing the idol with the metaphorical dedication of his devotees. The temple remains open 24 hours a day, all year around.

Although, originally a humble abode to the deity, the much-visited temple is now administered by a trust that receives a substantial amount of donations from pilgrims and devotees. With time, the popularity of Shani Shingnapur has surged and the faith of the residents has strengthened.

Locals continue to live in simple and functional accommodations that are left open throughout the seasons, with mere doorframes for entrances. Curtains can provide some sense of privacy, and plywood sometimes guards the bottom half of the doorway to keep stray animals at bay. Locals go about their daily chores without worrying about the security of their houses and belongings; such is their staunch faith in Lord Shani that they even travel out of town for days without asking their neighbours to keep vigil.



"If someone has been dishonest or tries to steal in the village, that person would be unable to escape the punishments of Lord Shani and will bear the consequences of his actions," said Dyaneshwar Kudalkar, who runs a guest house catering to pilgrims.

"When we are protected to this extent, we need not worry about making external arrangements for safety. There have been instances where people have installed doors or latches in their houses and have suffered accidents, losses in business or bad luck."

SubQuestion No : 48

Q.4
8 Which of the following statements is NOT true according to the passage?

Ans 1. Initially the temple of Shani used to be small.

-  2. Mustard oil keeps pouring on the idol of Lord Shani continuously.
- 3. Lord Shani's idol is mounted on a platform.
-  4. The idol of Lord Shani is covered from three sides.

Question ID : 5410784566

Status : Answered

Chosen Option : 4

Comprehension:

Read the following passage and answer the questions.

Spread across a mere 1km radius, Shani Shingnapur is a small town of about 200 houses in the Ahmednagar district of Maharashtra, India, where throngs of pilgrims come to offer their prayers to the Hindu god, Lord Shani.

Here, you will find one of the most venerated temples of Lord Shani in the country, and Shani Shingnapur residents unanimously put their faith in the deity as their protector. Due to a 300-year-old legend, no house in the village has doors. And this belief extends beyond the residential houses to nearly all the town's civic establishments, from hotels to the police station and even the bank. And there's not a single shop in Shani Shingnapur where you can buy locks and keys.

The Shani Shingnapur's shrine of Lord Shani is a 1.5 m black monolith installed on a platform without a cover from any side. Mustard oil ceaselessly pours out of a container suspended above the shrine, bathing the idol with the metaphorical dedication of his devotees. The temple remains open 24 hours a day, all year around.

Although, originally a humble abode to the deity, the much-visited temple is now administered by a trust that receives a substantial amount of donations from pilgrims and devotees. With time, the popularity of Shani Shingnapur has surged and the faith of the residents has strengthened.

Locals continue to live in simple and functional accommodations that are left open throughout the seasons, with mere doorframes for entrances. Curtains can provide some sense of privacy, and plywood sometimes guards the bottom half of the doorway to keep stray animals at bay. Locals go about their daily chores without worrying about the security of their houses and belongings; such is their staunch faith in Lord Shani that they even travel out of town for days without asking their neighbours to keep vigil.

"If someone has been dishonest or tries to steal in the village, that person would be unable to escape the punishments of Lord Shani and will bear the consequences of his actions," said Dyaneshwar Kudalkar, who runs a guest house catering to pilgrims.

"When we are protected to this extent, we need not worry about making external arrangements for safety. There have been instances where people have installed doors or latches in their houses and have suffered accidents, losses in business or bad luck."

SubQuestion No : 49

Q.4
9 How do people in Shani Shingnapur maintain their privacy?

- Ans
- 1. They use door frames for entrances.
 - 2. Plywood is used at the bottom half of entrance.
 - 3. Latches are installed in the entrance

✓ 4. Curtains are sometimes used.

Question ID : 5410784563

Status : Answered

Chosen Option : 4

Comprehension:

Read the following passage and answer the questions.

Spread across a mere 1km radius, Shani Shingnapur is a small town of about 200 houses in the Ahmednagar district of Maharashtra, India, where throngs of pilgrims come to offer their prayers to the Hindu god, Lord Shani.

Here, you will find one of the most venerated temples of Lord Shani in the country, and Shani Shingnapur residents unanimously put their faith in the deity as their protector. Due to a 300-year-old legend, no house in the village has doors. And this belief extends beyond the residential houses to nearly all the town's civic establishments, from hotels to the police station and even the bank. And there's not a single shop in Shani Shingnapur where you can buy locks and keys.

The Shani Shingnapur's shrine of Lord Shani is a 1.5 m black monolith installed on a platform without a cover from any side. Mustard oil ceaselessly pours out of a container suspended above the shrine, bathing the idol with the metaphorical dedication of his devotees. The temple remains open 24 hours a day, all year around.

Although, originally a humble abode to the deity, the much-visited temple is now administered by a trust that receives a substantial amount of donations from pilgrims and devotees. With time, the popularity of Shani Shingnapur has surged and the faith of the residents has strengthened.

Locals continue to live in simple and functional accommodations that are left open throughout the seasons, with mere doorframes for entrances. Curtains can provide some sense of privacy, and plywood sometimes guards the bottom half of the doorway to keep stray animals at bay. Locals go about their daily chores without worrying about the security of their houses and belongings; such is their staunch faith in Lord Shani that they even travel out of town for days without asking their neighbours to keep vigil.

"If someone has been dishonest or tries to steal in the village, that person would be unable to escape the punishments of Lord Shani and will bear the consequences of his actions," said Dyaneshwar Kudalkar, who runs a guest house catering to pilgrims.

"When we are protected to this extent, we need not worry about making external arrangements for safety. There have been instances where people have installed doors or latches in their houses and have suffered accidents, losses in business or bad luck."

SubQuestion No : 50

Q.5
0 Match words in column A with their meanings in column B.

Column A	Column B
a. surge	1. example
b. vigil	2. increase
c. instance	3. watch

- Ans
- 1. a-1, b-3, c-2
 - 2. a-2, b-3, c-1
 - 3. a-2, b-1, c-3
 - 4. a-3, b-2, c-1

Question ID : 5410784565

Status : Answered

Chosen Option : 2

Q.5
1 Who is the author of the well-known text Kamasutra?

- Ans
- 1. Patanjali
 - 2. Katyayana
 - 3. Varahamihir
 - 4. Vatsyayana

Question ID : 5410784634

Status : Answered

Chosen Option : 4

Q.5
2 If an amount of ₹ 5,000 earned a simple interest of ₹ 500 over 2 years, what is the rate of simple interest?

- Ans
- 1. 4%
 - 2. 2%
 - 3. 5%
 - 4. 5.5%

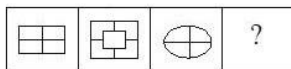
Question ID : 5410784590

Status : Answered

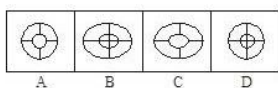
Chosen Option : 3

Q.5
3 Which figure from the Answer Figures will replace the question mark (?) in the Problem Figures?

Problem Figures



Answer figures



Ans

- ✓ 1. C
- ✗ 2. B
- ✗ 3. A
- ✗ 4. D

Question ID : 5410784559

Status : Answered

Chosen Option : 1

Q.⁵₄ Given below are six sentences with the first and the last in their correct order; however, the remaining four are jumbled. Pick the option that gives the correct order.

Sentence 1. Emilia and her family lived on the island of Sebesi—one of the largest islands in the Sunda Strait—located near the Anak Krakatau volcano.

P. Sebesi island is one of several areas that was badly hit by the tsunami, which was triggered after volcanic activity at Anak Krakatau caused undersea landslides.

Q. It destroyed hundreds of buildings, sweeping away cars and uprooting trees in several popular tourist destinations on Saturday.

R. Vast waves engulfed coastal towns on the islands of Sumatra and Java leaving at least 430 dead and more than 150 missing.

S. At least 16,000 people still remain displaced and rescue workers are struggling to reach remote areas of the country that have been hit by the tsunami.

Sentence 6. Emilia is one of 90 people who have been hospitalised at the Bob Bazar hospital in the nearby town of

Ans I ✗ lia SPQR

- ✓ 2. PQRS
- ✗ 3. RSQP
- ✗ 4. RQPS

Question ID : 5410784574

Status : Answered

Chosen Option : 2

Q.⁵₅ If $\sin(\alpha + \beta) = 1$, $\sin(\alpha - \beta) = \frac{1}{2}$, then $\tan(\alpha + 2\beta) \tan(2\alpha + \beta) =$

Ans ✗ 1. -1

2. 0

3. none

4. 1

Question ID : 5410784609

Status : Answered

Chosen Option : 4

Q.5
6 *Select the word which is closest in meaning to the word in capitals.*

DISTASTEFUL

Ans 1. unpleasant

2. contaminated

3. useless

4. tasteless

Question ID : 5410784581

Status : Answered

Chosen Option : 4

Q.5
7 Read the following given code language and answer the question.

If D = 8, H = 16, R = 36, BD = 12, then how AOM could be written in that code language?

Ans 1. 64

2. 58

3. 44

4. 36

Question ID : 5410784560

Status : Answered

Chosen Option : 2

Comprehension:

In the following passage some words have been deleted. Fill in the blanks with the help of the alternatives given. Select the most appropriate option for each number.

Today we know that our earth, which seems to be flat and almost endless; is really a small (1) _____ revolving round the sun. Compared to other little bodies, the earth is of course extremely big, so (2) _____ that in relation to its (3) _____ even huge mountains would be like tiny particles of sand sticking on a football.

SubQuestion No : 58

Q.5
8 Which of the following words should be filled at blank 1 as per context of the passage from the given options?

Ans 1. ball

2. globe

3. planet

4. round

Question ID : 5410784585

Status : Answered

Chosen Option : 3

Comprehension:

In the following passage some words have been deleted. Fill in the blanks with the help of the alternatives given. Select the most appropriate option for each number.

Today we know that our earth, which seems to be flat and almost endless; is really a small (1) _____ revolving round the sun. Compared to other little bodies, the earth is of course extremely big, so (2) _____ that in relation to its (3) _____ even huge mountains would be like tiny particles of sand sticking on a football.

SubQuestion No : 59

Q.5 Which of the following words should be filled at blank 2 as per context of the passage from the given options?

9

Ans

1. big

2. large

3. huge

4. vast

Question ID : 5410784586

Status : Answered

Chosen Option : 2

Comprehension:

In the following passage some words have been deleted. Fill in the blanks with the help of the alternatives given. Select the most appropriate option for each number.

Today we know that our earth, which seems to be flat and almost endless; is really a small (1) _____ revolving round the sun. Compared to other little bodies, the earth is of course extremely big, so (2) _____ that in relation to its (3) _____ even huge mountains would be like tiny particles of sand sticking on a football.

SubQuestion No : 60

Q.6 Which of the following words should be filled at blank 3 as per context of the passage from the given options?


0

Ans

1. size

2. shape

3. proportion

 4. distance

Question ID : 5410784587
Status : Answered
Chosen Option : 1

Q.6 A person sold a product for ₹ 360 at a profit of 20% on the initial price. What was the cost price of the product?




1

- Ans  1. ₹ 200
 2. ₹ 350
 3. ₹ 300
 4. ₹ 250

Question ID : 5410784596
Status : Answered
Chosen Option : 3

Q.6 The secretariat of International Solar Alliance is located in:

2

- Ans  1. China
 2. USA
 3. Germany
 4. India

Question ID : 5410784621
Status : Answered
Chosen Option : 4

Q.6 The first session of Indian National Congress was presided over by_____.

3

- Ans 1. Surendra Nath Banerjee
2. Narendra Nath Banerjee
3. Dinesh Chandra Banerjee
4. Womesh Chandra Benerjee

Question ID : 5410784613
Status : Answered
Chosen Option : 1

Q.6 The following series follows a trend. Identify the term which does not fit in to the series.

4

4, 6, 10, 16, 24, 34, 40, 60

- Ans  1. 40
 2. 16
 3. 34
 4. 60

Question ID : 5410784556
Status : Answered

Q.6 ⁵ In the sentence below, there is a word which is wrongly spelt. Identify the word.

Health authorities should foster good practice by disseminating information.

- Ans
- 1. Practice
 - 2. Information.
 - 3. Authorities
 - 4. Disseminating

Question ID : 5410784583
Status : Answered
Chosen Option : 4

Q.6 ⁶ What would be the result of the following expression

$$\frac{132 \times 132 \times 132 + 68 \times 68 \times 68}{132 \times 132 - 132 \times 68 + 68 \times 68}$$

- Ans
- 1. 4
 - 2. 1
 - 3. 200
 - 4. 24

Question ID : 5410784605
Status : Answered
Chosen Option : 3

Q.6 ⁷ In 2018, with which country did India sign a pact to deepen their cooperation in the field of environment while affirming their commitment to lead the fight against climate change?

- Ans
- 1. South Africa
 - 2. France
 - 3. China
 - 4. Brazil

Question ID : 5410784622
Status : Answered
Chosen Option : 2

Q.6 ⁸ Two trains, 230 m and 270 m long, are running on parallel tracks in the opposite directions at a speed of 40 km/h and 50 km/h, respectively. What is the time taken by the trains to cross each other completely?

- Ans
- 1. 25 s
 - 2. 15 s
 - 3. 20 s
 - 4. 30 s

Question ID : 5410784600
Status : Answered

Q.6
9 The bar graph given below shows the foreign exchange reserves of a country (in million US \$) from 1991 - 1992 to 1998 - 1999.

Foreign Exchange Reserves Of a Country. (in million US \$)



Between 1991 - 1992 to 1998 – 1999, in which year did the country's foreign exchange reserves increase by \$ 1200 MN as compared to the previous year?

- Ans
- 1. 1991-1992
 - 2. 1994-1995
 - 3. 1996-1997
 - 4. 1997-1998

Question ID : 5410784611

Status : Answered

Chosen Option : 3

Q.7
0 What is the full form of EPCA, which is tasked with taking various measures to tackle air pollution in the national capital region?

- Ans
- 1. Environment Pollution Compliance Authority
 - 2. Environment Pollution (Prevention and Control) Authority
 - 3. Energy Protection Control Authority
 - 4. Environmental Energy Pollution Compliance Authority

Question ID : 5410784635

Status : Answered

Chosen Option : 1

Q.7
1 A person sold a bag for ₹ 200 at a loss of 20% on the initial price. What was the cost price of the bag?

- Ans
- 1. ₹ 350
 - 2. ₹ 200

3. ₹ 150

4. ₹ 250

Question ID : 5410784595

Status : Answered

Chosen Option : 4

Q.7
2 A train moves past a pole and a tunnel completely in 3 s and 15 s, respectively. The length of the tunnel is 480 m. What is the speed of the train?

Ans 1. 4 m/s

2. 40 m/s

3. 30 m/s

4. 60 m/s

Question ID : 5410784601

Status : Answered

Chosen Option : 2

Q.7
3 The current (as of December 2018) Air Chief Marshal of India is:

Ans 1. Darmesh Darshan

2. Reghu Veer

3. B S Dhanoa

4. Vikas Gupta

Question ID : 5410784628

Status : Answered

Chosen Option : 3

Q.7
4 The bilateral maritime exercise between India and Japan, which was held in October 2018, was called as:

Ans 1. JI-18

2. JIMEX-18

3. INDJA-18

4. JAIND-18

Question ID : 5410784620

Status : Answered

Chosen Option : 2

Q.7
5 What is the fractional form of $7.\overline{135}$?

Ans 1. $\frac{795}{111}$

2. $\frac{793}{111}$

3. $\frac{792}{111}$

~~X~~ 4. $\frac{792}{1000}$

Question ID : 5410784589
Status : Answered
Chosen Option : 3

Q.7 Following are the conditions to select a manager for accounts in a company :

- 6
1. The candidate must be at least 30 years and not more than 40 years as on 1st January 2019.
 2. Be a commerce graduate with at least 55% aggregate marks
 3. Have experience of at least 10 years of accounts experience out of which at least 3 years in a managerial position in an organization.
 4. Have secured at least 60% in the recruitment process.

At 2 above, but has secured at least 50% aggregate marks in graduation and has secured 80% in the recruitment process .he can be referred to VP-accounts .

In each question below the candidate details are provided . Read the question and answer based on the information provided. Don't assume anything.

Ram is born on 1st August 1974 and has a 60% aggregate in graduation .he has 15 years' experience in an organization with 5 years as accounts manager .

- Ans ~~X~~ 1. If the candidate is to be selected for VP -accounts
2. If the candidate is to be selected for Manager -accounts
 3. If the candidate is not to be selected
 4. If the data provided is inadequate to take a decision

Question ID : 5410784553
Status : Answered
Chosen Option : 3

Q.7
7 Select the most appropriate meaning of the underlined idiom.

Ragini's parents do not like Mohit, but he keeps meeting her on and off.

- Ans
1. Secretly
 2. Openly
 3. Occasionally
 4. Regularly

Question ID : 5410784575
Status : Answered
Chosen Option : 3

Q.7
8 With respect to area, India is about how many times bigger than Pakistan?

- Ans
- ~~X~~ 1. 3
 - ~~X~~ 2. 5
 - ~~X~~ 3. 2
 4. 4

Question ID : 5410784615
Status : Answered

Q.7
9 With which of the following instruments Ustad Bismillah Khan is related to?

- Ans
- 1. Sitar
 - 2. Tabla
 - 3. Guitar
 - 4. Shehnai

Question ID : 5410784626

Status : Answered

Chosen Option : 4

Q.8
0 Which of the two conclusions can be concluded on the basis of given statements?

Statements:

Some Donuts are Burgers.
Some Cakes are Donuts.

Conclusions:

- 1. Some Burgers are Donuts.
- 2. All Cakes are Burgers.

- Ans
- 1. Only conclusion 1 follows
 - 2. Both (1) and (2) follow
 - 3. Neither 1 nor 2 follows
 - 4. Only conclusion 2 follows

Question ID : 5410784550

Status : Answered

Chosen Option : 1

Q.8
1 A and B together have ₹ 3000. If $\frac{2}{5}$ th of A's amount is equal to $\frac{1}{5}$ th of B's how much amount B has?

- Ans
- 1. ₹ 2000
 - 2. ₹ 500
 - 3. ₹ 1000
 - 4. ₹ 1500

Question ID : 5410784593

Status : Answered

Chosen Option : 1

Q.8
2 Four words have been given out of which three are alike in some manner, while one is different. Choose out the odd one.

- Ans
- 1. Hiss
 - 2. Hoot
 - 3. Mew
 - 4. Cattle

Question ID : 5410784545

Status : Answered

Chosen Option : 4

Q.8
3 Select the option that can replace the question mark (?) in the following equation.

$$25 \times (12 \times (5 - 2^2) + (2 + 4)) = ?$$

Ans 1. 100

2. 75

3. 25

4. 50

Question ID : 5410784588

Status : Answered

Chosen Option : 4

Q.8
4

Ans 1. Eagle

2. Swan

3. Owl

4. Hen

Question ID : 5410784549

Status : Answered

Chosen Option : 4

Q.8
5 Identify the segment of the sentence given below that contains a grammatical error.

Young people in Britain eats more snacks than people of the same age in other European countries.

Ans 1. than people of the same age

2. eats more snacks

3. in other European countries.

4. Young people in Britain

Question ID : 5410784567

Status : Answered

Chosen Option : 1

Q.8
6 The Supreme Commander of the Indian Air Force is the:

Ans 1. Home Minister of India

2. Prime Minister

3. Defence Minister

✓ 4. President of India

Question ID : 5410784629
Status : Answered
Chosen Option : 4

Q.8
7 Select the most appropriate option to fill in the blank in the context.

The suffering of children at the shelter home _____ our sympathy.

- Ans
- ✓ 1. aroused
 - ✗ 2. raised
 - ✗ 3. created
 - ✗ 4. arose

Question ID : 5410784580
Status : Answered
Chosen Option : 4

Q.8
8 A lends a loan amount of ₹10,000 to B at a simple interest rate of 5% per annum for a year. What will be the total amount returned by B?

- Ans
- ✓ 1. ₹ 10,500
 - ✗ 2. ₹ 12,000
 - ✗ 3. ₹ 500
 - ✗ 4. ₹ 12,500

Question ID : 5410784591
Status : Answered
Chosen Option : 1

Q.8
9 Select the option that will correctly fill in the blank and complete the following series.

37, 41, 43, 47, 53, 59, ____.

- Ans
- ✗ 1. 65
 - ✗ 2. 67
 - ✓ 3. 61
 - ✗ 4. 63

Question ID : 5410784541
Status : Answered
Chosen Option : 2

Q.9
0 In which Indian state did black pepper originate?

- Ans
- ✗ 1. Maharashtra
 - ✓ 2. Kerala
 - ✗ 3. Tamil Nadu

4. Orissa

Question ID : 5410784637
Status : Answered
Chosen Option : 2

Q.9 The age of the father 4 years ago was 8 times the age of his son. At present the father's age is 4 times that of his son.

1 Find the present age of son.

- Ans 1. 7 years
 2. 14 years
 3. 18 years
 4. 9 years

Question ID : 5410784599
Status : Answered
Chosen Option : 1

Q.9 India's first ever gold medal at the Youth Olympics was won by:

- Ans 1. Vicky Batta
 2. Jeremy Lalrinnunga
 3. Sneha Soren
 4. Vicky Bhattia

Question ID : 5410784623
Status : Answered
Chosen Option : 2

Q.9 A cylindrical surface having a height of 3 cm and a radius of 5 cm needs to be sellotaped around. What will be the minimum length of Sellotape required to wrap the cylinder once?

- Ans 1. 15π
 2. 5π
 3. 25π
 4. 10π

Question ID : 5410784604
Status : Answered
Chosen Option : 1

Q.9 Four words have been given as options out of which three are alike in some manner, while the fourth one is different.
4 Choose the odd one.

- Ans 1. Triangles
 2. Rhombus
 3. Squares
 4. Rectangles

Question ID : 5410784557

Status : Answered

Chosen Option : 1

Q.9
5 In which year Sangeet Natak Akademi was founded?

- Ans
- 1. 1952
 - 2. 1947
 - 3. 1948
 - 4. 1949

Question ID : 5410784625

Status : Not Answered

Chosen Option : --

Q.9
6 The bar graph given below shows the foreign exchange reserves of a country (in million US \$) from 1991 - 1992 to 1998 - 1999.

Foreign Exchange Reserves Of a Country. (in million US \$)



The foreign exchange reserves in 1997-98 was how many times that in 1994-95?

- Ans
- 1. 1.2
 - 2. 0.7
 - 3. 1.5
 - 4. 1.4

Question ID : 5410784610

Status : Answered

Chosen Option : 3

Q.9
7 Choose the numeral term which has the same relation as the given pair:

6 : 218 :: 8 : ?

Ans

- 1. 512
- 2. 516
- 3. 520
- 4. 514

Question ID : 5410784555
Status : Answered
Chosen Option : 4

Q.9 In a code language, THANKS is written as NKSAHT. How will POETRY be written as in that code language?
8

- Ans
- 1. TYREOP
 - 2. TROYEP
 - 3. TRYEOP
 - 4. TRYOEP

Question ID : 5410784538
Status : Answered
Chosen Option : 3

Q.9 Select the correct passive form of the given sentence.
9

All members happily paid the one-time subscription for the 'Swacchta Abhiyan' in the colony.

- Ans
- 1. The one-time subscription for the Swacchta Abhiyan in the colony has been paid happily by all the members. .
 - 2. The one-time subscription for the Swacchta Abhiyan in the colony is being paid happily by all the members.
 - 3. The one-time subscription for all the members in the colony was paid happily by the Swacchta Abhiyan.
 - 4. The one-time subscription for the Swacchta Abhiyan in the colony was paid happily by all the members.

Question ID : 5410784569
Status : Answered
Chosen Option : 3

Q.1 'Ban' is related to 'Prohibition' in the same way as 'Mend' is related to '_____'.
00

- Ans
- 1. Repair
 - 2. Assign
 - 3. Sedate
 - 4. Vacant

Question ID : 5410784536
Status : Answered
Chosen Option : 1

