

SSC Selection Post

Previous Year Paper
Matriculation Level
4 Feb 2022 Shift 1
(English)

<https://www.freshersnow.com>

Selection Post Phase IX 2021 Matriculation level

Roll Number	
Candidate Name	
Venue Name	
Exam Date	04/02/2022
Exam Time	9:00 AM - 10:00 AM
Subject	Selection Post Matriculation Level

Section : **General Intelligence**

Q.1 In a certain code language, 'Lakshya is Playing Chess' is written as 'it demrta bless popmase', 'Naitik is Reading a book' is written as 'g lifhte it plitnsh hool', and 'Ashu is Playing Cricket' is written as 'it rticket popmase dapu'. What will be the code for the word 'Playing' in that language?

- Ans 1. plitnsh
 2. popmase
 3. rticket
 4. demrta

Question ID : **65497838499**
 Status : **Answered**
 Chosen Option : **2**

Q.2 Read the given statements and conclusions carefully. Assuming that the information given in the statements is true, even if it appears to be at variance with commonly known facts, decide which of the given conclusions logically follow(s) from the statements.

Statements:

1. All doctors are girls.
2. All girls are honest.

Conclusions:

- I. All doctors are honest.
- II. Some honest are doctors.

- Ans 1. Both conclusions I and II follow
 2. Only conclusion I follows
 3. Neither conclusion I nor II follows
 4. Only conclusion II follows

Question ID : **65497838513**
 Status : **Answered**
 Chosen Option : **1**

Q.3 In a certain code language, 'THEORY' is coded as '2192497', and 'BRIGHT' is coded as '259320192'. How will 'SOLUTION' be coded in that language?

- Ans 1. 104352345
 2. 106332964
 3. 143529605
 4. 196332961

Question ID : **65497837991**
 Status : **Not Answered**
 Chosen Option : **--**

Q.4 Read the given statements and conclusions carefully. Assuming that the information given in the statements is true, even if it appears to be at variance with commonly known facts, decide which of the given conclusions logically follow(s) from the statements.

Statements:

All strainers are knives.
No knife is a pan.

Conclusions:

I. Some pans are strainers.
II. Some knives are strainers.
III. No strainer is a pan.

- Ans 1. Only conclusions II and III follow.
 2. Either conclusion I or III follows.
 3. Only conclusions I and II follow.
 4. Only conclusions I and III follow.

Question ID : 65497839017

Status : Answered

Chosen Option : 1

Q.5 In the series 8, 19, 30, what will be the 10th term?

- Ans 1. 118
 2. 107
 3. 114
 4. 99

Question ID : 65497839121

Status : Answered

Chosen Option : 1

Q.6 'A+B' का अर्थ है कि 'A, B' का भाई है, 'A-B' का अर्थ है कि 'A, B' की पुत्री है, 'A×B' का अर्थ है कि 'A, B' का पति है और 'A÷B' का अर्थ है कि 'A, B' का पुत्र है। यदि 'J+R÷T×K-Z' है, तो K का J से क्या संबंध है?

- Ans 1. मां
 2. नानी
 3. दादी
 4. बहन

Question ID : 65497838916

Status : Answered

Chosen Option : 1

Q.7 Select the correct option that indicates the arrangement of the given words in the order in which they appear in an English dictionary.

1. Lengthen
2. Lethargy
3. Leucocytes
4. Lemonade
5. Leverage
6. Leopard

- Ans 1. 4, 1, 6, 2, 3, 5
 2. 1, 2, 4, 3, 5, 6
 3. 1, 4, 2, 6, 5, 3
 4. 4, 6, 1, 2, 3, 5

Question ID : 65497839105

Status : Answered

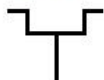
Chosen Option : 1

Q.8 In a certain code language, 'MENTOR' is written as 'NVMGLI' and 'DIARY' is written as 'WRZIB'. How will 'SHIMLA' be written in that language?

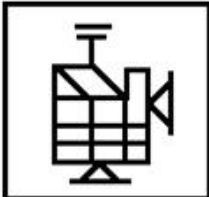
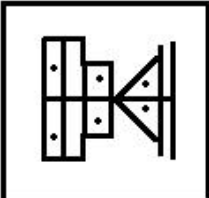
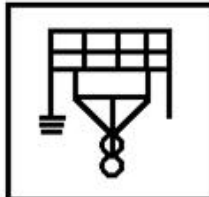
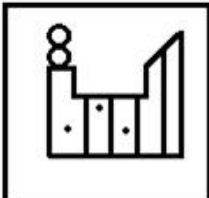
- Ans
- 1. HTSNOZ
 - 2. GSRNHZ
 - 3. HSRNOZ
 - 4. HSRMNZ

Question ID : 65497839212
 Status : Answered
 Chosen Option : 3

Q.9 Select the option in which the given figure is embedded (rotation is NOT allowed).



Ans

- 1. 
- 2. 
- 3. 
- 4. 

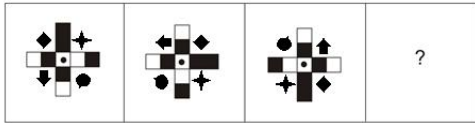
Question ID : 65497839127
 Status : Answered
 Chosen Option : 3

Q.10 In a certain code language, 'MADRID' is written as 'NBESJE', and 'LISBON' is written as 'MJTCPO'. How will 'MUNICH' be written in that language?

- Ans
- 1. NVOJDI
 - 2. OVPJDJ
 - 3. NUOJDI
 - 4. OUPJEJ

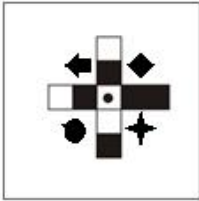
Question ID : 65497837988
 Status : Answered
 Chosen Option : 1

Q.11 Select the figure from among the given options that can replace the question mark (?) in the following series.

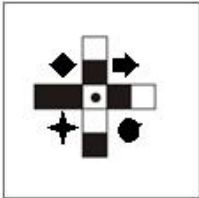


Ans

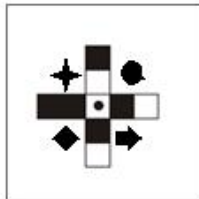
✗ 1.



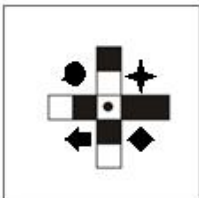
✗ 2.



✓ 3.



✗ 4.



Question ID : 65497838004
 Status : Answered
 Chosen Option : 3

Q.12 Select the number from among the given options that can replace the question mark (?) in the following series.

157, 165, 192, 256, ?

Ans ✗ 1. 342

✓ 2. 381

✗ 3. 298

✗ 4. 426

Question ID : 65497838000
 Status : Answered
 Chosen Option : 2

Q.13 In a certain code language, 'UNITED' is coded as '89' and 'SHOP' is coded as '50'. How will 'TRANSIT' be coded in that language?

- Ans
- 1. 90
 - 2. 88
 - 3. 79
 - 4. 93

Question ID : 65497839215
Status : Not Answered
Chosen Option : --

Q.14 Select the option that is related to the third number in the same way as the second number is related to the first number.

7 : 346 :: 6 : ?

- Ans
- 1. 327
 - 2. 119
 - 3. 219
 - 4. 281

Question ID : 65497838511
Status : Answered
Chosen Option : 3

Q.15 छः मित्र एक पंक्ति में बैठकर मूवी देख रहे हैं। E, Q के ठीक बगल में बैठा है। P, G के ठीक बगल में बैठा है। Q, R के साथ बैठा है, जो बाएं सिरे पर है। G, Q के दाईं ओर दूसरे स्थान पर बैठा है। E, P और F के बाईं ओर है। Q और E एक साथ बैठे हैं। F की स्थिति क्या है?

- Ans
- 1. पंक्ति के दाएं सिरे पर
 - 2. R और E के बीच
 - 3. E और G के बीच
 - 4. Q के दाईं ओर ठीक बगल में

Question ID : 65497838504
Status : Not Answered
Chosen Option : --

Q.16 सात व्यक्ति - A, B, D, N, R, S और V एक बेंच पर दक्षिण की ओर मुख करके बैठे हैं। A, V के दाईं ओर दूसरे स्थान पर बैठा है। A और R के बीच एक व्यक्ति बैठा है। N, D का निकटतम पड़ोसी है, जो किसी एक सिरे पर बैठा है। V, S के बाईं ओर तीसरे स्थान पर बैठा है। V, बाएं सिरे से तीसरे स्थान पर बैठा है। R एक सिरे पर बैठा है और S का निकटतम पड़ोसी है। A, R के बाईं ओर दूसरे स्थान पर बैठा है। निम्नलिखित में से कौन A के बाईं ओर तीसरे स्थान पर बैठा है?

- Ans
- 1. N
 - 2. D
 - 3. R
 - 4. V

Question ID : 65497839117
Status : Not Answered
Chosen Option : --

Q.17 Which two signs should be interchanged to make the given equation correct?

$$211 \times 14 + 627 \div 33 - 17 = 520$$

- Ans
- 1. + and +
 - 2. + and -
 - 3. + and ×
 - 4. × and -

Question ID : 65497839022

Status : Answered

Chosen Option : 4

Q.18 'संताप' का जो संबंध 'कष्ट' से है, 'प्रतिभाशाली' का वही संबंध '_____' से है।

- Ans
- 1. खिन्न
 - 2. रूढ़
 - 3. धूमिल
 - 4. तेजोमय

Question ID : 65497839108

Status : Answered

Chosen Option : 4

Q.19 A, B का पुत्र है। C, D का पिता है। A का विवाह E से हुआ है। A और D सहोदर हैं। F, E का भाई है। B का केवल एक पुत्र है। G, A का पुत्र है। F, H का पिता है। I, D की पुत्री है। F की कोई पुत्री नहीं है। C का E से क्या संबंध है?

- Ans
- 1. पुत्र
 - 2. ससुर
 - 3. भाई
 - 4. भतीजा

Question ID : 65497838506

Status : Answered

Chosen Option : 4

Q.20 Select the correct mirror image of the given combination when the mirror is placed at PQ as shown.

4 R F 8 9 3 Z f k 2

P
|
Q

- Ans
- 1. 4 R F 8 9 3 Z f k 2
 - 2. 4 R F 8 9 3 Z f k 2
 - 3. 4 R F 8 9 3 Z f k 2
 - 4. 4 R F 8 9 3 Z f k 2

Question ID : 65497839026

Status : Answered

Chosen Option : 4

Q.21 Select the option that is related to the third term in the same way as the second term is related to the first term.

RADIUS : ARINSU :: SQUARE : ?

- Ans 1. QSZFER
 2. QSPFER
 3. XLPFWZ
 4. XLZVWZ

Question ID : 65497839007
Status : Answered
Chosen Option : 2

Q.22 Select the letter-cluster from among the given options that can replace the question mark (?) in the following series.

NYQ, KWP, HUO, ESN, ?

- Ans 1. CQM
 2. CPN
 3. BQM
 4. BPN

Question ID : 65497837982
Status : Answered
Chosen Option : 3

Q.23 In a certain code language, 'QUICK' is coded as '162418610'. How will 'FOUND' be coded in that language?

- Ans 1. 231421126
 2. 413211221
 3. 213411261
 4. 231361221

Question ID : 65497839112
Status : Answered
Chosen Option : 2

Q.24 Select the combination of letters that when sequentially placed in the blanks of the given series will complete the series.

NEURO__CNEUR__ICNEU__TICNE__OTIC

- Ans 1. TIOTROUR
 2. TOITROUR
 3. TIOTORRU
 4. TIOTRORU

Question ID : 65497838495
Status : Not Answered
Chosen Option : --

Q.25 Four letter-clusters have been given, out of which three are alike in some manner and one is different. Select the letter-cluster that is different.

- Ans 1. TQO
 2. IGE
 3. MKI
 4. ECA

Question ID : 65497837984
Status : Answered
Chosen Option : 1

Section : English Language

Q.1 Select the most appropriate ANTONYM of the given word.

Perennial

- Ans 1. Temporary
 2. Continual
 3. Abiding
 4. Longstanding

Question ID : 65497838013
Status : Not Answered
Chosen Option : --

Q.2 Select the most appropriate ANTONYM of the given word.

Hollow

- Ans 1. Narrow
 2. Empty
 3. Curved
 4. Solid

Question ID : 65497839034
Status : Answered
Chosen Option : 1

Q.3 Select the most appropriate option to fill in the blank.

_____! The great leader is no more.

- Ans 1. Hurrah
 2. Hello
 3. Bravo
 4. Alas

Question ID : 65497838519
Status : Answered
Chosen Option : 4

Q.4 Select the most appropriate synonym of the given word.

Lofty

- Ans 1. Active
 2. Keen
 3. Humble
 4. Noble

Question ID : 65497838521
Status : Not Answered
Chosen Option : --

Q.5 Select the most appropriate meaning of the given idiom.

On purpose

- Ans 1. aimlessly
 2. deliberately
 3. with no reason
 4. carefully

Question ID : 65497839138
Status : Answered
Chosen Option : 3

Q.6 Select the option that expresses the given sentence in passive voice.

She took my signatures on the application form.

- Ans 1. My signatures were taken on the application form by her.
 2. Her signatures were taken on the application form by me.
 3. My signatures have been taken on the application form by her.
 4. Her signatures are taken on the application form by me.

Question ID : 65497839129
Status : Not Answered
Chosen Option : --

Q.7 Select the INCORRECTLY spelt word.

- Ans 1. Propose
 2. Imaginary
 3. Ignorence
 4. Gracious

Question ID : 65497838530
Status : Answered
Chosen Option : 3

Q.8 Select the most appropriate option to fill in the blank.

The wind blew so _____ at night that many trees fell in the park.

- Ans 1. intensely
 2. fiercely
 3. boldly
 4. gently

Question ID : 65497839132
Status : Not Answered
Chosen Option : --

Q.9 Select the most appropriate synonym of the given word.

Interfere

- Ans
- 1. Allow
 - 2. Assist
 - 3. Help
 - 4. Obstruct

Question ID : 65497839134
Status : Answered
Chosen Option : 4

Q.10 Select the correct indirect form of the given sentence.

“Poonam, I will wait for you in front of the school gate,” Vidushi said.

- Ans
- 1. Vidushi is telling Poonam that she has waited for her in front of the school gate.
 - 2. Vidushi has told Poonam that she is waiting for her in front of the school gate.
 - 3. Vidushi had told Poonam that I would wait for her in front of the school gate
 - 4. Vidushi told Poonam that she would wait for her in front of the school gate.

Question ID : 65497838008
Status : Answered
Chosen Option : 4

Q.11 Select the INCORRECTLY spelt word.

- Ans
- 1. Intelligence
 - 2. Integrate
 - 3. Integrity
 - 4. Intigral

Question ID : 65497839041
Status : Answered
Chosen Option : 4

Q.12 Select the option that can be used as a one-word substitute for the given group of words.

A person, animal or plant belonging originally to a place

- Ans
- 1. Alien
 - 2. Occupant
 - 3. Resident
 - 4. Native

Question ID : 65497839038
Status : Answered
Chosen Option : 3

Q.13 Select the wrongly spelt word.

- Ans
- 1. gauze
 - 2. gazzette
 - 3. gauge
 - 4. gazelle

Question ID : 65497838733
Status : Answered
Chosen Option : 2

Q.14 Select the most appropriate meaning of the given idiom.

The lion's share

- Ans 1. The highest authority
 2. The largest portion
 3. A risky pursuit
 4. A huge profit

Question ID : 65497838525
 Status : Answered
 Chosen Option : 3

Q.15 Select the option which means the same as the group of words given.

To steal and pass off ideas and words of another as one's own

- Ans 1. Credit
 2. Review
 3. Plagiarize
 4. Familiarize

Question ID : 65497838017
 Status : Not Answered
 Chosen Option : --

Comprehension:

Read the given passage and answer the questions that follow.

Maybe you're bored of bananas, apples and grapes and need a fresh produce pick. A nutrient-rich serving of kiwi fruit may be just what you need. A serving of kiwi fruit (2 kiwis) has twice the vitamin C of an orange, as much potassium as a banana and the fibre of a bowl of whole grain cereal—all for less than 100 calories!

The fuzzy fruit is sky-high in both soluble and insoluble fibre, both of which are essential for promoting heart health, regulating digestion, and lowering cholesterol levels—that's a winning trifecta. Kiwi fruit has also been considered a 'nutritional all-star', as Rutgers University researchers found that kiwi fruit has the best nutrient density of 21 commonly consumed fruits.

Along with vitamin C, kiwi fruits are rich in many bioactive compounds that have antioxidant capacity to help to protect against free radicals, harmful by-products produced in the body. If you want clean energy, think of kiwi fruit because they're rich in magnesium, a nutrient essential to convert food into energy.

A kiwi fruit also doubles as a peeper-keeper by supplying your eyes with protective lutein, a carotenoid that's concentrated in eye tissues and helps protect against harmful free radicals. Kiwi fruit is also packed with blood pressure-lowering potassium. In fact, a 100-gram serving of kiwi fruit—that's about one large kiwi—provides 15% of the Recommended Daily Allowance (RDA) of potassium.

Kiwi fruit has been growing in New Zealand for over 100 years. Once the fruit gained in popularity, other countries started to grow them including Italy, France, Chile, Japan, South Korea and Spain. At first, kiwis were referred to as 'Yang Tao' or 'Chinese Gooseberry', but the name was ultimately changed to kiwi fruit so that everyone would know where the fruit came from.

A ripe kiwi fruit will be plump and smooth-skinned, and free of wrinkles, bruise, and punctures. If you find that your kiwi is a little too firm after buying it, simply let it ripen at room temperature for three to five days. The firmer the fruit, the more tart it will taste. To speed up the ripening process, you can also place kiwis in a paper bag with an apple or banana. The kiwi will ripen in a day! If you want to store the fruit longer, you should keep it in a plastic bag in the refrigerator.

SubQuestion No : 16

Q.16 What has been referred to as a triple achievement of the kiwi fruit?

- Ans 1. Lowering of blood pressure, better digestion and improved eyesight
 2. Protection against free radicals, heart health and better digestion
 3. Heart health, regulating digestion, and lowering cholesterol levels
 4. Better eye sight, lowering cholesterol and regulating blood pressure

Question ID : 65497839050
 Status : Not Answered
 Chosen Option : --

Comprehension:

Read the given passage and answer the questions that follow.

Maybe you're bored of bananas, apples and grapes and need a fresh produce pick. A nutrient-rich serving of kiwi fruit may be just what you need. A serving of kiwi fruit (2 kiwis) has twice the vitamin C of an orange, as much potassium as a banana and the fibre of a bowl of whole grain cereal—all for less than 100 calories!

The fuzzy fruit is sky-high in both soluble and insoluble fibre, both of which are essential for promoting heart health, regulating digestion, and lowering cholesterol levels—that's a winning trifecta. Kiwi fruit has also been considered a 'nutritional all-star', as Rutgers University researchers found that kiwi fruit has the best nutrient density of 21 commonly consumed fruits.

Along with vitamin C, kiwi fruits are rich in many bioactive compounds that have antioxidant capacity to help to protect against free radicals, harmful by-products produced in the body. If you want clean energy, think of kiwi fruit because they're rich in magnesium, a nutrient essential to convert food into energy.

A kiwi fruit also doubles as a peeper-keeper by supplying your eyes with protective lutein, a carotenoid that's concentrated in eye tissues and helps protect against harmful free radicals. Kiwi fruit is also packed with blood pressure-lowering potassium. In fact, a 100-gram serving of kiwi fruit—that's about one large kiwi—provides 15% of the Recommended Daily Allowance (RDA) of potassium.

Kiwi fruit has been growing in New Zealand for over 100 years. Once the fruit gained in popularity, other countries started to grow them including Italy, France, Chile, Japan, South Korea and Spain. At first, kiwis were referred to as 'Yang Tao' or 'Chinese Gooseberry', but the name was ultimately changed to kiwi fruit so that everyone would know where the fruit came from.

A ripe kiwi fruit will be plump and smooth-skinned, and free of wrinkles, bruise, and punctures. If you find that your kiwi is a little too firm after buying it, simply let it ripen at room temperature for three to five days. The firmer the fruit, the more tart it will taste. To speed up the ripening process, you can also place kiwis in a paper bag with an apple or banana. The kiwi will ripen in a day! If you want to store the fruit longer, you should keep it in a plastic bag in the refrigerator.

SubQuestion No : 17

Q.17 Which of these is the quickest way to ripen a kiwi?

- Ans**
- 1. Keeping it in the refrigerator in a sealed bag
 - 2. Leaving it at room temperature
 - 3. Leaving it in direct sunlight
 - 4. Storing it in a paper bag with other fruits

Question ID : 65497839053

Status : Not Answered

Chosen Option : --

Comprehension:

Read the given passage and answer the questions that follow.

Maybe you're bored of bananas, apples and grapes and need a fresh produce pick. A nutrient-rich serving of kiwi fruit may be just what you need. A serving of kiwi fruit (2 kiwis) has twice the vitamin C of an orange, as much potassium as a banana and the fibre of a bowl of whole grain cereal—all for less than 100 calories!

The fuzzy fruit is sky-high in both soluble and insoluble fibre, both of which are essential for promoting heart health, regulating digestion, and lowering cholesterol levels—that's a winning trifecta. Kiwi fruit has also been considered a 'nutritional all-star', as Rutgers University researchers found that kiwi fruit has the best nutrient density of 21 commonly consumed fruits.

Along with vitamin C, kiwi fruits are rich in many bioactive compounds that have antioxidant capacity to help to protect against free radicals, harmful by-products produced in the body. If you want clean energy, think of kiwi fruit because they're rich in magnesium, a nutrient essential to convert food into energy.

A kiwi fruit also doubles as a peeper-keeper by supplying your eyes with protective lutein, a carotenoid that's concentrated in eye tissues and helps protect against harmful free radicals. Kiwi fruit is also packed with blood pressure-lowering potassium. In fact, a 100-gram serving of kiwi fruit—that's about one large kiwi—provides 15% of the Recommended Daily Allowance (RDA) of potassium.

Kiwi fruit has been growing in New Zealand for over 100 years. Once the fruit gained in popularity, other countries started to grow them including Italy, France, Chile, Japan, South Korea and Spain. At first, kiwis were referred to as 'Yang Tao' or 'Chinese Gooseberry', but the name was ultimately changed to kiwi fruit so that everyone would know where the fruit came from.

A ripe kiwi fruit will be plump and smooth-skinned, and free of wrinkles, bruise, and punctures. If you find that your kiwi is a little too firm after buying it, simply let it ripen at room temperature for three to five days. The firmer the fruit, the more tart it will taste. To speed up the ripening process, you can also place kiwis in a paper bag with an apple or banana. The kiwi will ripen in a day! If you want to store the fruit longer, you should keep it in a plastic bag in the refrigerator.

SubQuestion No : 18

Q.18 The word 'kiwi' suggests that the fruit comes from:

- Ans**
- 1. France
 - 2. South Korea
 - 3. Spain
 - 4. New Zealand

Question ID : 65497839052

Status : Answered

Chosen Option : 4

Comprehension:

Read the given passage and answer the questions that follow.

Maybe you're bored of bananas, apples and grapes and need a fresh produce pick. A nutrient-rich serving of kiwi fruit may be just what you need. A serving of kiwi fruit (2 kiwis) has twice the vitamin C of an orange, as much potassium as a banana and the fibre of a bowl of whole grain cereal—all for less than 100 calories!

The fuzzy fruit is sky-high in both soluble and insoluble fibre, both of which are essential for promoting heart health, regulating digestion, and lowering cholesterol levels—that's a winning trifecta. Kiwi fruit has also been considered a 'nutritional all-star', as Rutgers University researchers found that kiwi fruit has the best nutrient density of 21 commonly consumed fruits.

Along with vitamin C, kiwi fruits are rich in many bioactive compounds that have antioxidant capacity to help to protect against free radicals, harmful by-products produced in the body. If you want clean energy, think of kiwi fruit because they're rich in magnesium, a nutrient essential to convert food into energy.

A kiwi fruit also doubles as a peeper-keeper by supplying your eyes with protective lutein, a carotenoid that's concentrated in eye tissues and helps protect against harmful free radicals. Kiwi fruit is also packed with blood pressure-lowering potassium. In fact, a 100-gram serving of kiwi fruit—that's about one large kiwi—provides 15% of the Recommended Daily Allowance (RDA) of potassium.

Kiwi fruit has been growing in New Zealand for over 100 years. Once the fruit gained in popularity, other countries started to grow them including Italy, France, Chile, Japan, South Korea and Spain. At first, kiwis were referred to as 'Yang Tao' or 'Chinese Gooseberry', but the name was ultimately changed to kiwi fruit so that everyone would know where the fruit came from.

A ripe kiwi fruit will be plump and smooth-skinned, and free of wrinkles, bruise, and punctures. If you find that your kiwi is a little too firm after buying it, simply let it ripen at room temperature for three to five days. The firmer the fruit, the more tart it will taste. To speed up the ripening process, you can also place kiwis in a paper bag with an apple or banana. The kiwi will ripen in a day! If you want to store the fruit longer, you should keep it in a plastic bag in the refrigerator.

SubQuestion No : 19

Q.19 A serving of kiwi fruit is rich in:

- Ans** 1. Vitamin C and potassium
 2. Vitamin A and phosphorus
 3. Vitamin E and fibre
 4. Vitamin B and magnesium

Question ID : 65497839049

Status : Answered

Chosen Option : 1

Comprehension:

Read the given passage and answer the questions that follow.

Maybe you're bored of bananas, apples and grapes and need a fresh produce pick. A nutrient-rich serving of kiwi fruit may be just what you need. A serving of kiwi fruit (2 kiwis) has twice the vitamin C of an orange, as much potassium as a banana and the fibre of a bowl of whole grain cereal—all for less than 100 calories!

The fuzzy fruit is sky-high in both soluble and insoluble fibre, both of which are essential for promoting heart health, regulating digestion, and lowering cholesterol levels—that's a winning trifecta. Kiwi fruit has also been considered a 'nutritional all-star', as Rutgers University researchers found that kiwi fruit has the best nutrient density of 21 commonly consumed fruits.

Along with vitamin C, kiwi fruits are rich in many bioactive compounds that have antioxidant capacity to help to protect against free radicals, harmful by-products produced in the body. If you want clean energy, think of kiwi fruit because they're rich in magnesium, a nutrient essential to convert food into energy.

A kiwi fruit also doubles as a peeper-keeper by supplying your eyes with protective lutein, a carotenoid that's concentrated in eye tissues and helps protect against harmful free radicals. Kiwi fruit is also packed with blood pressure-lowering potassium. In fact, a 100-gram serving of kiwi fruit—that's about one large kiwi—provides 15% of the Recommended Daily Allowance (RDA) of potassium.

Kiwi fruit has been growing in New Zealand for over 100 years. Once the fruit gained in popularity, other countries started to grow them including Italy, France, Chile, Japan, South Korea and Spain. At first, kiwis were referred to as 'Yang Tao' or 'Chinese Gooseberry', but the name was ultimately changed to kiwi fruit so that everyone would know where the fruit came from.

A ripe kiwi fruit will be plump and smooth-skinned, and free of wrinkles, bruise, and punctures. If you find that your kiwi is a little too firm after buying it, simply let it ripen at room temperature for three to five days. The firmer the fruit, the more tart it will taste. To speed up the ripening process, you can also place kiwis in a paper bag with an apple or banana. The kiwi will ripen in a day! If you want to store the fruit longer, you should keep it in a plastic bag in the refrigerator.

SubQuestion No : 20

Q.20 Kiwi is considered a 'nutritional all-star' because:

- Ans
- 1. it fulfils 15% of RDA of potassium
 - 2. it is a power-packed food
 - 3. it has the best nutrient density
 - 4. it has the best antioxidant capacity

Question ID : 65497839051

Status : Answered

Chosen Option : 3

Comprehension:

In the following passage, some words have been deleted. Read the passage carefully and select the most appropriate option to fill in each blank.

It is best to steer the middle course in life. The key to happiness is to keep (1)_____ bounds and discipline one's life. Eating well is (2)_____ for nourishment but overeating can do more (3)_____ than good. All parents love their children but those who (4)_____ in excessive pampering end up spoiling their kids. (5)_____ riches can bring many evils, enemies, cares and worries.

SubQuestion No : 21

Q.21 Select the most appropriate option to fill in blank no. 1.

- Ans
- 1. along
 - 2. within
 - 3. among
 - 4. between

Question ID : 65497838533

Status : Answered

Chosen Option : 3

Comprehension:

In the following passage, some words have been deleted. Read the passage carefully and select the most appropriate option to fill in each blank.

It is best to steer the middle course in life. The key to happiness is to keep (1)_____ bounds and discipline one's life. Eating well is (2)_____ for nourishment but overeating can do more (3)_____ than good. All parents love their children but those who (4)_____ in excessive pampering end up spoiling their kids. (5)_____ riches can bring many evils, enemies, cares and worries.

SubQuestion No : 22

Q.22 Select the most appropriate option to fill in blank no. 2.

- Ans 1. serious
 2. relevant
 3. urgent
 4. important

Question ID : 65497838534
Status : Not Answered
Chosen Option : --

Comprehension:

In the following passage, some words have been deleted. Read the passage carefully and select the most appropriate option to fill in each blank.

It is best to steer the middle course in life. The key to happiness is to keep (1)_____ bounds and discipline one's life. Eating well is (2)_____ for nourishment but overeating can do more (3)_____ than good. All parents love their children but those who (4)_____ in excessive pampering end up spoiling their kids. (5)_____ riches can bring many evils, enemies, cares and worries.

SubQuestion No : 23

Q.23 Select the most appropriate option to fill in blank no. 3.

- Ans 1. hurt
 2. harm
 3. foul
 4. misuse

Question ID : 65497838535
Status : Not Answered
Chosen Option : --

Comprehension:

In the following passage, some words have been deleted. Read the passage carefully and select the most appropriate option to fill in each blank.

It is best to steer the middle course in life. The key to happiness is to keep (1)_____ bounds and discipline one's life. Eating well is (2)_____ for nourishment but overeating can do more (3)_____ than good. All parents love their children but those who (4)_____ in excessive pampering end up spoiling their kids. (5)_____ riches can bring many evils, enemies, cares and worries.

SubQuestion No : 24

Q.24 Select the most appropriate option to fill in blank no. 4.

- Ans 1. treat
 2. undertake
 3. indulge
 4. entertain

Question ID : 65497838536
Status : Not Answered
Chosen Option : --

Comprehension:

In the following passage, some words have been deleted. Read the passage carefully and select the most appropriate option to fill in each blank.

It is best to steer the middle course in life. The key to happiness is to keep (1)_____ bounds and discipline one's life. Eating well is (2)_____ for nourishment but overeating can do more (3)_____ than good. All parents love their children but those who (4)_____ in excessive pampering end up spoiling their kids. (5)_____ riches can bring many evils, enemies, cares and worries.

SubQuestion No : 25

Q.25 Select the most appropriate option to fill in blank no. 5.

- Ans 1. Exaggerated
 2. Excessive
 3. Extended
 4. Enhanced

Question ID : 65497838537
 Status : Not Answered
 Chosen Option : --

Section : Quantitative Aptitude

Q.1 दो वर्ष पहले, एक सर्वेक्षण से पता चला था कि एक कॉलेज के 2400 विद्यार्थी घर पर कंप्यूटर का उपयोग करने में सक्षम थे। इस वर्ष के सर्वेक्षण के अनुसार उन छात्रों की संख्या में 30% की वृद्धि हुई है, जो घर पर कंप्यूटर का उपयोग करने में सक्षम हैं। अब कितने छात्र घर पर कंप्यूटर का उपयोग करने में सक्षम हैं?

- Ans 1. 2820
 2. 3120
 3. 720
 4. 3000

Question ID : 65497839061
 Status : Answered
 Chosen Option : 2

Q.2 What is the single discount equivalent to the three successive discounts of 10%, 40% and 25%?

- Ans 1. 45.5%
 2. 37.5%
 3. 59.5%
 4. 65.5%

Question ID : 65497839161
 Status : Answered
 Chosen Option : 2

Q.3 If the five-digit number $602xy$ is divisible by 7 and 33, then the value of $(8x - 3y)$ is:

- Ans 1. 69
 2. 59
 3. 56
 4. 61

Question ID : 65497838545
 Status : Answered
 Chosen Option : 2

Q.4 उस आयताकार मैदान का क्षेत्रफल (m^2 में) ज्ञात कीजिए, जिसकी एक भुजा 35 m और एक विकर्ण 37 m है।

- Ans
- 1. 450
 - 2. 1295
 - 3. 1225
 - 4. 420

Question ID : 65497838056
Status : Not Answered
Chosen Option : --

Q.5 Sujatha purchased two articles for a total of ₹1,080. By selling one at a profit of 25% and the other at a loss of 20%, she neither gains nor incurs a loss. What is the difference (in ₹) between the cost price of the two articles?

- Ans
- 1. 120
 - 2. 100
 - 3. 80
 - 4. 150

Question ID : 65497838556
Status : Not Answered
Chosen Option : --

Q.6 The difference between the compound interest and simple interest on ₹x at a rate of 8.5% per annum for 2 years is ₹260.10. What is the value of x?

- Ans
- 1. 38,000
 - 2. 36,000
 - 3. 34,000
 - 4. 35,000

Question ID : 65497838255
Status : Not Answered
Chosen Option : --

Q.7 An item marked at ₹3,550 is offered at $k\%$ discount for ₹3,124. If the discount offered is reduced to $(k-4)\%$, then at what price will the item be available to customers?

- Ans
- 1. ₹3,249
 - 2. ₹3,262
 - 3. ₹3,266
 - 4. ₹3,250

Question ID : 65497838040
Status : Not Answered
Chosen Option : --

Q.8 What is n if 16, n and 49 are in continued proportion?

- Ans 1. 28
 2. $\frac{7}{4}$
 3. 32.5
 4. $\frac{4}{7}$

Question ID : 65497839169
Status : Answered
Chosen Option : 2

Q.9 A tap can fill a tank in 6 hours. After 4 hours it was found that only 60% of the tank is full due to a leakage at the bottom which was then immediately repaired. In how much time will the tank be completely filled?

- Ans 1. 6 hours 24 minutes
 2. 6 hours 40 minutes
 3. 6 hours 30 minutes
 4. 6 hours

Question ID : 65497838053
Status : Not Answered
Chosen Option : --

Q.10 In a medical institute, the strength of the students in the first two classes are in the ratio of 8 : 17. The ratio of the number of students in the second and the third classes is 2 : 3. What is the average of the number of students in the first and third classes, if the number of students in the second class is 612?

- Ans 1. 288
 2. 828
 3. 603
 4. 918

Question ID : 65497839267
Status : Answered
Chosen Option : 3

Q.11 A shopkeeper sold an item for ₹495 with 10% profit. In order to earn 16% profit, by how much (in ₹) should he increase the selling price?

- Ans 1. 27
 2. 32
 3. 30
 4. 25

Question ID : 65497838044
Status : Not Answered
Chosen Option : --

Q.12 The average of 11 numbers is 25. If the average of 6 of these numbers is 24, then what is the average of the remaining 5 numbers?

- Ans
- 1. 25.6
 - 2. 25.2
 - 3. 26
 - 4. 26.2

Question ID : 65497838036
Status : Answered
Chosen Option : 4

Q.13 If $x^3 - y^3 = 40$ and $x - y = 4$, then find the value of xy .

- Ans
- 1. 60
 - 2. -2
 - 3. -60
 - 4. 2

Question ID : 65497839180
Status : Answered
Chosen Option : 4

Q.14 A part of a journey is covered in 10 hours at 96 km/h and the remaining part of it is covered in 8 hours 30 minutes at 80 km/h. What is the total length of the journey (in km)?

- Ans
- 1. 1,760
 - 2. 1,640
 - 3. 2,000
 - 4. 1,500

Question ID : 65497839074
Status : Answered
Chosen Option : 2

Q.15 Find the smallest number which should be added to 1234 to get a number divisible by 45.

- Ans
- 1. 16
 - 2. 8
 - 3. 26
 - 4. 1

Question ID : 65497839054
Status : Answered
Chosen Option : 1

Q.16 There are three inlet pipes X, Y and Z in a tank. X and Y can fill the tank in 45 hours. Y and Z can fill the tank in 36 hours. Z and X can fill the tank in 72 hours. The number of hours in which all the three pipes can fill the tank, if operated simultaneously, is:

- Ans**
- ✓ 1. $31\frac{7}{23}$
 - ✗ 2. $31\frac{15}{23}$
 - ✗ 3. $15\frac{7}{23}$
 - ✗ 4. $15\frac{15}{23}$

Question ID : 65497839174
Status : Not Answered
Chosen Option : --

Q.17 A man borrowed money for 2 years and paid back in two equal annual instalments of ₹2,260 at 5% compound interest, compounded annually. What was the sum (in ₹, to the nearest tens) borrowed?

- Ans**
- ✗ 1. 4,420
 - ✗ 2. 4,520
 - ✗ 3. 4,300
 - ✓ 4. 4,200

Question ID : 65497839275
Status : Not Answered
Chosen Option : --

Q.18 The cost price of an article is 16% less than its selling price. What is the profit or loss percentage (to the nearest integer)?

- Ans**
- ✗ 1. Loss, 19%
 - ✗ 2. Loss, 16%
 - ✗ 3. Profit, 16%
 - ✓ 4. Profit, 19%

Question ID : 65497839268
Status : Not Answered
Chosen Option : --

Q.19 A man invested ₹7,050 for 5 years at the rate of 8% simple interest per annum. What will be two-third of the money (in ₹) that he will get on maturity?

- Ans**
- ✗ 1. 2,820
 - ✗ 2. 5,550
 - ✓ 3. 6,580
 - ✗ 4. 9,870

Question ID : 65497839069
Status : Not Answered
Chosen Option : --

Q.20 If $(2x + 3y)^3 - (2x - 3y)^3 = 3y[Ax^2 + By^2]$, then what is the value of $(A - B)$?

- Ans
- 1. 12
 - 2. 9
 - 3. 3
 - 4. 6

Question ID : 65497838567
Status : Not Answered
Chosen Option : --

Q.21 What is the mean proportional between 2.5 and 0.625?

- Ans
- 1. 12.5
 - 2. 1.25
 - 3. 0.0015625
 - 4. 0.125

Question ID : 65497838048
Status : Answered
Chosen Option : 4

Q.22 P और उसके चार मित्रों का औसत वजन 52.4 kg है। यदि P अपने चार दोस्तों के औसत वजन से 3 kg हल्का है, तो P का वजन (kg) में ज्ञात कीजिए।

- Ans
- 1. 50
 - 2. 53
 - 3. 48
 - 4. 51

Question ID : 65497839260
Status : Not Answered
Chosen Option : --

Q.23 A wholesaler bought an item from a manufacturer for ₹5,000 and sold it to a retailer at 20% profit. The retailer sold it to a customer at 10% profit. If the customer buys the item from the manufacturer itself, how much money (in ₹) will he save?

- Ans
- 1. 1,800
 - 2. 1,500
 - 3. 1,550
 - 4. 1,600

Question ID : 65497838247
Status : Not Answered
Chosen Option : --

Q.24 The average weight of some persons in a club was 80 kg. Seven persons with average weight 85.2 kg joined the club and at the same time 2 persons with average weight 72.7 kg left the club. The average weight of all the persons in the group increased by 1.02 kg. How many people were there initially in the club?

- Ans
- 1. 55
 - 2. 45
 - 3. 60
 - 4. 50

Question ID : 65497838548
Status : Not Answered
Chosen Option : --

Q.25 A boat can move 35 km upstream and the same distance downstream in a total time of 8 hours. If the speed of the boat in still water is 9 km/h, then the speed (in km/h) of the stream is:

- Ans
- 1. 2.5
 - 2. 2
 - 3. 1.5
 - 4. 3

Question ID : 65497838565
Status : Not Answered
Chosen Option : --

Section : General awareness

Q.1 'Cricket Crusader' is the autobiography of _____.

- Ans
- 1. Sunil Gavaskar
 - 2. Allan Border
 - 3. Gary Sobers
 - 4. Lala Amarnath

Question ID : 65497838585
Status : Not Answered
Chosen Option : --

Q.2 What is the full form of the NDHM scheme launched by the Ministry of Health and Family Welfare?

- Ans
- 1. National Digital Home Mission
 - 2. National Draft Health Mission
 - 3. National Digitalized Health Mission
 - 4. National Digital Health Mission

Question ID : 65497838593
Status : Answered
Chosen Option : 4

Q.3 Which of the following countries' National Gallery announced to return 14 artworks from its Asian art collection to India in 2021?

- Ans
- 1. Australia
 - 2. New Zealand
 - 3. Netherlands
 - 4. Italy

Question ID : 65497838081
Status : Answered
Chosen Option : 4

Q.4 Which of the following falls under the 'Right to Freedom' as per the Constitution of India?

- Ans
- 1. Equality before law
 - 2. Freedom to attend religious instruction or worship in certain educational institutions
 - 3. Abolition of Untouchability
 - 4. Right to education

Question ID : 65497839096
Status : Answered
Chosen Option : 4

Q.5 केसोवरी, कीवी और रिया निम्न में से किसके उदाहरण हैं?

- Ans
- 1. सरीसृप वर्ग
 - 2. स्तनधारी वर्ग
 - 3. मत्स्य वर्ग
 - 4. पक्षी वर्ग

Question ID : 65497838576
Status : Answered
Chosen Option : 4

Q.6 Which of the following Harappan sites is located in Afghanistan?

- Ans
- 1. Rakhigarhi
 - 2. Banawali
 - 3. Kalibangan
 - 4. Shortughai

Question ID : 65497838580
Status : Answered
Chosen Option : 4

Q.7 सिरोही राष्ट्रीय उद्यान निम्न में से किस राज्य में स्थित है?

- Ans
- 1. असम
 - 2. पश्चिम बंगाल
 - 3. मणिपुर
 - 4. ओडिशा

Question ID : 65497838069
Status : Answered
Chosen Option : 1

Q.8 Which of the following archaeological sites is located in Uttar Pradesh?

- Ans
- 1. Burzahom
 - 2. Koldihwa
 - 3. Chirand
 - 4. Brahmagiri

Question ID : 65497839195
Status : Answered
Chosen Option : 3

Q.9 Which of the following was adopted as the state bird of Ladakh in September 2021?

- Ans 1. Black-necked crane
 2. Parrot
 3. Kingfisher
 4. Sparrow

Question ID : 65497839204
Status : Answered
Chosen Option : 1

Q.10 खेल से लेकर संरचित कुशल कार्यों तक जीवन के सभी पहलुओं में स्वेच्छिक पेशीय क्षमताओं (motor abilities) का प्रभावी ढंग से उपयोग करने में असमर्थता को _____ कहा जाता है।

- Ans 1. अभिज्ञान-अक्षमता (agnosia)
 2. गतिसमन्वय वैकल्य (dyspraxia)
 3. नामन अक्षमता (anomia)
 4. स्पर्श अभिज्ञान-अक्षमता (astereognosis)

Question ID : 65497838065
Status : Not Answered
Chosen Option : --

Q.11 The period 2007-2012 was associated with the _____ Plan.

- Ans 1. 9th Five Year
 2. 11th Five Year
 3. 10th Five Year
 4. 12th Five Year

Question ID : 65497839185
Status : Answered
Chosen Option : 2

Q.12 In which of the following years did Albert Einstein receive the Nobel Prize in Physics?

- Ans 1. 1915
 2. 1920
 3. 1921
 4. 1905

Question ID : 65497839084
Status : Not Answered
Chosen Option : --

Q.13 In the context of banking in India, what does 'F' stand for in the abbreviation 'IFSC'?

- Ans 1. Fiscal
 2. Fast
 3. Federal
 4. Financial

Question ID : 65497838571
Status : Answered
Chosen Option : 4

Q.14 गांधीवादी नेता, पोद्दी श्रीरामुलु का निधन _____ भाषियों के लिए अलग राज्य हेतु अनशन करते हुए हुआ था।

- Ans
- 1. तमिल
 - 2. तेलुगु
 - 3. मलयालम
 - 4. कन्नड़

Question ID : 65497839092
Status : Answered
Chosen Option : 2

Q.15 निम्न में से कौन सी प्रतिस्पर्धा 2021 में टोक्यो में आयोजित हुए पैरालंपिक खेलों में शामिल नहीं थी?

- Ans
- 1. टेबल टेनिस (Table tennis)
 - 2. फुटबॉल 5-ए साइड (Football 5-a side)
 - 3. शॉट पुट (Shot put)
 - 4. हॉकी 6-ए साइड (Hockey 6-a side)

Question ID : 65497838589
Status : Answered
Chosen Option : 2

Q.16 Under which of the following Article of the Constitution of India is the Annual Financial Statement presented to the Parliament every financial year?

- Ans
- 1. Article 156
 - 2. Article 112
 - 3. Article 234
 - 4. Article 134

Question ID : 65497838077
Status : Answered
Chosen Option : 2

Q.17 Deepor Beel is a freshwater lake situated in:

- Ans
- 1. Uttarakhand
 - 2. Meghalaya
 - 3. Bihar
 - 4. Assam

Question ID : 65497839190
Status : Not Answered
Chosen Option : --

Q.18 निम्न में से किस बांध को 'पम्पा सागर' भी कहा जाता है?

- Ans
- 1. टिहरी
 - 2. तुंगभद्रा
 - 3. सरदार सरोवर
 - 4. हीराकुंड

Question ID : 65497839087
Status : Not Answered
Chosen Option : --

Q.19 Who among the following was a noted painter?

- Ans 1. Debendranath Tagore
 2. Abanindranath Tagore
 3. Rathindranath Tagore
 4. Satyendranath Tagore

Question ID : 65497839196
Status : Answered
Chosen Option : 4

Q.20 कन्हेरी गुफाएं निम्न में से किस स्थान पर स्थित हैं?

- Ans 1. पुणे
 2. मुंबई
 3. जयपुर
 4. पटना

Question ID : 65497838059
Status : Answered
Chosen Option : 2

Q.21 Who among the following Sikh Gurus founded the Khalsa Panth?

- Ans 1. Guru Ram Das
 2. Guru Arjan Dev
 3. Guru Nanak Dev
 4. Guru Gobind Singh

Question ID : 65497838071
Status : Answered
Chosen Option : 4

Q.22 Who among the following cricketers is on the International Cricket Council (ICC) Elite Panel of Umpires?

- Ans 1. Farokh Engineer
 2. Dilip Vengsarkar
 3. Srinivasaraghavan Venkataraghavan
 4. Anil Kumble

Question ID : 65497838590
Status : Answered
Chosen Option : 3

Q.23 In which of the following events was Vinod Kumar disqualified at the Paralympic Games held in Tokyo in 2021?

- Ans 1. High Jump
 2. Discus Throw
 3. Javelin Throw
 4. Long Jump

Question ID : 65497838792
Status : Not Answered
Chosen Option : --

Q.24 With effect from 1 April 2019, Dena Bank stands amalgamated with which of the following banks?

- Ans
- 1. State Bank of India
 - 2. Bank of India
 - 3. Punjab National Bank
 - 4. Bank of Baroda

Question ID : 65497839082
Status : Answered
Chosen Option : 4

Q.25 'Raja Parba', the festival which celebrates menstruation and conveys the message of empowerment against societal taboos, is celebrated in the state of _____.

- Ans
- 1. Bihar
 - 2. Assam
 - 3. Gujarat
 - 4. Odisha

Question ID : 65497839080
Status : Answered
Chosen Option : 4