

SSC Selection Post

Previous Year Paper
Matriculation Level
9 Feb 2022 Shift 1
(English)

<https://www.freshersnow.com>

Selection Post Phase IX 2021 Matriculation level

Roll Number	
Candidate Name	
Venue Name	
Exam Date	09/02/2022
Exam Time	9:00 AM - 10:00 AM
Subject	Selection Post Matriculation Level

Section : General Intelligence

Q.1 Chetana is the daughter of Vilas's son. Suhas is the son of Raj. Kapila is the wife of Vilas. Chetana is the sister of Suhas. Prajakta is Chetana's mother. How is Kapila related to Raj?

- Ans
- 1. Sister
 - 2. Wife
 - 3. Paternal aunt
 - 4. Mother

Question ID : 65497839322
Status : Answered
Chosen Option : 4

Q.2 Select the letter-cluster from among the given options that can replace the question mark (?) in the following series.

ILP, KHV, MDB, OZH, ?

- Ans
- 1. QWM
 - 2. RVN
 - 3. QVN
 - 4. RWM

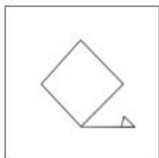
Question ID : 65497838594
Status : Answered
Chosen Option : 3

Q.3 Four letter-clusters have been given, out of which three are alike in some manner and one is different. Select the letter-cluster that is different.

- Ans
- 1. HMT
 - 2. DKP
 - 3. BGN
 - 4. LQX

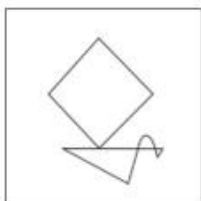
Question ID : 65497838596
Status : Answered
Chosen Option : 2

Q.4 Select the option in which the given figure is embedded (rotation is NOT allowed).

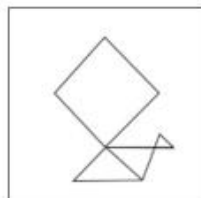


Ans

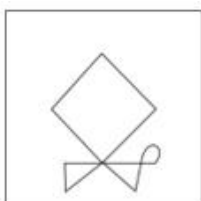
✗ 1.



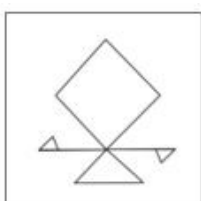
✓ 2.



✗ 3.



✗ 4.



Question ID : 65497838005

Status : Answered

Chosen Option : 2

Q.5 Read the given statements and conclusions carefully. Assuming that the information given in the statements is true, even if it appears to be at variance with commonly known facts, decide which of the given conclusions logically follow(s) from the statements.

Statements:

No train is a car.

No auto is a train.

Conclusions:

I. No car is an auto.

II. All autos are cars.

Ans

✗ 1. Only conclusion I follows.

✗ 2. Only conclusion II follows.

✓ 3. Neither conclusion I nor conclusion II follows.

✗ 4. Either conclusion I or conclusion II follows.

Question ID : 65497838711

Status : Answered

Chosen Option : 3

Q.6 Select the combination of letters that when sequentially placed in the blanks of the given series will complete the series.

u _ a _ c _ k _ b a _ c c _ u _ a a _ c k

Ans 1. b a c u a k b c

2. b a c k a k b c

3. b a u u a k b c

4. b a c u a k a k

Question ID : 65497839209

Status : Answered

Chosen Option : 1

Q.7 Select the number from among the given options that can replace the question mark (?) in the following series.

1, 5, 10, 23, 63, 167, ?

Ans 1. 396

2. 369

3. 862

4. 826

Question ID : 65497838612

Status : Answered

Chosen Option : 1

Q.8 In a certain code language, 'BHOPAL' is written as 'OBHLPA', and 'KANPUR' is written as 'NKARPU'. How will 'INDORE' be written in that language?

Ans 1. DINEOR

2. ERINDO

3. DNIORE

4. NIDROE

Question ID : 65497838294

Status : Answered

Chosen Option : 1

Q.9 L is the father of M. K is married to L. R is the sister of K. D is the son of N. K is the mother-in-law of N. L has only one son and no daughter. R is married to P. S is the daughter of P. How is D related to L?

Ans 1. Grandson

2. Nephew

3. Son

4. Uncle

Question ID : 65497838304

Status : Answered

Chosen Option : 1

Q.10 Select the option that is related to the third number in the same way as the second number is related to the first number and the sixth number is related to the fifth number.

17 : 255 :: 21 : ? :: 24 : 528

- Ans 1. 399
 2. 419
 3. 319
 4. 499

Question ID : 65497839225
Status : Answered
Chosen Option : 1

Q.11 In a certain code language, 'PARK' is coded as '3749', and 'RACE' is coded as '4762'. How will 'CARE' be coded in that language?

- Ans 1. 7642
 2. 6742
 3. 7624
 4. 6724

Question ID : 65497839012
Status : Answered
Chosen Option : 2

Q.12 Select the option that is related to the third term in the same way as the second term is related to the first term.

TRACK : MFFYE :: GLOBE : ?

- Ans 1. GTDQR
 2. GTERS
 3. GDTRQ
 4. GETSR

Question ID : 65497838701
Status : Answered
Chosen Option : 4

Q.13 Five persons Ritik, Aman, Vijay, Piyush and Nitin are sitting around a circular table facing away from the centre. Piyush is sitting to the immediate left of Ritik. Vijay and Aman are not the immediate neighbours of Ritik. Aman is sitting to the immediate right of Vijay.

Who is sitting to the immediate right of Nitin?

- Ans 1. Piyush
 2. Aman
 3. Vijay
 4. Ritik

Question ID : 65497839218
Status : Answered
Chosen Option : 3

Q.14 Six children G, H, I, J, K and L are sitting around a circle facing opposite to the centre. G is sitting second to the left of K. H is sitting to the immediate right of G and third to the left of J. I is sitting to the immediate left of J. Who is sitting to the immediate left of G?

Ans 1. L

2. J

3. K

4. I

Question ID : 65497837995

Status : Answered

Chosen Option : 1

Q.15 Read the given statements and conclusions carefully. Assuming that the information given in the statements is true, even if it appears to be at variance with commonly known facts, decide which of the given conclusions logically follow(s) from the statements.

Statement:

All footballs are hockey sticks.

All hockey sticks are stumps.

No stump is a ring.

Conclusions:

I. Some stumps are footballs.

II. No hockey stick is a ring.

III. Some footballs are rings.

Ans 1. Only conclusions I and III follow.

2. All conclusions I, II and III follow.

3. Only conclusions II and III follow.

4. Only conclusions I and II follow.

Question ID : 65497839227

Status : Answered

Chosen Option : 4

Q.16 Select the number from among the given options that can replace the question mark (?) in the following series.

248, 257, 250, 259, 252, ?

Ans 1. 261

2. 272

3. 268

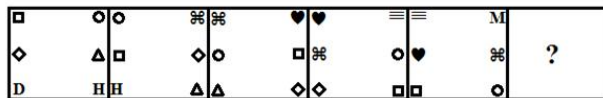
4. 258

Question ID : 65497837999

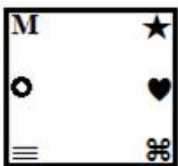
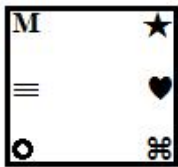
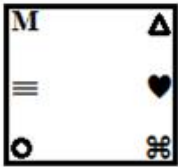

Status : Answered

Chosen Option : 1

Q.17 Select the figure from among the given options that can replace the question mark (?) in the following series.



Ans

- ✗ 1. 
- ✓ 2. 
- ✗ 3. 
- ✗ 4. 

Question ID : 65497838616
 Status : Not Answered
 Chosen Option : --

Q.18 Select the correct mirror image of the given combination when the mirror is placed at PQ as shown.



- ✗ 1. LV4NEG2NL
- ✗ 2. LV4NGE2NL
- ✓ 3. T4N2EGNAT
- ✗ 4. T4NEG2NAT

Question ID : 65497838720
 Status : Answered
 Chosen Option : 3

Q.19 In a certain code language, 'Z' is coded as 261, 'R' is coded as 189, and 'J' is coded as 1017. How will 'P' be coded in that language?

- Ans 1. 1611
 2. 1119
 3. 1607
 4. 1512

Question ID : 65497838297
Status : Answered
Chosen Option : 1

Q.20 Which two signs should be interchanged to make the given equation correct?

$$306 \div 17 + 4 - 50 \times 8 = 30$$

- Ans 1. + and ×
 2. + and ×
 3. × and -
 4. + and -

Question ID : 65497838716
Status : Answered
Chosen Option : 2

Q.21 In a certain code language, 'you can go' is written as 'sat nat pat', 'they can join' is written as 'pat gat zat', and 'they are ready' is written as 'dat zat yat'. How will 'join' be written in that language?

- Ans 1. zat
 2. gat
 3. pat
 4. dat

Question ID : 65497839213
Status : Answered
Chosen Option : 2

Q.22 Select the correct option that indicates the arrangement of the given words in the order in which they appear in an English dictionary.

1. REPRESSIVE
2. REPROACH
3. REPRIMAND
4. REPRISAL
5. REPRIEVE

- Ans 1. 3, 5, 1, 4, 2
 2. 2, 5, 1, 4, 3
 3. 2, 5, 1, 3, 4
 4. 1, 5, 3, 4, 2

Question ID : 65497837983
Status : Answered
Chosen Option : 4

Q.23 In a certain code language, 'FLOWER' is coded as '166', and 'SHIFT' is coded as '73'. How will 'VOLUME' be coded in that language?

- Ans
- 1. 212
 - 2. 222
 - 3. 184
 - 4. 148

Question ID : 65497839013
Status : Answered
Chosen Option : 4

Q.24 In a certain code language, 'FROG' is coded as 92, and 'DUCK' is coded as 78. How will 'BEAR' be coded in that language?

- Ans
- 1. 64
 - 2. 78
 - 3. 52
 - 4. 82

Question ID : 65497837990
Status : Answered
Chosen Option : 3

Q.25 'Assist' is related to 'Help' in the same way as 'Trash' is related to '_____':

- Ans
- 1. Purity
 - 2. Garbage
 - 3. Computer
 - 4. Memory

Question ID : 65497837986
Status : Answered
Chosen Option : 2

Section : English Language

Q.1 Select the INCORRECTLY spelt word.

- Ans
- 1. Gingar
 - 2. Glacier
 - 3. Girdle
 - 4. Glitter

Question ID : 65497838735
Status : Answered
Chosen Option : 3

Q.2 Select the option that can be used as a one-word substitute for the given group of words.

A room where food, crockery and cutlery are kept

- Ans
- 1. Gallery
 - 2. Pantry
 - 3. Bakery
 - 4. Dispensary

Question ID : 65497838732
Status : Answered
Chosen Option : 2

Q.3 Select the most appropriate synonym of the given word.

Camouflage

- Ans
- 1. Open
 - 2. Mask
 - 3. Reveal
 - 4. Show

Question ID : 65497838012
Status : Answered
Chosen Option : 2

Q.4 Select the most appropriate synonym of the given word.

Lure

- Ans
- 1. Reject
 - 2. Push
 - 3. Attract
 - 4. Free

Question ID : 65497839235
Status : Answered
Chosen Option : 3

Q.5 Select the most appropriate word to fill in the blank.

The new school is really wonderful as it is activity-based and believes in _____ learning.

- Ans
- 1. ministerial
 - 2. superficial
 - 3. theoretical
 - 4. experiential

Question ID : 65497838010
Status : Marked For Review
Chosen Option : 3

Q.6 Select the most appropriate option to fill in the blank.

I _____ out of the bed when I heard a noise in the room.

- Ans
- 1. sprang
 - 2. rose
 - 3. skipped
 - 4. took

Question ID : 65497839233
Status : Answered
Chosen Option : 1

Q.7 Select the wrongly spelt word.

- Ans
- 1. production
 - 2. technology
 - 3. primate
 - 4. adrese

Question ID : 65497839039
Status : Answered
Chosen Option : 4

Q.8 Select the correct passive form of the given sentence.

You can see several neem trees along the road to Connaught place.

- Ans
- 1. Many are seeing several neem trees along the road to Connaught Place.
 - 2. Several neem trees were to be seen along the road to Connaught Place.
 - 3. Several neem trees can be seen along the road to Connaught Place.
 - 4. Neem trees had been seen along the road to Connaught Place.

Question ID : 65497838007
Status : Answered
Chosen Option : 3

Q.9 Select the option that can be used as a one-word substitute for the given group of words.

A person who studies the Earth and the materials of which it is made

- Ans
- 1. Anthropologist
 - 2. Biologist
 - 3. Geologist
 - 4. Zoologist

Question ID : 65497838629
Status : Answered
Chosen Option : 3

Q.10 Select the option that expresses the given sentence in indirect speech.

She said to me, "I am busy today."

- Ans
- 1. She told me that I am busy today.
 - 2. She told me that she was busy that day.
 - 3. She said me that she was busy that day.
 - 4. She said to me that she was busy today.

Question ID : 65497838620
Status : Answered
Chosen Option : 2

Q.11 Select the wrongly spelt word.

- Ans
- 1. Voilence
 - 2. Yield
 - 3. Fiend
 - 4. Secretion

Question ID : 65497838019
Status : Answered
Chosen Option : 1

Q.12 Select the most appropriate meaning of the given idiom.

Spill the beans

- Ans 1. To give away a secret
 2. To postpone a plan
 3. To spoil something
 4. To not save anything

Question ID : 65497839239
Status : Answered
Chosen Option : 1

Q.13 Select the most appropriate ANTONYM of the given word.

Eliminate

- Ans 1. Add
 2. Ignore
 3. Exclude
 4. Cancel

Question ID : 65497838728
Status : Answered
Chosen Option : 1

Q.14 Select the most appropriate ANTONYM of the given word.

Obstruct

- Ans 1. Hinder
 2. Block
 3. Curb
 4. Allow

Question ID : 65497838625
Status : Answered
Chosen Option : 4

Q.15 Select the most appropriate meaning of the given idiom.

Have your back against the wall

- Ans 1. To be able to successfully tackle a difficult task
 2. To be humiliated and bullied by a superior at work
 3. To have a strong group of people supporting you
 4. To be in a desperate situation with very few options

Question ID : 65497838016
Status : Answered
Chosen Option : 4

Comprehension:

Read the given passage and answer the questions that follow.

The film industry is facing the challenge of the television screen which, because of its ready availability and nearness to entertainment seekers, is becoming very popular, particularly in the West where television programmes are as indispensable to people as newspaper material. Sustained entertainment for multitudes lasting two or three hours is possible only in big cinema halls. Scenic beauty, background effects and colour techniques which have made the products of cinema industry so attractive and delightful may not be reproduced by television programme organisers, and therefore, this important invention in the field of wireless communication, in spite of having become a big rival of the cinema, may not succeed in replacing it.

The motion picture has also stepped into the international sphere as an agent of goodwill and co-operation among nations. Cultural contacts which tend to reduce tension in the world and bring harmony in international relations have been established through the medium of films. The more people understand and appreciate the past history, present aims, customs, habits and beliefs of men and women in foreign lands, the more will they realise that their interests can best be served by establishing friendly relations with them and by removing those irritants which breed distrust, lack of co-operation and the desire to punish those whose views and attitudes are such as they do not like. As cultural agents movies can cement ties of love and brotherhood among nations and teach them to confer on each other the benefits of all the rich and glorious achievements of the present enlightened age. In recent years, artists of the film world have been visiting foreign lands with a view to presenting before the audience in those countries the best products of their cultural heritage. Film festivals which many European and Asian countries have been organising from time to time have also proved to be of immense value in reducing social barriers, colour prejudices and other causes of friction between nations.

SubQuestion No : 16

Q.16 Which of the following does NOT make the cinema more attractive than the television?

- Ans 1. Colour techniques
 2. Large audiences
 3. Background effects
 4. Scenic beauty

Question ID : 65497838744

Status : Answered

Chosen Option : 2

Comprehension:

Read the given passage and answer the questions that follow.

The film industry is facing the challenge of the television screen which, because of its ready availability and nearness to entertainment seekers, is becoming very popular, particularly in the West where television programmes are as indispensable to people as newspaper material. Sustained entertainment for multitudes lasting two or three hours is possible only in big cinema halls. Scenic beauty, background effects and colour techniques which have made the products of cinema industry so attractive and delightful may not be reproduced by television programme organisers, and therefore, this important invention in the field of wireless communication, in spite of having become a big rival of the cinema, may not succeed in replacing it.

The motion picture has also stepped into the international sphere as an agent of goodwill and co-operation among nations. Cultural contacts which tend to reduce tension in the world and bring harmony in international relations have been established through the medium of films. The more people understand and appreciate the past history, present aims, customs, habits and beliefs of men and women in foreign lands, the more will they realise that their interests can best be served by establishing friendly relations with them and by removing those irritants which breed distrust, lack of co-operation and the desire to punish those whose views and attitudes are such as they do not like. As cultural agents movies can cement ties of love and brotherhood among nations and teach them to confer on each other the benefits of all the rich and glorious achievements of the present enlightened age. In recent years, artists of the film world have been visiting foreign lands with a view to presenting before the audience in those countries the best products of their cultural heritage. Film festivals which many European and Asian countries have been organising from time to time have also proved to be of immense value in reducing social barriers, colour prejudices and other causes of friction between nations.

SubQuestion No : 17

Q.17 According to the passage, what is the prime reason for the popularity of the television?

- Ans**
- 1. Sustained entertainment
 - 2. Achievements of the present age
 - 3. Easy availability and access
 - 4. Interesting programmes

Question ID : **65497838743**

Status : **Answered**

Chosen Option : **3**

Comprehension:

Read the given passage and answer the questions that follow.

The film industry is facing the challenge of the television screen which, because of its ready availability and nearness to entertainment seekers, is becoming very popular, particularly in the West where television programmes are as indispensable to people as newspaper material. Sustained entertainment for multitudes lasting two or three hours is possible only in big cinema halls. Scenic beauty, background effects and colour techniques which have made the products of cinema industry so attractive and delightful may not be reproduced by television programme organisers, and therefore, this important invention in the field of wireless communication, in spite of having become a big rival of the cinema, may not succeed in replacing it.

The motion picture has also stepped into the international sphere as an agent of goodwill and co-operation among nations. Cultural contacts which tend to reduce tension in the world and bring harmony in international relations have been established through the medium of films. The more people understand and appreciate the past history, present aims, customs, habits and beliefs of men and women in foreign lands, the more will they realise that their interests can best be served by establishing friendly relations with them and by removing those irritants which breed distrust, lack of co-operation and the desire to punish those whose views and attitudes are such as they do not like. As cultural agents movies can cement ties of love and brotherhood among nations and teach them to confer on each other the benefits of all the rich and glorious achievements of the present enlightened age. In recent years, artists of the film world have been visiting foreign lands with a view to presenting before the audience in those countries the best products of their cultural heritage. Film festivals which many European and Asian countries have been organising from time to time have also proved to be of immense value in reducing social barriers, colour prejudices and other causes of friction between nations.

SubQuestion No : 18

Q.18 Select the word from the passage which means the same as 'Crucial'.

- Ans**
- 1. Glorious
 - 2. Indispensable
 - 3. Delightful
 - 4. Immense

Question ID : **65497838747**
Status : **Answered**
Chosen Option : **2**

<https://www.freshersnow.com>

Comprehension:

Read the given passage and answer the questions that follow.

The film industry is facing the challenge of the television screen which, because of its ready availability and nearness to entertainment seekers, is becoming very popular, particularly in the West where television programmes are as indispensable to people as newspaper material. Sustained entertainment for multitudes lasting two or three hours is possible only in big cinema halls. Scenic beauty, background effects and colour techniques which have made the products of cinema industry so attractive and delightful may not be reproduced by television programme organisers, and therefore, this important invention in the field of wireless communication, in spite of having become a big rival of the cinema, may not succeed in replacing it.

The motion picture has also stepped into the international sphere as an agent of goodwill and co-operation among nations. Cultural contacts which tend to reduce tension in the world and bring harmony in international relations have been established through the medium of films. The more people understand and appreciate the past history, present aims, customs, habits and beliefs of men and women in foreign lands, the more will they realise that their interests can best be served by establishing friendly relations with them and by removing those irritants which breed distrust, lack of co-operation and the desire to punish those whose views and attitudes are such as they do not like. As cultural agents movies can cement ties of love and brotherhood among nations and teach them to confer on each other the benefits of all the rich and glorious achievements of the present enlightened age. In recent years, artists of the film world have been visiting foreign lands with a view to presenting before the audience in those countries the best products of their cultural heritage. Film festivals which many European and Asian countries have been organising from time to time have also proved to be of immense value in reducing social barriers, colour prejudices and other causes of friction between nations.

SubQuestion No : 19**Q.19 Through the medium of films:**

- Ans
- 1. distrust between nations is strengthened
 - 2. harmony in international relations can be achieved
 - 3. ties of love and brotherhood can be severed
 - 4. lack of cooperation is encouraged

Question ID : **65497838745**Status : **Answered**Chosen Option : **2**

<https://www.freshersnow.com>

Comprehension:

Read the given passage and answer the questions that follow.

The film industry is facing the challenge of the television screen which, because of its ready availability and nearness to entertainment seekers, is becoming very popular, particularly in the West where television programmes are as indispensable to people as newspaper material. Sustained entertainment for multitudes lasting two or three hours is possible only in big cinema halls. Scenic beauty, background effects and colour techniques which have made the products of cinema industry so attractive and delightful may not be reproduced by television programme organisers, and therefore, this important invention in the field of wireless communication, in spite of having become a big rival of the cinema, may not succeed in replacing it.

The motion picture has also stepped into the international sphere as an agent of goodwill and co-operation among nations. Cultural contacts which tend to reduce tension in the world and bring harmony in international relations have been established through the medium of films. The more people understand and appreciate the past history, present aims, customs, habits and beliefs of men and women in foreign lands, the more will they realise that their interests can best be served by establishing friendly relations with them and by removing those irritants which breed distrust, lack of co-operation and the desire to punish those whose views and attitudes are such as they do not like. As cultural agents movies can cement ties of love and brotherhood among nations and teach them to confer on each other the benefits of all the rich and glorious achievements of the present enlightened age. In recent years, artists of the film world have been visiting foreign lands with a view to presenting before the audience in those countries the best products of their cultural heritage. Film festivals which many European and Asian countries have been organising from time to time have also proved to be of immense value in reducing social barriers, colour prejudices and other causes of friction between nations.

SubQuestion No : 20

Q.20 Which of the following statements is NOT true?

- Ans** 1. Films provide an opportunity to understand the beliefs and customs.
 2. Artists from the film world visit foreign lands to showcase their cultural heritage.
 3. Television is likely to replace cinema in view of its increasing popularity.
 4. Film festivals help in bringing nations closer to each other.

Question ID : 65497838746

Status : Answered

Chosen Option : 3

Comprehension:

In the following passage, some words have been deleted. Read the passage carefully and select the most appropriate option to fill in each blank.

Nike gave its office workers a week-long holiday to help them de-stress (1) _____ worries over the COVID-19 pandemic. The sportswear giant (2) _____ its offices so workers could "enjoy additional time off (3) _____ and recover". A senior manager at Nike (4) _____, "Our senior leaders are all sending a clear message – take the time to unwind, de-stress and spend (5) _____ with your loved ones." Nike's stores did not close. Store workers worked as usual.

SubQuestion No : 21

Q.21 Select the most appropriate option to fill in blank No. 1.

- Ans** 1. from
 2. of
 3. about
 4. with

Question ID : 65497839247

Status : Answered

Chosen Option : 1

Comprehension:

In the following passage, some words have been deleted. Read the passage carefully and select the most appropriate option to fill in each blank.

Nike gave its office workers a week-long holiday to help them de-stress (1) _____ worries over the COVID-19 pandemic. The sportswear giant (2) _____ its offices so workers could "enjoy additional time off (3) _____ and recover". A senior manager at Nike (4) _____, "Our senior leaders are all sending a clear message – take the time to unwind, de-stress and spend (5) _____ with your loved ones." Nike's stores did not close. Store workers worked as usual.

SubQuestion No : 22

Q.22 Select the most appropriate option to fill in blank No. 2.

- Ans
- 1. closing
 - 2. close
 - 3. closes
 - 4. closed

Question ID : 65497839248
Status : Answered
Chosen Option : 4

Comprehension:

In the following passage, some words have been deleted. Read the passage carefully and select the most appropriate option to fill in each blank.

Nike gave its office workers a week-long holiday to help them de-stress (1) _____ worries over the COVID-19 pandemic. The sportswear giant (2) _____ its offices so workers could "enjoy additional time off (3) _____ and recover". A senior manager at Nike (4) _____, "Our senior leaders are all sending a clear message – take the time to unwind, de-stress and spend (5) _____ with your loved ones." Nike's stores did not close. Store workers worked as usual.

SubQuestion No : 23

Q.23 Select the most appropriate option to fill in blank No. 3.

- Ans
- 1. to rest
 - 2. rested
 - 3. to resting
 - 4. rest

Question ID : 65497839249
Status : Answered
Chosen Option : 1

Comprehension:

In the following passage, some words have been deleted. Read the passage carefully and select the most appropriate option to fill in each blank.

Nike gave its office workers a week-long holiday to help them de-stress (1) _____ worries over the COVID-19 pandemic. The sportswear giant (2) _____ its offices so workers could "enjoy additional time off (3) _____ and recover". A senior manager at Nike (4) _____, "Our senior leaders are all sending a clear message – take the time to unwind, de-stress and spend (5) _____ with your loved ones." Nike's stores did not close. Store workers worked as usual.

SubQuestion No : 24

Q.24 Select the most appropriate option to fill in blank No. 4.

- Ans
- 1. spoke
 - 2. told
 - 3. said
 - 4. talked

Question ID : 65497839250
Status : Answered
Chosen Option : 3

Comprehension:

In the following passage, some words have been deleted. Read the passage carefully and select the most appropriate option to fill in each blank.

Nike gave its office workers a week-long holiday to help them de-stress (1) _____ worries over the COVID-19 pandemic. The sportswear giant (2) _____ its offices so workers could "enjoy additional time off (3) _____ and recover". A senior manager at Nike (4) _____, "Our senior leaders are all sending a clear message – take the time to unwind, de-stress and spend (5) _____ with your loved ones." Nike's stores did not close. Store workers worked as usual.

SubQuestion No : 25

Q.25 Select the most appropriate option to fill in blank No. 5.

- Ans
- 1. money
 - 2. days
 - 3. hours
 - 4. time

Question ID : 65497839251
Status : Answered
Chosen Option : 2

Section : Quantitative Aptitude

Q.1 A man sold an article for ₹9,700 and earned a profit of 25%. What would have been his profit or loss per cent (to the nearest integer), had he sold it for ₹8,400?

- Ans
- 1. Loss, 9%
 - 2. Loss, 8%
 - 3. Profit, 8 %
 - 4. Profit, 9%

Question ID : 65497839065
Status : Answered
Chosen Option : 4

Q.2 Find the smallest number which should be added to 3029 to get a number divisible by 18.

- Ans
- 1. 13
 - 2. 9
 - 3. 4
 - 4. 22

Question ID : 65497838748
Status : Answered
Chosen Option : 1

Q.3 A certain sum amounts to ₹15,179 in $8\frac{1}{2}$ years at 9% p.a. simple interest. What will be the simple interest (in ₹) on the same sum in $5\frac{1}{2}$ years at the same rate of interest?

- Ans
- 1. 4,158
 - 2. 4,257
 - 3. 4,356
 - 4. 4,455

Question ID : 65497838763
Status : Answered
Chosen Option : 2

Q.4 If the 8-digit number 63k4021p is divisible by 72, then find the value of $(5k - 3p)$.

- Ans**
- 1. 7
 - 2. -2
 - 3. 2
 - 4. -7

Question ID : 65497839259
 Status : Answered
 Chosen Option : 1

Q.5 If $\frac{x}{y} + \frac{y}{x} = 1$, and $x, y \neq 0$, then find the value of $x^6 + y^6 + 2x^3y^3$.

- Ans**
- 1. 0
 - 2. 1
 - 3. x^3y^3
 - 4. $3x^3y^3$

Question ID : 65497838058
 Status : Answered
 Chosen Option : 1

Q.6 A can do a work in 8 days and B can do the same work in 12 days. If they work on it for 3 days, then what fraction of the work is left?

- Ans**
- 1. $\frac{19}{24}$
 - 2. $\frac{5}{8}$
 - 3. $\frac{17}{20}$
 - 4. $\frac{3}{8}$

Question ID : 65497838052
 Status : Answered
 Chosen Option : 4

Q.7 In an examination, Shilpa scored 72.5% marks. Her friend who scored 78% marks has 88 marks more than her. Find the maximum marks of the examination.

- Ans**
- 1. 1500
 - 2. 1600
 - 3. 1800
 - 4. 1450

Question ID : 65497838654
 Status : Answered
 Chosen Option : 2

Q.8 A shopkeeper sells an item for ₹462 after offering a discount of 25% on its list price. Had he not offered any discount he would have earned a profit of 10%. What is the cost price (in ₹) of the article?

- Ans**
- 1. 580
 - 2. 540
 - 3. 550
 - 4. 560

Question ID : 65497838652
Status : Answered
Chosen Option : 4

Q.9 Find the value of $22.2 \times 22.2 + 124.32 + 2.8 \times 2.8$.

- Ans**
- 1. 48
 - 2. 25
 - 3. 550
 - 4. 625

Question ID : 65497839281
Status : Answered
Chosen Option : 4

Q.10 What is the value of p if the average of the following numbers is 14?

27, 32, 14, 0, p, 10, 15

- Ans**
- 1. 1
 - 2. 0
 - 3. 7
 - 4. 5

Question ID : 65497839057
Status : Answered
Chosen Option : 2

Q.11 The amount of a certain sum at simple interest at 8% per annum in $7\frac{1}{2}$ years is ₹3,000 less than twice the sum. The sum (in ₹) is:

- Ans**
- 1. 6,500
 - 2. 7,500
 - 3. 7,000
 - 4. 7,200

Question ID : 65497838662
Status : Not Answered
Chosen Option : --

Q.12 The ratio of boys and girls in the class is 4 : 3. If 5 more boys join the class and 3 girls leave the class, then the ratio of boys and girls becomes 11 : 6. What is the number of girls in the class now?

- Ans**
- 1. 18
 - 2. 24
 - 3. 27
 - 4. 21

Question ID : 65497838660
Status : Answered
Chosen Option : 1

Q.13 Two trains A and B start at uniform speeds, simultaneously from two stations P and Q, respectively, towards each other. After crossing each other, A takes 20 hours to reach Q and B takes 5 hours to reach P. If train A is moving at a speed of 55 km/h, the speed of B (in km/h) is:

- Ans**
- 1. 112
 - 2. 100
 - 3. 110
 - 4. 105

Question ID : 65497839279
Status : Answered
Chosen Option : 3

Q.14 The amount of a certain sum at simple interest at 12.5% p.a. in 5 years is ₹1,725 more than the simple interest on the same sum at the same rate in 10 years. The sum (in ₹) is:

- Ans**
- 1. 4,600
 - 2. 5,200
 - 3. 4,800
 - 4. 4,500

Question ID : 65497838764
Status : Not Answered
Chosen Option : --

Q.15 A shopkeeper offers successive discounts of 18% and 15% and sells the item for ₹34,850. What is its marked price (in ₹)?

- Ans**
- 1. 47,500
 - 2. 50,000
 - 3. 46,350
 - 4. 51,500

Question ID : 65497838039
Status : Answered
Chosen Option : 2

Q.16 Find the value of $(16.4\% \text{ of } 1095) - (3.5\% \text{ of } 324)$.

- Ans
- 1. 169.75
 - 2. 165.2
 - 3. 166.5
 - 4. 168.24

Question ID : 65497838756
Status : Answered
Chosen Option : 4

Q.17 If the selling price of 30 articles is equal to the cost price of 45 articles, the loss or gain per cent is:

- Ans
- 1. 25% gain
 - 2. 50% gain
 - 3. 40% loss
 - 4. 30% loss

Question ID : 65497838350
Status : Answered
Chosen Option : 2

Q.18 A field is in the shape of a rhombus. Its perimeter is 584 m and the length of one of its diagonal is 220 m. What is the area (in m^2) of the field?

- Ans
- 1. 21,450
 - 2. 20,900
 - 3. 21,120
 - 4. 21,010

Question ID : 65497838668
Status : Not Answered
Chosen Option : --

Q.19 A number is first increased by 35% and then again increased by 25%. The number, so obtained, is decreased by 40%. The net increase or decrease per cent in the number is:

- Ans
- 1. increase by 20%
 - 2. decrease by 1.25%
 - 3. decrease by 12.5%
 - 4. increase by 1.25%

Question ID : 65497838755
Status : Answered
Chosen Option : 4

Q.20 Out of 32 numbers, the average of the first 16 numbers is 54 and the average of the last 15 numbers is 57. If the 17th number is excluded, what will be the average of the remaining numbers (correct to one decimal place)?

- Ans**
- 1. 57.9
 - 2. 58.7
 - 3. 55.5
 - 4. 54.6

Question ID : 65497838342
Status : Not Answered
Chosen Option : --

Q.21 A man covers a certain distance at the speed of x km/h and returns to the starting point at 56 km/h. If his average speed for the whole journey is 63 km/h, then what is the value of x ?

- Ans**
- 1. 75
 - 2. 72
 - 3. 80
 - 4. 70

Question ID : 65497838768
Status : Answered
Chosen Option : 2

Q.22 25 women can do one-third of a work in 6 days. How many women should be employed so that the work is completed in 5 days?

- Ans**
- 1. 90
 - 2. 50
 - 3. 30
 - 4. 60

Question ID : 65497838665
Status : Answered
Chosen Option : 1

Q.23 The average height of a group of 16 students was 164 cm. Four students of height 153 cm, 158 cm, 166 cm and 145 cm left the group. Nine new students of average height 167 cm joined the remaining group. What is the new average (in cm, to the nearest whole number) of the students in the group?

- Ans**
- 1. 167
 - 2. 166
 - 3. 164
 - 4. 170

Question ID : 65497839262
Status : Not Answered
Chosen Option : --

Q.24 What is the fourth proportional to 0.6, 0.12, 0.04?

- Ans
- 1. 0.1
 - 2. 0.08
 - 3. 0.008
 - 4. 0.68

Question ID : 65497838047
Status : Answered
Chosen Option : 3

Q.25 A vendor sells a refrigerator for a sum of money which is $\frac{18}{25}$ of its cost price. What is his loss or profit percentage?

- Ans
- 1. Loss, 28%
 - 2. Profit, 25%
 - 3. Profit, 28%
 - 4. Loss, 25%

Question ID : 65497839270
Status : Answered
Chosen Option : 1

Section : General awareness

Q.1 The square root of the dimension of energy divided by mass is the same as that of:

- Ans
- 1. acceleration
 - 2. time
 - 3. velocity
 - 4. displacement

Question ID : 65497839290
Status : Answered
Chosen Option : 1

Q.2 The Rigvedic name of river Chenab was:

- Ans
- 1. Askini
 - 2. Sindhu
 - 3. Parushni
 - 4. Vitasta

Question ID : 65497838683
Status : Answered
Chosen Option : 1

Q.3 Suppose you earn ₹100 on the first day of every month and run down this balance evenly over the rest of the month, then your cash balances (in ₹) at the beginning and the end of the month are:

- Ans
- 1. 50 and 0
 - 2. 100 and 0
 - 3. 0 and 100
 - 4. 50 and 50

Question ID : 65497839285
Status : Marked For Review
Chosen Option : 2

Q.4 Crayfish and ticks are classified into _____, respectively.

- Ans 1. Crustacean and Arachnida
 2. Arachnida and Myriapoda
 3. Crustacean and Insecta
 4. Myriapoda and Insecta

Question ID : 65497838677
Status : Not Answered
Chosen Option : --

Q.5 Natural earthquakes mostly take place in the _____.

- Ans 1. Hydrosphere
 2. Lithosphere
 3. Ionosphere
 4. Troposphere

Question ID : 65497838781
Status : Answered
Chosen Option : 2

Q.6 Which of the following is one of the largest freshwater lakes in Assam and the State's only Ramsar site besides being an Important Bird Area?

- Ans 1. Umiam lake
 2. Loktak lake
 3. Ward's lake
 4. Deepor Beel or Dipor Bil

Question ID : 65497838068
Status : Answered
Chosen Option : 4

Q.7 The Kandariya Mahadeva temple, dedicated to Shiva, was constructed in 999 CE by the king Dhangadeva of the _____ dynasty.

- Ans 1. Western Ganga
 2. Chandela
 3. Chola
 4. Eastern Ganga

Question ID : 65497838786
Status : Answered
Chosen Option : 2

Q.8 An outdoor Polo team comprises of _____ players.

- Ans 1. 9
 2. 8
 3. 4
 4. 13

Question ID : 65497838078
Status : Answered
Chosen Option : 3

Q.9 The distance reached by the javelin in the gold medal winning throw by Neeraj Chopra at the Olympic games held in Tokyo in 2021 lay between _____.

- Ans
- 1. 86.5 m and 87.0 m
 - 2. 87.5 m and 88.0 m
 - 3. 86.0 m and 86.5 m
 - 4. 87.0 m and 87.5 m

Question ID : 65497839098
Status : Answered
Chosen Option : 2

Q.10 In the context of Buddhism, 'Mahayana' meant the:

- Ans
- 1. great sacrifice
 - 2. great war
 - 3. great vehicle
 - 4. great victory

Question ID : 65497839294
Status : Answered
Chosen Option : 1

Q.11 Of which political party is a coconut the reserved symbol?

- Ans
- 1. Naga People's Front
 - 2. Telegu Desam
 - 3. All India Forward Bloc
 - 4. Goa Forward Party

Question ID : 65497838689
Status : Not Answered
Chosen Option : --

Q.12 Who among the following delivered the inaugural address of the Shikshak Parv, via video conferencing, on 7th September 2021?

- Ans
- 1. Dharmendra Pradhan
 - 2. Narendra Modi
 - 3. CNR Rao
 - 4. Amartya Sen

Question ID : 65497839307
Status : Not Answered
Chosen Option : --

Q.13 A PAN card issued by the Income Tax Department of India bears an alphanumeric code of how many characters?

- Ans
- 1. 12
 - 2. 9
 - 3. 10
 - 4. 8

Question ID : 65497838776
Status : Not Answered
Chosen Option : --

Q.14 Which of the following monuments is NOT located in Fatehpur-Sikri?

- Ans
- 1. Jodha Bai's Palace
 - 2. Panchmahal
 - 3. Garib Nawaz Dargah
 - 4. Buland Darwaza

Question ID : 65497838774
Status : Answered
Chosen Option : 1

Q.15 During the process of respiration in plants, which of the following is NOT released as a product?

- Ans
- 1. Carbon dioxide
 - 2. Energy
 - 3. Oxygen
 - 4. Water

Question ID : 65497838778
Status : Answered
Chosen Option : 3

Q.16 Which of the following institutions collaborated with Bank of America for Centre for Digital Transformation in 2021?

- Ans
- 1. IIM Delhi
 - 2. IIM Lucknow
 - 3. IIM Ahmedabad
 - 4. IIM Indore

Question ID : 65497838063
Status : Not Answered
Chosen Option : --

Q.17 In which city is the Rabindranath Tagore Beach located?

- Ans
- 1. Mumbai
 - 2. Tuticorin
 - 3. Karwar
 - 4. Paradeep

Question ID : 65497838681
Status : Answered
Chosen Option : 4

Q.18 Who among the following was appointed as the Governor of Uttarakhand in September 2021?

- Ans
- 1. RN Ravi
 - 2. Jagdish Mukhi
 - 3. Baby Rani Maurya
 - 4. Gurmit Singh

Question ID : 65497838082
Status : Answered
Chosen Option : 4

Q.19 Who among the following is the author of 'India grows at night'?

- Ans
- 1. Shashi Tharoor
 - 2. P V Narasimha Rao
 - 3. Jawaharlal Nehru
 - 4. Gurcharan Das

Question ID : 65497839299
Status : Not Answered
Chosen Option : --

Q.20 In which of the following places is the High Court of Chhattisgarh situated?

- Ans
- 1. Bilaspur
 - 2. Raigarh
 - 3. Bhilai
 - 4. Raipur

Question ID : 65497838790
Status : Answered
Chosen Option : 4

Q.21 Which among the following ministers has chaired the First General Council Meeting of the Khelo India Scheme?

- Ans
- 1. Union Sports Minister
 - 2. Union Defence Minister
 - 3. Union Education Minister
 - 4. Union Commerce Minister

Question ID : 65497839304
Status : Answered
Chosen Option : 1

Q.22 Srikalahasti Temple is located in the state of:

- Ans
- 1. Andhra Pradesh
 - 2. Karnataka
 - 3. Telangana
 - 4. Tamil Nadu

Question ID : 65497838671
Status : Not Answered
Chosen Option : --

Q.23 To improve cultivation in Doab, Muhammad bin Tughlaq set up a separate agriculture department known as:

- Ans
- 1. Diwan-i-Istiaq
 - 2. Diwan-i-Amir-Kohi
 - 3. Diwan-i-Mustakhraj
 - 4. Diwan-i-Arz

Question ID : 65497838073
Status : Answered
Chosen Option : 3

Q.24 Which of the following political parties won the most votes after the TMC (Trinamool Congress) in the West Bengal Assembly Polls were held during March–April 2021?

- Ans
- 1. INC
 - 2. BJP
 - 3. CPM
 - 4. CPI

Question ID : 65497838693
Status : Answered
Chosen Option : 2

Q.25 Who among the following was appointed as the first brand ambassador of Cashify in August 2021?

- Ans
- 1. Rajkumar Rao
 - 2. Akshay Kumar
 - 3. Salman Khan
 - 4. Sonu Sood

Question ID : 65497838074
Status : Answered
Chosen Option : 1