














Practice, Learn and Achieve  
Your Goal with Prepp

# SBI SO Exam

Previous Paper

Simplifying  
Government Exams

 SSC CHSL	 IAS EXAM	 RRB NTPC	 NTSE	 CDS
 SSC CGL	 CBSE UGC NET	 IBPS PO	 NDA	
 SBI PO	 IBPS CLERK	 AFCAT	 SSC JE	 CTET
 CSIR UGC NET	 CAPF	 IBPS RRB		

## Clocks & Time: 8 Important Shortcuts Explained

We need to get couple of basic facts clear:

\* Speed of the hour hand = 0.5 degrees per minute (dpm) {The hour hand completes a full circle or 360 degrees in 12 hours or 720 minutes}

\* Speed of the minute hand = 6 dpm {The minute hand completes a full circle in 60 minutes}

\* At 'n' o' clock, the angle of the hour hand from the vertical is  $30n$

**Clock problems can be broadly classified in two categories:**

- Problems on angles
- Problems on incorrect clocks
- Problems on angles

Finding the angle between the hands category clock problems major questions which is quite time taking and difficult to solve.

**Some easy tricks to solve**

**Trick-1:**

The time is X h : Y min.so, the angle between hour and minute hand is given by

Angle between X and Y

$$= |(X*30) - ((Y*11)/2)| \text{ or}$$

$$30 * [HRS - (MIN/5)] + (MIN/2)$$

Ex : Angle between hands at 5:30 ?

- a. 15    b. 20    c. 25    d. 30

Sol : Angle between 5 and 30 =  $|(5*30) - ((30*11)/2)|$

$$= |150 - 165|$$

$$= 15 \text{ degrees}$$

Thus, angle between hands at 5:30 is 15 degrees.

**Trick-2:**

Right angles at each other by hands of clock between one hour is given by

$$= | (5x \pm 15) * (12/11) |$$

Ex : At what time do the hands of a clock between 7:00 and 8:00 form 90 degrees?

Sol: there is two possibles

Case-1:

$$= (5*7 - 15) * (12/11)$$

$$= 240/11$$

$$= 21 \text{ minutes } 9/11 \text{ of a minute}$$

Case-2:

$$= (5*7 + 15) * (12/11)$$

$$= 600/11$$

$$= 54 \text{ minutes } 6/11 \text{ of a minute}$$

So, the hands of the clock are at 90 degrees at the following timings:

$$7 : 21 : 9/11 \text{ and } 7 : 54 : 6/11$$

### Trick-3:

For coinciding the hands between one hour is

$$= (5x) * (12/11)$$

Ex: At what time do the hands of the clock meet between 7:00 and 8:00 ?

Sol:  $= (60*7)/11$

$$= 420/11$$

$$= 38 \text{ minutes } 2/11 \text{ minute}$$

Hands of the clock meet at

$$7 : 38 : 2/11$$

Opposite Direction ,  $(5x - 30) * (12/11)$

### Trick-4:

**Opposite to each other by hands of clock between one hour is given by**

$$= | (5x - 30) * (12/11) |$$

Ex : At what time do the hands of a clock between 7:00 and 8:00 form 180 degrees?

Sol:

$$= | (5*7 - 30) * (12/11) |$$

$$= 60/11$$

$$= 5 \text{ minutes } 5/11 \text{ of a minute}$$

### Trick-5

**Some other results which might be useful:**

· Hands of a clock meet at a gap of  $65 \frac{5}{11}$  minutes.

The meetings take place at 12:00:00, 1:05:5/11, 2:10:10/11 ... and so on.

· A clock makes two right angles between 2 hours. The clock does not make 48 right angles in 24 hours (1 day)

· Hands of a clock meet 11 times in 12 hours and 22 times in a day.

· Hands of a clock are perfectly opposite to each other (i.e. 180 degrees) 11 times in 12 hours and 22 times a day. {Same as above}

· Any other angle is made 22 times in 12 hours and 44 times in a day

### Number of right angles

Note: Between 2 -4 and 8-10 there are 3 right angles and not 4. The first right angle between 3 - 4 (9-10) and second right angle bw:

2-3(8-9) are the same.

Problems on incorrect clocks

Such sort of problems arise when a clock runs faster or slower than expected pace. When solving these problems it is best to keep track of the correct clock.

#### Type-1:

Ex: A watch gains 5 seconds in 3 minutes and was set right at 8 AM. What time will it show at 10 PM on the same day?

Ans: The watch gains 5 seconds in 3 minutes  $\Rightarrow$  100 seconds in 1 hour.

From 8 AM to 10 PM on the same day, time passed is 14 hours.

In 14 hours, the watch would have gained 1400 seconds or 23 minutes 20 seconds.

So, when the correct time is 10 PM, the watch would show 10 : 23 : 20 PM

#### Type-2:

Ex: A watch gains 5 seconds in 3 minutes and was set right at 8 AM. If it shows 5:15 in the afternoon on the same day, what is the correct time?

Sol: The watch gains 5 seconds in 3 minutes  $\Rightarrow$  1 minute in 36 minutes

From 8 AM to 5:15, the incorrect watch has moved 9 hours and 15 minutes = 555 minutes.

When the incorrect watch moves for 37 minutes, correct watch moves for 36 minutes.

$\Rightarrow$  When the incorrect watch moves for 1 minute, correct watch moves for  $36/37$  minutes

$\Rightarrow$  When the incorrect watch moves for 555 minutes, correct watch moves for  $(36/37)*555 = 36*15$  minutes = 9 hours

$\Rightarrow$  9 hours from 8 AM is 5 PM.

$\Rightarrow$  The correct time is 5 PM.

Note: I am sure you would have heard the proverb that even a broken clock is right twice a day. However, a clock which gains or loses a few minutes might not be right twice a day or even once a day. It would be right when it had gained / lost exactly 12 hours.

#### Type-3:

Ex: A watch loses 5 minutes every hour and was set right at 8 AM on a Monday. When will it show the correct time again?

Ans: For the watch to show the correct time again, it should lose 12 hours.  
It loses 5 minutes in 1 hour  
=> It loses 1 minute in 12 minutes  
=> It will lose 12 hours (or 720 minutes) in  $720 \times 12$  minutes = 144 hours = 6 days  
=> It will show the correct time again at 8 AM on Sunday.

Prepp

$$= y \cdot (t_2 - t_1) / (t_2 + t_1)$$

Ex : Ramesh can row a certain distance downstream in 6 hours and returns the same distance in 9 hours. If the speed of Ramesh in still water is 12 kmph. Find the speed of the stream?

- a. 2.4   b. 10   c. 1.2   d. 20

Sol : Speed of the stream =  
 $12 (9-6) / (9+6)$   
= 2.4 kmph

**Trick-3:**

**A man can row in still water at x km/h. In a stream flowing at y km/h, if it takes him 't' hours to row to a place and come back, then the distance between two places is given by**

$$= [ t \cdot (x^2 - y^2) ] / (2 \cdot x)$$

Ex: A man can row in still water at 4 km/h. In a stream flowing at 2 km/h, if it takes him '5' hours to row to a place and come back, then the distance between two places ?

- a. 15   b. 10   c. 12   d. 7.5

Sol :  $[5 \cdot (16-4)] / (2 \cdot 4) = 7.5$  km

**Trick-4:**

**A man can row in still water at x km/h. In a stream flowing at y km/h, if it takes t hours more in upstream than to go downstream for the same distance, then the distance is given by**

$$= [ t \cdot (x^2 - y^2) ] / (2 \cdot y)$$

Ex: A man can row in still water at 4 km/h. In a stream flowing at 2 km/h, if it takes 3 hours more in upstream than to go downstream for the same distance, then the distance swims by person ?

- a. 15   b. 9   c. 12   d. 7.5

Sol :  $[3 \cdot (16-4)] / (2 \cdot 2) = 9$  km

**Trick-5:**

**A man can row in still water at x km/h. In a stream flowing at y km/h, if he rows the same distance up and down the stream, then his average speed is given by**

$$= (x^2 - y^2) / x$$

= (Downstream \* Upstream) / man speed in still water.

Ex: A man can row in still water at 4 km/h. In a stream flowing at 2 km/h, if he rows the same distance up and down the stream, then his average speed ?

a. 6 b. 9 c. 3 d. 7.5

Sol :  $(16-4)/4 = 3$  km/hr

**Trick-6:**

**A man can row a distance 'D' upstream in t1 hrs. If he rows the same distance down the stream in t2 hrs. then speed is given by**

**Stream speed =  $[D*(t1-t2)]/(2*t1*t2)$**

Ex: A man can row a distance 30 km upstream in 5 hrs. If he rows the same distance down the stream in 3 hrs. then speed of stream ?

a..8 b. 4 c. 2 d. 6

Sol :  $[30*(5-3)]/(2*5*3) = 2$  km/hr

**Trick-7:**

**A man can row a distance 'D' upstream in t1 hrs. If he rows the same distance down the stream in t2 hrs. then speed is given by**

**Man speed =  $[D*(t1+t2)]/(2*t1*t2)$**

Ex: A man can row a distance 30 km upstream in 5 hrs. If he rows the same distance down the stream in 3 hrs. then speed of man ?

a. 8 b. 4 c. 2 d. 6

Sol :  $[30*(5+3)]/(2*5*3) = 8$  km/hr

## Boats and Streams: 8 Important Shortcuts & Tricks Explained with Examples

Stream: Moving water of the river is called stream.

Still Water: If the water is not moving then it is called still water.

Upstream: If a boat or a swimmer moves in the opposite direction of the stream then it is called upstream.

Downstream: If a boat or a swimmer moves in the same direction of the stream then it is called downstream.

### Points to remember

i. When speed of boat or a swimmer is given then it normally means speed in still water.

ii. If speed of boat or swimmer is  $x$  km/h and the speed of stream is  $y$  km/h then,

Speed of boat or swimmer upstream =  $(x - y)$  km/h

Speed of boat or swimmer downstream =  $(x + y)$  km/h

iii. Speed of boat or swimmer in still water is given by  
 $= \frac{1}{2}(\text{Downstream} + \text{Upstream})$

Speed of stream is given by

$= \frac{1}{2}(\text{Downstream} - \text{Upstream})$

### Some Shortcut Methods

#### Trick-1:

A man can row certain distance downstream in  $t_1$  hours and returns the same distance upstream in  $t_2$  hours. If the speed of stream is  $y$  km/h, then the speed of man in still water is given by

$$= \frac{y \cdot (t_2 + t_1)}{t_2 - t_1}$$

Ex: A man can row certain distance downstream in 2 hours and returns the same distance upstream in 4 hours. If the speed of stream is 5 km/h, then the speed of man in still water ?

a. 15   b. 10   c. 12   d. 20

Sol:  $= \frac{5 \cdot (4+2)}{4-2} = 15$  km/hr

#### Trick-2:

A man can row certain distance downstream in  $t_1$  hours and returns the same distance upstream in  $t_2$  hours. If the speed of stream is  $y$  km/h, then the speed of man in still water is given by





# Latest Sarkari jobs, Govt Exam alerts, Results and Vacancies

- ▶ Latest News and Notification
- ▶ Exam Paper Analysis
- ▶ Topic-wise weightage
- ▶ Previous Year Papers with Answer Key
- ▶ Preparation Strategy & Subject-wise Books

To know more [Click Here](#)



[www.prepp.in](http://www.prepp.in)