

Combined Higher Secondary Level Examination 2019 Tier I

Roll Number	8601050472
Candidate Name	DONDAPATI SANDEEP
Venue Name	iON Digital Zone IDZ Karmanghat
Exam Date	12/10/2020
Exam Time	10:00 AM - 11:00 AM
Subject	CHSL Tier 1

Section : English Language (Basic Knowledge)

Q.1 Select the most appropriate synonym of the given word.

ASSERTION

- Ans 1. Discussion
 2. Rejection
 3. Declaration
 4. Continuation

Question ID : 424429427

Status : Not Answered

Chosen Option : --

Q.2 Select the wrongly spelt word.

- Ans 1. Awfully
 2. Unduly
 3. Unruly
 4. Faithfully

Question ID : 424429408

Status : Answered

Chosen Option : 4

Q.3 Select the correct passive form of the given sentence.

The police beat a number of protestors last night.

- Ans 1. A number of protestors had been beaten by the police last night.
 2. A number of protestors were being beaten by the police last night.
 3. A number of protestors has been beaten by the police the night before.
 4. A number of protestors were beaten by the police the night before.

Question ID : 424429415

Status : Answered

Chosen Option : 1

Q.4 Select the most appropriate meaning of the given idiom.

Up in arms

- Ans 1. Angry about something
 2. Give up fighting and surrender
 3. Divide into armed groups
 4. Throw up arms in joy

Question ID : 424429422

Status : Not Answered

Chosen Option : --

Comprehension:

In the following passage some words have been deleted. Fill in the blanks with the help of the alternatives given. Select the most appropriate option for each blank.

Smartphones have become an essential part of our lives and their (1)___usage is now impacting human behaviour. We need to (2)___think about digital detox! Yes, the concept of disconnecting with (3)___virtual world is not just a fad. It's the need of the hour today. The Global Brand Director of the smartphone Vivo in his speech nudged all smartphone users (4)___a step backward and think. He said, "Let's (5)___our mobiles and pledge to be closer and nearer to our loved ones."

SubQuestion No : 5

Q.5 Select the most appropriate option for blank number 1.

- Ans 1. exceeding
 2. excessive
 3. exceed
 4. exceedingly

Question ID : 424429410

Status : Answered

Chosen Option : 2

Comprehension:

In the following passage some words have been deleted. Fill in the blanks with the help of the alternatives given. Select the most appropriate option for each blank.

Smartphones have become an essential part of our lives and their (1)___usage is now impacting human behaviour. We need to (2)___think about digital detox! Yes, the concept of disconnecting with (3)___virtual world is not just a fad. It's the need of the hour today. The Global Brand Director of the smartphone Vivo in his speech nudged all smartphone users (4)___a step backward and think. He said, "Let's (5)___our mobiles and pledge to be closer and nearer to our loved ones."

SubQuestion No : 6

Q.6 Select the most appropriate option for blank number 2.

- Ans 1. serious
 2. seriousness
 3. series
 4. seriously

Question ID : 424429411

Status : Answered

Chosen Option : 4

Comprehension:

In the following passage some words have been deleted. Fill in the blanks with the help of the alternatives given. Select the most appropriate option for each blank.

Smartphones have become an essential part of our lives and their (1)___usage is now impacting human behaviour. We need to (2)___think about digital detox! Yes, the concept of disconnecting with (3)___virtual world is not just a fad. It's the need of the hour today. The Global Brand Director of the smartphone Vivo in his speech nudged all smartphone users (4)_____a step backward and think. He said, "Let's (5)___our mobiles and pledge to be closer and nearer to our loved ones."

SubQuestion No : 7

Q.7 Select the most appropriate option for blank number 3.

- Ans
- 1. many
 - 2. the
 - 3. any
 - 4. a

Question ID : 424429412

Status : Answered

Chosen Option : 2

Comprehension:

In the following passage some words have been deleted. Fill in the blanks with the help of the alternatives given. Select the most appropriate option for each blank.

Smartphones have become an essential part of our lives and their (1)___usage is now impacting human behaviour. We need to (2)___think about digital detox! Yes, the concept of disconnecting with (3)___virtual world is not just a fad. It's the need of the hour today. The Global Brand Director of the smartphone Vivo in his speech nudged all smartphone users (4)_____a step backward and think. He said, "Let's (5)___our mobiles and pledge to be closer and nearer to our loved ones."

SubQuestion No : 8

Q.8 Select the most appropriate option for blank number 4.

- Ans
- 1. to taking
 - 2. takes
 - 3. to take
 - 4. taken

Question ID : 424429413

Status : Answered

Chosen Option : 3

Comprehension:

In the following passage some words have been deleted. Fill in the blanks with the help of the alternatives given. Select the most appropriate option for each blank.

Smartphones have become an essential part of our lives and their (1)___usage is now impacting human behaviour. We need to (2)___think about digital detox! Yes, the concept of disconnecting with (3)___virtual world is not just a fad. It's the need of the hour today. The Global Brand Director of the smartphone Vivo in his speech nudged all smartphone users (4)_____a step backward and think. He said, "Let's (5)___our mobiles and pledge to be closer and nearer to our loved ones."

SubQuestion No : 9

Q.9 Select the most appropriate option for blank number 5.

- Ans
- 1. switch in
 - 2. switch over
 - 3. switch up
 - 4. switch off

Question ID : 424429414

Status : Answered

Chosen Option : 4

Q.10 Select the most appropriate synonym of the given word.

GUILE

- Ans
- 1. Intuition
 - 2. Surfeit
 - 3. Sincerity
 - 4. Deceit

Question ID : 424429428

Status : Not Answered

Chosen Option : --

Q.11 Select the most appropriate option to substitute the underlined segment in the given sentence. If there is no need to substitute it, select 'No improvement'.

Lenovo has launched ThinkPad XI Fold, the world's first foldable laptop which is claimed to be so durable as its other devices.

- Ans
- 1. to be most durable as
 - 2. No improvement
 - 3. to be very durable as
 - 4. to be as durable as

Question ID : 424429420

Status : Answered

Chosen Option : 4

Q.12 Select the most appropriate word to fill in the blank in the given sentence.

If the video clip of the murder had not been shared on social media, the world would likely have remained _____ of the tragedy.

- Ans
- 1. recognised
 - 2. unconfirmed
 - 3. unaware
 - 4. renowned

Question ID : 424429429
Status : Answered
Chosen Option : 3

Q.13 Select the most appropriate ANTONYM of the given word.

DEMOLISH

- Ans
- 1. Cherish
 - 2. Abolish
 - 3. Construct
 - 4. Obstruct

Question ID : 424429406
Status : Answered
Chosen Option : 3

Q.14 Select the wrongly spelt word.

- Ans
- 1. Popularly
 - 2. Beggarly
 - 3. Sincearly
 - 4. Jocularly

Question ID : 424429424
Status : Answered
Chosen Option : 3

Q.15 Select the most appropriate meaning of the given idiom.

Stir up a hornet's nest

- Ans
- 1. Provoke trouble
 - 2. Lead a revolt
 - 3. Call for dialogue
 - 4. Destroy a nest

Question ID : 424429423
Status : Answered
Chosen Option : 1

Q.16 Select the correct indirect form of the given sentence.

“Do you attend the film festival at Goa every year?” he asked.

- Ans
- 1. He is asking me if I attended the film festival at Goa every year.
 - 2. He had asked me if I was attending the film festival at Goa every year.
 - 3. He asked me if I attended the film festival at Goa every year.
 - 4. He asks me if I attend the film festival at Goa every year.

Question ID : 424429416
Status : Answered
Chosen Option : 2

Q.17 Given below are four jumbled sentences. Select the option that gives their correct order.

- A. This test is conducted on the fully automated Driving Test Track designed by Maruti Suzuki.
- B. Each of these specific skills are to be tested and need to be completed successfully in under seven minutes by the candidate.
- C. It is a fully-automated track having six segments to test specific driving skills.
- D. The Regional Transport Offices of Delhi have recently introduced the new driving test.

- Ans
- 1. BADC
 - 2. ADBC
 - 3. DBAC
 - 4. DACB

Question ID : 424429405
Status : Answered
Chosen Option : 4

Q.18 Given below are four jumbled sentences. Select the option that gives their correct order.

- A. The most well-known among them is the Purple Frog needing immediate protection.
- B. The Secret Life of Frogs is the first ever film on the Amphibians of India.
- C. The film has been shot extensively in the Western Ghats.
- D. It showcases unique species of frogs which are critically endangered.

- Ans
- 1. BCDA
 - 2. CBDA
 - 3. DCBA
 - 4. BCAD

Question ID : 424429419
Status : Answered
Chosen Option : 1

Q.19 In the given sentence identify the segment which contains the grammatical error.

When I met Akbar Padamsee, one of a pioneers of Indian art, he was 87 but still alert and active.

- Ans
- 1. he was 87
 - 2. When I met
 - 3. but still alert and active
 - 4. one of a pioneers of Indian art

Question ID : 424429417
Status : Answered
Chosen Option : 4

Q.20 Select the word which means the same as the group of words given.

That which is no longer useful

- Ans
- 1. Redundant
 - 2. Dominant
 - 3. Abundant
 - 4. Reluctant

Question ID : 424429426
Status : Answered
Chosen Option : 3

Q.21 Select the most appropriate option to substitute the underlined segment in the given sentence. If there is no need to substitute it, select 'No improvement'.

It is reported that everyday India witnessing the death of over 2000 babies aged less than one year.

- Ans
- 1. India will be witness the death
 - 2. India witnesses the death
 - 3. No improvement
 - 4. India witness the death

Question ID : 424429421
Status : Answered
Chosen Option : 3

Q.22 In the given sentence identify the segment which contains the grammatical error.

Your skill lie in cheering up people who are stressed out, wound up or generally just annoyed.

- Ans
- 1. Your skill lie
 - 2. who are stressed out, wound up
 - 3. or generally just annoyed
 - 4. in cheering up people

Question ID : 424429418
Status : Answered
Chosen Option : 1

Q.23 Select the most appropriate ANTONYM of the given word.

SURVEILLANCE

- Ans 1. Attack
 2. Neglect
 3. Endurance
 4. Vigilance

Question ID : 424429407

Status : Answered

Chosen Option : 2

Q.24 Select the most appropriate word to fill in the blank in the given sentence.

Padamse worked like a mathematician and was a true _____ who experimented with numerous mediums.

- Ans 1. voluntary
 2. literary
 3. adversary
 4. visionary

Question ID : 424429430

Status : Answered

Chosen Option : 4

Q.25 Select the word which means the same as the group of words given.

Something that is genuine

- Ans 1. Unreal
 2. Academic
 3. Authentic
 4. Majestic

Question ID : 424429425

Status : Not Answered

Chosen Option : --

Section : General Intelligence

Q.1 Arrange the given words in a logical and meaningful sequence.

1. Flat
2. Street
3. Room
4. Apartment
5. Town

- Ans
- 1. 3, 4, 1, 2, 5
 - 2. 5, 4, 3, 2, 1
 - 3. 3, 5, 1, 4, 2
 - 4. 3, 1, 4, 2, 5

Question ID : 424429438
Status : Answered
Chosen Option : 4

Q.2 Four letter-clusters have been given out of which three are alike in some manner, while one is different. Choose the odd one.

- Ans
- 1. LNP
 - 2. DFH
 - 3. TVW
 - 4. FHJ

Question ID : 424429444
Status : Answered
Chosen Option : 3

Q.3 In a certain code language, N is coded as 30 and COT is coded as 78. How will PET be coded as in that language?

- Ans
- 1. 70
 - 2. 84
 - 3. 100
 - 4. 41

Question ID : 424429440
Status : Answered
Chosen Option : 2

Q.5 Read the given statements and conclusions carefully. Assuming that the information given in the statements is true, even if it appears to be at variance with commonly known facts, decide which of the given conclusions logically follow(s) from the statements.

Statements:

1. All beans are meat.
2. All breads are meat.

Conclusions:

- I. Some beans are breads.
- II. Some breads are beans.

- Ans**
1. Only conclusion I follows.
 2. Both conclusions I and II follow.
 3. Either conclusion I or II follows.
 4. Neither conclusion I nor II follows.

Question ID : 424429448
Status : Answered
Chosen Option : 3

Q.6 Select the option in which the numbers are related in the same way as are the numbers in the given set.

(3, 68, 5)

- Ans**
1. (2, 10, 1)
 2. (2, 72, 10)
 3. (5, 95, 8)
 4. (4, 64, 5)

Question ID : 424429435
Status : Answered
Chosen Option : 1

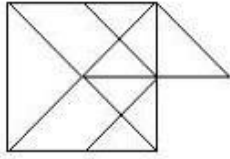
Q.7 John used to buy petrol at the rate of ₹80 per litre till last month. Now he buys it at the rate of ₹85 per litre. By what percentage did the petrol price increase as compared to last month?

- Ans**
1. 6.25%
 2. 5.5%
 3. 8.35%
 4. 10%

Question ID : 424429431
Status : Answered
Chosen Option : 1

How many triangles are there in the following figure?

Q.8



- Ans
- 1. 18
 - 2. 21
 - 3. 20
 - 4. 22

Question ID : 424429451

Status : Not Answered

Chosen Option : --

mpcareer.in

Q.10

Select the option that is related to the third letter-cluster in the same way as the second letter-cluster is related to the first letter-cluster.

- Ans 1. QTCV : ?
 2. HUMO
 3. PSBU
 4. RSDW

Question ID : 424429441
Status : Answered
Chosen Option : 1

Q.11

Select the combination of letters that when sequentially placed from left to right in the blanks of the given letter series will complete the series.

- Ans 1. cacccd -
 2. bacccd
 3. abdcdd
 4. bacacd

Question ID : 424429443
Status : Answered
Chosen Option : 2

Q.12

- Ans 1. Bird : Fly
 2. Goat : Bleat
 3. Hen : Egg
 4. Eagle : Swoop

Question ID : 424429445
Status : Answered
Chosen Option : 3

Q.13 Four letter-clusters have been given, out of which three are alike in some manner and one is different. Select the odd letter-cluster.

- Ans 1. EGVV
 2. TUGD
 3. NOML
 4. ADZW

Question ID : 424429446
Status : Answered
Chosen Option : 2

Q.14

Ans In a certain code language, 'BROWSE' is written as 'GUYQTD'. How will 'AMALGAM' be written as in that language?

- 2. PMDGCPD
- 3. CONCICO
- 4. DPMDGCP
- OCINCO

Question ID : 424429439

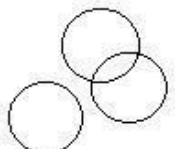



Status : Answered

Chosen Option : 4

Q.15

Select the Venn diagram that best represents the relationship between the following classes.

Ans Reptile, Mammal, Lizard

- 1. 
- 2. 
- 3. 
- 4. 

Question ID : 424429455

Status : Answered

Chosen Option : 3

Q.16

Select the option in which the numbers share the same relationship as that shared by the given number-pair.

- Ans 8 : 49
- 1. 9 : 87
 - 2. 12 : 121
 - 3. 13 : 170
 - 4. 15 : 210

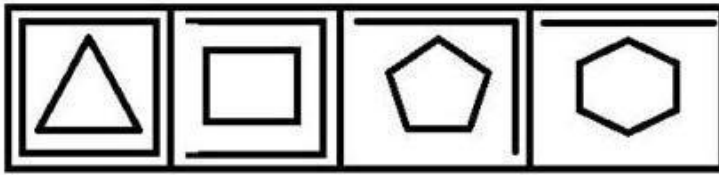
Question ID : 424429433

Status : Answered

Chosen Option : 2

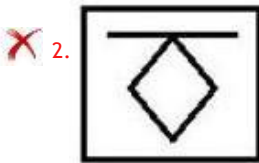
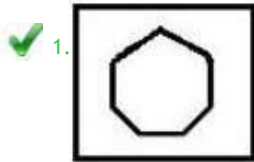
Q.17

Select the option figure that will come next in the following series.



Ans

1 2 3 4



Question ID : 424429450

Status : Answered

Chosen Option : 1

Q.18

Select the correct combination of mathematical signs to replace 'A' sequentially from left to right and balance the following equation.

- Ans
- ✗ 1. $\times, =, -, \div$
- ✗ 2. $\div, \times, =, -$
- ✗ 3. $\times, \div, +, =$
- ✓ 4. $\div, \times, =, \times$

Question ID : 424429432

Status : Answered

Chosen Option : 4

Q.19 Select the option that is related to the third word in the same way as the second word is related to the first word.

Work : Joule :: Area : ?

- Ans
- 1. Length
 - 2. Perimeter
 - 3. Radian
 - 4. Hectare

Question ID : 424429442
Status : Answered
Chosen Option : 4

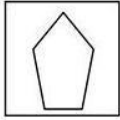
Q.20 Four numbers have been given, out of which three are alike in some manner and one is different. Select the number that is different from the rest.

- Ans
- 1. 268
 - 2. 124
 - 3. 212
 - 4. 255

Question ID : 424429437
Status : Not Answered
Chosen Option : --

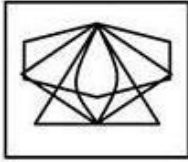
Q.21

Select the option in which the given figure is embedded. (Rotation of the figure is not allowed)



Ans

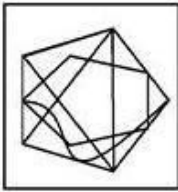
1.



2.



3.



4.

Question ID : 424429452

Status : Answered

Chosen Option : 4

Q.22 Four words have been given, out of which three are alike in some manner and one is different. Select the odd one.

Ans 1. Frisk

2. Chirp

3. Neigh

4. Bleat

Question ID : 424429447

Status : Not Answered

Chosen Option : --

Q.23 Select the option in which the numbers are related in the same way as are the numbers in the given set.

(7, 15, 31)

- Ans
- 1. (5, 625, 6)
 - 2. (2, 17, 14)
 - 3. (6, 13, 21)
 - 4. (3, 7, 15)

Question ID : 424429434
Status : Answered
Chosen Option : 4

Q.24 Disha's salary is ₹3,000 more than Pratima's salary. The ratio of Disha's to Pratima's salary is 17 : 15, respectively. What is the salary of Pratima?

- Ans
- 1. ₹27,250
 - 2. ₹22,500
 - 3. ₹26,750
 - 4. ₹25,500

Question ID : 424429436
Status : Answered
Chosen Option : 2

Section : Quantitative Aptitude(Basic Arithmetic Skill)

Q.1

Ans Ram sold a motorcycle for ₹70000 at 25% profit. For what price should he sell a motorcycle to gain 30% profit?

- 1. ₹72,900
- 2. ₹72,600
- 3. ₹72,800
- 4. ₹72,700

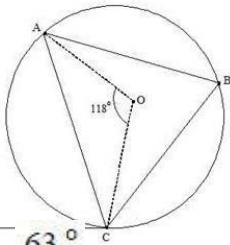
Question ID : 424429462

Status : Answered

Chosen Option : 3

Q.2

In the given figure, BC is a chord and CD is a tangent through the point C. If $\angle AOC = 118^\circ$, then find the $\angle ACD$.



- Ans
- 1. 63°
 - 2.
 - 3. 65°
 - 4. 59°
 - 5. 56°

Question ID : 424429466

Status : Not Answered

Chosen Option : --

Q3.

The average age of 25 men is 28 years. 5 new men of an average age of 25 years joined them. Find the average age of all the men together.

- Ans
- 1. 26.5 years
 - 2. 28.5 years
 - 3. 29.5 years
 - 4. 27.5 years

Question ID : 424429459

Status : Answered

Chosen Option : 4

Q.4 The least value of $8\operatorname{cosec}^2\theta + 25\sin^2\theta$ is:

- Ans
- 1. $10\sqrt{2}$
 - 2. $40\sqrt{2}$
 - 3. $20\sqrt{2}$
 - 4. $30\sqrt{2}$

Question ID : 424429475
Status : Not Answered
Chosen Option : --

Q.5 Richa travels from A to B at the speed of 15 km/h, from B to C at 20 km/h, and from C to D at 30 km/h. If $AB = BC = CD$, then find the Richa's average speed.

- Ans
- 1. 17 km/h
 - 2. 19 km/h
 - 3. 20 km/h
 - 4. 18 km/h

Question ID : 424429457
Status : Answered
Chosen Option : 3

Q.6 M is the circumcentre of triangle ABC with circumradius = 15 cm. Let $BC = 24$ cm and ML is perpendicular to BC. Then the Length of ML is

- Ans
- 1. 9 cm
 - 2. 10 cm
 - 3. 12 cm
 - 4. 8 cm

Question ID : 424429468
Status : Answered
Chosen Option : 1

Q.7 In $\triangle XYZ$, Y and Z are the mid-point of the sides AX and AX respectively, YZ is a point on the segment AX such that $LR : RM = 1 : 2$. If $LR = 3$ cm, then YZ is equal to:

- Ans
- 1. 19 cm
 - 2. 17 cm
 - 3. 18 cm
 - 4. 16 cm

Question ID : 424429467
Status : Answered
Chosen Option : 3

Q.8 The diagonal of rectangle is 15 cm and length is 12 cm. Find the area of the rectangle.

- Ans
- 1. 114 cm²
 - 2. 108 cm²
 - 3. 116 cm²
 - 4. 112 cm²

Question ID : 424429458
Status : Answered
Chosen Option : 2

Q.9

- Ans
- 1. 45
 - 2. 44
 - 3. 44.5
 - 4. 43.5

Question ID : 424429480
Status : Not Answered
Chosen Option : --

Q.10 If $a + b + c = 2$, $\frac{1}{a} + \frac{1}{b} + \frac{1}{c} = 0$, $ac = \frac{4}{b}$ and $a^3 + b^3 + c^3 = 28$, find the value of $a^2 + b^2 + c^2$.

- Ans
- 1. 8
 - 2. 6
 - 3. 10
 - 4. 12

Question ID : 424429471
Status : Not Answered
Chosen Option : --

Q.11 ₹6,300 is divided between X, Y, Z, such that $X : Y = 7 : 5$ and $Y : Z = 4 : 3$. Find the share of Y.

- Ans
- 1. ₹2,000
 - 2. ₹1,800
 - 3. ₹2,400
 - 4. ₹2,200

Question ID : 424429463

Status : Answered

Chosen Option : 1

Q.12 15 men can complete a task in 10 days. In how many days can 20 men complete the same task?

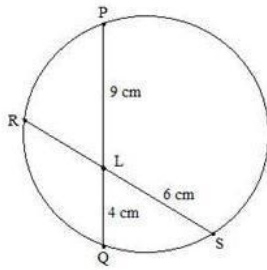
- Ans
- 1. 5.5 days
 - 2. 7.5 days
 - 3. 6.5 days
 - 4. 8.5 days

Question ID : 424429456

Status : Answered

Chosen Option : 2

Q.14 In the given figure, chords PQ and RS intersect each other at point L. Find the length of RL.



- Ans
- 1. 8 cm
 - 2. 2 cm
 - 3. 6 cm
 - 4. 3 cm

Question ID : 424429465
Status : Answered
Chosen Option : 3

Q.15 Kavita's attendance in her school for the academic session 2018-2019 was 216 days. On computing her attendance, it was observed that her attendance was 90%. The total working days of the school were:

- Ans
- 1. 250
 - 2. 240
 - 3. 194
 - 4. 195

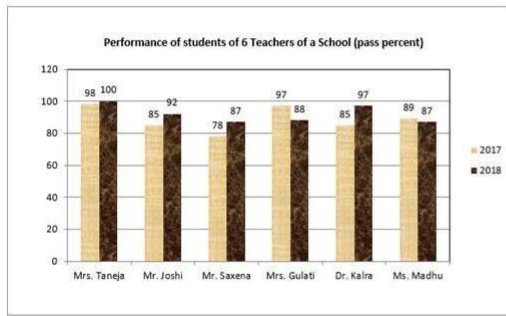
Question ID : 424429461
Status : Answered
Chosen Option : 2

Q.16 Which of the following options is completely divisible by 11

- Ans
- 1. 809781
 - 2. 963391
 - 3. 107611
 - 4. 116571

Question ID : 424429472
Status : Answered
Chosen Option : 2

Q.17 The given graph shows the pass percentage of students taught by six teachers of a school in the Senior Secondary Board exam.



Identify the teacher whose students have shown the maximum improvement.

- Ans
- 1. Mr. Joshi
 - 2. Dr. Kalra
 - 3. Mrs. Taneja
 - 4. Mr. Saxena

Question ID : 424429479
 Status : Not Answered
 Chosen Option : --

Q.18

- Ans
- 1. 3
 - 2. 5
 - 3. 4
 - 4. 2

Question ID : 424429473
 Status : Answered
 Chosen Option : 1

Q.19 If $\cos(x - y) = \frac{\sqrt{3}}{2}$ and $\sin(x + y) = \frac{1}{2}$, then the value of x ($0 < x < 90$) is:

- Ans
- 1. 45°
 - 2. 30°
 - 3. 15°
 - 4. 60°

Question ID : 424429476
 Status : Answered
 Chosen Option : 2

Q.20

If $\cot A = k$, then $\sin A$ is equal to:

Ans (presume that A is an acute angle)

1. $\frac{k^2}{\sqrt{1+k^2}}$

2. $\frac{1}{k}$

3. $-\frac{1}{k}$

4. $\frac{1}{\sqrt{1+k^2}}$

Question ID : 424429470

Status : Answered

Chosen Option : 4

Q.22

Ans If $\frac{\cos\theta + \sin\theta}{\cos\theta - \sin\theta} = 8$, then the value of $\cot\theta$ is equal to:

- 1. $\frac{7}{6}$
- 2. $\frac{9}{7}$
- 3. $\frac{6}{8}$
- 4. $\frac{8}{7}$

Question ID : 424429474

Status : Answered

Chosen Option : 2

Q.23

Ans List the price of a bike is 15% more than its cost price. It is sold at a discount of 20%. Find the dealer's loss or profit percentage.

- 1. Profit 8%
- 2. Profit 9%
- 3. Loss 9%
- 4. Loss 8%

Question ID : 424429460

Status : Answered

Chosen Option : 4

Q.25 In how many years shall ₹3,500 invested at the rate of 10% simple interest per annum, amount to ₹4,500?

Ans

- 1. $2\frac{4}{7}$ years
- 2. $2\frac{3}{7}$ years
- 3. $2\frac{6}{7}$ years
- 4. $2\frac{5}{7}$ years

Question ID : 424429464

Status : Answered

Chosen Option : 3



Q.1 How many times did Pankaj Advani win the 'IBSF World Billiards Championship'?

Ans

- 1. 22
- 2. 21
- 3. 24
- 4. 20

Question ID : 424429505

Status : Not Answered

Chosen Option : --

Q.2 In a computer, which unit is responsible for processing data and is also called the electronic brain of the computer?

Ans

- 1. Hard Disk
- 2. Central Processing Unit (CPU)
- 3. RAM
- 4. Keyboard

Question ID : 424429481

Status : Answered

Chosen Option : 2

Q.3 On which day is Constitution Day celebrated every year in India?

Ans

- 1. 2 October
- 2. 30 November
- 3. 15 October
- 4. 26 November

Question ID : 424429501

Status : Answered

Chosen Option : 4

Q.4 In which year were the 'Kalbelia' folk songs and dances of Rajasthan included in UNESCO's representative list of Intangible Cultural Heritage?

- Ans
- 1. 2010
 - 2. 2017
 - 3. 2012
 - 4. 2015

Question ID : 424429484
Status : Not Answered
Chosen Option : --

Q.5 Which article of the Constitution of India mentions that the Lok Sabha must have a Speaker and a Deputy Speaker?

- Ans
- 1. Article 93
 - 2. Article 85
 - 3. Article 97
 - 4. Article 100

Question ID : 424429502
Status : Not Answered
Chosen Option : --

Q.6 'Saga Dawa' is one of the biggest Buddhist festivals. In which one of the following states is it celebrated?

- Ans
- 1. Odisha
 - 2. Kerala
 - 3. Sikkim
 - 4. Jharkhand

Question ID : 424429483
Status : Not Answered
Chosen Option : --

Q.7 Which of the following is INCORRECTLY paired?

- Ans
- 1. Demography - Population geography
 - 2. Anthropology - Cultural geography
 - 3. Hydrology - Oceanography
 - 4. Pedology - Phyto geography

Question ID : 424429496
Status : Not Answered
Chosen Option : --

Q.8 Who introduced the 'Doctrine of Lapse'?

- Ans
- 1. Lord Lytton
 - 2. Lord Dalhousie
 - 3. Lord Wellesley
 - 4. Lord Canning

Question ID : 424429497

Status : Not Answered

Chosen Option : --

Q.9 Who founded the Indian Statistical Institute (ISI) in Calcutta?

- Ans
- 1. JM Sengupta
 - 2. Subhendu Sekhar Bose
 - 3. RN Mookerjee
 - 4. Prasanta Chandra Mahalanobis

Question ID : 424429488

Status : Not Answered

Chosen Option : --

Q.10 Which forest is also referred to as 'Monsoon Forests'?

- Ans
- 1. Montane Forests
 - 2. Tropical Deciduous Forests
 - 3. Tropical Evergreen Forests
 - 4. Mangrove Forests

Question ID : 424429494

Status : Not Answered

Chosen Option : --

Q.11 The Atrial wall of the human heart secretes a very important peptide hormone. What is the name of that hormone?

- Ans
- 1. ANF
 - 2. GIP
 - 3. CCK
 - 4. ADH

Question ID : 424429492

Status : Not Answered

Chosen Option : --

Q.12 In which process is a protective zinc coating applied on iron to prevent it from rusting?

- Ans 1. Galvanisation
 2. Annealing
 3. Smelting
 4. Welding

Question ID : 424429491
Status : Not Answered
Chosen Option : --

Q.13 Who became the first player in history to win the 'Sir Garfield Sobers Trophy' for 'ICC Cricketer of the Year'?

- Ans 1. Ravichandran Ashwin
 2. Mahendra Singh Dhoni
 3. Virat Kohli
 4. Sachin Tendulkar

Question ID : 424429504
Status : Not Answered
Chosen Option : --

Q.14 What disease is caused by insulin deficiency?

- Ans 1. Scleroderma
 2. Multiple Sclerosis
 3. Rheumatoid arthritis (RA)
 4. Diabetes mellitus

Question ID : 424429490
Status : Answered
Chosen Option : 4

Q.15 Which Indian actress was chosen for the '2020 Crystal Award' given by the World Economic Forum for spreading awareness about mental health?

- Ans 1. Deepika Padukone
 2. Priyanka Chopra
 3. Vidya Balan
 4. Kangana Ranaut

Question ID : 424429500
Status : Answered
Chosen Option : 1

Q.16 With which of the following sports is Bhamidipati Sai Praneeth associated?

- Ans
- 1. Cricket
 - 2. Badminton
 - 3. Hockey
 - 4. Tennis

Question ID : 424429503

Status : Answered

Chosen Option : 2

Q.17 Which of the following Bollywood veterans was chosen for the 66th Dadasaheb Phalke Award for 2018?

- Ans
- 1. Ashutosh Rana
 - 2. Shatrughan Sinha
 - 3. Nana Patekar
 - 4. Amitabh Bachchan

Question ID : 424429485

Status : Answered

Chosen Option : 4

Q.18 In the context of the mesosphere, which of the following statements is NOT correct?

- Ans
- 1. It is directly above the stratosphere.
 - 2. It is the third layer of the atmosphere.
 - 3. Meteorites burn up in this layer on entering from the space.
 - 4. In this layer temperature rises very rapidly with increasing height.

Question ID : 424429495

Status : Not Answered

Chosen Option : --

Q.19 Which of the following companies was chosen for the UN Global Climate Action Award in the 'Carbon Neutral Now' category in September 2019?

- Ans
- 1. Reliance Health
 - 2. Infosys
 - 3. Wipro
 - 4. Organic India

Question ID : 424429487

Status : Answered

Chosen Option : 2

Q.20 Which is the second largest river basin in India that covers 10% of the country's area?

- Ans
- 1. Krishna
 - 2. Narmada
 - 3. Mahanadi
 - 4. Godavari

Question ID : 424429493

Status : Marked For Review

Chosen Option : 4

Q.21 On 2 December 2019, who became the first female pilot of the Indian Navy?

- Ans
- 1. Bhawana Kanth
 - 2. Sarla Thakral
 - 3. Punita Arora
 - 4. Shivangi

Question ID : 424429486

Status : Answered

Chosen Option : 4

Q.22 What is the range of the intensity scale used in measuring earthquakes?

- Ans
- 1. 1 to 12
 - 2. 1 to 7
 - 3. 1 to 15
 - 4. 1 to 5

Question ID : 424429482

Status : Not Answered

Chosen Option : --

Q.23 According to the Economist Intelligence Unit (EIU), what is India's rank in the 2019 worldwide Index of Cancer Preparedness (ICP)?

- Ans
- 1. 15
 - 2. 19
 - 3. 28
 - 4. 10

Question ID : 424429489

Status : Not Answered

Chosen Option : --

Q.24 Who was best known for hoisting the Indian National Congress flag at the Gowalia Tank maidan in Bombay during the Quit India Movement?

- Ans 1. Aruna Asaf Ali
 2. Kanaklata Barua
 3. Bhikaiji Rustom Cama
 4. Lakshmi Sahgal

Question ID : 424429498
Status : Not Answered
Chosen Option : --

Q.25 'Aatish-i-Chinar' (Flames of Chinar) is the autobiography of which politician?

- Ans 1. Sheikh Muhammad Abdullah
 2. Benazir Bhutto
 3. M Hidayatullah
 4. APJ Abdul Kalam

Question ID : 424429499
Status : Not Answered
Chosen Option : --