

Exam Date	09/03/2023
Exam Time	9:00 AM - 10:00 AM
Subject	CHSL Exam 2022 Tier I

mpcareer.in

Section : English Language

Q.1 Rearrange the parts of the sentence in correct order.

Climate change is

P. climate caused by natural forces in combination

Q. a broad topic that includes periodic alterations in Earth's

R. with the effects of various human activities like burning of

S. fossil fuels and changes in land cover and biodiversity

Ans  1. RSQP

2. PSQR

3. SRPQ

4. QPRS

Question ID : 264330124039

Status : Answered

Chosen Option : 4

Q.2 Select the most appropriate option to fill in the blank.

However, even after Independence in 1947, British expatriate firms did not suddenly \_\_\_\_\_ from India.

Ans  1. close

2. divest

3. consecrate

4. disallow

Question ID : 264330124756

Status : Not Answered

Chosen Option : --

Q.3 Choose the word that can substitute the given group of words. Study of heavenly bodies

Ans  1. Numerology

2. Astronomy

3. Astrology

4. Stargazing

Question ID : 264330124309

Status : Answered

Chosen Option : 2

Q.4 Choose the word that is opposite in meaning to the given word. Frustrate

- Ans  1. Irk  
 2. Circumvent  
 3. Foster  
 4. Fetter

Question ID : 264330124173  
Status : Answered  
Chosen Option : 2

Q.5 Choose the option that is the correct passive form of the sentence. Ravi gave you the information?

- Ans  1. Has the information given to you?  
 2. Was the information given to you by Ravi?  
 3. Have the information been given to you?  
 4. You have been given the information?

Question ID : 264330124757  
Status : Answered  
Chosen Option : 2

Q.6 Choose the incorrectly spelt word.

- Ans  1. Shuot  
 2. Bloom  
 3. Broom  
 4. Gloomy

Question ID : 264330124099  
Status : Answered  
Chosen Option : 1

Q.7 Select the most appropriate 'one word' for the expression given below. One who has persistent neurotic impulse to steal

- Ans  1. Iconoclast  
 2. Kleptomaniac  
 3. Hypocrite  
 4. Connoisseur

Question ID : 264330125779  
Status : Answered  
Chosen Option : 2

Q.8 Choose the word that can substitute the given group of words. One who hates institution of marriage

- Ans  1. Coquette  
 2. Polyglot  
 3. Pedantic  
 4. Misogamist

Question ID : 264330124414  
Status : Answered  
Chosen Option : 4

Q.9 Choose the sentence with no spelling error.

- Ans  1. You remind me of someone I knew onse.  
 2. You remind me of someone I knew once.  
 3. You remiend me of somone I knew once.  
 4. You reminde me of someone I knew once.

Question ID : 264330124100  
Status : Answered  
Chosen Option : 2

Q.10 Select the most appropriate meaning of the given idiom. Slap on the wrist

- Ans  1. Criticize someone strongly and angrily  
 2. Wild with excitement  
 3. Misunderstand each other  
 4. A mild punishment

Question ID : 264330124774  
Status : Answered  
Chosen Option : 4

Q.11 Choose the word that means the same as the given word.  
Apologetic

1. Derisive  
 2. Contrite  
 3. Stagnant  
 4. Solid

Question ID : 264330124103  
Status : Not Answered  
Chosen Option : --

Ans

Q.12 Choose the word that means the same as the given word. Magnanimity

- Ans  1. Altruism  
 2. Virulence  
 3. Invidiousness  
 4. Volatile

Question ID : 264330124572  
Status : Answered  
Chosen Option : 3

Q.13 Fill in the blank with an appropriate option.

My feet don't \_\_\_\_\_ the ground for the rest of the day.

- Ans  1. touch  
 2. slab  
 3. purify  
 4. deal

Question ID : 264330124547  
Status : Answered  
Chosen Option : 1

Q.14 Select the correct indirect form of the given sentence.

The sage said, "Man proposes and God disposes."

Ans  1. The sage said that man proposes and God disposes.

2. The sage said that man had proposed and God had disposed.

3. The sage said that man propose and God dispose.

4. The sage said that man proposed and God disposed.

Question ID : 264330124082

Status : Answered

Chosen Option : 1

Q.15 Improve the underlined part of the sentence. Choose 'No improvement' as an answer if the sentence is grammatically correct.

A man may die, nations may rise and fall, but an idea lived on.

Ans  1. live on

2. lives in

3. lives on

4. No improvement

Question ID : 264330124198

Status : Answered

Chosen Option : 3

Q.16 In the following question, out of the given four alternatives, select the alternative which best expresses the meaning of the Idiom/Phrase.

Body and soul

1. Life and death

2. Happiness and sorrow

3. Wholly and entirely

4. To solve a difficulty

Question ID : 264330124097

Status : Answered

Chosen Option : 3

Ans

Q.17 Rearrange the parts of the sentence in correct order. P. versions of the European poor laws, charitable and

Q. in former colonies, such as Ghana, Jamaica, India and the

R. missionary activities, and the introduction of Western juvenile justice proceduresS. Philippines the basic welfare services

grew out of modified

Ans  1. QSPR

2. QPRS

3. PSQR

4. PRSQ

Question ID : 264330124092

Status : Answered

Chosen Option : 1

Q.18 Choose the word that means the same as the given word. Quandary

- Ans  1. Cinch
2. Breeze
3. Clique
4. Impasse

Question ID : 264330124052  
Status : Not Attempted and  
Marked For Review  
Chosen Option : --

Q.19 Find the part of the given sentence that has an error in it. If there is no error, choose 'No error'.  
The recent discoveries have risen hopes about possible applications.

- Ans  1. No error
2. have risen hopes
3. The recent discoveries
4. about possible applications.

Question ID : 264330124083  
Status : Answered  
Chosen Option : 1

Q.20 Identify the segment in the sentence which contains a grammatical error. If there is no error, then select the option "No error".  
And it just recently awarded/ a million-dollar contract/ that reeks of corruption.

1. that reeks of corruption.
2. a million-dollar contract
3. No error
4. And it just recently awarded

Question ID : 264330124760  
Status : Answered  
Chosen Option : 1

Ans

Comprehension:

In the following passage some of the words have been deleted. Read the passage carefully and select the correct answer for the given blank out of the four alternatives.  
Many fruits and vegetables change (1) \_\_\_\_\_ as they ripen. For example, tomatoes, strawberries, and red bell peppers all change from green to red. Colour is just one way along with size, texture, and smell that you can tell if a fruit or vegetable is (2) \_\_\_\_\_ to be harvested or eaten. Imagine a factory that (3) \_\_\_\_\_ strawberries into plastic containers to be (4) \_\_\_\_\_ to grocery stores across the country. It might be useful to have a machine that automatically (5) \_\_\_\_\_ any green strawberries that were picked before they were ripe. Or, you might want a machine on the farm that automatically recognizes strawberries by colour and only picks the red ones to begin with.

SubQuestion No : 21

Q.21 Select the most appropriate option to fill in blank number 1.

- Ans  1. clothes
2. colour
3. size
4. shape

Question ID : 264330124086  
Status : Answered  
Chosen Option : 2

Comprehension:

In the following passage some of the words have been deleted. Read the passage carefully and select the correct answer for the given blank out of the four alternatives.

Many fruits and vegetables change (1) \_\_\_\_\_ as they ripen. For example, tomatoes, strawberries, and red bell peppers all change from green to red. Colour is just one way along with size, texture, and smell that you can tell if a fruit or vegetable is (2) \_\_\_\_\_ to be harvested or eaten. Imagine a factory that (3) \_\_\_\_\_ strawberries into plastic containers to be (4) \_\_\_\_\_ to grocery stores across the country. It might be useful to have a machine that automatically (5) \_\_\_\_\_ any green strawberries that were picked before they were ripe. Or, you might want a machine on the farm that automatically recognizes strawberries by colour and only picks the red ones to begin with.

SubQuestion No : 22

Q.22 Select the most appropriate option to fill in blank number 2.

- Ans  1. steady  
 2. trepid  
 3. ready  
 4. sober

Question ID : 264330124087

Status : Answered

Chosen Option : 3

Comprehension:

In the following passage some of the words have been deleted. Read the passage carefully and select the correct answer for the given blank out of the four alternatives.

Many fruits and vegetables change (1) \_\_\_\_\_ as they ripen. For example, tomatoes, strawberries, and red bell peppers all change from green to red. Colour is just one way along with size, texture, and smell that you can tell if a fruit or vegetable is (2) \_\_\_\_\_ to be harvested or eaten. Imagine a factory that (3) \_\_\_\_\_ strawberries into plastic containers to be (4) \_\_\_\_\_ to grocery stores across the country. It might be useful to have a machine that automatically (5) \_\_\_\_\_ any green strawberries that were picked before they were ripe. Or, you might want a machine on the farm that automatically recognizes strawberries by colour and only picks the red ones to begin with.

SubQuestion No : 23

Q.23 Select the most appropriate option to fill in blank number 3.

1. halts  
 2. tapes  
 3. breaks  
 4. packs

Question ID : 264330124088

Status : Answered

Chosen Option : 4

Ans

Comprehension:

In the following passage some of the words have been deleted. Read the passage carefully and select the correct answer for the given blank out of the four alternatives.

Many fruits and vegetables change (1) \_\_\_\_\_ as they ripen. For example, tomatoes, strawberries, and red bell peppers all change from green to red. Colour is just one way along with size, texture, and smell that you can tell if a fruit or vegetable is (2) \_\_\_\_\_ to be harvested or eaten. Imagine a factory that (3) \_\_\_\_\_ strawberries into plastic containers to be (4) \_\_\_\_\_ to grocery stores across the country. It might be useful to have a machine that automatically (5) \_\_\_\_\_ any green strawberries that were picked before they were ripe. Or, you might want a machine on the farm that automatically recognizes strawberries by colour and only picks the red ones to begin with.

SubQuestion No : 24

Q.24 Select the most appropriate option to fill in blank number 4.

- Ans  1. suited to  
 2. shipped off  
 3. managed of  
 4. accounted to

Question ID : 264330124089  
Status : Answered  
Chosen Option : 2

Comprehension:

In the following passage some of the words have been deleted. Read the passage carefully and select the correct answer for the given blank out of the four alternatives.

Many fruits and vegetables change (1) \_\_\_\_\_ as they ripen. For example, tomatoes, strawberries, and red bell peppers all change from green to red. Colour is just one way along with size, texture, and smell that you can tell if a fruit or vegetable is (2) \_\_\_\_\_ to be harvested or eaten. Imagine a factory that (3) \_\_\_\_\_ strawberries into plastic containers to be (4) \_\_\_\_\_ to grocery stores across the country. It might be useful to have a machine that automatically (5) \_\_\_\_\_ any green strawberries that were picked before they were ripe. Or, you might want a machine on the farm that automatically recognizes strawberries by colour and only picks the red ones to begin with.

SubQuestion No : 25

Q.25 Select the most appropriate option to fill in blank number 5.

- Ans  1. sustains  
 2. rejects  
 3. detains  
 4. proceeds

Question ID : 264330124090  
Status : Answered  
Chosen Option : 2

Section : General Intelligence

Q.1 After interchanging the given two signs, what will be the value of the given equation?

× and ÷

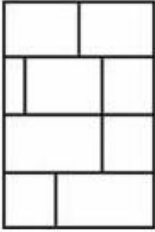
$$47 + 13 \div 65 \times 5 - 16$$

- Ans  1. 195  
 2. 190  
 3. 200  
 4. 205

Question ID : 264330126361  
Status : Answered  
Chosen Option : 3



How many quadrilaterals are there in the given figure?



Q.2

- Ans
- 1. 24
  - 2. 25
  - 3. 22
  - 4. 23

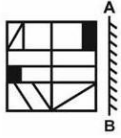
Question ID : 264330126859  
Status : Answered  
Chosen Option : 3

Q.3 If  ${}^9P_3 = 32$  and  ${}^{288}C_8 = 36$ , then  ${}^{408}C_6 = ?$

- Ans
- 1. 62
  - 2. 60
  - 3. 64
  - 4. 68

Question ID : 264330126341  
Status : Answered  
Chosen Option : 4

Q.4 If a mirror is placed on the line AB, then out of the option figures which figure will be the right image of the question figure?



Ans

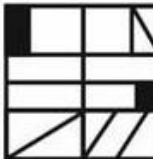
✗ 1.



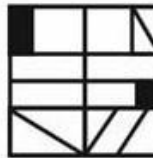
✗ 2.



✗ 3.



✓ 4.



Question ID : 264330126962  
 Status : Answered  
 Chosen Option : 2

Q.5 If a mirror is placed on the line AB, then out of the option figures which figure will be the right image of the question figure?

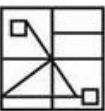


Ans

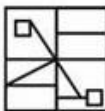
✗ 1.



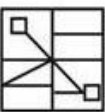
✗ 2.



✓ 3.



✗ 4.



Question ID : 264330126712  
 Status : Answered  
 Chosen Option : 3

Q.6 In the following question, four number pairs are given. In each pair the number on left side of (-) is related to the number of the right side of (-) with some Logic/Rule /Relation. Three pairs are similar on basis of same Logic/Rule/Relation. Select the odd

one out from the given alternatives. (NOTE: Operations should be performed on the whole numbers, without breaking down the numbers into its constituent digits. E.g.13

- Operations on 13 such as adding /subtracting /multiplying etc. to 13 can be performed. Breaking down 13 into 1 and 3 and then performing mathematical operations on 1 and 3 is not allowed)

Ans  1. 2125 – 8600

2. 1595 – 6380

3. 2685 – 10740

4. 3375 – 13500

Question ID : 264330127045

Status : Not Attempted and  
Marked For Review

Chosen Option : --

Q.7 Words given on the left side of (::) are related with each other by some Logic/Rule /Relation. Select the missing word/word pair on the right side of (::) from the given alternatives based on the same Logic/Rule/Relation. Pen : Author :: Axe : ?

Ans  1. Teacher

2. Chef

3. Woodcutter

4. Cobbler

Question ID : 264330126338

Status : Answered

Chosen Option : 3

Q.8 In a certain code language, 'GIRL' is coded as 'QWNL'. What is the code for 'KEPT' in that code language?

Ans  1. YUKR

2. YUKP

3. YVJP

4. YUJP

Question ID : 264330126772

Status : Answered

Chosen Option : 4

Q.9 Out of the given words, three are similar in a certain manner. However, one option is NOT like the other three. Select the option which is different from the rest.

Ans  1. Banana

2. Grape

3. Apple

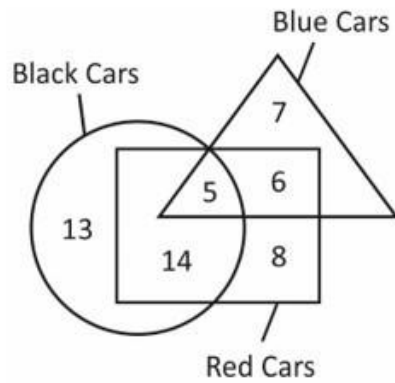
4. Cauliflower

Question ID : 264330127430

Status : Answered

Chosen Option : 4

How many red cars are there?



Q.10

- Ans
- 1. 28
  - 2. 22
  - 3. 31
  - 4. 33

Question ID : 264330126863

Status : Answered

Chosen Option : 4

Q.11 In the following question below are given some statements followed by some conclusions based on those statements. Taking the given statements to be true even if they seem to be at variance from commonly known facts. Read all the conclusions and then decide which of the given conclusion logically follows the given statements.

Statements:

I. All Z are D.

II. No Y is Z.

Conclusion:

I. Some D are not Y.

II. Some Z are not Y.

III. Some D are Z.

- 1. Both conclusions II and III follows
- 2. Both conclusions I and II follows
- 3. All conclusion follows
- 4. Only conclusion I follows

Question ID : 264330126781

Status : Answered

Chosen Option : 3

Ans

Q.12 Words given on the left side of (::) are related with each other by some Logic/Rule /Relation. Select the missing word/word pair on the right side of (::) from the given alternatives based on the same Logic/Rule/Relation. Tea : Cup :: ?

Ans  1. Paper : Pulp

2. Food : Plate

3. Milk : Drink

4. Glass : Water

Question ID : 264330127053

Status : Answered

Chosen Option : 2

mpcareer.in

Q.13 Select the option that is related to the third number in the same way as the first number is related to the second number and fifth number is related to sixth number.  $14 : 210 :: 13 : ? :: 16 : 272$

- Ans
- 1. 204
  - 2. 174
  - 3. 162
  - 4. 182

Question ID : 264330126841  
Status : Answered  
Chosen Option : 4

Q.14 In the following question, select the missing number from the given series. 129, 126, 123, 120, 117, ?

- Ans
- 1. 115
  - 2. 114
  - 3. 112
  - 4. 113

Question ID : 264330126339  
Status : Answered  
Chosen Option : 2


mpcareer.in

Q.15 Select the option figure in which the given figure is embedded. (Rotation is NOT allowed).

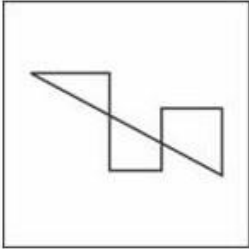


Ans


✗ 1.



✗ 2.



✓ 3.



✗ 4.



Question ID : 264330127635

Status : Answered

Chosen Option : 3

Q.16 Select the option in which the numbers shares the same relationship in set as that shared by the numbers in the given set. (NOTE: Operations should be performed on the whole numbers, without breaking down the numbers into its constituent digits. E.g.13 – Operations on 13 such as adding /subtracting /multiplying etc. to 13 can be performed. Breaking down 13 into 1 and 3 and then performing mathematical operations on 1 and 3 is not allowed)  
(79, 89, 101)  
(31, 41, 47)

Ans ✓ 1. (29, 37, 43)

✗ 2. (53, 61, 67)

✗ 3. (17, 19, 23)

✗ 4. (43, 47, 59)

Question ID : 264330126768

Status : Not Attempted and  
Marked For Review

Chosen Option : --

Q.17 Words given on the left side of (::) are related with each other by some Logic/Rule /Relation. Select the missing word/word pair on the right side of (::) from the given alternatives based on the same Logic/Rule/Relation.

Ans Design : Architect :: ?  1. Book : Poem

2. Furniture : Carpenter

3. Shoes : Poet

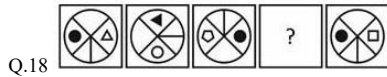
4. Editor : Newspaper

Question ID : 264330127228

Status : Answered

Chosen Option : 2

Select the figure from the given options that can replace the question mark (?) in the following series.



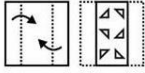
Question ID : 264330126783

Status : Answered

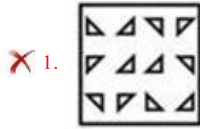
Chosen Option : 4



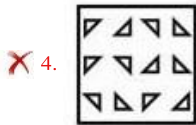
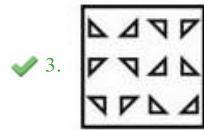
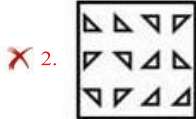
A piece of paper is folded and punched as shown below in the question figures. From the given answer figures, indicate how it will appear when opened?



Q.19



Ans



Question ID : 264330127236

Status : Answered

Chosen Option : 3

Q.20 In the following question, four number pairs are given. In each pair the number on left side of (-) is related to the number of the right side of (-) with some Logic/Rule /Relation. Three pairs are similar on basis of same Logic/Rule/Relation. Select the odd one out from the given alternatives. (NOTE: Operations should be performed on the whole numbers, without breaking down the numbers into its constituent digits. E.g.13 – Operations on 13 such as adding /subtracting /multiplying etc. to 13 can be performed. Breaking down 13 into 1 and 3 and then performing mathematical operations on 1 and 3 is not allowed)

Ans  1. 2222 – 4444

2. 5555 – 7777

3. 3333 – 6666

4. 4444 – 8888

Question ID : 264330127220

Status : Answered

Chosen Option : 2

Q.21 In a certain code language, 'TEFLOANS' is coded as '2056121226138', 'SERGEANT' is coded as '1951872226137'. What is the code for 'UNIQUELY' in that code language?

Ans  1. 2114917632142

2. 2124917623152

3. 2114917622152

4. 2115917623152

Question ID : 264330126773

Status : Not Answered

Chosen Option : --

Q.22 A series is given with one term missing. Select the correct alternative from the given ones that will complete the series.

LOG, FLH, ZIL, TFJ, NCK,?

- Ans
- 1. HZL
  - 2. HAL
  - 3. HZM
  - 4. HYL

Question ID : 264330126776  
Status : Answered  
Chosen Option : 1

Q.23 In the following question, select the odd letter/letters from the given alternatives.

- Ans
- 1. ABCD
  - 2. IJKL
  - 3. LMNO
  - 4. BDEF

Question ID : 264330126779  
Status : Answered  
Chosen Option : 4

Q.24 S is the sister of T. R is the brother of S. U is the wife of W. T is the father of U. How is T related to W?

- 1. Maternal Uncle
- 2. Father
- 3. Father in law
- 4. Son

Question ID : 264330126777  
Status : Answered  
Chosen Option : 3

Ans

Q.25 Arrange the given words in the sequence in which they occur in the dictionary.

1. Wage
2. Waist
3. Waste
4. West
5. Wave

- Ans
- 1. 24351
  - 2. 12354
  - 3. 35241
  - 4. 42135

Question ID : 264330127421  
Status : Answered  
Chosen Option : 2

Section : Quantitative Aptitude

If  $\sec \theta + \tan \theta = 5$ , then what is the value of  $\sec \theta - \tan \theta$  ?

Q.1

1.  $1/2$

Ans

2.  $1/6$

3.  $1/5$

4.  $1/3$

Question ID : 264330128159  
Status : Answered  
Chosen Option : 3

Q.2 If  $a + b + c = 0$ , then what is the value of  $a^3 + b^3 + c^3 - 3abc$ ? Ans

1. 1

2. 2

3. 0

4. -1

Question ID : 264330127777  
Status : Answered  
Chosen Option : 3

Q.3 Find the area of a triangle whose length of each side is 13 inches, 15 inches and 14 inches.

Ans

1. 84 square inches

2. 81.2 square inches

3. 42.1 square inches

4. 84.2 square inches

Question ID : 264330127776  
Status : Answered  
Chosen Option : 1

Q.4 Length of a chord is 30 cm in a circle whose radius is 17 cm. What will be the distance of this chord from the centre? Ans

1. 9 cm

2. 15 cm

3. 12 cm

4. 8 cm

Question ID : 264330128123  
Status : Answered  
Chosen Option : 4

Q.5 If  $\cot y = \frac{12}{5}$ , then what is the value of  $\cos^2 y$ ?

Ans

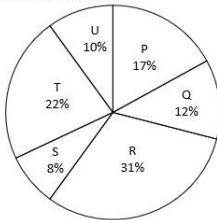
- ✓ 1.  $\frac{144}{169}$
- ✗ 2.  $\frac{84}{143}$
- ✗ 3.  $\frac{72}{143}$
- ✗ 4.  $\frac{72}{91}$

Question ID : 264330126476

Status : Answered

Chosen Option : 1

Q.6 The pie chart given below shows the number of girls in six schools P, Q, R, S, T and U. The total number of girls in all these six schools are 3000. Number of girls in a particular school is shown as a percentage of total number of girls in all these six schools.



What is the total number of girls in school P and R?

Ans

- ✗ 1. 930
- ✓ 2. 1440
- ✗ 3. 1620
- ✗ 4. 870

Question ID : 264330127862

Status : Answered

Chosen Option : 2

Q.7 The table given below shows the number of pens sold by two shopkeepers P and Q in 5 months.

Months	Shopkeepers	
	P	Q
A	100	10
B	80	20
C	40	120
D	30	60
E	10	50

J1 = The value of average number of pens sold by P in all five months.

J2 = The value of average number of pens sold by Q in all five months.

What is the value of  $(J1/J2)$ ?

Ans

- ✗ 1. 2
- ✓ 2. 1
- ✗ 3. 4
- ✗ 4. 3

Question ID : 264330128061

Status : Answered

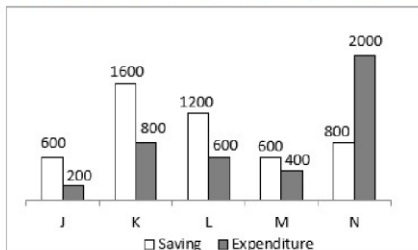
Chosen Option : 2

**Q.8** Radii of two circles are 12 cm and 5 cm. Distance between their centres is 25 cm. What is the length of the direct common tangent?

- Ans**
- 1. 21 cm
  - 2. 22 cm
  - 3. 24 cm
  - 4. 23 cm

Question ID : 264330127774  
Status : Answered  
Chosen Option : 3

**Q.9** The bar graph given below shows the saving and expenditure of 5 companies J, K, L, M and N.



The average savings of all companies is what percent of the average expenditure of all companies?

- Ans**
- 1. 120 percent
  - 2. 150 percent
  - 3. 100 percent
  - 4. 90 percent

Question ID : 264330128285  
Status : Answered  
Chosen Option : 1

**Q.10** The radius of a wheel is 14 cm. How much distance will be travelled by the wheel in 10 revolutions?

- Ans**
- 1. 820 cm
  - 2. 910 cm
  - 3. 800 cm
  - 4. 880 cm

Question ID : 264330127766  
Status : Answered  
Chosen Option : 4

**Q.11** What is the value of  $\left(\frac{1+\sec^2 A}{1+\cos^2 A}\right)\left(\frac{1+\sin^2 A}{1+\operatorname{cosec}^2 A}\right)$ ?

- Ans**
- 1.  $\operatorname{cosec}^2 A$
  - 2.  $\sec^2 A$
  - 3.  $\cos^2 A$
  - 4.  $\tan^2 A$

Question ID : 264330127783  
Status : Answered  
Chosen Option : 4

What is the value of  $44 \times 12 - (25 + 13 \times 10)$ ?

Q.12  
Ans

- 1. 373
- 3. 633
- 4. 573

2. 613

Question ID : 264330126485  
Status : Answered  
Chosen Option : 1

What is the value of  $\frac{\frac{5}{2} \div \frac{2}{5} \times \frac{1}{5} - \frac{1}{5} \div \frac{3}{5} \times \frac{5}{2}}{\frac{2}{5} \div \frac{1}{5} - \frac{1}{2} \times \frac{5}{2} \div \frac{25}{4} + \frac{1}{2} \div \frac{2}{5} \times \frac{1}{5}}$  ?

Q.13

- Ans
- 1. 32/127
  - 2. 28/125
  - 3. 25/123
  - 4. 31/127

Question ID : 264330127781  
Status : Answered  
Chosen Option : 3

Q.14 A person sells wheat at a profit of 25 percent. If he reduces its selling price by Rs. 40, then he suffers a loss of 25 percent. What was the initial selling price of the wheat?

- Ans
- 1. Rs. 60
  - 2. Rs. 80
  - 3. Rs. 120
  - 4. Rs. 100

Question ID : 264330127845  
Status : Answered  
Chosen Option : 4

Q.15 What will be the compound interest on Rs.14,000 for 2 years at the rate of 10% per annum compounded annually?

- Ans
- 1. Rs.3,490
  - 2. Rs.1,490
  - 3. Rs.6,940
  - 4. Rs.2,940

Question ID : 264330128422  
Status : Answered  
Chosen Option : 4

mpcareer.in

Angle subtended by a chord  $xy$  on the centre of a circle is  $180$  degree. If length of this chord is  $36$  cm, then what will be the radius of this circle?

✓ 1. 18 cm

Q.16

Ans

✗ 2. 27 cm

✗ 3. 24 cm

✗ 4. 21 cm

Question ID : 264330126475

Status : Answered

Chosen Option : 1

Q.17 The average age of 30 students is 15 years. It was observed that while calculating the average age, the age of a student was taken as 15 years instead of 9 years. What will be the correct average age?

Ans ✓ 1. 14.8 years

✗ 2. 16.4 years

✗ 3. 14.2 years

✗ 4. 15.6 years

Question ID : 264330127767

Status : Answered

Chosen Option : 1

Q.18 What is the value of  $\frac{1+x^2}{1-x} \div \frac{1-x^4}{x-1} \times \frac{x(1-x)}{(1+x)}$ ?

Ans ✓ 1.  $\frac{-x}{(1+x)^2}$

✗ 2.  $\frac{-x}{1+2x^2}$

✗ 3.  $\frac{-x}{1+x}$

✗ 4.  $\frac{-x}{1+x^2}$

Question ID : 264330127854

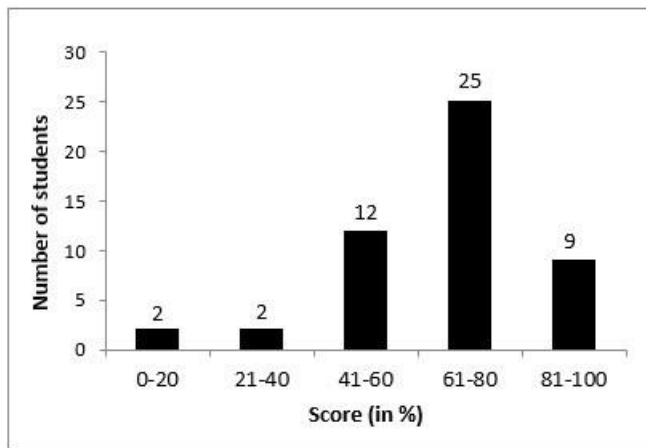
Status : Answered

Chosen Option : 4



The following histogram shows the score by the students of grade 10.

What percent of total student scored more than 60%?



Q.19

- Ans
- 1. 34%
  - 2. 25%
  - 3. 50%
  - 4. 68%

Question ID : 264330128438  
Status : Answered  
Chosen Option : 4

Q.20 A car travels a distance of 60 km at uniform speed. If the speed of car is increased by 8 km/hr, then it takes 2 hours less to cover the same distance. What is the original speed of the car?

- Ans
- 1. 15 km/hr
  - 2. 12 km/hr
  - 3. 16 km/hr
  - 4. 10 km/hr

Question ID : 264330127765  
Status : Answered  
Chosen Option : 2

Tina alone can do a piece of work in 12 days and Meena alone can do the same work in 15 days. If Tina and Meena undertook to do this work for Rs.18,000, then how much amount will Meena get, if they work together?

Q.21

- Ans
- 1. Rs.10,000
  - 2. Rs.8,000
  - 3. Rs.6,000
  - 4. Rs.12,000

Question ID : 264330128414

Status : Answered

Chosen Option : 2

mpcareer.in

**Q.22** If 20 percent of P is added to 40 percent of Q, then the resultant comes as 80 percent of Q. P is what percentage of Q?

- Ans
- 1. 200 percent
  - 2. 225 percent
  - 3. 150 percent
  - 4. 125 percent

Question ID : 264330127769  
Status : Answered  
Chosen Option : 1

**Q.23**  $\frac{2}{5}$  of marked price is equal to  $\frac{5}{8}$  of selling price. What is the discount percent?

- Ans
- 1. 42 percent
  - 2. 36 percent
  - 3. 50 percent
  - 4. 40 percent

Question ID : 264330127843  
Status : Answered  
Chosen Option : 2

**Q.24** If  $\frac{p}{q} = \frac{r}{s} = \frac{t}{u} = \frac{2}{5}$ , then what is the value of  $(4p + 3r + 7t) : (4q + 3s + 7u)$ ?

- Ans
- 1. 4 : 11
  - 2. 3 : 7
  - 3. 5 : 9
  - 4. 2 : 5

Question ID : 264330127771  
Status : Answered  
Chosen Option : 4

**Q.25** The average of 32, 34, 38, 21, 26 and x is 30. What will be the value of x?

- Ans
- 1. 29
  - 2. 27
  - 3. 28
  - 4. 31

Question ID : 264330126474  
Status : Answered  
Chosen Option : 1

Section : General awareness

**Q.1** Which of the following statement is correct regarding air pressure?

- Ans
- 1. High pressure is associated with cloudy skies and wet weather.
  - 2. Low pressure is associated with clear and sunny skies.
  - 3. The air always moves from high pressure areas to low pressure areas.
  - 4. The air pressure is lowest at sea level and increases with height.

Question ID : 264330124947  
Status : Answered  
Chosen Option : 3

**Q.2 Which of the following provisions of the Indian constitution is borrowed from the constitution of Canada?**

- Ans  1. Concept of Republic
2. Advisory jurisdiction of the Supreme court
3. Independence of judiciary
4. Concept of concurrent list

Question ID : 264330124879  
Status : Answered  
Chosen Option : 2

**Q.3 Which among the following cities won the India's cleanest city award for sixth time in a row in 2022?**

- Ans  1. Kolkata
2. Indore
3. Gurugram
4. Pune

Question ID : 264330125514  
Status : Answered  
Chosen Option : 2

**Q.4 Which among the following statements is incorrect?**

- Ans  1. The primary market is also known as new issue market.
2. Industrial Securities Market is also known as gilt-edged market.
3. The secondary market is the market for the sale and purchase of previously issued securities.
4. RBI plays a dominant role in the gilt-edged market through its 'Open Market Operations'.

Question ID : 264330125516  
Status : Not Attempted and Marked For Review  
Chosen Option : --

**Q.5 Which article of the Indian constitution mentions that it is duty of the Union government to protect States against external aggression and internal disturbance?**

- Ans  1. 353
2. 356
3. 358
4. 355

Question ID : 264330124953  
Status : Answered  
Chosen Option : 2

**Q.6 Which of the following shortcut is used in to close an open workbook in MS-Excel 365?**

- Ans  1. Ctrl + W
2. Ctrl + X
3. Ctrl + L
4. Ctrl + C

Question ID : 264330124859  
Status : Answered  
Chosen Option : 2

Q.7 Which country will host the FIFA Women's World Cup 2023?

- Ans
- 1. Italy and France
  - 2. Japan and China
  - 3. Australia and New Zealand
  - 4. United States of America and Canada

Question ID : 264330125331  
Status : Answered  
Chosen Option : 3

Q.8 Which of the following statements is NOT correct regarding mixtures?

- Ans
- 1. Colloids are heterogeneous mixtures in which the particle size is large.
  - 2. A solution is a homogeneous mixture of two or more substances.
  - 3. The major component of a solution is called the solvent.
  - 4. The minor component of a solution is called the solute.

Question ID : 264330124869  
Status : Answered  
Chosen Option : 2

Q.9 The plants of which of the following plant kingdoms are known as algae?

- Ans
- 1. Bryophyta
  - 2. Thallophyta
  - 3. Pteridophyta
  - 4. Angiosperms

Question ID : 264330125518  
Status : Answered  
Chosen Option : 2

Q.10 India's first 24 × 7 solar-powered village Modhera is located in which state?

- Ans
- 1. Madhya Pradesh
  - 2. Gujarat
  - 3. Rajasthan
  - 4. Himachal Pradesh

Question ID : 264330124862  
Status : Answered  
Chosen Option : 3

Q.11 Tropic of Cancer (23°30' N) passes through \_\_\_\_\_ state of India.

- Ans
- 1. Kerala
  - 2. Chhattisgarh
  - 3. Punjab
  - 4. Maharashtra

Question ID : 264330125646  
Status : Answered  
Chosen Option : 2

Q.12 Dhinodhar Hills is located in which Indian state/Union Territory?

- Ans  1. Gujarat  
 2. Maharashtra  
 3. West Bengal  
 4. Andaman and Nicobar Islands

Question ID : 264330125523  
Status : Not Attempted and  
Marked For Review  
Chosen Option : --

Q.13 Who among the following discovered the neutrons? Ans  1. J.

Chadwick

2. Neils Bohr  
 3. E. Goldstein  
 4. Ernest Rutherford

Question ID : 264330124867  
Status : Answered  
Chosen Option : 1

Q.14 Carnatic music is confined to \_\_\_\_\_.

1. Karnataka, Maharashtra, Gujarat and Rajasthan  
 2. Karnataka, Andhra Pradesh, Tamil Nadu and Kerala  
 3. Uttar Pradesh, Bihar, West Bengal and Haryana  
 4. Gujarat, Maharashtra, Rajasthan and Haryana

Question ID : 264330124811  
Status : Answered  
Chosen Option : 2

Ans

Q.15 The value added of a firm is calculated as \_\_\_\_\_.

- Ans  1. value of production of the firm + value of intermediate goods used by the firm  
 2. value of production of the firm + value of capital goods used by the firm  
 3. value of production of the firm – value of intermediate goods used by the firm  
 4. value of production of the firm / value of intermediate goods used by the firm

Question ID : 264330124865  
Status : Not Attempted and  
Marked For Review  
Chosen Option : --

Q.16 A \_\_\_\_\_ is an electronic device that receives a weak signal and regenerates it.

- Ans  1. repeater  
 2. router  
 3. switch  
 4. hub

Question ID : 264330124933  
Status : Not Attempted and  
Marked For Review  
Chosen Option : --

Q.17 Who is famously known as Bihar Kesari?

- Ans
- 1. Karpuri Thakur
  - 2. Shri Krishna Sinha
  - 3. Rajendra Prasad
  - 4. Lala Lajpat Rai

Question ID : 264330125651  
Status : Not Attempted and  
Marked For Review  
Chosen Option : --

Q.18 The Chief Minister of which state launched "Football for All" in the state to take the culture of football to the grassroots?

- Ans
- 1. Jharkhand
  - 2. Madhya Pradesh
  - 3. Odisha
  - 4. West Bengal

Question ID : 264330125513  
Status : Answered  
Chosen Option : 4

Q.19 Who among the following won the Men's Singles Title of the US Open 2022?

- 1. Stefanos Tsitsipas
- 2. Rafael Nadal
- 3. Carlos Alcaraz
- 4. Casper Ruud

Question ID : 264330125532  
Status : Answered  
Chosen Option : 3

Ans

Q.20 What is the average height of troposphere?

- Ans
- 1. 50 km
  - 2. 13 km
  - 3. 30 km
  - 4. 6 km

Question ID : 264330124870  
Status : Not Attempted and  
Marked For Review  
Chosen Option : --

Q.21 In which year was Raziyya removed from the throne of the Delhi Sultanate?

- Ans
- 1. 1238
  - 2. 1244
  - 3. 1236
  - 4. 1240

Question ID : 264330124950  
Status : Answered  
Chosen Option : 4

Q.22 The fifth edition of the Khelo India Youth Games will be held in \_\_\_\_\_ cities in Madhya Pradesh.

- Ans  1. eight  
 2. six  
 3. seven  
 4. nine

Question ID : 264330125156

Status : Not Attempted and  
Marked For Review

Chosen Option : --

Q.23 Which among the following films received the Filmfare award for the Best Film popular choice in 2022?

- Ans  1. Rashmi Rocket  
 2. Shershaah  
 3. Ramprasad Ki Tehrvi  
 4. Sardar Udham

Question ID : 264330125527

Status : Not Attempted and  
Marked For Review

Chosen Option : --

Q.24 Warli Painting is the folk painting of \_\_\_\_\_ state of India.

- Ans  1. Maharashtra  
 2. Mizoram  
 3. Manipur  
 4. Karnataka

Question ID : 264330125360

Status : Answered

Chosen Option : 1

Q.25 In which year Mahatma Gandhi organised a satyagraha in the Kheda district of Gujarat in the support of peasants?

- Ans  1. 1918  
 2. 1916  
 3. 1919  
 4. 1920

Question ID : 264330124874

Status : Answered

Chosen Option : 1