

- A. The beggar asked to help him.
- B. The beggar exclaimed whether none of them would help him.
- C. The beggar exclaimed would none of them helped him.
- D. The beggar exclaimed whether they would help him.

Ans. B

212. In the following question, a word has been written in four different ways out of which only one is correctly spelt. Select the correctly spelt word.

- A. Expernce
- B. Experience
- C. Expeireince
- D. Expereince

Ans. B

213. In the following passage, some of the words have been left out. Read the passage carefully and select the correct answer for the given blank out of the four alternatives.

We get sleepy and wake up, become hungry and thirsty at certain hours, _____ force of habit. We form the habit of liking a certain chair, or nook, or corner, or path, or desk, and _____ seek this to the exclusion of all others. We _____ use a particular pitch of voice and type of enunciation in speaking, and this becomes one of our characteristic marks; or we _____ the habit of using barbarisms or solecisms of language in _____, and these cling to us and become an inseparable part of us later in life.

at certain hours, _____ force of habit.

- A. tough
- B. thought
- C. though
- D. through

Ans. D

214. In the following passage, some of the words have been left out. Read the passage carefully and select the correct answer for the given blank out of the four alternatives.

We get sleepy and wake up, become hungry and thirsty at certain hours, _____ force of habit. We form the habit of liking a certain chair, or nook, or corner, or path, or desk, and _____ seek this to the exclusion of all others. We

_____ use a particular pitch of voice and type of enunciation in speaking, and this becomes one of our characteristic marks; or we _____ the habit of using barbarisms or solecisms of language in _____, and these cling to us and become an inseparable part of us later in life.

_____ seek this to the exclusion

- A. than
- B. there
- C. then
- D. that

Ans. C

215. In the following passage, some of the words have been left out. Read the passage carefully and select the correct answer for the given blank out of the four alternatives.

We get sleepy and wake up, become hungry and thirsty at certain hours, _____ force of habit. We form the habit of liking a certain chair, or nook, or corner, or path, or desk, and _____ seek this to the exclusion of all others. We _____ use a particular pitch of voice and type of enunciation in speaking, and this becomes one of our characteristic marks; or we _____ the habit of using barbarisms or solecisms of language in _____, and these cling to us and become an inseparable part of us later in life.

We _____ use a particular pitch of voice

- A. habit
- B. habits
- C. habitual
- D. habitually

Ans. D

216. In the following passage, some of the words have been left out. Read the passage carefully and select the correct answer for the given blank out of the four alternatives.

We get sleepy and wake up, become hungry and thirsty at certain hours, _____ force of habit. We form the habit of liking a certain chair, or nook, or corner, or path, or desk, and _____ seek this to the exclusion of all others. We _____ use a particular pitch of voice and type of enunciation in speaking,

and this becomes one of our characteristic marks; or we _____ the habit of using barbarisms or solecisms of language in _____, and these cling to us and become an inseparable part of us later in life.

marks; or we _____ the habit of using

- A. from B. form
C. for D. of

Ans. B

217. In the following passage, some of the words have been left out. Read the passage carefully and select the correct answer for the given blank out of the four alternatives.

We get sleepy and wake up, become hungry and thirsty at certain hours, _____ force of habit. We form the habit of liking a certain chair, or nook, or corner, or path, or desk, and _____ seek this to the exclusion of all others. We _____ use a particular pitch of voice and type of enunciation in speaking, and this becomes one of our characteristic marks; or we _____ the habit of using barbarisms or solecisms of language in _____, and these cling to us and become an inseparable part of us later in life.

language in _____, and these cling

- A. young B. younger
C. youths D. youth

Ans. D

218. In the following question, out of the four alternatives, select the alternative which best expresses the meaning of the idiom/phrase.

By courtesy of

- A. Be very polite.
B. Do a philanthropic act forcefully.
C. Be brave and face risks for the team.
D. Given or allowed by.

Ans. D

219. In the following question, out of the four alternatives, select the alternative which best expresses the meaning of the idiom/phrase.

In the same boat

- A. When the option that you have is equally bad as the situation you are in.
B. Life like the river throws the same challenges for all boats.
C. Be in the same difficult circumstances as others.
D. Big and small boats suffer the same fate in a storm.

Ans. C

220. In the following question, out of the four alternatives, select the alternative which is the best substitute of the words/sentence.

Critical explanation or interpretation of a text, especially of scripture

- A. Oblivion B. Nascence
C. Exegesis D. Naivete

Ans. C

221. In the following question, out of the four alternatives, select the alternative which is the best substitute of the words/sentence.

Destruction or slaughter on a mass scale

- A. Enshrine B. Cenotaph
C. Opulent D. Holocaust

Ans. D

222. In the following question, out of the four alternatives, select the alternative which will improve the bracketed part of the sentence. In case no improvement is needed, select "no improvement".

That year too, 'Photographers' (was listed) separately in the Trade List of The Madras Almanac.

- A. is listed B. were listing
C. were listed D. no improvement

Ans. C

223. In the following question, out of the four alternatives, select the alternative which will improve the bracketed part of the sentence. In case no improvement is needed, select "no improvement".

But we expect them (to performs) better than all others.

- A. to performing B. perform
C. to perform D. no improvement

Ans. C

224. The question below consists of a set of labelled sentences. Out of the four options

given, select the most logical order of the sentences to form a coherent paragraph.

Next to the Punjabi

A-clad in beautiful sarees

B-family was a group from Chennai in

C-which all the women were

A. BAC B. ACB

C. BCA D. ABC

Ans. C

225. In the following question, four words are given out of which one word is correctly spelt. Select the correctly spelt word.

A. meritocratic B. meritokratik

C. meritocretik D. meritocratic

Ans. D

226. In the following question, select the related word pair from the given alternatives.

Tie : Neck :: ? : ?

A. Hat : Head

B. Shoes : Socks

C. Laces : Cotton

D. Shirt : Legs

Ans. A

227. In the following question, select the related number from the given alternatives.

15 : 22 :: 19 : ?

A. 24 B. 20

C. 26 D. 22

Ans. C

228. In the following question, select the related letter/letters from the given alternatives.

BCE : IJL :: CDF : ?

A. KLN B. JKM

C. JLN D. KMN

Ans. B

229. In the following question, select the odd word pair from the given alternatives.

A. Red - Stop B. Green - Go

C. Pink - Red D. Yellow - Wait

Ans. C

230. In the following question, four number pairs are given. The number on left side of (-) is related to the number on the right side of (-) with some Logic/Rule/Relation. Three are similar on basis of same Logic/Rule/Relation. Select the odd one out from the given alternatives.

A. 19 - 57 B. 13 - 39

C. 23 - 69

D. 17 - 53

Ans. D

231. In the following question, select the odd letter/letters from the given alternatives.

A. RSUW

B. CDFI

C. KLNQ

D. STVY

Ans. A

232. Arrange the given words in the sequence in which they occur in the dictionary.

1. Philosopher

2. Pharmacy

3. Piercing

4. Salesman

5. Saleswoman

A. 21345

B. 53214

C. 34215

D. 24513

Ans. A

233. In the following question, select the missing number from the given series.

14, 17, 21, 24, 28, 31, ?

A. 32

B. 33

C. 35

D. 34

Ans. C

234. A series is given with one term missing. Select the correct alternative from the given ones that will complete the series.

H, K, N, ?, T, W, ?

A. R, Y

B. Q, Z

C. R, Z

D. S, X

Ans. B

235. Six batteries are kept one above the other. Jumbo is just above Pick. The Volt is between Tank and Ping. Lift is between Jumbo and Tank. Which battery is at second position from the bottom?

A. Pick

B. Tank

C. Volt

D. Jumbo

Ans. D

236. From the given alternatives, select the word which CANNOT be formed using the letters of the given word.

Grandmother

A. Read

B. Other

C. Author

D. Reed

Ans. C

237. In a certain code language, "MAGNET" is written as "WHQJDP". How is "FRAUDS" written in that code language?

- A. FXRVMK B. VGXDUI
C. XDUIGT D. TMKRDU

Ans. B

238. In a certain code language, ' \div ' represents '+', '-' represents 'x', '+' represents ' \div ' and 'x' represents '-'. Find out the answer to the following question.

$$18 + 2 \times 30 \div 6 - 4 = ?$$

- A. 46 B. 3
C. 36 D. 7

Ans. B

239. The following equation is incorrect. Which two signs should be interchanged to correct the equation?

$$30 \div 2 - 10 \times 6 + 5 = 35$$

- A. + and \div B. - and +
C. \div and x D. + and x

Ans. D

240. If $3\#5 = -20$, $1\#4 = -30$ and $6\#5 = 10$, then find the value of $4\#9 = ?$

- A. 70 B. -60
C. -50 D. -70

Ans. C

241. Which of the following terms follows the trend of the given list?

ZYXYXYXY, ZWXYXYXY, ZWZYXYXY, ZWZWXXYXY, ZWZWZYXY, _____.

- A. XYXYXY XY B. ZYXYXYXY
C. ZWZWXXYXY D. ZWXYXYXY

Ans. C

242. A post-man starts cycling from his post office. He cycles 7 km South, then turns West and cycles 5 km, Then turns North and cycles 6 km, then turns to his right and cycles 5 km. Where is he now with reference to his post office?

- A. 1 km North B. 2 km North
C. 1 km South D. 2 km South

Ans. C

243. In the question two statements are given, followed by two conclusions, I and II. You have to consider the statements to be true even if it seems to be at variance from commonly known facts. You have to decide which of the given conclusions, if any, follows from the given statements.

Statement I: All potatoes are chips

Statement II: All french fries are potatoes

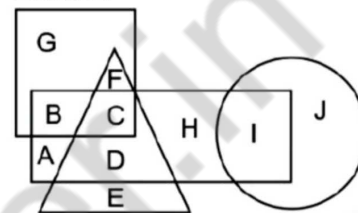
Conclusion I: No chips are french fries

Conclusion II: Some french fries are chips

- A. Only conclusion I follows
B. Only conclusion II follows
C. Both conclusions I and II follow
D. Neither conclusion I nor conclusion II follows

Ans. B

244. In the following figure, rectangle represents Reporters, circle represents Lyricists, triangle represents Potters and square represents Europeans. Which set of letters represents Europeans who are not Potters?



- A. FC B. GB
C. AD D. DE

Ans. B

245. A series is given with one term missing. Select the correct alternative from the given ones that will complete the series.

API, CRK, ETM, ?, IXQ

- A. HUP B. GVO
C. IVP D. IUO

Ans. B

246. In the following question, select the missing number from the given series.

108, 104, 100, 96, 92, ?

- A. 88 B. 8
C. 90 D. 86

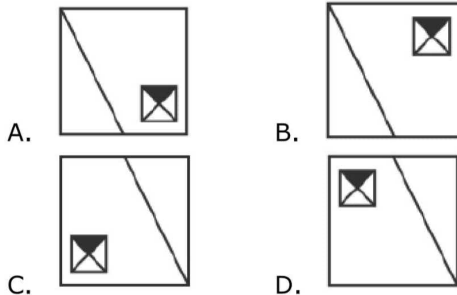
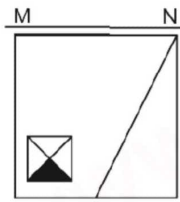
Ans. A

247. In the following question, four groups of three numbers are given. In each group the second and third number are related to the first number by a Logic/Rule/Relation. Three are similar on basis of same Logic/Rule/Relation. Select the odd one out from the given alternatives.

- A. (14, 29, 43) B. (15, 31, 46)
C. (18, 37, 52) D. (13, 27, 40)

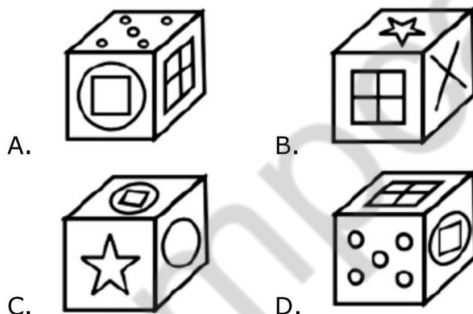
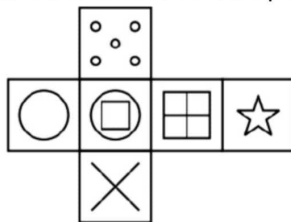
Ans. C

248. If a mirror is placed on the line MN, then which of the answer figures is the right image of the given figure?



Ans. D

249. Which of the following cube in the answer figure cannot be made based on the unfolded cube in the question figure?



Ans. C

250. A word is represented by only one set of numbers as given in any one of the alternatives. The sets of numbers given in the alternatives are represented by two classes of alphabets as shown in the given two matrices. The columns and rows of Matrix-I are numbered from 0 to 4 and that of Matrix-II are numbered from 5 to 9. A letter from these matrices can be represented first by its row and next by its column, for example 'B' can be represented by 13, 41 etc and 'R' can be represented

by 58, 59 etc. Similarly, you have to identify the set for the word 'SWAM'.

Matrix I अक्षर - I					
	0	1	2	3	4
0	A	L	J	F	B
1	L	F	M	B	J
2	J	I	D	G	F
3	A	F	A	G	J
4	B	B	M	I	F

Matrix II अक्षर - II					
	5	6	7	8	9
5	Y	T	O	R	R
6	U	Z	Z	P	O
7	V	Y	O	O	N
8	N	S	P	O	T
9	Z	Z	W	U	O

- A. 14,75,40,98 B. 86,97,32,12
C. 31,96,11,77 D. 24,65,13,95

Ans. B

251. Find the remainder in the expression $\frac{550 \times 651 \times 662}{7}$.

- A. 5 B. 4
C. 0 D. 3

Ans. C

252. Simplify $(11.998)^3 = ?$

- A. 1727.136 B. 1331.136
C. 1685.136 D. 1700.136

Ans. A

253. Find the value of $\left(\frac{\sqrt[4]{6}}{\sqrt[4]{3}}\right)^4$.

- A. 1 B. 2
C. 3 D. 4

Ans. B

254. Determine the value of $(a+1)^{b-1}$ when $a^b = 343$.

- A. 9 B. 64
C. 125 D. 216

Ans. B

255. In the two triangles ABC and DEF the sides AB = DE and BC = EF. Which of the following option is correct which results in the $\triangle ABC \cong \triangle DEF$?

- A. $\angle ACB = \angle EDF$ B. $\angle BAC = \angle EDF$
C. $\angle ACB = \angle DFE$ D. $\angle ABC = \angle DEF$

Ans. D

256. The triangle ABC and DEF are similar to each other. The measure of the angle A and E is 67 and 83 degree respectively. What is the value of angle C?

- A. 20° B. 30°
C. 40° D. 50°

Ans. B

257. If $R = 97$ and $S = 155.2$, then S is how much percentage more than R ?

- A. 60 B. 37.5
C. 58.2 D. 48

Ans. A

258. The ratio of two numbers is $5 : 6$. If their product is 1470, then what is the sum of both the numbers?

- A. 210 B. 77
C. 132 D. 98

Ans. B

259. U starts a business by investing Rs 45000 and V join him after one year with an amount of Rs 33000. After two years from the starting of business, they earned a profit of Rs 16400. What will be the U's share (in Rs) in the profit?

- A. 11200 B. 9600
C. 10000 D. 12000

Ans. D

260. A man buys 7 shirts at Rs 300 each, 2 trousers at Rs 450 each and 1 pair of shoes at Rs 500 each. What is the average expenditure (in Rs) per article?

- A. 210 B. 250
C. 320 D. 350

Ans. D

261. Compound interest on a certain sum for 2 years at the rate of 11% per annum is Rs 1160.5. What will be the simple interest (in Rs) for the same amount at the same rate of interest for 2 years?

- A. 9000 B. 1000
C. 1100 D. 1050

Ans. C

262. Two shirts are bought at the rate of Rs 400 each. Shopkeeper sells one at the profit of 150% and other at the loss of 150%. What will be the total profit or loss in the whole transaction?

- A. Loss of Rs 50
B. No profit/loss
C. Profit of Rs 25
D. Loss of Rs 150

Ans. B

263. Deepak marks the price of his table 60% above the cost price. He gives some discount on it and earns profit of 15.2%. What is the discount percentage?

- A. 36.4 B. 28
C. 44.8 D. 38.9

Ans. B

264. What is the value of $\sqrt[3]{729} + \sqrt{441} - \sqrt[3]{343}$?

- A. 48 B. 23
C. 7 D. 41

Ans. B

265. Parvesh is three times as efficient as Dinesh. Parvesh takes 20 days less than Dinesh to complete a book. If both of them work together, then in how many days the book will be completed?

- A. 7.5 B. 8
C. 10 D. 6.5

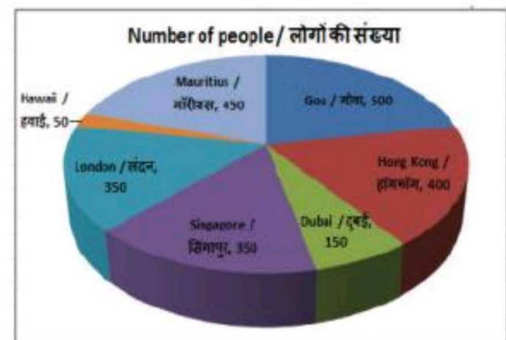
Ans. A

266. If Shubhangi walks with a speed of 2 km/hr, then she reaches her school 5/2 minutes late but if she walks with a speed of 2.5 km/hr, then she reaches 5 minutes before the scheduled time. What is the distance (in km) of her school from her house?

- A. 1.025 B. 1.125
C. 1.25 D. 1.5

Ans. C

267. The pie chart shows the results of an online survey which asked people about their favourite travel destination. Study the diagram and answer the following questions.



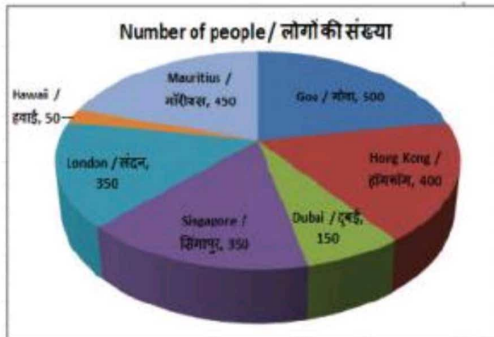
Which travel destination is the favourite of most people surveyed?

- A. Hong Kong B. Mauritius
C. Singapore D. Goa

Ans. D

268. The pie chart shows the results of an online survey which asked people about their favourite travel destination. Study the

diagram and answer the following questions.

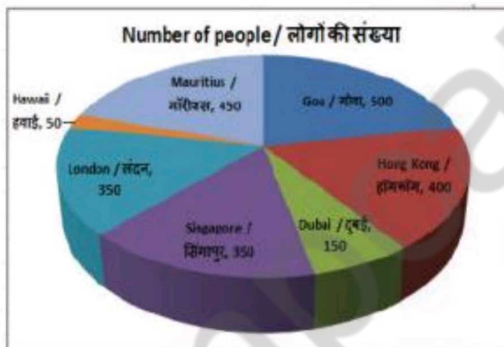


What is the total number of people who have responded to the survey?

- A. 2150 B. 2400
C. 2250 D. 2100

Ans. C

269. The pie chart shows the results of an online survey which asked people about their favourite travel destination. Study the diagram and answer the following questions.



The measure of the central angle of the sector representing number of people whose favourite travel destination is Hawaii is _____ degrees.

- A. 10 B. 12
C. 15 D. 8

Ans. D

270. The pie chart shows the results of an online survey which asked people about their favourite travel destination. Study the diagram and answer the following questions.



Respondents who say their favourite travel destination is Goa and those who say their favourite travel destination is Hong Kong constitute what percent of the total respondents?

- A. 25% B. 33.33%
C. 30% D. 40%

Ans. D

271. The length of the diagonal and the breadth of a rectangle are 26 cm and 10 cm respectively. Find its perimeter (in cm).

- A. 68 B. 136
C. 43 D. 86

Ans. A

272. If the sum of the interior angles of a regular polygon is 1260° , then how many sides does it have?

- A. 10 B. 12
C. 15 D. 9

Ans. D

273. Find the volume (in cm^3) of a right circular cylinder of diameter 42 cm and height 14 cm.

- A. 19404 B. 18018
C. 17321 D. 16729

Ans. A

274. $\triangle ABC$ is right angled at B. If $m\angle A = 30^\circ$, then find the value of $(\sin C + 1/3)$.

- A. $4/3$ B. $(\sqrt{3} + 1)/2$
C. $(\sqrt{3} + 2)/\sqrt{3}$ D. $(3\sqrt{3} + 2)/6$

Ans. D

275. $\triangle DEF$ is right angled at E. If $\cos D = 5/13$, then what is the value of $\tan F$?

- A. $5/13$ B. $5/12$
C. $13/5$ D. $13/12$

Ans. B

276. What does cyclical unemployment mean?

- A. Unemployment during recessionary phase of trade cycle
- B. Disguised unemployment
- C. Seasonal unemployment
- D. Voluntary unemployment

Ans. A

277. During which Five Year Planning was NABARD established?

- A. Fifth
- B. Sixth
- C. Third
- D. Ninth

Ans. B

278. Which of the following rulers started the Mughal style of painting?

- A. Babar
- B. Humayun
- C. Akbar
- D. Jahangir

Ans. B

279. Which of the following is related to the Tinkathiya Pratha?

- A. Champaran
- B. Kheda
- C. Bardoli
- D. Darbhanga

Ans. A

280. Which of the following pairs is NOT correctly matched?

- A. Silent volcano : Damavand
- B. Active volcano : Stromboli
- C. Dormant Volcano - Krakatau
- D. Extinct volcano - Etna

Ans. D

281. The mountain situated in the north-west India is: _____.

- A. Aravali
- B. Vindhya
- C. Hindukush
- D. Satpura

Ans. A

282. In which of the following areas, Pandit Jasraj has established his reputation?

- A. Literature writing
- B. Instrumental playing
- C. Classical singing
- D. Classical Dance

Ans. C

283. Which of the following has become the first country in the world to pay equal salary to men and women?

- A. Iceland
- B. Denmark
- C. Sweden
- D. Russia

Ans. A

284. Which Bollywood actor was honoured with the 24th Crystal Award at the world Economic Forum meeting in January 2018?

- A. Shahrukh Khan
- B. Aamir Khan
- C. Salman Khan
- D. Saif Ali Khan

Ans. A

285. National Flag of Bangladesh was designed by _____.

- A. Nandlal Bose
- B. Kazi Nazrul Islam
- C. Kamrul Hasan
- D. Ziaur Rahman

Ans. C

286. Which of the following is NOT a nucleon?

- A. Proton
- B. Electron
- C. Neutron
- D. No option is correct.

Ans. B

287. Baking soda is used _____.

- I. for making baking powder
 - II. in soda-acid fire extinguishers
 - III. to neutralize excess acid in the stomach
- A. Only I and II
 - B. Only I and III
 - C. Only II and III
 - D. All I, II and III

Ans. D

288. What are the minimum qualifications of a person to become a member of Lok Sabha?

- I. Must be a citizen of India
 - II. Must not be less than 25 years of age
 - III. Must hold an office of profit under Union Government.
- A. Both I and II
 - B. Both I and III
 - C. Both II and III
 - D. All I, II and III

Ans. A

289. In Indian parliamentary system, the leader of the largest opposition party having not less than _____ seats of total strength of the house is recognized as the leader of the opposition in that House.

- A. 1/10th B. 1/9th
C. 1/8 th D. 1/7 th

Ans. A

290. What is regulated by the sphincter muscle in the stomach?
A. Exit of the food from the stomach
B. Entry of food in the stomach
C. Mixing of food in the stomach
D. Exit of food from the large intestine

Ans. D

291. _____ of species is a reflection of their evolutionary relationships.
A. Characteristics
B. Adaptation
C. Illustration
D. Classification

Ans. D

292. National Skill Development Corporation (NSDC) and _____ are planning to launch 'Android Skill Development Programme' to impart mobile app development training.
A. Microsoft B. Google
C. Amazon D. Infosys

Ans. B

293. What is the name of the technology developed by Australian Scientists to transform soybean oil into graphene?
A. Grape B. GraphOne
C. GraphSoy D. GraphAir

Ans. D

294. In August 2017, who launched 'S&P BSE Bharat 22 Index'?
A. Asia Index
B. Europe Index
C. Australia Index
D. Africa Index

Ans. A

295. On 3 January 2018, Lok Sabha passed Ancient Monuments and Archaeological Site and Remains (Amendment) Bill, 2017 which amends the _____.
A. Ancient Monuments and Archaeological Sites and Remains (AMASR) Act, 1958
B. Ancient Monuments and Archaeological Sites and Remains (AMASR) Act, 1978

- C. Ancient Monuments and Archaeological Sites and Remains (AMASR) Act, 1988
D. Ancient Monuments and Archaeological Sites and Remains (AMASR) Act, 1996

Ans. A

296. Find the kinetic energy (in J) possessed by a body of mass 10 kg moving with a velocity of 5 m/s.
A. 25 B. 125
C. 62.5 D. 50

Ans. B

297. If the acceleration due to gravity on the surface of earth is g , then the acceleration due to gravity on the surface of a planet whose mass is double that of earth and radius is same as that of earth is _____.
A. $2g$ B. g
C. $g/2$ D. $4g$

Ans. A

298. An earthquake of magnitude 6 on Richter scale has _____ times more destructive energy than an earthquake of magnitude 4.
A. ten B. hundred
C. five D. thousand

Ans. D

299. Which of the statements given below are correct?
I. In 2017, Gary Cahill captained the Premier League team Chelsea.
II. In 2017, Jordan Henderson captained the Premier League team Liverpool.
III. Canada hosted the 2017 AIBA World Boxing Championships.
A. Only B B. Both A and B
C. Both B and C D. None of these

Ans. B

300. _____ is the premier trade body of and the chamber of commerce of the IT-BPO industry in India.
A. NIC
B. NASSCOM
C. Department of Information Technology
D. State Bank of India

Ans. B