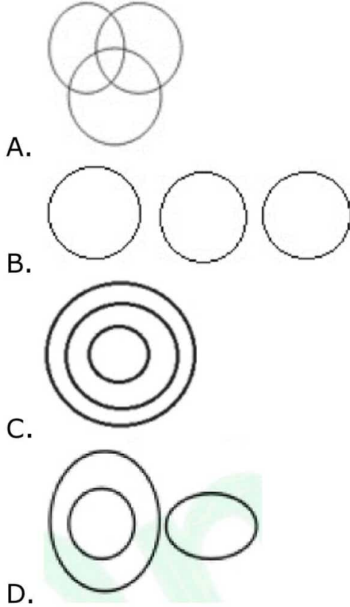


General Intelligence

1. Select the Venn diagram that best illustrates the relationship between the following classes.

Nurses, Doctors, Pharmacists



Ans: B

2. In a code language, CONSULTANCY is written as QOJKYOUYJWP. How will MASTERMINDS be written as in that language?

A. APOWIIIOZJEI B. APOWHIOZJEI
C. APOWIHOZJEI D. APOWJIOZJEI

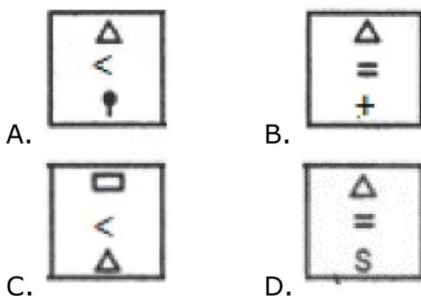
Ans: A

3. Ranga got thrice as many sums wrong as he got right in a mathematics assignment. If he attempted 72 sums in all, how many did he solve correctly in his mathematics assignment?

A. 16 B. 20
C. 14 D. 18

Ans: D

4. Select the figure that will come next in the following figure series.



Ans: D

5. If 'FORTUNE' is coded as '6521347' and 'PREY' is coded as '8279' then how will 'NEPTUNE' be coded as?

A. 4781347 B. 4781342
C. 4782347 D. 4781343

Ans: A

6. Select the option that is related to the third letter-cluster in the same way as the second letter-cluster is related to the first letter-cluster.

BANK : WXLJ :: IDOL : _____

A. DAKM B. ADMK
C. DAMJ D. DAMK

Ans: D

7. How many triangles are present in the following figure?



A. 23 B. 27
C. 25 D. 29

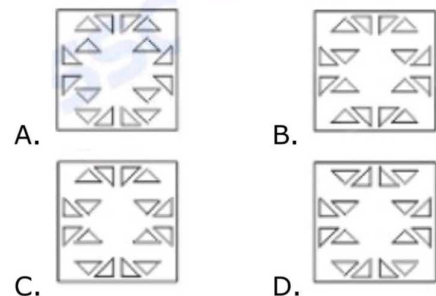
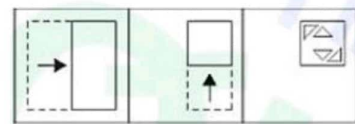
Ans: B

8. Three of the following four numbers are alike in a certain way and one is different. Pick the number that is different from the rest.

A. 83115 B. 54215
C. 43217 D. 12347

Ans: A

9. A paper is folded and cut as shown in the following figures. How will it appear when unfolded?



Ans: C

10. T is the sister of D. D is married to P. P is the son of M. T is the mother of J. Y is the father of U. Y has only one son and only one daughter. U is the daughter of T. Q is the son of D. If M is the wife of W, then how is Q related to W?

A. Son-in-law B. Son
C. Grandson D. Nephew

Ans: C

11. Which number will replace the question mark (?) in the following series?

2, 4, 16, 52, 132, 282, ?

- A. 512 B. 527
C. 534 D. 572

Ans: C

12. Three of the following four words are alike in a certain way and one is different. Pick the odd word out.

- A. Germany B. Singapore
C. Austria D. Italy

Ans: B

13. Select the combination of letters that when sequentially placed in the gaps of the gives letter series will complete the series.

ab _ba_ db _bd_ ac _ba_ db_ cdbabd

- A. dcadbbab B. dcabdbab
C. cdabdbba D. dcdabbab

Ans: B

14. Two statements are given, followed by three conclusions numbered I, II and III. Assuming the statements to be true, even if they seem to be at variance with commonly known facts, decide which of the conclusions logically follow(s) from the statements.

Statements:

All women are engineers.
Some singers are engineers.

Conclusions:

- I. All women are singers.
II. All singers are women
III. Some engineers are women.

- A. Only conclusions I and II follow.
B. Only conclusion I follows.
C. Only conclusion III follows.
D. Only conclusions II and III follow.

Ans: C

15. From the given alternatives select the numbers that must be interchanged to make the following equation correct.

16 - 6 + 12 × 3 ÷ 4 = 18

- A. 16 and 3 B. 6 and 3
C. 12 and 4 D. 6 and 4

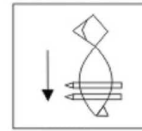
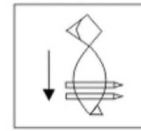
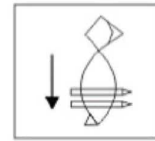
Ans: D

16. Rs. 2100 is divided among P, Q and R in such a way that P's share is half of the combined share of Q and R, and Q's share is one-fourth of the combined share of P and R. By what amount is R's share more than that of P?

- A. Rs. 280 B. Rs. 500
C. Rs. 200 D. Rs. 250

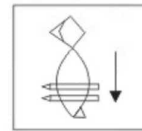
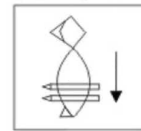
Ans: A

17. Select the correct mirror image of the given figure when the mirror is placed to the right of the figure.



A.

B.



C.

D.

Ans: D

18. 'Cone' is related to 'Ice-cream' in the same way as 'Bowl' is related to '_____':

- A. Soup B. Soap
C. Sip D. Drink

Ans: A

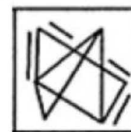
19. Arrange the following words in a logical and meaningful order.

1. Lustrum 2. Century
3. Year 4. Millennium
5. Decade

- A. 2, 1, 5, 3, 4 B. 5, 1, 3, 2, 4
C. 3, 1, 5, 2, 4 D. 5, 4, 3, 2, 1

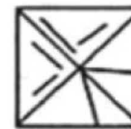
Ans: C

20. Select the option in which the given figure is embedded.



A.

B.



C.

D.

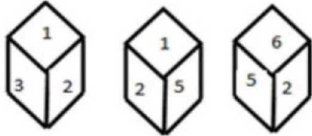
Ans: C

21. In a code language, 'CERTAIN' is written as 'XVIGZRM'. How will 'CLIMATE' be written as in that language?

- A. XORNZGV B. XORNZVG
C. XRONZGV D. XONRZGV

Ans: A

22. The different positions of the same dice are shown. Find the number on the face opposite to the one having 1



- A. 6
C. 4
- B. 3
D. 2

Ans: A

23. Which number will replace the question mark (?) in the following series?

89, 90, 82, 109, 45, ?

- A. -80
C. 170
- B. 125
D. 109

Ans: C

24. Select the word-pair in which the two words are related in the same way as are the two words in the following word-pair.

Myopic : Farsighted

- A. Famous : Obscure
B. Confusion : Chaotic
C. Postpone : Suspend
D. Trouble : Grief

Ans: A

25. Select the set in which the numbers are related in the same way as are the numbers of the following set.

(15, 102, 313)

- A. (11, 74, 229)
C. (8, 53, 164)
- B. (5, 32, 121)
D. (9, 60, 185)

Ans: A

General Awareness

1. In which state is Sambhar, the largest inland salt water lake of India located?
A. Maharashtra
B. Odisha
C. Andhra Pradesh
D. Rajasthan

Ans: D

2. Former Flipkart executive Sandeep Patil was appointed as India Managing Director of which company in May 2019?
A. Amazon
B. TrueCaller
C. Paytm
D. Snapdeal

Ans: B

3. Which State Government increased the financial aid given to girls under the 'Aapki Beti' scheme in May 2019?
A. Sikkim
B. Odisha
C. Rajasthan
D. Assam

Ans: C

4. Who among the following clinched a gold medal in the women's 25m pistol event at the 2019 ISSF World Cup?
A. Rahi Sarnobat
B. Heena Sidhu
C. Manu Bhaker
D. Devanshi Rana

Ans: A

5. Which one of the following Union Territories has been granted with partial statehoodship?

- A. Puducherry
B. Daman and Diu
C. Dadra and Nagar Haveli
D. Lakshadweep

Ans: A

6. Hertz is the SI unit of:

- A. Frequency
C. Pressure
- B. Force
D. Energy

Ans: A

7. In Lok Sabha 2019 Elections, Congress won _____ seats out of the 13 Lok Sabha seats of Punjab.

- A. 8
C. 10
- B. 6
D. 5

Ans: A

8. Financial Literacy Week 2019' is an initiative by which bank to promote awareness on key topics every year through a focused campaign?

- A. State Bank of India
B. ICICI Bank
C. Reserve Bank of India
D. Indian Bank

Ans: C

9. In which state is the Mundra Power Plant located?

- A. Gujarat
C. Chhattisgarh
- B. Madhya Pradesh
D. Odisha

Ans: A

10. What is the name of the Young Scientist Programme inaugurated by the Chairman of ISRO in May 2019?

- A. Yuva-2019
B. Young India-2019
C. Youth-2019
D. Yuvika-2019

Ans: D

11. In May 2019, which of the following companies announced that it would stop selling its smartphones in India?

- A. Samsung
C. Sony
- B. Apple
D. OnePlus

Ans: C

12. Which of the following countries hosted the Asian Cup Football tournament in 2019?

- A. Singapore
C. UAE
- B. China
D. South Korea

Ans: C

13. The investment and financial services major Goldman Sachs has sanctioned \$250 million to construct one of its largest global workspaces in _____.

- A. Bengaluru
C. Gurugram
- B. Pune
D. Chennai

Ans: A

14. In which year was Satya Sodhak Samaj founded by Jyotirao Phule?
A. 1865 B. 1873
C. 1861 D. 1870

Ans: B

15. Who among the following was elected to the board of the International Air Transport Association (IATA) in June 2019?
A. Rahul Bhatia B. Ajay Singh
C. Naresh Goyal D. Bhaskar Bhat

Ans: B

16. The Himalayas belong to which of the following categories of mountains?
A. Plateau Mountain
B. Fault-block Mountain
C. Fold Mountain
D. Dome Mountain

Ans: C

17. The National Institute of Nutrition is located in:
A. Shillong B. Indore
C. Mumbai D. Hyderabad

Ans: D

18. The quote "The shots that hit me are the last nails to the coffin of British rule in India." Belongs to which of the following freedom fighters?
A. Lala Lajpat Rai
B. Chandrashekhar Azad
C. Bhagat Singh
D. Ram Prasad Bismil

Ans: A

19. In the field of Information & Communication Technology, what is the full form of EEPROM?
A. Electrically Erasable Programmable Read-Only Memory
B. Electrically Efficient Portable Read-Only Memory
C. Electrically Efficient Programmable Read-Only Memory
D. Enhanced Electrical Portable Read-Only Memory

Ans: A

20. 'Pivot Table' is a feature of which of the following softwares?
A. Microsoft Excel
B. Microsoft Word
C. Microsoft Access
D. Microsoft PowerPoint

Ans: A

21. Which eminent novelist and poet of the 20th century is the author of 'Pinjar'?
A. Amrita Pritam
B. Harivansh Rai Bachchan
C. Bhawai Prasad Mishra
D. Prabha Kiran Jain

Ans: A

22. The winners of the 2019 ICC men's World Cup will earn a cash award of _____ which is the highest prize money on offer in the history of the tournament.

- A. \$6 million B. \$4 million
C. \$5 million D. \$2 million

Ans: B

23. The 'World Blood Donor Day' was celebrated around the world on _____ 2019 with the theme 'Safe blood for all'.
A. 16th March B. 29th April
C. 14th June D. 25th May

Ans: C

24. Soorya Festival' is associated to which of the following cities?
A. Thiruvananthapuram
B. Chennai
C. Jaipur
D. Hyderabad

Ans: A

25. In the solar system, among the planet listed below, which planet is farthest from the Sun?
A. Mars B. Jupiter
C. Neptune D. Venus

Ans: C

Quantitative Aptitude

1. Anu spends 90% of her income. If her expenditure increases by 25% and savings increase by 30%, then by what percent does her salary increase?
A. 25.5% B. 24%
C. 22.5% D. 20%

Ans: A

2. Let $\triangle ABC \sim \triangle QPR$ and $\frac{ar(\triangle ABC)}{ar(\triangle PQR)} = \frac{9}{16}$.
If $AB = 12$ cm, $BC = 6$ cm and $AC = 9$ cm, then QP is equal to:
A. 16 cm B. 9 cm
C. 12 cm D. 8 cm

Ans: A

3. A circle is inscribed in a quadrilateral ABCD, touching sides AB, BC, CD and DA at P, Q, R and S, respectively. If $AS = 8$ cm, $BC = 11$ cm, and $CR = 5$ cm, then the length AB is equal to:
A. 12 cm B. 13 cm
C. 16 cm D. 14 cm

Ans: D

4. If $3\cos^2 A + 6\sin^2 A = 3$, $0^\circ \leq A \leq 90^\circ$, then the value of A is:
A. 30° B. 0°
C. 90° D. 45°

Ans: B

5. In $\triangle ABC$, $AD \perp BC$ at D and AE is the bisector of $\angle A$. If $\angle B = 72^\circ$ and $\angle C = 26^\circ$, then what is the measure of $\angle DAE$?

- A. 23° B. 25°
C. 49° D. 37°

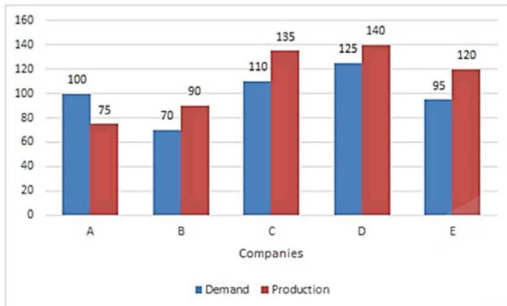
Ans: A

6. The value of $\frac{(\cos 9^\circ + \sin 81^\circ)(\sec 9^\circ + \operatorname{cosec} 81^\circ)}{\sin 56^\circ \sec 34^\circ + \cos 25^\circ \operatorname{cosec} 65^\circ}$ is:

- A. $\frac{1}{2}$ B. 4
C. 2 D. 1

Ans: C

7. The given Bar Graph presents the Demand and Production of motorcycles of five companies (in lakhs).



The average Production of motorcycles of companies B, C and E taken together is what percent less than the Demand of motorcycles of D?

- A. 8% B. 8.7%
C. 9.3% D. 6%

Ans: A

8. A simplified value of $\left(\frac{\sin \theta}{1 + \cos \theta} + \frac{1 + \cos \theta}{\sin \theta}\right) \left(\frac{1}{\tan \theta + \cot \theta}\right)$ is:

- A. $\cos \theta$ B. $2 \sin \theta$
C. $\sin \theta$ D. $2 \cos \theta$

Ans: D

9. If $3 - 2 \sin^2 \theta - 3 \cos \theta = 0$, $0^\circ < \theta < 90^\circ$, then what is the value of $(2 \operatorname{cosec} \theta + \tan \theta)$?

- A. $7\sqrt{3}$ B. $5\sqrt{3}$
C. $\frac{5\sqrt{3}}{3}$ D. $\frac{7\sqrt{3}}{3}$

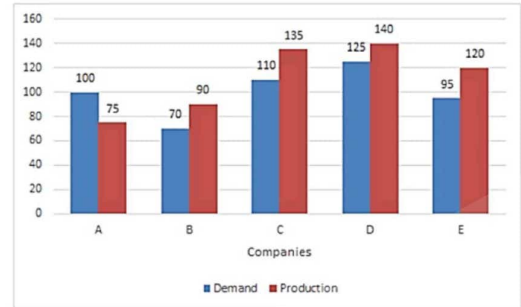
Ans: D

10. Abhi sold two articles for Rs. 5,220 each. On one, he gained 16% and on the other, he lost 10%. His profit or loss on the whole was:

- A. Profit, Rs. 140 B. Loss, Rs. 125
C. Profit, Rs. 180 D. Loss, Rs. 130

Ans: A

11. The given Bar Graph presents the Demand and Production of motorcycles of five companies (in lakhs).



What is the ratio of the total Demand of motorcycles of companies A and D taken together to the Production of motorcycles of company C?

- A. 13 : 9 B. 8 : 5
C. 5 : 3 D. 9 : 7

Ans: C

12. A and B, working together, can complete a work in 16 days, C and A together can complete it in 32 days, B and C together can complete it in 24 days. They worked together for 12 days. In how many days will C alone complete the remaining work?

- A. 40 B. 36
C. 45 D. 32

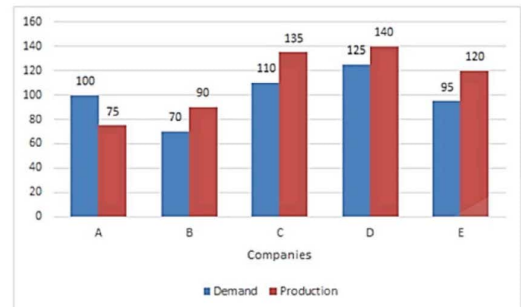
Ans: B

13. If $a^3 + b^3 = 110$ and $a + b = 5$, then $(a + b)^2 - 3ab$ is equal to:

- A. 52 B. 32
C. 42 D. 22

Ans: D

14. The given Bar Graph presents the Demand and Production of motorcycles of five companies (in lakhs).



The total Production of motorcycles of companies B and D taken together is what percent of the Demand of motorcycles of all the companies taken together?

- A. 46% B. 38%
C. 48% D. 40%

Ans: A

15. The total number of students in class A and B is 96. The number of students in A is 40% more than that in B. The average weight (in kg) of the students in B is 50% more than that of the stu-

dents in A. If the average weight of all the students in A and B taken together is 58 kg, then what is the average weight of the students in B?

- A. 72 kg B. 60 kg
C. 48 kg D. 66 kg

Ans: A

16. If $a + b + c = 5$, and $a^2 + b^2 + c^2 = 33$, then what is the value of $a^3 + b^3 + c^3 - 3abc$?

- A. 195 B. 180
C. 192 D. 185

Ans: D

17. If $40\sqrt{5}x^3 - 3\sqrt{3}y^3 = (2\sqrt{5}x - \sqrt{3}y) \times (Ax^2 + Bxy + Cy^2)$, then what is the value of $\sqrt{B^2 + C^2} - A$?

- A. 11 B. 7
C. 8 D. 9

Ans: B

18. What is the compound interest on a sum of Rs. 4,096 at 15% p.a. for $2\frac{1}{2}$ years, if the interest is compounded 10-monthly?

- A. Rs. 1,726 B. Rs. 1,736
C. Rs. 1,636 D. Rs. 1,763

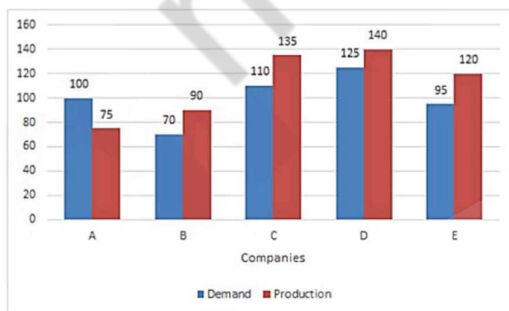
Ans: B

19. A train x running at 84 km/h crosses another train y running at 52 km/h in opposite direction in 12 seconds. If the length of y is two-third that of x, then what is the length of x?

- A. 250 m B. 242 m
C. 272 m D. 408 m

Ans: C

20. The given Bar Graph presents the Demand and Production of motorcycles of five companies (in lakhs).



The company in which the Production of motorcycles is approximately 23% more than the Demand is:

- A. B B. C
C. D D. E

Ans: B

21. If $x^2 + 1 = 3x$, then the value of $\frac{(x^4 + x^{-2})}{(x^2 + 5x + 1)}$ is:

- A. $2\frac{1}{3}$ B. $2\frac{1}{4}$
C. $4\frac{1}{2}$ D. $3\frac{1}{2}$

Ans: B

22. In an examination, the success to failure ratio was 5 : 2. Had the number of failures been 14 more, then the success to failure ratio would have been 9 : 5. The total number of candidates who appeared for the examination was:

- A. 210 B. 196
C. 126 D. 203

Ans: B

23. In a circle, chords AB and CD intersect each other at E. If CD = 18 cm, DE = 6 cm and AE = 18 cm, then BE = ?

- A. 6 cm B. 8 cm
C. 3 cm D. 4 cm

Ans: D

24. In $\triangle ABC$, $\angle A = 90^\circ$. If BL and CM are the medians, then:

- A. $4(BL^2 + CM^2) = 3BC^2$
B. $4(BL^2 + CM^2) = 5BC^2$
C. $3(BL^2 + CM^2) = 4BC^2$
D. $5(BL^2 + CM^2) = 4BC^2$

Ans: B

25. The radius of the base of a cylinder is 7 cm and its curved surface area is 440 cm². Its volume (in cm³) will be:

(Take $\pi = \frac{22}{7}$)

- A. 1760 B. 1430
C. 1540 D. 1650

Ans: C

English Language

1. Select the most appropriate antonym of the given word.

MOROSE

- A. sullen B. cheerful
C. unsatisfied D. mournful

Ans: B

2. Select the most appropriate antonym of the given word.

CORROBORATE

- A. confirm B. approve
C. verify D. contradict

Ans: D

3. Select the most appropriate option to substitute the underlined segment in

the given sentence. If there is no need to substitute it, select No improvement.

The children are too young to **sit up** a long lecture.

- A. No improvement
- B. sit across
- C. sit away
- D. sit through

Ans: D

4. Select the word which means the same as the group of words given.

That which cannot be taken by force

- A. inaccessible
- B. impregnable
- C. inapprehensible
- D. immutable

Ans: B

5. In the sentence identify the segment which contains the grammatical error.

Different-coloured natural foods not only put a smile on children's faces and also benefit their overall growth.

- A. benefit their overall growth
- B. and also benefit
- C. Different-coloured natural foods
- D. put a smile on children's faces

Ans: B

6. Given below are four jumbled sentences. Out of the given options pick the one that gives their correct order.

- A.** Early on Christmas morning Pip returns to the graveyard with the file, a pie and brandy.
- B.** On Christmas Eve, Pip, an orphan who is about seven years old, encounters an escaped convict in the village graveyard.
- C.** The convict scares Pip into stealing food and a file.
- D.** Pip, who lives his elder sister and her husband Joe Gargery, a blacksmith, steals a file and some food.

- A. BCDA
- B. CBAD
- C. BDCA
- D. DCAB

Ans: A

7. Given below are four jumbled sentences. Out of the given options pick the one that gives their correct order.

- A.** In a small town in England, there lived a poor little girl.
- B.** She was very excited but her right shoe was worn out.
- C.** So, she went to a cobbler to get it mended.
- D.** Her friend invited her to come to her birthday party.

- A. DCAB
- B. ACBD

- C. ADBC
- D. CBAD

Ans: C

8. Select the correct indirect form of the given sentence.

I asked the shopkeeper, "What is the price of this bike?"

- A. I asked the shopkeeper that what the price of this bike was.
- B. I asked the shopkeeper what is the price of this bike.
- C. I asked the shopkeeper what was the price of that bike.
- D. I asked the shopkeeper what the price of that bike was.

Ans: D

9. Select the most appropriate synonym of the given word.

EMBED

- A. pull
- B. bury
- C. dig up
- D. rise

Ans: B

10. Select the most appropriate meaning of the given idiom.

As clear as mud

- A. extremely dirty
- B. honest and legal
- C. impossible to understand
- D. completely suitable for someone

Ans: C

11. Select the most appropriate option to substitute the underlined segment in the given sentence. If there is no need to substitute it, select No improvement.

I try to avoid **travel in** the rush hour.

- A. travelling in
- B. No improvement
- C. to travel at
- D. travelling on

Ans: A

12. Select the wrongly spelt word.

- A. brood
- B. blossom
- C. boast
- D. booty

Ans: B

13. In the sentence identify the segment which contains the grammatical error.

The Cannes Film Festival attract some of the world's most famous people.

- A. the world's
- B. The Cannes Film Festival
- C. attract some of
- D. most famous people

Ans: C

14. Select the most appropriate synonym of the given word.

COMBUSTIBLE

- A. nonexplosive
- B. fragile

- C. unbreakable D. inflammable

Ans: D

- 15.** Select the most appropriate word to fill in the blank.

The thick smoke _____ out of the land-fill site is making the city's polluted air even more toxic.

- A. burning B. tossing
C. billowing D. rocking

Ans: C

- 16.** Select the most appropriate word to fill in the blank.

Financial institutions that had their premises in the World Trade Centre were crippled by the loss of _____ and hardware.

- A. individual B. personnel
C. group D. person

Ans: B

Comprehension:

In the following passage some words have been deleted. Fill in the blanks with the help of the alternatives given. Select the most appropriate option for each blank.

Bill Gates is the second-richest **(1)** _____ in the world. He is **(2)** _____ an estimated \$ 103 billion. His wealth **(3)** _____ only by Jeff Bezos, **(4)** _____ has a current net worth of \$ 116 billion. Gates is **(5)** _____ rich that an average American spending \$ 1 is similar to Gates spending \$ 1.06 million.

SubQuestion No: 17

- 17.** Select the most appropriate option for blank No. 1.
A. person B. personnel
C. character D. human

Ans: A

Comprehension:

In the following passage some words have been deleted. Fill in the blanks with the help of the alternatives given. Select the most appropriate option for each blank.

Bill Gates is the second-richest **(1)** _____ in the world. He is **(2)** _____ an estimated \$ 103 billion. His wealth **(3)** _____ only by Jeff Bezos, **(4)** _____ has a current net worth of \$ 116 billion. Gates is **(5)** _____ rich that an average American spending \$ 1 is similar to Gates spending \$ 1.06 million.

SubQuestion No: 18

- 18.** Select the most appropriate option for blank No. 2.
A. classes B. worth

- C. valuable D. cost

Ans: B

Comprehension:

In the following passage some words have been deleted. Fill in the blanks with the help of the alternatives given. Select the most appropriate option for each blank.

Bill Gates is the second-richest **(1)** _____ in the world. He is **(2)** _____ an estimated \$ 103 billion. His wealth **(3)** _____ only by Jeff Bezos, **(4)** _____ has a current net worth of \$ 116 billion. Gates is **(5)** _____ rich that an average American spending \$ 1 is similar to Gates spending \$ 1.06 million.

SubQuestion No: 19

- 19.** Select the most appropriate option for blank No. 3.
A. is surpassed B. surpasses
C. is surpassing D. surpassed

Ans: A

Comprehension:

In the following passage some words have been deleted. Fill in the blanks with the help of the alternatives given. Select the most appropriate option for each blank.

Bill Gates is the second-richest **(1)** _____ in the world. He is **(2)** _____ an estimated \$ 103 billion. His wealth **(3)** _____ only by Jeff Bezos, **(4)** _____ has a current net worth of \$ 116 billion. Gates is **(5)** _____ rich that an average American spending \$ 1 is similar to Gates spending \$ 1.06 million.

SubQuestion No: 20

- 20.** Select the most appropriate option for blank No. 4.
A. which B. whose
C. whom D. who

Ans: D

Comprehension:

In the following passage some words have been deleted. Fill in the blanks with the help of the alternatives given. Select the most appropriate option for each blank.

Bill Gates is the second-richest **(1)** _____ in the world. He is **(2)** _____ an estimated \$ 103 billion. His wealth **(3)** _____ only by Jeff Bezos, **(4)** _____ has a current net worth of \$ 116 billion. Gates is **(5)** _____ rich that an average American spending \$ 1 is similar to Gates spending \$ 1.06 million.

SubQuestion No: 21

21. Select the most appropriate option for blank No. 5.

- A. so B. too
C. as D. such

Ans: A

22. Select the correct passive form of the given sentence.

Bill Gates has given away twenty seven percent of his wealth in charity.

- A. Twenty seven percent of his wealth had been given away by Bill Gates in charity.
B. Twenty seven percent of his wealth has given away Bill Gates in charity.
C. Bill Gates has been given away by twenty seven percent of his wealth in charity.
D. Twenty seven percent of his wealth has been given away by Bill Gates in charity.

Ans: D

23. Select the most appropriate meaning of the given idiom

Spill the beans

- A. create difficulty
B. makes an excuse
C. reveal a secret
D. frighten someone

Ans: C

24. Select the word which means the same as the group of words given.

A large impressive house

- A. mansion B. cabin
C. shack D. fort

Ans: A

25. Select the wrongly spelt word.

- A. emphasis B. emporium
C. emmision D. emolument

Ans: C