

MP Patwari

Memory Based Paper
15th Mar, 2023 Shift 2

mpcareer.in

200 Questions

Que. 1 'शचीपति' पर्याय है-

1. इंद्र
2. शिव
3. कृष्ण
4. गणपति

Correct Option - 1

Que. 2 The chemical formula of lime water is:

1. CaO
2. CaCO₃
3. Ca(HCO₃)₂
4. Ca(OH)₂

Correct Option - 4

Que. 3 **Direction:** Choose the correct antonym of the following word from the options given below:

Encourage

1. incite
2. persuade
3. aid
4. discourage

Correct Option - 4

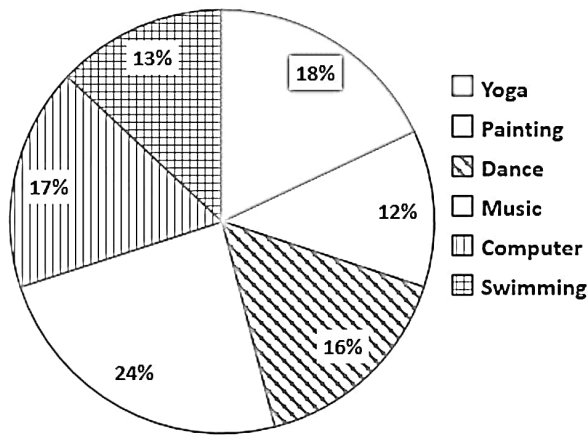
Que. 4 **Directions :** This question consists of a sentence, parts of which have been jumbled. These parts have been labelled as P, Q, R and S. Given below each sentence are four sequences, namely (a), (b), (c) and (d). You are required to re-arrange the jumbled parts of the sentence and mark your response accordingly.

was specifically dedicated to(P)/ the first organization which(Q)/ the Russian White movement(R)/ opposing communism was(S)

1. QPSR
2. QSRP
3. RSPQ
4. RPQS

Correct Option - 1

Que. 5 The given pie-chart shows the total number of children who opted different courses in a summer camp in May 2019.



300 students attended the summer camp, and every child was allowed to opt only one activity for the camp. The total number of students who opted for Yoga and Painting taken together is how much less than the total number of children who opted for Music and Dance taken together?

1. 45
2. 35
3. 30
4. 40

Correct Option - 3

Que. 6 Mohit bought a horse and a carriage for Rs. 4000. He sold the horse at a gain of 20% and the carriage at a loss of 10%, thereby gaining 2% on the whole. Find the cost of the horse?

1. Rs. 1000
2. Rs. 1400
3. Rs. 1200
4. Rs. 1600

Correct Option - 4

Que. 7 Select the option that expresses the given sentence in direct speech.

Radhika exclaimed with sorrow that life had become wretched.

1. Radhika said, "How wretched had become life!"
2. Radhika said, "Oh! What wretched life will become."
3. Radhika said, "Life has become wretched."
4. Radhika said, "Alas! How wretched life has become."

Correct Option - 4

Que. 8 The efficiencies of A, B, and C are in the ratio 5 : 3 : 2. Working together, they can complete a task in 21 hours. In how many hours will B alone complete 40% of that task?

1. 28
2. 24
3. 21
4. 35

Correct Option - 1

Que. 9

The ratio of the present ages of Ram and Ramesh is 3 : 5. After 7 years the ratio of their ages will be 4 : 5. Find the present age of Ramesh.

1. 5 years
2. 15 years
3. 7 years
4. 12 years

Correct Option - 3

Que. 10 निम्नलिखित में से शुद्ध वर्तनी का चयन कीजिए:

1. आधात्म
2. ख्याल
3. नर्क
4. खरोच

Correct Option - 4

Que. 11 The average weight of the class is 60 kg and the average weight of boys in the class is 80 kg. The ratio of boys to girls in the class is 5 : 4. If there are 72 students in the class. Find the average weight of girls

1. 45
2. 35
3. 40
4. 30

Correct Option - 2

Que. 12 B.O.D. (Biological Oxygen Demand) is connected with:

1. Organic matter
2. Microbes
3. Microbes and Organic matter
4. None of the above

Correct Option - 3

Que. 13 Select the correct direct form of the given sentence.

William told Marry that he was meeting with the client later that afternoon.

1. William said, "I will meet the client this afternoon."
2. William said, "I am meeting with the client yesterday."
3. William said, "I met with the client later that afternoon."
4. William said to Marry, "I am meeting with the client later this afternoon."

Correct Option - 4

Que. 14 इनमें अयादि संधि का उदाहरण कौनसा है?

1. प्रेत
2. इत्यर्थ
3. पवन
4. अत्याचार

Correct Option - 3

Que. 15 In an examination, a student had to obtain 33% of the maximum marks to pass. He got 125 marks and failed by 40 marks. The maximum marks were

1. 500
2. 600
3. 800
4. 1000

Correct Option - 1

Que. 16 Direction: Select the INCORRECTLY spelt word.

1. Immediate
2. Massage
3. Amass
4. Messanger

Correct Option - 4

Que. 17 Choose the one which is the nearest in meaning to the given word.

RECALL

1. Speak
2. Receive
3. Face
4. Remember

Correct Option - 4

Que. 18 निम्न में से तद्भव - तत्सम का कौन सा युग्म सुमेलित नहीं है?

1. पत्ता - पत्र
2. नीबू - निम्बक
3. पानीय - दूध
4. पंछी - पक्षी

Correct Option - 3

Que. 19 'डाकू' का पर्यायवाची है-

1. प्रवंचक
2. बटमार
3. रक्ततुण्ड
4. प्रगल्भ

Correct Option - 2

Que. 20 निम्नलिखित में से किस वाक्य में विराम चिन्ह का उचित प्रयोग हुआ है?

1. अध्यापिका ने कक्षा में 'अपना घर' लघुकथा सुनाई।
2. अध्यापिका ! ने कक्षा में अपना 'घर' लघुकथा सुनाई।
3. अध्यापिका' ने कक्षा में अपना घर लघुकथा सुनाई।
4. अध्यापिका ने कक्षा में अपना ' घर लघुकथा सुनाई।

Correct Option - 1

Que. 21 'चपला - चपल' के समरूपी भिन्नार्थक हैं-

1. बिजली - तेज
2. तेज - बिजली
3. बादल - गर्जन
4. गर्जन - बादल

Correct Option - 1

Que. 22 A, B and C can complete a piece of work in 45, 36 and 60 days respectively. They started working together, but after 6 days A and B left the work. In how many days C alone will complete the remaining work?

1. 42
2. 30
3. 36
4. 27

Correct Option - 3

Que. 23 A bag contains Rs. 5, Rs. 2, and Rs. 1 coins in the ratio 5 : 6 : 7. If the total amount is Rs. 220, then number of Rs. 2 coins in the bag is -

1. 120
2. 35
3. 30
4. 60

Correct Option - 3

Que. 24 **Direction:** Select the most appropriate SYNONYM of the given word.

SIGNIFICANT

1. energetic
2. important
3. lustful
4. static

Correct Option - 2

Que. 25 The sum of mean, median and mode of the data:

11, 14, 9, 30, 35, 17, 19, 28, 23, 48, 36, 30 is

1. 80.5
2. 78.5
3. 76
4. 75

Correct Option - 1

Que. 26 Out of the given options, choose the one which is the correct active voice of the sentence given below.

The assignment had not been completed by me.

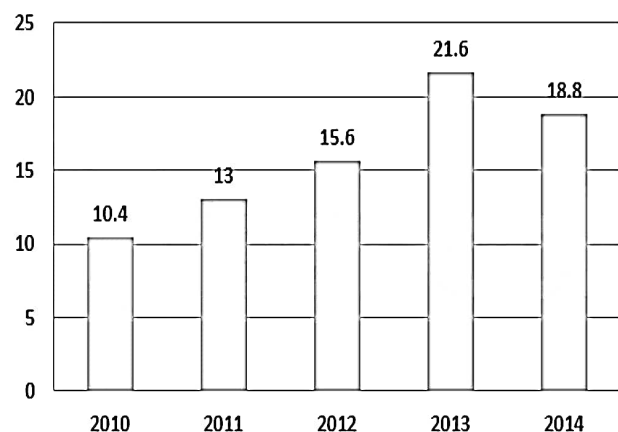
1. I have not complete the assignment.

2. I had not completed the assignment.
3. I had not been completed the assignment.
4. The assignment was not complete by me.

Correct Option - 2

Que. 27 Study the given bar-graph and answer the question that follows.

The bar-graph shows the export of rice (in Rs. lakh) during five years.



The average export of rice for the years 2010 to 2014 (in Rs. lakh) was:

1. 13.28
2. 14.78
3. 15.88
4. 16.56

Correct Option - 3

Que. 28 Select the option that expresses the given sentence in direct speech.

The commander ordered the soldiers to go straight to their barracks.

1. "Go straight to your barracks," the commander said to the soldiers.
2. "Go straight to their barracks," the commander said to the soldiers.
3. The commander said to the soldiers, "Please go straight to your barracks."
4. The commander said, "Soldiers, to go straight to their barracks."

Correct Option - 1

Que. 29 निम्न में से शुद्ध वाक्य का चयन करें।

1. बच्चों को पढ़ाना उसकी वृत्ति था।
2. बच्चों के पढ़ाना उसकी वृत्ति थी।
3. बच्चों को पढ़ाना उसका वृत्ति थी।
4. बच्चों को पढ़ाना उसकी वृत्ति थी।

Correct Option - 4

Que. 30 मोटे अक्षरों में दिए गये शब्द के विलोम का चयन उसके नीचे दिए गए विकल्पों में से कीजिये।

खंडन

1. एकमुखी

2. प्रतीची
3. विघटन
4. मण्डन

Correct Option - 4

Que. 31 $\triangle ABC$ is similar to $\triangle DEF$. If the area of $\triangle ABC$ is 9 sq. cm, and area of $\triangle DEF$ is 16 sq.cm, and $EF = 2.8$. then the length of BC will be

1. 2.1 cm
2. 2.6 cm
3. 4.8 cm
4. 3.6 cm

Correct Option - 1

Que. 32 Which of the following chemical element does not belong to the group of alkaline earth metals?

1. Calcium
2. Barium
3. Radium
4. Potassium

Correct Option - 4

Que. 33 Out of the following options, choose the correct form of verb that is in agreement with the subject for the given sentence:

A number of students _____ suspended during the riots in 1998.

1. were
2. is
3. has been
4. are

Correct Option - 1

Que. 34 Direction: Find the misspelt word.

1. Prioratise
2. Picturise
3. Visualise
4. Individualise

Correct Option - 1

Que. 35 'यण स्वर संधि' की दृष्टि से असंगत विकल्प का चयन कीजिए -

1. मनु + अन्तर = मन्वन्तर
2. पितृ + इच्छा = पित्रिच्छा
3. स्व + अवलंबन = स्वावलंबन
4. अभि + अस्त = अभ्यस्त

Correct Option - 3

Que. 36 Which of the following types of radiation do Greenhouse gases emit?

1. Ultraviolet (UV)
2. Visible
3. Infrared (IR)
4. Gamma

Correct Option - 3

Que. 37 Select the correct active form of the following sentence:

The short man was being laughed at by the students.

1. The students are laughing at the short man.
2. The students laugh at the short man.
3. The students laughed at the short man.
4. The students were laughing at the short man.

Correct Option - 4

Que. 38 The SI unit of heat is

1. Kilocalorie
2. Erg
3. Joule
4. Calorie

Correct Option - 3

Que. 39 शुद्ध वाक्य छाँटिए :

1. मैंने कपड़े पहनने हैं।
2. मुझे कपड़े पहनने हैं।
3. मेरे को कपड़े पहनने हैं।
4. मुझे कपड़े पहनना है।

Correct Option - 2

Que. 40 In comparison to pure water, Boiling point of impure water

1. is same
2. increases
3. decreases
4. first decreases then Increases

Correct Option - 2

Que. 41 **Directions** : This question consists of a sentence, parts of which have been jumbled. These parts have been labelled as P, Q, R and S. Given below each sentence are four sequences, namely (a), (b), (c) and (d). You are required to re-arrange the jumbled parts of the sentence and mark your response accordingly.

orwell produced(P)/ literary criticism, poetry,(Q)/ fiction and(R)/ polemical journalism(S)

1. PQRS
2. PSQR
3. PQSR
4. SRQP

Correct Option - 1

Que. 42 What is the pH value of acid rain?

1. Less than 5.6
2. More than 5.6
3. Equal to 7.0
4. More than 7.0

Correct Option - 1

Que. 43 Select the option that is expressed in passive voice.

1. The committee is organizing the show.
2. The music is being played by the band.
3. The artist is creating the sculpture.
4. The gallery is calling on people to come see it.

Correct Option - 2

Que. 44 Side of a rhombus is 15 cm and the length of its diagonal is 60% more than the length of its side. What is the length of the other diagonal of the rhombus?

1. 18
2. 12
3. 16
4. 20

Correct Option - 1

Que. 45 Sky appears blue due to:

1. Dispersion
2. Scattering
3. Refraction
4. Reflection

Correct Option - 2

Que. 46 'प्रति' उपसर्ग युक्त पद चुनिए :

1. प्रोक्ति
2. प्रत्युष
3. प्रोत्साहन
4. प्राप्याशा

Correct Option - 2

Que. 47 What type of waves are light wave?

1. Transverse wave
2. Longitudinal wave
3. Both A & B
4. None

Correct Option - 1

Que. 48 Select the INCORRECTLY spelt word.

1. Guidance
2. Quiet
3. Quandary
4. Graphic

Correct Option - 1

Que. 49 A and B together can complete a certain work in 20 days, B and C together can complete it in 30 days and C and A together can complete it in 24 days. In how many days will A alone complete $\frac{7}{12}$ part of the same work?

1. 30
2. 20
3. 48
4. 80

Correct Option - 2

Que. 50 Chemical name of washing soda is:

1. Sodium chloride
2. Sodium hydrogen carbonate
3. Sodium carbonate
4. Sodium hydroxide

Correct Option - 3

Que. 51 अव्ययीभाव समास का उदाहरण है:

1. यथाशक्ति
2. भरपेट
3. प्रत्येक
4. उक्त सभी

Correct Option - 4

Que. 52 The ratio of radii of a cylinder and a cone is 2 : 3 respectively. The respective ratio of volumes of a cylinder and a cone is 9 : 7. What is the ratio of the heights of cylinder and cone respectively?

1. 27 : 28
2. 21 : 27
3. 17 : 29
4. 19 : 17

Correct Option - 1

Que. 53 The ratio of $4^{3.5} : 2^5$ is same as:

1. 2 : 1
2. 4 : 1
3. 7 : 5
4. 7 : 10

Correct Option - 2

Que. 54 What will be formed by burning hydrogen?

1. Oxygen
2. Ash
3. Soil
4. Water

Correct Option - 4

Que. 55 Greenhouse gases warm the atmosphere by

1. Generating heat
2. Wind energy
3. Trapping heat
4. Turbulence

Correct Option - 3

Que. 56 निम्नलिखित में शुद्ध शब्द है :

1. आशिर्वाद
2. आशीर्वाद
3. आशीरवाद
4. आशीर्वाद

Correct Option - 4

Que. 57 Rearrange the parts of the sentence in the correct order.

P: the Romans borrowed and adapted

Q: from the Greek colonies of Italy

R: turn had borrowed and adapted it

S: the alphabet from the Etruscans, who in

1. QPSR
2. SQRP
3. SPQR
4. PSRQ

Correct Option - 4

Que. 58 If $A : B = 2 : 3$, $B : C = 4 : 5$, $C : D = 6 : 7$ then $A : B : C : D$ is

1. 16 : 22 : 15 : 35
2. 16 : 22 : 30 : 35
3. 16 : 24 : 30 : 35
4. 16 : 24 : 15 : 35

Correct Option - 3

Que. 59 निम्नलिखित में से शब्द-युग्म "कँटीला-कटीला" के सही अर्थ भेद का चयन कीजिए

1. कांटना - पतित
2. काँटेदार - काटने वाला
3. आहूत - बुलाया हुआ

4. निकट - सूत का लच्छा

Correct Option - 2

Que. 60 Select the most appropriate meaning of the given idiom.

On the ball

1. To be alert
2. Doing a bad job
3. Doing an average job
4. To be lazy

Correct Option - 1

Que. 61 In a uniform circular motion:

1. Velocity is constant
2. Distance is constant
3. Displacement is constant
4. Speed is constant

Correct Option - 4

Que. 62 The structural and functional unit of nervous system is:

1. Nephron
2. Sarcomere
3. Neuron
4. Brain

Correct Option - 3

Que. 63 The mean of 50 observations is 20. It is found that observation 35 was misread as 43 then the correct mean is

1. 28.56
2. 19.84
3. 26.72
4. 25.85

Correct Option - 2

Que. 64 A can do a work in 6 days. B takes 12 days. C takes as long as A and B would take working together. How long will it take B and C to complete the work together ?

1. 8 days
2. 3 days
3. 4 days
4. None of these

Correct Option - 2

Que. 65 Direction: Complete the following sentence choosing the correct preposition.

I somehow managed to walk _____ the broken bridge.

1. at
2. between
3. across

4. in

Correct Option - 3

Que. 66 निम्नलिखित में से 'वज्रपाणि' कौन-सा शब्द है?

1. रूढ़
2. यौगिक
3. योगरूढ़
4. इनमें से कोई नहीं।

Correct Option - 3

Que. 67 In rural area, cow dung is used to coat the floor and walls of huts to

1. make them smooth
2. make them rough for friction
3. given a natural colour to the walls and floor
4. keep the insects away

Correct Option - 4

Que. 68 A and B started a business together and got a profit in the ratio 3 : 5. If B invested ₹80,000 for 12 months, then A invested ₹72,000 for how many months?

1. 10 months
2. 9 months
3. 8 months
4. 6 months

Correct Option - 3

Que. 69 A solid metallic sphere of radius 13 cm is melted and recast into a cone having diameter of the base as 13 cm. What is the height of the cone?

1. 246 cm
2. 152 cm
3. 174 cm
4. 208 cm

Correct Option - 4

Que. 70 Select the most appropriate meaning of the given idiom.

A rolling stone gathers no moss

1. A person who settles for a short time and runs from place to place, enjoying his freedom
2. A person who does not settle anywhere for a short time, and is always searching for gold
3. A person who settles for a long time and leads a boring and useless life
4. A person who does not settle in one place for a long time, does not gain wealth, name or fame

Correct Option - 4

Que. 71 Which one of the following diseases is caused by water pollution?

1. Conjunctivitis
2. Respiratory infections

3. Diarrhoea
4. Bronchitis

Correct Option - 3

Que. 72 Halogens have _____ electrons in their outermost shells.

1. five
2. six
3. eight
4. seven

Correct Option - 4

Que. 73 The population of a town is 6000, if the number of males increase by 8% and the number of females increase by 10%, the population will be 6500, Find the number of females in the town -

1. 1000
2. 1200
3. 1100
4. 1300

Correct Option - 1

Que. 74 If 12% of 40% of $X = 84$, then what is the value of X ?

1. 1750
2. 1680
3. 1600
4. 1860

Correct Option - 1

Que. 75 Alkali metals are assigned which group in the Modern Periodic Table?

1. Second group
2. Eighteenth group
3. Third group
4. First group

Correct Option - 4

Que. 76 The L.C.M. of $x^2 - y^2$, $x^3 - y^3$ and $x^3 - x^2y - xy^2 + y^3$ is

1. $(x + y)(x - y)(x^2 + y^2 + xy)$
2. $(x + y)(x - y)^2(x^2 + y^2 + xy)$
3. $(x + y)(x - y)^2(x^2 + y^2 - xy)$
4. $(x + y)^2(x - y)^2$

Correct Option - 2

Que. 77 One card is drawn from a well-shuffled deck of 52 cards. The probability that the card will not be an ace is

1. $\frac{12}{13}$
2. $\frac{1}{13}$

3. $\frac{3}{13}$
4. $\frac{4}{13}$

Correct Option - 1

Que. 78 If α and β are the roots of equation $x^2 - 6x + 8 = 0$, then what is the value of $\alpha^2/\beta + \beta^2/\alpha$?

1. 9
2. 8
3. 7
4. 2

Correct Option - 1

Que. 79 गौरव का विलोम शब्द क्या होगा-

1. लघु
2. लघुत्व
3. लाघव
4. लघिमा

Correct Option - 3

Que. 80 Direction: Choose the appropriate prepositions for the given sentence:

They drove ____ Pune ____ Mumbai.

1. at... to
2. to... at
3. from... to
4. off... from

Correct Option - 3

Que. 81 _____ is the concentration of a toxin at successively higher levels in a food chain.

1. Biodillution
2. Biosynthesis
3. Biomagnification
4. Biosolution

Correct Option - 3

Que. 82 Direction: Choose the correct preposition.

He took ages _____ the job.

1. beneath
2. for
3. over
4. above

Correct Option - 2

Que. 83 Samuel invested ₹ 27000 for one year at the rate of 16% per annum, what will be the compound interest if compounded every six months?

1. 31492.8

2. 4492.8
3. 4320
4. 5000

Correct Option - 2

Que. 84 Hollow circular cylinder of inner radius 15 cm and outer radius 16 cm is made of iron, if height of the cylinder is 63 cm. How much iron is required to construct hollow circular cylinder?

1. 6248 cm³
2. 6348 cm³
3. 6138 cm³
4. 6156 cm³

Correct Option - 3

Que. 85 Select the correct direct form of the given sentence.

The principal asked the students if they could prepare for the independence day speech by the following week.

1. The principal asked to the students, "Could you prepare for the independence day speech by the following week?"
2. The principal said to the students, "Will you prepare for the independence day speech by the following week?"
3. The principal said to the students, "Can you prepare for the independence day speech by next week?"
4. The principal said to the students, "Are you prepared for the independence day speech by next week?"

Correct Option - 3

Que. 86 The ratio of alcohol to water in a mixture of 120 liters is 2 : 1. If this ratio of alcohol to water is made 2 : 3, by adding some water then the quantity of water (in liters) present in the newly made mixture is

1. 60
2. 80
3. 120
4. 140

Correct Option - 3

Que. 87 निम्नलिखित में से किस शब्द में कर्म तत्पुरुष समास है?

1. शिल्पकार
2. सत्याग्रह
3. देशभक्ति
4. राजकुमार

Correct Option - 1

Que. 88 'संकल्प' में उपसर्ग है।

1. सम
2. सन
3. सम्
4. सन्

Correct Option - 3

Que. 89 'नमक' किस प्रकार का शब्द है?

1. यौगिक
2. योगरूढ़
3. रूढ़
4. उपर्युक्त में से कोई नहीं।

Correct Option - 3

Que. 90 The amount of simple interest on ₹4800 at the rate 5% per annum in $2\frac{1}{2}$ years will be-

1. ₹700
2. ₹400
3. ₹500
4. ₹600

Correct Option - 4

Que. 91 Choose the correct antonym of the word:

Booster

1. Supporter
2. Admirer
3. Zealot
4. Detractor

Correct Option - 4

Que. 92 From the top of a tree 7 m high, the angle of elevation of a tower is 30° . If the tower is 47 m high, how far away from the tower is the tree positioned?

1. $45\sqrt{3}$ m
2. 40 m
3. $15\sqrt{3}$ m
4. $40\sqrt{3}$ m

Correct Option - 4

Que. 93 On a straight road, a bus is 30 km ahead of a car traveling in the same direction. After 3 hours, the car is 60 km ahead of the bus. If the speed of the bus is 42 km/h, then find the speed of the car.

1. 67 km/h
2. 72 km/h
3. 65 km/h
4. 59 km/h

Correct Option - 2

Que. 94 निम्नलिखित में से किस एक वाक्य में योजक चिन्ह का प्रयोग नहीं किया गया है?

1. उसके माता- पिता गाँव में रहते हैं।
2. वह हँसते-हँसते लोट-पोट हो गया।
3. वह देश-विदेश की सूचनाएँ रखता है।
4. वह सुन्दर था; नौजवान था; सुगठित देह का स्वामी था।

Correct Option - 4

Que. 95 निम्नलिखित में से किस वाक्य में अपादान कारक का प्रयोग हुआ है?

1. मोहन ने पत्र लिखा।
2. हम आँखों से देखते हैं।
3. बिल्ली छत से कूद पड़ी।
4. गीता का भाई आया।

Correct Option - 3

Que. 96 If the difference of the mode and median of a data is 38, then the difference of the median and mean is:

1. 19
2. 18
3. 22
4. 24

Correct Option - 1

Que. 97 Which vitamin behaves as an antioxidant?

1. Vitamin A
2. Vitamin C
3. Vitamin D
4. Vitamin B

Correct Option - 2

Que. 98 $^{86}\text{Kr}_{36}$ and $^{86}\text{Sr}_{38}$ are examples of?

1. Isotopes
2. Isomers
3. Isobars
4. Isotones

Correct Option - 3

Que. 99 A batsman has a definite average for 11 innings. That batsman scores 120 runs in his 12th innings due to which his average increased by 5 runs. Accordingly, what is the average of the batsman after 12 innings?

1. 70
2. 72
3. 60
4. 65

Correct Option - 4

Que. 100 Micro-organism act upon the dead plant to produce:

1. Mushroom
2. Sand
3. Humus
4. Wood

Correct Option - 3

Que. 101 The Indian Ocean is the _____ ocean in the world.

1. largest
2. third-largest
3. smallest
4. second-largest

Correct Option - 2

Que. 102 Select the option in which the numbers are related in the same way as are the numbers of the following set.
(7, 9, 252)

1. (6, 9, 188)
2. (12, 10, 260)
3. (8, 11, 352)
4. (6, 8, 212)

Correct Option - 3

Que. 103 Which article of the Indian Constitution ensures the abolition of titles?

1. Article 16
2. Article 18
3. Article 19
4. Article 21

Correct Option - 2

Que. 104 As per Census 2011, what is the literacy rate in Madhya Pradesh?

1. 63.74%
2. 71.13%
3. 57.56%
4. 69.32%

Correct Option - 4

Que. 105 Virtual memory implements the translation of a program's address space to

1. virtual addresses
2. physical addresses
3. mapping addresses
4. page addresses

Correct Option - 2

Que. 106 Which number would replace question mark (?) in the given series?

42, 55, 70, 87, ?

1. 109
2. 100
3. 106
4. 103

Correct Option - 3

Que. 107 Which one of the following is not an importance of management?

1. Integrating various interest groups
2. Developing society
3. Disciplining employees
4. Inculcating creativity

Correct Option - 3

Que. 108 Janki introduces Radha as wife of the only grandson of her father. How Radha is related to Janki?

1. Mother-in-law
2. Mother
3. Daughter-in-law
4. Daughter

Correct Option - 3

Que. 109 Three of the following four words are alike in a certain way and one is different. Select the odd one.

1. Lungs
2. Heart
3. Liver
4. Nose

Correct Option - 4

Que. 110 The seat of Madhya Pradesh High Court is located at

1. Indore
2. Bhopal
3. Gwalior
4. Jabalpur

Correct Option - 4

Que. 111 Since 1895 _____ has been the headquarters of the political agent in Malwa.

1. Neemuch
2. Jhabua
3. Khargone
4. Morena

Correct Option - 1

Que. 112 Which one of the following is related to control function of the financial manager?

1. To negotiate with bankers for a loan.
2. To analyse variance between standard costs and actual costs.
3. To estimate the future cash flows from a proposed project.
4. To advertise the public issue of the firm.

Correct Option - 2

Que. 113 Two statements are given followed by two conclusions numbered I and II. Assuming the statements to be true, even if they seem to be at variance with commonly known facts, decide which of the conclusions logically follow(s) from the statements.

Statements:

1. Some teachers are philosophers.
2. Some philosophers are writers.

Conclusion:

- I. some writers are teacher
- II. No writer is a teacher

1. Neither conclusions I nor II follows
2. Only conclusion I follows
3. Only Conclusion II follows
4. Either conclusion I or II follows

Correct Option - 4

Que. 114 Which among the programming language is written in the form of a stream of bits?

1. BASIC
2. Assembly language
3. High level language
4. Machine language

Correct Option - 3

Que. 115 Business environment is a _____ concept since it differs from country to country and even region to region.

1. Uncertainty
2. Relative
3. Complexity
4. None of the above

Correct Option - 2

Que. 116 In the following question, select the related letters from the given alternatives.

KR : NU :: TV : ?

1. WY
2. ZB
3. XZ
4. VX

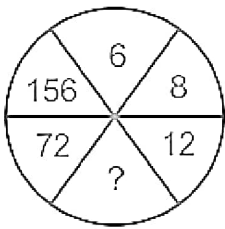
Correct Option - 1

Que. 117 Batch costing is applied in industries _____.

1. engaged in construction industries
2. engaged in service industries
3. where distinct products are produced
4. where identical products are produced

Correct Option - 4

Que. 118 Choose the alternative that best replaces the question mark (?) in the given figure.



1. 42
2. 54
3. 49
4. 61

Correct Option - 1

Que. 119 In which of the following districts State Rice Research Centre is located?

1. Burhanpur
2. Satna
3. Dewas
4. Barwani

Correct Option - 4

Que. 120 Four letter-clusters have been given, out of which three are alike in some manner, while one is different. Select the odd letter-cluster

1. ABEF
2. GHRT
3. XYWX
4. PQHI

Correct Option - 2

Que. 121 Select the correct combination of mathematical signs to replace the * signs and to balance the given equation.

$$25 * 3 * 5 * 15 * 1$$

1. =, +, +, +
2. +, =, +, -
3. ÷, ×, ×, =
4. ×, =, ×, ×

Correct Option - 4

Que. 122 Which of the following function keys can be used to edit a cell of an MS-Excel worksheet?

1. F3
2. F5
3. F2
4. F4

Correct Option - 3

Que. 123 What is Verification of log-in name and password for?

1. Authenticating the user
2. Re-confirming the user

3. Providing formal access to the user
4. Completing the formality of login-in

Correct Option - 1

Que. 124 What are certain assumptions about the future on the basis of which the plan will be ultimately formulated?

1. Method of premises
2. Planning premises
3. Esteem needs
4. Management premises

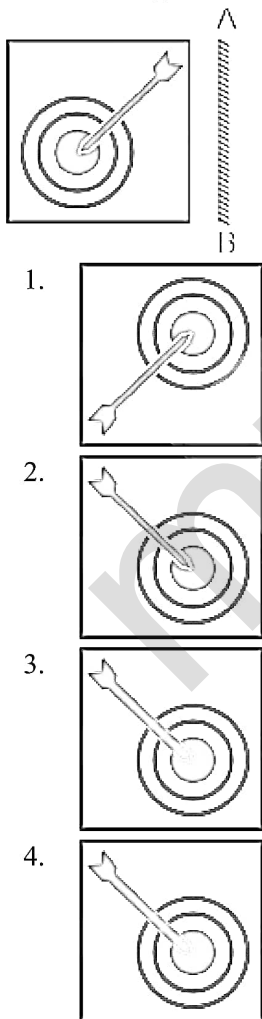
Correct Option - 2

Que. 125 With the introduction of Photostat Machines in the market, the carbon paper industry was adversely affected. Which component of the environment was responsible for it?

1. Political
2. Technical
3. Economic
4. All the above

Correct Option - 2

Que. 126 If the mirror is placed on the line, then which of the answer figure is the right mirror image of the given figure?



Correct Option - 2

Que. 127 How many kingdoms were included in Mahajanapadas?

1. 16
2. 20
3. 14
4. 15

Correct Option - 1

Que. 128 Identify which is not an Importance of Controlling

1. Accomplishing organizational goals
2. Judging accuracy of standards
3. Making efficient use of resources
4. Difficulty in setting quantitative standards

Correct Option - 4

Que. 129 Who presided over 1907 Indian National Congress Session at Surat ?

1. Dadabai Naoroji
2. B.G. Tilak
3. RasBehari Ghosh
4. LalaLajpat Rai

Correct Option - 3

Que. 130 Read the given statements and conclusions carefully. Assuming that the information given in the statement is true, even if it appears to be at variance with commonly known facts, decide which of the given conclusions logically follow(s) from the statements.

Statements:

A few student are scholars.

Some scholars are girls.

All girls are literates.

Conclusions:

I. Some students are girls.

II Some scholars are literates.

III. Some literates being students is a possibility.

1. only conclusion I and II follow
2. Only conclusion II and III follow
3. Only conclusion I follows
4. All conclusions I, II, III follow

Correct Option - 2

Que. 131 Samvidhan Divas or Constitution Day is celebrated in India on _____.

1. 3rd December
2. 25th October
3. 5th January
4. 26th November

Correct Option - 4

Que. 132 When a document of MS-Word 2010 is already open, which keyboard shortcut is used to open a new document?

1. Ctrl + N
2. Ctrl + X
3. Ctrl + Y
4. Ctrl + V

Correct Option - 1

Que. 133 Who got the construction work of Moti Masjid located in Bhopal done?

1. Qudsia Begum
2. Shahjahan Begum
3. Sikandar Jahan Begum
4. Shajida Sultan

Correct Option - 3

Que. 134 A is richer than B, C is richer than A, D is richer than C. E is the richest of all. If they are made to sit in the above degree of richness, who will have the central position?

1. A
2. B
3. C
4. D

Correct Option - 3

Que. 135 Two statements are given, followed by two conclusions numbered I and II. Assuming the statements to be true, even if they seem to be at variance with commonly known facts, decide which of the conclusions logically follow(s) from the statements.

Statements:

Some candles are bulbs

Some bulbs are generators

Conclusions:

I. Some candles are generators

II. All candles are generators

1. Only conclusion I follows
2. Only conclusion II follows
3. Both conclusions I and II follow
4. Neither conclusion I nor II follows

Correct Option - 4

Que. 136 Which of the following places is called 'Queen of hills'?

1. Dehradun
2. Mussoorie
3. Ranikhet
4. Nainital

Correct Option - 2

Que. 137 The operating system can be defined as:

1. Software is responsible for managing various activities and sharing computer resources.
2. A software that can perform any specific task for the user.
3. A medium that provides detailed information on a specific topic that is suitable for the user.
4. A storage device responsible for providing an interface to the user.

Correct Option - 1

Que. 138 The primary function of management is

1. Planning
2. Communication
3. Decision-making
4. Motivation

Correct Option - 1

Que. 139 Six friends A, B, C, D, E and F are sitting around a round table facing the centre. A sits second to the right of B, E sits second to the left of C. B doesn't sit adjacent to E. D does not sit opposite to E or C. Who sits to the immediate left of E?

1. C
2. B
3. D
4. A

Correct Option - 4

Que. 140 Units of production is an appropriate method of assigning overhead when?

1. Several well differentiated products are manufactured
2. Direct labour costs are low
3. Only one product is manufactured
4. The manufacturing process is complex

Correct Option - 3

Que. 141 ENIAC is the first automatic, general-purpose, digital computer. What is the full form of ENIAC?

1. Eigen Numerical Integrator and Calculator
2. Electronic Non-numeric Integrator and Calculator
3. Elementary Numerical Integer Calculator
4. Electronic Numerical Integrator and Calculator

Correct Option - 4

Que. 142 From the given alternatives, select the set of letters that can come in place of the question mark (?) in the following series.

BEI, EHL, HKO, KNR, ?

1. NPS
2. NRU
3. NQU

4. NQT

Correct Option - 3

Que. 143 In which district is Upper Tilwara canal irrigation project located?

1. Ratlam
2. Seoni
3. Fold
4. Neemuch

Correct Option - 2

Que. 144 The caves of Saru- Maru are located at

1. Pangudaria (Sehore)
2. Bareily (Raisen)
3. ganjbasoda (Vidhisha)
4. Kukshi (Dhar)

Correct Option - 1

Que. 145 Under which Article of Indian Constitution amendment process has been given ?

1. 361
2. 364
3. 368
4. 370

Correct Option - 3

Que. 146 Select the option that is related to the first number in the same way as the fourth number is related to the third number.

2 : ? :: 9 : 729

1. 16
2. 7
3. 8
4. 4

Correct Option - 3

Que. 147 Which company has funded UBUNTU operating system?

1. Apple
2. Google
3. Canonical
4. Intel

Correct Option - 3

Que. 148 Three of the four words given in the options are alike in a certain way and one is different. Pick up the odd one from the given alternatives.

1. Thiruvananthapuram
2. Amaravati
3. Itanagar

4. Kanpur

Correct Option - 4

Que. 149 Which of the following is indicated by labelling?

1. Content
2. Weight
3. Measure
4. All of these

Correct Option - 4

Que. 150 Burhanpur city is situated on the bank of river _____?

1. Narmada
2. Son
3. Tapti
4. Wainganga

Correct Option - 3

Que. 151 The painting of Bodhisattva Padmapani is the specialty of which caves?

1. Pandava caves
2. Mara caves
3. Bagh Caves
4. Bhedaghat Caves

Correct Option - 3

Que. 152 "Dandi-March" started on?

1. March 10, 1930
2. March 12, 1930
3. March 10, 1931
4. March 12, 1931

Correct Option - 2

Que. 153 Which of the following memories has the shortest access time?

1. Cache Memory
2. Magnetic Bubble Memory
3. Magnetic Core Memory
4. Random Access Memory

Correct Option - 1

Que. 154 Complete the following digital sequence :

2, 8, 20, 44, 92, _____

1. 136
2. 166
3. 188
4. 182

Correct Option - 3

Que. 155 In which state of India did the Kuchipudi dance originate?

1. Karnataka
2. Maharashtra
3. Gujarat
4. Andhra Pradesh

Correct Option - 4

Que. 156 Which one of the following does not follow the scalar chain?

1. Functional structure
2. Informal organization
3. Formal organisation
4. Divisional structure

Correct Option - 2

Que. 157 In this question, the statement is followed by two conclusions. Which of the two conclusions is/are true?

Statement: $X < U = F > R \geq P < T < W$

Conclusions:

I. $X < T$

II. $R > W$

1. Only conclusion I is true
2. Neither conclusion I nor II is true
3. Only conclusion II is true
4. Both conclusions I and II are true

Correct Option - 2

Que. 158 Which of the following option will replace the question mark (?) in the following letter cluster series?

DC, GA, IY, LW, NU, ?

1. QU
2. QR
3. QS
4. RS

Correct Option - 3

Que. 159 Sheetal walks 25 m east. Then she turns right and walks another 25 m. She then turns right and walks another 40 m. Then again turning right, she walks 25 m. Finally, she turns left and walks 10 m. How far is Sheetal from her original position?

1. 20 m
2. 25 m
3. 10 m
4. 15 m

Correct Option - 2

Que. 160 A main page or starting page of website is known as _____.

1. Display Page
2. Home Page
3. Server Page
4. Domain Page

Correct Option - 2

Que. 161 Which of the following in relation to importance of consumer protection reflects the point that products may be adulterated and may be health hazardous. This may endanger their life and due to this a consumer needs to be protected?

1. Consumer ignorance
2. Prevention from malpractice
3. Social responsibility
4. Importance of physical safety

Correct Option - 4

Que. 162 The warning label on a pack of cigarettes is included to

1. promote the product
2. satisfy legal requirements
3. encourage the proper use of the product
4. position the product as being socially responsible

Correct Option - 2

Que. 163 Which of the following is the first screen to appear on the monitor after Windows 10 is loaded?

1. File Folder
2. Desktop
3. Recycling Bin
4. Recently Added Screen

Correct Option - 2

Que. 164 Which of the following statements is TRUE?

1. Both SRAM and DRAM are random access memory.
2. SRAM is a non-volatile memory.
3. DRAM is faster than SRAM.
4. SRAM requires periodic refreshing.

Correct Option - 1

Que. 165 The term 'Duckworth-Lewis' is associated with which sport?

1. Cricket
2. Squash
3. Hockey
4. Tennis

Correct Option - 1

Que. 166 _____ is the organisational structure in which activities are grouped based on products.

1. Functional structure

2. Formal Structure
3. Divisional structure
4. Informal Structure

Correct Option - 3

Que. 167 Sushri Anusuiya Uikye, has been appointed as Governor of Manipur. Before this appointment, she was governor of which state?

1. Nagaland
2. Arunachal Pradesh
3. Goa
4. Chhattisgarh

Correct Option - 4

Que. 168 Parimal walks 40 metres towards east He then turns left and walks 20 metres. He again turns left and walks 40 metres. How far is he from his starting point ?

1. 60 metres
2. 30 metres
3. 20 metres
4. 40 metres

Correct Option - 3

Que. 169 A/An _____ is software used to maintain the security of a private network.

1. malware
2. encryption
3. firewall
4. clickbait

Correct Option - 3

Que. 170 What is the extension of a MS PowerPoint (ver. 2010) template file ?

1. .potx
2. .pptx
3. .pptt
4. .pott

Correct Option - 1

Que. 171 Which one is an Input device?

1. Floppy Disc
2. RAM
3. Keyboard
4. Speakers

Correct Option - 3

Que. 172 Role of staff in "line and staff" organization is _____.

1. Advisory
2. Managerial

3. Superior
4. All of the above

Correct Option - 1

Que. 173 Where is the University Institute of Technology Rajiv Gandhi Proudyogiki Vishwavidyalaya located?

1. Jabalpur
2. Bhopal
3. Indore
4. Gwalior

Correct Option - 2

Que. 174 A cash discount received is entered on the three column cash book on:

1. Debit side
2. Credit side
3. No Entry is made
4. Written as a note

Correct Option - 2

Que. 175 Which literary figure is *not* associated with Madhya Pradesh?

1. Dharmvir Bharti
2. Sharad Joshi
3. Prabhakar Machwe
4. Harishankar Parsai

Correct Option - 1

Que. 176 Which of the following is not a part of an email address?

1. @ Symbol
2. Email provider's domain
3. Username
4. User domain

Correct Option - 4

Que. 177 In which part of Madhya Pradesh are the Chulgiri hills located?

1. North
2. East
3. South-East
4. South-West

Correct Option - 4

Que. 178 Characteristics of good packaging is:

1. Convenient
2. Bulky
3. Always be Colourful
4. Above all

Correct Option - 1

Que. 179 Three of the following four words are alike in a certain way and one is different. Pick the odd word out.

1. Headphone
2. Webcam
3. Loudspeaker
4. Mic

Correct Option - 2

Que. 180 Which of the following software can be used to reduce file size by compressing its contents?

1. Adobe Acrobat Reader
2. McAfee
3. Notepad
4. WinZip

Correct Option - 4

Que. 181 In a certain code language, 'RAJU' is written as 'WFOZ' and 'SITA' is written as 'XNYF'. How will 'MONU' be written in that language?

1. RTSZ
2. UTRZ
3. SRSY
4. TRSX

Correct Option - 1

Que. 182 The unfavourable balance of Profit and Loss Account should be:

1. Added in liabilities
2. Subtracted from assets
3. Subtracted from capital
4. None of the above

Correct Option - 3

Que. 183 _____ are used in Word 2016 for reduced size versions of images.

1. Thumb drives
2. Preview panes
3. Thumb documents
4. Thumbnails

Correct Option - 4

Que. 184 A complaint can be filed against _____ who adopt(s) unfair trade practices.

1. Consumer
2. Trader only
3. Trader and Manufacturer
4. Manufacturer only

Correct Option - 3

Que. 185 What is called evaluation of financial transactions?

1. Budgeting
2. Accounting
3. Auditing
4. Motivation

Correct Option - 3

Que. 186 'Davis Cup' is associated with the sport of—

1. Lawn Tennis
2. Cricket
3. Hockey
4. Badminton

Correct Option - 1

Que. 187 The full form of USB is :

1. Unique Special Bus
2. Universal Special Bus
3. Unique Serial Bus
4. Universal Serial Bus

Correct Option - 4

Que. 188 Which of the following error will not affect the trial balance agreement?

1. Posting of amount in wrong side
2. Incorrect account balance
3. Incorrect casting of subsidiary books
4. Completely omitting an entry from the subsidiary book

Correct Option - 4

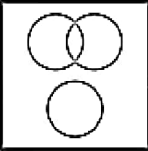
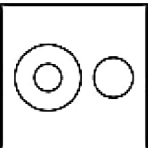
Que. 189 If today is Saturday, what will be the day after 52 days?

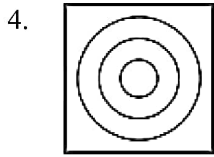
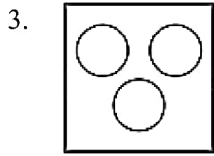
1. Monday
2. Saturday
3. Sunday
4. Tuesday

Correct Option - 4

Que. 190 Select the option that correctly represents the relationship among the following:

Bird, Sparrow, Squirrel

1. 
2. 



Correct Option - 2

Que. 191 If the rate of Gross profit on sales is 30% and the cost of goods sold is Rs. 70,000, What is the amount of sales?

1. Rs. 1,00,000
2. Rs. 21,000
3. Rs. 49,000
4. Rs. 2,33,333

Correct Option - 1

Que. 192 Which shortcut is used to insert hyperlink for selected text in MS Excel?

1. Ctrl + J
2. Ctrl + K
3. Ctrl + O
4. Ctrl+I

Correct Option - 2

Que. 193 Who appoints the Attorney General of India?

1. Supreme Court of India
2. President of India
3. Cabinet Secretariat
4. Ministry of Law

Correct Option - 2

Que. 194 In the context of the Internet, which of the followings is NOT a protocol?

1. Telnet
2. TCP
3. UDP
4. PPT

Correct Option - 4

Que. 195 Round Robin Scheduling is most suitable for _____.

1. Batch OS
2. Hard RTOS
3. Soft RTOS
4. Time Sharing OS

Correct Option - 4

Que. 196 The programs which are as permanent as hardware and stored in ROM is known as _____.

1. Hard disk
2. Firmware
3. Software
4. Hardware

Correct Option - 2

Que. 197 Which of the following Prime Ministers was born in Madhya Pradesh ?

1. Inder Kumar Gujral
2. Atal Bihari Vajpayee
3. H.D. Deve Gowda
4. Manmohan Singh

Correct Option - 2

Que. 198 Mark the number which does not belong to the following series.

121, 143, 165, 186, 209

1. 209
2. 143
3. 186
4. 165

Correct Option - 3

Que. 199 The plan which includes objective, policy, procedure, and rules is called?

1. Strategy
2. Budget
3. Programme
4. All of the Above

Correct Option - 3

Que. 200 The Battle of Khanwa was fought between Babur and _____.

1. Hemu
2. Todar Mal
3. Rana Sanga
4. Sher Shah Suri

Correct Option - 3
