

**MP
Patwari**

Memory Based Paper
20th Mar, 2023
Shift 1 & 2 Mixed

mpcareer.in

200 Questions

Que. 1 The Black soil is also known as _____ soil.

1. Bhangar
2. Humus
3. Crystalline
4. Regur

Correct Option - 4

Que. 2 Who constructed the Chaturbhuj Temple of Orchha?

1. Satpura Kings
2. Bundela Rajputs
3. King Vikramaditya
4. Raja Bhoj

Correct Option - 2

Que. 3 "वह कमरे से बाहर गया है।" इस वाक्य में कौन सा कारक है?

1. करण कारक
2. कर्म कारक
3. कर्ता कारक
4. अपादान कारक

Correct Option - 4

Que. 4 Direction: Choose the most appropriate answer and fill in the blanks:

You, he, and _____ shall study for the exam.

1. me
2. him
3. them
4. I

Correct Option - 4

Que. 5 Select the correct indirect form of the given sentence.

He said to Sita, "Can you give this assignment"?

1. He asked Sita that he can give this assignment.
2. He said to Sita that he could give this assignment
3. He said that if she could give that assignment.
4. He asked Sita if she could give that assignment.

Correct Option - 4

Que. 6 In parallelogram ABCD, the bisector of $\angle A$ meets BC at X. If $\angle AXB = 40^\circ$, then $\angle D =$

1. 100°
2. 140°

3. 120°

4. 80°

Correct Option - 1

Que. 7 Directions: In the following questions, for alternatives are given for the underlined idiom / phrase. Choose the alternatives which best expresses the meaning of the underlined idiom / phrase.

The Government claims that Indian industry is progressing by leaps and bounds.

1. intermittently
2. leisurely
3. at a rapid pace
4. at a desired pace

Correct Option - 3

Que. 8 Four words are given, out of which only one word is spelt correctly. Choose the correctly spelt word.

1. Belligerent
2. Beligerent
3. Billigerent
4. Biligerent

Correct Option - 1

Que. 9 Which is the first Biosphere reserve in India?

1. Sunderbans Biosphere reserve
2. Nilgiri Biosphere Reserve
3. Nanda Devi Biosphere Reserve
4. Gulf of Mannar Biosphere Reserve

Correct Option - 2

Que. 10 From a pack of 52 cards, two cards are drawn together at random. What is the probability of both the cards being queen?

1. $\frac{3}{221}$
2. $\frac{221}{3}$
3. $\frac{221}{1}$
4. $\frac{1}{221}$

Correct Option - 4

Que. 11 A man sells an item at a profit of 25%. Had he bought it for Rs.700 less and sold it for Rs.700 less, he would have made an additional profit of 5%. Find the cost price of the item.

1. Rs. 4500
2. Rs. 4200
3. Rs. 4600
4. Rs.4250

Correct Option - 2

Que. 12 Select the most appropriate word to fill in the blank.

It is the right way _____ the railway station.

1. of
2. for
3. on
4. to

Correct Option - 4

Que. 13 If $x^2 - 3x + 1 = 0$, then the value of $x^{10} + \frac{1}{x^{10}}$ is:

1. 14408
2. 14642
3. 14638
4. 15127

Correct Option - 4

Que. 14 Where is the Patiyandai temple and Gola Math located?

1. Satna
2. Rewa
3. Panna
4. Rajgarh

Correct Option - 1

Que. 15 **Directions: Select the correct passive form of the given sentence.**

The police beat a number of protestors last night.

1. A number of protestors had been beaten by the police last night.
2. A number of protestors were being beaten by the police last night.
3. A number of protestors has been beaten by the police the night before.
4. A number of protestors were beaten by the police last night.

Correct Option - 4

Que. 16 लड़का पेड़ से गिरा' इस वाक्य में कौन सा कारक है

1. संप्रदान कारक
2. कर्म कारक
3. अपादान कारक
4. करण कारक

Correct Option - 3

Que. 17 द्वंद्व समास का उदाहरण कौन-सा है?

1. देहलता
2. तिरंगा
3. उतार-चढ़ाव
4. रेखांकित

Correct Option - 3

Que. 18 निम्नलिखित विकल्पों में से 'पार्वती' के पर्यायवाची का चयन कीजिए-

1. रमा
2. अपर्णा
3. इंदिरा
4. भारती

Correct Option - 2

Que. 19 कान का तत्सम शब्द है -

1. करण
2. कण
3. कान
4. कर्ण

Correct Option - 4

Que. 20 **Direction:** In the following question, a sentence is given in Direct/Indirect speech. Out of the four alternatives, choose the one which best expresses the sentence in Indirect/Direct speech.

She told her mother that she would have to get up at 7 am the following day.

1. She said to her mother, "I must have to get up at 7 am tomorrow."
2. She told her mother, "I must get up at 7 am the following day."
3. She said to her mother, "I will get up at 7 am tomorrow."
4. She said to her mother, "I will have to get up at 7 am tomorrow."

Correct Option - 4

Que. 21 Battle of Panipat was fought in the year 1526 between Babur and _____.

1. Rana Sanga
2. Muhammad Bin Tughlak
3. Hemu
4. Ibrahim Lodi

Correct Option - 4

Que. 22 Which of the following tax is **not** included in Goods and Services Tax (GST)?

1. Excise Duty
2. Custom Duty
3. Value Added Tax
4. Service Tax

Correct Option - 2

Que. 23 Who invented zero in ancient mathematics?

1. Ban Bhatta
2. Arya Bhatta
3. Sushruta
4. Newton

Correct Option - 2

Que. 24 Identify the part of the sentence that has an error:

The dog barks at the thief when he had jumped over the fence.

1. over the fence
2. The dog barks
3. at the thief
4. when he had jumped

Correct Option - 2

Que. 25 On what sum does the difference between the compound interest and the simple interest for 2 years at 12% p.a. is ₹ 46.08?

1. ₹ 3600
2. ₹ 3000
3. ₹ 3200
4. ₹ 4000

Correct Option - 3

Que. 26 The average age of a husband and his wife was 23 years when they were married 5 years ago. The average age of the husband, the wife and their child is 20 years now. How old is the child now?

1. 9 months
2. 1 year
3. 3 years
4. 4 years

Correct Option - 4

Que. 27 Pipe A can fill 50% of a tank in 4 hours and pipe B can completely fill the same tank in 12 hours. If both the pipes are opened at the same time, then in how much time will the empty tank be completely filled?

1. 4 hours 52 minutes
2. 4 hours 48 minutes
3. 4 hours 40 minutes
4. 4 hours 55 minutes

Correct Option - 2

Que. 28 Two chords, AB and CD of a circle meet at a point O, outside the circle. It is given that AB = 7 cm, CD = 4 cm, OB = 5 cm. What is length of OD?

1. 5 cm
2. 6 cm
3. 7.5 cm
4. 10 cm

Correct Option - 2

Que. 29 In the following question, out of the four alternatives, select the alternative which best expresses the meaning of the idiom/Phrase.

Gift of the gab

1. Gift for gambling
2. Deceive people easily

3. To act without restraints
4. Ability to speak impressively

Correct Option - 4

Que. 30 'कनक-से दिन मोती-सी रात' में कौनसा अलंकार है ?

1. यमक
2. श्लेष
3. उत्प्रेक्षा
4. उपमा

Correct Option - 4

Que. 31 A can do a piece of work in 40 days. He works at it for 10 days, and then B alone finishes the remaining work in 45 days. In how many days will A and B working together finish 75% of the same work?

1. 18
2. 16
3. 24
4. 20

Correct Option - 1

Que. 32 दिए गए शब्द युग्म का सही शब्द युग्म ज्ञात कीजिए।

शांति : श्रान्ति

1. स्थिरता : थकावट
2. शक्तिशाली : सार
3. स्थिरता : विश्रान्ति
4. श्याम : थकावट

Correct Option - 1

Que. 33 The point on the line, through A(1, -3) and B(-2, 3) that is twice as far from A as from B, is

1. (-2, 1)
2. (-1, 3)
3. (-1, 1)
4. (2, -3)

Correct Option - 3

Que. 34 Select the most appropriate synonym of the given word.

FRIGID

1. Warm
2. Freezing
3. Amicable
4. Moderate

Correct Option - 2

Que. 35

A lady row a distance of $15\frac{1}{4}$ km upstream in $3\frac{1}{2}$ hours and a distance of 13 km distance downstream in 2 hours. How much time will the lady take to row a distance of 90km in still water?

1. 20
2. 18
3. 24
4. 15

Correct Option - 1

Que. 36 A hollow metallic sphere with external diameter 8 cm and internal diameter 4 cm is melted and moulded into a cone having base radius 4 cm. The height of the cone is

1. 12 cm
2. 15 cm
3. 14 cm
4. 18 cm

Correct Option - 3

Que. 37 If the ratio of volume of a sphere and of a cylinder is 4 : 3. If radius of both the figures is same, then radius of a sphere is equal to

1. half the height of a cylinder
2. twice the height of a cylinder
3. 1
4. height of a cylinder

Correct Option - 4

Que. 38 What should be added to 20% of 180 so that the sum is equal to 20% of 272?

1. 18.4
2. 144
3. 36
4. 72

Correct Option - 1

Que. 39 Who was the first speaker of the Legislative Assembly of Madhya Pradesh?

1. Pt. Kunji Lal Dubey
2. Sitasharan Sharma
3. Sarla Grewal
4. G. P. Bhatt

Correct Option - 1

Que. 40 If $\frac{\sqrt{3}-1}{\sqrt{3}+1} = a - b\sqrt{3}$, then

1. $a = 2, b = 1$
2. $a = 2, b = -1$
3. $a = -2, b = 1$
4. $a = b = 1$

Correct Option - 1

Que. 41 If $0.75 : x :: 2.5 : 8$, then the value of x will be equal to:

1. 2.4
2. 0.50
3. 1.5
4. 0.42

Correct Option - 1

Que. 42 'स्कन्ध' का तद्भव रूप है-

1. कंध
2. कांध
3. कन्धा
4. इनमें से कोई नहीं

Correct Option - 3

Que. 43 Fill in the blanks with correct option:

_____ house on the corner is for sale.

1. A
2. An
3. The
4. Zero article

Correct Option - 3

Que. 44 $72 \div 8 \times [\{(57 - 49) \div 2\} + \{(85 - 60) \div 5\} - \{(28 - 19) \div 3\}]$ is equal to:

1. 56
2. 46
3. 54
4. 60

Correct Option - 3

Que. 45 A person travels from P to Q at a speed of 50 km/h and returns by increasing his speed by 60%. What is his average speed for both the trips?

1. 35.61 km/h
2. 61.53 km/h
3. 31.56 km/h
4. 16.53 km/h

Correct Option - 2

Que. 46 A bag contains coins of denominations Rs. 1, Rs. 2 and Rs. 5 only in the ratio of 12 : 5 : 3. If the total amount in the bag is Rs. 3,626, then what is the number of coins of Rs. 5 in the bag?

1. 285
2. 297
3. 291
4. 294

Correct Option - 4

Que. 47 निम्नांकित में से कौनसा शब्द शुद्ध है-

1. आशिर्वाद
2. आर्शिवाद
3. आशीर्वाद
4. आशीर्वद

Correct Option - 4

Que. 48 Who among the following has won the Australian Open Women's Singles title in January 2022?

1. Ashleigh Barty
2. Danielle Collins
3. Naomi Osaka
4. Serena Williams

Correct Option - 1

Que. 49 To do a certain work, the ratio of the efficiencies of A, B and C is 3 : 5 : 8. Working together, they can complete the same work in 15 days. If only A and B work together for 12 days and leave, and then C comes to complete the remaining work, for how many days will C work?

1. 18
2. 10
3. 15
4. 12

Correct Option - 1

Que. 50 Silver coins issued by Guptas were known as

1. Pana
2. Dinara
3. Rupaka
4. Karshapana

Correct Option - 3

Que. 51 According to the Mahabharata, in which Mahajanapada did the Pandavas live during their exile?

1. kuru
2. kaushal
3. mall
4. matsya

Correct Option - 4

Que. 52 'रति सम रमणीय मूर्ति राधा की' पंक्ति में किस प्रकार का अलंकार है?

1. उत्प्रेक्षा
2. उपमा
3. यमक
4. श्लेष

Correct Option - 2

Que. 53 शुद्ध शब्द छाटिए

1. संस्कृतिक
2. हस्ताक्षर
3. हस्ताक्षेप
4. हास्यपद

Correct Option - 2

Que. 54 A ladder 25m long just reaches the top of a building 20m high from the ground, then the distance of the foot of the ladder from the building is:

1. 15 m
2. 14 m
3. 10 m
4. 13 m

Correct Option - 1

Que. 55 The principal building material of the palaces of Mauryan rulers was

1. Stone
2. Wood
3. Iron
4. Copper

Correct Option - 2

Que. 56 Select the option that expresses the given sentence in active voice.

I have been informed of their decision.

1. They have informed me of their decision.
2. They had informed me of their decision.
3. They informed me of their decision.
4. They are informing me of their decision.

Correct Option - 1

Que. 57 What is the sum of the mean, median and mode of the observations: 6, 2, 4, 5, 7, 9, 10, 5, 1, 2, 5, 4?

1. 15
2. 10
3. 5
4. 20

Correct Option - 1

Que. 58 Bhimbetka caves are famous for its _____

1. Sculptures
2. Tiger parks
3. Rock paintings
4. Temples

Correct Option - 3

Que. 59 In which of the following districts tomb of Mumtaz situated?

1. Mandla
2. Katni
3. Burhanpur
4. Mandu

Correct Option - 3

Que. 60 Choose the correct tense to complete the sentence:

_____ the train left when you reached at the station?

1. Has
2. Did
3. Had
4. Have

Correct Option - 3

Que. 61 'दसन जोति बरनै नहिं जाई, चौंधे दिष्टि देखि चमकाई'- पंक्ति में है:

1. अन्योक्ति अलंकार
2. सहोक्ति अलंकार
3. वक्रोक्ति अलंकार
4. अतिशयोक्ति अलंकार

Correct Option - 4

Que. 62 निम्नलिखित में कौन सा शब्द तद्भव है।

1. नग्न
2. नृत्य
3. नाक
4. निद्रा

Correct Option - 3

Que. 63 Number of puffs sold by 4 different bakeries in 3 different months.

Bakery	January	February	March
A	150	109	138
B	78	87	125
C	157	220	220
D	175	132	197

What is the respective ratio between the number of puffs sold by bakeries A and B together in February and the total number of puffs sold by bakeries C and D together in the same month?

1. 24 : 32
2. 49 : 88
3. 48 : 89
4. 44 : 92

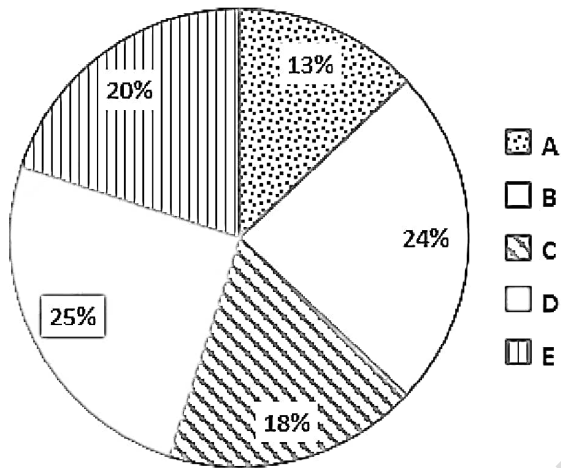
Correct Option - 2

Que. 64 The marked price of a bed sheet was Rs. 750. A man bought the bed sheet for Rs. 560. after getting two successive discounts of which the first was 16%. How much was the second discount?

1. $11\frac{1}{2}\%$
2. $11\frac{1}{9}\%$
3. $11\frac{1}{4}\%$
4. $11\frac{4}{3}\%$

Correct Option - 2

Que. 65 The given pie chart shows the percentage wise distribution of books in 5 different states A, B, C, D and E. The total number of books is 2500.

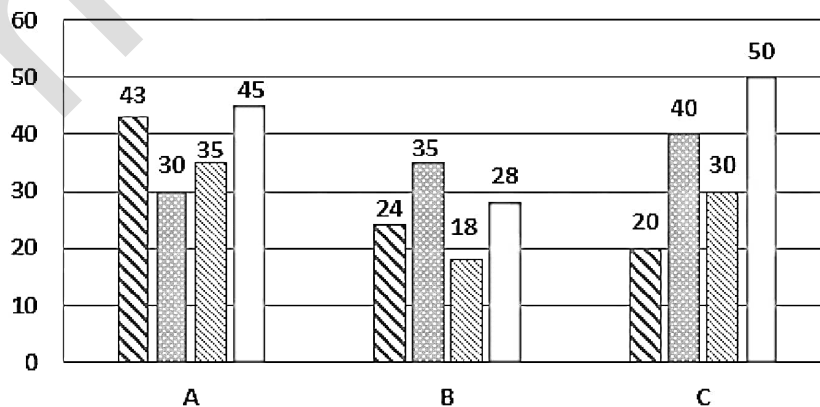


What is the different between the total number of books in states B and C together and the total number of books in states D and E together?

1. 75
2. 50
3. 25
4. 43

Correct Option - 1

Que. 66 ▨ March ▤ April ▧ May □ June



The given bar graph shows the production of Tea (in lakh tonnes) in different months, by the three companies, A, B and C. What will be the ratio of Tea produced by company A in both April and May to the Tea produced by both B and C in June.

1. 5 : 6
2. 4 : 9
3. 5 : 7
4. 4 : 5

Correct Option - 1

Que. 67 Name the mosque in Bhopal known as 'The Crown of Mosques' and is also the largest in India

1. Jama Masjid
2. Malik Mughis Mosque
3. Moti Masjid
4. Taj-UI-Masajid

Correct Option - 4

Que. 68 A girl drove a car from Kolkata to Puri. She covered the first 70 km distance at a speed of 35 km/hr. What was her average speed for the remaining 150 km if her overall average speed was 44 km/h?

1. 100 km/h
2. 25 km/h
3. 75 km/h
4. 50 km/h

Correct Option - 4

Que. 69 **Directions:** Given below are four jumbled sentences. Select the option that gives their correct order.

A: He put them in a huge pot and placed it on the fire to cook.

B: Then he cut them into long strips.

C: He took all the vegetable bits, washed them and cleaned them well.

D: Next, he ground some fresh coconut, green chillies and garlic together.

1. BACD
2. CBAD
3. CDBA
4. ADBC

Correct Option - 2

Que. 70 कलुष का विलोम शब्द है _____

1. पापशुन्य
2. निष्पाप
3. निष्कलुष
4. निष्करुण

Correct Option - 3

Que. 71 A and B working alone can complete a work in 8 days and 12 days, respectively. They started working together, but A left 2 days before completion of the work. In how many days was the work completed?

1. 6

2. 5
3. 8
4. 10

Correct Option - 1

Que. 72 In the following question, out of the four alternatives, select the best alternative which best expresses the meaning of the Idiom/Phrase.

Barking up the wrong tree.

1. Seeking revenge from someone.
2. Accusing the wrong person.
3. To have cut the wrong tree.
4. None of the above.

Correct Option - 2

Que. 73 'स्त्री' का पर्यायवाची शब्द है:

1. गृहणी
2. वधू
3. दामिनी
4. वनिता

Correct Option - 4

Que. 74 Select the correct passive form of the given sentence.

They have invited the parents as well as the child.

1. The parents as well as the child has been invited.
2. The parents as well as the child have been invited.
3. The child as well as the parents has been invited.
4. The parents as well as the child had been invited by them.

Correct Option - 2

Que. 75 Select the option that expresses the given sentence in the reported speech.

The shopkeeper said to him, "Don't you know that I am your friend?"

1. The shopkeeper asked him if he do not know that he was his friend.
2. The shopkeeper asked him if he does not know that I was his friend.
3. The shopkeeper asked him if he did not know that he was his friend.
4. The shopkeeper asked him if he could not know that he was his friend.

Correct Option - 3

Que. 76 The concept of social, economic and political justice has been taken from which revolution?

1. Japanese Revolution
2. American Revolution
3. French Revolution
4. Russian Revolution

Correct Option - 4

Que. 77 निम्नलिखित में से किस एक वाक्य में योजक चिन्ह का प्रयोग किया गया है?

1. मोहन, अब तुम जा सकते हो।
2. पृथ्वी पर जो सदा राम-नाम गेट हैं, मैं उन्हें बार-बार प्रणाम करता हूँ।
3. सज्जनों, समय आ गया है, सावधान हो जाओ।
4. प्रिय, महाशय मैं आपका आभारी हूँ।

Correct Option - 2

Que. 78 A sentence is given in Active/Passive voice. Out of the four alternatives suggested, select the one which best expresses the same sentence in Active/Passive voice.

His attitude towards the society surprised me.

1. I were surprised at his attitude towards the society.
2. I was surprised by his attitude towards the society.
3. He was surprised by his attitude towards the society.
4. I was surprised at his attitude towards the society.

Correct Option - 4

Que. 79 Solid cubes are made by melting a solid cylinder. The base radius of the cylinder is 44 cm and its height is 14 cm. If the side of the cube is 11 cm, then how many cubes will be made?

1. 64
2. 128
3. 32
4. 256

Correct Option - 1

Que. 80 In the following question, an idiomatic expression and its four meanings are given. Find out the correct meaning of the idiomatic expression and indicate the number of that meaning as your answer.

From hand to mouth

1. Thwarted one in the execution of one's own design
2. Distinguished himself
3. Without any provision for the future
4. Know it thoroughly

Correct Option - 3

Que. 81 Disguised unemployment is said to occur when:

1. Demand for labour declines compared to its supply for demographic reasons.
2. Demand for labour reduces because of a seasonal swing.
3. More labour is engaged in an occupation than optimally required.
4. Jobs get reduced because of a negative business cycle.

Correct Option - 3

Que. 82 Directions: Given below are four jumbled sentences. Select the option that gives their correct order.

A: Our captain sent a dozen men with vessels for water if any could be found.

B: When we came to land, we saw no river or spring nor any inhabitants.

C: I went on to explore.

D: On the 16th of June 1730, we discovered land.

1. DABC
2. ACDB
3. CABD
4. BACD

Correct Option - 1

Que. 83 Direction: Identify the segment in the sentence, which contains the grammatical error.

The message was conveyed to me by him across her.

1. The message was
2. conveyed to
3. me by him
4. across her

Correct Option - 4

Que. 84 Chandrakant Pandit has been appointed as the coach of which of the following IPL cricket team?

1. Royal Challengers Bengaluru
2. Kolkata Knight Riders
3. Mumbai Indian
4. Delhi Capital

Correct Option - 2

Que. 85 Tawa Dam is located in which district of Madhya Pradesh?

1. Hoshangabad
2. Indore
3. Balaghat
4. Jabalpur

Correct Option - 1

Que. 86 Lowest female literacy rate district in Madhya Pradesh is

1. Jhabua
2. Alirajpur
3. Sheopur
4. Barwani

Correct Option - 2

Que. 87 Select the option that expresses the given sentence in direct speech.

He asked me when I had booked the flight tickets.

1. He said to me, "When did you book the flight tickets?"
2. He said to me, "When are you booking the flight tickets?"
3. He said to me, "When do you book the flight tickets?"
4. He said to me, "When you had book the flight tickets?"

Correct Option - 1

Que. 88 "वह तख्त पर सोता है" में कौन-सा वाच्य है?

1. कर्म वाच्य
2. भाव वाच्य
3. कर्तृ वाच्य
4. इनमें से कोई नहीं

Correct Option - 3

Que. 89 The ratio of the speeds of the train and the man is 10 : 1. The length of the train is 340 m and crosses a pole in 17 seconds. In how much time will the man cross the 360 m long platform?

1. 1 min 30 sec
2. 4 min
3. 3 min
4. 2 min 20 sec

Correct Option - 3

Que. 90 In how many ways, a committee of 5 members comprising 3 men and 2 women can be selected from 6 men and 5 women ?

1. 150
2. 200
3. 900
4. 1800

Correct Option - 2

Que. 91 Jhoolan Goswami is associated with:

1. Football
2. Cricket
3. Badminton
4. Archery

Correct Option - 2

Que. 92 The LCM and HCF of two numbers are 60 and 5, respectively. If one of the number is divided by 2 and the quotient is 10, then find the other number.

1. 15
2. 20
3. 12
4. 30

Correct Option - 1

Que. 93 "टोपी" शब्द का बहुवचन क्या है?

1. तोपियां
2. बुटियां
3. टोकरियां
4. टोपियाँ

Correct Option - 4

Que. 94 FIFA World Cup 2022 will be hosted by which country?

1. Brazil
2. Qatar
3. Saudi Arabia
4. France

Correct Option - 2

Que. 95 Select the option that expresses the given sentence in active voice.

All weapons were surrendered by them.

1. They had surrendered all weapons.
2. They surrendered all weapons.
3. They are surrendering all weapons.
4. They have surrendered all weapons.

Correct Option - 2

Que. 96 Given below are four sentences in jumbled order. Pick the option that gives their correct order.

A. Scientists have also puzzled over what exactly were these creatures - reptiles or birds.

B. Perhaps the least controversial assertion about the pterosaurs is that they were reptiles.

C. The fossil remains of the first flying vertebrates, the pterosaurs, have intrigued paleontologists for more than two centuries.

D. The scientists have wondered how such large creatures solved the problems of powered flight.

1. ADCB
2. BCDA
3. CDAB
4. DABC

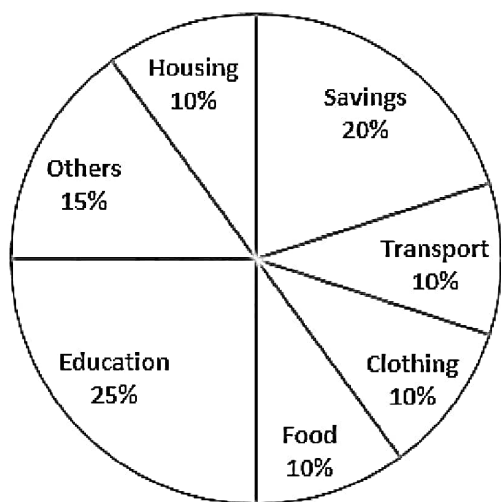
Correct Option - 3

Que. 97 निम्नलिखित में से किस शब्द में द्वंद्व समास नहीं है?

1. शुभागमन
2. कंदमूल
3. दाल-रोटी
4. जीवन-मरण

Correct Option - 1

Que. 98 A pie-chart is given below, shows the expenditure of a family in percentage during certain year.



Find the ratio of the total amount of money spent on Education and Savings.

1. 5 : 2
2. 2 : 5
3. 5 : 4
4. 4 : 5

Correct Option - 3

Que. 99 निम्नलिखित वाक्यों में से शुद्ध वाक्य का चयन कीजिये-

1. आज तो दही खट्टी है।
2. नेता की मृत्यु का समाचार से सम्पूर्ण देश भर में निराशा छा गयी।
3. राम और सीता चौदह वर्षों के बाद अयोध्या आयीं।
4. वे सब प्रकार के दोषों से मुक्त हैं।

Correct Option - 4

Que. 100 **Direction:** Choose the most appropriate form of indirect speech for the given sentence.

She said to me, "Where are you going for the vacation?"

1. She asked me where I was going for the vacation.
2. She said that where I was going for the vacation.
3. She asked me that where I was going for the vacation.
4. She asked where I had been going for the vacation.

Correct Option - 1

Que. 101 "They are subordinates to top management and superior to first-line managers." Which level of management is highlighted in this statement?

1. Top management
2. Middle management
3. Bottom management
4. None of these

Correct Option - 2

Que. 102 Delegation of authority makes the size of the organization :

1. Smaller and unmanageable

2. Comparatively Larger
3. Very big but unmanageable
4. It does not affect the size of the organization

Correct Option - 2

Que. 103 If the day before yesterday was Saturday, then what will be the day after tomorrow?

1. Friday
2. Thursday
3. Wednesday
4. Tuesday

Correct Option - 3

Que. 104 Which of these is also a term used with reference to the Internet?

1. Biscuits
2. Pastries
3. Cakes
4. Cookies

Correct Option - 4

Que. 105 Which of the following is a technique used for measuring actual performance?

1. Random sampling
2. Personal observation
3. Performance reports
4. All of the above

Correct Option - 4

Que. 106 Which of the following is a valid set of High Level Languages? :

1. {Java, Anaconda, Snowflake}
2. {COBOL, PNG, LIST}
3. {C#, LPG, Python}
4. {RPG, LISP, SNOBOL}

Correct Option - 4

Que. 107 Study the given pattern carefully and select the number that can replace the question mark (?) in it.

10	3	14
49	15	68
33	19	?

1. 29
2. 28
3. 25
4. 27

Correct Option - 2

Que. 108

A series is given with one term missing. Select the correct alternative from the given ones that will complete the series.

PMR, LJM, HGH, DDC, ?

1. YDZ
2. WBX
3. XCY
4. ZAX

Correct Option - 4

Que. 109 At what time between the 3 and 4 clockwise, the needles of hours and minute will be opposite each other or make an angle of 180° ?

1. $3 : 43\frac{7}{11}$
2. $3 : 38\frac{2}{11}$
3. $3 : 49\frac{1}{11}$
4. $3 : 54\frac{6}{11}$

Correct Option - 3

Que. 110 When contents of a cell in a worksheet of MS-Excel 2010 are being edited, the cell number is displayed in _____.

1. status bar
2. ribbon
3. formula bar
4. name box

Correct Option - 4

Que. 111 By whom the following definition of management was given?

"Management is the art of knowing what you want to do and then seeing that it is done in the best and the cheapest way".

1. F.W. Taylor
2. Henry Fayol
3. E.F.L. Brech
4. Oliver Sheldon

Correct Option - 1

Que. 112 The working principle of a rocket engine is based on the-

1. Newton's first law of motion
2. Newton's second law of motion
3. Newton's third law of motion
4. Conservation of energy

Correct Option - 3

Que. 113 The process of formation of a dark-coloured amorphous substance (organic matter that has reached maturity) decomposed from plant residues is called:

1. stratification

2. humification
3. mineralisation
4. fragmentation

Correct Option - 2

Que. 114 What is the common name of Mercury Sulfide?

1. Marsh Gas
2. Mohr's Salt
3. Potash Alum
4. Vermilion

Correct Option - 4

Que. 115 Which two number should be interchanged to make the following equation correct?

$$72 \div 9 \times 8 + 6 - 5 = 100$$

1. 9 and 6
2. 9 and 8
3. 6 and 8
4. 9 and 5

Correct Option - 1

Que. 116 The rate of doing work is called:

1. impulse
2. energy
3. force
4. power

Correct Option - 4

Que. 117 Two statements are given, followed by two conclusions numbered I and II. Assuming the statements to be true, even if they seem to be at variance with commonly known facts, decide which of the conclusions logically follow(s) from the statements.

Statements:

Some mangoes are oranges.

All oranges are grapes.

Conclusions:

I. All grapes are oranges.

II. All mangoes are grapes.

1. Only conclusion II follows
2. Both conclusions I and II follow
3. Only conclusion I follows
4. Neither conclusion I nor II follows

Correct Option - 4

Que. 118 Which of the following not an importance of Decentralization?

1. Utilisation of resources
2. Quick decision making

3. Develops managerial talent for the future
4. Develops initiative among subordinates

Correct Option - 1

Que. 119 In Computer Terminology, MPEG stands for

1. Moving Picture Experts Group
2. Moving Picture Electronic Group
3. Moving Picture Erasable Group
4. Moving Picture Equipment Group

Correct Option - 1

Que. 120 Which principle of management suggests the concept of replacing I with we?

1. Order
2. Equity
3. Espirit De Corp
4. None of these

Correct Option - 3

Que. 121 Among A, B, C, D, E and F, each one of the them have different weight, F is not the lightest. C is heavy than E and F. B is heavy than four people. E is heavy than D and F. A is heavy than B. Then how many people are heavier than C?

1. Two
2. Three
3. One
4. More than three

Correct Option - 1

Que. 122 Find the next number in the series.

46, 127, 202, 271, 334, ?

1. 391
2. 381
3. 401
4. 371

Correct Option - 1

Que. 123 Various parts of plants, vegetation and organic waste are called:

1. Fossil fuel
2. Nuclear Energy
3. Bio mass
4. Solar energy

Correct Option - 3

Que. 124 The company has received amount against the shares towards share capital is called

1. Nominal capital
2. Issued capital

3. Subscribed capital
4. Paid up capital

Correct Option - 4

Que. 125 Deficiency of which of the following Vitamins prevents from the clotting of blood?

1. Vitamin A
2. Vitamin K
3. Vitamin E
4. Vitamin D

Correct Option - 2

Que. 126 _____ hides the true network addresses and is used to intercept all messages entering and leaving the network.

1. Logic bomb
2. Firewall
3. Patches
4. Proxy server

Correct Option - 4

Que. 127 Desktop computers, laptop computers, tablets and smartphones are different types of _____.

1. microcomputers
2. mainframe computers
3. supercomputers
4. minicomputers

Correct Option - 1

Que. 128 Influenza disease is caused by which of the following?

1. Bacteria
2. Virus
3. Fungi
4. Protozoan

Correct Option - 2

Que. 129 In a certain code language, ALMIRAH is written as HRRMUCI and COMPANY is written as JURTPDZ. How will JUNGLEE be written in that language?

1. QASKOGF
2. QBSKHFW
3. QASKPHF
4. QUREASR

Correct Option - 1

Que. 130 If an organism can be cut into two identical halves in a single plane of division, then the organism is said to be:

1. Radially symmetrical
2. Asymmetrical
3. Transversely symmetrical
4. Bilaterally symmetrical

Correct Option - 4

Que. 131 Which of the answer figures is exactly the water image of the given figure?



1. ROCKON
2. ROCKON
3. ROCKON
4. ROCKON

Correct Option - 4

Que. 132 _____ command in Web browser that helps to move to the previous page from the current page.

1. Back
2. Create
3. Save
4. Forward

Correct Option - 1

Que. 133 Select the number from among the given options that can replace the question mark (?) in the following series.
12, 25, 51, 103, 207, ?

1. 415
2. 413
3. 416
4. 414

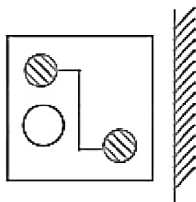
Correct Option - 1

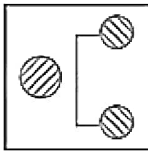
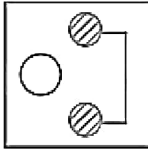
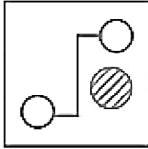
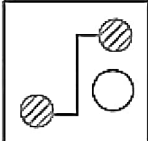
Que. 134 Select the term that will come next in the following series.
FHE, KMJ, PRO, UWT, ?

1. ZCB
2. ZBA
3. ZBY
4. ZAB

Correct Option - 3

Que. 135 Identify the mirror image for the following figure.



1. 
2. 
3. 
4. 

Correct Option - 4

Que. 136 Which of the following statements are correct about an aqueous solution of an acid and a base?

1. Higher the pH, stronger is the acid.
2. Higher the pH, weaker is the acid.
3. Lower the pH, stronger is the base.
4. Lower the pH, weaker is the base.

1. 1 and 3
2. 2 and 3
3. 1 and 4
4. 2 and 4

Correct Option - 4

Que. 137 Controlling is needed at which level of Management?

1. Top Level
2. Middle Level
3. Lower Level
4. All of the Above

Correct Option - 4

Que. 138 Six persons M, N, O, P, Q, and R are sitting in a row facing north direction. The number of persons to the left of P is one more than to his right. R sits second to the right of O, who is not adjacent to P. M sits immediate left of Q. Who sits to the immediate left of R?

1. N
2. P
3. M
4. Q

Correct Option - 1

Que. 139

Eight friends A, B, C, D, E, F, G and H are sitting around circular table facing each other for a lunch. A is opposite D and third to the right of B. G is between A and F. H is to the right of A. E is between C and D. Who is sitting opposite B?

1. C
2. E
3. F
4. H

Correct Option - 4

Que. 140 Which storage medium has tracks and sectors?

1. Pen drive
2. Primary memory
3. ROM
4. Hard disk

Correct Option - 4

Que. 141 At least a half of the total carbon dioxide fixation on earth is carried out by _____.

1. Bacteria
2. Algae
3. Fungi
4. Mycoplasma

Correct Option - 2

Que. 142 In MS word 2010, shortcut key to save the file is:

1. Ctrl+S
2. Ctrl+D
3. Alt+D
4. Alt+S

Correct Option - 1

Que. 143 Identify the type of organisational structure which facilitates occupational specialisation

1. Functional structure
2. Horizontal structure
3. Network structure
4. Divisional structure

Correct Option - 1

Que. 144 **Direction:** Study the following information carefully to answer the questions given below-

Six persons T, O, Y, L, B and F are sitting around a circular table facing outside the center not necessarily in the same order. Y is not an immediate neighbour of T. O sits between T and B who sits second left of L.

Who sits immediate left of O?

1. T
2. Y
3. B
4. L

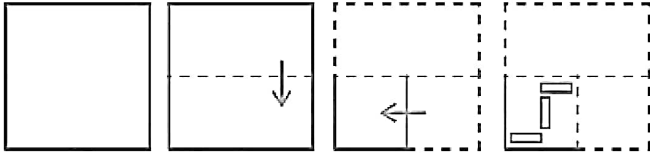
Correct Option - 1

Que. 145 Electric current is measured using which of the following instrument?

1. Voltmeter
2. Thermostat
3. Ammeter
4. Wattmeter

Correct Option - 3

Que. 146 The sequence of folding a piece of paper and the manner in which the folded paper has been cut is shown in the following figures. How would this paper look when unfolded?



- 1.
- 2.
- 3.
- 4.

Correct Option - 3

Que. 147 A series is given, with one number missing. Choose the correct option from the given ones that will complete the series.

9, 26, 43, 60, ?

1. 77
2. 87
3. 75
4. 76

Correct Option - 1

Que. 148 Which of the following devices can read data and convert them to a form that a computer can use?

1. Processing devices
2. Input devices
3. Output devices
4. Memory devices

Correct Option - 2

Que. 149 In the context of computers, WORM is an acronym of:

1. Write Once, Read Many
2. Word On, RAM Memory
3. Word Optical, Recognition Malware
4. Wireless Operating, Read Module

Correct Option - 1

Que. 150 Arun ranks 27th in the class. Vijay is 7 ranks ahead of Arun. Vijay's rank from the last is 36th. How many students are there in the class?

1. 55
2. 51
3. 56
4. 61

Correct Option - 1

Que. 151 When a large force acts on a body for a short time, then the force is called?

1. Impulsive force
2. Kinetic force
3. Centrifugal force
4. Static force

Correct Option - 1

Que. 152 We slip while walking on a path having pond scum or green algae because:

1. The inertia of motion
2. The friction is zero
3. The friction between the feet and the path is increased.
4. The friction between the feet and the path is reduced.

Correct Option - 4

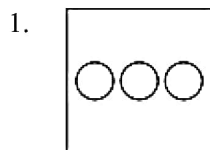
Que. 153 What is diluted acetic acid commonly known as?

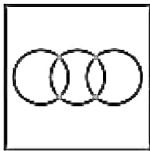
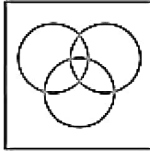

1. Oleum
2. Blue vitriol
3. Vinegar
4. Alum

Correct Option - 3

Que. 154 Select the Venn diagram from the given options that best represents the relationship between the given set of classes.

Prose, Literature and Poetry



2. 
3. 
4. 

Correct Option - 4

Que. 155 Which of the following internet services transfers files to and from a remote network?

1. FTP
2. TELNET
3. SMTP
4. POP

Correct Option - 1

Que. 156 Which of the following memory is used to bridge the gap between the speed of CPU and RAM?

1. Cache memory
2. DVD
3. ROM
4. Pen drive

Correct Option - 1

Que. 157 In a certain code language, 'HEAVEN' is written as 'QHVDHK'. How will 'VIRTUE' be written in the same code language?

1. HXWULX
2. YLUWXH
3. HXVULY
4. HXWULY

Correct Option - 4

Que. 158 In the following, two signs in the equation have been interchanged. Find out those two signs to make the equation correct.

$$16 + 4 \div 2 - 21 \times 7 = 21$$

1. - and \div
2. \times and +
3. + and -
4. \times and \div

Correct Option - 4

When sending email, we place the email address of the primary recipient(s) of the email in the _____ field.

Que. 159 BCC

2. TO
3. CC
4. Subject

Correct Option - 2

Que. 160 Supervision is considered :

1. An art of involving experience
2. An expression of intelligence
3. A keen sense of observation
4. Helping attitude towards subordinates

Correct Option - 3

Que. 161 Controlling function brings the management cycle back to the

1. Organising function
2. Directing function
3. Planning function
4. None of the above

Correct Option - 3

Que. 162 **Directions:** Solve the following question and mark the best possible option.

Statement: $N > M > V > L > X$

Conclusion I: $V > X$

Conclusion II: $N < L$

1. Neither I nor II is correct
2. Only I is true
3. Only II is true
4. Either I or II is correct

Correct Option - 2

Que. 163 The small shape used to denote a folder, file or program in a GUI-based system is known as _____.

1. Folders
2. Icons
3. Desktops
4. Ions

Correct Option - 2

Que. 164 Which of the following market Is formed on geographical basis?

1. Wholesale Market
2. Share Market
3. Foreign Exchange Market
4. Futures Markets

Correct Option - 3

Que. 165 Which of the following part of a flower is not a reproductive organ?

1. Stigma
2. Style
3. Anther
4. Sepal

Correct Option - 4

Que. 166 **Direction:** In the question below are given two statements followed by two conclusions numbered I and II.

You have to take the given statements to be true even if they seem to be at variance with commonly known facts. Read all the conclusions and then decide which of the given conclusions logically follows from the given statements disregarding commonly known facts.

Statement:

All Flowers are Pretty.

Some Pots is Pretty.

Conclusions:

I. Some Pretty is Pots.

II. Some Flower is Pretty.

1. Both conclusion I and II follow
2. Only conclusion I follow
3. Only conclusion II follow
4. Neither conclusion I nor II follows

Correct Option - 1

Que. 167 Which of the following error affects gross profit, net profit and both the sides of Balance sheet ?

1. Personal expenses of Rs. 2,000 of trader were debited in sundry expenses account
2. Received Rs. 10,000 from Suresh against his loan were credited in sales account
3. Rs. 2,000 incurred on building repairs were posted in Building account
4. Rs. 4,000 received from Rakesh were posted to the account of Rajesh

Correct Option - 2

Que. 168 _____ is the only revenue-generating element in the marketing mix.

1. Product
2. Pricing
3. Place
4. Promotion

Correct Option - 2

Que. 169 A natural magnet is an ore of which of the following chemical compound?

1. Iron Oxide
2. Iron Nitrate
3. Copper oxide
4. Iron Hydroxide

Correct Option - 1

Que. 170 In the following question, select the missing number from the given series.

16, 47, 139, 414, ?

1. 1232
2. 1238
3. 1234
4. 1236

Correct Option - 2

Que. 171 Principles of Taylor and Fayol are mutually complementary. One believed that the management should share the gain with the workers while the other suggested that employee's compensation should depend upon the earning capacity of the company and should give them a reasonable standard of living Which principle of Fayol is applied here?

1. Remuneration
2. Equity
3. Esprit the corps
4. Discipline

Correct Option - 1

Que. 172 How many water molecules are present in one molecule of washing soda?

1. 8
2. 5
3. 7
4. 10

Correct Option - 4

Que. 173 When baking powder is heated or mixed in water _____ is produced.

1. H_2
2. O_2
3. CO_2
4. CO

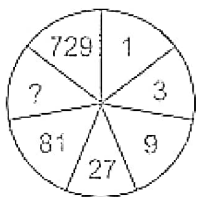
Correct Option - 3

Que. 174 Tools, machines, and buildings that can be used in production over many years are called _____.

1. fixed capital
2. working capital
3. human capital
4. None of the above

Correct Option - 1

Que. 175 In the following question, select the number which can be placed at the sign of question mark (?) from the given alternatives.



1. 242
2. 250
3. 201
4. 243

Correct Option - 4

Que. 176 Nitrogen and Carbon monoxide is the composition of which fuel?

1. CNG
2. Producer Gas
3. Water Gas
4. Petroleum Gas

Correct Option - 2

Que. 177 Which one of the following statements is true about estimated costs and standard costs ?

1. Standard costs are based on scientific analysis and engineering studies while estimated costs are based on historical basis.
2. Standard cost emphasis is on “what cost will be” while estimated cost emphasis is on “what cost should be”.
3. Standard costs are more frequently revised compared to estimated cost.
4. Estimated costs are more stable than standard costs.

Correct Option - 1

Que. 178 What is the second largest font size that can be selected using the ‘Font Size’ drop-down list in MS-Word 2016?

1. 48
2. 96
3. 36
4. 72

Correct Option - 1

Que. 179 A democratic leader exhibits the following type of behavior in his group

1. decentralization of responsibilities
2. participation of all members in decision making processes
3. the end of mutual relations
4. evaluation of group-members actions

Correct Option - 1

Que. 180 Who is known as the 'father of computer'?

1. Pascal
2. Hollerith
3. Newman
4. Charles Babbage

Correct Option - 4

Que. 181 Which of the following is *not* the major elements of social environment?

1. Concern with quality of life

2. Life expectancy
3. Educational system and literacy rates
4. Political ideology

Correct Option - 4

Que. 182 _____ extension can be used to save slides where one can just need to view the presentation and cannot do any editing.

1. .ppt
2. .pptx
3. .ppsx
4. .pptm

Correct Option - 3

Que. 183 In a certain code language, 'ACHIEVE' is written as 'XHENBAB' and 'NUMBERS' is written as 'KZJGBWP'. How will 'CAPTAIN' be written in that language?

1. YFLYWNJ
2. ZFMYXNK
3. YHLAWPJ
4. ZHMAXPK

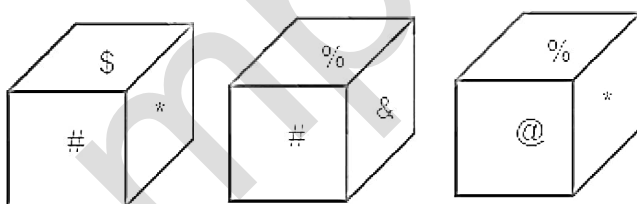
Correct Option - 2

Que. 184 Which of the following charts is used in MS-Excel 365 to represent the size of items in a data series, which is proportional to the sum of the items of data arranged in a column or row?

1. Pie
2. Line
3. Scatter
4. Bar

Correct Option - 1

Que. 185 Three different positions of the same dice are shown. Select the symbol that will be on the face opposite to the one showing '@'.



1. #
2. \$
3. %
4. &

Correct Option - 1

Que. 186 What happens to milk during the formation of curd?

1. Coagulation of milk protein and formation of sugar
2. PH increases and alcohol is produced

3. PH decreases and sugar is converted to lactic acid
4. Complete Oxidation of sugar into carbon di oxide and water

Correct Option - 3

Que. 187 Dot Matrix Printer is a/an

1. Processing device
2. Output device
3. Input device
4. Memory device

Correct Option - 2

Que. 188 Plaster of Paris is produced by heating _____.

1. Graphite
2. Gypsum
3. Zinc
4. Lead

Correct Option - 2

Que. 189 _____ is a technology that allows computers and other devices to communicate via a wireless signal.

1. Wi-Fi
2. Viral
3. ZIP
4. Wired equivalent privacy

Correct Option - 1

Que. 190 Pervasiveness of planning indicates that planning:

1. is a top management function
2. extends throughout the organization
3. is a future-oriented activity
4. is the first element of management process

Correct Option - 2

Que. 191 In a DBMS, the content and location of data is identified by:

1. Sequence data
2. Metadata
3. Minidata
4. Subdata

Correct Option - 2

Que. 192 Which of the following features in MS-Word 2010 can be used to draw a straight line across the selected texts in a document?

1. Strikethrough
2. Eraser
3. Format Painter
4. Replace

Correct Option - 1

Que. 193 What is the standard Windows keyboard, shortcut key combination for 'Redo'?

1. Control+Y
2. Control+Minus
3. Control+Shift+A
4. Control+Z

Correct Option - 1

Que. 194 X bicycled 15 km north, then 20 km to his left. At least, how many more kms does he need to bicycle to return to his original position?

1. 35 km
2. 15 km
3. 20 km
4. 25 km

Correct Option - 4

Que. 195 Organisation structure establishes relationships between:

1. Organisation and environment
2. Organisation and society
3. People, work and resources
4. Suppliers and customers

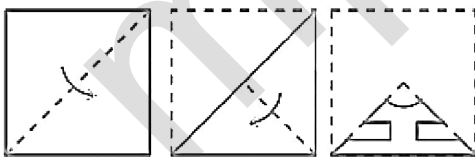
Correct Option - 3

Que. 196 First step in planning process is to:


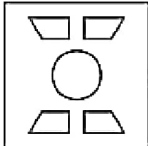
1. Setting an objective
2. Evaluate alternative
3. Determine strength and weakness
4. None of the above

Correct Option - 1

Que. 197 Direction: A piece of paper is folded and cut as shown below in the question figures. From the given answer figures, indicate how it will appear when opened



- 1.
- 2.

3. 
4. 

Correct Option - 3

Que. 198 Which of the following taxes is direct tax?

1. Service Tax
2. Entertainment tax
3. Corporate tax
4. Sales tax

Correct Option - 3

Que. 199 Formula of Borax is

1. $\text{Na}_2\text{B}_4\text{O}_7 \cdot 5\text{H}_2\text{O}$
2. $\text{Na}_2\text{B}_4\text{O}_7 \cdot 10\text{H}_2\text{O}$
3. $\text{Na}_2\text{B}_4\text{O}_7 \cdot 3\text{H}_2\text{O}$
4. $\text{Na}_2\text{B}_4\text{O}_7 \cdot \text{H}_2\text{O}$

Correct Option - 2

Que. 200 Which of the following is NOT a valid characteristic of the Linux operating system?

1. Multiprogramming
2. Real-time
3. Multiuser
4. Multitasking

Correct Option - 2