

MP Patwari

Memory Based Paper
27th Mar, 2023 Shift 1

mpcareer.in

200 Questions

Que. 1 Who was felicitated with the 'Sports Icon' award at the Maldives Sports Awards 2022?

1. Harbhajan Singh
2. Yuvraj Singh
3. Rohit Sharma
4. Suresh Raina

Correct Option - 4

Que. 2 The Achanakmar-Amarkantak Biosphere Reserve is located in the following states:

1. Sikkim and Manipur
2. Madhya Pradesh and Chhattisgarh
3. Assam and Mizoram
4. Uttarakhand and Uttar Pradesh

Correct Option - 2

Que. 3 The Legislative Assembly of Madhya Pradesh was designed by?

1. Ram V. Sutar
2. Charles Correa
3. Edwin Lutyens
4. Herbert Baker

Correct Option - 2

Que. 4 Which of the following is called as "Queen of Satpura"?

1. Amarkantak
2. Bhedaghat
3. Pachmarhi
4. Chitrakoot

Correct Option - 3

Que. 5 'Khanjar' is joint military exercise between India and _____.

1. Iran
2. Kyrgyzstan
3. Indonesia
4. Vietnam

Correct Option - 2

Que. 6 Infant Mortality Rate is

1. the infant deaths per thousand live births
2. the infant deaths per thousand deliveries
3. the infant deaths per 1 lakh live births
4. Number of infant deaths in 1000 population every year

Correct Option - 1

Que. 7 Kaimur range is situated in which of the following states

1. Jammu and Kashmir
2. Rajasthan and Haryana
3. Madhya Pradesh and Bihar
4. Himachal Pradesh and Uttarakhand

Correct Option - 3

Que. 8 What is the full form of IFC?

1. International File Collection
2. Ignore File Council
3. International Finance Corporation
4. internet front class

Correct Option - 3

Que. 9 The population of Madhya Pradesh, according to Census 2011, is

1. 7.2 crores
2. 6.2 crores
3. 6.5 crores
4. 7.5 crores

Correct Option - 1

Que. 10 Which was the second dynasty to rule over Magadha empire?

1. Haryanka Dynasty
2. Nanda Dynasty
3. Shishunaga Dynasty
4. Mauryan Dynasty

Correct Option - 3

Que. 11 Kaathi is a _____.

1. Caste
2. Tribe
3. Wooden Art
4. Folk Dance

Correct Option - 4

Que. 12 After Mahatma Gandhi's release from prison in January 1931, Congress leaders met at _____ to plan the future course of action.

1. Surat
2. Allahabad
3. Calcutta
4. Lahore

Correct Option - 2

Que. 13 Which of the following Dams is in Madhya Pradesh?

1. Gandhi Sagar Dam
2. Hirakud Dam
3. Ramganga Dam
4. Ottu Barrage Dam

Correct Option - 1

Que. 14 Recently launched 'Jan Samarth' portal

1. provides single point access for authenticated health information to citizens.
2. assists farmers to access links to useful farming-specific information.
3. provides access to Pan India e-Government services.
4. provides link to Government credit schemes.

Correct Option - 4

Que. 15 Which Tiger Reserve of Madhya Pradesh has been declared the Biosphere Reserve by UNESCO?

1. Kanha Tiger Reserve
2. Pench Tiger Reserve
3. Satpuda Tiger Reserve
4. Panna Tiger Reserve

Correct Option - 4

Que. 16 Which among of the following missiles is called the Indian Patriot?

1. Nag
2. Sagarika
3. Trishul
4. Akash

Correct Option - 4

Que. 17 Disguised unemployment generally means

1. large number of people remain unemployed
2. alternative employment is not available
3. marginal productivity of labour is zero
4. productivity of workers is low

Correct Option - 3

Que. 18 Which article of Indian Constitution is related to joint session of parliament?

1. Article 108
2. Article 110
3. Article 280
4. Article 370

Correct Option - 1

Que. 19 World Environment Day is celebrated on

1. December 1
2. June 5

3. November 14
4. August 15

Correct Option - 2

Que. 20 Madhya Pradesh is bordered by?

1. Uttar Pradesh, Chattisgarh, Maharashtra, Gujarat
2. Tamil Nadu, Andhra Pradesh, Karnataka, Kerala
3. Arunachal Pradesh, Mizoram, Manipur, Assam
4. Meghalaya, Uttarakhand, Gujarat

Correct Option - 1

Que. 21 **Direction:** In the following question, a sentence is given in Direct/Indirect speech. Out of the four alternatives, choose the one which best expresses the sentence in Indirect/Direct speech.

Ram said to me, "Let us go to see a movie."

1. Ram suggested to me that we should go to see a movie.
2. Ram told me to go to see a movie.
3. Ram told to me that we should go to see a movie.
4. Ram said to me that I should go to see a movie.

Correct Option - 1

Que. 22 In the following question, sentences of a paragraph have been jumbled and labeled as A, B, C, and D. You are required to rearrange the jumbled sentences of the paragraph and mark your response accordingly by selecting the correct option.

A: Restrictions to curb

B: Angrily after the government announced tighter

C: Officials in Peru and Mexico have reacted

D: The spread of Coronavirus amidst rising mortality rate.

1. CBAD
2. BACD
3. ABCD
4. DABC

Correct Option - 1

Que. 23 Select the most appropriate meaning of the given idiom.

Out of the blue

1. Completely unexpectedly
2. Beat someone black and blue
3. Loves to wear only blue colour clothes
4. Completely honestly

Correct Option - 1

Que. 24 **Directions:** Given below are four sentences, three of which are jumbled. Pick the option that gives the correct order.

- A. Spread butter on two slices of bread.
- B. Then, arrange the tomatoes over the cucumbers.

- C. Arrange cucumber pieces on one slice of buttered bread.
D. Sprinkle salt and pepper and place the other slice of bread over it.
1. ABDC
 2. ADCB
 3. ACBD
 4. ACDB

Correct Option - 3

Que. 25 Directions: Given below are four jumbled sentences. Out of the given options select the one that gives their correct order.

- A. Anush was very afraid of stray dogs.
B. Anush's mother saw the dog chasing her son.
C. One evening, when a street dog barked at him, Anush turned and started running.
D. The dog ran after him barking loudly and fiercely.
1. DCAB
 2. ABCD
 3. ACDB
 4. ADBC

Correct Option - 3

Que. 26 In the following question, a sentence has been given in indirect speech. Out of the four alternatives suggested, select the one which best expresses the same sentence in direct speech.

The engineer told manish that he had been repairing a machine since 11 am.

1. The engineer said to manish, "I have been repairing a machine since 11 am.
2. The engineer says to manish, "I have been repairing a machine since 11 am.
3. The engineer said to manish, "I have been repaired a machine since 11 am.
4. The engineer said to manish, "I has been repairing a machine since 11 am.

Correct Option - 1

Que. 27 Select the most appropriate ANTONYM of the given word.

FREED

1. released
2. discharged
3. imprisoned
4. liberated

Correct Option - 3

Que. 28 Select the most appropriate meaning of the given idiom.

Of the old school

1. School in an old age home
2. School one attended long ago
3. Old fashioned in thought
4. Old dilapidated building

Correct Option - 3

Que. 29 In the following question, out of the four alternatives, select the alternative which best expresses the meaning of the idiom/phrase.

Under my thumb

1. A very easy task
2. To hide something
3. To pressurise someone to partner with you for a crime
4. Under my control

Correct Option - 4

Que. 30 Select the INCORRECTLY spelt word.

1. Fabulus
2. Farther
3. Fasting
4. Further

Correct Option - 1

Que. 31 Direction: Select the correct active/passive form from the given sentence.

You are requested to eat healthy foods.

1. You should eat healthy foods.
2. Do eat healthy foods.
3. Always eat healthy foods.
4. Eat healthy foods.

Correct Option - 4

Que. 32 Directions: Select the most appropriate antonym of the given word.

DEJECTED

1. moody
2. doleful
3. morose
4. cheerful

Correct Option - 4

Que. 33 Select the correct direct narration of the given sentence.

Samira told Ravina that she was watching the news.

1. Samira said to Ravina, "I was watching the news".
2. Samira said to Ravina, "I am watching the news".
3. Samira said to Ravina, "I had been watching the news".
4. Samira said to Ravina, "I have been watching the news".

Correct Option - 2

Que. 34 Select the wrongly spelt word.

1. Prominent
2. Professor
3. Laboratory
4. Knowlege

Correct Option - 4

Que. 35 The following sentence has been split into four segments. Identify the segment that contains a grammatical error.

The teacher punished him / and told him / that he does not / need to give a clarification.

1. need to give a clarification
2. The teacher punished him
3. and told him
4. that he does not

Correct Option - 4

Que. 36 Select the option that expresses the given sentence in passive voice.

The first-year students are bidding farewell to their seniors.

1. Farewell is to be bid to their seniors by the first-year students.
2. Farewell was being bid to their seniors by the first-year students.
3. Farewell is being bid to their seniors by the first-year students.
4. Their seniors is being bid farewell by the first-year students.

Correct Option - 3

Que. 37 Select the most appropriate option to fill in the blank.

Today, banking in a seamless world _____ a distinct reality.

1. are
2. is
3. was
4. have

Correct Option - 2

Que. 38 Select the correct passive voice form for the given sentence.

My brother likes football.

1. Football was liked by my brother.
2. Football is like by my brother.
3. Football was like by my brother.
4. Football is liked by my brother.

Correct Option - 4

Que. 39 Select the option that expresses the given sentence in passive voice.

Mandeep has repaired the truck.

1. The truck have been repaired by Mandeep.
2. The truck had been repaired by Mandeep.
3. The truck is been repaired by Mandeep.
4. The truck has been repaired by Mandeep.

Correct Option - 4

Que. 40 Directions: Choose the one meaning which best expresses the idiom.

Hobson's choice.

1. a situation in which you have no choice because if you don't accept what is given, you get nothing at all
2. a situation in which you have all choice but if you accept the choice you forfeit the right to choice again
3. a choice where your fortunes have already been decided before you exercise the choice
4. a choice which is a win-win situation for parties involved in unlike business

Correct Option - 1

Que. 41 Select the most appropriate comparative degree to fill in the blank.

Balance those killer workouts with something a bit ____ like Pilates or yoga.

1. milder
2. mild
3. much mild
4. mildest

Correct Option - 1

Que. 42 Select the most appropriate synonym of the given word.

Lull

1. Activity
2. Disturbance
3. Noise
4. Calm

Correct Option - 4

Que. 43 Select the correct passive form of the given sentence.

The committee has discussed the matter for several days.

1. The matter is being discussed by the committee for several days.
2. The matter has discussed by the committee for several days.
3. The matter was discussed by the committee for several days.
4. The matter has been discussed by the committee for several days.

Correct Option - 4

Que. 44 **Direction:** In the following question, a sentence is given in Direct/Indirect speech. Out of the four alternatives, choose the one which best expresses the sentence in Indirect/Direct Speech.

The doctor said to Mohan, "Do not take off your bandages from surgery before a week."

1. The doctor asked Mohan not to take off your bandages from surgery before a week.
2. The doctor said to Mohan not to take off his bandages from surgery before a week.
3. The doctor forbade Mohan not to take off his bandages from surgery before a week.
4. The doctor advised Mohan not to take off his bandages from surgery before a week.

Correct Option - 4

Que. 45 Choose the correct preposition, out of the four options, to be filled in the blanks:-

Kalim's behavior is subversive _____ discipline.

1. with
2. about
3. of
4. for

Correct Option - 3

Que. 46 In which group of the modern periodic table are halogens placed?

1. 16th
2. 18th
3. 1st
4. 17th

Correct Option - 4

Que. 47 Which of the following is a water soluble Vitamin?

1. Calciferol
2. Tocopherol
3. Ascorbic acid
4. Phylloquinone

Correct Option - 3

Que. 48 What is the chemical name for Vitamin B7?

1. Panotothenic Acid
2. Cobalamin
3. Biotin
4. Folic Acid

Correct Option - 3

Que. 49 The principle enzyme for DNA replication is

1. DNA ligase
2. DNA helicase
3. DNA-dependent DNA polymerase
4. None of the above

Correct Option - 3

Que. 50 Which one of the following pair is an example of Isobars?

1. Chlorine and oxygen
2. Calcium and argon
3. Oxygen and carbon
4. Hydrogen and helium

Correct Option - 2

Que. 51 In which stage of mitotic cell division, chromosomes loose their identity?

1. Prophase
2. Metaphase
3. Anaphase
4. Telophase

Correct Option - 4

Que. 52 Which element is found in protein ?

1. Calcium
2. Magnesium
3. Boron
4. Nitrogen

Correct Option - 4

Que. 53 Which of the following groups contain only biodegradable items?

1. Grass, flowers and plastic
2. Cake, wood and metal
3. Fruit-peels, Vegetables and wood
4. Grass, wood and plastic

Correct Option - 3

Que. 54 What is the SI unit of angular frequency?

1. Hz
2. rad/s
3. rad
4. Hz^{-1}

Correct Option - 2

Que. 55 Choose the correct sequence of embryo development in a dicot plant

1. Proembryo → Globular embryo → Heart-shaped embryo → Mature embryo
2. Proembryo → Heart-shaped embryo → Globular embryo → Mature embryo
3. Globular → Heart-shaped embryo → Proembryo embryo → Mature embryo
4. Globular → Proembryo embryo → Heart-shaped embryo → Mature embryo

Correct Option - 1

Que. 56 A sound source sends waves of frequency 400 Hz and 3 m wavelength. What will be the speed of sound waves?

1. 1000 m/s
2. 10000 m/s
3. 1200 m/s
4. 12000 m/s

Correct Option - 3

Que. 57 What are the constituents of bronze?

1. Al + Cu + Mn + Mg
2. Cu + Zn
3. Cu + Sn
4. Pb + Sn

Correct Option - 3

Que. 58 An example of a commonly used Insecticide is

1. Bordeaux mixture

- 2, 4-Dichloro phenoxy acetic acid
- Dichloro diphenyl trichloro ethane
- Arsenic

Correct Option - 3

Que. 59 Which of the following does not belong to Phylum Coelenterata?

- Sea pen
- Sea feather
- Sea cucumber
- Sea fan

Correct Option - 3

Que. 60 Faraday's Laws of electrolysis are concerned with _____.

- Equivalent weight
- Atomic weight
- Molecular weight
- Atomic number

Correct Option - 1

Que. 61 The element having tetra-atomic atomicity is _____.

- Helium
- Nitrogen
- Phosphorous
- Chlorine

Correct Option - 3

Que. 62 A hydrocarbon in which two carbon atoms are joined by a double bond is called as an:

- Alkane
- Alkene
- Alkyne
- Ionic bond

Correct Option - 2

Que. 63 Which bacteria is responsible for the formation of curd?

- Bacillus radicolica
- Lactobacillus aureus
- Micrococcus
- Lactobacillus acidophilus

Correct Option - 4

Que. 64 Which one of the following reactions is a combination reaction?

- $\text{Mg(s)} + \text{Cl}_2(\text{g}) \rightarrow \text{MgCl}_2(\text{s})$
- $\text{HCl(aq)} + \text{NaOH(aq)} \rightarrow \text{NaCl(s)} + \text{H}_2\text{O(aq)}$
- $\text{CuSO}_4(\text{aq}) + \text{Fe(s)} \rightarrow \text{FeSO}_4(\text{aq}) + \text{Cu(s)}$

4. None of these

Correct Option - 1

Que. 65 Which of the following forces is always attractive?

1. Electrostatic force
2. Gravitational force
3. Muscular force
4. Magnetic force

Correct Option - 2

Que. 66 An object is released from a certain height above the ground. Just at the time it touches the ground, it will possess _____.

1. heat energy
2. chemical energy
3. kinetic energy
4. potential energy

Correct Option - 3

Que. 67 In total internal reflection the value of critical angle will be maximum when light passes through

1. From Glass to air
2. From Diamond to air
3. From Glass to water
4. From water to air

Correct Option - 3

Que. 68 Which of the following metals reacts with steam to form a metal oxide and hydrogen?

1. Copper
2. Silver
3. Lead
4. Aluminium

Correct Option - 4

Que. 69 What is the value of Universal Gravitational Constant (G) in C.G.S?

1. (6.67×10^{-6}) c.g.s unit
2. (6.67×10^{-7}) c.g.s unit
3. (6.67×10^{-9}) c.g.s unit
4. (6.67×10^{-8}) c.g.s unit

Correct Option - 4

Que. 70 Which of the following chemical compound is also known as Lunar Caustic?

1. Silver Nitrate
2. Sodium Hydroxide
3. Hydrochloride Acid
4. Calcium Oxide

Correct Option - 1

Que. 71 Which of the following output device is used to print graphics?

1. Inkjet Printer
2. Dot matrix printer
3. Plotter
4. Laser printer

Correct Option - 3

Que. 72 What kind of error does a blue underline that appears below the text represent in MS Word 2016?

1. Spelling error
2. Capitalization error
3. Hyperlink error
4. Format Consistency Checker

Correct Option - 4

Que. 73 Which of the following keyboard shortcuts doubles the line spacing for the current selection?

1. Ctrl + D
2. Alt + D
3. Alt + 2
4. Ctrl + 2

Correct Option - 4

Que. 74 The inbox is the default location for all _____.

1. incoming mail
2. forwarded mail
3. sent mail
4. deleted mail

Correct Option - 1

Que. 75 Which of the following statements is incorrect regarding the Internet?

1. Internet and World Wide Web are one and the same.
2. Every computer connected to the Internet is identified by an IP address.
3. Computers connected to the Internet are called clients.
4. Internet works with the help of clients and servers.

Correct Option - 1

Que. 76 Which of the following is a system software?

1. Device driver
2. Tally
3. Spreadsheet
4. Text editor

Correct Option - 1

Que. 77 Anti-virus is installed in a computer to:

1. Safeguard the computer from virus
2. Safeguard the computer from fire
3. Improve the memory size
4. Install other programs

Correct Option - 1

Que. 78 Which of the following keys can be used to prevent a page from loading in Google Chrome?

1. Esc
2. Tab
3. Backspace
4. Delete

Correct Option - 1

Que. 79 What is the absolute address of the cell located at the intersection of a seventh row and fifth column in an MS Excel spreadsheet?

1. &E&7
2. \$G\$5
3. \$E\$7
4. &G&5

Correct Option - 3

Que. 80 Which of the following statements is incorrect about the taskbar of the Windows 10 operating system?

1. The Start menu is on the left side of the taskbar.
2. Internet connection status is displayed in the notification area of the taskbar.
3. The taskbar is at the bottom of the screen.
4. Icons of pinned applications are displayed in the notification area of the taskbar.

Correct Option - 4

Que. 81 Clipboard functions, manipulating slides, fonts, and paragraph settings appear under which of the following menus in MS PowerPoint 2016?

1. Review
2. Home
3. View
4. Design

Correct Option - 2

Que. 82 Which of the following option of Mouse properties is used to swap the functions of right and left mouse buttons?

1. Pointer Options
2. ClickLock
3. Double-click speed
4. Button configuration

Correct Option - 4

Que. 83 Which of the following is NOT a valid menu item in MS-Word 2016?

1. View
2. Data
3. Home
4. Mailings

Correct Option - 2

Que. 84 Which one of these also known as read/write memory?

1. ROM
2. RAM
3. DVD
4. Hard disk

Correct Option - 2

Que. 85 The World Wide Web (WWW) is :

1. another name for the Internet
2. a worldwide connection of computers
3. a worldwide collection of information
4. a collection of linked information residing on computers connected by the Internet

Correct Option - 4

Que. 86 Which of the following menu of MS Excel 2016 includes 'Merge & Center' command?

1. Insert
2. Data
3. Home
4. View

Correct Option - 3

Que. 87 The earliest calculating devices are;

1. TRON
2. Abacus
3. ENIAC
4. Analytical Engine

Correct Option - 2

Que. 88 Which of the following keyboard shortcuts is used to go to the File tab in MS Word 2010?

1. Alt + N
2. Alt + F
3. Alt + H
4. Alt + G

Correct Option - 2

Que. 89 What is XML stands for?

1. Example Markup Language

2. Extensible Markup Language
3. X Markup Language
4. Extra Modern Link

Correct Option - 2

Que. 90 An IPv4 address is of _____ bits.

1. 64
2. 16
3. 32
4. 128

Correct Option - 3

Que. 91 Which of the following statement is correct about the use of Blind Carbon Copy (BCC) in Gmail?

1. It is used for sharing a copy of the email with all the primary recipients.
2. It is used for sharing a copy of the email with 100 primary recipients.
3. It is used for sharing a copy of the email with someone without letting the primary recipient know about it.
4. It is used for sharing a copy of the email with 10 primary recipients.

Correct Option - 3

Que. 92 Computer memory is made up of a large number of cells. Each cell is capable of storing _____ of information in the form of binary numbers.

1. two bits
2. one bit
3. one byte
4. one nibble

Correct Option - 2

Que. 93 Select the option that is related to the third number in the same way as the second number is related to the first number.

169 : 225 :: 256 : ?

1. 324
2. 361
3. 289
4. 400

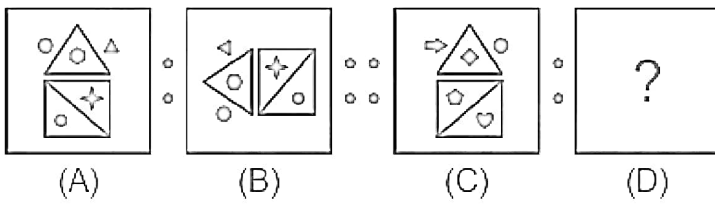
Correct Option - 1

Que. 94 Mark the odd one out:

1. Chrome
2. Office
3. Safari
4. Internet Explorer

Correct Option - 2

Que. 95 Select the option that is related to figure C in the same way as figure B is related to figure A.



- 1.
- 2.
- 3.
- 4.

Correct Option - 3

Que. 96 Which of the given options is the most suitable to fill in the blank?

$16 : 128 :: 4 : \underline{\hspace{2cm}}$

1. 14
2. 8
3. 40
4. 26

Correct Option - 2

Que. 97 Four letter-clusters have been given out of which three are alike in some manner and one is different. Select the one that is different.

1. SVX
2. FIK
3. BDG
4. LOQ

Correct Option - 3

Que. 98 Find the odd number pair from the given alternatives.

1. (217, 194)
2. (474, 452)
3. (372, 349)
4. (177, 154)

Correct Option - 2

Que. 99 Three of the following four letter-clusters are alike in a certain way and thus form a group. Select the letter-cluster which does NOT belong to that group.

1. XUR
2. YVS
3. WTR
4. ZWT

Correct Option - 3

Que. 100 If 'animals' is called 'red', 'red' is called 'water', 'water' is called 'sky', 'sky' is called 'cloud', 'cloud' is called 'air' and 'air' is called 'fish', Where does the fish live?

1. red
2. fish
3. sky
4. water

Correct Option - 3

Que. 101 In a certain code language, 'LETTUCE' is written as 'ECUTTEL' and 'PEPPERS' is written as 'SREPPEP'. How will 'PARSNIP' be written in that language?

1. PINSARP
2. PNISRAP
3. PINSRAP
4. PISNRAP

Correct Option - 3

Que. 102 In a certain code language, 'BEHOLD' is written as 'BDEHLO' and 'INDEED' is written as 'DDEEIN'. How will 'COURSE' be written in that language?

1. CEROSU
2. CEORUS
3. CEOSUR
4. CEORSU

Correct Option - 4

Que. 103 Which of the following numbers will replace the question mark (?) in the given series?

17, 17, 34, 102, 408, ?

1. 1620
2. 2040
3. 2440
4. 1550

Correct Option - 2

Que. 104 Select the number from among the given options that can replace the question mark (?) in the following series.

4, 5, 13, 22, 86, 111, ?

1. 327
2. 237
3. 247
4. 427

Correct Option - 1

Que. 105 Which of the following numbers will replace the question mark (?) in the given series?

40, 41, 50, 75, 124, ?

1. 205
2. 257
3. 232
4. 264

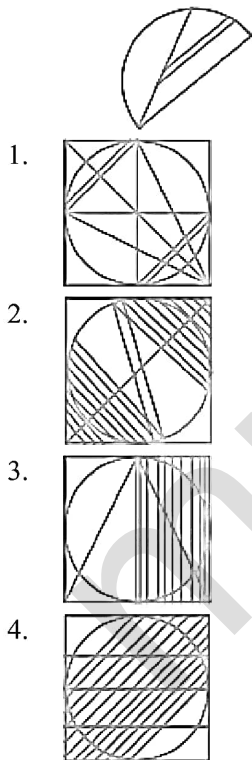
Correct Option - 1

Que. 106 Eight friends Brij, Chetan, Juhi, Lakshya, Naman, Pawan, Ramesh, and Yash are sitting around a circular table facing towards the centre. One of the nine seats is vacant. Ramesh sits second to the left of Juhi. Juhi sits third to the left of Chetan. Pawan sits between Juhi and Lakshya. Brij sits to the immediate left of Naman. Naman is not an immediate neighbour of Ramesh. Yash is not an immediate neighbour of Naman. Who sits second to the left of Yash?

1. Brij
2. Naman
3. Ramesh
4. It is vacant seat.

Correct Option - 4

Que. 107 Select the option in which the given figure is embedded (rotation is allowed).



Correct Option - 3

Que. 108 In the question given, relations between different elements are shown in the statements. These statements are followed by two conclusions. Find out which of the given conclusions follow(s) the given statements and select the correct alternative from the given choices.

Statements:

$N > W \leq Q < F$; $W > G \leq H > A$

Conclusions:

I. $Q \geq H$

II. $G < N$

1. Neither conclusion I nor II is true
2. Only conclusion II is true
3. Only conclusion I is true
4. Either conclusion I or II is true

Correct Option - 2

Que. 109 A person leaves his house early in the morning and walks 12 km towards west. He takes a right turn and walks 22 km. He takes a right turn and walks 20 km. He takes a right turn and walks 5 km. He takes a left turn and walks 4 km. Finally he takes a right turn and walks 12 km. How far and in which direction is he now from the starting point?

1. 13 km North-West
2. 17 km South-West
3. 17 km South-East
4. 13 km North-East

Correct Option - 4

Que. 110 Direction: Study the following information carefully and answer the question given below.

Eight different people – B, C, D, E, F, G, H and I are sitting on a rectangular table but not necessarily in the same order. Four of them are sitting on the middle side of the table facing outside and rest of them are sitting on the corners of the table facing inside. F is sitting second to the right of C who is sitting in the middle on the smaller side of the table. Two people are sitting between C and the one who is sitting immediate right of H. D is sitting fifth to the right of H. B is sitting immediate left of G. Neither B nor F is an immediate neighbour of E.

Who among the following is not sitting at the corner of the table?

1. B
2. D
3. E
4. G

Correct Option - 4

Que. 111 In a row of people, the position of A from the left side is 11th and the position of B from the right side is 12th. C is sitting midway between B and A. Also, the position of C from the right of the row is 18th. Find the total no. of persons in the row.

1. 36
2. 34
3. 30
4. 33

Correct Option - 2

Que. 112 All 32 students of a class are standing in a straight row facing north. Anand is 6th from the right end, while Meena is 14th from the left end. How many students stand between Anand and Meena?

1. 12
2. 13

3. 10
4. 8

Correct Option - 1

Que. 113 How many such pairs of letters are there in the word REMONSTRATE (in both forward and backward directions) each of which has as many letters between them in the word as there are in English alphabetical order?

1. 7
2. 6
3. 5
4. 8

Correct Option - 4

Que. 114 Three of the given options are alike in a certain way. However, one option is not like the other three. Select the option which is different from the others.

1. Wolverine
2. Horse
3. Hen
4. Bull

Correct Option - 3

Que. 115 Among A, B, C, D, E, F and G each one of the them have different weight, G is lighter than only C. As many people are heavier than B equals to the number of people lighter than A. E is lighter than both B and A but heavier than F. D is heavy than both A and F. Then who is the third lightest person?

1. E
2. A
3. B
4. D

Correct Option - 2

Que. 116 Eight friends P, Q, R, S, T, U, V and W are sitting around a circular table facing away from the center but not necessarily in the same order. S is sitting opposite to the one who is sitting immediate left of T. Q is sitting opposite to the one who is second to the right of S. W is not adjacent to Q and is sitting opposite to U. R is immediate neighbor of P who sitting opposite to the one who is sitting second to the right of W. Then who is sitting third to the right of V?

1. Q
2. U
3. P
4. S

Correct Option - 2

Que. 117 **Direction:** Choose the group of letters, which is different from others.

1. CFIL
2. PSVX
3. JMPS
4. ORUX

Correct Option - 2

Que. 118 Select the option that is related to the third number in the same way as the second number is related to the first number.

9 : 91 :: 13 : ?

1. 132
2. 203
3. 183
4. 99

Correct Option - 3

Que. 119 In a certain code language, 'SPECIAL' is written as 'ILWYSAP' and 'SECURITY' is written as 'IWYGJSHC'. How will 'REQUIRED' be written in that language?

1. JWKGSJWX
2. JWKFRIVW
3. JWKGTKWX
4. JWKGSJWW

Correct Option - 1

Que. 120 Eight friends, S, T, U, V, W, X, Y and Z, are doing exercise in a line, all are facing south. U sits at second from left. S is at one of the extreme end in row. W is between T and U. V is between X and Z. Y sits fourth to left of Z. There are two people sitting between Z and S. V is third to right of W. Who is sitting at fifth from right end?

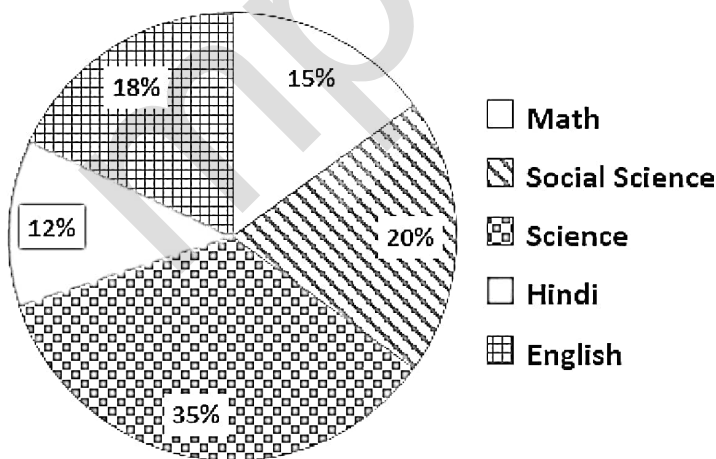
1. Z
2. W
3. T
4. V

Correct Option - 3

Que. 121 Study the following pie-chart and answer the given question.

Percentage wise distribution of teachers of six different subjects in a school.

Total number of teachers = 180



The ratio of the number of teachers in Hindi to the number of teachers in English and Mathematics together is:

1. 4 : 11
2. 12 : 11

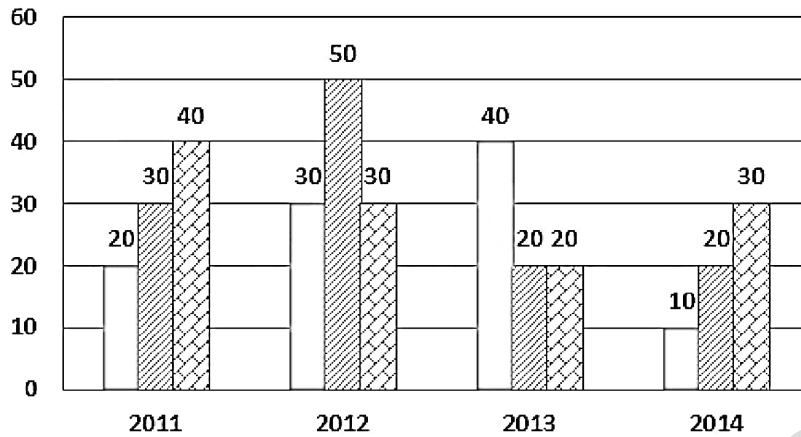
3. 5 : 3

4. 15 : 11

Correct Option - 1

Que. 122 The number of students in Class XI in Science, Arts and Commerce streams of a school over a period of 4 years (2011-2014) has been depicted through the bar chart given below.

□ Science ▨ Arts ▩ Commerce



What is the average number of Arts students in the given class over the given period of 4 years?

1. 32
2. 35
3. 30
4. 25

Correct Option - 3

Que. 123 Which of the following is *not* part of dimensions of business environment?

1. Economic Environment
2. Technological Environment
3. Political Environment
4. Resource Environment

Correct Option - 4

Que. 124 Management is considered to be an art because:

1. The principles of management have universal validity
2. The principles of management have universal application
3. Different principles of management are brought into effect differently by different managers
4. It is not important for the practising managers to be a member of a professional association

Correct Option - 3

Que. 125 Which of the following is a function of Top level management?

1. To interpret the policies
2. To oversee the efforts of workers
3. To Formulate overall goals and strategies for the organization
4. All of the above

Correct Option - 3

Que. 126 The Principle of Order is concerned with:

1. Orderly arrangements of various resources
2. Giving orders to employees
3. Receiving an orders from top-level
4. None of the above

Correct Option - 1

Que. 127 Which one of the following is a feature of monopolistic competition?

1. Indeterminate Demand Curve
2. Non-price competition
3. Interdependent firms
4. Price competition

Correct Option - 2

Que. 128 Rohan is working as a department head in his company. At the time of promotion, he promoted Rahul, who was the son of one of his relatives. However, Rajiv was the most deserving person for the promotion.

Which of the following management principles is violated here?

1. Equity
2. Remuneration
3. Stability of Personnel
4. Order

Correct Option - 1

Que. 129 Demand for furniture is a

1. Consumer's demand
2. Durable demand
3. Producer's demand
4. Both (A) and (B)

Correct Option - 4

Que. 130 All of the following would be included in the non-financial company's Operating Activities except

1. Income tax payment
2. Collections from customer
3. Cash payment to suppliers
4. Interest on Current Investment

Correct Option - 4

Que. 131 Return on investment measures a relationship between:

1. Net Profit after interest and tax and capital employed.
2. Net Profit before interest and tax and capital employed.
3. Net Profit after interest and tax and total assets.
4. Net Profit before interest and tax and total assets.

Correct Option - 2

Que. 132 While recording the expenses in the profit and loss account, Ritesh entered a sum of Rs 32,000, which was spent on repairing the personal car, in the repairs account.

Identify which principle of accounting is violated here?

1. Separate entity
2. Conservatism
3. Revenue recognition
4. Full disclosure

Correct Option - 1

Que. 133 The first ever Industrial Policy Resolution of India was announced in the year _____.

1. 1952
2. 1955
3. 1948
4. 1960

Correct Option - 3

Que. 134 The Companies act 2013 has been divided into _____ chapters.

1. 25
2. 27
3. 29
4. 30

Correct Option - 3

Que. 135 Military type of organisation is known as

1. line organisation
2. functional organisation
3. line and staff organisation
4. line, staff and functional organisation

Correct Option - 1

Que. 136 Ideal Quick Ratio is:

1. 1: 1
2. 1: 2
3. 2: 1
4. 2: 2

Correct Option - 1

Que. 137 The balance of exports and imports of goods is referred to as:

1. current account
2. Current account balance
3. current account deficit
4. Balance of trade

Correct Option - 4

Human capital means

- Que. 138** The population of the country
2. Material capital possessed by the population
 3. Skill capacity and ability possessed by the population
 4. None of the above

Correct Option - 3

- Que. 139** Rahul electronics Ltd. earned a net profit of ₹50,00,000 in the last financial year. The finance manager of Rahul electronics has to decide that these funds must be used to open another store in a different locality.

Identify which of the following financial decisions he taking?

1. Dividend decision
2. Investment Decision
3. Financing Decision
4. Working capital Decision

Correct Option - 2

- Que. 140** If Primary deficit is zero, then the amount of borrowing will be :

1. more than interest payment
2. less than interest payment
3. just equal to the interest payment
4. None of these

Correct Option - 3

- Que. 141** Which of the following is not a deferred revenue Expenditure.

1. Preliminary expenses
2. Pre-operative expenses
3. Heavy advertising expenses to introduce a New product
4. Legal expenses for Breach of Contract

Correct Option - 4

- Que. 142** Nidhi Company is recognised under Section _____ of the Companies Act, 2013.

1. 620A
2. 612
3. 406
4. 403

Correct Option - 3

- Que. 143** Which of the following is NOT a measure of government deficit?

1. Fiscal deficit
2. Revenue expenditure
3. Primary deficit
4. Revenue deficit

Correct Option - 2

- Que. 144** What is Cash Reserve Ratio (CRR)?

1. The fraction of the deposits that commercial banks lend to the customers.

2. The fraction of the deposits that RBI must keep with commercial banks.
3. The fraction of the deposits that commercial banks must keep with RBI.
4. The fraction of the deposits that commercial banks must keep with the central government.

Correct Option - 3

Que. 145 In which market structure, the demand is perfectly elastic?

1. Duopoly
2. Perfect competition
3. Monopoly
4. Oligopoly

Correct Option - 2

Que. 146 What is the unit digit of $9^2 + 9^4 + 9^6 + 9^8 + \dots + 9^{100}$?

1. 0
2. 1
3. 5
4. 9

Correct Option - 1

Que. 147 A can complete 50% of a job in 9 days and B can complete 25% of the job in 9 days if they worked alone. If they worked together how much of the job (in %) can they complete in 6 days?

1. 100
2. 90
3. 50
4. 80

Correct Option - 3

Que. 148 A can complete a piece of work in 10 days and B can do the same work in 20 days. If they work in alternate days, then find least number of days to complete the work.

1. 13.5 days
2. 13 days
3. 12.5 days
4. 12 days

Correct Option - 2

Que. 149 If $x^a = y^b = z^c$ and $y^2 = zx$, then find the value of $1/a + 1/c$?

1. 2
2. $1/b$
3. $2/b$
4. $b/2$

Correct Option - 3

Que. 150 The value of $63 \times 6 \div 54 - 11 \div 7 \times 35 + 156 \times 8 \div 13 - 9 \div 49 \times 196 + 108 \times 14 \div 36$ is:

1. 62
2. 73

3. 46

4. 54

Correct Option - 4

Que. 151 The difference between the compound interest and simple interest for 3 years at 5% per annum on 8,000 will be

1. Rs. 75

2. Rs. 69

3. Rs. 55

4. Rs. 61

Correct Option - 4

Que. 152 Rs. 1, 50 paise and 25 paise coins are present in a bag in the ratio 2 : 3 : 5. If the total amount in the bag is Rs. 684 then find the number of 50 paise coins in the bag.

1. 80

2. 432

3. 96

4. 240

Correct Option - 2

Que. 153 A 10 cm side cube is painted from all sides. If it is to be sliced into 1 cm side cubes, how many smaller cubes will have exactly one side painted?

1. 348

2. 438

3. 384

4. 834

Correct Option - 3

Que. 154 In an election between two candidates, 85% of the voters cast their votes, out of which 5% of the votes were decided to be invalid. A candidate got 104975 votes which are 65% of the total valid votes. What is the total number of votes enrolled in that election?

1. 195000

2. 256500

3. 200000

4. 235000

Correct Option - 3

Que. 155 From a well-shuffled deck of 52 cards, 4 cards are drawn at random. What is the probability that all the cards are of the same colour?

1. $\frac{46}{1323}$

2. $\frac{23}{1323}$

3. $\frac{92}{833}$

4. $\frac{110}{1323}$

Correct Option - 3

Que. 156 What will be the sum of the digits of the smallest five-digit number which when divided by 9, 12, 15, and 24 leaves remainders 1, 4, 7, and 16 respectively?

1. 10
2. 12
3. 8
4. 11

Correct Option - 1

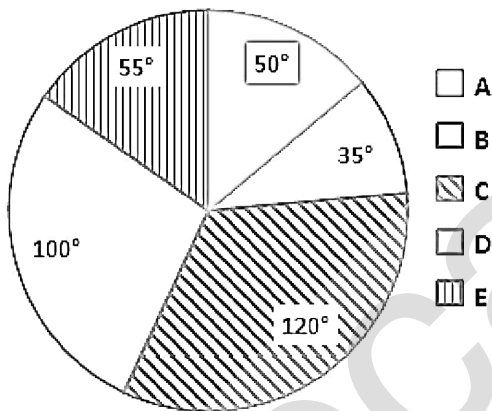
Que. 157 Given are the scores of a batsman in the last 10 innings. Find the median score of the batsman in these innings.
65, 180, 81, 6, 63, 27, 122, 8, 165, 50

1. 64.5
2. 64
3. 65
4. 63

Correct Option - 2

Que. 158 Study the pie chart that shows the quantity wise sales distribution of five products (A, B, C, D and E) of a company in 2019 and answer the question that follows.

Quantity wise sales distribution of five products (A, B, C, D and E)



If 2100 units of product C were sold in 2019 and the total number of units sold by the company in 2020 was 28% more than that in 2019, then how many units were sold by the company in 2020?

1. 8064
2. 8576
3. 6300
4. 7428

Correct Option - 1

Que. 159 The average weight of 12 members of a family is 55 kg. If the weight of one new member is included, the average increases by 1 kg. Find the weight of the new member.

1. 67 kg
2. 65 kg
3. 69 kg
4. 68 kg

Correct Option - 4

Que. 160 The sum of the curved surface area and total surface area of a solid cylinder is 2068 cm^2 . If radius of its base is 14 cm, then what is the volume of this cylinder ? (use $\pi = 22/7$)

1. 2926 cm^3
2. 2861 cm^3
3. 2760 cm^3
4. 2550 cm^3

Correct Option - 1

Que. 161 When a number is divided by 296, the remainder is 75. What will be the remainder when the same number is divided by 37?

1. 1
2. 19
3. 23
4. 12

Correct Option - 1

Que. 162 In how many different ways can the letters of the word "PHONE" be arranged so that the vowels may occupy only odd positions?

1. 36
2. 30
3. 25
4. 20

Correct Option - 1

Que. 163 Two trains A and B start running together from the same point in the same direction at 60 km/h and 70 km/h respectively. If the length of each train is 240 train m, how long will it take for the train B to cross Train A?

1. 1 min 12 s
2. 1 min 26 s
3. 2 min 53 s
4. 2 min 12 s

Correct Option - 3

Que. 164 If $x = \frac{1}{1+\sqrt{2}}$, then the value of $x^2 + 2x + 3$ is -

1. $3 + \sqrt{2}$
2. 4
3. 0
4. $2 + \sqrt{2}$

Correct Option - 2

Que. 165 In a mixture, the ratio of milk and water is 5 : 3. If 4 litres of water is added to the mixture, the ratio becomes 3 : 2. Find the quantity of milk in the mixture.

1. 42 litres
2. 25 litres
3. 60 litres
4. 30 litres

Correct Option - 3

Que. 166 If the mode of the following data is 12, then find the value of k.

11, 15, 8, 9, k, 11, 12, 12, 15, 14

1. 12
2. 15
3. 13
4. 11

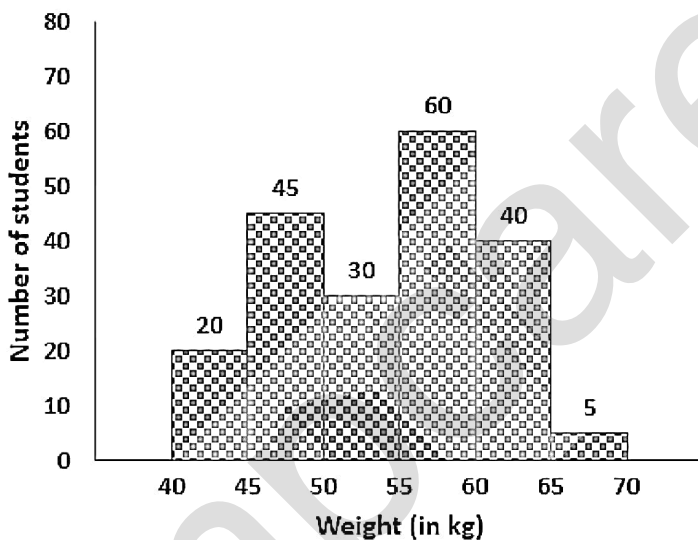
Correct Option - 1

Que. 167 At compound interest (compounded annually) a sum of money becomes 3 times of itself in 4 years. In how many years will it become 9 times of itself?

1. 16 years
2. 8 years
3. 12 years
4. 10 years

Correct Option - 2

Que. 168 The following histogram shows the weights of students of class X in a school on a particular day. Total number of students enrolled in class X = 200



The number of students weighing less than 55 kg is what percentage less than the number of students weighing 55 kg to 65 kg ?

1. 10%
2. 8%
3. 5%
4. 7%

Correct Option - 3

Que. 169 The total number of white balls and pink balls is five times the number of blue balls and the total number of pink balls and blue balls are twice the number of white balls. If there are 33 pink balls, then find the total number of balls in the bag.

1. 66
2. 55

3. 22

4. 44

Correct Option - 1

Que. 170 If a person has to drive 210 km, how long will the journey take if he drives at an average speed of 20 km/hr for 120 km and at an average speed of 30 km/hr for 90 km, and have a 60 minutes stop for refreshments midway through the journey?

1. 7 hours

2. 8 hours

3. 9 hours

4. 10 hours

Correct Option - 4

Que. 171 ABCD is a parallelogram. P and R are the midpoints of DC and BC respectively. The line PR intersects the diagonal AC at Q. The distance CQ will be equal to

1. AC/4

2. BD/3

3. BD/4

4. AC/3

Correct Option - 1

Que. 172 The table given below shows the runs scored by 4 different batsmen B1, B2, B3, and B4 in 5 different matches of a series.

	Matches				
	M1	M2	M3	M4	M5
B1	120	95	83	86	20
B2	12	8	0	196	52
B3	23	36	45	19	27
B4	56	65	85	45	42

What is the difference in the total number of runs scored by B1 and B4 in these 5 matches?

1. 98

2. 111

3. 87

4. 124

Correct Option - 2

Que. 173 In an office of 900 employees, on a particular day, except for 10% of the female employees, all employees were present. On the next day, except for 8% of the male employees, all employees were present. The number of employees present on each of these two days was the same. Find the total number of male employees on the payrolls of this office.

1. 550

2. 450

3. 800

4. 500

Correct Option - 4

Que. 174 The third proportional of 0.024 and 0.12 is:

1. 0.060
2. 6.000
3. 0.600
4. 0.006

Correct Option - 3

Que. 175 Four years ago, the average age of a group of five members was 38 years. One more man joins the group and the present average age of the group members becomes 44 years. What is the present age (in years) of the new member?

1. 74
2. 52
3. 54
4. 30

Correct Option - 3

Que. 176 निम्नलिखित वाक्यांशों का क्रमानुसार व्यवस्थित कीजिए:

- A. अध्ययन और अध्यापन हो
- B. शहीदों का एक
- C. जिसमें क्रांतिकारी आंदोलन
- D. ऐसा स्मारक बनाया जाए
- E. के इतिहास का

विकल्पों का समुचित क्रम चुनकर एक सार्थक वाक्य बनाइए

1. D, C, E, A, B
2. A, B, C, E, D
3. B, E, C, D, A
4. B, D, C, E, A

Correct Option - 4

Que. 177 लिखकर लोहित लेख, डूब गया दिनमणि अहा।

व्योमसिंधु सखि देख, तारक बुदबुद दे रहा ।।

इन पंक्तियों में प्रयुक्त छंद है

1. दोहा
2. चौपाई
3. सोरठा
4. रोला

Correct Option - 3

Que. 178 सही वर्तनी वाले शब्द का चयन करें।

1. गाधिका
2. गयीका

3. गायीका
4. गयिका

Correct Option - 1

Que. 179 'प्रत्युपकार' में उपसर्ग है-

1. प्र
2. प्रति
3. परा
4. प्रत्य

Correct Option - 2

Que. 180 निर्देश : निम्नलिखित वाक्यों में उनके प्रथम तथा अन्तिम संख्या अंश संख्या 1 से 6 के अन्तर्गत दिये गये हैं। बीच वाले चार अंश (य), (र), (ल), (व) के अन्तर्गत बिना क्रम के हैं चारों अंशों को उचित क्रमानुसार व्यवस्थित कर सही विकल्प चुनें।

1. तुलसीदास जी कई वर्षों तक काशी में रहने के पश्चात्
(य) वह कभी-कभी काशी और चित्रकूट भी चले जाते थे।
(र) रामचरितमानस के अतिरिक्त उन्होंने कई अन्य
(ल) अयोध्या चले गए। वहाँ उन्होंने रामचरितमानस लिखा
(व) पुस्तकें लिखी हैं, जिनमें विनय-पत्रिका, गीतावली,
6. कवित्त रामायण, रामललानहछू और हनुमान बाहुक अधिक प्रसिद्ध हैं।

1. ल य र व
2. र व ल य
3. व ल य र
4. य र व ल

Correct Option - 1

Que. 181 'चाकू से फल को काटा गया।' इस वाक्य में रेखांकित का कारक है:

1. कर्ता
2. कर्म
3. करण
4. संप्रदान

Correct Option - 3

Que. 182 इनमें से अव्ययीभाव समास किसमें है?

1. महादेव
2. आजीवन
3. पाप-पुण्य
4. शताब्दी

Correct Option - 2

Que. 183 निम्नलिखित में से किस शब्द की वर्तनी अशुद्ध है?

1. याज्ञवल्क

2. सदृश
3. हस्तक्षेप
4. गृहिणी

Correct Option - 1

Que. 184 “हिमाद्रि तुंग श्रुंग से प्रबुद्ध शुद्ध भारती ॥” :पंक्ति में रस है –

1. करुण
2. शांत
3. वीर
4. हास्य

Correct Option - 3

Que. 185 इनमें से 'उपसर्ग' सहित शब्द कौन-सा है?

1. प्रस्ताव
2. प्रयोग
3. प्रतिमा
4. ममता

Correct Option - 2

Que. 186 निम्नलिखित वाक्यों में उनके प्रथम तथा अन्तिम अंश संख्या 1 और 6 के अन्तर्गत दिए गए हैं। बीच वाले चार अंश (य), (र), (ल), (व) के अन्तर्गत बिना क्रम के हैं। चारों अंशों को उचित क्रमानुसार व्यवस्थित कर सही विकल्प चुनें।

1. अवकाश के समय की गतिविधियाँ
(य) सामाजिक परिवर्तन की
(र) को दूर करने का प्रयत्न करते हैं
(ल) सूचक होती हैं जिसके जरिए
(व) हम तनावों, निराशाओं आदि
6. और मनोरंजन के साथ रचनात्मक कार्य भी करते हैं।
 1. ल य र व
 2. र ल व य
 3. ल र व य
 4. य ल व र

Correct Option - 4

Que. 187 सही वाक्य चुनिए:

1. मैं गाने का अभ्यास कर रहा हूँ
2. मोहन की माता जी जा रहा है
3. हमें चरखा कातनी चाहिए
4. खरगोश को काटकर गाजर खिलाओ

Correct Option - 1

Que. 188 दिए गए शब्द का विलोम शब्द ज्ञात कीजिए।

जटिल

1. काट्य
2. कटु
3. सरस
4. कटोर

Correct Option - 3

Que. 189 'जानने की इच्छा रखने वाला'- इस शब्द समूह के लिए एक शब्द बताइए।

1. पिपासु
2. उत्साही
3. जिज्ञासु
4. इनमें से कोई नहीं

Correct Option - 3

Que. 190 अव्ययीभाव समास का उदाहरण कौन सा है?

1. प्रत्यक्ष
2. रसभरा
3. पदभ्रष्ट
4. दोपहर

Correct Option - 1

Que. 191 निम्न में कौन सा शब्द तत्सम है?

1. भ्राता
2. कान
3. सब
4. बयार

Correct Option - 1

Que. 192 निम्नलिखित में से एक वर्तनी शुद्ध है-

1. नुपूर
2. स्मर्ण
3. कवयित्री
4. परिस्थिती

Correct Option - 3

Que. 193 'अनुगामी' शब्द में कौन सा उपसर्ग है?

1. आ
2. अ
3. अनु
4. अन

Correct Option - 3

Que. 194 'पायोजी मैंने राम-रतन धन पायो'। मीराबाई रचित रचना में निम्न में से कौन से कौन से अलंकार का प्रयोग किया गया है।

1. रूपक
2. अतिशयोक्ति
3. उपमा
4. यमक

Correct Option - 1

Que. 195 'आँखे निकाल उड़ जाते, क्षण भर उड़ कर आ जाते।' में कौन सा रस है?

1. वीर रस
2. भयानक रस
3. अद्भुत रस
4. वीभत्स रस

Correct Option - 4

Que. 196 'छत से ईट गिरी' वाक्य में कौन सा कारक है ?

1. अपादान
2. सम्बन्ध
3. अधिकरण
4. सम्प्रदान

Correct Option - 1

Que. 197 निम्नलिखित में 'तत्सम' शब्द कौन-सा है?

1. यमुना
2. बिजली
3. रात
4. जनेऊ

Correct Option - 1

Que. 198 'नाकों चने चबाना' मुहावरे का सही अर्थ क्या है?

1. बेइज्जती करना
2. बहुत तंग करना
3. मुसीबतें आना
4. ईर्ष्या रखना

Correct Option - 2

Que. 199 "राम का रूप निहारती जानकी , कंगन के नग के नग कि परिछाही। " :पंक्ति में रस है

1. करुण
2. शांत
3. संयोग श्रृंगार
4. वियोग श्रृंगार

Que. 200 'अपराधी' का विलोम है:

1. निरपराध
2. मुजरिम
3. सज्जन
4. दयालु

Correct Option - 1

mpcareer.in