

QID : 1 -

In the following question, select the number which can be placed at the sign of question mark (?) from the given alternatives.

निम्नलिखित प्रश्न में दिए गए विकल्पों में से प्रश्न चिह्न (?) के स्थान पर आने वाली संख्या को चुनिए।

10	4	15	30
5	20	2	28
7	6	30	?

Options:

- 1) 42
- 2) 43
- 3) 44
- 4) 48

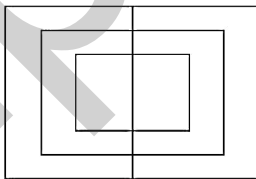
Correct Answer: 44

Candidate Answer: 44

QID : 2 -

How many quadrilaterals are there in the given figure?

दी गई आकृति में कितने चतुर्भुज हैं?



Options:

- 1) 8
- 2) 9
- 3) 10
- 4) 12

Correct Answer: 9

Candidate Answer: 9

QID : 3 -

A word is represented by only one set of numbers as given in any one of the alternatives. The sets of numbers given in the alternatives are represented by two classes of alphabets as shown in the given two matrices. The columns and rows of **Matrix-I** are numbered from 0 to 4 and that of **Matrix-II** are numbered from 5 to 9. A letter from these matrices can be represented first by its row and next by its column, for example, 'U' can be represented by 14, 95, etc., and 'M' can be represented by 23, 88, etc. Similarly, you have to identify the set for the word "PARK".

एक शब्द केवल एक संख्या-समूह द्वारा दर्शाया गया है, जैसा कि विकल्पों में से किसी एक में दिया गया है। विकल्पों में दिए गए संख्या-समूह अक्षरों के दो वर्गों द्वारा दर्शाए गए हैं, जैसा कि दिए गए दो आव्यूहों में है। आव्यूह-I के स्तम्भ और पंक्ति की संख्या 0 से 4 है और आव्यूह-II की 5 से 9। इन आव्यूहों से एक अक्षर को पहले उसकी पंक्ति और बाद में स्तम्भ संख्या द्वारा दर्शाया जा सकता है। उदाहरण के लिए 'U' को 14, 95, आदि द्वारा दर्शाया जा सकता है तथा 'M' को 23, 88, आदि द्वारा दर्शाया जा सकता है। इसी तरह से आपको प्रश्न में दिए शब्द "PARK" के लिए समूह को पहचानना है।

Matrix-I आव्यूह-I						Matrix-II आव्यूह-II					
	0	1	2	3	4		5	6	7	8	9
0	C	U	G	J	D	5	A	V	K	T	H
1	S	F	J	N	U	6	L	R	T	O	N
2	Y	P	V	M	F	7	I	Q	W	Y	P
3	I	E	A	C	H	8	F	H	R	M	S
4	T	K	D	Q	L	9	U	G	A	Q	B

Options:

- 1) 21, 55, 67, 41
- 2) 79, 55, 87, 41
- 3) 21, 31, 67, 57
- 4) 79, 32, 67, 57

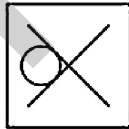
Correct Answer: 79, 55, 87, 41

Candidate Answer: 79, 55, 87, 41

QID : 4 -

From the given answer figures, select the one in which the question figure is hidden/embedded.

दी गई उत्तर आकृतियों में से उस उत्तर आकृति को चुनिए जिस में प्रश्न आकृति निहित है।

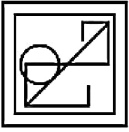


Options:

1)



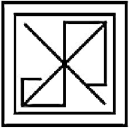
2)



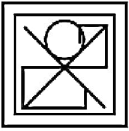
3)



4)



Correct Answer:



Candidate Answer:



QID : 5 -

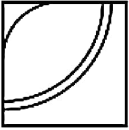
Which answer figure will complete the pattern in the question figure?

कौन सी उत्तर आकृति प्रश्न आकृति के प्रतिरूप को पूरा करेगी?



Options:

1)



2)



3)



4)



Correct Answer:



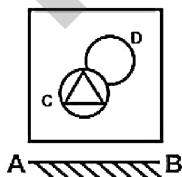
Candidate Answer:



QID : 6 -

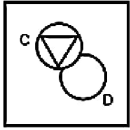
If a mirror is placed on the line AB, then which of the answer figures is the right image of the given figure?

यदि एक दर्पण को AB रेखा पर रखा जाए, तो दी गई उत्तर आकृतियों में से कौन सी आकृति प्रश्न आकृति की सही प्रतिबिम्ब होगी?

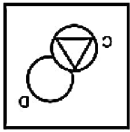


Options:

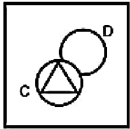
1)



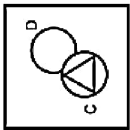
2)



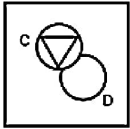
3)



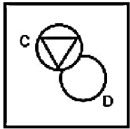
4)



Correct Answer:



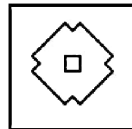
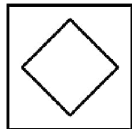
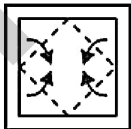
Candidate Answer:



QID : 7 -


A piece of paper is folded and punched as shown below in the question figures. From the given answer figures, indicate how it will appear when opened?

नीचे के प्रश्न आकृतियों में दिखाए अनुसार कागज को मोड़कर छेदने तथा खोलने के बाद वह किस उत्तर आकृति जैसा दिखाई देगा?

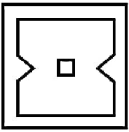


Options:

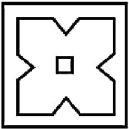
1)



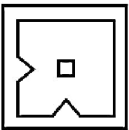
2)



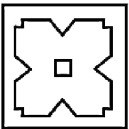
3)



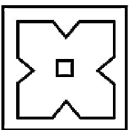
4)



Correct Answer:



Candidate Answer:



QID : 8 - If '-' means '+', 'x' means '-', '-' means '-' and '+' means 'x', then

$$9 \times 6 + 36 - 4 = ?$$

यदि '-' का अर्थ '+', 'x' का अर्थ '-', '-' का अर्थ '-' तथा '+' का अर्थ 'x' हो, तो

$$9 \times 6 + 36 - 4 = ?$$

Options:

- 1) 58
- 2) 38
- 3) 40
- 4) 32

Correct Answer: 58

Candidate Answer: 58

QID : 9 - If $5 + 3 + 1 = 15$ and $6 + 1 + 4 = 24$, then $4 + 3 + 0 = ?$

यदि $5 + 3 + 1 = 15$ तथा $6 + 1 + 4 = 24$ हो, तो $4 + 3 + 0 = ?$

Options:

- 1) 4
- 2) 12
- 3) 0
- 4) 8

Correct Answer: 0

Candidate Answer: 0

QID : 10 - Arrange the given words in the sequence in which they occur in the dictionary.

1. Jelly
2. Jenny
3. Jewel
4. Jocks
5. Jiffy

निम्नलिखित शब्दों को शब्दकोश में आने वाले क्रम के अनुसार लिखें।

1. Jelly
2. Jenny
3. Jewel
4. Jocks
5. Jiffy

Options:

1) 12345

2) 12354

3) 13254

4) 21354

Correct Answer: 12354

Candidate Answer: 12354

QID : 11 - In the following question, select the missing number from the given series.

121, 4, 144, 9, 169, 16, 196, ?

निम्नलिखित प्रश्न में दिए गए विकल्पों में से लुप्त अंक ज्ञात कीजिए।

121, 4, 144, 9, 169, 16, 196, ?

Options:

1) 225

2) 36

3) 25

4) 40

Correct Answer: 25

Candidate Answer: 25

QID : 12 - A series is given with one term missing. Select the correct alternative from the given ones that will complete the series.

W, T, Q, N, ?

एक अनुक्रम दिया गया है, जिसमें से एक पद लुप्त है। दिए गए विकल्पों में से वह सही विकल्प चुनिए, जो अनुक्रम को पूरा करे।

W, T, Q, N, ?

Options:

1) J

2) K

3) L

4) M

Correct Answer: K

Candidate Answer: K

QID : 13 - In the following question, select the odd word from the given alternatives.

निम्नलिखित प्रश्न में दिए गए विकल्पों में से विषम शब्द को चुनिए।

Options:

1) Grass

घास

2) Plant

पौधा

3) Tree

वृक्ष

4) Land

भूमि

Correct Answer: Land

भूमि

Candidate Answer: Land

भूमि

QID : 14 - In the following question, select the odd number pair from the given alternatives.

निम्नलिखित प्रश्न में दिए गए विकल्पों में से विषम संख्या युग्म को चुनिए।

Options:

1) 7 - 52

2) 11 - 124

3) 12 - 147

4) 14 - 201

Correct Answer: 14 - 201

Candidate Answer: 14 - 201

QID : 15 - In the following question, select the odd letters from the given alternatives.

निम्नलिखित प्रश्न में दिए गए विकल्पों में से विषम अक्षरों को चुनिए।

Options:

1) CDEH

2) JKLO

3) RSTW

4) EFGK

Correct Answer: EFGK

Candidate Answer: EFGK

QID : 16 - Identify the diagram that best represents the relationship among the given classes.

Biology, Science, Subject

वह आरेख चुनिए जो नीचे दिए गए वर्गों के बीच के संबंध का सही निरूपण करता है।


जीव-विज्ञान, विज्ञान, विषय

Options:

1)



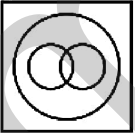
2)



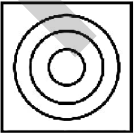
3)



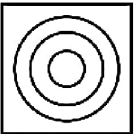
4)



Correct Answer:



Candidate Answer:



QID : 17 - In the following question, select the related word from the given alternatives.

Metal : Ore :: Paper : ?

निम्नलिखित प्रश्न में दिए गए विकल्पों में से संबंधित शब्द को चुनिए।

धातु : अयस्क :: कागज : ?

Options:

- 1) Flour
आटा
- 2) Pulp
गूदा
- 3) Brick
ईंट
- 4) Seed
बीज

Correct Answer: Pulp

गूदा

Candidate Answer: Pulp

गूदा

QID : 18 - In the following question, select the related number from the given alternatives.

1 : 8 :: 216 : ?

निम्नलिखित प्रश्न में दिए गए विकल्पों में से संबंधित संख्या को चुनिए।

1 : 8 :: 216 : ?

Options:

- 1) 343
- 2) 125
- 3) 64
- 4) 729

Correct Answer: 343

Candidate Answer: 343

QID : 19 - In the following question, select the related letters from the given alternatives.

FA : CC :: PX : ?

निम्नलिखित प्रश्न में दिए गए विकल्पों में से संबंधित अक्षरों को चुनिए।

FA : CC :: PX : ?

Options:

- 1) KY
- 2) LY
- 3) MZ
- 4) KZ

Correct Answer: MZ

Candidate Answer: MZ

QID : 20 - In the following question, select the word which cannot be formed using the letters of the given word.

TOURNAMENT

निम्नलिखित विकल्पों में से वह शब्द चुनिए जो दिए गए शब्द के अक्षरों का प्रयोग करके नहीं बनाया जा सकता।

TOURNAMENT

Options:

- 1) TORMENT
- 2) RENT
- 3) TOUR
- 4) TRAP

Correct Answer: TRAP

Candidate Answer: TRAP

QID : 21 - Pointing to a man, Heena said "he is the only son of wife of my father". How is the man related to Heena?

एक पुरुष की ओर संकेत करते हुए, हिना ने कहा कि "वह मेरे पिता की पत्नी का एकमात्र पुत्र है।" वह पुरुष हिना से किस प्रकार संबंधित है?

Options:

- 1) Grandfather
दादा
- 2) Husband
पति
- 3) Brother
भाई
- 4) Son
पुत्र

Correct Answer: Brother

भाई

Candidate Answer: Brother
भाई

QID : 22 - Nayan remembers his examinations starts after 15th August, while her mother remembers that his examinations starts before 18th August. On which date of August does his examinations start?

नयन को याद है कि उसकी परीक्षा 15 अगस्त के बाद आरंभ हो रही है जबकि उसकी माता को याद है कि उसकी परीक्षा 18 अगस्त से पहले आरंभ हो रही है। उसकी परीक्षा अगस्त की किस तिथि को आरंभ है?

Options:

- 1) 16
- 2) 17
- 3) 16 or 17
16 अथवा 17
- 4) 17 or 18
17 अथवा 18

Correct Answer: 16 or 17
16 अथवा 17

Candidate Answer: 16 or 17
16 अथवा 17

QID : 23 - In the following question below are given some statements followed by some conclusions. Taking the given statements to be true even if they seem to be at variance from commonly known facts, read all the conclusions and then decide which of the given conclusion logically follows the given statements.

Statements:

- I. Some yellow are small.
- II. All small are red.

Conclusions:

- I. Some red are yellow.
- II. Some small are yellow.

नीचे दिए गए प्रश्न में कुछ कथन और उनके बाद उन कथनों पर आधारित कुछ निष्कर्ष दिए गए हैं, हालांकि उनमें सामान्य ज्ञात तथ्यों से भिन्नता हो सकती है। सभी निष्कर्ष पढ़ें और फिर निर्धारित करें कि दिए गए कौन से निष्कर्ष, दिए गए कथनों के आधार पर युक्तिसंगत हैं।

कथन:

- I. कुछ पीले छोटे हैं।
- II. सभी छोटे लाल हैं।

निष्कर्ष:

- I. कुछ लाल पीले हैं।
- II. कुछ छोटे पीले हैं।

Options:

- 1) Only conclusion (I) follows.
केवल निष्कर्ष (I) सही है।
- 2) Only conclusion (II) follows.
केवल निष्कर्ष (II) सही है।
- 3) Neither conclusion (I) nor conclusion (II) follows.
न तो निष्कर्ष (I) न ही निष्कर्ष (II) सही है।
- 4) Both conclusion follow.
दोनों ही निष्कर्ष सही हैं।

Correct Answer: Both conclusion follow.
दोनों ही निष्कर्ष सही हैं।

Candidate Answer: Both conclusion follow.
दोनों ही निष्कर्ष सही हैं।

QID : 24 - In a certain code language, "HAZE" is written as "ICCI". How is "SMOG" written in that code language?

एक विशिष्ट कोड भाषा में, "HAZE" को "ICCI" लिखा जाता है। इस कोड भाषा में "SMOG" को किस प्रकार लिखा जाएगा?

Options:

- 1) TORK
- 2) TORL
- 3) TNRK
- 4) TNSK

Correct Answer: TORK

Candidate Answer: TORK

QID : 25 - In a certain code language, "SIN" is written as "43" and "PEN" is written as "36". How is "TIP" written in that code language?

एक विशिष्ट कोड भाषा में, "SIN" को "43" तथा "PEN" को "36" लिखा जाता है। इस कोड भाषा में "TIP" को किस प्रकार लिखा जाएगा?

Options:

- 1) 45
- 2) 46
- 3) 44
- 4) 43

Correct Answer: 46

Candidate Answer: 46

QID : 26 - Which smallest number to be subtracted from 300, so that the resulting number is completely divisible by 9?

300 में ऐसी कौन सी सबसे छोटी संख्या घटायी जाए, ताकि परिणामी संख्या 9 से पूर्णतः विभाजित हो जाए?

Options:

- 1) 5
- 2) 6
- 3) 3
- 4) 1

Correct Answer: 3

Candidate Answer: 3

QID : 27 - What is the digit in unit's place of the product $2^5 \times 25^2 \times 3^7$?

$2^5 \times 25^2 \times 3^7$ के गुणनफल का इकाई का अंक क्या है?

Options:

- 1) 1
- 2) 2
- 3) 0
- 4) 5

Correct Answer: 0

Candidate Answer: 0

QID : 28 - What is the value of $13 + 14 \dots\dots 20$?

$13 + 14 \dots\dots 20$ का मान क्या है?

Options:

- 1) 182
- 2) 144
- 3) 132
- 4) 124

Correct Answer: 144

Candidate Answer: 132

QID : 29 -

What is the value of $8\frac{1}{7} + 5\frac{3}{7} + 4\frac{2}{7} + 3\frac{1}{7}$?

$8\frac{1}{7} + 5\frac{3}{7} + 4\frac{2}{7} + 3\frac{1}{7}$ का मान क्या है?

Options:

- 1) 22
- 2) 23
- 3) 24
- 4) 21

Correct Answer: 21

Candidate Answer: 21

QID : 30 - A number when divided by 18 leaves remainder 15. What is the remainder when the same number is divided by 6?

एक संख्या को जब 18 से भाग दिया जाता है तो शेषफल 15 प्राप्त होता है। उसी संख्या को जब 6 से भाग दिया जाए, तो शेषफल क्या होगा?

Options:

- 1) 3
- 2) 2
- 3) 1
- 4) 4

Correct Answer: 3

Candidate Answer: 3

QID : 31 - If 123457Y is completely divisible by 8, then what will be the digit in place of Y?

यदि 123457Y, 8 से पूर्णतः विभाजित है, तो Y के स्थान पर कौन सा अंक आएगा?

Options:

- 1) 4
- 2) 5
- 3) 8
- 4) 6

Correct Answer: 6

Candidate Answer: 6

QID : 32 - P can do a piece of work in 36 days. If Q is 50% more efficient than P, then in how many days can Q do the same work?

P किसी कार्य को 36 दिनों में कर सकता है। यदि Q की कार्य क्षमता P से 50% अधिक है, तो उसी कार्य को Q कितने दिनों में करेगा?

Options:

- 1) 18
- 2) 24
- 3) 12
- 4) 21

Correct Answer: 24

Candidate Answer: 24

QID : 33 - P is twice as good as Q and together they finish a piece of work in 36 days. The number of days taken by P alone to finish the work?

P की कार्य कुशलता Q से दुगुनी है तथा वे दोनों मिलकर किसी कार्य को 36 दिनों में पूरा कर सकते हैं। P अकेला उस कार्य को कितने दिनों में पूरा कर सकता है?

Options:

- 1) 48
- 2) 60
- 3) 54
- 4) 72

Correct Answer: 54

Candidate Answer: 54

QID : 34 - If the diagonal of a square is 10 cm, then what is the area (in cm^2) of the square?

यदि किसी वर्ग का विकर्ण 10 से.मी. है, तो वर्ग का क्षेत्रफल (से.मी.² में) क्या होगा?

Options:

- 1) 100
- 2) $50\sqrt{2}$
- 3) 50
- 4) $100\sqrt{2}$

Correct Answer: 50

Candidate Answer: 50

QID : 35 - The marked price of an article is Rs 750 and a customer pays Rs 600 for it. What is the discount percentage?

एक वस्तु का अंकित मूल्य 750 रु है तथा एक ग्राहक इसके लिए 600 रु देता है। छूट प्रतिशत क्या है?

Options:

- 1) 20
- 2) 30
- 3) 15
- 4) 10

Correct Answer: 20

Candidate Answer: 20

QID : 36 - The marked price of an article is 50% more than its cost price. If a discount of 10% is given, then what is the profit percentage?

एक वस्तु का अंकित मूल्य उसके क्रय मूल्य से 50% अधिक है। यदि 10% की छूट दी जाए, तो लाभ का प्रतिशत क्या है?

Options:

- 1) 25
- 2) 30
- 3) 35
- 4) 20

Correct Answer: 35

Candidate Answer: 35

QID : 37 - Two numbers are in the ratio of 3 : 4. If 8 be subtracted from each, then the new ratio becomes 17 : 24. What are the two numbers?

दो संख्याएँ 3 : 4 अनुपात में हैं। यदि प्रत्येक में से 8 घटाया जाए तो नया अनुपात 17 : 24 हो जाता है। दोनों संख्याएँ क्या हैं?

Options:

- 1) 42 and 56
42 तथा 56
- 2) 30 and 40
30 तथा 40
- 3) 45 and 60
45 तथा 60
- 4) 60 and 80
60 तथा 80

Correct Answer: 42 and 56
42 तथा 56

Candidate Answer: 42 and 56
42 तथा 56

QID : 38 - If $\frac{2}{3}$ of P = $\frac{1}{5}$ of Q, then what is P : Q?

यदि P का $\frac{2}{3}$ = Q का $\frac{1}{5}$ हो, तो P : Q क्या होगा?

Options:

- 1) 3 : 5
- 2) 3 : 10
- 3) 3 : 7
- 4) 3 : 9

Correct Answer: 3 : 10

Candidate Answer: 3 : 10

QID : 39 - The average of 6 numbers is 18. If one number is excluded, the average becomes 17. What is the excluded number?

6 संख्याओं का औसत 18 है। यदि एक संख्या को हटा दी जाए, तो औसत 17 हो जाता है। हटाई गई संख्या क्या है?

Options:

- 1) 22
- 2) 23
- 3) 21
- 4) 20

Correct Answer: 23

Candidate Answer: 23

QID : 40 - If the ratio of the cost price and selling price of an article is 5 : 6, then what will be the profit percentage?

यदि एक वस्तु के क्रय मूल्य तथा विक्रय मूल्य का अनुपात 5 : 6 है, तो लाभ प्रतिशत क्या होगा?

Options:

- 1) 10
- 2) 12
- 3) 15
- 4) 20

Correct Answer: 20

Candidate Answer: 20

QID : 41 - If the rice is sold at Rs 48 per kg, then there would be a 20% loss. To earn a profit of 20% what should be the price of rice (per kg)?

यदि चावल को 48 रु प्रति कि.ग्रा. की दर से बेचा जाता है, तो 20% की हानि होगी। 20% का लाभ प्राप्त करने के लिए चावल की कीमत (प्रति कि.ग्रा.) कितनी होनी चाहिए?

Options:

- 1) 72
- 2) 76
- 3) 78
- 4) 84

Correct Answer: 72

Candidate Answer: 72

QID : 42 - When 80 is subtracted from 20% of a number, the result is 30. What is the value of the number?

किसी संख्या के 20% में से 80 घटाने पर परिणाम 30 आता है तो संख्या का मान क्या है?

Options:

- 1) 330
- 2) 440
- 3) 550
- 4) 220

Correct Answer: 550

Candidate Answer: 550

QID : 43 - A number is first decreased by 30% and then increased by 30%. If the number so obtained is 72 less than the original number, then what is the value of the original number?

एक संख्या को पहले 30% घटाया जाता है और फिर 30% बढ़ा दिया जाता है। यदि प्राप्त संख्या वास्तविक संख्या से 72 कम है, तो वास्तविक संख्या का मान क्या होगा?

Options:

- 1) 720
- 2) 800
- 3) 960
- 4) 1080

Correct Answer: 800

Candidate Answer: 800

QID : 44 - Speeds of a boat along the current and against the current are 16 km/hr and 12 km/hr respectively. What is the speed (in km/hr) of the current?

एक नाव की गति धारा के अनुकूल तथा धारा के प्रतिकूल दिशा में क्रमशः 16 कि.मी./घंटा तथा 12 कि.मी./घंटा है। धारा की गति (कि.मी./घंटा में) क्या है?

Options:

- 1) 1
- 2) 2
- 3) 3
- 4) 4

Correct Answer: 2

Candidate Answer: 2

QID : 45 - A person goes from point L to N and comes back. His average speed for the whole journey is 100 km/hr. If his speed while coming back from N to L is 65 km/hr, then what will be the speed of the person (in km/hr) while going from L to N?

एक व्यक्ति बिंदु L से N जाता है तथा वापस आ जाता है। पूरी यात्रा के लिए उसकी औसत गति 100 कि.मी./घंटा है। यदि N से L आने में उसकी गति 65 कि.मी./घंटा है, तो L से N तक जाने में उस व्यक्ति की गति (कि.मी./घंटा में) क्या होगी?

Options:

- 1) 135
- 2) 146.31
- 3) 150.62
- 4) 216.67

Correct Answer: 216.67

Candidate Answer: 216.67

QID : 46 - An amount invested at simple interest gives Rs 2550 interest at rate of 17% per annum in 3 years. What is the principal (in Rs)?

एक धनराशि साधारण ब्याज पर निवेश की जाती है जोकि 3 वर्ष में 17% प्रति वर्ष की दर से 2550 रु का ब्याज देती है। मूलधन (रु में) क्या है?

Options:

- 1) 4000
- 2) 5000
- 3) 6000
- 4) 4500

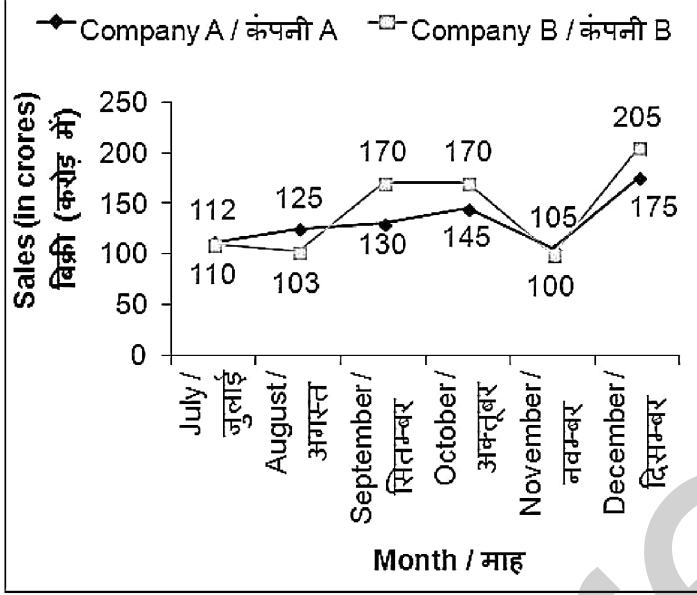
Correct Answer: 5000

Candidate Answer: 5000

QID : 47 -

The line chart given below shows the sales (in crores) of company A and B from July to December.

नीचे दिए गए रेखा चित्र में जुलाई से दिसम्बर तक दो कंपनियों A तथा B की बिक्री (करोड़ में) को दर्शाया गया है।



The sales of company A in November is how much percent more than the sales of company B in November?

नवम्बर माह में कंपनी A की बिक्री नवम्बर माह में कंपनी B की बिक्री से कितने प्रतिशत अधिक है?

Options:

- 1) 5
- 2) 10
- 3) 8
- 4) 15

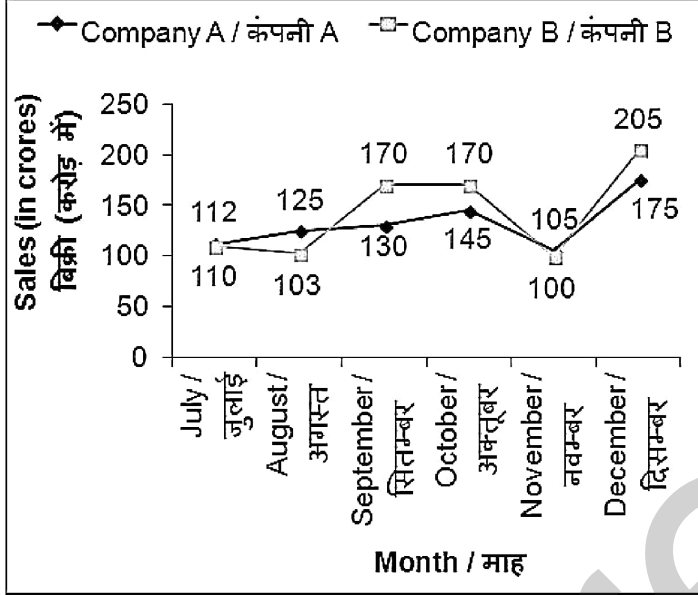
Correct Answer: 5

Candidate Answer: 5

QID : 48 -

The line chart given below shows the sales (in crores) of company A and B from July to December.

नीचे दिए गए रेखा चित्र में जुलाई से दिसम्बर तक दो कंपनियों A तथा B की बिक्री (करोड़ में) को दर्शाया गया है।



The sales of company B is same in which two months?

किन दो महीनों में कंपनी B की बिक्री समान रही है?

Options:

- 1) September and October
सितम्बर तथा अक्टूबर
- 2) October and November
अक्टूबर तथा नवम्बर
- 3) August and November
अगस्त तथा नवम्बर
- 4) July and August
जुलाई तथा अगस्त

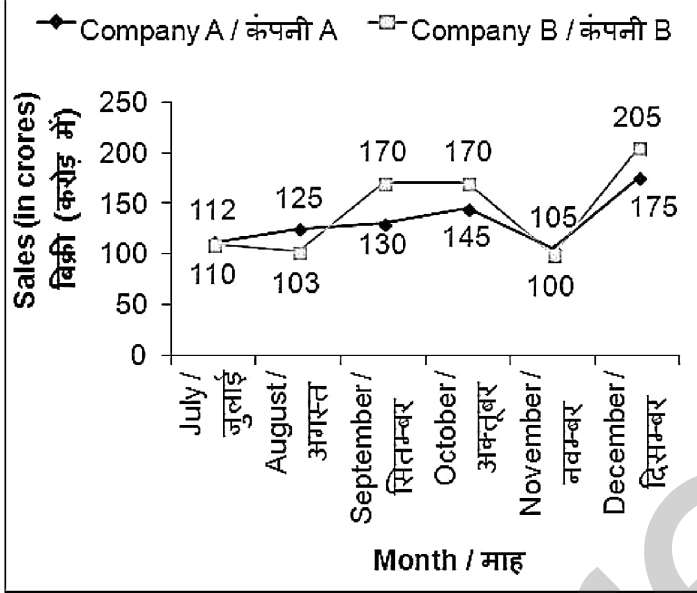
Correct Answer: September and October
सितम्बर तथा अक्टूबर

Candidate Answer: September and October
सितम्बर तथा अक्टूबर

QID : 49 -

The line chart given below shows the sales (in crores) of company A and B from July to December.

नीचे दिए गए रेखा चित्र में जुलाई से दिसम्बर तक दो कंपनियों A तथा B की बिक्री (करोड़ में) को दर्शाया गया है।



What is the average sale (in crore Rs) of company B in the given six months?

दिए गए छह महीनों में कंपनी B की औसत बिक्री (करोड़ रुपये में) क्या है?

Options:

- 1) 143
- 2) 140
- 3) 154
- 4) 135

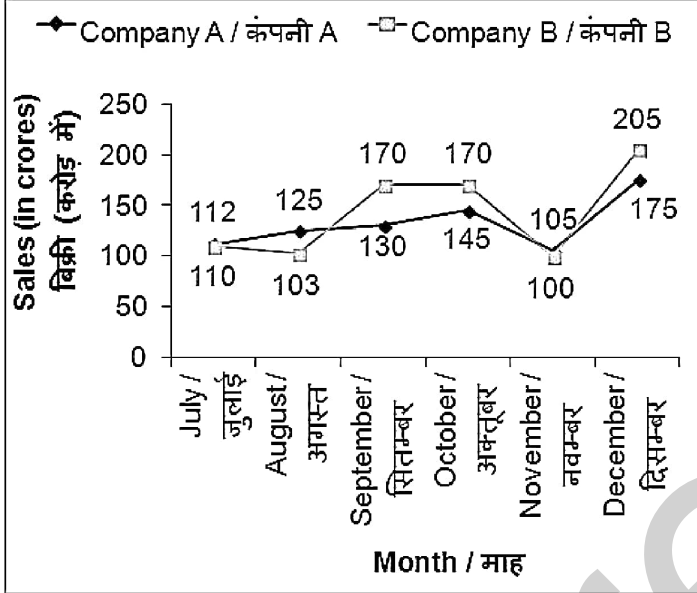
Correct Answer: 143

Candidate Answer: 143

QID : 50 -

The line chart given below shows the sales (in crores) of company A and B from July to December.

नीचे दिए गए रेखा चित्र में जुलाई से दिसम्बर तक दो कंपनियों A तथा B की बिक्री (करोड़ में) को दर्शाया गया है।



For how many months the sales of company B is more than the sales of company A?

कितने महीनों के लिए कंपनी B की बिक्री कंपनी A की बिक्री से अधिक है?

Options:

- 1) 2
- 2) 3
- 3) 1
- 4) 4

Correct Answer: 3

Candidate Answer: 3

QID : 51 - In the following question, some part of the sentence may have errors. Find out which part of the sentence has an error and select the appropriate option. If a sentence is free from error, select 'No Error'.

Elderly people can have a normal (1)/ body temperature below 98.6 so (2)/ the younger population can have a little higher temperature. (3)/ No Error (4)

Options:

- 1) 1
- 2) 2
- 3) 3
- 4) 4

Correct Answer: 2

Candidate Answer: 2

QID : 52 - In the following question, some part of the sentence may have errors. Find out which part of the sentence has an error and select the appropriate option. If a sentence is free from error, select 'No Error'.

We are at that critical juncture when (1)/we are facing a serious issue (2)/with the image perception of the railways. (3)/ No Error (4)

Options:

- 1) 1
- 2) 2
- 3) 3
- 4) 4

Correct Answer: 1

Candidate Answer: 1

QID : 53 - In the following question, the sentence given with blank to be filled in with an appropriate word. Select the correct alternative out of the four and indicate it by selecting the appropriate option.

Everything is bright and beautiful, _____?

Options:

- 1) isn't he
- 2) isn't it
- 3) isn't she
- 4) isn't him

Correct Answer: isn't it

Candidate Answer: isn't it

QID : 54 - In the following question, the sentence given with blank to be filled in with an appropriate word. Select the correct alternative out of the four and indicate it by selecting the appropriate option.

They are terribly busy with _____ work.

Options:

- 1) his
- 2) their
- 3) them
- 4) her

Correct Answer: their

Candidate Answer: their

QID : 55 - In the following question, out of the given four alternatives, select the one which best expresses the meaning of the given word.

Lean

Options:

- 1) Fat
- 2) Thin
- 3) Obese
- 4) Plump

Correct Answer: Thin

Candidate Answer: Thin

QID : 56 - In the following question, out of the given four alternatives, select the one which best expresses the meaning of the given word.

Lurk

Options:

- 1) Ignore
- 2) Rush
- 3) Come
- 4) Sneak

Correct Answer: Sneak

Candidate Answer: Ignore

QID : 57 - In the following question, out of the given four alternatives, select the one which best expresses the meaning of the given word.

Groan

Options:

- 1) Grumble
- 2) Agreement
- 3) Liking
- 4) Regard

Correct Answer: Grumble

Candidate Answer: Grumble

QID : 58 - In the following question, out of the given four alternatives, select the one which is opposite in meaning of the given word.

Lethargic

Options:

- 1) Lazy
- 2) Sluggish
- 3) Lively
- 4) Dull

Correct Answer: Lively

Candidate Answer: Lively

QID : 59 - In the following question, out of the given four alternatives, select the one which is opposite in meaning of the given word.

Defend

Options:

- 1) Uphold
- 2) Surrender
- 3) Secure
- 4) Resist

Correct Answer: Surrender

Candidate Answer: Surrender

QID : 60 - In the following question, out of the given four alternatives, select the one which is opposite in meaning of the given word.

Command

Options:

- 1) Opposition
- 2) Call
- 3) Dictate
- 4) Notification

Correct Answer: Opposition

Candidate Answer: Opposition

QID : 61 - In the following question, out of the four given alternatives, select the alternative which best expresses the meaning of the Idiom/Phrase.

Rest on one's laurels

Options:

- 1) To retire from active life
- 2) To remember thing clearly
- 3) Not to come to point
- 4) Defend from enemies

Correct Answer: To retire from active life

Candidate Answer: To retire from active life

QID : 62 - In the following question, out of the four given alternatives, select the alternative which best expresses the meaning of the Idiom/Phrase.

Fallout

Options:

- 1) To admire
- 2) Declared dead
- 3) To love someone
- 4) To quarrel

Correct Answer: To quarrel

Candidate Answer: To admire

QID : 63 - Improve the bracketed part of the sentence.

The main **(causes of this failure is)** inadequate ability growth and character development.

Options:

- 1) causes of these failure is
- 2) cause of this failure are
- 3) causes of this failure are
- 4) No improvement

Correct Answer: causes of this failure are

Candidate Answer: No improvement

QID : 64 - Improve the bracketed part of the sentence.

If they **(did not know their ability)** and they do not know which sports they want to do, they will not learn to play any sports and will not succeed.

Options:

- 1) do not know their ability
- 2) would not know their ability
- 3) did not know their capability
- 4) No improvement

Correct Answer: do not know their ability

Candidate Answer: do not know their ability

QID : 65 - In the following question, out of the four given alternatives, select the alternative which is the best substitute of the phrase.

Art or craft making skill with hand.

Options:

- 1) Hovercraft
- 2) Handicraft
- 3) Statecraft
- 4) Spacecraft

Correct Answer: Handicraft

Candidate Answer: Handicraft

QID : 66 - In the following question, out of the four given alternatives, select the alternative which is the best substitute of the phrase.

Insufficient feeding or nourishing.

Options:

- 1) Abduction
- 2) Abolition
- 3) Addiction
- 4) Malnutrition

Correct Answer: Malnutrition

Candidate Answer: Malnutrition

QID : 67 - In the following question, a word has been written in four different ways out of which only one is correctly spelt. Select the correctly spelt word.

Options:

- 1) Defecient
- 2) Deficeint
- 3) Deficient
- 4) Deficent

Correct Answer: Deficient

Candidate Answer: Deficient

QID : 68 - In the following question, a word has been written in four different ways out of which only one is correctly spelt. Select the correctly spelt word.

Options:

- 1) Chanlenge
- 2) Challenge
- 3) Challainge
- 4) Challenge

Correct Answer: Challenge

Candidate Answer: Challenge

QID : 69 - Rearrange the parts of the sentence in correct order.

His vision

P: hardly related to

Q: and goals were

R: the reality around him

Options:

- 1) PRQ
- 2) QPR
- 3) PQR
- 4) RPQ

Correct Answer: QPR

Candidate Answer: QPR

QID : 70 - Rearrange the parts of the sentence in correct order.

Pollution needs

P: otherwise our future generations

Q: to be tackled seriously

R: would suffer a lot

Options:

- 1) PRQ
- 2) QRP
- 3) RPQ
- 4) QPR

Correct Answer: QPR

Candidate Answer: QPR

QID : 71 - In the following passage some of the words have been left out. Read the passage carefully and select the correct answer for the given blank out of the four alternatives.

The thoughts, behavior and tastes of fashion, music, television and other _____ of life of the masses are often seen having a _____ impact on the living of the society. We tend to get influenced by the lifestyles of our peer group. The changing ways of life of our peers often _____ us to change our ways of looking at life and leading it. It's a human tendency to do what the crowd does. Few have the courage to resist the peer pressure and be their own selves rather than being one among the lot. Peer pressure is bound to affect most of us, both, positively and _____. The distinction between positive and negative peer pressure lies in a thoughtful analysis of the views of the masses. Following your peers _____ leaves a negative impact on your life while an analytical approach of looking at peer behavior can act positively. Let us look at the positive and negative effects of peer pressure.

television and other _____ of life

Options:

- 1) walks
- 2) cakes
- 3) notion
- 4) ideas

Correct Answer: walks

Candidate Answer: notion

QID : 72 - In the following passage some of the words have been left out. Read the passage carefully and select the correct answer for the given blank out of the four alternatives.

The thoughts, behavior and tastes of fashion, music, television and other _____ of life of the masses are often seen having a _____ impact on the living of the society. We tend to get influenced by the lifestyles of our peer group. The changing ways of life of our peers often _____ us to change our ways of looking at life and leading it. It's a human tendency to do what the crowd does. Few have the courage to resist the peer pressure and be their own selves rather than being one among the lot. Peer pressure is bound to affect most of us, both, positively and _____. The distinction between positive and negative peer pressure lies in a thoughtful analysis of the views of the masses. Following your peers _____ leaves a negative impact on your life while an analytical approach of looking at peer behavior can act positively. Let us look at the positive and negative effects of peer pressure.

a _____ impact on the living

Options:

- 1) mere
- 2) deep
- 3) follow
- 4) slow

Correct Answer: deep

Candidate Answer: deep

QID : 73 - In the following passage some of the words have been left out. Read the passage carefully and select the correct answer for the given blank out of the four alternatives.

The thoughts, behavior and tastes of fashion, music, television and other _____ of life of the masses are often seen having a _____ impact on the living of the society. We tend to get influenced by the lifestyles of our peer group. The changing ways of life of our peers often _____ us to change our ways of looking at life and leading it. It's a human tendency to do what the crowd does. Few have the courage to resist the peer pressure and be their own selves rather than being one among the lot. Peer pressure is bound to affect most of us, both, positively and _____. The distinction between positive and negative peer pressure lies in a thoughtful analysis of the views of the masses. Following your peers _____ leaves a negative impact on your life while an analytical approach of looking at peer behavior can act positively. Let us look at the positive and negative effects of peer pressure.

peers often _____ us to change

Options:

- 1) reduce
- 2) converse
- 3) force
- 4) relates

Correct Answer: force

Candidate Answer: force

QID : 74 - In the following passage some of the words have been left out. Read the passage carefully and select the correct answer for the given blank out of the four alternatives.

The thoughts, behavior and tastes of fashion, music, television and other _____ of life of the masses are often seen having a _____ impact on the living of the society. We tend to get influenced by the lifestyles of our peer group. The changing ways of life of our peers often _____ us to change our ways of looking at life and leading it. It's a human tendency to do what the crowd does. Few have the courage to resist the peer pressure and be their own selves rather than being one among the lot. Peer pressure is bound to affect most of us, both, positively and _____. The distinction between positive and negative peer pressure lies in a thoughtful analysis of the views of the masses. Following your peers _____ leaves a negative impact on your life while an analytical approach of looking at peer behavior can act positively. Let us look at the positive and negative effects of peer pressure.

both, positively and _____.

Options:

- 1) positively
- 2) neutral
- 3) indifferent
- 4) negatively

Correct Answer: negatively

Candidate Answer: negatively

QID : 75 - In the following passage some of the words have been left out. Read the passage carefully and select the correct answer for the given blank out of the four alternatives.

The thoughts, behavior and tastes of fashion, music, television and other _____ of life of the masses are often seen having a _____ impact on the living of the society. We tend to get influenced by the lifestyles of our peer group. The changing ways of life of our peers often _____ us to change our ways of looking at life and leading it. It's a human tendency to do what the crowd does. Few have the courage to resist the peer pressure and be their own selves rather than being one among the lot. Peer pressure is bound to affect most of us, both, positively and _____. The distinction between positive and negative peer pressure lies in a thoughtful analysis of the views of the masses. Following your peers _____ leaves a negative impact on your life while an analytical approach of looking at peer behavior can act positively. Let us look at the positive and negative effects of peer pressure.

Following your peers _____ leaves a

Options:

- 1) blindly
- 2) effectively
- 3) rarely
- 4) surely

Correct Answer: blindly

Candidate Answer: blindly

QID : 76 - What is the full form of GNP?

जीएनपी का पूरा रूप क्या है?

Options:

- 1) Great Net Product
ग्रेट नेट प्रोडक्ट
- 2) Gross National Product
ग्रीस नेशनल प्रोडक्ट
- 3) Great National Product
ग्रेट नेशनल प्रोडक्ट
- 4) Gross Net Product
ग्रीस नेट प्रोडक्ट

Correct Answer: Gross National Product
ग्रीस नेशनल प्रोडक्ट

Candidate Answer: Gross National Product
ग्रीस नेशनल प्रोडक्ट

QID : 77 - Development promises a real growth by enhancing _____ of a person.

एक व्यक्ति के _____ को बढ़ावा देकर विकास वास्तविक वृद्धि का वचन देता है।

Options:

- 1) Total income
कुल आय
- 2) Standard of living
जीवन स्तर
- 3) Total income and standard of living both
कुल आय तथा जीवन स्तर दोनों
- 4) Neither total income nor standard of living
न तो कुल आय न ही जीवन स्तर

Correct Answer: Total income and standard of living both
कुल आय तथा जीवन स्तर दोनों

Candidate Answer: Total income and standard of living both
कुल आय तथा जीवन स्तर दोनों

QID : 78 - How many fundamental duties does part IV-A of Indian constitution specifies?

भारतीय संविधान का भाग IV-A कितने मौलिक कर्तव्य निर्दिष्ट करता है?

Options:

- 1) 5
- 2) 7
- 3) 11
- 4) 31

Correct Answer: 11

Candidate Answer: 7

QID : 79 - In order to make a bill into a law it is required to pass through _____.

किसी विधेयक को कानून बनाने के लिए उसे _____ की मंजूरी ज़रूरी है।

Options:

- 1) Only Lok Sabha
केवल लोक सभा
- 2) Only Rajya Sabha
केवल राज्य सभा
- 3) Both Lok and Rajya Sabha
लोक सभा तथा राज्य सभा दोनों
- 4) Either Lok Sabha or Rajya Sabha
या लोक सभा या राज्य सभा

Correct Answer: Both Lok and Rajya Sabha
लोक सभा तथा राज्य सभा दोनों

Candidate Answer: Both Lok and Rajya Sabha
लोक सभा तथा राज्य सभा दोनों

QID : 80 - Which ancient city of Indus-Valley Civilization was famous for its dock yard?

सिंधु घाटी सभ्यता का कौन सा प्राचीन शहर अपने बन्दरगाह के लिए प्रसिद्ध था?

Options:

- 1) Dholavira
धौलावीरा
- 2) Lothal
लोथल
- 3) Chanhudaro
चनहुदड़ो
- 4) Mohenjo-daro
मोहनजोदड़ो

Correct Answer: Lothal
लोथल

Candidate Answer: Lothal
लोथल

QID : 81 - In which year did Mahatma Gandhi gave a call for a Satyagraha against the Rowlatt Act?

किस वर्ष में महात्मा गांधी ने रॉलेट अधिनियम के खिलाफ सत्याग्रह का आवाहन किया था?

Options:

- 1) 1915
- 2) 1919
- 3) 1923
- 4) 1909

Correct Answer: 1919

Candidate Answer: 1919

QID : 82 - Winter solstice occurs on which date of the year?

वर्ष के किस तिथि को शीत आयनांत होता है?

Options:

- 1) 21 March
21 मार्च
- 2) 23 September
23 सितम्बर
- 3) 21 June
21 जून
- 4) 22 December
22 दिसम्बर

Correct Answer: 22 December
22 दिसम्बर

Candidate Answer: 22 December
22 दिसम्बर

QID : 83 - Which is the second largest continent of the world after Asia?

एशिया के बाद विश्व का दूसरा सबसे बड़ा महाद्वीप कौन सा है?

Options:

- 1) North America
उत्तरी अमेरिका
- 2) South America
दक्षिणी अमेरिका
- 3) Africa
अफ्रीका
- 4) Europe
यूरोप

Correct Answer: Africa
अफ्रीका

Candidate Answer: [NOT ANSWERED]

QID : 84 - What is small leaf like structures of a flower called?

पुष्प की छोटी पत्ति की तरह दिखने वाली भाग क्या कहलाती है?

Options:

- 1) Sepals
बाह्यदल
- 2) Petals
पंखुडियाँ
- 3) Pistil
स्त्रीकेसर
- 4) Stamens
पुंकेसर

Correct Answer: Sepals
बाह्यदल

Candidate Answer: Petals
पंखुडियाँ

QID : 85 - The balance of CO₂ and O₂ in atmosphere is due to _____.

वायुमण्डल में कार्बन डाईऑक्साइड और ऑक्सीजन के संतुलन का कारण _____ है।

Options:

- 1) Transportation
परिवहन
- 2) Photosynthesis
प्रकाश संश्लेषण
- 3) Respiration
श्वसन
- 4) Evaporation
वाष्पीकरण

Correct Answer: Photosynthesis
प्रकाश संश्लेषण

Candidate Answer: Photosynthesis
प्रकाश संश्लेषण

QID : 86 - Excretion means _____.

उत्सर्जन का अर्थ _____ है।

Options:

- 1) Removal of substances present in excess
अतिरिक्त मात्रा में मौजूद पदार्थों का निष्कासन
- 2) Formation of those substances that have some role in the body
ऐसे पदार्थों का निर्माण जोकि शरीर में कुछ भूमिका निभाते हैं
- 3) Removal of such substances that have never been part of the body
ऐसे पदार्थ का निष्कासन जो कभी शरीर का भाग नहीं रहा है
- 4) All options are correct
सभी विकल्प सही हैं

Correct Answer: Removal of substances present in excess
अतिरिक्त मात्रा में मौजूद पदार्थों का निष्कासन

Candidate Answer: Removal of substances present in excess
अतिरिक्त मात्रा में मौजूद पदार्थों का निष्कासन

QID : 87 - Which is the correct order of decreasing friction?

घर्षण घटने का सही क्रम कौन सा है?

Options:

- 1) Static friction > Sliding friction > Rolling friction
स्थैतिक घर्षण > सर्पी घर्षण > लोटनिक घर्षण
- 2) Static friction > Rolling friction > Sliding friction
स्थैतिक घर्षण > लोटनिक घर्षण > सर्पी घर्षण
- 3) Rolling friction > Sliding friction > Static friction
लोटनिक घर्षण > सर्पी घर्षण > स्थैतिक घर्षण
- 4) Sliding friction > Rolling friction > Static friction
सर्पी घर्षण > लोटनिक घर्षण > स्थैतिक घर्षण

Correct Answer: Static friction > Sliding friction > Rolling friction
स्थैतिक घर्षण > सर्पी घर्षण > लोटनिक घर्षण

Candidate Answer: Static friction > Rolling friction > Sliding friction
स्थैतिक घर्षण > लोटनिक घर्षण > सर्पी घर्षण

QID : 88 - A steam engine converts the heat energy of steam into _____.

एक भाप इंजन भाप की ऊष्मा ऊर्जा को _____ में बदलता है।

Options:

- 1) Electrical energy
विद्युत ऊर्जा
- 2) Chemical energy
रासायनिक ऊर्जा
- 3) Mechanical energy
यांत्रिक ऊर्जा
- 4) Thermal energy
तापिय ऊर्जा

Correct Answer: Mechanical energy
यांत्रिक ऊर्जा

Candidate Answer: Mechanical energy
यांत्रिक ऊर्जा

QID : 89 - What is the full form of ASCII?

ए. एस. सी. आई. आई. का असंक्षिप्त रूप क्या है?

Options:

- 1) American Standard Code for Internet Interchange
अमेरिकन स्टैण्डर्ड कोड फॉर इंटरनेट इंटरचेंज
- 2) American Standard Code for Information Interchange
अमेरिकन स्टैण्डर्ड कोड फॉर इनफार्मेशन इंटरचेंज
- 3) American Standard Code for Information International
अमेरिकन स्टैण्डर्ड कोड फॉर इनफार्मेशन इंटरनेशनल
- 4) American Standard Code for Internet International
अमेरिकन स्टैण्डर्ड कोड फॉर इंटरनेट इंटरनेशनल

Correct Answer: American Standard Code for Information Interchange
अमेरिकन स्टैण्डर्ड कोड फॉर इनफार्मेशन इंटरचेंज

Candidate Answer: American Standard Code for Information Interchange
अमेरिकन स्टैंडर्ड कोड फॉर इनफार्मेशन इंटरचेंज

QID : 90 - Metallurgy is the process of _____.

धातुकर्म एक _____ प्रक्रिया है।

Options:

1) Extracting metals from the Ore

अयस्क से धातुओं के निष्कर्षण की

2) Roasting the Ore

अयस्क के भर्जन की

3) Liquefaction of metals

धातु का तरलीकरण की

4) Adding metal to the Ore in blast furnace

ब्लास्ट फर्नेस में मौजूद अयस्क में धातु मिलाने की

Correct Answer: Extracting metals from the Ore

अयस्क से धातुओं के निष्कर्षण की

Candidate Answer: Extracting metals from the Ore

अयस्क से धातुओं के निष्कर्षण की

QID : 91 - Metals have _____.

धातुओं का _____।

Options:

1) High melting and boiling point

गलनांक और क्वथनांक उच्च होता है

2) Low melting and boiling point

गलनांक और क्वथनांक निम्न होता है

3) High melting and low boiling point

गलनांक उच्च और क्वथनांक निम्न होता है

4) Low melting and high boiling point

गलनांक निम्न और क्वथनांक उच्च होता है

Correct Answer: High melting and boiling point

गलनांक और क्वथनांक उच्च होता है

Candidate Answer: High melting and boiling point

गलनांक और क्वथनांक उच्च होता है

QID : 92 - What is the water which is suitable for drinking called?

पीने के लिए उपयुक्त जल को क्या कहते हैं?

Options:

1) Potable water

पेय जल

2) Portable water

वहनीय जल

3) Pure water

शुद्ध जल

4) Sterile water

जीवाणुरहित जल

Correct Answer: Potable water

पेय जल

Candidate Answer: Potable water

पेय जल

QID : 93 - Which among the following considered to be the financial turn around and rival package for electricity distribution companies of India?

निम्नलिखित में से किसे भारत के बिजली वितरण कंपनियों के लिए वित्तीय बारी और प्रतिद्वंद्वी पैकेज के रूप में माना जाता है?

Options:

1) VAT

वैट

2) UDAAN

उड़ान

3) UDAY

उदय

4) UJALA

उजाला

Correct Answer: UDAY

उदय

Candidate Answer: UDAY

उदय

QID : 94 - Who invented the first modern electrical air conditioning unit?

प्रथम आधुनिक विद्युत वातानुकूलक इकाई का आविष्कारक कौन है?

Options:

1) Karl Benz

कार्ल बेंज

2) Robert W. Wilson

रॉबर्ट डब्ल्यू. विल्सन

3) Willis Carrier

विलिस कैरियर

4) Charles M. Hall

चार्ल्स एम. हॉल

Correct Answer: Willis Carrier
विलिस कैरियर

Candidate Answer: Willis Carrier
विलिस कैरियर

QID : 95 - Which country will host the 2018 FIFA Football World Cup?

कौन सा देश 2018 फीफा फुटबॉल वर्ल्ड कप की मेजबानी करेगा?

Options:

- 1) Brazil
ब्राज़ील
- 2) Russia
रूस
- 3) Germany
जर्मनी
- 4) England
इंग्लैंड

Correct Answer: Russia
रूस

Candidate Answer: Brazil
ब्राज़ील

QID : 96 - Alpana is a traditional folk art of which state?

अल्पना किस राज्य की पारंपरिक लोक कला है?

Options:

- 1) Maharashtra
महाराष्ट्र
- 2) West Bengal
पश्चिम बंगाल
- 3) Karnataka
कर्नाटक
- 4) Rajasthan
राजस्थान

Correct Answer: West Bengal
पश्चिम बंगाल

Candidate Answer: West Bengal
पश्चिम बंगाल

QID : 97 - Which former Union Minister has been awarded with the Japan's imperial decoration 'Order of the Rising Sun' award?

किस पूर्व केंद्रीय मंत्री को जापान के शाही सजावट 'ऑर्डर ऑफ द राइजिंग सन' पुरस्कार से सम्मानित किया गया है?

Options:

- 1) Ashwani Kumar
अश्विनी कुमार
- 2) Manmohan Singh
मनमोहन सिंह
- 3) L. K. Advani
एल. के. आडवाणी
- 4) Sharad Yadav
शरद यादव

Correct Answer: Ashwani Kumar
अश्विनी कुमार

Candidate Answer: [NOT ANSWERED]

QID : 98 - Who is the author of book named "Alice in the Wonderland"?

"एलिस इन द वॉन्डरलैण्ड" नामक पुस्तक के लेखक कौन हैं?

Options:

- 1) William Shakespeare
विलियम शेक्सपीयर
- 2) Paul Kennedy
पॉल कैनेडी
- 3) Lewis Carrol
लुइस कैरोल
- 4) George Orwell
जॉर्ज ऑर्वेल

Correct Answer: Lewis Carrol
लुइस कैरोल

Candidate Answer: Lewis Carrol
लुइस कैरोल

QID : 99 - What is the group of rural women solar engineers from African countries trained under India's developmental support for harnessing solar energy called?

सौर ऊर्जा को उपयोग में लाने के लिए भारत के विकासकारी सहयोग के अंतर्गत प्रशिक्षित अफ्रीकी देशों से ग्रामीण महिला और इंजीनियरों के समूह को क्या कहते हैं?

Options:

- 1) Solar Sangathan
सौर संगठन
- 2) Solar Samiti
सौर समिति
- 3) Solar Mamas
सौर ममास
- 4) Solar System
सौर प्रणाली

Correct Answer: Solar Mamas
सौर ममास

Candidate Answer: [NOT ANSWERED]

QID : 100 - The 250 km Tamu-Kalewa-Kalemyo highway is a gift to Myanmar is built by _____.

250 कि.मी. का तामु-कलेवा-कलेम्यो हाईवे म्यानमार को एक उपहार है, जो _____ द्वारा निर्मित है।

Options:

- 1) National Highway Authority of India
नेशनल हाईवे अथॉरिटी ऑफ इंडिया
- 2) Military of Myanmar
म्यांमार की सेना
- 3) Border Roads Organisation
बॉर्डर रोड आर्गनाइजेशन
- 4) None of these
इनमें से कोई नहीं

Correct Answer: Border Roads Organisation
बॉर्डर रोड आर्गनाइजेशन

Candidate Answer: [NOT ANSWERED]