

SSC MTS 2023 Tier 1 Sept 4 Shift 3 Question Paper with Answers

Roll Number	
Candidate Name	
Exam Date	04/09/2023
Exam Time	4:00 PM - 6:00 PM
Subject	MTS Non Tech Havaladar CBIC and CBN Examination 2023

Section : Numerical and Mathematical Ability

Q.1 Simplify the given expression.

$$71 - (-3)\{-2 - (8 - 3)\} + 3\{5 + (-2)(-1)\}$$

- Ans
- 1. 30
 - 2. 119
 - 3. 50
 - 4. 71

Question ID : 264330157321

Option 1 ID : 264330616650

Option 2 ID : 264330616648

Option 3 ID : 264330616647

Option 4 ID : 264330616649

Status : Answered

Chosen Option : 4

Q.2 Find the mean proportional between 0.08 and 0.32.

- Ans
- 1. 16
 - 2. 0.016
 - 3. 0.16
 - 4. 1.6

Question ID : 264330153845

Option 1 ID : 264330602844

Option 2 ID : 264330602846

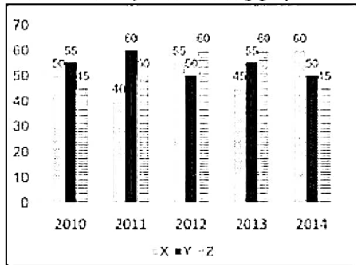
Option 3 ID : 264330602843

Option 4 ID : 264330602845

Status : Answered

Chosen Option : 3

Q.3 The graph shows the production of tyres (in Lakhs) by three different companies X, Y, and Z over the years.
Directions: Study the following graph carefully to answer the question given below it.



The total production of company Z in 2012 and 2013 is what percentage of the total production of company X in 2010 and 2011?

- Ans**
- 1. 126.3%
 - 2. 133.3%
 - 3. 75%
 - 4. 111.1%

Question ID : 264330153890
Option 1 ID : 264330603025
Option 2 ID : 264330603023
Option 3 ID : 264330603024
Option 4 ID : 264330603026
Status : Answered
Chosen Option : 2

Q.4 What is the largest number that divides 627, 15630 and 3128 and leaves remainders of 2, 5 and 3, respectively?

- Ans**
- 1. 775
 - 2. 650
 - 3. 625
 - 4. 1225

Question ID : 264330156089
Option 1 ID : 264330611757
Option 2 ID : 264330611758
Option 3 ID : 264330611755
Option 4 ID : 264330611756
Status : Answered
Chosen Option : 3

Q.5 If P can finish a job in 3 hours and Q can finish the same job in 6 hours independently, then they together will finish the job in x minutes. Find the value of x .

- Ans**
- 1. 160
 - 2. 100
 - 3. 150
 - 4. 120

Question ID : 264330155972
Option 1 ID : 264330611289
Option 2 ID : 264330611290
Option 3 ID : 264330611287
Option 4 ID : 264330611288
Status : Answered
Chosen Option : 4

Q.6 The ratio of principal and amount is 5 : 6 for one year. Find the rate of simple interest per annum?

- Ans**
- 1. 10%
 - 2. 11%
 - 3. 15%
 - 4. 20%

Question ID : 264330158842
Option 1 ID : 264330622727
Option 2 ID : 264330622729
Option 3 ID : 264330622728
Option 4 ID : 264330622730
Status : Answered
Chosen Option : 4

Q.7 A boatman goes 6 km against the current of the stream in 2 hours and goes 1.5 km along the current in 7.5 minutes. How long will (in hours) it take to go 30 km in still water?

- Ans**
- 1. 2.5
 - 2. 3.5
 - 3. 3.0
 - 4. 4.0

Question ID : 264330153776
Option 1 ID : 264330602569
Option 2 ID : 264330602570
Option 3 ID : 264330602568
Option 4 ID : 264330602567
Status : Answered
Chosen Option : 4

Q.8 The average height of 25 boys was calculated to be 150 cm. It was detected later that one value of 160 cm was wrongly copied as 135 cm for the computation of the mean. Find the correct mean height (in cm).

- Ans**
- 1. 152
 - 2. 158
 - 3. 154
 - 4. 151

Question ID : 264330156097
Option 1 ID : 264330611790
Option 2 ID : 264330611789
Option 3 ID : 264330611787
Option 4 ID : 264330611788
Status : Answered
Chosen Option : 4

Q.9 The marked price of mustard oil is 10% more than its cost price. At what percentage less than the marked price should it be sold to have no profit and no loss?

- Ans**
- 1. $9\frac{3}{11}\%$
 - 2. $9\frac{2}{11}\%$
 - 3. $9\frac{1}{11}\%$
 - 4. $9\frac{4}{11}\%$

Question ID : 264330156219

Option 1 ID : 264330612277

Option 2 ID : 264330612276

Option 3 ID : 264330612275

Option 4 ID : 264330612278

Status : Answered

Chosen Option : 3

Q.10 A woman jogged every month in 2022 as per the given table. Study the table and answer the question that follows.

Month	Jan	Feb	March	April	May	June	July	Aug	Sept	Oct	Nov	Dec
Distance jogged (in km)	90	60	30	30	30	60	60	90	30	60	90	30

What is the mean distance jogged by the woman in the year 2022?

- Ans**
- 1. 52.5 km
 - 2. 55 km
 - 3. 50 km
 - 4. 60 km

Question ID : 264330156290

Option 1 ID : 264330612562

Option 2 ID : 264330612559

Option 3 ID : 264330612561

Option 4 ID : 264330612560

Status : Answered

Chosen Option : 2

Q.11 The area of a trapezium is 180 cm^2 and two parallel sides are 28 cm and 12 cm. The distance between these parallel sides is:

- Ans**
- 1. 9 cm
 - 2. 12 cm
 - 3. 18 cm
 - 4. 15 cm

Question ID : 264330154138

Option 1 ID : 264330604016

Option 2 ID : 264330604015

Option 3 ID : 264330604017

Option 4 ID : 264330604018

Status : Answered

Chosen Option : 1

Q.12 Water is pouring into a cuboidal reservoir at the rate of 50 litres per minute. The volume of the reservoir is 120 m^3 . How many hours will it take to fill the reservoir?

- Ans**
- 1. 35
 - 2. 45
 - 3. 40
 - 4. 30

Question ID : 264330153864
Option 1 ID : 264330602922
Option 2 ID : 264330602919
Option 3 ID : 264330602920
Option 4 ID : 264330602921
Status : Answered
Chosen Option : 3

Q.13 The difference between the compound interest (Compounded annually) and simple interest for an amount of ₹85,000 in 2 years is ₹850. Find the rate of interest per annum.

- Ans**
- 1. 5%
 - 2. 10%
 - 3. 8%
 - 4. 12%

Question ID : 264330156229
Option 1 ID : 264330612315
Option 2 ID : 264330612317
Option 3 ID : 264330612316
Option 4 ID : 264330612318
Status : Answered
Chosen Option : 2

Q.14 ₹3,600 is divided such that half of the first part, one-third of the second part and one-fifth of the third part are the same. The value of the third part is:

- Ans**
- 1. 1080
 - 2. 1000
 - 3. 2400
 - 4. 1800

Question ID : 264330154050
Option 1 ID : 264330603665
Option 2 ID : 264330603666
Option 3 ID : 264330603663
Option 4 ID : 264330603664
Status : Answered
Chosen Option : 4

Q.15 A store sells an item for ₹500, making a profit of 25%. Later, the store reduces the price of the item by 20% to clear out old inventory. What is the new percentage profit or loss for the store?

- Ans**
- 1. 2% profit
 - 2. 5% profit
 - 3. 5% loss
 - 4. No profit, no loss

Question ID : 264330156264
Option 1 ID : 264330612457
Option 2 ID : 264330612455
Option 3 ID : 264330612456
Option 4 ID : 264330612458
Status : Answered
Chosen Option : 4

Q.16 Two trains 120 metres and 150 metres long, respectively, are running in the same direction with speeds of 70 km/h and 52 km/h, respectively. In how much time will the first train cross the second? (in seconds)

- Ans**
- 1. 52
 - 2. 60
 - 3. 48
 - 4. 54

Question ID : 264330156008
Option 1 ID : 264330611431
Option 2 ID : 264330611434
Option 3 ID : 264330611432
Option 4 ID : 264330611433
Status : Answered
Chosen Option : 4

Q.17 A cyclist travels 15 km at a speed of 10 km/h and then travels another 15 km at a speed of 20 km/h. What is the average speed of the cyclist for the entire journey? (round to two places of decimals)

- Ans**
- 1. 12.32km/h
 - 2. 13.74 km/h
 - 3. 12.72 km/h
 - 4. 13.33 km/h

Question ID : 264330156257
Option 1 ID : 264330612427
Option 2 ID : 264330612430
Option 3 ID : 264330612428
Option 4 ID : 264330612429
Status : Answered
Chosen Option : 4

Q.18 Susanth purchased 3 packs of oil at the rate of ₹20 each, 4 packs of oil at ₹21 each and 3 packs of oil at the rate of ₹22 each. What is the average cost of one pack of oil?

- Ans**
- 1. ₹21.5
 - 2. ₹20
 - 3. ₹20.5
 - 4. ₹21

Question ID : 264330153870

Option 1 ID : 264330602946

Option 2 ID : 264330602943

Option 3 ID : 264330602944

Option 4 ID : 264330602945

Status : Answered

Chosen Option : 4

Q.19 A man can finish a work in 12 days and a woman can finish the same in 10 days. 2 men and 3 women work on alternate days and men start the first day. The work will be finished in _____ days.

- Ans**
- 1. $\frac{22}{3}$
 - 2. $\frac{24}{5}$
 - 3. $\frac{22}{5}$
 - 4. $\frac{21}{5}$

Question ID : 264330153815

Option 1 ID : 264330602725

Option 2 ID : 264330602723

Option 3 ID : 264330602726

Option 4 ID : 264330602724

Status : Answered

Chosen Option : 3

Q.20 During the first year, the population of a town increased by 10% and during the next year, the population decreased by 10%. If the total population of the town was 19,800 at the end of the second year, find the population size at the beginning of the first year.

- Ans**
- 1. 20,800
 - 2. 21,000
 - 3. 20,000
 - 4. 21,800

Question ID : 264330155994

Option 1 ID : 264330611377

Option 2 ID : 264330611376

Option 3 ID : 264330611378

Option 4 ID : 264330611375

Status : Answered

Chosen Option : 3

Section : Reasoning Ability and Problem Solving

Q.1 In a certain code language, 'GLOAT' is coded as 'EJMYR' and 'INCLUR' is coded as 'GLASP'. What is the code for 'PANDA' in the given code language?

- Ans**
- 1. MZMCZ
 - 2. MYMCX
 - 3. NXNBY
 - 4. NYLBY

Question ID : 264330155816

Option 1 ID : 264330610667

Option 2 ID : 264330610669

Option 3 ID : 264330610670

Option 4 ID : 264330610668

Status : Answered

Chosen Option : 4

Q.2 Q, R, S, T, U, V, W and X are sitting around a square table facing the center of the table. Some of them are sitting at the corners while some are sitting at the exact center of the sides. X sits second to the left of W. W sits in one of the corners. V is the immediate neighbour of T and U. R sits third to the left of T. U does not sit in one of the corners. U is neither the neighbour of X nor W. Q is not the neighbour of X.

How many people sit between S and V, when counted from the left of S?

- Ans**
- 1. One
 - 2. Three
 - 3. Four
 - 4. Two

Question ID : 264330155535

Option 1 ID : 264330609546

Option 2 ID : 264330609544

Option 3 ID : 264330609543

Option 4 ID : 264330609545

Status : Answered

Chosen Option : 4

Q.3 What will come in place of '?' in the following equation, if '+' and '*' are interchanged and '-' and '/' are interchanged?

$$1 \times 1 - 1 \div 1 + 1 = ?$$

- Ans**
- 1. 11
 - 2. 1
 - 3. 10
 - 4. 21

Question ID : 264330154656

Option 1 ID : 264330606089

Option 2 ID : 264330606088

Option 3 ID : 264330606087

Option 4 ID : 264330606090

Status : Answered

Chosen Option : 2

Q.4 Find out the correct alternative that when filled in the blanks in the same sequence will make the series logically complete.

EFS_ JK_M OPRS_ US_ YZ_B

- Ans**
- 1. HSTWS
 - 2. HTBSW
 - 3. JSTBW
 - 4. JTBWS

Question ID : 264330154727
Option 1 ID : 264330606372
Option 2 ID : 264330606371
Option 3 ID : 264330606373
Option 4 ID : 264330606374
Status : Answered
Chosen Option : 1

Q.5 If 7th May 2000 is Sunday, then what will be the day of the week on 15th July 2010?

- Ans**
- 1. Sunday
 - 2. Monday
 - 3. Friday
 - 4. Thursday

Question ID : 264330154331
Option 1 ID : 264330604788
Option 2 ID : 264330604787
Option 3 ID : 264330604789
Option 4 ID : 264330604790
Status : Answered
Chosen Option : 4

Q.6 Read the given statements and conclusions carefully. You have to take the given statements to be true even if they seem to be at variance from commonly known facts. You have to decide which conclusion/s logically follow/s from the given statements.

Statements: Some doughnuts are rocks. All rocks are papers. Some papers are oil.

Conclusion I: Some doughnuts are papers.

Conclusion II: Some rocks are oil.

- Ans**
- 1. Neither conclusion (I) nor (II) is follow.
 - 2. Both conclusions (I) and (II) are follow.
 - 3. Only conclusion (II) is follow.
 - 4. Only conclusion (I) is follow.

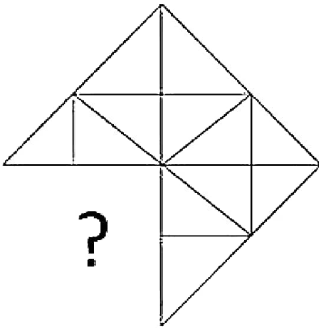
Question ID : 264330155926
Option 1 ID : 264330611109
Option 2 ID : 264330611110
Option 3 ID : 264330611108
Option 4 ID : 264330611107
Status : Answered
Chosen Option : 4

Q.7 What will come in the place of '?' in the following equation, if '+' and '-' are interchanged and '×' and '÷' are interchanged?
 $147 \times 7 \div 8 - 32 - 6 = ?$

- Ans**
- 1. 132
 - 2. 152
 - 3. 122
 - 4. 142

Question ID : 264330155676
Option 1 ID : 264330610109
Option 2 ID : 264330610107
Option 3 ID : 264330610108
Option 4 ID : 264330610110
Status : Answered
Chosen Option : 4

Q.8 Identify the figure that completes the pattern (rotation is NOT allowed).



Ans

- 1.
- 2.
- 3.
- 4.

Question ID : 264330154520
Option 1 ID : 264330605545
Option 2 ID : 264330605543
Option 3 ID : 264330605544
Option 4 ID : 264330605546
Status : Answered
Chosen Option : 1

Q.9 Select the set in which the numbers are related in the same way as are the numbers of the following sets.
(NOTE: Operations should be performed on the whole numbers, without breaking down the numbers into its constituent digits. E.g. 13 – Operations on 13 such as adding / subtracting / multiplying etc. to 13 can be performed. Breaking down 13 into 1 and 3 and then performing mathematical operations on 1 and 3 is not allowed)
(4, 55, 7)
(2, 35, 5)

- Ans**
- 1. 41, 156, 7
 - 2. 12, 346, 9
 - 3. 32, 175, 3
 - 4. 19, 122, 8

Question ID : 264330151617
Option 1 ID : 264330594098
Option 2 ID : 264330594095
Option 3 ID : 264330594097
Option 4 ID : 264330594096
Status : Answered
Chosen Option : 3

Q.10 What should come in place of '?' in the given series?

10 52 262 1312 6562 ?

- Ans**
- 1. 32954
 - 2. 31726
 - 3. 32812
 - 4. 31458

Question ID : 264330151472
Option 1 ID : 264330593518
Option 2 ID : 264330593516
Option 3 ID : 264330593517
Option 4 ID : 264330593515
Status : Answered
Chosen Option : 3

Q.11 What should come in place of '?' in the given series?

37 325 2917 ? 236197 2125765 19131877

- Ans**
- 1. 27894
 - 2. 28953
 - 3. 28741
 - 4. 26245

Question ID : 264330151447
Option 1 ID : 264330593416
Option 2 ID : 264330593418
Option 3 ID : 264330593417
Option 4 ID : 264330593415
Status : Answered
Chosen Option : 4

Q.12 DK 18 is related to EM 22 in a certain way. In the same way, ME 25 is related to NG 29. To which of the following is UL 14 related to following the same logic?

- Ans**
- 1. VM 19
 - 2. WN 18
 - 3. XO 17
 - 4. VN 18

Question ID : 264330151667
Option 1 ID : 264330594297
Option 2 ID : 264330594298
Option 3 ID : 264330594296
Option 4 ID : 264330594295
Status : Answered
Chosen Option : 4

Q.13 In a certain code language, 'MINT' is coded as '4735' and 'TIME' is coded as '5483'. What is the code for 'E' in the given code language?

- Ans**
- 1. 8
 - 2. 5
 - 3. 4
 - 4. 3

Question ID : 264330151703
Option 1 ID : 264330594439
Option 2 ID : 264330594440
Option 3 ID : 264330594442
Option 4 ID : 264330594441
Status : Answered
Chosen Option : 1

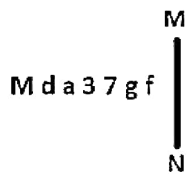
Q.14 Find out the correct alternative that when filled in the blanks in the same sequence will make the series logically complete.

A_BY CZ_Y_ZFY GZH_IZ_Y

- Ans**
- 1. HCJNR
 - 2. ZJDBV
 - 3. BHDKU
 - 4. ZDEYJ

Question ID : 264330154721
Option 1 ID : 264330606350
Option 2 ID : 264330606347
Option 3 ID : 264330606348
Option 4 ID : 264330606349
Status : Answered
Chosen Option : 4

Q.15 Select the correct mirror image of the given figure when the mirror is placed at MN as shown below.



- Ans
- 1. $\text{f g } \angle \text{ } \epsilon \text{ a b M}$
 - 2. $\text{g f } \nabla \text{ } 3 \text{ } \epsilon \text{ P M}$
 - 3. $\text{f g } \nabla \text{ } \epsilon \text{ } \epsilon \text{ b W}$
 - 4. $\text{f g } \nabla \text{ } \epsilon \text{ } \epsilon \text{ b M}$

Question ID : 264330151530
Option 1 ID : 264330593748
Option 2 ID : 264330593750
Option 3 ID : 264330593747
Option 4 ID : 264330593749
Status : Answered
Chosen Option : 4

Q.16 What should come in place of '?' in the given series?

2 24 ? 948 5700 34212 205284

- Ans
- 1. 156
 - 2. 184
 - 3. 119
 - 4. 136

Question ID : 264330151482
Option 1 ID : 264330593557
Option 2 ID : 264330593558
Option 3 ID : 264330593555
Option 4 ID : 264330593556
Status : Answered
Chosen Option : 1

Q.17 Which figure should replace the question mark (?) if the following figure series were to be continued?

V	=	3	△	V	3	0	△	
0		=		C		3		?
△	3	0	V	△	0	C	V	

Ans

X 1.

V	C
0	
△	3

X 2.

C	0
I	
V	△

✓ 3.

V	0
I	
△	C

X 4.

0	C
3	
△	V

Question ID : 264330154743
 Option 1 ID : 264330606436
 Option 2 ID : 264330606435
 Option 3 ID : 264330606437
 Option 4 ID : 264330606438
 Status : Answered
 Chosen Option : 3

Q.18 13 is related to 174 following a certain logic. Following the same logic, 15 is related to 230. To which of the following is 17 related to, following the same logic?

- Ans
- X 1. 291
 - X 2. 292
 - X 3. 293
 - ✓ 4. 294

Question ID : 264330151596
 Option 1 ID : 264330594011
 Option 2 ID : 264330594012
 Option 3 ID : 264330594013
 Option 4 ID : 264330594014
 Status : Answered
 Chosen Option : 4

Q.19 What should come in place of ? in the given series based on the English alphabetical order?

DQK, CPJ, BOI, ANH, ?

- Ans
- 1. XMF
 - 2. YLF
 - 3. YNF
 - 4. ZMG

Question ID : 264330155768
Option 1 ID : 264330610475
Option 2 ID : 264330610476
Option 3 ID : 264330610478
Option 4 ID : 264330610477
Status : Answered
Chosen Option : 4

Q.20 Read the given statements and conclusions carefully. You have to take the given statements to be true even if they seem to be at variance from commonly known facts. You have to decide which conclusion/s logically follow/s from the given statements.

Statements: Some glass are pink. All pink are bags. Some bags are flowers.

Conclusion I: Some pink are glass.

Conclusion II: Some flowers are bags.

- Ans
- 1. Only conclusion (II) is follow.
 - 2. Neither conclusion (I) nor (II) is follow.
 - 3. Only conclusion (I) is follow.
 - 4. Both conclusions (I) and (II) are follow.

Question ID : 264330155896
Option 1 ID : 264330610988
Option 2 ID : 264330610989
Option 3 ID : 264330610987
Option 4 ID : 264330610990
Status : Answered
Chosen Option : 4

Section : General Awareness

Q.1 What is the most powerful weapon that enables the Parliament to ensure executive accountability?

- Ans
- 1. Approval or refusal of laws
 - 2. The no-confidence motion
 - 3. Confirmation of treaties
 - 4. Deliberation and discussion

Question ID : 264330161293
Option 1 ID : 264330632500
Option 2 ID : 264330632502
Option 3 ID : 264330632501
Option 4 ID : 264330632499
Status : Not Attempted and Marked For Review
Chosen Option : --

Q.2 Where is the Mahabodhi temple situated?

- Ans** 1. Varanasi
 2. Bodh Gaya
 3. Patna
 4. Agra

Question ID : 264330160762
Option 1 ID : 264330630379
Option 2 ID : 264330630382
Option 3 ID : 264330630381
Option 4 ID : 264330630380
Status : Answered
Chosen Option : 2

Q.3 Which African leader wrote the autobiography ' Long Walk to Freedom'?

- Ans** 1. Robert Mugabe
 2. Nelson Mandela
 3. Muammar Gaddafi
 4. Desmond Tutu

Question ID : 264330160959
Option 1 ID : 264330631169
Option 2 ID : 264330631167
Option 3 ID : 264330631170
Option 4 ID : 264330631168
Status : Answered
Chosen Option : 2

Q.4 In which year was the Training of Rural Youth for Self Employment (TRYSEM) scheme launched by Government of India?

- Ans** 1. 1991
 2. 2000
 3. 1979
 4. 1965

Question ID : 264330161575
Option 1 ID : 264330633628
Option 2 ID : 264330633630
Option 3 ID : 264330633627
Option 4 ID : 264330633629
Status : Not Attempted and Marked For Review
Chosen Option : --

Q.5 Under the Chief Minister Learn and Earn Scheme of Madhya Pradesh, the government will NOT provide which of the following?

- Ans** 1. Financial assistance
 2. Training
 3. Laptops
 4. Employable skills

Question ID : 264330158331
Option 1 ID : 264330620684
Option 2 ID : 264330620686
Option 3 ID : 264330620685
Option 4 ID : 264330620683
Status : Answered
Chosen Option : 1

Q.6 Nored dance historian Dr. Sunil Kothari was awarded Madhabdev Award in 2019 by the Government of Assam for popularising which dance form of the state?

- Ans**
- 1. Bihu
 - 2. Bagurumba
 - 3. Sattriya
 - 4. Ojapali

Question ID : 264330155488
Option 1 ID : 264330609355
Option 2 ID : 264330609358
Option 3 ID : 264330609356
Option 4 ID : 264330609357
Status : **Not Attempted and Marked For Review**
Chosen Option : --

Q.7 What is the usual term used to describe the climate of India?

- Ans**
- 1. Polar climate
 - 2. Tropical monsoon
 - 3. Desert climate
 - 4. Arid climate

Question ID : 264330157825
Option 1 ID : 264330618660
Option 2 ID : 264330618662
Option 3 ID : 264330618659
Option 4 ID : 264330618661
Status : **Answered**
Chosen Option : 2

Q.8 Dandari (Dancing) troupes perform _____ during the festival of Diwali for a fortnight with participation from Kolam and Raj Gond tribes.

- Ans**
- 1. Chhau
 - 2. Baiga Pardhoni
 - 3. Ghusadi
 - 4. Rout Nacha

Question ID : 264330160853
Option 1 ID : 264330630745
Option 2 ID : 264330630746
Option 3 ID : 264330630744
Option 4 ID : 264330630743
Status : **Answered**
Chosen Option : 4

Q.9 How many gold medals did India win at the ISSF Junior World Cup 2023?

- Ans 1. 7
 2. 8
 3. 5
 4. 6

Question ID : 264330161130

Option 1 ID : 264330631852

Option 2 ID : 264330631854

Option 3 ID : 264330631853

Option 4 ID : 264330631851

Status : Not Attempted and
Marked For Review

Chosen Option : --

Q.10 _____ is the first Indian woman to have won a Grammy.

- Ans 1. Tanvi Shah
 2. Shalmali Kholgade
 3. Palak Muchhal
 4. Shilpa Rao

Question ID : 264330155472

Option 1 ID : 264330609293

Option 2 ID : 264330609291

Option 3 ID : 264330609292

Option 4 ID : 264330609294

Status : Answered

Chosen Option : 1

Q.11 Which Indian musician personality's native place is West Bengal?

- Ans 1. Naushad
 2. OP Nayyar
 3. Ilayaraja
 4. Bappi Lahiri

Question ID : 264330162236

Option 1 ID : 264330636273

Option 2 ID : 264330636274

Option 3 ID : 264330636272

Option 4 ID : 264330636271

Status : Answered

Chosen Option : 4

Q.12 According to the Census of India 2011, which State/Union Territory has the lowest sex ratio?

- Ans 1. Punjab
 2. Lakshadweep
 3. Daman and Diu
 4. Haryana

Question ID : 264330160154
Option 1 ID : 264330627955
Option 2 ID : 264330627956
Option 3 ID : 264330627957
Option 4 ID : 264330627958
Status : Answered
Chosen Option : 4

Q.13 Which of the following is an autobiography of the famous cricketer Sourav Ganguly?

- Ans 1. A Shot at History
 2. The Dream of Revolution
 3. A Century is not enough
 4. Memories of My Life and Times

Question ID : 264330162283
Option 1 ID : 264330636459
Option 2 ID : 264330636460
Option 3 ID : 264330636461
Option 4 ID : 264330636462
Status : Answered
Chosen Option : 3

Q.14 Consider the following statement about the Government of India Act, 1935.

1. This act was enacted by the British Parliament.
2. This Act was divided into two separate acts for India and Burma Government.
3. This act was commenced from the 1 April 1935.

Select the correct statement(s) using the code given below.

- Ans 1. Both 1 and 2
 2. 1, 2 and 3
 3. Both 2 and 3
 4. Both 1 and 3

Question ID : 264330160879
Option 1 ID : 264330630847
Option 2 ID : 264330630850
Option 3 ID : 264330630849
Option 4 ID : 264330630848
Status : Not Attempted and Marked For Review
Chosen Option : --

Q.15 Who among the following established a unit of horsepower that is equal to one horse doing 33,000 foot - pounds of work in one minute?

- Ans 1. James Black
 2. James Croll
 3. James Watt
 4. James Dwight Dana

Question ID : 264330161401
Option 1 ID : 264330632932
Option 2 ID : 264330632933
Option 3 ID : 264330632931
Option 4 ID : 264330632934
Status : Answered
Chosen Option : 3

Q.16 In which year was the 42nd Constitutional Amendment Act passed?

- Ans 1. 1978
 2. 1976
 3. 1998
 4. 1986

Question ID : 264330159898
Option 1 ID : 264330626940
Option 2 ID : 264330626939
Option 3 ID : 264330626942
Option 4 ID : 264330626941
Status : Answered
Chosen Option : 2

Q.17 Who among the following leaders led the Revolt of 1857 in Bihar?

- Ans 1. Rajendra Prasad
 2. Devi Singh
 3. Rajkumar Shukla
 4. Kunwar Singh

Question ID : 264330162325
Option 1 ID : 264330636629
Option 2 ID : 264330636627
Option 3 ID : 264330636630
Option 4 ID : 264330636628
Status : Answered
Chosen Option : 4

Q.18 Shri Jagannathji Mela is held at _____.

- Ans 1. Cuttack
 2. Sambalpur
 3. Jaipur
 4. Alwar

Question ID : 264330159087
Option 1 ID : 264330623708
Option 2 ID : 264330623710
Option 3 ID : 264330623709
Option 4 ID : 264330623707
Status : Answered
Chosen Option : 1

Q.19 _____ literally means 'dance of the enchantress'. It is one of the most striking in the Indian classical dance repertoire.

- Ans
- 1. Kuchipudi
 - 2. Mohiniyattam
 - 3. Kathakali
 - 4. Bharatanatyam

Question ID : 264330160789
Option 1 ID : 264330630490
Option 2 ID : 264330630488
Option 3 ID : 264330630487
Option 4 ID : 264330630489
Status : Answered
Chosen Option : 3

Q.20 The important milestones of the SHG Bank linkage movement was spearheaded by _____ with support from RBI.

- Ans
- 1. SEBI
 - 2. Indian Bank
 - 3. NABARD
 - 4. Cooperative Bank

Question ID : 264330161454
Option 1 ID : 264330633144
Option 2 ID : 264330633143
Option 3 ID : 264330633145
Option 4 ID : 264330633146
Status : Not Attempted and Marked For Review
Chosen Option : --

Q.21 Narendra Modi Cricket Stadium is one of the premier stadiums in India located at _____.

- Ans
- 1. Ahmedabad
 - 2. New Delhi
 - 3. Baroda
 - 4. Surat

Question ID : 264330158241
Option 1 ID : 264330620323
Option 2 ID : 264330620324
Option 3 ID : 264330620325
Option 4 ID : 264330620326
Status : Answered
Chosen Option : 1

Q.22 The pre-monsoon showers are known as _____ in Kerala and Karnataka.

- Ans
- 1. tea showers
 - 2. grapes showers
 - 3. banana showers
 - 4. mango showers

Question ID : 264330161515

Option 1 ID : 264330633387

Option 2 ID : 264330633390

Option 3 ID : 264330633389

Option 4 ID : 264330633388

Status : Not Attempted and
Marked For Review

Chosen Option : --

Q.23 Insufficient levels of parathyroid hormone and low amount of calcium in the blood causes which of the following conditions?

- Ans
- 1. Malaria
 - 2. Anaemia
 - 3. Diabetes
 - 4. Hypocalcemia

Question ID : 264330156612

Option 1 ID : 264330613838

Option 2 ID : 264330613836

Option 3 ID : 264330613837

Option 4 ID : 264330613835

Status : Not Attempted and
Marked For Review

Chosen Option : --

Q.24 Team Rest of India won Irani Cup in 2023. Irani Cup was hosted in which state?

- Ans
- 1. Madhya Pradesh
 - 2. West Bengal
 - 3. Bihar
 - 4. Uttar Pradesh

Question ID : 264330158353

Option 1 ID : 264330620772

Option 2 ID : 264330620774

Option 3 ID : 264330620771

Option 4 ID : 264330620773

Status : Answered

Chosen Option : 1

Q.25 What is a dimension related to the sustainability of microfinance institutions in India?

- Ans** 1. Dependency on donor funding
 2. Limited social impact
 3. High-profit margins
 4. Excessive interest rates

Question ID : 264330157294
Option 1 ID : 264330616540
Option 2 ID : 264330616542
Option 3 ID : 264330616539
Option 4 ID : 264330616541
Status : Answered
Chosen Option : 1

Section : English Language and Comprehension

Q.1 The sentence given below contains some spelling errors. Select the option that has the correct spellings.

Members of the association have successfully climbed several peaks of the Himalayan range.

- Ans** 1. Members of the associattion have succesfully climbed several paeks of the Himalayan range.
 2. Meembers of the associatiion have successfully climbed several peaks of the Himalayan range.
 3. Members of the associasion have succesfully climbed several paiks of the Himalayan range.
 4. Members of the association have successfully climbed several peaks of the Himalayan range.

Question ID : 264330153541
Option 1 ID : 264330601667
Option 2 ID : 264330601669
Option 3 ID : 264330601670
Option 4 ID : 264330601668
Status : Answered
Chosen Option : 4

Q.2 Choose the sentence that contains an error.

- Ans** 1. The Mona Lisa is a famous painting by Leonardo da Vinci.
 2. She is the only person who can speak five languages fluently.
 3. He is a doctor who specialises in the treating rare diseases.
 4. I saw the movie that won the Academy Award for Best Picture.

Question ID : 264330155180
Option 1 ID : 264330608179
Option 2 ID : 264330608181
Option 3 ID : 264330608182
Option 4 ID : 264330608180
Status : Answered
Chosen Option : 3

Q.3 The following sentence has been split into four segments. Identify the segment that contains a spelling error.
The conference / attempts to / trace the processes and / consequences of climate change.

- Ans**
- 1. consequences of climate change
 - 2. The conference
 - 3. attempts to
 - 4. trace the processes and

Question ID : 264330155314
Option 1 ID : 264330608698
Option 2 ID : 264330608695
Option 3 ID : 264330608696
Option 4 ID : 264330608697
Status : Answered
Chosen Option : 2

Q.4 Select the word segment which substitutes the bracketed word correctly and completes the sentence meaningfully.
Mathematics (are not) easy to learn.

- Ans**
- 1. were not
 - 2. was not
 - 3. has not
 - 4. is not

Question ID : 264330152567
Option 1 ID : 264330597873
Option 2 ID : 264330597872
Option 3 ID : 264330597874
Option 4 ID : 264330597871
Status : Answered
Chosen Option : 4

Q.5 Select the option that can be used as a one-word substitute for the given group of words.

The action of formally accusing a public official of a serious offence

- Ans**
- 1. Impeachment
 - 2. Condemnation
 - 3. Summon
 - 4. Allegation

Question ID : 264330151870
Option 1 ID : 264330595099
Option 2 ID : 264330595101
Option 3 ID : 264330595100
Option 4 ID : 264330595102
Status : Answered
Chosen Option : 1

Q.6 Select the option that can be used as a one-word substitute for the given group of words.

A number which is used to divide another number

- Ans**
- 1. Divisible
 - 2. Quotient
 - 3. Remainder
 - 4. Divisor

Question ID : 264330153456
Option 1 ID : 264330601341
Option 2 ID : 264330601340
Option 3 ID : 264330601342
Option 4 ID : 264330601339
Status : Answered
Chosen Option : 4

Q.7 Select the most appropriate meaning of the given idiom.

To cut someone some slack

- Ans**
- 1. Avoid talking about problems till the very end
 - 2. To get the conversation going
 - 3. To criticise someone very strictly
 - 4. To not manage someone very strictly or critically

Question ID : 264330153009
Option 1 ID : 264330599608
Option 2 ID : 264330599609
Option 3 ID : 264330599607
Option 4 ID : 264330599610
Status : Answered
Chosen Option : 3

Q.8 Select the most appropriate idiom to fill in the blank.
Our trainer asked for _____ on her for the next informative session.

- Ans**
- 1. chasing rainbows
 - 2. being around the bend
 - 3. all eyes and ears
 - 4. going bananas

Question ID : 264330153561
Option 1 ID : 264330601745
Option 2 ID : 264330601744
Option 3 ID : 264330601743
Option 4 ID : 264330601746
Status : Answered
Chosen Option : 3

Q.9 Select the INCORRECTLY spelt word in the given sentence.
Children below the age of 14 were not allowed to participate in the cooking competition.

- Ans**
- 1. Competition
 - 2. Partisipate
 - 3. Children
 - 4. Allowed

Question ID : 264330153301

Option 1 ID : 264330600762

Option 2 ID : 264330600761

Option 3 ID : 264330600759

Option 4 ID : 264330600760

Status : Answered

Chosen Option : 2

Q.10 The following sentence has been split into four segments. Identify the segment that contains a grammatical error.

After I complete my training program / I will have been joining a team of astronauts / and preparing to / embark on a mission to Mars.

- Ans**
- 1. I will have been joining a team of astronauts
 - 2. embark on a mission to Mars
 - 3. and preparing to
 - 4. After I complete my training program

Question ID : 264330144176

Option 1 ID : 264330564968

Option 2 ID : 264330564970

Option 3 ID : 264330564969

Option 4 ID : 264330564967

Status : Answered

Chosen Option : 3

Q.11 The given sentence contains an error. Select the option that correctly rectifies the error.

Earlier, he was feeling better, but things took a turn for the bad.

- Ans**
- 1. Earlier, he was feeling better, but things took a turn for the worst.
 - 2. Earlier, he was feeling good, but things took a turn for the bad.
 - 3. Earlier, he was feeling well, but things took a turn for the ill.
 - 4. Earlier, he was feeling better, but things took a turn for the ill.

Question ID : 264330152609

Option 1 ID : 264330598040

Option 2 ID : 264330598041

Option 3 ID : 264330598039

Option 4 ID : 264330598042

Status : Answered

Chosen Option : 1

Q.12 Select the most appropriate meaning of the given idiom.

Blessing in disguise

- Ans 1. Something that seems good but is harmful for you
 2. Something that seems bad but provides some benefit
 3. Something that cannot be hidden from anyone
 4. Something that remains hidden from everyone

Question ID : 264330153010
Option 1 ID : 264330599611
Option 2 ID : 264330599612
Option 3 ID : 264330599613
Option 4 ID : 264330599614
Status : Answered
Chosen Option : 2

Q.13 Select the most appropriate ANTONYM of the given word.

Break

- Ans 1. Divide
 2. Mend
 3. Split
 4. Breach

Question ID : 264330153556
Option 1 ID : 264330601725
Option 2 ID : 264330601724
Option 3 ID : 264330601726
Option 4 ID : 264330601723
Status : Answered
Chosen Option : 2

Q.14 Select the option that can be used as a one-word substitute for the given group of words.

A place of burial

- Ans 1. Building
 2. Laboratory
 3. Cemetery
 4. Observatory

Question ID : 264330153360
Option 1 ID : 264330600994
Option 2 ID : 264330600992
Option 3 ID : 264330600991
Option 4 ID : 264330600993
Status : Answered
Chosen Option : 3

Q.15 Select the most appropriate ANTONYM of the given word.
Forthcoming

- Ans** 1. Large
 2. Extensive
 3. Adventurous
 4. Past

Question ID : 264330151912
Option 1 ID : 264330595265
Option 2 ID : 264330595264
Option 3 ID : 264330595266
Option 4 ID : 264330595263
Status : Answered
Chosen Option : 4

Q.16 Parts of the following sentence have been given as options. Select the option that contains an error.

I will celebrating New Year at my old residence as usual.

- Ans** 1. I
 2. will celebrating
 3. New Year
 4. at my old residence as usual.

Question ID : 264330155229
Option 1 ID : 264330608371
Option 2 ID : 264330608372
Option 3 ID : 264330608373
Option 4 ID : 264330608374
Status : Answered
Chosen Option : 2

Q.17 The following sentence has been divided into parts. One of them may contain an error. Select the part that contains the error from the given options. If you don't find any error, mark 'No error' as your answer.
Why don't / you throw this / paper on the dust bin?

- Ans** 1. paper on the dust bin
 2. No error
 3. you throw this
 4. Why don't

Question ID : 264330150527
Option 1 ID : 264330589753
Option 2 ID : 264330589754
Option 3 ID : 264330589752
Option 4 ID : 264330589751
Status : Answered
Chosen Option : 1

Q.18 Select the most appropriate meaning of the given idiom.
Beat around the bush

- Ans**
- 1. To be persistent in pursuing a goal
 - 2. To be impatient and short-tempered
 - 3. To be direct and formal
 - 4. To avoid addressing a topic correctly

Question ID : 264330143943
Option 1 ID : 264330564037
Option 2 ID : 264330564038
Option 3 ID : 264330564035
Option 4 ID : 264330564036
Status : Answered
Chosen Option : 4

Q.19 Select the most appropriate option to fill in the blank.
Her stories paid _____ to her mother, whom she regarded as the goddess of bravery.

- Ans**
- 1. frustration
 - 2. sainthood
 - 3. absoluteness
 - 4. homage

Question ID : 264330153552
Option 1 ID : 264330601707
Option 2 ID : 264330601710
Option 3 ID : 264330601708
Option 4 ID : 264330601709
Status : Answered
Chosen Option : 4

Q.20 Select the most appropriate synonym of the given word.
Amicable

- Ans**
- 1. Friendly
 - 2. Proud
 - 3. Generous
 - 4. Harsh

Question ID : 264330152749
Option 1 ID : 264330598596
Option 2 ID : 264330598597
Option 3 ID : 264330598598
Option 4 ID : 264330598595
Status : Answered
Chosen Option : 1

Comprehension:

In the following passage, some words have been deleted. Read the passage carefully and select the most appropriate option to fill in each blank.

Once, there was a boy who became bored when he watched over the village sheep (1)_____ on the hillside. To entertain himself, he sang out, "Wolf! Wolf! The wolf is chasing the sheep!" When the villagers heard the cry, they came (2)_____ the hill to drive the wolf away. But, when they arrived, they saw no wolf. The boy was amused when seeing their angry faces. "Don't scream wolf, boy," warned the villagers, "when there is no wolf!" They angrily went back down the hill. Later, the shepherd boy cried out once again, "Wolf! Wolf! The wolf is chasing the sheep!" When the villagers came, they saw there was no wolf, they said strictly, "Save your (3)_____ cry for when there is really a wolf! Don't cry 'wolf' when there is no wolf!" Later, the boy saw a real wolf sneaking around his flock. Alarmed, he jumped on his feet and cried out as loud as he could, "Wolf! Wolf!" But the villagers thought he was (4)_____ them again, and so they didn't come to help. At sunset, the villagers went looking for the boy who hadn't returned with their sheep. When they went up the hill, they found him (5)_____ as all the sheep were dead.

SubQuestion No : 21

Q.21 Select the most appropriate option to fill in blank number 1.

- Ans 1. laughing
 2. receiving
 3. assisting
 4. grazing

Question ID : 264330153531

Option 1 ID : 264330601627

Option 2 ID : 264330601630

Option 3 ID : 264330601628

Option 4 ID : 264330601629

Status : Answered

Chosen Option : 4

Comprehension:

In the following passage, some words have been deleted. Read the passage carefully and select the most appropriate option to fill in each blank.

Once, there was a boy who became bored when he watched over the village sheep (1)_____ on the hillside. To entertain himself, he sang out, "Wolf! Wolf! The wolf is chasing the sheep!" When the villagers heard the cry, they came (2)_____ the hill to drive the wolf away. But, when they arrived, they saw no wolf. The boy was amused when seeing their angry faces. "Don't scream wolf, boy," warned the villagers, "when there is no wolf!" They angrily went back down the hill. Later, the shepherd boy cried out once again, "Wolf! Wolf! The wolf is chasing the sheep!" When the villagers came, they saw there was no wolf, they said strictly, "Save your (3)_____ cry for when there is really a wolf! Don't cry 'wolf' when there is no wolf!" Later, the boy saw a real wolf sneaking around his flock. Alarmed, he jumped on his feet and cried out as loud as he could, "Wolf! Wolf!" But the villagers thought he was (4)_____ them again, and so they didn't come to help. At sunset, the villagers went looking for the boy who hadn't returned with their sheep. When they went up the hill, they found him (5)_____ as all the sheep were dead.

SubQuestion No : 22

Q.22 Select the most appropriate option to fill in blank number 2.

- Ans 1. driving
 2. walking down
 3. running down
 4. running up

Question ID : 264330153532

Option 1 ID : 264330601632

Option 2 ID : 264330601633

Option 3 ID : 264330601634

Option 4 ID : 264330601631

Status : Answered

Chosen Option : 4

Comprehension:

In the following passage, some words have been deleted. Read the passage carefully and select the most appropriate option to fill in each blank.

Once, there was a boy who became bored when he watched over the village sheep (1)_____ on the hillside. To entertain himself, he sang out, "Wolf! Wolf! The wolf is chasing the sheep!" When the villagers heard the cry, they came (2)_____ the hill to drive the wolf away. But, when they arrived, they saw no wolf. The boy was amused when seeing their angry faces. "Don't scream wolf, boy," warned the villagers, "when there is no wolf!" They angrily went back down the hill. Later, the shepherd boy cried out once again, "Wolf! Wolf! The wolf is chasing the sheep!" When the villagers came, they saw there was no wolf, they said strictly, "Save your (3)_____ cry for when there is really a wolf! Don't cry 'wolf' when there is no wolf!" Later, the boy saw a real wolf sneaking around his flock. Alarmed, he jumped on his feet and cried out as loud as he could, "Wolf! Wolf!" But the villagers thought he was (4)_____ them again, and so they didn't come to help. At sunset, the villagers went looking for the boy who hadn't returned with their sheep. When they went up the hill, they found him (5)_____ as all the sheep were dead.

SubQuestion No : 23

Q.23 Select the most appropriate option to fill in blank number 3.

- Ans** 1. frightened
 2. laughable
 3. funny
 4. muffled

Question ID : 264330153533

Option 1 ID : 264330601636

Option 2 ID : 264330601637

Option 3 ID : 264330601635

Option 4 ID : 264330601638

Status : Answered

Chosen Option : 1

Comprehension:

In the following passage, some words have been deleted. Read the passage carefully and select the most appropriate option to fill in each blank.

Once, there was a boy who became bored when he watched over the village sheep (1)_____ on the hillside. To entertain himself, he sang out, "Wolf! Wolf! The wolf is chasing the sheep!" When the villagers heard the cry, they came (2)_____ the hill to drive the wolf away. But, when they arrived, they saw no wolf. The boy was amused when seeing their angry faces. "Don't scream wolf, boy," warned the villagers, "when there is no wolf!" They angrily went back down the hill. Later, the shepherd boy cried out once again, "Wolf! Wolf! The wolf is chasing the sheep!" When the villagers came, they saw there was no wolf, they said strictly, "Save your (3)_____ cry for when there is really a wolf! Don't cry 'wolf' when there is no wolf!" Later, the boy saw a real wolf sneaking around his flock. Alarmed, he jumped on his feet and cried out as loud as he could, "Wolf! Wolf!" But the villagers thought he was (4)_____ them again, and so they didn't come to help. At sunset, the villagers went looking for the boy who hadn't returned with their sheep. When they went up the hill, they found him (5)_____ as all the sheep were dead.

SubQuestion No : 24

Q.24 Select the most appropriate option to fill in blank number 4.

- Ans** 1. fooling
 2. questioning
 3. fighting
 4. seeing

Question ID : 264330153534

Option 1 ID : 264330601642

Option 2 ID : 264330601640

Option 3 ID : 264330601639

Option 4 ID : 264330601641

Status : Answered

Chosen Option : 1

Comprehension:

In the following passage, some words have been deleted. Read the passage carefully and select the most appropriate option to fill in each blank.

Once, there was a boy who became bored when he watched over the village sheep (1)_____ on the hillside. To entertain himself, he sang out, "Wolf! Wolf! The wolf is chasing the sheep!" When the villagers heard the cry, they came (2)_____ the hill to drive the wolf away. But, when they arrived, they saw no wolf. The boy was amused when seeing their angry faces. "Don't scream wolf, boy," warned the villagers, "when there is no wolf!" They angrily went back down the hill. Later, the shepherd boy cried out once again, "Wolf! Wolf! The wolf is chasing the sheep!" When the villagers came, they saw there was no wolf, they said strictly, "Save your (3)_____ cry for when there is really a wolf! Don't cry 'wolf' when there is no wolf!" Later, the boy saw a real wolf sneaking around his flock. Alarmed, he jumped on his feet and cried out as loud as he could, "Wolf! Wolf!" But the villagers thought he was (4)_____ them again, and so they didn't come to help. At sunset, the villagers went looking for the boy who hadn't returned with their sheep. When they went up the hill, they found him (5)_____ as all the sheep were dead.

SubQuestion No : 25

Q.25 Select the most appropriate option to fill in blank number 5.

- Ans** 1. singing
 2. happy
 3. dancing
 4. weeping

Question ID : 264330153535

Option 1 ID : 264330601644

Option 2 ID : 264330601646

Option 3 ID : 264330601645

Option 4 ID : 264330601643

Status : Answered

Chosen Option : 4