

SSC MTS 2023 Tier 1 Sept 5 Shift 2 Question Paper with Answers

Roll Number	
Candidate Name	
Exam Date	05/09/2023
Exam Time	12:30 PM - 2:30 PM
Subject	MTS Non Tech Havaldar CBIC and CBN Examination 2023

Section : Numerical and Mathematical Ability

Q.1 A right circular cone is 9.8 cm high with the radius of its base 4 cm. It is melted and recast into a right circular cone with the radius of its base 3.5 cm. Find its height (use $\pi = \frac{22}{7}$).

- Ans**
- 1. 21.8 cm
 - 2. 28.1 cm
 - 3. 12.8 cm
 - 4. 18.2 cm

Question ID : 264330156293
Option 1 ID : 264330612574
Option 2 ID : 264330612573
Option 3 ID : 264330612572
Option 4 ID : 264330612571
Status : Answered
Chosen Option : 3

Q.2 Profit of ₹29,120 is divided among A, B and C so that A's share is $2\frac{1}{2}$ times B's and B's share is $1\frac{1}{5}$ times C. Find B's share.

- Ans**
- 1. ₹6,940
 - 2. ₹7,820
 - 3. ₹6,720
 - 4. ₹7,140

Question ID : 264330156268
Option 1 ID : 264330612472
Option 2 ID : 264330612474
Option 3 ID : 264330612471
Option 4 ID : 264330612473
Status : Answered
Chosen Option : 3

Q.3 Tushar, Megha, Punam and Richa can complete a piece of work in 10 days, 12 days, 15 days and 18 days, respectively. In how many days will the work be completed if each of them work on alternate days starting with Megha on first day, Punam on second day, Richa on third day, Tushar on fourth day and then again Megha on fifth day and so on.

- Ans**
- 1. 12
 - 2. 13
 - 3. 10
 - 4. 14

Question ID : 264330156195
Option 1 ID : 264330612180
Option 2 ID : 264330612182
Option 3 ID : 264330612179
Option 4 ID : 264330612181
Status : Answered
Chosen Option : 2

Q.4 The table below represents marks obtained by four students A, B, C, and D in four subjects in an examination. The maximum marks for each subject are 100.

Student	English	Hindi	Math	Science
A	90	89	100	93
B	85	86	88	95
C	94	92	96	89
D	87	90	97	82

The average marks of Math and Hindi taken together of the four students is what per cent more/less (rounded off to 1 decimal place) than the average marks of English and Science taken together?

- Ans**
- 1. More, 3.2%
 - 2. More, 2.4%
 - 3. Less, 2.4%
 - 4. Less, 3.2%

Question ID : 264330153779
Option 1 ID : 264330602579
Option 2 ID : 264330602581
Option 3 ID : 264330602582
Option 4 ID : 264330602580
Status : Answered
Chosen Option : 1

Q.5 The average age of a family of three members (mother, father and Son) is 44 years. After the son's marriage, the average age of the family becomes 39 years. What is the age of the daughter-in-law?

- Ans**
- 1. 24 years
 - 2. 25 years
 - 3. 23 years
 - 4. 22 years

Question ID : 264330154116
Option 1 ID : 264330603928
Option 2 ID : 264330603927
Option 3 ID : 264330603929
Option 4 ID : 264330603930
Status : Answered
Chosen Option : 1

Q.6 Using the middle points of sides of a square with an area of 36 square units, another square is made. What is the area of a new square made in square units?

- Ans**
- 1. 24
 - 2. 27
 - 3. 18
 - 4. 21

Question ID : 264330153824
Option 1 ID : 264330602761
Option 2 ID : 264330602760
Option 3 ID : 264330602759
Option 4 ID : 264330602762
Status : Answered
Chosen Option : 3

Q.7 Find the amount of ₹75,000 for one year at the rate of 16% per annum, if the interest is compounded quarterly. (rounded off to two decimal places)

- Ans**
- 1. ₹87,379.40
 - 2. ₹89,773.40
 - 3. ₹87,937.40
 - 4. ₹87,739.40

Question ID : 264330156364
Option 1 ID : 264330612857
Option 2 ID : 264330612858
Option 3 ID : 264330612856
Option 4 ID : 264330612855
Status : Answered
Chosen Option : 4

Q.8 How much simple interest will ₹6,000 earn in 15 months at the rate of 12% per annum?

- Ans**
- 1. ₹900
 - 2. ₹600
 - 3. ₹750
 - 4. ₹800

Question ID : 264330155965
Option 1 ID : 264330611262
Option 2 ID : 264330611260
Option 3 ID : 264330611259
Option 4 ID : 264330611261
Status : Answered
Chosen Option : 1

Q.9 Nikita made two investments; she earns 10% on one investment and lost 20% on the second investment. If the investments were in the ratio 2 : 3, then she got a:

- Ans**
- 1. loss of 8%
 - 2. profit of 15%
 - 3. profit of 8%
 - 4. loss of 15%

Question ID : 264330154046
Option 1 ID : 264330603650
Option 2 ID : 264330603647
Option 3 ID : 264330603649
Option 4 ID : 264330603648
Status : Answered
Chosen Option : 1

Q.10 Simplify the given expression.

$$2 \div [2 + 2 \div \{2 + 2 \div (2 + 2 \div 3)\}]$$

- Ans**
- 1. $\frac{11}{15}$
 - 2. $\frac{19}{15}$
 - 3. $\frac{17}{15}$
 - 4. $\frac{13}{15}$

Question ID : 264330156068
Option 1 ID : 264330611673
Option 2 ID : 264330611674
Option 3 ID : 264330611672
Option 4 ID : 264330611671
Status : Answered
Chosen Option : 1

Q.11 Reena, Ritu and Sita can independently complete a piece of work in 6 hours, 9 hours and 18 hours, respectively. If they work together, then how much time (in hours) will they take to complete that piece of work?

- Ans**
- 1. 3
 - 2. 5
 - 3. 4
 - 4. 2

Question ID : 264330156237
Option 1 ID : 264330612348
Option 2 ID : 264330612350
Option 3 ID : 264330612349
Option 4 ID : 264330612347
Status : Answered
Chosen Option : 1

Q.12 The mean proportion of a and $\frac{a}{b^2}$ is _____.

Ans 1. ab

2. $\frac{b}{a}$

3. $\frac{a}{b}$

4. $\frac{a}{2b}$

Question ID : 264330153808

Option 1 ID : 264330602698

Option 2 ID : 264330602697

Option 3 ID : 264330602695

Option 4 ID : 264330602696

Status : Answered

Chosen Option : 3

Q.13 A school has two sections of a class. Section A has 30 students and Section B has 20 students. The average score of the students in Section A is 85, and the average score of the students in Section B is 70. What is the overall average score of the class?

Ans 1. 81

2. 80

3. 79

4. 78

Question ID : 264330156254

Option 1 ID : 264330612415

Option 2 ID : 264330612416

Option 3 ID : 264330612417

Option 4 ID : 264330612418

Status : Answered

Chosen Option : 3

Q.14 The HCF of three numbers is 57. If they are in the ratio of 4 : 5 : 6, then find the numbers.

Ans 1. 228, 285, 342

2. 236, 295, 354

3. 240, 300, 360

4. 232, 290, 348

Question ID : 264330155722

Option 1 ID : 264330610293

Option 2 ID : 264330610291

Option 3 ID : 264330610294

Option 4 ID : 264330610292

Status : Answered

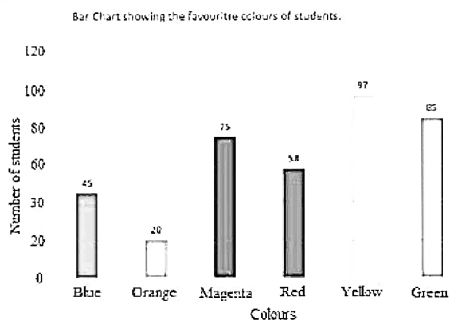
Chosen Option : 1

Q.15 The strength of a school increases and decreases every alternate year by 20%. It started with an increase in the year 2015 and the initial strength was 3000. Find the strength of the school in the year 2017 and also the percentage of increase in strength, respectively.

- Ans**
- 1. 3456, 15.2%
 - 2. 4456, 14.2%
 - 3. 4556, 17.2%
 - 4. 3556, 16.2%

Question ID : 264330155996
Option 1 ID : 264330611385
Option 2 ID : 264330611383
Option 3 ID : 264330611386
Option 4 ID : 264330611384
Status : Answered
Chosen Option : 1

Q.16 The Bar Chart below shows the favourite colours of 380 students in a class. Study the bar chart and answer the question based on it.



The total number of students whose favourite colours are blue, magenta, red and yellow is what per cent (rounded off to the nearest integer) of the total number of students in the class?

- Ans**
- 1. 77%
 - 2. 69%
 - 3. 64%
 - 4. 72%

Question ID : 264330153782
Option 1 ID : 264330602593
Option 2 ID : 264330602592
Option 3 ID : 264330602591
Option 4 ID : 264330602594
Status : Answered
Chosen Option : 4

Q.17 The total journey is of 800 km. A car travels the first 320 km of the journey at the speed of 64 km/hr. What should be the speed of the next 480 km so that average speed will become 80 km/hr?

- Ans**
- 1. 96 km/hr
 - 2. 69 km/hr
 - 3. 86 km/hr
 - 4. 89 km/hr

Question ID : 264330156550
Option 1 ID : 264330613590
Option 2 ID : 264330613587
Option 3 ID : 264330613588
Option 4 ID : 264330613589
Status : Answered
Chosen Option : 1

Q.18 एक आदमी साइकिल से एक स्थान तक जाने और वहां से स्कूटर से वापस आने में 8 घंटे 30 मिनट का समय लेता है। यदि वह दोनों ओर की यात्रा साइकिल से करता है, तो उसे 10 घंटे लगते हैं। उसे स्कूटर से दोनों ओर की यात्रा करने में कितना समय लगेगा (घंटों में)?

- Ans**
- 1. $4\frac{1}{2}$
 - 2. 7
 - 3. $3\frac{1}{2}$
 - 4. 4

Question ID : 264330156007
Option 1 ID : 264330611427
Option 2 ID : 264330611430
Option 3 ID : 264330611428
Option 4 ID : 264330611429
Status : Answered
Chosen Option : 3

Q.19 Divya bought six candies for a rupee. How many candies for a rupee must she sell to gain 50%?

- Ans**
- 1. Four
 - 2. Three
 - 3. One
 - 4. Two

Question ID : 264330155704
Option 1 ID : 264330610222
Option 2 ID : 264330610221
Option 3 ID : 264330610219
Option 4 ID : 264330610220
Status : Answered
Chosen Option : 2

Q.20 एक सिपाही एक चोर को 185 m की दूरी से देखता है। चोर भागने लगता है और सिपाही उसका पीछा करता है। चोर और सिपाही क्रमशः 8 m/s और 9 m/s की चाल से दौड़ते हैं। 2 मिनट बाद उनके बीच की दूरी कितनी है?

- Ans**
- 1. 65 m
 - 2. 92 m
 - 3. 120 m
 - 4. 130 m

Question ID : 264330153882
Option 1 ID : 264330602991
Option 2 ID : 264330602993
Option 3 ID : 264330602992
Option 4 ID : 264330602994
Status : Answered
Chosen Option : 3

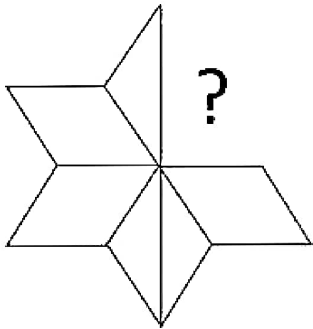
Q.1 What should come in place of ? in the given series based on the English alphabetical order?

SDJ, UGL, WJN, YMP, ?

- Ans
- 1. CPS
 - 2. BQS
 - 3. APR
 - 4. BOR

Question ID : 264330155779
Option 1 ID : 264330610522
Option 2 ID : 264330610520
Option 3 ID : 264330610519
Option 4 ID : 264330610521
Status : Answered
Chosen Option : 3

Q.2 Identify the figure that completes the pattern (rotation is NOT allowed).



Ans

- 1.
- 2.
- 3.
- 4.

Question ID : 264330154518
Option 1 ID : 264330605537
Option 2 ID : 264330605538
Option 3 ID : 264330605536
Option 4 ID : 264330605535
Status : Answered
Chosen Option : 1

Q.3 JR 11 is related to KT 16 in a certain way. In the same way, VM 22 is related to WO 27. To which of the following is DS 18 related to following the same logic?

- Ans**
- 1. CQ 24
 - 2. EU 23
 - 3. FU 23
 - 4. FT 22

Question ID : 264330151678

Option 1 ID : 264330594342

Option 2 ID : 264330594340

Option 3 ID : 264330594339

Option 4 ID : 264330594341

Status : Answered

Chosen Option : 3

Q.4 Read the given statements and conclusions carefully. You have to take the given statements to be true even if they seem to be at variance from commonly known facts. You have to decide which conclusion/s logically follow/s from the given statements.

Statements: Some walls are stone. All stones are diamonds. All diamonds are bricks.

Conclusion I: Some stones are walls.

Conclusion II: Some stones are bricks.

- Ans**
- 1. Neither conclusion (I) nor (II) is follow.
 - 2. Both conclusions (I) and (II) are follow.
 - 3. Only conclusion (II) is follow.
 - 4. Only conclusion (I) is follow.

Question ID : 264330155932

Option 1 ID : 264330611133

Option 2 ID : 264330611134

Option 3 ID : 264330611132

Option 4 ID : 264330611131

Status : Answered

Chosen Option : 4

Q.5 Manu, Ram, Gaurav, Shivam, Umesh and Veer are sitting around a circular table facing the centre. Manu is sitting 2nd to the left of Ram. Gaurav is sitting 3rd to the right of Ram. Shivam is sitting 3rd to the left of Manu. Umesh is sitting 2nd to the left of Shivam. Who is sitting 2nd to the left of Manu?

- Ans**
- 1. Gaurav
 - 2. Ram
 - 3. Veer
 - 4. Umesh

Question ID : 264330155647

Option 1 ID : 264330609991

Option 2 ID : 264330609994

Option 3 ID : 264330609992

Option 4 ID : 264330609993

Status : Not Answered

Chosen Option : --

Q.6 What should come in place of ? in the given series?

31 32 35 36 39 ?

- Ans
- 1. 41
 - 2. 42
 - 3. 43
 - 4. 40

Question ID : 264330151547
Option 1 ID : 264330593816
Option 2 ID : 264330593817
Option 3 ID : 264330593818
Option 4 ID : 264330593815
Status : Answered
Chosen Option : 4

Q.7 What should come in place of '?' in the given series?

7 30 122 490 1962 ?

- Ans
- 1. 7760
 - 2. 7850
 - 3. 7872
 - 4. 7896

Question ID : 264330151494
Option 1 ID : 264330593603
Option 2 ID : 264330593604
Option 3 ID : 264330593605
Option 4 ID : 264330593606
Status : Answered
Chosen Option : 2

Q.8 What should come in place of ? in the given series based on the English alphabetical order?

FVZ, GXA, HZB, IBC, ?

- Ans
- 1. IED
 - 2. JDD
 - 3. IEF
 - 4. KDF

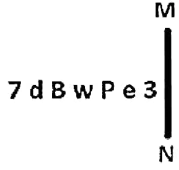
Question ID : 264330155767
Option 1 ID : 264330610472
Option 2 ID : 264330610471
Option 3 ID : 264330610473
Option 4 ID : 264330610474
Status : Answered
Chosen Option : 2

Q.9 In a certain code language, 'ETHOS' is coded as '15' and 'CHEERFUL' is coded as '24'. What is the code for 'CHIMNEY' in the given code language?

- Ans
- 1. 18
 - 2. 21
 - 3. 19
 - 4. 23

Question ID : 264330155821
Option 1 ID : 264330610690
Option 2 ID : 264330610689
Option 3 ID : 264330610688
Option 4 ID : 264330610687
Status : Answered
Chosen Option : 2

Q.10 Select the correct mirror image of the given figure when the mirror is placed at MN as shown below.



- Ans
- 1. 3 e P w B b 7
 - 2. 3 e P w B b 7
 - 3. 3 e P w B b 7
 - 4. 3 e P w B b 7

Question ID : 264330151519
Option 1 ID : 264330593704
Option 2 ID : 264330593703
Option 3 ID : 264330593705
Option 4 ID : 264330593706
Status : Answered
Chosen Option : 3

Q.11 यदि '+' और '-' को आपस में बदल दिया जाए तथा 'x' और '÷' को आपस में बदल दिया जाए तो निम्नलिखित समीकरण में (?) के स्थान पर क्या आएगा?

$$52 \div 6 + 71 - 168 \times 8 = ?$$

- Ans
- 1. 310
 - 2. 313
 - 3. 262
 - 4. 211

Question ID : 264330154619
Option 1 ID : 264330605939
Option 2 ID : 264330605942
Option 3 ID : 264330605941
Option 4 ID : 264330605940
Status : Answered
Chosen Option : 3

Q.12 In the following number-pairs, the second number is obtained by applying certain mathematical operations to the first number. Select the set in which the numbers are related in the same way as are the numbers of the following sets.
 (NOTE : Operations should be performed on the whole numbers, without breaking down the numbers into its constituent digits. E.g. 13 – Operations on 13 such as adding /deleting /multiplying etc. to 13 can be performed. Breaking down 13 into 1 and 3 and then performing mathematical operations on 1 and 3 is not allowed)
 12 : 144
 13 : 169

- Ans**
- 1. 9 : 80
 - 2. 10 : 90
 - 3. 15 : 225
 - 4. 14 : 182

Question ID : 264330154647
 Option 1 ID : 264330606054
 Option 2 ID : 264330606051
 Option 3 ID : 264330606053
 Option 4 ID : 264330606052
 Status : Answered
 Chosen Option : 3

Q.13 Which figure should replace the question mark (?) if the following figure series were to be continued?

B R A I D	R B D A I	I A S B R	A I R S B	?
-----------	-----------	-----------	-----------	---

- Ans**
- 1. I R T S A
 - 2. B S T I A
 - 3. B A I R S
 - 4. S B T A I

Question ID : 264330154767
 Option 1 ID : 264330606534
 Option 2 ID : 264330606531
 Option 3 ID : 264330606532
 Option 4 ID : 264330606533
 Status : Answered
 Chosen Option : 3

Q.14 What should come in place of '?' in the given series?

16 31 76 ? 616 1831 5476

- Ans
- 1. 217
 - 2. 201
 - 3. 207
 - 4. 211

Question ID : 264330151446
Option 1 ID : 264330593414
Option 2 ID : 264330593411
Option 3 ID : 264330593412
Option 4 ID : 264330593413
Status : Answered
Chosen Option : 1

Q.15 In a certain code language, 'make your life' is coded as 'uk ox zr' and 'life is good' is coded as 'qr uk va'. How is 'life' coded in the given language?

- Ans
- 1. zt
 - 2. ox
 - 3. uk
 - 4. qr

Question ID : 264330151692
Option 1 ID : 264330594395
Option 2 ID : 264330594398
Option 3 ID : 264330594397
Option 4 ID : 264330594396
Status : Answered
Chosen Option : 3

Q.16 Select the combination of letters that when sequentially placed in the blanks of the given series will make it logically complete.

F_HIFKO_ _RVTFY_IF_JT

- Ans
- 1. UJHNH
 - 2. DHJNF
 - 3. JFJMH
 - 4. DTFCF

Question ID : 264330156320
Option 1 ID : 264330612682
Option 2 ID : 264330612681
Option 3 ID : 264330612679
Option 4 ID : 264330612680
Status : Answered
Chosen Option : 4

Q.17 If G means \rightarrow ; C means \times ; D means $+$; E means \div , then what will come in place of the question mark (?) in the following equation?

$$64 \text{ D } 4 \text{ G } 37 \text{ E } 12 \text{ C } 7 = ?$$

- Ans**
- 1. 71
 - 2. 63
 - 3. 36
 - 4. 89

Question ID : 264330154691
Option 1 ID : 264330606229
Option 2 ID : 264330606228
Option 3 ID : 264330606227
Option 4 ID : 264330606230
Status : Answered
Chosen Option : 2

Q.18 5 is related to 19 following a certain logic. Following the same logic, 8 is related to 31. To which of the following is 13 related to, following the same logic?

- Ans**
- 1. 51
 - 2. 52
 - 3. 53
 - 4. 50

Question ID : 264330151605
Option 1 ID : 264330594048
Option 2 ID : 264330594049
Option 3 ID : 264330594050
Option 4 ID : 264330594047
Status : Answered
Chosen Option : 1

Q.19 If 3 May 2010 is a Monday, then what will be the day of the week on 16 December 2014?

- Ans**
- 1. Tuesday
 - 2. Saturday
 - 3. Friday
 - 4. Sunday

Question ID : 264330154352
Option 1 ID : 264330604874
Option 2 ID : 264330604871
Option 3 ID : 264330604872
Option 4 ID : 264330604873
Status : Answered
Chosen Option : 3

Q.20 Read the given statement(s) and conclusions carefully. Assuming that the information given in the statements is true, even if it appears to be at variance with commonly known facts, decide which of the given conclusions logically follow(s) from the statement(s).

Statements: All orchids are flowers. Some orchids are beautiful.

Conclusions:

(I) Some flowers are beautiful.

(II) All beautiful are flowers.

- Ans**
- 1. Only conclusion (II) is follows.
 - 2. Both conclusions (I) and (II) are follows.
 - 3. Neither conclusion (I) nor (II) is follows.
 - 4. Only conclusion (I) is follows.

Question ID : 264330154434

Option 1 ID : 264330605200

Option 2 ID : 264330605202

Option 3 ID : 264330605201

Option 4 ID : 264330605199

Status : Answered

Chosen Option : 4

Section : General Awareness

Q.1 दूध, समुद्री भोजन, मेवे और साबुत अनाज में कौन-सा खनिज उच्च मात्रा में होता है जो हड्डियों के स्वास्थ्य और हमारे शरीर की मरम्मत प्रक्रिया में सहायता करता है?

- Ans**
- 1. फ्लोराइड
 - 2. पोटैशियम
 - 3. फॉस्फोरस
 - 4. जिंक

Question ID : 264330161074

Option 1 ID : 264330631630

Option 2 ID : 264330631629

Option 3 ID : 264330631628

Option 4 ID : 264330631627

Status : Answered

Chosen Option : 2

Q.2 पूंजीगत व्यय क्या है?

- Ans**
- 1. हेल्थकेयर कार्यक्रमों पर व्यय की गई धनराशि
 - 2. ऋण चुकाने पर व्यय की गई धनराशि
 - 3. किसानों के लिए सब्सिडी पर व्यय की गई धनराशि
 - 4. अवसंरचना (infrastructure) के विकास पर व्यय की गई धनराशि

Question ID : 264330157274

Option 1 ID : 264330616460

Option 2 ID : 264330616459

Option 3 ID : 264330616462

Option 4 ID : 264330616461

Status : Answered

Chosen Option : 4

Q.3 Which physiographic division of India from the following is formed of alluvial soil?

- Ans
- 1. The Peninsular Plateau
 - 2. The Himalayan Mountains
 - 3. The Islands
 - 4. The Northern Plains

Question ID : 264330161531

Option 1 ID : 264330633452

Option 2 ID : 264330633454

Option 3 ID : 264330633453

Option 4 ID : 264330633451

Status : Answered

Chosen Option : 2

Q.4 ऑस्कर पुरस्कार (2023) विजेता गीत 'नाटू नाटू' के संगीत निर्देशक कौन हैं?

- Ans
- 1. उत्तम सिंह
 - 2. ए.आर. रहमान
 - 3. एम.एम. कीरावनी
 - 4. अनु मलिक

Question ID : 264330155504

Option 1 ID : 264330609419

Option 2 ID : 264330609421

Option 3 ID : 264330609422

Option 4 ID : 264330609420

Status : Answered

Chosen Option : 3

Q.5 Laterite soil develops as a result of which of the following reasons?

- Ans
- 1. Compaction
 - 2. Leaching
 - 3. High temperature only
 - 4. Sedimentation

Question ID : 264330161315

Option 1 ID : 264330632589

Option 2 ID : 264330632588

Option 3 ID : 264330632590

Option 4 ID : 264330632587

Status : Answered

Chosen Option : 2

Q.6 भीतरगांव ईंट मंदिर (Bhitargaon Brick temple) निम्नलिखित में से किस काल की वास्तुकला का एक अच्छा उदाहरण है?

- Ans
- 1. मुगल काल
 - 2. गुप्त काल
 - 3. मौर्य काल
 - 4. चोल काल

Question ID : 264330160782
Option 1 ID : 264330630461
Option 2 ID : 264330630460
Option 3 ID : 264330630459
Option 4 ID : 264330630462
Status : Answered
Chosen Option : 2

Q.7 खेरो इंडिया यूनिवर्सिटी गेम्स के तीसरे संस्करण के शुभंकर का नाम क्या है?

- Ans
- 1. शेरा (Shera)
 - 2. सावज (Savaj)
 - 3. जीतू (Jitu)
 - 4. मोगा (Moga)

Question ID : 264330161133
Option 1 ID : 264330631864
Option 2 ID : 264330631866
Option 3 ID : 264330631863
Option 4 ID : 264330631865
Status : Answered
Chosen Option : 3

Q.8 ऑटोबायोग्राफी ऑफ ए योगी (Autobiography of a Yogi)' _____ की आत्मकथा है।

- Ans
- 1. स्वामी दयानंद सरस्वती
 - 2. परमहंस योगानंद
 - 3. रामकृष्ण परमहंस
 - 4. स्वामी विवेकानंद

Question ID : 264330160961
Option 1 ID : 264330631176
Option 2 ID : 264330631177
Option 3 ID : 264330631178
Option 4 ID : 264330631175
Status : Answered
Chosen Option : 2

Q.9 झारखंड का पाइका नृत्य (Paika dance) आमतौर पर _____ जनजाति द्वारा विशेष सम्मानित अतिथियों के स्वागत के लिए या धार्मिक जुलूस (शोभा यात्रा) के दौरान किया जाता है।

- Ans
- 1. संथाल (Santhal)
 - 2. मुंडा (Munda)
 - 3. ओरांव (Oraon)
 - 4. भूमिज (Bhumij)

Question ID : 264330160799
Option 1 ID : 264330630527
Option 2 ID : 264330630529
Option 3 ID : 264330630530
Option 4 ID : 264330630528
Status : Answered
Chosen Option : 1

Q.10 'My Country My Life' is an autobiography of _____.

- Ans
- 1. Jaswant Singh
 - 2. Amit Shah
 - 3. LK Advani
 - 4. Rajnath Singh

Question ID : 264330155492
Option 1 ID : 264330609373
Option 2 ID : 264330609371
Option 3 ID : 264330609374
Option 4 ID : 264330609372
Status : Answered
Chosen Option : 1

Q.11 As per the Census of India 2011, which state recorded a negative population growth rate?

- Ans
- 1. Sikkim
 - 2. Kerala
 - 3. Arunachal Pradesh
 - 4. Nagaland

Question ID : 264330161552
Option 1 ID : 264330633537
Option 2 ID : 264330633535
Option 3 ID : 264330633536
Option 4 ID : 264330633538
Status : Answered
Chosen Option : 4

Q.12 In March 2023, Rajasthan became the first state in India to provide right to ___ for its people.

- Ans
- 1. accommodation
 - 2. education
 - 3. telecommunication
 - 4. health

Question ID : 264330158335
Option 1 ID : 264330620700
Option 2 ID : 264330620699
Option 3 ID : 264330620702
Option 4 ID : 264330620701
Status : Answered
Chosen Option : 3

Q.13 सुभाष चंद्र बोस के राजनीतिक गुरु कौन थे?

- Ans
- 1. एम. जी. रानाडे
 - 2. महात्मा गांधी
 - 3. जवाहर लाल नेहरू
 - 4. चितरंजन दास

Question ID : 264330162344
Option 1 ID : 264330636705
Option 2 ID : 264330636703
Option 3 ID : 264330636704
Option 4 ID : 264330636706
Status : Answered
Chosen Option : 4

Q.14 शास्त्रीय नृत्य के राष्ट्रीय पुरस्कार को _____ कहा जाता है।

- Ans
- 1. जातीय नृत्य सम्मान
 - 2. भारतीय पुरस्कार
 - 3. अभिनंदन सरोजा पुरस्कार
 - 4. शास्त्रीय सम्मान

Question ID : 264330160983
Option 1 ID : 264330631264
Option 2 ID : 264330631266
Option 3 ID : 264330631265
Option 4 ID : 264330631263
Status : Answered
Chosen Option : 3

Q.15 Which state has the maximum number of Jute mills (as of 2022)?

- Ans
- 1. Tripura
 - 2. Uttar Pradesh
 - 3. Assam
 - 4. West Bengal

Question ID : 264330161491
Option 1 ID : 264330633294
Option 2 ID : 264330633291
Option 3 ID : 264330633293
Option 4 ID : 264330633292
Status : Answered
Chosen Option : 4

Q.16 अर्थव्यवस्था में व्यावसायिक बैंकों (commercial banks) की मुख्य भूमिका क्या है?

- Ans
- 1. आर्थिक वृद्धि और विकास को बढ़ावा देना
 - 2. शेयर बाज़ार को विनियमित करना
 - 3. महंगाई पर नियंत्रण
 - 4. विदेशी मुद्रा भंडार का प्रबंधन

Question ID : 264330157307
Option 1 ID : 264330616593
Option 2 ID : 264330616592
Option 3 ID : 264330616591
Option 4 ID : 264330616594
Status : Answered
Chosen Option : 1

Q.17 गौर मारिया (Gaur Maria), _____ राज्य की एक नृत्य शैली, आनंद और आह्वान का एक प्रसिद्ध कला शैली है। यह एक समूह नृत्य है और इस नृत्य में पुरुष और महिलाएं दोनों उत्साहपूर्वक भाग लेते हैं।

- Ans
- 1. महाराष्ट्र
 - 2. राजस्थान
 - 3. गुजरात
 - 4. छत्तीसगढ़

Question ID : 264330160794
Option 1 ID : 264330630507
Option 2 ID : 264330630509
Option 3 ID : 264330630508
Option 4 ID : 264330630510
Status : Answered
Chosen Option : 4

Q.18 Born on _____, Mohandas Karamchand Gandhi whose birthday is celebrated as Gandhi Jayanti, successfully led India's non-violence movement against the British.

- Ans
- 1. 2 October 1868
 - 2. 2 October 1870
 - 3. 2 October 1867
 - 4. 2 October 1869

Question ID : 264330160856
Option 1 ID : 264330630756
Option 2 ID : 264330630758
Option 3 ID : 264330630755
Option 4 ID : 264330630757
Status : Answered
Chosen Option : 4

Q.19 ISSF जूनियर विश्व कप 2023 में भारत पदक तालिका में शीर्ष पर रहा। यह प्रतियोगिता कहां आयोजित की गई थी?

- Ans
- 1. इटली
 - 2. ऑस्ट्रेलिया
 - 3. आज़रबाइजान
 - 4. जर्मनी

Question ID : 264330161145
Option 1 ID : 264330631911
Option 2 ID : 264330631912
Option 3 ID : 264330631913
Option 4 ID : 264330631914
Status : Answered
Chosen Option : 3

Q.20 निम्नलिखित में से कौन-सी कैबिनेट समिति नहीं है?

- Ans
- 1. कैबिनेट की नियुक्ति समिति (Appointment Committee of the Cabinet)
 - 2. राजनीतिक मामलों की समिति (Committee on Political Affairs)
 - 3. निवेश और विकास संबंधी समिति (Committee on Investment and Growth)
 - 4. मंत्रियों के बीच विवाद पर समिति (Committee on Conflicts among Ministers)

Question ID : 264330160862

Option 1 ID : 264330630780

Option 2 ID : 264330630779

Option 3 ID : 264330630781

Option 4 ID : 264330630782

Status : Answered

Chosen Option : 2

Q.21 शिक्षा और संस्कृति को बढ़ावा देने के लिए भारतीय विद्या भवन की स्थापना किसने की?

- Ans
- 1. डॉ. कन्हैयालाल मानेकलाल मुंशी
 - 2. डॉ. आत्माराम पांडुरंग
 - 3. गोपाल कृष्ण गोखले
 - 4. डॉ. बाबासाहेब अम्बेडकर

Question ID : 264330160882

Option 1 ID : 264330630861

Option 2 ID : 264330630860

Option 3 ID : 264330630859

Option 4 ID : 264330630862

Status : Answered

Chosen Option : 1

Q.22 भारतीय संविधान का कौन-सा अनुच्छेद सभी श्रमिकों के लिए जीवनयापन योग्य वेतन और सामाजिक और सांस्कृतिक अवसरों के साथ एक सभ्य जीवन स्तर सुरक्षित करता है?

- Ans
- 1. अनुच्छेद 43
 - 2. अनुच्छेद 40
 - 3. अनुच्छेद 39
 - 4. अनुच्छेद 41

Question ID : 264330161398

Option 1 ID : 264330632922

Option 2 ID : 264330632920

Option 3 ID : 264330632919

Option 4 ID : 264330632921

Status : Answered

Chosen Option : 1

Q.23 Which of the following is a white to yellowish solid with a weak aromatic odour purified by the process of sublimation?

- Ans
- 1. Titanyl
 - 2. Orthovanadate
 - 3. Anthracene
 - 4. Dysprosium

Question ID : 264330161056

Option 1 ID : 264330631557

Option 2 ID : 264330631558

Option 3 ID : 264330631555

Option 4 ID : 264330631556

Status : Answered

Chosen Option : 3

Q.24 95 वर्षीय भगवानी देवी और 106 वर्षीय रामबाई को उनको उपलब्धियों के लिए संयुक्त रूप से बीबीसी विशेष ट्रॉफी (BBC special trophy) से सम्मानित किया गया, जहां देवी ने फिनलैंड के टाम्पेरे (Tampere) में _____ में 100 मीटर स्प्रिंट में स्वर्ण पदक जीता।

- Ans
- 1. 2022 राष्ट्रीय सीनियर खेल (2022 National Senior Games)
 - 2. सीनियर स्पोर्ट्स इंटरनेशनल मीट 2022 (Senior Sports International Meet 2022)
 - 3. हंट्समैन वर्ल्ड सीनियर गेम्स 2022 (Huntsman World Senior Games 2022)
 - 4. 2022 विश्व मास्टर्स एथलेटिक्स चैंपियनशिप (2022 World Masters Athletics Championships)

Question ID : 264330161438
Option 1 ID : 264330633080
Option 2 ID : 264330633079
Option 3 ID : 264330633082
Option 4 ID : 264330633081
Status : Answered
Chosen Option : 2

Q.25 टी.एन. राजरत्नम पिल्लई (TN Rajarathnam Pillai) निम्नलिखित में से कौन-से संगीत वाद्ययंत्र के वादक हैं?

- Ans
- 1. घटम
 - 2. सारंगी
 - 3. नादस्वरम
 - 4. शहनाई

Question ID : 264330155466
Option 1 ID : 264330609269
Option 2 ID : 264330609267
Option 3 ID : 264330609268
Option 4 ID : 264330609270
Status : Answered
Chosen Option : 3

Section : English Language and Comprehension

Q.1 The following sentence has been split into four segments. Identify the segment that contains a spelling error.

Several days later, / he received a written / comeunication from the magistrate / that the case has been dropped.

- Ans
- 1. Several days later,
 - 2. he received a written
 - 3. comeunication from the magistrate
 - 4. that the case has been dropped

Question ID : 264330152983
Option 1 ID : 264330599503
Option 2 ID : 264330599504
Option 3 ID : 264330599505
Option 4 ID : 264330599506
Status : Answered
Chosen Option : 3

Q.2 Select the option that can be used as a one-word substitute for the given group of words.

A man whose wife is dead

- Ans**
- 1. Widower
 - 2. Ascetic
 - 3. Widow
 - 4. Bachelor

Question ID : 264330152735

Option 1 ID : 264330598540

Option 2 ID : 264330598541

Option 3 ID : 264330598539

Option 4 ID : 264330598542

Status : Answered

Chosen Option : 1

Q.3 Select the most appropriate option that can substitute the underlined segment in the given sentence.

No sooner did he finished his examination than he left for his cricket training centre.

- Ans**
- 1. no sooner did he finish
 - 2. no sooner than he finished
 - 3. no sooner than he did finished
 - 4. no sooner had he finish

Question ID : 264330153505

Option 1 ID : 264330601534

Option 2 ID : 264330601533

Option 3 ID : 264330601532

Option 4 ID : 264330601531

Status : Answered

Chosen Option : 1

Q.4 Parts of the following sentence have been given as options. Select the option that contains an error.

They will start their journey after the breakfast.

- Ans**
- 1. will start
 - 2. their journey
 - 3. They
 - 4. after the breakfast

Question ID : 264330152793

Option 1 ID : 264330598764

Option 2 ID : 264330598765

Option 3 ID : 264330598763

Option 4 ID : 264330598766

Status : Answered

Chosen Option : 4

Q.5 Select the INCORRECTLY spelt word.

- Ans**
- 1. Wholeness
 - 2. Overwhelming
 - 3. Legandry
 - 4. Inclusive

Question ID : 264330152782
Option 1 ID : 264330598722
Option 2 ID : 264330598719
Option 3 ID : 264330598721
Option 4 ID : 264330598720
Status : Answered
Chosen Option : 3

Q.6 Select the most appropriate ANTONYM of the given word.
Humane

- Ans**
- 1. Proud
 - 2. Kind
 - 3. Cruel
 - 4. Imperfect

Question ID : 264330152741
Option 1 ID : 264330598565
Option 2 ID : 264330598563
Option 3 ID : 264330598564
Option 4 ID : 264330598566
Status : Answered
Chosen Option : 3

Q.7 Select the correctly spelt word.

- Ans**
- 1. Prevenseon
 - 2. Prevention
 - 3. Previnsion
 - 4. Prevension

Question ID : 264330153086
Option 1 ID : 264330599909
Option 2 ID : 264330599910
Option 3 ID : 264330599908
Option 4 ID : 264330599907
Status : Answered
Chosen Option : 2

Q.8 Parts of the given sentence have been underlined. One of them contains an error. The underlined parts are given as options with some changes. Select the option that correctly rectifies the error.

He is good at playing the guitar than his brother.

- Ans**
- 1. is better
 - 2. in playing
 - 3. guitar
 - 4. to

Question ID : 264330153172
Option 1 ID : 264330600247
Option 2 ID : 264330600248
Option 3 ID : 264330600249
Option 4 ID : 264330600250
Status : Answered
Chosen Option : 1

Q.9 Select the most appropriate ANTONYM of the word given in brackets to fill in the blank.

The company is looking for some _____ (idle) workers who can join the organisation immediately.

- Ans**
- 1. diligent
 - 2. coy
 - 3. callous
 - 4. sober

Question ID : 264330152694
Option 1 ID : 264330598381
Option 2 ID : 264330598380
Option 3 ID : 264330598379
Option 4 ID : 264330598382
Status : Answered
Chosen Option : 1

Q.10 Select the option that can be used as a one-word substitute for the underlined group of words.

He simply continued to say something in order to convey information in a calm voice.

- Ans**
- 1. dictate
 - 2. teach
 - 3. speak
 - 4. spell

Question ID : 264330152706
Option 1 ID : 264330598424
Option 2 ID : 264330598426
Option 3 ID : 264330598423
Option 4 ID : 264330598425
Status : Answered
Chosen Option : 1

Q.11 Select the most appropriate meaning of the underlined idiom.
After years of rivalry, the two families decided to bury the hatchet.

- Ans**
- 1. To continue an old quarrel
 - 2. To end a quarrel by never talking to each other
 - 3. To end a quarrel and become friendly
 - 4. To start a new quarrel

Question ID : 264330153411
Option 1 ID : 264330601181
Option 2 ID : 264330601180
Option 3 ID : 264330601182
Option 4 ID : 264330601179
Status : Answered
Chosen Option : 3

Q.12 The following sentence has been split into four segments. Identify the segment that contains an error.

Did / her friend / went to / school yesterday?

- Ans**
- 1. went to
 - 2. school yesterday
 - 3. her friend
 - 4. Did

Question ID : 264330155318
Option 1 ID : 264330608713
Option 2 ID : 264330608714
Option 3 ID : 264330608712
Option 4 ID : 264330608711
Status : Answered
Chosen Option : 1

Q.13 Select the most appropriate option that can substitute the underlined segment in the given sentence.

The Delhi administration is seriously worried about the warning to civic health posed by the polluted waters of Yamuna.

- Ans**
- 1. a peril to civic health
 - 2. the notice to civic health
 - 3. the plague to civic health
 - 4. the threat to civic health

Question ID : 264330151810
Option 1 ID : 264330594868
Option 2 ID : 264330594870
Option 3 ID : 264330594869
Option 4 ID : 264330594867
Status : Answered
Chosen Option : 4

Q.14 The following sentence has been split into four segments. Identify the segment that contains a grammatical error.
Mohan is respected / by everyone / because he works / hardly.

- Ans**
- 1. by everyone
 - 2. because he works
 - 3. hardly
 - 4. Mohan is respected

Question ID : 264330153181
Option 1 ID : 264330600284
Option 2 ID : 264330600285
Option 3 ID : 264330600286
Option 4 ID : 264330600283
Status : Answered
Chosen Option : 3

Q.15 Select the most appropriate meaning of the given idiom.
Day and night

- Ans**
- 1. Continuously
 - 2. Clumsily
 - 3. Adversely
 - 4. Diligently

Question ID : 264330151828
Option 1 ID : 264330594939
Option 2 ID : 264330594942
Option 3 ID : 264330594941
Option 4 ID : 264330594940
Status : Answered
Chosen Option : 1

Q.16 Select the most appropriate ANTONYM of the given word.
Humility

- Ans**
- 1. Shyness
 - 2. Timidity
 - 3. Arrogance
 - 4. Obedience

Question ID : 264330152776
Option 1 ID : 264330598696
Option 2 ID : 264330598698
Option 3 ID : 264330598695
Option 4 ID : 264330598697
Status : Answered
Chosen Option : 3

Q.17 The following sentence has been split into four segments. Identify the segment that contains an error.
They had been dancing / for an hour / when our dance teacher / had arrived.

- Ans**
- 1. when our dance teacher
 - 2. They had been dancing
 - 3. for an hour
 - 4. had arrived

Question ID : 264330143055
Option 1 ID : 264330560497
Option 2 ID : 264330560495
Option 3 ID : 264330560496
Option 4 ID : 264330560498
Status : Answered
Chosen Option : 3

Q.18 Select the most appropriate idiom to fill in the blank.
Jane, please don't tell me fairy tales; I just want to know the real matter _____.

- Ans**
- 1. in the cold
 - 2. in a fortnight
 - 3. in the long run
 - 4. in a nutshell

Question ID : 264330153098
Option 1 ID : 264330599957
Option 2 ID : 264330599956
Option 3 ID : 264330599958
Option 4 ID : 264330599955
Status : Answered
Chosen Option : 2

Q.19 Select the most appropriate meaning of the underlined idiom.
The shopkeeper was sly as a fox and tried to sell off the old stock.

- Ans**
- 1. smart and clever
 - 2. slow
 - 3. suspicious
 - 4. in confusion or disagreement

Question ID : 264330153643
Option 1 ID : 264330602043
Option 2 ID : 264330602044
Option 3 ID : 264330602046
Option 4 ID : 264330602045
Status : Answered
Chosen Option : 1

Q.20 Select the most appropriate option to fill in the blank.
Bhanu, the security guard, asks everyone entering my building to show their _____ card.

- Ans**
- 1. identity
 - 2. place
 - 3. self
 - 4. name

Question ID : 264330152582
Option 1 ID : 264330597932
Option 2 ID : 264330597933
Option 3 ID : 264330597934
Option 4 ID : 264330597931
Status : Answered
Chosen Option : 1

Comprehension:

In the following passage, some words have been deleted. Read the passage carefully and select the most appropriate option to fill in each blank.

Effective communication is about more than just exchanging information. It's about understanding the emotion and intentions (1)_____ the information. As well as being able to clearly convey a message, you need to also (2)_____ in a way that gains the full meaning of what's being said and makes the other person feel heard and understood. For many of us, communicating more clearly and effectively requires learning some (3)_____ skills. Whether you're trying to improve communication with your spouse, kids, boss, or coworkers, learning these skills can (4)_____ your connections to others, build greater trust and respect, and (5)_____ teamwork, problem solving, and your overall social and emotional health.

SubQuestion No : 21

Q.21 Select the most appropriate option to fill in blank number 1.

- Ans**
- 1. behind
 - 2. in front of
 - 3. above
 - 4. below

Question ID : 264330153016
Option 1 ID : 264330599632
Option 2 ID : 264330599634
Option 3 ID : 264330599631
Option 4 ID : 264330599633
Status : Answered
Chosen Option : 1

Comprehension:

In the following passage, some words have been deleted. Read the passage carefully and select the most appropriate option to fill in each blank.

Effective communication is about more than just exchanging information. It's about understanding the emotion and intentions (1)_____ the information. As well as being able to clearly convey a message, you need to also (2)_____ in a way that gains the full meaning of what's being said and makes the other person feel heard and understood. For many of us, communicating more clearly and effectively requires learning some (3)_____ skills. Whether you're trying to improve communication with your spouse, kids, boss, or coworkers, learning these skills can (4)_____ your connections to others, build greater trust and respect, and (5)_____ teamwork, problem solving, and your overall social and emotional health.

SubQuestion No : 22

Q.22 Select the most appropriate option to fill in blank number 2.

- Ans 1. think
 2. talk
 3. listen
 4. speak

Question ID : 264330153017

Option 1 ID : 264330599638

Option 2 ID : 264330599637

Option 3 ID : 264330599635

Option 4 ID : 264330599636

Status : Answered

Chosen Option : 3

Comprehension:

In the following passage, some words have been deleted. Read the passage carefully and select the most appropriate option to fill in each blank.

Effective communication is about more than just exchanging information. It's about understanding the emotion and intentions (1)_____ the information. As well as being able to clearly convey a message, you need to also (2)_____ in a way that gains the full meaning of what's being said and makes the other person feel heard and understood. For many of us, communicating more clearly and effectively requires learning some (3)_____ skills. Whether you're trying to improve communication with your spouse, kids, boss, or coworkers, learning these skills can (4)_____ your connections to others, build greater trust and respect, and (5)_____ teamwork, problem solving, and your overall social and emotional health.

SubQuestion No : 23

Q.23 Select the most appropriate option to fill in blank number 3.

- Ans 1. boring
 2. trivial
 3. wasteful
 4. important

Question ID : 264330153018

Option 1 ID : 264330599639

Option 2 ID : 264330599642

Option 3 ID : 264330599641

Option 4 ID : 264330599640

Status : Answered

Chosen Option : 4

Comprehension:

In the following passage, some words have been deleted. Read the passage carefully and select the most appropriate option to fill in each blank.

Effective communication is about more than just exchanging information. It's about understanding the emotion and intentions (1)_____ the information. As well as being able to clearly convey a message, you need to also (2)_____ in a way that gains the full meaning of what's being said and makes the other person feel heard and understood. For many of us, communicating more clearly and effectively requires learning some (3)_____ skills. Whether you're trying to improve communication with your spouse, kids, boss, or coworkers, learning these skills can (4)_____ your connections to others, build greater trust and respect, and (5)_____ teamwork, problem solving, and your overall social and emotional health.

SubQuestion No : 24

Q.24 Select the most appropriate option to fill in blank number 4.

- Ans 1. hamper
 2. trivialise
 3. disturb
 4. deepen

Question ID : 264330153019

Option 1 ID : 264330599645

Option 2 ID : 264330599643

Option 3 ID : 264330599644

Option 4 ID : 264330599646

Status : Answered

Chosen Option : 4

Comprehension:

In the following passage, some words have been deleted. Read the passage carefully and select the most appropriate option to fill in each blank.

Effective communication is about more than just exchanging information. It's about understanding the emotion and intentions (1)_____ the information. As well as being able to clearly convey a message, you need to also (2)_____ in a way that gains the full meaning of what's being said and makes the other person feel heard and understood. For many of us, communicating more clearly and effectively requires learning some (3)_____ skills. Whether you're trying to improve communication with your spouse, kids, boss, or coworkers, learning these skills can (4)_____ your connections to others, build greater trust and respect, and (5)_____ teamwork, problem solving, and your overall social and emotional health.

SubQuestion No : 25

Q.25 Select the most appropriate option to fill in blank number 5.

- Ans 1. hamper
 2. hasten
 3. improve
 4. disturb

Question ID : 264330153020

Option 1 ID : 264330599648

Option 2 ID : 264330599649

Option 3 ID : 264330599647

Option 4 ID : 264330599650

Status : Answered

Chosen Option : 3