

Section : General English

Q.1 Choose the most appropriate word that can substitute the given group of words.

A group of Lions

- Ans
- 1. Herd
 - 2. Pack
 - 3. Flock
 - 4. Pride

Question ID : 239087971
Status : Answered
Chosen Option : 1

Q.2 Select the most appropriate synonym of the given word.

Harass

- Ans
- 1. Assist
 - 2. Scare
 - 3. Molest
 - 4. Comfort

Question ID : 239087966
Status : Answered
Chosen Option : 2

Q.3 Select the most appropriate option to substitute the underlined segment in the given sentence. If there is no need to substitute it, select No Improvement.

He made multiple attempts at securing a government job.

- Ans
- 1. attempts through
 - 2. attempt in
 - 3. attempt for
 - 4. No Improvement

Question ID : 239087955
Status : Answered
Chosen Option : 3

Comprehension:

In the following passage some words have been deleted. Fill in the blanks with the help of the alternatives given. Select the most appropriate option for each blank.

Buffer stock refers to a (1)_____ of a commodity that is used to offset price fluctuations (2)_____ unforeseen emergencies. Buffer stock is generally (3)_____ for essential commodities and necessities like food grains, pulses, etc. The Cabinet Committee (4)_____ Economic Affairs (5)_____ the minimum buffer stock on a quarterly basis.

SubQuestion No : 4

Q.4 Select the most appropriate option for blank No. 1.

- Ans
- 1. reserves
 - 2. reserve
 - 3. reserved
 - 4. reservation

Question ID : 239087960
Status : Answered
Chosen Option : 2

Comprehension:

In the following passage some words have been deleted. Fill in the blanks with the help of the alternatives given. Select the most appropriate option for each blank.

Buffer stock refers to a (1)_____ of a commodity that is used to offset price fluctuations (2)_____ unforeseen emergencies. Buffer stock is generally (3)_____ for essential commodities and necessities like food grains, pulses, etc. The Cabinet Committee (4)_____ Economic Affairs (5)_____ the minimum buffer stock on a quarterly basis.

SubQuestion No : 5

Q.5 Select the most appropriate option for blank No. 2.

- Ans
- 1. even
 - 2. if
 - 3. and
 - 4. also

Question ID : 239087961
Status : Answered
Chosen Option : 1

Comprehension:

In the following passage some words have been deleted. Fill in the blanks with the help of the alternatives given. Select the most appropriate option for each blank.

Buffer stock refers to a (1)_____ of a commodity that is used to offset price fluctuations (2)_____ unforeseen emergencies. Buffer stock is generally (3)_____ for essential commodities and necessities like food grains, pulses, etc. The Cabinet Committee (4)_____ Economic Affairs (5)_____ the minimum buffer stock on a quarterly basis.

SubQuestion No : 6

Q.6 Select the most appropriate option for blank No. 3.

- Ans
- 1. maintains
 - 2. maintaining
 - 3. maintain
 - 4. maintained

Question ID : 239087962
Status : Answered
Chosen Option : 4

Comprehension:

In the following passage some words have been deleted. Fill in the blanks with the help of the alternatives given. Select the most appropriate option for each blank.

Buffer stock refers to a (1)_____ of a commodity that is used to offset price fluctuations (2)_____ unforeseen emergencies. Buffer stock is generally (3)_____ for essential commodities and necessities like food grains, pulses, etc. The Cabinet Committee (4)_____ Economic Affairs (5)_____ the minimum buffer stock on a quarterly basis.

SubQuestion No : 7

Q.7 Select the most appropriate option for blank No. 4.

- Ans
- 1. at
 - 2. to
 - 3. for
 - 4. in

Question ID : 239087963

Status : Answered

Chosen Option : 2

Comprehension:

In the following passage some words have been deleted. Fill in the blanks with the help of the alternatives given. Select the most appropriate option for each blank.

Buffer stock refers to a (1)_____ of a commodity that is used to offset price fluctuations (2)_____ unforeseen emergencies. Buffer stock is generally (3)_____ for essential commodities and necessities like food grains, pulses, etc. The Cabinet Committee (4)_____ Economic Affairs (5)_____ the minimum buffer stock on a quarterly basis.

SubQuestion No : 8

Q.8 Select the most appropriate option for blank No. 5.

- Ans
- 1. forces
 - 2. rules
 - 3. fixes
 - 4. guides

Question ID : 239087964

Status : Answered

Chosen Option : 3

Q.9 Find the part of the given sentence that has an error in it. If there is no error, choose 'No error'.

He always stood up for the rights of the oppressed. /No error

- Ans
- 1. for the rights
 - 2. of the oppressed
 - 3. He always stood up
 - 4. No error

Question ID : 239087953

Status : Answered

Chosen Option : 3

Q.10 Find the part of the given sentence that has an error in it. If there is no error, choose 'No error'.

The 91 year old lady have been a fan of cricket for decades. /No error

- Ans
- 1. The 91 year old

- 2. have been a fan
- 3. of cricket for decades
- 4. No error

Question ID : 239087951
Status : Answered
Chosen Option : 2

Q.11 Select the most appropriate option to fill in the blank.

She had a bandage _____ round her finger.

- Ans
- 1. covered
 - 2. bound
 - 3. wrapped
 - 4. twisted

Question ID : 239087976
Status : Answered
Chosen Option : 2

Q.12 Select the most appropriate option to substitute the underlined segment in the given sentence. If there is no need to substitute it, select No Improvement.

It is danger to cross the road unmindfully.

- Ans
- 1. It is dangerous
 - 2. It is full of dangerous
 - 3. No Improvement
 - 4. There is danger

Question ID : 239087956
Status : Answered
Chosen Option : 1

Q.13 Select the most appropriate option to fill in the blank.

They sat by the river bank with their legs _____ in the water.

- Ans
- 1. remaining
 - 2. dangling
 - 3. washing
 - 4. swimming

Question ID : 239087975
Status : Answered
Chosen Option : 2

Q.14 Select the most appropriate meaning of the given idiom.

Eye wash

- Ans
- 1. A fact
 - 2. A deception
 - 3. A solution

4. A problem

Question ID : 239087970
Status : Answered
Chosen Option : 3

Q.15 Choose the correctly spelt word.

- Ans 1. Ignorence
 2. Colaborate
 3. Interupt
 4. Thriller

Question ID : 239087973
Status : Answered
Chosen Option : 1

Q.16 Choose the correctly spelt word.

- Ans 1. Knowledge
 2. Neice
 3. Patner
 4. Lisence

Question ID : 239087974
Status : Answered
Chosen Option : 1

Q.17 Select the most appropriate antonym of the given word.

Linger

- Ans 1. Defer
 2. Stop
 3. Quicken
 4. Wait

Question ID : 239087968
Status : Answered
Chosen Option : 3

Q.18 Select the most appropriate synonym of the given word.

Benevolent

- Ans 1. Cruel
 2. Malevolent
 3. Miser
 4. Generous

Question ID : 239087965
Status : Answered
Chosen Option : 4

Jovial

- Ans 1. Hesitant
 2. Cheerful
 3. Gloomy
 4. Tired

Question ID : 239087967
Status : Answered
Chosen Option : 1

Q.20 Select the most appropriate meaning of the given idiom.

Pull up your socks

- Ans 1. To lose one's temper
 2. To play a joke on someone
 3. To put in extra effort
 4. To suspect some foul play

Question ID : 239087969
Status : Answered
Chosen Option : 4

Q.21 Choose the most appropriate word that can substitute the given group of words.

A person pretending to be somebody he isn't

- Ans 1. Bureaucrat
 2. Aristocrat
 3. Conservative
 4. Hypocrite

Question ID : 239087972
Status : Answered
Chosen Option : 2

Q.22 Select the most appropriate option to fill in the blank.

We cannot quote a price _____ we are allowed to examine the sample.

- Ans 1. except
 2. unless
 3. because
 4. whether

Question ID : 239087957
Status : Answered
Chosen Option : 2

Q.23 Select the most appropriate option to substitute the underlined segment in the given sentence. If there is no need to substitute it, select No Improvement.

You need have brought your umbrella as it is a cloudy day.

- Ans 1. No Improvement

- 2. can have
- 3. could has
- 4. should have

Question ID : 239087954
Status : Answered
Chosen Option : 4

Q.24 Find the part of the given sentence that has an error in it. If there is no error, choose 'No error'.

It would take up few of my time to explain to you the whole case. /No error

- Ans
- 1. No error
 - 2. few of my time to
 - 3. explain to you the whole case
 - 4. It would take up

Question ID : 239087952
Status : Answered
Chosen Option : 4

Q.25 Select the most appropriate option to fill in the blank.

A twelve year old boy drowned in a pit ____ up for the coastal road project.

- Ans
- 1. digs
 - 2. dug
 - 3. dig
 - 4. digging

Question ID : 239087958
Status : Answered
Chosen Option : 3

Section : General Intelligence & Reasoning

Q.1 In a certain code language, 'SOLVED' is written as 'OSVLDE'. What is the code for 'CREATE' in that code language?

- Ans
- 1. RCAEET
 - 2. RCAETE
 - 3. RCTAEE
 - 4. RCEAET

Question ID : 239087703
Status : Answered
Chosen Option : 1

Q.2 Select the option in which the words share the same relationship as that shared by the given pair of words.

Food : Chef :: ?

- Ans
- 1. Farmer : Crop
 - 2. Ornaments : Jeweller

3. Furniture : Wood

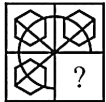
4. Tailor : Clothes

Question ID : 239087701

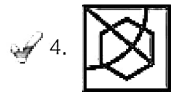
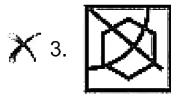
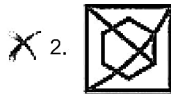
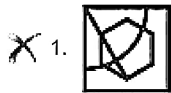
Status : Answered

Chosen Option : 4

Q.3 Study the given pattern carefully and select the figure that will complete the pattern given in the question figure.



Ans

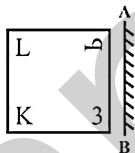


Question ID : 239087719

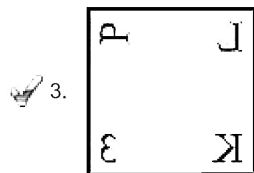
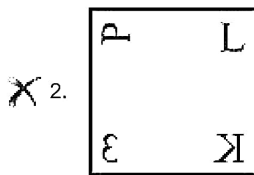
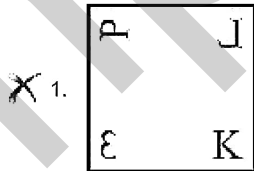
Status : Answered

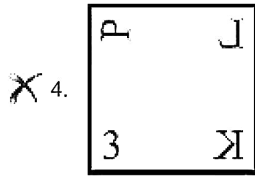
Chosen Option : 4

Q.4 If a mirror is placed on the line AB, then which of the answer figures is the right image of the given figure?



Ans





Question ID : 239087721
 Status : Answered
 Chosen Option : 3

Q.5 In the following question, select the related letter pair from the given alternatives.

TIR : VKT :: ?

- Ans
- 1. RAP : TCS
 - 2. LOD : NMF
 - 3. GAR : IYT
 - 4. GEM : IGO

Question ID : 239087702
 Status : Answered
 Chosen Option : 4

Q.6 A series is given with one term missing. Select the correct alternative from the given ones that will complete the series.

ROD, XUJ, DAP, JGV, ?

- Ans
- 1. QNC
 - 2. PNB
 - 3. PMB
 - 4. QMB

Question ID : 239087699
 Status : Answered
 Chosen Option : 3

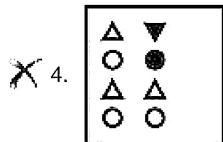
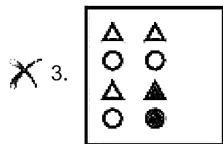
Q.7 In the following question, select the figure which can be placed at the sign of question mark (?) from the given alternatives.



- Ans
- 1.

△	△
●	●
△	△
○	○
 - 2.

△	△
○	●
△	△
○	○



Question ID : 239087718
Status : Answered
Chosen Option : 2

Q.8 By interchanging which two signs the equation will be correct?

$$19 + 63 \div 7 - 8 \times 12 = 79$$

- Ans
- X 1. \times and \div
 - 2. $-$ and \times
 - X 3. $+$ and $-$
 - X 4. \times and $+$

Question ID : 239087716
Status : Not Answered
Chosen Option : --

Q.9 Select the number that can replace the question mark (?) in the following series.

16, 17, 23, 18, 19, 26, 20, 21, 29, 22, ?, ?

- Ans
- 1. 23, 32
 - X 2. 25, 36
 - X 3. 32, 23
 - X 4. 36, 25

Question ID : 239087713
Status : Answered
Chosen Option : 1

Q.10 Select the number that can replace the question mark (?) in the following series.

63, 82, 102, 123, 145, ?

- Ans
- X 1. 167
 - X 2. 178
 - 3. 168
 - X 4. 159

Question ID : 239087712
Status : Answered
Chosen Option : 3

Q.11 In the following question below are given some statements followed by some conclusions based on

then decide which of the given conclusion logically follows the given statements.

Statements:

I. All T are P.

II. Some P are Q.

Conclusions:

I. Some Q are P.

II. Some P are T.

- Ans
- 1. Both conclusion I and II follows
 - 2. Neither conclusion follow
 - 3. Only conclusion I follows
 - 4. Only conclusion II follows

Question ID : 239087711

Status : Answered

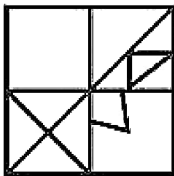
Chosen Option : 1

Q.12 From the given answer figures, select the one in which the question figure is hidden/embedded. (Rotation not allowed)

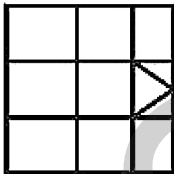


Ans

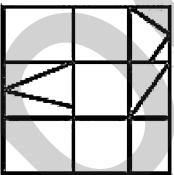
1.



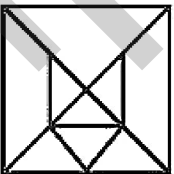
2.



3.



4.



Question ID : 239087720

Status : Answered

Chosen Option : 2

Q.13 Select the option that is related to the third term in the same way as the second term is related to the first term.

Brick : Wall :: Gold : ?

- Ans
- 1. Jewellery
 - 2. Yellow

3. Metal

4. Hard

Question ID : 239087700

Status : Answered

Chosen Option : 1

Q.14 By interchanging which two numbers the equation will be correct?

$$9 - 2 \times 4 \div 6 = -3$$

Ans 1. 6 and 2

2. 6 and 9

3. 4 and 9

4. 2 and 4

Question ID : 239087717

Status : Not Answered

Chosen Option : --

Q.15 Six doctors E, G, I, K, M and O are standing in a row facing towards north (Not necessarily in the same order). M is standing to the immediate right of E. K is standing second to the right of O. Two doctors are standing between I and M. K is towards the left of G.

Who is standing to the immediate right of K?

Ans 1. E

2. M

3. I

4. G

Question ID : 239087707

Status : Answered

Chosen Option : 1

Q.16 In the following question below are given some statements followed by some conclusions based on those statements. Taking the given statements to be true even if they seem to be at variance from commonly known facts. Read all the conclusions and then decide which of the given conclusion logically follows the given statements.

Statements:

I. All photo are phone.

II. Some phone are yellow.

III. No yellow is red.

Conclusions:

I. Some red are photo.

II. Some yellow are phone.

III. No red is photo.

Ans 1. Only conclusion III follows

2. Neither conclusion follow

3. Only conclusion II follows

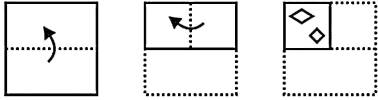
4. Only conclusion I follows

Question ID : 239087710

Status : Answered

Chosen Option : 3

Q.17 A piece of paper is folded and punched as shown below in the question figures. From the given answer figures, indicate how it will appear when opened?



Ans

- 1.
- 2.
- 3.
- 4.

Question ID : 239087722

Status : Answered

Chosen Option : 4

Q.18 Five movies K, L, M, N and P (not necessarily in the same order) are displayed from Monday to Friday. Only one movie is displayed on one day. Each movie is displayed only one time. Movie K is displayed on Monday. Two movies are displayed between N and P. L is displayed just one day after P. How many movies are displayed before M?

Ans

- 1. 1
- 2. 4
- 3. 3
- 4. 2

Question ID : 239087709

Status : Answered

Chosen Option : 1

Q.19 In the following question, select the number which can be placed at the sign of question mark (?) from the given alternatives.

- 6 3 8 20
- 9 5 1 ?
- 11 4 7 26

Ans

- 1. 14

3. 19

4. 17

Question ID : 239087715

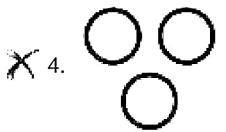
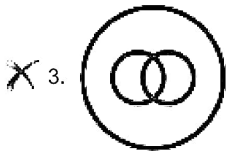
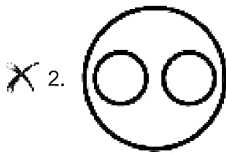
Status : Not Answered

Chosen Option : --

Q.20 Identify the diagram that best represents the relationship among the given classes.

Lawyer, Profession, Client

Ans



Question ID : 239087723

Status : Answered

Chosen Option : 1

Q.21 Six employees L, N, P, R, T and V are sitting around a circular table facing towards the centre (not necessarily in the same order). V is second to the left of N. L is to the immediate left of P. R is second to the left of P. P is third to the right of N. Who is sitting to the immediate right of V?

Ans

1. R

2. T

3. P

4. N

Question ID : 239087708

Status : Not Answered

Chosen Option : --

Q.22 Select the option that is related to the third number in the same way as the second number is related to the first number.

31 : 54 :: 43 : ?

Ans

1. 66

2. 74

3. 76

4. 64

Question ID : 239087714
Status : Answered
Chosen Option : 1

Q.23 In a certain code language, 'FRAUD' is written as '6181214', 'RING' is written as '189147'. What is the code for 'GLOBE' in that code language?

- Ans
- 1. 7131525
 - 2. 7125125
 - 3. 7121525
 - 4. 7525121

Question ID : 239087705
Status : Answered
Chosen Option : 3

Q.24 In a certain code language, 'LIP' is written as '40', 'GILT' is written as '51'. What is the code for 'ROPE' in that code language?

- Ans
- 1. 54
 - 2. 56
 - 3. 57
 - 4. 51

Question ID : 239087706
Status : Answered
Chosen Option : 3

Q.25 In a certain code language, 'RAPID' is written as 'LUJCX'. What is the code for 'STARE' in that code language?

- Ans
- 1. NPULY
 - 2. NOULY
 - 3. MMULY
 - 4. MNULY

Question ID : 239087704
Status : Answered
Chosen Option : 4

Section : Numerical Aptitude

Q.1 The data given below shows the marks obtained by various students.

Marks	Number of students
10 – 12	6
12 – 14	8
14 – 16	5
16 – 18	7
18 – 20	4

What is the mean marks (Correct up to two decimal places) of given data?

- 1. 13.67
- 2. 14.67
- 3. 15.33
- 4. 13.33

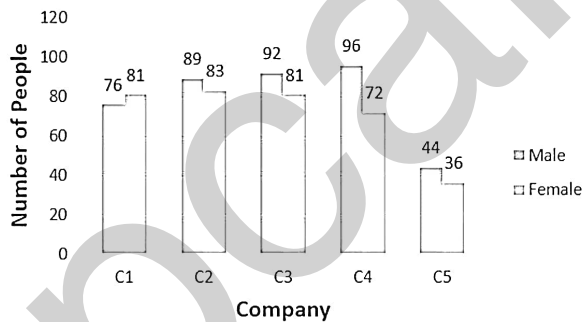
Question ID : 239087830
 Status : Answered
 Chosen Option : 4

Q.2 The radius of a right circular cylinder is 7 cm. Its height is twice its radius. What is the curved surface area of the cylinder?
 (Take $\pi = \frac{22}{7}$)

- Ans**
- 1. 476 cm²
 - 2. 616 cm²
 - 3. 896 cm²
 - 4. 1232 cm²

Question ID : 239087844
 Status : Answered
 Chosen Option : 2

Q.3 The Bar graph given below presents the number of males and females working in five different companies.



What is the average number of females working per company?

- Ans**
- 1. 72.2
 - 2. 70.6
 - 3. 71.8
 - 4. 74.6

Question ID : 239087847
 Status : Answered
 Chosen Option : 2

Q.4 A person goes from A to B with a speed of 30 km/h. He comes back from B to A with a speed of 20 km/h. What is his average speed for the entire journey?

- Ans**
- 1. 27.5 km/h
 - 2. 26.5 km/h
 - 3. 25 km/h

4. 24 km/h

Question ID : 239087842
Status : Answered
Chosen Option : 3

Q.5 The sum of two numbers is 77 and their ratio is 6 : 5. What is their difference?

- Ans 1. 4
 2. 6
 3. 7
 4. 5

Question ID : 239087836
Status : Answered
Chosen Option : 3

Q.6 If $A = 8 \div 4 \times (3 - 1) + 6 \times 3 \div 2$ of 3 and $B = 4 \div 8 \times 2 + 7 \times 3$, then what is the value of $A + B$?

- Ans 1. 31
 2. 33
 3. 35
 4. 29

Question ID : 239087826
Status : Answered
Chosen Option : 1

Q.7 26% of $A = 832$. What is the value of 31% of A ?

- Ans 1. 876
 2. 854
 3. 992
 4. 968

Question ID : 239087831
Status : Answered
Chosen Option : 3

Q.8 Average of a and b is 36. Average of b and c is 42. What is the difference between c and a ?

- Ans 1. 16
 2. 14
 3. 12
 4. 18

Question ID : 239087828
Status : Answered
Chosen Option : 3

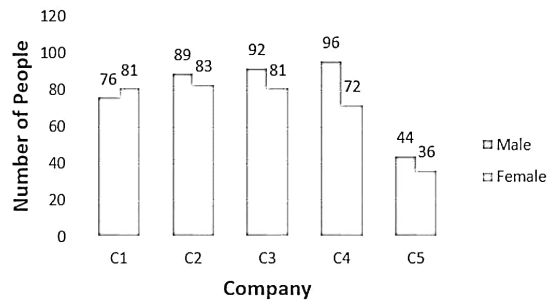
Q.9 The marked price of an article is ₹2800. The selling price of the article is ₹2408. What is the discount percentage?

- Ans 1. 16%

- 2. 24%
- 3. 18%
- 4. 14%

Question ID : 239087829
 Status : Answered
 Chosen Option : 4

Q.10 The Bar graph given below presents the number of males and females working in five different companies.



What is the ratio of the total number of males working in the Companies C2 and C3 to the total number of females working in C1 and C5?

- Ans**
- 1. 171 : 136
 - 2. 181 : 117
 - 3. 182 : 119
 - 4. 183 : 124

Question ID : 239087848
 Status : Answered
 Chosen Option : 2

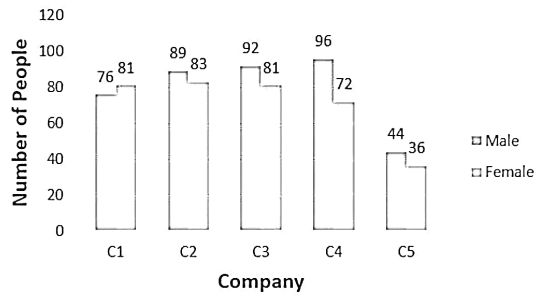
Q.11 What is the average of 59, 63, 68, 77, 74 and 73, when each number is divided by 23?

- Ans**
- 1. $\frac{63}{23}$
 - 2. $\frac{67}{23}$
 - 3. 3
 - 4. 46

Question ID : 239087827
 Status : Not Answered
 Chosen Option : --

Q.12

The Bar graph given below presents the number of males and females working in five different companies.



The total number of males working in these five companies is how much percent (approximately) more than the total number of females working in these five companies?

- Ans
- 1. 8.52%
 - 2. 9.67%
 - 3. 14.67%
 - 4. 12.46%

Question ID : 239087846
Status : Not Answered
Chosen Option : --

Q.13 Side of a hexagon is 4 cm. Side of a square is $4\sqrt{2}$ cm. What is the ratio of their areas?

- Ans
- 1. $3\sqrt{3} : 2$
 - 2. $3\sqrt{3} : 4$
 - 3. $\sqrt{3}/2 : 1$
 - 4. $2\sqrt{3} : 1$

Question ID : 239087845
Status : Answered
Chosen Option : 2

Q.14 A train crosses a stationary pole in 3 minutes. It crosses a 600 meter long platform in 5 minutes. What are the length and the speed of the train?

- Ans
- 1. 900 m, 18 km/h
 - 2. 900 m, 15 km/h
 - 3. 3600 m, 18 km/h
 - 4. 1200 m, 15 km/h

Question ID : 239087841
Status : Answered
Chosen Option : 4

Q.15 If $X : Y : Z = 1 : 2 : 3$ and $X^2 + Y^2 + Z^2 = 224$, then what is the value of $X + Y + Z$?

- Ans
- 1. 32
 - 2. 24
 - 3. 48

X 4. 36

Question ID : 239087835
Status : Answered
Chosen Option : 2

Q.16 If ₹12000 is invested for two years at compound interest (compounded annually) at the rate of 20% per annum, then what is the interest?

- Ans
- 1. ₹5280
 - 2. ₹5640
 - 3. ₹4280
 - 4. ₹4800

Question ID : 239087838
Status : Answered
Chosen Option : 1

Q.17 The cost price of an article 1 is six times of the profit earned by selling it at SP1. Cost price of article 2 is three times the loss incurred by selling it at SP2. If the cost prices of the articles are the same, then what is the ratio of SP1 and SP2?

- Ans
- 1. 4 : 3
 - 2. 7 : 4
 - 3. 7 : 5
 - 4. 6 : 5

Question ID : 239087832
Status : Answered
Chosen Option : 1

Q.18 If ₹1000 is invested for two years at simple interest at the rate of 12.5% per annum, then what is the amount?

- Ans
- 1. ₹1250
 - 2. ₹1325
 - 3. ₹1275
 - 4. ₹1125

Question ID : 239087837
Status : Answered
Chosen Option : 1

Q.19 What is the total surface area and the curved surface area of a solid hemisphere of radius 14 cm?

- Ans
- 1. 924 cm^2 , 616 cm^2
 - 2. 5544 cm^2 , 1848 cm^2
 - 3. 1848 cm^2 , 1232 cm^2
 - 4. 2772 cm^2 , 1848 cm^2

Question ID : 239087843
Status : Not Answered
Chosen Option : --

The proportion of students in three classes is 3 : 4 : 5. If the number of students is increased by 20 in each class, then the proportion changes to 4 : 5 : 6. What is the initial number of students in the three classes taken together?

- Ans
- 1. 300
 - 2. 280
 - 3. 320
 - 4. 240

Question ID : 239087834
Status : Answered
Chosen Option : 4

Q.21 What is the value of
 $(3 \times 4 \text{ of } 12 \div 2) \div 9 \times 4 + 4 \div 8 + 3 \times 2 ?$

- Ans
- 1. $\frac{37}{2}$
 - 2. $\frac{94}{3}$
 - 3. $\frac{77}{2}$
 - 4. $\frac{89}{3}$

Question ID : 239087825
Status : Answered
Chosen Option : 3

Q.22 A alone can do a work in 20 days. A and B together can do the same work in 15 days. B and C together can do the same work in $\frac{75}{2}$ days. What is the ratio of the efficiency of A, B and C in terms of doing the work?

- Ans
- 1. 5 : 3 : 1
 - 2. 5 : 4 : 3
 - 3. 10 : 4 : 1
 - 4. 15 : 5 : 3

Question ID : 239087840
Status : Answered
Chosen Option : 4

Q.23 What is the greatest number which when divides 460, 491 and 553, leave 26 as remainder in each case?

- Ans
- 1. 31
 - 2. 35
 - 3. 33
 - 4. 27

Question ID : 239087824
Status : Not Answered
Chosen Option : --

Q.24 Five technicians of a Studio A can do a work in 30 days. Eight technicians of a Studio B can do the same work in 15 days. In how many days can one technician of Studio A and one technician of Studio B, together do the same work?

- 1. $\frac{190}{3}$
- 2. $\frac{200}{3}$
- 3. $\frac{220}{9}$
- 4. $\frac{250}{9}$

Question ID : 239087839
Status : Not Answered
Chosen Option : --

Q.25 If profit is 20% of the selling price, then profit is what percent of the cost price?

- Ans
- 1. 15%
 - 2. 20%
 - 3. 25%
 - 4. 22.5%

Question ID : 239087833
Status : Answered
Chosen Option : 3

Section : General awareness

Q.1 Which among the following is NOT a metal?

- Ans
- 1. iron
 - 2. copper
 - 3. selenium
 - 4. tin

Question ID : 239087589
Status : Answered
Chosen Option : 2

Q.2 Five year plan was introduced in India in which year?

- Ans
- 1. 1947
 - 2. 1955
 - 3. 1951
 - 4. 1958

Question ID : 239087582
Status : Answered
Chosen Option : 3

Q.3 Which part of the Constitution deals with amendments of the Constitution?

- Ans
- 1. Part XX
 - 2. Part XV
 - 3. Part VIII

4. Part X

Question ID : 239087586
Status : Answered
Chosen Option : 2

Q.4 Who of the following personalities is known as 'Loknayak'?

- Ans
- 1. Rajiv Gandhi
 - 2. Atal Bihari Vajpayee
 - 3. A. P. J. Abdul Kalam
 - 4. Jayaprakash Narayan

Question ID : 239087579
Status : Answered
Chosen Option : 4

Q.5 15th Finance commission is headed by:

- Ans
- 1. Amitabh Kant
 - 2. N K Singh
 - 3. Y V Reddy
 - 4. Urjit Patel

Question ID : 239087584
Status : Answered
Chosen Option : 2

Q.6 Which among the following states has the longest coastline?

- Ans
- 1. Tamil Nadu
 - 2. Maharashtra
 - 3. Andhra Pradesh
 - 4. Goa

Question ID : 239087595
Status : Answered
Chosen Option : 2

Q.7 Michael Phelps, the celebrated swimmer belongs to _____.

- Ans
- 1. Norway
 - 2. America
 - 3. Switzerland
 - 4. Australia

Question ID : 239087577
Status : Answered
Chosen Option : 4

Q.8 Mohenjo-daro lies on bank of which river?

- Ans
- 1. Ravi
 - 2. Indus

- 3. Ghaggar
- 4. Saraswati

Question ID : 239087597
Status : Answered
Chosen Option : 3

Q.9 Dronacharya award is associated with _____.

- Ans**
- 1. Music
 - 2. Education
 - 3. Sports
 - 4. Dance

Question ID : 239087578
Status : Answered
Chosen Option : 3

Q.10 Which of the following pairs is correct?

- Ans**
- 1. Nandadevi National Park-Uttar Pradesh
 - 2. Gir National Park-Maharashtra
 - 3. Great Himalyan National Park-Himachal Pradesh
 - 4. Keoladeo Ghana National Park-Assam

Question ID : 239087593
Status : Answered
Chosen Option : 3

Q.11 Which of the following text is referred as 'Vedanta'?

- Ans**
- 1. Vedangas
 - 2. Aranyakas
 - 3. Upanishads
 - 4. Brahmanas

Question ID : 239087598
Status : Answered
Chosen Option : 1

Q.12 Who among the following was the youngest person to receive a Nobel Prize?

- Ans**
- 1. Marie Curie
 - 2. William Lawrence Bragg
 - 3. James Watson
 - 4. Kenneth Arrow

Question ID : 239087592
Status : Answered
Chosen Option : 1

Q.13 What is the symbol of gold?

- Ans**
- 1. Hg

- 2. Ag
- 3. Au
- 4. Mg

Question ID : 239087588
Status : Answered
Chosen Option : 2

Q.14 Which award is often referred to as the 'Nobel Prize of architecture'?

- Ans
- 1. Ramon Magsaysay
 - 2. Jawaharlal Nehru prize
 - 3. Pritzker prize
 - 4. Abel prize

Question ID : 239087581
Status : Answered
Chosen Option : 2

Q.15 World Aids Day is celebrated on:

- Ans
- 1. 5th June
 - 2. 1st November
 - 3. 1st December
 - 4. 8th March

Question ID : 239087590
Status : Answered
Chosen Option : 1

Q.16 Nationalist Congress Party was formed in which year?

- Ans
- 1. 1980
 - 2. 1992
 - 3. 1999
 - 4. 1984

Question ID : 239087596
Status : Answered
Chosen Option : 4

Q.17 The branch of medical science that deals with kidneys is known as:

- Ans
- 1. Cardiology
 - 2. Otorhinolaryngology
 - 3. Ophthalmology
 - 4. Nephrology

Question ID : 239087591
Status : Answered
Chosen Option : 4

Q.18 With reference to the

incarnations of Lord Vishnu?

- Ans 1. Garuda
 2. Kurma
 3. Varaha
 4. Matsya

Question ID : 239087575
Status : Answered
Chosen Option : 2

Q.19 Who is the Leader of the House in the Seventeenth Lok Sabha?

- Ans 1. Narendra Modi
 2. Rajnath Singh
 3. Sushil Kumar Shinde
 4. Amit Shah

Question ID : 239087585
Status : Answered
Chosen Option : 1

Q.20 Our national anthem 'Jana Gana Mana' has been adopted from which language?

- Ans 1. Hindi
 2. Assamese
 3. Marathi
 4. Bengali

Question ID : 239087576
Status : Answered
Chosen Option : 4

Q.21 Which of the following is NOT a scheduled language of India?

- Ans 1. Manipuri
 2. Sindhi
 3. Rajasthani
 4. Bodo

Question ID : 239087587
Status : Answered
Chosen Option : 4

Q.22 Who of the following Indians has NOT been awarded with the Noble Prize?

- Ans 1. Kailash Satyarthi
 2. Hargobind Khorana
 3. Rabindranath Tagore
 4. Mahatma Gandhi

Question ID : 239087580
Status : Answered

Q.23 Which of the following countries does NOT share border with India?

- Ans**
- 1. Bangladesh
 - 2. Iran
 - 3. Nepal
 - 4. Myanmar

Question ID : 239087594
Status : Answered
Chosen Option : 2

Q.24 Which organization publishes 'World Development Report'?

- Ans**
- 1. International Monetary Fund (IMF)
 - 2. United Nations Development Programme (UNDP)
 - 3. World Economic Forum
 - 4. World Bank

Question ID : 239087583
Status : Answered
Chosen Option : 2

Q.25 In July 2019, which of the following cities inscribed on UNESCO's World Heritage List?

- Ans**
- 1. Hyderabad
 - 2. Ahmedabad
 - 3. Orchha
 - 4. Jaipur

Question ID : 239087574
Status : Answered
Chosen Option : 4