

# Multi Tasking Non Technical Staff Havaldar CBIC and CBN Exam 2021

Roll Number	
Candidate Name	
Venue Name	
Exam Date	06/07/2022
Exam Time	9:00 AM - 10:30 AM
Subject	MTS Non technical and Havaldar Examination 2021

## Answered Question

Q.1 Select the option that corrects the misspelt words in the given sentence.

I can't picture him fighting or picking on anyone.

- Ans  1. I can't picture him fighting or picking on anyone.
2. I can't picture him fighting or picking on anyone.
3. I can't picture him fighting or picking on anyone.
4. I can't picture him fighting or picking on anyone.

Question ID : 26433051102

Status : Answered

Chosen Option : 1

Q.2 Select the most appropriate option to fill in the blank.

The boys were tired, but not too tired to examine the little hut \_\_\_\_\_.

- Ans  1. weakly
2. weakly
3. weakly
4. weakly

Question ID : 26433050389

Status : Answered

Chosen Option : 3

Q.3 Select the most appropriate option to fill in the blank.

It is better to be prompt and organised than to be \_\_\_\_\_.

- Ans  1. prompt
2. promptness
3. efficient
4. efficient

Question ID : 26433050792

Status : Answered

Chosen Option : 4

Q.4 Select the option that will improve the underlined part of the sentence. In case no improvement is needed, select 'No improvement required'.

Why doesn't you try calling your family again?

- Ans
- 1. you don't have
  - 2. doesn't you tried
  - 3. you should
  - 4. No improvement required

Question ID : 26433050760

Status : Answered

Chosen Option : 3

Q.5 Parts of the following sentence have been given as options. One of them may contain an error. Select the part that contains the error from the given options. If you don't find any error, mark 'No error' as your answer.

The telecom growth story is a important component of the broader story of India.

- Ans
- 1. No error
  - 2. The telecom growth story is
  - 3. The broader story of India
  - 4. a important component

Question ID : 26433051060

Status : Answered

Chosen Option : 3

Q.6 Select the most appropriate ANTONYM of the underlined word.

Their reverence reaches its zenith here at the birthplace of the country's founder.

- Ans
- 1. crest
  - 2. nadir
  - 3. horizon
  - 4. pinnacle

Question ID : 26433051663

Status : Answered

Chosen Option : 2

Q.7 Select the option that will improve the underlined part of the given sentence. In case no improvement is needed, select 'No improvement required'.

His mouth left open as he realise the truth.

- Ans
- 1. He opened his mouth as he realised
  - 2. left opened as he perceived
  - 3. was left opened as he realised
  - 4. No improvement required

Question ID : 26433051820

Status : Answered

Chosen Option : 1

Q.8 The following sentence has been divided into parts. One of them may contain an error. Select the part that contains the error from the given options. If you don't find any error, mark "No error" as your answer.

Solar storms can / impact Earth-dwellers / in significantly ways.

- Ans  1. Solar storms can  
 2. impact Earth-dwellers  
 3. No error  
 4. in significantly ways.

Question ID : 26433050949  
Status : Answered  
Chosen Option : 4

Q.9 Select the option that will improve the underlined part of the given sentence. In case no improvement is needed, select 'No improvement required'.

I noticed some strawberries grown in which of the gardens.

- Ans  1. in which of  
 2. grows upon most of  
 3. No improvement required  
 4. was in which of

Question ID : 26433050588  
Status : Answered  
Chosen Option : 4

Q.10 Select the most appropriate synonym of the given word.

Random

- Ans  1. Utterly  
 2. Confused  
 3. Systematic  
 4. Intense

Question ID : 26433050965  
Status : Answered  
Chosen Option : 4

Q.11 Select the option that can be used as a one-word substitute for the given group of words.

Deliberately and maliciously set something (buildings usually) on fire

- Ans  1. Aggravate  
 2. Incite  
 3. Arsonist  
 4. Apex

Question ID : 26433051379  
Status : Answered  
Chosen Option : 3

Q.12 Select the option that will improve the underlined part of the sentence. In case no improvement is needed, select 'No improvement required'.

He stood up from their chair to signal the end of the meeting.

- Ans
- 1. up from
  - 2. upon of his
  - 3. No improvement required
  - 4. below in their

Question ID : 26433051065  
Status : Answered  
Chosen Option : 1

Q.13 Select the option that will improve the underlined part of the given sentence. In case no improvement is needed, select 'No improvement required'.

Shubham and I were watching football match in our bedroom.

- Ans
- 1. I were watching
  - 2. I was watching
  - 3. me is watching
  - 4. We were watching

Question ID : 26433050961  
Status : Answered  
Chosen Option : 4

Q.14 Select the correctly spelt word.

- Ans
- 1. influance
  - 2. influence
  - 3. influance
  - 4. influenace

Question ID : 26433050945  
Status : Answered  
Chosen Option : 2

Q.15 Select the most appropriate meaning of the given idiom.

**Out for the count**

- Ans
- 1. Very expensive
  - 2. Prepared for battle
  - 3. Prepared to meet a crisis
  - 4. Ready for security

Question ID : 26433051385  
Status : Answered  
Chosen Option : 3

Q.16 Select the option that will improve the underlined part of the given sentence. In case no improvement is needed, select 'No improvement required'.

Although the waters may have receded, the aftermath of one of the world's biggest natural disaster had only just begun.

- Ans
- 1. the aftermath of one of the world's biggest natural disasters has
  - 2. No improvement required
  - 3. the aftermath of one of the world's biggest natural disasters has
  - 4. the aftermath of one of the world's biggest natural disaster

Question ID : 26433051595  
Status : Answered  
Chosen Option : 1

Q.17 Select the most appropriate synonym of the given word.

Modest

- Ans
- 1. Bold
  - 2. Humble
  - 3. Drama
  - 4. Gave

Question ID : 26433051301  
Status : Answered  
Chosen Option : 2

Q.18 The following sentence has been split into four segments. Identify the segment that contains a grammatical error.

Most of the / freshwater lake in India / are in the / Himalayan region.

- Ans
- 1. Himalayan region
  - 2. Most of the
  - 3. are in the
  - 4. freshwater lake in India

Question ID : 26433051470  
Status : Answered  
Chosen Option : 4

Q.19 Select the most appropriate ANTONYM of the given word.

Retute

- Ans
- 1. Retract
  - 2. Acknowledge
  - 3. Deny
  - 4. Dispute

Question ID : 26433050937  
Status : Answered  
Chosen Option : 2

Q.20 Select the most appropriate meaning of the given idiom.

Draw the line

- Ans
- 1. To accept someone's idea
  - 2. To give a second chance
  - 3. To move on from a past relationship
  - 4. To end a relationship

Question ID : 26433050993

Status : Answered

Chosen Option : 4

Comprehension:

In the following passage, some words have been deleted. Read the passage carefully and select the most appropriate option to fill in each blank.

The Government is taking seriously the (1) \_\_\_\_\_ of road safety and is committed to reducing the number of people killed in accidents. Forums are being conducted (2) \_\_\_\_\_ to bring law-makers, law enforcement officers and road users together to discuss ways to (3) \_\_\_\_\_ the rise in road accidents. Everyone agrees that more needs to be done on road safety in its determination to (4) \_\_\_\_\_ the rate of road accidents in the country. The Government, with the cooperation of relevant agencies, is making serious (5) \_\_\_\_\_ to instil proper road culture in children, young adults and the public in general.

SubQuestion No : 21

Q.21 Select the most appropriate option to fill in blank number 1.

- Ans
- 1. relation
  - 2. residue
  - 3. concern
  - 4. rate

Question ID : 26433051374

Status : Answered

Chosen Option : 3

Comprehension:

In the following passage, some words have been deleted. Read the passage carefully and select the most appropriate option to fill in each blank.

The Government is taking seriously the (1) \_\_\_\_\_ of road safety and is committed to reducing the number of people killed in accidents. Forums are being conducted (2) \_\_\_\_\_ to bring law-makers, law enforcement officers and road users together to discuss ways to (3) \_\_\_\_\_ the rise in road accidents. Everyone agrees that more needs to be done on road safety in its determination to (4) \_\_\_\_\_ the rate of road accidents in the country. The Government, with the cooperation of relevant agencies, is making serious (5) \_\_\_\_\_ to instil proper road culture in children, young adults and the public in general.

SubQuestion No : 22

Q.22 Select the most appropriate option to fill in blank number 2.

- Ans
- 1. concern
  - 2. reputation
  - 3. immediate
  - 4. track

Question ID : 26433051375

### Comprehension:

In the following passage, some words have been deleted. Read the passage carefully and select the most appropriate option to fill in each blank.

The Government is taking seriously the (1) \_\_\_\_\_ of road safety and is committed to reducing the number of people killed in accidents. Forums are being conducted (2) \_\_\_\_\_ to bring law-makers, law enforcement officers and road users together to discuss ways to (3) \_\_\_\_\_ the rise in road accidents. Everyone agrees that more needs to be done on road safety in its determination to (4) \_\_\_\_\_ the rate of road accidents in the country. The Government, with the cooperation of relevant agencies, is making serious (5) \_\_\_\_\_ to instil proper road culture in children, young adults and the public in general.

SubQuestion No : 23

Q.23 Select the most appropriate option to fill in blank number 3.

- Ans
- A 1. analysis
  - B 2. forum
  - C 3. combat
  - D 4. deal

Question ID : 26433051376

Status : Answered

Chosen Option : 2

### Comprehension:

In the following passage, some words have been deleted. Read the passage carefully and select the most appropriate option to fill in each blank.

The Government is taking seriously the (1) \_\_\_\_\_ of road safety and is committed to reducing the number of people killed in accidents. Forums are being conducted (2) \_\_\_\_\_ to bring law-makers, law enforcement officers and road users together to discuss ways to (3) \_\_\_\_\_ the rise in road accidents. Everyone agrees that more needs to be done on road safety in its determination to (4) \_\_\_\_\_ the rate of road accidents in the country. The Government, with the cooperation of relevant agencies, is making serious (5) \_\_\_\_\_ to instil proper road culture in children, young adults and the public in general.

SubQuestion No : 24

Q.24 Select the most appropriate option to fill in blank number 4.

- Ans
- A 1. deal
  - B 2. forum
  - C 3. combat
  - D 4. promote

Question ID : 26433051377

Status : Answered

Chosen Option : 1

### Comprehension:

In the following passage, some words have been deleted. Read the passage carefully and select the most appropriate option to fill in each blank.

The Government is taking seriously the (1) \_\_\_\_\_ of road safety and is committed to reducing the number of people killed in accidents. Forums are being conducted (2) \_\_\_\_\_ to bring law-makers, law enforcement officers and road users together to discuss ways to (3) \_\_\_\_\_ the rise in road accidents. Everyone agrees that more needs to be done on road safety in its determination to (4) \_\_\_\_\_ the rate of road accidents in the country. The Government, with the cooperation of relevant agencies, is making serious (5) \_\_\_\_\_ to instil proper road culture in children, young adults and the public in general.

SubQuestion No : 25

Q.25 Select the most appropriate option to fill in blank number 5.

- Ans  1. acknowledging them  
 2. presents  
 3. combat  
 4. struggles

Question ID : 26433051370

Status : Answered

Chosen Option : 3

Q.26 Select the most appropriate option to fill in blank number 6.

Q.1 Select the number from the given options that can replace the question mark (?) in the following series.

205, 222, 241, 264, 293, ?

- Ans  1. 330  
 2. 341  
 3. 359  
 4. 304

Question ID : 26433048944

Status : Answered

Chosen Option : 2

Q.2 In a certain code language, 'TYR' is coded as '65', and 'GAP' is coded as '26'. How will 'MOJ' be coded in that language?

- Ans  1. 41  
 2. 43  
 3. 26  
 4. 39

Question ID : 26433048945

Status : Answered

Chosen Option : 1



Q.3 Select the option that is related to the sixth word in the same way as the first word is related to the second word and the third word is related to the fourth word.

Speech : Dumb :: Sight : Blind :: ? : Deaf

- Ans  1. Voice
2. Vision
3. Wits
4. Language

Question ID : 26433048094  
Status : Answered  
Chosen Option : 1

Q.4 In a certain code language, 'Floors white marble' is written as 'tp aj pr', 'Tyre are hard white' is written as 'pr qa lr ak' and 'Marble are shiny' is written as 'tp lr s'. What is the code for 'Shiny floors' in that code language?

- Ans  1. lr aj
2. lr s
3. tp aj
4. aj pr

Question ID : 26433048793  
Status : Answered  
Chosen Option : 3

Q.5 Which of the mathematical signs should be interchanged in the given equation to make it mathematically correct?

$$31 \div 14 \times 9 + 3 - 7 = 66$$

- Ans  1.  $\times$  and  $-$
2.  $-$  and  $+$
3.  $+$  and  $-$
4.  $-$  and  $\div$

Question ID : 26433048336  
Status : Answered  
Chosen Option : 1

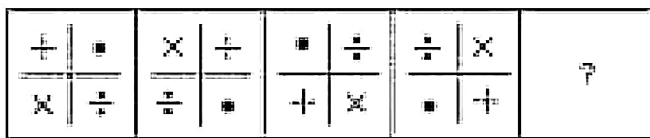
Q.6 Select the option in which the two numbers are related in the same way as are the numbers in the give number pair.

31 : 48

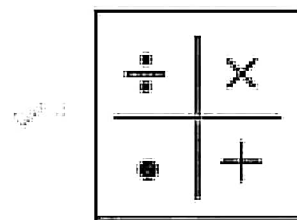
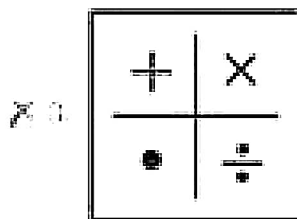
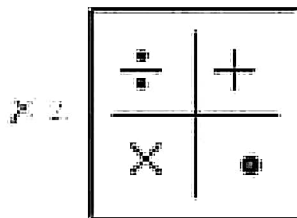
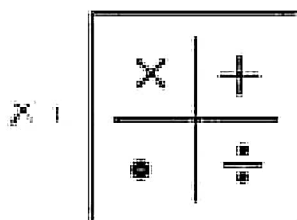
- Ans  1. 29 : 44
2. 42 : 62
3. 33 : 71
4. 1 : 15

Question ID : 26433048742  
Status : Answered  
Chosen Option : 4

Q.7 Select the figure from amongst the given options that can replace the question mark (?) in the following series.



Ans



Question ID : 26433048464  
 Status : Answered  
 Chosen Option : 4

Q.8 Read the given statements and conclusions carefully. Assuming that the information given in the statements is true, even if it appears to be at variance with commonly known facts, decide which of the given conclusions logically follow(s) from the statements.

Statements:

Some tablets are laptops.

Some laptops are computers.

Conclusions:

I. Some tablets are computers.

II. Some laptops are not tablets.

- Ans
1. Only conclusion I follows
2. Both conclusions I and II follow
3. Neither conclusion I nor II follows
4. Only conclusion II follows

Question ID : 26433048305  
 Status : Answered  
 Chosen Option : 3

Q.9 Select the option that is related to the third number in the same way as the second number is related to the first number and the fourth number is related to the third number.

16: 36 :: 26: 56 :: 37: ?

- Ans
- 1. 76
  - 2. 70
  - 3. 74
  - 4. 72

Question ID : 26433048369  
 Status : Answered  
 Chosen Option : 4

Q.10 The square of 6.45 is a piece of paper cut the manner in which the 6.45 paper has been cut is shown in the following figure. How would this paper look when unfolded?



- Ans
- 1.
  - 2.
  - 3.
  - 4.

Question ID : 26433048537  
 Status : Answered  
 Chosen Option : 1

Q.11 Select the option that is related to the fifth letter-cluster in the same way as the second letter-cluster is related to the first letter-cluster and the fourth letter-cluster is related to the third letter-cluster.

GOOD : HSXT :: BEST : CIBJ :: COOL : ?

- Ans
- 1. DSSE
  - 2. DSXZ
  - 3. DSZH
  - 4. DSSE

Question ID : 26433048295  
 Status : Answered  
 Chosen Option : 4

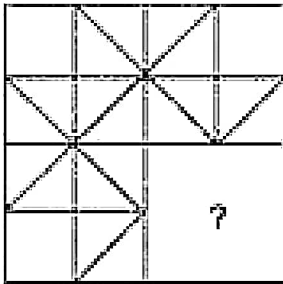
Q.12 Select the option in which the pair of letter-clusters share the same relationship as that shared by the given pair of letter-clusters.

MOD : KMZ :: ?

- Ans  1. AUK : YHN  
 2. LOP : QNR  
 3. BND : OLB  
 4. STU : FRZ

Question ID : 26433048949  
Status : Answered  
Chosen Option : 2

Q.13 Select the figure from the options that can replace the question mark to complete the pattern.



Ans

- 1.
- 2.
- 3.
- 4.

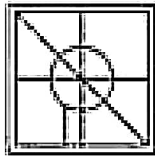
Question ID : 26433040067  
Status : Answered  
Chosen Option : 1

Q.14 Select the option figure in which the given figure is embedded.

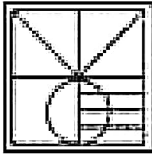


Ans

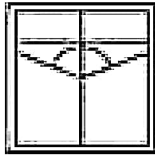
X 1.



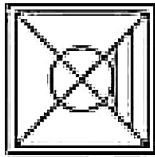
X 2.



X 3.



X 4.



Question ID : 26433048760

Status : Answered

Chosen Option : 2

Q.15 In a certain code language, 'CYLINDER' is written as 'CYLNDERR', 'CERTAIN' is written as 'CFRTBJN', and 'PURPOSE' is written as 'PVRPPSF'. How will 'QUEUEING' be written in that language?

Ans X 1. CFVFWJNS

X 2. QDFVBJND

X 3. RVPVBJNS


X 4. QDFVJNS

Question ID : 26433048097

Status : Answered

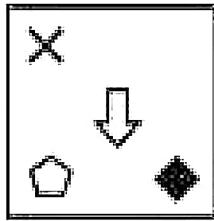
Chosen Option : 4

Q.16 Select the figure from among the given options that can replace the question mark (?) in the following series.

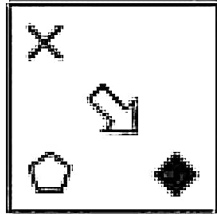


Ans

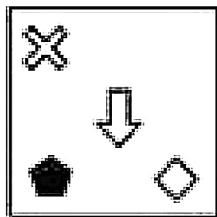
A



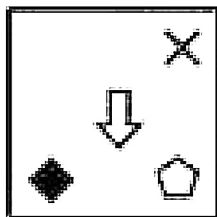
B



C



D



Question ID : 26435048342  
 Status : Answered  
 Chosen Option : 1

Q.17 Read the given statements and conclusions carefully. Assuming that the information given in the statements is true, even if it appears to be at variance with commonly known facts, decide which of the given conclusions logically follow(s) from the statements.

Statements:

- I. Some blue are red.
- II. Some green are red.

Conclusions:

- I. No blue is green.
- II. No red is green.

Ans

- A. Only conclusion I follows.
- B. Both conclusions I and II follow.
- C. Only conclusion II follows.
- D. Both conclusions I and II do not follow.

Question ID : 26435048753  
 Status : Answered  
 Chosen Option : 4

Q.18 In a certain code language, '567' is written as 'see good pictures', '539' is written as 'good and beautiful', and '967' is written as 'pictures are beautiful'. What is the code for the word 'see' in that language?

- Ans  1. 567
2. 539
3. 967
4. 539

Question ID : 26433048074  
Status : Answered  
Chosen Option : 1

Q.19 Select the option that can replace the question mark (?) in the following series.

B, D, G, L, 5, 7

- Ans  1. E
2. F
3. H
4. C

Question ID : 26433048318  
Status : Answered  
Chosen Option : 3

Q.20 Seven boys J, M, N, K, P, L and Q sit in a row facing the South (but not necessarily in the same order). K sits fifth to the left of J. K does not sit at any of ends. L sits exactly in the middle of the row. E sits third to the right of M. Only two boys sit between Q and P. Q is not the immediate neighbour of L. Three of the following are similar by a certain logic and form a group. Which of the following does NOT belong to that group?

- Ans  1. MN
2. PQ
3. LJ
4. KL

Question ID : 26433048855  
Status : Answered  
Chosen Option : 4

Q.21 After interchanging the two numbers 3 and 6, what will be the value of the given expression?

$$12 \times 3 \div 6 + 9 - 3$$

- Ans  1. 18
2. 25
3. 20
4. 26

Question ID : 26433048939  
Status : Answered  
Chosen Option : 3

Q.22 Select the option that is related to the 10th number in the same way as the second number is related to the first number and the fourth number is related to the third number.

23 : 72 :: 38 : 117 :: 46 : ?

Ans  1. 139

2. 134

3. 131

4. 132

Question ID : 26435049479

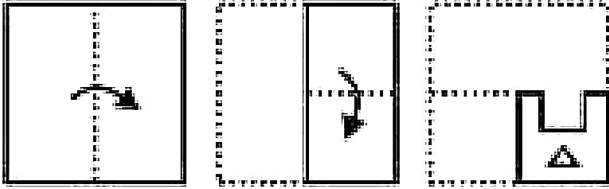
Status : Answered

Chosen Option : 3

mpcareer.in

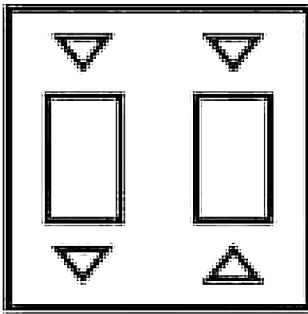


Q.23 The sequence of folding a piece of paper and the manner in which the folded paper has been cut is shown in the following figures. How would this paper look when unfolded?

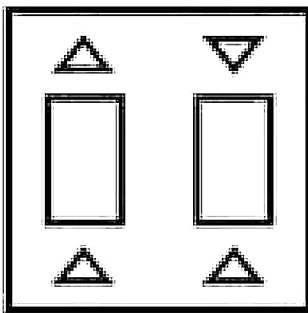


Ans

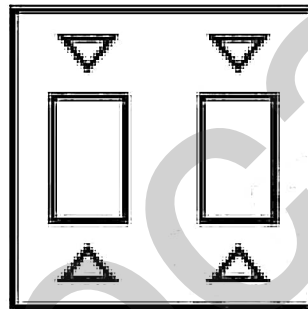
X 1



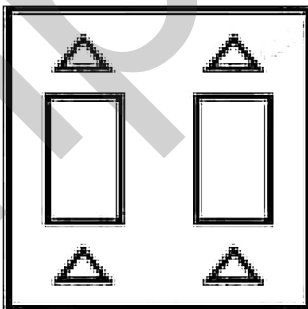
X 2



✓



X 4



Question ID : 26433048887  
 Status : Answered  
 Chosen Option : 3

Q.24 The weight of seven boys B1, B2, B3, B4, B5, B6 and B7 are compared. The weight of B5 is less than only one boy and more than that of B6. The weight of B4 is neither more nor less than B6 but more than B1, B7, B3. Who weighs the most?

- Ans
- 1. B5
  - 2. B1
  - 3. B6
  - 4. B7

Question ID : 26433048857  
Status : Answered  
Chosen Option : 2

Q.25 Seven sisters, Anita, Babita, Sunita, Dixita, Rita, Lalita and Geeta are standing in a row facing north. Lalita is standing to the immediate right of Rita who stands fourth to the right of Geeta. Only Sunita stands exactly between Babita and Dixita. Dixita stands at the middle position. Who stands at the rightmost position?

- Ans
- 1. Lalita
  - 2. Rita
  - 3. Geeta
  - 4. Sunita

Question ID : 26433040472  
Status : Answered  
Chosen Option : 2

Answer : 1,3,4

Q.1 If  $A = \frac{2}{3} + \frac{1}{4} \times \frac{1}{5} + \frac{1}{6} - \frac{1}{6}$  and  $B = \frac{1}{3} - \frac{2}{4} \times \frac{2}{5} + \frac{1}{6}$ , then what is the value of  $A - B$ ?

- Ans
- 1.  $\frac{17}{20}$
  - 2.  $\frac{9}{20}$
  - 3.  $\frac{7}{40}$
  - 4.  $\frac{1}{5}$

Question ID : 26433049814  
Status : Answered  
Chosen Option : 3

Q.2 The perimeter of a square is equal to the perimeter of a rectangle, and the area of a circle with radius 12 cm. The area of the square is  $412 \text{ cm}^2$ . Find the area of the rectangle.

- Ans
- A.  $412 \text{ cm}^2$
  - B.  $394 \text{ cm}^2$
  - C.  $324 \text{ cm}^2$
  - D.  $336 \text{ cm}^2$

Question ID : 26433048517  
Status : Answered  
Chosen Option : 4

Q.3 In a competitive exam, the minimum qualification percentages for Category A and Category B jobs are 25% and 40% respectively. A candidate scored 80 marks out of 100 in Category B job. In 10% marks. What is the minimum qualification marks to secure a Category A job?

- Ans
- A. 55
  - B. 60
  - C. 50
  - D. 65

Question ID : 26433050074  
Status : Answered  
Chosen Option : 2

Q.4 If  $\frac{32 + 16 - 5 - 2}{11 + 12 + 8 - 5 + 2} = \frac{1}{P}$ , then what is the value of P?

- Ans
- A.  $\frac{4}{3}$
  - B.  $\frac{9}{4}$
  - C.  $\frac{16}{4}$
  - D.  $\frac{4}{16}$

Question ID : 26433049663  
Status : Answered  
Chosen Option : 3

Q.5 If the total surface area of a sphere of radius  $r$  cm is equal to the total surface area of a cube of side  $s$  cm, which of the following is true?

- Ans
- A.  $r > s$
  - B.  $r \geq s$
  - C.  $r = s$
  - D.  $r < s$

Question ID : 26433050341  
Status : Answered  
Chosen Option : 4

Q.6 The average salary of 12 employees in a company was revealed to be ₹20000 at the start of the month. At the end of the month, the average salary increased by 15%. Find the salary of the manager.

- Ans
- A. ₹36,000
  - B. ₹46,000
  - C. ₹28,000
  - D. ₹42,000

Question ID : 26433049497  
Status : Answered  
Chosen Option : B

Q.7 There is a simple interest of ₹100000 earned on a two-year deposit of ₹4 lakh amount. How much more interest would be earned if he had invested the same amount for a period of 3 years, compounded annually?

- Ans
- A. ₹48
  - B. ₹64
  - C. ₹32
  - D. ₹20

Question ID : 26433050002  
Status : Answered  
Chosen Option : C

Q.8 The average of a set of 20 numbers is P. If one of the numbers from the set is replaced with 85, then the average becomes (P + 2). What is the value of the number that is replaced?

- Ans
- A. 98
  - B. 94
  - C. 60
  - D. 104

Question ID : 26433049679  
Status : Answered  
Chosen Option : A

Q.9 The diameter of a circle is 112 cm. What is the circumference of this circle? [Use  $\pi = \frac{22}{7}$ ]

- Ans
- A. 156 cm
  - B. 396 cm
  - C. 416 cm
  - D. 352 cm

Question ID : 26433049659  
Status : Answered  
Chosen Option : D

Q.10 If the selling price of a shirt increased from ₹400 to ₹410, the profit increased by 4%. What is the cost price of the shirt?

- Ans
- A 1. ₹650
  - A 2. ₹750
  - A 3. ₹450
  - A 4. ₹500

Question ID : 26433050976  
Status : Answered  
Chosen Option : 2

Q.11 If the retail price of a table is 10% less than its price. And a sum of ₹20 is given on the sale of the table. What will be its profit percentage?

- Ans
- A 1. 60%
  - A 2. 80%
  - A 3. 50%
  - A 4. 40%

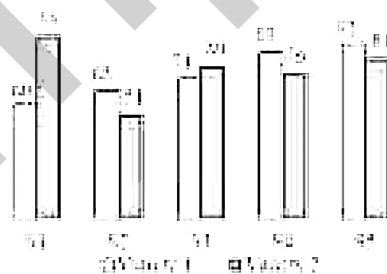
Question ID : 26433049674  
Status : Answered  
Chosen Option : 4

Q.12 A man is sold for ₹1,500 at a profit of 50%. If the selling price is 120% then what will be the loss percentage?

- Ans
- A 1. 30%
  - A 2. 20%
  - A 3. 10%
  - A 4. 25%

Question ID : 26433049649  
Status : Answered  
Chosen Option : 2

Q.13 The bar chart given below shows the number of tea packets of 250 grams sold by P shop during a particular week.



What is the average number of tea packets sold per day, both the varieties sold together?

- Ans
- A 1. 154.4
  - A 2. 152.8
  - A 3. 157.6
  - A 4. 149.2

Question ID : 26433049896  
Status : Answered

Q.14 S is 20% more than T. T is 10% less than U. What is the ratio of S to U?

- Ans
- A. 27 : 25
  - B. 23 : 19
  - C. 25 : 21
  - D. 29 : 24

Question ID : 26433049700  
Status : Answered  
Chosen Option : 1

Q.15 P<sub>1</sub> alone can do  $\frac{1}{4}$  of the work in 10 days. P<sub>2</sub> alone can do  $\frac{1}{5}$  of the work in 10 days. P<sub>3</sub> alone can do  $\frac{1}{6}$  of the work in 10 days. In how many days can they complete the work if all three work together?

- Ans
- A.  $\frac{60}{16}$  days
  - B.  $\frac{110}{19}$  days
  - C.  $\frac{100}{17}$  days
  - D.  $\frac{90}{17}$  days

Question ID : 26433049643  
Status : Answered  
Chosen Option : 2

Q.16 The LCM of two positive integers L and M is the least number and the HCF of the two integers L, M. The number of pairs (L, M) is

- Ans
- A. 6
  - B. 10
  - C. 9
  - D. 8

Question ID : 26433050970  
Status : Answered  
Chosen Option : 1

Q.17 The following pie chart shows the number of boys who took part in different sports in a school as percentage of the total number of boys, and taking this amount by their 2 departments together.



If the total number of boys who took part in the different sports by their 2 departments together was 1400, then what was the total number of boys who took part in 'A' and 'B' taken together?

- Ans
- A. 240
  - B. 196
  - C. 224
  - D. 210

Question ID : 26433049667  
 Status : Answered  
 Chosen Option : 3

Q.18 The average weight of A, B, and C is 42 kg. If the average weight of B and C is 44 kg and that of A and B is 46 kg, then what will be the weight of C?

- Ans
- A. 24 kg
  - B. 38 kg
  - C. 36 kg
  - D. 63 kg

Question ID : 26433050321  
 Status : Answered  
 Chosen Option : 1

Q.19 The speed of a train is 40 km/h. The speed of the train is 2 km/h. What is the total distance that the train will travel if it travels for 4 hours at 40 km/h and 3 hours at 2 km/h?

- Ans
- A. 70 km
  - B. 72 km
  - C. 64 km
  - D. 68 km

Question ID : 26433049795  
 Status : Answered  
 Chosen Option : 4

Q.20 The table below shows the number of balls bowled and the number of wickets taken by five bowlers in a match.

Bowler	Overs	Wickets
Jadeja	6	2
Jasprit	8	2
Bumrah	7	1
Pandya	1	3
Ashwin	3	1

If in each over every bowler bowled 6 balls, what number of balls bowled had bowled the highest number of balls per wicket taken by him?

- Ans
- A. Jadeja
  - B. Bumrah
  - C. Ashwin
  - D. Jasprit

Question ID : 26433050107  
Status : Answered  
Chosen Option : 3

Q.21 What number must be subtracted from each of the numbers 38, 59, 48 and 19, to obtain the same new value in all properties?

- Ans
- A. 9
  - B. 11
  - C. 7
  - D. 5

Question ID : 26433049305  
Status : Answered  
Chosen Option : 3

Q.22 The price of the oil increases by 5% every year. If the current price of the oil is ₹100 per litre, then what will be the price of it next year after 2 years?

- Ans
- A. ₹106.8
  - B. ₹101.5
  - C. ₹100.5
  - D. ₹108.2

Question ID : 26433040582  
Status : Answered  
Chosen Option : 4



Q.23 A person has some amount of ₹1000 and ₹2000 in hand. The rate of the products of the numbers of ₹100 and ₹2000 are 10% and 15% respectively. The number of ₹100 and ₹2000 are  $x$  and  $y$  respectively. What would be the minimum amount of money that is possible?

- Ans
- A. ₹50
  - B. ₹88
  - C. ₹68
  - D. ₹74

Question ID : 26433050180  
Status : Answered  
Chosen Option : 3

Q.24 A and B can do a piece of work alone in 10 days. If A is 25% more efficient than B, in how many days will A and B working together complete the work?

- Ans
- A.  $\frac{150}{11}$  days
  - B.  $\frac{120}{11}$  days
  - C.  $\frac{140}{11}$  days
  - D.  $\frac{130}{11}$  days

Question ID : 26433050044  
Status : Answered  
Chosen Option : 2

Q.25 A man can row a boat down a stream in a speed of 14 km/h and upstream in 11 km/h. If the speed in still water and the speed of the stream, respectively, (Give both speed in km/h and m/s)

- Ans
- A. 13: 5
  - B. 11: 4
  - C. 13: 2
  - D. 13: 6

Question ID : 26433050164  
Status : Answered  
Chosen Option : 3

Q.26 Alluri Sitaram Raju was a tribal freedom fighter from which state of India?

- Q.1 Alluri Sitaram Raju was a tribal freedom fighter from which state of India?
- Ans
- A. Bihar
  - B. Madhya Pradesh
  - C. Andhra Pradesh
  - D. Gujarat

Question ID : 26433047053  
Status : Answered

Q.2 Which country will host the FIFA World Cup 2022?

- Ans
- 1. China
  - 2. South Korea
  - 3. USA
  - 4. England

Question ID : 26433047490

Status : Answered

Chosen Option : 3

Q.3 भारत में इनमें से किस संस्था द्वारा एक रुपये के कपड़े की नोट और सिक्के निर्मित किए जाते हैं?

- Ans
- 1. कॉपीराइट विंग ऑफ इंडिया
  - 2. भारतीय रिजर्व बैंक विंग-भारत
  - 3. एन सी सी
  - 4. केंद्र विंग ऑफ इंडिया

Question ID : 26433047092

Status : Answered

Chosen Option : 1

Q.4 Which of the following elements has the largest atomic radius?

- Ans
- 1. Beryllium
  - 2. Calcium
  - 3. Nitrogen
  - 4. Carbon

Question ID : 26433047573

Status : Answered

Chosen Option : 2

Q.5 Who won a gold medal for India in the javelin throw event at Tokyo Olympics 2020?

- Ans
- 1. Sumit Antil
  - 2. Neeraj Chopra
  - 3. Anshu Kumar
  - 4. Ajay Singh Yadav

Question ID : 26433047069

Status : Answered

Chosen Option : 3

Q.6 In which type of Megalith (grave/monument) were the stone pieces set in a circular shape around the grave?

- Ans  1. Dolmen
2. Dolmen
3. Flush cut grave
4. Menhir

Question ID : 26433047081  
Status : Answered  
Chosen Option : 1

Q.7 Who among the following was Akbar's revenue minister?

- Ans  1. Tansen
2. Todar Mal
3. Raja Man Singh
4. Baidi

Question ID : 26433047482  
Status : Answered  
Chosen Option : 2

Q.8 The feature of Fundamental Rights in the Indian Constitution is borrowed from the Constitution of \_\_\_\_\_.

- Ans  1. Australia
2. Britain
3. Ireland
4. United States of America

Question ID : 26433047489  
Status : Answered  
Chosen Option : 4

Q.9 Sundari trees are found in the \_\_\_\_\_.

- Ans  1. Mahanadi delta
2. Godavari delta
3. Godavari delta
4. Mulapeta delta

Question ID : 26433047729  
Status : Answered  
Chosen Option : 2

Q.10 In which state of India is the Nayanjali festival celebrated?

- Ans  1. Goa
2. West Bengal
3. Uttar Pradesh
4. Rajasthan

Question ID : 26433047571  
Status : Answered  
Chosen Option : 2

Q.11 The number of females per 1000 males in the population is called the \_\_\_\_\_.

- Ans  1. birth rate
2. sex ratio
3. death rate
4. literacy rate

Question ID : 26433047477  
Status : Answered  
Chosen Option : 2

Q.12 Who is the author of the book 'Gone Girl'?

- Ans  1. Daniel Galgal
2. Lisa Klein
3. Yann Martel
4. Arundhati Bharati

Question ID : 26433047085  
Status : Answered  
Chosen Option : 4

Q.13 \_\_\_\_\_ includes all non-living components, such as air, cloud, dust, land, mountains, rivers, temperature, humidity, water, water vapour, sand, etc.

- Ans  1. Biotic environment
2. Abiotic environment
3. Artificial environment
4. Healthy environment

Question ID : 26433047090  
Status : Answered  
Chosen Option : 1

Q.14 Name the album for which Pandit Ravi Shankar won the Grammy award in 1967.

- Ans  1. Three Ragas
2. West Meets East
3. Concert for Bangladesh
4. Full Moon

Question ID : 26433047086

Q.15 The state legislative assembly has a strength of \_\_\_\_\_, with exceptions for smaller states.

- Ans  1. 600 to 1000
2. 70 to 90
3. 50 to 400
4. 10 to 100

Question ID : 26433047064  
Status : Answered  
Chosen Option : 3

Q.16 Who among the following freedom fighters of India revived the Indian National Army 'Azad Hind Fauj' (which was formed in 1942 by Rash Behari Bose and Captain-General Mohan Singh) in the year 1943?

- Ans  1. Mahatma Gandhi
2. Jawaharlal Nehru
3. Bhagat Singh
4. Subhas Chandra Bose

Question ID : 26433047209  
Status : Answered  
Chosen Option : 4

Q.17 Sattriya is a classical dance form of which Indian state?

- Ans  1. Manipur
2. Karnataka
3. Tamil
4. Kerala

Question ID : 26433047155  
Status : Answered  
Chosen Option : 1

Q.18 Which countries hosted the matches played in the 2021 ICC Men's T20 World Cup?

- Ans  1. England and Ethiopia
2. India and Bangladesh
3. India, Bangladesh, Sri Lanka, and Zimbabwe
4. Bangladesh and Sri Lanka

Question ID : 26433047115  
Status : Answered  
Chosen Option : 3

Q.19 Which of the following rivers of India drains into the Bay of Bengal?

- Ans  1. Tapi  
 2. Gomti  
 3. Yamuna  
 4. Mahi

Question ID : 26433047053  
Status : Answered  
Chosen Option : 2

Q.20 Who among the following Indian dancers was the first woman in Indian history to be nominated as a member of the Rajya Sabha?

- Ans  1. Usha Devi Arora  
 2. Madhan Devi  
 3. Malika Sarabhai  
 4. Saroj Khan

Question ID : 26433047062  
Status : Answered  
Chosen Option : 1

Q.21 The Jagananna Smart Township scheme was launched by which state government of India?

- Ans  1. Madhya Pradesh  
 2. Punjab  
 3. Odisha  
 4. Andhra Pradesh

Question ID : 26433047469  
Status : Answered  
Chosen Option : 3

Q.22 As of April 2022, what is the capital of India's neighbouring country Bhutan?

- Ans  1. Thimphu  
 2. Dhaka  
 3. Suva  
 4. Manu

Question ID : 26433046905  
Status : Answered  
Chosen Option : 1

Q.23 Which of the following glands/organs in human body secretes bile juice?

Ans  1. Pancreas

2. Liver

3. Pituitary

4. Pituit

Question ID : 26433047200

Status : Answered

Chosen Option : 2

Q.24 Bonala is a Hindu festival celebrated to worship Goddess Mahakali in which of the following states?

Ans  1. West Bengal

2. Assam

3. Kerala

4. Madhya Pradesh

Question ID : 26433047472

Status : Answered

Chosen Option : 2

Q.25 The steep rocky coast rising almost vertically above sea water is called \_\_\_\_\_.

Ans  1. sea caves

2. cliff

3. sea arches

4. sea-flow cave

Question ID : 26433047476

Status : Answered

Chosen Option : 2

# Multi Tasking Non Technical Staff Havaldar CBIC and CBN Exam 2021

Roll Number	
Candidate Name	
Venue Name	
Exam Date	06/07/2022
Exam Time	1:00 PM - 2:30 PM
Subject	MTS Non technical and Havaldar Examination 2021

## Answered Items

Q.1 Select the option that will improve the underlined part of the given sentence. In case no improvement is needed, select 'No improvement required'.

Please consult a doctor before you take any medicine.

- Ans
- 1. consulting
  - 2. consulted
  - 3. No improvement required
  - 4. consults

Question ID : 26433051370

Status : Answered

Chosen Option : 4

Q.2 The following sentence has been divided into parts. One of them may contain an error. Select the part that contains the error from the given options. If you don't find any error, mark 'No error' as your answer.

People sometimes asks me / why carbon dioxide / is important for the climate.

- Ans
- 1. is important for the climate
  - 2. why carbon dioxide
  - 3. No error
  - 4. People sometimes asks me

Question ID : 26433050577

Status : Answered

Chosen Option : 4

Q.3 Select the option that will improve the underlined part of the given sentence. In case no improvement is needed, select 'No improvement required'.

The snowstorm in that region will affect thousand of travellers.

- Ans
- 1. would affect thousand
  - 2. will affect thousands
  - 3. No improvement required
  - 4. will affect thousands

Question ID : 26433050693

Status : Answered

Chosen Option : 4



Q.4 Select the most appropriate ANTONYM of the given word.

HARMONY

- Ans  1. Peace
2. Union
3. Transmute
4. Goodwill

Question ID : 26433051489  
Status : Answered  
Chosen Option : 3

Q.5 Select the most appropriate ANTONYM of the given word.

Segacious

- Ans  1. In
2. Reluctant
3. Fool
4. Intelligent

Question ID : 26433051791  
Status : Answered  
Chosen Option : 1

Q.6 Select the most appropriate ANTONYM of the underlined word in the given sentence.

We had hundreds of conspicuous scientists.

- Ans  1. Obvious
2. Quiet
3. Inconspicuous
4. Silent

Question ID : 26433050539  
Status : Not Answered  
Chosen Option : -

Q.7 Select the most appropriate option to fill in the blank.

This, \_\_\_\_\_ of their purpose, the three knights tried another plan.

- Ans  1. In view
2. In line
3. In total
4. In fact

Question ID : 26433051155  
Status : Not Answered  
Chosen Option : -

Q.8 Select the most appropriate synonym of the given word.

Segregate

- Ans  1. Separate
2. Unite
3. Bind
4. Integrate

Question ID : 26433051330

Status : Answered

Chosen Option : 4

Q.9 Select the most appropriate option to substitute the underlined segment in the given sentence. If there is no need to substitute it, select 'No substitution required.'

Abraham also had one sister, of whom not much has been recorded.

- Ans  1. of whom
2. of whose
3. whom
4. No substitution required

Question ID : 26433051239

Status : Answered

Chosen Option : 3

Q.10 Select the most appropriate synonym of the given word.

Obtrusive

- Ans  1. Perceptive
2. Evident
3. Prominent
4. Modest

Question ID : 26433051147

Status : Answered

Chosen Option : 3

Q.11 The following sentence has been divided into parts. One of them may contain an error. Select the part that contains the error from the given options. If you don't find any error, mark 'No error' as your answer.

A man tends to one / of the horses after it's / training at a stud farm.

- Ans  1. No error
2. A man tends to one
3. No error
4. training at a stud farm

Question ID : 26433051313

Status : Answered

Chosen Option : 1

Q.12 Select the most appropriate meaning of the given idiom.

Change of heart

- Ans  1. To nervously escape disaster
2. An unfair attack
3. To be very different from what you first thought
4. Very similar in appearance

Question ID : 26433051097

Status : Not Answered

Chosen Option : -

Q.13 Select the option that corrects the incorrectly spelt words in the given sentences.

Fifty people have been taken into police custody.

- Ans  1. Fifty people have been taken into police custody
2. Five people have been taken into police custody
3. Fifty people have been taken into police custody
4. Fifty people have been taken into police custody

Question ID : 26433050599

Status : Answered

Chosen Option : 4

Q.14 Select the INCORRECTLY spelt word.

- Ans  1. Swimming
2. Prudence
3. Sovereign
4. Prudence

Question ID : 26433051491

Status : Answered

Chosen Option : 2

Q.15 Select the option that can be used as a one-word substitute for the given group of words.

One who hates mankind

- Ans  1. Amoral
2. Ovipare
3. Malvolent
4. Misanthrop

Question ID : 26433050999

Status : Answered

Chosen Option : 4

Q.16 Select the most appropriate option to fill in the blank.

In all cases, we have to \_\_\_\_\_ the facts from the various reports and documents.

- Ans
- 1. Fact
  - 2. Report
  - 3. Statement
  - 4. Detail

Question ID : 26433051701

Status : Not Answered

Chosen Option : -

Q.17 Select the option that can be used as a one-word substitute for the given group of words.

Someone who attacks cherished ideas or traditional institutions

- Ans
- 1. Believer
  - 2. Critic
  - 3. Heresiarch
  - 4. Misanthrope

Question ID : 26433051431

Status : Answered

Chosen Option : 2

Q.18 Select the option that can be used as a one-word substitute for the given group of words.

One who collects stamps

- Ans
- 1. Numismatist
  - 2. Philatelist
  - 3. Philologist
  - 4. Collector

Question ID : 26433050728

Status : Answered

Chosen Option : 3

Q.19 The following sentence has been split into four segments. Identify the segment that contains a grammatical error.

Concern about rising pollution / led to the / formulation of / various action plans.

- Ans
- 1. Concern about rising pollution
  - 2. formulation of
  - 3. led to the
  - 4. various action plans

Question ID : 26433051722

Status : Answered

Chosen Option : 1

Q.20 Select the most appropriate meaning of the given idiom.

An eye wash

- Ans
- 1. In writing
  - 2. A pretence
  - 3. Avoid talking
  - 4. A rare event

Question ID : 26433051691

Status : Not Answered

Chosen Option : -

Comprehension:

In the following passage, some words have been deleted. Read the passage carefully and select the most appropriate option to fill in each blank.

Mt. Mantap in North Korea has now been reported to have (1) \_\_\_\_\_ from its original state after an underground nuclear test was carried out under it at the Punggye-ri nuclear test site on 3 September 2017. An international team of scientists (2) \_\_\_\_\_ a special satellite radar imaging called synthetic aperture radar and seismic recordings to study the effects of the blast which (3) \_\_\_\_\_ a 5.2 magnitude earthquake. The surface of the mountain was pushed (4) \_\_\_\_\_ by almost 11 feet and then collapsed leaving the mountain about 20 inches (5) \_\_\_\_\_.

SubQuestion No : 21

Q.21 Select the most appropriate option to fill in blank number 1.

- Ans
- 1. released
  - 2. clasped
  - 3. impacted
  - 4. dislodged

Question ID : 26433051140

Status : Answered

Chosen Option : 4

Comprehension:

In the following passage, some words have been deleted. Read the passage carefully and select the most appropriate option to fill in each blank.

Mt. Mantap in North Korea has now been reported to have (1) \_\_\_\_\_ from its original state after an underground nuclear test was carried out under it at the Punggye-ri nuclear test site on 3 September 2017. An international team of scientists (2) \_\_\_\_\_ a special satellite radar imaging called synthetic aperture radar and seismic recordings to study the effects of the blast which (3) \_\_\_\_\_ a 5.2 magnitude earthquake. The surface of the mountain was pushed (4) \_\_\_\_\_ by almost 11 feet and then collapsed leaving the mountain about 20 inches (5) \_\_\_\_\_.

SubQuestion No : 22

Q.22 Select the most appropriate option to fill in blank number 2.

- Ans
- 1. learned
  - 2. used
  - 3. urged
  - 4. deduced

Question ID : 26433051141

Status : Answered

Chosen Option : 2

**Comprehension:**

In the following passage, some words have been deleted. Read the passage carefully and select the most appropriate option to fill in each blank.

Mt. Mantap in North Korea has now been reported to have (1) \_\_\_\_\_ from its original state after an underground nuclear test was carried out under it at the Punggye-ri nuclear test site on 9 September 2017. An international team of scientists (2) \_\_\_\_\_ a special satellite radar imaging called synthetic aperture radar and seismic recordings to study the effects of the blast which (3) \_\_\_\_\_ a 5.2 magnitude earthquake. The surface of the mountain was pushed (4) \_\_\_\_\_ by almost 11 feet and then collapsed leaving the mountain about 20 inches (5) \_\_\_\_\_.

SubQuestion No : 23

Q.23 Select the most appropriate option to fill in blank number 3.

- Ans
- A. 1. affected
  - B. 2. neglected
  - C. 3. surveyed
  - D. 4. lost

Question ID : 26433051142  
Status : Answered  
Chosen Option : 3

**Comprehension:**

In the following passage, some words have been deleted. Read the passage carefully and select the most appropriate option to fill in each blank.

Mt. Mantap in North Korea has now been reported to have (1) \_\_\_\_\_ from its original state after an underground nuclear test was carried out under it at the Punggye-ri nuclear test site on 9 September 2017. An international team of scientists (2) \_\_\_\_\_ a special satellite radar imaging called synthetic aperture radar and seismic recordings to study the effects of the blast which (3) \_\_\_\_\_ a 5.2 magnitude earthquake. The surface of the mountain was pushed (4) \_\_\_\_\_ by almost 11 feet and then collapsed leaving the mountain about 20 inches (5) \_\_\_\_\_.

SubQuestion No : 24

Q.24 Select the most appropriate option to fill in blank number 4.

- Ans
- A. 1. unyielded
  - B. 2. confined
  - C. 3. aligned
  - D. 4. aligned

Question ID : 26433051143  
Status : Answered  
Chosen Option : 4

### Comprehension:

In the following passage, some words have been deleted. Read the passage carefully and select the most appropriate option to fill in each blank.

Mt. Mantap in North Korea has now been reported to have (1) \_\_\_\_\_ from its original state after an underground nuclear test was carried out under it at the Punggyeon nuclear test site on 3 September 2017. An international team of scientists (2) \_\_\_\_\_ a special satellite radar imaging called synthetic aperture radar and seismic recordings to study the effects of the blast which (3) \_\_\_\_\_ a 5.2 magnitude earthquake. The surface of the mountain was pushed (4) \_\_\_\_\_ by almost 11 feet and then collapsed making the mountain about 20 inches (5) \_\_\_\_\_.

SubQuestion No : 25

Q.25 Select the most appropriate option to fill in blank number 5.

- Ans  A. 1. different  
 B. 2. same  
 C. 3. proper  
 D. 4. greater

Question ID : 26433058184

Status : Answered

Chosen Option : 2

Q.26 Select the most appropriate option to fill in blank number 6.

Q.1 J, K, L, M and N are sitting on a bench. J is the immediate neighbour of K, M is the immediate neighbour of N, and J is not sitting with L who sits on the right end of the bench. J sits to the right of M and N. M sits to the right of N. In which position is J sitting?

- Ans  A. 1. First from the left  
 B. 2. Fourth from the left  
 C. 3. Second from the left  
 D. 4. Second from the right

Question ID : 26433047976

Status : Answered

Chosen Option : 1

Q.2 Select the number from among the given options that can replace the question mark (?) in the following series.

48, 52, 60, 72, 80, ?

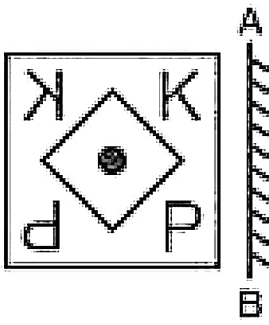
- Ans  A. 1. 118  
 B. 2. 96  
 C. 3. 112  
 D. 4. 110

Question ID : 26433047982

Status : Answered

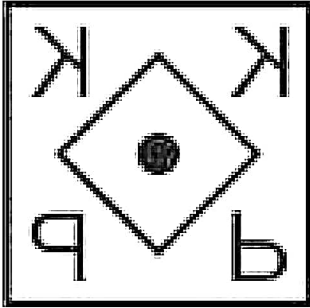
Chosen Option : 4

Q.3 Select the correct mirror image of the given figure when the mirror is placed at the right side.

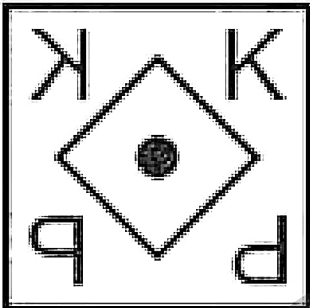


Ans

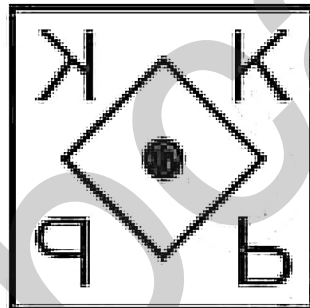
Q.1



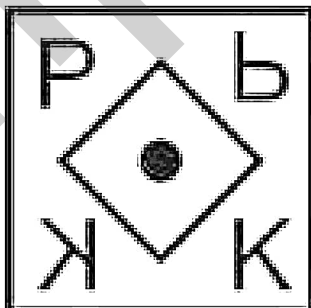
Q.2



Q.3



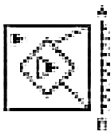
Q.4



Question ID : 26433049011  
 Status : Answered  
 Chosen Option : 3



Q.4 Select the correct mirror image of the given figure when the mirror is placed at the line AH as shown.

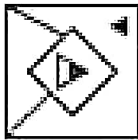


Ans

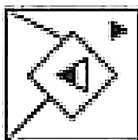
A. 1.



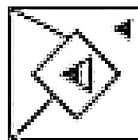
A. 2.



A. 3.



A. 4.



Question ID : 26433048733

Status : Answered

Chosen Option : 4

Q.5 Eight girls, G1, G2, G3, G4, G5, G6, G7 and G8, are sitting around a circular table facing the centre (not necessarily in the same order). G5 is third to the right of G1, G8 is second to the right of G4, G4 is not the immediate neighbour of G1 or G5, G6 and G2 are immediate neighbours, G2 is not the immediate neighbour of G1, G7 is not the immediate neighbour of G8.

Which of the following statements is correct?

- I. G7 is the immediate left of G4.
- II. G1 and G3 are neighbour of G8.

Ans  A. 1. Only I is correct.

A. 2. Neither I nor II is correct.

A. 3. Only II is correct.

A. 4. Both I and II are correct.

Question ID : 26433040056

Status : Answered

Chosen Option : 4

Q.6 In a certain code language, '7 8 3' means 'Noira likes ice-creams', '4 3 5' means 'ice-creams are tasty', '2 5 4' means 'we are friends', then what is the code for 'tasty' in the same code language?

Ans  A. 1.

A. 2.

A. 3.

A. 4.

Question ID : 26433048349

Status : Answered

Q.7 Select the option that is related to the sixth number in the same way as the first number is related to the second number and third number is related to fourth number.  
 $8432 : 4362 :: 2496 : 4926 :: ? : 2174$

- Ans
- A. 1742
  - B. 7421
  - C. 2174
  - D. 7429

Question ID : 2643304841  
 Status : Answered  
 Chosen Option : 3

Q.8 After interchanging the given two signs and two numbers (not digits), what will be the value of the given equation?

+ and +, 12 and 14  
 $12 + 45 + 15 = 14 - 10 = ?$

- Ans
- A. 7
  - B. 20
  - C. 10
  - D. 30

Question ID : 26433049039  
 Status : Answered  
 Chosen Option : 1

Q.9 Select the figure from the given options that you replace the question mark (?) in the following series.



- Ans
- A.
  - B.
  - C.
  - D.

Question ID : 26433048859  
 Status : Answered  
 Chosen Option : 2

Q.10 Select the option in which the numbers are related in the same way as are the numbers in the following sets.

(3, 5, 7)  
(11, 13, 17)

(NOTE : Operations should be performed on the whole numbers, without breaking down the numbers into its constituent digits. E.g. 13 – Operations on 13 such as adding /subtracting /multiplying etc. to 13 can be performed. Breaking down 13 into 1 and 3 and then performing mathematical operations on 1 and 3 is not allowed)

- Ans  1. (7, 11, 17)  
 2. (5, 7, 19)  
 3. (7, 11, 21)  
 4. (9, 17, 19)

Question ID : 26433048517

Status : Answered

Chosen Option : 4

Q.11 In a certain code language, 'TANK' is coded as '4' and 'PIR' is coded as '3'. How will 'FREIGHT' be coded in that language?

- Ans  1. 1  
 2. 0  
 3. 6  
 4. 5

Question ID : 26433048821

Status : Answered

Chosen Option : 1

Q.12 Read the given statements and conclusions carefully. Assuming that the information given in the statements is true, even if it appears to be at variance with commonly known facts, decide which of the given conclusions logically follow(s) from the statements.

Statements:

- I. All W are A.  
II. Some X are W.

Conclusions:

- I. All X are A.  
II. Some W are X.  
III. Some A are not X.

- Ans  1. Only conclusion III follows  
 2. Only conclusions I and II follow  
 3. All conclusions follow  
 4. Only conclusion I follows

Question ID : 26433048854

Status : Answered

Chosen Option : 2

Q.13 R 4 is related to P 2 in a certain way. In the same way, F 7 is related to D 5. To which of the following is Z 8 related following the same logic?

- Ans
- A. 2, Y 6
  - B. 3, X 7
  - C. 4, Y 7

Question ID : 26433048269  
 Status : Answered  
 Chosen Option : 1

Q.14 The sequence of folds of a piece of paper and the number of folds of the folded paper that turn out to be open in the following figures. How would this paper look when unfolded?



Ans

- A.
- B.
- C.
- D.

Question ID : 26433047916  
 Status : Answered  
 Chosen Option : 3

Q.15 The volume of 7 spheres V1, V2, V3, V4, V5, V6 and V7 are compared. The volume of V4 is less than V1, V2 and V5. The volume of V7 is greater than only two spheres. The volume of V4 is more than V7. If the volume of V6 is not the lowest, then the volume of how many spheres is less than V3?

- Ans
- 1
  - 2
  - 3
  - 4

Question ID : 26433040057  
Status : Answered  
Chosen Option : 1

Q.16 Select the option that is related to the third letter-cluster in the same way as the second letter-cluster is related to the first letter-cluster.

PAT : SVA :: GRA : ?

- Ans
- 1. PSM
  - 2. TNU
  - 3. RMD
  - 4. PBT

Question ID : 26433048351  
Status : Answered  
Chosen Option : 2

Q.17 Read the given statements and conclusions carefully. Assuming that the information given in the statements is true, even if it appears to be at variance with commonly known facts, decide which of the given conclusions logically follow(s) from the statements.

Statements:

- I. All P are Q.
- II. All N are P.

Conclusions:

- I. All N are Q.
- II. Some P are N.

- Ans
- 1. Both conclusions I and II follow
  - 2. Only conclusion II follows
  - 3. Neither conclusion I nor II follows
  - 4. Only conclusion I follows

Question ID : 26433048528  
Status : Answered  
Chosen Option : 1

Q.18 By interchanging the given two signs + and - and two numbers 17 and 216 (NOT digits), which of the following equations will be correct?

I.  $10 + 210 + 17 + 6 = 13 = 146$

II.  $7 + 216 + 41 - 17 + 36 = 81$

Ans  1. Only I

2. Only II

3. Both I and II

4. None of them

Question ID : 26433040699

Status : Answered

Chosen Option : 3

Q.19 In a certain code language, 'GEKF' is written as 'ZBHC' and 'KCPF' is written as 'KZMC'. How will 'JROG' be written in that language?

Ans  1. GOND

2. GOLF

3. GOLF

4. GOLF

Question ID : 26433040272

Status : Answered

Chosen Option : 3

Q.20 Select the option in which the pair of letter-clusters share the same relationship as that shared by the given letter-clusters.

RSPO : QPSR

Ans  1. UBAJ : QVAD

2. BCJH : KJBE

3. MAME : HDVM

4. TQUR : RUPQ

Question ID : 26433040825

Status : Answered

Chosen Option : 1

Q.21 Select the letter-cluster from among the given options that can replace the question mark (?) in the following series.

KRO, PWT, UBY, ?

Ans  1. ZOE

2. ZMO

3. ZOC

4. ZPO

Question ID : 26433040762

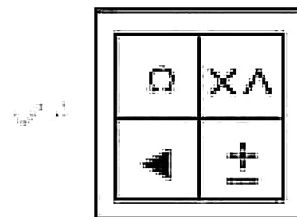
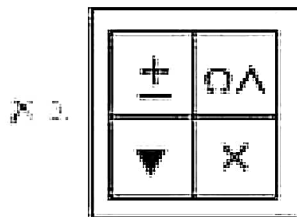
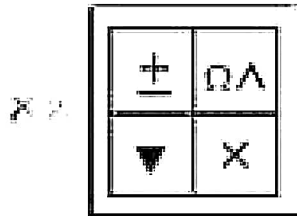
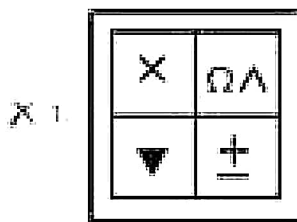
Status : Answered

Chosen Option : 3

Q.22 select the figure from among the given options that can replace the question mark (?) in the following table.

			?
--	--	--	---

Ans

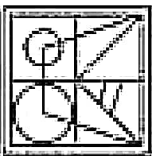
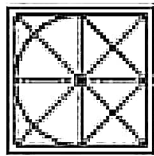


Question ID : 26433047989  
Status : Answered  
Chosen Option : 4

Q.23 Select the option in which the given figure is embedded (rotation is allowed).



Ans



Question ID : 26433048535

Status : Answered

Chosen Option : 1

Q.24 Select the number from among the given options that can replace the question mark (?) in the following series.

21, 42, 168, 1008, 7

Ans

1. 8000

2. 112

3. 7854

4. 6000

Question ID : 26433049044

Status : Answered

Chosen Option : 2

Q.25 In a certain code language, 'ABCD' is coded as '2345', and 'PALE' is coded as '172136'. How will 'TOP' be coded in that language?

Ans

1. 201637

2. 211637

3. 201617

4. 201616

Question ID : 26433049572

Status : Answered

Chosen Option : 2



Q.1 In what time does a sum of money amount to twice of itself at simple interest of 10% per annum?

- Ans
- 1. 10 years
  - 2. 5 years
  - 3. 15 years
  - 4. 12.5 years

Question ID : 26433050032

Status : Answered

Chosen Option : 1

Q.2 Find the average of all the prime numbers between 1 to 50. (Give your answer correct to one decimal place.)

- Ans
- 1. 24.9
  - 2. 34.9
  - 3. 52.9
  - 4. 21.9

Question ID : 26433049271

Status : Answered

Chosen Option : 4

Q.3 Select the number that will come in place of the question mark (?) in the following arithmetic progression

$$\frac{10}{32}, \frac{11}{32}, \frac{12}{32}, \dots, ?$$

- Ans
- 1. 622
  - 2. 608
  - 3. 618
  - 4. 610

Question ID : 26433050169

Status : Answered

Chosen Option : 2

Q.4 A cubical vessel has a base length equal to the radius of its hemispherical dome and open at the top. Water is filled to the brim of the vessel. Find the number of spherical drops of water made

- Ans
- 1. 4
  - 2. 6
  - 3. 5
  - 4. 3

Question ID : 26433050150

Status : Answered

Chosen Option : 2

Q.5 What is the value of  $(1 + 8)^3$  of  $512 = 1 + 5 + 0.5 + 6?$

- Ans
- A. 114
  - B. 4
  - C. 124
  - D. 64

Question ID : 26433040348  
Status : Answered  
Chosen Option : 3

Q.6 If  $P = 2^3 + 3^4$ ,  $Q = 2^4 + 3^3$ , and  $R = 3^3 + 2^2$ , then what is the highest common factor of P, Q and R?

- Ans
- A.  $2^3 + 3^4$
  - B.  $2^4 + 3^3$
  - C.  $2^2 + 3^2$
  - D.  $2^4 + 3^2$

Question ID : 26433049862  
Status : Answered  
Chosen Option : 1

Q.7 An article is sold at a discount of 12.5% and still there is a profit of 15%. At what approximate percentage over the above marked price has the article been marked?

- Ans
- A. 29.41%
  - B. 30.08%
  - C. 34.46%
  - D. 31.43%

Question ID : 26433050024  
Status : Answered  
Chosen Option : 4

Q.8 What is the average of the first 60 natural numbers?

- Ans
- A. 30
  - B. 60
  - C. 30.5
  - D. 45.5

Question ID : 26433050421  
Status : Answered  
Chosen Option : 3

Q.9 Rajan sold a watch to Akash at a profit of 20%. Akash sold it to Adithyan at a loss of 10%, while Adithyan sold it to Bharat at a profit of 25%. If Bharat purchased the watch for ₹1,200, then at what price did Rajan purchase it?

- Ans
- A. ₹2,000
  - B. ₹950
  - C. ₹1,000
  - D. ₹900

Question ID : 26433050177

Status : Answered

Chosen Option : 3

Q.10 The average of the runs scored by 8 players in an innings is 50. If the runs scored by 7 of these players in that innings are 25, 35, 45, 50, 60, 65 and 60 respectively then runs scored by the 8<sup>th</sup> player in that innings?

- Ans
- A. 65
  - B. 80
  - C. 75
  - D. 70

Question ID : 26433050029

Status : Answered

Chosen Option : 4

Q.11 15% of 20% of S = 126. What is the value of S?

- Ans
- A. 4200
  - B. 4500
  - C. 4800
  - D. 3900

Question ID : 26433040800

Status : Answered

Chosen Option : 1

Q.12 What distance will be covered in 14 minutes by an auto rickshaw moving at 42 km/h?

- Ans
- A. 6.2 km
  - B. 7.2 km
  - C. 9.8 km
  - D. 5.8 km

Question ID : 26433049333

Status : Answered

Chosen Option : 3

Q.13 If a boat can travel 250 km upstream and 175 km downstream in 5 hours each, then how much distance will it travel in 4 hours if it travels in still water?

- Ans
- X 1 54 km
  - X 2 50 km
  - X 3 40 km
  - 4 60 km

Question ID : 26433050304

Status : Answered

Chosen Option : 4

Q.14 If  $162 : x :: x : 338$ , find the positive value of  $x$ .

- Ans
- X 1 250
  - X 2 300
  - 3 334
  - X 4 318

Question ID : 26433049339

Status : Answered

Chosen Option : 3

Q.15 The following table gives the number of children from 4 different schools who like 4 different types of fruits. All the children like only one of the given fruits.

School	No. of children who like			
	Apple	Orange	Mango	Grapes
P	120	90	100	130
Q	80	160	160	90
R	140	120	140	110
S	160	50	40	70

The total number of children who like grapes is required. Find the correct statement regarding the total number of children who like mango from school R to correct to two decimal places.

- Ans
- 1 136.84%
  - X 2 140.68%
  - X 3 128.92%
  - X 4 150%

Question ID : 26433050387

Status : Answered

Chosen Option : 1

Q.16 A team of 10 people can complete a piece of work in 15 days. If 5 more people are added to the team, how long will it take to complete the work?

- Ans
- A. 15
  - B. 6
  - C. 12
  - D. 4

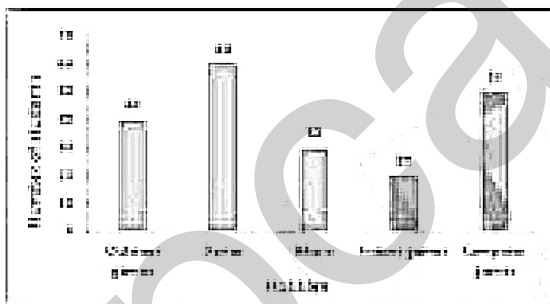
Question ID : 26433050335  
 Status : Answered  
 Chosen Option : 2

Q.17 A team of 10 people can complete a piece of work in 15 days. If 5 more people are added to the team, how long will it take to complete the work?

- Ans
- A. 25 days
  - B. 18 days
  - C. 24 days
  - D. 16 days

Question ID : 26433049536  
 Status : Answered  
 Chosen Option : 3

Q.18 The following bar graph shows the number of people who voted for different candidates in an election. How many more votes did the candidate who received the most votes receive than the candidate who received the fewest votes?



In percentage terms, how many more votes did the candidate who received the most votes receive than the candidate who received the fewest votes?

- Ans
- A. 50%
  - B. 100%
  - C. 200%
  - D. 20%

Question ID : 26433049338  
 Status : Answered  
 Chosen Option : 2

Q.19 If the circumference of the top of a hemispherical bowl is 44 mm, find the radius of the top of the bowl. (Use  $\pi = \frac{22}{7}$ )

- Ans
- A. 10 mm
  - B. 7 mm
  - C. 9 mm
  - D. 8 mm

Question ID : 26433045294  
Status : Answered  
Chosen Option : 2

Q.20 Find the value of 'b' in the given mathematical statement:

$$30\% \text{ of } b\% \text{ of } 296 = 40\% \text{ of } 50\% \text{ of } 5\% \text{ of } 1480$$

- Ans
- A.  $\frac{80}{3}$
  - B.  $\frac{40}{3}$
  - C.  $\frac{125}{3}$
  - D.  $\frac{50}{3}$

Question ID : 26433050249  
Status : Answered  
Chosen Option : 4

Q.21 The ratio of the present ages of Anshu and Hemant is 5 : 8. After 7 years, Hemant's age will be 41 years. What will be Anshu's age after 7 years?

- Ans
- A. 14 years
  - B. 12 years
  - C. 19 years
  - D. 31 years

Question ID : 26433050309  
Status : Answered  
Chosen Option : 3

Q.22 The volume of a wall is four times its breadth and length of wall is 60 m. If its height is  $25350 \text{ cm}^3$ . What is the breadth of the wall?

- Ans
- A. 21 cm
  - B. 15 cm
  - C. 11 cm
  - D. 18 cm

Question ID : 26433050441

Q.23 The total price of a watch is Rs. 1000. If the watch is offered at a discount of 20%, what is the annual interest of loan amount through bank?

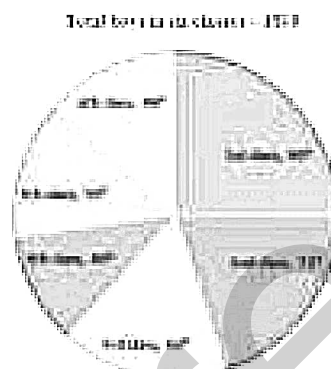
- Ans
- A. ₹112
  - B. ₹110
  - C. ₹106
  - D. ₹132

Question ID : 26433049847

Status : Answered

Chosen Option : 4

Q.24 The pictures below show, in terms of the central angles of the given representations, each group, the distribution of number of boys in each class of a school in village.



If 20% of the students in class A like to play hockey, then the number of students who like to play football is

- Ans
- A. 180
  - B. 144
  - C. 216
  - D. 120

Question ID : 26433050169

Status : Answered

Chosen Option : 1

Q.25 At simple interest a certain sum amounts to ₹12000 in 2 years and to ₹15000 in 4 years. What is the rate of simple interest per annum on offer?

- Ans
- A. 62.50%
  - B. 150%
  - C. 100%
  - D. 12.5%

Question ID : 26433049859

Status : Answered

Chosen Option : 3

Q.1 Which of the following naturally occurring acids is present in ant sting?

- Ans  1. Lactic acid
2. Citric acid
3. Malic acid
4. Oxalic acid

Question ID : 26433047574

Status : Answered

Chosen Option : 3

Q.2 Which team lost to Hyderabad FC in the finals of ISL 2021-22?

- Ans  1. Jamshedpur FC
2. Kerala Blasters FC
3. ATK Mohun Bagan
4. FC Goa

Question ID : 26433047665

Status : Not Answered

Chosen Option : =

Q.3 Why is there low population growth in a society that is underdeveloped and technologically backward?

- Ans  1. High death rates and low birth rates
2. Because both death rate and birth rate are low
3. Because such countries usually have strict government policies to limit the population growth
4. Because people migrate from underdeveloped countries

Question ID : 26433047829

Status : Answered

Chosen Option : 1

Q.4 Right to Education was added as a fundamental right in the Indian Constitution in

- Ans  1. 1931
2. 1956
3. 1971
4. 1984

Question ID : 26433047283

Status : Answered

Chosen Option : 3



Q.5 What is the coil of wire in the electric room heater known as?

- Ans  1. Coil
2. Fuse
3. Switch
4. Plug

Question ID : 26433047773  
Status : Answered  
Chosen Option : 2

Q.6 In which state of India is the Sri Brahmipureswarar temple situated?

- Ans  1. Andhra Pradesh
2. Tamil Nadu
3. Rajasthan
4. Manipur

Question ID : 26433047247  
Status : Not Answered  
Chosen Option : -

Q.7 'Waiting for a Visa' is the autobiography of which of the following persons?

- Ans  1. Bhausaheb Phadnis
2. Indira Gandhi
3. Mahatma Gandhi
4. Jawaharlal Nehru

Question ID : 26433047435  
Status : Answered  
Chosen Option : 2

Q.8 In which of the following sites of Indus Valley Civilization was 'The Great Bath' found?

- Ans  1. Mohenjodaro
2. Harappa
3. Lothal
4. Dholavira

Question ID : 26433047431  
Status : Answered  
Chosen Option : 4

Q.9 Which team won the Vijay Hazare Trophy 2021 - 22?

- Ans  1. Jammu & Kashmir
2. Services
3. Uttar Pradesh
4. Jharkhand

Question ID : 26433047215  
Status : Answered

Q.10 Which of the following dance forms depletes the english of women whose partners are gone from home?

- Ans  1. Kathi
2. Panna
3. Akrap
4. Pata

Question ID : 26433046720  
Status : Not Answered  
Chosen Option : -

Q.11 As per Census 2011, which of the following states of India has the highest sex ratio?

- Ans  1. Madhya Pradesh
2. Uttar Pradesh
3. Kerala
4. Maharashtra

Question ID : 26433046679  
Status : Answered  
Chosen Option : 3

Q.12 The SAHAY scheme to promote sports in rebel hill areas was launched by which state of India?

- Ans  1. Jharkhand
2. Odisha
3. Haryana
4. Assam

Question ID : 26433047245  
Status : Not Answered  
Chosen Option : -

Q.13 The oceanic crust of the earth mainly consists of \_\_\_\_\_.

- Ans  1. Olivine and pyroxene
2. mica and chlorite
3. ironed ore and nickel
4. iron and calcium

Question ID : 26433047251  
Status : Answered  
Chosen Option : 2

Q.14 In which year was the Child Marriage Restraint Act passed in India?

- Ans  1. 1929
2. 1931
3. 1935
4. 1930

Question ID : 26433047583  
Status : Not Answered  
Chosen Option : -

Q.15 In which season are Kharif crops grown?

- Ans  1. Autumn
2. Monsoon
3. Spring
4. Winter

Question ID : 26433047252  
Status : Answered  
Chosen Option : 2

Q.16 What is the longitudinal valley lying between lesser Himalaya and the Shiwaliks called?

- Ans  1. Hara
2. Bari
3. Kangra
4. Doon

Question ID : 26433047578  
Status : Answered  
Chosen Option : 4

Q.17 Which of the following persons was appointed as Chief of the Air Staff of India in September 2022?

- Ans  1. AIRS Shakti Das
2. Hari Singh Anand
3. Anvillal Choudhary
4. Sandeep Singh

Question ID : 26433047419  
Status : Answered  
Chosen Option : 3

Q.18 \_\_\_\_\_ founded Satyashodhak Samaj], which campaigned against idolatry and the caste system.

- Ans
- 1. Mahatma Chhatrapati Sai
  - 2. Raja Ram Mohan Roy
  - 3. Chattampi Swamikal Thiruv
  - 4. Jyotiba Phule

Question ID : 26433046734  
Status : Answered  
Chosen Option : 4

Q.19 Madhavi Mudgal is associated with which classical dance of India?

- Ans
- 1. Manipuri
  - 2. Bharata
  - 3. Odissi
  - 4. Sattriya

Question ID : 26433047587  
Status : Answered  
Chosen Option : 3

Q.20 Which of the following is the first solar project to break the grid parity barrier in India?

- Ans
- 1. Bhadra Solar Park
  - 2. Kumbhariya Mega Solar Park
  - 3. Navsaria Mega Solar
  - 4. Charanka Solar Park

Question ID : 26433046724  
Status : Not Answered  
Chosen Option : -

Q.21 In which of the following states is the Gochha Festival celebrated?

- Ans
- 1. Manipal
  - 2. Karnataka
  - 3. Chhattisgarh
  - 4. Orissa

Question ID : 26433047771  
Status : Not Answered  
Chosen Option : -

Q.22 Which of the following is a component of capital budget?

- Ans
- 1. Direct spending
  - 2. Fine tax revenue
  - 3. Tax revenues
  - 4. Investment expenditure

Question ID : 26433047442

Q.23 How many Grammy Awards has AR Rahman won?

Ans  1. 1

2. 4

3. 3

4. 2

Question ID : 26433047436

Status : Not Answered

Chosen Option : -

Q.24 Which of the following is the correct chronological order of the rulers of the Tughluq dynasty who ruled over Delhi from the year 1320 to 1414?

Ans  1. Ghiasuddin Tughluq, Firoz Shah Tughluq, Muhammad Tughluq

2. Firoz Shah Tughluq, Muhammad Tughluq, Ghiasuddin Tughluq

3. Firoz Shah Tughluq, Muhammad Tughluq, Firoz Shah Tughluq

4. Muhammad Tughluq, Firoz Shah Tughluq, Ghiasuddin Tughluq

Question ID : 26433047257

Status : Answered

Chosen Option : 3

Q.25 As per the Constitution of India, every Legislative Assembly of every State, unless sooner dissolved, shall continue for \_\_\_\_\_ from the date appointed for its first meeting.

Ans  1. two years

2. three years

3. six years

4. five years

Question ID : 26433047589

Status : Answered

Chosen Option : 4

# Multi Tasking Non Technical Staff Havaladar CBIC and CBN Exam 2021

Roll Number	
Candidate Name	
Venue Name	
Exam Date	06/07/2022
Exam Time	5:00 PM - 6:30 PM
Subject	MTS Non technical and Havaladar Examination 2021

## Section 2: English

Q.1 Select the most appropriate option to fill in the blank.

He said the cooperative will continue to invest \_\_\_\_\_ per its usual yearly rate.

- Ans  1. that
2. so
3. such
4. as

Question ID : 26433051031

Status : Answered

Chosen Option : 4

Q.2 Select the option that will improve the underlined part of the given sentence. In case no improvement is needed, select 'No improvement required'.

In his memoir, Attenborough said that, "Lisa would have been 11 if she was with us today."

- Ans  1. Attenborough said that, "Lisa will have been 11 if she were
2. Attenborough said that, "Lisa would have been 11 if she were
3. Attenborough said, "Lisa would have been 11 if she was
4. No improvement required

Question ID : 26433051568

Status : Answered

Chosen Option : 2

Q.3 The following sentence has been divided into parts. One of them may contain an error. Select the part that contains the error from the given options. If you don't find any error, mark 'No error' as your answer.

Young scientists have fresh ideas; they are ambitious and highly productive.

- Ans  1. and highly productive
2. Young scientists have fresh ideas
3. No error
4. they are ambitious

Question ID : 26433050742

Status : Marked For Review

Chosen Option : 3

Q.4 Select the option that corrects the misspelt words in the given sentence.

The anti-terrorist squad is investigating this case.

- Ans
- A. 1. The anti-terrorist squad is invest gating this case.
  - B. 2. The anti-terrorist squad is investigating this case.
  - C. 3. The anti-terrorist squad is investigating this case.
  - D. 4. The anti-terrorist squad is investigating this case.

Question ID : 26433050764

Status : Answered

Chosen Option : 4

Q.5 Select the most appropriate option to fill in the blank.

If I \_\_\_\_\_ a doctor, I would have treated you all.

- Ans
- A. 1. were
  - B. 2. would
  - C. 3. am
  - D. 4. could

Question ID : 26433050960

Status : Answered

Chosen Option : 1

Q.6 Select the most appropriate ANTONYM of the underlined word.

He carries that sorrow with him now, just under the surface, almost tangible.

- Ans
- A. 1. Detectable
  - B. 2. Invisible
  - C. 3. Actual
  - D. 4. Distinct

Question ID : 26433051662

Status : Answered

Chosen Option : 2

Q.7 Select the option that will improve the underlined part of the given sentence. In case no improvement is needed, select 'No improvement required'.

These days, judging someone is easier than respecting them.

- Ans
- A. 1. respecting them.
  - B. 2. respect them.
  - C. 3. is respect of them.
  - D. 4. No improvement required.

Question ID : 26433050665

Status : Answered

Chosen Option : 1

Q.8 Select the correctly spell word.

- Ans  1. Assambley
2. Assambley
3. Assambly
4. Assembly

Question ID : 26433050841  
Status : Answered  
Chosen Option : 1

Q.9 Select the most appropriate meaning of the given idiom.

To lead one by the nose

- Ans  1. To try again after failing at something
2. To control someone's mind
3. To have the freedom to choose
4. To be anxious to start something

Question ID : 26433051201  
Status : Answered  
Chosen Option : 2

Q.10 Select the most appropriate ANTONYM of the given word.

Decay

- Ans  1. Deteriorate
2. Grow
3. Spoilage
4. Breakdown

Question ID : 26433050833  
Status : Answered  
Chosen Option : 2

Q.11 Select the option that will improve the underlined part of the given sentence. In case no improvement is needed, select 'No improvement required'.

Why should we give up everything?

- Ans  1. give up
2. give off
3. give in
4. No improvement is required

Question ID : 26433050562  
Status : Answered  
Chosen Option : 4



Q.12 Select the most appropriate ANTONYM of the underlined word in the given sentence.

He learned to endure hunger and cold.

- Ans  1. Resist
2. Persist
3. Retain
4. Sustain

Question ID : 26433050617

Status : Answered

Chosen Option : 3

Q.13 Select the option that will improve the underlined part of the given sentence. In case no improvement is needed, select 'No improvement required'.

My company beliefs that no one should turn up late for work.

- Ans  1. believes
2. believe
3. No improvement required
4. belief

Question ID : 26433051422

Status : Answered

Chosen Option : 2

Q.14 Select the option that will improve the underlined part of the given sentence. In case no improvement is needed, select 'No improvement required'.

I am sorry of which my mother said.

- Ans  1. for which
2. for which
3. of that
4. No improvement required

Question ID : 26433050882

Status : Answered

Chosen Option : 1

Q.15 Select the most appropriate meaning of the given idiom.

Play with fire

- Ans  1. To play a game honestly
2. To play a game dishonestly
3. To please someone
4. To waste time on worthless things

Question ID : 26433050967

Status : Answered

Chosen Option : 2

Q.16 Select the most appropriate synonym of the given word.

Obstruct

- Ans
- 1. Replace
  - 2. Block
  - 3. Holster
  - 4. Unplug

Question ID : 26433050757

Status : Answered

Chosen Option : 2

Q.17 The following sentence has been divided into parts. One of them may contain an error. Select the part that contains the error from the given options. If you don't find any error, mark 'No error' as your answer.

Safety measures makes risky activities less risky.

- Ans
- 1. risky activities
  - 2. No error
  - 3. Safety measures make
  - 4. less risky

Question ID : 26433050741

Status : Answered

Chosen Option : 3

Q.18 Select the most appropriate option to fill in the blank.

The ocean waves swelled and reached \_\_\_\_\_ her head, and she started screaming.

- Ans
- 1. among
  - 2. upon
  - 3. over
  - 4. at

Question ID : 26433051371

Status : Answered

Chosen Option : 3

Q.19 The following sentence has been split into four segments. Identify the segment that contains a grammatical error.

Human being are / the producers and the / consumers of Earth's / resources.

- Ans
- 1. are / the producers
  - 2. resources
  - 3. the producers and the
  - 4. consumers of Earth's

Question ID : 26433051458

Status : Answered

Chosen Option : 1

Q.20 Select the most appropriate synonym of the underlined word.

I don't know why she wears those eccentric outfits.

- Ans
- A. 1. Exquisite
  - B. 2. Elegant
  - C. 3. Frivolous
  - D. 4. Lush

Question ID : 26433050914

Status : Answered

Chosen Option : 3

#### Comprehension:

In the following passage, some words have been deleted. Read the passage carefully and select the most appropriate option to fill in each blank.

Strong mental health is not just the (1) \_\_\_\_\_ of mental health problems. (2) \_\_\_\_\_ mentally or emotionally healthy is (3) \_\_\_\_\_ more than being free of depression, anxiety or other psychological issues. (4) \_\_\_\_\_ than the absence of mental illness, mental health (5) \_\_\_\_\_ to the presence of positive characteristics and positive outlook towards life.

SubQuestion No : 21

Q.21 Select the most appropriate option to fill in blank number 1.

- Ans
- A. 1. adequacy
  - B. 2. absence
  - C. 3. absence
  - D. 4. none

Question ID : 26433050903

Status : Answered

Chosen Option : 2

#### Comprehension:

In the following passage, some words have been deleted. Read the passage carefully and select the most appropriate option to fill in each blank.

Strong mental health is not just the (1) \_\_\_\_\_ of mental health problems. (2) \_\_\_\_\_ mentally or emotionally healthy is (3) \_\_\_\_\_ more than being free of depression, anxiety or other psychological issues. (4) \_\_\_\_\_ than the absence of mental illness, mental health (5) \_\_\_\_\_ to the presence of positive characteristic and positive outlook towards life.

SubQuestion No : 22

Q.22 Select the most appropriate option to fill in blank number 2.

- Ans
- A. 1. Be
  - B. 2. Been
  - C. 3. Be
  - D. 4. Be

Question ID : 26433050904

Status : Answered

Chosen Option : 1

**Comprehension:**

In the following passage, some words have been deleted. Read the passage carefully and select the most appropriate option to fill in each blank.

Strong mental health is not just the (1) \_\_\_\_\_ of mental health problems. (2) \_\_\_\_\_ mentally or emotionally healthy is (3) \_\_\_\_\_ more than being free of depression, anxiety or other psychological issues. (4) \_\_\_\_\_ than the absence of mental illness, mental health (5) \_\_\_\_\_ to the presence of positive characteristics and positive outlook towards life.

SubQuestion No : 23

Q.23 Select the most appropriate option to fill in blank number 3.

- Ans
- 1. many
  - 2. very
  - 3. more
  - 4. most

Question ID : 26433050905

Status : Answered

Chosen Option : 3

**Comprehension:**

In the following passage, some words have been deleted. Read the passage carefully and select the most appropriate option to fill in each blank.

Strong mental health is not just the (1) \_\_\_\_\_ of mental health problems. (2) \_\_\_\_\_ mentally or emotionally healthy is (3) \_\_\_\_\_ more than being free of depression, anxiety or other psychological issues. (4) \_\_\_\_\_ than the absence of mental illness, mental health (5) \_\_\_\_\_ to the presence of positive characteristics and positive outlook towards life.

SubQuestion No : 24

Q.24 Select the most appropriate option to fill in blank number 4.

- Ans
- 1. Scarce
  - 2. Neither
  - 3. More
  - 4. Whichever

Question ID : 26433050906

Status : Answered

Chosen Option : 3

### Comprehension:

In the following passage, some words have been deleted. Read the passage carefully and select the most appropriate option to fill in each blank.

Strong mental health is not just the (1) \_\_\_\_\_ of mental health problems. (2) \_\_\_\_\_ mentally or emotionally healthy is (3) \_\_\_\_\_ more than being free of depression, anxiety or other psychological issues. (4) \_\_\_\_\_ than the absence of mental illness, mental health (5) \_\_\_\_\_ to the presence of positive characteristics and positive outlook towards life.

SubQuestion No : 25

Q.25 Select the most appropriate option to fill in blank number 5.

- Ans  1. means  
 2. means  
 3. essential  
 4. adds

Question ID : 26433050907  
Status : Answered  
Chosen Option : 4

Q.26 Select the option that is related to the fifth number in the same way as the second number is related to the first number and fourth number is related to third number.

Q.1 Select the option that is related to the fifth number in the same way as the second number is related to the first number and fourth number is related to third number.

(NOTE: Operations should be performed on the whole numbers, without breaking down the numbers into its constituent digits. E.g.13 - Operations on 13 such as adding /subtracting /multiplying etc. to 13 can be performed. Breaking down 13 into 1 and 3 and then performing mathematical operations on 1 and 3 is not allowed)

159 : 229 :: 122 : 211 :: 2 : ?

- Ans  1. 169  
 2. 199  
 3. 89  
 4. 189

Question ID : 26433046209  
Status : Answered  
Chosen Option : 1

Q.2 Which two numbers need to be interchanged to make the following equation correct?

$42 \times 15 \div 3 + 6 = 5 \div 94$

- Ans  1. 15 and 5  
 2. 15 and 10  
 3. 6 and 3  
 4. 6 and 3

Question ID : 26433048136  
Status : Answered  
Chosen Option : 2

Q.3 Read the given statements and conclusions carefully. Assuming that the information given in the statements is true, even if it appears to be at variance with commonly known facts, decide which of the given conclusions logically follow(s) from the statements.

Statements:

All trousers are pants.

All pants are clothes.

Conclusions:

I. Some clothes are trousers.

II. All pants are trousers.

Ans  1. Both conclusions I and II follow

2. Neither conclusion I nor II follow

3. Neither conclusion I nor II follow

4. Only conclusion II follows.

Question ID : 26433048279

Status : Answered

Chosen Option : 2

Q.4 Select the option that is related to the fifth number in the same way as the second number is related to the first number and the fourth number is related to the third number.

24 : 36 :: 38 : 57 :: 58 : ?

Ans  1. 78

2. 69

3. 75

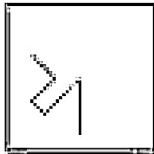
4. 84

Question ID : 26433048132

Status : Answered

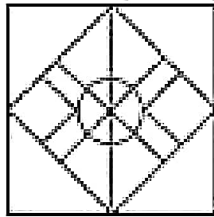
Chosen Option : 4

Q.5 Select the option in which the given figure is embedded (no part rotation is NOT allowed)

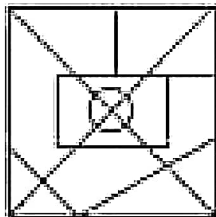


Ans

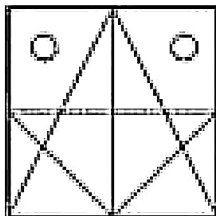
1



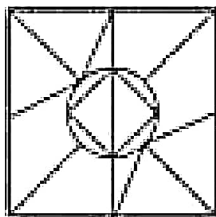
2



3



4



Question ID : 26433048289

Status : Answered

Chosen Option : 1

Q.6 Read the given statements and conclusions carefully. Assuming that the information given in the statements is true, even if it appears to be at variance with commonly known facts, decide which of the given conclusions logically follow(s) from the statements.

Statements:

No shirt is a pant. Some shirts are jackets.

All jackets are trousers.

Conclusions:

I) Some shirts are trousers is a possibility.

II) No pant is a jacket.

Ans  1. None of conclusion I and II follows

2. Only conclusion II follows

3. Only conclusion I follows

4. Both conclusions I and II follow

Question ID : 26433048205

Status : Answered

Chosen Option : 1

Q.7 In a certain code language, 'Trucks are heavy and good' is coded as '6 6 7 2 @', 'Weight lifts human heavy' is coded as 'W % 4 8', and 'good are multiples' is coded as '@ pr 6'. What is can be the code for 'heavy good' in that language?

- Ans
- A. 1 7 8
  - B. 2 6 6
  - C. 3 6 6
  - D. 4 4 6

Question ID : 26433048647

Status : Answered

Chosen Option : 2

Q.8 Select the option that is related to the fifth word in the same way as the second word is related to the first word and the fourth word is related to the third word.

Ratna : Eye :: Pens : Brain :: Cochlea : ?

- Ans
- A. 1. Heart
  - B. 2. Ear
  - C. 3. Throat
  - D. 4. Nose

Question ID : 26433048195

Status : Answered

Chosen Option : 2

Q.9 In a certain code language, 'Numbers are even' is coded as '5 3 +', and 'Odd factors are multiples' is coded as '+ 7 6 @'. What can be the code for 'even' in that code language?

- Ans
- A. 1 6
  - B. 2 6
  - C. 3 6 7
  - D. 4 7

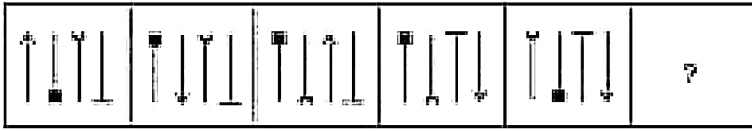
Question ID : 26433048720

Status : Answered

Chosen Option : 3

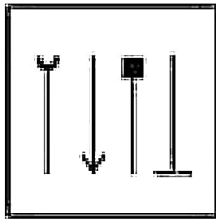


Q.10 Select the figure from among the given options that can replace the question mark in the following series.

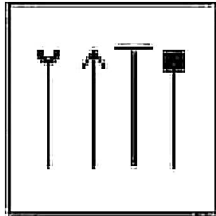


Ans

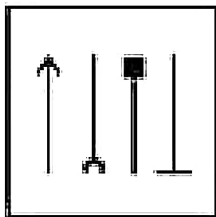
X 1.



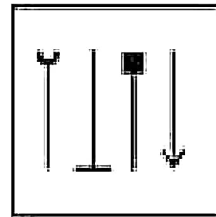
X 2.



X 3.

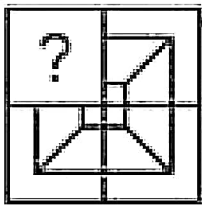


X 4.



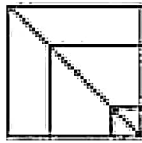
Question ID : 26433048138  
Status : Masked For Re  
Chosen Option : 4

Q.11 Select the figure from the options that can replace the question mark and complete the pattern.

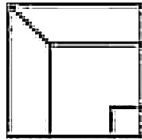


Ans

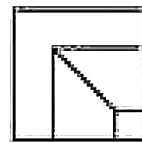
A 1



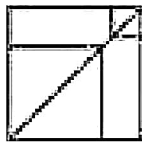
A 2



A 3



A 4



Question ID : 26433048615

Status : Answered

Chosen Option : 3

Q.12 Select the option that is related to the fifth word in the same way as the second word is related to the first word and the fourth word is related to the third word.

Book : Author :: Movie : Director :: Poem : ?

Ans

A 1. Singer

A 2. Singer

A 3. Actor

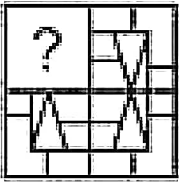
A 4. Director

Question ID : 26433047994

Status : Answered


Chosen Option : 1

Q.13 Select the figure from the given options that can replace the question mark (?) and complete the pattern.

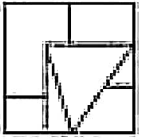


Ans

A 1



A 2



A 3



A 4



Question ID : 26433048813

Status : Answered

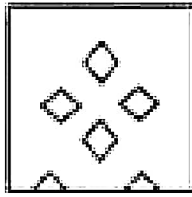
Chosen Option : 3

Q.14 The sequence of folding a piece of paper and the manner in which the folded paper has been cut is shown in the following figure. How would this paper look when unfolded?

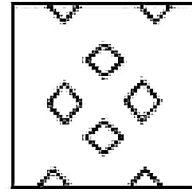


Ans

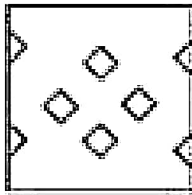
X 1



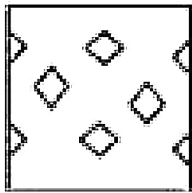
✓ 2



X 3



X 4



Question ID : 26433047966

Status : Answered

Chosen Option : 2

Q.15 In a certain code language, if dress is called comb, comb is called hair dryer, hair dryer is called lipstick, lipstick is called sandal, and sandal is called jewellery, then what is used to colour the lips?

Ans X 1 Jewellery

X 2 Comb

X 3 Hair dryer

✓ 4 Lipstick

Question ID : 26433048024

Status : Answered

Chosen Option : 4

Q.16 The heights of seven boys B1, B2, B3, B4, B5, B6 and B7 is compared. They all have different heights. B2 is taller than B1 and B5. B7 is shorter than B3 and B4 but taller than B5. B6 is taller than only three boys and B2 is the tallest. How many boys are shorter than B4 and taller than B2?

- Ans  1
2. 1
3. 4
4. 3

Question ID : 26433048807  
Status : Answered  
Chosen Option : 1

Q.17 Seven friends, Parv, Qazi, Raees, Sushil, Tania, Uma, and Vishnu are sitting around a circular table facing the centre. Parv is immediate neighbour of both Tania and Sushil. Uma is immediate neighbour of both Qazi and Vishnu. Qazi is sitting second to the right of Tania. Who is sitting to the immediate left of Qazi?

- Ans  1. Parv
2. Sushil
3. Vishnu
4. Uma

Question ID : 26433048125  
Status : Answered  
Chosen Option : 1

Q.18 In a certain code language, 'TRAM' is written as 'UQBL' and 'PAST' is written as 'QZTS'. How will 'DEED' be written in that language?

- Ans  1. FEBC
2. EFCD
3. OFED
4. EFCB

Question ID : 26433047957  
Status : Answered  
Chosen Option : 4

Q.19 What will be the value of the given expression, if 'A' means '+', 'B' means '-', 'C' means 'x' and 'D' means '÷'?

20 B 30 A 15 C 20 D 5

- Ans  1. 60
2. 90
3. 40
4. 55

Question ID : 26433048789  
Status : Answered  
Chosen Option : 2

Q.20 Select the set in which the numbers are related in the same way as are the numbers of the following sets.

(NOTE : Operations should be performed on the whole numbers, without breaking down the numbers into its constituent digits. E.g. 13 – Operations on 13 such as adding /deleting /multiplying etc. to 13 can be performed. Breaking down 13 into 1 and 3 and then performing mathematical operations on 1 and 3 is not allowed.)

{13, 28, 86} {18, 39, 116}

- Ans  A. {2, 9, 18, 50}
- B. {3, 6, 18, 54}
- C. {4, 11, 24, 76}

Question ID : 26433040264

Status : Answered

Chosen Option : 1

Q.21 Select the option that is related to the third letter-cluster in the same way as the second letter-cluster is related to the first letter-cluster.

POLE : SRQH :: HAIR : ?

- Ans  A. UNLU
- B. RLU
- C. RSLU
- D. RSLV

Question ID : 26433048724

Status : Answered

Chosen Option : 2

Q.22 Seven women A, B, C, D, E, F and G are sitting in a row facing the South (not necessarily in the same order). A is fifth to the right of G, A is at one of the ends. E is exactly in the middle of row. F is fourth to the right of G. B is not the immediate neighbour of E. D is to the immediate left of E.

Which of the following statements is/are NOT correct?

- I. D is third to the left of F.  
II. F is sitting between C and D.

- Ans  A. I, II and III
- B. Only I
- C. Neither I nor II
- D. None

Question ID : 26433048605

Status : Answered

Chosen Option : 4

Q.23 Identify the number that does NOT belong to the following series

46, 91, 138, 279, 764, 1529

Ans  A. 46

B. 91

C. 138

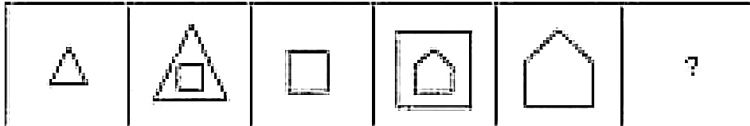
D. 279

Question ID : 26433040794

Status : Answered

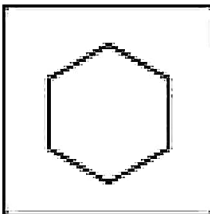
Chosen Option : 1

Q.24 Select the figure from among the given options, that can replace the question mark (?) in the following series.

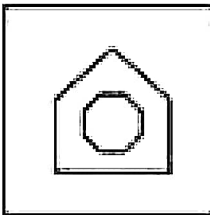


Ans

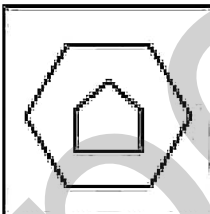
1



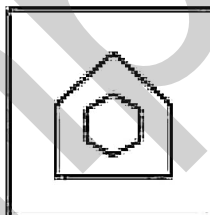
2



3



4



Question ID : 26433048212

Status : Answered

Chosen Option : 4

Q.25 Select the letter from among the given options that can replace the question mark (?) in the following series.

I, M, Q, U, ?, C

Ans  1. W

2. A

3. V

4. X

Question ID : 26433048118

Status : Answered

Chosen Option : 4

Q.26 Find the missing number.

Q.1 What approximate value should come in the place of the question mark (?) in the following equation?

$$209.03 - 61.99 = 11.43 \times ?$$

Ans  33

31

32

34

Question ID : 26433049544

Status : Answered

Chosen Option : 1

Q.2 The average weight of 8 persons is increased by 2.5 kg when one of the persons whose weight is 56 kg is replaced by a new person. Find the weight of the new person.

Ans  1. 58 kg

2. 59 kg

3. 49 kg

4. 46 kg

Question ID : 26433049473

Status : Answered

Chosen Option : 2

Q.3 Find the area of a trapezium whose parallel sides are of length 15 cm and 10 cm respectively and whose distance between the parallel sides is 12 cm.

Ans  1. 180 cm<sup>2</sup>

2. 210 cm<sup>2</sup>

3. 360 cm<sup>2</sup>

4. 120 cm<sup>2</sup>

Question ID : 26433049565

Status : Answered

Chosen Option : 2



Q.4 What is the largest number that can exactly divide 403 and 496?

- Ans
- X 1. 62
  - X 2. 93
  - X 3. 13
  - ✓ 4. 31

Question ID : 26433040537  
Status : Answered  
Chosen Option : 4

Q.5 Ravi sold a chain at a loss of 60%. The selling price of the chain is ₹600. What is the cost price of the chain?

- Ans
- X 1. ₹1,260
  - ✓ 2. ₹1,500
  - X 3. ₹1,800
  - X 4. ₹1,660

Question ID : 26433040522  
Status : Answered  
Chosen Option : 2

Q.6 Two right circular cones of equal volumes have their heights in the ratio 4 : 9. What is the ratio of the radii of their bases. The cones contain in the same order as that in which the ratio of their heights is given?

- Ans
- ✓ 1. 3 : 2
  - X 2. 9 : 4
  - X 3. 2 : 3
  - X 4. 4 : 9

Question ID : 26433049566  
Status : Answered  
Chosen Option : 1

Q.7 If 60% of G =  $\frac{4}{5}$  of H, then G is approximately what percentage of H?

- Ans
- X 1. 125%
  - X 2. 115%
  - X 3. 140%
  - ✓ 4. 133.33%

Question ID : 26433040975  
Status : Answered  
Chosen Option : 4

Q.8 The terms  $x - 1$ ,  $x - 2$ ,  $3x - 5$ , and  $y$  are in proportion. Find the value of  $y$  if  $x = 3$ .

- Ans
- A. 45
  - B. 29
  - C. 35
  - D. 24

Question ID : 26433049480  
Status : Answered  
Chosen Option : 3

Q.9 Rishi bought a piece of land of 4000 sq. m. He built a house on the land and sold it for a profit of 20%. What is the cost of Rishi?

- Ans
- A. ₹3000
  - B. ₹640
  - C. ₹720
  - D. ₹580

Question ID : 26433049435  
Status : Answered  
Chosen Option : 2

Q.10 The average age of 29 students in a class is 18 years. When the teacher's age is included, the average increases by 1. What is the teacher's age in years?

- Ans
- A. 50
  - B. 45
  - C. 55
  - D. 40

Question ID : 26433050285  
Status : Answered  
Chosen Option : 4

Q.11 Find the rate of simple interest per annum at which a sum of ₹1,200 will amount to ₹1,800 in 4 years.

- Ans
- A. 15%
  - B. 12.5%
  - C. 14%
  - D. 10%

Question ID : 26433049401  
Status : Answered  
Chosen Option : 2

Q.12 The value of  $(0.51)^2 + (0.49)^2 - (0.51)^2 - 0.2499 - (0.49)^2$  is:

- Ans
- A. 2.9
  - B. 1.00
  - C. 1.57
  - D. 3.31

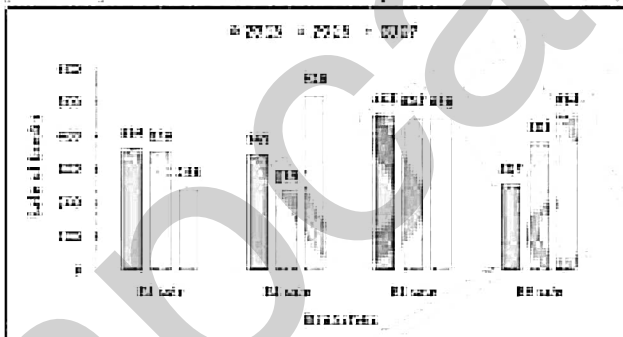
Question ID : 26433049469  
Status : Answered  
Chosen Option : 2

Q.13 The difference between the length and breadth of a rectangle is 16 cm. If its perimeter is 108 cm, then what is its area?

- Ans
- A. 2100  $\text{cm}^2$
  - B. 2145  $\text{cm}^2$
  - C. 2050  $\text{cm}^2$
  - D. 2375  $\text{cm}^2$

Question ID : 26433050316  
Status : Answered  
Chosen Option : 2

Q.14 The following bar graph shows the number of books sold from four different branches, B1, B2, B3 and B4, of a publishing house, in three consecutive years.

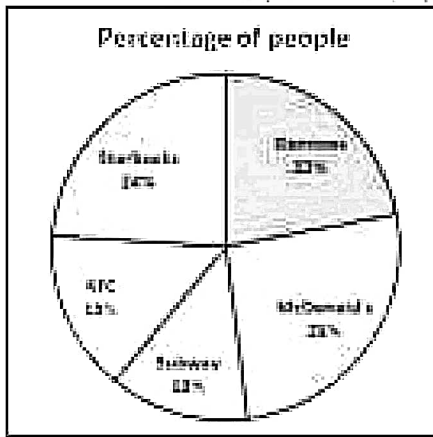


Calculate the total number of books sold from each B<sup>i</sup> during these three years.

- Ans
- A. 1432
  - B. 1378
  - C. 1322
  - D. 1783

Question ID : 26433049488  
Status : Answered  
Chosen Option : 2

Q.15 A survey was conducted among 2000 people to find the chain of eateries that is most popular. The following pie chart shows the distribution of the preference of people as against to the chain of eateries.



Find the ratio of the number of the people who selected the most popular among the given eateries to the number of the people who selected the least popular amongst the given eateries in this survey.

- Ans
- A. 2 : 1
  - B. 1 : 3
  - C. 1 : 2
  - D. 3 : 1

Question ID : 26433049364  
 Status : Answered  
 Chosen Option : 1

Q.16 The average of U, V and W is 48 and that of V and W is 48. What is the value of U?

- Ans
- A. 44
  - B. 48
  - C. 42
  - D. 46

Question ID : 26433049346  
 Status : Answered  
 Chosen Option : 2

Q.17 A car travels the first half of a journey at a speed of 60 km/h and the next half of the journey at 100 km/h. What is the average speed of the car? (Give your answer correct to 2 places of decimal.)

- Ans
- A. 88.89 km/h
  - B. 92.29 km/h
  - C. 82.28 km/h
  - D. 45.41 km/h

Question ID : 26433049409  
 Status : Answered  
 Chosen Option : 1

Q.18 A certain piece of work can be done by 10 men in 15 days. If 20 men are efficient than A, and B is 25% more efficient than B. In how many days can B and C together complete the work?

- Ans
- A.  $\frac{35}{9}$  days
- B.  $\frac{35}{9}$  days
- C.  $\frac{40}{9}$  days
- D.  $\frac{40}{9}$  days

Question ID : 26433048984

Status : Answered

Chosen Option : 4

Q.19 If  $M = 8x$  and  $N = 6x$ , then  $N$  is what percentage less than  $M$ ?

- Ans
- A. 12.50%
- B. 33.33%
- C. 25%
- D. 20%

Question ID : 26433048975

Status : Answered

Chosen Option : 3

Q.20 How much interest will be received on a principal of ₹10,000 at the rate of 15% per annum, compounded annually for 2 years?

- Ans
- A. ₹13,526
- B. ₹11,526
- C. ₹13,446
- D. ₹12,544

Question ID : 26433048933

Status : Answered

Chosen Option : 4

Q.21 The following table shows the total number of votes polled and the percentage of invalid votes in a political election held in a village during the last four Assembly elections:

Year	Total votes polled	Percentage of Invalid votes
2007	6150	2%
2010	6600	3%
2013	6200	1%
2016	10000	10%

What is the sum of the number of valid votes polled in 2010 and 2013 if no voter is absent?

- Ans
- A. 16140
  - B. 15430
  - C. 15600
  - D. 16425

Question ID : 26433050137  
Status : Answered  
Chosen Option : 2

Q.22 The marked price of an article is kept at 20% above the cost price. If the article is sold at a discount of 10% then the ratio of its selling price to its cost price is

- Ans
- A. 43 : 40
  - B. 23 : 20
  - C. 23 : 40
  - D. 20 : 23

Question ID : 26433049478  
Status : Answered  
Chosen Option : 2

Q.23 In a factory, the average salary of workers is Rs. 6000 per month. If there are 100 workers in the factory, how much more money is required to the management if the average salary is increased to Rs. 6500 per month?

- Ans
- A. 85
  - B. 132
  - C. 121
  - D. 99

Question ID : 26433050130  
Status : Answered  
Chosen Option : 2

Q.24 By selling an article for ₹450, Ryan incurred a loss of 10%. At what price should he sell it to make a profit of 20%?

- Ans
- A. ₹480
  - B. ₹440
  - C. ₹560
  - D. ₹600

Question ID : 26433049552  
Status : Answered  
Chosen Option : 3

Q.25 The speed of a boat in still water is 16 km/h. The time taken by the boat to cover a distance of 16 km upstream is equal to the time taken by the boat to travel 20 km downstream. What is the speed of the stream?

- Ans
- A. 4 km/h
  - B. 7 km/h
  - C. 5 km/h
  - D. 6 km/h

Question ID : 26433050134  
Status : Answered  
Chosen Option : 1

Q.26. Name the following.

Q.1 In which state of India is Nishagandhi festival celebrated?

- Ans
- A. Kerala
  - B. Odisha
  - C. Madhya Pradesh
  - D. Rajasthan

Question ID : 26433047521  
Status : Answered  
Chosen Option : 4

Q.2 The famous song 'Aye Mere Watan Ke Logo' was originally sung by \_\_\_\_\_.

- Ans
- A. Shreya Ghoshal
  - B. Alka Singh
  - C. Usha Khanna
  - D. Alka Bhatt

Question ID : 26433046886  
Status : Answered  
Chosen Option : 3

Q.3 Who among the following took the title of 'Ghazi' after defeating Rana Sanga in the Battle of Khanwa in 1527?

- Ans  1. Babur
2. Dada Salim Chelme
3. Humayun
4. Mahmud Ghazni

Question ID : 26433047032  
Status : Answered  
Chosen Option : 1

Q.4 Mana writes about an ocean that separates North America from Europe. Which ocean is it?

- Ans  1. Atlantic Ocean
2. Arctic Ocean
3. Indian Ocean
4. Pacific Ocean

Question ID : 26433047026  
Status : Answered  
Chosen Option : 1

Q.5 What is the term of State Legislative Assembly in India as per Indian Constitution?

- Ans  1. 7 years
2. 4 years
3. 5 years
4. 3 years

Question ID : 26433046984  
Status : Answered  
Chosen Option : 3

Q.6 With which Indian state is the 'Panthi' dance form associated?

- Ans  1. Maharashtra
2. Odisha
3. Punjab
4. Kerala

Question ID : 26433046870  
Status : Answered  
Chosen Option : 2



Q.7 Which Mauryan ruler was called 'Amittokates' by the Greeks?

- Ans  1. Samudragupta  
 2. Chandragupta I  
 3. Ashoka  
 4. Kanishka

Question ID : 26433046801

Status : Answered

Chosen Option : 3

Q.8 Which of the following Articles under Directive Principles of State Policy, in the Indian constitution provides the organisation of village panchayats?

- Ans  1. Article 63  
 2. Article 67  
 3. Article 62  
 4. Article 61

Question ID : 26433047038

Status : Answered

Chosen Option : 4

Q.9 According to the data from the economic think-tank, the Centre for Monitoring Indian Economy (CMIE), which of the following states witnessed the highest unemployment rate as of January 2022?

- Ans  1. Rajasthan  
 2. Bihar  
 3. Jharkhand  
 4. Assam

Question ID : 26433046754

Status : Answered

Chosen Option : 4

Q.10 Who is the recipient of the Abhinandan Saroja National Award 2021 by the National Institute of Indian Classical Dance?

- Ans  1. Ganga Prasad  
 2. Padma Devi  
 3. Chaya Kumar  
 4. Sitavati Nayyar

Question ID : 26433046952

Status : Not Answered

Chosen Option : =

Q.11 Choose the most reactive metal from the options given below.

- Ans  1. Copper
2. Zinc
3. Sodium
4. Iron

Question ID : 26433047525

Status : Answered

Chosen Option : 3

Q.12 Which of the following is an example of Mughal architecture under Aurangzeb?

- Ans  1. Taj Mahal, Agra
2. Jaj Mahal, Agra
3. Jama Masjid, Delhi
4. Qutub Minar, Delhi

Question ID : 26433047022

Status : Answered

Chosen Option : 1

Q.13 Which of the following was set up in 1956 by the Indian government by nationalising all the existing private sector life insurance companies?

- Ans  1. New India Assurance Company of India Limited
2. Oriental Insurance Corporation
3. Life Insurance Corporation of India
4. United India Insurance Company Limited

Question ID : 26433046892

Status : Answered

Chosen Option : 3

Q.14 Who among the following won a bronze medal in the Summer Olympics 2020 (played in 2021)?

- Ans  1. Ravi Dahiya
2. Neeraj Chopra
3. Arjun
4. Manish Prasad

Question ID : 26433047399

Status : Answered

Chosen Option : 3

Q.15 India and Sri Lanka are joined by a group of islets forming \_\_\_\_\_.

- Ans  1. Malatya Gandhi Setu  
 2. Suseel River Bridge  
 3. Sagar Mahatma Bridge  
 4. Palk Strait

Question ID : 26433046953  
Status : Answered  
Chosen Option : 4

Q.16 Which of the following was a revolutionary organisation formed outside India in 1913?

- Ans  1. Bharatya Janata Party  
 2. Swami Commission  
 3. Anand Math  
 4. Indian National Congress

Question ID : 26433046953  
Status : Answered  
Chosen Option : 3

Q.17 Which animal was the official mascot of the ICC Cricket World Cup 2011?

- Ans  1. Elephant  
 2. Horse  
 3. Lion  
 4. Tiger

Question ID : 26433047093  
Status : Marked For Review  
Chosen Option : 4

Q.18 Which TMC candidate won the Asansol (West Bengal) by-poll election in April 2022?

- Ans  1. Manita Bhargava  
 2. Anurupa Paul  
 3. Anurupa Ghosh  
 4. Ritob Ghosh

Question ID : 26433046869  
Status : Answered  
Chosen Option : 2

Q.19 Which of the following ports is known as 'Diamond Harbour'?

- Ans  1. Port Blair  
 2. Kochi  
 3. Kolkata  
 4. Manipal

Question ID : 26433047027  
Status : Answered

Q.20 Indian shooter and gold medallist Abhinav Bindra's autobiographical book is called

- Ans
- 1. Shoot to Succeed
  - 2. Hearing the Heart Way
  - 3. Being Born
  - 4. A Shot at Success

Question ID : 26433046885  
Status : Answered  
Chosen Option : 4

Q.21 Which of the following socio-religious communities was founded by Raja Ram Mohan Roy?

- Ans
- 1. Aacharya
  - 2. Prarthana Samaj
  - 3. Arya Samaj
  - 4. Brahmo Samaj

Question ID : 26433046884  
Status : Answered  
Chosen Option : 4

Q.22 Which of the following is an example of Phylum Mollusca of the animal kingdom?

- Ans
- 1. Snail
  - 2. Sea horse
  - 3. Dolphin
  - 4. King crab

Question ID : 26433046874  
Status : Not Answered  
Chosen Option : -

Q.23 According to the census 2011, which state is the most populous state in India?

- Ans
- 1. Uttar Pradesh
  - 2. Rajasthan
  - 3. Kerala
  - 4. Madhya Pradesh

Question ID : 26433047704  
Status : Answered  
Chosen Option : 1

Q.24 The Delhi Municipal Corporation (Amendment) Bill, 2022 was proposed in Lok Sabha by the Ministry of \_\_\_\_\_.

- Ans
- A. 1. Law and Justice
  - A. 2. Finance
  - A. 3. Social Justice and Empowerment
  - A. 4. Health and Family Welfare

Question ID : 26433047018

Status : Answered

Chosen Option : 4

Q.25 Which natural compound helps in photosynthesis of plants?

- Ans
- A. 1. Chlorophyll
  - A. 2. Glucose
  - A. 3. Carotene
  - A. 4. Lactin

Question ID : 26433046950

Status : Answered

Chosen Option : 1