

SSC MTS 2023 Tier 1 Sept 6 Shift 3 Question Paper with Answers

Roll Number	
Candidate Name	
Exam Date	06/09/2023
Exam Time	4:00 PM - 6:00 PM
Subject	MTS Non Tech Havaladar CBIC and CBN Examination 2023

Section : Numerical and Mathematical Ability

Q.1 In what ratio should wheat of ₹34 per kg be mixed with wheat of ₹26 per kg so that on selling the mixture at ₹36 per kg, a profit of 20% is gained?

- Ans**
- 1. 1 : 1
 - 2. 2 : 3
 - 3. 1 : 2
 - 4. 3 : 4

Question ID : 264330156511
Option 1 ID : 264330613434
Option 2 ID : 264330613432
Option 3 ID : 264330613431
Option 4 ID : 264330613433

Status : Answered

Chosen Option : 1

Q.2 A thief is noticed by a policeman from a distance of 98 m. The thief starts running and the policeman chases him. The thief and policeman run at the speed of 90 km/h and 118.8 km/h, respectively. What is the time taken to catch the thief by a policeman?

- Ans**
- 1. $14\frac{1}{4}$ sec
 - 2. $10\frac{1}{2}$ sec
 - 3. $13\frac{1}{4}$ sec
 - 4. $12\frac{1}{4}$ sec

Question ID : 264330154091
Option 1 ID : 264330603830
Option 2 ID : 264330603827
Option 3 ID : 264330603828
Option 4 ID : 264330603829

Status : Answered

Chosen Option : 4

Q.3 A cube of side 3 cm is melted and smaller cubes of sides 1 cm each are formed. How many such cubes can be formed?

- Ans**
- 1. 72
 - 2. 64
 - 3. 27
 - 4. 8

Question ID : 264330156085
Option 1 ID : 264330611742
Option 2 ID : 264330611741
Option 3 ID : 264330611739
Option 4 ID : 264330611740
Status : Answered
Chosen Option : 3

Q.4 What is the average of the prime numbers between 46 and 99, correct to two decimal places?

- Ans**
- 1. 80.27
 - 2. 82.70
 - 3. 70.82
 - 4. 72.80

Question ID : 264330156545
Option 1 ID : 264330613567
Option 2 ID : 264330613570
Option 3 ID : 264330613568
Option 4 ID : 264330613569
Status : Answered
Chosen Option : 4

Q.5 If $a : b = 3 : 2$ and $b : c = 5 : 4$, then $a : b : c$ is:

- Ans**
- 1. 11 : 8 : 10
 - 2. 8 : 10 : 15
 - 3. 15 : 10 : 8
 - 4. 7 : 10 : 15

Question ID : 264330154082
Option 1 ID : 264330603791
Option 2 ID : 264330603792
Option 3 ID : 264330603794
Option 4 ID : 264330603793
Status : Answered
Chosen Option : 3

Q.6 Find the least number which when divided by 19, 36 and 54 leaves a remainder of 4 in each case.

- Ans** ✓ 1. 2056
✗ 2. 1854
✗ 3. 2172
✗ 4. 1925

Question ID : 264330155723
Option 1 ID : 264330610297
Option 2 ID : 264330610295
Option 3 ID : 264330610298
Option 4 ID : 264330610296
Status : Answered
Chosen Option : 1

Q.7 In April, Mr. Khan observed that his balance in his bank account is ₹5,600 for the first 24 days, ₹12,000 for the next two days and ₹37,500 in the last 4 days of the month. What is his daily average balance for April?

- Ans** ✓ 1. ₹10,280
✗ 2. ₹15,280
✗ 3. ₹10,480
✗ 4. ₹14,280

Question ID : 264330154117
Option 1 ID : 264330603933
Option 2 ID : 264330603931
Option 3 ID : 264330603934
Option 4 ID : 264330603932
Status : Answered
Chosen Option : 1

Q.8 The areas of three adjacent faces of a cuboid are p , q and r unit², respectively. What is its volume?

- Ans** ✗ 1. $p^3q^3r^3$ unit³
✓ 2. \sqrt{pqr} unit³
✗ 3. pqr unit³
✗ 4. $\sqrt[3]{pqr}$ unit³

Question ID : 264330154139
Option 1 ID : 264330604022
Option 2 ID : 264330604021
Option 3 ID : 264330604020
Option 4 ID : 264330604019
Status : Answered
Chosen Option : 2

Q.9 What will be the amount due on ₹24,000 in 2 years when the rate of simple interest on successive years is 4% per annum and 5% per annum, respectively?

- Ans
- 1. ₹24,960
 - 2. ₹25,200
 - 3. ₹26,208
 - 4. ₹26,160

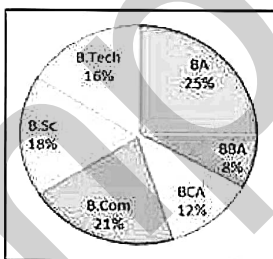
Question ID : 264330159035
Option 1 ID : 264330623500
Option 2 ID : 264330623502
Option 3 ID : 264330623499
Option 4 ID : 264330623501
Status : Answered
Chosen Option : 4

Q.10 Aslam can do a work in 20 days and Bansi in 30 days. If they work on it together for 5 days, then, what is the fraction of the remaining work?

- Ans
- 1. $\frac{7}{13}$
 - 2. $\frac{7}{12}$
 - 3. $\frac{11}{12}$
 - 4. $\frac{5}{12}$

Question ID : 264330156115
Option 1 ID : 264330611862
Option 2 ID : 264330611861
Option 3 ID : 264330611860
Option 4 ID : 264330611859
Status : Answered
Chosen Option : 2

Q.11 The pie chart shows the percentage of students studying in different courses in a college.
The degree measure of angle for students studying in BBA is:



- Ans
- 1. 32°
 - 2. 36°
 - 3. 48.8°
 - 4. 28.8°

Question ID : 264330154068
Option 1 ID : 264330603735
Option 2 ID : 264330603736
Option 3 ID : 264330603738
Option 4 ID : 264330603737
Status : Answered
Chosen Option : 4

Q.12 Sonam covers 230 km in 5 hours. What distance (in km) will she cover in 9 hours?

- Ans**
- 1. 484
 - 2. 454
 - 3. 424
 - 4. 414

Question ID : 264330155750
Option 1 ID : 264330610403
Option 2 ID : 264330610404
Option 3 ID : 264330610405
Option 4 ID : 264330610406
Status : Answered
Chosen Option : 4

Q.13 The income of a person first increases by 25% and then decreases by 25%. What % is the new income of the original income?

- Ans**
- 1. $91\frac{1}{4}\%$
 - 2. $93\frac{3}{4}\%$
 - 3. $95\frac{3}{4}\%$
 - 4. $92\frac{1}{4}\%$

Question ID : 264330156819
Option 1 ID : 264330614654
Option 2 ID : 264330614653
Option 3 ID : 264330614652
Option 4 ID : 264330614651
Status : Answered
Chosen Option : 2

Q.14 P, Q and R can complete a piece of work in 6 days, 12 days and 15 days, respectively. P starts working alone on 1st, 4th, 7th ..., Q works alone on 2nd, 5th, 8th... and R works alone on 3rd, 6th, 9th... This pattern is continued till the work is completed. In how much time (in days) is the entire work done?

- Ans**
- 1. $10\frac{3}{5}$
 - 2. $9\frac{3}{10}$
 - 3. $9\frac{1}{2}$
 - 4. $10\frac{1}{2}$

Question ID : 264330153778
Option 1 ID : 264330602577
Option 2 ID : 264330602576
Option 3 ID : 264330602575
Option 4 ID : 264330602578
Status : Answered
Chosen Option : 2

Q.15 The ratio of cost price to selling price of an article is 186 : 206. The profit per cent on it is:

- Ans
- 1. $12\frac{50}{93}$
 - 2. $12\frac{70}{93}$
 - 3. $10\frac{70}{93}$
 - 4. $10\frac{50}{93}$

Question ID : 264330155960
Option 1 ID : 264330611239
Option 2 ID : 264330611240
Option 3 ID : 264330611242
Option 4 ID : 264330611241
Status : Answered
Chosen Option : 3

Q.16 If $A : B = \frac{1}{3} : \frac{1}{5}$, $B : C = \frac{1}{7} : \frac{1}{8}$ and $C : D = \frac{1}{10} : \frac{1}{21}$, then $A : B : C : D$ is:

- Ans
- 1. 40 : 24 : 21 : 10
 - 2. 48 : 23 : 25 : 8
 - 3. 8 : 3 : 7 : 5
 - 4. 14 : 24 : 28 : 10

Question ID : 264330154083
Option 1 ID : 264330603798
Option 2 ID : 264330603795
Option 3 ID : 264330603797
Option 4 ID : 264330603796
Status : Answered
Chosen Option : 1

Q.17 The table below shows the production of transformers by five different companies in the year 2022 from January to June. Study the table carefully and answer the question that follows.

Month/Company	P	Q	R	S	T
January	145	140	177	163	140
February	178	122	179	188	187
March	185	135	160	130	145
April	150	130	169	148	172
May	146	128	180	137	153
June	128	145	195	148	170

What is the difference between the total production of companies Q and R from the month January to June?

- Ans
- 1. 260
 - 2. 263
 - 3. 280
 - 4. 283

Question ID : 264330156572
Option 1 ID : 264330613675
Option 2 ID : 264330613676
Option 3 ID : 264330613677
Option 4 ID : 264330613678
Status : Answered
Chosen Option : 1

Q.18 Kavita bought a table at 30% discount on its original price. She sold it with 48% increase on the price she bought it. What is the percentage difference between the new sale price and original price? If the original price is ₹8,000, then how much extra money did Kavita get as profit?

- Ans**
- 1. 5.6%; ₹280
 - 2. 3.6%; ₹288
 - 3. 6%; ₹360
 - 4. 4.5%; ₹308

Question ID : 264330156182
Option 1 ID : 264330612127
Option 2 ID : 264330612129
Option 3 ID : 264330612130
Option 4 ID : 264330612128
Status : Not Answered
Chosen Option : --

Q.19 What sum of money invested at 8% per annum in $1\frac{1}{2}$ years, compounded half-yearly, shall become ₹17,576?

- Ans**
- 1. ₹ 16,500
 - 2. ₹ 15,000
 - 3. ₹ 15,525
 - 4. ₹ 15,625

Question ID : 264330156079
Option 1 ID : 264330611715
Option 2 ID : 264330611716
Option 3 ID : 264330611718
Option 4 ID : 264330611717
Status : Answered
Chosen Option : 4

Q.20 Simplify:

$$(15 \div 3) \div 5 + (18 \div 9) \times 3 + (24 \div 6) \times (5 \div 4) = ?$$

- Ans**
- 1. 12
 - 2. 1
 - 3. 16
 - 4. 21

Question ID : 264330156427
Option 1 ID : 264330613102
Option 2 ID : 264330613099
Option 3 ID : 264330613101
Option 4 ID : 264330613100
Status : Answered
Chosen Option : 1

Q.1 CZMB is related to NNAM in a certain way based on the English alphabetical order. In the same way, LKQD is related to WRLO. To which of the following is HNTF related, following the same logic?

- Ans**
- 1. SQOU
 - 2. SUOQ
 - 3. SOUQ
 - 4. SUQO

Question ID : 264330154181
Option 1 ID : 264330604189
Option 2 ID : 264330604188
Option 3 ID : 264330604187
Option 4 ID : 264330604190
Status : Answered
Chosen Option : 2

Q.2 Select the combination of letters that when sequentially placed in the blanks of the given series will make it logically complete.

AC_F GJL M_PR _UVX YA_D

- Ans**
- 1. LODBS
 - 2. DKOBS
 - 3. DLOS B
 - 4. HFBHC

Question ID : 264330156316
Option 1 ID : 264330612666
Option 2 ID : 264330612665
Option 3 ID : 264330612664
Option 4 ID : 264330612663
Status : Answered
Chosen Option : 3

Q.3 If 16 September 1980 is a Tuesday, then what will be the day of the week on 3 September 1985?

- Ans**
- 1. Tuesday
 - 2. Saturday
 - 3. Friday
 - 4. Sunday

Question ID : 264330154349
Option 1 ID : 264330604860
Option 2 ID : 264330604861
Option 3 ID : 264330604859
Option 4 ID : 264330604862
Status : Answered
Chosen Option : 1

Q.4 What will come in the place of '?' in the following equation, if '+' and '-' are interchanged and '×' and '÷' are interchanged?
 $321 \times 3 - 81 - 12 + 8 = ?$

- Ans**
- 1. 132
 - 2. 122
 - 3. 142
 - 4. 112

Question ID : 264330155672
Option 1 ID : 264330610092
Option 2 ID : 264330610091
Option 3 ID : 264330610093
Option 4 ID : 264330610094
Status : Answered
Chosen Option : 2

Q.5 What should come in place of ? in the given series based on the English alphabetical order?

KFY, LGA, MHC, NIE, ?

- Ans**
- 1. OJG
 - 2. MIH
 - 3. NJG
 - 4. MKI

Question ID : 264330155773
Option 1 ID : 264330610498
Option 2 ID : 264330610497
Option 3 ID : 264330610495
Option 4 ID : 264330610496
Status : Answered
Chosen Option : 1

Q.6 Read the given statements and conclusions carefully. You have to take the given statements to be true even if they seem to be at variance from commonly known facts. You have to decide which conclusion/s logically follow/s from the given statements.

Statements: Some bats are curtains. All curtains are yellow. All yellow are pens.

Conclusion I: All yellow are curtains.

Conclusion II: Some pens are curtains.

- Ans**
- 1. Only conclusion (I) is follow.
 - 2. Both conclusions (I) and (II) are follow.
 - 3. Neither conclusion (I) nor (II) is follow.
 - 4. Only conclusion (II) is follow.

Question ID : 264330155910
Option 1 ID : 264330611043
Option 2 ID : 264330611046
Option 3 ID : 264330611045
Option 4 ID : 264330611044
Status : Answered
Chosen Option : 4

Q.7 What should come in place of ? in the given series based on the English alphabetical order?

HWC, KUD, NSE, QQF, ?

- Ans**
- 1. RMH
 - 2. ROF
 - 3. SNH
 - 4. TOG

Question ID : 264330155803
Option 1 ID : 264330610617
Option 2 ID : 264330610618
Option 3 ID : 264330610616
Option 4 ID : 264330610615
Status : Answered
Chosen Option : 4

Q.8 27 is related to 36 following a certain logic. Following the same logic, 69 is related to 78. To which of the following is 53 related to, following the same logic?

- Ans**
- 1. 63
 - 2. 64
 - 3. 62
 - 4. 61

Question ID : 264330151598
Option 1 ID : 264330594021
Option 2 ID : 264330594022
Option 3 ID : 264330594020
Option 4 ID : 264330594019
Status : Answered
Chosen Option : 3

Q.9 What should come in place of ? in the given series?

56 54 50 48 44 ?

- Ans**
- 1. 40
 - 2. 38
 - 3. 42
 - 4. 36

Question ID : 264330151718
Option 1 ID : 264330594499
Option 2 ID : 264330594501
Option 3 ID : 264330594500
Option 4 ID : 264330594502
Status : Answered
Chosen Option : 3

Q.10 R, S, T, U, V, W, X and Y are sitting around a square table facing the center of the table. Some of them are sitting at the corners while some are sitting at the exact center of the sides. R is the immediate neighbour of X and Y. X sits in any of the corners. W sits third to the right of T. T does not sit in any of the corners. U is the immediate neighbour of Y and W. V is not the neighbour of W.

How many people sit between W and T, when counted from the right of W?

- Ans**
- 1. Four
 - 2. Five
 - 3. Two
 - 4. Three

Question ID : 264330155540

Option 1 ID : 264330609564

Option 2 ID : 264330609563

Option 3 ID : 264330609566

Option 4 ID : 264330609565

Status : Answered

Chosen Option : 1

Q.11 If 'P' stands for '×', 'Q' stands for '+', 'R' stands for '-' and 'S' stands for '÷', what will come in place of the question mark (?) in the following equation?
 $39 \text{ S } 6 \text{ P } 9 \text{ R } 32 \text{ S } 15 \text{ P } 8 \text{ R } 70 = ?$

- Ans**
- 1. 111
 - 2. 88
 - 3. 91
 - 4. 119

Question ID : 264330151791

Option 1 ID : 264330594791

Option 2 ID : 264330594793

Option 3 ID : 264330594792

Option 4 ID : 264330594794

Status : Answered

Chosen Option : 1

Q.12 What should come in place of ? in the given series?

101 104 109 116 125 ?

- Ans**
- 1. 136
 - 2. 134
 - 3. 135
 - 4. 133

Question ID : 264330151545

Option 1 ID : 264330593810

Option 2 ID : 264330593808

Option 3 ID : 264330593809

Option 4 ID : 264330593807

Status : Answered

Chosen Option : 1

Q.13 28 is related to 12 following a certain logic. Following the same logic, 42 is related to 19. To which of the following is 52 related to, following the same logic?

- Ans**
- 1. 23
 - 2. 25
 - 3. 24
 - 4. 22

Question ID : 264330151584

Option 1 ID : 264330593964

Option 2 ID : 264330593966

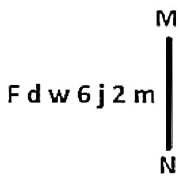
Option 3 ID : 264330593965

Option 4 ID : 264330593963

Status : Answered

Chosen Option : 3

Q.14 Select the correct mirror image of the given figure when the mirror is placed at MN as shown below.



- Ans**
- 1. m 2 j a w b F
 - 2. 2 m j a w b F
 - 3. m 2 j a w b F
 - 4. m 2 j a m d F

Question ID : 264330151505

Option 1 ID : 264330593648

Option 2 ID : 264330593650

Option 3 ID : 264330593649

Option 4 ID : 264330593647

Status : Answered

Chosen Option : 3

Q.15 In a certain code language, 'MACABRE' is coded as '8' and 'HEDONISM' is coded as '9'. What is the code for 'ERUPT' in the given code language?

- Ans**
- 1. 8
 - 2. 6
 - 3. 5
 - 4. 7

Question ID : 264330155823

Option 1 ID : 264330610695

Option 2 ID : 264330610697

Option 3 ID : 264330610696

Option 4 ID : 264330610698

Status : Answered

Chosen Option : 2

Q.16 Read the given statements and conclusions carefully. You have to take the given statements to be true even if they seem to be at variance from commonly known facts. You have to decide which conclusion/s logically follow/s from the given statements.

Statements: All flowers are orange. Some orange is colour. All colours are bright.

Conclusion I: Some orange are flowers.

Conclusion II: All colour is orange.

- Ans**
- 1. Only conclusion (I) is follow.
 - 2. Both conclusions (I) and (II) are follow.
 - 3. Only conclusion (II) is follow.
 - 4. Neither conclusion (I) nor (II) is follow.

Question ID : 264330155904

Option 1 ID : 264330611019

Option 2 ID : 264330611022

Option 3 ID : 264330611020

Option 4 ID : 264330611021

Status : Answered

Chosen Option : 1

Q.17 Which figure should replace the question mark (?) if the following figure series were to be continued?

D	X	Y	8	Y	9	9	8	Y	↑	Y	D	
8	↑		D	X		↑	=		9	8		?
		9			↑			D			=	

Ans

✓ 1.

D	↑	Y
=	S	
		9

✗ 2.

9	↑	=
8	Y	
		D

✗ 3.

Y	D	↑
=	S	
		9

✗ 4.

D	↑	Y
=	9	
		8

Question ID : 264330154757

Option 1 ID : 264330606493

Option 2 ID : 264330606492

Option 3 ID : 264330606494

Option 4 ID : 264330606491

Status : Not Answered

Chosen Option : --

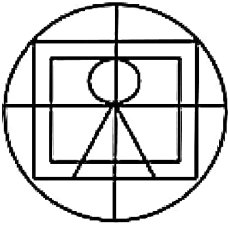
Q.18 Select the option figure in which the given figure (X) is embedded as its part (rotation is NOT allowed).



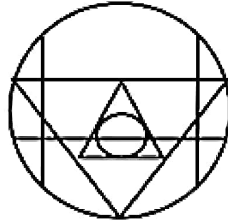
(X)

Ans

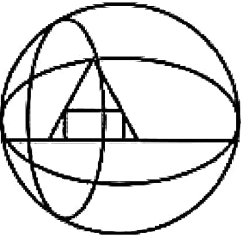
X 1.



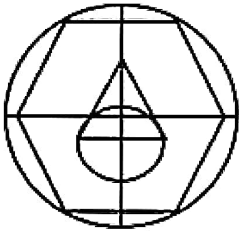
✓ 2.



X 3.



X 4.



Question ID : 264330151728

Option 1 ID : 264330594540

Option 2 ID : 264330594539

Option 3 ID : 264330594542

Option 4 ID : 264330594541

Status : Answered

Chosen Option : 2

Q.19 In a certain code language, 'never lose hope' is coded as 'tu fk mb' and 'winners never quit' is coded as 'dg vc fk'. How is 'never' coded in the given language?

Ans X 1. vc

X 2. tu

✓ 3. fk

X 4. dg

Question ID : 264330151696

Option 1 ID : 264330594414

Option 2 ID : 264330594411

Option 3 ID : 264330594412

Option 4 ID : 264330594413

Status : Answered

Chosen Option : 3

Q.20 What should come in place of ? in the given series?

175 180 185 190 195 ?

- Ans
- 1. 207
 - 2. 204
 - 3. 201
 - 4. 200

Question ID : 264330151544

Option 1 ID : 264330593805

Option 2 ID : 264330593804

Option 3 ID : 264330593803

Option 4 ID : 264330593806

Status : Answered

Chosen Option : 4

Section : General Awareness

Q.1 Which of the following countries did India beat to win the Men's Hockey Junior Asia Cup 2023?

- Ans
- 1. South Korea
 - 2. Thailand
 - 3. Pakistan
 - 4. Japan

Question ID : 264330161135

Option 1 ID : 264330631872

Option 2 ID : 264330631874

Option 3 ID : 264330631871

Option 4 ID : 264330631873

Status : Answered

Chosen Option : 1

Q.2 In the realm of soil science, humus is considered:

- Ans
- 1. synthetic additive
 - 2. decaying organic matter in soil
 - 3. mineral-rich compound
 - 4. inorganic material

Question ID : 264330161317

Option 1 ID : 264330632598

Option 2 ID : 264330632597

Option 3 ID : 264330632595

Option 4 ID : 264330632596

Status : Answered

Chosen Option : 1

Q.3 Which group of crops belong to fibre crops and are produced on a large scale in India?

- Ans**
- 1. Gram and tur
 - 2. Jute and hemp
 - 3. Tea and coffee
 - 4. Wheat and rice

Question ID : 264330160138
Option 1 ID : 264330627892
Option 2 ID : 264330627894
Option 3 ID : 264330627893
Option 4 ID : 264330627891
Status : Answered
Chosen Option : 1

Q.4 Name the life-threatening disease caused by protozoa of the genus Trypanosoma that is transmitted to human hosts through the bite of infected tsetse flies.

- Ans**
- 1. Sleeping sickness
 - 2. Chagas disease
 - 3. Giardiasis
 - 4. Kala-azar

Question ID : 264330161077
Option 1 ID : 264330631642
Option 2 ID : 264330631639
Option 3 ID : 264330631640
Option 4 ID : 264330631641
Status : Answered
Chosen Option : 4

Q.5 Who is an acclaimed Kathak dancer with many awards to his credit?

- Ans**
- 1. Pandit Shiv Kumar Sharma
 - 2. Ustad Alla Rakha
 - 3. Pandit Birju Maharaj
 - 4. Ustad Bismillah Khan

Question ID : 264330160981
Option 1 ID : 264330631255
Option 2 ID : 264330631257
Option 3 ID : 264330631258
Option 4 ID : 264330631256
Status : Answered
Chosen Option : 3

Q.6 'Pinjar' is a novel by _____.

- Ans**
- 1. Kiran Desai
 - 2. Kamala Das
 - 3. Anita Desai
 - 4. Amrita Pritam

Question ID : 264330160969
Option 1 ID : 264330631209
Option 2 ID : 264330631210
Option 3 ID : 264330631208
Option 4 ID : 264330631207
Status : Answered
Chosen Option : 1

Q.7 When was the Asian Games organised in India for the second time?

- Ans 1. 1994
 2. 1986
 3. 1982
 4. 1998

Question ID : 264330158237
Option 1 ID : 264330620309
Option 2 ID : 264330620307
Option 3 ID : 264330620308
Option 4 ID : 264330620310
Status : Answered
Chosen Option : 1

Q.8 Who nominates members to the Rajya Sabha based on their excellence in literature, science, art and social service?

- Ans 1. The Chief Justice of India
 2. The President
 3. The Chairman of the Rajya Sabha
 4. The Prime Minister

Question ID : 264330161292
Option 1 ID : 264330632498
Option 2 ID : 264330632497
Option 3 ID : 264330632496
Option 4 ID : 264330632495
Status : Answered
Chosen Option : 2

Q.9 Which Indian musician is associated with the Flute?

- Ans 1. Pandit Hari Prasad Chaurasia
 2. Ustad Zakir Hussain
 3. Pandit Ravi Shankar
 4. Ustad Allahrakha

Question ID : 264330162231
Option 1 ID : 264330636251
Option 2 ID : 264330636254
Option 3 ID : 264330636253
Option 4 ID : 264330636252
Status : Answered
Chosen Option : 1

Q.10 The black soil area of the _____ is known as the Deccan Trap.

- Ans 1. Northern Plains
 2. Peninsular Plateau
 3. Coastal Plains
 4. Himalayan Mountains

Question ID : 264330161524
Option 1 ID : 264330633424
Option 2 ID : 264330633423
Option 3 ID : 264330633426
Option 4 ID : 264330633425
Status : Answered
Chosen Option : 2

Q.11 When did the British East India Company start the 'permanent settlement system'?

- Ans 1. 1793 CE
 2. 1773 CE
 3. 1799 CE
 4. 1780 CE

Question ID : 264330162317
Option 1 ID : 264330636597
Option 2 ID : 264330636595
Option 3 ID : 264330636598
Option 4 ID : 264330636596
Status : Answered
Chosen Option : 1

Q.12 The word 'Swaraj' was first used by Dadabhai Naoroji in the Congress session held in which place?

- Ans 1. Madras
 2. Surat
 3. Calcutta
 4. Lucknow

Question ID : 264330162327
Option 1 ID : 264330636636
Option 2 ID : 264330636635
Option 3 ID : 264330636638
Option 4 ID : 264330636637
Status : Answered
Chosen Option : 3

Q.13 Chhau, identified by the Ministry of Culture as a classical dance, is prevalent in eastern India and has three distinct forms. Which of the following is NOT one of them?

- Ans 1. Seraikela Chhau of Jharkhand
 2. Marwahi Chhau of Chhattisgarh
 3. Purulia Chhau of West Bengal
 4. Mayurbhanj Chhau of Odisha

Question ID : 264330160792
Option 1 ID : 264330630500
Option 2 ID : 264330630502
Option 3 ID : 264330630501
Option 4 ID : 264330630499
Status : Answered
Chosen Option : 2

Q.14 According to the Global Multidimensional Poverty Index 2022, which of the following states is NOT included in 10 poorest states?

- Ans 1. Gujarat
 2. Assam
 3. Odisha
 4. Uttar Pradesh

Question ID : 264330161502
Option 1 ID : 264330633337
Option 2 ID : 264330633335
Option 3 ID : 264330633338
Option 4 ID : 264330633336
Status : Answered
Chosen Option : 1

Q.15 Which Clause of Article 19 of the Indian Constitution guarantees the 'right to move freely throughout the territory of India'?

- Ans
- 1. Clause (b)
 - 2. Clause (c)
 - 3. Clause (d)
 - 4. Clause (a)

Question ID : 264330162249
Option 1 ID : 264330636324
Option 2 ID : 264330636325
Option 3 ID : 264330636326
Option 4 ID : 264330636323
Status : Answered
Chosen Option : 2

Q.16 Who among the following was a renowned player of the musical instrument called 'Santoor'?

- Ans
- 1. Pandit Hariprasad Chaurasia
 - 2. Pandit Kumar Gandharva
 - 3. Pandit Shivkumar Sharma
 - 4. Pandit Ravi Shankar

Question ID : 264330155462
Option 1 ID : 264330609253
Option 2 ID : 264330609251
Option 3 ID : 264330609254
Option 4 ID : 264330609252
Status : Answered
Chosen Option : 3

Q.17 The President of India conferred the Padma Shri award to Sanathoiba Sharma for his distinguished service in the field of _____ in 2023.

- Ans
- 1. Mukna
 - 2. Khong Kangjei
 - 3. Thang-Ta
 - 4. Yubi Lakpi

Question ID : 264330161444
Option 1 ID : 264330633105
Option 2 ID : 264330633104
Option 3 ID : 264330633103
Option 4 ID : 264330633106
Status : Answered
Chosen Option : 1

Q.18 Rikham pada dance belongs to which of the following states?

- Ans
- 1. Meghalaya
 - 2. Assam
 - 3. Mizoram
 - 4. Arunachal Pradesh

Question ID : 264330159059
Option 1 ID : 264330623597
Option 2 ID : 264330623596
Option 3 ID : 264330623598
Option 4 ID : 264330623595
Status : Answered
Chosen Option : 1

Q.19 Which theory was published by John Dalton in 1808 to explain chemical reactions?

- Ans 1. Atomic theory
 2. Valence bond theory
 3. Quantum field theory
 4. Molecular orbital theory

Question ID : 264330161057
Option 1 ID : 264330631559
Option 2 ID : 264330631561
Option 3 ID : 264330631560
Option 4 ID : 264330631562
Status : Answered
Chosen Option : 1

Q.20 What is the main function of money in an economy?

- Ans 1. To regulate interest rates
 2. To create wealth
 3. To facilitate exchange
 4. To control inflation

Question ID : 264330157297
Option 1 ID : 264330616554
Option 2 ID : 264330616552
Option 3 ID : 264330616551
Option 4 ID : 264330616553
Status : Answered
Chosen Option : 3

Q.21 Who among the following designed the India Gate?

- Ans 1. Lord Wavell
 2. Lord Dalhousie
 3. Edwin Lutyens
 4. John Nash

Question ID : 264330160773
Option 1 ID : 264330630423
Option 2 ID : 264330630425
Option 3 ID : 264330630424
Option 4 ID : 264330630426
Status : Answered
Chosen Option : 3

Q.22 In 2022, the Centre constituted a committee headed by former Union Agriculture Secretary _____ to look into the issues of minimum support price (MSP).

- Ans 1. Sanjay Agrawal
 2. P Chandrashekar
 3. Radha Mohan Singh
 4. JP Sharma

Question ID : 264330161410
Option 1 ID : 264330632968
Option 2 ID : 264330632969
Option 3 ID : 264330632967
Option 4 ID : 264330632970
Status : Answered
Chosen Option : 1

Q.23 One of the prominent festivals celebrated in _____ is the 'Me-Dum-Me-Phi', i.e., the ancestor worship festival.

- Ans 1. Assam
 2. Nagaland
 3. Manipur
 4. Meghalaya

Question ID : 264330160820
Option 1 ID : 264330630611
Option 2 ID : 264330630613
Option 3 ID : 264330630614
Option 4 ID : 264330630612
Status : Answered
Chosen Option : 2

Q.24 निम्नलिखित में से सरकारी बजट में राजस्व व्यय का उदाहरण कौन-सा है?

- Ans 1. नए राजमार्ग का निर्माण
 2. किसी राज्य-स्वामित्व वाली कंपनी में निवेश
 3. सरकारी कर्मचारियों के वेतन का भुगतान
 4. ऋण का पुनर्भुगतान

Question ID : 264330157275
Option 1 ID : 264330616463
Option 2 ID : 264330616466
Option 3 ID : 264330616464
Option 4 ID : 264330616465
Status : Answered
Chosen Option : 2

Q.25 'The Fall of a Sparrow' is an autobiography of _____.

- Ans 1. Salim Ali
 2. Raj Kapoor
 3. Kapil Dev
 4. Atal Bihari Vajpayee

Question ID : 264330155490
Option 1 ID : 264330609364
Option 2 ID : 264330609366
Option 3 ID : 264330609365
Option 4 ID : 264330609363
Status : Answered
Chosen Option : 1

Q.1 Select the most appropriate meaning of the given idiom.
Be like chalk and cheese

- Ans**
- 1. To be completely different from each other
 - 2. To be very similar to each other
 - 3. To have a close relation with another person
 - 4. To be distantly related to each other

Question ID : 264330153410
Option 1 ID : 264330601175
Option 2 ID : 264330601176
Option 3 ID : 264330601177
Option 4 ID : 264330601178
Status : Answered
Chosen Option : 3

Q.2 Select the most appropriate ANTONYM of the underlined word.
Everyone liked the lively music being played at the restaurant.

- Ans**
- 1. Durable
 - 2. Cheerful
 - 3. Speedy
 - 4. Sombre

Question ID : 264330153408
Option 1 ID : 264330601168
Option 2 ID : 264330601167
Option 3 ID : 264330601169
Option 4 ID : 264330601170
Status : Answered
Chosen Option : 4

Q.3 Select the INCORRECTLY spelt word.

- Ans**
- 1. Fourty
 - 2. Committee
 - 3. Hypnotic
 - 4. Tennessee

Question ID : 264330153219
Option 1 ID : 264330600435
Option 2 ID : 264330600436
Option 3 ID : 264330600438
Option 4 ID : 264330600437
Status : Answered
Chosen Option : 1

Q.4 Select the option that can be used as a one-word substitute for the underlined segment in the following sentence.
Raymond has opted the study of religion as his major subject in graduation.

- Ans**
- 1. Psephology
 - 2. Philology
 - 3. Theology
 - 4. Psychology

Question ID : 264330152715
Option 1 ID : 264330598459
Option 2 ID : 264330598461
Option 3 ID : 264330598462
Option 4 ID : 264330598460
Status : Answered
Chosen Option : 3

Q.5 Select the most appropriate idiom from the given options to fill in the blank.
Greta Thunberg _____ when she dared to question about accountability with respect to global warming and climate change.

- Ans**
- 1. sowed wild oats
 - 2. kept the pot boiling
 - 3. gave the devil his due
 - 4. hit the nail on the head

Question ID : 264330152685
Option 1 ID : 264330598346
Option 2 ID : 264330598345
Option 3 ID : 264330598343
Option 4 ID : 264330598344
Status : Answered
Chosen Option : 1

Q.6 Select the most appropriate option that can substitute the underlined segment in the given sentence. If there is no need to substitute it, select 'No substitution required'.
When Rajesh was going to college, he meet with an accident.

- Ans**
- 1. has met
 - 2. meets
 - 3. met
 - 4. No substitution required

Question ID : 264330152727
Option 1 ID : 264330598508
Option 2 ID : 264330598507
Option 3 ID : 264330598509
Option 4 ID : 264330598510
Status : Answered
Chosen Option : 3

Q.7 Parts of the following sentence have been underlined and given as options. Select the option that contains an error.

As soon as I shall win the lottery, I hope to buy a Ferrari.

- Ans**
- 1. hope
 - 2. As soon as
 - 3. shall win
 - 4. a Ferrari

Question ID : 264330159746
Option 1 ID : 264330626341
Option 2 ID : 264330626339
Option 3 ID : 264330626340
Option 4 ID : 264330626342
Status : Answered
Chosen Option : 1

Q.8 Select the most appropriate option to fill in the blank.

Some things are meant to be, and death is _____ for humans.

- Ans**
- 1. edible
 - 2. spiral
 - 3. natural
 - 4. viral

Question ID : 264330153497
Option 1 ID : 264330601506
Option 2 ID : 264330601505
Option 3 ID : 264330601504
Option 4 ID : 264330601503
Status : Answered
Chosen Option : 3

Q.9 Select the option that rectifies the spelling of the underlined word in the given sentence.

They complained that their manager was incompietent and knew nothing about the project.

- Ans**
- 1. incompetant
 - 2. incompetteant
 - 3. incomepetent
 - 4. incompetent

Question ID : 264330152837
Option 1 ID : 264330598939
Option 2 ID : 264330598941
Option 3 ID : 264330598942
Option 4 ID : 264330598940
Status : Answered
Chosen Option : 4

Q.10 Select the most appropriate synonym of the given word.
Distinguished

- Ans**
- 1. Mirrored
 - 2. Dignified
 - 3. Dramatic
 - 4. Mediocre

Question ID : 264330153558
Option 1 ID : 264330601733
Option 2 ID : 264330601731
Option 3 ID : 264330601732
Option 4 ID : 264330601734
Status : Answered
Chosen Option : 2

Q.11 Select the most appropriate ANTONYM of the given word.
Periodic

- Ans**
- 1. Holistic
 - 2. Dynamic
 - 3. Irregular
 - 4. Tedious

Question ID : 264330151913
Option 1 ID : 264330595269
Option 2 ID : 264330595267
Option 3 ID : 264330595270
Option 4 ID : 264330595268
Status : Answered
Chosen Option : 1

Q.12 The following sentence has been split into four segments. Identify the segment that contains an error.

Manisha saw an old elephant / in the wildlife reserve / while she was / on safari tour.

- Ans**
- 1. on safari tour
 - 2. Manisha saw an old elephant
 - 3. while she was
 - 4. in the wildlife reserve

Question ID : 264330155316
Option 1 ID : 264330608706
Option 2 ID : 264330608703
Option 3 ID : 264330608705
Option 4 ID : 264330608704
Status : Answered
Chosen Option : 3

Q.13 Parts of the following sentence have been given as options. Select the option that contains an error.
In Nepal, the food is more cheaper than in Sri Lanka.

- Ans**
- 1. more cheaper
 - 2. the food is
 - 3. than in Sri Lanka
 - 4. In Nepal

Question ID : 264330152799
Option 1 ID : 264330598789
Option 2 ID : 264330598788
Option 3 ID : 264330598790
Option 4 ID : 264330598787
Status : Answered
Chosen Option : 1

Q.14 Select the most appropriate option to fill in the blank.
Most times, he is sitting alone, immersed in his own _____.

- Ans**
- 1. synagogue
 - 2. monologue
 - 3. mystagogue
 - 4. prologue

Question ID : 264330153436
Option 1 ID : 264330601267
Option 2 ID : 264330601269
Option 3 ID : 264330601270
Option 4 ID : 264330601268
Status : Answered
Chosen Option : 2

Q.15 Identify the INCORRECTLY spelt word in the following sentence and select its correct spelling from the given options.
He has neither the policies nor the persanol charisma to inspire people.

- Ans**
- 1. cherisma
 - 2. polecies
 - 3. personal
 - 4. niether

Question ID : 264330153109
Option 1 ID : 264330600002
Option 2 ID : 264330600000
Option 3 ID : 264330600001
Option 4 ID : 264330599999
Status : Answered
Chosen Option : 3

Q.16 Select the most appropriate meaning of the underlined idiom.

The judge wanted to hear straight from the horse's mouth.

- Ans
- 1. Directly from the lawyer
 - 2. Directly from the person involved
 - 3. In close vicinity to the juror
 - 4. Having ears which never fail

Question ID : 264330153149
Option 1 ID : 264330600156
Option 2 ID : 264330600155
Option 3 ID : 264330600157
Option 4 ID : 264330600158
Status : Answered
Chosen Option : 2

Q.17 Select the most appropriate option that can substitute the underlined segment in the given sentence. If there is no need to substitute it, select 'No substitution required'.
Virtual reality is the creation of a virtual environment presented to our senses in such a way that we experience it as if we were really there.

- Ans
- 1. presenting to our senses
 - 2. presenting in our senses
 - 3. presents to our senses
 - 4. No substitution required

Question ID : 264330151899
Option 1 ID : 264330595212
Option 2 ID : 264330595213
Option 3 ID : 264330595211
Option 4 ID : 264330595214
Status : Answered
Chosen Option : 1

Q.18 Select the most appropriate idiom from the given options to fill in the blank.
Being a journalist, your first duty is to _____ or else your colleagues might surpass you.

- Ans
- 1. eat a humble pie
 - 2. have an axe to grind
 - 3. build castles in the air
 - 4. keep your ear to the ground

Question ID : 264330152686
Option 1 ID : 264330598348
Option 2 ID : 264330598349
Option 3 ID : 264330598347
Option 4 ID : 264330598350
Status : Answered
Chosen Option : 4

Q.19 The following sentence has been divided into four parts. Identify the part that contains an error.
(A) He will come / (B) and receive you / (C) at the station / (D) when you will arrive.

- Ans
- 1. A
 - 2. B
 - 3. C
 - 4. D

Question ID : 264330152626
Option 1 ID : 264330598108
Option 2 ID : 264330598110
Option 3 ID : 264330598109
Option 4 ID : 264330598107
Status : Answered
Chosen Option : 4

Q.20 The following sentence has been split into four segments. Identify the segment that contains a grammatical error.

She is very good / in playing / the guitar / and singing songs.

- Ans
- 1. in playing
 - 2. and singing songs
 - 3. the guitar
 - 4. She is very good

Question ID : 264330155427
Option 1 ID : 264330609116
Option 2 ID : 264330609118
Option 3 ID : 264330609117
Option 4 ID : 264330609115
Status : Answered
Chosen Option : 3

Comprehension:

In the following passage, some words have been deleted. Read the passage carefully and select the most appropriate option to fill in each blank.

Environmental pollution is a growing (1) _____ all around the world as it poses significant risks to human health and ecosystems. The (2) _____ of environmental pollution vary from natural causes such as volcanic emissions to human actions, including industrialisation, transportation, energy production and agricultural practices. (3) _____ of these activities, pollutants are released into the air, water bodies and soil leading to harmful effects such as respiratory diseases, loss of biodiversity and climate change. One of the primary causes of environmental pollution is human attitudes towards sustainability (4) _____ their lack of environmental awareness. Human activities that harm the environment and ecosystem often result from individual choices (5) _____ driving or using single-use plastics.

SubQuestion No : 21

Q.21 Select the most appropriate option to fill in blank number 1.

- Ans
- 1. interest
 - 2. duty
 - 3. concern
 - 4. charge

Question ID : 264330153398
Option 1 ID : 264330601130
Option 2 ID : 264330601128
Option 3 ID : 264330601129
Option 4 ID : 264330601127
Status : Answered
Chosen Option : 3

Comprehension:

In the following passage, some words have been deleted. Read the passage carefully and select the most appropriate option to fill in each blank.

Environmental pollution is a growing (1)_____ all around the world as it poses significant risks to human health and ecosystems. The (2)_____ of environmental pollution vary from natural causes such as volcanic emissions to human actions, including industrialisation, transportation, energy production and agricultural practices. (3)_____ of these activities, pollutants are released into the air, water bodies and soil leading to harmful effects such as respiratory diseases, loss of biodiversity and climate change. One of the primary causes of environmental pollution is human attitudes towards sustainability (4)_____ their lack of environmental awareness. Human activities that harm the environment and ecosystem often result from individual choices (5)_____ driving or using single-use plastics.

SubQuestion No : 22

Q.22 Select the most appropriate option to fill in blank number 2.

- Ans** 1. sourcing
 2. sources
 3. sourced
 4. source

Question ID : 264330153399

Option 1 ID : 264330601132

Option 2 ID : 264330601134

Option 3 ID : 264330601133

Option 4 ID : 264330601131

Status : Answered

Chosen Option : 2

Comprehension:

In the following passage, some words have been deleted. Read the passage carefully and select the most appropriate option to fill in each blank.

Environmental pollution is a growing (1)_____ all around the world as it poses significant risks to human health and ecosystems. The (2)_____ of environmental pollution vary from natural causes such as volcanic emissions to human actions, including industrialisation, transportation, energy production and agricultural practices. (3)_____ of these activities, pollutants are released into the air, water bodies and soil leading to harmful effects such as respiratory diseases, loss of biodiversity and climate change. One of the primary causes of environmental pollution is human attitudes towards sustainability (4)_____ their lack of environmental awareness. Human activities that harm the environment and ecosystem often result from individual choices (5)_____ driving or using single-use plastics.

SubQuestion No : 23

Q.23 Select the most appropriate option to fill in blank number 3.

- Ans** 1. Since
 2. However
 3. As a result
 4. Therefore

Question ID : 264330153400

Option 1 ID : 264330601136

Option 2 ID : 264330601138

Option 3 ID : 264330601137

Option 4 ID : 264330601135

Status : Answered

Chosen Option : 3

Comprehension:

In the following passage, some words have been deleted. Read the passage carefully and select the most appropriate option to fill in each blank.

Environmental pollution is a growing (1)_____ all around the world as it poses significant risks to human health and ecosystems. The (2)_____ of environmental pollution vary from natural causes such as volcanic emissions to human actions, including industrialisation, transportation, energy production and agricultural practices. (3)_____ of these activities, pollutants are released into the air, water bodies and soil leading to harmful effects such as respiratory diseases, loss of biodiversity and climate change. One of the primary causes of environmental pollution is human attitudes towards sustainability (4)_____ their lack of environmental awareness. Human activities that harm the environment and ecosystem often result from individual choices (5)_____ driving or using single-use plastics.

SubQuestion No : 24

Q.24 Select the most appropriate option to fill in blank number 4.

- Ans** 1. and
 2. since
 3. but
 4. because

Question ID : 264330153401

Option 1 ID : 264330601139

Option 2 ID : 264330601141

Option 3 ID : 264330601140

Option 4 ID : 264330601142

Status : Answered

Chosen Option : 1

Comprehension:

In the following passage, some words have been deleted. Read the passage carefully and select the most appropriate option to fill in each blank.

Environmental pollution is a growing (1)_____ all around the world as it poses significant risks to human health and ecosystems. The (2)_____ of environmental pollution vary from natural causes such as volcanic emissions to human actions, including industrialisation, transportation, energy production and agricultural practices. (3)_____ of these activities, pollutants are released into the air, water bodies and soil leading to harmful effects such as respiratory diseases, loss of biodiversity and climate change. One of the primary causes of environmental pollution is human attitudes towards sustainability (4)_____ their lack of environmental awareness. Human activities that harm the environment and ecosystem often result from individual choices (5)_____ driving or using single-use plastics.

SubQuestion No : 25

Q.25 Select the most appropriate option to fill in blank number 5.

- Ans** 1. example
 2. while
 3. like
 4. instance

Question ID : 264330153402

Option 1 ID : 264330601144

Option 2 ID : 264330601143

Option 3 ID : 264330601146

Option 4 ID : 264330601145

Status : Answered

Chosen Option : 3