

Section : General English

Q.1 Select the most appropriate meaning of the given idiom.

To lead by the nose

- Ans**
- 1. To hit someone on the nose
 - 2. To depend totally on someone
 - 3. To completely control someone
 - 4. To burden someone with work

Question ID : 2390871633
Status : Answered
Chosen Option : 3

Q.2 Choose the most appropriate word that can substitute the given group of words.

A polygon with eight sides and eight angles.

- Ans**
- 1. Octagon
 - 2. Pentagon
 - 3. Hexagon
 - 4. Triangle

Question ID : 2390871636
Status : Answered
Chosen Option : 1

Q.3 Select the most appropriate option to fill in the blank.

Akbar had a _____ reign than Babar.

- Ans**
- 1. longest
 - 2. longer
 - 3. long
 - 4. more long

Question ID : 2390871622
Status : Answered
Chosen Option : 2

Q.4 Choose the correctly spelt word.

- Ans**
- 1. Submission
 - 2. Explanation

- 3. Conquer
- 4. Confidense

Question ID : 2390871637
Status : Answered
Chosen Option : 3

Q.5 Select the most appropriate option to fill in the blank.

She returned the book after she ____ it.

- Ans
- 1. had read
 - 2. was read
 - 3. read
 - 4. reads

Question ID : 2390871621
Status : Answered
Chosen Option : 1

Q.6 Select the most appropriate option to substitute the underlined segment in the given sentence. If there is no need to substitute it, select No Improvement.

I will write to you when I will reach New Delhi.

- Ans
- 1. I will be reaching
 - 2. No Improvement
 - 3. I am reached
 - 4. I reach

Question ID : 2390871618
Status : Answered
Chosen Option : 1

Q.7 Choose the most appropriate word that can substitute the given group of words.

Person with no fixed abode

- Ans
- 1. Artist
 - 2. Crusader
 - 3. Tourist
 - 4. Nomad

Question ID : 2390871635
Status : Answered
Chosen Option : 4

Q.8 Select the most appropriate synonym of the given word.

Eager

- Ans
- 1. Active
 - 2. Keen
 - 3. Satisfied
 - 4. Alert

Question ID : 2390871629
Status : Answered
Chosen Option : 2

Q.9 Find the part of the given sentence that has an error in it. If there is no error, choose 'No error'.

She loved herself so more that she thought of no one else. /No error

- Ans
- 1. thought of no one else
 - 2. so more that she
 - 3. No error
 - 4. She loved herself

Question ID : 2390871617
Status : Answered
Chosen Option : 2

Q.10 Choose the correctly spelt word.

- Ans
- 1. Adjourn
 - 2. Proceedings
 - 3. Suspicion
 - 4. Discussion

Question ID : 2390871638
Status : Answered
Chosen Option : 1

Q.11 Select the most appropriate option to substitute the underlined segment in the given sentence. If there is no need to substitute it, select No Improvement.

My car broke off on my way to home.

- Ans
- 1. down
 - 2. on
 - 3. out
 - 4. No Improvement

Question ID : 2390871619
Status : Answered
Chosen Option : 1

Q.12 Select the most appropriate antonym of the given word.

Destroy

- Ans
- 1. Obliterate
 - 2. Abolish
 - 3. Shine
 - 4. Preserve

Question ID : 2390871631
Status : Answered
Chosen Option : 4

Q.13 Find the part of the given sentence that has an error in it. If there is no error, choose 'No error'.

There is few to be said on both sides. /No error

- Ans
- 1. There is few
 - 2. on both sides
 - 3. No error
 - 4. to be said

Question ID : 2390871615

Status : Not Attempted and Marked For Review

Chosen Option : --

Q.14 Select the most appropriate option to fill in the blank.

The passengers were afraid, but the captain _____ them that there was no danger.

- Ans
- 1. confided
 - 2. assured
 - 3. cautioned
 - 4. claimed

Question ID : 2390871640

Status : Answered

Chosen Option : 2

Q.15 Find the part of the given sentence that has an error in it. If there is no error, choose 'No error'.

Some people is always talking about themselves. /No error

- Ans
- 1. Some people
 - 2. No error
 - 3. is always talking
 - 4. about themselves

Question ID : 2390871616

Status : Answered

Chosen Option : 3

Q.16 Select the most appropriate antonym of the given word.

Quarrel

- Ans
- 1. Strife
 - 2. Feud
 - 3. Bias
 - 4. Harmony

Question ID : 2390871632

Status : Answered

Chosen Option : 4

Q.17 Select the most appropriate meaning of the given idiom.

- Ans
- 1. To remember the past
 - 2. Neat and tidy
 - 3. To forgive and forget
 - 4. Just at the last moment

Question ID : 2390871634
Status : Answered
Chosen Option : 3

Q.18 Select the most appropriate option to substitute the underlined segment in the given sentence. If there is no need to substitute it, select No Improvement.

We must start now unless it will be too late.

- Ans
- 1. or
 - 2. but
 - 3. until
 - 4. No Improvement

Question ID : 2390871620
Status : Answered
Chosen Option : 1

Q.19 Select the most appropriate option to fill in the blank.

The frightened convict _____ for mercy.

- Ans
- 1. mumbled
 - 2. whispered
 - 3. pleaded
 - 4. shouted

Question ID : 2390871639
Status : Answered
Chosen Option : 3

Q.20 Select the most appropriate synonym of the given word.

Strange

- Ans
- 1. Natural
 - 2. Conventional
 - 3. Despair
 - 4. Abnormal

Question ID : 2390871630
Status : Answered
Chosen Option : 4

Comprehension:

In the following passage some words have been deleted. Fill in the blanks with the help of the alternatives given. Select the most appropriate option for each blank.

The Harmandir Sahib, also known as Darbar Sahib is a Gurudwara (1)_____ in the city of Amritsar. It (2)_____ an eminent pilgrimage site (3)_____ Sikhism. It is usually (4)_____ the Golden Temple in English.

SubQuestion No : 21

Q.21 Select the most appropriate option for blank No. 1.

- Ans**
- 1. located
 - 2. locating
 - 3. locate
 - 4. locates

Question ID : 2390871624

Status : Answered

Chosen Option : 1

Comprehension:

In the following passage some words have been deleted. Fill in the blanks with the help of the alternatives given. Select the most appropriate option for each blank.

The Harmandir Sahib, also known as Darbar Sahib is a Gurudwara (1)_____ in the city of Amritsar. It (2)_____ an eminent pilgrimage site (3)_____ Sikhism. It is usually (4)_____ the Golden Temple in English (5)_____ it is plated with gold.

SubQuestion No : 22

Q.22 Select the most appropriate option for blank No. 2.

- Ans**
- 1. was
 - 2. is
 - 3. are
 - 4. has

Question ID : 2390871625

Status : Answered

Chosen Option : 4

Comprehension:

In the following passage some words have been deleted. Fill in the blanks with the help of the alternatives given. Select the most appropriate option for each blank.

The Harmandir Sahib, also known as Darbar Sahib is a Gurudwara (1)_____ in the city of Amritsar. It (2)_____ an eminent pilgrimage site (3)_____ Sikhism. It is usually (4)_____ the Golden Temple in English (5)_____ it is plated with gold.

SubQuestion No : 23

Q.23 Select the most appropriate option for blank No. 3.

- Ans**
- 1. with
 - 2. of
 - 3. by
 - 4. on

Question ID : 2390871626

Status : Answered

Chosen Option : 2

Comprehension:

In the following passage some words have been deleted. Fill in the blanks with the help of the alternatives given. Select the most appropriate option for each blank.

The Harmandir Sahib, also known as Darbar Sahib is a Gurudwara (1)_____ in the city of Amritsar. It (2)_____ an eminent pilgrimage site (3)_____ Sikhism. It is usually (4)_____ the Golden Temple in English (5)_____ it is plated with gold.

SubQuestion No : 24

Q.24 Select the most appropriate option for blank No. 4.

- Ans
- 1. named
 - 2. known
 - 3. regarded
 - 4. called

Question ID : 2390871627
Status : Answered
Chosen Option : 4

Comprehension:

In the following passage some words have been deleted. Fill in the blanks with the help of the alternatives given. Select the most appropriate option for each blank.

The Harmandir Sahib, also known as Darbar Sahib is a Gurudwara (1)_____ in the city of Amritsar. It (2)_____ an eminent pilgrimage site (3)_____ Sikhism. It is usually (4)_____ the Golden Temple in English (5)_____ it is plated with gold.

SubQuestion No : 25

Q.25 Select the most appropriate option for blank No. 5.

- Ans
- 1. but
 - 2. even
 - 3. also
 - 4. because

Question ID : 2390871628
Status : Answered
Chosen Option : 4

Section : General Intelligence & Reasoning

Q.1 In the following question, select the number which can be placed at the sign of question mark (?) from the given alternatives.

7 6 3 48
4 9 8 63
2 5 7 ?

- Ans
- 1. 37
 - 2. 64
 - 3. 42
 - 4. 68

Question ID : 2390871456
Status : Answered
Chosen Option : 1

Q.2 After interchanging the given two signs, what will be the value of $9 + 143 \div 13 \times 11 - 160 = ?$

× and ÷

- Ans
- 1. -17
 - 2. -32
 - 3. 18

4. 28

Question ID : 2390871458
Status : Answered
Chosen Option : 3

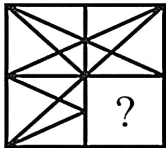
Q.3 Select the option that is related to the third term in the same way as the second term is related to the first term.

Amphibian : Frog :: Insect : ?

- Ans
- 1. Rat
 - 2. Snake
 - 3. Butterfly
 - 4. Ostrich

Question ID : 2390871442
Status : Answered
Chosen Option : 3

Q.4 Study the given pattern carefully and select the figure that will complete the pattern given in the question figure.



- Ans
- 1.
 - 2.
 - 3.
 - 4.

Question ID : 2390871460
Status : Answered
Chosen Option : 1

Q.5 In a certain code language, 'SOL' is written as '45', 'KIN' is written as '33'. What is the code for 'OWL' in that code language?

- Ans
- 1. 49
 - 2. 48
 - 3. 51
 - 4. 50

Question ID : 2390871447
Status : Answered
Chosen Option : 1

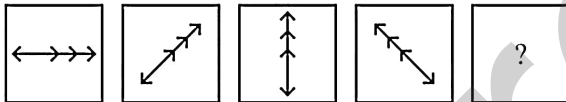
Q.6 Select the option in which the letters share the same relationship as that shared by the given pair of letters.

GUN : JYS :: ?

- Ans
- 1. NAP : QWU
 - 2. SUC : VYG
 - 3. TOL : WSQ
 - 4. HUB : KYH

Question ID : 2390871443
Status : Answered
Chosen Option : 3

Q.7 In the following question, select the figure which can be placed at the sign of question mark (?) from the given alternatives.



Ans

- 1.
- 2.
- 3.
- 4.

Question ID : 2390871459
Status : Answered
Chosen Option : 4

Q.8 Select the number that can replace the question mark (?) in the following series.

13, 22, 33, 48, 69, ?

- Ans
- 1. 88

- 2. 98
- 3. 112
- 4. 96

Question ID : 2390871454
Status : Answered
Chosen Option : 2

Q.9 Five teachers P, K, A, R and M are sitting in a row facing towards south (Not necessarily in the same order). K is sitting second to the right of R. M is sitting to the immediate right of P. Two teachers are sitting between M and A. Who is sitting to the immediate left of R?

- Ans
- 1. K
 - 2. A
 - 3. P
 - 4. M

Question ID : 2390871449
Status : Answered
Chosen Option : 2

Q.10 In the following question below are given some statements followed by some conclusions based on those statements. Taking the given statements to be true even if they seem to be at variance from commonly known facts. Read all the conclusions and then decide which of the given conclusion logically follows the given statements.

Statements:

- I. No T is R.
- II. All R are V.

Conclusions:

- I. Some V are R.
- II. Some T are R.
- III. All V are T.

- Ans
- 1. Both conclusion II and III follows
 - 2. Neither conclusion follow
 - 3. Both conclusion I and III follows
 - 4. Only conclusion I follows

Question ID : 2390871452
Status : Answered
Chosen Option : 4

Q.11 Select the number that can replace the question mark (?) in the following series.

197, 220, 244, 269, 295, ?

- Ans
- 1. 330
 - 2. 322
 - 3. 328
 - 4. 312

Question ID : 2390871453
Status : Answered
Chosen Option : 2

Q.12 By interchanging which two signs the equation will be correct?

$$11 + 9 - 4 \times 12 \div 6 = 32$$

- Ans
- 1. \times and $+$
 - 2. \times and \div
 - 3. $-$ and $+$
 - 4. \div and $-$

Question ID : 2390871457

Status : Answered

Chosen Option : 4

Q.13 Select the option that is related to the third term in the same way as the second term is related to the first term.

Nest : Bird :: Palace : ?

- Ans
- 1. Soldier
 - 2. Big
 - 3. King
 - 4. Jeep

Question ID : 2390871441

Status : Answered

Chosen Option : 3

Q.14 In the following question below are given some statements followed by some conclusions based on those statements. Taking the given statements to be true even if they seem to be at variance from commonly known facts. Read all the conclusions and then decide which of the given conclusion logically follows the given statements.

Statements:

- I. Some P are Q.
- II. Some S are R.
- III. No R is Q.

Conclusions:

- I. Some S are Q.
- II. Some Q are P.
- III. Some R are S.

- Ans
- 1. Neither conclusion follow
 - 2. Both conclusion II and III follows
 - 3. Both conclusion I and II follows
 - 4. Only conclusion I follows

Question ID : 2390871451

Status : Answered

Chosen Option : 2

Q.15 In a certain code language, 'HORSED' is written as 'ABPOLE'. What is the code for 'PRISON' in that code language?

- Ans
- 1. LNQGPN
 - 2. LMQGPN
 - 3. KLPFOM
 - 4. KMPFOM

Question ID : 2390871444

Status : Not Attempted and Marked For Review

Chosen Option : --

Q.16 In a certain code language, 'CHIRPS' is written as 'AJGTNU'. What is the code for 'RAINED' in that code language?

- Ans
- 1. QEHQEG
 - 2. PDGPDF
 - 3. QDHQDG
 - 4. PCGPCF

Question ID : 2390871445

Status : Answered

Chosen Option : 4

Q.17 Select the option that is related to the third number in the same way as the second number is related to the first number.

31 : 963 :: 17 : ?

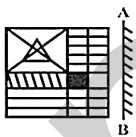
- Ans
- 1. 287
 - 2. 291
 - 3. 289
 - 4. 290

Question ID : 2390871455

Status : Answered

Chosen Option : 2

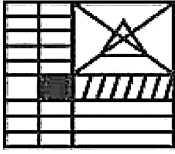
Q.18 If a mirror is placed on the line AB, then which of the answer figures is the right image of the given figure?



Ans

- 1.
- 2.
- 3.

4.



Question ID : 2390871462

Status : Answered

Chosen Option : 4

Q.19 A series is given with one term missing. Select the correct alternative from the given ones that will complete the series.

JG, FC, BY, XU, ?

- Ans
- 1. TR
 - 2. VQ
 - 3. VR
 - 4. TQ

Question ID : 2390871440

Status : Answered

Chosen Option : 4

Q.20 Identify the Venn diagram that best represents the relationship between the given classes.

Female, Mother, Sister

Ans

- 1.
- 2.
- 3.
- 4.

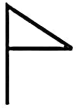
Question ID : 2390871464

Status : Answered

Chosen Option : 4

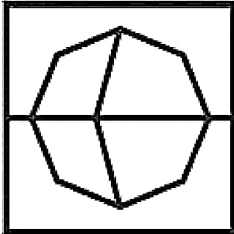
Q.21

From the given answer figures, select the one in which the question figure is hidden/embedded. (Rotation is not allowed)

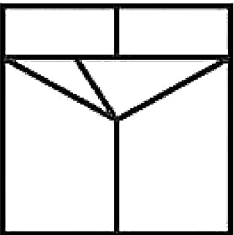


Ans

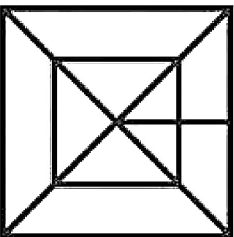
1.



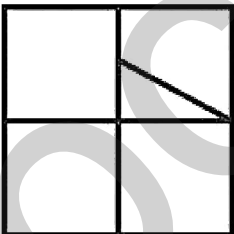
2.



3.



4.



Question ID : 2390871461

Status : Answered

Chosen Option : 4

Q.22 Five tables T1, T2, T3, T4 and T5 are kept one above the other (Not necessarily in the same order). Number of tables above T4 are same as the number of tables below T5. T3 is just above T1. T5 is at the bottom. There are two tables between T2 and T5. Which of the following is the correct position of T1?

Ans

1. T1 is just below T5

2. T2 is two places below T1

3. T1 is just above T5

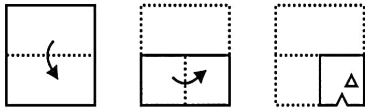
4. T1 is three places below T2

Question ID : 2390871450

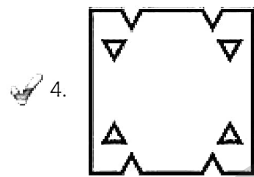
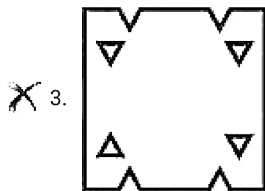
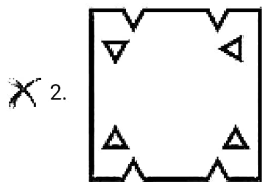
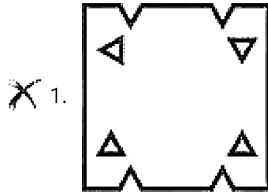
Status : Answered

Chosen Option : 3

Q.23 A piece of paper is folded and punched as shown below in the question figures. From the given answer figures, indicate how it will appear when opened?



Ans



Question ID : 2390871463

Status : Answered

Chosen Option : 4

Q.24 In a certain code language, 'RAFTS' is written as '96432', 'WEBAR' is written as '75169'. What is the code for 'FRAWT' in that code language?

- Ans
- 1. 49673
 - 2. 49675
 - 3. 49671
 - 4. 49672

Question ID : 2390871446

Status : Answered

Chosen Option : 1

Q.25 Six phones P1, P2, P3, P4, P5 and P6 are placed in a row facing towards north (Not necessarily in the same order). P1 is placed to the immediate left of P6. P5 is placed second to the left of P2. P4 is placed second to the right of P6. P4 is to the immediate right of P5. P3 is towards the left of P1. How many phones are placed between P3 and P6?

- Ans
- 1. 0
 - 2. 1
 - 3. 4

X 4.2

Question ID : 2390871448
Status : Answered
Chosen Option : 2

Section : Numerical Aptitude

Q.1 If Dev can make 40 chairs in 20 days, working 10 hours per day then in how many days can he make 10 chairs working 8 hours per day?

Ans

- X 1. $7\frac{1}{2}$
✓ 2. $6\frac{1}{4}$
X 3. 8
X 4. 6

Question ID : 2390871306
Status : Answered
Chosen Option : 2

Q.2 A takes 10 minutes more than B in covering a certain distance. If their speeds are in the ratio of 3 : 4, then what is the time taken by B to cover the same distance?

Ans

- X 1. 50 minutes
X 2. 20 minutes
X 3. 40 minutes
✓ 4. 30 minutes

Question ID : 2390871307
Status : Answered
Chosen Option : 4

Q.3 What is the value of

$$\left(1 + \frac{3}{4}\right) \times \frac{3}{21} \text{ of } 5\frac{1}{3} \div \frac{128}{49} + \frac{2}{3} \times \frac{7}{11} \times \frac{121}{49} \div \left(\frac{15}{14} - \frac{2}{7}\right) ?$$

Ans

- X 1. $\frac{62}{29}$
X 2. $\frac{57}{41}$
X 3. $\frac{69}{25}$
✓ 4. $\frac{59}{32}$

Question ID : 2390871291
Status : Answered
Chosen Option : 4

Q.4

The data below shows the number of wickets taken by each bowler and the number of bowlers who took them.

Number of Wickets per bowler	Number of Bowlers
5	2
4	3
3	4
2	5
1	9

What is the median of the number of wickets?

- Ans 1. 2
 2. 2.5
 3. 3
 4. 4

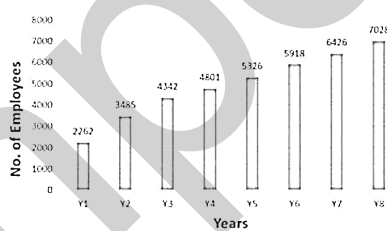
Question ID : 2390871296
Status : Answered
Chosen Option : 3

Q.5 Ajay sold an article for ₹84 at a loss of 30%. If he sells the same article at ₹120, then what will be his profit or loss percentage?

- Ans 1. 10% loss
 2. 15% loss
 3. No profit no loss
 4. 20% profit

Question ID : 2390871299
Status : Answered
Chosen Option : 3

Q.6 The Bar graph shown below presents the number of employees in an office during eight consecutive years.



What is the average number of employees per year?

- Ans 1. 5348.5
 2. 4948.5
 3. 5548.5
 4. 5148.5

Question ID : 2390871312
Status : Answered
Chosen Option : 2

Q.7 ₹975 is distributed among Anuj, Bharat and Shekhar. The proportion of their shares is 3 : 4 : 8, respectively. What is the share of Bharat?

- Ans 1. ₹100

- 2. ₹260
- 3. ₹280
- 4. ₹296

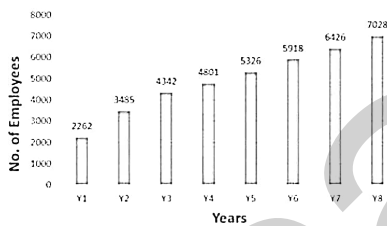
Question ID : 2390871302
 Status : Answered
 Chosen Option : 2

Q.8 320 is how much percentage less than 400?

- Ans
- 1. 15%
 - 2. 20%
 - 3. 12%
 - 4. 18%

Question ID : 2390871297
 Status : Answered
 Chosen Option : 2

Q.9 The Bar graph shown below presents the number of employees in an office during eight consecutive years.



The number of employees in year Y2 is how much percent less than average number of employees per year?

- Ans
- 1. 29.57%
 - 2. 23.57%
 - 3. 41.54%
 - 4. 35.57%

Question ID : 2390871313
 Status : Answered
 Chosen Option : 1

Q.10 Two articles were sold of ₹2400 each by a shopkeeper. The shopkeeper incurred no profit and no loss on the whole transaction. If one of the two articles sold at a profit of 20%, then what was the loss incurred on the other article?

- Ans
- 1. ₹600
 - 2. ₹400
 - 3. ₹240
 - 4. ₹380

Question ID : 2390871298
 Status : Answered
 Chosen Option : 2

Q.11 If $A = 2 + 3 \times 4$, $B = 3 + 4 \times (7 - 2)$ and $C = 1 + 5 - 6$, then what is the value of $A + B + C$?

Ans

- 1. $\frac{85}{3}$
- 2. $\frac{59}{3}$
- 3. $\frac{79}{3}$
- 4. $\frac{68}{3}$

Question ID : 2390871292

Status : Answered

Chosen Option : 4

Q.12 The ratio (by volume) of milk and water in a mixture is 2 : 1. If we add 12 litres of water in the mixture, then the ratio of milk and water becomes 4 : 3. What is the quantity of water in the new mixture?

Ans

- 1. 36 litres
- 2. 48 litres
- 3. 24 litres
- 4. 84 litres

Question ID : 2390871301

Status : Answered

Chosen Option : 1

Q.13 If the Least Common Multiple of 56, 57 and 58 is K, then what will be the Least Common Multiple of 56, 57, 58 and 59?

Ans

- 1. 177 K
- 2. 59 K
- 3. 57 K
- 4. 56 K

Question ID : 2390871290

Status : Answered

Chosen Option : 2

Q.14 If $V_1 : V_2 = 1 : 2$ and $V_1 + V_2 = 147$, then what is the value of $V_2 - V_1$?

Ans

- 1. 49
- 2. 98
- 3. 48
- 4. 56

Question ID : 2390871300

Status : Answered

Chosen Option : 1

Q.15 The average age of a group of 20 men is 30 years. A 50 year old man leaves the group, while a woman joins the group. The average age decreases by 1 year. What is the age of the woman?

Ans

- 1. 30 years
- 2. 35 years

- 3. 38 years
- 4. 40 years

Question ID : 2390871293
 Status : Answered
 Chosen Option : 1

Q.16 If the lengths of the diagonals of a rhombus are 24 cm and 18 cm, then what is the area of the rhombus?

- Ans
- 1. 188 cm²
 - 2. 196 cm²
 - 3. 216 cm²
 - 4. 204 cm²

Question ID : 2390871310
 Status : Answered
 Chosen Option : 3

Q.17 The average of 36, 28, 43, 56, 74, 65, 12 and x is 45. What is the value of x?

- Ans
- 1. 46
 - 2. 44
 - 3. 48
 - 4. 42

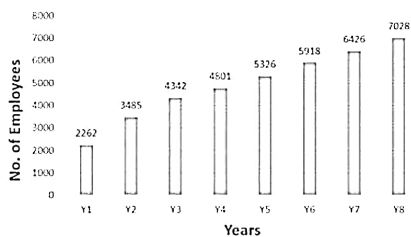
Question ID : 2390871294
 Status : Answered
 Chosen Option : 1

Q.18 If the discount offered on an article is 40%, then what will be the ratio of selling price and marked price?

- Ans
- 1. 2 : 5
 - 2. 3 : 5
 - 3. 4 : 7
 - 4. 5 : 8

Question ID : 2390871295
 Status : Answered
 Chosen Option : 2

Q.19 The Bar graph shown below presents the number of employees in an office during eight consecutive years.



What is the growth percentage in the number of employees from Y5 to Y6?

- Ans
- 1. 11.11

- 2. 11.96
- 3. 12.04
- 4. 10.00

Question ID : 2390871314
Status : Answered
Chosen Option : 2

Q.20 The base and hypotenuse of a right angled triangle are 9 cm and 41 cm respectively. What is the area of the triangle?

- Ans**
- 1. 160 cm²
 - 2. 190 cm²
 - 3. 180 cm²
 - 4. 170 cm²

Question ID : 2390871309
Status : Answered
Chosen Option : 3

Q.21 What is the area of the largest square which can be inscribed in a circle of radius 28 cm?

- Ans**
- 1. 196 cm²
 - 2. 1568 cm²
 - 3. 784 cm²
 - 4. 3136 cm²

Question ID : 2390871311
Status : Answered
Chosen Option : 3

Q.22 C and D together can make a chair in 4 days and C alone can make this chair in 12 days. In how many days D alone can make this chair?

- Ans**
- 1. 6 days
 - 2. 10 days
 - 3. 4 days
 - 4. 8 days

Question ID : 2390871305
Status : Answered
Chosen Option : 1

Q.23 A train moves at the speed of 80 km/h and crosses a platform in 0.75 minutes. If the length of the train is equal to the length of the platform, then what is the length of the platform?

- Ans**
- 1. 400 m
 - 2. 500 m
 - 3. 450 m
 - 4. 480 m

Status : **Answered**
Chosen Option : 2

Q.24 A sum of ₹900 is invested at compound interest (compounded annually) for 2 years. If the rate of interest is 10% per annum, then what will be the amount?

- Ans
- 1. ₹1289
 - 2. ₹1121
 - 3. ₹1089
 - 4. ₹1071

Question ID : 2390871303
Status : **Answered**
Chosen Option : 3

Q.25 The simple interest on a certain sum for two years is ₹1000 at the rate of 10% per annum. What is the amount after these two years?

- Ans
- 1. ₹7000
 - 2. ₹6500
 - 3. ₹5500
 - 4. ₹6000

Question ID : 2390871304
Status : **Answered**
Chosen Option : 4

Section : General awareness

Q.1 The full form of INTACH is:

- Ans
- 1. Indian National Trust for Architectural and Calligraphic Heritage
 - 2. Indian National Trust for Archaeological and Cooperative Heritage
 - 3. Indian National Trust for Art and Cultural Heritage
 - 4. Indian National Trust for Art and Cooperative Heritage

Question ID : 2390871067
Status : **Answered**
Chosen Option : 3

Q.2 Who is the Chairman of National Commission of Population control?

- Ans
- 1. President
 - 2. Secretary of Concerned Department
 - 3. Prime Minister
 - 4. Union Minister of Health and Family Welfare

Question ID : 2390871083
Status : **Answered**
Chosen Option : 4

Q.3 'Broom and Groom' book is co-authored by:

- Ans
- 1. Narendra Modi
 - 2. Kiran Bedi

3. Salman Rushdie

4. Shashi Tharoor

Question ID : 2390871071
Status : Answered
Chosen Option : 4

Q.4 Who is the Author of the book "The Bachelor of Arts"?

Ans 1. Rudyard Kipling

2. R. K. Narayan

3. Vikram Seth

4. Ruskin Bond

Question ID : 2390871070
Status : Answered
Chosen Option : 3

Q.5 Where is the Great Barrier Reef located?

Ans 1. Peru

2. Australia

3. Mexico

4. Bahrain

Question ID : 2390871065
Status : Answered
Chosen Option : 2

Q.6 Which of the following countries was the earliest to give women the right to vote?

Ans 1. France

2. USA

3. Australia

4. UK

Question ID : 2390871078
Status : Answered
Chosen Option : 1

Q.7 Which of the following Scheme is described in Union Budget 2019-20?

Ans 1. Pradhan Mantri Ujjwala Yojana

2. Pradhan Mantri Jan Arogya Yojana

3. Pradhan Mantri Sahaj Bijli Har Ghar Yojana

4. Pradhan Mantri Shram Yogi Maandhan

Question ID : 2390871074
Status : Answered
Chosen Option : 1

Q.8 Bagh caves are situated in which state?

Ans 1. Assam

- 2. Karnataka
- 3. Madhya Pradesh
- 4. Uttar Pradesh

Question ID : 2390871066
Status : Answered
Chosen Option : 2

Q.9 The High Court of Kerala and Lakshadweep is situated at:

- Ans
- 1. Kannur
 - 2. Thrissur
 - 3. Kochi
 - 4. Ernakulam

Question ID : 2390871076
Status : Answered
Chosen Option : 4

Q.10 Katarniaghat Wildlife Sanctuary is situated in which state?

- Ans
- 1. Karnataka
 - 2. Bihar
 - 3. Madhya Pradesh
 - 4. Uttar Pradesh

Question ID : 2390871081
Status : Answered
Chosen Option : 1

Q.11 Which of the following passes are NOT correctly matched with their location?

- Ans
- 1. Nathu - la pass - Sikkim
 - 2. Shipki-la pass - Arunachal Pradesh
 - 3. Zojila pass - Jammu and Kashmir
 - 4. Mana pass - Uttarakhand

Question ID : 2390871086
Status : Answered
Chosen Option : 4

Q.12 Sveriges Riksbank Prize in Economic Sciences is awarded every year in the memory of

- Ans
- 1. Karl Marx
 - 2. Alfred Nobel
 - 3. Adam Smith
 - 4. John Keynes

Question ID : 2390871075
Status : Answered
Chosen Option : 3

Q.13 Who invented penicillin?

- Ans
- 1. Theodore H. Maiman
 - 2. Galileo Galilei
 - 3. Alexander Fleming
 - 4. Evangelista Torricelli

Question ID : 2390871079
Status : Answered
Chosen Option : 3

Q.14 Which of the following regions of northern plains is the most fertile?

- Ans
- 1. Terai
 - 2. Khadar
 - 3. Bhabar
 - 4. Bhangar

Question ID : 2390871084
Status : Answered
Chosen Option : 3

Q.15 Tiger belongs to which category under IUCN?

- Ans
- 1. Critically endangered
 - 2. Endangered
 - 3. Vulnerable
 - 4. Extinct

Question ID : 2390871080
Status : Answered
Chosen Option : 1

Q.16 Subhas Chandra Bose was elected President of the Haripura Congress Session in ____.

- Ans
- 1. 1938
 - 2. 1940
 - 3. 1936
 - 4. 1942

Question ID : 2390871088
Status : Answered
Chosen Option : 1

Q.17 Who introduced 'Charbagh' style of architecture in India?

- Ans
- 1. Marathas
 - 2. Rajputs
 - 3. Mughals
 - 4. Mauryas

Question ID : 2390871087
Status : Not Answered

Q.18 Who among the following is a co-founder of e-commerce store Flipkart?

- Ans
- 1. Vishal Sikka
 - 2. Binny Bansal
 - 3. Peyush Bansal
 - 4. Rohit Bansal

Question ID : 2390871072
Status : Answered
Chosen Option : 2

Q.19 In which of the following peasant uprisings, Sardar Vallabhbhai Patel took part?

- Ans
- 1. Bardoli Satyagrah
 - 2. Tebhaga Movement
 - 3. Eka Movement
 - 4. Kisan Sabha

Question ID : 2390871089
Status : Not Attempted and Marked For Review
Chosen Option : --

Q.20 Rotavirus vaccine is used to prevent which disease?

- Ans
- 1. Diarrhoea
 - 2. Polio
 - 3. Hepatitis
 - 4. AIDS

Question ID : 2390871082
Status : Not Attempted and Marked For Review
Chosen Option : --

Q.21 Bruny Surin, the Olympian athlete belongs to which of the following countries?

- Ans
- 1. Austria
 - 2. Canada
 - 3. Spain
 - 4. Mexico

Question ID : 2390871068
Status : Not Attempted and Marked For Review
Chosen Option : --

Q.22 Which of the following department publishes Index of Industrial Production (IIP)?

- Ans
- 1. Central Statistics Office
 - 2. National Sample Survey Organisation
 - 3. Labour bureau
 - 4. Department of

Question ID : 2390871073

Status : **Not Attempted and Marked For Review**

Chosen Option : --

Q.23 The Subject of Sports comes under which list of Indian Constitution?

- Ans
- 1. Union list
 - 2. State list
 - 3. Concurrent list
 - 4. Residuary list

Question ID : 2390871069

Status : **Not Attempted and Marked For Review**

Chosen Option : --

Q.24 Which of the following is NOT a Constitutional body?

- Ans
- 1. National Commission for Schedule Tribes
 - 2. Finance commission
 - 3. NITI Aayog
 - 4. Election commission

Question ID : 2390871077

Status : **Answered**

Chosen Option : 3

Q.25 Arrange the following hills according to their location from north to south:

1. Nallamala hills
2. Shevaroy hills
3. Palkonda hills
4. Javadi hills

- Ans
- 1. 1-3-4-2
 - 2. 3-1-4-2
 - 3. 1-3-2-4
 - 4. 4-2-1-3

Question ID : 2390871085

Status : **Not Attempted and Marked For Review**

Chosen Option : --