

# Multi Tasking Non Technical Staff Havaldar CBIC and CBN Exam 2021

Roll Number	
Candidate Name	
Venue Name	
Exam Date	08/07/2022
Exam Time	9:00 AM - 10:30 AM
Subject	MTS Non technical and Havaldar Examination 2021

View ID: 1111

Q.1 Select the option that will improve the underlined part of the sentence. In case no improvement is needed, select 'No improvement required'.

The scientists have so far focused on improvn cropped yields.

- Ans  1. No improvement required
2. improvement crop
3. No improvement required
4. improve crop yield

Question ID : 26433051091

Status : Answered

Chosen Option : 1

Q.2 The following sentence has been split into four segments. Identify the segment that contains a grammatical error.

The brightest stars / can be 30,000 times / most luminous / than the Sun

- Ans  1. The brightest stars
2. can be 30,000 times
3. can be 30,000 times
4. than the Sun

Question ID : 26433051552

Status : Answered

Chosen Option : 2

Q.3 Select the most appropriate option to fill in the blank.

He persuaded other towns near Amman to send \_\_\_\_\_ soldiers to help him.

- Ans  1. 100
2. three
3. ten
4. they

Question ID : 26433050745

Status : Answered

Chosen Option : 3

Q.4 Select the most appropriate synonym of the given word.

Callous

- Ans  1. Hard
2. Pathetic
3. Large
4. Humane

Question ID : 26433051277

Status : Not Answered

Chosen Option : -

Q.5 Select the most appropriate synonym of the given word.

Cautious

- Ans  1. Careful
2. Pathetic
3. Brave
4. Scolding

Question ID : 26433051704

Status : Answered

Chosen Option : 3

Q.6 Select the most appropriate option to fill in the blank.

Could you spell your name \_\_\_\_\_, please?

- Ans  1. weakly
2. never
3. clearly
4. forever

Question ID : 26433051606

Status : Answered

Chosen Option : 3

Q.7 Select the option that will improve the underlined part of the given sentence. In case no improvement is needed, select 'No improvement required'.

The courses provided by the training institute were more than enough.

- Ans  1. more than enough
2. more than a
3. most enough
4. more than sufficient

Question ID : 26433051752

Status : Answered

Chosen Option : 4

Q.8 Select the most appropriate meaning of the given idiom.

To walk the tight rope

- Ans
- 1. Be an expert
  - 2. Be in a narrow
  - 3. Be well trained
  - 4. Be very nervous

Question ID : 26433051794

Status : Answered

Chosen Option : 2

Q.9 The following sentence has been divided into parts. One of them may contain an error. Select the part that contains the error from the given options. If you don't find any error, mark 'No error' as your answer.

Land revenue was one of the major source of income / for Britishers in India.

- Ans
- 1. No error
  - 2. Land revenue was one of the
  - 3. major source of income
  - 4. for Britishers in India

Question ID : 26433051747

Status : Answered

Chosen Option : 3

Q.10 Select the most appropriate option to fill in the blank.

Pilots must be \_\_\_\_\_ at all times to keep their passengers safe during the flight.

- Ans
- 1. busy
  - 2. alert
  - 3. awake
  - 4. awakeful

Question ID : 26433051052

Status : Answered

Chosen Option : 3

Q.11 Select the most appropriate option to fill in the blank.

If she likes something, she'll buy it \_\_\_\_\_ much it costs.

- Ans
- 1. however
  - 2. whatever
  - 3. since
  - 4. very

Question ID : 26433051398

Status : Answered

Chosen Option : 2

Q.12 Select the sentence in which a word is INCORRECTLY spelt.

- Ans  1. He hoped that he had won the prestigious award.
2. I could never tolerate his mean practice.
3. He had a very good understanding of it.
4. A woman gasped in horror at the sight of him.

Question ID : 26433051606  
Status : Answered  
Chosen Option : 3

Q.13 Select the most appropriate ANTONYM of the given word.

Wicked

- Ans  1. Evil
2. Sinful
3. Eward
4. Virtuous

Question ID : 264330516041  
Status : Answered  
Chosen Option : 4

Q.14 Select the most appropriate synonym of the underlined word.

Medicines should be ordered by the generic name, not by the proprietary or trade name.

- Ans  1. Exclusive
2. Generic
3. Individual
4. Specific

Question ID : 264330516730  
Status : Answered  
Chosen Option : 2

Q.15 Select the most appropriate option to fill in the blank.

Ms. Gupta expressed her \_\_\_\_\_ for my political understanding.

- Ans  1. Gratitude
2. Gracious
3. Grasp
4. Compassion

Question ID : 264330516285  
Status : Answered  
Chosen Option : 4

Q.16 Select the most appropriate meaning of the underlined idiom.

When those things come near you, run at the drop of a hat.

- Ans
- 1. Be dressed for a party
  - 2. With all your belongings
  - 3. Go on a short trip
  - 4. At the moment

Question ID : 26433051020

Status : Answered

Chosen Option : 4

Q.17 Select the option that can be used as a one-word substitute for the given group of words.

A person who makes maps

- Ans
- 1. Scribe
  - 2. Architect
  - 3. Cartographer
  - 4. Poet

Question ID : 26433051100

Status : Answered

Chosen Option : 3

Q.18 The following sentence has been divided into parts. One of them may contain an error. Select the part that contains the error from the given options. If you don't find any error, mark "No error" as your answer.

He is / struggling to make / a honest living.

- Ans
- 1. struggling to make
  - 2. No error
  - 3. a honest living
  - 4. He is

Question ID : 26433051645

Status : Answered

Chosen Option : 2

Q.19 Select the correctly spelt word.

- Ans
- 1. imitate
  - 2. imitate
  - 3. imitate
  - 4. imetation

Question ID : 26433051049

Status : Answered

Chosen Option : 1

Q.20 Select the option that will improve the underlined part of the given sentence. In case no improvement is needed, select 'No improvement required'.

While travelling, one comes across the larger number of people.

- Ans
- 1. the large number of
  - 2. No improvement required
  - 3. an larger number of
  - 4. a large number of

Question ID : 26433050614

Status : Answered

Chosen Option : 4

### Comprehension:

In the following passage, some words have been deleted. Read the passage carefully and select the most appropriate option to fill in each blank.

In Delhi, while the bigger schools transport their students in their own air-conditioned buses, others rely on vans, autos and e-rickshaws where many reckless drivers ~~pick~~ in too many children and drive (1) \_\_\_\_\_ when causing accidents. Many parents take time off their daily (2) \_\_\_\_\_ to do school-runs. Some use vehicles while others just walk their children to school. Two months ago, it was reported how in the (3) \_\_\_\_\_ of road-crossing facilities near schools, a bunch of parents were taking time to play traffic marshals. Not so long ago, children could just walk or cycle to their schools, participating in games or sports practice. In fact, school authorities (4) \_\_\_\_\_ to admit students living within walkable distances so that they wouldn't have to take the school bus or public transport. As Delhi grows, its children (5) \_\_\_\_\_ not only traffic, broken infrastructure but also violence, air-pollution and overcrowded living conditions.

SubQuestion No : 21

Q.21 Select the most appropriate option to fill in blank number 1.

- Ans
- 1. handle
  - 2. decisively
  - 3. handle
  - 4. clumsily

Question ID : 26433050270

Status : Answered

Chosen Option : 3

### Comprehension:

In the following passage, some words have been deleted. Read the passage carefully and select the most appropriate option to fill in each blank.

In Delhi, while the bigger schools transport their students in their own or hired buses, others rely on vans, autos and e-rickshaws where many reckless drivers pack in too many children and drive (1) \_\_\_\_\_, often causing accidents. Many parents take time off their daily (2) \_\_\_\_\_ to do school runs. Some use vehicles while others just walk their children to school. Two months ago, it was reported how in the (3) \_\_\_\_\_ of road-crossing facilities near schools, a bunch of parents were taking turns to play traffic marshals. Not so long ago, children could just walk or cycle to their schools, private tuition classes or sports practice. In fact, school authorities (4) \_\_\_\_\_ to admit students living within walkable distances so that they wouldn't have to take the school bus or public transport. As Delhi grew, its children (5) \_\_\_\_\_ not only traffic, broken infrastructure but also violence, air-pollution and overcrowded living conditions.

SubQuestion No : 22

Q.22 Select the most appropriate option to fill in blank number 2.

- Ans:  1. rush  
 2. vacation  
 3. problems  
 4. break

Question ID : 26433051271

Status : Answered

Chosen Option : 2

### Comprehension:

In the following passage, some words have been deleted. Read the passage carefully and select the most appropriate option to fill in each blank.

In Delhi, while the bigger schools transport their students in their own or hired buses, others rely on vans, autos and e-rickshaws where many reckless drivers pack in too many children and drive (1) \_\_\_\_\_, often causing accidents. Many parents take time off their daily (2) \_\_\_\_\_ to do school runs. Some use vehicles while others just walk their children to school. Two months ago, it was reported how in the (3) \_\_\_\_\_ of road-crossing facilities near schools, a bunch of parents were taking turns to play traffic marshals. Not so long ago, children could just walk or cycle to their schools, private tuition classes or sports practice. In fact, school authorities (4) \_\_\_\_\_ to admit students living within walkable distances so that they wouldn't have to take the school bus or public transport. As Delhi grew, its children (5) \_\_\_\_\_ not only traffic, broken infrastructure but also violence, air-pollution and overcrowded living conditions.

SubQuestion No : 23

Q.23 Select the most appropriate option to fill in blank number 3.

- Ans:  1. rush  
 2. non-availability  
 3. defiance  
 4. resistance

Question ID : 26433051272

Status : Answered

Chosen Option : 1

### Comprehension:

In the following passage, some words have been deleted. Read the passage carefully and select the most appropriate option to fill in each blank.

In Delhi, while the bigger schools transport their students in their own or hired buses, others rely on vans, autos and e-rickshaws where many reckless drivers pack in too many children and drive (1) \_\_\_\_\_, often causing accidents. Many parents take time off their daily (2) \_\_\_\_\_ to do school runs. Some use vehicles while others just walk their children to school. Two months ago, it was reported how in the (3) \_\_\_\_\_ of road-crossing facilities near schools, a bunch of parents were taking turns to play traffic marshals. Not so long ago, children could just walk or cycle to their schools, private tuition classes or sports practice. In fact, school authorities (4) \_\_\_\_\_ to admit students living within walkable distances so that they wouldn't have to take the school bus or public transport. As Delhi grew, its children (5) \_\_\_\_\_ not only traffic, broken infrastructure but also violence, air-pollution and overcrowded living conditions.

#### SubQuestion No : 24

Q.24 Select the most appropriate option to fill in blank number 4.

- Ans
- 1. reckless
  - 2. quiet
  - 3. actors
  - 4. task force

Question ID: 26433054273

Status: Answered

Chosen Option: 4

### Comprehension:

In the following passage, some words have been deleted. Read the passage carefully and select the most appropriate option to fill in each blank.

In Delhi, while the bigger schools transport their students in their own or hired buses, others rely on vans, autos and e-rickshaws where many reckless drivers pack in too many children and drive (1) \_\_\_\_\_, often causing accidents. Many parents take time off their daily (2) \_\_\_\_\_ to do school runs. Some use vehicles while others just walk their children to school. Two months ago, it was reported how in the (3) \_\_\_\_\_ of road-crossing facilities near schools, a bunch of parents were taking turns to play traffic marshals. Not so long ago, children could just walk or cycle to their schools, private tuition classes or sports practice. In fact, school authorities (4) \_\_\_\_\_ to admit students living within walkable distances so that they wouldn't have to take the school bus or public transport. As Delhi grew, its children (5) \_\_\_\_\_ not only traffic, broken infrastructure but also violence, air-pollution and overcrowded living conditions.

#### SubQuestion No : 25

Q.25 Select the most appropriate option to fill in blank number 4.

- Ans
- 1. vans
  - 2. repeat
  - 3. tested
  - 4. tested

Question ID: 26433054274

Status: Answered

Chosen Option: 1



Q.1 In a certain code language, "VIOLET" is written as "TJMMCU", and "MARKET" is written as "KBPLCU". How will "ROCKET" be written in that language?

- Ans  1. RQKJL
2. UGALIF
3. QSSJML
4. PAFPLU

Question ID : 26433048471  
Status : Answered  
Chosen Option : 1

Q.2 Select the option in which the two numbers are related in the same way as are the numbers in the given number-pair.

416 : 614 :: 7

- Ans  1. 264 : 643
2. 271 : 672
3. 481 : 643
4. 342 : 643

Question ID : 26433048642  
Status : Answered  
Chosen Option : 2

Q.3 Select the number from among the given options that can replace the question mark (?) in the following series.

12, 25, 51, 103, 207, ?

- Ans  1. 415
2. 413
3. 416
4. 414

Question ID : 26433048968  
Status : Answered  
Chosen Option : 1

Q.4 In a certain code language, if bread is called butter, butter is called blood, blood is called water, water is called cheese, and cheese is called tender, then what is red in colour?

- Ans  1. Tender
2. Butter
3. Water
4. Blood

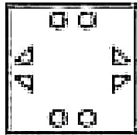
Question ID : 26433049124  
Status : Answered  
Chosen Option : 1

Q.5 The sequence of folding a piece of paper and the manner in which the folded paper has been cut is shown in the following figure. How would this paper look when unfolded?

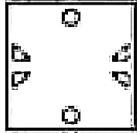


Ans

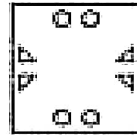
X 1



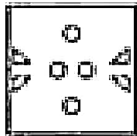
X 2



X 3



X 4



Question ID : 26433040662

Status : Answered

Chosen Option : 3

Q.6 In a certain code language, 'READS' is written as 'IVZWH' and 'FRIBC' is written as 'UBRYX'. How will 'GHRTX' be written in that language?

Ans X 1. TSPCC

X 2. TSPCC

X 3. TSPCC

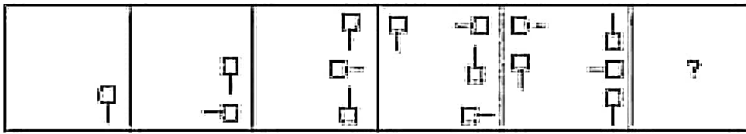
X 4. TSPCC

Question ID : 26433040895

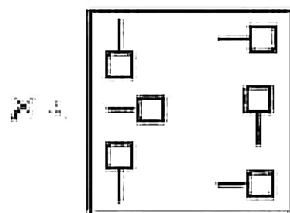
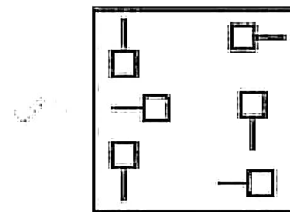
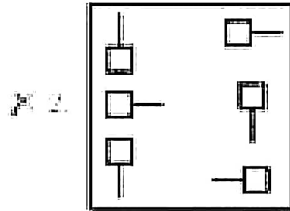
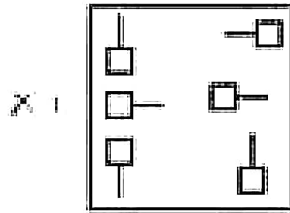
Status : Answered

Chosen Option : 3

Q.7 Select the figure from amongst the given options that can replace the question mark (?) in the following series.



Ans



Question ID : 26433048433  
 Status : Answered  
 Chosen Option : 3

Q.8 Which number will replace the question mark (?) in the following series?

40, 80, 200, 630, 2100, ?

- Ans
- X 1. 10500
  - X 2. 9030
  - X 3. 4200
  - X 4. 6300

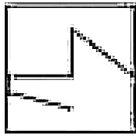
Question ID : 26433048949  
 Status : Answered  
 Chosen Option : 3

Q.9 Seven girls G1, G2, G3, G4, G5, G6 and G7 sit in a row facing towards the north (not necessarily in the same order). G4 sits fifth to the right of G1. G4 does not sit at any of the extreme ends. G6 sits exactly in the middle of the row. G6 sits third to the left of G2. Only two girls sit between G7 and G5. G7 is not an immediate neighbour of G6. Who are the immediate neighbours of G3?

- Ans
- 1. G4 and G5
  - 2. G4 and G7
  - 3. G5 and G7
  - 4. G1 and G2

Question ID : 26433040900  
 Status : Answered  
 Chosen Option : 3

Q.10 Select the option in which the given figure is embedded.



- Ans
- 1.
  - 2.
  - 3.
  - 4.

Question ID : 26433040660  
 Status : Answered  
 Chosen Option : 3

Q.11 Select the option that is related to the fifth alphanumeric-cluster in the same way as the second alphanumeric-cluster is related to the first alphanumeric-cluster and the fourth alphanumeric-cluster is related to the third alphanumeric-cluster.

P4 : K9 :: M10 : K25 :: G49 : ?

- Ans
- 1. H3
  - 2. P64
  - 3. J2
  - 4. I-2

Question ID : 26433040407  
 Status : Answered  
 Chosen Option : 4

Q.12 Select the option that is related to the third letter-cluster in the same way as the second letter-cluster is related to the first letter-cluster.

DAL : ODE :: AGR : ?

- Ans  1. UKD  
 2. UJE  
 3. VUD  
 4. UUD

Question ID : 26433048899

Status : Answered

Chosen Option : 4

Q.13 In a certain code language, 'TOPICS' is written as 'QAGONS' and 'GREATH' is written as 'FRYDQF'. How will 'BANDEF' be written in that language?

- Ans  1. DCCMZA  
 2. WJFZMZA  
 3. DCEMZA  
 4. DCEBYA

Question ID : 26433049049

Status : Answered

Chosen Option : 2

Q.14 Select the figure from amongst the given options that can replace the question mark (?) in the following series.

# ↑	↑ # J	↑ # K J	L K J # ↑	?
--------	-------	---------------	-----------------	---

Ans

A

K	J	L
#		F
↑		

B

J	K	L
#		F
↑		

C

J	K	L
↑		F
#		

D

J	K	F
#		L
↑		

Question ID : 26433049984  
 Status : Answered  
 Chosen Option : 2

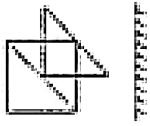
Q.15 After interchanging the two signs + and ×, what will be the value of the given equation?

$$25 \times 5 + 4 + 2 - 10 = ?$$

- Ans
- A. 1.25
  - B. 2.25
  - C. 3.25
  - D. 4.25

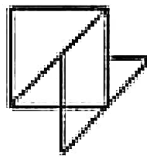
Question ID : 26433048014  
 Status : Answered  
 Chosen Option : 4

Q.16 Select the correct mirror image of the given figure when the mirror is placed to its right side.

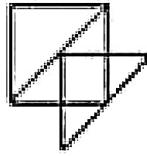


Ans

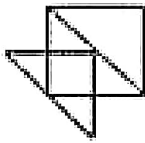
X 1.



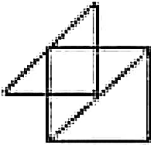
X 2.



X 3.



✓ 4.



Question ID : 26433049136

Status : Answered

Chosen Option : 4

Q.17 The ages of seven boys B1, B2, B3, B4, B5, B6 and B7 are compared. All boys have different ages. The age of B4 is less than three boys. The age of B1 is only greater than B7 and B3. The age of B5 is greater than B6 but less than B2. The age of how many boys is less than B6?

Ans X 1. 2

X 2. 4

X 3. 3

✓ 4. 1

Question ID : 26433049932

Status : Answered

Chosen Option : 4

Q.18 6 persons A, B, C, D, E and F are sitting around a rectangular table facing the centre (not necessarily in the same order). Two persons are sitting on each longer side and one person is sitting on each shorter side. D is sitting opposite to F. A and E are sitting on the same side. Neither D nor E is sitting just next to D. C sits to the right of D. Which of the following statements is correct?  
I. C is the second to the left of F.  
II. E is sitting opposite to C.

- Ans  1. Only II
2. Only I
3. Both I and II
4. Neither I nor II

Question ID : 26433040931  
Status : Answered  
Chosen Option : 1

Q.19 Select the option that is related to the fifth number in the same way as the second number is related to the first number and the fourth number is related to the third number.  
NOTE: Operations should be performed on the whole numbers, without breaking down the numbers into its constituent digits. E.g. 13 – Operations on 13 such as adding /deleting /multiplying etc. to 13 can be performed. Breaking down 13 into 1 and 3 and then performing mathematical operations on 1 and 3 is not allowed)

21 : 9261 :: 17 : 4913 :: 8 : 17

- Ans  1. 1024
2. 494
3. 16
4. 2008

Question ID : 26433040939  
Status : Answered  
Chosen Option : 3

Q.20 Read the given statements and conclusions carefully. Assuming that the information given in the statements is true, even if it appears to be at variance with commonly known facts, decide which of the given conclusions logically follow(s) from the statements.

Statements:

- I. No car is red.  
II. All reds are buses.

Conclusions:

- I. Some blues are not cars.  
II. No red is a car.

- Ans  1. Both conclusion I and II follow
2. Neither conclusion I nor II follows
3. Only conclusion I follows
4. Only conclusion II follows

Question ID : 26433040653  
Status : Answered  
Chosen Option : 4



Q.21 Read the given statements and conclusions carefully. Assuming that the information given in the statements is true, even if it appears to be at variance with commonly known facts, decide which of the given conclusions logically follow(s) from the statements.

Statements:

Some blankets are pillows.

All pillows are cushions.

Conclusions:

I. Some blankets are cushions is a possibility.

II. Some cushions are pillows.

- Ans
- A. Only conclusion II follows
  - B. Only conclusion I follows
  - C. Neither conclusion I nor II follows
  - D. Both conclusions I and II follow

Question ID : 26433040426

Status : Answered

Chosen Option : 4

Q.22 Select the option that is related to the fifth letter-cluster in the same way as the second letter-cluster is related to the first letter-cluster and the fourth letter-cluster is related to the third letter-cluster.

AZBZ : CYDY :: EXFX : GWHW :: IVJW : ?

- Ans
- A. IJRW
  - B. KVLW
  - C. KJRW
  - D. KVLW

Question ID : 26433040416

Status : Answered

Chosen Option : 4

Q.23 By interchanging the given two signs and two numbers (not digits), which of the following equations will NOT be correct?

\* and +, 27 and 35

I.  $27 \div 7 = 6 \times 5 + 35 = 53$

II.  $11 - 7 \times 35 \times 420 \div 27 = 93$

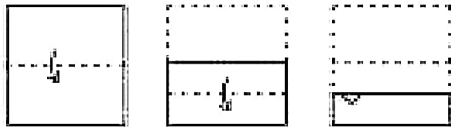
- Ans
- A. Neither I nor II
  - B. Only I
  - C. Both I and II
  - D. Only II

Question ID : 26433049065

Status : Answered

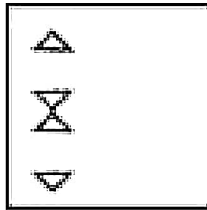
Chosen Option : 1

Q.24 The sequence of folding a piece of paper and the number at which the folded paper has been cut is shown in the following figures. How would this paper look when unfolded?

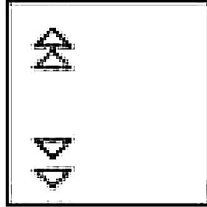


Ans

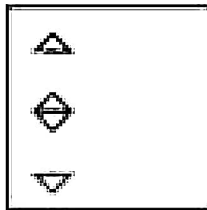
X 1



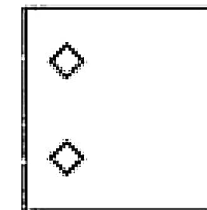
X 2



X 3



✓ 4



Question ID : 26433048241  
 Status : Answered  
 Chosen Option : 4

Q.25 Select the letter-cluster from among the given options that can replace the question mark (?) in the following series.

RN, NP, JR, ? , BV

Ans

X 1. ER

X 2. ET

X 3. RS

✓ 4. RT

Question ID : 26433049077  
 Status : Answered  
 Chosen Option : 4

Q.1 यदि हमारे वित्तिक दायरे का ₹8,000 को छोड़ें या B.D. को मासिक दर में 3 करोड़ का अनुबंधि हमारे किराने होंगे।

- Ans
- A ₹100
  - B ₹150
  - C ₹80
  - D ₹120

Question ID : 26433049903

Status : Answered

Chosen Option : 1

Q.2 A big company "A" and "B" can do a work of 49 days and a requirement of 400. What is the difference between the amount of expenditure of 1000000 on the amount of expenditure of 1000000.

- Ans
- A ₹125
  - B ₹120
  - C ₹110
  - D ₹130

Question ID : 26433050304

Status : Answered

Chosen Option : 4

Q.3 The cost price of a certain fraction of the loss incurred on selling this year. What is the loss percentage?

- Ans
- A 25%
  - B 16.66%
  - C 20%
  - D 33.33%

Question ID : 26433049749

Status : Answered

Chosen Option : 3

Q.4 What is the value of  $5 + [12 - 3 + 15 - 16 + 3 - 50]$ ?

- Ans
- A 75
  - B 74
  - C 71
  - D 66

Question ID : 26433040763

Status : Answered

Chosen Option : 3

Q.5 The simple interest on a sum of money for 2 years at 4% is ₹180. What is the compound interest on the same sum at 4% per annum for the same time period?

- Ans
- A ₹228.48
  - B ₹204
  - C ₹220.6
  - D ₹285.6

Question ID : 26433050406

Status : Answered

Chosen Option : 4

Q.6 In an office with 40 employees, the average salary of those who do not have a college degree is ₹10,000 and the average salary of those who do have a college degree is ₹15,000. The number of those who do not have a college degree in the office is in the ratio 3 : 1 to the number of those who do have a college degree. What is the total salary of all the employees taken together? (Assume the number of employees to be 100)

- Ans
- A ₹25,800
  - B ₹21,000
  - C ₹24,000
  - D ₹24,600

Question ID : 26433050349

Status : Answered

Chosen Option : 2

Q.7 The volume of a cuboid is 3399 cm<sup>3</sup>. The sum of the length and the breadth of the cuboid is 37 cm. If the difference between the length and the breadth of the cuboid is 4 cm, then what is the height of the cuboid?

- Ans
- A 18 cm
  - B 11 cm
  - C 14 cm
  - D 16 cm

Question ID : 26433049761

Status : Answered

Chosen Option : 2

Q.8 Find the height of a right pyramid if its base is a square of side 20 cm and the volume of the pyramid is 16000 cm<sup>3</sup>.

- Ans
- A 4.5 cm
  - B 7.5 cm
  - C  $2\sqrt{2}$  cm
  - D 2.5 cm

Question ID : 26433050367

Status : Answered

Chosen Option : 2

Q.9 A man's present age is a factor of 72. After 7 years, the age will be a factor of 114. How many years hence will the age divide the number of years between 1 & 72?

- Ans
- A. 49 years
  - B. 42 years
  - C. 35 years
  - D. 28 years

Question ID : 26433050255  
Status : Answered  
Chosen Option : 3

Q.10 If Q and R can complete a task in 15 days. If P and R can complete the task together in 20 days. In how many days can Q complete the task alone?

- Ans
- A. 30 days
  - B. 24 days
  - C. 21 days
  - D. 25 days

Question ID : 26433050111  
Status : Answered  
Chosen Option : 2

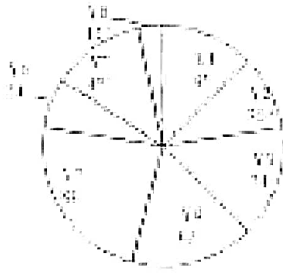
Q.11 If  $a = 2^3 \cdot 3^2$  and  $Q = 3^2 \cdot 2^3$ , then what is the least common multiple of P and Q?

- Ans
- A.  $2^3 \cdot 3^5$
  - B.  $2^5 \cdot 3^3$
  - C.  $2^3 \cdot 3^6$
  - D.  $2^6 \cdot 3^3$

Question ID : 26433049907  
Status : Answered  
Chosen Option : 1

**Q.12** Study the following pictorial representation of the data and answer the question that follows.

The following pictorial representation shows the number of matches played by a team in each of eight consecutive years. In the pictorial representation, each dot represents the total number of matches played by the team in all the eight years taken together.



The total number of matches played by the team in the years VI and VII taken together is approximately what percentage of the total number of matches played by the team in all the eight years taken together?

- Ans
- A. 13.33%
  - B. 15.75%
  - C. 10.25%
  - D. 14.28%

Question ID : 26433049767  
 Status : Answered  
 Chosen Option : 1

**Q.13** The population of a village decreases every year in the rate of 1%. If the present population is 31272, what was the population of the village two years ago?

- Ans
- A. 31868
  - B. 30000
  - C. 32472
  - D. 30560

Question ID : 26433050425  
 Status : Answered  
 Chosen Option : 2

**Q.14** The price of bananas is ₹5 per kg and the price of grapes is ₹20 per kg. In what ratio should the bananas and grapes be mixed so that the profit after selling the mixture at ₹26 per kg will be 25%?

- Ans
- A. 1 : 1
  - B. 5 : 4
  - C. 2 : 3
  - D. 3 : 4

Question ID : 26433050397  
 Status : Answered  
 Chosen Option : 2

Q.15 Baby can swim 27 km downstream in 1 1/2 hours upstream in 2 hours. What is the velocity of the current?

- Ans
- X 1. 3 km/h
  - X 2. 5 km/h
  - X 3. 4 km/h
  - ✓ 4. 2 km/h

Question ID : 26433050250  
 Status : Answered  
 Chosen Option : 4

Q.16 The monthly salary of a person is ₹20,000. He spends 10% of his monthly salary on food. The remaining amount is deposited in a bank and earns interest at 10%. What will be the interest earned?

- Ans
- ✓ 1. ₹5,500
  - X 2. ₹6,000
  - X 3. ₹5,750
  - X 4. ₹5,000

Question ID : 26433049726  
 Status : Answered  
 Chosen Option : 1

Q.17 नीचे दी गई सड़ियों का उपयोग करके उनके अर्थों का विवरण प्राप्त करें।  
 दी गई सड़ियाँ हैं: अनाज-अनाज, जमा में COVID-19 में महिला जनसंख्या का प्रतिशत और पुरुषों और महिलाओं के अनुपात का अनुपात है।

शहर	COVID-19 में महिला जनसंख्या का प्रतिशत	COVID-19 में महिला पुरुषों और महिलाओं का अनुपात
दुबई	40	2:3
मोसको	33	2:3
दुबई	60	5:7
बम्बई	50	7:3
दिल्ली	65	6:5
अमरावती	35	4:1

यदि दिल्ली में COVID-19 में कुल महिलाओं की संख्या 8439 थी और मोसको में COVID-19 में महिलाओं की संख्या, दिल्ली में COVID-19 में महिलाओं की संख्या से 30% कम थी, तो मोसको में COVID-19 में महिलाओं की कुल संख्या कितनी थी?

- Ans
- X 1. 16,872
  - ✓ 2. 14,763
  - X 3. 19,794
  - X 4. 13,536

Question ID : 26433050262  
 Status : Answered  
 Chosen Option : 2

Q.18 The average of four consecutive odd numbers is 9. If the first odd number is  $x$ , then what will be the sum of squares of these four numbers?

- Ans
- A. 9
  - B. 7
  - C. 10
  - D. 11

Question ID : 26433049753  
Status : Answered  
Chosen Option : 1

Q.19 A shopkeeper offers 10% discount on purchase of a product. What is the selling price of a customer who bought a product of 150000?

- Ans
- A. ₹758.75
  - B. ₹828.75
  - C. ₹800
  - D. Same as the cost price

Question ID : 26433050403  
Status : Answered  
Chosen Option : 2

Q.20 The diagonal of a rectangle is 20 cm. If its breadth is 12 cm, then what will be its length?

- Ans
- A. 15 cm
  - B. 16 cm
  - C. 18 cm
  - D. 17 cm

Question ID : 26433049753  
Status : Answered  
Chosen Option : 2

Q.21 A 600 km long piece of work is to be done in 12 days. If some can do the same work in 10 days, what can do the same work in 10 days. In how many days will they complete off the work, if all three work together?


- Ans
- A. 3.6 days
  - B. 3.9 days
  - C. 4.2 days
  - D. 4.5 days

Question ID : 26433049593  
Status : Answered  
Chosen Option : 1



Q.22 To find the average of 20 observations, the operation is as follows:

The distribution of the observations is given below. Find the total value of observations if the coefficient of variation is 0.5. Correctly give the value of the



The number of observations of each type is given below. The value of the coefficient of variation is 0.5. Find the value of the observations of each type.

- Ans
- A. ₹120
  - B. ₹150
  - C. ₹90
  - D. ₹100

Question ID: 26433050313

Status: Answered

Chosen Option: 4

Q.23 Find the length of a train, if a completely covered in bridges of length 150 m and 100 m in 10 seconds and 20 seconds respectively.

- Ans
- A. 120 m
  - B. 130 m
  - C. 600 m
  - D. 110 m

Question ID: 26433050308

Status: Answered

Chosen Option: 3

Q.24 The value of  $16^{\frac{1}{2}} - 256^{\frac{1}{4}} + 2197^{\frac{1}{3}}$  is:

- Ans
- A. 265
  - B. 180
  - C. 262
  - D. 241

Question ID: 26433050294

Status: Answered

Chosen Option: 1

Q.25 The selling price of a bulb is half of its cost price. What is the loss percentage?

- Ans
- A. 60%
  - B. 20%
  - C. 40%
  - D. 50%

Question ID : 26433049972  
Status : Answered  
Chosen Option : 4

Go to Question

Q.1 'Loor' is a folk dance of which state of India?

- Ans
- A. Manipal
  - B. Manipur
  - C. Karnataka
  - D. Kerala

Question ID : 26433047695  
Status : Answered  
Chosen Option : 1

Q.2 The Congress split took place in \_\_\_\_\_.

- Ans
- A. 1935
  - B. 1943
  - C. 1956
  - D. 1958

Question ID : 26433047709  
Status : Answered  
Chosen Option : 3

Q.3 Poverty line measures poverty on the basis of:

- Ans
- A. expenditure only
  - B. income level and literacy rate
  - C. literacy only
  - D. income level and literacy rate

Question ID : 26433047755  
Status : Not Answered  
Chosen Option : -

Q.4 As on Jan 2022, who among the following has been appointed as the new Chairman of ISRO?

- Ans  1. BN Suresh  
 2. V. Narayanan  
 3. K. Sivan  
 4. ASH Kumar

Question ID : 26433047794  
Status : Answered  
Chosen Option : 2

Q.5 The Indian National Congress was established in \_\_\_\_\_.

- Ans  1. 1875  
 2. 1877  
 3. 1879  
 4. 1885

Question ID : 26433047159  
Status : Answered  
Chosen Option : 4

Q.6 In which of the following grounds did Yuvraj Singh hit 6 sixes in an over of a T20 International match?

- Ans  1. Wankhede Stadium  
 2. Eden Gardens Stadium  
 3. M. Chinnai Stadium  
 4. Newlands Cricket Ground

Question ID : 26433047841  
Status : Not Answered  
Chosen Option : -

Q.7 Which of the following Articles of the Indian Constitution talks about joint sitting of both Houses in certain cases?

- Ans  1. Article 111  
 2. Article 123  
 3. Article 75  
 4. Article 112

Question ID : 26433047164  
Status : Answered  
Chosen Option : 4

Q.8 'The Diary of a Young Girl' is an autobiography of:

- Ans  1. Anne Frank
2. Agatha Christie
3. Michelle Obama
4. Jessica Simpson

Question ID : 26433047310  
Status : Answered  
Chosen Option : 1

Q.9 Which feature of the Indian Constitution is borrowed from the Constitution of Britain?

- Ans  1. Fundamental duties
2. Fundamental rights
3. Judicial review
4. Fundamental rights

Question ID : 26433047363  
Status : Answered  
Chosen Option : 2

Q.10 Which of the given statements is correct regarding properties of suspension?

- I. Suspension is a heterogeneous mixture.  
II. The particles of a suspension can be seen by the naked eye.

- Ans  1. Only I
2. Neither I nor II
3. Both I and II
4. Only II

Question ID : 26433047649  
Status : Answered  
Chosen Option : 3

Q.11 Spirogyra belongs to which group of plant kingdom?

- Ans  1. Rhizophyta
2. Angiosperms
3. Bryophyta
4. Thallophyta

Question ID : 26433047149  
Status : Answered  
Chosen Option : 1

Q.12 Kamala Nayari is known for which classical dance form?

- Ans
- 1. Bharatanatyam
  - 2. Kathakali
  - 3. Odissi
  - 4. Bhangra

Question ID : 26433047162  
Status : Not Answered  
Chosen Option : -

Q.13 Kardang Monastery which is a Buddhist Pilgrimage is situated in which state of India?

- Ans
- 1. Jharkhand
  - 2. Goa
  - 3. Himachal Pradesh
  - 4. Kerala

Question ID : 26433047372  
Status : Not Answered  
Chosen Option : -

Q.14 In February 2022, which Indian state government announced that 'Hope Express' would be launched in the state to prevent cancer?

- Ans
- 1. Odisha
  - 2. Karnataka
  - 3. Haryana
  - 4. Chhattisgarh

Question ID : 26433047368  
Status : Not Answered  
Chosen Option : -

Q.15 Who will co-host the ICC Men's T20 World Cup 2024?

- Ans
- 1. Australia
  - 2. The United Kingdom
  - 3. The United Arab Emirates and Oman
  - 4. Sri Lanka

Question ID : 26433047144  
Status : Answered  
Chosen Option : 3

Q.16 Which of the following crops takes almost a year to grow?

- Ans
- 1. Sugarcane
  - 2. Peas
  - 3. Cucumber
  - 4. Rice

Question ID : 26433047377  
Status : Answered

Q.17 In 1526, \_\_\_\_\_ was defeated by Babur at Panipat.

- Ans  1. Sikandar Lodi  
 2. Rana Lodi  
 3. Sultan Lodi  
 4. Ibrahim Lodi

Question ID : 26433047302  
Status : Answered  
Chosen Option : 4

Q.18 How many countries share land boundaries with India?

- Ans  1. Seven  
 2. Ten  
 3. Eight  
 4. Five

Question ID : 26433047155  
Status : Answered  
Chosen Option : 1

Q.19 Which of the following is an example of sedimentary rocks?

- Ans  1. Sandstone  
 2. Granite  
 3. Slate  
 4. Marble

Question ID : 26433047376  
Status : Answered  
Chosen Option : 1

Q.20 Pongal is a harvest festival of which state of India?

- Ans  1. Karnataka  
 2. Madhya  
 3. Rajasthan  
 4. Manipal

Question ID : 26433047646  
Status : Answered  
Chosen Option : 1

Q.21 Which of the following is a young fold mountain?

- Ans  1. The Himalayas  
 2. The Appalachians  
 3. Andes Range  
 4. The Vosges

Question ID : 26433047153  
Status : Answered  
Chosen Option : 1

Q.22 Diarrhoeas often contain:

- Ans  1. mucus to soothe an inflamed  
 2. germs for excretion  
 3. techniques to reduce bacteria  
 4. none of the above

Question ID : 26433047806  
Status : Not Answered  
Chosen Option : -

Q.23 With which of the following was Kridri Gopalnath associated?

- Ans  1. Sam  
 2. Jyoti Prakash  
 3. Tabla  
 4. Flute

Question ID : 26433047811  
Status : Not Answered  
Chosen Option : -

Q.24 Which of the following bodies publishes the Human Development Report?

- Ans  1. United Nations Food Organization  
 2. United Nations Human Resource Development  
 3. World Health Organization  
 4. International Development Association

Question ID : 26433047817  
Status : Not Answered  
Chosen Option : -

Q.25 When the litmus solution is neither acidic nor basic then its colour is \_\_\_\_\_.

- Ans  1. purple  
 2. red  
 3. yellow  
 4. blue

Question ID : 26433047700  
Status : Not Answered  
Chosen Option : -

# Multi Tasking Non Technical Staff Havaldar CBIC and CBN Exam 2021

Roll Number	
Candidate Name	
Venue Name	
Exam Date	08/07/2022
Exam Time	1:00 PM - 2:30 PM
Subject	MTS Non technical and Havaldar Examination 2021

## Question 1

Q.1 Select the most appropriate option to fill in the blank.

The Mid-Day Meal Programme has been running \_\_\_\_\_ 21 years.

- Ans
- 1. 10
  - 2. 00
  - 3. 100
  - 4. 01

Question ID : 26433050840

Status : Answered

Chosen Option : 3

Q.2 Select the option that can be used as a one-word substitute for the given group of words.

Not fit to eat

- Ans
- 1. Salubrious
  - 2. Palatable
  - 3. Edible
  - 4. Fragile

Question ID : 26433050917

Status : Answered

Chosen Option : 3

Q.3 Select the option that can be used as a one-word substitute for the given group of words.

A large group of people, especially the nomadic

- Ans
- 1. Gentry
  - 2. Urban
  - 3. Tribe
  - 4. Hamlet

Question ID : 26433051300

Status : Marked For Review

Chosen Option : 1



Q.4 Select the correctly spelt word.

- Ans  1. calculate
2. calculate
3. calculate
4. calculate

Question ID : 26433051639  
Status : Answered  
Chosen Option : 4

Q.5 Select the most appropriate meaning of the given idiom.

Water under the bridge

- Ans  1. Something which happens all the time
2. Something that does not affect the past
3. Something that has happened in the past but is not a problem now
4. A problem which has been existing and will continue to exist in the future

Question ID : 26433051664  
Status : Answered  
Chosen Option : 1

Q.6 The following sentence has been split into four segments. Identify the segment that contains a grammatical error.

Rivers / has being of primary / importance throughout / human history.

- Ans  1. Rivers
2. has being
3. importance throughout
4. importance throughout

Question ID : 26433051696  
Status : Answered  
Chosen Option : 3

Q.7 Select the most appropriate meaning of the underlined idiom.

Ran added a father in his cap by winning that international tournament.

- Ans  1. To feel well and healthy
2. To take advantage of one's position
3. To take advantage of one's position
4. An expression of extreme surprise

Question ID : 26433050994  
Status : Answered  
Chosen Option : 4

Q.8 The following sentence has been divided into parts. One of them may contain an error. Select the part that contains the error from the given options. If you don't find any error, mark "No error" as your answer.

In spite of hardly work / she was not able / to pass the exam.

- Ans
- 1. In spite of the work
  - 2. No error
  - 3. to pass the exam
  - 4. she was not able

Question ID : 26433050299  
Status : Answered  
Chosen Option : 1

Q.9 Select the most appropriate option to fill in the blank.

He came back from the game, took a \_\_\_\_\_ shower and was ready for the evening.

- Ans
- 1. fast
  - 2. clean
  - 3. noisy
  - 4. cool

Question ID : 26433050641  
Status : Marked For Review  
Chosen Option : 2

Q.10 Select the option that can be used as a one-word substitute for the given group of words.

An action of making amends for a wrong or injury

- Ans
- 1. Atonement
  - 2. Reception
  - 3. Rise
  - 4. Rejoice

Question ID : 26433050658  
Status : Answered  
Chosen Option : 2

Q.11 Select the most appropriate synonym of the given word.

Intervene

- Ans
- 1. Entail
  - 2. Compact
  - 3. Confuse
  - 4. Interpose

Question ID : 26433050624  
Status : Answered  
Chosen Option : 3

Q.12 Select the most appropriate synonym of the given word.

Sinister

- Ans
- 1. Prominent
  - 2. Sordid
  - 3. Pleasant
  - 4. Evil

Question ID : 26433051140

Status : Answered

Chosen Option : 4

Q.13 Select the option that rectifies the incorrectly spelt words in the given sentence.

They have legitimate grounds to engage users.

- Ans
- 1. They have legitimate grounds to engage users.
  - 2. They have legitimate grounds to engage users.
  - 3. They have legitimate grounds to engage users.
  - 4. They have legitimate grounds to engage users.

Question ID : 26433050920

Status : Answered

Chosen Option : 3

Q.14 Select the option that will improve the underlined part of the given sentence. In case no improvement is needed, select 'No improvement required'.

Despite not getting approval from the leader, we decided to carry out the plan.

- Ans
- 1. carry over
  - 2. carry away
  - 3. carry off
  - 4. No improvement required

Question ID : 26433051474

Status : Answered

Chosen Option : 3

Q.15 Select the option that will improve the underlined part of the given sentence. In case no improvement is needed, select 'No improvement required'.

In my experience, the press gallery are more concern to public affairs than private elites.

- Ans
- 1. are more concerned with
  - 2. No improvement required
  - 3. is much more concerned of
  - 4. are much concern for

Question ID : 26433051266

Status : Marked For Review

Chosen Option : 1

Q.16 Select the most appropriate ANTONYM of the given word.

Abate

- Ans
- 1. Moderate
  - 2. Decrease
  - 3. Increase
  - 4. Decrease

Question ID : 26433051694

Status : Answered

Chosen Option : 4

Q.17 Select the most appropriate ANTONYM of the given word.

Obvious

- Ans
- 1. Hidden
  - 2. Plain
  - 3. Vapid
  - 4. Acute

Question ID : 26433051695

Status : Answered

Chosen Option : 3

Q.18 Select the option that can be used as a one-word substitute for the given group of words.

Animals that live in water

- Ans
- 1. Pterosaurs
  - 2. Aquad
  - 3. Terrestrial
  - 4. Aquatic

Question ID : 26433050761

Status : Answered

Chosen Option : 4

Q.19 Select the most appropriate ANTONYM of the underlined word in the given sentence.

Many died in captivity and many suffered appalling brutality.

- Ans
- 1. Torment
  - 2. Cruelty
  - 3. Inhumanity
  - 4. Gentleness

Question ID : 26433050695

Status : Answered

Chosen Option : 4

**Q.20** Parts of the following sentence have been given as options. One of them may contain an error. Select the part that contains the error from the given options. If you don't find any error, mark 'No error' as your answer.

The use of calculators is prohibited in the examination.

- Ans  1. is prohibited in
2. the exam.
3. The use of calculators.
4. the examination.

Question ID : 26433051134  
Status : Answered  
Chosen Option : 2

**Comprehension:**

In the following passage, some words have been deleted. Read the passage carefully and select the most appropriate option to fill in each blank.

Endurance was the three-masted ship in (1) \_\_\_\_\_ Sir Ernest Shackleton and a (2) \_\_\_\_\_ of 27 men sailed for the Antarctic on the 1914–1917 Imperial Trans-Antarctic Expedition. The ship, originally named Polaris, was built at Framnes shipyard and (3) \_\_\_\_\_ in 1912 from Sandefjord in Norway. After her commissioners could no longer pay the shipyard, the ship (4) \_\_\_\_\_ bought by Shackleton in January 1914 for the expedition, which would be her first (5) \_\_\_\_\_.

SubQuestion No : 21

**Q.21** Select the most appropriate option to fill in blank number 1.

- Ans  1. captain
2. wife
3. first
4. women

Question ID : 26433051626  
Status : Answered  
Chosen Option : 1

**Comprehension:**

In the following passage, some words have been deleted. Read the passage carefully and select the most appropriate option to fill in each blank.

Endurance was the three-masted ship in (1) \_\_\_\_\_ Sir Ernest Shackleton and a (2) \_\_\_\_\_ of 27 men sailed for the Antarctic on the 1914–1917 Imperial Trans-Antarctic Expedition. The ship, originally named Polaris, was built at Framnes shipyard and (3) \_\_\_\_\_ in 1912 from Sandefjord in Norway. After her commissioners could no longer pay the shipyard, the ship (4) \_\_\_\_\_ bought by Shackleton in January 1914 for the expedition, which would be her first (5) \_\_\_\_\_.

SubQuestion No : 22

**Q.22** Select the most appropriate option to fill in blank number 2.

- Ans  1. watch
2. team
3. wife
4. group

Question ID : 26433051627  
Status : Marked For Review  
Chosen Option : 3

**Comprehension:**

In the following passage, some words have been deleted. Read the passage carefully and select the most appropriate option to fill in each blank.

Endurance was the three-masted ship in (1) \_\_\_\_\_ Sir Ernest Shackleton and a (2) \_\_\_\_\_ of 27 men sailed for the Antarctic on the 1914-1917 Imperial Trans-Antarctic Expedition. The ship, originally named Fokens, was built at Framneses shipyard and (3) \_\_\_\_\_ in 1912 from Sandefjord in Norway. After her commissioners could no longer pay the shipyard, the ship (4) \_\_\_\_\_ bought by Shackleton in January 1914 for the expedition, which would be her first (5) \_\_\_\_\_.

SubQuestion No : 23

Q.23 Select the most appropriate option to fill in blank number 3.

- Ans:  1. released  
 2. built  
 3. started  
 4. renovated

Question ID : 26492059629

Status : Answered

Chosen Option : 1

**Comprehension:**

In the following passage, some words have been deleted. Read the passage carefully and select the most appropriate option to fill in each blank.

Endurance was the three-masted ship in (1) \_\_\_\_\_ Sir Ernest Shackleton and a (2) \_\_\_\_\_ of 27 men sailed for the Antarctic on the 1914-1917 Imperial Trans-Antarctic Expedition. The ship, originally named Fokens, was built at Framneses shipyard and (3) \_\_\_\_\_ in 1912 from Sandefjord in Norway. After her commissioners could no longer pay the shipyard, the ship (4) \_\_\_\_\_ bought by Shackleton in January 1914 for the expedition, which would be her first (5) \_\_\_\_\_.

SubQuestion No : 24

Q.24 Select the most appropriate option to fill in blank number 4.

- Ans:  1. were  
 2. no  
 3. in  
 4. are

Question ID : 26492059629

Status : Answered

Chosen Option : 2

### Comprehension:

In the following passage, some words have been deleted. Read the passage carefully and select the most appropriate option to fill in each blank.

Endurance was the three-masted ship in (1) \_\_\_\_\_ Sir Ernest Shackleton and a (2) \_\_\_\_\_ of 27 men sailed for the Antarctic on the 1914-1917 Imperial Trans-Antarctic Expedition. The ship, originally named *Polaris*, was built at Framnes shipyard and (3) \_\_\_\_\_ in 1912 from Sandefjord in Norway. After her commissioners could no longer pay the shipyard, the ship (4) \_\_\_\_\_ bought by Shackleton in January 1914 for the expedition, which would be her first (5) \_\_\_\_\_.

SubQuestion No : 25

Q.25 Select the most appropriate option to fill in blank number 5.

- Ans  1. voyage
2. route
3. drive
4. mile

Question ID : 26432059639  
Status : Answered  
Chosen Option : 1

Q.26 The number 1000 is a power of 10.

Q.1 Select the number that can replace the question mark (?) in the following series.

42, 38, 80, 118, 198, 316, ?

- Ans  1. 453
2. 509
3. 511
4. 493

Question ID : 26433048869  
Status : Answered  
Chosen Option : 3

Q.2 Eight boys A, B, C, D, E, F, G and H are sitting around a square table, facing towards the centre (but not necessarily in the same order). Two boys are sitting on each side, G and C are sitting on the same side. E is sitting opposite to G and E is to the immediate right of B. F and H are sitting on the adjacent side of G and C. F and H are sitting on the same side. H is fourth to the left of B. D is not the immediate neighbour of G. Which of the following pairs of boys represent the boys sitting on the same side of the square table?

- Ans  1. AC
2. HD
3. BD
4. FH

Question ID : 26433048881  
Status : Marked For Review  
Chosen Option : 4

Q.3 Select the option that is related to the third letter-cluster in the same way as the second letter-cluster is related to the first letter-cluster.  
TRQ : QMN :: BLA : ?

- Ans
- A. 1. YHZ
  - B. 2. XGS
  - C. 3. XPD
  - D. 4. VSC

Question ID : 26433040951

Status : Answered

Chosen Option : 4

Q.4 The weight of seven boys B1, B2, B3, B4, B5, B6 and B7 are compared. The weight of no two boys is the same. The weight of B4 is less than only three boys. The weight of B1 is more than B7. The weight of B2 is the most. B5 and B6 both weigh more than B1. The weight of B3 is less than that of B7.

How many boys weigh less than B1?

- Ans
- A. 1. 4
  - B. 2. 3
  - C. 3. 1
  - D. 4. 2

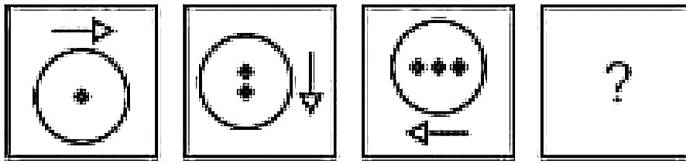
Question ID : 26433040952

Status : Answered

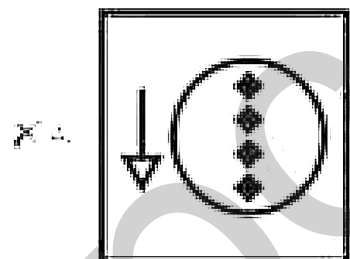
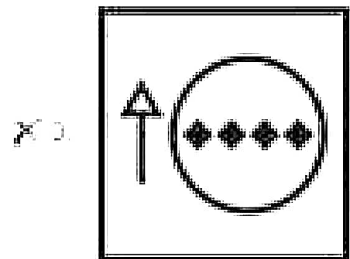
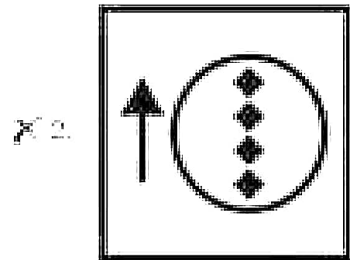
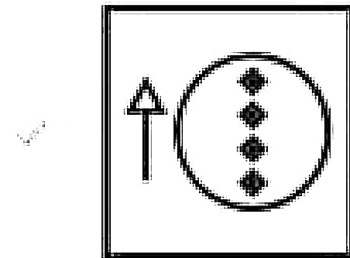
Chosen Option : 4



Q.5 Select the figure from amongst the given options that can replace the question mark (?) in the following series.



Ans



Question ID : 26493046959  
Status : Answered  
Chosen Option : 1

Q.6 In a certain code language, 'ru vu du' is written as 'Time and Money', 'ru du ru' is written as 'Manage Money Judiciously', and 'ru vu fu' is written as 'Save More Time'. What is the code for 'Save More Money' in that code language?

- Ans
- 1. ru vu fu
  - 2. ru fu fu
  - 3. ru vu fu
  - 4. ru vu du

Question ID : 26493046959  
Status : Answered  
Chosen Option : 3

Q.7 Select the option that is related to the third letter-cluster in the same way as the second letter-cluster is related to the first letter-cluster.

KING : HEKD :: FRKM : ?

- Ans
- 1. CIHI
  - 2. CLHI
  - 3. COIH
  - 4. COIL

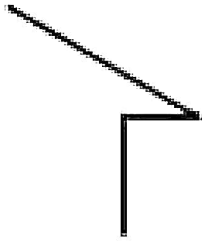
Question ID : 26433040049

Status : Answered

Chosen Option : 4

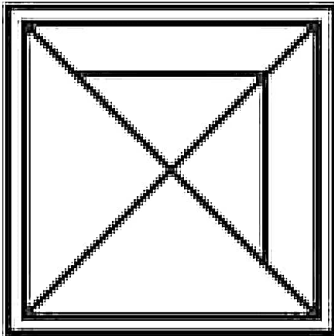
mpcareer.in

Q.8 Select the option in which the given figure is embedded. (Rotation is not allowed)

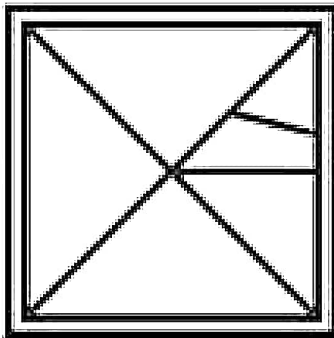


Ans

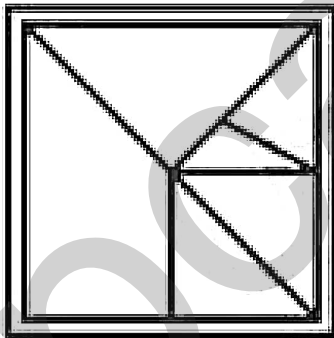
X 1.



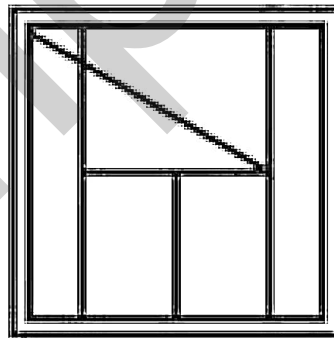
X 2.



X 3.



X 4.



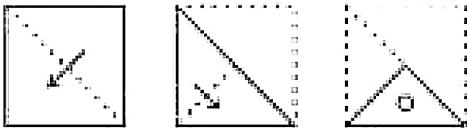
Question ID : 26433040960  
Status : Answered  
Chosen Option : 4

Q.9 In a certain code language, 'TORQ' is coded as '210', and 'HARN' is coded as '123'. How will 'PADM' be coded in that code language?

- Ans
- A. 1, 94
  - B. 2, 112
  - C. 3, 11
  - D. 4, 86

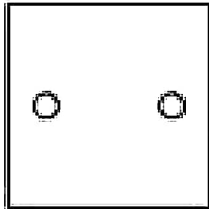
Question ID : 26433048722  
 Status : Answered  
 Chosen Option : 3

Q.10 The sequence of folding a piece of paper and the number of times the folded paper has formed a pocket in the following figures. How would the paper look when unfolded?

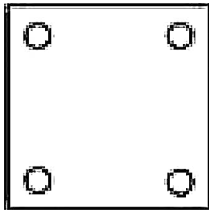


Ans

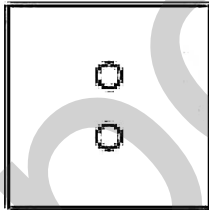
A.



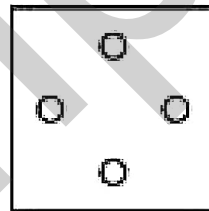
B.



C.



D.



Question ID : 26433040016  
 Status : Answered  
 Chosen Option : 4

**Q.11** Read the given statements and conclusions carefully. Assuming that the information given in the statements is true, even if it appears to be at variance with commonly known facts, decide which of the given conclusions logically follow(s) from the statements.

Statements:

- I. No car is a bench.
- II. All tables are cars.

Conclusions:

- I. Some cars are tables.
- II. Some cars are benches.
- III. No bench is a table.

- Ans
- A. Only conclusion I follows
  - B. All the conclusions follow
  - C. Only conclusions I and II follow
  - D. Only conclusions II and III follow

Question ID : 26433048954

Status : Answered

Chosen Option : 3

**Q.12** Select the letter-cluster from among the given options that can replace the question mark (?) in the following series.

XJ, AG, DD, GA, ?

- Ans
- 1. KX
  - 2. JI
  - 3. KV
  - 4. LY

Question ID : 26433048927

Status : Answered

Chosen Option : 2

**Q.13** Select the option in which the numbers are related in the same way as are the numbers in the given set.

{18, 400, 484}

- Ans
- 1. {22, 400, 484}
  - 2. {14, 200, 400}
  - 3. {22, 400, 324}
  - 4. {22, 400, 529}

Question ID : 26433048942

Status : Answered

Chosen Option : 4

Q.14 Five people, J, N, P, R and S are sitting in a straight row, facing the North, but not necessarily in the same order. Only N sits between J and S. S sits to the immediate left of P. J sits to the immediate right of R. Who sits at the second position from the left end?

- Ans
- A. S
  - B. J
  - C. P
  - D. R

Question ID : 26433048276  
 Status : Answered  
 Chosen Option : 2

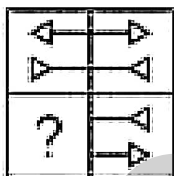
Q.15 Select the option that is related to the fifth term in the same way as the second term is related to the first term and the fourth term is related to the third term.

U144 : S121 :: N100 : L81 :: G64 : ?

- Ans
- A. 121
  - B. 64
  - C. 81
  - D. 100

Question ID : 26433048171  
 Status : Answered  
 Chosen Option : 1

Q.16 Select the correct form the option that can replace the question mark (?) and complete the pattern (directions are given below)



- Ans
- A.
  - B.
  - C.
  - D.

Question ID : 26433040938  
 Status : Answered  
 Chosen Option : 1

Q.17 In a certain code language, 'MISTER' is coded as '925301', 'UNCLE' is coded as '64670', and 'SEN' is coded as '504'. How will 'MISTIC' be coded in that language?

- Ans
- A. 936571
  - B. 936570
  - C. 873503
  - D. 357620

Question ID : 26433048175

Status : Answered

Chosen Option : 2

Q.18 Read the given statements and conclusions carefully. Assuming that the information given in the statements is true, even if it appears to be at variance with commonly known facts, decide which of the given conclusions logically follow(s) from the statements.

Statements:

- I. All Crax are Chips.
- II. All Drinks are Chips.

Conclusions:

- I. Some Drinks are not Crax.
- II. All Chips are Crax.

- Ans
- A. Only conclusion I follows
  - B. Both conclusions I and II follow
  - C. Both conclusions I and II follow
  - D. Only conclusion II follows

Question ID : 26433048955

Status : Marked For Review

Chosen Option : 1

Q.19 Select the option in which the numbers shares the same relationship as that shared by the numbers in the given set.

(NOTE: Operations should be performed on the whole numbers, without breaking down the numbers into its constituent digits. E.g. 13 – Operations on 13 such as adding /deleting /multiplying etc. to 13 can be performed. Breaking down 13 into 1 and 3 and then performing mathematical operations on 1 and 3 is not allowed)  
(46, 130, 414)

- Ans
- A. (135, 111, 111)
  - B. (2, 412, 138, 894)
  - C. (3, 672, 198, 624)
  - D. (58, 334, 996)

Question ID : 26433048941

Status : Answered

Chosen Option : 1

Q.20 In a certain code language, 'HAIR' is written as 'SJBH', 'POLE' is written as 'FMPQ'. How will 'MANY' be written in that language?

- Ans
- 1. ZQSH
  - 2. ZPHH
  - 3. ZQSH
  - 4. ZPHH

Question ID : 26433049045  
 Status : Marked For Review  
 Chosen Option : 4

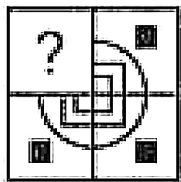
Q.21 Which two numbers (not digits) and two signs need to be interchanged to make the given equation correct?

$$28 \times 4 + 15 = 8 - 34 = 388$$

- Ans
- 1. + and =, 4 and 15
  - 2. + and =, 4 and 34
  - 3. + and =, 15 and 28
  - 4. + and =, 15 and 8

Question ID : 26433049046  
 Status : Answered  
 Chosen Option : 1

Q.22 Select the figure from the options that can replace the question mark '?' and complete the pattern.



- Ans
- 1.
  - 2.
  - 3.
  - 4.

Question ID : 26433049039  
 Status : Answered  
 Chosen Option : 4



Q.23 After Interchanging the given two signs + and - and two numbers 6 and 25, what will be the value of the given expression?

$$4 - 6 + 5 \times 25 + 14$$

- Ans
- A. 1.5
  - B. 2.15
  - C. 3.15
  - D. 4.15

Question ID : 26433048864  
Status : Answered  
Chosen Option : 3

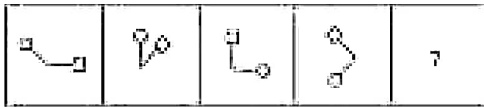
Q.24 Select the option that will replace the question mark (?) in the given series.

11, 16, 26, 41, 61, ?

- Ans
- A. 1.75
  - B. 2.11
  - C. 3.11
  - D. 4.81

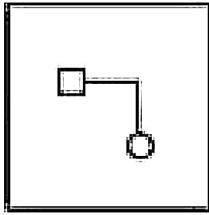
Question ID : 26433048882  
Status : Answered  
Chosen Option : 3

Q.25 Select the figure from among the given options that can explain the operation number 7 in the following series.

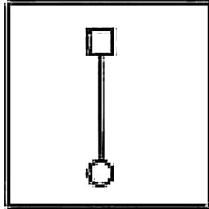


Ans

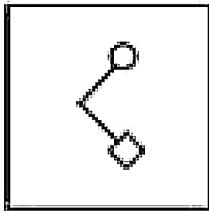
X 1



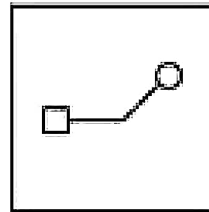
X 2



X 3



X 4



Question ID : 26433040289  
 Status : Answered  
 Chosen Option : 4

Next Question

Q.1 The length of the common chord of two circles of radii 10 cm and 16 cm is 12 cm. What is the distance between the centres of the two circles? [Give your answer correct to the nearest integer value.]

- Ans
- X 1. 23 cm
  - X 2. 28 cm
  - X 3. 20 cm
  - X 4. 35 cm

Question ID : 26433050342  
 Status : Answered  
 Chosen Option : 2

Q.2 Study the given table and answer the question that follows.

The table below shows the number of cricket runs made by five wicket-keepers in six days of a particular week.

Wicket-keeper	Monday	Tuesday	Wednesday	Thursday	Friday	Saturday
A	65	61	55	60	75	68
B	61	55	50	64	60	58
C	58	60	64	60	68	63
D	64	60	50	60	64	62
E	64	64	61	62	65	60

In how many days is the number of runs made by A more than the average number of runs made by A per day?

- Ans
- A. 3
  - B. 4
  - C. 2
  - D. 1

Question ID : 26433050212  
Status : Answered  
Chosen Option : 4

Q.3 The length and the breadth of a rectangular cardboard are 10 cm and 15 cm respectively. If the largest possible square is cut out from the rectangle, what is the area of the remaining part of the cardboard?

- Ans
- A.  $175 \text{ cm}^2$
  - B.  $175 \text{ cm}^2$
  - C.  $425 \text{ cm}^2$
  - D.  $325 \text{ cm}^2$

Question ID : 26433050200  
Status : Answered  
Chosen Option : 1

Q.4 In the set of four numbers, each greater than 17, the L.C.M. is 361. Calculate the sum of the numbers.

- Ans
- A. 357
  - B. 238
  - C. 268
  - D. 340

Question ID : 26433050270  
Status : Not Answered  
Chosen Option : -

Q.5 A merchant bought a item from Manufacturer at \$500. Merchant also charged an additional \$25 for packaging and \$10 for delivering the item. For what amount should Merchant sell the item to get a profit of 10%?

- Ans
- A. \$667
  - B. \$612
  - C. \$783
  - D. \$453

Question ID : 26433050277  
Status : Answered  
Chosen Option : 1

Q.6 The average weight of 17 students of a class is 56 kg. 3 new students whose weights are 57, 62 and 69 kg, respectively, join the class. Find the new average weight of the students of the class.

- Ans
- A. 56.45 kg
  - B. 56.95 kg
  - C. 58.05 kg
  - D. 57.65 kg

Question ID : 26433050323  
Status : Answered  
Chosen Option : 2

Q.7 A can complete a work in 24 days, B can complete it in 40 days and C can complete it in 63 days. If A, B and C work together, in how many days can they complete the work?

- Ans
- A.  $11\frac{6}{11}$
  - B.  $11\frac{3}{11}$
  - C.  $11\frac{4}{11}$
  - D.  $11\frac{9}{11}$

Question ID : 26433050305  
Status : Answered  
Chosen Option : 4

Q.8 If  $A = \frac{3+4+2}{6+3+1}$  and  $B = \frac{12+6+2}{8+4+3}$ , then what is the value of  $A^2 + B^2 + 2AB$ ?

- Ans
- A. 72.25
  - B. 52.25
  - C. 42.25
  - D. 56.25

Question ID : 26433049619  
Status : Answered  
Chosen Option : 4

Q.9

If  $m : n = 5 : 4$ , then what is the values of  $(m^2 - n^2) : (m^2 + n^2)$  ?

- Ans
- A. 16 : 9
  - B. 25 : 9
  - C. 32 : 5
  - D. 41 : 9

Question ID : 26433049630

Status : Answered

Chosen Option : 4

Q.10 A rhombus is inscribed within a square ABCD in the order A'B'C'D' as depicted in the figure below. If  $\angle A' = 110^\circ$ , then what is the ratio of the side of C to that of D?

- Ans
- A. 4 : 5
  - B. 3 : 4
  - C. 2 : 3
  - D. 6 : 7

Question ID : 26433050265

Status : Answered

Chosen Option : 3

Q.11 The average age of 10 students and their teachers is the proportion of 7 : 19. What is the age of the school principal?

- Ans
- A. 24 years
  - B. 25 years
  - C. 21 years
  - D. 27 years

Question ID : 26433040431

Status : Answered

Chosen Option : 4

Q.12 The monthly income of Lakshmi is Rs 2000. She has spent for 8 months at a rate of Rs 25000 per month. What is the amount left to her?

- Ans
- A. 36,550
  - B. 36,225
  - C. 37,250
  - D. 36,250

Question ID : 26433050202

Status : Answered

Chosen Option : 4

Q.13 The radius of a circle is 10 cm. The length of a chord of the circle is 16 cm. Find the area of the minor sector.

- Ans
- A. 3720
  - B. 3450
  - C. 3540
  - D. 3480

Question ID : 26433050296  
Status : Marked For Review  
Chosen Option : 2

Q.14 A certain number of identical spheres are touched by another sphere of same radius 20 cm. What is the number of small spheres touched if the surface area of each small sphere is  $2404 \text{ cm}^2$  ( $\pi = \frac{22}{7}$ )

- Ans
- A. 8
  - B. 9
  - C. 6
  - D. 7


Question ID : 26433040441  
Status : Answered  
Chosen Option : 3

Q.15 The marked price of a laptop is ₹ 60,000. The laptop is sold at a discount of 20%. If the profit of 10% is made then the selling price is the cost price of the laptop?

- Ans
- A. ₹ 50,000
  - B. ₹ 45,000
  - C. ₹ 48,000
  - D. ₹ 40,000

Question ID : 26433040349  
Status : Answered  
Chosen Option : 4

Q.16 The following bar chart shows the number of computers sold per month by a company in five consecutive months.



What is the average number of computers sold per month during this period? (Round off your answer to the nearest integer value.)

- Ans
- A. 304
  - B. 219
  - C. 212
  - D. 208

Question ID : 26433040641

Status : Answered

Chosen Option : 4

Q.17 In a city, 60% of the population are males and the rest are females. If the ratio of males to females is 3:2, and the ratio of married females to unmarried females is 2:3, then what percentage of the total population is married?

- Ans
- A. 41%
  - B. 59%
  - C. 51%
  - D. 49%

Question ID : 26433050150

Status : Answered

Chosen Option : 1

Q.18 The simple interest on a sum of money for a period of 6 years is equal to  $\frac{1}{9}$ th of its principal. What is the rate of simple interest per annum that is being given?

- Ans
- A. 9%
  - B. 8.5%
  - C. 10%
  - D. 5%

Question ID : 26433049367

Status : Answered

Chosen Option : 4

**Q.19** A contractor completes a piece of work in 25 days. If he had his help the same work in 21 days. What % of the work complete the same work in 28 days. The three workers together completed the work and received a total payment of ₹1000 including the work. What is A's share in the total payment received?

- Ans
- A. ₹240
  - B. ₹480
  - C. ₹320
  - D. ₹400

Question ID : 26433049743

Status : Answered

Chosen Option : 3

**Q.20** Ram has 2 pens at ₹120 each, 2 pens at ₹160 each and 3 pens each at ₹200 each. What is the average expenditure incurred for the pens alone?

- Ans
- A. ₹180
  - B. ₹160
  - C. ₹170
  - D. ₹165

Question ID : 26433049854

Status : Answered

Chosen Option : 2

**Q.21** Ram starts B to 29 km west. A period from 10:00 A.M. to 10:30 A.M. and speed of 10 km/hr and then comes B. Starts from 10:30 A.M. to 11:00 A.M. and speed of 15 km/hr and goes towards A. At what time will they meet?

- Ans
- A. 5:10 p.m.
  - B. 4:40 p.m.
  - C. 5:40 p.m.
  - D. 5:20 p.m.

Question ID : 26433049920

Status : Marked For Review

Chosen Option : 3

**Q.22** A boat is towed in full water. It maintains the speed of the stream in 1/3rd of the time. What is the ratio of the speed of the boat to the speed of the stream?

- Ans
- A. 10
  - B. 15
  - C. 21
  - D. 16

Question ID : 26433050209

Status : Marked For Review

Chosen Option : 3



**Q.23** The length of a rectangle is increased by  $16\frac{2}{3}\%$ . By what approximate percentage should its breadth be decreased to maintain the area of the rectangle remain the same?

- Ans
- A.  $17.5\%$
  - B.  $14.29\%$
  - C.  $10\%$
  - D.  $12.5\%$

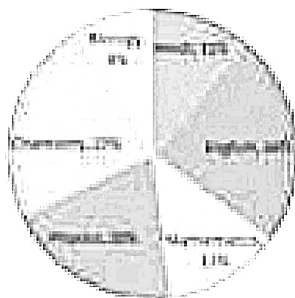
Question ID : 26433040701

Status : Masked For Review

Chosen Option : 2

**Q.24** Study the given pie chart and answer the question that follows.  
The pie chart shows the percentage-wise distribution of transfers in a district of the transfer officers. If the number of transfers in the percentage of the total number of transfers at the district is taken as 1000.

Total number of transfers = 1000



What is the ratio of the number of transfers to other countries to the number of transfers to other states?

- Ans
- A. 3 : 2
  - B. 13 : 18
  - C. 24 : 23
  - D. 13 : 20

Question ID : 26433050283

Status : Answered

Chosen Option : 3

**Q.25** Select the number that will come in place of the question mark (?) in the unbalanced statement.

$$0.084^{12} + 0.16^{12} + 0.4^{12} + 0.4^{24} = 0.4^{24}$$

- Ans
- A. 350
  - B. 320
  - C. 338
  - D. 341

Question ID : 26433050208

Status : Not Answered

Chosen Option : -

Q.1 Which schedule of the Indian Constitution has provisions related to the Union list?

- Ans
- 1. First schedule
  - 2. Ninth schedule
  - 3. Seventh schedule
  - 4. Tenth schedule

Question ID : 26433047689  
Status : Answered  
Chosen Option : 3

Q.2 Sarai Narmahal is a centrally protected monument of India. It is situated in which state of India?

- Ans
- 1. Uttar Pradesh
  - 2. West Bengal
  - 3. Madhya Pradesh
  - 4. Himachal Pradesh

Question ID : 26433047672  
Status : Not Answered  
Chosen Option : -

Q.3 Open Market Operations conducted by the Reserve Bank of India (RBI) are of \_\_\_\_\_ types.

- Ans
- 1. Two
  - 2. three
  - 3. five
  - 4. four

Question ID : 26433047267  
Status : Answered  
Chosen Option : 2

Q.4 Which of the following diseases is caused by the prolonged deficiency of vitamin D?

- Ans
- 1. Rickets
  - 2. Cholesterol
  - 3. Scurvy
  - 4. Anemia

Question ID : 26433047024  
Status : Answered  
Chosen Option : 1

Q.5 The Deccan plateau lies to the south of which of the following rivers?

- Ans  1. Tapi  
 2. Godavari  
 3. Narmada  
 4. Pennar

Question ID : 26433047678  
Status : Answered  
Chosen Option : 1

Q.6 Ravikirti was a court poet of which Chalukya ruler?

- Ans  1. Binna II  
 2. Binna I  
 3. Vishnvardhana II  
 4. Kirtivarman II

Question ID : 26433047682  
Status : Answered  
Chosen Option : 3

Q.7 Which article of the Indian Constitution states that 'No person shall be prosecuted and punished for the same offence more than once'?

- Ans  1. Article 10  
 2. Article 20  
 3. Article 21  
 4. Article 21A

Question ID : 26433047688  
Status : Answered  
Chosen Option : 2

Q.8 Which of the following events occurred as an after-effect of the Jallianwala Bagh Massacre (13th April 1919)?

- Ans  1. Hunter commission to settle disputes between the mill owners and the workers  
 2. Individual provinces could sign a separate agreement with the British  
 3. The 1919 Commission on Law and Order in Punjab was set up  
 4. Propagation of Gandhian and Satyagrah by Congress was halted

Question ID : 26433047704  
Status : Answered  
Chosen Option : 3

Q.9 Pandit Kishan Malharaj was associated with which instrument?

- Ans
- 1. Sitar
  - 2.Tabla
  - 3. Veena
  - 4. Sarod

Question ID : 26433047261  
Status : Marked For Review  
Chosen Option : 3

Q.10 What is the approximate atomic mass (u) of hydrogen?

- Ans
- 1. 12
  - 2. 4
  - 3. 1
  - 4. 14

Question ID : 26433047676  
Status : Answered  
Chosen Option : 3

Q.11 What is the atomic number of chromium?

- Ans
- 1. 24
  - 2. 18
  - 3. 21
  - 4. 16

Question ID : 26433047595  
Status : Answered  
Chosen Option : 1

Q.12 In which city, Prime Minister Narendra Modi launched the Ayushman Bharat Health Infrastructure Mission?

- Ans
- 1. Bhopal
  - 2. Lucknow
  - 3. Patna
  - 4. Gandhinagar

Question ID : 26433047669  
Status : Answered  
Chosen Option : 4

Q.13 In which year did the Mughal emperor Aurangzeb die?

- Ans
- 1. 1707
  - 2. 1711
  - 3. 1715
  - 4. 1705

Question ID : 26433047683  
Status : Answered

Q.14 \_\_\_\_\_ is the deepest landlocked and well-protected port in India.

- Ans  1. Kandla port  
 2. Tuticorin port  
 3. Tuticorin port  
 4. Mumbai port

Question ID : 26433047677  
Status : Answered  
Chosen Option : 3

Q.15 Radha Sridhar received the Sangeet Natak Akademi Award for the year 2018 for her contribution to which classical dance of India?

- Ans  1. Kathak dance  
 2. Manipuri  
 3. Sattriya  
 4. Bharatnatya

Question ID : 26433047687  
Status : Not Answered  
Chosen Option : --

Q.16 Who was appointed as the Chief Economic Advisor to the Government of India in January 2022?

- Ans  1. S. Rajaraman  
 2. K. V. Srinivasan  
 3. Rajat Kumar  
 4. V. Anand

Question ID : 26433047244  
Status : Answered  
Chosen Option : 4

Q.17 Which of the following statements is correct?

- I. Most of Ashoka's inscriptions were written in Brahmi script.  
II. Many of Chanakya's ideas were written down in a book called the Arthashastra.

- Ans  1. Only I  
 2. Only II  
 3. Neither I nor II  
 4. Both I and II

Question ID : 26433047256  
Status : Answered  
Chosen Option : 1

Q.16 Which of the following states does the dance form 'Kathakali' belong to?

- Ans
- 1. Uttaranchal
  - 2. Punjab
  - 3. Kerala
  - 4. Odisha

Question ID : 26433047020  
Status : Answered  
Chosen Option : 3

Q.17 In which state of India is the Yaoshang festival celebrated?

- Ans
- 1. Uttar Pradesh
  - 2. Manipur
  - 3. Rajasthan
  - 4. Tamil Nadu

Question ID : 26433047505  
Status : Answered  
Chosen Option : 2

Q.20 As per census 2011, which of the following is the most spoken language of India?

- Ans
- 1. Hindi
  - 2. Marathi
  - 3. English
  - 4. Telugu

Question ID : 26433046829  
Status : Answered  
Chosen Option : 1

Q.21 How many players are a part of the team on the field in a game of Hockey?

- Ans
- 1. 11
  - 2. 10
  - 3. 12
  - 4. 13

Question ID : 26433047116  
Status : Marked For Review  
Chosen Option : 4

Q.22 Which of the following bases is found in window cleaner?

- Ans
- 1. Magnesium hydroxide
  - 2. Calcium hydroxide
  - 3. Sodium hydroxide
  - 4. Calcium hydroxide

Question ID : 26433047674  
Status : Not Answered  
Chosen Option : -

Q.23 David Warner played for which team in IPL 2022?

- Ans
- 1. Sunrisers Hyderabad
  - 2. Royal Challengers Bangalore
  - 3. Chennai Super Kings
  - 4. Punjab Kings

Question ID : 26433047565  
Status : Answered  
Chosen Option : 3

Q.24 According to the 2011 Census, which of the following has the second highest sex ratio in India?

- Ans
- 1. Tamil Nadu
  - 2. Kerala
  - 3. West Bengal
  - 4. Maharashtra

Question ID : 26433047720  
Status : Answered  
Chosen Option : 3

Q.25 Who is the author of the book 'Roads to Mussoorie'?

- Ans
- 1. Ratan Das
  - 2. Arjun Singh
  - 3. Anish Tandon
  - 4. J. S. Sanyal

Question ID : 26433047260  
Status : Answered  
Chosen Option : 3

# Multi Tasking Non Technical Staff Havaldar CBIC and CBN Exam 2021

Roll Number	
Candidate Name	
Venue Name	
Exam Date	08/07/2022
Exam Time	5:00 PM - 6:30 PM
Subject	MTS Non technical and Havaldar Examination 2021

## Question 1

Q.1 Parts of the following sentence have been given as options. One of them contains an error. Select the part that contains the error from the given options.

The gate plant is usual harvested when it is at the flowering stage

- Ans  1. when it is
2. usual harvested
3. at the flowering stage
4. The gate plant

Question ID : 26433056211

Status : Answered

Chosen Option : 2

Q.2 Select the most appropriate meaning of the underlined idiom:

My cousin's office is at a stone's throw from my house.

- Ans  1. Near the forest
2. In a dangerous situation
3. In a short distance
4. Along roads

Question ID : 26433050800

Status : Answered

Chosen Option : 3

Q.3 Select the option that can be used as a one-word substitute for the given group of words.

That which can be easily broken

- Ans  1. Frangible
2. Durable
3. Fragible
4. Stren

Question ID : 26433050985

Status : Answered

Chosen Option : 1



Q.4 The following sentence has been divided into parts. One of them may contain an error. Select the part that contains the error from the given options. If you don't find any error, mark "No error" as your answer.

She say that she feels very / lonely and depressed / living in a big house.

- Ans
- 1. The way that she feel lonely
  - 2. living in a big house
  - 3. No error
  - 4. lonely and depressed

Question ID : 26433050288  
Status : Answered  
Chosen Option : 1

Q.5 The following sentence has been divided into parts. One of them may contain an error. Select the part that contains the error from the given options. If you don't find any error, mark "No error" as your answer.

I am currently worked / with a newly / set up marketing company.

- Ans
- 1. No error
  - 2. set up marketing company
  - 3. I am currently worked
  - 4. with a newly

Question ID : 26433050576  
Status : Answered  
Chosen Option : 3

Q.6 Select the most appropriate synonym of the given word.

Concede

- Ans
- 1. Reject
  - 2. Yield
  - 3. Deny
  - 4. Facilitate

Question ID : 26433050500  
Status : Answered  
Chosen Option : 2

Q.7 Select the most appropriate synonym of the underlined word in the given sentence.

We need to protest against this policy.

- Ans
- 1. object
  - 2. consent
  - 3. validate
  - 4. protest

Question ID : 26433050541  
Status : Answered  
Chosen Option : 1

Q.8 Select the option that can be used as a one-word substitute for the given group of words.

Weakness and poor health

- Ans
- 1. Demerit
  - 2. Fossilility
  - 3. Lame
  - 4. Obscure

Question ID : 26433051631  
Status : Answered  
Chosen Option : 3

Q.9 Select the option that can be used as a one-word substitute for the given group of words.

To owe up to something as true

- Ans
- 1. Confess
  - 2. Suppress
  - 3. Retrace
  - 4. Annex

Question ID : 26433051463  
Status : Answered  
Chosen Option : 1

Q.10 Select the correctly spelt word.

- Ans
- 1. Continual
  - 2. Hatched
  - 3. Incessant
  - 4. Adversaries

Question ID : 26433051232  
Status : Marked For Review  
Chosen Option : 3

Q.11 Select the most appropriate word for the given group of words.

A person incapable of making mistakes

- Ans
- 1. Infallible
  - 2. Pure
  - 3. Optimal
  - 4. Flaw

Question ID : 26433050493  
Status : Answered  
Chosen Option : 1

Q.12 Select the most appropriate option to fill in the blank.

Danny lay on his back staring at the \_\_\_\_\_ of his room.

- Ans
- 1. Ceiling
  - 2. Ceiling
  - 3. ceiling
  - 4. springs

Question ID : 26433050704

Status : Answered

Chosen Option : 2

Q.13 Select the option that can be used as a one-word substitute for the given group of words.

A sound that is pleasing to hear

- Ans
- 1. Harsh
  - 2. Melodious
  - 3. Harsh
  - 4. Acrid

Question ID : 26433051320

Status : Answered

Chosen Option : 2

Q.14 Select the most appropriate ANTONYM of the given word.

Cowardly

- Ans
- 1. Courageous
  - 2. Fleeing
  - 3. Spacious
  - 4. Brave

Question ID : 26433051410

Status : Answered

Chosen Option : 1

Q.15 Select the most appropriate ANTONYM of the underlined word in the given sentence.

I believe in having a clear and lucid conversation.

- Ans
- 1. Obscure
  - 2. Turbid
  - 3. Obedient
  - 4. Blatant

Question ID : 26433050800

Status : Answered

Chosen Option : 1

Q.16 Select the most appropriate synonym of the given word.

Deficient

- Ans  1. Lacking  
 2. Whole  
 3. Incomplete  
 4. Integral

Question ID : 26433050592

Status : Answered

Chosen Option : 3

Q.17 Select the INCORRECTLY spelt word.

- Ans  1. Assentch  
 2. Assent  
 3. Assention  
 4. Assentiate

Question ID : 26433050413

Status : Answered

Chosen Option : 2

Q.18 Select the most appropriate option to substitute the underlined segment in the given sentence. If there is no need to substitute it, select 'No substitution required.'

The missing child was discovered in lower Maryland a few days later.

- Ans  1. After a while  
 2. a lot of days later  
 3. No substitution required  
 4. few days later

Question ID : 26433050213

Status : Answered

Chosen Option : 3

Q.19 Select the most appropriate meaning of the given idiom.

Set the wheels in motion

- Ans  1. To start a discussion  
 2. To drive very fast  
 3. To end a party  
 4. To end a discussion

Question ID : 26433050203

Status : Answered

Chosen Option : 1

Q.20 Select the most appropriate option to fill in the blank.

I signed this science project \_\_\_\_\_ London.

- Ans
- 1. by
  - 2. in
  - 3. by
  - 4. into

Question ID : 26433050527

Status : Answered

Chosen Option : 2

Comprehension:

In the following passage, some words have been deleted. Read the passage carefully and select the most appropriate option to fill in each blank.

With over 49,000 plant species (1) \_\_\_\_\_ as of 2016, India holds (2) \_\_\_\_\_ 11.5% of all the flora in the world. Now, a new fossil record has (3) \_\_\_\_\_ that India is the birthplace of Asian bamboo, and they (4) \_\_\_\_\_ formed about 25 million years ago in the north-eastern (5) \_\_\_\_\_ of the country.

SubQuestion No : 21

Q.21 Select the most appropriate option to fill in blank number 1.

- Ans
- 1. discovered
  - 2. signed
  - 3. revealed
  - 4. described

Question ID : 26433050530

Status : Answered

Chosen Option : 1

Comprehension:

In the following passage, some words have been deleted. Read the passage carefully and select the most appropriate option to fill in each blank.

With over 49,000 plant species (1) \_\_\_\_\_ as of 2016, India holds (2) \_\_\_\_\_ 11.5% of all the flora in the world. Now, a new fossil record has (3) \_\_\_\_\_ that India is the birthplace of Asian bamboo, and they (4) \_\_\_\_\_ formed about 25 million years ago in the north-eastern (5) \_\_\_\_\_ of the country.

SubQuestion No : 22

Q.22 Select the most appropriate option to fill in blank number 2.

- Ans
- 1. on
  - 2. of
  - 3. open
  - 4. part

Question ID : 26433050531

Status : Answered

Chosen Option : 4

**Comprehension:**

In the following passage, some words have been deleted. Read the passage carefully and select the most appropriate option to fill in each blank.

With over 49,000 plant species (1) \_\_\_\_\_ as of 2018, India holds (2) \_\_\_\_\_ 11.5% of all the flora in the world. Now, a new fossil record has (3) \_\_\_\_\_ that India is the birthplace of Asian bamboo, and they (4) \_\_\_\_\_ formed about 25 million years ago in the north-eastern (5) \_\_\_\_\_ of the country.

SubQuestion No : 23

Q.23 Select the most appropriate option to fill in blank number 3.

- Ans
- 1. united
  - 2. shown
  - 3. revealed
  - 4. arranged

Question ID : 26433050532  
Status : Answered  
Chosen Option : 2

**Comprehension:**

In the following passage, some words have been deleted. Read the passage carefully and select the most appropriate option to fill in each blank.

With over 49,000 plant species (1) \_\_\_\_\_ as of 2018, India holds (2) \_\_\_\_\_ 11.5% of all the flora in the world. Now, a new fossil record has (3) \_\_\_\_\_ that India is the birthplace of Asian bamboo, and they (4) \_\_\_\_\_ formed about 25 million years ago in the north-eastern (5) \_\_\_\_\_ of the country.

SubQuestion No : 24

Q.24 Select the most appropriate option to fill in blank number 4.

- Ans
- 1. was
  - 2. has
  - 3. were
  - 4. are

Question ID : 26433050533  
Status : Answered  
Chosen Option : 3

**Comprehension:**

In the following passage, some words have been deleted. Read the passage carefully and select the most appropriate option to fill in each blank.

With over 49,000 plant species (1) \_\_\_\_\_ as of 2016, India holds (2) \_\_\_\_\_ 11.5% of all the flora in the world. Now, a new first record has (3) \_\_\_\_\_ that India is the birthplace of Asian bamboo, and they (4) \_\_\_\_\_ formed about 25 million years ago in the north-eastern (5) \_\_\_\_\_ of the country.

**SubQuestion No : 25**

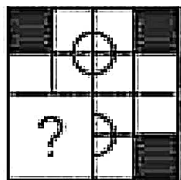
**Q.25** Select the most appropriate option to fill in blank number 5.

- Ans**
- 1. part
  - 2. beside
  - 3. tops
  - 4. at

Question ID : 26433050534  
Status : Answered  
Chosen Option : 1

**Directions:** Read the following passage carefully and answer the questions.

**Q.1** Select the figure from the given options that can replace the question mark (?) and complete the pattern.



- Ans**
- 1.
  - 2.
  - 3.
  - 4.

Question ID : 26433048763  
Status : Answered  
Chosen Option : 1

Q.2 Select the option that is related to the fourth number in the same way as the first number is related to the second number and the fifth number is related to the sixth number.

32 : 80 :: 7 : 45 :: 16 : 51

- Ans  1. 15  
 2. 12  
 3. 10  
 4. 14

Question ID : 26433040766  
Status : Answered  
Chosen Option : 4

Q.3 Select the option that is related to the third letter-cluster in the same way as the second letter-cluster is related to the first letter-cluster.

PM : RJ :: TF : ?

- Ans  1. VD  
 2. VJ  
 3. UD  
 4. UC

Question ID : 26433048549  
Status : Answered  
Chosen Option : 2

Q.4 Select the option that is related to the third letter-cluster in the same way as the second letter-cluster is related to the first letter-cluster.

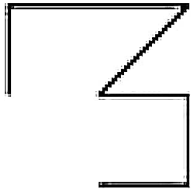
KIN : MGS :: RFB : ?

- Ans  1. THE  
 2. TCS  
 3. TGN  
 4. TCG

Question ID : 26433048775  
Status : Answered  
Chosen Option : 4

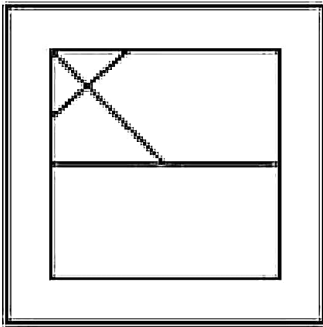


Q.5 Select the option in which the given figure is embedded (rotation is NOT allowed).

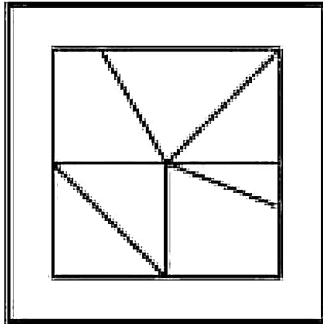


Ans

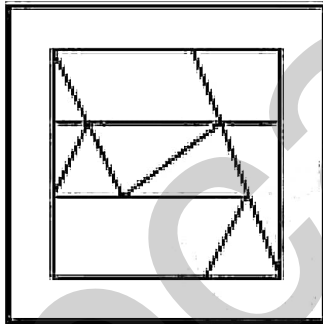
X 1.



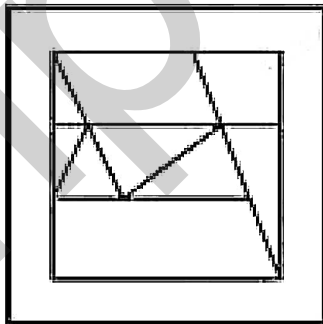
X 1.



X 1.



X 1.



Question ID : 26423047939  
Status : Answered  
Chosen Option : 2

Q.6 Which two digits need to be interchanged to make the following equation correct?

$$16 + 7 = 2 + 4 - 3 = 12$$

- Ans
- 1. 2 and 4
  - 2. 2 and 3
  - 3. 16 and 2
  - 4. 7 and 3

Question ID : 26433047900

Status : Answered

Chosen Option : 2

Q.7 Select the number from among the given options that can replace the question mark (?) in the following series.

64, 60, 57, 53, 49, ?

- Ans
- 1. 46
  - 2. 45
  - 3. 47
  - 4. 48

Question ID : 26433048593

Status : Answered

Chosen Option : 2

Q.8 In a certain code language, 'HERD' is written as 'JCSQ' and 'LOVE' is written as 'MQWG'. How will 'ROAD' be written in that language?

- Ans
- 1. SPDE
  - 2. SPSE
  - 3. SQCF
  - 4. SPDF

Question ID : 26433047922

Status : Answered

Chosen Option : 1

Q.9 In a certain code language, 'AB CD' is coded as '10', and 'EG FA' is coded as '19'. How will 'JR LF' be coded in that language?

- Ans
- 1. 40
  - 2. 36
  - 3. 34
  - 4. 44

Question ID : 26433048872

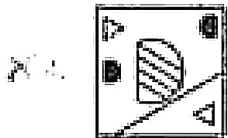
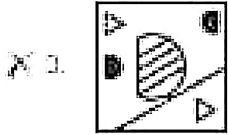
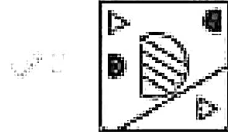
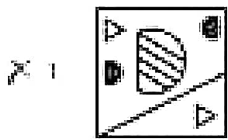
Status : Answered

Chosen Option : 3

Q.10 Select the correct mirror image of the given figure when the mirror is placed at AB as shown.



Ans

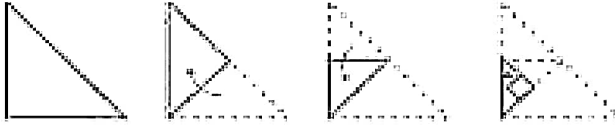


Question ID : 20433040560

Status : Answered

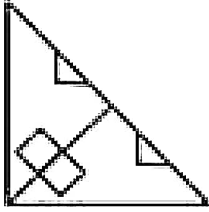
Chosen Option : 2

**Q.11** The sequence of folding a piece of paper and the manner in which the folded paper has been cut is shown in the following figures. How would this paper look when unfolded?

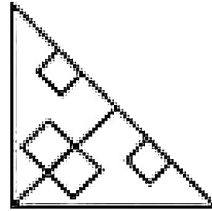


Ans

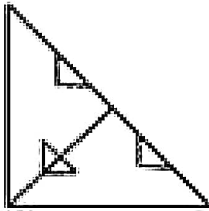
A



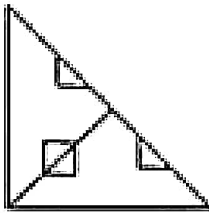
B



C



D

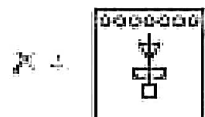
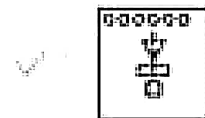


Question ID: 26433048116  
 Status: Answered  
 Chosen Option: 2

Q.12 Select the figure from among the given options that can replace the question mark (?) in the following series.



Ans



Question ID : 26433040669

Status : Answered

Chosen Option : 1

Q.13 Eight girls X, Y, Z, U, V, W, S and T are sitting around a circular table, facing towards the centre (not necessarily in the same order). X is second to the left of U. U is third to the left of V. Z is third to the right of S. S is not the immediate neighbour of V. T is third to the right of Y. Y is second to the right of S. Three out of the following four options are similar by a certain logic and form a group. Which of the following does NOT belong to that group?

Ans  A. YS

B. WV

C. ZU

D. UX

Question ID : 26433040681

Status : Answered

Chosen Option : 3

Q.14 In a certain code language, 'OVERT' is written as 'LEVIC' and 'MOKIN' is written as 'NLPRM'. How will 'NLICQ' be written in that language?

Ans  A. RQVPL

B. RQVWL

C. RQVDC

D. RQVRL

Question ID : 26433040299

Status : Answered

Chosen Option : 1

**Q.15** Read the given statements and conclusions carefully. Assuming that the information given in the statements is true, even if it appears to be at variance with commonly known facts, decide which of the given conclusions logically follow(s) from the statements.

**Statements:**

No forests are trees.  
Some trees are short.

**Conclusions:**

- I. Some forests are short.
- II. No tree is a forest.

- Ans**
- A. Both of conclusions I and II follow.
  - B. Only conclusion I follows.
  - C. Both conclusion I and II follow.
  - D. Only conclusion II follows.

Question ID : 26433047929  
Status : Answered  
Chosen Option : 2

**Q.16** In a certain code language, 'Red are sweet brown' is coded as '8 5 4 2', and 'Blue moon are white' is coded as '5 3 1 2'. What is the code for 'are' in that language?

- Ans**
- A. 2
  - B. 5
  - C. 1
  - D. 4

Question ID : 26433048545  
Status : Answered  
Chosen Option : 1

**Q.17** Select the figure from among the given options that completes the figure number 4 in the following series.



- Ans**
- A.
  - B.
  - C.
  - D.

Question ID : 26433048763  
Status : Answered  
Chosen Option : 2

Q.18 Six boys A1, A2, A3, A4, A5 and A6 are sitting around a circular table, facing towards the centre. A4 is the third to the left of A1. A5 and A3 are neighbours of A4. A6 is to the immediate right of A5. Who is sitting third from the left of A6?

- Ans
- 1. A2
  - 2. A3
  - 3. A5
  - 4. A6

Question ID : 26433048665  
Status : Answered  
Chosen Option : 2

Q.19 Identify the number that does NOT belong to the following series.

20, 10, 60, 15, 30, 90

- Ans
- 1. 15
  - 2. 10
  - 3. 60
  - 4. 90

Question ID : 26433048669  
Status : Not Attempted a  
Marked For Review  
Chosen Option : -

Q.20 Seven teachers M, N, O, P, Q, R and S take different number of tuitions. P takes more tuitions than S. M takes more tuitions than Q. R takes the second highest number of tuitions. The number of tuitions that Q takes is less than only that of four teachers. N takes less tuitions than P but more than M. Q takes the least number of tuitions. S takes the second lowest number of tuitions. In terms of the number of tuitions taken, who is between N and S?

- Ans
- 1. R, M
  - 2. R, N
  - 3. Q, P
  - 4. M, P

Question ID : 26433048682  
Status : Answered  
Chosen Option : 4

Q.21 After interchanging the given two signs and two numbers, what will be the value of the following expression?

4 and 12; + and +  
 $12 \times 4 + 3 + 6 - 2$

- Ans
- 1. 35
  - 2. 34
  - 3. 15
  - 4. 25

Question ID : 26433048664  
Status : Answered  
Chosen Option : 2

Q.22 Select the letter from among the given options that can replace the question mark (?) in the following series.

D, G, J, M, P, ?

Ans  A. I

B. H

C. T

D. U

Question ID : 26433047063

Status : Answered

Chosen Option : 2

Q.23 Select the set in which the numbers are related in the same way as are the numbers of the following sets.

(NOTE : Operations should be performed on the whole numbers, without breaking down the numbers into its constituent digits. Eg 13 - Operations on 13 such as adding /deleting /multiplying etc. to 13 can be performed. Breaking down 13 into 1 and 3 and then performing mathematical operations on 1 and 3 is NOT allowed)

{2, 3, 25}

{3, 4, 49}

Ans  A. {1, 2, 4}

B. {2, 6, 9, 36}

C. {3, 6, 6, 36}

D. {4, 6, 7, 49}

Question ID : 26433047064

Status : Answered

Chosen Option : 1

Q.24 Select the option that is related to the fifth term in the same way as the second term is related to the first term and the fourth term is related to the third term.

B 2 : F 6 :: W 11 : Q 15 :: R 18 : ?

Ans  A. 1, 10, 20

B. 2, 7, 31

C. 3, 12, 28

D. 4, 13, 32

Question ID : 26433047069

Status : Answered

Chosen Option : 4



Q.25 Read the given statements and conclusions carefully. Assuming that the information given in the statements is true, even if it appears to be at variance with commonly known facts, decide which of the given conclusions logically follow(s) from the statements.

Statements:

- I. Some M are P.
- II. All X are M.

Conclusions:

- I. Some P are X.
- II. Some P are M.
- III. No P is X.

- Ans
- 1. Only conclusion I and II follow
  - 2. Only conclusions I and III follow
  - 3. Only conclusion III follows
  - 4. None of the conclusions follow

Question ID : 26433040779

Status : Answered

Chosen Option : 1

Answered Correctly

Q.1 A boat can travel 42 km in 6 hours with a good upstream. If the speed of the stream is 2 km/h, then how much time will the boat take to travel the same distance downstream?

- Ans
- 1. 156 km
  - 2. 120 km
  - 3. 132 km
  - 4. 144 km

Question ID : 26433049926

Status : Answered

Chosen Option : 3

Q.2 The value of  $[12 \div 5 - (200 - (501 - 347 - 386))] - 2$  is:

- Ans
- 1. 82
  - 2. 111
  - 3. 61
  - 4. 62

Question ID : 26433050093

Status : Answered

Chosen Option : 2

Q.3 The perimeter of an equilateral triangle is 36 cm. What is the area of this triangle?

- Ans
- A.  $96\sqrt{3} \text{ cm}^2$
  - B.  $36\sqrt{3} \text{ cm}^2$
  - C.  $24\sqrt{3} \text{ cm}^2$
  - D.  $27\sqrt{3} \text{ cm}^2$

Question ID : 26433049505

Status : Answered

Chosen Option : 2

Q.4 A word is formed by rearranging the letters of the word 'MATHS'. If they were not repeated for each case the number of such words is

- Ans
- A. 2
  - B. 3
  - C. 4
  - D. 5
  - E. 6
  - F. 7
  - G. 8
  - H. 9
  - I. 10
  - J. 11

Question ID : 26433040260

Status : Answered

Chosen Option : 4

Q.5 The average of 11 observations is 10, that of the last 6 being 9 and that of the first 6 being 11. What is the 11<sup>th</sup> observation?

- Ans
- A. 11
  - B. 8
  - C. 9
  - D. 10

Question ID : 26433040373

Status : Answered

Chosen Option : 4

Q.6 If  $0.04 : 0.06 :: 0.06 : A$ , then what is the value of A?

- Ans
- A. 0.05
  - B. 0.08
  - C. 0.06
  - D. 0.09

Question ID : 26433049900

Status : Answered

Chosen Option : 4

Q.7

If  $A = \frac{1}{2} + \frac{1}{3} + \frac{1}{4} + \frac{1}{5} + \frac{1}{6}$  and  $B = \frac{6}{6} + \frac{5}{5} + \frac{4}{4} + \frac{3}{3} + \frac{2}{2}$ , then what is the value of  $(A - B)^2$ ?

Ans

A.  $\frac{1}{5}$

B.  $\frac{11}{60}$

C.  $\frac{33}{35}$

D.  $\frac{25}{36}$

Question ID : 26433049930

Status : Answered

Chosen Option : 2

Q.8

The machine can process at a rate of 60000 bits (bytes) per second for a period of 2 years 6 months (approximately).

Ans

A. 37,222

B. 37,623

C. 37,852

D. 37,546

Question ID : 26433049931

Status : Answered

Chosen Option : 2

Q.9

Point A(6, 4) and B(2, 1) are vertices of a triangle ABC. The third vertex C lies on the line  $2x + 3y = 10$ . What is the area of the triangle ABC (in square units)?

Ans

A. 4/3

B. 6/7

C. 6/11

D. 8/3

Question ID : 26433049936

Status : Answered

Chosen Option : 3

Q.10 On an 18% discount sale, an article costs ₹6,560. What is the marked price of the article?

- Ans
- A. ₹8,800
  - B. ₹7,000
  - C. ₹8,000
  - D. ₹7,500

Question ID : 26433049328  
Status : Answered  
Chosen Option : 3

Q.11 The diagonal of a rhombus is 12 cm long and it is twice as long as one of the sides of the rhombus. What is the area of the rhombus?

- Ans
- A.  $25\sqrt{3}$  cm<sup>2</sup>
  - B.  $30\sqrt{3}$  cm<sup>2</sup>
  - C.  $36\sqrt{3}$  cm<sup>2</sup>
  - D.  $42\sqrt{3}$  cm<sup>2</sup>

Question ID : 26433050115  
Status : Answered  
Chosen Option : 3

Q.12 4 boys or 7 girls can complete a piece of work in 16 days. How many days will 12 boys and 21 girls together take to complete the job?

- Ans
- A. 3 days
  - B. 4 days
  - C. 6 days
  - D. 5 days

Question ID : 26433050266  
Status : Answered  
Chosen Option : 1

Q.13 The number of boys in a class is 40% of the total number of students in the class. If the number of girls in the class is 24, then what is the number of boys in the class?

- Ans
- A. 27
  - B. 21
  - C. 30
  - D. 24

Question ID : 26433049300  
Status : Answered  
Chosen Option : 1

**Q.14** A white square with a side length of 21 cm is inscribed and divided into a regular pyramid of height 12 cm. If the area of the pyramid is  $18\sqrt{3}$  cm<sup>2</sup>, what is the length of each edge of the base of the pyramid? [1.5 × 3 = 4.5]

- Ans**
- A. 68 cm
  - B. 85 cm
  - C. 42 cm
  - D. 48 cm

Question ID : 26433050242  
Status : Answered  
Chosen Option : 3

**Q.15** 120 apples, 240 oranges and 180 pears are packed in boxes in such a way that each box contains the same number of fruits. Each box contains only one type of fruit, and the fruit is left in a packet. What is the smallest possible number of boxes required to do the job?

- Ans**
- A. 50
  - B. 40
  - C. 17
  - D. 30

Question ID : 26433049270  
Status : Answered  
Chosen Option : 3

**Q.16** Two mixers and one TV cost ₹900, while two TVs and one mixer cost ₹700. The cost of one TV is:

- Ans**
- A. ₹100
  - B. ₹400
  - C. ₹300
  - D. ₹200

Question ID : 26433049276  
Status : Answered  
Chosen Option : 3

Q.17 The following table shows the number of pairs of shoes of different brands sold by a department store in West.

Brand	Number
B1	45
B2	50
B3	60
B4	30
B5	70
B6	40

The department store found B5 was the number of pairs of shoes sold of B5 are 20% more than the average number of shoes sold of the other 5 brands. What is the number of shoes sold of B2?

- Ans
- A 1. 65
  - A 2. 76
  - A 3. 71
  - A 4. 66

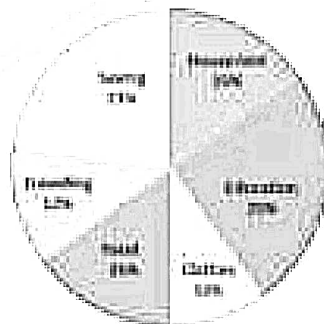
Question ID : 26433050015  
 Status : Answered  
 Chosen Option : 4

Q.18 The average of seven numbers is 20. If 2 is subtracted from each number, then what will be the new average?

- Ans
- A 1. 22
  - A 2. 10
  - A 3. 9
  - A 4. 18

Question ID : 26433040577  
 Status : Answered  
 Chosen Option : 4

Q.19 The following pie chart shows the expenditure of Anshu on various items. In this pie chart, the percentage of his income is

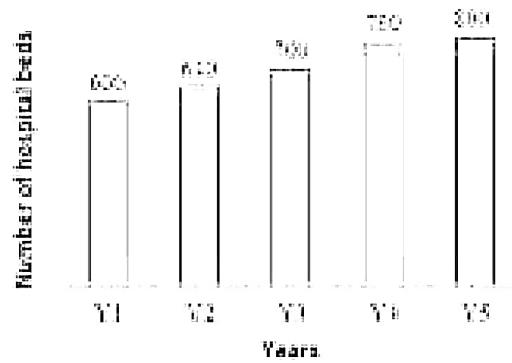


If the expenditure of Anshu on Food is ₹15,000, then what would his income be?

- Ans
- A 1. ₹31,200
  - A 2. ₹26,400
  - A 3. ₹27,600
  - A 4. ₹33,000

Question ID : 26433050114  
 Status : Answered  
 Chosen Option : 3

Q.20 The following bar chart shows the number of hospital beds in a state in 5 consecutive years.



The number of hospital beds in Y6 will be 20% more than the number of such beds in Y5, and the number of hospital beds in Y7 will be 25% more than the number of such beds in Y6. What is the ratio of the number of hospital beds in Y2 to the number of hospital beds in Y7?

- Ans
- A. 16 : 31
  - B. 8 : 15
  - C. 2 : 7
  - D. 4 : 7

Question ID : 26433040041  
 Status : Answered  
 Chosen Option : 2

Q.21 A, B = 13 : 17 and A is 20% more than C. If B is 15% less than D, then C is what percentage of D?

- Ans
- A. 47.50%
  - B. 50%
  - C. 52.50%
  - D. 53%

Question ID : 26433049501  
 Status : Answered  
 Chosen Option : 2

Q.22 The average weight of all the 480 employees in an office is 55 kg. If the  $\frac{1}{4}$  of the employees are females and the ratio of the average weight of males to that of a female is 7 : 4. Find the average weight of the female employees.

- Ans
- A. 60 kg
  - B. 54 kg
  - C. 55 kg
  - D. 59 kg

Question ID : 26433050223  
 Status : Answered  
 Chosen Option : 3

Q.23 The population of a town is increasing at the rate of 10% per year. If the present population of the town is 1,00,000, what will its population be 2 years from now?

- Ans
- A. 3,00,000
  - B. 1,21,000
  - C. 2,10,000
  - D. 1,20,000

Question ID : 26433049282

Status : Answered

Chosen Option : 2

Q.24 The price of an article is 20% below its real price. If the cost of 24 articles would have been a profit of 20%. What is the original selling price of the article?

- Ans
- A. ₹700
  - B. ₹500
  - C. ₹900
  - D. ₹800

Question ID : 26433050102

Status : Answered

Chosen Option : 4

Q.25 The sum of the angles of two triangles is equal to  $200^\circ$ . If there are 20 triangles in the collection, then what is the difference between the number of triangles and the sum of the angles?

- Ans
- A. 50
  - B. 80
  - C. 40
  - D. 60

Question ID : 26433050005

Status : Answered

Chosen Option : 4

Q.26. In which state is...

Q.1 In which state of India is Sekrenyi Festival celebrated?

- Ans
- A. Tripura
  - B. Rajasthan
  - C. Tamil Nadu
  - D. Bihar

Question ID : 26433047306

Status : Not Answered

Chosen Option : --



Q.2 \_\_\_\_\_ is an Indian sport in which a "raider" enters the opposite team's half to tag opponents, without taking a breath.

- Ans
- 1. Kho-Kho
  - 2. Kabaddi
  - 3. Muaythai
  - 4. Throwing

Question ID : 26433047016  
Status : Answered  
Chosen Option : 2

Q.3 Who among the following is popularly known as 'Panchanada'?

- Ans
- 1. Zakir Hussain
  - 2. Jagjit Singh
  - 3. AR Rahman
  - 4. Usha Uthman

Question ID : 26433046736  
Status : Not Answered  
Chosen Option : -

Q.4 With respect to the seasons in India, the term 'Kaal Baisakhi' is related to which of the following states in India?

- Ans
- 1. West Bengal
  - 2. Karnataka
  - 3. Punjab
  - 4. Kerala

Question ID : 26433047503  
Status : Not Answered  
Chosen Option : -

Q.5 Which of the following is the earliest form of Veda?

- Ans
- 1. Atharva Veda
  - 2. Sama Veda
  - 3. Yajur Veda
  - 4. Rig Veda

Question ID : 26433046731  
Status : Answered  
Chosen Option : 4

Q.6 Who among the following has been appointed as India's Foreign Secretary effective from 1 May 2022?

- Ans  1. Ajay Kumar K. Lamba
2. Harsh Vardhan Shringla
3. Subrahmanyan Jaishankar
4. S. Jaishankar

Question ID : 26433046749  
Status : Answered  
Chosen Option : 1

Q.7 As per Census 2011, which of the following states of India has the lowest literacy rate?

- Ans  1. Kerala
2. Andhra Pradesh
3. Tamil Nadu
4. Bihar

Question ID : 26433046979  
Status : Answered  
Chosen Option : 4

Q.8 'Mudiyettu' is a traditional folk theatre form of which Indian state?

- Ans  1. Manipal
2. Kerala
3. Andhra Pradesh
4. Assam

Question ID : 26433047379  
Status : Answered  
Chosen Option : 2

Q.9 Ratiati Bhaia, recipient of Kalidas Samman was associated with which classical dance of India?

- Ans  1. Odissi
2. Manipuri
3. Sattriya
4. Bharata

Question ID : 26433047512  
Status : Not Answered  
Chosen Option : -

Q.10 As announced in the Union Budget of Financial Year 2022, income from virtual digital assets will be taxed at \_\_\_\_\_.

- Ans
- A. 1.25%
  - B. 2.25%
  - C. 3.25%
  - D. 30%

Question ID : 26433046742  
Status : Answered  
Chosen Option : 2

Q.11 Vinod talks about the only planet with liquid water on the surface. Which of the following planets is he talking about?

- Ans
- A. Earth
  - B. Venus
  - C. Mars
  - D. Saturn

Question ID : 26433046676  
Status : Answered  
Chosen Option : 1

Q.12 Which of the following cell organelles functions both as a passageway for intracellular transport and as a manufacturing surface?

- Ans
- A. Golgi Apparatus
  - B. Lysosome
  - C. Mitochondria
  - D. Endoplasmic Reticulum

Question ID : 26433047499  
Status : Not Answered  
Chosen Option : -

Q.13 Which of the following is a famous example of a temple built in complete Dravidian style?

- Ans
- A. Hoysaleswara Temple, Karnataka
  - B. Viratnagar Mahadev Temple at Shimoga
  - C. Kamakhya Temple at Guwahati
  - D. Rajeswara Temple at Halebidu

Question ID : 26433046672  
Status : Not Answered  
Chosen Option : -

Q.14 Who among the following began the Suddhi Movement, which enabled the Hindus who had accepted Islam or Christianity to return to Hinduism, their original faith?

- Ans
- 1. Ramakrishna Paramahansa
  - 2. Keshava Chandra Sen
  - 3. Narendra Mohi Dasg
  - 4. Prayag Chandra

Question ID : 26433047509  
Status : Not Answered  
Chosen Option : --

Q.15 Which of the following is NOT a part of the Preamble of India?

- Ans
- 1. Liberty
  - 2. Equality
  - 3. Fraternity
  - 4. Justice

Question ID : 26433046689  
Status : Answered  
Chosen Option : 3

Q.16 Who among the following was the first Muslim woman ruler of medieval India from 1296 to 1249 AD?

- Ans
- 1. Razia Sultana
  - 2. Sultana Chand Bibi
  - 3. Razia Mangayama
  - 4. Begum Samru

Question ID : 26433046682  
Status : Answered  
Chosen Option : 1

Q.17 New Zealand defeated India in the finals of the Inaugural World Test Championship in June 2021. Which country hosted this match?

- Ans
- 1. South Africa
  - 2. England
  - 3. Australia
  - 4. New Zealand

Question ID : 26433047315  
Status : Answered  
Chosen Option : 2

Q.18 What was the former name of the Yamuna Expressway Project constructed in Uttar Pradesh, India?

- Ans
- 1. Parvati Expressway
  - 2. Yamuna Expressway
  - 3. Nanda-Devi Expressway
  - 4. Kosi Expressway

Question ID : 26433046577

Status : Not Answered

Chosen Option : -

Q.19 'Straight from the Heart' is the autobiography of which of the following famous personalities?

- Ans
- 1. Sachin Tendulkar
  - 2. Rahul Dravid
  - 3. Kapil Dev
  - 4. Sunil Gavaskar

Question ID : 26433046735

Status : Not Answered

Chosen Option : -

Q.20 Which of the following is the correct chemical formula of sodium aluminate?

- Ans
- 1.  $\text{NaAlO}_2$
  - 2.  $\text{Na}_2\text{AlO}$
  - 3.  $\text{NaAlO}_3$
  - 4.  $\text{Na}_2\text{AlO}_3$

Question ID : 26433047398

Status : Answered

Chosen Option : 4

Q.21 How many laws were repealed under the Farm Laws Repeal Bill, 2021?

- Ans
- 1. Two
  - 2. Three
  - 3. Four
  - 4. One

Question ID : 26433046669

Status : Answered

Chosen Option : 3

Q.22 The movement of people across regions and territories is called \_\_\_\_\_.

- Ans  1. Demoralisation  
 2. Migration  
 3. Mobility  
 4. Demographic Transition

Question ID : 26433047630  
Status : Answered  
Chosen Option : 2

Q.23 Which of the following statements is correct?

- I. Robert Clive had come to Madras from England in 1743 at the age of 18.  
II. After the battle of Buxar, the East India Company appointed Residents in Indian states.

- Ans  1. Only I  
 2. Neither I nor II  
 3. Only II  
 4. Both I and II

Question ID : 26433047334  
Status : Not Answered  
Chosen Option : --

Q.24 Which of the following statements is correct regarding 'Arthropoda'?

- I. These animals are bilaterally symmetrical.  
II. They have jointed legs.

- Ans  1. Both I and II  
 2. Neither I nor II  
 3. Only I  
 4. Only II

Question ID : 26433047325  
Status : Not Answered  
Chosen Option : --

Q.25 Article 280 of the Constitution of India talks about which constitutional body?

- Ans  1. Grants and Service Tax Council  
 2. Election Commission of India  
 3. Attorney General of India  
 4. Finance Commission

Question ID : 26433047514  
Status : Not Answered  
Chosen Option : --