

SSC MTS 2023 Tier 1 Sept 8 Shift 1 Question Paper with Answers

Roll Number	
Candidate Name	
Exam Date	08/09/2023
Exam Time	9:00 AM - 11:00 AM
Subject	MTS Non Tech Havaladar CBIC and CBN Examination 2023 Extra Time

Section : Numerical and Mathematical Ability

Q.1 There are 48 students in a class. Their average weight is 48 kg. When one student leaves the class, the average weight reduces by 200 grams. What is the weight of the student who left the class?

- Ans**
- 1. 57.4 kg
 - 2. 54.7 kg
 - 3. 45.7 kg
 - 4. 47.5 kg

Question ID : 264330156547

Option 1 ID : 264330613578

Option 2 ID : 264330613576

Option 3 ID : 264330613575

Option 4 ID : 264330613577

Status : Answered

Chosen Option : 2

Q.2 Following marks are obtained by a student in five subjects.

Subjects	Marks (out of 50)
CS	49
History	41
English	49
Science	44
Social Science	47

What is the percentage of marks scored by the student?

- Ans
- 1. 92.5%
 - 2. 45%
 - 3. 93%
 - 4. 92%

Question ID : 264330156537
Option 1 ID : 264330613536
Option 2 ID : 264330613538
Option 3 ID : 264330613537
Option 4 ID : 264330613535
Status : Answered
Chosen Option : 1

Q.3 Simplify:

$$3\frac{2}{7} + 3\frac{2}{11} \times 3\frac{1}{7} \div 4\frac{1}{3}$$

- Ans
- 1. $7\frac{54}{91}$
 - 2. $9\frac{54}{91}$
 - 3. $5\frac{54}{91}$
 - 4. $3\frac{54}{91}$

Question ID : 264330155721
Option 1 ID : 264330610289
Option 2 ID : 264330610290
Option 3 ID : 264330610288
Option 4 ID : 264330610287
Status : Answered
Chosen Option : 2

Q.4 A deposited ₹62,500 at the rate of 8% per annum compounded half yearly, then what is the compound interest at the end of two years?

- Ans**
- 1. ₹18,161.12
 - 2. ₹12,171.72
 - 3. ₹10,821.18
 - 4. ₹10,616.16

Question ID : 264330154090
Option 1 ID : 264330603825
Option 2 ID : 264330603826
Option 3 ID : 264330603823
Option 4 ID : 264330603824
Status : Answered
Chosen Option : 1

Q.5 A man and woman working on alternate days can finish a work in 15 days if the man works on the first day. The same work is finished in 14.5 days if they work on alternate days and if the woman starts on the first day. The work will be finished by a man alone in ____ days.

- Ans**
- 1. 25
 - 2. 21
 - 3. 15
 - 4. 22

Question ID : 264330153816
Option 1 ID : 264330602730
Option 2 ID : 264330602728
Option 3 ID : 264330602727
Option 4 ID : 264330602729
Status : Answered
Chosen Option : 2

Q.6 If the cost price of 12 mangoes is equal to the selling price of 16 mangoes, then the loss percentage is:

- Ans**
- 1. 25%
 - 2. 4%
 - 3. 20%
 - 4. 33%

Question ID : 264330153871
Option 1 ID : 264330602948
Option 2 ID : 264330602947
Option 3 ID : 264330602949
Option 4 ID : 264330602950
Status : Answered
Chosen Option : 4

Q.7 A boat covers a distance of 65 km downstream in 5 hours while it takes 13 hours to cover the same distance upstream.
What is the speed of the boat in still water?

- Ans**
- 1. 8 km/h
 - 2. 11 km/h
 - 3. 6 km/h
 - 4. 9 km/h

Question ID : 264330154093
Option 1 ID : 264330603838
Option 2 ID : 264330603836
Option 3 ID : 264330603835
Option 4 ID : 264330603837
Status : Answered
Chosen Option : 3

Q.8 There are two varieties of rice. Variety 1 costs ₹100 per kg and variety 2 costs ₹120 per kg. The vendor mixed both the varieties and sold for ₹121 per kg and gained 10%. Find the ratio of variety 1 to variety 2 rice in the mixture.

- Ans**
- 1. 1 : 1
 - 2. 3 : 1
 - 3. 2 : 1
 - 4. 1 : 3

Question ID : 264330153837
Option 1 ID : 264330602812
Option 2 ID : 264330602814
Option 3 ID : 264330602813
Option 4 ID : 264330602811
Status : Answered
Chosen Option : 4

Q.9 The average weight of A, B and C is 43 kg. If the average weight of A and B is 40 kg and that of B and C is 41 kg, then the weight (in kg) of B is?

- Ans**
- 1. 41
 - 2. 43
 - 3. 33
 - 4. 37

Question ID : 264330156509
Option 1 ID : 264330613425
Option 2 ID : 264330613426
Option 3 ID : 264330613423
Option 4 ID : 264330613424
Status : Answered
Chosen Option : 1

Q.10 Vinita obtained an amount of ₹23,340 as simple interest on a certain amount at 15% per annum after 8 years. What was the amount invested by Vinita?

- Ans**
- 1. ₹20,450
 - 2. ₹18,650
 - 3. ₹17,490
 - 4. ₹19,450

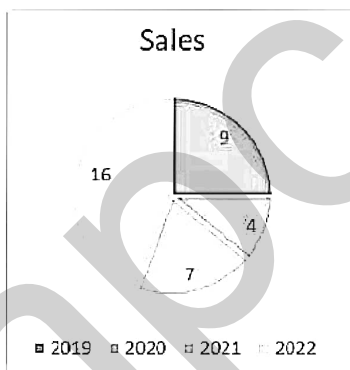
Question ID : 264330156187
Option 1 ID : 264330612150
Option 2 ID : 264330612148
Option 3 ID : 264330612147
Option 4 ID : 264330612149
Status : Answered
Chosen Option : 4

Q.11 The largest three-digit number which gives the same remainder 2 when divided by 3, 5 and 9 is _____.

- Ans**
- 1. 980
 - 2. 992
 - 3. 995
 - 4. 990

Question ID : 264330156249
Option 1 ID : 264330612398
Option 2 ID : 264330612395
Option 3 ID : 264330612397
Option 4 ID : 264330612396
Status : Answered
Chosen Option : 2

Q.12 Consider the sales of a company in the year 2019, 2020, 2021 and 2022 given in the pie chart.



The difference in angles at the centre by sales in 2022 and 2019 is _____ degrees.

- Ans**
- 1. 50
 - 2. 80
 - 3. 60
 - 4. 70

Question ID : 264330153822
Option 1 ID : 264330602751
Option 2 ID : 264330602754
Option 3 ID : 264330602752
Option 4 ID : 264330602753
Status : Answered
Chosen Option : 2

Q.13 A can complete a piece of work in 20 days. B can complete the same work in 36 days. If A and B work together, then the number of days required to complete the work is:

- Ans**
- 1. $10\frac{6}{7}$
 - 2. $12\frac{6}{7}$
 - 3. $12\frac{1}{7}$
 - 4. $10\frac{1}{7}$

Question ID : 264330156492
Option 1 ID : 264330613355
Option 2 ID : 264330613358
Option 3 ID : 264330613356
Option 4 ID : 264330613357
Status : Answered
Chosen Option : 3

Q.14 What is the fourth proportional to 816, 226, 408?

- Ans**
- 1. 108
 - 2. 103
 - 3. 113
 - 4. 117

Question ID : 264330154086
Option 1 ID : 264330603807
Option 2 ID : 264330603809
Option 3 ID : 264330603810
Option 4 ID : 264330603808
Status : Answered
Chosen Option : 1

Q.15 If the price of a product is decreased by 50%, then increased by 50% and then again increased by 50%, what is the net increase percentage in the price?

- Ans**
- 1. 13.5%
 - 2. 11.5%
 - 3. 12.5%
 - 4. 9.5%

Question ID : 264330156516
Option 1 ID : 264330613453
Option 2 ID : 264330613451
Option 3 ID : 264330613454
Option 4 ID : 264330613452
Status : Answered
Chosen Option : 3

Q.16 The marks scored by a student are directly proportional to the time invested in studies. If the student gets 60 marks when he studies 4 hours a day, then how many hours he should use in his studies daily to get 75 marks?

- Ans**
- 1. 4.5
 - 2. 5
 - 3. 5.5
 - 4. 6

Question ID : 264330153810
Option 1 ID : 264330602703
Option 2 ID : 264330602705
Option 3 ID : 264330602704
Option 4 ID : 264330602706
Status : Answered
Chosen Option : 2

Q.17 The distance covered (in km) by a bus in 55 minutes at a speed of 69 km/h is:

- Ans**
- 1. 67.75
 - 2. 63.25
 - 3. 65.25
 - 4. 60.75

Question ID : 264330156488
Option 1 ID : 264330613341
Option 2 ID : 264330613342
Option 3 ID : 264330613339
Option 4 ID : 264330613340
Status : Answered
Chosen Option : 1

Q.18 The cost price of an item is ₹4,850. What is the profit percentage (rounded off to 1 decimal place) if it is sold at ₹6,680?

- Ans**
- 1. 44.6%
 - 2. 37.7%
 - 3. 39.5%
 - 4. 35.5%

Question ID : 264330163010
Option 1 ID : 264330639356
Option 2 ID : 264330639358
Option 3 ID : 264330639357
Option 4 ID : 264330639355
Status : Answered
Chosen Option : 2

Q.19 The radius of a cone is 10.5 cm and the area of the curved surface is 396 cm^2 . Find its slant height.

Take $\pi = \frac{22}{7}$

- Ans**
- 1. 9 cm
 - 2. 11.5 cm
 - 3. 12 cm
 - 4. 8.5 cm

Question ID : 264330156371
Option 1 ID : 264330612884
Option 2 ID : 264330612885
Option 3 ID : 264330612886
Option 4 ID : 264330612883
Status : Answered
Chosen Option : 2

Q.20 Find the volume of a cuboid whose dimensions are 12.2 cm, 16 cm and 8.5 cm.

- Ans**
- 1. 3072 cm^3
 - 2. 1659.2 cm^3
 - 3. 832 cm^3
 - 4. 1664 cm^3

Question ID : 264330156087
Option 1 ID : 264330611749
Option 2 ID : 264330611748
Option 3 ID : 264330611747
Option 4 ID : 264330611750
Status : Answered
Chosen Option : 4

Section : Reasoning Ability and Problem Solving

Q.1 What should come in place of ? in the given series based on the English alphabetical order?

ICU, FAT, CYS, ZWR, ?

- Ans**
- 1. VTR
 - 2. VST
 - 3. WVS
 - 4. WUQ

Question ID : 264330155778
Option 1 ID : 264330610517
Option 2 ID : 264330610516
Option 3 ID : 264330610515
Option 4 ID : 264330610518
Status : Answered
Chosen Option : 4

Q.2 In a certain code language, 'YOU' is coded as '20' and 'LIP' is coded as '44'. What is the code for 'ROB' in the given code language?

- Ans**
- 1. 44
 - 2. 46
 - 3. 41
 - 4. 42

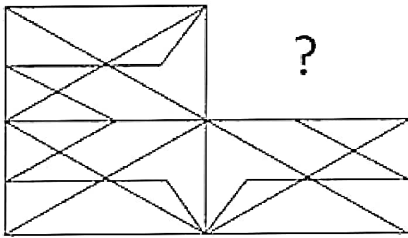
Question ID : 264330155820
Option 1 ID : 264330610683
Option 2 ID : 264330610684
Option 3 ID : 264330610686
Option 4 ID : 264330610685
Status : Answered
Chosen Option : 2

Q.3 In the following number-pairs, the second number is obtained by applying certain mathematical operations to the first number. Select the set in which the numbers are related in the same way as are the numbers of the following sets.
(NOTE: Operations should be performed on the whole numbers, without breaking down the numbers into its constituent digits. E.g. 13 – Operations on 13 such as adding / subtracting / multiplying etc. to 13 can be performed. Breaking down 13 into 1 and 3 and then performing mathematical operations on 1 and 3 is not allowed)
7, 13
18, 35

- Ans**
- 1. 77, 98
 - 2. 22, 43
 - 3. 32, 64
 - 4. 44, 76

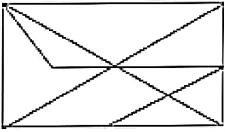
Question ID : 264330151624
Option 1 ID : 264330594126
Option 2 ID : 264330594123
Option 3 ID : 264330594124
Option 4 ID : 264330594125
Status : Answered
Chosen Option : 2

Q.4 Identify the figure that completes the pattern (rotation is NOT allowed).

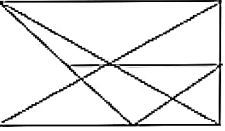


Ans

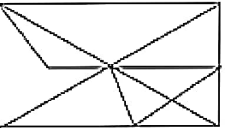
✓ 1.



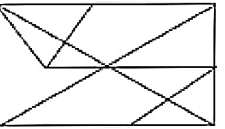
✗ 2.



✗ 3.



✗ 4.



Question ID : 264330154519

Option 1 ID : 264330605541

Option 2 ID : 264330605540

Option 3 ID : 264330605539

Option 4 ID : 264330605542

Status : Answered

Chosen Option : 1

Q.5 What should come in place of ? in the given series based on the English alphabetical order?

TEO, RCM, PAK, NYI, ?

Ans ✗ 1. KVH

✗ 2. KUH

✗ 3. LVG

✓ 4. LWG

Question ID : 264330155769

Option 1 ID : 264330610481

Option 2 ID : 264330610480

Option 3 ID : 264330610479

Option 4 ID : 264330610482

Status : Answered

Chosen Option : 4

Q.6 Which figure should replace the question mark (?) if the following figure series were to be continued?

K		R		4		2							
R	S	A	Q	4	S	2	K	A	R	S	K		?
Q		4	K		A	R		S	4		A		

Ans

X 1.

A			
G	R	S	
2		4	

X 2.

4			
G	2	A	
S		K	

✓ 3.

S			
G	4	A	
2		K	

X 4.

4			
G	A	S	
2		K	

Question ID : 264330154759
Option 1 ID : 264330606500
Option 2 ID : 264330606501
Option 3 ID : 264330606499
Option 4 ID : 264330606502
Status : Answered
Chosen Option : 4

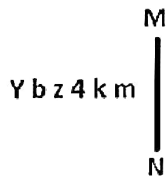
Q.7 If G means '+', C means '×', D means '+', B means '-', then what will come in place of the question mark (?) in the following equation?

$$13 C 8 G 45 B 22 D 2 = ?$$

- Ans**
- X 1. 78
X 2. 62
✓ 3. 70
X 4. 55

Question ID : 264330154682
Option 1 ID : 264330606194
Option 2 ID : 264330606192
Option 3 ID : 264330606193
Option 4 ID : 264330606191
Status : Answered
Chosen Option : 3

Q.8 Select the correct mirror image of the given figure when the mirror is placed at MN as shown below.



- Ans**
- 1. m k 4 z q A
 - 2. m k 4 z b Y
 - 3. w k 4 z d Y
 - 4. m k 4 z d Y

Question ID : 264330151513

Option 1 ID : 264330593682

Option 2 ID : 264330593681

Option 3 ID : 264330593679

Option 4 ID : 264330593680

Status : Answered

Chosen Option : 4

Q.9 Select the word-pair that best represents a similar relationship to the one expressed in the pair of words given below.

(The words must be considered as meaningful English words and must not be related to each other based on the number of letters/number of consonants/vowels in the word)

Cricket : Pitch

- Ans**
- 1. Wrestling : Track
 - 2. Ship : Dock
 - 3. Boxing : Ring
 - 4. Boat : Harbour

Question ID : 264330154633

Option 1 ID : 264330605998

Option 2 ID : 264330605995

Option 3 ID : 264330605997

Option 4 ID : 264330605996

Status : Answered

Chosen Option : 3

Q.10 The position of how many letters will remain unchanged if each of the letter in the word 'POCKET' is arranged in alphabetical order?

- Ans**
- 1. Two
 - 2. Five
 - 3. Three
 - 4. One

Question ID : 264330154322

Option 1 ID : 264330604752

Option 2 ID : 264330604754

Option 3 ID : 264330604753

Option 4 ID : 264330604751

Status : Answered

Chosen Option : 2

Q.11 What should come in place of ? in the given series?

73 75 77 79 81 ?

- Ans
- 1. 82
 - 2. 83
 - 3. 85
 - 4. 84

Question ID : 264330151540
Option 1 ID : 264330593787
Option 2 ID : 264330593788
Option 3 ID : 264330593790
Option 4 ID : 264330593789
Status : Answered
Chosen Option : 2

Q.12 Seven people, U, M, K, G, B, R and D are sitting in a straight line, facing south. Only two people sit to the left of B. M sits third to the right of G. U is the immediate neighbour of M and B. D sits to the immediate left of K.

Total how many people sit between D and G?

- Ans
- 1. Two
 - 2. Three
 - 3. One
 - 4. Four

Question ID : 264330161695
Option 1 ID : 264330634108
Option 2 ID : 264330634109
Option 3 ID : 264330634107
Option 4 ID : 264330634110
Status : Answered
Chosen Option : 2

Q.13 What should come in place of ? in the given series based on the English alphabetical order?

GUN, DWM, AYL, XAK, ?

- Ans
- 1. VCI
 - 2. VBH
 - 3. UCJ
 - 4. UBI

Question ID : 264330155805
Option 1 ID : 264330610625
Option 2 ID : 264330610623
Option 3 ID : 264330610624
Option 4 ID : 264330610626
Status : Answered
Chosen Option : 3

Q.14 In a certain code language, 'ATOM' is coded as '9613' and 'BOAT' is coded as '1938'. What is the code for 'B' in the given code language?

- Ans**
- 1. 9
 - 2. 8
 - 3. 3
 - 4. 1

Question ID : 264330151705
Option 1 ID : 264330594449
Option 2 ID : 264330594448
Option 3 ID : 264330594447
Option 4 ID : 264330594450
Status : Answered
Chosen Option : 2

Q.15 Read the given statements and conclusions carefully. You have to take the given statements to be true even if they seem to be at variance from commonly known facts. You have to decide which conclusion/s logically follow/s from the given statements.

Statements: All people are tall. Some tall are buildings. No buildings are clocks.

Conclusion I: Some people are buildings.

Conclusion II: No clocks are buildings.

- Ans**
- 1. Only conclusion (II) is follow.
 - 2. Neither conclusion (I) nor (II) is follow.
 - 3. Both conclusions (I) and (II) are follow.
 - 4. Only conclusion (I) is follow.

Question ID : 264330155920
Option 1 ID : 264330611084
Option 2 ID : 264330611085
Option 3 ID : 264330611086
Option 4 ID : 264330611083
Status : Answered
Chosen Option : 1

Q.16 If 'I' stands for '+', 'J' stands for '×', 'K' stands for '÷' and 'L' stands for '-', what will come in place of the question mark (?) in the following equation?
 $119 I (7 J 3) L (50 K 5) L 45 = ?$

- Ans**
- 1. 85
 - 2. 80
 - 3. 75
 - 4. 70

Question ID : 264330151804
Option 1 ID : 264330594844
Option 2 ID : 264330594843
Option 3 ID : 264330594846
Option 4 ID : 264330594845
Status : Answered
Chosen Option : 3

Q.17 In the following number-pairs, the second number is obtained by applying certain mathematical operations to the first number. Select the set in which the numbers are related in the same way as are the numbers of the following sets.

53, 90

79, 116

(NOTE: Operations should be performed on the whole numbers, without breaking down the numbers into its constituent digits. E.g. 13 – Operations on 13 such as adding / subtracting / multiplying etc. to 13 can be performed. Breaking down 13 into 1 and 3 and then performing mathematical operations on 1 and 3 is not allowed)

Ans ✓ 1. 47, 84

✗ 2. 31, 94

✗ 3. 59, 98

✗ 4. 42, 59

Question ID : 264330154501

Option 1 ID : 264330605470

Option 2 ID : 264330605467

Option 3 ID : 264330605469

Option 4 ID : 264330605468

Status : Answered

Chosen Option : 1

Q.18 What should come in place of '?' in the given series?

11 32 74 158 326 ?

Ans ✓ 1. 662

✗ 2. 674

✗ 3. 625

✗ 4. 648

Question ID : 264330151474

Option 1 ID : 264330593525

Option 2 ID : 264330593526

Option 3 ID : 264330593523

Option 4 ID : 264330593524

Status : Answered

Chosen Option : 1

Q.19 Read the given statements and conclusions carefully. You have to take the given statements to be true even if they seem to be at variance from commonly known facts. You have to decide which conclusion's logically follow's from the given statements.

Statements: Some combs are wood. Some wood are tables. Some tables are plastic.

Conclusion I: Some wood are combs.

Conclusion II: All plastic are tables.

Ans ✗ 1. Only conclusion (II) is follow.

✗ 2. Both conclusions (I) and (II) are follow.

✓ 3. Only conclusion (I) is follow.

✗ 4. Neither conclusion (I) nor (II) is follow.

Question ID : 264330155901

Option 1 ID : 264330611008

Option 2 ID : 264330611010

Option 3 ID : 264330611007

Option 4 ID : 264330611009

Status : Answered

Chosen Option : 3

Q.20 What should come in place of ? in the given series?

23 28 38 53 73 ?

- Ans
- 1. 95
 - 2. 91
 - 3. 101
 - 4. 98

Question ID : 264330151713
Option 1 ID : 264330594480
Option 2 ID : 264330594482
Option 3 ID : 264330594479
Option 4 ID : 264330594481
Status : Answered
Chosen Option : 4

Section : General Awareness

Q.1 Which Indian Mass Movement began with the famous 'Dandi March' of Mahatma Gandhi?

- Ans
- 1. Civil Disobedience Movement
 - 2. Non-Cooperation Movement
 - 3. Quit India Movement
 - 4. Kheda Movement

Question ID : 264330162326
Option 1 ID : 264330636633
Option 2 ID : 264330636632
Option 3 ID : 264330636631
Option 4 ID : 264330636634
Status : Answered
Chosen Option : 1

Q.2 Whose autobiography is titled 'An Unsuitable Boy'?

- Ans
- 1. Karan Johar
 - 2. Aditya Chopra
 - 3. Hansal Mehta
 - 4. Sanjay Kapoor

Question ID : 264330155448
Option 1 ID : 264330609197
Option 2 ID : 264330609195
Option 3 ID : 264330609196
Option 4 ID : 264330609198
Status : Not Answered
Chosen Option : --

Q.3 The length of the men's kabaddi court is _____ metres.

- Ans 1. 10
 2. 13
 3. 17
 4. 15

Question ID : 264330158245
Option 1 ID : 264330620339
Option 2 ID : 264330620340
Option 3 ID : 264330620342
Option 4 ID : 264330620341
Status : Not Answered
Chosen Option : --

Q.4 Who among the following is the author of the book 'The Zoya factor'?

- Ans 1. Kiran Desai
 2. Sudha Murty
 3. Anuja Chauhan
 4. Nandini Bajpai

Question ID : 264330155458
Option 1 ID : 264330609235
Option 2 ID : 264330609236
Option 3 ID : 264330609238
Option 4 ID : 264330609237
Status : Answered
Chosen Option : 2

Q.5 Who among the following has NOT received the Sangeet Natak Akademi Award-2021 (given in February 2023) for his/her contribution in dance ?

- Ans 1. Neena Prasad
 2. Sumitra Guha
 3. Jayalakshmi Eshwar
 4. Thokchom Ibemubi Devi

Question ID : 264330157837
Option 1 ID : 264330618708
Option 2 ID : 264330618710
Option 3 ID : 264330618707
Option 4 ID : 264330618709
Status : Not Answered
Chosen Option : --

Q.6 Which of the following is NOT a Directive Principle based on the ideals of Mahatma Gandhi?

- Ans**
- 1. To promote industrialisation in urban areas
 - 2. To organise village Panchayats
 - 3. To prohibit intoxicating drinks and drugs that are injurious to health
 - 4. To promote cottage industries in rural areas

Question ID : 264330162251
Option 1 ID : 264330636334
Option 2 ID : 264330636331
Option 3 ID : 264330636333
Option 4 ID : 264330636332
Status : Answered
Chosen Option : 3

Q.7 Which of the following methods is used to calculate national income by summing up the total incomes earned by individuals and businesses in an economy?

- Ans**
- 1. Value-added method
 - 2. Output method
 - 3. Income method
 - 4. Expenditure method

Question ID : 264330157315
Option 1 ID : 264330616626
Option 2 ID : 264330616625
Option 3 ID : 264330616623
Option 4 ID : 264330616624
Status : Answered
Chosen Option : 2

Q.8 What is personal income?

- Ans**
- 1. The income earned by individuals and households after taxes and other deductions
 - 2. The total income earned by businesses and corporations in an economy
 - 3. The income earned by individuals through their own business or self-employment
 - 4. The total income earned by individuals and households before taxes and other deductions

Question ID : 264330157318
Option 1 ID : 264330616637
Option 2 ID : 264330616635
Option 3 ID : 264330616638
Option 4 ID : 264330616636
Status : Answered
Chosen Option : 1

Q.9 Who founded the Hindu reform organisation Brahma Samaj?

- Ans**
- 1. Ramkrishna Paramhans
 - 2. Rabindranath Tagore
 - 3. Atmaram Pandurang
 - 4. Raja Ram Mohan Roy

Question ID : 264330161745
Option 1 ID : 264330634307
Option 2 ID : 264330634309
Option 3 ID : 264330634310
Option 4 ID : 264330634308
Status : Answered
Chosen Option : 4

Q.10 Whom among the following Indian singers is known as 'Gazal King'?

- Ans 1. Manna Dey
 2. Mukesh
 3. Shailendra
 4. Jagjit Singh

Question ID : 264330162232
Option 1 ID : 264330636256
Option 2 ID : 264330636255
Option 3 ID : 264330636257
Option 4 ID : 264330636258
Status : Answered
Chosen Option : 3

Q.11 Dree Utsav is celebrated in the state of _____.

- Ans 1. Arunachal Pradesh
 2. Kerala
 3. Assam
 4. Andhra Pradesh

Question ID : 264330159082
Option 1 ID : 264330623689
Option 2 ID : 264330623690
Option 3 ID : 264330623688
Option 4 ID : 264330623687
Status : Answered
Chosen Option : 1

Q.12 _____ word of Indian dance is derived from a Sanskrit word and literally means 'taking towards'.

- Ans 1. Nritta
 2. Laasya
 3. Taandava
 4. Abhinaya

Question ID : 264330159047
Option 1 ID : 264330623549
Option 2 ID : 264330623547
Option 3 ID : 264330623550
Option 4 ID : 264330623548
Status : Answered
Chosen Option : 1

Q.13 Which of the following is an example of the Western Coast Port?

- Ans 1. Tuticorin Port
 2. Paradip Port
 3. Mumbai Port
 4. Vishakhapatnam Port

Question ID : 264330160139
Option 1 ID : 264330627897
Option 2 ID : 264330627896
Option 3 ID : 264330627898
Option 4 ID : 264330627895
Status : Answered
Chosen Option : 3

Q.14 What are the three tiers of the Government in India?

- Ans** 1. Union government, Judiciary government and Federal government
 2. Union government, State Government and Federal Government
 3. Union government, State government and Judiciary government
 4. Union Government, State Government and Local Government

Question ID : 264330161290
Option 1 ID : 264330632488
Option 2 ID : 264330632490
Option 3 ID : 264330632487
Option 4 ID : 264330632489
Status : Answered
Chosen Option : 4

Q.15 The foundation of Sanchi Stupa was laid by which of the following Kings?

- Ans** 1. Samudragupta
 2. Bimbisara
 3. Ashoka
 4. Chandragupta Maurya

Question ID : 264330160758
Option 1 ID : 264330630365
Option 2 ID : 264330630363
Option 3 ID : 264330630366
Option 4 ID : 264330630364
Status : Answered
Chosen Option : 3

Q.16 During which months do retreating monsoons occur in India?

- Ans** 1. January and February
 2. May and June
 3. October and November
 4. March and April

Question ID : 264330160147
Option 1 ID : 264330627930
Option 2 ID : 264330627928
Option 3 ID : 264330627927
Option 4 ID : 264330627929
Status : Answered
Chosen Option : 3

Q.17 Which is the primary structural component responsible for most of the mechanical strength of the cell wall?

- Ans** 1. Heparin
 2. Glycogen
 3. Chitin
 4. Cellulose

Question ID : 264330161082
Option 1 ID : 264330631662
Option 2 ID : 264330631660
Option 3 ID : 264330631661
Option 4 ID : 264330631659
Status : Answered
Chosen Option : 4

Q.18 Ball and spring model of chemical bonds obey:

- Ans** 1. Hooke's law
 2. Charles' law
 3. gravitational law
 4. Newton's law

Question ID : 264330156586
Option 1 ID : 264330613734
Option 2 ID : 264330613732
Option 3 ID : 264330613731
Option 4 ID : 264330613733
Status : Answered
Chosen Option : 2

Q.19 Pandit Janki Prasad was associated with which of the following Gharanas of Kathak?

- Ans** 1. Banaras
 2. Raigarh
 3. Jaipur
 4. Lucknow

Question ID : 264330160809
Option 1 ID : 264330630569
Option 2 ID : 264330630570
Option 3 ID : 264330630567
Option 4 ID : 264330630568
Status : Answered
Chosen Option : 4

Q.20 In 2023, Ajay Singh, the chief of SpiceJet was appointed as president of which of the following?

- Ans** 1. FICCI
 2. ASSOCHAM
 3. CII
 4. NASSCOM

Question ID : 264330158348
Option 1 ID : 264330620751
Option 2 ID : 264330620752
Option 3 ID : 264330620753
Option 4 ID : 264330620754
Status : Answered
Chosen Option : 1

Q.21 Rohit Sharma became the first ever Indian to play how many T20 cricket matches in October 2022?

- Ans** 1. 300
 2. 100
 3. 200
 4. 400

Question ID : 264330158361
Option 1 ID : 264330620805
Option 2 ID : 264330620803
Option 3 ID : 264330620804
Option 4 ID : 264330620806
Status : Answered
Chosen Option : 1

Q.22 Which form of Indian dance is said to be 'soft and suitable for female presentation'?

- Ans 1. Nritta
 2. Taandava
 3. Laasya
 4. Nritya

Question ID : 264330161891
Option 1 ID : 264330634892
Option 2 ID : 264330634893
Option 3 ID : 264330634894
Option 4 ID : 264330634891
Status : Answered
Chosen Option : 3

Q.23 Which of the following oceans is surrounded by the continent of North America and South America to the east?

- Ans 1. Pacific Ocean
 2. Atlantic Ocean
 3. Indian Ocean
 4. Arctic Ocean

Question ID : 264330161323
Option 1 ID : 264330632620
Option 2 ID : 264330632622
Option 3 ID : 264330632619
Option 4 ID : 264330632621
Status : Answered
Chosen Option : 2

Q.24 The famous 'Pashupatinath Temple' is located in which country from the following?

- Ans 1. Nepal
 2. Bhutan
 3. Maldives
 4. Sri Lanka

Question ID : 264330161561
Option 1 ID : 264330633574
Option 2 ID : 264330633571
Option 3 ID : 264330633573
Option 4 ID : 264330633572
Status : Answered
Chosen Option : 1

Q.25 In which of the following years was the first Janjatiya Khel Mahotsav held?

- Ans 1. 2023
 2. 2021
 3. 2020
 4. 2022

Question ID : 264330161142
Option 1 ID : 264330631900
Option 2 ID : 264330631901
Option 3 ID : 264330631902
Option 4 ID : 264330631899
Status : Answered
Chosen Option : 1

Q.1 Select the option that can be used as a one-word substitute for the given group of words.

One who does not believe in the existence of God

- Ans** 1. Atheist
 2. Priest
 3. Monk
 4. Believer

Question ID : 264330153404
Option 1 ID : 264330601152
Option 2 ID : 264330601153
Option 3 ID : 264330601151
Option 4 ID : 264330601154
Status : Answered
Chosen Option : 1

Q.2 Select the most appropriate option that can rectify the underlined segment in the given sentence. If there is no need to rectify it, select 'no rectification needed'.

You are the beautiful woman I have ever seen.

- Ans** 1. no rectification needed
 2. more beautiful
 3. beauty
 4. most beautiful

Question ID : 264330153465
Option 1 ID : 264330601378
Option 2 ID : 264330601377
Option 3 ID : 264330601375
Option 4 ID : 264330601376
Status : Answered
Chosen Option : 4

Q.3 Choose the option which best expresses the meaning of the given idiom.

By fair means or foul

- Ans** 1. To work without planning
 2. To find difficulty in completing some work
 3. To get one's way with honesty or dishonesty
 4. To provoke someone into quarrelling

Question ID : 264330153347
Option 1 ID : 264330600939
Option 2 ID : 264330600941
Option 3 ID : 264330600940
Option 4 ID : 264330600942
Status : Answered
Chosen Option : 3

Q.4 The following sentence has been split into four segments. Identify the segment that contains a grammatical error.
My younger daughter, / Kanu prefer / dark chocolate / to yoghurt.

- Ans**
- 1. dark chocolate
 - 2. My younger daughter
 - 3. Kanu prefer
 - 4. to yoghurt

Question ID : 264330147603
Option 1 ID : 264330578633
Option 2 ID : 264330578631
Option 3 ID : 264330578632
Option 4 ID : 264330578634
Status : Answered
Chosen Option : 2

Q.5 Choose the sentence that contains an error.

- Ans**
- 1. I saw a movie that was directed by Steven Spielberg.
 - 2. She is the only person who can solve this difficult math problem.
 - 3. He is an lawyer who works for a prestigious law firm.
 - 4. The Great Wall of China is a popular tourist attraction.

Question ID : 264330155179
Option 1 ID : 264330608176
Option 2 ID : 264330608177
Option 3 ID : 264330608178
Option 4 ID : 264330608175
Status : Answered
Chosen Option : 2

Q.6 Parts of the following sentence have been given as options. Select the option that contains an error.
Ishita will playing Tennis for her favourite team.

- Ans**
- 1. will playing
 - 2. Tennis for
 - 3. her favourite team
 - 4. Ishita

Question ID : 264330152816
Option 1 ID : 264330598856
Option 2 ID : 264330598857
Option 3 ID : 264330598858
Option 4 ID : 264330598855
Status : Answered
Chosen Option : 1

Q.7 Select the most appropriate option that can substitute the underlined segment in the given sentence.

He apologised in her silently before he pushed deeper into her thoughts.

- Ans**
- 1. apologise in her
 - 2. apologised with her
 - 3. apologised of her
 - 4. apologised to her

Question ID : 264330153476
Option 1 ID : 264330601421
Option 2 ID : 264330601420
Option 3 ID : 264330601419
Option 4 ID : 264330601422
Status : Answered
Chosen Option : 4

Q.8 Select the correctly spelt word.

- Ans**
- 1. Bihavior
 - 2. Behavier
 - 3. Behaviour
 - 4. Behaveor

Question ID : 264330153412
Option 1 ID : 264330601183
Option 2 ID : 264330601186
Option 3 ID : 264330601185
Option 4 ID : 264330601184
Status : Answered
Chosen Option : 3

Q.9 Select the most appropriate synonym of the given word.
Obvious

- Ans**
- 1. Clear
 - 2. Murky
 - 3. Ambiguous
 - 4. Opaque

Question ID : 264330151825
Option 1 ID : 264330594930
Option 2 ID : 264330594928
Option 3 ID : 264330594929
Option 4 ID : 264330594927
Status : Answered
Chosen Option : 1

Q.10 Select the most appropriate meaning of the given idiom.
As phony as a three-dollar bill

- Ans**
- 1. Something that is attractive
 - 2. Something that is genuine
 - 3. Something that is disgusting
 - 4. Something that is fake

Question ID : 264330153439
Option 1 ID : 264330601280
Option 2 ID : 264330601279
Option 3 ID : 264330601282
Option 4 ID : 264330601281
Status : Answered
Chosen Option : 1

Q.11 Select the most appropriate option to fill in the blank.

They are going to give me a lovely present, but I cannot ____ what it will be.

- Ans**
- 1. give
 - 2. gist
 - 3. guess
 - 4. guest

Question ID : 264330153496
Option 1 ID : 264330601502
Option 2 ID : 264330601501
Option 3 ID : 264330601500
Option 4 ID : 264330601499
Status : Answered
Chosen Option : 3

Q.12 Select the INCORRECTLY spelt word.

- Ans**
- 1. Important
 - 2. Maintanance
 - 3. Friend
 - 4. Rhythm

Question ID : 264330152643
Option 1 ID : 264330598177
Option 2 ID : 264330598176
Option 3 ID : 264330598178
Option 4 ID : 264330598175
Status : Answered
Chosen Option : 2

Q.13 Select the most appropriate synonym of the given word.
Determined

- Ans** 1. Flexible
 2. Famous
 3. Decisive
 4. Elevated

Question ID : 264330151919
Option 1 ID : 264330595291
Option 2 ID : 264330595293
Option 3 ID : 264330595294
Option 4 ID : 264330595292
Status : Not Answered
Chosen Option : --

Q.14 Select the most appropriate synonym of the underlined word.
Ray was cynical about love.

- Ans** 1. prolific
 2. obese
 3. trusting
 4. pessimistic

Question ID : 264330153520
Option 1 ID : 264330601594
Option 2 ID : 264330601593
Option 3 ID : 264330601592
Option 4 ID : 264330601591
Status : Answered
Chosen Option : 4

Q.15 Select the option that rectifies the spelling of the underlined word in the given sentence.

The company sent out a questionaire to its employees to gather feedback on their work environment.

- Ans** 1. questioneire
 2. questionnaire
 3. questionnire
 4. questionaiare

Question ID : 264330153229
Option 1 ID : 264330600478
Option 2 ID : 264330600476
Option 3 ID : 264330600475
Option 4 ID : 264330600477
Status : Answered
Chosen Option : 2

Q.16 Select the option that can be used as a one-word substitute for the given group of words.

A person who feeds on human flesh

- Ans** 1. Cannibal
 2. Carnivore
 3. Nudge
 4. Omnivore

Question ID : 264330153405
Option 1 ID : 264330601157
Option 2 ID : 264330601155
Option 3 ID : 264330601156
Option 4 ID : 264330601158
Status : Answered
Chosen Option : 2

Q.17 Select the most appropriate option that can substitute the underlined segment in the given sentence. If there is no need to substitute it, select 'No substitution required'.
Larger emissions of greenhouse gases lead to higher concentrations in the atmosphere.

- Ans** 1. lead to higher concentrations
 2. have lead to higher concentrations
 3. is lead to higher concentrations
 4. No substitution required

Question ID : 264330151898
Option 1 ID : 264330595207
Option 2 ID : 264330595208
Option 3 ID : 264330595209
Option 4 ID : 264330595210
Status : Answered
Chosen Option : 4

Q.18 Select the most appropriate meaning of the underlined idiom.
Ramesh always blows his own trumpet.

- Ans** 1. praises himself
 2. criticises himself
 3. does his own work
 4. depends on others

Question ID : 264330152752
Option 1 ID : 264330598607
Option 2 ID : 264330598608
Option 3 ID : 264330598609
Option 4 ID : 264330598610
Status : Answered
Chosen Option : 1

Q.19 Select the most appropriate meaning of the underlined idiom.
He was on cloud nine when he got admission in Cambridge University.

- Ans** 1. involved in useless journey
 2. very happy
 3. unsettled
 4. available to be called to go to work

Question ID : 264330153642
Option 1 ID : 264330602042
Option 2 ID : 264330602039
Option 3 ID : 264330602041
Option 4 ID : 264330602040
Status : Answered
Chosen Option : 2

Q.20 Select the option that can be used as a one-word substitute for the given group of words.

An examination of a body after death

- Ans** 1. Post room
 2. Post death
 3. Post partum
 4. Post mortem

Question ID : 264330152588
Option 1 ID : 264330597958
Option 2 ID : 264330597956
Option 3 ID : 264330597955
Option 4 ID : 264330597957
Status : Answered
Chosen Option : 4

Comprehension:

In the following passage some words have been deleted. Fill in the blanks with the help of the alternatives given. Select the most appropriate option for each number.

One of the (1)_____ tragedies is seeing someone with incredible talent get (2)_____ because he or she lacks some basic skills. This book (3)_____ the number one reason executives derail, and it provides extremely helpful tools to operate in a fast-paced, result-oriented environment. I am impressed by how insightful, (4)_____, well organised and focused it is. It will surely help one (5)_____ several difficult situations.

SubQuestion No : 21

Q.21 Select the most appropriate option to fill in blank number 1.

- Ans** 1. more great
 2. great
 3. greater
 4. greatest

Question ID : 264330153590
Option 1 ID : 264330601850
Option 2 ID : 264330601847
Option 3 ID : 264330601848
Option 4 ID : 264330601849
Status : Answered
Chosen Option : 4

Comprehension:

In the following passage some words have been deleted. Fill in the blanks with the help of the alternatives given. Select the most appropriate option for each number.

One of the (1)_____ tragedies is seeing someone with incredible talent get (2)_____ because he or she lacks some basic skills. This book (3)_____ the number one reason executives derail, and it provides extremely helpful tools to operate in a fast-paced, result-oriented environment. I am impressed by how insightful, (4)_____, well organised and focused it is. It will surely help one (5)_____ several difficult situations.

SubQuestion No : 22

Q.22 Select the most appropriate option to fill in blank number 2.

- Ans 1. uplifted
 2. damaged
 3. derailed
 4. channelised

Question ID : 264330153591

Option 1 ID : 264330601852

Option 2 ID : 264330601851

Option 3 ID : 264330601854

Option 4 ID : 264330601853

Status : Answered

Chosen Option : 3

Comprehension:

In the following passage some words have been deleted. Fill in the blanks with the help of the alternatives given. Select the most appropriate option for each number.

One of the (1)_____ tragedies is seeing someone with incredible talent get (2)_____ because he or she lacks some basic skills. This book (3)_____ the number one reason executives derail, and it provides extremely helpful tools to operate in a fast-paced, result-oriented environment. I am impressed by how insightful, (4)_____, well organised and focused it is. It will surely help one (5)_____ several difficult situations.

SubQuestion No : 23

Q.23 Select the most appropriate option to fill in blank number 3.

- Ans 1. demeans
 2. devours
 3. addresses
 4. neglects

Question ID : 264330153592

Option 1 ID : 264330601858

Option 2 ID : 264330601857

Option 3 ID : 264330601855

Option 4 ID : 264330601856

Status : Answered

Chosen Option : 3

Comprehension:

In the following passage some words have been deleted. Fill in the blanks with the help of the alternatives given. Select the most appropriate option for each number.

One of the (1)_____ tragedies is seeing someone with incredible talent get (2)_____ because he or she lacks some basic skills. This book (3)_____ the number one reason executives derail, and it provides extremely helpful tools to operate in a fast-paced, result-oriented environment. I am impressed by how insightful, (4)_____, well organised and focused it is. It will surely help one (5)_____ several difficult situations.

SubQuestion No : 24

Q.24 Select the most appropriate option to fill in blank number 4.

- Ans** 1. sophisticated
 2. pessimistic
 3. cumbersome
 4. readable

Question ID : 264330153593

Option 1 ID : 264330601862

Option 2 ID : 264330601861

Option 3 ID : 264330601859

Option 4 ID : 264330601860

Status : Answered

Chosen Option : 2

Comprehension:

In the following passage some words have been deleted. Fill in the blanks with the help of the alternatives given. Select the most appropriate option for each number.

One of the (1)_____ tragedies is seeing someone with incredible talent get (2)_____ because he or she lacks some basic skills. This book (3)_____ the number one reason executives derail, and it provides extremely helpful tools to operate in a fast-paced, result-oriented environment. I am impressed by how insightful, (4)_____, well organised and focused it is. It will surely help one (5)_____ several difficult situations.

SubQuestion No : 25

Q.25 Select the most appropriate option to fill in blank number 5.

- Ans** 1. condemn
 2. salvage
 3. reject
 4. discourage

Question ID : 264330153594

Option 1 ID : 264330601866

Option 2 ID : 264330601864

Option 3 ID : 264330601863

Option 4 ID : 264330601865

Status : Answered

Chosen Option : 2