

# SSC MTS 2023 Tier 1 Sept 8 Shift 2 Question Paper with Answers

Roll Number	
Candidate Name	
Exam Date	08/09/2023
Exam Time	12:30 PM - 2:30 PM
Subject	MTS Non Tech Havaladar CBIC and CBN Examination 2023

## Section : Numerical and Mathematical Ability

**Q.1** A boat covers a certain distance downstream in 5 hours but takes 8 hours to return upstream to the starting point. If the speed of the stream is 6 km/h, find the speed of the boat in still water.

- Ans**
- 1. 26 km/h
  - 2. 13 km/h
  - 3. 78 km/h
  - 4. 39 km/h

Question ID : 264330153884

Option 1 ID : 264330603002

Option 2 ID : 264330603001

Option 3 ID : 264330602999

Option 4 ID : 264330603000

Status : Answered

Chosen Option : 1

**Q.2** Three numbers are in the ratio 5 : 2 : 7. The sum of their squares is 3822. The biggest number is:

- Ans**
- 1. 35
  - 2. 38
  - 3. 78
  - 4. 49

Question ID : 264330154047

Option 1 ID : 264330603654

Option 2 ID : 264330603651

Option 3 ID : 264330603653

Option 4 ID : 264330603652

Status : Answered

Chosen Option : 4

**Q.3** A path of uniform width 2.5 m runs around the outside of a rectangular field of dimensions 45 m X 35 m. What is the area of the path (in  $m^2$ ) ?

- Ans**
- 1. 500
  - 2. 425
  - 3. 475
  - 4. 525

Question ID : 264330153787  
Option 1 ID : 264330602612  
Option 2 ID : 264330602613  
Option 3 ID : 264330602614  
Option 4 ID : 264330602611  
Status : Answered  
Chosen Option : 1

**Q.4** In a certain time, a sum becomes 5 times at the rate of 6% per annum on simple interest. At what rate of interest, the same sum becomes 8 times in the same duration?

- Ans**
- 1. 8.5%
  - 2. 10.5%
  - 3. 5.5%
  - 4. 12.5%

Question ID : 264330155747  
Option 1 ID : 264330610393  
Option 2 ID : 264330610392  
Option 3 ID : 264330610394  
Option 4 ID : 264330610391  
Status : Answered  
Chosen Option : 2

**Q.5** Find the amount if ₹10,200 is invested at the rate of 8% per annum compound interest for  $1\frac{1}{2}$  years when interest is compounded half yearly (up to two decimal places).

- Ans**
- 1. ₹11,743.61
  - 2. ₹11,473.61
  - 3. ₹11,764.28
  - 4. ₹11,347.28

Question ID : 264330156363  
Option 1 ID : 264330612854  
Option 2 ID : 264330612852  
Option 3 ID : 264330612853  
Option 4 ID : 264330612851  
Status : Answered  
Chosen Option : 2

**Q.6** In what ratio, rice costing ₹ 185 per kg be mixed with rice costing ₹ 95 per kg such that by selling the mixture at ₹ 140 per kg there is a gain of 40%?

- Ans**
- 1. 2 : 19
  - 2. 3 : 23
  - 3. 2 : 13
  - 4. 1 : 17

Question ID : 264330154079  
Option 1 ID : 264330603779  
Option 2 ID : 264330603780  
Option 3 ID : 264330603782  
Option 4 ID : 264330603781  
Status : Answered  
Chosen Option : 4

**Q.7** Among four numbers the sum of the smallest and largest is 72 more than the sum of middle two numbers . If the numbers are in the ratio 6 : 7 : 15 : 19, then the smallest number is:

- Ans**
- 1. 72
  - 2. 144
  - 3. 168
  - 4. 216

Question ID : 264330154051  
Option 1 ID : 264330603670  
Option 2 ID : 264330603669  
Option 3 ID : 264330603668  
Option 4 ID : 264330603667  
Status : Answered  
Chosen Option : 3

**Q.8** A man runs across an 1800 m long street in 6 min. Calculate his speed in m/sec.

- Ans**
- 1. 5
  - 2. 4
  - 3. 6
  - 4. 8

Question ID : 264330156111  
Option 1 ID : 264330611843  
Option 2 ID : 264330611845  
Option 3 ID : 264330611844  
Option 4 ID : 264330611846  
Status : Answered  
Chosen Option : 1

Q.9 The following marks are obtained by a student in five subjects.

Subjects	Marks
Geography	42
History	43
Civics	51
Hindi	54
CS	50

What is the difference between the minimum and maximum marks scored by the student?

- Ans
- 1. 10
  - 2. 4
  - 3. 2
  - 4. 12

Question ID : 264330156536

Option 1 ID : 264330613533

Option 2 ID : 264330613534

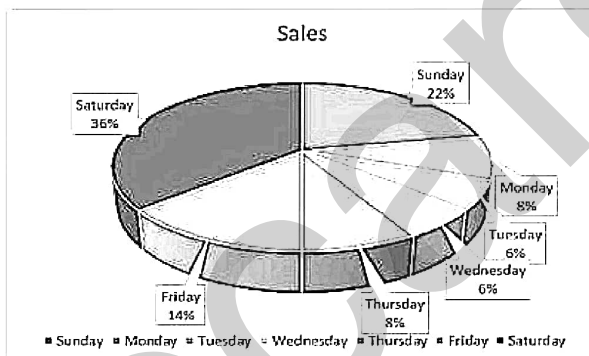
Option 3 ID : 264330613532

Option 4 ID : 264330613531

Status : Answered

Chosen Option : 4

Q.10 The sale of tickets (in thousands) in days of a week is given in the pie chart:



The combined angle made at the centre by which days is equal to the angle made by Saturday?

- Ans
- 1. Sunday, Monday and Tuesday
  - 2. Tuesday, Wednesday and Thursday
  - 3. Monday, Tuesday and Wednesday
  - 4. Wednesday, Thursday and Friday

Question ID : 264330153823

Option 1 ID : 264330602758

Option 2 ID : 264330602756

Option 3 ID : 264330602755

Option 4 ID : 264330602757

Status : Answered

Chosen Option : 1

**Q.11** A and B can do a piece of work in 6 and 12 days, respectively. If they work alternately and A begins the work, in how many days will the work be completed?

- Ans**
- 1. 9
  - 2. 8
  - 3.  $8\frac{1}{2}$
  - 4.  $9\frac{1}{2}$

Question ID : 264330153855  
Option 1 ID : 264330602883  
Option 2 ID : 264330602885  
Option 3 ID : 264330602886  
Option 4 ID : 264330602884  
Status : Answered  
Chosen Option : 2

**Q.12** A dealer buys some goods for ₹3,600. If the overhead expenses be 5% of the cost price, then at what price should it be sold to earn 15%?

- Ans**
- 1. ₹4,347
  - 2. ₹4,734
  - 3. ₹4,437
  - 4. ₹4,743

Question ID : 264330159025  
Option 1 ID : 264330623461  
Option 2 ID : 264330623462  
Option 3 ID : 264330623459  
Option 4 ID : 264330623460  
Status : Answered  
Chosen Option : 1

**Q.13** The income of a company increases 25% per annum. If its income is ₹26,64,000 in the year 1999 what was its income in the year 1997?

- Ans**
- 1. ₹ 16,50,000
  - 2. ₹ 17,04,960
  - 3. ₹ 15,50,000
  - 4. ₹ 17,50,000

Question ID : 264330156072  
Option 1 ID : 264330611689  
Option 2 ID : 264330611688  
Option 3 ID : 264330611690  
Option 4 ID : 264330611687  
Status : Answered  
Chosen Option : 2

**Q.14** The average of a batsman in 20 innings is 41 runs. In the next inning, he scored 41 runs. What will be his new average?

**Ans** ✗ 1. 39

✓ 2. 41

✗ 3. 38

✗ 4. 36

Question ID : 264330156212

Option 1 ID : 264330612249

Option 2 ID : 264330612250

Option 3 ID : 264330612248

Option 4 ID : 264330612247

Status : Answered

Chosen Option : 2

**Q.15** Aisha and Razia can complete a work in 50 days and 75 days, respectively. In how many days will the entire work be completed if both of them work together?

**Ans** ✗ 1. 32

✗ 2. 25

✓ 3. 30

✗ 4. 28

Question ID : 264330155718

Option 1 ID : 264330610278

Option 2 ID : 264330610275

Option 3 ID : 264330610277

Option 4 ID : 264330610276

Status : Answered

Chosen Option : 3

**Q.16** A man sold his cycle at 17% loss. If he had sold it for ₹1,056 more, he would have made 5% profit. The cost price of the cycle is:

**Ans** ✗ 1. ₹4,700

✗ 2. ₹3,800

✗ 3. ₹5,100

✓ 4. ₹4,800

Question ID : 264330154080

Option 1 ID : 264330603784

Option 2 ID : 264330603783

Option 3 ID : 264330603785

Option 4 ID : 264330603786

Status : Answered

Chosen Option : 4

Q.17 Find the HCF of 230, 276, and 322.

- Ans
- 1. 23
  - 2. 12
  - 3. 46
  - 4. 14

Question ID : 264330156090  
Option 1 ID : 264330611759  
Option 2 ID : 264330611761  
Option 3 ID : 264330611762  
Option 4 ID : 264330611760  
Status : Answered  
Chosen Option : 3

Q.18 On simplifying the following expression, we get \_\_\_\_\_.

$$\frac{24\sqrt{45} - 16\sqrt{20} + \sqrt{245} - 47\sqrt{5}}{3\frac{1}{5} + 1\frac{2}{5} - 2\frac{1}{6} - 2\frac{1}{5} - 5\frac{2}{5} + 3\frac{1}{6}}$$

- Ans
- 1. 0
  - 2. 3
  - 3. 1
  - 4. 2

Question ID : 264330154114  
Option 1 ID : 264330603922  
Option 2 ID : 264330603919  
Option 3 ID : 264330603921  
Option 4 ID : 264330603920  
Status : Answered  
Chosen Option : 1

Q.19 The speed of a bus from station A to B is 55 km/h, and while coming back from station B to A, the speed of the bus is 95 km/h. The average speed (in km/h) of the bus during the whole journey is:

- Ans
- 1.  $72\frac{1}{3}$
  - 2.  $67\frac{1}{3}$
  - 3.  $62\frac{2}{3}$
  - 4.  $69\frac{2}{3}$

Question ID : 264330156512  
Option 1 ID : 264330613438  
Option 2 ID : 264330613435  
Option 3 ID : 264330613436  
Option 4 ID : 264330613437  
Status : Answered  
Chosen Option : 4

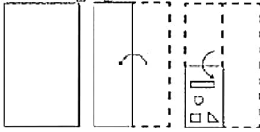
**Q.20** What is the total surface area (in  $\text{cm}^2$ ) of a right circular cone of radius 10.5 cm and slant height 13 cm? Take  $\pi = \frac{22}{7}$

- Ans**
- 1. 577.5
  - 2. 757.5
  - 3. 775.5
  - 4. 787.5

Question ID : 264330153790  
 Option 1 ID : 264330602625  
 Option 2 ID : 264330602624  
 Option 3 ID : 264330602626  
 Option 4 ID : 264330602623  
 Status : Answered  
 Chosen Option : 3

Section : Reasoning Ability and Problem Solving

**Q.1** The sequence of folding a piece of paper and the manner in which the folded paper is cut is shown in the following figures. How would this paper look when unfolded?



**Ans**

- 1.
- 2.
- 3.
- 4.

Question ID : 264330155606  
 Option 1 ID : 264330609830  
 Option 2 ID : 264330609828  
 Option 3 ID : 264330609829  
 Option 4 ID : 264330609827  
 Status : Answered  
 Chosen Option : 3



**Q.2** In a certain code language, 'YOJ' is coded as 'BRM' and 'DSP' is coded as 'GVS'. What is the code for 'ZMC' in the given code language?

- Ans**
- 1. DQE
  - 2. CPF
  - 3. CQF
  - 4. DPG

Question ID : 264330155832  
Option 1 ID : 264330610733  
Option 2 ID : 264330610734  
Option 3 ID : 264330610732  
Option 4 ID : 264330610731  
Status : Answered  
Chosen Option : 2

**Q.3** Read the given statement(s) and conclusions carefully. Assuming that the information given in the statements is true, even if it appears to be at variance with commonly known facts, decide which of the given conclusions logically follow(s) from the statement(s).

Statements: All the pencils are pens. All the pens are inks.

Conclusions:

- (I) All the pencils are inks.
- (II) Some inks are pencils.

- Ans**
- 1. Neither conclusion (I) nor (II) follows.
  - 2. Both conclusions (I) and (II) follow.
  - 3. Only conclusion (II) follows.
  - 4. Only conclusion (I) follows.

Question ID : 264330154427  
Option 1 ID : 264330605173  
Option 2 ID : 264330605174  
Option 3 ID : 264330605172  
Option 4 ID : 264330605171  
Status : Answered  
Chosen Option : 2

**Q.4** If 'A' stands for '+', 'B' stands for '×', 'C' stands for '÷' and 'D' stands for '-', what will come in place of the question mark (?) in the following equation?  
(54 A 9) C 34 D (10 B 3) C 46 D 16 = ?

- Ans**
- 1. 40
  - 2. 32
  - 3. 46
  - 4. 54

Question ID : 264330151793  
Option 1 ID : 264330594801  
Option 2 ID : 264330594800  
Option 3 ID : 264330594799  
Option 4 ID : 264330594802  
Status : Answered  
Chosen Option : 1

**Q.5** Select the word-pair that best represents a similar relationship to the one expressed in the pair of words given below.

(The words must be considered as meaningful English words and must not be related to each other based on the number of letters/number of consonants/vowels in the word)

Correspond : Letters

- Ans**
- ✓ 1. Barter : Commodities
  - ✗ 2. Trespass : Boundaries
  - ✗ 3. Arbitrate : Controversies
  - ✗ 4. Debate : Problems

Question ID : 264330154639  
Option 1 ID : 264330606022  
Option 2 ID : 264330606020  
Option 3 ID : 264330606019  
Option 4 ID : 264330606021  
Status : Answered  
Chosen Option : 2

**Q.6** What should come in place of ? in the given series based on the English alphabetical order?

LVE, IUC, FTZ, CSW, ?

- Ans**
- ✓ 1. ZRT
  - ✗ 2. ZQW
  - ✗ 3. YSX
  - ✗ 4. YQW

Question ID : 264330155790  
Option 1 ID : 264330610565  
Option 2 ID : 264330610566  
Option 3 ID : 264330610563  
Option 4 ID : 264330610564  
Status : Answered  
Chosen Option : 1

**Q.7** What should come in place of '?' in the given series?

2 16 86 436 2186 ?

- Ans**
- ✗ 1. 10578
  - ✗ 2. 11032
  - ✗ 3. 11486
  - ✓ 4. 10936

Question ID : 264330151463  
Option 1 ID : 264330593479  
Option 2 ID : 264330593481  
Option 3 ID : 264330593482  
Option 4 ID : 264330593480  
Status : Answered  
Chosen Option : 4

**Q.8** In a certain code language, 'good vibes only' is coded as 'vn mj kl' and 'change is good' is coded as 'mj ro dh'. How is 'good' coded in the given language?

- Ans**
- 1. ro
  - 2. dh
  - 3. vn
  - 4. mj

Question ID : 264330151688  
Option 1 ID : 264330594382  
Option 2 ID : 264330594381  
Option 3 ID : 264330594380  
Option 4 ID : 264330594379  
Status : Answered  
Chosen Option : 4

**Q.9** What should come in place of ? in the given series based on the English alphabetical order?

JAS, HDV, FGY, DJB, ?

- Ans**
- 1. DNE
  - 2. CNF
  - 3. BME
  - 4. CMG

Question ID : 264330155794  
Option 1 ID : 264330610582  
Option 2 ID : 264330610580  
Option 3 ID : 264330610581  
Option 4 ID : 264330610579  
Status : Answered  
Chosen Option : 3

**Q.10** Which figure should replace the question mark (?) if the following figure series were to be continued?

△	G	S	S	7	B	2	△	7	7	S	G	
	B			△			G			2		?
	7			G			S			△		

Ans

X 1. 

↑	△	7
	S	
	2	

X 2. 

↑	7	S
	△	
	G	

X 3. 

↑	7	S
	△	
	2	

✓ 4. 

↑	2	S
	△	
	7	

Question ID : 264330154765

Option 1 ID : 264330606524

Option 2 ID : 264330606523

Option 3 ID : 264330606526

Option 4 ID : 264330606525

Status : Answered

Chosen Option : 4

**Q.11** The position of how many letters will remain unchanged if each of the letter in the word 'DURATION' is arranged in alphabetical order?

- Ans
- X 1. Four
  - ✓ 2. None
  - X 3. Five
  - X 4. One

Question ID : 264330154329

Option 1 ID : 264330604780

Option 2 ID : 264330604781

Option 3 ID : 264330604779

Option 4 ID : 264330604782

Status : Answered

Chosen Option : 2

**Q.12** In the following number-pairs, the second number is obtained by applying certain mathematical operations to the first number. Select the set in which the numbers are related in the same way as are the numbers of the following sets.  
(NOTE : Operations should be performed on the whole numbers, without breaking down the numbers into its constituent digits. E.g. 13 – Operations on 13 such as adding / subtracting / multiplying etc. to 13 can be performed. Breaking down 13 into 1 and 3 and then performing mathematical operations on 1 and 3 is not allowed)  
2, 7  
5, 16

- Ans**
- 1. 14, 45
  - 2. 11, 23
  - 3. 20, 58
  - 4. 15, 46

Question ID : 264330151625  
Option 1 ID : 264330594128  
Option 2 ID : 264330594127  
Option 3 ID : 264330594130  
Option 4 ID : 264330594129  
Status : Answered  
Chosen Option : 4

**Q.13** Select the combination of letters that when sequentially placed in the blanks of the given series, will complete the series.

J \_ K \_ KKJ \_ K \_ \_ K

- Ans**
- 1. JJKJK
  - 2. KJKJK
  - 3. JKJKJ
  - 4. KJKJ

Question ID : 264330151645  
Option 1 ID : 264330594209  
Option 2 ID : 264330594208  
Option 3 ID : 264330594210  
Option 4 ID : 264330594207  
Status : Answered  
Chosen Option : 2

**Q.14** Read the given statements and conclusions carefully. You have to take the given statements to be true even if they seem to be at variance from commonly known facts. You have to decide which conclusion/s logically follow/s from the given statements.

Statements: Some beds are telephones. All telephones are pillows. Some pillows are cupboards.

Conclusion I: Some pillows are telephones.

Conclusion II: Some beds are pillows.

- Ans**
- 1. Both conclusions (I) and (II) are follow.
  - 2. Only conclusion (I) is follow.
  - 3. Neither conclusion (I) nor (II) is follow.
  - 4. Only conclusion (II) is follow.

Question ID : 264330155914  
Option 1 ID : 264330611062  
Option 2 ID : 264330611059  
Option 3 ID : 264330611061  
Option 4 ID : 264330611060  
Status : Answered  
Chosen Option : 1

Q.15 What should come in place of ? in the given series?

37 36 33 32 29 ?

Ans  1. 28

2. 26

3. 27

4. 24

Question ID : 264330151719

Option 1 ID : 264330594506

Option 2 ID : 264330594504

Option 3 ID : 264330594503

Option 4 ID : 264330594505

Status : Answered

Chosen Option : 1

Q.16 16 is related to 29 following a certain logic. Following the same logic, 85 is related to 98. To which of the following is 53 related to, following the same logic?

Ans  1. 66

2. 62

3. 64

4. 68

Question ID : 264330151594

Option 1 ID : 264330594005

Option 2 ID : 264330594003

Option 3 ID : 264330594004

Option 4 ID : 264330594006

Status : Answered

Chosen Option : 1

Q.17 What should come in place of '?' in the given series?

20 54 156 ? 1380 4134 12396

Ans  1. 506

2. 474

3. 358

4. 462

Question ID : 264330151448

Option 1 ID : 264330593422

Option 2 ID : 264330593421

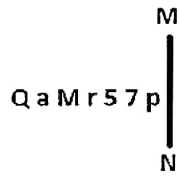
Option 3 ID : 264330593419

Option 4 ID : 264330593420

Status : Answered

Chosen Option : 4

Q.18 Select the correct mirror image of the given figure when the mirror is placed at MN as shown below.



- Ans
- 1. q 7 2 1 M a Q
  - 2. q 7 5 1 M a Q
  - 3. q 7 5 1 M 6 Q
  - 4. q 7 2 1 M 6 Q

Question ID : 264330151524

Option 1 ID : 264330593725

Option 2 ID : 264330593724

Option 3 ID : 264330593723

Option 4 ID : 264330593726

Status : Answered

Chosen Option : 4

Q.19 Abeen, Bela, Deepa, Farheen, Heera, and Girish are sitting around a circular table facing the centre. Girish sits 2nd to the right of Deepa. Farheen sits to the immediate left of Girish. Bela sits 2nd to the right of Farheen. Heera is an immediate neighbour of Deepa. Who sits to the immediate right of Bela?

- Ans
- 1. Girish
  - 2. Deepa
  - 3. Heera
  - 4. Abeer

Question ID : 264330155656

Option 1 ID : 264330610030

Option 2 ID : 264330610027

Option 3 ID : 264330610028

Option 4 ID : 264330610029

Status : Answered

Chosen Option : 4

Q.20 If F means '+', C means '\*', D means '-', A means '÷', then what will come in place of the question mark (?) in the following equation?

$$65 A 39 D 3 F 23 C 2 = ?$$

- Ans
- 1. 64
  - 2. 32
  - 3. 56
  - 4. 42

Question ID : 264330154689

Option 1 ID : 264330606222

Option 2 ID : 264330606219

Option 3 ID : 264330606221

Option 4 ID : 264330606220

Status : Answered

Chosen Option : 2

Q.1 The 11th Fundamental Duty provides opportunities for education for the \_\_\_\_\_ age group of children.

- Ans  1. 6-14  
 2. 5-15  
 3. 2-11  
 4. 6-18

Question ID : 264330159901  
Option 1 ID : 264330626952  
Option 2 ID : 264330626954  
Option 3 ID : 264330626953  
Option 4 ID : 264330626951  
Status : Answered  
Chosen Option : 1

Q.2 As per the Census of India 2011, which Union Territory recorded the lowest population growth rate?

- Ans  1. Lakshadweep  
 2. Delhi  
 3. Daman and Diu  
 4. Chandigarh

Question ID : 264330161553  
Option 1 ID : 264330633540  
Option 2 ID : 264330633541  
Option 3 ID : 264330633539  
Option 4 ID : 264330633542  
Status : Answered  
Chosen Option : 1

Q.3 In which year were the Arms Act and Vernacular Press Act passed?

- Ans  1. 1878  
 2. 1879  
 3. 1877  
 4. 1876

Question ID : 264330160876  
Option 1 ID : 264330630837  
Option 2 ID : 264330630838  
Option 3 ID : 264330630836  
Option 4 ID : 264330630835  
Status : Answered  
Chosen Option : 4

Q.4 In which state of India is Kaziranga National Park located?

- Ans  1. Assam  
 2. Gujarat  
 3. Karnataka  
 4. West Bengal

Question ID : 264330161497  
Option 1 ID : 264330633315  
Option 2 ID : 264330633317  
Option 3 ID : 264330633316  
Option 4 ID : 264330633318  
Status : Answered  
Chosen Option : 1



Q.5 Whose autobiography is titled 'Ace against Odds'?

- Ans
- 1. Sania Mirza
  - 2. Saina Nehwal
  - 3. Mirabai Chanu
  - 4. Mary Kom

Question ID : 264330155450  
Option 1 ID : 264330609205  
Option 2 ID : 264330609204  
Option 3 ID : 264330609206  
Option 4 ID : 264330609203  
Status : Answered  
Chosen Option : 1

Q.6 By what name are the flat membrane-enclosed sacs present in the Golgi apparatus known?

- Ans
- 1. Lamellae
  - 2. Cisternae
  - 3. Cristae
  - 4. Stroma

Question ID : 264330161083  
Option 1 ID : 264330631663  
Option 2 ID : 264330631664  
Option 3 ID : 264330631665  
Option 4 ID : 264330631666  
Status : Answered  
Chosen Option : 2

Q.7 The Swarna Jayanti Shahari Rojgar Yojana (SJSRY) was launched in the year \_\_\_\_\_ by Government of India.

- Ans
- 1. 1990
  - 2. 1997
  - 3. 2010
  - 4. 2004

Question ID : 264330161574  
Option 1 ID : 264330633623  
Option 2 ID : 264330633624  
Option 3 ID : 264330633626  
Option 4 ID : 264330633625  
Status : Answered  
Chosen Option : 4

Q.8 Manna Dey was a famous personality of India in the field of \_\_\_\_\_.

- Ans
- 1. Science
  - 2. Games
  - 3. Politics
  - 4. Music

Question ID : 264330155512  
Option 1 ID : 264330609453  
Option 2 ID : 264330609454  
Option 3 ID : 264330609452  
Option 4 ID : 264330609451  
Status : Answered  
Chosen Option : 4

Q.9 'Chapchar Kut' is a festival from the state of \_\_\_\_\_. It is celebrated during March after the completion of the most arduous task of Jhum operation i.e., jungle clearing (clearing of the remnants of burning).

- Ans
- 1. Mizoram
  - 2. Nagaland
  - 3. Jharkhand
  - 4. Chhattisgarh

Question ID : 264330160822  
Option 1 ID : 264330630622  
Option 2 ID : 264330630619  
Option 3 ID : 264330630620  
Option 4 ID : 264330630621  
Status : Not Answered  
Chosen Option : --

Q.10 In which event at the 2023 ISSF Junior World Cup Championships did Amanpreet Singh win a gold medal for India?

- Ans
- 1. Men's 10 m air rifle
  - 2. Men's 10 m air pistol team
  - 3. Men's 25 m pistol
  - 4. Men's 25 m rapid fire pistol

Question ID : 264330161141  
Option 1 ID : 264330631896  
Option 2 ID : 264330631898  
Option 3 ID : 264330631895  
Option 4 ID : 264330631897  
Status : Answered  
Chosen Option : 3

Q.11 In which of the following States was the 2023 World Squash Championship held?

- Ans  1. Kerala  
 2. Tamil Nadu  
 3. Odisha  
 4. Karnataka

Question ID : 264330161143  
Option 1 ID : 264330631906  
Option 2 ID : 264330631905  
Option 3 ID : 264330631904  
Option 4 ID : 264330631903  
Status : Answered  
Chosen Option : 4

Q.12 Mumtaz Khan was named 'FIH Women's Rising Star of the Year' in 2022. She plays which of the following sports?

- Ans  1. Hockey  
 2. Fencing  
 3. Football  
 4. High Jump

Question ID : 264330158360  
Option 1 ID : 264330620800  
Option 2 ID : 264330620802  
Option 3 ID : 264330620799  
Option 4 ID : 264330620801  
Status : Answered  
Chosen Option : 2

Q.13 Which of the following is a common financial service provided by Micro Finance Institutions?

- Ans  1. Mortgage loans for luxury homes  
 2. Investment advisory services for high-net-worth individuals  
 3. Credit card issuance  
 4. Small loans to low-income individuals for entrepreneurial activities

Question ID : 264330157286  
Option 1 ID : 264330616508  
Option 2 ID : 264330616510  
Option 3 ID : 264330616507  
Option 4 ID : 264330616509  
Status : Answered  
Chosen Option : 4

Q.14 The Rathwas, who dwell in the state of \_\_\_\_\_, perform the Rathwa dance on the occasion of Holi (festival of colours).

- Ans  1. Andhra Pradesh  
 2. Telangana  
 3. Maharashtra  
 4. Gujarat

Question ID : 264330160800  
Option 1 ID : 264330630532  
Option 2 ID : 264330630534  
Option 3 ID : 264330630531  
Option 4 ID : 264330630533  
Status : Answered  
Chosen Option : 2

Q.15 Which Article of the Constitution of India provides for a governor for each state?

- Ans
- 1. Article 173
  - 2. Article 157
  - 3. Article 153
  - 4. Article 156

Question ID : 264330161294  
Option 1 ID : 264330632506  
Option 2 ID : 264330632505  
Option 3 ID : 264330632503  
Option 4 ID : 264330632504  
Status : Answered  
Chosen Option : 2

Q.16 Who was the first Woman President of Indian National Congress?

- Ans
- 1. Sarojini Naidu
  - 2. Asaf Ali
  - 3. Annie Besant
  - 4. Usha Mehta

Question ID : 264330162342  
Option 1 ID : 264330636695  
Option 2 ID : 264330636697  
Option 3 ID : 264330636698  
Option 4 ID : 264330636696  
Status : Answered  
Chosen Option : 3

Q.17 \_\_\_\_\_ was a star of the Kathak dance form described as 'Nritya Samragini' (the empress of dance) by Rabindranath Tagore.

- Ans
- 1. Sitara Devi
  - 2. Rukmini Devi Arundale
  - 3. Mrinalini Sarabhai
  - 4. Mallika Sarabhai

Question ID : 264330160811  
Option 1 ID : 264330630577  
Option 2 ID : 264330630575  
Option 3 ID : 264330630578  
Option 4 ID : 264330630576  
Status : Answered  
Chosen Option : 4

Q.18 Which of the following methods is used to calculate national income by summing up the total spending on final goods and services in an economy?

- Ans
- 1. Value-added method
  - 2. Output method
  - 3. Expenditure method
  - 4. Income method

Question ID : 264330157316  
Option 1 ID : 264330616630  
Option 2 ID : 264330616629  
Option 3 ID : 264330616628  
Option 4 ID : 264330616627  
Status : Answered  
Chosen Option : 3

Q.19 Former Governor of Jharkhand from the year 2004 to 2009, \_\_\_\_\_, passed away in Lucknow in 2022.

- Ans
- 1. Ramesh Bais
  - 2. Syed Ahmed
  - 3. Syed Sibtey Razi
  - 4. Kateekal Sankaranarayanan

Question ID : 264330161405  
Option 1 ID : 264330632950  
Option 2 ID : 264330632949  
Option 3 ID : 264330632948  
Option 4 ID : 264330632947  
Status : Answered  
Chosen Option : 2

Q.20 According to the IUPAC nomenclature system, which functional group is characterised by the presence of a -OH group, usually in a water-like bent shape?

- Ans
- 1. Carbonyls
  - 2. Amines
  - 3. Alcohols
  - 4. Esters

Question ID : 264330161051  
Option 1 ID : 264330631536  
Option 2 ID : 264330631538  
Option 3 ID : 264330631535  
Option 4 ID : 264330631537  
Status : Answered  
Chosen Option : 1

Q.21 Ajmer Sharif is the shrine of which of the following Sufi saints?

- Ans
- 1. Mohammad Ghori
  - 2. Mohammad Bin Tughlaq
  - 3. Khwaja Moinuddin Chishti
  - 4. Bhaktiyar Khilji

Question ID : 264330160765  
Option 1 ID : 264330630394  
Option 2 ID : 264330630391  
Option 3 ID : 264330630393  
Option 4 ID : 264330630392  
Status : Answered  
Chosen Option : 3

Q.22 Whose autobiography is titled as 'Wings of Fire: An Autobiography'?

- Ans
- 1. E Sreedharan
  - 2. APJ Abdul Kalam
  - 3. Rajender Singh
  - 4. Satyabhama Das Biju

Question ID : 264330155446  
Option 1 ID : 264330609188  
Option 2 ID : 264330609187  
Option 3 ID : 264330609189  
Option 4 ID : 264330609190  
Status : Answered  
Chosen Option : 2

Q.23 Which of the following Carnatic musicians was the first to receive the Bharat Ratna?

- Ans
- 1. Tyagaraja
  - 2. MS Subbulakshmi
  - 3. Syama Sastri
  - 4. KJ Yesudas

Question ID : 264330161767  
Option 1 ID : 264330634398  
Option 2 ID : 264330634395  
Option 3 ID : 264330634397  
Option 4 ID : 264330634396  
Status : Answered  
Chosen Option : 2

Q.24 Which of the following is the highest navigable lake in the world?

- Ans
- 1. Huron
  - 2. Titicaca
  - 3. Superior
  - 4. Como

Question ID : 264330161324  
Option 1 ID : 264330632625  
Option 2 ID : 264330632624  
Option 3 ID : 264330632623  
Option 4 ID : 264330632626  
Status : Answered  
Chosen Option : 2

Q.25 Rukmini Devi Arundale was associated with which Indian classical dance form?

- Ans
- 1. Manipuri
  - 2. Kathak
  - 3. Bharatanatyam
  - 4. Mohiniyattam

Question ID : 264330155520  
Option 1 ID : 264330609485  
Option 2 ID : 264330609486  
Option 3 ID : 264330609483  
Option 4 ID : 264330609484  
Status : Answered  
Chosen Option : 3

Section : English Language and Comprehension

Q.1 Select the option that rectifies the spelling of the underlined word in the given sentence.

He felt priviledged to have received the country's greatest honour.

- Ans
- 1. previllaged
  - 2. privileged
  - 3. privilegede
  - 4. privilaged

Question ID : 264330153225  
Option 1 ID : 264330600460  
Option 2 ID : 264330600461  
Option 3 ID : 264330600459  
Option 4 ID : 264330600462  
Status : Answered  
Chosen Option : 2

Q.2 Select the option that can be used as a one-word substitute for the underlined segment in the following sentence.

Hundreds of people were removed from a place by the government recently due to a war-like situation.

- Ans
- 1. assassinated
  - 2. evacuated
  - 3. invaded
  - 4. terminated

Question ID : 264330152716  
Option 1 ID : 264330598466  
Option 2 ID : 264330598464  
Option 3 ID : 264330598465  
Option 4 ID : 264330598463  
Status : Answered  
Chosen Option : 2

**Q.3** Select the most appropriate meaning of the underlined idiom in the following sentence.

Buying a home in the city centre will cost you an arm and a leg.

- Ans**
- 1. Nothing extra
  - 2. A large amount of money
  - 3. A small amount of money
  - 4. Physical pain

Question ID : 264330153048  
Option 1 ID : 264330599762  
Option 2 ID : 264330599760  
Option 3 ID : 264330599759  
Option 4 ID : 264330599761  
Status : Answered  
Chosen Option : 2

**Q.4** Select the option that can be used as a one-word substitute for the given group of words.

One who has love for mankind

OR

One who makes an active effort to promote human welfare

- Ans**
- 1. Philosopher
  - 2. Patriot
  - 3. Autocrat
  - 4. Philanthropist

Question ID : 264330153554  
Option 1 ID : 264330601716  
Option 2 ID : 264330601717  
Option 3 ID : 264330601718  
Option 4 ID : 264330601715  
Status : Answered  
Chosen Option : 4

**Q.5** Select the most appropriate meaning of the given idiom.  
From scratch

- Ans**
- 1. From a skin disease
  - 2. From the beginning
  - 3. From utter disorder
  - 4. From death

Question ID : 264330156173  
Option 1 ID : 264330612091  
Option 2 ID : 264330612094  
Option 3 ID : 264330612092  
Option 4 ID : 264330612093  
Status : Answered  
Chosen Option : 2



Q.6 The following sentence has been divided into four parts. Identify the part that contains an error.

(A) Four divided by / (B) two is coming / (C) out to / (D) be two.

- Ans  1. D  
 2. C  
 3. B  
 4. A

Question ID : 264330152628  
Option 1 ID : 264330598118  
Option 2 ID : 264330598117  
Option 3 ID : 264330598116  
Option 4 ID : 264330598115  
Status : Answered  
Chosen Option : 3

Q.7 Select the most appropriate meaning of the underlined idiom.

The detective went the whole nine yards in his investigation.

- Ans  1. Measuring every step  
 2. Everything, all the way  
 3. Close affinity with the law  
 4. Taking the distant call

Question ID : 264330153147  
Option 1 ID : 264330600148  
Option 2 ID : 264330600150  
Option 3 ID : 264330600149  
Option 4 ID : 264330600147  
Status : Answered  
Chosen Option : 2

Q.8 Select the most appropriate option to fill in the blank.

Many soldiers marched in \_\_\_\_\_ at the international border.

- Ans  1. dress  
 2. uniform  
 3. fabric  
 4. clothes

Question ID : 264330152583  
Option 1 ID : 264330597935  
Option 2 ID : 264330597937  
Option 3 ID : 264330597938  
Option 4 ID : 264330597936  
Status : Answered  
Chosen Option : 2

**Q.9** The following sentence has been split into four segments. Identify the segment that contains a grammatical error.

This scripture / has been /translated in / seventy languages.

- Ans**
- 1. seventy languages
  - 2. This scripture
  - 3. has been
  - 4. translated in

Question ID : 264330155431  
Option 1 ID : 264330609134  
Option 2 ID : 264330609131  
Option 3 ID : 264330609132  
Option 4 ID : 264330609133  
Status : Answered  
Chosen Option : 4

**Q.10** Select the sentence that has NO spelling errors.

- Ans**
- 1. The elderly woman was delighted to receive a bouquet of fragrant flowers from her thoughtful grandson, who had come to visit her at the nursing home
  - 2. The elderly woman was delighted to receive a bouque of fragrant flowers from her thoughtfull grandson, who had come to visit her at the nursing home
  - 3. The elderly woman was deligted to receive a bouque of fregrant flowers from her thoughtful grandson, who had come to visit her at the nursing home
  - 4. The elderly woman was deligted to recive a bouquet of fragrant flowers from her thoughtfull grandson, who had come to visit her at the nursing home

Question ID : 264330152648  
Option 1 ID : 264330598196  
Option 2 ID : 264330598198  
Option 3 ID : 264330598195  
Option 4 ID : 264330598197  
Status : Answered  
Chosen Option : 1

**Q.11** Select the most appropriate option to fill in the blank.

She was known for her \_\_\_\_\_ attention to detail, always making sure everything was perfectly organised and in its proper place.

- Ans**
- 1. fastidious
  - 2. scornful
  - 3. tedious
  - 4. exact

Question ID : 264330151863  
Option 1 ID : 264330595073  
Option 2 ID : 264330595072  
Option 3 ID : 264330595071  
Option 4 ID : 264330595074  
Status : Answered  
Chosen Option : 4

Q.12 Select the option that can be used as a one-word substitute for the given group of words.

**The killing of a king**

- Ans  1. Regicide  
 2. Fratricide  
 3. Sororicide  
 4. Patricide

Question ID : 264330151868  
Option 1 ID : 264330595091  
Option 2 ID : 264330595094  
Option 3 ID : 264330595092  
Option 4 ID : 264330595093  
Status : Answered  
Chosen Option : 1

Q.13 Select the most appropriate option to fill in the blanks.

(Ø = No article)

\_\_\_ doctor suggested doing some eye exercises and wearing \_\_\_ pair of powered glasses.

- Ans  1. A; a  
 2. Ø; a  
 3. A; Ø  
 4. The; a

Question ID : 264330151329  
Option 1 ID : 264330592945  
Option 2 ID : 264330592944  
Option 3 ID : 264330592946  
Option 4 ID : 264330592943  
Status : Answered  
Chosen Option : 1

Q.14 Parts of the following sentence have been given as options. Select the option that contains an error.

**They have less books than I have.**

- Ans  1. I have  
 2. They have  
 3. than  
 4. less books

Question ID : 264330152802  
Option 1 ID : 264330598802  
Option 2 ID : 264330598799  
Option 3 ID : 264330598801  
Option 4 ID : 264330598800  
Status : Answered  
Chosen Option : 4

**Q.15** Select the most appropriate meaning of the given idiom.  
**Into hot water**

- Ans**
- 1. Not on good terms
  - 2. In favour with
  - 3. Came to nothing
  - 4. Into trouble

Question ID : 264330152574

Option 1 ID : 264330597899

Option 2 ID : 264330597901

Option 3 ID : 264330597902

Option 4 ID : 264330597900

Status : Answered

Chosen Option : 4

**Q.16** Select the most appropriate synonym of the bracketed word in the following sentence to fill in the blank.

The sun was setting over the mountains, painting the sky with \_\_\_\_\_(energetic) shades of orange and pink.

- Ans**
- 1. vibrant
  - 2. reactive
  - 3. faded
  - 4. bright

Question ID : 264330152661

Option 1 ID : 264330598247

Option 2 ID : 264330598250

Option 3 ID : 264330598248

Option 4 ID : 264330598249

Status : Answered

Chosen Option : 1

**Q.17** The following sentence has been split into four segments. Identify the segment that contains an error.

She was writing / a letter to her grandmother / when the power / gone out.

- Ans**
- 1. gone out
  - 2. a letter to her grandmother
  - 3. She was writing
  - 4. when the power

Question ID : 264330155319

Option 1 ID : 264330608718

Option 2 ID : 264330608716

Option 3 ID : 264330608715

Option 4 ID : 264330608717

Status : Answered

Chosen Option : 1

**Q.18** Select the most appropriate ANTONYM of the given word.  
**Nonchalant**

- Ans**  1. Flexible  
 2. Caring  
 3. Marvellous  
 4. Covert

Question ID : 264330153539  
Option 1 ID : 264330601661  
Option 2 ID : 264330601660  
Option 3 ID : 264330601662  
Option 4 ID : 264330601659  
Status : Answered  
Chosen Option : 4

**Q.19** Select the most appropriate synonym of the given word.  
**Grief**

- Ans**  1. Pleasure  
 2. Jollity  
 3. Pain  
 4. Content

Question ID : 264330151821  
Option 1 ID : 264330594911  
Option 2 ID : 264330594914  
Option 3 ID : 264330594912  
Option 4 ID : 264330594913  
Status : Answered  
Chosen Option : 3

**Q.20** There is a spelling error in the given sentence. Select the option that contains the **INCORRECTLY** spelt word.  
**The profesor's niece was planning a pleasant surprise for him.**

- Ans**  1. profesor  
 2. planning  
 3. pleasant  
 4. niece

Question ID : 264330152835  
Option 1 ID : 264330598931  
Option 2 ID : 264330598933  
Option 3 ID : 264330598934  
Option 4 ID : 264330598932  
Status : Answered  
Chosen Option : 1

**Comprehension:**

In the following passage, some words have been deleted. Read the passage carefully and select the most appropriate option to fill in each blank.

Tim Cook, CEO of Apple who has recently \_\_\_\_\_ (1) India, has some \_\_\_\_\_ (2) for parents: limit the screen time for children. He says: "Kids are born \_\_\_\_\_ (3), they're digital kids now. And it is, I think, important to set some hard rails around it." Various surveys of Indian children show alarming findings. A Saurashtra University survey of \_\_\_\_\_ (4) a thousand children and their parents in Rajkot finds that 92% students prefer playing mobile games over playing outside and 78% students \_\_\_\_\_ (5) to having their phone while having meals. In another survey by Local Circles, nearly 55% of parents admit that their children aged 9-13 have access to a smartphone throughout the day.

**SubQuestion No : 21**

**Q.21** Select the most appropriate option to fill in blank number 1.

- Ans**  1. visiting  
 2. visited  
 3. visit  
 4. visits

Question ID : 264330152760

Option 1 ID : 264330598637

Option 2 ID : 264330598636

Option 3 ID : 264330598635

Option 4 ID : 264330598638

Status : Answered

Chosen Option : 2

**Comprehension:**

In the following passage, some words have been deleted. Read the passage carefully and select the most appropriate option to fill in each blank.

Tim Cook, CEO of Apple who has recently \_\_\_\_\_ (1) India, has some \_\_\_\_\_ (2) for parents: limit the screen time for children. He says: "Kids are born \_\_\_\_\_ (3), they're digital kids now. And it is, I think, important to set some hard rails around it." Various surveys of Indian children show alarming findings. A Saurashtra University survey of \_\_\_\_\_ (4) a thousand children and their parents in Rajkot finds that 92% students prefer playing mobile games over playing outside and 78% students \_\_\_\_\_ (5) to having their phone while having meals. In another survey by Local Circles, nearly 55% of parents admit that their children aged 9-13 have access to a smartphone throughout the day.

**SubQuestion No : 22**

**Q.22** Select the most appropriate option to fill in blank number 2.

- Ans**  1. suggesting  
 2. advise  
 3. suggest  
 4. advice

Question ID : 264330152761

Option 1 ID : 264330598642

Option 2 ID : 264330598639

Option 3 ID : 264330598641

Option 4 ID : 264330598640

Status : Answered

Chosen Option : 4

**Comprehension:**

In the following passage, some words have been deleted. Read the passage carefully and select the most appropriate option to fill in each blank.

Tim Cook, CEO of Apple who has recently \_\_\_\_\_ (1) India, has some \_\_\_\_\_ (2) for parents: limit the screen time for children. He says: "Kids are born \_\_\_\_\_ (3), they're digital kids now. And it is, I think, important to set some hard rails around it." Various surveys of Indian children show alarming findings. A Saurashtra University survey of \_\_\_\_\_ (4) a thousand children and their parents in Rajkot finds that 92% students prefer playing mobile games over playing outside and 78% students \_\_\_\_\_ (5) to having their phone while having meals. In another survey by Local Circles, nearly 55% of parents admit that their children aged 9-13 have access to a smartphone throughout the day.

**SubQuestion No : 23**

**Q.23** Select the most appropriate option to fill in blank number 3.

- Ans**
- 1. digitally
  - 2. digitalise
  - 3. digital
  - 4. digitalised

Question ID : 264330152762

Option 1 ID : 264330598644

Option 2 ID : 264330598645

Option 3 ID : 264330598643

Option 4 ID : 264330598646

Status : Answered

Chosen Option : 4

**Comprehension:**

In the following passage, some words have been deleted. Read the passage carefully and select the most appropriate option to fill in each blank.

Tim Cook, CEO of Apple who has recently \_\_\_\_\_ (1) India, has some \_\_\_\_\_ (2) for parents: limit the screen time for children. He says: "Kids are born \_\_\_\_\_ (3), they're digital kids now. And it is, I think, important to set some hard rails around it." Various surveys of Indian children show alarming findings. A Saurashtra University survey of \_\_\_\_\_ (4) a thousand children and their parents in Rajkot finds that 92% students prefer playing mobile games over playing outside and 78% students \_\_\_\_\_ (5) to having their phone while having meals. In another survey by Local Circles, nearly 55% of parents admit that their children aged 9-13 have access to a smartphone throughout the day.

**SubQuestion No : 24**

**Q.24** Select the most appropriate option to fill in blank number 4.

- Ans**
- 1. closer than
  - 2. bigger than
  - 3. above than
  - 4. more than

Question ID : 264330152763

Option 1 ID : 264330598650

Option 2 ID : 264330598649

Option 3 ID : 264330598647

Option 4 ID : 264330598648

Status : Answered

Chosen Option : 4

**Comprehension:**

In the following passage, some words have been deleted. Read the passage carefully and select the most appropriate option to fill in each blank.

Tim Cook, CEO of Apple who has recently \_\_\_\_\_ (1) India, has some \_\_\_\_\_ (2) for parents: limit the screen time for children. He says: "Kids are born \_\_\_\_\_ (3), they're digital kids now. And it is, I think, important to set some hard rails around it." Various surveys of Indian children show alarming findings. A Saurashtra University survey of \_\_\_\_\_ (4) a thousand children and their parents in Rajkot finds that 92% students prefer playing mobile games over playing outside and 78% students \_\_\_\_\_ (5) to having their phone while having meals. In another survey by Local Circles, nearly 55% of parents admit that their children aged 9-13 have access to a smartphone throughout the day.

**SubQuestion No : 25**

**Q.25** Select the most appropriate option to fill in blank number 5.

- Ans**
- 1. habituated
  - 2. habituating
  - 3. will be habituating
  - 4. are habituated

Question ID : 264330152764

Option 1 ID : 264330598653

Option 2 ID : 264330598652

Option 3 ID : 264330598651

Option 4 ID : 264330598654

Status : Answered

Chosen Option : 4