

Section : General English

Q.1 Select the antonym of the given word.

Attract

- Ans
- 1. Lure
 - 2. Repel
 - 3. Allure
 - 4. Invite

Question ID : 2390872057
Status : Answered
Chosen Option : 2

Q.2 Identify the segment in the sentence which contains the grammatical error from the given options.

Put off the air conditioner unless you will catch a cold

- Ans
- 1. catch a cold
 - 2. you will
 - 3. Put off the air conditioner
 - 4. unless

Question ID : 2390872041
Status : Answered
Chosen Option : 4

Q.3 Select the most appropriate option to substitute the underlined segment in the given sentence. If there is no need to substitute it, select option 'No substitution required'.

The trainee hand a copy of his appointment letter to the HR head.

- Ans
- 1. handed of a copy
 - 2. handed over a copy
 - 3. No substitution required
 - 4. hand over the copy

Question ID : 2390872046
Status : Answered
Chosen Option : 2

Q.4 Select the most appropriate word to fill in the blank and make a meaningful sentence.

She seemed

at

- Ans
- 1. interested
 - 2. excited
 - 3. uninterested
 - 4. enthusiastic

Question ID : 2390872065
Status : Answered
Chosen Option : 3

Comprehension:

In the following passage some words have been deleted. Fill in the blanks with the help of the alternatives given. Select the most appropriate option for each blank.

Louis Braille was a French educator and inventor (1)____ a system of reading and writing for the visually impaired. His system (2)____ virtually unchanged to date and is known worldwide simply as 'braille'. Blinded (3)____ both eyes as a result of an early childhood (4)____, Braille mastered his disability while still a boy. He (5)____ at school and received a scholarship to the Royal Institute for Blind Youth.

SubQuestion No : 5

Q.5 Select the most appropriate option to fill in blank No.1.

- Ans
- 1. from
 - 2. by
 - 3. in
 - 4. of

Question ID : 2390872048
Status : Answered
Chosen Option : 4

Comprehension:

In the following passage some words have been deleted. Fill in the blanks with the help of the alternatives given. Select the most appropriate option for each blank.

Louis Braille was a French educator and inventor (1)____ a system of reading and writing for the visually impaired. His system (2)____ virtually unchanged to date and is known worldwide simply as 'braille'. Blinded (3)____ both eyes as a result of an early childhood (4)____, Braille mastered his disability while still a boy. He (5)____ at school and received a scholarship to the Royal Institute for Blind Youth.

SubQuestion No : 6

Q.6 Select the most appropriate option to fill in blank No.2.

- Ans
- 1. remains
 - 2. leaves
 - 3. rests
 - 4. preserves

Question ID : 2390872049
Status : Answered
Chosen Option : 1

Comprehension:

In the following passage some words have been deleted. Fill in the blanks with the help of the alternatives given. Select the most appropriate option for each blank.

Louis Braille was a French educator and inventor (1)____ a system of reading and writing for the visually impaired. His system (2)____ virtually unchanged to date and is known worldwide simply as 'braille'. Blinded (3)____ both eyes as a result of an early childhood (4)____, Braille

mastered his disability while still a boy. He (5)_____ at school and received a scholarship to the Royal Institute for Blind Youth.

SubQuestion No : 7

Q.7 Select the most appropriate option to fill in blank No.3.

- Ans
- 1. with
 - 2. on
 - 3. to
 - 4. in

Question ID : 2390872050

Status : Answered

Chosen Option : 1

Comprehension:

In the following passage some words have been deleted. Fill in the blanks with the help of the alternatives given. Select the most appropriate option for each blank.

Louis Braille was a French educator and inventor (1)_____ a system of reading and writing for the visually impaired. His system (2)_____ virtually unchanged to date and is known worldwide simply as 'braille'. Blinded (3)_____ both eyes as a result of an early childhood (4)_____, Braille mastered his disability while still a boy. He (5)_____ at school and received a scholarship to the Royal Institute for Blind Youth.

SubQuestion No : 8

Q.8 Select the most appropriate option to fill in blank No.4.

- Ans
- 1. provision
 - 2. accident
 - 3. plan
 - 4. occasion

Question ID : 2390872051

Status : Answered

Chosen Option : 2

Comprehension:

In the following passage some words have been deleted. Fill in the blanks with the help of the alternatives given. Select the most appropriate option for each blank.

Louis Braille was a French educator and inventor (1)_____ a system of reading and writing for the visually impaired. His system (2)_____ virtually unchanged to date and is known worldwide simply as 'braille'. Blinded (3)_____ both eyes as a result of an early childhood (4)_____, Braille mastered his disability while still a boy. He (5)_____ at school and received a scholarship to the Royal Institute for Blind Youth.

SubQuestion No : 9

Q.9 Select the most appropriate option to fill in blank No.5.

- Ans
- 1. recorded
 - 2. talented
 - 3. skilled
 - 4. excelled

Question ID : 2390872052

Status : Answered

Chosen Option : 4

Q.10. Select the correctly spelt word.

- Ans
- 1. Modrran
 - 2. Modern
 - 3. Modren
 - 4. Moddern

Question ID : 2390872064
Status : Answered
Chosen Option : 2

Q.11 Select the synonym of the given word.

Apparent

- Ans
- 1. Obsolete
 - 2. Obscure
 - 3. Obvious
 - 4. Objective

Question ID : 2390872055
Status : Answered
Chosen Option : 3

Q.12 Identify the segment in the sentence which contains the grammatical error from the given options.

The company has invested a great deal of time and effort to setting up new training schemes.

- Ans
- 1. new training schemes
 - 2. invested a great deal of
 - 3. time and effort to setting up
 - 4. The company has

Question ID : 2390872043
Status : Answered
Chosen Option : 3

Q.13 Select the most appropriate word to fill in the blank and make a meaningful sentence.

The author touched the _____ of her career with her second novel which won the Pulitzer Prize.

- Ans
- 1. peak
 - 2. peek
 - 3. base
 - 4. nadir

Question ID : 2390872066
Status : Answered
Chosen Option : 1

Q.14 Select the word which means the same as the group of words given.

One who works very hard

- Ans
- 1. Exhausted

- 2. Exploited
- 3. Labourer
- 4. Industrious

Question ID : 2390872062
Status : Answered
Chosen Option : 3

Q.15 Select the most appropriate option to fill in the blank and make a grammatically correct sentence.

The bodies ____ identified as those of two suspected drug dealers.

- Ans
- 1. was
 - 2. were
 - 3. have
 - 4. had

Question ID : 2390872054
Status : Answered
Chosen Option : 2

Q.16 Identify the segment in the sentence which contains the grammatical error from the given options.

It's important for media to be more responsibly and careful.

- Ans
- 1. and careful
 - 2. It's important
 - 3. more responsibly
 - 4. for media to be

Question ID : 2390872042
Status : Answered
Chosen Option : 3

Q.17 Select the word which means the same as the group of words given.

A person who wastes his money on luxury

- Ans
- 1. Monarch
 - 2. Expensive
 - 3. Extravagant
 - 4. Frugal

Question ID : 2390872061
Status : Answered
Chosen Option : 3

Q.18 Select the meaning of the given idiom.

To pour oil in troubled water

- Ans
- 1. To calm a dispute
 - 2. To raise a controversy
 - 3. To light a fire

4. To create tension

Question ID : 2390872060
Status : Answered
Chosen Option : 4

Q.19 Select the most appropriate option to substitute the underlined segment in the given sentence. If there is no need to substitute it, select option 'No substitution required'.

Despite spending six years in politics, he are still regard by many as the new kid on the block.

- Ans
- 1. No substitution required
 - 2. he is still regard
 - 3. he is still regarded
 - 4. he are still regarding

Question ID : 2390872045
Status : Answered
Chosen Option : 3

Q.20 Select the correctly spelt word.

- Ans
- 1. Elimentary
 - 2. Elementary
 - 3. Elimantry
 - 4. Eleantry

Question ID : 2390872063
Status : Answered
Chosen Option : 2

Q.21 Select the most appropriate option to fill in the blank and make a grammatically correct sentence.

I was determined not to stay in hospital for any longer ____ was strictly necessary.

- Ans
- 1. than
 - 2. that
 - 3. when
 - 4. then

Question ID : 2390872053
Status : Answered
Chosen Option : 1

Q.22 Select the synonym of the given word.

Slender

- Ans
- 1. Slim
 - 2. Slippery
 - 3. Strong
 - 4. Sturdy

Status : **Not Attempted and Marked For Review**

Chosen Option : --

Q.23 Select the meaning of the given idiom.

Fair's fair

- Ans
- 1. Fair complexion
 - 2. White supremacy
 - 3. Just treatment
 - 4. Disappointed

Question ID : 2390872059

Status : **Not Attempted and Marked For Review**

Chosen Option : --

Q.24 Select the antonym of the given word.

Hopeful

- Ans
- 1. Optimistic
 - 2. Cheerful
 - 3. Healthy
 - 4. Pessimistic

Question ID : 2390872058

Status : **Answered**

Chosen Option : 1

Q.25 Select the most appropriate option to substitute the underlined segment in the given sentence. If there is no need to substitute it, select option 'No substitution required'.

The interview was broadcast on the same day he was sworn in as President.

- Ans
- 1. had broadcast
 - 2. No substitution required
 - 3. was broadcasted
 - 4. broadcast

Question ID : 2390872044

Status : **Answered**

Chosen Option : 3

Section : General Intelligence & Reasoning

Q.1 In the following question below are given some statements followed by some conclusions based on those statements. Taking the given statements to be true even if they seem to be at variance from commonly known facts. Read all the conclusions and then decide which of the given conclusion logically follows the given statements.

Statements:

- I. Some flower are soft.
- II. No hard is soft.

Conclusions:

- I. Some hard are flower.
- II. Some soft are flower.

- 2. Both conclusion I and II follows
- 3. Only conclusion I follows
- 4. Neither conclusion follows

Question ID : 2390871901
 Status : Answered
 Chosen Option : 1

Q.2 Select the option that is related to the third term in the same way as the second term is related to the first term.





Plate : Utensil :: Car : ?

- Ans
- 1. Tyre
 - 2. Bike
 - 3. Driver
 - 4. Vehicle

Question ID : 2390871892
 Status : Answered
 Chosen Option : 4

Q.3 Identify the Venn diagram that best represents the relationship among the given classes.

Table, Chair, Refrigerator

- Ans
- 1. 
 - 2. 
 - 3. 
 - 4. 

Question ID : 2390871914
 Status : Answered
 Chosen Option : 4

Q.4 Three of the following four number-pairs are alike in a certain way and one is different. Find the odd one out.

- Ans
- 1. 63 : 3906
 - 2. 15 : 210

3. 18 : 306

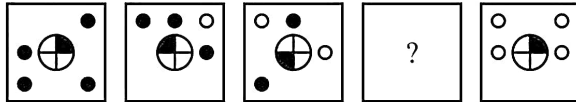
4. 37 : 1331

Question ID : 2390871905

Status : Answered

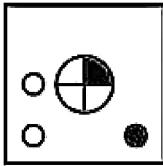
Chosen Option : 4

Q.5 In the following question, select the figure which can be placed at the sign of question mark (?) from the given alternatives.

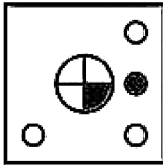


Ans

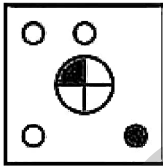
1.



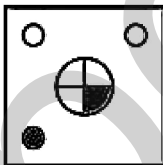
2.



3.



4.



Question ID : 2390871909

Status : Answered

Chosen Option : 2

Q.6 In a certain code language, 'PRO' is written as '48', 'BAL' is written as '14'. What is the code for 'COH' in that code language?

Ans 1. 26

2. 25

3. 24

4. 27

Question ID : 2390871896

Status : Answered

Chosen Option : 2

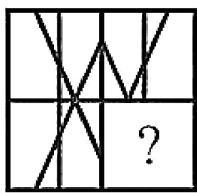
Q.7 Six tailors G1, G2, G3, G4, G5 and G6 are sitting around a circular table facing towards the centre (not necessarily in the same order). G6 is second to the left of G3. G2 is second to

the right of G1. G5 is to the immediate left of G6.
Which tailor is sitting second to the right of G3?

- Ans
- 1. G1
 - 2. G6
 - 3. G5
 - 4. G4

Question ID : 2390871898
Status : **Marked For Review**
Chosen Option : 4

Q.8 Which answer figure will complete the pattern in the question figure?



- Ans
- 1.
 - 2.
 - 3.
 - 4.

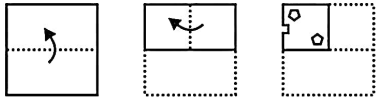
Question ID : 2390871910
Status : **Answered**
Chosen Option : 4

Q.9 Six boys P, Q, R, S, T and G are sitting around a circular table facing towards the centre (not necessarily in the same order). P is to the immediate right of G. Q is second to the left of T. R is second to the left of S. G is second to the right of S. How many boys are sitting between R and T?

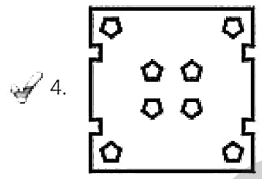
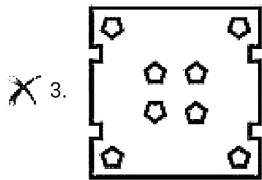
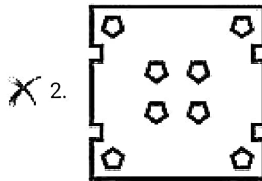
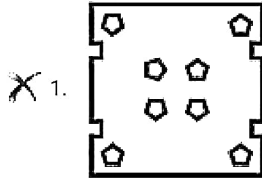
- Ans
- 1. 1
 - 2. 2
 - 3. 3
 - 4. 0

Question ID : 2390871899
Status : **Not Attempted and Marked For Review**
Chosen Option : --

A piece of paper is folded and punched as shown below in the question figures. From the given answer figures, indicate how it will appear when opened?



Ans

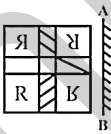


Question ID : 2390871913

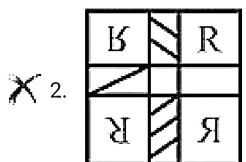
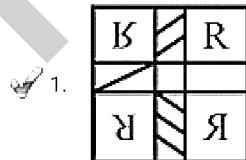
Status : Answered

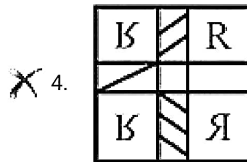
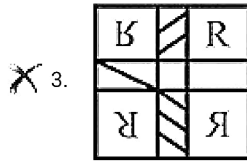
Chosen Option : 4

Q.11 If a mirror is placed on the line AB, then which of the answer figures is the right image of the given figure?



Ans





Question ID : 2390871912
 Status : Answered
 Chosen Option : 1

Q.12 In a certain code language, 'REASON' is written as 'SDBRPM'. What is the code for 'NGLISH' in that code language?

- Ans
- 1. OFMHTG
 - 2. PGMUIH
 - 3. PGNIUH
 - 4. OEMHTG

Question ID : 2390871895
 Status : Answered
 Chosen Option : 1

Q.13 Select the number that can replace the question mark (?) in the following series.

1107, 1127, 1167, 1227, 1307, ?

- Ans
- 1. 1417
 - 2. 1427
 - 3. 1397
 - 4. 1407

Question ID : 2390871903
 Status : Answered
 Chosen Option : 4

Q.14 In a certain code language, 'VERBAL' is written as '225182112', 'CURANT' is written as '3211811420'. What is the code for 'SOLVER' in that code language?

- Ans
- 1. 19152412518
 - 2. 19151222518
 - 3. 19151122518
 - 4. 19151123518

Question ID : 2390871897
 Status : Answered
 Chosen Option : 2

Q.15 In the following question below are given some statements followed by some conclusions based on those statements. Taking the given statements to be true even if they seem to be

the given conclusion logically follows the given statements.

Statements:

- I. All H are B.
- II. All R are B.

Conclusions:

- I. Some H are R.
- II. No H is R.
- III. Some B are R.

- Ans
- 1. Both conclusion II and III follow
 - 2. Conclusion III and either conclusion I or II follows
 - 3. Only conclusion I follows
 - 4. Only conclusion II follows

Question ID : 2390871902

Status : Answered

Chosen Option : 2

Q.16 In the following question, select the number which can be placed at the sign of question mark (?) from the given alternatives.

6 13 72

4 7 24

9 11 ?

- Ans
- 1. 16
 - 2. 20
 - 3. 90
 - 4. 31

Question ID : 2390871906

Status : Not Attempted and Marked For Review

Chosen Option : --

Q.17 Select the option that is related to the third Letter Cluster in the same way as the second Letter Cluster is related to the first Letter Cluster.

ROL : URO :: TAG : ?

- Ans
- 1. XEL
 - 2. XEK
 - 3. WEJ
 - 4. WDJ

Question ID : 2390871893

Status : Answered

Chosen Option : 4

Q.18 Select the option that is related to the third term in the same way as the second term is related to the first term.

Arc : Circle :: ?

- Ans
- 1. Blade : Sofa
 - 2. Clock : Needle

4. House : Room

Question ID : 2390871891
Status : Answered
Chosen Option : 3

Q.19 By interchanging which two signs the equation will be correct?

$$5 - 9 + 16 \times 91 \div 13 = -98$$

- Ans
- 1. \times and $-$
 - 2. $+$ and $-$
 - 3. $+$ and \div
 - 4. \div and $-$

Question ID : 2390871907
Status : Answered
Chosen Option : 2

Q.20 Select the Letter Cluster that can replace the question mark (?) in the following series.

MOND, RUUL, WABT, BGIB, ?

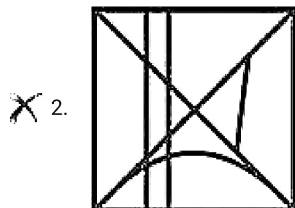
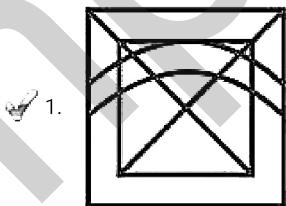
- Ans
- 1. HNQJ
 - 2. HNPS
 - 3. GMPJ
 - 4. GMQJ

Question ID : 2390871890
Status : Answered
Chosen Option : 3

Q.21 From the given answer figures, select the one in which the question figure is hidden/embedded.



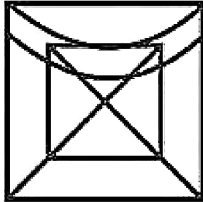
Ans



3.



4.



Question ID : 2390871911

Status : Answered

Chosen Option : 1

Q.22 Six benches N1, N2, N3, N4, N5 and N6 are kept one above the other (not necessarily in the same order). N4 is above N3 and N5 only. There are four benches between N1 and N5. N2 is three places above N3.

Which of the following statement is not correct?

Ans

- 1. N2 is just above N6
- 2. There are two bench between N3 and N2
- 3. N1 is between N6 and N2
- 4. N5 is at the bottom end

Question ID : 2390871900

Status : Answered

Chosen Option : 4

Q.23 After interchanging two signs '+' and 'x' what will be the value of given equation?

$$6 \times 8 \div 32 + 64 - 11 = ?$$

Ans

- 1. 14
- 2. 13
- 3. 10
- 4. 11

Question ID : 2390871908

Status : Answered

Chosen Option : 4

Q.24 In a certain code language, 'MODERN' is written as 'JLABOK'. What is the code for 'NUMBER' in that code language?

Ans

- 1. LSKZCP
- 2. LTKZCP
- 3. KRKYBO
- 4. KRJYBO

Question ID : 2390871894

Status : Answered

Chosen Option : 4

Q.25 Select the number that can replace the question mark (?) in the following series.

36, 73, 147, 295, ?

- Ans
- 1. 621
 - 2. 591
 - 3. 581
 - 4. 691

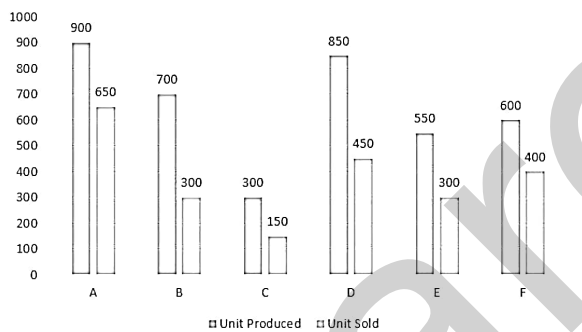
Question ID : 2390871904

Status : Answered

Chosen Option : 2

Section : Numerical Aptitude

Q.1 The Bar Graph shows the Production and Sales of Mobile handsets of various companies A, B, C, D, E & F in a month.



The total units sold by Companies A, B and C together is approximately what per cent of the total units produced by Companies A, B and C together (correct to nearest integer)?

- Ans
- 1. 50
 - 2. 58
 - 3. 62
 - 4. 76

Question ID : 2390871939

Status : Answered

Chosen Option : 2

Q.2 To travel 612 km, Train A takes 9 hours more than Train B. If the speed of the Train A is doubled, it takes 3 hours less than Train B. The speed (in km/h) of Train B is:

- Ans
- 1. 1.2 km/h
 - 2. 51 km/h
 - 3. 30.6 km/h
 - 4. 40.8 km/h

Question ID : 2390871932

Status : Answered

Chosen Option : 4

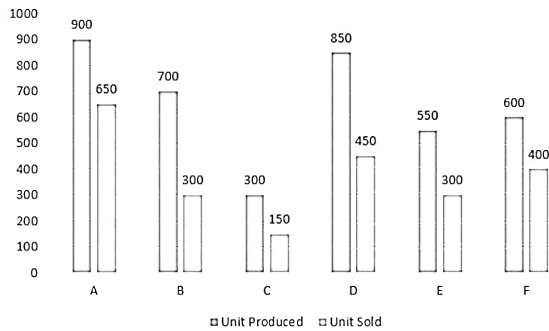
Q.3 A train crosses a stationary object in 25 sec. What is the length of the train if the speed of the train is 25 m/s?

Ans

- 2. 625 m
- 3. 300 m
- 4. 620 m

Question ID : 2390871933
 Status : Answered
 Chosen Option : 2

Q.4 The Bar Graph shows the Production and Sales of Mobile handsets of various companies A, B, C, D, E & F in a month.



Which Company had the highest percentage of sale with respect to its production?

- Ans**
- 1. A
 - 2. D
 - 3. E
 - 4. B

Question ID : 2390871937
 Status : Answered
 Chosen Option : 1

Q.5 On selling an article for ₹2400 a trader earns 25% profit. If he had sold it for ₹2160, then what was his profit or loss percentage?

- Ans**
- 1. $12\frac{1}{2}\%$ loss
 - 2. 15% profit
 - 3. 15% loss
 - 4. $12\frac{1}{2}\%$ profit

Question ID : 2390871924
 Status : Answered
 Chosen Option : 4

Q.6 Shiv Purchased a table for ₹135000 and sold it for ₹110000 what is loss percentage?

- Ans**
- 1. $\frac{500}{27}\%$
 - 2. $\frac{2200}{27}\%$
 - 3. 30%

4. $\frac{270}{22}$ %

Question ID : 2390871923

Status : Answered

Chosen Option : 1

Q.7 The mean of 20 observations was 85, but later it was found that 97 was misread as 79. The correct mean is:

- Ans
- 1. 85.7
 - 2. 85.9
 - 3. 85.8
 - 4. 85.6

Question ID : 2390871918

Status : Answered

Chosen Option : 2

Q.8 The mode of 2, 2, 3, 3, 5, 5, 5, 7, 8, 8, 9, 10 is:

- Ans
- 1. 3
 - 2. 5
 - 3. 2
 - 4. 6

Question ID : 2390871921

Status : Answered

Chosen Option : 2

Q.9 HCF and LCM of two numbers p and q is A and B respectively, if $A + B = p + q$, then the value of $A^3 + B^3$ is:

- Ans
- 1. p^3
 - 2. $p^3 - q^3$
 - 3. q^3
 - 4. $p^3 + q^3$

Question ID : 2390871915

Status : Not Attempted and Marked For Review

Chosen Option : --

Q.10 20% discount is offered on an item. By applying a promo code Rishi wins 4% cash back. What is the equivalent single discount?

- Ans
- 1. 33%
 - 2. 23.20%
 - 3. 22.60%
 - 4. 24%

Question ID : 2390871920

Status : Answered

Chosen Option : 2

Q.11 Two classes M and N have average marks 25 and 40 respectively, the overall average obtained is 30. The ratio of the students in the class M and N is:

- Ans**
- 1. 2 : 1
 - 2. 5 : 6
 - 3. 5 : 3
 - 4. 1 : 2

Question ID : 2390871919

Status : Answered

Chosen Option : 1

Q.12 A fighter plane travels at 1440 km/h. How many meters does it travel in one second?

- Ans**
- 1. 385
 - 2. 394
 - 3. 400
 - 4. 374

Question ID : 2390871931

Status : Answered

Chosen Option : 3

Q.13 0.15% of $33\frac{1}{3}\%$ of 180000 is:

- Ans**
- 1. 900
 - 2. 150
 - 3. 90
 - 4. 9

Question ID : 2390871917

Status : Answered

Chosen Option : 3

Q.14 If the length of a side of the square is equal to that of the diameter of a circle, then the ratio of the area of the square and that of the circle is:

$$\left(\pi = \frac{22}{7}\right)$$

- Ans**
- 1. 11 : 14
 - 2. 28 : 11
 - 3. 11 : 7
 - 4. 14 : 11

Question ID : 2390871934

Status : Answered

Chosen Option : 4

Q.15 A hall with dimensions 25 metres long and 15 metres broad is surrounded by a path of uniform width of 3.5 metres. The cost of flooring the path, at ₹25.50 per square metre is:

- Ans**
- 1. ₹8146.50

2. ₹4186.50
 3. ₹8389.5
 4. ₹9149.50

Question ID : 2390871935
Status : Answered
Chosen Option : 3

Q.16 Three categories of employees A, B and C get wages in the ratio of 1 : 2 : 3 if they get increments of 5%, 10% and 15% respectively. What will be the new ratio of their wages?

- Ans 1. 7 : 21 : 23
 2. 21 : 22 : 23
 3. 7 : 22 : 23
 4. 21 : 44 : 69

Question ID : 2390871927
Status : Answered
Chosen Option : 4

Q.17 a and b are two numbers such that their mean proportion is 6 and third proportion is 48. What is the value of a and b ?

- Ans 1. 6,6
 2. 3,6
 3. 6,12
 4. 3,12

Question ID : 2390871925
Status : Not Attempted and Marked For Review
Chosen Option : --

Q.18 $(x^5 + x^4)^3 \div x^2 = ?$

- Ans 1. x^2
 2. x^{-1}
 3. x
 4. x^3

Question ID : 2390871916
Status : Answered
Chosen Option : 3

Q.19 Daily ticket of a metro train costs ₹120 and Monthly pass costs ₹3276. If Sohan buys the Monthly pass and travels for 30 days in a month then what Percentage does he save?

- Ans 1. 12%
 2. 9%
 3. 18%
 4. 15%

Question ID : 2390871922
Status : **Marked For Review**
Chosen Option : 2

Q.20 Ramesh borrowed ₹12000 at 13% per annum simple interest what amount will Ramesh pay to clear his debt after 5 years?

- Ans
- 1. ₹18600
 - 2. ₹20000
 - 3. ₹19800
 - 4. ₹18800

Question ID : 2390871928
Status : **Answered**
Chosen Option : 3

Q.21 The hypotenuse of a right-angled triangle is 39 cm and the difference of other two sides is 21 cm. Then, the area of the triangle is:

- Ans
- 1. 360 cm^2
 - 2. 280 cm^2
 - 3. 270 cm^2
 - 4. 540 cm^2

Question ID : 2390871936
Status : **Not Attempted and Marked For Review**
Chosen Option : --

Q.22 A bag contains the amount of ₹25.8 in the form of 1 rupee, 50 paise and 10 paise coins and are in the ratio of 3 : 2 : 3. How many 50 paise coins are there in the bag?

- Ans
- 1. 18
 - 2. 36
 - 3. 12
 - 4. 3

Question ID : 2390871926
Status : **Answered**
Chosen Option : 3

Q.23 At what percent per annum will ₹6000 amounts to ₹7986 in 3 years if the interest is compounded annually?

- Ans
- 1. 11%
 - 2. 12.5%
 - 3. 8%
 - 4. 10%

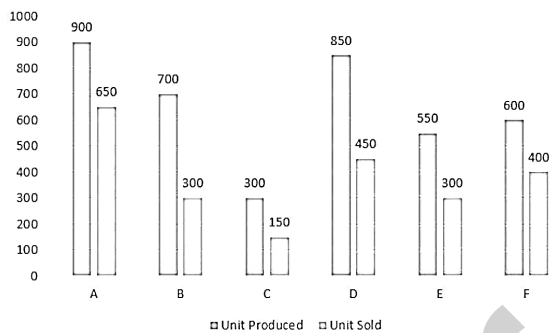
Question ID : 2390871929
Status : **Answered**
Chosen Option : 4

Q.24 X takes 10 days less than the time taken by Y to finish a piece of work. X and Y together can do it in 12 days. In how many days Y alone can finish

- Ans
- 1. 22.5 days
 - 2. 30 days
 - 3. 30 days
 - 4. 25 days

Question ID : 2390871930
Status : Answered
Chosen Option : 2

Q.25 The Bar Graph shows the Production and Sales of Mobile handsets of various companies A, B, C, D, E & F in a month.



What is the average number of Units produced by all the Companies together?

- Ans
- 1. 625
 - 2. 675
 - 3. 600
 - 4. 650

Question ID : 2390871938
Status : Answered
Chosen Option : 4

Section : General awareness

Q.1 Which of the following pairs of State - Chief Minister is correct?

- Ans
- 1. Goa - Nirmala Sitharaman
 - 2. Chhattisgarh - Bhupesh Baghel
 - 3. Madhya Pradesh - Jyotiraditya Scindia
 - 4. Rajasthan - Gopinath Munde

Question ID : 2390871272
Status : Answered
Chosen Option : 2

Q.2 The process of breaking down of rocks by the action of wind, water and climate is called as _____

- Ans
- 1. Land slide
 - 2. Erosion
 - 3. Solifluction
 - 4. Weathering

Question ID : 2390871284
Status : Marked For Review
Chosen Option : 4

Q.3 Who presided over the Drafting Committee of the Constitution?

- Ans
- 1. Jawaharlal Nehru
 - 2. Sardar Vallabhbhai Patel
 - 3. Dr. B. R. Ambedkar
 - 4. V. P. Menon

Question ID : 2390871278
Status : Answered
Chosen Option : 3

Q.4 73rd Constitutional Amendment Act added which part to the Indian Constitution?

- Ans
- 1. Part IX - B
 - 2. Part IX
 - 3. Part X
 - 4. Part IX - A

Question ID : 2390871277
Status : Not Attempted and Marked For Review
Chosen Option : --

Q.5 The Archaeological Site of Inamgaon is situated in _____

- Ans
- 1. Maharashtra
 - 2. Gujarat
 - 3. Karnataka
 - 4. Uttar Pradesh

Question ID : 2390871288
Status : Answered
Chosen Option : 2

Q.6 Which component of blood fights against germs that enter human body?

- Ans
- 1. White blood cells
 - 2. Haemoglobin
 - 3. Platelets
 - 4. Red blood cells

Question ID : 2390871281
Status : Marked For Review
Chosen Option : 1

Q.7 Mouma Das is related to which sport?

- Ans
- 1. Archery
 - 2. Hockey

- 3. Shooting
- 4. Table Tennis

Question ID : 2390871268
Status : Marked For Review
Chosen Option : 2

Q.8 Union Budget and Railway Budget of India were merged in which year?

- Ans
- 1. 2018
 - 2. 2016
 - 3. 2017
 - 4. 2015

Question ID : 2390871274
Status : Not Attempted and Marked For Review
Chosen Option : --

Q.9 Sunil Arora has been appointed as the 23rd _____ of India.

- Ans
- 1. Chief Election Commissioner
 - 2. RAW Chief
 - 3. Chief Economic Advisor
 - 4. Comptroller & Auditor General

Question ID : 2390871270
Status : Answered
Chosen Option : 1

Q.10 Who among the following established the Depressed Classes Association?

- Ans
- 1. Mahatma Gandhi
 - 2. Sardar Vallabhbhai Patel
 - 3. Dr. B. R. Ambedkar
 - 4. Babu Jagjivan Ram

Question ID : 2390871289
Status : Answered
Chosen Option : 3

Q.11 Deficiency of which of the following causes Beri Beri in human beings?

- Ans
- 1. Vitamin B1
 - 2. Vitamin C
 - 3. Vitamin D
 - 4. Vitamin A

Question ID : 2390871283
Status : Answered
Chosen Option : 1

Q.12 Which article of Indian Constitution guarantees Protection of Life and Personal Liberty?

- 1. Article 21A
- 2. Article 22
- 3. Article 21
- 4. Article 20

Question ID : 2390871276
Status : Marked For Review
Chosen Option : 1

Q.13 Which of the following is correct?

- Ans
- 1. Gulfaroshan is a festival of flowers.
 - 2. Murals are the hanging rock paintings.
 - 3. Aurang was a type of horsecart.
 - 4. Munshi was a person who can read, write and teach Arabic.

Question ID : 2390871266
Status : Not Attempted and Marked For Review
Chosen Option : --

Q.14 Ladakh lies between _____.

- Ans
- 1. Shivaliks and Zaskar Mountains
 - 2. Karakoram Range and Zaskar Mountains
 - 3. Middle Himalayas and Shivaliks
 - 4. Greater Himalayas and Shivaliks

Question ID : 2390871285
Status : Not Attempted and Marked For Review
Chosen Option : --

Q.15 The Economic Survey of India is prepared under the guidance of:

- Ans
- 1. Finance Minister
 - 2. Finance Commission
 - 3. RBI Governor
 - 4. Chief Economic Advisor

Question ID : 2390871273
Status : Marked For Review
Chosen Option : 3

Q.16 FIFA was established in _____.

- Ans
- 1. Spain
 - 2. Italy
 - 3. France
 - 4. England

Question ID : 2390871269

swared

Chosen Option : 2

Q.17 Deficiency of which hormone in the body causes 'Goitre'?

- Ans
- 1. Adrenaline
 - 2. Thyroxine
 - 3. Estrogen
 - 4. Testosterone

Question ID : 2390871282

Status : Answered

Chosen Option : 2

Q.18 Minimum Support Price is announced by _____.

- Ans
- 1. Chamber of Commerce
 - 2. Ministry of Finance
 - 3. Ministry of Agriculture
 - 4. Cabinet Committee on Economic Affairs

Question ID : 2390871275

Status : Answered

Chosen Option : 2

Q.19 Ghaghra and Son are tributaries of which river?

- Ans
- 1. Ganga
 - 2. Chambal
 - 3. Brahmaputra
 - 4. Yamuna

Question ID : 2390871286

Status : Answered

Chosen Option : 2

Q.20 Who was conferred with Palestine's highest award "Grand Collar of Palestine" in 2018?

- Ans
- 1. Narendra Modi
 - 2. Donald Trump
 - 3. Benjamin Netanyahu
 - 4. Vladimir Putin

Question ID : 2390871271

Status : Answered

Chosen Option : 3

Q.21 Lion tailed Macaque is also called as _____.

- Ans
- 1. Howler Ape
 - 2. Silver Ape
 - 3. Beard Ape
 - 4. Black Ape

Question ID : 2390871280
Status : Not Answered
Chosen Option : --

Q.22 Who painted the painting 'My Mother'?

- Ans
- 1. Bankim Chandra Chatterjee
 - 2. Debendranath Tagore
 - 3. Nandalal Bose
 - 4. Abanindranath Tagore

Question ID : 2390871267
Status : Not Answered
Chosen Option : --

Q.23 Who started the newspaper 'Kesari'?

- Ans
- 1. Lala Lajpat Rai
 - 2. Bal Gangadhar Tilak
 - 3. Bipin Chandra Pal
 - 4. Dada Bhai Naoroji

Question ID : 2390871287
Status : Answered
Chosen Option : 1

Q.24 The tomb of a Sufi Saint is called _____.

- Ans
- 1. Cul-de-Sac
 - 2. Khanqah
 - 3. Idgah
 - 4. Dargah

Question ID : 2390871265
Status : Not Answered
Chosen Option : --

Q.25 What is the chemical name of table salt?

- Ans
- 1. Sodium Chloride
 - 2. Calcium Chloride
 - 3. Magnesium Dioxide
 - 4. Sodium Sulphate

Question ID : 2390871279
Status : Answered
Chosen Option : 2