

QID: 201 -

In the following question, select the number which can be placed at the sign of question mark (?) from the given alternatives.

निम्नलिखित प्रश्न में दिए गए विकल्पों में से प्रश्न चिह्न (?) के स्थान पर आने वाली संख्या को चुनिए।

3	6
2	1

9	2
2	1

3	3
2	?

Options:

- 1) 1
- 2) 2
- 3) 3
- 4) 6

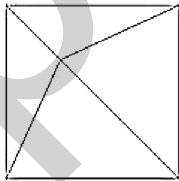
Correct Answer: 2

Candidate Answer: [NOT ANSWERED]

QID: 202 -

How many triangles are there in the given figure?

दी गई आकृति में कितने त्रिभुज हैं?



Options:

- 1) 4
- 2) 6
- 3) 5
- 4) 7

Correct Answer: 6

Candidate Answer: 6

QID: 203 -

A word is represented by only one set of numbers as given in any one of the alternatives. The sets of numbers given in the alternatives are represented by two classes of alphabets as shown in the given two matrices. The columns and rows of **Matrix-I** are numbered from 0 to 4 and that of **Matrix-II** are numbered from 5 to 9. A letter from these matrices can be represented first by its row and next by its column, for example, 'X' can be represented by 20, 97, etc., and 'M' can be represented by 13, 68, etc. Similarly, you have to identify the set for the word "HURT".

एक शब्द केवल एक संख्या-समूह द्वारा दर्शाया गया है, जैसा कि विकल्पों में से किसी एक में दिया गया है। विकल्पों में दिए गए संख्या-समूह अक्षरों के दो वर्गों द्वारा दर्शाए गए हैं, जैसा कि दिए गए दो आव्यूहों में है। आव्यूह-I के स्तम्भ और पंक्ति की संख्या 0 से 4 है और आव्यूह-II की 5 से 9। इन आव्यूहों से एक अक्षर को पहले उसकी पंक्ति और बाद में स्तम्भ संख्या द्वारा दर्शाया जा सकता है। उदाहरण के लिए 'X' को 20, 97, आदि द्वारा दर्शाया जा सकता है तथा 'M' को 13, 68, आदि द्वारा दर्शाया जा सकता है। इसी तरह से आपको प्रश्न में दिए शब्द "HURT" के लिए समूह को पहचानना है।

Matrix-I
आव्यूह-I

	0	1	2	3	4
0	B	T	F	I	C
1	R	E	I	M	T
2	X	O	U	L	E
3	I	E	Z	B	G
4	S	H	B	O	J

Matrix-II
आव्यूह-II

	5	6	7	8	9
5	Z	U	J	S	G
6	H	O	Q	M	J
7	K	P	V	S	N
8	E	G	O	L	R
9	T	F	X	O	A

Options:

- 1) 41, 56, 10, 95
- 2) 65, 56, 87, 13
- 3) 65, 12, 89, 01
- 4) 41, 22, 87, 01

Correct Answer: 41, 56, 10, 95

Candidate Answer: 41, 56, 10, 95

QID: 204 -

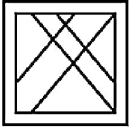
From the given answer figures, select the one in which the question figure is hidden/embedded.

दी गई उत्तर आकृतियों में से उस उत्तर आकृति को चुनिए जिस में प्रश्न आकृति निहित है।

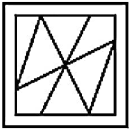


Options:

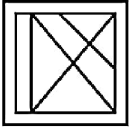
1)



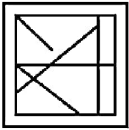
2)



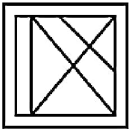
3)



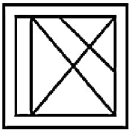
4)



Correct Answer:



Candidate Answer:



QID: 205 -

Which answer figure will complete the pattern in the question figure?

कौन सी उत्तर आकृति प्रश्न आकृति के प्रतिरूप को पूरा करेगी?



Options:

1)



2)



3)



4)



Correct Answer:



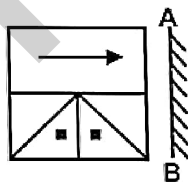
Candidate Answer:



QID: 206 -

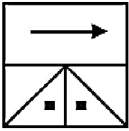
If a mirror is placed on the line AB, then which of the answer figures is the right image of the given figure?

यदि एक दर्पण को AB रेखा पर रखा जाए, तो दी गई उत्तर आकृतियों में से कौन सी आकृति प्रश्न आकृति की सही प्रतिबिम्ब होगी?

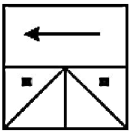


Options:

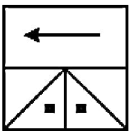
1)



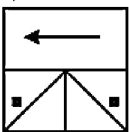
2)



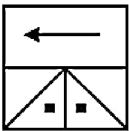
3)



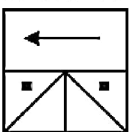
4)



Correct Answer:



Candidate Answer:



QID: 207 -

A piece of paper is folded and punched as shown below in the question figures. From the given answer figures, indicate how it will appear when opened?

नीचे के प्रश्न आकृतियों में दिखाए अनुसार कागज को मोड़कर छेदने तथा खोलने के बाद वह किस उत्तर आकृति जैसा दिखाई देगा?



Options:

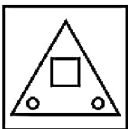
1)



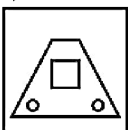
2)



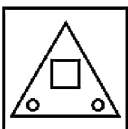
3)



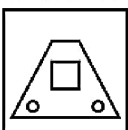
4)



Correct Answer:



Candidate Answer:



QID: 208 - If 'N' means 'x', 'L' means '+', 'Q' means '-' and 'P' means '÷', then

11 L 3 P 4 N 8 = ?

If 'N' stands for 'x', 'L' means '+', 'Q' means '-' and 'P' means '÷', then

11 I 3 p 4 n 8 = ?

Options:

- 1) 17
- 2) 14
- 3) 11
- 4) 24

Correct Answer: 17

Candidate Answer: 17

QID: 209 - If $11 \# 13 = -2$ and $47 \# 43 = 4$, then

$11 \# 6 = ?$

If $11 \# 13 = -2$ and $47 \# 43 = 4$, then

$11 = 6 = ?$

Options:

- 1) 5
- 2) 9
- 3) 3
- 4) 4

Correct Answer: 5

Candidate Answer: 5

QID: 210 - Arrange the given words in the sequence in which they occur in the dictionary.

1. Count
2. Coach
3. Crown
4. Crazy
5. Craft

Write the following words according to the order in the dictionary.

1. Count
2. Coach
3. Crown
4. Crazy
5. Craft

Options:

1) 25134

2) 21534

3) 21543

4) 23154

Correct Answer: 21543

Candidate Answer: 21543

QID : 211 - In the following question, select the missing number from the given series.

4, 27, 16, 125, 36, ?

निम्नलिखित प्रश्न में दिए गए विकल्पों में से लुप्त अंक ज्ञात कीजिए।

4, 27, 16, 125, 36, ?

Options:

1) 49

2) 343

3) 64

4) 512

Correct Answer: 343

Candidate Answer: 343

QID : 212 - A series is given with one term missing. Select the correct alternative from the given ones that will complete the series.

S, Q, O, M, ?

एक अनुक्रम दिया गया है, जिसमें से एक पद लुप्त है। दिए गए विकल्पों में से वह सही विकल्प चुनिए, जो अनुक्रम को पूरा करे।

S, Q, O, M, ?

Options:

1) J

2) L

3) K

4) I

Correct Answer: K

Candidate Answer: K

QID : 213 - In the following question, select the odd word from the given alternatives.

निम्नलिखित प्रश्न में दिए गए विकल्पों में से विषम शब्द को चुनिए।

Options:

1) Cutting

काटना

2) Distribute

बाँटना

3) Divide

विभाजन

4) Together

एक साथ

Correct Answer: Together

एक साथ

Candidate Answer: Together

एक साथ

QID : 214 - In the following question, select the odd number pair from the given alternatives.

निम्नलिखित प्रश्न में दिए गए विकल्पों में से विषम संख्या युग्म को चुनिए।

Options:
1) 7 - 343

2) 8 - 512

3) 4 - 128

4) 5 - 125

Correct Answer: 4 - 128

Candidate Answer: 4 - 128

QID : 215 - In the following question, select the odd letters from the given alternatives.

निम्नलिखित प्रश्न में दिए गए विकल्पों में से विषम अक्षरों को चुनिए।

Options:

1) ADGJ

2) ILOR

3) EHKN

4) PSVX

Correct Answer: PSVX

Candidate Answer: ADGJ

QID : 216 - Identify the diagram that best represents the relationship among the given classes.

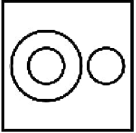
Stapler, Female, Sister

वह आरेख चुनिए जो नीचे दिए गए वर्गों के बीच के संबंध का सही निरूपण करता है।

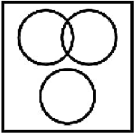
स्टेपलर, महिला, बहन

Options:

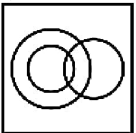
1)



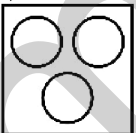
2)



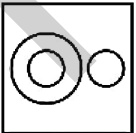
3)



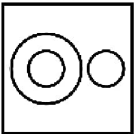
4)



Correct Answer:



Candidate Answer:



QID : 217 - In the following question, select the related word from the given alternatives.

Lethargy : Alertness :: Lazy : ?

निम्नलिखित प्रश्न में दिए गए विकल्पों में से संबंधित शब्द को चुनिए।

आलस्य : सतर्कता :: आलसी : ?

Options:

1) Industrious

परिश्रमी

2) Coward

कायर

3) Ignorance

अनभिज्ञता

4) Unclean

अशुद्ध

Correct Answer: Industrious

परिश्रमी

Candidate Answer: Ignorance

अनभिज्ञता

QID : 218 - In the following question, select the related number from the given alternatives.

16 : 49 :: 38 : ?

निम्नलिखित प्रश्न में दिए गए विकल्पों में से संबंधित संख्या को चुनिए।

16 : 49 :: 38 : ?

Options:

1) 100

2) 121

3) 144

4) 169

Correct Answer: 121

Candidate Answer: 121

QID : 219 - In the following question, select the related letters from the given alternatives.

PT : SX :: ON : ?

निम्नलिखित प्रश्न में दिए गए विकल्पों में से संबंधित अक्षरों को चुनिए।

PT : SX :: ON : ?

Options:

1) RQ

2) QQ

3) RR

4) QR

Correct Answer: RR

Candidate Answer: RQ

QID : 220 - In the following question, select the word which cannot be formed using the letters of the given word.

MANAGEMENT

निम्नलिखित विकल्पों में से वह शब्द चुनिए जो दिए गए शब्द के अक्षरों का प्रयोग करके नहीं बनाया जा सकता।

MANAGEMENT

Options:

1) GAME

2) TEAM

3) MANAGE

4) SAGE

Correct Answer: SAGE

Candidate Answer: SAGE

QID : 221 - Present age of Q and R is in ratio 3: 4. After 5 years age of Q will 23 years What is the present age (in years) of R?

The current age of Q and R is in the ratio of 3: 4. After 5 years Q will be 23 years old. What is the present age of R (in years)?

Options:

1) 20

2) 24

3) 18

4) 26

Correct Answer: 24

Candidate Answer: 24

Kid 222 - A. The L_3^{Th} From Left And L_9^{Th} From Right In A Line Of People K How many people are there in the line?

In the line of individuals A is 13-to th

Options:

- 1) 32
- 2) 31
- 3) 30
- 4) 33

Correct Answer: 31

Candidate Answer: 31

QID: 223 - In the following question there are some conclusions. Taking the given statements to be true even if they seem to be variance from commonly known facts, read all the conclusions and then decide which of the given conclusions logically follows the given statements.

Statements:

- I. Some green are mangoes
- II. No green is yellow

Conclusions:

- I. No mango is yellow
- II. No yellow is mango

Some statements in the question given below and after them have been given some conclusions based on those statements, although they may differ from the usual known facts. Read all the conclusions and then determine which conclusions given are rationally based on the given statements.

Statement:

- I. Some green are common.
- II. There is no green yellow.

Conclusion:

- I. No common yellow.
- II. No yellow is common.

Options:

- 1) Only conclusion (I) follows.
The only conclusion (I) is correct.
- 2) Only concludes (II) follows.
The only conclusion (II) is correct.
- 3) Both the conclusions follow.
Both conclusions are correct.
- 4) Neither conclusion (I) nor the conclusion (II) follows.
Neither conclusion (I) nor the conclusion (II) is correct.

Correct Answer: Neither conclusion (I) nor the conclusion (II) follows.
Neither conclusion (I) nor the conclusion (II) is correct.

Candidate Answer: Neither conclusion (I) nor the conclusion (II) follows.
Neither conclusion (I) nor the conclusion (II) is correct.

QID: 224 - In a certain code language, "END" is written as "DMC" . How is "FOG" written in that code language?

In a typical code language, "END" is written as "DMC" . How will "FOG" be written in this code language ?

Options:

- 1) GNE
- 2) EME
- 3) ENF
- 4) GNF

Correct Answer: ENF

Candidate Answer: ENF

QID: 225 - In a certain code language, "BAT" is written as "23" and "EAR" is written as "24" . How is "HEN" written in that code language?

In a typical code language, "BAT" is written as "23" and "EAR" is "24" . How will "HEN" be written in this code language ?

Options:

- 1) 27
- 2) 24
- 3) 26
- 4) 23

Correct Answer: 27

Candidate Answer: 27

QID: 226 - Which is the following statement is / are true?

- I. Odd + Odd = Even
- II Odd + Odd + Odd = Odd

Which of the following / is the statement true?

- I. Odd + asymmetrical = sum
- II. Odd + asymmetrical + asymmetrical = odd

Options:

- 1) Only I
- 2) Only II
- 3) Both I And II
- 4) Neither I Nor II

Correct Answer: Both Both I and II
I and II

Candidate Answer: Both Both I and II
I and II

QID: 227 - Which of the following is **not** a prime number?

Which of the following is **not** a prime number ?

Options:

- 1) 41
- 2) 47
- 3) 91
- 4) 73

Correct Answer: 91

Candidate Answer: 91

QID: 228 - What will be the remainder when 421 is divided by 11?

When 421 divided by 11, what will be the remainder?

Options:

- 1) 3
- 2) 5
- 3) 7
- 4) 4

Correct Answer: 3

Candidate Answer: 3

QID: 229 - What will be the remainder when $(401 + 402 + 403 + 404)$ is divided by 4?

When $(401 + 402 + 403 + 404)$ is divided by 4, what will be the remainder?

Options:

- 1) 10
- 2) 2
- 3) 6
- 4) 3

Correct Answer: 2

Candidate Answer: 2

QID : 230 - What is the least number multiplied to 300, so that number becomes multiple of 105?

300 से ऐसी कौन सी सबसे छोटी संख्या गुणा की जाए, ताकि संख्या 105 की गुणज हो जाए?

Options:

- 1) 35
- 2) 7
- 3) 21
- 4) 3

Correct Answer: 35

Candidate Answer: 7

QID : 231 - The product of two numbers is 225. If one of the number is 45, then what is the another number?

दो संख्याओं का गुणनफल 225 है। यदि एक संख्या 45 है, तो दूसरी संख्या क्या है?

Options:

- 1) 3
- 2) 15
- 3) 5
- 4) 7

Correct Answer: 5

Candidate Answer: 5

QID : 232 - A and B together can do a piece of work in 10 days and A alone can do it in 15 days. B alone can do the work in how many days?

A तथा B मिलकर एक कार्य को 10 दिनों में पूरा कर सकते हैं तथा A अकेले उसे 15 दिनों में पूरा कर सकता है। B अकेले उस कार्य को कितने दिनों में पूरा कर सकता है?

Options:

- 1) 30
- 2) 45
- 3) 12
- 4) 24

Correct Answer: 30

Candidate Answer: 30

QID: 233 - If $\frac{2}{7}$ th of a cistern is filled in 18 minutes, then what is the time (in minutes) needed to fill the remaining part?

If the $\frac{2}{7}$ -fourth part of the tank is filled in 18 minutes, how much time (in minutes) will it take to fill the remaining part?

Options:

- 1) 45
- 2) 30
- 3) 90
- 4) 60

Correct Answer: 45

Candidate Answer: 45

QID: 234 - The lengths of two diagonals of a rhombus are 15 cm and 20 cm What is the area (in cm^2) of the rhombus?

The length of the two diagonals of a rhombus is 15 cm. And 20 cm is. What is the area of the rhombus (in cm^2)?

Options:

- 1) 120
- 2) 150
- 3) 190
- 4) 180

Correct Answer: 150

Candidate Answer: 150

QID: 235 - The marked price of a chair is Rs 800 and a discount of 30% is given. What is the selling price (in rupees)?

The face value of a chair is Rs 800 and a 30% discount is offered. What is the sale price (in RS)?

Options:

- 1) 560
- 2) 600
- 3) 610
- 4) 620

Correct Answer: 560

Candidate Answer: 560

QID : 236 - The marked price of an article is 40% more than its cost price. If a discount of 5% is given, then what is the profit percentage?

एक वस्तु का अंकित मूल्य उसके क्रय मूल्य से 40% अधिक है। यदि 5% की छूट दी जाए, तो लाभ प्रतिशत क्या है?

Options:

- 1) 28
- 2) 33
- 3) 35
- 4) 38

Correct Answer: 33

Candidate Answer: 33

QID: 237 - If $\frac{2}{7}$ of P = $\frac{4}{3}$ of Q, then what is P: Q?

If P is $\frac{2}{7}$ = Q is $\frac{4}{3}$, then what is P: Q?

Options:

- 1) 14: 3
- 2) 3: 7
- 3) 14: 5
- 4) 7: 5

Correct Answer: 14: 3

Candidate Answer: 14: 3

QID: 238 - If $x / y = 3/5$, then what is the ratio of $(3x + 2y)$ and $(3x - y)$?

If $x / y = 3/5$, then what is the ratio of $(3x + 2y)$ and $(3x - y)$?

Options:

1) 19: 4

2) 19: 7

3) 17: 4

4) 17: 7

Correct Answer: 19: 4

Candidate Answer: 19: 4

QID: 239 - The average of 21 numbers is 12. If one number is excluded, the average becomes 10.5. What is the excluded number?

The average of 21 numbers is 12. If a number is removed, the average is 10.5. What is the deleted number?

Options:

1) 42

2) 32

3) 28

4) 38

Correct Answer: 42

Candidate Answer: 42

QID: 240 - By selling an article for Rs 416, a shopkeeper gains 30%. To gain 40% what should the sale price (in rupees)?

A shopkeeper gets 30% profit when selling an item for 416 rupees. What should be the sales price (in RS) for earning 40% profit?

Options:

1) 426

2) 448

3) 472

4) 442

Correct Answer: 448

Candidate Answer: 448

QID : 241 - By selling an article for Rs 720, a shopkeeper gains 20%. To gain 40% what should be the selling price (in Rs)?

एक वस्तु को 720 रु में बेचने पर एक दुकानदार को 20% लाभ होता है। 40% लाभ कमाने के लिए विक्रय मूल्य (रु में) क्या होना चाहिए?

Options:

1) 820

2) 840

3) 860

4) 960

Correct Answer: 840

Candidate Answer: 840

QID : 242 - If one-third of a number is 125, then what will be the 64% of that number?

यदि किसी संख्या का एक-तिहाई 125 है, तो उस संख्या का 64% क्या होगा?

Options:

1) 240

2) 360

3) 480

4) 180

Correct Answer: 240

Candidate Answer: 240

QID : 243 - If the price of a commodity is decreased by 30% and its consumption is increased by 10%, then what will be the percentage increase or decrease in the expenditure of the commodity?

यदि एक वस्तु की कीमत 30% कम हो जाती है तथा उसकी खपत 10% बढ़ जाती है, तो वस्तु पर खर्च में कितने प्रतिशत की वृद्धि या कमी होगी?

Options:

1) 23% decrease

23% की कमी

2) 23% increase

23% की वृद्धि

3) 17% increase

17% की वृद्धि

4) 17% decrease

17% की कमी

Correct Answer: 23% decrease

23% की कमी

Candidate Answer: 23% decrease

23% की कमी

QID : 244 - Ritik can cover a certain distance in 18 hours if he walks at the rate of 10 km/hr. If he covers the same distance by bus at the rate of 45 km/hr, then what is the time (in hours) taken by him?

रितिक यदि 10 कि.मी./घंटा की गति से चले तो वह एक निश्चित दूरी 18 घंटे में तय कर लेता है। यदि वह वही दूरी बस द्वारा 45 कि.मी./घंटा की गति से तय करे, तो उसे कितना समय (घंटों में) लगेगा?

Options:

1) 2

2) 4

3) 8

4) 6

Correct Answer: 4

Candidate Answer: 4

QID : 245 - If 300 metres long train takes 30 seconds to cross a pole, then what is the speed (in km/hr) of the train?

यदि एक 300 मीटर लम्बी रेलगाड़ी एक खम्बे को पार करने के लिए 30 सेकण्ड लेती है, तो रेलगाड़ी की गति (कि.मी./घंटा में) क्या है?

Options:

1) 18

2) 36

3) 54

4) 72

Correct Answer: 36

Candidate Answer: 36

QID : 246 - Same principal is invested in schemes of compound interest and simple interest. The interest obtained in compound interest and simple interest schemes after 2 years are Rs 3360 and Rs 2800 respectively. If the rate of interest is 40%, then what is the principal (in Rs)?

समान मूलधन चक्रवृद्धि ब्याज तथा साधारण ब्याज की योजनाओं में निवेश किया जाता है। चक्रवृद्धि ब्याज तथा साधारण ब्याज योजना में 2 वर्षों के पश्चात क्रमशः 3360 रु तथा 2800 रु ब्याज प्राप्त होता है। यदि ब्याज दर 40% है, तो मूलधन (रु में) क्या है?

Options:

1) 3500

2) 4500

3) 2500

4) 5500

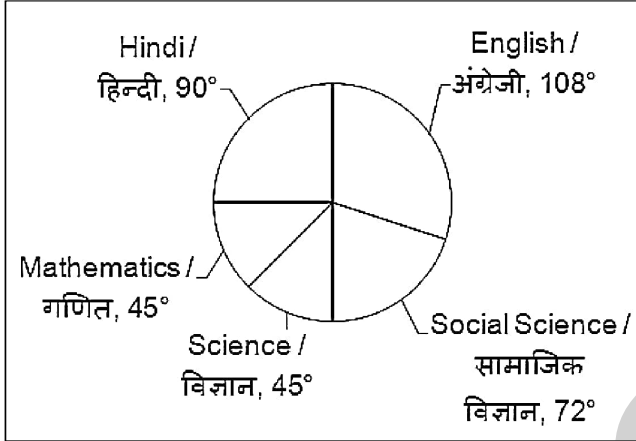
Correct Answer: 3500

Candidate Answer: 3500

QID : 247 -

The pie chart given below shows the number of books of 5 different subjects in a library. The total number of books in the library is 360.

नीचे दिए गए वृत्त चित्र में एक पुस्तकालय में 5 विभिन्न विषयों की पुस्तकों की संख्या को दर्शाया गया है। पुस्तकालय में पुस्तकों की कुल संख्या 360 है।



How many books of English are there in the library?

पुस्तकालय में अंग्रेजी की कितनी पुस्तकें हैं?

Options:

- 1) 75
- 2) 180
- 3) 108
- 4) 1080


Correct Answer: 108

Candidate Answer: 108

QID : 248 -

The pie chart given below shows the number of books of 5 different subjects in a library. The total number of books in the library is 360.

नीचे दिए गए वृत्त चित्र में एक पुस्तकालय में 5 विभिन्न विषयों की पुस्तकों की संख्या को दर्शाया गया है। पुस्तकालय में पुस्तकों की कुल संख्या 360 है।



Which 2 subject's books are present in equal number in the library?

पुस्तकालय में किन 2 विषयों की पुस्तकें बराबर संख्या में उपस्थित हैं?

Options:

1) English and Social Science

अंग्रेजी तथा सामाजिक विज्ञान

2) Hindi and Mathematics

हिन्दी तथा गणित

3) English and Hindi

अंग्रेजी तथा हिन्दी

4) Mathematics and Science

गणित तथा विज्ञान

Correct Answer: Mathematics and Science

गणित तथा विज्ञान


Candidate Answer: Mathematics and Science

गणित तथा विज्ञान

QID : 249 -

The pie chart given below shows the number of books of 5 different subjects in a library. The total number of books in the library is 360.

नीचे दिए गए वृत्त चित्र में एक पुस्तकालय में 5 विभिन्न विषयों की पुस्तकों की संख्या को दर्शाया गया है। पुस्तकालय में पुस्तकों की कुल संख्या 360 है।



What is the difference between the number of books of English and that of Social Science?

अंग्रेजी की पुस्तकों तथा सामाजिक विज्ञान की पुस्तकों की संख्या के मध्य का अंतर क्या है?

Options:

- 1) 72
- 2) 36
- 3) 108
- 4) 90

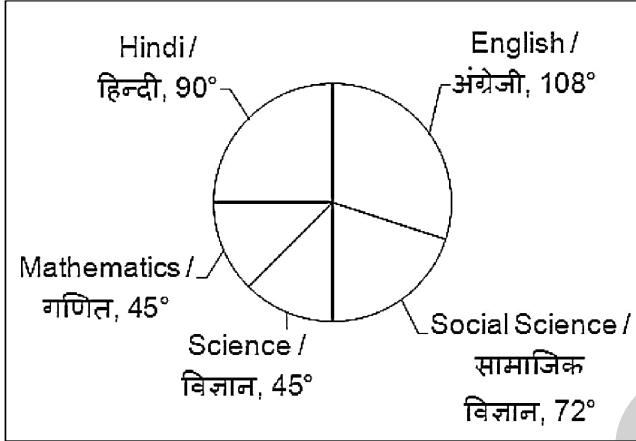
Correct Answer: 36

Candidate Answer: 36

QID : 250 -

The pie chart given below shows the number of books of 5 different subjects in a library. The total number of books in the library is 360.

नीचे दिए गए वृत्त चित्र में एक पुस्तकालय में 5 विभिन्न विषयों की पुस्तकों की संख्या को दर्शाया गया है। पुस्तकालय में पुस्तकों की कुल संख्या 360 है।



What is the total number of books of Hindi and Social Science?

हिन्दी तथा सामाजिक विज्ञान की पुस्तकों की कुल संख्या क्या है?

Options:

- 1) 198
- 2) 135
- 3) 160
- 4) 162

Correct Answer: 162

Candidate Answer: 162

QID: 251 - In the following question, the sentence may have errors Find out which part of the sentence is an error and select the appropriate option. If a sentence is free from error, select 'No Error'.

However, the essential services (1) / and critical staff in a government (2) / will be on duty today. (3) / No Error (4)

Options:

- 1) 1
- 2) 2
- 3) 3
- 4) 4

Correct Answer: 2

Candidate Answer: 2

QID: 252 - In the following question, some of the sentences have been errors. Find out which part of the sentence is an error and select the appropriate option. If a sentence is free from error, select 'No Error'.

Mumbai was crawling at a (1) / snail's pace yesterday, is slowly (2) / returning to normalcy. (3) / No Error (4)

Options:

- 1) 1
- 2) 2
- 3) 3
- 4) 4

Correct Answer: 1

Candidate Answer: 2

QID : 253 - In the following question, the sentence given with blank to be filled in with an appropriate word. Select the correct alternative out of the four and indicate it by selecting the appropriate option.

Turn the AC _____ before you leave the office

Options:

- 1) out
- 2) off
- 3) down
- 4) in

Correct Answer: off

Candidate Answer: off

QID: 254 - In the following question, the sentence given with blank to fill a proper word. Choose the correct option

I dislike eating in a _____ restaurant.

Options:

- 1) Noiseful
- 2) Noising
- 3) Noised
- 4) noisy

Correct Answer: noisy

Candidate Answer: noisy

QID: 255 - In the following question, out of the given four options, select the one.

Perish

Options:

- 1) Energize
- 2) Revive
- 3) Refresh
- 4) Decease

Correct Answer: Decease

Candidate Answer: Energize

QID: 256 - In the following question, out of the given four alternatives, select the one.

Nudge

Options:

- 1) Allow
- 2) Leave alone
- 3) Poke
- 4) Withdraw

Correct Answer: Poke

Candidate Answer: Poke

QID: 257 - In the following question, out of the given four options, select the one.

Panic

Options:

- 1) Calm
- 2) Contentment
- 3) Confidence
- 4) Frenzy

Correct Answer: Frenzy

Candidate Answer: Frenzy

QID: 258 - In the following question, out of the given four alternatives, select the one in which the given word.

Auspicious

Options:

- 1) Bright
- 2) Happy
- 3) Unlucky
- 4) Timely

Correct Answer: Unlucky

Candidate Answer: Unlucky

QID: 259 - In the following question, out of the given four alternatives, select the one in which the given word.

Spare

Options:

- 1) Necessary
- 2) Free
- 3) Option
- 4) Surplus

Correct Answer: Necessary

Candidate Answer: Free

QID: 260 - In the following question, out of the given four alternatives, select the one in which the given word.

Remarkable

Options:

- 1) Famous
- 2) Odd
- 3) Rare
- 4) Normal

Correct Answer: Normal

Candidate Answer: Normal

QID: 261 - In the following question, out of the four given options, select the option which means the best of the Idiom / Phrase.

Between the devil and the deep sea

Options:

- 1) Go fishing and cause trouble
- 2) Between two great difficulties
- 3) Speaking sharply
- 4) To begin working seriously

Correct Answer: Between two great difficulties

Candidate Answer: Between two great difficulties

QID: 262 - In the following question, out of the four given options, select the alternative which means the idiom / phrase.

A child's play

Options:

- 1) Very innocent
- 2) Very annoying
- 3) Something that is very easy
- 4) Very irritating

Correct Answer: Something that is very easy

Candidate Answer: Very annoying

QID: 263 - Improve the bracketed part of the sentence.

To conform to a set of rules (a) Regulations without a real voice in their formulation

Options:

- 1) and
- 2) to
- 3) but
- 4) No improvement

Correct Answer: and

Candidate Answer: and

QID: 264 - Improve the bracketed part of the sentence.

It includes a (decision of the status) of British and EU migrants resident in their respective territories

Options:

- 1) decision to the status
- 2) decision on the status
- 3) decision of the status
- 4) No improvement

Correct Answer: decision on the status

Candidate Answer: decision on the status

QID: 265 - In the following question, out of the four given alternatives, the alternative is the best substitute of the phrase.

A man who remains unmarried

Options:

- 1) Vidowed
- 2) Councilor
- 3) Bachelor
- 4) Propeller

Correct Answer: Bachelor

Candidate Answer: Bachelor

QID: 266 - In the following question, out of the four given alternatives, the alternative is the best substitute of the phrase.

A supreme ruler

Options:

- 1) Patriarch
- 2) Anarchic
- 3) Monarch
- 4) Matriarch

Correct Answer: Monarch

Candidate Answer: Monarch

QID: 267 - In the following question, a word has been written in four different ways out of which only one is correctly spelled. Select the correct spelled word

Options:

- 1) Sicondary
- 2) Secondiry
- 3) Secondary
- 4) Secondory

Correct Answer: Secondary

Candidate Answer: Secondary

QID: 268 - In the following question, a word has been written in four different ways out of which only one is correctly spelt. Select the correct spelled word

Options:

- 1) Strength
- 2) Strenth
- 3) Stringth
- 4) Strentgh

Correct Answer: Strength

Candidate Answer: Strength

QID: 269 - Rearrange the order in correct order.

The Greatest

as: This was the meat

Q: Needs were incompletely Society

and: Challenge for Education

Options:

- 1) PRQ
- 2) PQR
- 3) QRP
- 4) RPQ

Correct Answer: RPQ

Candidate Answer: RPQ

QID: 270 - Rearrange the order in correct order.

The increase of the

P: shrinking of forest area

Q: has led to the

R: population of our country

Options:

- 1) QRP
- 2) PRQ
- 3) QPR
- 4) RQP

Correct Answer: RQP

Candidate Answer: RQP

QID: 271 - In the following passage Read the passage carefully

For centuries of human existence, we have believed or are rather _____ to believe that humanity has by nature, been divided into _____ or castes and that certain race physical or intellectual endowments in terms of others to superior. The discrimination that follows this belief is called racism or _____. Since time immemorial, society has divided into different classes and communities. In countries like India, there was a caste system It was believed that God had created people of a particular caste only to do one kind of job. So the castes were developed with professional lines The people who performed low-key jobs were treated much _____. This attitude has been so strongly enriched in the Indian psyche that it continues to exist even _____, to some measure.

we have believed or are rather _____ to believe that

Options:

- 1) taught
- 2) brought
- 3) thought
- 4) sort

Correct Answer: taught

Candidate Answer: brought

QID: 272 - In the following passage Read the passage carefully

For centuries of human existence, we have believed or are rather _____ to believe that humanity has by nature, been divided into _____ or castes and that certain race physical or intellectual endowments in terms of others to superior. The discrimination that follows this belief is called racism or _____. Since time immemorial, society has divided into different classes and communities. In countries like India, there was a caste system It was believed that God had created people of a particular caste only to do one kind of job. So the castes were developed with professional lines The people who performed low-key jobs were treated much _____. This attitude has been so strongly enriched in the Indian psyche that it continues to exist even _____, to some measure.

in _____ or castes and that certain races

Options:

- 1) faces
- 2) races
- 3) cases
- 4) braces

Correct Answer: races

Candidate Answer: races

QID: 273 - In the following passages Read the passage carefully

For centuries of human existence, we have believed or are rather _____ to believe that humanity has by nature, been divided into _____ or castes and that certain race physical or intellectual endowments in terms of others to superior. The discrimination that follows this belief is called racism or _____. Since time immemorial, society has divided into different classes and communities. In countries like India, there was a caste system It was believed that God had created people of a particular caste only to do one kind of job. So the castes were developed with professional lines The people who performed low-key jobs were treated much _____. This attitude has been so strongly enriched in the Indian psyche that it continues to exist even _____, to some measure.

This belief is called racism or _____.

Options:

- 1) atheist
- 2) agnostic
- 3) apartheid
- 4) proteid

Correct Answer: Apartheid

Candidate Answer: proteid

QID: 274 - In the following passages Read the passage carefully

For centuries of human existence, we have believed or are rather _____ to believe that humanity has by nature, been divided into _____ or castes and that certain race physical or intellectual endowments in terms of others to superior. The discrimination that follows this belief is called racism or _____. Since time immemorial, society has divided into different classes and communities. In countries like India, there was a caste system It was believed that God had created people of a particular caste only to do one kind of job. So the castes were developed with professional lines The people who performed low-key jobs were treated much _____. This attitude has been so strongly enriched in the Indian psyche that it continues to exist even _____, to some measure.

_____ were treated very _____

Options:

- 1) lovely
- 2) nicely
- 3) sincerely
- 4) badly

Correct Answer: badly

Candidate Answer: badly

QID: 275 - In the following passages Read the passage carefully

For centuries of human existence, we have believed or are rather _____ to believe that humanity has by nature, been divided into _____ or castes and that certain race physical or intellectual endowments in terms of others to superior. The discrimination that follows this belief is called racism or _____. Since time immemorial, society has divided into different classes and communities. In countries like India, there was a caste system It was believed that God had created people of a particular caste only to do one kind of job. So the castes were developed with professional lines The people who performed low-key jobs were treated much _____. This attitude has been so strongly enriched in the Indian psyche that it continues to exist even _____, to some measure.

_____ it continues to exist even _____, to some measure.

Options:

- 1) tomorrow
- 2) today
- 3) present
- 4) weekday

Correct Answer: today

Candidate Answer: today

QID: 276 - While calculating GDP, which among the following is **not** included?

Which of the following is **not** included in the calculation of GDP ?

Options:

- 1) Final Goods
last item
- 2) Final Services
Ultimate Services
- 3) Intermediate Goods
intermediate goods
- 4) None Of These
None of these

Correct Answer: Intermediate goods
intermediate goods

Candidate Answer: Intermediate Goods
intermediate goods

QID: 277 - Where do the banks use the major portion of the deposits?

Where do banks use large portions of deposits?

Options:

- 1) To pay the depositors
payment of depositors
- 2) To extend loans
Expansion of loan
- 3) To create infrastructure
Infrastructure
- 4) To pay the salaries
Pay Salary

Correct Answer: To extend loans
expansion of loan

Candidate Answer: To extend loans
expansion of loan

QID: 278 - How many Fundamental Duties were given in Indian Constitution?

How many fundamental duties have been given in the Indian Constitution?

Options:

- 1) 10
- 2) 11
- 3) 12
- 4) 14

Correct Answer: 11

Candidate Answer: 11

QID: 279 - Which among the following is the supreme law that determines the relationship between people living in a territory and also the relationship between the people and the government?

Which of the following is the supreme law, with regard to mutual relations between people living in any area as well as relations between people and the government are also fixed?

Options:

- 1) The President Of India
President of India
- 2) The Prime Minister Of India
Indian Prime
- 3) The Indian Constitution
Constitution
- 4) The Chief Justice Of India
Chief Justice of India

Correct Answer: The Constitution of
India

Candidate Answer: The Indian Constitution
Indian Constitution

QID: 280 - Which year Simon Commission came to India?

In which year did Simon Commission come to India?

Options:

- 1) 1919
- 2) 1925
- 3) 1927
- 4) 1932

Correct Answer: 1927

Candidate Answer: 1932

QID: 281 - Which Delhi Sultan planned for a Mongol region for the first time in the Sultanate?

For the first time in the history of the Sultanate to capture the Mongol region, which sultan of Delhi had planned a campaign?

Options:

- 1) Alauddin
Khilji Alauddin Khilji
- 2)
Ghiyasuddin Tughlaq Gasasuddin Tughluq
- 3) Muhammad
Tughlaq Muhammad Tughluq
- 4) Bahlol Lodi
Bahlol Lodi

Correct Answer: Muhammad
Tughlaq Muhammad Tughluq

Candidate Answer: Alauddin
Khilji Alauddin Khilji

QID: 282 - Which is the only continent through the Tropic of Cancer, the Equator and the Tropic of Capricorn Pass?

Which is the only continent through which the Cancer, Equatorial and Capricorn passes?

Options:

- 1) Australia
Australia
- 2) South America
South America
- 3) Asia
Asia
- 4) Africa
Africa

Correct Answer: Africa
Africa

Candidate Answer: Asia
Asia

QID: 283 - What is the duration of south-west monsoon season (Rainy) in India?

What is the period of rainy season (rain) in the south-west monsoon in India?

Options:

- 1) March to May
to May
- 2) October and November
October to November
- 3) December to February
December to February
- 4) June to September
June to September

Correct Answer: June to September
June to September

Candidate Answer: June to September
June to September

QID: 284 - Cholesterol is synthesized in _____.

Cholesterol is synthesized in _____.

Options:

- 1) Brunner's
Brunner
- 2) Kidney
liver
- 3) Liver
liver (liver)
- 4) Stomach
stomach

Correct Answer: Liver
liver (liver)

Candidate Answer: Liver
liver (liver)

QID: 285 - Five-class classification was proposed by _____.

The five world classifications were proposed by _____.

Options:

- 1) Whittaker
Whittek
- 2) Huxley
Huxley
- 3) Linnaeus
Linnaeus
- 4) Lamarck
Lamarck

Correct Answer: Whittaker
Whittek

Candidate Answer: Lamarck
Lamarck

QID: 286 - Kwashiorkor is in children who get _____.

Kwashiorkor can be in children who take _____.

Options:

- 1) Low-carbohydrate diet
Low-carbohydrate food
- 2) Low-vitamin diet
Low vitamin meal
- 3) Low-mineral diet
Low mineral meal
- 4) Low-protein diet
Low protein diet

Correct Answer: Low-protein diet
Low-protein food

Candidate Answer: Low-vitamin diet
Low Vitamin Food

QID: 287 - The combined effect of mass and velocity is taken into account by a physical quantity called _____.

The combined effect of mass and motion is taken on the basis of physical quantity, which is called _____.

Options:

- 1) impulse
impulse
- 2) moment of force moment of
power
- 3) momentum
speed
- 4) speed
move

Correct Answer:
Speed of momentum

Candidate Answer: impulse
impulse

QID: 288 - Two bodies are in thermal equilibrium, if they are the same _____.

If _____ are the same, then two bodies are in thermal balance.

Options:

- 1) Temperature
temperature
- 2) Amount of heat
amount
- 3) Mass
mass
- 4) Velocity
velocity

Correct Answer: Temperature
Temperature

Answer Candidate: Amount Of Heat
volume of heat

QID: 289 - What are the list of coded instructions called?

What is the list of instructions coded?

Options:

- 1) Algorithm
Algorithm
- 2) Computer Language
Computer Language
- 3) Computer Program
Computer Program
- 4) None Of These
None of these

Correct Answer: Computer program
computer program

Candidate Answer: Computer program
computer program

QID: 290 - The size of the nucleus is approximately _____.

The size of the nucleus is approximately _____.

Options:

- 1) 10^{-18} M
- 2) 10^{-10} m.
- 3) 10^{-8} M
- 4) None Of These
None of these

Answer Correct: None Of These
None of these

Answer Candidate: 10^{-18} M
 10^{-18} m.

QID: 291 - Which of the following is **not** a noble gas?

Which of these is **not** an excellent gas ?

Options:

- 1) Helium
Helium
- 2) Xenon
Zenan
- 3) Argon
Argon
- 4) Oxygen
Oxygen

Correct Answer: Oxygen
Oxygen

Candidate Answer: Oxygen
Oxygen

QID: 292 - Which one of the following is a terrestrial ecosystem?

Which of the following is a terrestrial ecosystem?

Options:

- 1) Pond
pond
- 2) Lake
lake
- 3) Semi-arid area
semi-arid area
- 4) river
river

Correct Answer: Semi-arid area
semi-arid region

Candidate Answer: Semi-arid area
semi-arid area

QID: 293 - Under which scheme each member of Parliament takes responsibility of developing physical and institutional infrastructure in three villages by 2019?

Under which scheme each MP will take responsibility for the development of physical and institutional infrastructure in three villages by 2019?

Options:

- 1) Saansad Adarsh Gram Yojana
Parliamentarian Model Village Scheme
- 2) Indira Awaas Yojana
Indira Awas Yojana
- 3) Unnat Bharat
Advanced India
- 4) Saraansh
Summary

Correct Answer: Saansad Adarsh Gram Yojana
Parliamentarian Model Village Scheme

Candidate Answer: Saansad Adarsh Gram Yojana
Parliamentarian Model Village Scheme

QID: 294 - Who discovered Hydrogen?

Who searched for hydrogen?

Options:

- 1) Henry Cavendish
Henry Cavendish
- 2) George Cayley
George Banjo
- 3) Samuel Colt
Samuel Kult
- 4) WC Roentgen
W. C. Rortgen

Correct Answer: Henry Cavendish
Henry Cavendish

Candidate Answer: Henry Cavendish
Henry Cavendish

QID: 295 - The first Asian Games took place in which city?

In which city was the first Asian game played?

Options:

- 1) New Delhi
New Delhi
- 2) Shanghai
Shanghai
- 3) Beijing
Beijing
- 4) Singapore
Singapore

Correct Answer: New Delhi
New Delhi

Candidate Answer: New Delhi
New Delhi

QID: 296 - Kalighat paintings derives its name from its place of origin in the ____.

The name of Kalighat painting is derived from his native place, Kalighat in ____.

Options:

- 1) Kanchipuram
Kanchipuram
- 2) Kolkata
Kolkata
- 3)
Kushinagar Kushinagar
- 4) Kathgodam
Kathgodam

Correct Answer: Kolkata
Kolkata

Candidate Answer: [NOT ANSWERED]

QID: 297 - Who won the Pulitzer Prize 2017 for fiction named "The Underground Railroad"?

Who won the Pulitzer Prize for the fiction called "The Underground Railroad"?

Options:

- 1) Colson Whitehead
Colson Whitehead
- 2) JK Rowling
JK Rowling
- 3) Salman Rushdie
Salman Rushdie
- 4) Nora Roberts
Nora Roberts

Correct Answer: Colson Whitehead
Colson Whitehead

Candidate Answer: [NOT ANSWERED]

QID: 298 - Who is the author of book named "An Idealist View of Life"?

Who is the author of the book "An Idealist View of Life"?

Options:

- 1) Jawahar Lal Nehru
Jawaharlal Nehru
- 2) Dr. S. Radhakrishnan
Dr. S. Radhakrishnan
- 3) Jai Shankar Prasad
Jai Shankar Prasad
- 4) Mulk Raj Anand Mul Raj
Raj

Correct Answer: Dr. S. Radhakrishnan
Dr. S. Radhakrishnan

Candidate Answer: [NOT ANSWERED]

QID: 299 - Konkan is the annual bilateral maritime exercise between the Indian Navy and the ____ Navy.

Konkan is the annual bilateral marine practice among the Indian Navy and ____ Navy.

Options:

- 1) Chinese
Chinese
- 2) Russian
Russian
- 3) German
German
- 4) British
British

Correct Answer: British
British

Candidate Answer: British
British

QID: 300 - Which is **not** in the three rivers of Indus water system, which has got India under the control of the Indus Water Treaty with Pakistan?

Which of the following is **not** one of the three rivers of the Indus Water System on which India got control under Pakistan under the Indus Water Treaty?

Options:

- 1) Ravi
Ravi
- 2)
Chenab Chenab
- 3) Beas
Beas
- 4) Satluj
Sutlej

Correct Answer: Chenab
Chenab

Candidate Answer: [NOT ANSWERED]