

Section : General English

**Q.1 Select the most appropriate word to fill in the blank and make a meaningful sentence.**

Be careful not to drop this glass case; it's very \_\_\_\_\_.

- Ans
- 1. smooth
  - 2. hard
  - 3. rigid
  - 4. fragile

Question ID : 2390873052  
Status : Answered  
Chosen Option : 4

**Q.2 Identify the segment in the sentence which contains the grammatical error.**

Grandmother was knitting a sweater for his grand-daughter.

- Ans
- 1. Grandmother was
  - 2. sweater for his
  - 3. knitting a
  - 4. grand-daughter

Question ID : 2390873029  
Status : Answered  
Chosen Option : 2

**Q.3 Select the most appropriate word to fill in the blank and make a meaningful sentence.**

The development of real estate has \_\_\_\_\_ impacted the environment.

- Ans
- 1. adversely
  - 2. conveniently
  - 3. narrowly
  - 4. positively

Question ID : 2390873053  
Status : Answered  
Chosen Option : 1

**Q.4 Select the correctly spelt word.**

- Ans
- 1. Essential
  - 2. Essensial

3. Essentail

4. Essencial

Question ID : 2390873050  
Status : Answered  
Chosen Option : 1

**Q.5 Select the most appropriate meaning of the given idiom.**

**Far cry from**

- Ans  1. To be sad about past things  
 2. To cry over small things  
 3. To be very different from  
 4. To be away from dear ones

Question ID : 2390873047  
Status : Not Answered  
Chosen Option : --

**Q.6 Select the most appropriate antonym of the word.**

**Quell**

- Ans  1. Deny  
 2. Agitate  
 3. Entire  
 4. Reduce

Question ID : 2390873044  
Status : Not Answered  
Chosen Option : --

**Q.7 Select the most appropriate antonym of the word.**

**Confront**

- Ans  1. Oppose  
 2. Avoid  
 3. Encounter  
 4. Meet

Question ID : 2390873045  
Status : Answered  
Chosen Option : 1

**Q.8 Select the most appropriate synonym of the given word.**

**Fundamental**

- Ans  1. Secondary  
 2. Trivial  
 3. Basic  
 4. Extra

Status : Answered  
Chosen Option : 3

Q.9 Select the correctly spelt word.

- Ans
- 1. Scientefic
  - 2. Scientific
  - 3. Sceintific
  - 4. Scienctific

Question ID : 2390873051  
Status : Answered  
Chosen Option : 2

Q.10 Select the most appropriate word for the given group of words.

One who studies the evolution of mankind

- Ans
- 1. Anthropologist
  - 2. Dermatologist
  - 3. Sociologist
  - 4. Archaeologist

Question ID : 2390873048  
Status : Answered  
Chosen Option : 1

Q.11 Select the most appropriate synonym of the given word.

Detain

- Ans
- 1. Delay
  - 2. Advance
  - 3. Permit
  - 4. Allow

Question ID : 2390873042  
Status : Answered  
Chosen Option : 3

Q.12 Identify the segment in the sentence which contains the grammatical error.

Sakshi is as smarter as any other child in the class.

- Ans
- 1. Sakshi is
  - 2. in the class
  - 3. any other child
  - 4. as smarter as

Question ID : 2390873028  
Status : Answered  
Chosen Option : 4

Q.13 Identify the segment in the sentence which contains the grammatical error.

They have been living

- Ans
- 1. They have
  - 2. in Boston
  - 3. from ten years
  - 4. been living

Question ID : 2390873030  
Status : Answered  
Chosen Option : 3

Q.14 Select the most appropriate option to substitute the underlined segment in the given sentence. If there is no need to substitute it, select No improvement.

Rashi hasn't eaten everything from yesterday.

- Ans
- 1. anything since
  - 2. something for
  - 3. nothing along
  - 4. No improvement

Question ID : 2390873031  
Status : Answered  
Chosen Option : 1

Q.15 Select the most appropriate option to substitute the underlined segment in the given sentence. If there is no need to substitute it, select No improvement.

The new traffic signals is not clear visible from a distance

- Ans
- 1. is not clearly
  - 2. are not clearly
  - 3. No improvement
  - 4. are not clear

Question ID : 2390873033  
Status : Answered  
Chosen Option : 2

Q.16 Select the most appropriate option to substitute the underlined segment in the given sentence. If there is no need to substitute it, select No improvement.

Shakiba is a smallest of the two girls.

- Ans
- 1. the small
  - 2. more small
  - 3. the smaller
  - 4. No improvement

Question ID : 2390873032  
Status : Answered  
Chosen Option : 3

Q.17 Select the most appropriate meaning of the given idiom.

Cry over spilt milk

- Ans
- 1. cry too much over a petty issue

- 2. unnecessarily worry about the future
- 3. complain about being forced to drink milk
- 4. regret about something that happened and cannot be changed

Question ID : 2390873046  
Status : Not Answered  
Chosen Option : --

Q.18 Select the most appropriate word for the given group of words.

A large bundle bound for storage or transport

- Ans
- 1. Bunch
  - 2. Barrel
  - 3. Bale
  - 4. Bevy

Question ID : 2390873049  
Status : Answered  
Chosen Option : 3

Q.19 Select the most appropriate option to fill in the blank and make a grammatically correct sentence.

The vase broke \_\_\_\_\_ pieces when Simran dropped it.

- Ans
- 1. in
  - 2. into
  - 3. among
  - 4. from

Question ID : 2390873034  
Status : Answered  
Chosen Option : 2

Q.20 Select the most appropriate option to fill in the blank and make a grammatically correct sentence.

London is \_\_\_\_\_ European city.

- Ans
- 1. a
  - 2. No article
  - 3. an
  - 4. the

Question ID : 2390873035  
Status : Answered  
Chosen Option : 3

**Comprehension:**

In the following passage some words have been deleted. Fill in the blanks with the help of the alternatives given. Select the most appropriate option for each blank.

Rama was a naughty boy (1)\_\_\_\_\_ lived in the village of Tenali. His mother did not (2)\_\_\_\_\_ what to do with him since he (3)\_\_\_\_\_ to study or do any work. One day (4)\_\_\_\_\_ took him to see a Guru. She told the (5)\_\_\_\_\_ man that she wanted him to take Rama under his guardianship.

**SubQuestion No : 21**

**Q.21** Select the most appropriate option to fill in blank No.1.

- Ans**
- 1. that
  - 2. which
  - 3. he
  - 4. who

Question ID : 2390873037  
Status : Answered  
Chosen Option : 4

**Comprehension:**

In the following passage some words have been deleted. Fill in the blanks with the help of the alternatives given. Select the most appropriate option for each blank.

Rama was a naughty boy (1)\_\_\_\_\_ lived in the village of Tenali. His mother did not (2)\_\_\_\_\_ what to do with him since he (3)\_\_\_\_\_ to study or do any work. One day (4)\_\_\_\_\_ took him to see a Guru. She told the (5)\_\_\_\_\_ man that she wanted him to take Rama under his guardianship.

**SubQuestion No : 22**

**Q.22** Select the most appropriate option to fill in blank No.2.

- Ans**
- 1. know
  - 2. knew
  - 3. knows
  - 4. knowing

Question ID : 2390873038  
Status : Answered  
Chosen Option : 2

**Comprehension:**

In the following passage some words have been deleted. Fill in the blanks with the help of the alternatives given. Select the most appropriate option for each blank.

Rama was a naughty boy (1)\_\_\_\_\_ lived in the village of Tenali. His mother did not (2)\_\_\_\_\_ what to do with him since he (3)\_\_\_\_\_ to study or do any work. One day (4)\_\_\_\_\_ took him to see a Guru. She told the (5)\_\_\_\_\_ man that she wanted him to take Rama under his guardianship.

**SubQuestion No : 23**

**Q.23** Select the most appropriate option to fill in blank No.3.

- Ans**
- 1. reminded
  - 2. refused
  - 3. wished
  - 4. denied

Question ID : 2390873039  
Status : Answered  
Chosen Option : 2

**Comprehension:**

In the following passage some words have been deleted. Fill in the blanks with the help of the alternatives given. Select the most appropriate option for each blank.

Rama was a naughty boy (1)\_\_\_\_\_ lived in the village of Tenali. His mother did not (2)\_\_\_\_\_ what to do with him since

see a Guru. She told the (5)\_\_\_\_\_ man that she wanted him to take Rama under his guardianship.

**SubQuestion No : 24**

**Q.24 Select the most appropriate option to fill in blank No.4.**

- Ans
- 1. she
  - 2. her
  - 3. they
  - 4. he

Question ID : 2390873040  
Status : Answered  
Chosen Option : 1

**Comprehension:**

In the following passage some words have been deleted. Fill in the blanks with the help of the alternatives given. Select the most appropriate option for each blank.

Rama was a naughty boy (1)\_\_\_\_\_ lived in the village of Tenali. His mother did not (2)\_\_\_\_\_ what to do with him since he (3)\_\_\_\_\_ to study or do any work. One day (4)\_\_\_\_\_ took him to see a Guru. She told the (5)\_\_\_\_\_ man that she wanted him to take Rama under his guardianship.

**SubQuestion No : 25**

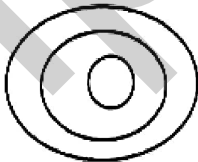
**Q.25 Select the most appropriate option to fill in blank No.5.**

- Ans
- 1. lonely
  - 2. learned
  - 3. lazy
  - 4. lively

Question ID : 2390873041  
Status : Answered  
Chosen Option : 3

Section : General Intelligence & Reasoning

**Q.1 Select the set of classes that best represents the given Venn diagram.**

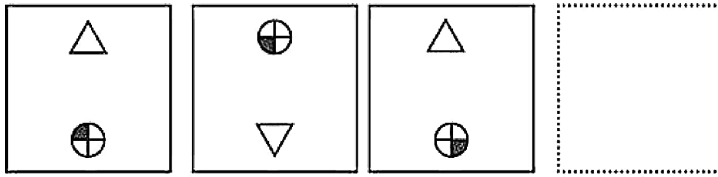


- Ans
- 1. State, Sea, District
  - 2. India, Mumbai, Delhi
  - 3. Water, River, Dam
  - 4. Asia, India, Pune

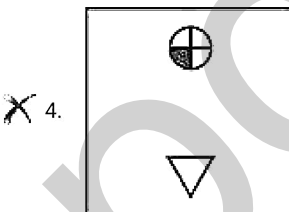
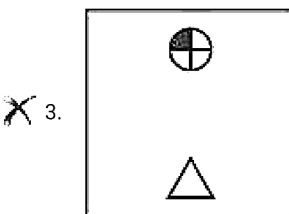
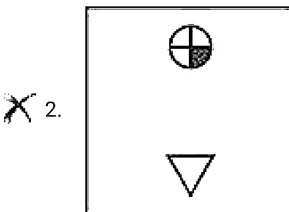
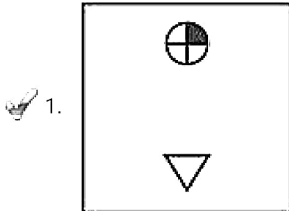
Question ID : 2390873153  
Status : Answered  
Chosen Option : 4

Q.2

Which of the following answer figure completes the series of the question figure?



Ans



Question ID : 2390873148  
Status : Answered  
Chosen Option : 1

Q.3 Select the option that is related to the fourth term in the same way as the first term is related to the second term.

16 : 272 :: ? : 380

- Ans
- ✗ 1. 17
  - ✓ 2. 19
  - ✗ 3. 21
  - ✗ 4. 23

Question ID : 2390873144  
Status : Answered  
Chosen Option : 2



Q.4 In a certain code language, if the word 'CLASSIFY' is coded as 'XOZHHRUB', then how is the word 'MODIFY' coded in that language?

- Ans
- 1. RUBNLW
  - 2. NLRUBW
  - 3. NLWRUB
  - 4. RUBNWL

Question ID : 2390873133  
Status : Answered  
Chosen Option : 3

Q.5 Eight boys P, Q, R, S, T, U, V and W are sitting in a Circular table.  
P and Q are sitting in front of each other.  
S is sitting second from the right of P and V is sitting second to the right of Q.  
T and W are sitting in front of each other.  
R is sitting between P and V.

How many boys are sitting between U and V, When counted from the right of U?

- Ans
- 1. Three
  - 2. Five
  - 3. Four
  - 4. Two

Question ID : 2390873138  
Status : Answered  
Chosen Option : 2

Q.6 Select the option that is related to the fourth term in the same way as the first term is related to the second term.

DFIM : CEHL :: ? : KMPT

- Ans
- 1. LNUQ
  - 2. LNQU
  - 3. JLOS
  - 4. UVWL

Question ID : 2390873132  
Status : Answered  
Chosen Option : 3

Q.7 Select the number that can replace the question mark (?) in the following series.

423, 407, 439, 391, 455, ?

- Ans
- 1. 375
  - 2. 420
  - 3. 365
  - 4. 360

Question ID : 2390873143  
Status : Answered  
Chosen Option : 1

Q.8 'Furniture' is related to

- Ans
- 1. Black smith
  - 2. Tailor
  - 3. Butcher
  - 4. Cobbler

Question ID : 2390873130  
Status : Answered  
Chosen Option : 3

Q.9 Which letter will replace the question mark (?) in the following series?

FLO , H?Q , JPS, LRU

- Ans
- 1. M
  - 2. P
  - 3. N
  - 4. I

Question ID : 2390873129  
Status : Answered  
Chosen Option : 3

Q.10 If in a certain code language 'RUN' is written as '202316' and 'PEN' is written as '18716', then how will 'RANSOM' be coded in that language?

- Ans
- 1. 20316211715
  - 2. 20114131915
  - 3. 18114191315
  - 4. 1841491315

Question ID : 2390873136  
Status : Answered  
Chosen Option : 1

Q.11 'Candle' is related to 'Wick' in the same way as 'Pen' is related to '\_\_\_\_\_'. .

- Ans
- 1. Light
  - 2. Pencil
  - 3. Inkpot
  - 4. Nib

Question ID : 2390873131  
Status : Answered  
Chosen Option : 4

Q.12 Six friends A, B, C, D, E and F are standing in a row facing North. B is exactly in between F and D. E is standing exactly in between A and C. A is not a neighbor of D and F. C is not a neighbor of D but immediate right of F. C is standing in between which of the following?

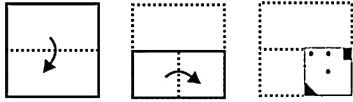
- Ans
- 1. E and F
  - 2. E and B
  - 3. D and F
  - 4. A and E

Question ID : 2390873137

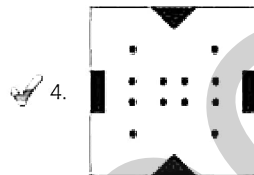
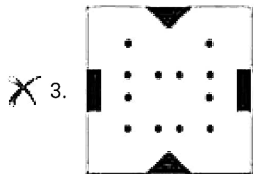
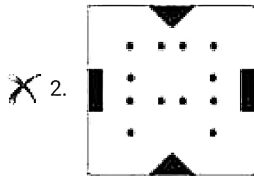
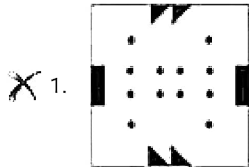
Status : Answered

Chosen Option : 1

**Q.13** A piece of paper is folded and cut as shown below in the question figures. Select from the given answer figures, how it will appear when unfolded.



Ans



Question ID : 2390873152

Status : Answered

Chosen Option : 4

**Q.14** Select the correct option that will fill in the blank and complete the series.

10, 17, 26, 37, \_\_\_\_\_

Ans  1. 49

2. 50

3. 54

4. 52

Question ID : 2390873142

Status : Answered

Chosen Option : 2

Q.15

In the following question, select the number which can be placed at the sign of question mark (?) from the given alternatives.

6 13 51

4 7 29

19 11 ?

Ans  1. 61

2. 16

3. 17

4. 71

Question ID : 2390873145

Status : Not Answered

Chosen Option : --

Q.16 Compare the salary of employees B, R, G, A, and M in relation to each other:

M get more salary than A and G.

R's salary is less than three persons.

B's salary is the lowest.

Whose salary is the second lowest?

Ans  1. R

2. A

3. G

4. M

Question ID : 2390873139

Status : Answered

Chosen Option : 2

Q.17 Choose the option that most closely resembles the mirror image of the given figure when mirror is placed at right side.

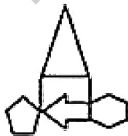


Ans

1.

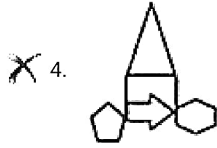


2.



3.





Question ID : 2390873151  
 Status : Answered  
 Chosen Option : 2

Q.18 Find out the two signs to be interchanged for making following equation correct:

$$6 \div 5 + 12 \times 4 - 7 = 26$$

- Ans
- 1.  $\div$  and  $\times$
  - 2.  $+$  and  $\times$
  - 3.  $+$  and  $-$
  - 4.  $\div$  and  $-$

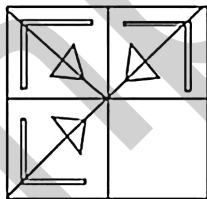
Question ID : 2390873146  
 Status : Answered  
 Chosen Option : 1

Q.19 If 'LEMON' is coded as 'NCOMP', then 'MANGO' is coded as \_\_\_\_\_.

- Ans
- 1. OYPEQ
  - 2. OZRDS
  - 3. NDRHP
  - 4. RZPES

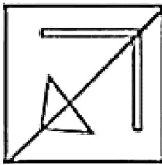
Question ID : 2390873134  
 Status : Answered  
 Chosen Option : 1

Q.20 Study the given pattern carefully and select the figure that will complete the pattern given in the question figure.

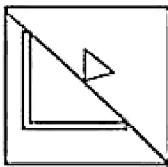


- Ans
- 1.
  - 2.

X 3.



X 4.



Question ID : 2390873149

Status : Answered

Chosen Option : 1

Q.21 The statements below are followed by two conclusions labelled I and II. Assuming that the information in the statements is true, even if it appears to be at variance with generally established facts, decide which conclusion(s) logically and definitely follow(s) from the information given in the statements.

Statements:

I. Some cups are glasses.

II. No plate is cup as well as glass.

Conclusions:

I. Some cups are plates.

II. All glasses are not plates.

Ans

1. Only conclusion I follow
2. Only conclusion II follows
3. Neither conclusion I nor conclusion II follow.
4. Either conclusion I or conclusion II follows.

Question ID : 2390873140

Status : Answered

Chosen Option : 2

Q.22 If in a certain code language 'HACB' is written as '8132', then how will 'DEFA' be written in that language?

Ans

1. 5641
2. 4156
3. 4561
4. 4651

Question ID : 2390873135

Status : Answered

Chosen Option : 3

Q.23 If the two signs, ' $\div$ ' and ' $\times$ ' and two numbers '2 and 8' are interchanged, what will be the value of the following equation?

$$4 \times 8 \div 2 = ?$$

Ans

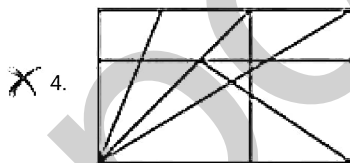
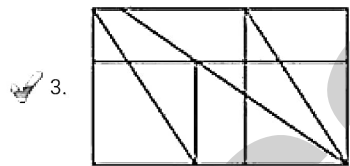
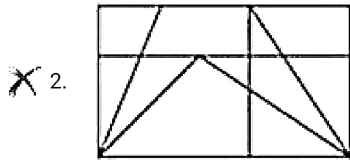
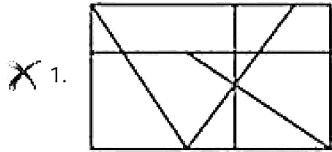
1. 16
2. 15
3. 8

Question ID : 2390873147  
Status : Answered  
Chosen Option : 1

Q.24 Select the option in which the given figure is embedded. (Rotation is not allowed)



Ans



Question ID : 2390873150  
Status : Answered  
Chosen Option : 3

Q.25 Read the given statement and conclusions carefully and decide which of the conclusions logically follow(s) from the statement.

**Statement:**  
Sama Veda is believed to be written around 200 BC.

**Conclusions:**  
I. Sama Veda is one of the oldest books in history.  
II. Sama Veda is the oldest book in history

- Ans
- ✓ 1. Only Conclusion I follows.
  - X 2. Either conclusion I or conclusion II follows.
  - X 3. Neither conclusion I nor conclusion II follow.
  - X 4. Only Conclusions II follows.

Status : Answered  
Chosen Option : 1

Section : Numerical Aptitude

Q.1 The cost price of an article is ₹480. It is to be sold at a profit of 12.5%. What is the selling price of the article?

- Ans
- 1. ₹560
  - 2. ₹492.5
  - 3. ₹500
  - 4. ₹540

Question ID : 2390872732  
Status : Answered  
Chosen Option : 4

Q.2 If  $4A = 6B = 5C$ ; then  $A : B : C$  is:

- Ans
- 1. 15:20:24
  - 2. 15:10:12
  - 3. 24:20:15
  - 4. 20:15:24

Question ID : 2390872733  
Status : Answered  
Chosen Option : 2

Q.3 What percent of 5.6 kg is 140 gram?

- Ans
- 1. 2
  - 2. 1.8
  - 3. 2.5
  - 4. 1.5

Question ID : 2390872730  
Status : Answered  
Chosen Option : 3

Q.4 The value of  $x$  in the given equation

$$23^2 + \sqrt{x} = 625$$

- Ans
- 1. 9576
  - 2. 9124
  - 3. 9028
  - 4. 9216

Question ID : 2390872724  
Status : Answered

Chosen Option : 4



**Q.5** The Table shows the number of candidates appearing for an interview for a post in six Banks (H, I, J, K, L, M) and percentage of qualifying candidates.

Banks	Candidates Appearing	% of Candidates Qualifying
H	1500	14
I	2200	26
J	3000	17
K	980	20
L	1200	28
M	2500	21

What was the respective ratio of the number of candidates who qualified in bank H to the number of candidates who qualified in bank L?

- Ans**
- 1. 5 : 8
  - 2. 2 : 5
  - 3. 3 : 7
  - 4. 5 : 6

Question ID : 2390872746  
Status : Answered  
Chosen Option : 1

**Q.6** Five years ago, the average age of four girls, was 7 years. A new girl is included then the average present age becomes 13 years. The present age of the new girl is:

- Ans**
- 1. 14 years
  - 2. 16 years
  - 3. 17 years
  - 4. 19 years

Question ID : 2390872726  
Status : Answered  
Chosen Option : 3

**Q.7** The length, breadth and height of a cuboid are 18 cm, 24cm and 4 cm respectively. The volume of cube is equal to the volume of given cuboid. The side of the cube is:

- Ans**
- 1. 9 cm
  - 2. 12 cm
  - 3. 16 cm
  - 4. 8 cm

Question ID : 2390872744  
Status : Answered  
Chosen Option : 2

**Q.8** A train travelling at the speed of 108 km/h crosses a pole in 32 seconds. The length (in m) of the train is:

- Ans**
- 1. 1240
  - 2. 960
  - 3. 1024
  - 4. 1200

Question ID : 2390872741

Status : Answered

Chosen Option : 2

**Q.9** The Table shows the number of candidates appearing for an interview for a post in six Banks (H, I, J, K, L, M) and percentage of qualifying candidates.

Banks	Candidates Appearing	% of Candidates Qualifying
H	1500	14
I	2200	26
J	3000	17
K	980	20
L	1200	28
M	2500	21

What was the average number of candidates who appeared for the interview in bank H, J and L together?

- Ans
- 1. 2000
  - 2. 1900
  - 3. 1500
  - 4. 1800

Question ID : 2390872747

Status : Answered

Chosen Option : 2

**Q.10** A cone has a radius of 20 cm and height 21 cm, the total surface area (in  $\text{cm}^2$ ) of the cone is:

(Take  $\pi = \frac{22}{7}$ )

- Ans
- 1. 3160
  - 2. 2920
  - 3. 3080
  - 4. 3240

Question ID : 2390872742

Status : Not Answered

Chosen Option : --

**Q.11** An item is marked 37.5% above the cost price. If a discount of 9.09% is allowed, then the profit percentage (correct to nearest integer) is:

- Ans
- 1. 20
  - 2. 15
  - 3. 10
  - 4. 25

Question ID : 2390872728

Status : Answered

Chosen Option : 2

**Q.12** The simple interest on an amount of ₹2800 at the end of 3 years is ₹420. What would be the simple interest on an amount of ₹3200 for the same rate and the same period?

- Ans
- 1. ₹560

- 2. ₹640
- 3. ₹480
- 4. ₹440

Question ID : 2390872736  
 Status : Answered  
 Chosen Option : 3

**Q.13** A buys a water cooler at some price and sells it to B at 20% profit. B sells it to C at 10% profit. If C bought it for ₹6666, then the cost price for B is:

- Ans**
- 1. ₹5600
  - 2. ₹6400
  - 3. ₹5400
  - 4. ₹6060

Question ID : 2390872731  
 Status : Answered  
 Chosen Option : 4

**Q.14** The Table shows the number of candidates appearing for an interview for a post in six Banks (H, I, J, K, L, M) and percentage of qualifying candidates.

Banks	% of Candidates	
	Appearing	Qualifying
H	1500	14
I	2200	26
J	3000	17
K	900	20
L	1200	28
M	2500	21

The number of candidates who did not qualify in bank K was approximately what percent (correct to nearest integer) of the candidates who did not qualify in bank I?

- Ans**
- 1. 44
  - 2. 42
  - 3. 51
  - 4. 48

Question ID : 2390872745  
 Status : Answered  
 Chosen Option : 1

**Q.15** The median of the given data

$\frac{1}{2}, \frac{2}{7}, \frac{3}{4}, \frac{1}{3}, \frac{5}{8}$  is:

- Ans**
- 1.  $\frac{1}{2}$
  - 2.  $\frac{2}{7}$
  - 3.  $\frac{3}{4}$

4.  $\frac{1}{3}$

Question ID : 2390872729  
Status : Answered  
Chosen Option : 1

**Q.16** Pipe A can fill a tank in 36 minutes and Pipe B can empty the tank in 45 minutes. If both the pipes are opened simultaneously, then the time (in hours) to fill the tank to half its capacity is:

- Ans
- 1. 1.25
  - 2. 1.5
  - 3. 1.75
  - 4. 2

Question ID : 2390872738  
Status : Not Answered  
Chosen Option : --

**Q.17** A is twice as good at writing a novel as B. Together they can finish writing the novel in 24 days. In how many days can A alone write the novel?

- Ans
- 1. 18
  - 2. 24
  - 3. 36
  - 4. 32

Question ID : 2390872739  
Status : Answered  
Chosen Option : 1

**Q.18** Seventy eight is divided into two parts such that four times the first part and five times the second part are in the ratio 14:15. The first part is:

- Ans
- 1. 36
  - 2. 42
  - 3. 30
  - 4. 48

Question ID : 2390872734  
Status : Answered  
Chosen Option : 2

**Q.19** The volume of prism is  $288 \text{ cm}^3$  and height is 24 cm. The base area (in  $\text{cm}^2$ ) of the prism is:

- Ans
- 1. 10
  - 2. 12
  - 3. 14
  - 4. 15

Question ID : 2390872743  
Status : Not Answered  
Chosen Option : --

Q.20 The compound interest on an amount of ₹5120 at the rate of 12.5% (compounded annually) for 3 years is:

- Ans
- 1. ₹2280
  - 2. ₹1960
  - 3. ₹2170
  - 4. ₹2120

Question ID : 2390872737  
Status : Answered  
Chosen Option : 3

Q.21 If LCM of two numbers is 231, HCF of two numbers is 11 and one number is 77, the other number is:

- Ans
- 1. 57
  - 2. 37
  - 3. 33
  - 4. 47

Question ID : 2390872723  
Status : Answered  
Chosen Option : 3

Q.22 If A:B =3:4 , B:C =2:3 , the value of A + B : B + C : C + A is:

- Ans
- 1. 7:10:9
  - 2. 5:6:7
  - 3. 3:4:6
  - 4. 7:5:6

Question ID : 2390872735  
Status : Answered  
Chosen Option : 1

Q.23 The value of

$$\left(2\frac{1}{6} + 1\frac{13}{18} - \frac{1}{6}\right) \times 16 \div 4 \text{ is:}$$

- Ans
- 1.  $\frac{134}{9}$
  - 2. 63
  - 3. 42
  - 4.  $41\frac{1}{72}$

Question ID : 2390872725  
Status : Answered  
Chosen Option : 1

Q.24 A total of 57 sweets were distributed among 10 children such that each girl gets 6 sweets and each boy gets 5 sweets.  
The number of boys is:

- Ans
- 1. 6
  - 2. 4
  - 3. 3
  - 4. 5

Question ID : 2390872727  
Status : Answered  
Chosen Option : 3

**Q.25** A man is walking at a speed of 12 km per hour. After every kilometre, he takes rest for 4 minutes. How much time (in minutes) will he take to cover a distance of 8 kilometres?

- Ans
- 1. 68
  - 2. 72
  - 3. 64
  - 4. 60

Question ID : 2390872740  
Status : Answered  
Chosen Option : 1

Section : General awareness

**Q.1** What is the state of matter formed by cooling a gas of extremely low density to Super low temperatures?

- Ans
- 1. Plasma
  - 2. Solid
  - 3. Liquid
  - 4. Bose-Einstein Condensate

Question ID : 2390872890  
Status : Answered  
Chosen Option : 3

**Q.2** The famous cartoon character called 'Gattu' was created by the legendary cartoonist RK Laxman for which company?

- Ans
- 1. Onida
  - 2. Amul
  - 3. Nirma
  - 4. Asian Paints

Question ID : 2390872881  
Status : Answered  
Chosen Option : 4

**Q.3** Which Indian actor has been appointed as Brand Ambassador by 'Phone Pe' in March 2019?

- Ans
- 1. Aamir Khan
  - 2. Amitabh Bachchan
  - 3. Salman Khan
  - 4. Shahrukh Khan

Question ID : 2390872878  
Status : Answered  
Chosen Option : 4

**Q.4 In the context of the Physical features of India, what is kayal?**

- Ans
- 1. Thick deposits of glacial clay
  - 2. Alluvial floodplains in North East
  - 3. Lake formed by tectonic activity
  - 4. Backwaters

Question ID : 2390872892  
Status : Answered  
Chosen Option : 3

**Q.5 What is the SI unit of momentum?**

- Ans
- 1. Kg m/sec
  - 2. Kg m
  - 3. Joule
  - 4. Ampere

Question ID : 2390872888  
Status : Answered  
Chosen Option : 1

**Q.6 Which of the following is NOT a communicable disease?**

- Ans
- 1. Chickenpox
  - 2. Tuberculosis
  - 3. Diabetes
  - 4. Cholera

Question ID : 2390872887  
Status : Answered  
Chosen Option : 3

**Q.7 After the revolt of 1857, which of the following changes were NOT introduced by the British Government in India?**

- Ans
- 1. Governor General of India became Viceroy of India
  - 2. Secretary of State for India was appointed
  - 3. Powers of East India Company was transferred to British Crown
  - 4. Proportion of India Soldiers in the British army were increased

Question ID : 2390872895  
Status : Answered  
Chosen Option : 4

**Q.8 Tropical Evergreen Forests are NOT found in which part of India?**

- Ans
- 1. North Eastern Region
  - 2. Andaman & Nicobar
  - 3. Eastern Ghats

4. Western Ghats

Question ID : 2390872894  
Status : Answered  
Chosen Option : 3

Q.9 Tripitaka is the holy book of which of the following religions?

- Ans
- 1. Buddhism
  - 2. Jainism
  - 3. Judaism
  - 4. Islam

Question ID : 2390872875  
Status : Answered  
Chosen Option : 2

Q.10 Which film won Golden Peacock Award at IFFI 2018?

- Ans
- 1. Walking with the wind
  - 2. Sealed lips
  - 3. Donbass
  - 4. Tumhari Sulu

Question ID : 2390872880  
Status : Answered  
Chosen Option : 4

Q.11 Which human organ is responsible for removing nitrogenous waste from the human body?

- Ans
- 1. Lungs
  - 2. Kidney
  - 3. Liver
  - 4. Pancreas

Question ID : 2390872891  
Status : Answered  
Chosen Option : 3

Q.12 During the reign of Iltutmish, special slaves were purchased for military service known as

- Ans
- 1. Iqtadar
  - 2. Muqtis
  - 3. Bandagan
  - 4. Samanta

Question ID : 2390872896  
Status : Not Answered  
Chosen Option : --

Q.13 Which of the following is NOT a weight division in boxing?

- Ans
- 1. Heavy weight



- 2. Middle weight
- 3. Under weight
- 4. Light weight

Question ID : 2390872877  
Status : Answered  
Chosen Option : 3

**Q.14** The decisions of the Supreme Court of India are binding on \_\_\_\_\_.

- Ans
- 1. Only District Courts
  - 2. All Courts in India
  - 3. Territory of individual state
  - 4. All States & UT except J & K

Question ID : 2390872885  
Status : Answered  
Chosen Option : 4

**Q.15** What is the amount allocated to Mahatma Gandhi National Rural Employment Guarantee Act (MGNREGA) Scheme in the Union Budget for 2019-20?

- Ans
- 1. ₹60000 crore
  - 2. ₹80000 crore
  - 3. ₹50000 crore
  - 4. ₹70000 crore

Question ID : 2390872882  
Status : Answered  
Chosen Option : 1

**Q.16** Right to Health is guaranteed to every citizen of India under which article?

- Ans
- 1. Article 19
  - 2. Article 21-A
  - 3. Article 20
  - 4. Article 21

Question ID : 2390872884  
Status : Answered  
Chosen Option : 1

**Q.17** Which is the highest Court of Appeal in India?

- Ans
- 1. High Court
  - 2. Supreme Court
  - 3. District Court
  - 4. Consumer Court

Question ID : 2390872886  
Status : Answered  
Chosen Option : 2

Q.18 Pricing Policy of Minimum Support Price follows which approach?

- Ans  1. Cost plus approach  
 2. Loan plus approach  
 3. Investment plus approach  
 4. Land plus approach

Question ID : 2390872883  
Status : Not Answered  
Chosen Option : --

Q.19 First Indian woman to successfully scale Mount Makalu is \_\_\_\_\_.

- Ans  1. Priyanka Mohite  
 2. Gauri Sawant  
 3. Bhawana Kanth  
 4. Kami Rita Sherpa

Question ID : 2390872879  
Status : Not Answered  
Chosen Option : --

Q.20 Which of the following rivers is NOT a part of Himalayan drainage system?

- Ans  1. Ganga  
 2. Godavari  
 3. Indus  
 4. Brahmaputra

Question ID : 2390872893  
Status : Answered  
Chosen Option : 2

Q.21 Which Education Commission argued that European learning would improve the moral character of Indians?

- Ans  1. Irwin Report  
 2. Wood's Despatch  
 3. Linlithgow Commission  
 4. Ramsay Macdonald Award

Question ID : 2390872897  
Status : Answered  
Chosen Option : 2

Q.22 Which of the following is NOT a colour in the Olympic Ring?

- Ans  1. Pink  
 2. Green  
 3. Red  
 4. Blue

Question ID : 2390872876  
Status : Answered

Chosen Option : 1

**Q.23 Which part of human respiratory system provides surface for exchange of gases?**

- Ans**
- 1. Alveoli
  - 2. Bronchioles
  - 3. Bronchi
  - 4. Trachea

Question ID : **2390872889**  
Status : **Not Answered**  
Chosen Option : --

**Q.24 The famous Lingraja Temple is located in which city?**

- Ans**
- 1. Bhubaneshwar
  - 2. Bhopal
  - 3. Ujjain
  - 4. Kolkata

Question ID : **2390872874**  
Status : **Answered**  
Chosen Option : 1

**Q.25 Which of the following pillars depict rock-cut pillars?**

- Ans**
- 1. Gothic Pillars
  - 2. Persian Pillars
  - 3. Mauryan Pillars
  - 4. Achamenian Pillars

Question ID : **2390872873**  
Status : **Not Answered**  
Chosen Option : --