

Section : General English

Q.1 Select the most appropriate option to fill in the blank and make a grammatically correct sentence.

Robert and Rooney aren't very good friends although they _____ each other for a long time.

- Ans
- 1. knew
 - 2. have known
 - 3. has known
 - 4. are knowing

Question ID : 2390872079
Status : Answered
Chosen Option : 1

Q.2 Select the most appropriate synonym of the given word.

RELEVANT

- Ans
- 1. Applicable
 - 2. Inapplicable
 - 3. Unrelated
 - 4. Unconnected

Question ID : 2390872082
Status : Answered
Chosen Option : 1

Q.3 Select the most appropriate word to fill in the blank and make a meaningful sentence.

When I returned home from work I found my son weeping _____.

- Ans
- 1. gently
 - 2. bitterly
 - 3. sweetly
 - 4. calmly

Question ID : 2390872092
Status : Answered
Chosen Option : 2

Q.4 Identify the segment in the sentence which contains the grammatical error from the given options.

The essay is divided into five paragraphs and every of these has seven sentences.

- Ans
- 1. and every of these
 - 2. The essay is divided
 - 3. into five paragraphs

4. has seven sentences

Question ID : 2390872069
Status : Marked For Review
Chosen Option : 4

Q.5 Select the most appropriate word to fill in the blank and make a meaningful sentence.

Nowadays, digital services have made our cash transactions easier and _____.

- Ans
- 1. softer
 - 2. heavier
 - 3. smoother
 - 4. dearer

Question ID : 2390872091
Status : Marked For Review
Chosen Option : 3

Q.6 Identify the segment in the sentence which contains the grammatical error from the given options.

Outside the cinema hall, there was queue of people waiting to see the movie.

- Ans
- 1. Outside the cinema hall
 - 2. people waiting
 - 3. to see the movie
 - 4. there was queue of

Question ID : 2390872067
Status : Answered
Chosen Option : 3

Q.7 Identify the segment in the sentence which contains the grammatical error from the given options.

A friend of mine is working as a photographer of the local newspaper.

- Ans
- 1. photographer of
 - 2. is working as a
 - 3. A friend of mine
 - 4. the local newspaper

Question ID : 2390872068
Status : Answered
Chosen Option : 3

Q.8 Select the most appropriate word for the given group of words.

The decision that is given by the jury or judge at the end of a trial

- Ans
- 1. Allegation
 - 2. Accusation
 - 3. Verdict
 - 4. Punishment

Question ID : 2390872087
Status : Marked For Review
Chosen Option : 1

Q.9 Select the most appropriate antonym of the word.

ILLUSION

- Ans
- 1. Reality
 - 2. Fantasy
 - 3. Hallucination
 - 4. Mirage

Question ID : 2390872084
Status : Answered
Chosen Option : 1

Q.10 Select the most appropriate option to substitute the underlined segment in the given sentence. If there is no need to substitute it, select No improvement.

I asked two pedestrians the way to the station, and neither of them couldn't help me.

- Ans
- 1. and either them couldn't
 - 2. No improvement
 - 3. but neither of them could
 - 4. but none of they could

Question ID : 2390872071
Status : Answered
Chosen Option : 4

Q.11 Select the correctly spelt word.

- Ans
- 1. Discribe
 - 2. Disappear
 - 3. Devlop
 - 4. Diffrence

Question ID : 2390872090
Status : Answered
Chosen Option : 2

Q.12 Select the most appropriate option to fill in the blank and make a grammatically correct sentence.

Children are not allowed to use the swimming pool _____ they are accompanied by an adult.

- Ans
- 1. unless
 - 2. at least
 - 3. in case
 - 4. if only

Question ID : 2390872080
Status : Answered
Chosen Option : 1

Q.13 Select the most appropriate meaning of the given idiom.

It's raining cats and dogs

- Ans
- 1. To rain at regular intervals
 - 2. To rain mildly
 - 3. To rain continuously
 - 4. To rain very heavily

Question ID : 2390872085
Status : Answered

Q.14 Select the most appropriate word for the given group of words.

An extremely large mass of ice which moves very slowly, often down a mountain valley

- Ans
- 1. Mirage
 - 2. Ocean
 - 3. Glacier
 - 4. Island

Question ID : 2390872088
Status : Answered
Chosen Option : 3

Q.15 Select the most appropriate option to substitute the underlined segment in the given sentence. If there is no need to substitute it, select No improvement.

Robert told me about his new job, which he's enjoying very much.

- Ans
- 1. which he enjoying
 - 2. No improvement
 - 3. that which he's enjoyed
 - 4. which he had enjoy

Question ID : 2390872072
Status : Answered
Chosen Option : 2

Q.16 Select the most appropriate synonym of the given word.

CALM

- Ans
- 1. Peaceful
 - 2. Violent
 - 3. Windy
 - 4. Stormy

Question ID : 2390872081
Status : Answered
Chosen Option : 1

Q.17 Select the most appropriate antonym of the word.

DIMINISH

- Ans
- 1. Decrease
 - 2. Decline
 - 3. Shrink
 - 4. Increase

Question ID : 2390872083
Status : Answered
Chosen Option : 4

Q.18 Select the most appropriate option to substitute the underlined segment in the given sentence. If there is no need to substitute it, select No improvement.

The fire spread through the building very quick but fortunately nobody was injured.

- Ans
- 1. No improvement
 - 2. spreading through building very quick
 - 3. spread through the building very quickly
 - 4. spreads through

Question ID : 2390872070
Status : Answered
Chosen Option : 3

Q.19 Select the most appropriate meaning of the given idiom.

Forty winks

- Ans
- 1. To blink repeatedly
 - 2. A sound sleep at night
 - 3. To keep awake
 - 4. A short nap during the day

Question ID : 2390872086
Status : Answered
Chosen Option : 1

Q.20 Select the correctly spelt word.

- Ans
- 1. Disastrous
 - 2. Diractory
 - 3. Discipline
 - 4. Dormitory

Question ID : 2390872089
Status : Answered
Chosen Option : 3

Comprehension:

In the following passage some words have been deleted. Fill in the blanks with the help of the alternatives given. Select the most appropriate option for each blank.

The house - the only one in the entire valley sat on the crest of a low hill. From this height one (1)_____ see the river and the field of ripe corn dotted with the flowers that (2)_____ promised a good harvest. The only thing the earth (3)_____ was a downpour or at least a shower. Throughout the morning Paul - who (4)_____ his fields intimately (5)_____ done nothing else but watch the sky towards the north-east.

SubQuestion No : 21

Q.21 Select the most appropriate option to fill in blank No.1

- Ans
- 1. must
 - 2. could
 - 3. ought
 - 4. need

Question ID : 2390872074
Status : Answered
Chosen Option : 2

Comprehension:

In the following passage some words have been deleted. Fill in the blanks with the help of the alternatives given. Select the most appropriate option for each blank.

The house - the only one in the entire valley sat on the crest of a low hill. From this height one (1)_____ see the river and the field of ripe corn dotted with the flowers that (2)_____ promised a good harvest. The only thing the earth (3)_____ was a downpour or at least a shower. Throughout the morning Paul - who (4)_____ his fields intimately (5)_____ done nothing else but watch the sky towards the north-east.

SubQuestion No : 22

Q.22 Select the most appropriate option to fill in blank No.2

- Ans
- 1. rarely
 - 2. always

3. hardly

4. never

Question ID : 2390872075

Status : Answered

Chosen Option : 2

Comprehension:

In the following passage some words have been deleted. Fill in the blanks with the help of the alternatives given. Select the most appropriate option for each blank.

The house - the only one in the entire valley sat on the crest of a low hill. From this height one (1)_____ see the river and the field of ripe corn dotted with the flowers that (2)_____ promised a good harvest. The only thing the earth (3)_____ was a downpour or at least a shower. Throughout the morning Paul - who (4)_____ his fields intimately (5)_____ done nothing else but watch the sky towards the north-east.

SubQuestion No : 23

Q.23 Select the most appropriate option to fill in blank No.3

- Ans
- 1. longed
 - 2. prayed
 - 3. needed
 - 4. displayed

Question ID : 2390872076

Status : Answered

Chosen Option : 3

Comprehension:

In the following passage some words have been deleted. Fill in the blanks with the help of the alternatives given. Select the most appropriate option for each blank.

The house - the only one in the entire valley sat on the crest of a low hill. From this height one (1)_____ see the river and the field of ripe corn dotted with the flowers that (2)_____ promised a good harvest. The only thing the earth (3)_____ was a downpour or at least a shower. Throughout the morning Paul - who (4)_____ his fields intimately (5)_____ done nothing else but watch the sky towards the north-east.

SubQuestion No : 24

Q.24 Select the most appropriate option to fill in blank No.4

- Ans
- 1. known
 - 2. know
 - 3. knowing
 - 4. knew

Question ID : 2390872077

Status : Answered

Chosen Option : 4

Comprehension:

In the following passage some words have been deleted. Fill in the blanks with the help of the alternatives given. Select the most appropriate option for each blank.

The house - the only one in the entire valley sat on the crest of a low hill. From this height one (1)_____ see the river and the field of ripe corn dotted with the flowers that (2)_____ promised a good harvest. The only thing the earth (3)_____ was a downpour or at least a shower. Throughout the morning Paul - who (4)_____ his fields intimately (5)_____ done nothing else but watch the sky towards the north-east.

SubQuestion No : 25

Q.25 Select the most appropriate option to fill in blank No.5

- Ans
- 1. had
 - 2. have
 - 3. having

4. is

Question ID : 2390872078
Status : Answered
Chosen Option : 2

Section : General Intelligence & Reasoning

Q.1 If 'A' stands 'addition', B stands for 'division', C stands for 'subtraction' and D stands for 'multiplication', then what is the value of the following equation?

25 D 13 A 82 C 132 B 11 = ?

- Ans
- 1. 415
 - 2. 395
 - 3. 375
 - 4. 253

Question ID : 2390871958
Status : Answered
Chosen Option : 2

Q.2 Select the option that is related to the third letter-cluster in the same way as the second letter-cluster is related to the first letter-cluster.

PECL : OFHS :: QTJM : ?

- Ans
- 1. PMWT
 - 2. ONVS
 - 3. OMWS
 - 4. PNV T

Question ID : 2390871943
Status : Answered
Chosen Option : 1

Q.3 Which number will replace the question mark (?) in the following series?

105, 106, 114, 141, ?

- Ans
- 1. 206
 - 2. 205
 - 3. 207
 - 4. 208

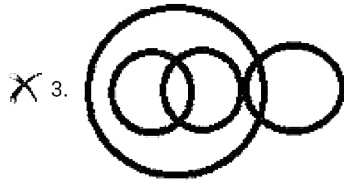
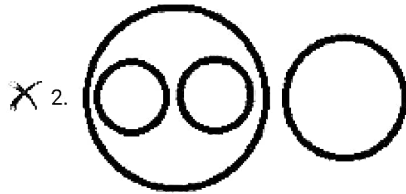
Question ID : 2390871954
Status : Answered
Chosen Option : 2

Q.4 Select the Venn diagram that best illustrates the relationship between the following classes.

Mothers, Fathers, Daughters, Women

Ans





Question ID : 2390871964

Status : Answered

Chosen Option : 1

Q.5 Which of the following letter cluster will replace the question mark (?) to complete the given series?

PTX, AEI, LPT, ?

- Ans
- 1. XAE
 - 2. WAE
 - 3. XAD
 - 4. WZE

Question ID : 2390871940

Status : Not Attempted and Marked For Review

Chosen Option : --

Q.6 Eight friends P, Q, R, S, T, U, V and W are sitting around a circular table at equal distances from each other. U is sitting extremely opposite to P. S is between V and Q. R is between U and W. P is sitting to the immediate right of Q. Who is sitting between P and W?

- Ans
- 1. T
 - 2. V
 - 3. Q
 - 4. U

Question ID : 2390871949

Status : Answered

Chosen Option : 4

Q.7 In a code language, if 'REPAIR' is written as '18101621818', then how will 'GALAXY' be written in that language?

- Ans
- 1. 721222425
 - 2. 721212425
 - 3. 711212425
 - 4. 611212324

Question ID : 2390871947

Status : Answered

Chosen Option : 1

Q.8 Select the option that is related to the third number in the same way as the second number is related to the first number.

12 : 121 :: 10 : ?

- Ans
- 1. 91
 - 2. 81
 - 3. 64
 - 4. 112

Question ID : 2390871955
 Status : Answered
 Chosen Option : 2

Q.9 Select the word pair in which the two words are related in the same way as the two words in the following word-pair.

Skin : Eczema

- Ans
- 1. Heart : Blood
 - 2. Lungs : Oxygen
 - 3. Eyes : Cataract
 - 4. Kidney : Diabetes

Question ID : 2390871942
 Status : Answered
 Chosen Option : 3

Q.10 Select the figure that will come next in the following figure series.



Ans

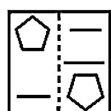
- 1.
- 2.
- 3.
- 4.

Q.11 Select the set in which the numbers are related in the same way as are the numbers of the following set.

5, 30, 40

- Ans
- 1. 7, 56, 77
 - 2. 4, 25, 32
 - 3. 6, 42, 49
 - 4. 8, 72, 88

Q.12 A figure of transparent sheet with a pattern is given below. Figure out from amongst the four options as to how the pattern would appear when the transparent sheet is folded at the dotted line.



Ans

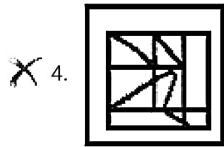
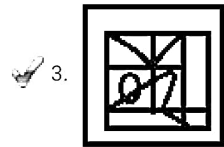
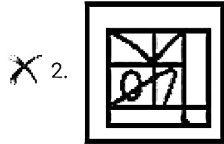
- 1.
- 2.
- 3.
- 4.

Q.13 Select the option figure which contains the given question figure embedded in it as its part. (Rotation is not allowed)



Ans

- 1.



Question ID : 2390871961
Status : Answered
Chosen Option : 3

Q.14 Two statements are given, followed by three conclusions numbered I, II and III. Assuming the statements to be true, even if they seem to be at variance with commonly known facts, decide which of the conclusions logically follow(s) from the statements.

Statements:
Some caps are shirts.
Some shirts are coats.

Conclusions:
I. No coat is cap.
II. No coat is shirt.
III. Some coats are caps.

- Ans ✓ 1. Either conclusion I or III follow.
X 2. Conclusions II and III follow.
X 3. Either conclusion II or III follow.
X 4. Conclusions I and II follow.

Question ID : 2390871952
Status : Answered
Chosen Option : 1

Q.15 In a code language, if 'CLASS' is written as '24152688', then how will 'MORPH' be written in that language?

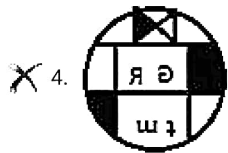
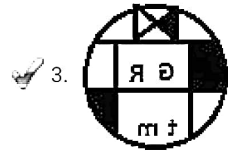
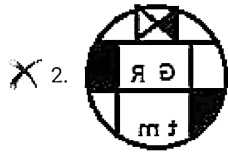
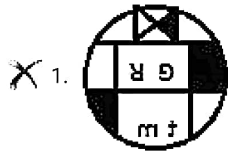
- Ans X 1. 131291018
✓ 2. 141291119
X 3. 141181118
X 4. 151291119

Question ID : 2390871946
Status : Answered
Chosen Option : 2

Q.16 Select the correct mirror image of the given figure when the mirror is placed to the right of the figure.



Ans



Question ID : 2390871962

Status : Answered

Chosen Option : 3

Q.17 Six persons A, B, C, D, E and F are sitting in a line. E is between D and F. A is second to the right of F. C is at extreme right. Who is sitting at second place to the left of C?

- Ans
- X 1. D
 - 2. B
 - X 3. F
 - X 4. A

Question ID : 2390871948

Status : Answered

Chosen Option : 2

Q.18 In a code language, 'LANTERN' is written as 'AELNNRT'. How will 'POSITIVE' be written as in that language?

- Ans
- X 1. EIIOPTVS
 - 2. EIIOPTSV
 - X 3. ISOPEVIT
 - X 4. IIEPOSTV

Question ID : 2390871945

Status : Marked For Review

Chosen Option : 3

Q.19 In a code language, 'people are confident' is written as 'lur bur duk', 'we are helpful' is written as 'kur duk sur', 'we have cars' is written as 'sur mur jur' and 'people have honesty' is written as 'lur jur nur'. What is the code for 'confident'?

- Ans
- X 1. lur
 - 2. bur
 - X 3. jur
 - X 4. duk

Question ID : 2390871944

Status : Answered

Chosen Option : 2

Q.20 'Jharkhand' is related to 'State' in the same way as 'Lakshwadweep' is related to '_____':

- Ans
- 1. Punjab
 - 2. Ranchi
 - 3. District
 - 4. Union Territory

Question ID : 2390871941
Status : Answered
Chosen Option : 4

Q.21 Three statements are given, followed by three conclusions numbered I, II and III. Assuming the statements to be true, even if they seem to be at variance with commonly known facts, decide which of the conclusions logically follow(s) from the statements.

Statements:

Some plants are leaves.
All leaves are twigs.
No twig is banana.

Conclusions:

I. Some plants are bananas.
II. Some twigs are leaves.
III. Some bananas are leaves.

- Ans
- 1. Only conclusion II follows
 - 2. Only conclusion III follows
 - 3. Conclusions I and II follow
 - 4. Conclusions II and III follow

Question ID : 2390871951
Status : Answered
Chosen Option : 2

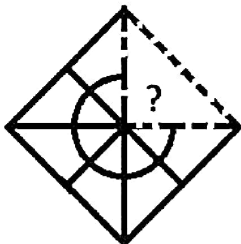
Q.22 Which number will replace the question mark (?) in the following series?

15, 17, 20, 25, 32, 43, ?

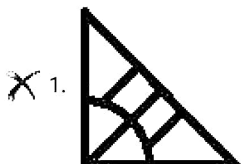
- Ans
- 1. 54
 - 2. 55
 - 3. 57
 - 4. 56

Question ID : 2390871953
Status : Answered
Chosen Option : 4

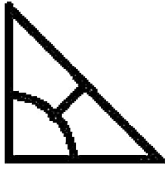
Q.23 Which of the following option figure will complete the pattern in the figure given below?



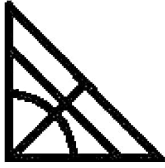
Ans



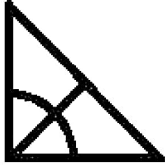
2.



3.



4.



Question ID : 2390871960

Status : Answered

Chosen Option : 4

Q.24 Which two signs and two numbers should be interchanged to make the given equation correct?

$$28 + 4 \times 16 \div 5 - 17 = 127$$

Ans

1. 4 and 5, + and \times
 2. 28 and 16, + and \div
 3. 4 and 5, + and -
 4. 28 and 5, \div and \times

Question ID : 2390871957

Status : Answered

Chosen Option : 1

Q.25 Amrit is elder than Vikrant. Shanaz is elder than Joya. Ketan is younger than Joya. Vikrant is elder than Shanaz. Who is the youngest in the group?

Ans

1. Shanaz
 2. Ketan
 3. Joya
 4. Vikrant

Question ID : 2390871950

Status : Answered

Chosen Option : 3

Section : Numerical Aptitude

Q.1 The area of the sheet metal needed to make a box of size $7 \text{ cm} \times 8 \text{ cm} \times 9 \text{ cm}$ is:

Ans

1. 156 cm^2
 2. 382 cm^2
 3. 139 cm^2
 4. 412 cm^2

Question ID : 2390871985

Status : Answered

Chosen Option : 2

Q.2 Age of A is 6 years more than three times the age of B. After three years, A's age will be 8 years more than twice the age of B. The average of present ages of A and B (in years) is:

- Ans
- 1. 12
 - 2. 14
 - 3. 11
 - 4. 13

Question ID : 2390871968
Status : Answered
Chosen Option : 4

Q.3 A mixture contains milk and water in the ratio (by volume) 5 : 3 and another mixture, of the same volume as that of the former, contains water and milk in the ratio (by volume) 1 : 3. In what ratio, two mixtures be mixed in order to obtain a new mixture consisting of milk and water in the ratio (by volume) 7 : 3?

- Ans
- 1. 3 : 4
 - 2. 3 : 2
 - 3. 2 : 3
 - 4. 5 : 6

Question ID : 2390871976
Status : Answered
Chosen Option : 3

Q.4 A boat takes 80 minutes to row 12 km upstream and 60 minutes to row 15 km downstream. How long will it take to row a distance of 36 km in still water?

- Ans
- 1. 4 hours
 - 2. 2.5 hours
 - 3. 3 hours
 - 4. 2 hours

Question ID : 2390871982
Status : Answered
Chosen Option : 3

Q.5 A work can be completed by 35 workers in 30 days. If 5 workers leave after every 10 days then in how many days will the work be completed?

- Ans
- 1. 50 days
 - 2. 40 days
 - 3. 35.5 days
 - 4. 37.5 days

Question ID : 2390871981
Status : Answered
Chosen Option : 4

Q.6 The diagonal of a square measures $6\sqrt{2}$ cm. The measure of the diagonal of a square whose area is twice that of the first square is:

- Ans
- 1. $6\sqrt{2}$ cm
 - 2. $12\sqrt{2}$ cm
 - 3. 12 cm
 - 4. 6 cm

Question ID : 2390871984
Status : Answered

Q.7 The Table shows the Number of Laptops and Desktops manufactured by a company.

Year	2008	2009	2010	2011	2012
Laptops	14400	20500	12800	16400	18600
Desktops	12800	24700	19200	20200	14900

What is the average number of laptops manufactured by a company from 2008 to 2012?

- Ans
- 1. 13550
 - 2. 16540
 - 3. 14260
 - 4. 16140

Question ID : 2390871989
Status : Answered
Chosen Option : 2

Q.8 If $a : b = 2 : 3$ and $b : c = 2 : 3$, then what is the value of $(3a^2 + b^2 - c^2) : (a^2 + 2b^2 - c^2)$?

- Ans
- 1. 5 : 7
 - 2. 4 : 5
 - 3. 3 : 5
 - 4. 3 : 7

Question ID : 2390871975
Status : Answered
Chosen Option : 4

Q.9 The value of $5\frac{1}{3} \times 2\frac{1}{7} \times 9\frac{2}{5} \times 4\frac{3}{8} \times 2\frac{6}{47}$ is:

- Ans
- 1. 1000
 - 2. 1
 - 3. 100
 - 4. 10

Question ID : 2390871967
Status : Answered
Chosen Option : 1

Q.10 A can do a work in 15 days. B is 25% more efficient than A. In how many days, working together A and B will complete the same work?

- Ans
- 1. $\frac{21}{4}$
 - 2. $\frac{25}{7}$
 - 3. $\frac{24}{5}$
 - 4. $\frac{20}{3}$

Question ID : 2390871980
Status : Answered
Chosen Option : 4

Q.11

The Table shows the Number of Laptops and Desktops manufactured by a company.

Year	2008	2009	2010	2011	2012
Laptops	14400	20500	12800	16400	18600
Desktops	12800	24700	19200	20200	14900

What was the difference in the total number of Laptops and Desktops manufactured in 2009 to the total number of Laptops and Desktops manufactured in 2011?

- Ans
- 1. 6800
 - 2. 5600
 - 3. 8600
 - 4. 8200

Question ID : 2390871987
Status : Answered
Chosen Option : 3

Q.12 If 80% of X is 36 more than 60% of Y and 120% of X is equal to Y, then the difference between X and Y is:

- Ans
- 1. 80
 - 2. 60
 - 3. 90
 - 4. 100

Question ID : 2390871972
Status : Answered
Chosen Option : 3

Q.13 A Woman travelling at 130% of her usual speed reaches her office 12 minute early. Her usual time to cover the journey is:

- Ans
- 1. 0.52 hr
 - 2. 0.48 hr
 - 3. 2 hrs
 - 4. 1 hr

Question ID : 2390871983
Status : Answered
Chosen Option : 1

Q.14 The volume of prism is 308 cm^3 and height is 11 cm. The base area of prism is:

- Ans
- 1. 22 cm^2
 - 2. 28 cm^2
 - 3. 21 cm^2
 - 4. 14 cm^2

Question ID : 2390871986
Status : Answered
Chosen Option : 2

Q.15 The value of $[12 \times 5 - \{200 - (501 + 247 - 386)\}] + 2$ is:

- Ans
- 1. 162
 - 2. 161
 - 3. 111

X 4. 82

Question ID : 2390871966
Status : Answered
Chosen Option : 3

Q.16 The Table shows the Number of Laptops and Desktops manufactured by a company.

Year	2008	2009	2010	2011	2012
Laptops	14400	20500	12800	16400	18600
Desktops	12800	24700	19200	20200	14900

Approximately what was the percentage decrease in number of desktops manufactured in 2012 from 2011? (correct to nearest integer)

- Ans
- 1. 26
 - 2. 28
 - 3. 22
 - 4. 30

Question ID : 2390871988
Status : Answered
Chosen Option : 1

Q.17 The largest three digit number that is exactly divisible by 6, 7 and 8 is:

- Ans
- 1. 168
 - 2. 840
 - 3. 999
 - 4. 358

Question ID : 2390871965
Status : Answered
Chosen Option : 2

Q.18 The average of 10 numbers is P and the average of 4 of these numbers is Q. If the average of remaining numbers is R then which of the following is correct:

- Ans
- 1. $5P = 2Q + 3R$
 - 2. $3P = 2Q + 4R$
 - 3. $5P = 3Q + 2R$
 - 4. $4P = 2Q + 3R$

Question ID : 2390871969
Status : Answered
Chosen Option : 1

Q.19 Parikh sold his pen at a profit of ₹11. He calculated the profit percentage on selling price and found it to be 25%. The cost price (in ₹) of the pen is:

- Ans
- 1. 24
 - 2. 33
 - 3. 36
 - 4. 44

Question ID : 2390871974
Status : Answered
Chosen Option : 4

Q.20 If an article is sold at 23% profit instead of 14% profit, then the profit would be ₹189 more. What is the cost price?

- Ans
- 1. ₹2105

2. ₹1800
 3. ₹2100
 4. ₹2340

Question ID : 2390871973
Status : Answered
Chosen Option : 3

Q.21 A bag contains ten rupee, five rupee and two rupee notes in the ratio 10 : 5 : 2. The total value of five rupee notes in the bag is ₹84 more than that of two rupee notes. The total value of ten rupee notes in the bag (in ₹) is:

- Ans 1. 300
 2. 400
 3. 450
 4. 350

Question ID : 2390871977
Status : Not Attempted and Marked For Review
Chosen Option : --

Q.22 After allowing a discount of 12.5%, shopkeeper makes a profit of 25% on a bag. At what percent higher than the cost price did he mark the bag? (correct to nearest integer)

- Ans 1. 41%
 2. 43%
 3. 38%
 4. 35%

Question ID : 2390871970
Status : Answered
Chosen Option : 2

Q.23 A sum doubles in 4 years at a certain rate of compound interest. In how many years does it amount to 8 times itself at the same rate?

- Ans 1. 12
 2. 15
 3. 6
 4. 9

Question ID : 2390871979
Status : Answered
Chosen Option : 1

Q.24 The temperature in $^{\circ}\text{C}$ of 11 days recorded as follows :
29, 32, 30, 15, 21, 24, 23, 27, 26, 30, 33 the Median of the temperature is:

- Ans 1. 26
 2. 23
 3. 27
 4. 18

Question ID : 2390871971
Status : Answered
Chosen Option : 3

Q.25 A certain sum amounts to ₹20720 in four years and ₹24080 in six years at a certain rate of simple interest. The sum (in ₹) is:

- Ans
- 1. 15000
 - 2. 14000
 - 3. 11000
 - 4. 12000

Question ID : 2390871978
Status : Answered
Chosen Option : 2

Section : General awareness

Q.1 The reaction between an acid and base is known as ____.

- Ans
- 1. Neutralisation
 - 2. Acidification
 - 3. Sublimation
 - 4. Evaporation

Question ID : 2390872004
Status : Answered
Chosen Option : 1

Q.2 किसने प्रांतीय संविधान समिति का नेतृत्व किया?

- Ans
- 1. वी. पी. मेनन
 - 2. जवाहरलाल नेहरू
 - 3. डॉ. राजेंद्र प्रसाद
 - 4. सरदार वल्लभ भाई पटेल

Question ID : 2390872002
Status : Answered
Chosen Option : 3

Q.3 Which of the following pair of Tropical Grassland - Location is correct?

- Ans
- 1. Steppe - Greenland
 - 2. Los Llanos - Brazil
 - 3. Savanna - Africa
 - 4. Campas - Venezuela

Question ID : 2390872009
Status : Marked For Review
Chosen Option : 2

Q.4 Poona Pact, 1932, was signed between ____.

- Ans
- 1. Dr. B.R. Ambedkar and Mahatma Gandhi
 - 2. Dr. B.R. Ambedkar and Jawaharlal Nehru
 - 3. Mahatma Gandhi and Mc Donald
 - 4. Mahatma Gandhi and Viceroy Irvin

Question ID : 2390872013
Status : Marked For Review
Chosen Option : 1

Q.5 Swaraj Party was formed by ____.

- Ans
- 1. C.R. Das and Jawaharlal Nehru

- 2. Subhas Chandra Bose and Jawaharlal Nehru
- 3. Motilal Nehru and Sardar Vallabhbhai Patel
- 4. C.R. Das and Motilal Nehru

Question ID : 2390872014
Status : Answered
Chosen Option : 4

Q.6 Article 21-A was introduced by which Constitutional Amendment Act?

- Ans
- 1. 93rd
 - 2. 86th
 - 3. 85th
 - 4. 73rd

Question ID : 2390872001
Status : Answered
Chosen Option : 2

Q.7 Who among the following has NOT received 'Bharat Ratna'?

- Ans
- 1. Sachin Tendulkar
 - 2. Atal Bihari Vajpayee
 - 3. Pt. Jawaharlal Nehru
 - 4. Mahatma Gandhi

Question ID : 2390871997
Status : Answered
Chosen Option : 4

Q.8 Which of the following Prime Minister has served a term of 13 days?

- Ans
- 1. Jawaharlal Nehru
 - 2. Charan Singh
 - 3. Atal Bihari Vajpayee
 - 4. Morarji Desai

Question ID : 2390871995
Status : Answered
Chosen Option : 2

Q.9 Who decides repo rate, reverse repo rate and bank rate?

- Ans
- 1. SEBI
 - 2. Reserve Bank of India
 - 3. NABARD
 - 4. SBI

Question ID : 2390871999
Status : Answered
Chosen Option : 2

Q.10 What is the necessary condition for rusting of iron?

- Ans
- 1. Presence of O₂
 - 2. Presence of CO₂
 - 3. Absence of O₂
 - 4. Absence of w

Question ID : 2390872007
Status : Answered
Chosen Option : 1

Q.11 As of June 2019, which of the following is NOT a Navratna Company?

- Ans
- 1. Steel Authority of India Limited
 - 2. Rashtriya Ispat Nigam Limited
 - 3. Bharat Electronics Limited
 - 4. Hindustan Petroleum Corporation Limited

Question ID : 2390872000
Status : Answered
Chosen Option : 3

Q.12 Which of the following countries hosted the first South Asian Games?

- Ans
- 1. India
 - 2. Pakistan
 - 3. Nepal
 - 4. Bangladesh

Question ID : 2390871993
Status : Answered
Chosen Option : 3

Q.13 In which year the Congress and the Muslim League signed the historic Lucknow pact?

- Ans
- 1. 1915
 - 2. 1917
 - 3. 1916
 - 4. 1906

Question ID : 2390872012
Status : Answered
Chosen Option : 3

Q.14 The painting "Damayanthi" was painted by _____.

- Ans
- 1. Raja Ravi Varma
 - 2. Kalidas
 - 3. Johann Zoffany
 - 4. Abanindranath Tagore

Question ID : 2390871991
Status : Answered
Chosen Option : 1

Q.15 Who was the first Chief Justice of Independent India?

- Ans
- 1. M. Patanjali Sastri
 - 2. B.K. Mukherjee
 - 3. Harilal J. Kania
 - 4. S.R. Das

Question ID : 2390871996
Status : Answered
Chosen Option : 3

Q.16 Temple for Goddess Nishumbhasudini was built by _____.

- Ans 1. Cholas
 2. Muttaraiyar
 3. Gupta Dynasty
 4. Pallavas

Question ID : 2390871992
Status : Marked For Review
Chosen Option : 4

Q.17 Who among the following is the highest wicket taker in the ICC World Cup 2019?

- Ans 1. Mitchell Starc
 2. Jofra Archer
 3. Jaspreet Bumrah
 4. Trent Boult

Question ID : 2390871994
Status : Answered
Chosen Option : 1

Q.18 Salinity is the amount of salt in grams present in _____.

- Ans 1. 10 grams of water
 2. 10000 grams of water
 3. 100 grams of water
 4. 1000 grams of water

Question ID : 2390872005
Status : Marked For Review
Chosen Option : 4

Q.19 What is the Reverse Repo Rate as announced by the Reserve Bank of India in June 2019?

- Ans 1. 5.75 per cent
 2. 6.25 per cent
 3. 5.50 per cent
 4. 6.00 per cent

Question ID : 2390871998
Status : Marked For Review
Chosen Option : 3

Q.20 The headquarters of the Indian Institute of Astrophysics is located in _____.

- Ans 1. Indore
 2. Shillong
 3. Nainital
 4. Bangalore

Question ID : 2390872006
Status : Answered
Chosen Option : 4

Q.21 Who appoints Governor of the state in India?

- Ans 1. Cabinet Committee on Appointments
 2. Prime Minister

3. President

4. PMO

Question ID : 2390872003
Status : Answered
Chosen Option : 1

Q.22 Mosses, Lichens and small shrubs are found in which type of vegetation?

- Ans
- 1. Tundra
 - 2. Coral Reefs
 - 3. Mangrove
 - 4. Tropical Evergreen Forest

Question ID : 2390872010
Status : Answered
Chosen Option : 3

Q.23 Ajanta and Ellora caves are located in which state of India?

- Ans
- 1. Madhya Pradesh
 - 2. Bihar
 - 3. Maharashtra
 - 4. Goa

Question ID : 2390871990
Status : Answered
Chosen Option : 3

Q.24 Taiga forest are found in which of the following countries?

- Ans
- 1. Australia
 - 2. Brazil
 - 3. India
 - 4. Russia

Question ID : 2390872011
Status : Marked For Review
Chosen Option : 2

Q.25 Susu Dolphin is found in waters of which river?

- Ans
- 1. Jhelum
 - 2. Chenab
 - 3. Ganga
 - 4. Indus

Question ID : 2390872008
Status : Answered
Chosen Option : 3