

QID : 101 -

In the following question, select the number which can be placed at the sign of question mark (?) from the given alternatives.

निम्नलिखित प्रश्न में दिए गए विकल्पों में से प्रश्न चिह्न (?) के स्थान पर आने वाली संख्या को चुनिए।

5	2	4	3
6	4	5	5
8	7	6	?

Options:

- 1) 6
- 2) 9
- 3) 8
- 4) 7

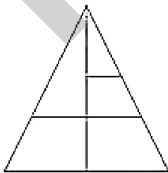
Correct Answer: 9

Candidate Answer: 9

QID : 102 -

How many triangles are there in the given figure?

दी गई आकृति में कितने त्रिभुज हैं?



Options:

- 1) 5
- 2) 6
- 3) 7
- 4) 8

Correct Answer: 7

Candidate Answer: 7

QID : 103 -

A word is represented by only one set of numbers as given in any one of the alternatives. The sets of numbers given in the alternatives are represented by two classes of alphabets as shown in the given two matrices. The columns and rows of **Matrix-I** are numbered from 0 to 4 and that of **Matrix-II** are numbered from 5 to 9. A letter from these matrices can be represented first by its row and next by its column, for example, 'F' can be represented by 31, 67, etc., and 'L' can be represented by 33, 75, etc. Similarly, you have to identify the set for the word "ENACT".

एक शब्द केवल एक संख्या-समूह द्वारा दर्शाया गया है। जैसा कि विकल्पों में से किसी एक में दिया गया है। विकल्पों में दिए गए संख्या-समूह अक्षरों के दो वर्गों द्वारा दर्शाए गए हैं, जैसा कि दिए गए दो आव्यूहों में है। आव्यूह-I के स्तम्भ और पंक्ति की संख्या 0 से 4 है और आव्यूह-II की 5 से 9। इन आव्यूहों से एक अक्षर को पहले उसकी पंक्ति और बाद में स्तम्भ संख्या द्वारा दर्शाया जा सकता है। उदाहरण के लिए 'F' को 31, 67, आदि द्वारा दर्शाया जा सकता है तथा 'L' को 33, 75, आदि द्वारा दर्शाया जा सकता है। इसी तरह से आपको प्रश्न में दिए शब्द "ENACT" के लिए समूह को पहचानना है।

Matrix-I आव्यूह-I						Matrix-II आव्यूह-II					
	0	1	2	3	4		5	6	7	8	9
0	F	E	J	T	N	5	U	E	S	V	X
1	Y	M	B	C	A	6	O	K	F	C	Z
2	Z	G	W	I	Q	7	L	Q	Z	Y	D
3	D	F	A	L	R	8	A	E	I	S	N
4	U	I	Y	V	X	9	L	M	T	C	I

Options:

- 1) 01, 04, 14, 13, 97
- 2) 56, 32, 02, 03, 44
- 3) 97, 89, 86, 95, 98
- 4) 01, 89, 03, 68, 23

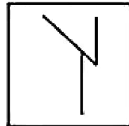
Correct Answer: 01, 04, 14, 13, 97

Candidate Answer: 01, 04, 14, 13, 97

QID : 104 -

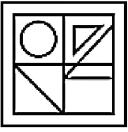
From the given answer figures, select the one in which the question figure is hidden/embedded.

दी गई उत्तर आकृतियों में से उस उत्तर आकृति को चुनिए जिस में प्रश्न आकृति निहित है।

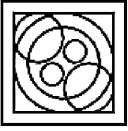


Options:


1)



2)



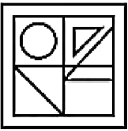
3)



4)



Correct Answer:



Candidate Answer:



QID : 105 -

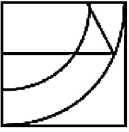
Which answer figure will complete the pattern in the question figure?

कौन सी उत्तर आकृति प्रश्न आकृति के प्रतिरूप को पूरा करेगी?

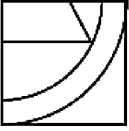


Options:

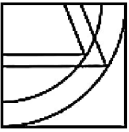
1)



2)



3)



4)



Correct Answer:



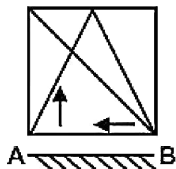
Candidate Answer:



QID : 106 -

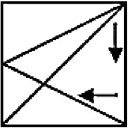
If a mirror is placed on the line AB, then which of the answer figures is the right image of the given figure?

यदि एक दर्पण को AB रेखा पर रखा जाए, तो दी गई उत्तर आकृतियों में से कौन सी आकृति प्रश्न आकृति की सही प्रतिबिम्ब होगी?

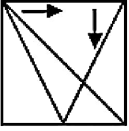


Options:

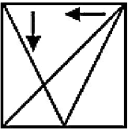
1)



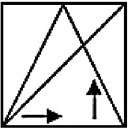
2)



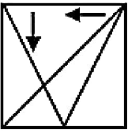
3)



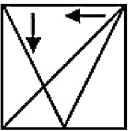
4)



Correct Answer:



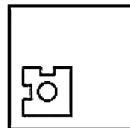
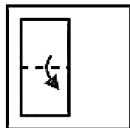
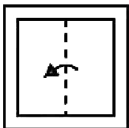
Candidate Answer:



QID : 107 -

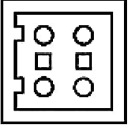
A piece of paper is folded and punched as shown below in the question figures. From the given answer figures, indicate how it will appear when opened?

नीचे के प्रश्न आकृतियों में दिखाए अनुसार कागज को मोड़कर छेदने तथा खोलने के बाद वह किस उत्तर आकृति जैसा दिखाई देगा?

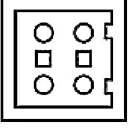


Options:

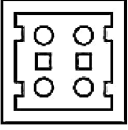
1)



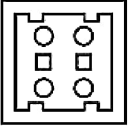
2)



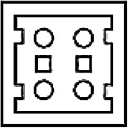
3)



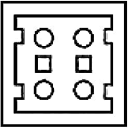
4)



Correct Answer:



Candidate Answer:



QID : 108 - By interchanging given two signs and two numbers which equation will be correct?

\div and x , 10 and 5

दिए गए दो चिह्नों तथा दो अंकों को आपस में परस्पर बदलने पर कौन सा समीकरण सही हो जाएगा?

\div तथा x , 10 तथा 5

Options:

- 1) $10 \times 5 \div 3 + 1 = 7/2$
- 2) $5 + 4 \times 10 \div 1 = 29/2$
- 3) $10 \times 5 \div 4 + 1 = 3$
- 4) $5 \div 4 + 10 \times 1 = -6$

Correct Answer: $10 \times 5 \div 4 + 1 = 3$

Candidate Answer: $10 \times 5 \div 4 + 1 = 3$

QID : 109 - If $11 H 14 H 3 = 28$ and $9 H 4 H 17 = 30$, then

$5 H 6 H 19 = ?$

यदि $11 H 14 H 3 = 28$ तथा $9 H 4 H 17 = 30$ हो, तो

$5 H 6 H 19 = ?$

Options:

- 1) 30
- 2) 36
- 3) 28
- 4) 40

Correct Answer: 30

Candidate Answer: 30

QID : 110 - Arrange the given words in the sequence in which they occur in the dictionary.

1. Inking
2. Innings
3. India
4. Indica
5. Inglot

निम्नलिखित शब्दों को शब्दकोश में आने वाले क्रम के अनुसार लिखें।

1. Inking
2. Innings
3. India
4. Indica
5. Inglot

Options:

1) 34512

2) 34521

3) 43512

4) 43521

Correct Answer: 34512

Candidate Answer: 34512

QID : 111 - In the following question, select the missing number from the given series.

2, 5, 9, 14, ?, 27

निम्नलिखित प्रश्न में दिए गए विकल्पों में से लुप्त अंक ज्ञात कीजिए।

2, 5, 9, 14, ?, 27

Options:

1) 22

2) 20

3) 21

4) 19

Correct Answer: 20

Candidate Answer: 20

QID : 112 - A series is given with one term missing. Select the correct alternative from the given ones that will complete the series.

A, CD, FGH, JKLM, ?

एक अनुक्रम दिया गया है, जिसमें से एक पद लुप्त है। दिए गए विकल्पों में से वह सही विकल्प चुनिए, जो अनुक्रम को पूरा करे।

A, CD, FGH, JKLM, ?

Options:

1) NOPQR

2) OPQRS

3) OPQR

4) PQ

Correct Answer: OPQRS

Candidate Answer: OPQRS

QID : 113 - In the following question, select the odd word from the given alternatives.

निम्नलिखित प्रश्न में दिए गए विकल्पों में से विषम शब्द को चुनिए।

Options:

1) Coffee

कॉफी

2) Cup

कप

3) Tea

चाय

4) Water

जल

Correct Answer: Cup

कप

Candidate Answer: Cup

कप

QID : 114 - In the following question, select the odd number from the given alternatives.

निम्नलिखित प्रश्न में दिए गए विकल्पों में से विषम संख्या को चुनिए।

Options:

- 1) 1
- 2) 64
- 3) 216
- 4) 256

Correct Answer: 256

Candidate Answer: 256

QID : 115 - In the following question, select the odd letters from the given alternatives.

निम्नलिखित प्रश्न में दिए गए विकल्पों में से विषम अक्षरों को चुनिए।

Options:

- 1) PRT
- 2) ACE
- 3) MNO
- 4) MOQ

Correct Answer: MNO

Candidate Answer: MNO

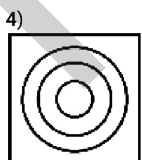
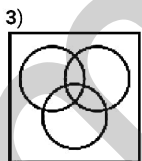
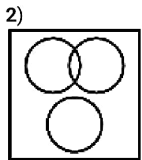
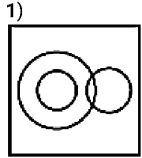
QID : 116 - Identify the diagram that best represents the relationship among the given classes.

Director, Actor, Book

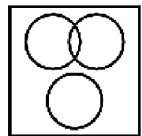
वह आरेख चुनिए जो नीचे दिए गए वर्गों के बीच के संबंध का सही निरूपण करता है।

निर्देशक, अभिनेता, पुस्तक

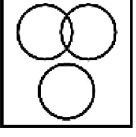
Options:



Correct Answer:



Candidate Answer:



QID : 117 - In the following question, select the related word from the given alternatives.

Money : Bank :: Education : ?

निम्नलिखित प्रश्न में दिए गए विकल्पों में से संबंधित शब्द को चुनिए।

पैसा : बैंक :: शिक्षा : ?

Options:

1) Teacher

शिक्षक

2) School

विद्यालय

3) Building

इमारत

4) Student

विद्यार्थी

Correct Answer: School

विद्यालय

Candidate Answer: School

विद्यालय

QID : 118 - In the following question, select the related number from the given alternatives.

18 : 289 :: 15 : ?

निम्नलिखित प्रश्न में दिए गए विकल्पों में से संबंधित संख्या को चुनिए।

18 : 289 :: 15 : ?

Options:

1) 256

2) 225

3) 196

4) 144

Correct Answer: 196

Candidate Answer: 196

QID : 119 - In the following question, select the related letters from the given alternatives.

AM : NZ :: BC : ?

निम्नलिखित प्रश्न में दिए गए विकल्पों में से संबंधित अक्षरों को चुनिए।

AM : NZ :: BC : ?

Options:

1) YZ

2) XZ

3) XY

4) DO

Correct Answer: XY

Candidate Answer: XY

QID : 120 - In the following question, select the word which cannot be formed using the letters of the given word.

NOURISHMENT

निम्नलिखित विकल्पों में से वह शब्द चुनिए जो दिए गए शब्द के अक्षरों का प्रयोग करके नहीं बनाया जा सकता।

NOURISHMENT

Options:

- 1) TRIM
- 2) NOURISH
- 3) TRAUMA
- 4) SOUR

Correct Answer: TRAUMA

Candidate Answer: TRAUMA

QID : 121 - If the ratio of the present ages of P and Q is 3 : 4 and the sum of their ages 3 years ago was 36, then what is the ratio of their ages 3 years ago?

यदि P तथा Q की वर्तमान आयु का अनुपात 3 : 4 है तथा 3 वर्ष पूर्व दोनों की आयु का योग 36 था, तो 3 वर्ष पूर्व उनकी आयु का अनुपात क्या था?

Options:

- 1) 5 : 7
- 2) 3 : 5
- 3) 4 : 7
- 4) 6 : 7

Correct Answer: 5 : 7

Candidate Answer: 5 : 7

QID : 122 - Present ages of R and S are in the ratio 3 : 5 respectively. After 6 years this ratio becomes 2 : 3. What is the present age (in years) of R?

R तथा S की वर्तमान आयु क्रमशः 3 : 5 के अनुपात में है। 6 वर्ष पश्चात यह अनुपात 2 : 3 हो जाता है। R की वर्तमान आयु (वर्षों में) क्या है?

Options:

- 1) 18
- 2) 24
- 3) 30
- 4) 36

Correct Answer: 18

Candidate Answer: 18

QID : 123 - In the following question below are given some statements followed by some conclusions. Taking the given statements to be true even if they seem to be at variance from commonly known facts, read all the conclusions and then decide which of the given conclusion logically follows the given statements.

Statements:

- I. Some X and Y.
- II. All Y are Z.

Conclusions:

- I. All Z are Y.
- II. Some Z are X.

नीचे दिए गए प्रश्न में कुछ कथन और उनके बाद उन कथनों पर आधारित कुछ निष्कर्ष दिए गए हैं, हालांकि उनमें सामान्य ज्ञात तथ्यों से भिन्नता हो सकती है। सभी निष्कर्ष पढ़ें और फिर निर्धारित करें कि दिए गए कौन से निष्कर्ष, दिए गए कथनों के आधार पर युक्तिसंगत हैं।

कथन:

- I. कुछ X, Y हैं।
- II. सभी Y, Z हैं।

निष्कर्ष:

- I. सभी Z, Y हैं।
- II. कुछ Z, X हैं।

Options:

- 1) Only conclusion (I) follows.
केवल निष्कर्ष (I) सही है।
- 2) Only conclusion (II) follows.
केवल निष्कर्ष (II) सही है।
- 3) Both conclusion follow.
दोनों ही निष्कर्ष सही हैं।
- 4) Neither conclusion (I) nor conclusion (II) follows.
न तो निष्कर्ष (I) न ही निष्कर्ष (II) सही है।

Correct Answer: Only conclusion (II) follows.

केवल निष्कर्ष (II) सही है।

Candidate Answer: Only conclusion (II) follows.

केवल निष्कर्ष (II) सही है।

QID : 124 - In a certain code language, "RUST" is written as "PSQR". How is "KENT" written in that code language?

एक विशिष्ट कोड भाषा में, "RUST" को "PSQR" को

Options:

- 1) ICLR
- 2) ICMS
- 3) IDMR
- 4) JCLS

Correct Answer: ICLR

Candidate Answer: ICLR

QID : 125 - In a certain code language, "BUZ" is written as "59" and "BIZ" is written as "47". How is "FOG" written in that code language?

एक विशिष्ट कोड भाषा में, "BUZ" को "59" तथा "BIZ" को "47" लिखा जाता है। इस कोड भाषा में "FOG" को किस प्रकार लिखा जाएगा?

Options:

- 1) 37
- 2) 38
- 3) 39
- 4) 40

Correct Answer: 38

Candidate Answer: 38

QID : 126 - What is the value of $76 + 77 + 78 \dots\dots 100$?

$76 + 77 + 78 \dots\dots 100$ का मान क्या है?

Options:

- 1) 2100
- 2) 2120
- 3) 2200
- 4) 2380

Correct Answer: 2200

Candidate Answer: 2200

QID : 127 - If $2347X$ is completely divisible by 4, then what is the value of X ?

यदि $2347X$, 4 से पूर्णतः विभाजित है, तो X का मान क्या है?

Options:

- 1) 2
- 2) 4
- 3) 6
- 4) 2 or 6

2 अथवा 6

Correct Answer: 2 or 6

2 अथवा 6

Candidate Answer: 2 or 6

2 अथवा 6

QID : 128 - Which of the following number is divisible by 6?

निम्नलिखित में से कौन सी संख्या 6 से पूर्णतः विभाजित है?

Options:

- 1) 354324
- 2) 533212
- 3) 93242
- 4) 85232

Correct Answer: 354324

Candidate Answer: 354324

QID : 129 -

Which of the following statement is true?

- I. 2^{3^2} is even.
- II. 3^{4^2} is odd.

निम्नलिखित में से कौन सा कथन सत्य है?

- I. 2^{3^2} सम है।
- II. 3^{4^2} विषम है।

Options:

- 1) Only I
केवल I
- 2) Only II
केवल II
- 3) Both I and II
I तथा II दोनों
- 4) Neither I nor II
न तो I न ही II

Correct Answer: Both I and II
I तथा II दोनों

Candidate Answer: Both I and II
I तथा II दोनों

QID : 130 - What is the value of $25 \div 5 - 2 \times 4 + 10$?

$25 \div 5 - 2 \times 4 + 10$ का मान क्या है?

Options:

- 1) 5
- 2) 7
- 3) 8
- 4) 17

Correct Answer: 7

Candidate Answer: 7

QID : 131 - If $439 \times 441 \times 443$ is divided by 6, then what will be the remainder?

यदि $439 \times 441 \times 443$ को 6 से विभाजित किया जाये, तो शेषफल क्या होगा?

Options:

- 1) 5
- 2) 1
- 3) 3
- 4) 2

Correct Answer: 5

Candidate Answer: 3

QID : 132 - Two pipes A and B can alone fill a tank in 60 minutes and 75 minutes respectively. Pipe C can alone empty the same tank in 100 minutes. If all three pipes are opened together, then in how many minutes will the tank be filled?

दो पाईप A तथा B एक टंकी को क्रमशः 60 मिनटों तथा 75 मिनटों में भर सकते हैं। पाईप C उसी टंकी को अकेला 100 मिनटों में खाली कर सकता है। यदि तीनों पाईपों को एक साथ खोल दिया जाये, तो टंकी कितने मिनटों में भर जाएगी?

Options:

- 1) 100
- 2) 50
- 3) 75
- 4) 80

Correct Answer: 50

Candidate Answer: 50

QID : 133 - A pipe can fill a tank in 140 hours. Due to the leak in its bottom, the tank is filled in 160 hours. If the tank is full, then that leak can empty the tank in how many hours?

एक पाईप एक टंकी को 140 घंटे में भर सकता है। टंकी के तले में छेद होने के कारण, टंकी को भरने में 160 घंटे लगते हैं। यदि टंकी पूरी भरी हो, तो वह छेद टंकी को कितने घंटे में खाली कर सकता है?

Options:

- 1) 1000
- 2) 1500
- 3) 1120
- 4) 1200

Correct Answer: 1120

Candidate Answer: 1120

QID : 134 - What is the area (in cm^2) of an equilateral triangle whose side is 14 cm?

एक समबाहु त्रिभुज जिसकी भुजा 14 से.मी. है, का क्षेत्रफल (से.मी.² में) क्या है?

Options:

1) $28\sqrt{3}$

2) $50\sqrt{3}$

3) $49\sqrt{3}$

4) $51\sqrt{3}$

Correct Answer: $49\sqrt{3}$

Candidate Answer: $49\sqrt{3}$

QID : 135 - A merchant purchases a watch for Rs 600 and fixes its marked price in such a way that after allowing a discount of 20%, he earns a profit of 10%. What is the marked price (in Rs) of the watch?

एक व्यापारी 600 रु में एक घड़ी खरीदता है तथा इसका अंकित मूल्य इस तरह अंकित करता है कि 20% की छूट देने के पश्चात भी उसे 10% का लाभ प्राप्त होता है। घड़ी का अंकित मूल्य (रु में) क्या है?

Options:

1) 850

2) 725

3) 750

4) 825

Correct Answer: 825

Candidate Answer: 825

QID : 136 - The cost price of an article is 70% of the marked price. What is the gain percentage after allowing a discount of 16% on the marked price?

किसी वस्तु का क्रय मूल्य उसके अंकित मूल्य का 70% है। अंकित मूल्य पर 16% की छूट देने के पश्चात लाभ प्रतिशत क्या है?

Options:

1) 15

2) 30

3) 10

4) 20

Correct Answer: 20

Candidate Answer: 20

QID : 137 - The ratio of two positive numbers is 3 : 4. Their product is 588. What is the smallest number?

दो धनात्मक संख्याओं का अनुपात 3 : 4 है। उनका गुणनफल 588 है। छोटी संख्या क्या है?

Options:

1) 21

2) 28

3) 14

4) 35

Correct Answer: 21

Candidate Answer: 21

QID : 138 - B starts a business by investing Rs 60000. After 5 months, D joins business by investing Rs 75000. At the end of the year, in what ratio will they share the profit?

B, 60000 रु की पूँजी निवेश करके एक व्यापार आरंभ करता है। 5 माह के पश्चात D, 75000 रु निवेश कर उस व्यापार में शामिल हो जाता है। वर्ष के अंत में वह किस अनुपात में लाभ बाँटेंगे?

Options:

1) 169 : 144

2) 48 : 35

3) 14 : 11

4) 12 : 15

Correct Answer: 48 : 35

Candidate Answer: 48 : 35

QID : 139 - The average of N numbers is 16. If a number 10 is removed, then average becomes 17. What is the value of N?

N संख्याओं का औसत 16 है। यदि एक संख्या 10 को हटाया जाए, तो औसत 17 हो जाता है। N का मान क्या है?

Options:

- 1) 6
- 2) 7
- 3) 8
- 4) 9

Correct Answer: 7

Candidate Answer: 7

QID : 140 - By Selling 5 articles for 1 rupee, a man losses 20%. If he sells 3 articles per rupee, then what will be the profit percentage?

1 रुपये में 5 वस्तुओं को बेचने पर एक व्यक्ति को 20% की हानि होती है। यदि वह एक रुपये में 3 वस्तुएँ बेचे, तो लाभ प्रतिशत क्या होगा?

Options:

- 1) 75
- 2) 66.67
- 3) 30
- 4) 33.33

Correct Answer: 33.33

Candidate Answer: 33.33

QID : 141 - By selling an article for Rs 510 there is a loss of 15%. What is the cost price (in Rs) of the article?

एक वस्तु को 510 रु में बेचने पर 15% की हानि होती है। वस्तु का क्रय मूल्य (रु में) क्या है?

Options:

- 1) 600
- 2) 580
- 3) 400
- 4) 450

Correct Answer: 600

Candidate Answer: 600

QID : 142 - A number is multiplied by $\frac{2}{9}$ instead of $\frac{3}{7}$. New value is what percent of expected value?

एक संख्या को $\frac{3}{7}$ के बजाय $\frac{2}{9}$ से गुणा कर दिया जाता है। नया मान अपेक्षित मान का कितना प्रतिशत है?

Options:

- 1) 62.66
- 2) 51.85
- 3) 57.21
- 4) 68.76

Correct Answer: 51.85

Candidate Answer: 51.85

QID : 143 - Total cost of 60 tables is Rs 30000. If cost of each table increases by 20% and number of tables decrease by 20%, then what will be the total cost (in Rs) of tables?

60 मेजों का कुल मूल्य 30000 रु है। यदि प्रत्येक मेज का मूल्य 20% से बढ़ा दिया जाये तथा मेजों की संख्या 20% से कम हो जाए, तो मेजों का कुल मूल्य (रु में) क्या होगा?

Options:

- 1) 28800
- 2) 27500
- 3) 30000
- 4) 25500

Correct Answer: 28800

Candidate Answer: 28800

QID : 144 - The speed of a boat in still water is 10 km/hr. It covers a distance of 50 km upstream in 6 hours. What is the speed (in km/hr) of the stream?

शांत जल में एक नाव की गति 10 कि.मी./घंटा है। वह धारा के प्रतिकूल 50 कि.मी. की दूरी 6 घंटे में तय करती है। धारा की गति (कि.मी./घंटा में) क्या है?

Options:

- 1) 1.2
- 2) 1.5
- 3) 1.6
- 4) 2

Correct Answer: 1.6

Candidate Answer: 1.6

QID : 145 - A 600 metres long train crosses a bridge 600 metres long in 60 seconds. What is speed (in km/hr) of the train?

एक 600 मीटर लम्बी रेलगाड़ी एक 600 मीटर

Options:

- 1) 70
- 2) 72
- 3) 75
- 4) 65

Correct Answer: 72

Candidate Answer: 72

QID : 146 - What is the compound interest (in Rs) on a sum of Rs 12000 for 2 years at the rate of 10% per annum compounded annually?

12000 के मूलधन पर 10% की वार्षिक दर पर वार्षिक संयोजन से 2 वर्षों का चक्रवृद्धि ब्याज (रु में) क्या है?

Options:

- 1) 2520
- 2) 2400
- 3) 2620
- 4) 2340

Correct Answer: 2520

Candidate Answer: 2520

QID : 147 -

The table given below shows the sales (in lacs) of 2 companies Audi and BMW from year 2000 to 2005.

नीचे दी गई तालिका में वर्ष 2000 से 2005 तक 2 कंपनियों ऑडी तथा बी.एम.डब्ल्यू की बिक्री (लाखों में) को दर्शाया गया है।

Year / वर्ष	Sales (in lacs) / बिक्री (लाखों में)	
	Audi / ऑडी	BMW / बी.एम.डब्ल्यू
2000	20	22
2001	25	24
2002	15	20
2003	25	28
2004	14	20
2005	20	15

In how many years was the sale of Audi more than that of BMW?

कितने वर्षों में ऑडी की बिक्री बी.एम.डब्ल्यू की बिक्री से अधिक थी?

Options:

- 1) 2
- 2) 5
- 3) 1
- 4) 3

Correct Answer: 2

Candidate Answer: 2

QID : 148 -

The table given below shows the sales (in lacs) of 2 companies Audi and BMW from year 2000 to 2005.

नीचे दी गई तालिका में वर्ष 2000 से 2005 तक 2 कंपनियों ऑडी तथा बी.एम.डब्ल्यू की बिक्री (लाखों में) को दर्शाया गया है।

Year / वर्ष	Sales (in lacs) / बिक्री (लाखों में)	
	Audi / ऑडी	BMW / बी.एम.डब्ल्यू
2000	20	22
2001	25	24
2002	15	20
2003	25	28
2004	14	20
2005	20	15

What was the percentage change in the sale of Audi from year 2000 to 2004?

वर्ष 2000 से 2004 तक, ऑडी की बिक्री में प्रतिशत परिवर्तन क्या था?

Options:

1) 30

2) 80

3) 50

4) 60

Correct Answer: 30

Candidate Answer: 30

QID : 149 -

The table given below shows the sales (in lacs) of 2 companies Audi and BMW from year 2000 to 2005.

नीचे दी गई तालिका में वर्ष 2000 से 2005 तक 2 कंपनियों ऑडी तथा बी.एम.डब्ल्यू की बिक्री (लाखों में) को दर्शाया गया है।

Year / वर्ष	Sales (in lacs) / बिक्री (लाखों में)	
	Audi / ऑडी	BMW / बी.एम.डब्ल्यू
2000	20	22
2001	25	24
2002	15	20
2003	25	28
2004	14	20
2005	20	15

What was the average sale (in lacs) of BMW from 2001 to 2005?

वर्ष 2001 से 2005 तक, बी.एम.डब्ल्यू की औसत बिक्री (लाखों में) क्या थी?

Options:

- 1) 22
- 2) 23.2
- 3) 27.2
- 4) 21.4

Correct Answer: 21.4

Candidate Answer: 21.4

QID : 150 -

The table given below shows the sales (in lacs) of 2 companies Audi and BMW from year 2000 to 2005.

नीचे दी गई तालिका में वर्ष 2000 से 2005 तक 2 कंपनियों ऑडी तथा बी.एम.डब्ल्यू की बिक्री (लाखों में) को दर्शाया गया है।

Year / वर्ष	Sales (in lacs) / बिक्री (लाखों में)	
	Audi / ऑडी	BMW / बी.एम.डब्ल्यू
2000	20	22
2001	25	24
2002	15	20
2003	25	28
2004	14	20
2005	20	15

The sale of BMW in 2004 is what percent of the sale of Audi in 2000?

वर्ष 2004 में बी.एम.डब्ल्यू की बिक्री वर्ष 2000 में ऑडी की बिक्री का कितना प्रतिशत है?

Options:

- 1) 120
- 2) 100
- 3) 135
- 4) 300

Correct Answer: 100

Candidate Answer: 100

QID : 151 - In the following question, some part of the sentence may have errors. Find out which part of the sentence has an error and select the appropriate option. If a sentence is free from error, select 'No Error'.

Although he get to (1)/ visit a lot of places and (2)/ meet interesting people. (3)/ No error (4)

Options:

- 1) 1
- 2) 2
- 3) 3
- 4) 4

Correct Answer: 1

Candidate Answer: 1

QID : 152 - In the following question, some part of the sentence may have errors. Find out which part of the sentence has an error and select the appropriate option. If a sentence is free from error, select 'No Error'.

What if you could get all the (1)/ benefits of readings without (2)/ giving up your other interests (3)/ No error (4)

Options:

- 1) 1
- 2) 2
- 3) 3
- 4) 4

Correct Answer: 2

Candidate Answer: 2

QID : 153 - In the following question, the sentence given with blank to be filled in with an appropriate word. Select the correct alternative out of the four and indicate it by selecting the appropriate option.

The moment _____ is lost is lost forever.

Options:

- 1) where
- 2) which
- 3) whom
- 4) who

Correct Answer: which

Candidate Answer: which

QID : 154 - In the following question, the sentence given with blank to be filled in with an appropriate word. Select the correct alternative out of the four and indicate it by selecting the appropriate option.

Rajesh called his cousin a _____.

Options:

- 1) layer
- 2) liar
- 3) mair
- 4) care

Correct Answer: liar

Candidate Answer: liar

QID : 155 - In the following question, out of the given four alternatives, select the one which best expresses the meaning of the given word.

Jettison

Options:

- 1) Space bound
- 2) Splessness
- 3) Conjure
- 4) Hurl

Correct Answer: Hurl

Candidate Answer: Splessness

QID : 156 - In the following question, out of the given four alternatives, select the one which best expresses the meaning of the given word.

Laconic

Options:

- 1) Verbose
- 2) Wordy
- 3) Crisp
- 4) Health

Correct Answer: Crisp

Candidate Answer: Verbose

QID : 157 - In the following question, out of the given four alternatives, select the one which best expresses the meaning of the given word.

Morbid

Options:

- 1) Happy
- 2) Outgoing
- 3) Ranger
- 4) Depressed

Candidate Answer: Depressed

QID : 158 - In the following question, out of the given four alternatives, select the one which is opposite in meaning of the given word.

Enrich

Options:

- 1) Adorn
- 2) Better
- 3) Reduce
- 4) Build

Correct Answer: Reduce

Candidate Answer: Reduce

QID : 159 - In the following question, out of the given four alternatives, select the one which is opposite in meaning of the given word.

Inert

Options:

- 1) Active
- 2) Asleep
- 3) Dull
- 4) Idle

Correct Answer: Active

Candidate Answer: Active

QID : 160 - In the following question, out of the given four alternatives, select the one which is opposite in meaning of the given word.

Secure

Options:

- 1) Safe
- 2) Endangered
- 3) Immune
- 4) Protected

Correct Answer: Endangered

Candidate Answer: Immune

QID : 161 - In the following question, out of the four given alternatives, select the alternative which best expresses the meaning of the Idiom/Phrase.

Be on the square

Options:

- 1) To be away from home
- 2) To make someone fool
- 3) To squander money
- 4) To act and speak honestly

Correct Answer: To act and speak honestly

Candidate Answer: To act and speak honestly

QID : 162 - In the following question, out of the four given alternatives, select the alternative which best expresses the meaning of the Idiom/Phrase.

Let the cat out of the bag

Options:

- 1) Reveal a secret carelessly or by mistake
- 2) Talking ignorantly
- 3) To destroy at the end
- 4) To make use of time

Correct Answer: Reveal a secret carelessly or by mistake

Candidate Answer: Reveal a secret carelessly or by mistake

QID : 163 - Improve the bracketed part of the sentence.

They have been hesitant to form (**ourselves**) as a breakaway group for fear of being disqualified for defection.



Options:

- 1) Themselves
- 2) Themselves
- 3) Itselves
- 4) No improvement

Correct Answer: Themselves

Candidate Answer: Themselves

QID : 164 - Improve the bracketed part of the sentence.

Reconciliation is (closed) to impossible now, although he has not been expelled from the group.

Options:

- 1) Imposed
- 2) Closing
- 3) Close
- 4) No improvement

Correct Answer: Close

Candidate Answer: Imposed

QID : 165 - In the following question, out of the four given alternatives, select the alternative which is the best substitute of the phrase.

Speed of an object in one direction

Options:

- 1) Ferocity
- 2) Capacity
- 3) Velocity
- 4) Felicity

Correct Answer: Velocity

Candidate Answer: Velocity

QID : 166 - In the following question, out of the four given alternatives, select the alternative which is the best substitute of the phrase.

Full of criticism and mockery

Options:

- 1) Admire
- 2) Affaire
- 3) Satire
- 4) Allure

Correct Answer: Satire

Candidate Answer: Satire

QID : 167 - In the following question, a word has been written in four different ways out of which only one is correctly spelt. Select the correctly spelt word.

Options:

- 1) Familear
- 2) Familiar
- 3) Familiar
- 4) Famelar

Correct Answer: Familiar

Candidate Answer: Familiar

QID : 168 - In the following question, a word has been written in four different ways out of which only one is correctly spelt. Select the correctly spelt word.

Options:

- 1) Envelope
- 2) Envelop
- 3) Envelap
- 4) Enwelope

Correct Answer: Envelope

Candidate Answer: Envelope

QID : 169 - Rearrange the parts of the sentence in correct order.

We had been told to

P: we can put our hands and feet

Q: and identify places where

R: first observe the rock carefully

Options:

- 1) PQR
- 2) RQP
- 3) QPR
- 4) RPQ

Correct Answer: RQP

Candidate Answer: RQP

QID : 170 - Rearrange the parts of the sentence in correct order.

I tried to explain

P: them could understand it

Q: in Hindi but

R: but neither of

Options:

- 1) PQR
- 2) QRP
- 3) QPR
- 4) RPQ

Correct Answer: QRP

Candidate Answer: RPQ

QID : 171 - In the following passage some of the words have been left out. Read the passage carefully and select the correct answer for the given blank out of the four alternatives.

Life in urban India is marked by wide-ranging disparity. There are residents who have _____ means of enjoyment but _____ people are so poor that they have to live in slums. Economic inequality, pollution and garbage are the _____ of urban existence. People also have to face lack of adequate water supply. Yet people want to live in cities because they get facilities for good education, healthcare, transport and so many modes of comforts and entertainment. There are also _____ opportunities for employment in cities _____ villages where very few people are gainfully employed.

residents who have _____ means

Options:

- 1) unlimited
- 2) fair
- 3) pragmatic
- 4) circular

Correct Answer: unlimited

Candidate Answer: circular

QID : 172 - In the following passage some of the words have been left out. Read the passage carefully and select the correct answer for the given blank out of the four alternatives.

Life in urban India is marked by wide-ranging disparity. There are residents who have _____ means of enjoyment but _____ people are so poor that they have to live in slums. Economic inequality, pollution and garbage are the _____ of urban existence. People also have to face lack of adequate water supply. Yet people want to live in cities because they get facilities for good education, healthcare, transport and so many modes of comforts and entertainment. There are also _____ opportunities for employment in cities _____ villages where very few people are gainfully employed.

but _____ people are so poor

Options:

- 1) long
- 2) some
- 3) least
- 4) good

Correct Answer: some

Candidate Answer: some

QID : 173 - In the following passage some of the words have been left out. Read the passage carefully and select the correct answer for the given blank out of the four alternatives.

Life in urban India is marked by wide-ranging disparity. There are residents who have _____ means of enjoyment but _____ people are so poor that they have to live in slums. Economic inequality, pollution and garbage are the _____ of urban existence. People also have to face lack of adequate water supply. Yet people want to live in cities because they get facilities for good education, healthcare, transport and so many modes of comforts and entertainment. There are also _____ opportunities for employment in cities _____ villages where very few people are gainfully employed.

garbage are the _____ of urban



Options:

- 1) boon
- 2) blessing
- 3) bane
- 4) resource

Correct Answer: bane

Candidate Answer: bane

QID : 174 - In the following passage some of the words have been left out. Read the passage carefully and select the correct answer for the given blank out of the four alternatives.

Life in urban India is marked by wide-ranging disparity. There are residents who have _____ means of enjoyment but _____ people are so poor that they have to live in slums. Economic inequality, pollution and garbage are the _____ of urban existence. People also have to face lack of adequate water supply. Yet people want to live in cities because they get facilities for good education, healthcare, transport and so many modes of comforts and entertainment. There are also _____ opportunities for employment in cities _____ villages where very few people are gainfully employed.

There are also _____ opportunities

Options:

- 1) bad
- 2) worst
- 3) least
- 4) good

Correct Answer: good

Candidate Answer: good

QID : 175 - In the following passage some of the words have been left out. Read the passage carefully and select the correct answer for the given blank out of the four alternatives.

Life in urban India is marked by wide-ranging disparity. There are residents who have _____ means of enjoyment but _____ people are so poor that they have to live in slums. Economic inequality, pollution and garbage are the _____ of urban existence. People also have to face lack of adequate water supply. Yet people want to live in cities because they get facilities for good education, healthcare, transport and so many modes of comforts and entertainment. There are also _____ opportunities for employment in cities _____ villages where very few people are gainfully employed.

in cities _____ villages

Options:

- 1) unlike
- 2) similar
- 3) alike
- 4) example

Correct Answer: unlike

Candidate Answer: example

QID : 176 - The economic activities are divided into three sectors – primary, secondary, tertiary on the basis of _____.

आर्थिक गतिविधियों को _____ के आधार पर प्राथमिक, माध्यमिक तथा तृतीयक तीनों क्षेत्रों में विभाजित किया जाता है।

Options:

- 1) Employment conditions
रोजगार की स्थिति
- 2) the nature of economic activity
आर्थिक गतिविधि की प्रकृति
- 3) Ownership of enterprises
उद्यमों का स्वामित्व
- 4) Number of workers employed in the enterprise
उद्यम में कार्यरत श्रमिकों की संख्या

Correct Answer: the nature of economic activity

आर्थिक गतिविधि की प्रकृति

Candidate Answer: Number of workers employed in the enterprise

उद्यम में कार्यरत श्रमिकों की संख्या

QID : 177 - Which among the following result in connecting the market or integration of markets in different countries?

निम्नलिखित में से कौन विभिन्न देशों में बाजारों के संयोजन अथवा एकीकरण का परिणाम देता है?

Options:

- 1) Mass production
बड़े पैमाने पर उत्पादन
- 2) Urban trade
शहरी व्यापार
- 3) Foreign trade
विदेशी व्यापार
- 4) Tourism
पर्यटन

Correct Answer: Foreign trade
विदेशी व्यापार

Candidate Answer: Foreign trade
विदेशी व्यापार

QID : 178 - Who among the following is head of government?

निम्नलिखित में से कौन सरकार का प्रमुख है?

Options:

- 1) President of India
भारत के राष्ट्रपति
- 2) Prime Minister of India
भारत के प्रधानमंत्री
- 3) Finance Minister of India
भारत के वित्त मंत्री
- 4) Foreign Secretary
विदेश सचिव

Correct Answer: Prime Minister of India
भारत के प्रधानमंत्री

Candidate Answer: Prime Minister of India
भारत के प्रधानमंत्री

QID : 179 - Fundamental rights in indian constitution has been taken from which country's constitution?

भारतीय संविधान में मौलिक अधिकार किस देश के संविधान से लिए गए हैं?

Options:

- 1) US Constitution
अमेरिकी संविधान
- 2) Irish constitution
आयरिश संविधान
- 3) Australian constitution
ऑस्ट्रेलियाई संविधान
- 4) British constitution
ब्रिटिश संविधान

Correct Answer: US Constitution
अमेरिकी संविधान

Candidate Answer: US Constitution
अमेरिकी संविधान

QID : 180 - At which place did Gautam Buddha passed away?

किस स्थान पर गौतम बुद्ध की मृत्यु हुई थी?

Options:

- 1) Bodh Gaya
बोध गया
- 2) Kushinagar
कुशीनगर
- 3) Lumbini
लुम्बिनी
- 4) Sarnath
सारनाथ

Correct Answer: Kushinagar
कुशीनगर

Candidate Answer: Kushinagar
कुशीनगर

QID : 181 - The demand for separate electorate for muslims was conceded in which year?

किस वर्ष में मुस्लिमों के लिए अलग निर्वाचिका की माँग को मान लिया गया था?

Options:

- 1) 1906
- 2) 1909
- 3) 1919

.....

Correct Answer: 1909

Candidate Answer: 1909

QID : 182 - What are the small pieces of rocks which move around the sun is called?

सूर्य के चारों ओर चक्कर लगाने वाले पत्थरों के छोटे-छोटे टुकड़ों को क्या कहते हैं?

Options:

- 1) Asteroids
क्षुद्र ग्रह
- 2) Meteoroids
उल्कापिंड
- 3) Stars
तारे
- 4) Satellites
उपग्रह

Correct Answer: Meteoroids
उल्कापिंड

Candidate Answer: Asteroids
क्षुद्र ग्रह

QID : 183 - What is the shape of the Indian Ocean?

हिन्द महासागर का आकार क्या है?

Options:

- 1) Almost Circular
लगभग वृत्तकार
- 2) S' shaped
S' आकार
- 3) Almost Triangular
लगभग त्रिभुजाकार
- 4) None of these
इनमें से कोई नहीं

Correct Answer: None of these
इनमें से कोई नहीं

Candidate Answer: S' shaped
S' आकार

QID : 184 - Who is called the 'Father of Zoology'?

'जीवविज्ञान के पिता' किसे कहा जाता है?

Options:

- 1) Huxley
हक्सले
- 2) Aristotle
अरस्तू
- 3) Lamarck
लैमार्क
- 4) Cuvier
कुवियर

Correct Answer: Aristotle
अरस्तू

Candidate Answer: Aristotle
अरस्तू

QID : 185 - Curdling of milk in the stomach is due to the action of _____.

अमाशय में दूध का फटना _____ की प्रक्रिया के कारण होता है।

Options:

- 1) Myosin
मायोसिन
- 2) Rennin
रेनिन
- 3) HCL
एच.सी.एल.
- 4) Pepsin
पेप्सीन

Correct Answer: Rennin
रेनिन

Candidate Answer: Rennin
रेनिन

QID : 186 - Amount of O₂ normally carried by 100 ml of pure blood, is _____.

100 मि.ली. शुद्ध रक्त द्वारा वहन किए जाने वाले

Options:

- 1) 50 ml
50 मि.ली.
- 2) 2 ml
2 मि.ली.
- 3) 20 ml
20 मि.ली.
- 4) 5 ml
5 मि.ली.

Correct Answer: 20 ml
20 मि.ली.

Candidate Answer: 20 ml
20 मि.ली.

QID : 187 - Newton used the phrase 'quantity of motion' for _____.

न्यूटन ने 'गति की मात्रा' का प्रयोग _____ के लिए किया था।

Options:

- 1) momentum
संवेग
- 2) force
बल
- 3) speed
चाल
- 4) mass
द्रव्यमान

Correct Answer: momentum
संवेग

Candidate Answer: momentum
संवेग

QID : 188 - When salt is properly mixed with ice, the melting point of ice _____.

जब नमक को बर्फ के साथ ठीक से मिश्रित किया जाता है, तो बर्फ का गलनांक _____।

Options:

- 1) decreases
कम हो जाती है
- 2) increases
बढ़ती है
- 3) remains the same
स्थिर रहता है
- 4) becomes infinite
अनंत हो जाता है

Correct Answer: decreases
कम हो जाती है

Candidate Answer: increases
बढ़ती है

QID : 189 - Which among the following is **NOT** an example of extension used in computer?

निम्नलिखित में से कौन सा कम्प्यूटर में उपयोग किया जाने वाला एक्सटेंशन का उदाहरण **नहीं** है?

Options:

- 1) doc
- 2) xls
- 3) fat32
- 4) htm

Correct Answer: fat32

Candidate Answer: fat32

QID : 190 - Metals are _____.

धातुएँ _____ होती हैं।

Options:

- 1) Malleable and ductile
आघातवर्ध और तन्य
- 2) Non-malleable and ductile
गैर आघातवर्ध और तन्य
- 3) Brittle and ductile
भंगुर और तन्य
- 4) Non-malleable and non-ductile
गैर आघातवर्ध और अतन्य

Correct Answer: Malleable and ductile
आघातवर्ध और तन्य

Candidate Answer: Malleable and ductile
आघातवर्ध और तन्य

QID : 191 - White phosphorus is stored in _____.

सफेद फास्फोरस _____ में संग्रहीत किया जाता है।

Options:

- 1) ether
ईथर
- 2) water
पानी
- 3) mercury
पारा
- 4) petrol
पेट्रोल

Correct Answer: water
पानी

Candidate Answer: water
पानी

QID : 192 - The herbivores are also called _____.

शाकाहारियों को _____ भी कहा जाता है

Options:

- 1) Primary consumers
प्राथमिक उपभोक्ता
- 2) Secondary consumers
माध्यमिक उपभोक्ताओं
- 3) Tertiary consumers
तृतीयक उपभोक्ताओं
- 4) None of these
इनमें से कोई नहीं

Correct Answer: Primary consumers
प्राथमिक उपभोक्ता

Candidate Answer: Primary consumers
प्राथमिक उपभोक्ता

QID : 193 - Vittiya Saksharata Abhiyan was launched to make people aware about _____.

वित्तीय साक्षरता अभियान को लोगों को _____ के बारे में जागरूक करने के लिए शुरू किया गया था।

Options:

- 1) Mutual Funds
म्यूचुअल फंड्स
- 2) Cashless economic system
कैशलेस आर्थिक प्रणाली
- 3) Financial inclusion
वित्तीय समावेशन
- 4) investment
निवेश

Correct Answer: Cashless economic system
कैशलेस आर्थिक प्रणाली

Candidate Answer: Financial inclusion
वित्तीय समावेशन

QID : 194 - James watt is famous for the invention of _____.

जेम्स वाट _____ के आविष्कार के लिए प्रसिद्ध है।

Options:

- 1) Diesel Engine
डीजल इंजन
- 2) Steam Engine
भाप का इंजन
- 3) Electric Motor
इलेक्ट्रिक मोटर
- 4) Thermometer
थर्मामीटर

Correct Answer: Steam Engine
भाप का इंजन

Candidate Answer: Steam Engine
भाप का इंजन

QID : 195 - Who was the winner of first ever formula 1 Grand Prix held in India?

भारत में आयोजित सर्वप्रथम फॉर्मूला 1 ग्रांड प्रिक्स के विजेता कौन थे?



Options:

- 1) Sebastian Vettel
सेबस्टियन वेट्टेल
- 2) Nico Rosberg
निको रोसबर्ग
- 3) Lewis Hamilton
लुईस हैमिल्टन
- 4) Michael Schumacher
माइकल शूमाकर

Correct Answer: Sebastian Vettel
सेबस्टियन वेट्टेल

Candidate Answer: Nico Rosberg
निको रोसबर्ग

QID : 196 - Garba is a famous dance form of which state?

गरबा किस राज्य का प्रसिद्ध नृत्य रूप है?

Options:

- 1) Punjab
पंजाब
- 2) Gujrat
गुजरात
- 3) Madhya Pradesh
मध्य प्रदेश
- 4) West Bengal
पश्चिम बंगाल

Correct Answer: Gujrat
गुजरात

Candidate Answer: Gujrat
गुजरात

QID : 197 - Who among the following has won Dhyan Chand Award, 2017 for Hockey?

निम्नलिखित में से कौन हॉकी के लिए ध्यानचंद पुरस्कार, 2017 जीता है?

Options:

- 1) P. A. Raphel
पी. ए. राफेल
- 2) Mariyappan
मरियप्पन
- 3) Sumarai Tete
समुराई टेटे
- 4) Cheteswar Pujara
चेतेश्वर पुजारा

Correct Answer: Sumarai Tete
समुराई टेटे

Candidate Answer: Sumarai Tete
समुराई टेटे

QID : 198 - Who is the author of the book named "Dynasties of India and Beyond"?

"डाइनास्टीज ऑफ इंडिया एण्ड बिओन्ड" नामक पुस्तक के लेखक कौन हैं?

Options:

- 1) Inder Malhotra
इंदर मल्होत्रा
- 2) H. P. Nanda
एच. पी. नंदा
- 3) Amrita Pritam
अमृता प्रीतम
- 4) Anita Desai
अनिता देसाई

Correct Answer: Inder Malhotra
इंदर मल्होत्रा

Candidate Answer: [NOT ANSWERED]

QID : 199 - APTTA is a transit trade agreement between Afghanistan and _____.

एपीटीटीए अफगानिस्तान और _____ के बीच एक पारगमन व्यापार समझौता है।



Options:

- 1) Pakistan
पाकिस्तान
- 2) Iran
ईरान
- 3) Kazakhstan
कजाखस्तान
- 4) Vietnam
वियतनाम

Correct Answer: Pakistan
पाकिस्तान

Candidate Answer: [NOT ANSWERED]

QID : 200 - India has signed an agreement to join the global terror database maintained by the Terrorist Screening Centre of which country?

भारत ने किस देश के आतंकवादी स्क्रीनिंग केंद्र द्वारा अनुरक्षित वैश्विक आतंकवाद डेटाबेस में सम्मिलित होने के लिए एक समझौते पर हस्ताक्षर किया है?

Options:

- 1) Pakistan
पाकिस्तान
- 2) Britain
ब्रिटेन
- 3) Russia
रूस
- 4) United States of America
संयुक्त राज्य अमेरीका

Correct Answer: United States of America
संयुक्त राज्य अमेरीका

Candidate Answer: [NOT ANSWERED]