

# SSC MTS 2023 Tier 1 Sept 14 Shift 3 Question Paper with Answers

Roll Number	
Candidate Name	
Exam Date	14/09/2023
Exam Time	4:00 PM - 6:00 PM
Subject	MTS Non Tech Havaladar CBIC and CBN Examination 2023

Section : Numerical and Mathematical Ability

**Q.1** A square and a rhombus have the same base and the rhombus is inclined at  $45^\circ$ , then what will be the ratio of the area of the square to the area of the rhombus?

- Ans**
- 1.  $\sqrt{3}:1$
  - 2.  $1:\sqrt{3}$
  - 3.  $\sqrt{2}:\sqrt{3}$
  - 4.  $\sqrt{2}:1$

Question ID : 264330154105

Option 1 ID : 264330603883

Option 2 ID : 264330603884

Option 3 ID : 264330603885

Option 4 ID : 264330603886

Status : Not Answered

Chosen Option : --

**Q.2** If  $A : B : C = 3 : 4 : 5$ , then  $\sqrt{A^2 + B^2} : \sqrt{C^2 - B^2}$  is:

- Ans**
- 1. 3 : 2
  - 2. 4 : 5
  - 3. 5 : 3
  - 4. 3 : 5

Question ID : 264330154084

Option 1 ID : 264330603800

Option 2 ID : 264330603802

Option 3 ID : 264330603801

Option 4 ID : 264330603799

Status : Answered

Chosen Option : 3

**Q.3** The ratio of two numbers is 3 : 4. If the sum of these two numbers is 70, then what is their LCM?

- Ans**
- 1. 120
  - 2. 96
  - 3. 108
  - 4. 84

Question ID : 264330155689  
Option 1 ID : 264330610162  
Option 2 ID : 264330610160  
Option 3 ID : 264330610161  
Option 4 ID : 264330610159  
Status : Answered  
Chosen Option : 1

**Q.4** What is the amount (in ₹) due on a sum of money ₹12,500 after one year if the compound interest is payable half-yearly at 12% per annum?

- Ans**
- 1. 14,450
  - 2. 14,540
  - 3. 15,440
  - 4. 14,045

Question ID : 264330153774  
Option 1 ID : 264330602559  
Option 2 ID : 264330602562  
Option 3 ID : 264330602560  
Option 4 ID : 264330602561  
Status : Answered  
Chosen Option : 4

**Q.5** A sum at simple interest of 5.5% per annum amounts to ₹7,503 in 4 years. Find the sum (in ₹).

- Ans**
- 1. 5,350
  - 2. 6,150
  - 3. 5,980
  - 4. 5,520

Question ID : 264330155745  
Option 1 ID : 264330610383  
Option 2 ID : 264330610386  
Option 3 ID : 264330610385  
Option 4 ID : 264330610384  
Status : Not Answered  
Chosen Option : --

**Q.6** In what ratio should rice worth ₹140 per kg and ₹90 per kg be mixed so that a mixture of two qualities of rice may become worth ₹110 per kg?

- Ans**
- 1. 2 : 3
  - 2. 1 : 3
  - 3. 3 : 2
  - 4. 1 : 2

Question ID : 264330154120

Option 1 ID : 264330603944

Option 2 ID : 264330603946

Option 3 ID : 264330603943

Option 4 ID : 264330603945

Status : Answered

Chosen Option : 1

**Q.7** 30 men can complete a work in 10 days. They started working and after six days, 10 more men joined them. In how many days will the total work be completed?

- Ans**
- 1. 8
  - 2. 9
  - 3. 6
  - 4. 7

Question ID : 264330156240

Option 1 ID : 264330612361

Option 2 ID : 264330612362

Option 3 ID : 264330612359

Option 4 ID : 264330612360

Status : Answered

Chosen Option : 2

**Q.8** What is the value of the following expression?

$$\frac{[27 - (6 \div 3) \times 4] \div 18}{84 - 8 \div 4 \times 8 - 2}$$

- Ans**
- 1.  $\frac{37}{66}$
  - 2.  $\frac{33}{7}$
  - 3.  $\frac{29}{20}$
  - 4.  $\frac{8}{9}$

Question ID : 264330156176

Option 1 ID : 264330612106

Option 2 ID : 264330612105

Option 3 ID : 264330612104

Option 4 ID : 264330612103

Status : Answered

Chosen Option : 1

**Q.9** In what ratio should coffee powder costing ₹500 per kg be mixed with coffee powder costing ₹750 per kg so that the cost of the mixture is ₹600 per kg?

- Ans**
- 1. 5 : 2
  - 2. 4 : 3
  - 3. 3 : 2
  - 4. 3 : 1

Question ID : 264330155955  
Option 1 ID : 264330611221  
Option 2 ID : 264330611220  
Option 3 ID : 264330611219  
Option 4 ID : 264330611222  
Status : Answered  
Chosen Option : 3

**Q.10** The salaries of P and Q together amount to ₹6,40,000. P and Q save 60% and 40%, respectively, of their individual salaries. If their expenditures are the same, then what is the ratio of P's salary to Q's salary?

- Ans**
- 1. 4 : 3
  - 2. 2 : 3
  - 3. 3 : 2
  - 4. 3 : 4

Question ID : 264330153762  
Option 1 ID : 264330602514  
Option 2 ID : 264330602512  
Option 3 ID : 264330602511  
Option 4 ID : 264330602513  
Status : Not Answered  
Chosen Option : --

**Q.11** A 228 m long train is running at 125 km/h. In what time (in seconds), will it pass a man running at 17 km/h in the same direction in which the train is going?

- Ans**
- 1. 9.2
  - 2. 7.6
  - 3. 6.2
  - 4. 8.5

Question ID : 264330155754  
Option 1 ID : 264330610419  
Option 2 ID : 264330610421  
Option 3 ID : 264330610422  
Option 4 ID : 264330610420  
Status : Answered  
Chosen Option : 2



Q.12 Find the fourth proportional of  $12^{35}$ ,  $3^{12}$  and  $4^{12}$ .

- Ans
- 1.  $12^{-23}$
  - 2.  $3^{24}$
  - 3.  $12^{-11}$
  - 4.  $4^{24}$

Question ID : 264330154053

Option 1 ID : 264330603676

Option 2 ID : 264330603678

Option 3 ID : 264330603675

Option 4 ID : 264330603677

Status : Not Answered

Chosen Option : --

Q.13 Smita is faster than Pihu. Smita and Pihu each walk 48 km. The sum of their speeds is 14 km/hr, and the sum of times taken by them is 28 hours. What is Smita's speed?

- Ans
- 1. 12.5 km/hr
  - 2. 12 km/hr
  - 3. 8 km/hr
  - 4. 10 km/hr

Question ID : 264330156192

Option 1 ID : 264330612169

Option 2 ID : 264330612170

Option 3 ID : 264330612167

Option 4 ID : 264330612168

Status : Not Answered

Chosen Option : --

Q.14 Arin alone can do a piece of work in 6 days and Selvi alone can do the same in 8 days. Arin and Selvi undertook to do it for ₹7,200. With the help of Kevin, they completed the work in 3 days. How much is to be paid to Kevin?

- Ans
- 1. ₹900
  - 2. ₹700
  - 3. ₹800
  - 4. ₹600

Question ID : 264330156118

Option 1 ID : 264330611873

Option 2 ID : 264330611871

Option 3 ID : 264330611874

Option 4 ID : 264330611872

Status : Answered

Chosen Option : 1

**Q.15** A man goes from his house to a vegetable market at the speed of 15 km/h and walked back at the speed of 10 km/h. If the whole journey took 2 hours 30 minutes, find the distance from his house to the vegetable market (in km).

- Ans**
- 1. 15
  - 2. 20
  - 3. 12
  - 4. 18

Question ID : 264330155992  
Option 1 ID : 264330611367  
Option 2 ID : 264330611370  
Option 3 ID : 264330611368  
Option 4 ID : 264330611369  
Status : Not Answered  
Chosen Option : --

**Q.16** A closed wooden box measures externally 10 cm long, 8 cm broad and 6 cm high. If the thickness of the wood is 0.5 cm, then the volume of wood required is:

- Ans**
- 1.  $165 \text{ cm}^3$
  - 2.  $300 \text{ cm}^3$
  - 3.  $230 \text{ cm}^3$
  - 4.  $150 \text{ cm}^3$

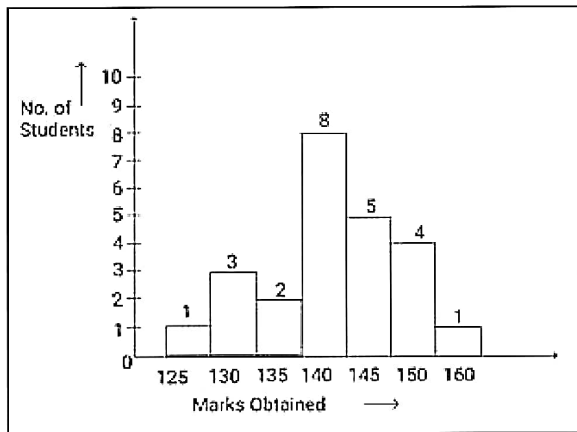
Question ID : 264330154107  
Option 1 ID : 264330603893  
Option 2 ID : 264330603892  
Option 3 ID : 264330603894  
Option 4 ID : 264330603891  
Status : Not Answered  
Chosen Option : --

**Q.17** A factory owner earns 12% on the product manufactured by him. The shopkeeper earns 10% profit on the same item. If shopkeeper sells the product for ₹ 98.56, then the cost price of the product for the factory owner is ₹ \_\_\_\_.

- Ans**
- 1. 88
  - 2. 90
  - 3. 84
  - 4. 80

Question ID : 264330153804  
Option 1 ID : 264330602679  
Option 2 ID : 264330602680  
Option 3 ID : 264330602681  
Option 4 ID : 264330602682  
Status : Answered  
Chosen Option : 4

Q.18 Study the given graph and answer the question that follows.



How many students obtained more than 125 marks?

- Ans
- 1. 19
  - 2. 17
  - 3. 15
  - 4. 23

Question ID : 264330156242

Option 1 ID : 264330612369

Option 2 ID : 264330612368

Option 3 ID : 264330612367

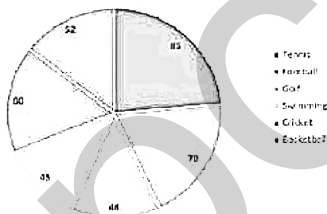
Option 4 ID : 264330612370

Status : Answered

Chosen Option : 4

Q.19 The Pie chart below shows the expenditures (in lakh ₹) of a country on various sports during a particular year. Study the graph carefully and answer the questions given below it.

Pie chart below shows the expenditures (in lakh ₹) of a country on various sports during a particular year.



The total expenditure on tennis, football and cricket taken together is what per cent (rounded off to 1 decimal place) more or less than the total expenditure on golf, swimming and basketball taken together?

- Ans
- 1. More, 29.6%
  - 2. less, 48.3%
  - 3. Less, 29.6%
  - 4. More, 48.3%

Question ID : 264330153785

Option 1 ID : 264330602605

Option 2 ID : 264330602604

Option 3 ID : 264330602606

Option 4 ID : 264330602603

Status : Not Answered

Chosen Option : --

Q.20

If a loss is  $\frac{1}{8}$ th of the selling price, then the loss percentage is:

Ans

✓ 1.  $11\frac{1}{9}\%$

✗ 2.  $7\frac{4}{9}\%$

✗ 3.  $10\frac{1}{9}\%$

✗ 4.  $8\frac{5}{9}\%$

Question ID : 264330162069

Option 1 ID : 264330635605

Option 2 ID : 264330635606

Option 3 ID : 264330635603

Option 4 ID : 264330635604

Status : Not Answered

Chosen Option : --

Section : Reasoning Ability and Problem Solving

mpcareer

Q.1 Which figure should replace the question mark (?) if the following figure series were to be continued?

B	Y	6	6	Y	△	△	6	=	=	6	B	?
△		↑	↑		B	B		↑	↑		△	

Ans

X 1.  $\begin{matrix} \triangle & C & \uparrow \\ B & & = \end{matrix}$

X 2.  $\begin{matrix} B & = & 6 \\ \triangle & & \uparrow \end{matrix}$

✓ 3.  $\begin{matrix} B & = & C \\ \triangle & & \uparrow \end{matrix}$

X 4.  $\begin{matrix} C & = & 6 \\ \triangle & & \uparrow \end{matrix}$

Question ID : 264330154746  
 Option 1 ID : 264330606447  
 Option 2 ID : 264330606449  
 Option 3 ID : 264330606450  
 Option 4 ID : 264330606448  
 Status : Answered  
 Chosen Option : 2

Q.2 Select the combination of letters that when sequentially placed in the blanks of the given series, will complete the series.

W \_ X \_ XXW \_ X \_ \_ X

- Ans
- X 1. XWWWXW
  - X 2. WWXWX
  - ✓ 3. XWXWX
  - X 4. WXWXW

Question ID : 264330151655  
 Option 1 ID : 264330594247  
 Option 2 ID : 264330594248  
 Option 3 ID : 264330594249  
 Option 4 ID : 264330594250  
 Status : Answered  
 Chosen Option : 3

Q.3 What should come in place of '?' in the given series?

19 40 103 292 859 ?

- Ans
- 1. 2536
  - 2. 2560
  - 3. 2490
  - 4. 2508

Question ID : 264330151454  
Option 1 ID : 264330593445  
Option 2 ID : 264330593446  
Option 3 ID : 264330593443  
Option 4 ID : 264330593444  
Status : Answered  
Chosen Option : 2

Q.4 What should come in place of '?' in the given series?

18 41 110 ? 938 2801 8390

- Ans
- 1. 291
  - 2. 317
  - 3. 325
  - 4. 339

Question ID : 264330151488  
Option 1 ID : 264330593579  
Option 2 ID : 264330593580  
Option 3 ID : 264330593581  
Option 4 ID : 264330593582  
Status : Answered  
Chosen Option : 2

Q.5 14 is related to 57 following a certain logic. Following the same logic, 22 is related to 89. To which of the following is 52 related to, following the same logic?

- Ans
- 1. 209
  - 2. 208
  - 3. 206
  - 4. 204

Question ID : 264330151607  
Option 1 ID : 264330594058  
Option 2 ID : 264330594057  
Option 3 ID : 264330594056  
Option 4 ID : 264330594055  
Status : Answered  
Chosen Option : 1

**Q.6** What should come in place of ? in the given series based on the English alphabetical order?

BSL, EUM, HWN, KYO, ?

- Ans**
- 1. MBP
  - 2. MBQ
  - 3. NBR
  - 4. NAP

Question ID : 264330155775  
Option 1 ID : 264330610506  
Option 2 ID : 264330610503  
Option 3 ID : 264330610505  
Option 4 ID : 264330610504  
Status : Answered  
Chosen Option : 4

**Q.7** BNFT is related to FRJX in a certain way based on the English alphabetical order. In the same way, JOEA is related to NSIE. To which of the following is HERK related to, following the same logic?

- Ans**
- 1. LJVP
  - 2. JHVP
  - 3. LIVO
  - 4. KHUN

Question ID : 264330151679  
Option 1 ID : 264330594343  
Option 2 ID : 264330594345  
Option 3 ID : 264330594346  
Option 4 ID : 264330594344  
Status : Answered  
Chosen Option : 3

**Q.8** Read the given statements and conclusions carefully. You have to take the given statements to be true even if they seem to be at variance from commonly known facts. You have to decide which conclusion/s logically follow/s from the given statements.

Statements: All buckets are plastic. Some plastic are spoons. All spoons are forks.

Conclusion I: Some plastic are buckets.

Conclusion II: Some plastics are forks.

- Ans**
- 1. Only conclusion (II) is follow.
  - 2. Both conclusions (I) and (II) are follow.
  - 3. Only conclusion (I) is follow.
  - 4. Neither conclusion (I) nor (II) is follow.

Question ID : 264330155928  
Option 1 ID : 264330611116  
Option 2 ID : 264330611118  
Option 3 ID : 264330611115  
Option 4 ID : 264330611117  
Status : Answered  
Chosen Option : 2

Q.9 What should come in place of '?' in the given series?

20 104 524 2624 13124 ?

- Ans
- 1. 65282
  - 2. 64586
  - 3. 65624
  - 4. 63457

Question ID : 264330151461  
Option 1 ID : 264330593473  
Option 2 ID : 264330593472  
Option 3 ID : 264330593474  
Option 4 ID : 264330593471  
Status : Answered  
Chosen Option : 3

Q.10 What should come in place of ? in the given series based on the English alphabetical order?

ZHS, YER, XBQ, WYP, ?

- Ans
- 1. VWO
  - 2. WVN
  - 3. WWN
  - 4. VVO

Question ID : 264330155789  
Option 1 ID : 264330610561  
Option 2 ID : 264330610559  
Option 3 ID : 264330610562  
Option 4 ID : 264330610560  
Status : Answered  
Chosen Option : 4

Q.11 Meena, Saroj, Goldy, Priti, Poonam and Baby are sitting around a circular table facing the centre. Meena sits to the immediate left of Saroj, Goldy sits 3rd to the right of Saroj, Priti sits 2nd to the left of Goldy, Poonam sits to the immediate right of Goldy. Who sits 2nd to the left of Baby?

- Ans
- 1. Saroj
  - 2. Goldy
  - 3. Priti
  - 4. Poonam

Question ID : 264330155649  
Option 1 ID : 264330609999  
Option 2 ID : 264330610001  
Option 3 ID : 264330610000  
Option 4 ID : 264330610002  
Status : Answered  
Chosen Option : 1



**Q.12** 5 is related to 20 following a certain logic. Following the same logic, 7 is related to 26. To which of the following is 2 related to, following the same logic?

- Ans**
- 1. 11
  - 2. 13
  - 3. 10
  - 4. 12

Question ID : 264330151581  
Option 1 ID : 264330593952  
Option 2 ID : 264330593954  
Option 3 ID : 264330593951  
Option 4 ID : 264330593953  
Status : Not Answered  
Chosen Option : --

**Q.13** If 11th June 1987 is Thursday, then what will be the day of the week on 4th Dec 1989?

- Ans**
- 1. Tuesday
  - 2. Monday
  - 3. Saturday
  - 4. Wednesday

Question ID : 264330154332  
Option 1 ID : 264330604792  
Option 2 ID : 264330604793  
Option 3 ID : 264330604791  
Option 4 ID : 264330604794  
Status : Answered  
Chosen Option : 2

**Q.14** In a certain code language, 'how are you' is coded as 'aj ts el' and 'show them how' is coded as 'wn el pd'. How is 'how' coded in the given language?

- Ans**
- 1. pd
  - 2. el
  - 3. aj
  - 4. wn

Question ID : 264330151711  
Option 1 ID : 264330594471  
Option 2 ID : 264330594473  
Option 3 ID : 264330594472  
Option 4 ID : 264330594474  
Status : Answered  
Chosen Option : 2

Q.15 Select the correct mirror image of the given figure when the mirror is placed at MN as shown below.



- Ans
- 1. a d S F 7 q R
  - 2. a d S F 7 q R
  - 3. a d Z F 7 q R
  - 4. a d S F 7 d R

Question ID : 264330151520  
Option 1 ID : 264330593710  
Option 2 ID : 264330593708  
Option 3 ID : 264330593707  
Option 4 ID : 264330593709  
Status : Answered  
Chosen Option : 2

Q.16 What will come in the place of '?' in the following equation, if '+' and '-' are interchanged and '×' and '÷' are interchanged?

$$37 - 18 \div 6 + 325 \times 25 = ?$$

- Ans
- 1. 132
  - 2. 152
  - 3. 142
  - 4. 122

Question ID : 264330155673  
Option 1 ID : 264330610098  
Option 2 ID : 264330610095  
Option 3 ID : 264330610097  
Option 4 ID : 264330610096  
Status : Answered  
Chosen Option : 1

Q.17 What will come in place of '?' in the following equation, if '-' and '×' are interchanged and '+' and '÷' are interchanged?

$$7 - 7 \times 3 - 4 \div 5 = ?$$

- Ans
- 1. -1
  - 2. -6
  - 3. -2
  - 4. -4

Question ID : 264330154659  
Option 1 ID : 264330606102  
Option 2 ID : 264330606100  
Option 3 ID : 264330606101  
Option 4 ID : 264330606099  
Status : Answered  
Chosen Option : 2

**Q.18** Read the given statement(s) and conclusions carefully. Assuming that the information given in the statements is true, even if it appears to be at variance with commonly known facts, decide which of the given conclusions logically follow(s) from the statement(s).

Statements: All the trucks are flies. Some scooters are flies.

Conclusions:

(I) All trucks are scooters.

(II) Some scooters are trucks.

- Ans**
- 1. Neither conclusion (I) nor (II) is follows.
  - 2. Only conclusion (I) is follows.
  - 3. Both conclusions (I) and (II) are follows.
  - 4. Only conclusion (II) is follows.

Question ID : 264330154429

Option 1 ID : 264330605181

Option 2 ID : 264330605179

Option 3 ID : 264330605182

Option 4 ID : 264330605180

Status : Answered

Chosen Option : 1

**Q.19** In a certain code language, 'FLOWERY' is coded as 'FYREWOL' and 'LINGUIST' is coded as 'LTSIUGNI'. What is the code for 'MANIFEST' in the given code language?

- Ans**
- 1. MTSEFINA
  - 2. TESFINAM
  - 3. SEFINAMT
  - 4. MSTEGJMA

Question ID : 264330155814

Option 1 ID : 264330610661

Option 2 ID : 264330610659

Option 3 ID : 264330610660

Option 4 ID : 264330610662

Status : Answered

Chosen Option : 1


Q.20 Select the option figure in which the given figure (X) is embedded as its part (rotation is NOT allowed).



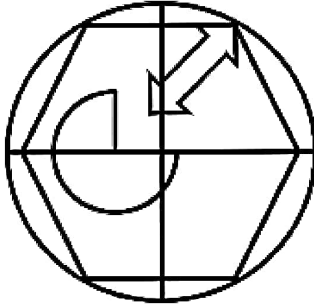
(X)

Ans

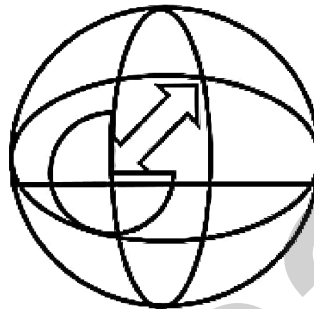
X 1.



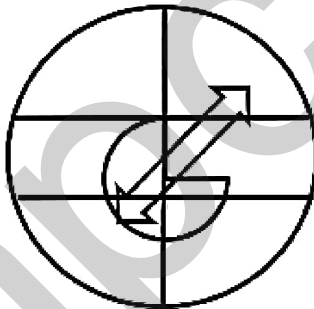
X 2.



✓ 3.



X 4.



Question ID : 264330151729

Option 1 ID : 264330594546

Option 2 ID : 264330594545

Option 3 ID : 264330594544

Option 4 ID : 264330594543

Status : Answered

Chosen Option : 3

Q.1 Which of the following Indian playback singers received the Bharat Ratna in 2001?

- Ans  1. KS Chithra  
 2. Geeta Dutt  
 3. Lata Mangeshkar  
 4. Asha Bhosle

Question ID : 264330161773  
Option 1 ID : 264330634422  
Option 2 ID : 264330634421  
Option 3 ID : 264330634420  
Option 4 ID : 264330634419  
Status : Answered  
Chosen Option : 4

Q.2 Which of the following cricket players wrote the autobiography 'Playing It My Way'?

- Ans  1. Yuvraj Singh  
 2. Sourav Ganguly  
 3. Sachin Tendulkar  
 4. Kiran More

Question ID : 264330160960  
Option 1 ID : 264330631173  
Option 2 ID : 264330631172  
Option 3 ID : 264330631171  
Option 4 ID : 264330631174  
Status : Answered  
Chosen Option : 1

Q.3 In which city is the India Gate situated?

- Ans  1. Delhi  
 2. Ahmedabad  
 3. Lucknow  
 4. Mumbai

Question ID : 264330160775  
Option 1 ID : 264330630431  
Option 2 ID : 264330630433  
Option 3 ID : 264330630434  
Option 4 ID : 264330630432  
Status : Answered  
Chosen Option : 1

Q.4 Who authored the book 'Poverty and Un-British Rule in India' in 1901, which was highly critical of the economic impact of British Rule?

- Ans  1. Pherozeshah Mehta  
 2. Dadabhai Naoroji  
 3. WC Bonnerji  
 4. Badruddin Tyabji

Question ID : 264330161748  
Option 1 ID : 264330634319  
Option 2 ID : 264330634322  
Option 3 ID : 264330634320  
Option 4 ID : 264330634321  
Status : Answered  
Chosen Option : 2

**Q.5** The efforts of Malayalam poet Vallathol Narayana Menon and dancer and guru Kalyanikutty Amma brought back and gave a new life to the dance form

- Ans**
- 1. Bharatanatyam
  - 2. Kuchipudi
  - 3. Mohiniyattam
  - 4. Kathakali

Question ID : 264330160790  
Option 1 ID : 264330630492  
Option 2 ID : 264330630493  
Option 3 ID : 264330630494  
Option 4 ID : 264330630491  
Status : Not Answered  
Chosen Option : --

**Q.6** Where was All Indian Muslim League formed in 1906?

- Ans**
- 1. Agra
  - 2. Dhaka
  - 3. Lahore
  - 4. Delhi

Question ID : 264330162333  
Option 1 ID : 264330636661  
Option 2 ID : 264330636660  
Option 3 ID : 264330636659  
Option 4 ID : 264330636662  
Status : Answered  
Chosen Option : 3

**Q.7** Which of the following writers wrote the autobiography 'Truth, Love and a Little Malice'?

- Ans**
- 1. Khushwant Singh
  - 2. Chetan Bhagat
  - 3. Pratibha Ray
  - 4. Amrita Pritam

Question ID : 264330160962  
Option 1 ID : 264330631180  
Option 2 ID : 264330631182  
Option 3 ID : 264330631181  
Option 4 ID : 264330631179  
Status : Answered  
Chosen Option : 2

Q.8 In 2023, a three-day All-India Taekwondo Championship was organized in \_\_\_\_\_ to mark 50 years of Korea-India diplomatic relations.

- Ans
- 1. Kolkata
  - 2. Bengaluru
  - 3. Mizoram
  - 4. New Delhi

Question ID : 264330161154  
Option 1 ID : 264330631949  
Option 2 ID : 264330631947  
Option 3 ID : 264330631950  
Option 4 ID : 264330631948  
Status : Not Answered  
Chosen Option : --

Q.9 The outward remittances under the Reserve Bank of India's \_\_\_\_\_ made a strong comeback in the first quarter of FY23 as Indians increased spending on international travel, maintenance of close relatives and gifts.

- Ans
- 1. Liberalised Remittance Scheme
  - 2. Regular Remittance Scheme
  - 3. Liquid Remittances Scheme
  - 4. Foreign Remittances Scheme

Question ID : 264330161403  
Option 1 ID : 264330632939  
Option 2 ID : 264330632940  
Option 3 ID : 264330632941  
Option 4 ID : 264330632942  
Status : Not Answered  
Chosen Option : --

Q.10 The Pradhan Mantri MUDRA Yojana (PMMY) scheme provide loans up to \_\_\_\_\_ to the non-corporate, non-farm small and micro entrepreneurs. (As of April 2023).

- Ans
- 1. 5 lakh
  - 2. 10 lakh
  - 3. 2.5 lakh
  - 4. 1 lakh

Question ID : 264330161578  
Option 1 ID : 264330633641  
Option 2 ID : 264330633642  
Option 3 ID : 264330633640  
Option 4 ID : 264330633639  
Status : Answered  
Chosen Option : 4

Q.11 What is the primary cause for the highest precipitation in India?

- Ans
- 1. West Garo Hills
  - 2. South-West Monsoon
  - 3. North-East Monsoon
  - 4. East Khasi Hills

Question ID : 264330157824  
Option 1 ID : 264330618658  
Option 2 ID : 264330618657  
Option 3 ID : 264330618656  
Option 4 ID : 264330618655  
Status : Answered  
Chosen Option : 2

Q.12 The \_\_\_\_\_ maestros who revived the art form in the late 1940s include Kelucharan Mohapatra and Raghunath Dutta.

- Ans
- 1. Sattriya
  - 2. Odissi
  - 3. Manipuri
  - 4. Chhau

Question ID : 264330160813  
Option 1 ID : 264330630584  
Option 2 ID : 264330630585  
Option 3 ID : 264330630583  
Option 4 ID : 264330630586  
Status : Not Answered  
Chosen Option : --

Q.13 The Guru Kelucharan Mohapatra Award 2022 was conferred upon Guru Nirrajan Rout and Guru Ramahari Das for their contribution to the fields of \_\_\_\_\_ dance and music.

- Ans
- 1. Sattriya
  - 2. Kuchipudi
  - 3. Kathak
  - 4. Odissi

Question ID : 264330155484  
Option 1 ID : 264330609339  
Option 2 ID : 264330609341  
Option 3 ID : 264330609342  
Option 4 ID : 264330609340  
Status : Not Answered  
Chosen Option : --



**Q.14 Which of the following is true about disposable income in relation to personal income?**

- Ans**  1. Disposable income is equal to personal income.  
 2. Disposable income is always less than personal income.  
 3. Disposable income is always greater than personal income.  
 4. Disposable income can be greater or less than personal income, depending on taxes and deductions.

Question ID : 264330161589  
Option 1 ID : 264330633685  
Option 2 ID : 264330633684  
Option 3 ID : 264330633683  
Option 4 ID : 264330633686  
Status : Not Answered  
Chosen Option : --

**Q.15 Which of the following best describes the process of calorimetry?**

- Ans**  1. Measuring the amount of compressive strength  
 2. Measuring the amount of force  
 3. Measuring the amount of electricity  
 4. Measuring the amount of heat energy transferred

Question ID : 264330161330  
Option 1 ID : 264330632649  
Option 2 ID : 264330632647  
Option 3 ID : 264330632648  
Option 4 ID : 264330632650  
Status : Not Answered  
Chosen Option : --

**Q.16 Which Article of the Constitution of India provides early childhood care and education for all children until they complete the age of six years?**

- Ans**  1. Article 38  
 2. Article 39  
 3. Article 45  
 4. Article 40

Question ID : 264330159906  
Option 1 ID : 264330626974  
Option 2 ID : 264330626973  
Option 3 ID : 264330626971  
Option 4 ID : 264330626972  
Status : Not Answered  
Chosen Option : --

**Q.17 Which of the following is NOT a constitutional body?**

- Ans**  1. Election Commission  
 2. Finance Commission  
 3. Union Public Service Commission  
 4. NITI Aayog

Question ID : 264330160861  
Option 1 ID : 264330630776  
Option 2 ID : 264330630778  
Option 3 ID : 264330630777  
Option 4 ID : 264330630775  
Status : Answered  
Chosen Option : 3

Q.18 विटामिन B1 की कमी से कौन-सा पोषण संबंधी विकार होता है जिससे परिधीय तंत्रिकाओं (peripheral nerves) और क्षय (wasting) की समस्याएं उत्पन्न होती हैं?

- Ans
- 1. शुष्काक्षिपाक (Xerophthalmia)
  - 2. पर्निसियस एनीमिया (Pernicious anaemia)
  - 3. बेरीबेरी (Beriberi)
  - 4. सूखा रोग (Rickets)

Question ID : 264330161075

Option 1 ID : 264330631634

Option 2 ID : 264330631631

Option 3 ID : 264330631633

Option 4 ID : 264330631632

Status : Not Answered

Chosen Option : --

Q.19 According to the National Multidimensional Poverty Index of NITI Aayog 2021, which of the following states has less than 1% multidimensionally Poor of its total population?

- Ans
- 1. Maharashtra
  - 2. Punjab
  - 3. Telangana
  - 4. Kerala

Question ID : 264330161569

Option 1 ID : 264330633606

Option 2 ID : 264330633604

Option 3 ID : 264330633605

Option 4 ID : 264330633603

Status : Not Answered

Chosen Option : --

Q.20 According to the Hindu calendar, Holi is celebrated on \_\_\_\_\_.

- Ans
- 1. Chaitra Purnima
  - 2. Pausa Purnima
  - 3. Phalguna Purnima
  - 4. Magha Purnima

Question ID : 264330160827

Option 1 ID : 264330630641

Option 2 ID : 264330630642

Option 3 ID : 264330630639

Option 4 ID : 264330630640

Status : Answered

Chosen Option : 3

Q.21 Who was the music director of the famous song "Aye Mere Watan Ke Logon" sung by Lata Mangeshkar?

- Ans
- 1. Kishore Kumar
  - 2. Rajesh Roshan
  - 3. C Ramchandra
  - 4. Anand Raaj Anand

Question ID : 264330155514  
Option 1 ID : 264330609462  
Option 2 ID : 264330609459  
Option 3 ID : 264330609461  
Option 4 ID : 264330609460  
Status : Answered  
Chosen Option : 4

Q.22 भारत में जंगली गधे और ऊंट किस प्रकार के वनों में पाए जाते हैं?

- Ans
- 1. उष्णकटिबंधीय सदाबहार वन
  - 2. पर्वतीय वन
  - 3. कांटेदार वन और झाड़ियाँ
  - 4. मैंग्रोव वन

Question ID : 264330161499  
Option 1 ID : 264330633325  
Option 2 ID : 264330633326  
Option 3 ID : 264330633324  
Option 4 ID : 264330633323  
Status : Answered  
Chosen Option : 3

Q.23 Which Indian sprinter bagged two gold medals, one each in the men's 100 and 200-metre races at the Flanders Cup 2023 athletics meet?

- Ans
- 1. Mohammed Afsal P
  - 2. Amlan Borgohain
  - 3. Tejas Shirse
  - 4. ihson dhkson

Question ID : 264330161132  
Option 1 ID : 264330631859  
Option 2 ID : 264330631860  
Option 3 ID : 264330631862  
Option 4 ID : 264330631861  
Status : Not Answered  
Chosen Option : --

Q.24 Who became the first Indian javelin ace to win the gold at the Zurich Diamond League?

- Ans
- 1. Sahil Silwal
  - 2. Shivpal Yadav
  - 3. Neeraj Chopra
  - 4. Rohit Yadav

Question ID : 264330158363  
Option 1 ID : 264330620813  
Option 2 ID : 264330620811  
Option 3 ID : 264330620812  
Option 4 ID : 264330620814  
Status : Answered  
Chosen Option : 3

**Q.25 Which curve examines the relationship between the rate of unemployment and the rate of money wage changes?**

- Ans**  1. Phillips curve  
 2. Indifference curve  
 3. Supply curve  
 4. Demand curve

Question ID : 264330161456  
Option 1 ID : 264330633152  
Option 2 ID : 264330633151  
Option 3 ID : 264330633154  
Option 4 ID : 264330633153  
Status : Answered  
Chosen Option : 1

Section : English Language and Comprehension

**Q.1 The following sentence has been split into four segments. Identify the segment that contains a grammatical error.**  
**When I was in high school / I participated in several extracurricular activities / such as the debate team and the school newspaper / which help me developed my communication and writing skills.**

- Ans**  1. When I was in high school  
 2. which help me developed my communication and writing skills  
 3. such as the debate team and the school newspaper  
 4. I participated in several extracurricular activities

Question ID : 264330144180  
Option 1 ID : 264330564983  
Option 2 ID : 264330564986  
Option 3 ID : 264330564985  
Option 4 ID : 264330564984  
Status : Answered  
Chosen Option : 2

**Q.2 Select the most appropriate option that can substitute the underlined segment in the given sentence.**

**The rise in temperature is playing havoc with India's rainfall which is pertinent for India's agriculture sector.**

- Ans**  1. rainfall who is pertinent  
 2. rainfall which is significant  
 3. rainfall which is decant  
 4. rainfall which was mendicant

Question ID : 264330151807  
Option 1 ID : 264330594855  
Option 2 ID : 264330594857  
Option 3 ID : 264330594858  
Option 4 ID : 264330594856  
Status : Answered  
Chosen Option : 2

**Q.3** Select the most appropriate idiom to fill in the blank.  
Sameera has been in \_\_\_\_\_ since she got selected for a highly paid job at a multinational company.

- Ans**
- 1. seventh heaven
  - 2. all the rage
  - 3. the dark
  - 4. a cold day in July

Question ID : 264330152780

Option 1 ID : 264330598714

Option 2 ID : 264330598713

Option 3 ID : 264330598712

Option 4 ID : 264330598711

Status : Answered

Chosen Option : 1

**Q.4** Select the most appropriate meaning of the underlined segment in the given sentence.  
I hope you break a leg at your performance tonight!

- Ans**
- 1. Give up
  - 2. Make a mistake
  - 3. Perform well
  - 4. Hurt yourself

Question ID : 264330152925

Option 1 ID : 264330599281

Option 2 ID : 264330599282

Option 3 ID : 264330599280

Option 4 ID : 264330599279

Status : Answered

Chosen Option : 3

**Q.5** Select the most appropriate option to fill in the blank.  
Winning the championship was a dream come true for the team, but being awarded the MVP trophy was \_\_\_\_\_.

- Ans**
- 1. the silver lining
  - 2. the bird in the bush
  - 3. a cold turkey
  - 4. the icing on the cake

Question ID : 264330151886

Option 1 ID : 264330595166

Option 2 ID : 264330595164

Option 3 ID : 264330595163

Option 4 ID : 264330595165

Status : Answered

Chosen Option : 4

**Q.6** Select the most appropriate ANTONYM of the underlined word.  
We requested grandmother to extend her visit.

- Ans  1. Imperil  
 2. Curtail  
 3. Assail  
 4. Bewail

Question ID : 264330151820  
Option 1 ID : 264330594910  
Option 2 ID : 264330594907  
Option 3 ID : 264330594909  
Option 4 ID : 264330594908  
Status : Answered  
Chosen Option : 2

**Q.7** Select the most appropriate option that can substitute the underlined segment in the given sentence.  
Simon is afraid of closed space.

- Ans  1. has xenophobia  
 2. has ecophobia  
 3. has claustrophobia  
 4. has hydrophobia

Question ID : 264330153512  
Option 1 ID : 264330601560  
Option 2 ID : 264330601559  
Option 3 ID : 264330601561  
Option 4 ID : 264330601562  
Status : Answered  
Chosen Option : 3

**Q.8** Select the most appropriate synonym of the given word.  
Magnificent

- Ans  1. Justify  
 2. Glorious  
 3. Highest  
 4. Modest

Question ID : 264330152595  
Option 1 ID : 264330597984  
Option 2 ID : 264330597986  
Option 3 ID : 264330597985  
Option 4 ID : 264330597983  
Status : Answered  
Chosen Option : 2

**Q.9** The sentence given below contains some spelling errors. Select the option that has the correct spellings.  
Applications of subjects like Physiks and chemmistry in our dayly life also have higher visibilty than those of Biology.

- Ans**
- 1. Applicasions of subjects like Physiks and Cemistry in our dayly life also have higher visibility than those of Biology.
  - 2. Applications of subjects like Physics and chemistry in our dayly life also have higher visibilty than those of Biology.
  - 3. Applications of subjects like Physics and Chemistry in our daily life also have higher visibility than those of Biology.
  - 4. Applicacions of subjects like Physics and chemmistry in our daily life also have higher visibilty than those of Biology.

Question ID : 264330153542  
Option 1 ID : 264330601674  
Option 2 ID : 264330601672  
Option 3 ID : 264330601671  
Option 4 ID : 264330601673  
Status : Answered  
Chosen Option : 3

**Q.10** Parts of the given sentence have been underlined. One of them contains an error. The underlined parts are given as options with some changes. Select the option that correctly rectifies the error.

The weather is cold tonight than it was yesterday.

- Ans**
- 1. its
  - 2. are
  - 3. were
  - 4. colder

Question ID : 264330153175  
Option 1 ID : 264330600261  
Option 2 ID : 264330600259  
Option 3 ID : 264330600262  
Option 4 ID : 264330600260  
Status : Answered  
Chosen Option : 4

**Q.11** Select the option that correctly rectifies the underlined spelling error in the given sentence.

Little children are afraid to go to school because of the agressive seniors who tend to bully them.

- Ans**
- 1. Aggressive
  - 2. Aggressive
  - 3. Agrressive
  - 4. Agrressive

Question ID : 264330155315  
Option 1 ID : 264330608699  
Option 2 ID : 264330608700  
Option 3 ID : 264330608702  
Option 4 ID : 264330608701  
Status : Answered  
Chosen Option : 2

**Q.12** Select the most appropriate option to fill in the blank.  
The scratches on her hands were clear signs of domestic violence, \_\_\_\_\_ and said that she got scratched by barbed wire fencing.

- Ans**
- 1. and poverty
  - 2. yet she lied
  - 3. which was enough evidence
  - 4. done a while ago

Question ID : 264330152640  
Option 1 ID : 264330598165  
Option 2 ID : 264330598164  
Option 3 ID : 264330598166  
Option 4 ID : 264330598163  
Status : Answered  
Chosen Option : 2

**Q.13** Select the most appropriate option that can substitute the underlined segment in the given sentence.

Rahul's sister says that my brother is the best dancer in the city.

- Ans**
- 1. her brother is the best dancer in the city
  - 2. my brother was the best dancer in the city
  - 3. her brother was the best dancer in the city
  - 4. his brother was the best dancer in the city

Question ID : 264330152709  
Option 1 ID : 264330598437  
Option 2 ID : 264330598435  
Option 3 ID : 264330598436  
Option 4 ID : 264330598438  
Status : Answered  
Chosen Option : 1

**Q.14** Select the most appropriate option that can substitute the underlined segment in the given sentence. If there is no need to substitute it, select 'No improvement required'.

A wonder in the plant kingdom, the Great Banyan Tree of the AJC Bose Botanical Garden at Shibpur in Howrah, occupies a unique position in the world records.

- Ans**
- 1. occupying a unique position in
  - 2. occupies an unique position in
  - 3. No improvement required
  - 4. being occupied a unique position of

Question ID : 264330152667  
Option 1 ID : 264330598271  
Option 2 ID : 264330598273  
Option 3 ID : 264330598274  
Option 4 ID : 264330598272  
Status : Answered  
Chosen Option : 3



**Q.15** Parts of the following sentence have been given as options. Select the option that contains an error.  
The cholera is a frightful disease.

- Ans**  1. is  
 2. The cholera  
 3. frightful disease  
 4. a

Question ID : 264330152791  
Option 1 ID : 264330598756  
Option 2 ID : 264330598755  
Option 3 ID : 264330598758  
Option 4 ID : 264330598757  
Status : Answered  
Chosen Option : 2

**Q.16** The sentence given below has spelling errors. Select the sentence without spelling errors.  
Knowledge and awareness about my own self has to preceede my knowledge of things other than me.

- Ans**  1. Knowledge and awareness about my own self has to preceede my knowledge of things other then me.  
 2. Knowledge and awareness about my own self has to precede my knowledge of things other than me.  
 3. Knowlegde and awareness about my own self has to preceede my knowlegde of things other than me.  
 4. Knowledge and awarenes about my own self has to preceede my knowledge of things other than me.

Question ID : 264330151838  
Option 1 ID : 264330594982  
Option 2 ID : 264330594981  
Option 3 ID : 264330594979  
Option 4 ID : 264330594980  
Status : Answered  
Chosen Option : 2

**Q.17** Select the most appropriate idiom to fill in the blank.  
If Peter said he would get that book for you, he will do it. He always \_\_\_\_\_.

- Ans**  1. keeps under his hat  
 2. keeps him at arm's length  
 3. keeps his word  
 4. keeps his shirt on

Question ID : 264330153101  
Option 1 ID : 264330599967  
Option 2 ID : 264330599969  
Option 3 ID : 264330599968  
Option 4 ID : 264330599970  
Status : Answered  
Chosen Option : 3

Q.18 Select the most appropriate option that can substitute the underlined segment in the given sentence.

It has raining very hard and he has a very large umbrella to keep off the rain-drops.

- Ans
- 1. shall rain
  - 2. is raining
  - 3. will be rainy
  - 4. rained

Question ID : 264330153481  
Option 1 ID : 264330601441  
Option 2 ID : 264330601439  
Option 3 ID : 264330601442  
Option 4 ID : 264330601440  
Status : Answered  
Chosen Option : 2

Q.19 Select the most appropriate synonym of the underlined word in the given sentence.  
Shiya had more grit than her other siblings.

- Ans
- 1. power
  - 2. level
  - 3. gap
  - 4. courage

Question ID : 264330152722  
Option 1 ID : 264330598487  
Option 2 ID : 264330598490  
Option 3 ID : 264330598488  
Option 4 ID : 264330598489  
Status : Answered  
Chosen Option : 4

Q.20 The following sentence has been divided into four parts. Identify the part that contains an error.

(A) The twins are / (B) often told that / (C) they are resembling / (D) each other.

- Ans
- 1. C
  - 2. A
  - 3. B
  - 4. D

Question ID : 264330152613  
Option 1 ID : 264330598056  
Option 2 ID : 264330598055  
Option 3 ID : 264330598058  
Option 4 ID : 264330598057  
Status : Answered  
Chosen Option : 3

**Comprehension:**

In the following passage some words have been deleted. Fill in the blanks with the help of the alternatives given. Select the most appropriate option for each number.

Each essay is set (1)\_\_\_\_\_ against its background and made simpler by providing (2)\_\_\_\_\_ summary and critical commentary, short notes on textual issues, and (3)\_\_\_\_\_ of important critical and theoretical issues under the heading essay topics. (4)\_\_\_\_\_ of the most commonly used terms in the literature is given at the end and meant to serve as ready reference. This book will cater the (5)\_\_\_\_\_ of students of literature and teachers teaching this course.

**SubQuestion No : 21**

**Q.21** Select the most appropriate option to fill in blank number 1.

- Ans  1. in  
 2. at  
 3. on  
 4. off

Question ID : 264330153584

Option 1 ID : 264330601830

Option 2 ID : 264330601828

Option 3 ID : 264330601827

Option 4 ID : 264330601829

Status : Answered

Chosen Option : 4

**Comprehension:**

In the following passage some words have been deleted. Fill in the blanks with the help of the alternatives given. Select the most appropriate option for each number.

Each essay is set (1)\_\_\_\_\_ against its background and made simpler by providing (2)\_\_\_\_\_ summary and critical commentary, short notes on textual issues, and (3)\_\_\_\_\_ of important critical and theoretical issues under the heading essay topics. (4)\_\_\_\_\_ of the most commonly used terms in the literature is given at the end and meant to serve as ready reference. This book will cater the (5)\_\_\_\_\_ of students of literature and teachers teaching this course.

**SubQuestion No : 22**

**Q.22** Select the most appropriate option to fill in blank number 2.

- Ans  1. there  
 2. its  
 3. that  
 4. this

Question ID : 264330153585

Option 1 ID : 264330601834

Option 2 ID : 264330601833

Option 3 ID : 264330601832

Option 4 ID : 264330601831

Status : Answered

Chosen Option : 2

**Comprehension:**

In the following passage some words have been deleted. Fill in the blanks with the help of the alternatives given. Select the most appropriate option for each number.

Each essay is set (1)\_\_\_\_\_ against its background and made simpler by providing (2)\_\_\_\_\_ summary and critical commentary, short notes on textual issues, and (3)\_\_\_\_\_ of important critical and theoretical issues under the heading essay topics. (4)\_\_\_\_\_ of the most commonly used terms in the literature is given at the end and meant to serve as ready reference. This book will cater the (5)\_\_\_\_\_ of students of literature and teachers teaching this course.

**SubQuestion No : 23**

**Q.23** Select the most appropriate option to fill in blank number 3.

- Ans**  1. mindset  
 2. chats  
 3. discussions  
 4. thinking

Question ID : 264330153586

Option 1 ID : 264330601838

Option 2 ID : 264330601835

Option 3 ID : 264330601836

Option 4 ID : 264330601837

Status : Answered

Chosen Option : 3

**Comprehension:**

In the following passage some words have been deleted. Fill in the blanks with the help of the alternatives given. Select the most appropriate option for each number.

Each essay is set (1)\_\_\_\_\_ against its background and made simpler by providing (2)\_\_\_\_\_ summary and critical commentary, short notes on textual issues, and (3)\_\_\_\_\_ of important critical and theoretical issues under the heading essay topics. (4)\_\_\_\_\_ of the most commonly used terms in the literature is given at the end and meant to serve as ready reference. This book will cater the (5)\_\_\_\_\_ of students of literature and teachers teaching this course.

**SubQuestion No : 24**

**Q.24** Select the most appropriate option to fill in blank number 4.

- Ans**  1. figures  
 2. glossary  
 3. grammar  
 4. data

Question ID : 264330153587

Option 1 ID : 264330601841

Option 2 ID : 264330601839

Option 3 ID : 264330601840

Option 4 ID : 264330601842

Status : Answered

Chosen Option : 2

**Comprehension:**

In the following passage some words have been deleted. Fill in the blanks with the help of the alternatives given. Select the most appropriate option for each number.

Each essay is set (1)\_\_\_\_\_ against its background and made simpler by providing

(2)\_\_\_\_\_ summary and critical commentary, short notes on textual issues, and

(3)\_\_\_\_\_ of important critical and theoretical issues under the heading essay topics.

(4)\_\_\_\_\_ of the most commonly used terms in the literature is given at the end and meant to serve as ready reference. This book will cater the (5)\_\_\_\_\_ of students of literature and teachers teaching this course.

**SubQuestion No : 25**

**Q.25** Select the most appropriate option to fill in blank number 5.

- Ans**
- 1. desires
  - 2. whims
  - 3. feelings
  - 4. needs

Question ID : 264330153588

Option 1 ID : 264330601846

Option 2 ID : 264330601845

Option 3 ID : 264330601843

Option 4 ID : 264330601844

Status : Answered

Chosen Option : 4

mpcareer