



Staff Selection Commission
(Government Of India)

REGISTRATION NUMBER : examstocks.com
EXAM DATE : 15-October-2017
EXAM NAME : SSC Examination TOTAL
MARKS : 150

CANDIDATE NAME : examstocks.com
EXAM START TIME : 10:00:00 EXAM
DURATION : 01:30 Hrs TOTAL NO OF
QUESTIONS : 100

QID : 1 -

In the following question, select the number which can be placed at the sign of question mark (?) from the given alternatives.

निम्नलिखित प्रश्न में दिए गए विकल्पों में से प्रश्न चिह्न (?) के स्थान पर आने वाली संख्या को चुनिए।

9	11	8	10
90	132	72	?

Options:

1) 100

2) 110

3) 99

4) 56

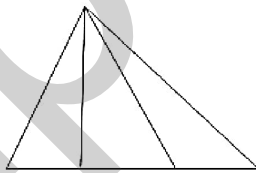
Correct Answer: 110

Candidate Answer: 110

QID : 2 -

How many triangles are there in the given figure?

दी गई आकृति में कितने त्रिभुज हैं?



Options:

1) 4

2) 5

3) 6

4) 7

Correct Answer: 6

Candidate Answer: 6

QID : 3 -

A word is represented by only one set of numbers as given in any one of the alternatives. The sets of numbers given in the alternatives are represented by two classes of alphabets as shown in the given two matrices. The columns and rows of **Matrix-I** are numbered from 0 to 4 and that of **Matrix-II** are numbered from 5 to 9. A letter from these matrices can be represented first by its row and next by its column, for example, 'A' can be represented by 40, 79, etc., and 'N' can be represented by 12, 89, etc. Similarly, you have to identify the set for the word "STOP".

एक शब्द केवल एक संख्या-समूह द्वारा दर्शाया गया है, जैसा कि विकल्पों में से किसी एक में दिया गया है। विकल्पों में दिए गए संख्या-समूह अक्षरों के दो वर्गों द्वारा दर्शाए गए हैं, जैसा कि दिए गए दो आव्यूहों में है। आव्यूह-I के स्तम्भ और पंक्ति की संख्या 0 से 4 है और आव्यूह-II की 5 से 9। इन आव्यूहों से एक अक्षर को पहले उसकी पंक्ति और बाद में स्तम्भ संख्या द्वारा दर्शाया जा सकता है। उदाहरण के लिए 'A' को 40, 79, आदि द्वारा दर्शाया जा सकता है तथा 'N' को 12, 89, आदि द्वारा दर्शाया जा सकता है। इसी तरह से आपको प्रश्न में दिए शब्द "STOP" के लिए समूह को पहचानना है।

Matrix-I आव्यूह-I					Matrix-II आव्यूह-II						
	0	1	2	3	4		5	6	7	8	9
0	O	K	D	F	X	5	R	C	W	G	I
1	G	M	N	H	V	6	K	M	O	Q	S
2	E	O	Y	J	T	7	U	W	Y	B	A
3	C	F	I	L	R	8	F	H	G	L	N
4	A	S	U	N	P	9	A	R	T	S	X

Options:

1) 41, 24, 00, 67

2) 98, 97, 21, 44

3) 69, 79, 67, 43

4) 58, 97, 59, 89

Correct Answer: 98, 97, 21, 44

Candidate Answer: 98, 97, 21, 44

QID : 4 -

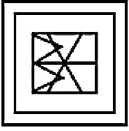
From the given answer figures, select the one in which the question figure is hidden/embedded.

दी गई उत्तर आकृतियों में से उस उत्तर आकृति को चुनिए जिस में प्रश्न आकृति निहित है।

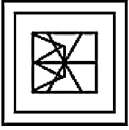


Options:

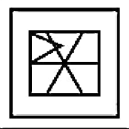
1)



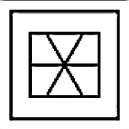
2)



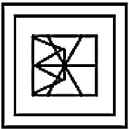
3)



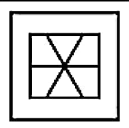
4)



Correct Answer:



Candidate Answer:



QID : 5 -

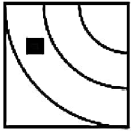
Which answer figure will complete the pattern in the question figure?

कौन सी उत्तर आकृति प्रश्न आकृति के प्रतिरूप को पूरा करेगी?



Options:

1)



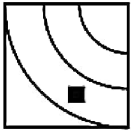
2)



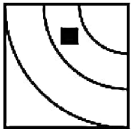
3)



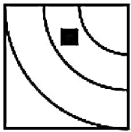
4)



Correct Answer:



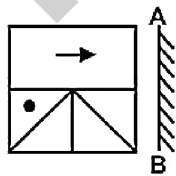
Candidate Answer:



QID : 6 -

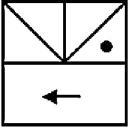
If a mirror is placed on the line AB, then which of the answer figures is the right image of the given figure?

यदि एक दर्पण को AB रेखा पर रखा जाए, तो दी गई उत्तर आकृतियों में से कौन सी आकृति प्रश्न आकृति की सही प्रतिबिम्ब होगी?

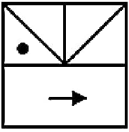


Options:

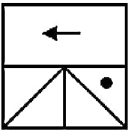
1)



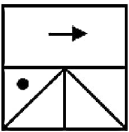
2)



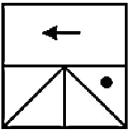
3)



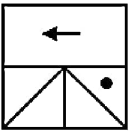
4)



Correct Answer:



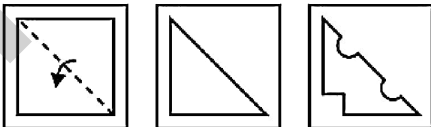
Candidate Answer:



QID : 7 -

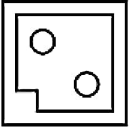
A piece of paper is folded and punched as shown below in the question figures. From the given answer figures, indicate how it will appear when opened?

नीचे के प्रश्न आकृतियों में दिखाए अनुसार कागज को मोड़कर छेदने तथा खोलने के बाद वह किस उत्तर आकृति जैसा दिखाई देगा?

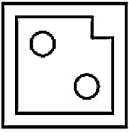


Options:

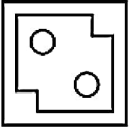
1)



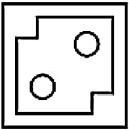
2)



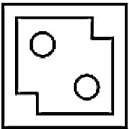
3)



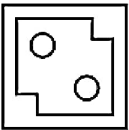
4)



Correct Answer:



Candidate Answer:



QID : 8 - If 'P' means '-', 'Q' means '+', 'R' means 'x' and 'S' means '÷', then

19 R 11 Q 3 S 12 P 4 = ?

यदि 'P' का अर्थ '-', 'Q' का अर्थ '+', 'R' का अर्थ 'x' तथा 'S' का अर्थ '÷' हो, तो

19 R 11 Q 3 S 12 P 4 = ?

Options:

- 1) 34
- 2) 69
- 3) 73
- 4) 59

Correct Answer: 59

Candidate Answer: 69

QID : 9 - If $4 \times 3 \div 6 = 1$ and $15 \times 4 \div 9 = 10$, then

$16 \times 3 \div 10 = ?$

यदि $4 \times 3 \div 6 = 1$ तथा $15 \times 4 \div 9 = 10$ हो, तो

$16 \times 3 \div 10 = ?$

Options:

- 1) 12
- 2) 10
- 3) 13
- 4) 9

Correct Answer: 9

Candidate Answer: 13

QID : 10 - Arrange the given words in the sequence in which they occur in the dictionary.

1. Reason
2. Regal
3. Regent
4. Read
5. Resort

निम्नलिखित शब्दों को शब्दकोश में आने वाले क्रम के अनुसार लिखें।

1. Reason
2. Regal
3. Regent
4. Read
5. Resort

Options:

- 1) 14235
- 2) 41235
- 3) 41253
- 4) 14523

Correct Answer: 41235

Candidate Answer: 41235

QID : 11 - In the following question, select the missing number from the given series.

43, 53, 73, 83, 103, ?

निम्नलिखित प्रश्न में दिए गए विकल्पों में से लुप्त अंक ज्ञात कीजिए।

43, 53, 73, 83, 103, ?

Options:

- 1) 113
- 2) 123
- 3) 173
- 4) 163

Correct Answer: 113

Candidate Answer: 113

QID : 12 - A series is given with one term missing. Select the correct alternative from the given ones that will complete the series.

AZ, CX, EV, ?

एक अनुक्रम दिया गया है, जिसमें से एक पद लुप्त है। दिए गए विकल्पों में से वह सही विकल्प चुनिए, जो अनुक्रम को पूरा करे।

AZ, CX, EV, ?

Options:

- 1) FU
- 2) GT
- 3) GH
- 4) FG

Correct Answer: GT

Candidate Answer: GT

QID : 13 - In the following question, select the odd word from the given alternatives.

निम्नलिखित प्रश्न में दिए गए विकल्पों में से विषम शब्द को चुनिए।

Options:

- 1) Circle
वृत्त
- 2) Square
वर्ग
- 3) Rectangle
आयत
- 4) Line
रेखा

Correct Answer: Line

रेखा

Candidate Answer: Line

रेखा

QID : 14 - In the following question, select the odd number pair from the given alternatives.

निम्नलिखित प्रश्न में दिए गए विकल्पों में से विषम संख्या युग्म को चुनिए।

Options:
1) 9 – 99

2) 11 – 121

3) 6 – 66

4) 4 – 46

Correct Answer: 4 – 46

Candidate Answer: 4 – 46

QID : 15 - In the following question, select the odd letters from the given alternatives.

निम्नलिखित प्रश्न में दिए गए विकल्पों में से विषम अक्षरों को चुनिए।

Options:

1) PQ

2) CD

3) RS

4) TV

Correct Answer: TV

Candidate Answer: TV

QID : 16 - Identify the diagram that best represents the relationship among the given classes.

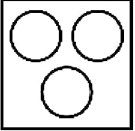
India, China, Asia

वह आरेख चुनिए जो नीचे दिए गए वर्गों के बीच के संबंध का सही निरूपण करता है।

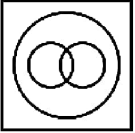
भारत, चीन, एशिया

Options:

1)



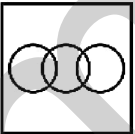
2)



3)



4)



Correct Answer:



Candidate Answer:



QID : 17 - In the following question, select the related word from the given alternatives.

Smoke : Pollution :: Fire : ?

निम्नलिखित प्रश्न में दिए गए विकल्पों में से संबंधित शब्द को चुनिए।

धुआँ : प्रदूषण :: अग्नि : ?

Options:

- 1) Food
भोजन
- 2) Heat
ऊष्मा
- 3) Woods
लकड़ियाँ
- 4) Matchstick
माचिस

Correct Answer: Heat
ऊष्मा

Candidate Answer: Heat
ऊष्मा

QID : 18 - In the following question, select the related number from the given alternatives.

12 : 1728 :: 13 : ?

निम्नलिखित प्रश्न में दिए गए विकल्पों में से संबंधित संख्या को चुनिए।

12 : 1728 :: 13 : ?

Options:

- 1) 169
- 2) 2197
- 3) 225
- 4) 3375

Correct Answer: 2197

Candidate Answer: 3375

QID : 19 - In the following question, select the related letters from the given alternatives.

XYZA : AZYX :: MNOP : ?

निम्नलिखित प्रश्न में दिए गए विकल्पों में से संबंधित अक्षरों को चुनिए।

XYZA : AZYX :: MNOP : ?

Options:

- 1) PMNO
- 2) POMN
- 3) PONM
- 4) NMOP

Correct Answer: PONM

Candidate Answer: PONM

QID : 20 - In the following question, select the word which cannot be formed using the letters of the given word.

FRANCHISE

निम्नलिखित विकल्पों में से वह शब्द चुनिए जो दिए गए शब्द के अक्षरों का प्रयोग करके नहीं बनाया जा सकता।

FRANCHISE

Options:

- 1) RAIN
- 2) SIDE
- 3) HAIR
- 4) RAISE

Correct Answer: SIDE

Candidate Answer: SIDE

QID : 21 - Sonali walks 39 km towards south. She turns left and walks another 39 km. She turns left and walks another 39 km. In which direction is she from her starting point?

सोनाली दक्षिण की ओर 39 कि.मी. चलती है। वह बायीं ओर मुड़ती है तथा 39 कि.मी. और चलती है। वह बायीं ओर मुड़ती है तथा 39 कि.मी. और चलती है। वह अपने आरंभिक बिन्दु से किस दिशा में है?

Options:

- 1) East
पूर्व
- 2) North-East
उत्तर-पूर्व
- 3) West
पश्चिम
- 4) South-West
दक्षिण-पश्चिम

Correct Answer: East

पूर्व

Candidate Answer: South-West

दक्षिण-पश्चिम

QID : 22 - A is 3 years older than B. B is 6 years younger than C. C is 4 years older than D. D is 5 years younger than E. Who is the eldest?

A, B से 3 वर्ष बड़ा है। B, C से 6 वर्ष छोटा है। C, D से 4 वर्ष बड़ा है। D, E से 5 वर्ष छोटा है। सबसे बड़ा कौन है?

Options:

1) C

2) E

3) D

4) B

Correct Answer: E

Candidate Answer: C

QID : 23 - In the following question below are given some statements followed by some conclusions. Taking the given statements to be true even if they seem to be at variance from commonly known facts, read all the conclusions and then decide which of the given conclusion logically follows the given statements.

Statements:

I. Some dolls are toys.

II. Some toys are cups.

Conclusions:

I. No doll is toy.

II. No cup is doll.

नीचे दिए गए प्रश्न में कुछ कथन और उनके बाद उन कथनों पर आधारित कुछ निष्कर्ष दिए गए हैं, हालांकि उनमें सामान्य ज्ञात तथ्यों से भिन्नता हो सकती है। सभी निष्कर्ष पढ़ें और फिर निर्धारित करें कि दिए गए कौन से निष्कर्ष, दिए गए कथनों के आधार पर युक्तिसंगत हैं।

कथन:

I. कुछ गुड़ियाँ खिलौने हैं।

II. कुछ खिलौने कप हैं।

निष्कर्ष:

I. कोई गुड़िया खिलौना नहीं है।

II. कोई कप गुड़िया नहीं है।

Options:

1) Only conclusion (I) follows.

केवल निष्कर्ष (I) सही है।

2) Only conclusion (II) follows.

केवल निष्कर्ष (II) सही है।

3) Both conclusion follow.

दोनों ही निष्कर्ष सही हैं।

4) Neither conclusion (I) nor conclusion (II) follows.

न तो निष्कर्ष (I) न ही निष्कर्ष (II) सही है।

Correct Answer: Neither conclusion (I) nor conclusion (II) follows.

न तो निष्कर्ष (I) न ही निष्कर्ष (II) सही है।

Candidate Answer: Only conclusion (II) follows.

केवल निष्कर्ष (II) सही है।

QID : 24 - In a certain code language, "HOUSTON" is written as "JMWQVMP". How is "TRIUMPH" written in that code language?

एक विशिष्ट कोड भाषा में, "HOUSTON" को "JMWQVMP" लिखा जाता है। इस कोड भाषा में "TRIUMPH" को किस प्रकार लिखा जाएगा?

Options:

1) SLMNPHQ

2) VPKSONJ

3) JLMOPOT

4) SOVPKNT

Correct Answer: VPKSONJ

Candidate Answer: VPKSONJ

QID : 25 - In a certain code language, "BREAD" is written as "96541" and "HORSE" is written as "78605". How is "BORED" written in that code language?

एक विशिष्ट कोड भाषा में, "BREAD" को "96541" तथा "HORSE" को "78605" लिखा जाता है। इस कोड भाषा में "BORED" को किस प्रकार लिखा जाएगा?

Options:

1) 70851

2) 16589

3) 70589

4) 98651

Correct Answer: 98651

Candidate Answer: 98651

QID : 26 - How many positive factors of 48 are there?

48 के धनात्मक गुणनखंड कितने हैं?

Options:

- 1) 8
- 2) 12
- 3) 10
- 4) 20

Correct Answer: 10

Candidate Answer: 10

QID : 27 - How many numbers from 105 to 205 are divisible by 9?

105 से 205 तक ऐसी कितनी संख्याएँ हैं जो 9 से विभाजित होती हैं?

Options:

- 1) 10
- 2) 11
- 3) 13
- 4) 9

Correct Answer: 11

Candidate Answer: 9

QID : 28 - Which of the following statement(s) is/are true?

- I. $(2/3) > (4/5)$
- II. $(3/5) > (1/3)$

निम्नलिखित में से कौन सा/से कथन सत्य है/हैं?

- I. $(2/3) > (4/5)$
- II. $(3/5) > (1/3)$

Options:

- 1) Only I
केवल I
- 2) Only II
केवल II
- 3) Both I and II
I तथा II दोनों
- 4) Neither I nor II
न तो I न ही II

Correct Answer: Only II
केवल II

Candidate Answer: Only II
केवल II

QID : 29 - If a number is as much as greater than 41 as it is less than 83, then what is that number?

एक संख्या 41 से जितनी बड़ी है उतनी ही 83 से छोटी है, तो वह संख्या क्या है?

Options:

- 1) 41
- 2) 19
- 3) 62
- 4) 21

Correct Answer: 62

Candidate Answer: 62

QID : 30 - What is the value of $[(2.3)^3 + (1.7)^3] \div [(2.3)^2 - 2.3 \times 1.7 + (1.7)^2]$?

$[(2.3)^3 + (1.7)^3] \div [(2.3)^2 - 2.3 \times 1.7 + (1.7)^2]$ का मान क्या है?

Options:

- 1) 4
- 2) 6
- 3) 3
- 4) 2

Correct Answer: 4

Candidate Answer: 2

QID : 31 - N is a number divisible by 20. If $(N + 2)(N + 9)$ is divided by 20, then what will be the remainder?

N एक संख्या जो 20 से विभाजित है। यदि $(N + 2)(N + 9)$ को 20 से विभाजित किया जाता है, तो शेषफल क्या होगा?

Options:

- 1) 14
- 2) 18
- 3) 9
- 4) 6

Correct Answer: 18

Candidate Answer: 18

QID : 32 - M, N and P undertook a work for Rs 50000. Together M and N complete $(7/10)^{\text{th}}$ part of the work. What is the share (in Rs) of P?

M, N तथा P ने एक कार्य को 50000 रु में लिया। M तथा N मिलकर कार्य का $(7/10)$ -वां भाग पूरा करते हैं। P का हिस्सा (रु में) क्या है?

Options:

- 1) 20000
- 2) 10000
- 3) 15000
- 4) 25000

Correct Answer: 15000

Candidate Answer: 15000

QID : 33 - Three taps D, E and F can fill a tank in 100, 120 and 150 minutes respectively. If all the taps are opened together, then in how many minutes will the tank be filled?

तीन नल D, E तथा F एक टंकी को क्रमशः 100, 120 तथा 150 मिनटों में भर सकते हैं। यदि सभी नलों को एक साथ खोल दिया जाये, तो टंकी कितने मिनटों में भर जायेगी?

Options:

- 1) 50
- 2) 60
- 3) 40
- 4) 70

Correct Answer: 40

Candidate Answer: 60

QID : 34 - The ratio of the angles of a triangle is 2 : 3 : 5. What is the measure of the smallest angle (in degrees)?

किसी त्रिभुज के कोणों का अनुपात 2 : 3 : 5 है। सबसे छोटे कोण का मान (डिग्री में) क्या है?

Options:

- 1) 32
- 2) 36
- 3) 48
- 4) 40

Correct Answer: 36

Candidate Answer: 40

QID : 35 - A shopkeeper offers 25% discount on balls which have been marked 40% above the cost price. Gajender bought the ball for Rs 630. What was the cost price (in Rs) of the ball?

एक दुकानदार क्रय मूल्य से 40% अधिक अंकित मूल्य वाली गेंदों पर 25% की छूट देता है। गजेंद्र ने 630 रु में गेंद खरीदी। गेंद का क्रय मूल्य (रु में) क्या था?

Options:

- 1) 600
- 2) 580
- 3) 575
- 4) 550

Correct Answer: 600

Candidate Answer: 600

QID : 36 - The cost price of an article is 76% of the marked price. What is the loss percentage after allowing a discount of 43% on the marked price?

किसी वस्तु का क्रय मूल्य उसके अंकित मूल्य का 76% है। अंकित मूल्य पर 43% की छूट देने के पश्चात हानि प्रतिशत क्या है?

Options:

- 1) 10
- 2) 12.5
- 3) 25
- 4) 30

Correct Answer: 25

Candidate Answer: 12.5

QID : 37 - Divide Rs 960 among M, N and O so that M get $(3/9)^{\text{th}}$ of N's share and O gets $(4/7)^{\text{th}}$ of M's share. What is the share (in Rs) of O?

960 रु को M, N तथा O में इस प्रकार विभाजित करें की M को N के हिस्से का $(3/9)$ -वां भाग मिले तथा O को M के हिस्से का $(4/7)$ -वां भाग मिले। O का हिस्सा (रु में) क्या है?

Options:

- 1) 120
- 2) 360
- 3) 630
- 4) 480

Correct Answer: 120

Candidate Answer: 480

QID : 38 - In what ratio a man must mix sugar at Rs 13.40 per kg with Rs 17.70 per kg sugar so as to make a mixture worth Rs 15.20 per kg?

एक व्यक्ति किस अनुपात में 13.40 रु प्रति कि.ग्रा. वाली चीनी को 17.70 रु प्रति कि.ग्रा. वाली चीनी के साथ मिलाये ताकि मिश्रण की कीमत 15.20 रु प्रति कि.ग्रा. हो जाये?

Options:

- 1) 5 : 3
- 2) 5 : 2
- 3) 25 : 18
- 4) 19 : 12

Correct Answer: 25 : 18

Candidate Answer: 25 : 18

QID : 39 - The average of 16 numbers is 10.5. If a number 3 is removed, then what will be the new average?

16 संख्याओं का औसत 10.5 है। यदि एक संख्या 3 को हटाया जाये, तो नया औसत क्या होगा?

Options:

- 1) 10
- 2) 11
- 3) 11.5
- 4) 10.75

Correct Answer: 11

Candidate Answer: 11.5

QID : 40 - By selling 75 metres of cloth, a person losses the cost price of 15 metres of cloth. What is his loss percent?

75 मीटर कपड़ा बेचकर एक व्यक्ति को 15 मीटर कपड़े के क्रय मूल्य के बराबर हानि होती है। उसका हानि प्रतिशत क्या है?

Options:

- 1) 40
- 2) 15
- 3) 11.11
- 4) 20

Correct Answer: 20

Candidate Answer: 11.11

QID : 41 - If bananas are bought at the rate of 4 for a rupee, then how many must be sold for a rupee so as to gain 33.33%?

यदि एक रुपये में 4 की दर से केले खरीदे जायें, तो एक रुपये में कितने केले बेचे जायें कि 33.33% का लाभ हो?

Options:

- 1) 6
- 2) 2
- 3) 3
- 4) 1

Correct Answer: 3

Candidate Answer: 1

QID : 42 - A number is increased first by 20% and then it is decreased by 30%. What is the percentage change in the number?

एक संख्या को पहले 20% से बढ़ाया जाता है तथा फिर उसे 30% से घटाया जाता है। संख्या में कितने प्रतिशत परिवर्तन हुआ है?

Options:

- 1) 16% decrease
16% की कमी
- 2) 10% decrease
10% की कमी
- 3) 20% decrease
20% की कमी
- 4) 10% increase
10% की वृद्धि

Correct Answer: 16% decrease

16% की कमी

Candidate Answer: 16% decrease

16% की कमी

QID : 43 - Two numbers are 35% and 20% respectively less than a third number. First number is what percent less than the second number?

दो संख्याएँ, एक तीसरी संख्या से क्रमशः 35% तथा 20% कम हैं। पहली संख्या, दूसरी संख्या से कितने प्रतिशत कम है?

Options:

- 1) 22.5
- 2) 24.5
- 3) 18.75
- 4) 16.75

Correct Answer: 18.75

Candidate Answer: 16.75

QID : 44 - The speed of a stream is 2 km/hr. A boat goes 32 km and comes back to the starting point in 12 hours. What is the speed (in km/hr) of the boat in still water?

एक धारा की गति 2 कि.मी./घंटा है। एक नाव 32 कि.मी. की दूरी तय करती है और अपने आरंभिक बिंदु पर 12 घंटे में वापस आ जाती है। शांत जल में नाव की गति (कि.मी./घंटा में) क्या है?

Options:

- 1) 5
- 2) 6
- 3) 8
- 4) 10

Correct Answer: 6

Candidate Answer: 8

QID : 45 - The downstream speed of a boat is 20 km/hr and the speed of current is 5 km/hr. What is the total time (in hours) taken by the boat to cover 40 km upstream and 60 km downstream?

किसी नाव की गति धारा के अनुकूल 20 कि.मी./घंटा है तथा धारा की गति 5 कि.मी./घंटा है। धारा के प्रतिकूल 40 कि.मी. तथा धारा के अनुकूल 60 कि.मी. की दूरी तय करने में नाव को कुल कितना समय (घंटों में) लगेगा?

Options:

- 1) 6
- 2) 7
- 3) 8
- 4) 9

Correct Answer: 7

Candidate Answer: 8

QID : 46 - A sum becomes 5 times in 4 years at compound interest. In how many years the same sum will become 25 times?

एक राशि चक्रवृद्धि ब्याज से 4 वर्षों में 5 गुना हो जाती है। कितने वर्षों में वही धनराशि 25 गुना हो जायेगी?

Options:

- 1) 20
- 2) 100
- 3) 80
- 4) 8

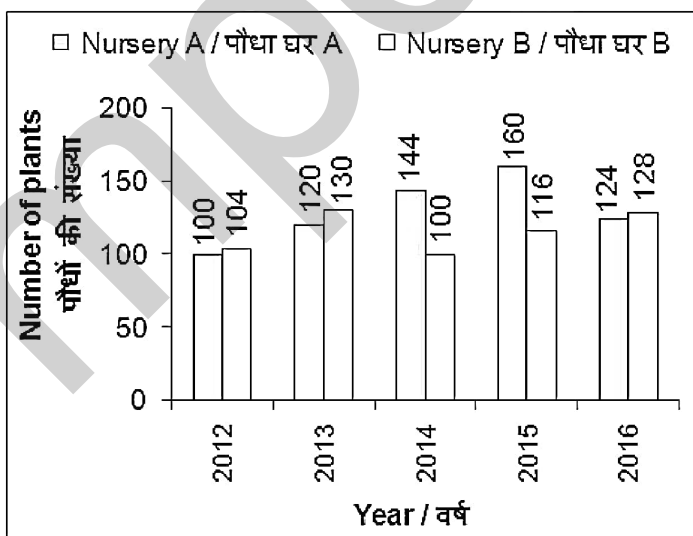
Correct Answer: 8

Candidate Answer: 20

QID : 47 -

The bar chart given below shows the number of new plants grown in 2 nurseries A and B from year 2012 to 2016.

नीचे दिए गए दण्ड चित्र में वर्ष 2012 से 2016 तक 2 पौधे घरों A तथा B में उगाये गये नये पौधों की संख्या को दर्शाया गया है।



What is the percentage change in the number of plants grown in nursery A from year 2012 to year 2014?

वर्ष 2012 से 2014 तक पौधे घर A में उगाये गये पौधों की संख्या में प्रतिशत परिवर्तन क्या है?

Options:

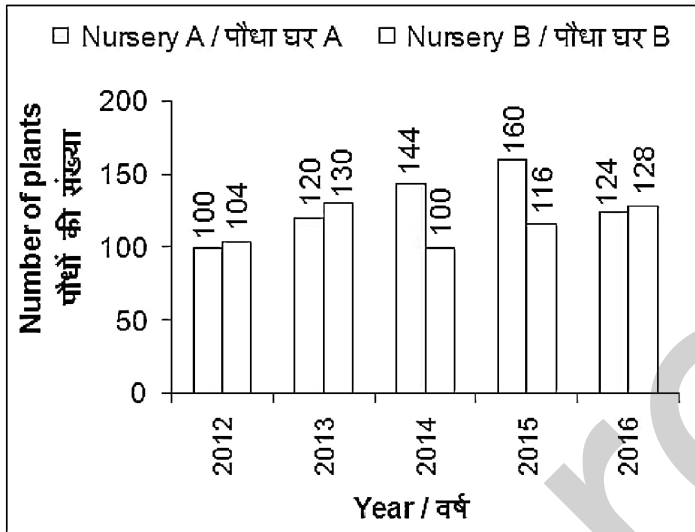
- 1) 22
- 2) 50
- 3) 44
- 4) 72

Correct Answer: 44

QID : 48 -

The bar chart given below shows the number of new plants grown in 2 nurseries A and B from year 2012 to 2016.

नीचे दिए गए दण्ड चित्र में वर्ष 2012 से 2016 तक 2 पौधे घरों A तथा B में उगाये गये नये पौधों की संख्या को दर्शाया गया है।



In which two years the difference in the number of plants grown in the two nurseries was same?

किन दो वर्षों में दोनों पौधे घरों में उगाये गये पौधों की संख्या का अंतर समान था?

Options:

- 1) 2012 and 2013
2012 तथा 2013
- 2) 2013 and 2014
2013 तथा 2014
- 3) 2013 and 2016
2013 तथा 2016
- 4) 2012 and 2016
2012 तथा 2016

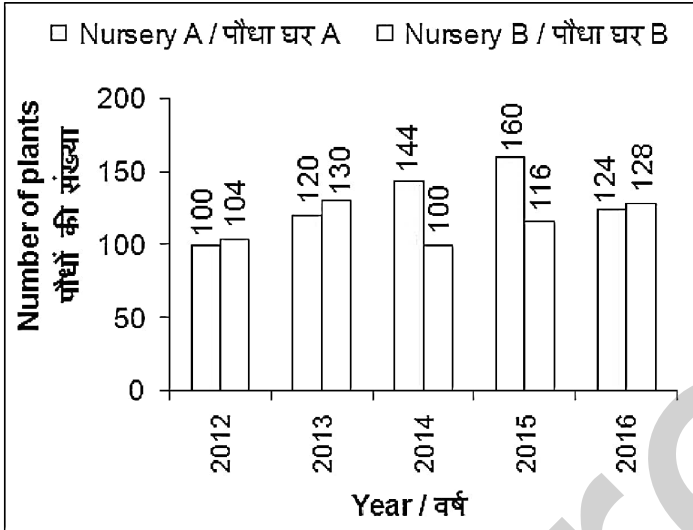
Correct Answer: 2012 and 2016
2012 तथा 2016

Candidate Answer: 2012 and 2016
2012 तथा 2016

QID : 49 -

The bar chart given below shows the number of new plants grown in 2 nurseries A and B from year 2012 to 2016.

नीचे दिए गए दण्ड चित्र में वर्ष 2012 से 2016 तक 2 पौधे घरों A तथा B में उगाये गये नये पौधों की संख्या को दर्शाया गया है।



In year 2013, the number of plants grown in nursery B was what percent of the number of plants grown in nursery A?

वर्ष 2013 में पौधे घर B में उगाये गये पौधों की संख्या पौधे घर A में उगाये गये पौधों की संख्या का कितना प्रतिशत था?

Options:

- 1) 108.33
- 2) 65
- 3) 60
- 4) 200

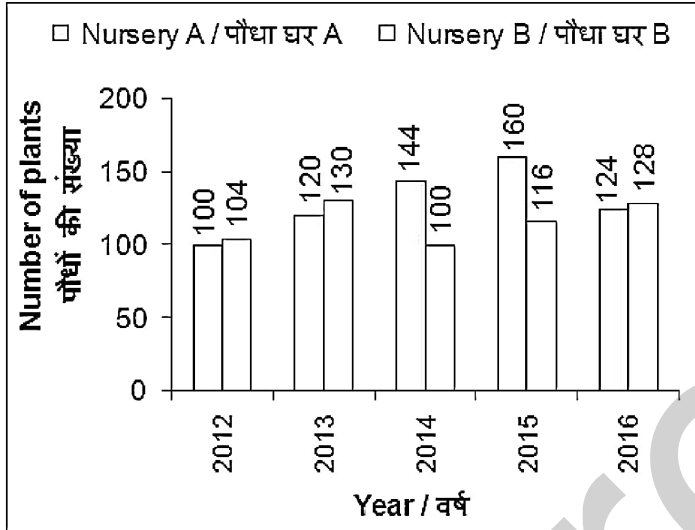
Correct Answer: 108.33

Candidate Answer: 108.33

QID : 50 -

The bar chart given below shows the number of new plants grown in 2 nurseries A and B from year 2012 to 2016.

नीचे दिए गए दण्ड चित्र में वर्ष 2012 से 2016 तक 2 पौधे घरों A तथा B में उगाये गये नये पौधों की संख्या को दर्शाया गया है।



What is the percentage change in the number of plants grown in nursery B from year 2012 to year 2015?

वर्ष 2012 से 2015 तक पौधे घर B में उगाये गये पौधों की संख्या में प्रतिशत परिवर्तन क्या है?

Options:

1) 21.81

2) 11.54

3) 6

4) 58

Correct Answer: 11.54

Candidate Answer: 21.81

QID : 51 - In the following question, some part of the sentence may have errors. Find out which part of the sentence has an error and select the appropriate option. If a sentence is free from error, select 'No Error'.

Parliament backing a (1)/ second reading of legislation to (2)/ severe ties with the Union (3)/ No Error (4)

Options:

1) 1

2) 2

3) 3

4) 4

Correct Answer: 1

Candidate Answer: 2

QID : 52 - In the following question, some part of the sentence may have errors. Find out which part of the sentence has an error and select the appropriate option. If a sentence is free from error, select 'No Error'.

Prime Minister now faces (1)/ demands by lawmakers to concessions (2)/ before he presents the budget. (3)/ No Error (4)

Options:

1) 1

2) 2

3) 3

4) 4

Correct Answer: 2

Candidate Answer: 3

QID : 53 - In the following question, the sentence given with blank to be filled in with an appropriate word. Select the correct alternative out of the four and indicate it by selecting the appropriate option.

At one time, Mr. Gupta _____ this supermarket.

Options:

- 1) owned
- 2) had owned
- 3) used to owning
- 4) was owing

Correct Answer: owned

Candidate Answer: used to owning

QID : 54 - In the following question, the sentence given with blank to be filled in with an appropriate word. Select the correct alternative out of the four and indicate it by selecting the appropriate option.

Mandeep _____ in Kerala for four years when his parents came to visit.

Options:

- 1) had been living
- 2) had live
- 3) has live
- 4) has living

Correct Answer: had been living

Candidate Answer: has live

QID : 55 - In the following question, out of the given four alternatives, select the one which best expresses the meaning of the given word.

Emphatic

Options:

- 1) Reserved
- 2) Firm
- 3) Indistinct
- 4) Insignificant

Correct Answer: Firm

Candidate Answer: Insignificant

QID : 56 - In the following question, out of the given four alternatives, select the one which best expresses the meaning of the given word.

Furbish

Options:

- 1) Damage
- 2) Shine
- 3) Hurt
- 4) Tarnish

Correct Answer: Shine

Candidate Answer: Damage

QID : 57 - In the following question, out of the given four alternatives, select the one which best expresses the meaning of the given word.

Gallantry

Options:

- 1) Fear
- 2) Bravery
- 3) Misbehaviours
- 4) Disruption

Correct Answer: Bravery

Candidate Answer: Misbehaviours

QID : 58 - In the following question, out of the given four alternatives, select the one which is opposite in meaning of the given word.

Divulge

Options:

- 1) Admit
- 2) Betray
- 3) Declare
- 4) Hide

Correct Answer: Hide

Candidate Answer: Betray

QID : 59 - In the following question, out of the given four alternatives, select the one which is opposite in meaning of the given word.

Intentional

Options:

- 1) Designed
- 2) Accidental
- 3) Advised
- 4) Planned

Correct Answer: Accidental

Candidate Answer: Advised

QID : 60 - In the following question, out of the given four alternatives, select the one which is opposite in meaning of the given word.

Heedless

Options:

- 1) Careless
- 2) Observant
- 3) Rash
- 4) Neglectful

Correct Answer: Observant

Candidate Answer: Rash

QID : 61 - In the following question, out of the four given alternatives, select the alternative which best expresses the meaning of the Idiom/Phrase.

Give a free hand

Options:

- 1) Without stigma
- 2) To exercise complete control over something
- 3) Maintaining composure
- 4) An unexpected triumph

Correct Answer: To exercise complete control over something

Candidate Answer: Without stigma

QID : 62 - In the following question, out of the four given alternatives, select the alternative which best expresses the meaning of the Idiom/Phrase.

Be as hard as nails

Options:

- 1) Tough guy
- 2) To have no feelings
- 3) Laborious person
- 4) Physically strong

Correct Answer: To have no feelings

Candidate Answer: Physically strong

QID : 63 - Improve the bracketed part of the sentence.

"This is (deeply disappointing result)," said an opposition party spokesman.

Options:

- 1) an deeply disappointing result
- 2) a deeply disappointing result
- 3) deeply very disappointing result
- 4) No improvement

Correct Answer: a deeply disappointing result

Candidate Answer: No improvement

QID : 64 - Improve the bracketed part of the sentence.

Attorneys have announced a settlement in a lawsuit over (whom) owns the copyright.

Options:

- 1) who
- 2) which
- 3) whose
- 4) No improvement

Correct Answer: who

Candidate Answer: No improvement

QID : 65 - In the following question, out of the four given alternatives, select the alternative which is the best substitute of the phrase.

Worshipping of idols

Options:

- 1) Actuary
- 2) Advisory
- 3) Idolatry
- 4) Ceremony

Correct Answer: Idolatry

Candidate Answer: Advisory

QID : 66 - In the following question, out of the four given alternatives, select the alternative which is the best substitute of the phrase.

That cannot be avoided

Options:

- 1) Changeable
- 2) Durable
- 3) Abolishable
- 4) Inevitable

Correct Answer: Inevitable

Candidate Answer: Inevitable

QID : 67 - In the following question, a word has been written in four different ways out of which only one is correctly spelt. Select the correctly spelt word.

Options:

- 1) Alergic
- 2) Alergec
- 3) Allergic
- 4) Ellergic

Correct Answer: Allergic

Candidate Answer: Alergic

QID : 68 - In the following question, a word has been written in four different ways out of which only one is correctly spelt. Select the correctly spelt word.

Options:

- 1) Allaince
- 2) Elliance
- 3) Allanice
- 4) Alliance

Correct Answer: Alliance

Candidate Answer: Alliance

QID : 69 - Rearrange the parts of the sentence in correct order.

Rapid improvement

P: stimulated the globalisation process

Q: major factor that has

R: in technology has been one

Options:

- 1) RQP
- 2) PRQ
- 3) QPR
- 4) QRP

Correct Answer: RQP

Candidate Answer: RQP

QID : 70 - Rearrange the parts of the sentence in correct order.

There are many aspects of

P: unequal situations in a

Q: of rules and regulations

R: market and poor enforcement

Options:

- 1) PQR
- 2) QRP
- 3) PRQ
- 4) QPR

Correct Answer: PRQ

Candidate Answer: QRP

QID : 71 - In the following passage some of the words have been left out. Read the passage carefully and select the correct answer for the given blank out of the four alternatives.

There are ____ ingredients ____ for achieving success. Of which, self-awareness is one, which is ____ to success. People are more comfortable in knowing about ____ than about themselves. A few people have the habit of complaining, condemning and criticizing others' behavior and nature. They cannot digest when others think and behave with them as they think that they are better than others. In fact, nobody is perfect in this world. We all have our strengths and weaknesses and being aware of the same will help us to become a ____ person.

There are ____

Options:

- 1) several
- 2) much
- 3) most
- 4) more

Correct Answer: several

Candidate Answer: more

QID : 72 - In the following passage some of the words have been left out. Read the passage carefully and select the correct answer for the given blank out of the four alternatives.

There are ____ ingredients ____ for achieving success. Of which, self-awareness is one, which is ____ to success. People are more comfortable in knowing about ____ than about themselves. A few people have the habit of complaining, condemning and criticizing others' behavior and nature. They cannot digest when others think and behave with them as they think that they are better than others. In fact, nobody is perfect in this world. We all have our strengths and weaknesses and being aware of the same will help us to become a ____ person.

ingredients ____ for achieving success.

Options:

- 1) relational
- 2) essential
- 3) unimportant
- 4) secondary

Correct Answer: essential

Candidate Answer: relational

QID : 73 - In the following passage some of the words have been left out. Read the passage carefully and select the correct answer for the given blank out of the four alternatives.

There are ____ ingredients ____ for achieving success. Of which, self-awareness is one, which is ____ to success. People are more comfortable in knowing about ____ than about themselves. A few people have the habit of complaining, condemning and criticizing others' behavior and nature. They cannot digest when others think and behave with them as they think that they are better than others. In fact, nobody is perfect in this world. We all have our strengths and weaknesses and being aware of the same will help us to become a ____ person.

which is ____ to success.

Options:

- 1) notion
- 2) option
- 3) key
- 4) lock

Correct Answer: key

Candidate Answer: option

QID : 74 - In the following passage some of the words have been left out. Read the passage carefully and select the correct answer for the given blank out of the four alternatives.

There are ____ ingredients ____ for achieving success. Of which, self-awareness is one, which is ____ to success. People are more comfortable in knowing about ____ than about themselves. A few people have the habit of complaining, condemning and criticizing others' behavior and nature. They cannot digest when others think and behave with them as they think that they are better than others. In fact, nobody is perfect in this world. We all have our strengths and weaknesses and being aware of the same will help us to become a ____ person.

knowing about ____ than about

Options:

- 1) others
- 2) bosses
- 3) people
- 4) another

Correct Answer: others

Candidate Answer: people

QID : 75 - In the following passage some of the words have been left out. Read the passage carefully and select the correct answer for the given blank out of the four alternatives.

There are ____ ingredients ____ for achieving success. Of which, self-awareness is one, which is ____ to success. People are more comfortable in knowing about ____ than about themselves. A few people have the habit of complaining, condemning and criticizing others' behavior and nature. They cannot digest when others think and behave with them as they think that they are better than others. In fact, nobody is perfect in this world. We all have our strengths and weaknesses and being aware of the same will help us to become a ____ person.

help us to become a ____ person.

Options:

- 1) satisfied
- 2) emotional
- 3) successful
- 4) notorious

Correct Answer: successful

Candidate Answer: satisfied

QID : 76 - What is the situation where people are apparently working but all of them are made to work less than their potential is called?

ऐसी स्थिति जहाँ लोग स्पष्ट रूप से कार्य कर रहे होते हैं लेकिन उन सभी को अपनी क्षमता से कम कार्य करने को दिया जाता है, क्या कहलाती है?

Options:

- 1) Unemployment
बेरोजगारी
- 2) Over employment
अधिक रोजगार
- 3) Seasonal employment
मौसमी रोजगार
- 4) Underemployment
अल्परोजगार

Correct Answer: Underemployment

अल्परोजगार

Candidate Answer: Underemployment

अल्परोजगार

QID : 77 - Which among the following refers to an agreement in which the lender supplies the borrower with money, goods or services in return for the promise of future payment?

इनमें से कौन सा एक समझौते को संदर्भित करता है जिसमें ऋणदाता भविष्य में भुगतान के वादे के बदले उधारकर्ता को धन, माल या सेवाएँ प्रदान करता है?

Options:

- 1) Deposit
जमा
- 2) Saving
बचत
- 3) Credit
साख
- 4) Cheque
चेक

Correct Answer: Credit

साख

Candidate Answer: Saving

बचत

QID : 78 - Lok-Sabha is presided by whom?

लोक सभा की अध्यक्षता कौन करता है?

Options:

- 1) Speaker
स्पीकर
- 2) President of India
भारत के राष्ट्रपति
- 3) Prime Minister of India
भारत के प्रधानमंत्री
- 4) None of these
इनमें से कोई नहीं

Correct Answer: Speaker

स्पीकर

Candidate Answer: Speaker

स्पीकर

QID : 79 - What is the in source of preamble of Indian constitution?

भारतीय संविधान का उद्देशिका का स्रोत क्या है?

Options:

- 1) British constitution
ब्रिटिश संविधान
- 2) Australian constitution
ऑस्ट्रेलियन संविधान
- 3) American constitution
अमेरिकी संविधान
- 4) Brazilian constitution
ब्राज़ीलियन संविधान

Correct Answer: American constitution

अमेरिकी संविधान

Candidate Answer: Brazilian constitution

ब्राज़ीलियन संविधान

QID : 80 - Which was the most important Mahajanpada?

सबसे महत्वपूर्ण महाजनपद कौन सा था?

Options:

- 1) Avanti
अवन्ति
- 2) Gandhara
गंधार
- 3) Magadha
मगध
- 4) Vajji
वज्जि

Correct Answer: Magadha
मगध

Candidate Answer: Magadha
मगध

QID : 81 - When was Rani Lakshmbai defeated and killed?

रानी लक्ष्मीबाई की शिकस्त कब हुई तथा उन्हें कब मारा गया?

Options:

- 1) November 1852
नवम्बर 1852
- 2) October 1854
अक्टूबर 1854
- 3) June 1858
जून 1858
- 4) April 1867
अप्रैल 1867

Correct Answer: June 1858
जून 1858

Candidate Answer: November 1852
नवम्बर 1852

QID : 82 - The process that divides the day from night on the globe is called the circle of _____.

वह प्रक्रिया जो ग्लोब पर दिन रात को विभाजित करती है, _____ कहलाती है।

Options:

- 1) Revolution
परिक्रमण
- 2) Rotation
घूर्णन
- 3) Translation
अंतरण
- 4) Illumination
प्रदीप्ति

Correct Answer: Illumination
प्रदीप्ति

Candidate Answer: Revolution
परिक्रमण

QID : 83 - What is the shape of the Atlantic Ocean?

अटलांटिक महासागर का आकार क्या है?

Options:

- 1) Almost Circular
लगभग वृत्ताकार
- 2) S' shaped
S' आकार
- 3) Almost Triangular
लगभग त्रिभुजाकार
- 4) None of these
इनमें से कोई नहीं

Correct Answer: S' shaped
S' आकार

Candidate Answer: S' shaped
S' आकार

QID : 84 - A balanced diet has _____.

एक संतुलित आहार में _____ है।

Options:

- 1) Only nutrient
केवल पोषक तत्व
- 2) Only water
केवल पानी
- 3) Only roughage
केवल चारा
- 4) All options are correct
सभी विकल्प सही हैं

Correct Answer: All options are correct
सभी विकल्प सही हैं

Candidate Answer: Only nutrient
केवल पोषक तत्व

QID : 85 - In which of the following groups of animal the heart pumps only deoxygenated blood?

निम्नलिखित जानवरों के समूह में से किसमें हृदय केवल डॉक्सिनेटेड रक्त को स्पष्ट करता है?

Options:

- 1) Fish
मछली
- 2) Mammals
स्तनधारी
- 3) Reptile
सरीसृप
- 4) Snake
साँप

Correct Answer: Fish
मछली

Candidate Answer: Snake
साँप

QID : 86 - Vitamin A is responsible for _____.

विटामिन ए _____ के लिए जिम्मेदार है।

Options:

- 1) Night blindness
रतौंधी
- 2) Scurvy
स्कर्वी
- 3) Pellagra
पेलाग्रा
- 4) Jaundice
पीलिया

Correct Answer: Night blindness
रतौंधी

Candidate Answer: Night blindness
रतौंधी

QID : 87 - A rocket works on the _____.

एक रॉकेट _____ पर काम करता है।

Options:

- 1) Archimedes Principle
आर्किमिडीज सिद्धांत
- 2) second law of motion
गति का दूसरा कानून
- 3) principle of linear momentum
रैखिक गति के सिद्धांत
- 4) None of these
इनमें से कोई नहीं

Correct Answer: principle of linear momentum
रैखिक गति के सिद्धांत

Candidate Answer: principle of linear momentum
रैखिक गति के सिद्धांत

QID : 88 - Which of the following mirror is used to concentrate light on a given spot?

निम्नलिखित में से कौन सा दर्पण किसी दिए गए स्थान पर प्रकाश को केंद्रित करने के लिए उपयोग किया जाता है?

Options:

- 1) Concave mirror
अवतल दर्पण
- 2) Convex mirror
उत्तल दर्पण
- 3) Plane mirror
समतल दर्पण
- 4) Biconvex mirror
उभययुत्तल दर्पण

Correct Answer: Concave mirror
अवतल दर्पण

Candidate Answer: Biconvex mirror
उभययुत्तल दर्पण

QID : 89 - What are the errors in a program is called?

एक प्रोग्राम में त्रुटियां क्या कहलाती हैं?

Options:

- 1) Fault
दोष
- 2) Mistake
गलती
- 3) Syntax
वाक्य-विन्यास
- 4) Bug
बग

Correct Answer: Bug
बग

Candidate Answer: Bug
बग

QID : 90 - The sharp pain caused by the sting of an ant is due to _____.

एक चींटी के डंक से _____ के कारण तेज दर्द होता है।

Options:

- 1) Nitric acid
नाइट्रिक अम्ल
- 2) Hydrochloric acid
हाइड्रोक्लोरिक अम्ल
- 3) Formic acid
फॉर्मिक अम्ल
- 4) Acetic acid
एसिटिक अम्ल

Correct Answer: Formic acid
फॉर्मिक अम्ल

Candidate Answer: Formic acid
फॉर्मिक अम्ल

QID : 91 - The reaction $2\text{Na} + \text{Cl}_2 = 2\text{NaCl}$ is an example of _____.

$2\text{Na} + \text{Cl}_2 = 2\text{NaCl}$ अभिक्रिया _____ का एक उदाहरण है।

Options:

- 1) Combination reaction
संयोजन प्रतिक्रिया
- 2) Decomposition reaction
अपघटन प्रतिक्रिया
- 3) Complex reaction
जटिल प्रतिक्रिया
- 4) Double decomposition reaction
डबल अपघटन प्रतिक्रिया

Correct Answer: Decomposition reaction
अपघटन प्रतिक्रिया

Candidate Answer: Double decomposition reaction
डबल अपघटन प्रतिक्रिया

QID : 92 - What is symbiosis?

सहजीवन क्या है?

Options:

- 1) association necessary for survival of both partners
ऐसी संगति जो दोनों भागीदारों के अस्तित्व के लिए आवश्यक हो
- 2) association in which one species is benefitted and causes harm to another species
ऐसी संगति जिसमें एक प्रजाति का लाभ तथा अन्य प्रजातियों को नुकसान पहुँचता हो
- 3) association in which one species is benefitted and another is unaffected
ऐसी संगति जिसमें एक प्रजाति का लाभ होता है तथा दूसरा अप्रभावित होता है
- 4) None of these
इनमें से कोई नहीं

Correct Answer: association necessary for survival of both partners
ऐसी संगति जो दोनों भागीदारों के अस्तित्व के लिए आवश्यक हो

Candidate Answer: association necessary for survival of both partners
ऐसी संगति जो दोनों भागीदारों के अस्तित्व के लिए आवश्यक हो

QID : 93 - What is the maximum age of joining Atal Pension Yojana?

अटल पेंशन योजना से जुड़ने के लिए अधिकतम आयु क्या है?

Options:

- 1) 18 years
18 वर्ष
- 2) 21 years
21 वर्ष
- 3) 40 years
40 वर्ष
- 4) 60 years
60 वर्ष

Correct Answer: 40 years
40 वर्ष

Candidate Answer: 60 years
60 वर्ष

QID : 94 - What was invented by "Charles Goodyear"?

"चार्ल्स गुडईयर" ने किस का आविष्कार किया था?

Options:

- 1) Saccharin
सच्चारिन
- 2) Rocket
रोकेट
- 3) Razor
रेज़र
- 4) Rubber
रबर

Correct Answer: Rubber
रबर

Candidate Answer: Saccharin
सुचरिन

QID : 95 - Which among the following is **NOT** included in the Olympic Games?

निम्नलिखित में से कौन ओलंपिक खेलों में शामिल नहीं है?

Options:

- 1) Swimming
तैराकी
- 2) Archery
तीरांदाजी
- 3) Athletics
एथलेटिक्स
- 4) Kabaddi
कबड्डी

Correct Answer: Kabaddi
कबड्डी

Candidate Answer: Swimming
तैराकी

QID : 96 - The Kailash temple at Ellora is an example of ____.

एलोरा में कैलाश मंदिर ____ का एक उदाहरण है।

Options:

- 1) Free-standing temple
मुक्त खड़े मंदिर
- 2) Rock-cut Temple
चट्टानों से कटे मंदिर
- 3) Shore temple
समुद्र तटीय मंदिर
- 4) None of these
इनमें से कोई नहीं

Correct Answer: Rock-cut Temple
चट्टानों से कटे मंदिर

Candidate Answer: Rock-cut Temple
चट्टानों से कटे मंदिर

QID : 97 - Who has won the prestigious Abel Prize 2017 for his role in the development of mathematical theory of wavelets?

गणितीय तरंगिकाओं के सिद्धांत के विकास में अपनी भूमिका के लिए प्रतिष्ठित एबल पुरस्कार 2017 किसने जीता?

Options:

- 1) Roald Dahl
रोआल्ड डाल
- 2) Danielle Steel
डेनिएल स्टील
- 3) Dan Brown
डेन ब्राउन
- 4) Yves Meyer
यवेस मेयेर

Correct Answer: Yves Meyer
यवेस मेयेर

Candidate Answer: Danielle Steel
डेनिएल स्टील

QID : 98 - Who is the author of the book named "Rangbhoomi"?

"रंगभूमि" नामक पुस्तक के लेखक कौन हैं?

Options:

- 1) Prem Chand
प्रेम चंद
- 2) Kalidas
कालिदास
- 3) Gulzar
गुलजार
- 4) Tulsidas
तुलसीदास

Correct Answer: Prem Chand
प्रेम चंद

Candidate Answer: Prem Chand
प्रेम चंद

QID : 99 - Desert Eagle is the bilateral exercise between Indian Air Force and ____ Air Force.

डेजर्ट ईगल भारतीय वायु सेना तथा ____ वायु सेना के बीच द्विपक्षीय अभ्यास है।

Options:

1) U.S.A.(United States of America)

संयुक्त राज्य अमेरिका

2) Russia

रूस

3) U.A.E.(United Arab Emirates)

संयुक्त अरब अमीरात

4) China

चीन

Correct Answer: U.A.E.(United Arab Emirates)

संयुक्त अरब अमीरात

Candidate Answer: U.S.A.(United States of America)

संयुक्त राज्य अमेरिका

QID : 100 - When was the Indus Water Treaty between India and Pakistan signed?

भारत तथा पाकिस्तान के बीच सिंधु जल संधि पर हस्ताक्षर कब हुए?

Options:

1) 1947

2) 1954

3) 1960

4) 1972

Correct Answer: 1960

Candidate Answer: 1972