

Section : General English

Q.1 Select the correctly spelt word.

- Ans
- 1. Unforgatable
 - 2. Uniique
 - 3. Unfortunately
 - 4. Undoubtedly

Question ID : 2390872495
Status : Answered
Chosen Option : 3

Q.2 Select the most appropriate synonym of the given word.

AFFLUENCE

- Ans
- 1. Wealth
 - 2. Poverty
 - 3. Hardship
 - 4. Bankruptcy

Question ID : 2390872487
Status : Answered
Chosen Option : 3

Q.3 Select the most appropriate antonym of the word.

DISTANT

- Ans
- 1. Close
 - 2. Beyond
 - 3. Faraway
 - 4. Remote

Question ID : 2390872489
Status : Answered
Chosen Option : 1

Q.4 Select the most appropriate option to substitute the underlined segment. If there is no need to substitute it, select No improvement

My parents both are doctors.

- Ans
- 1. No improvement
 - 2. Both my parents
 - 3. Both my parent
 - 4. My parents are both

Question ID : 2390872476

Status : Answered
Chosen Option : 2

Q.5 Select the most appropriate option to fill in the blank and make a grammatically correct sentence.

I would have forgotten my appointment if Susan _____ reminded me about it.

- Ans
- 1. wouldn't
 - 2. hadn't
 - 3. haven't
 - 4. had

Question ID : 2390872485
Status : Answered
Chosen Option : 2

Q.6 Select the most appropriate option to fill in the blank and make a grammatically correct sentence.

It wasn't easy, but finally we succeeded _____ finding a solution to the problem.

- Ans
- 1. at
 - 2. of
 - 3. for
 - 4. in

Question ID : 2390872484
Status : Answered
Chosen Option : 2

Q.7 Select the most appropriate meaning of the given idiom.

In the nick of time

- Ans
- 1. In the middle of things
 - 2. At the last possible moment
 - 3. Much in advance
 - 4. After the deadline

Question ID : 2390872490
Status : Answered
Chosen Option : 2

Q.8 Select the correctly spelt word.

- Ans
- 1. Superfisial
 - 2. Succesful
 - 3. Seige
 - 4. Separate

Question ID : 2390872494
Status : Answered
Chosen Option : 4

Q.9 Select the most appropriate option to substitute the underlined segment. If there is no need to substitute it, select No improvement

I had first gone to Srinagar with mine family in 1961.

- Ans
- 1. along mine family
 - 2. along my family

- 3. with my family
- 4. No improvement

Question ID : 2390872477
Status : Answered
Chosen Option : 3

Q.10 Select the most appropriate synonym of the given word.

ZEST

- Ans
- 1. Indifference
 - 2. Detachment
 - 3. Enthusiasm
 - 4. Unconcern

Question ID : 2390872486
Status : Answered
Chosen Option : 1

Q.11 Select the most appropriate option to substitute the underlined segment. If there is no need to substitute it, select No improvement

Sonia is learnt to play the guitar these days.

- Ans
- 1. was learning to play
 - 2. No improvement
 - 3. is learning to play
 - 4. was learning playing

Question ID : 2390872475
Status : Answered
Chosen Option : 3

Q.12 Identify the segment in the sentence which contains the grammatical error. If there is no error, select 'no error'

My friend usually wakes up late on Sunday mornings.

- Ans
- 1. usually wakes up
 - 2. late on Sunday mornings
 - 3. My friend
 - 4. No error

Question ID : 2390872472
Status : Answered
Chosen Option : 4

Q.13 Identify the segment in the sentence which contains the grammatical error.

A Superintendent of Police have the authority to suspend an inspector.

- Ans
- 1. have the
 - 2. A Superintendent of Police
 - 3. an inspector
 - 4. authority to suspend

Question ID : 2390872474
Status : Answered
Chosen Option : 1

Q.14 Select the most appropriate

One who abstains from alcoholic drinks

- Ans
- 1. Non-vegetarian
 - 2. Drunkard
 - 3. Vegetarian
 - 4. Teetotaler

Question ID : 2390872492
Status : Answered
Chosen Option : 4

Q.15 Select the most appropriate word to fill in the blank and make a meaningful sentence.

Which _____ should we adopt to increase our sales?

- Ans
- 1. functions
 - 2. intentions
 - 3. promotions
 - 4. strategies

Question ID : 2390872496
Status : Answered
Chosen Option : 4

Q.16 Identify the segment in the sentence which contains the grammatical error.

If I had gone to the library I can have borrowed a book.

- Ans
- 1. I can have
 - 2. If I had
 - 3. gone to the library
 - 4. borrowed a book

Question ID : 2390872473
Status : Answered
Chosen Option : 1

Q.17 Select the most appropriate word to fill in the blank and make a meaningful sentence.

We try to keep abreast of the new treatments, but have gained little _____ experience of using them.

- Ans
- 1. orderly
 - 2. systematic
 - 3. practical
 - 4. doable

Question ID : 2390872497
Status : Answered
Chosen Option : 3

Q.18 Select the most appropriate meaning of the given idiom.

Put the cart before the horse

- Ans
- 1. To follow the logical order
 - 2. To do impractical things
 - 3. To lie about a situation
 - 4. To do last things first

Status : Answered
Chosen Option : 1

Comprehension:

In the following passage some words have been deleted. Fill in the blanks with the help of the alternatives given. Select the most appropriate option for each blank.

There lived an old couple whose only pet was a little dog. Having no children, they loved it as though it (1)_____ a baby. The old dame made it a cushion (2)_____ blue crepe, and at mealtime Muko—for that was its name—would sit on it as (3)_____ as any cat. The kind people (4)_____ the pet with tidbits of fish with their own chopsticks, and all the boiled rice (5)_____ wanted.

SubQuestion No : 19

Q.19 Select the most appropriate option to fill in blank No.1.

- Ans
- 1. are
 - 2. like
 - 3. is
 - 4. were

Question ID : 2390872479
Status : Answered
Chosen Option : 4

Comprehension:

In the following passage some words have been deleted. Fill in the blanks with the help of the alternatives given. Select the most appropriate option for each blank.

There lived an old couple whose only pet was a little dog. Having no children, they loved it as though it (1)_____ a baby. The old dame made it a cushion (2)_____ blue crepe, and at mealtime Muko—for that was its name—would sit on it as (3)_____ as any cat. The kind people (4)_____ the pet with tidbits of fish with their own chopsticks, and all the boiled rice (5)_____ wanted.

SubQuestion No : 20

Q.20 Select the most appropriate option to fill in blank No.2

- Ans
- 1. of
 - 2. on
 - 3. by
 - 4. at

Question ID : 2390872480
Status : Answered
Chosen Option : 1

Comprehension:

In the following passage some words have been deleted. Fill in the blanks with the help of the alternatives given. Select the most appropriate option for each blank.

There lived an old couple whose only pet was a little dog. Having no children, they loved it as though it (1)_____ a baby. The old dame made it a cushion (2)_____ blue crepe, and at mealtime Muko—for that was its name—would sit on it as (3)_____ as any cat. The kind people (4)_____ the pet with tidbits of fish with their own chopsticks, and all the boiled rice (5)_____ wanted.

SubQuestion No : 21

Q.21 Select the most appropriate option to fill in blank No.3

- Ans
- 1. comfortably
 - 2. strongly
 - 3. securely
 - 4. compactly

Question ID : 2390872481
Status : Answered

Comprehension:

In the following passage some words have been deleted. Fill in the blanks with the help of the alternatives given. Select the most appropriate option for each blank.

There lived an old couple whose only pet was a little dog. Having no children, they loved it as though it (1)_____ a baby. The old dame made it a cushion (2)_____ blue crepe, and at mealtime Muko—for that was its name—would sit on it as (3)_____ as any cat. The kind people (4)_____ the pet with tidbits of fish with their own chopsticks, and all the boiled rice (5)_____ wanted.

SubQuestion No : 22

Q.22 Select the most appropriate option to fill in blank No.4

- Ans
- 1. feeds
 - 2. feed
 - 3. feeding
 - 4. fed

Question ID : 2390872482

Status : Answered

Chosen Option : 1

Comprehension:

In the following passage some words have been deleted. Fill in the blanks with the help of the alternatives given. Select the most appropriate option for each blank.

There lived an old couple whose only pet was a little dog. Having no children, they loved it as though it (1)_____ a baby. The old dame made it a cushion (2)_____ blue crepe, and at mealtime Muko—for that was its name—would sit on it as (3)_____ as any cat. The kind people (4)_____ the pet with tidbits of fish with their own chopsticks, and all the boiled rice (5)_____ wanted.

SubQuestion No : 23

Q.23 Select the most appropriate option to fill in blank No.5

- Ans
- 1. it
 - 2. one
 - 3. he
 - 4. she

Question ID : 2390872483

Status : Answered

Chosen Option : 1

Q.24 Select the most appropriate antonym of the word.

Better

- Ans
- 1. Good
 - 2. Worst
 - 3. Bad
 - 4. Worse

Question ID : 2390872488

Status : Answered

Chosen Option : 4

Q.25 Select the most appropriate word for the given group of words.

A sentimental longing or wistful affection for a period in the past

- Ans
- 1. Paradise
 - 2. Harmony
 - 3. Recollection

4. Nostalgia

Question ID : 2390872493
Status : Answered
Chosen Option : 2

Section : General Intelligence & Reasoning

Q.1 Read the given statement and conclusions carefully and decide which of the conclusions logically follow(s) from the statement.

Statement:

Road offers the fastest connectivity between Agra and Delhi.

Conclusions:

I. There is no rail connectivity between Agra and Delhi.

II. There is no air connectivity between Agra and Delhi.

- Ans
- 1. Only conclusion I follows.
 - 2. Neither conclusion I nor conclusion II follows.
 - 3. Either conclusion I or conclusion II follows.
 - 4. Only conclusion II follows.

Question ID : 2390872585
Status : Answered
Chosen Option : 2

Q.2 Select the option that is related to the third term in the same way as the second term is related to the first term.

Jasmine : White :: Sunflower : ?

- Ans
- 1. Violet
 - 2. Pink
 - 3. Yellow
 - 4. Indigo

Question ID : 2390872575
Status : Answered
Chosen Option : 3

Q.3 Four words have been given out of which three are alike in some manner, while one is different. Choose the odd one.

- Ans
- 1. Cow
 - 2. Donkey
 - 3. Deer
 - 4. Sheep

Question ID : 2390872574
Status : Answered
Chosen Option : 3

Q.4 Six people have different heights. U is the tallest one. P is taller than R, who is shorter than S. Q is shorter than R, but taller than T. Who is shortest one?

- Ans
- 1. T
 - 2. P
 - 3. S
 - 4. Q

Question ID : 2390872583
Status : Answered

Q.5 In a certain code, 'MIGHTY' is written as 'BJFISN'. How is 'BUILDER' written in that code?

- Ans
- 1. IVHMCIFY
 - 2. YUIMCFI
 - 3. YFCMHVI
 - 4. IHVMGFY

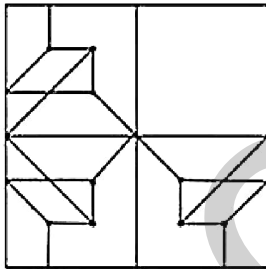
Question ID : 2390872577
 Status : Not Answered
 Chosen Option : --

Q.6 Satish is 9 ranks ahead of Ajay in the class of 39 students. If Ajay's rank is 15th from the last, then what is Satish's rank from the start?

- Ans
- 1. 14th
 - 2. 24th
 - 3. 18th
 - 4. 16th

Question ID : 2390872582
 Status : Answered
 Chosen Option : 4

Q.7 Which answer figure will complete the pattern in the question figure?



(Rotation NOT allowed)

- Ans
- 1.
 - 2.
 - 3.
 - 4.

Status : Not Answered
Chosen Option : --

Q.8 If A stands for '+', B stands for '-', C stands for 'x', what would be the value of the given equation?

(10 C 4) A (4 C 4) B 6 = ?

- Ans
- 1. 56
 - 2. 50
 - 3. 46
 - 4. 60

Question ID : 2390872591
Status : Answered
Chosen Option : 2

Q.9 The statements below are followed by two conclusions labelled I and II. Assuming that the information in the statements is true, even if it appears to be at variance with generally established facts, decide which conclusion(s) logically and definitely follow(s) from the information given in the statements.

Statements:

- I. Some dawns are nights.
- II. No night is a noon.
- III. No dawn is a dusk.

Conclusions:

- I. Some dusks are nights.
- II. Some noons are dawns.

- Ans
- 1. Either conclusion I or II follows.
 - 2. Only conclusion II follows.
 - 3. Only conclusion I follows.
 - 4. Neither I nor II follows.

Question ID : 2390872584
Status : Answered
Chosen Option : 4

Q.10 Select the option that is related to the third Letter Cluster in the same way as the second Letter Cluster is related to the first Letter Cluster.

BDHP : CFJT :: PHDB : ?

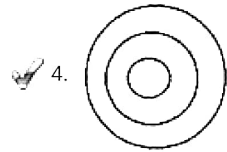
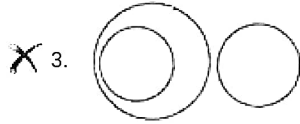
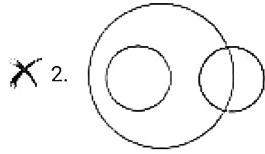
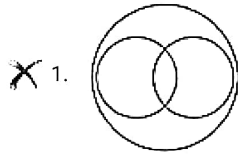
- Ans
- 1. HWSH
 - 2. QJFF
 - 3. BSWN
 - 4. HSWH

Question ID : 2390872576
Status : Answered
Chosen Option : 2

Q.11 Select the Venn diagram that best represents the given set of classes.

Continent, Country, State

Ans

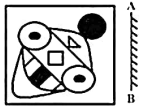


Question ID : 2390872597

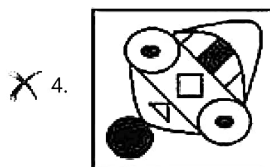
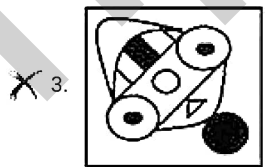
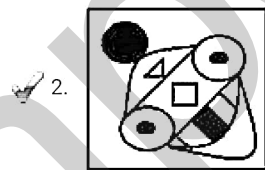
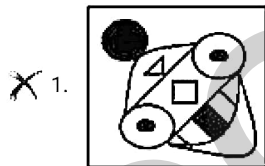
Status : Answered

Chosen Option : 2

Q.12 If a mirror is placed on the line AB, then which of the answer figures is the right image of the given figure?



Ans



Question ID : 2390872595

Status : Answered

Chosen Option : 4

Q.13 Select the correct option that will fill in the blank and complete the series.

- Ans
- 1. 4
 - 2. 12
 - 3. 3
 - 4. 6

Question ID : 2390872586
Status : Answered
Chosen Option : 2

Q.14 In a certain code, 'GRAPH' is written as 'JUZSK'. How is 'CARE' written in that code?

- Ans
- 1. FZUD
 - 2. FZUU
 - 3. FZTO
 - 4. FZZD

Question ID : 2390872578
Status : Not Answered
Chosen Option : --

Q.15 Select the correct combination of mathematical signs to replace * signs and to balance the given equation:

$$28 * 4 * 9 * 16$$

- Ans
- 1. - x +
 - 2. + ÷ =
 - 3. - = x
 - 4. ÷ + =

Question ID : 2390872590
Status : Answered
Chosen Option : 4

Q.16 If J = 10 and JAM = 130, then JAR = ?

- Ans
- 1. 150
 - 2. 170
 - 3. 140
 - 4. 180

Question ID : 2390872579
Status : Answered
Chosen Option : 4

Q.17 In the following question, select the number which can be placed at the sign of question mark (?) from the given alternatives.

67	39	28
51	?	14
75	28	47

- Ans
- 1. 13
 - 2. 41
 - 3. 26
 - 4. 37

Question ID : 2390872589
Status : Answered
Chosen Option : 4

Q.18 Find the wrong term in the given number series:

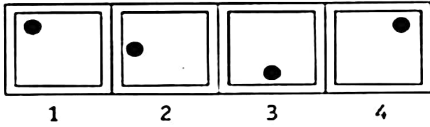
34, 32, 35, 33, 36, 37

- Ans
- 1. 32
 - 2. 33
 - 3. 34
 - 4. 37

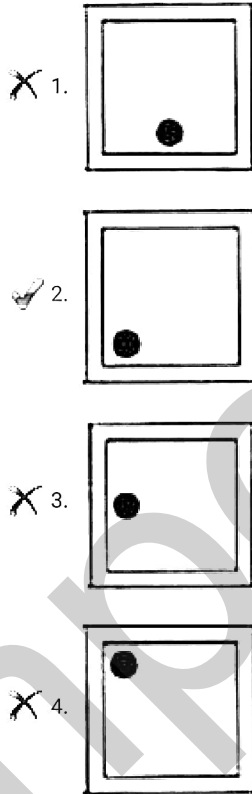
Question ID : 2390872587
Status : Answered
Chosen Option : 4

Q.19 In the following question, select the figure which can be placed at the sign of question mark (?) from the given alternatives.

Question Figure



Ans



Question ID : 2390872592
Status : Not Answered
Chosen Option : --

Q.20 If A = 1, B = 3, C = 5 and similarly Z = 51, then find the code for PULSE?

- Ans
- 1. 314213279
 - 2. 323412379
 - 3. 314123379
 - 4. 342231279

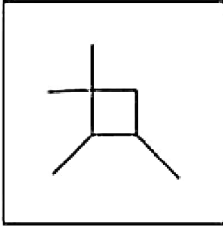
Question ID : 2390872580
Status : Not Answered
Chosen Option : --

Q.21 From the given answer figures, select the one in which the question figure is hidden/embedded.

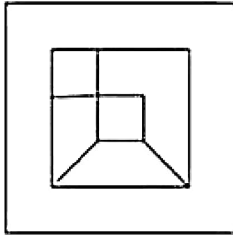


Ans

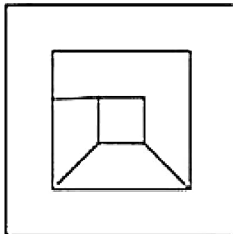
1.



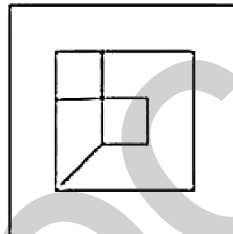
2.



3.



4.

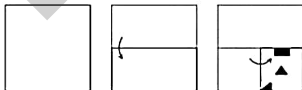


Question ID : 2390872594

Status : Not Answered

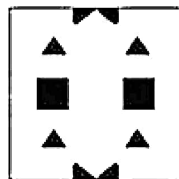
Chosen Option : --

Q.22 A piece of paper is folded and punched as shown below in the question figures, indicate how it will appear when opened?

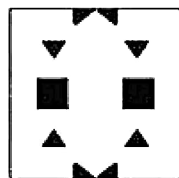


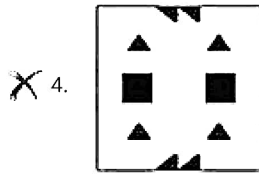
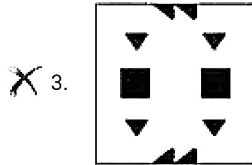
Ans

1.



2.





Question ID : 2390872596

Status : Not Answered

Chosen Option : --

Q.23 M, N, P, R, T, W, F and H are sitting around a circle at the centre, P is third to the left of M and second to the right of T. N is second to the right of P. R is second to the right of W who is second to the right of M. F is not an immediate neighbour of P.

Who is to the immediate right of P?

- Ans
- 1. W
 - 2. R
 - 3. F
 - 4. H

Question ID : 2390872581

Status : Answered

Chosen Option : 4

Q.24 Select the option that is related to the third term in the same way as the second term is related to the first term.

BUCKET : DSEIGR :: BONUS : ?

- Ans
- 1. DPMSU
 - 2. DSPUM
 - 3. DMPSU
 - 4. DMSPU

Question ID : 2390872573

Status : Answered

Chosen Option : 3

Q.25 Select the option that is related to the third number in the same way as the second number is related to the first number.

735 : 612 :: 476 : ?

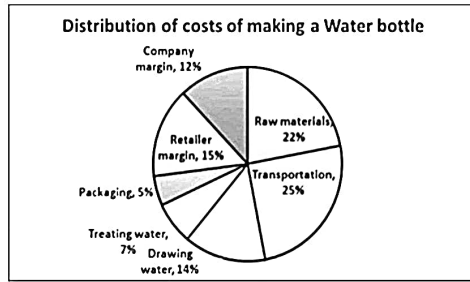
- Ans
- 1. 353
 - 2. 432
 - 3. 343
 - 4. 336

Question ID : 2390872588

Status : Answered

Chosen Option : 1

The Pie chart given below presents the distribution of costs of making a water bottle by a company. If the company earns 20% on cost per bottle and the cost of packaging one bottle is ₹0.50, then what is the selling price of one bottle?



- Ans
- 1. ₹12.50
 - 2. ₹12
 - 3. ₹15
 - 4. ₹10

Question ID : 2390872444
Status : Answered
Chosen Option : 2

Q.2 A temple has five bells which ring at the intervals of 12, 15, 16, 20 and 25 minutes respectively. If they ring together at midnight, then at what time next will they ring together?

- Ans
- 1. 7:00 P.M.
 - 2. 7:30 P.M.
 - 3. 8:00 P.M.
 - 4. 8:30 P.M.

Question ID : 2390872421
Status : Answered
Chosen Option : 3

Q.3 A vegetable seller bought 10 dozens of potatoes for ₹120, another 5 dozens for ₹50 and another 5 dozens for ₹30. He sold the potatoes for ₹9 a dozen. How much discount did he overall offer?

- Ans
- 1. 11.11%
 - 2. 10%
 - 3. 7.5%
 - 4. 5%

Question ID : 2390872426
Status : Answered
Chosen Option : 1

Q.4 What is the value of:

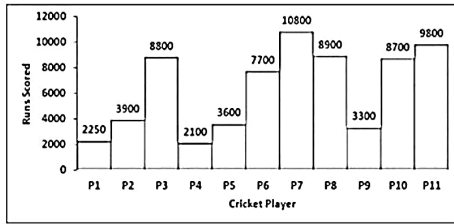
$$(1 \times 2 + 3 \times 4 + 5 \times 6 + 7 \times 8 - 9 \times 10) \div 2 \text{ of } 5?$$

- Ans
- 1. 1
 - 2. 4
 - 3. 3
 - 4. 2

Question ID : 2390872422
Status : Answered
Chosen Option : 4

Q.5

The Bar graph given below presents the runs scored by eleven cricketers, named P1,P2,P3,P4, ... P11 in their respective careers which lasted for five years in each case. Which cricketer bridges the gap between the highest and the lowest scorers of runs?



- Ans
- 1. P8
 - 2. P3
 - 3. P6
 - 4. P10

Question ID : 2390872445
 Status : Answered
 Chosen Option : 4

Q.6 A cricket team has scored 156 runs in 30 overs. They need to score 275 in 50 overs. What is the average runs per over they need to score in the next 20 overs?

- Ans
- 1. 5.9
 - 2. 5.85
 - 3. 5.75
 - 4. 5.95

Question ID : 2390872424
 Status : Answered
 Chosen Option : 4

Q.7 Find the median of the given data:
 3, 2, 6, 4, 9, 7, 11, 5, 15

- Ans
- 1. 6
 - 2. 7
 - 3. 5
 - 4. 4

Question ID : 2390872427
 Status : Not Answered
 Chosen Option : --

Q.8 The simple interest on ₹ x for m years at a rate of $r\%$ is equal to the same on ₹ y for n years at the rate of $s\%$. then $\frac{x}{y}$ is equal to:

- Ans
- 1. $\frac{mr}{ns}$
 - 2. $\frac{ms}{nr}$
 - 3. $\frac{nr}{ms}$
 - 4. $\frac{ns}{mr}$

Question ID : 2390872434
 Status : Answered

Q.9 A rectangular park was redesigned and as a result of which its length increased by 50%. If the area of the park, remained unchanged, then by how much percentage had the breadth been reduced?

- Ans
- 1. 40.33
 - 2. 33.33
 - 3. 50
 - 4. 25

Question ID : 2390872441
Status : Not Answered
Chosen Option : --

Q.10 What is the volume of the sphere whose diameter is 42 cm?

(Take $\pi = \frac{22}{7}$)

- Ans
- 1. 38808 cm³
 - 2. 19404 cm³
 - 3. 58212 cm³
 - 4. 9702 cm³

Question ID : 2390872440
Status : Answered
Chosen Option : 2

Q.11 A spherical ball of diameter 35 cm rolls 20 times. How much is the distance (in m) covered by it?

(Take $\pi = \frac{22}{7}$)

- Ans
- 1. 22
 - 2. 44
 - 3. 20
 - 4. 35

Question ID : 2390872442
Status : Not Answered
Chosen Option : --

Q.12 A man on a tour travels first 360 km by train at 72 km/h, the next 160 km on a motor cycle at 12.80 km/h, and the last 200 km by on a bicycle at 16 km/h. Ignoring the buffer times between the different modes of travel, what is the average speed (in m/s) for his tour?

- Ans
- 1. 4.33
 - 2. 5.67
 - 3. 6.67
 - 4. 7.33

Question ID : 2390872438
Status : Answered
Chosen Option : 3

Q.13 What is the value of the square root of:

$[(100 \text{ of } 0.9 \times 0.8 - 7 \times 1.2 \div 0.2 + 5 \times 4 - 3 \times 2)] \div 10 + 1.85$?

- Ans
- 1. 6.25
 - 2. 2.5
 - 3. 12.25

X 4. 3.5

Question ID : 2390872423

Status : Not Answered

Chosen Option : --

Q.14 The Table given below presents the annual expenses (in thousands) on various heads made by a firm during 2006-2010. By how much percentage (correct up to two decimal places) is the average expenditure on purchases more than the average expenditure on rent?

Year	Particulars				
	Purchases	Wages	Rent	Interest	Delivery
2006	23500	35000	40000	16000	16000
2007	28500	24000	34000	14000	18000
2008	38500	30000	36000	22000	22000
2009	41000	36000	20000	18000	22000
2010	50000	40000	28000	16000	26000

- Ans
- X 1. 8.00
 - X 2. 14.23
 - X 3. 10.00
 - ✓ 4. 14.87

Question ID : 2390872443

Status : Answered

Chosen Option : 2

Q.15 An experienced carpenter can complete a woodwork in 8 days. A young carpenter can complete the same work in 12 days. Both work together for 3 days, and then the latter leaves. How many days will be taken by the former to complete the remaining work?

- Ans
- X 1. 4
 - X 2. 6
 - ✓ 3. 3
 - X 4. 2

Question ID : 2390872437

Status : Answered

Chosen Option : 3

Q.16 The ratio of boys and girls in a college was 4 : 5. New students got admitted and the number of boys went up by 50% and the number of girls went up by 60%. What is the new ratio of boys and girls in the college?

- Ans
- X 1. 2 : 3
 - X 2. 3 : 5
 - ✓ 3. 3 : 4
 - X 4. 5 : 8

Question ID : 2390872433

Status : Answered

Chosen Option : 4

Q.17 For every ₹5 worth of revenue, a retailer earns ₹1. If the cost of the goods was ₹4800, then how much did he earn?

- Ans
- ✓ 1. ₹1200
 - X 2. ₹600
 - X 3. ₹900
 - X 4. ₹1120

Question ID : 2390872429

Status : Answered

Chosen Option : 2

Q.18 The length and the breadth of a cuboid are increased by 10% each, whereas the height is reduced by 10%. By how much did the volume change?

- Ans
- 1. 8.9% increase
 - 2. 10% increase
 - 3. 8.9% decrease
 - 4. 10% decrease

Question ID : 2390872428
Status : Not Answered
Chosen Option : --

Q.19 X and Y together have ₹1300. If ₹10 less than three-fifth of the amount of X is equal to half of the amount of Y, then how much does X have?

- Ans
- 1. ₹650
 - 2. ₹550
 - 3. ₹700
 - 4. ₹600

Question ID : 2390872432
Status : Not Answered
Chosen Option : --

Q.20 What is the proportion equivalent to $\frac{X}{Y} : \frac{Y}{Z} : \frac{X}{Z}$, if $X : Y : Z = 4 : 7 : 9$?

- Ans
- 1. 36 : 49 : 32
 - 2. 36 : 49 : 28
 - 3. 36 : 51 : 28
 - 4. 16 : 21 : 14

Question ID : 2390872431
Status : Answered
Chosen Option : 2

Q.21 How much will a principal of ₹5000 invested on compound interest (compounded annually) amount to, in three years at a rate of 50% per annum?

- Ans
- 1. ₹17,275
 - 2. ₹16,875
 - 3. ₹16,375
 - 4. ₹11,250

Question ID : 2390872435
Status : Answered
Chosen Option : 3

Q.22 30 dozens of nuts were bought for ₹14400. If the nuts are sold in a packet of 5 for ₹250, then how much profit is earned?

- Ans
- 1. ₹4000
 - 2. ₹3600
 - 3. ₹3200
 - 4. ₹1440

Question ID : 2390872430
Status : Answered

Chosen Option : 2

Q.23 A man can row a boat in still water at a speed of 5 m/s. He covers a stretch of 200 m in a river downstream during high and low tides in 10 s and 25 s respectively. What is the ratio of the speed (in m/s) of the water flowing in the river during high and low tides?

- Ans
- 1. 3 : 2
 - 2. 5 : 3
 - 3. 4 : 3
 - 4. 5 : 1

Question ID : 2390872439
Status : Not Answered
Chosen Option : --

Q.24 A and B can do a piece of work alone in 15 and 30 days respectively. In how many days can they together complete the work?

- Ans
- 1. 10
 - 2. 8
 - 3. 12
 - 4. 9

Question ID : 2390872436
Status : Answered
Chosen Option : 4

Q.25 The average weight of a group of eight peoples increased by 2.5 kg when a person weighing 80 kg joined in place of one of the members of the group. The weight of the member replaced was:

- Ans
- 1. 70 kg
 - 2. 77.5 kg
 - 3. 60 kg
 - 4. 62.5 kg

Question ID : 2390872425
Status : Not Answered
Chosen Option : --

Section : General awareness

Q.1 Upper House of the Indian Parliament is also known as ____.

- Ans
- 1. Rajya Sabha
 - 2. Vidhan Sabha
 - 3. Vidhan Parishad
 - 4. Lok Sabha

Question ID : 2390872534
Status : Answered
Chosen Option : 1

Q.2 What is the peculiarity of the compound Yttrium Barium Copper Oxide (YBCO)?

- Ans
- 1. It is a highly radioactive material
 - 2. It is an almost 100% transparent material
 - 3. It has got very high malleability and ductility
 - 4. It is a high temperature superconductor

Status : Answered
Chosen Option : 3

Q.3 Peacock Island Temple is also known as _____.

- Ans
- 1. Kailashnath Temple
 - 2. Jagannath Temple
 - 3. Umananda Temple
 - 4. Tirupati Temple

Question ID : 2390872525
Status : Answered
Chosen Option : 3

Q.4 Where is Shore Temple located in India?

- Ans
- 1. Kanchipuram
 - 2. Chennai
 - 3. Sarnath
 - 4. Mahabalipuram

Question ID : 2390872523
Status : Answered
Chosen Option : 4

Q.5 Fine leg, Gully, and Midwicket are terms associated with which Sport?

- Ans
- 1. Cricket
 - 2. Football
 - 3. Hockey
 - 4. Volleyball

Question ID : 2390872526
Status : Answered
Chosen Option : 1

Q.6 Elections to Panchayats in a State are conducted by _____.

- Ans
- 1. Election Commission of India
 - 2. Gram Sabha
 - 3. State Election Commission
 - 4. Joint Public Service Commission

Question ID : 2390872535
Status : Answered
Chosen Option : 3

Q.7 Who was the first National Security Advisor of India?

- Ans
- 1. Manmohan Singh
 - 2. Prof. Rajinder Khanna
 - 3. Pankaj Singh
 - 4. Brajesh Mishra

Question ID : 2390872530
Status : Answered
Chosen Option : 2

Q.8 Which of the following

- Ans
- 1. Tennis Council
 - 2. International Tennis Council
 - 3. Tennis Federation
 - 4. International Tennis Federation

Question ID : 2390872527
Status : Answered
Chosen Option : 4

Q.9 Which amendment of the Constitution is called as the 'mini constitution of India' and was brought in during the national emergency in the year 1976?

- Ans
- 1. 54th Amendment
 - 2. 25th Amendment
 - 3. 24th Amendment
 - 4. 42nd Amendment

Question ID : 2390872536
Status : Answered
Chosen Option : 3

Q.10 In which year, first Gender Budget Statement appeared in the Union Budget of India?

- Ans
- 1. 2010-11
 - 2. 2001-02
 - 3. 2007-08
 - 4. 2005-06

Question ID : 2390872532
Status : Answered
Chosen Option : 1

Q.11 Wangala festival is celebrated in which of the following states of India?

- Ans
- 1. Kerala
 - 2. Bihar
 - 3. Tamil Nadu
 - 4. Meghalaya

Question ID : 2390872524
Status : Answered
Chosen Option : 3

Q.12 Which event led to the termination of Non-Cooperation - Khilafat Movement by Gandhiji?

- Ans
- 1. Passing of Rowlatt Act
 - 2. Death of Bal Gangadhar Tilak
 - 3. Jallianwala Bagh Massacre
 - 4. Chauri - Chaura Incident

Question ID : 2390872547
Status : Answered
Chosen Option : 1

Q.13 "The general theory of Employment, Interest and money" (1936) was written by ____.

- Ans
- 1. Dr. A.P.J. Abdul Kalam
 - 2. Adam Smith

- 3. John Maynard Keynes
- 4. Amartya sen

Question ID : 2390872528
Status : Answered
Chosen Option : 3

Q.14 Raja Ravi Varma, considered as one of the greatest painters of India, hailed from which of these states?

- Ans
- 1. Maharashtra
 - 2. West Bengal
 - 3. Kerala
 - 4. Karnataka

Question ID : 2390872545
Status : Answered
Chosen Option : 4

Q.15 Name the actor who got the best Lead Actor (Male) award in the British Academy Film Awards (BAFTA) in 2019.

- Ans
- 1. Steve Coogan
 - 2. Rami Malek
 - 3. Bradley Cooper
 - 4. Christian Bale

Question ID : 2390872529
Status : Answered
Chosen Option : 3

Q.16 Which metal was earlier called Wolfram?

- Ans
- 1. Molybdenum
 - 2. Radium
 - 3. Zinc
 - 4. Tungsten

Question ID : 2390872541
Status : Answered
Chosen Option : 4

Q.17 The split in Congress occurred in which of the following sessions?

- Ans
- 1. Lahore Session 1927
 - 2. Kanpur Session 1922
 - 3. Surat Session 1907
 - 4. Karachi Session 1934

Question ID : 2390872546
Status : Not Answered
Chosen Option : --

Q.18 Which of the following pairs represents a parasitic relationship?

- Ans
- 1. Ticks on Dog
 - 2. Remora Fish - Sharks
 - 3. Cattle Egrets - Livestock
 - 4. Algae - Coral

Question ID : 2390872539
Status : Answered
Chosen Option : 3

Q.19 Which of the following rivers does NOT drain into the sea?

- Ans
- 1. Banas
 - 2. Narmada
 - 3. Ganga
 - 4. Godavari

Question ID : 2390872543
Status : Answered
Chosen Option : 4

Q.20 Which Economic Survey was also called 'Pink Economic Survey' ?

- Ans
- 1. Economic Survey 2017-18
 - 2. Economic Survey 2018-19
 - 3. Economic Survey 2015-16
 - 4. Economic Survey 2016-17

Question ID : 2390872531
Status : Answered
Chosen Option : 3

Q.21 How many elements are there in the periodic table such that for every element name there is a single alphabet that symbolically represents it (for example, B-Boron, C-Carbon etc.)?

- Ans
- 1. 7
 - 2. 17
 - 3. 14
 - 4. 10

Question ID : 2390872538
Status : Answered
Chosen Option : 3

Q.22 What is Nominal Gross Domestic Product (GDP)?

- Ans
- 1. The Gross Domestic Product (GDP) that is calculated by taking a base year as a determinant.
 - 2. The Gross Domestic Product (GDP) that excludes all exports and imports in the calculation.
 - 3. The Gross Domestic Product (GDP) that is calculated at the current market price.
 - 4. The Gross Domestic Product (GDP) that is calculated in terms of crypto currency.

Question ID : 2390872533
Status : Answered
Chosen Option : 2

Q.23 What is the S.I. unit of Energy?

- Ans
- 1. Hertz
 - 2. Joule
 - 3. Newton
 - 4. Pascal

Question ID : 2390872540

Status : Answered
Chosen Option : 2

Q.24 Black soil is mostly found in which part of India?

- Ans 1. Peninsular Plateau
 2. Himalayas
 3. Desert
 4. Coastal Plains

Question ID : 2390872544
Status : Answered
Chosen Option : 1

Q.25 Southernmost point of the Peninsular Plateau is marked by which of the following hills?

- Ans 1. Anaconda
 2. Girnar
 3. Nilgiri
 4. Velikonda

Question ID : 2390872542
Status : Answered
Chosen Option : 3