

Section : General English

**Q.1 Select the most appropriate antonym of the word.**

**AFFLUENCE**

- Ans
- 1. Luxury
  - 2. Poverty
  - 3. Prosperity
  - 4. Richness

Question ID : 2390872940  
Status : Answered  
Chosen Option : 2

**Q.2 Select the most appropriate word for the given group of words.**

**A person who rides in horse races, especially as a profession**

- Ans
- 1. Jockey
  - 2. Champion
  - 3. Chauffer
  - 4. Cowboy

Question ID : 2390872944  
Status : Answered  
Chosen Option : 4

**Q.3 Select the correctly spelt word.**

- Ans
- 1. Fasinate
  - 2. Surrander
  - 3. Desperate
  - 4. Priviledge

Question ID : 2390872946  
Status : Answered  
Chosen Option : 3

**Q.4 Select the most appropriate word for the given group of words.**

**Policy of racial discrimination**

- Ans
- 1. Inequality
  - 2. Apartheid

3. Segregation

4. Supremacy

Question ID : 2390872945

Status : Answered

Chosen Option : 1

**Q.5 Select the most appropriate synonym of the given word.**

**DUBIOUS**

Ans  1. Certain

2. Definite

3. Sure

4. Doubtful

Question ID : 2390872939

Status : Answered

Chosen Option : 4

**Comprehension:**

In the following passage some words have been deleted. Fill in the blanks with the help of the alternatives given. Select the most appropriate option for each blank.

Venus is the planet closest to the Earth. It shines very (1)\_\_\_\_\_ in the night sky. The surface temperature (2)\_\_\_\_\_ Venus is about 400 degrees Celsius. The atmosphere (3)\_\_\_\_\_ very dense. Its surface cannot be observed directly (4)\_\_\_\_\_ the planet is permanently covered with a thick (5)\_\_\_\_\_ of clouds. Venus has active volcanoes and mountains higher than the Everest.

**SubQuestion No : 6**

**Q.6 Select the most appropriate option to fill in blank No.1.**

Ans  1. cheerfully

2. loudly

3. brightly

4. heavily

Question ID : 2390872931

Status : Answered

Chosen Option : 3

**Comprehension:**

In the following passage some words have been deleted. Fill in the blanks with the help of the alternatives given. Select the most appropriate option for each blank.

Venus is the planet closest to the Earth. It shines very (1)\_\_\_\_\_ in the night sky. The surface temperature (2)\_\_\_\_\_ Venus is about 400 degrees Celsius. The atmosphere (3)\_\_\_\_\_ very dense. Its surface cannot be observed directly (4)\_\_\_\_\_ the planet is permanently covered with a thick (5)\_\_\_\_\_ of clouds. Venus has active volcanoes and mountains higher than the Everest.

**SubQuestion No : 7**

**Q.7 Select the most appropriate option to fill in blank No.2.**

Ans  1. over

2. on

3. above

4. around

Question ID : 2390872932

Status : Answered

Chosen Option : 2

**Comprehension:**

In the following passage some words have been deleted. Fill in the blanks with the help of the alternatives given. Select the most appropriate option for each blank.

Venus is the planet closest to the Earth. It shines very (1)\_\_\_\_\_ in the night sky. The surface temperature (2)\_\_\_\_\_ Venus is about 400 degrees Celsius. The atmosphere (3)\_\_\_\_\_ very dense. Its surface cannot be observed directly (4)\_\_\_\_\_ the planet is permanently covered with a thick (5)\_\_\_\_\_ of clouds. Venus has active volcanoes and mountains higher than the Everest.

**SubQuestion No : 8**

**Q.8 Select the most appropriate option to fill in blank No.3.**

Ans

- 1. is
- 2. was
- 3. were
- 4. are

Question ID : 2390872933

Status : Answered

Chosen Option : 1

**Comprehension:**

In the following passage some words have been deleted. Fill in the blanks with the help of the alternatives given. Select the most appropriate option for each blank.

Venus is the planet closest to the Earth. It shines very (1)\_\_\_\_\_ in the night sky. The surface temperature (2)\_\_\_\_\_ Venus is about 400 degrees Celsius. The atmosphere (3)\_\_\_\_\_ very dense. Its surface cannot be observed directly (4)\_\_\_\_\_ the planet is permanently covered with a thick (5)\_\_\_\_\_ of clouds. Venus has active volcanoes and mountains higher than the Everest.

**SubQuestion No : 9**

**Q.9 Select the most appropriate option to fill in blank No.4.**

Ans

- 1. though
- 2. so
- 3. because
- 4. but

Question ID : 2390872934

Status : Answered

Chosen Option : 3

**Comprehension:**

In the following passage some words have been deleted. Fill in the blanks with the help of the alternatives given. Select the most appropriate option for each blank.

Venus is the planet closest to the Earth. It shines very (1)\_\_\_\_\_ in the night sky. The surface temperature (2)\_\_\_\_\_ Venus is about 400 degrees Celsius. The atmosphere (3)\_\_\_\_\_ very dense. Its surface cannot be observed directly (4)\_\_\_\_\_ the planet is permanently covered with a thick (5)\_\_\_\_\_ of clouds. Venus has active volcanoes and mountains higher than the Everest.

**SubQuestion No : 10**

**Q.10 Select the most appropriate option to fill in blank No.5.**

Ans

- 1. slab

- 2. folds
- 3. pads
- 4. layer

Question ID : 2390872935  
Status : Answered  
Chosen Option : 4

**Q.11** Select the most appropriate option to fill in the blank and make a grammatically correct sentence.

A babysitter is somebody who looks \_\_\_\_\_ other people's children.

- Ans
- 1. after
  - 2. for
  - 3. on
  - 4. over

Question ID : 2390872937  
Status : Answered  
Chosen Option : 1

**Q.12** Select the most appropriate word to fill in the blank and make a meaningful sentence.

She gave important evidence and I found her to be a sensible and \_\_\_\_\_ witness.

- Ans
- 1. unlikely
  - 2. credible
  - 3. conclusive
  - 4. imposing

Question ID : 2390872948  
Status : Answered  
Chosen Option : 2

**Q.13** Select the most appropriate word to fill in the blank and make a meaningful sentence.

The children \_\_\_\_\_ over the property of their father.

- Ans
- 1. confiscated
  - 2. quarrelled
  - 3. enjoyed
  - 4. approved

Question ID : 2390872949  
Status : Answered  
Chosen Option : 3

**Q.14** Identify the segment in the sentence which contains the grammatical error.

We have been staying at the hotel since the last ten days.

- Ans
- 1. last ten days
  - 2. staying at the hotel
  - 3. We have been

4. since the

Question ID : 2390872924  
Status : Answered  
Chosen Option : 4

**Q.15 Identify the segment in the sentence which contains the grammatical error.**

**A soyabean processing unit is going to set up soon in our village.**

- Ans
- 1. soon in our village
  - 2. to set up
  - 3. A soyabean processing unit
  - 4. is going

Question ID : 2390872926  
Status : Answered  
Chosen Option : 2

**Q.16 Select the most appropriate antonym of the word.**

**ILLICIT**

- Ans
- 1. Prohibited
  - 2. Illegal
  - 3. Lawful
  - 4. Illegible

Question ID : 2390872941  
Status : Answered  
Chosen Option : 3

**Q.17 Select the most appropriate option to substitute the underlined segment. If there is no need to substitute it, select No improvement**

**He is living in this house for the past fifteen years before he shifted abroad.**

- Ans
- 1. has been living
  - 2. No improvement
  - 3. had been living
  - 4. was lived

Question ID : 2390872928  
Status : Answered  
Chosen Option : 3

**Q.18 Select the most appropriate meaning of the given idiom.**

**Get a foot in the door**

- Ans
- 1. To be injured
  - 2. To block the path
  - 3. To be lucky
  - 4. To have a chance to do something

Status : Answered  
Chosen Option : 2

Q.19 Select the correctly spelt word.

- Ans
- 1. Tyeranny
  - 2. Tendency
  - 3. Twelfth
  - 4. Tommorrow

Question ID : 2390872947  
Status : Answered  
Chosen Option : 2

Q.20 Select the most appropriate option to fill in the blank and make a grammatically correct sentence.

The car-park was full, so we \_\_\_\_\_ to look for another place to park.

- Ans
- 1. has
  - 2. having
  - 3. had
  - 4. have

Question ID : 2390872936  
Status : Answered  
Chosen Option : 4

Q.21 Select the most appropriate option to substitute the underlined segment. If there is no need to substitute it, select No improvement

She told the children not to stop the work.

- Ans
- 1. not stop
  - 2. don't stop
  - 3. not stopping
  - 4. No improvement

Question ID : 2390872927  
Status : Answered  
Chosen Option : 2

Q.22 Select the most appropriate meaning of the given idiom.

By and large

- Ans
- 1. In general
  - 2. All inclusive
  - 3. In short
  - 4. By choice

Question ID : 2390872942  
Status : Answered  
Chosen Option : 1

Q.23 Select the most appro

**BENEFICIAL**

- Ans  1. Adverse  
 2. Advantageous  
 3. Worthless  
 4. Harmful

Question ID : 2390872938  
Status : Answered  
Chosen Option : 2

**Q.24 Identify the segment in the sentence which contains the grammatical error.**

Each of these players have been warned not to repeat the silly mistakes.

- Ans  1. the silly mistakes  
 2. have been  
 3. warned not to repeat  
 4. Each of these players

Question ID : 2390872925  
Status : Answered  
Chosen Option : 2

**Q.25 Select the most appropriate option to substitute the underlined segment. If there is no need to substitute it, select No improvement**

The child smile on her mother.

- Ans  1. smiled at  
 2. is smiling over  
 3. No improvement  
 4. smiles on

Question ID : 2390872929  
Status : Answered  
Chosen Option : 1

Section : General Intelligence & Reasoning

**Q.1 Select the option that is related to the fourth term in the same way as the first term is related to the second term.**

Kiln : Bricks :: ? : Bread

- Ans  1. Bakery  
 2. Dairy  
 3. Distillery  
 4. Shop

Question ID : 2390873155  
Status : Answered  
Chosen Option : 1

**Q.2 Five persons are sitting in a row facing north  
C is fourth to the left of**

B is sitting exactly at the middle of the row. N is sitting immediate left of M. V is another person. What is the position of N with respect to V?

- Ans
- 1. Second to the right
  - 2. Immediate right
  - 3. Second to the left
  - 4. Immediate left

Question ID : 2390873162  
Status : Answered  
Chosen Option : 1

Q.3 Select the option that is related to the third term in the same way as the second term is related to the first term.

6 : 2 :: 8 : ?

- Ans
- 1. 3
  - 2. 7
  - 3. 5
  - 4. 1

Question ID : 2390873169  
Status : Answered  
Chosen Option : 1

Q.4 The statement below is followed by two conclusions labelled I and II. Decide which conclusion(s) logically and definitely follow(s) from the information given in the statement only.

Statement:

Rain water is the purest form of water.

Conclusions:

- I. Rain water contains impurities.
- II. Rain water will contain the least amount of impurities.

- Ans
- 1. Both conclusion I and conclusion II follow.
  - 2. Either conclusion I or conclusion II follows.
  - 3. Only Conclusion I follows.
  - 4. Only Conclusions II follows.

Question ID : 2390873166  
Status : Answered  
Chosen Option : 4

Q.5 Which two numbers need to be interchanged to make the given equation correct?

$$128 \div 4 - 3 \times 12 + 6 = 26$$

- Ans
- 1. 3, 12
  - 2. 4, 12
  - 3. 3, 6
  - 4. 12, 6

Question ID : 2390873171  
Status : Answered



Q.6 If 'FEVER' is coded as '98283' and 'REVOLVE' is coded as '3825128', then what is 'ROVER' coded as?

- Ans
- 1. 35283
  - 2. 35832
  - 3. 32538
  - 4. 38253

Question ID : 2390873160  
Status : Answered  
Chosen Option : 1

Q.7 The statements below are followed by two conclusions labelled I and II. Assuming that the information in the statements is true, even if it appears to be at variance with generally established facts, decide which conclusion(s) logically and definitely follow(s) from the information given in the statements.

Statements:

- I. Some bats are cats.
- II. All cats are darts.

Conclusions:

- I. All bats are darts.
- II. Some bats are darts.

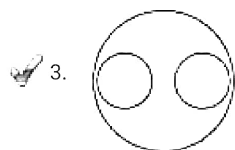
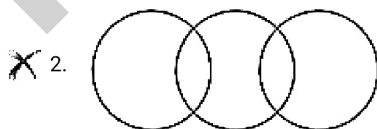
- Ans
- 1. Neither Conclusion I nor II follows.
  - 2. Only conclusion I follows.
  - 3. Only conclusion II follows.
  - 4. Either conclusion I or II follows.

Question ID : 2390873165  
Status : Answered  
Chosen Option : 3

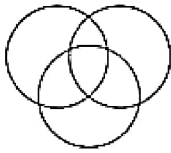
Q.8 Select the Venn diagram that best represents the given set of classes.

Birds, insects, animals

Ans



X 4.



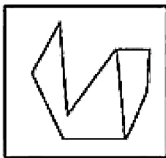
Question ID : 2390873178  
Status : Answered  
Chosen Option : 1

Q.9 Select the option in which the given figure is embedded. (Rotation is not allowed)

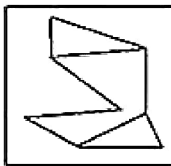


Ans

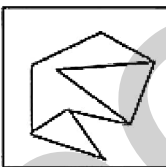
X 1.



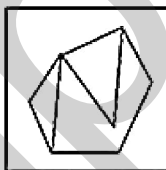
X 2.



X 3.




4.




Question ID : 2390873175  
Status : Answered  
Chosen Option : 4

Q.10 Select the correct option to complete the following pattern.



Ans



Question ID : 2390873174  
Status : Answered  
Chosen Option : 2

Q.11 Select the option that is related to the third word in the same way as the second word is related to the first word.

Tailor : Sewing Machine :: Farmer : ?

- Ans
- 1. Plough
  - 2. Crops
  - 3. Seeds
  - 4. Farm

Question ID : 2390873156  
Status : Answered  
Chosen Option : 1

Q.12 Select the term that will come next in the following series.

BY, CX, EV, HS, \_\_\_\_\_

- Ans
- 1. JQ
  - 2. PK
  - 3. LO
  - 4. MN

Question ID : 2390873154  
Status : Answered  
Chosen Option : 3

Q.13 Select the correct option that will complete the series.

26, 51, 176, 801, ?

- Ans
- 1. 3926
  - 2. 3625

3. 2441

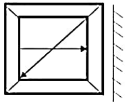
4. 2854

Question ID : 2390873167

Status : Answered

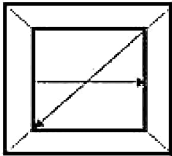
Chosen Option : 1

Q.14 Choose the option that most closely resembles the mirror image of the given figure when mirror is placed at right side.

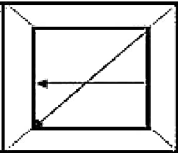


Ans

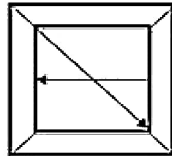
1.



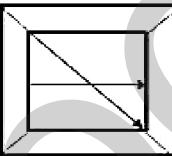
2.



3.



4.



Question ID : 2390873176

Status : Answered

Chosen Option : 3

Q.15 If 'TAMIL' is written as 'WZPHO' In certain code then how 'MATHS' would be written in the same code?

Ans

1. LBSHV

2. PZWGV

3. PZHWV

4. ZWGPV

Question ID : 2390873158

Status : Answered

Chosen Option : 2

Q.16 Which two signs need to be interchanged to make the given equation correct?

$$36 \div 2 + 15 \times 5 - 18 = 57$$

Ans

1. + -

2. x, -

3. ÷, x

4. ÷, +

Question ID : 2390873172

Status : Answered

Chosen Option : 3

Q.17 Select the option that is related to the third term in the same way as the second term is related to the first term.

GP : NH :: ET : ?

Ans  1. JK

2. HJ

3. JJ

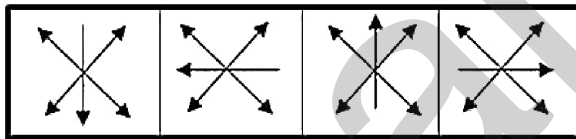
4. JL

Question ID : 2390873157

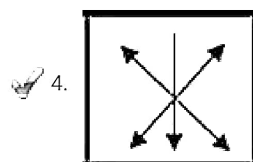
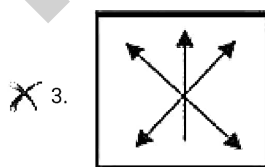
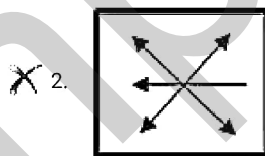
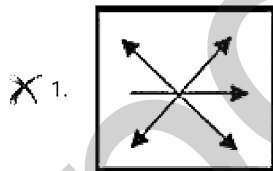
Status : Answered

Chosen Option : 3

Q.18 Which of the following answer figure completes the series of the question figure?



Ans



Status : Answered  
Chosen Option : 4

**Q.19** In the following question, select the number which can be placed at the sign of question mark (?) from the given alternatives.

37 142 87

5 27 18

27 88 ?

- Ans
- 1. 71
  - 2. 45
  - 3. 39
  - 4. 51

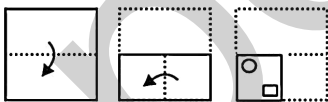
Question ID : 2390873170  
Status : Answered  
Chosen Option : 4

**Q.20** In a class of 35 children, Aarav's rank is sixth from the top. Ronnie is seven ranks below Aarav. What is Ronnie's rank from the bottom?

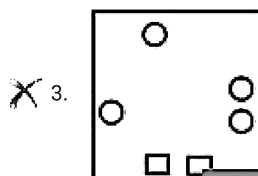
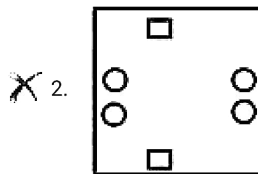
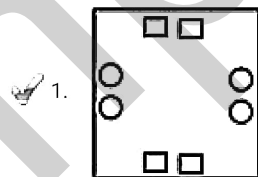
- Ans
- 1. 30th
  - 2. 23rd
  - 3. 20th
  - 4. 22nd

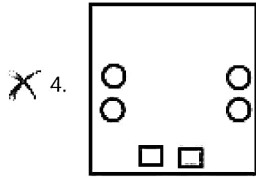
Question ID : 2390873164  
Status : Answered  
Chosen Option : 2

**Q.21** A piece of paper is folded and cut as shown below in the question figures, how it will appear when opened.



Ans





Question ID : 2390873177  
Status : Answered  
Chosen Option : 1

Q.22 If 'LANE' is coded as 'KZOF', then 'MASK' is coded as \_\_\_\_\_.

- Ans
- X 1. NZTM
  - X 2. LZSK
  - ✓ 3. LZTL
  - X 4. NBTL

Question ID : 2390873159  
Status : Answered  
Chosen Option : 3

Q.23 Six boys are sitting around a circular table facing centre.  
M is second to the right of K who is sitting opposite to F.  
L and O are sitting opposite to each other.  
Neither L nor R is sitting near F.  
Who is sitting opposite to R?

- Ans
- X 1. F
  - X 2. K
  - X 3. O
  - ✓ 4. M

Question ID : 2390873163  
Status : Answered  
Chosen Option : 4

Q.24 Find the wrong term in the given series:

80, 70, 55, 35, 10, -20, -50

- Ans
- X 1. 70
  - X 2. -20
  - X 3. 10
  - ✓ 4. -50

Question ID : 2390873168  
Status : Answered  
Chosen Option : 4

Q.25 If HA = 8 and CAT = 60 then HEN = ?

- Ans
- X 1. 542
  - ✓ 2. 560
  - X 3. 524

X 4. 564

Question ID : 2390873161  
Status : Answered  
Chosen Option : 2

Section : Numerical Aptitude

Q.1 Two numbers are respectively 80% and 35% greater than a third number. What is the ratio of the two numbers?

- Ans
- 1. 4 : 3
  - 2. 17 : 6
  - 3. 8 : 5
  - 4. 8 : 3

Question ID : 2390872634  
Status : Answered  
Chosen Option : 1

Q.2 A boat travels upstream at the speed of 20 km/h and downstream at the speed of 30 km/h. What is the speed of the boat in still water?

- Ans
- 1. 26 km/h
  - 2. 25 km/h
  - 3. 24 km/h
  - 4. 22.50 km/h

Question ID : 2390872641  
Status : Answered  
Chosen Option : 2

Q.3 If the height of a right circular cylinder is 10 cm and the curved surface area is  $440 \text{ cm}^2$ , then what is its radius?

- Ans
- 1. 10.5 cm
  - 2. 7 cm
  - 3. 14 cm
  - 4. 17.5 cm

Question ID : 2390872642  
Status : Answered  
Chosen Option : 2

Q.4 The volume of a sphere and a right circular cylinder are the same. The radii of the sphere and the cylinder are 21 cm and 14 cm respectively. How much is the height of the cylinder?

- Ans
- 1. 63 cm
  - 2. 56 cm
  - 3. 49 cm
  - 4. 42 cm

Question ID : 2390872644  
Status : Answered  
Chosen Option : 1



**Q.5** A man bought a shirt for ₹1000 and a pair of trousers for ₹2000. The discount offered on the shirt and the trousers were 20% and 50% respectively. What was the overall discount offered?

- Ans**
- 1. 25%
  - 2. 40%
  - 3. 45%
  - 4. 60%

Question ID : 2390872628  
Status : Answered  
Chosen Option : 2

**Q.6** A train travels 50% faster than a car. Both start at the same point and meet after travelling 360 km. In between, the train stopped for a couple of hours at a station due to engine failure. What is the speed of the train?

- Ans**
- 1. 72 km/h
  - 2. 90 km/h
  - 3. 60 km/h
  - 4. 80 km/h

Question ID : 2390872640  
Status : Not Attempted and Marked For Review  
Chosen Option : --

**Q.7** A number is divided into three parts such that thrice the first part, six times the second part and eight times the third part are equal. If the first part is ₹1600, what is the third part?

- Ans**
- 1. ₹900
  - 2. ₹750
  - 3. ₹450
  - 4. ₹600

Question ID : 2390872633  
Status : Answered  
Chosen Option : 4

**Q.8** An art exhibition was held during a November month. The average number of visitors on weekdays and weekends were 750 and 450 respectively. What was the average number of visitors for the month if the first day of the month was a Monday?

- Ans**
- 1. 520
  - 2. 530
  - 3. 510
  - 4. 540

Question ID : 2390872627  
Status : Answered  
Chosen Option : 3

**Q.9** A principal amount increases by 50% in five years at simple interest. At the same rate of interest, what will be the compound interest on ₹20000 for three years?

- Ans**
- 1. ₹2880
  - 2. ₹5760
  - 3. ₹6620

4. ₹3310

Question ID : 2390872637

Status : Answered

Chosen Option : 3

**Q.10** Two bikes cost ₹40000 each. One of them is sold for ₹48000. At what price should the other be sold to get an overall profit of 25%?

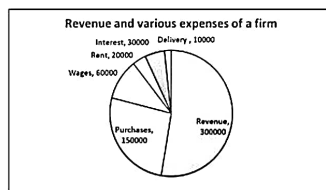
- Ans
- 1. ₹48,000
  - 2. ₹52,000
  - 3. ₹50,000
  - 4. ₹60,000

Question ID : 2390872632

Status : Answered

Chosen Option : 1

**Q.11** The Pie chart given below presents the projected revenue and various expenses for a firm for the previous financial year. If the profit margin for the upcoming financial year is projected at 20%, then by how much percentage will the margin change according to the projections?



- Ans
- 1. 50% decrease
  - 2. 50% increase
  - 3. 100% increase
  - 4. 75% increase

Question ID : 2390872645

Status : Not Attempted and Marked For Review

Chosen Option : --

**Q.12** 30 dozen of nuts were bought for ₹14400 and another 32 packets of nuts (20 nuts in each packet) were bought for ₹57600. If the nuts are mixed and then sold in a packet of five for ₹432, then how much is the profit percentage?

- Ans
- 1. 25%
  - 2. 15%
  - 3. 20%
  - 4. 10%

Question ID : 2390872631

Status : Answered

Chosen Option : 3

**Q.13** An examination was held on five subjects where the maximum marks for each subject was 100. X scored 82, 97, 88 and 91 in four subjects. If his aggregate was 90%, how much did he score in the fifth subject?

- Ans
- 1. 92
  - 2. 89

3. 94

4. 79

Question ID : 2390872630

Status : Answered

Chosen Option : 1

Q.14 The total surface area of a cube is  $864 \text{ cm}^2$ . What is its volume (in  $\text{cm}^3$ )?

Ans  1. 216

2. 729

3. 1728

4. 512

Question ID : 2390872643

Status : Answered

Chosen Option : 3

Q.15 What is the mean of the first 20 whole numbers?

Ans  1. 9

2. 10

3. 9.5

4. 10.5

Question ID : 2390872629

Status : Answered

Chosen Option : 3

Q.16 What is the value of:

$$(0.4 \text{ of } 50 \times 6 \div 8) \div (12 \times 10 \div 16) + 5 \times 0.2 - 0.01 \times 10^2 ?$$

Ans  1. 3

2. 2

3. 1

4. 4

Question ID : 2390872625

Status : Answered

Chosen Option : 2

Q.17 The difference between two numbers is 15 and their HCF and LCM are 3 and 108 respectively. Find the difference between their reciprocals.

Ans  1.  $\frac{5}{81}$

2.  $\frac{5}{54}$

3.  $\frac{5}{112}$

4.  $\frac{5}{108}$

Question ID : 2390872623

Status : Answered

Chosen Option : 4

**Q.18** The Table given below presents the profit (in multiple of thousand rupees) of a firm for the years 2010-2018. By how much percentage is the average profit of years 2015-2017 greater than the profit of 2012?

Years	Profit of a firm
2010	7500
2011	7000
2012	8000
2013	8500
2014	9500
2015	11000
2016	8000
2017	11000
2018	11500

Ans

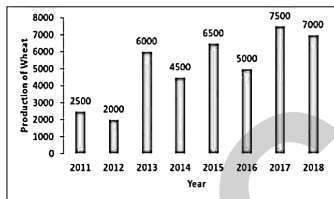
1. 50  
 2. 12.5  
 3. 25  
 4. 33.33

Question ID : 2390872647

Status : Answered

Chosen Option : 3

**Q.19** The Bar graph given below presents the production of wheat (in tonnes) by a big farm during the years 2011-2018. In how many of the given years was the production of wheat greater than the average production of the period?



Ans

1. 4  
 2. 3  
 3. 2  
 4. 5

Question ID : 2390872646

Status : Answered

Chosen Option : 1

**Q.20** The sum and the difference of two numbers are 27 and 3 respectively. What is the ratio of the two numbers?

Ans

1. 4 : 7  
 2. 2 : 1  
 3. 5 : 3  
 4. 5 : 4

Question ID : 2390872635

Status : Answered

Chosen Option : 4

**Q.21** A bike owner buys petrol at ₹64, ₹50 and ₹320 per litre for three consecutive years. What is the average cost per litre of petrol if he spends ₹32000 e

- Ans
- 1. ₹120
  - 2. ₹108
  - 3. ₹84
  - 4. ₹96

Question ID : 2390872626  
Status : Answered  
Chosen Option : 4

Q.22 A, B and C can do a work in 16 days, while A and B can do the work in 40 days. In how many days can C do the work alone?

- Ans
- 1. 26.67
  - 2. 30
  - 3. 25
  - 4. 23.33

Question ID : 2390872639  
Status : Answered  
Chosen Option : 1

Q.23 A can do a task alone in 96 days, B is thrice as efficient as A. A worked for 24 days alone and then B joined him. In how many days will they complete the remaining task together?

- Ans
- 1. 21
  - 2. 14
  - 3. 16
  - 4. 18

Question ID : 2390872638  
Status : Answered  
Chosen Option : 4

Q.24 The simple interest on a sum for five years at 7% per annum is ₹700. What is the principal amount?

- Ans
- 1. ₹2100
  - 2. ₹1800
  - 3. ₹2000
  - 4. ₹1600

Question ID : 2390872636  
Status : Answered  
Chosen Option : 3

Q.25 What is the value of:

$$(2 \text{ of } 14 \div 7 \times 3) + (44 \div 11 \times 8) - (12 \times 9 \div 3)?$$

- Ans
- 1. 7
  - 2. 6
  - 3. 9
  - 4. 8

Question ID : 2390872624  
Status : Answered  
Chosen Option : 4

Section : General awareness

**Q.1 Which of the following Monument-Location pair is correct?**

- Ans
- 1. Taj Mahal - Meerut
  - 2. Red Fort - Jaipur
  - 3. Golconda Fort - Hyderabad
  - 4. Alai Darwaja - Thanjavur

Question ID : 2390872775  
Status : Answered  
Chosen Option : 3

**Q.2 The famous collection of animal fables written by Vishnu Sharma is known as \_\_\_\_\_.**

- Ans
- 1. Kathasarit Sagar
  - 2. Panchatantra
  - 3. Hitopadesha
  - 4. Jataka

Question ID : 2390872773  
Status : Answered  
Chosen Option : 2

**Q.3 Which Film won the Oscar for Best Picture in 2019?**

- Ans
- 1. Green Book
  - 2. Roma
  - 3. Bohemian Rhapsody
  - 4. The Favourite

Question ID : 2390872778  
Status : Answered  
Chosen Option : 1

**Q.4 For which crop, Fair and Remunerative price is announced, instead of Minimum Support Price?**

- Ans
- 1. Rice
  - 2. Wheat
  - 3. Sugarcane
  - 4. Pulses

Question ID : 2390872781  
Status : Answered  
Chosen Option : 3

**Q.5 Which part of Human ear collects sound from its surrounding?**

- Ans
- 1. Pinna
  - 2. Cochlea

- 3. Anvil
- 4. Hammer

Question ID : 2390872789  
Status : Not Answered  
Chosen Option : --

**Q.6 Which organelle of cell is also known as powerhouse of the cell?**

- Ans
- 1. Plastids
  - 2. Mitochondria
  - 3. Golgi Apparatus
  - 4. Lysosomes

Question ID : 2390872791  
Status : Answered  
Chosen Option : 2

**Q.7 Who takes over the office of President when there is a Vacancy by reasons of death, resignation, removal by impeachment or otherwise?**

- Ans
- 1. Deputy Chairman of Rajya Sabha
  - 2. Chairman of Rajya Sabha
  - 3. Speaker of Lok Sabha
  - 4. Deputy Speaker of Lok Sabha

Question ID : 2390872786  
Status : Answered  
Chosen Option : 2

**Q.8 Mountain Building on the surface of the earth is a result of which type of Forces?**

- Ans
- 1. Endogenic Forces
  - 2. Exogenic Forces
  - 3. Gravitational Forces
  - 4. Magnetic Forces

Question ID : 2390872793  
Status : Answered  
Chosen Option : 1

**Q.9 President of INTERPOL elected in November 2018 belongs to which Country?**

- Ans
- 1. South Korea
  - 2. Pakistan
  - 3. Bangladesh
  - 4. Sri Lanka

Question ID : 2390872779  
Status : Not Answered  
Chosen Option : --

**Q.10 In which coastal town**

- Ans
- 1. Ahmedabad
  - 2. Sabarmati
  - 3. Dandi
  - 4. Surat

Question ID : 2390872795  
Status : Answered  
Chosen Option : 3

Q.11 Rann Ustav is Celebrated in which State?

- Ans
- 1. Maharashtra
  - 2. Gujarat
  - 3. Madhya Pradesh
  - 4. Rajasthan

Question ID : 2390872774  
Status : Answered  
Chosen Option : 2

Q.12 Amnesty International is associated to which of the following?

- Ans
- 1. Cultural Heritage Conservation
  - 2. Animal Rights
  - 3. Human Rights
  - 4. Forest Conservation

Question ID : 2390872784  
Status : Answered  
Chosen Option : 3

Q.13 Sunil Chhetri represents India in which Sport?

- Ans
- 1. Cricket
  - 2. Basket Ball
  - 3. Hockey
  - 4. Football

Question ID : 2390872777  
Status : Answered  
Chosen Option : 4

Q.14 Who has written the Book "Arthashastra"?

- Ans
- 1. Abul Fazal
  - 2. Kautilya
  - 3. Vikram Seth
  - 4. Bhaskara

Question ID : 2390872780  
Status : Not Attempted and  
Marked For Review



**Q.15 Bats search out prey and fly in dark night by emitting and detecting reflections of which type of Sound Waves?**

- Ans**
- 1. Ultrasonic Waves
  - 2. Sonic Waves
  - 3. Subsonic Waves
  - 4. Hypersonic Waves

Question ID : 2390872790  
Status : Answered  
Chosen Option : 1

**Q.16 Who renounced his knighthood title after 'Jallianwala Bagh' massacre?**

- Ans**
- 1. Rabindranath Tagore
  - 2. Dr. B.R. Ambedkar
  - 3. Mahatama Gandhi
  - 4. Bal gangadhar Tilak

Question ID : 2390872797  
Status : Answered  
Chosen Option : 1

**Q.17 Which team won Indian Premier League 2019 Trophy?**

- Ans**
- 1. Chennai Superkings
  - 2. Delhi Capitals
  - 3. Mumbai Indians
  - 4. Royal Challengers Bangalore

Question ID : 2390872776  
Status : Answered  
Chosen Option : 3

**Q.18 Which of the following is NOT a type of Combination reaction?**

- Ans**
- 1. Adding of water to Quick lime
  - 2. Formation of water
  - 3. Burning of Coal
  - 4. Heating of limestone

Question ID : 2390872787  
Status : Answered  
Chosen Option : 3

**Q.19 Which gas is used in food packaging industry to prevent chips from getting oxidised?**

- Ans**
- 1. Hydrogen
  - 2. Nitrogen
  - 3. Carbon
  - 4. Helium

Status : Answered  
Chosen Option : 2

Q.20 What is the main mineral constituent of Continental mass?

- Ans
- 1. Magnesium and silica
  - 2. Oxygen and Alumina
  - 3. Alumina and Magnesium
  - 4. Silica and Alumina

Question ID : 2390872792  
Status : Not Answered  
Chosen Option : --

Q.21 Which of the following is a Nationalised Bank in India?

- Ans
- 1. ICICI Bank
  - 2. Axis Bank
  - 3. State Bank of India
  - 4. Yes Bank

Question ID : 2390872782  
Status : Answered  
Chosen Option : 3

Q.22 Which act of the Parliament set targets for the government to reduce fiscal deficits in India?

- Ans
- 1. FEMA Act
  - 2. FRBM Act
  - 3. RBI Act
  - 4. POSCO Act

Question ID : 2390872783  
Status : Answered  
Chosen Option : 1

Q.23 Who appoints Comptroller and Auditor General of India?

- Ans
- 1. President
  - 2. Supreme Court
  - 3. Prime Minister
  - 4. Chief Justice of India

Question ID : 2390872785  
Status : Answered  
Chosen Option : 1

Q.24 Which of the following is correct order of Dynasty established in India?

- Ans
- 1. Tughlaq - Khalji - Lodi - Sayyid
  - 2. Khalji - Sayyid - Lodi - Tughlaq
  - 3. Lodi - Sayyid - Tughlaq - Khalji
  - 4. Khalji - Tughlaq - Sayyid - Lodi

Question ID : 2390872796  
Status : Not Answered  
Chosen Option : --

Q.25 Which of the following landforms does NOT depict the youthful Stage of rivers?

- Ans
- 1. Rapids
  - 2. V-Shaped Valleys
  - 3. Delta
  - 4. Gorge

Question ID : 2390872794  
Status : Not Answered  
Chosen Option : --

mpCareers.in