



Staff Selection Commission
(Government Of India)

REGISTRATION NUMBER : examstocks.com
EXAM DATE : 16-September-2017 EXAM
NAME : SSC Examination TOTAL MARKS : 150

CANDIDATE NAME : examstocks.com
EXAM START TIME : 16:30:00 EXAM
DURATION : 01:30 Hrs TOTAL NO OF
QUESTIONS : 100

QID : 101 -

In the following question, select the number which can be placed at the sign of question mark (?) from the given alternatives.

निम्नलिखित प्रश्न में दिए गए विकल्पों में से प्रश्न चिह्न (?) के स्थान पर आने वाली संख्या को चुनिए।

2	5	4
3	4	3
7	6	2
15	18	?

Options:

1) 10

2) 11

3) 12

4) 13

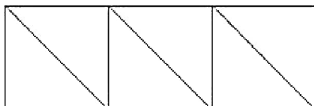
Correct Answer: 12

Candidate Answer: 12

QID : 102 -

How many triangles are there in the given figure?

दी गई आकृति में कितने त्रिभुज हैं?



Options:

1) 4

2) 6

3) 5

4) 7

Correct Answer: 6

Candidate Answer: 6

QID : 103 -

A word is represented by only one set of numbers as given in any one of the alternatives. The sets of numbers given in the alternatives are represented by two classes of alphabets as shown in the given two matrices. The columns and rows of **Matrix-I** are numbered from 0 to 4 and that of **Matrix-II** are numbered from 5 to 9. A letter from these matrices can be represented first by its row and next by its column, for example, 'A' can be represented by 21, 59, etc., and 'N' can be represented by 32, 78, etc. Similarly, you have to identify the set for the word "GOAT".

एक शब्द केवल एक संख्या-समूह द्वारा दर्शाया गया है, जैसा कि विकल्पों में से किसी एक में दिया गया है। विकल्पों में दिए गए संख्या-समूह अक्षरों के दो वर्गों द्वारा दर्शाए गए हैं, जैसा कि दिए गए दो आव्यूहों में है। आव्यूह-I के स्तम्भ और पंक्ति की संख्या 0 से 4 है और आव्यूह-II की 5 से 9। इन आव्यूहों से एक अक्षर को पहले उसकी पंक्ति और बाद में स्तम्भ संख्या द्वारा दर्शाया जा सकता है। उदाहरण के लिए 'A' को 21, 59, आदि द्वारा दर्शाया जा सकता है तथा 'N' को 32, 78, आदि द्वारा दर्शाया जा सकता है। इसी तरह से आपको प्रश्न में दिए शब्द "GOAT" के लिए समूह को पहचानना है।

Matrix-I
आव्यूह-I

	0	1	2	3	4
0	E	G	I	K	M
1	O	Q	S	U	W
2	Y	A	C	F	D
3	J	L	N	P	R
4	T	V	X	Z	B

Matrix-II
आव्यूह-II

	5	6	7	8	9
5	M	O	H	J	A
6	K	D	Q	L	Z
7	I	S	C	N	X
8	G	U	A	P	V
9	E	W	Y	R	T

Options:

1) 85, 10, 22, 99

2) 01, 10, 21, 41

3) 85, 56, 58, 99

4) 01, 56, 87, 99

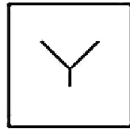
Correct Answer: 01, 56, 87, 99

Candidate Answer: 01, 56, 87, 99

QID : 104 -

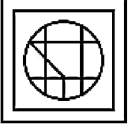
From the given answer figures, select the one in which the question figure is hidden/embedded.

दी गई उत्तर आकृतियों में से उस उत्तर आकृति को चुनिए जिस में प्रश्न आकृति निहित है।



Options:

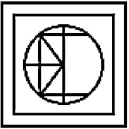
1)



2)



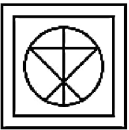
3)



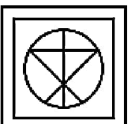
4)



Correct Answer:



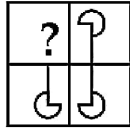
Candidate Answer:



QID : 105 -

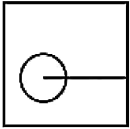
Which answer figure will complete the pattern in the question figure?

कौन सी उत्तर आकृति प्रश्न आकृति के प्रतिरूप को पूरा करेगी?

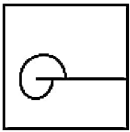


Options:

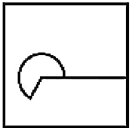
1)



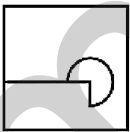
2)



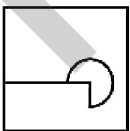
3)



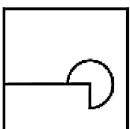
4)



Correct Answer:



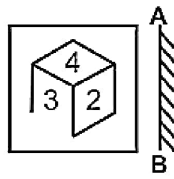
Candidate Answer:



QID : 106 -

If a mirror is placed on the line AB, then which of the answer figures is the right image of the given figure?

यदि एक दर्पण को AB रेखा पर रखा जाए, तो दी गई उत्तर आकृतियों में से कौन सी आकृति प्रश्न आकृति की सही प्रतिबिम्ब होगी?

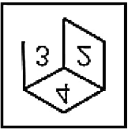


Options:

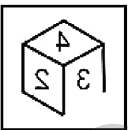
1)



2)



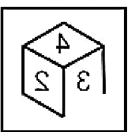
3)



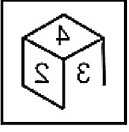
4)



Correct Answer:



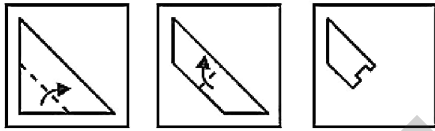
Candidate Answer:



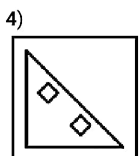
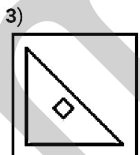
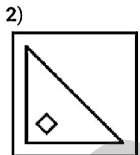
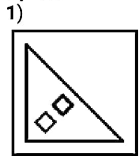
QID : 107 -

A piece of paper is folded and punched as shown below in the question figures. From the given answer figures, indicate how it will appear when opened?

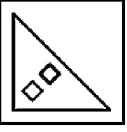
नीचे के प्रश्न आकृतियों में दिखाए अनुसार कागज को मोड़कर छेदने तथा खोलने के बाद वह किस उत्तर आकृति जैसा दिखाई देगा?



Options:



Correct Answer:



Candidate Answer:



QID : 108 - If 'J' means '+', 'K' means '-', 'T' means '×' and 'U' means '÷', then

18 T 3 U 27 J 2 = ?

यदि 'J' का अर्थ '+', 'K' का अर्थ '-', 'T' का अर्थ '×' तथा 'U' का अर्थ '÷' हो, तो

18 T 3 U 27 J 2 = ?

Options:

1) 6

2) 2

3) 4

4) 3

Correct Answer: 4

Candidate Answer: 4

QID : 109 - If $8 \times 16 \times 9 = 8169$ and $9 \times 23 \times 4 = 9234$, then $4 \times 10 \times 11 = ?$

यदि $8 \times 16 \times 9 = 8169$ तथा $9 \times 23 \times 4 = 9234$ हो, तो $4 \times 10 \times 11 = ?$

Options:

1) 11014

2) 41011

3) 14610

4) 10114

Correct Answer: 41011

Candidate Answer: 41011

QID : 110 - Arrange the given words in the sequence in which they occur in the dictionary.

1. Paper
2. Parade
3. Postal
4. Praise
5. Picture

निम्नलिखित शब्दों को शब्दकोश में आने वाले क्रम के अनुसार लिखें।

1. Paper
2. Parade
3. Postal
4. Praise
5. Picture

Options:

- 1) 12543
- 2) 21543
- 3) 21534
- 4) 12534

Correct Answer: 12534

Candidate Answer: 12534

QID : 111 - In the following question, select the missing number from the given series (need to write options).

104, 52, 26, 13, 6.5, ?

निम्नलिखित प्रश्न में दिए गए विकल्पों में से लुप्त अंक ज्ञात कीजिए।

104, 52, 26, 13, 6.5, ?

Options:

- 1) 3.5
- 2) 3.75
- 3) 4.25
- 4) 3.25

Correct Answer: 3.25

Candidate Answer: 3.25

QID : 112 - In the following question, which one set of letters when sequentially placed at the gaps in the given letter series shall complete it?

_ b c a b _ a b c _ b _

निम्नलिखित प्रश्न में अक्षरों का कौन सा समूह खाली स्थानों पर क्रमवार रखने से दी गई अक्षर श्रृंखला को पूरा करेगा?

_ b c a b _ a b c _ b _

Options:

1) acac

2) bbca

3) caca

4) aacc

Correct Answer: acac

Candidate Answer: acac

QID : 113 - In the following question, select the odd word pair from the given alternatives.

निम्नलिखित प्रश्न में दिए गए विकल्पों में से विषम शब्द युग्म को चुनिए।

Options:

1) Ground : Play

मैदान : खेल

2) Solar system : Sun

सौर-मण्डल : सूर्य

3) Body : Hand

शरीर : हाथ

4) Tree : Stem

पेड़ : तना

Correct Answer: Ground : Play

मैदान : खेल

Candidate Answer: Ground : Play

मैदान : खेल

QID : 114 - In the following question, select the odd number pair from the given alternatives.

निम्नलिखित प्रश्न में दिए गए विकल्पों में से विषम संख्या युग्म को चुनिए।

Options:

1) 13 : 25

2) 31 : 63

3) 21 : 41

4) 19 : 37

Correct Answer: 31 : 63

Candidate Answer: 31 : 63

QID : 115 - In the following question, select the odd letters from the given alternatives.

निम्नलिखित प्रश्न में दिए गए विकल्पों में से विषम अक्षरों को चुनिए।

Options:

1) QP

2) DC

3) XY

4) ML

Correct Answer: XY

Candidate Answer: XY

QID : 116 - Identify the diagram that best represents the relationship among the given classes.

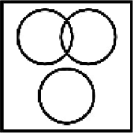
Haryana, Chandigarh, Uttar Pradesh

वह आरेख चुनिए जो नीचे दिए गए वर्गों के बीच के संबंध का सही निरूपण करता है।

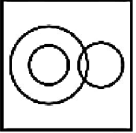
हरियाणा, चंडीगढ़, उत्तर प्रदेश

Options:

1)



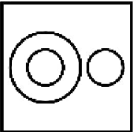
2)



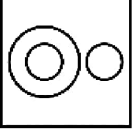
3)



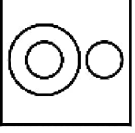
4)



Correct Answer:



Candidate Answer:



QID : 117 - In the following question, select the related word from the given alternatives.

Liver : Organ :: Earth : ?

निम्नलिखित प्रश्न में दिए गए विकल्पों में से संबंधित शब्द को चुनिए।

यकृत : अंग :: पृथ्वी : ?

Options:

1) Round

गोल

2) Brown

भूरी

3) Home

घर

4) Planet

ग्रह

Correct Answer: Planet

ग्रह

Candidate Answer: Planet

ग्रह

QID : 118 - In the following question, select the related number from the given alternatives.

100 : 121 :: 36 : ?

निम्नलिखित प्रश्न में दिए गए विकल्पों में से संबंधित संख्या को चुनिए।

100 : 121 :: 36 : ?

Options:

1) 64

2) 49

3) 25

4) 16

Correct Answer: 49

Candidate Answer: 49

QID : 119 - In the following question, select the related letters from the given alternatives.

EI : AE :: UO : ?

निम्नलिखित प्रश्न में दिए गए विकल्पों में से संबंधित अक्षरों को चुनिए।

EI : AE :: UO : ?

Options:

1) PK

2) QJ

3) PJ

4) QK

Correct Answer: QK

Candidate Answer: QK

QID : 120 - In the following question, select the word which cannot be formed using the letters of the given word.

PRECITIPATE

निम्नलिखित विकल्पों में से वह शब्द चुनिए जो दिए गए शब्द के अक्षरों का प्रयोग करके नहीं बनाया जा सकता।

PRECITIPATE

Options:

1) PAIR

2) PART

3) RECITE

4) PAIN

Correct Answer: PAIN

Candidate Answer: PAIN

QID : 121 - Vilas remembers his marriage is after 4th July. While his sister remembers his marriage is before 6th July. On which date of July is his marriage?

विलास को याद है कि उसका विवाह 4 जुलाई के बाद है। जबकि उसकी बहन को याद है कि उसका विवाह 6 जुलाई से पहले है। उसका विवाह जुलाई की किस तिथि को है?

Options:

1) 4

2) 5

3) 6

4) 7

Correct Answer: 5

Candidate Answer: 5

QID : 122 - In a row of 63 cars, black car is 32nd from the right end. What is its position from left end?

63 कारों की एक पंक्ति में, काली रंग की कार दायीं ओर से 32 वीं है। बायीं ओर से उसका स्थान क्या है?

Options:

1) 32

2) 31

3) 33

4) 34

Correct Answer: 32

Candidate Answer: 32

QID : 123 - In the following question below are given some statements followed by some conclusions. Taking the given statements to be true even if they seem to be at variance from commonly known facts, read all the conclusions and then decide which of the given conclusion logically follows the given statements Some tables are chairs.

Statements:

- I. Some tables are chairs.
- II. Some chairs are pens.

Conclusions:

- I. Some pens are chairs.
- II. Some pens are tables.

नीचे दिए गए प्रश्न में कुछ कथन और उनके बाद उन कथनों पर आधारित कुछ निष्कर्ष दिए गए हैं, हालांकि उनमें सामान्य ज्ञात तथ्यों से भिन्नता हो सकती है। सभी निष्कर्ष पढ़ें और फिर निर्धारित करें कि दिए गए कौन से निष्कर्ष, दिए गए कथनों के आधार पर युक्तिसंगत हैं।

कथन:

- I. कुछ मेज़ कुर्सियाँ हैं।
- II. कुछ कुर्सियाँ कलम हैं।

निष्कर्ष:

- I. कुछ कलम कुर्सियाँ हैं।
- II. कुछ कलम मेज़ हैं।

Options:

1) Only conclusion (I) follows.

केवल निष्कर्ष (I) सही है।

2) Only conclusion (II) follows.

केवल निष्कर्ष (II) सही है।

3) Both conclusion follow.

दोनों ही निष्कर्ष सही हैं।

4) Neither conclusion (I) nor conclusion (II) follows.

न तो निष्कर्ष (I) न ही निष्कर्ष (II) सही है।

Correct Answer: Only conclusion (I) follows.

केवल निष्कर्ष (I) सही है।

Candidate Answer: Only conclusion (I) follows.

QID : 124 - In a certain code language, "PHONE" is written as "RJQPG". How is "STAMP" written in that code language?

एक विशिष्ट कोड भाषा में, "PHONE" को "RJQPG" लिखा जाता है। इस कोड भाषा में "STAMP" को किस प्रकार लिखा जाएगा?

Options:

- 1) UVCOR
- 2) CVCOS
- 3) UVDOR
- 4) UVCPS

Correct Answer: UVCOR

Candidate Answer: UVCOR

QID : 125 - In a certain code language, "PARK" is written as "92" and "WALK" is written as "94". How is "LOSS" written in that code language?

एक विशिष्ट कोड भाषा में, "PARK" को "92" तथा "WALK" को "94" लिखा जाता है। इस कोड भाषा में "LOSS" को किस प्रकार लिखा जाएगा?

Options:

- 1) 65
- 2) 130
- 3) 195
- 4) 180

Correct Answer: 130

Candidate Answer: 130

QID : 126 - If 432P1 is completely divisible by 9, then what is the value of P?

यदि 432P1, 9 से पूर्णतः विभाजित है, तो P का मान क्या होगा?

Options:

- 1) 1
- 2) 8
- 3) 7
- 4) 2

Correct Answer: 8

Candidate Answer: 8

QID : 127 - Which smallest number must be added to 100, so that the resulting number is completely divisible by 6?

100 में ऐसी कौन सी सबसे छोटी संख्या जोड़ी जाए, ताकि परिणामी संख्या 6 से पूर्णतः विभाजित हो जाए?

Options:

- 1) 2
- 2) 3
- 3) 5
- 4) 4

Correct Answer: 2

QID : 128 - What is the value of $51 + 52 + 53 \dots\dots 100$?

51 + 52 + 53 100 का मान क्या है?

Options:

1) 1325

2) 5050

3) 3775

4) 3325

Correct Answer: 3775

Candidate Answer: 3775

QID : 129 -

What is the value of $9\frac{1}{3} + 19\frac{2}{3} + 20\frac{3}{4} + 19\frac{1}{4}$?

$9\frac{1}{3} + 19\frac{2}{3} + 20\frac{3}{4} + 19\frac{1}{4}$ का मान क्या है?

Options:

1) 67

2) 65

3) 59

4) 69

Correct Answer: 69

Candidate Answer: 69

QID : 130 - What is the sum of first 15 odd natural number?

प्रथम 15 विषम प्राकृत संख्याओं का योग क्या है?

Options:

1) 255

2) 225

3) 235

4) 215

Correct Answer: 225

Candidate Answer: 225

QID : 131 - What is the sum of all natural numbers between 1 and 100 which are multiples of 7?

1 से 100 के मध्य आने वाली सभी प्राकृत संख्याएँ जो 7 का गुणज है, का योग क्या है?

Options:

1) 735

2) 675

3) 745

4) 705

Correct Answer: 735

Candidate Answer: 735

QID : 132 - Working 6 hours a day, Raman can complete a piece of work in 24 days. How many hours a day should he work so as to finish the work in 18 days?

6 घंटे प्रतिदिन कार्य करके, रमन किसी कार्य को 24 दिनों में पूरा कर सकता है, कार्य को 18 दिनों में समाप्त करने के लिए उसे प्रतिदिन कितने घंटे काम करना होगा?

Options:

1) 8

2) 10

3) 12

4) 16

Correct Answer: 8

Candidate Answer: 8

QID : 133 - A can do a piece of work in 48 days. If B is 50% more efficient than A, then in how many days can B do the same work?

A किसी कार्य को 48 दिनों में कर सकता है। यदि B की कार्य क्षमता A से 50% अधिक है, तो उसी कार्य को B कितने दिनों में करेगा?

Options:

1) 24

2) 32

3) 18

4) 15

Correct Answer: 32

Candidate Answer: 32

QID : 134 - The length and breadth of a rectangular field are in the ratio of 4 : 3. If the perimeter of the field is 70 m, then what will be the breadth (in metres)?

किसी आयताकार क्षेत्र की लम्बाई तथा चौड़ाई का अनुपात 4 : 3 है। यदि आयताकार क्षेत्र का परिमाप 70 मीटर हो, तो उसकी चौड़ाई (मीटर में) क्या होगी?

Options:

1) 12

2) 15

3) 18

4) 24

Correct Answer: 15

Candidate Answer: 15

QID : 135 - The marked price of an article is Rs 650 and a customer pays Rs 585 for it. What is the discount percentage?

एक वस्तु का अंकित मूल्य 650 रु है तथा एक ग्राहक इसके लिए 585 रु देता है। छूट प्रतिशत क्या है?

Options:

1) 10

2) 12

3) 9

4) 15

Correct Answer: 10

Candidate Answer: 10

QID : 136 - The marked price of an article is twice the cost price. For a gain of 30%, what should be the discount percentage?

एक वस्तु का अंकित मूल्य इसकी लागत मूल्य से दोगुना है। 30% लाभ प्राप्त करने के लिए, छूट प्रतिशत क्या होगी?

Options:

1) 30

2) 35

3) 25

4) 40

Correct Answer: 35

Candidate Answer: 35

QID : 137 - If $B : A = 2 : 3$ and $A : C = 5 : 7$, then what is $(A + B) : (B + C)$?

यदि $B : A = 2 : 3$ तथा $A : C = 5 : 7$ है, तो $(A + B) : (B + C)$ क्या होगा?

Options:

1) 25 : 26

2) 25 : 36

3) 25 : 31

4) 27 : 43

Correct Answer: 25 : 31

Candidate Answer: 25 : 31

QID : 138 - Two numbers are in the ratio of 5 : 3. If 9 be subtracted from each, then the new ratio is 9 : 5. What are the two numbers?

दो संख्याएँ 5 : 3 अनुपात में हैं। यदि प्रत्येक में से 9 घटाया जाए तो नया अनुपात 9 : 5 हो जाता है। दोनों संख्याएँ क्या हैं?

Options:

- 1) 50 and 30
50 तथा 30
- 2) 45 and 27
45 तथा 27
- 3) 90 and 54
90 तथा 54
- 4) 15 and 45
15 तथा 45

Correct Answer: 90 and 54
90 तथा 54

Candidate Answer: 90 and 54
90 तथा 54

QID : 139 - The average of 20 numbers is 30 and that of other 30 numbers is 50. What is the average of all the numbers?

20 संख्याओं का औसत 30 तथा अन्य 30 संख्याओं का औसत 50 है। सभी संख्याओं का औसत क्या है?

Options:

- 1) 42
- 2) 47
- 3) 44
- 4) 45

Correct Answer: 42

Candidate Answer: 42

QID : 140 - If the cost price of 10 articles is equal to the selling price of 15 articles, then what is the loss percentage?

यदि 10 वस्तुओं का क्रय मूल्य 15 वस्तुओं के विक्रय मूल्य के बराबर है, तो हानि प्रतिशत क्या होगा?

Options:

- 1) 25%
- 2) 50%
- 3) 33.33%
- 4) 20%

Correct Answer: 33.33%

Candidate Answer: 33.33%

QID : 141 - If the ratio of the cost price and selling price of an article is 20 : 21, then what will be the profit percentage?

यदि एक वस्तु के क्रय मूल्य तथा विक्रय मूल्य का अनुपात 20 : 21 है, तो लाभ प्रतिशत क्या होगा?

Options:

- 1) 5%
- 2) 4.5%
- 3) 6%
- 4) 7.5%

Correct Answer: 5%

Candidate Answer: 5%

QID : 142 - If income of R is 30% more than the income of Q and the income of Q is 20% more than the income of P, then the income of R is how much percent more than the income of P?

यदि R की आय, Q की आय से 30% अधिक है तथा Q की आय, P की आय से 20% अधिक है, तो R की आय, P की आय से कितने प्रतिशत अधिक होगी?

Options:

- 1) 50
- 2) 10
- 3) 56
- 4) 55

Correct Answer: 56

Candidate Answer: 56

QID : 143 - When 40 is subtracted from 30% of a number, the result is 50. What is the value of the number?

किसी संख्या के 30% में से 40 घटाने पर परिणाम 50 आता है। संख्या का मान क्या है?

Options:

1) 150

2) 180

3) 300

4) 450

Correct Answer: 300

Candidate Answer: 300

QID : 144 - Speeds of a boat along the current and against the current are 10 km/hr and 8 km/hr respectively. What is the speed (in km/hr) of the current?

एक नाव की गति धारा के अनुकूल तथा धारा के प्रतिकूल दिशा में क्रमशः 10 कि.मी./घंटा तथा 8 कि.मी./घंटा है। धारा की गति (कि.मी./घंटा में) क्या है?

Options:

1) 1

2) 2

3) 3

4) 9

Correct Answer: 1

Candidate Answer: 1

QID : 145 - A person goes from point A to B with a speed of 55 km/hr and returns back with a speed 65 km/hr. What is the average speed (in km/hr) of the person while going and coming back from A to B?

एक व्यक्ति 55 कि.मी./घंटा की रफ्तार से बिंदु A से B तक जाता है तथा 65 कि.मी./घंटा की गति से वापस लौटता है। A से B तक जाने तथा वापस आने में व्यक्ति की औसत गति (कि.मी./घंटा में) क्या है?

Options:

1) 59.58

2) 62.31

3) 60

4) 63

Correct Answer: 59.58

Candidate Answer: 59.58

QID : 146 - A sum was invested on simple interest at a certain rate for 2 years. If the interest rate is increased by 4%, then the interest increases by Rs 160. What is the sum (in Rs) invested?

एक धनराशि ब्याज की किसी वार्षिक दर से 2 वर्ष के लिए साधारण ब्याज में निवेशित की जाती है। यदि ब्याज दर 4% से बढ़ा दी जाए तो ब्याज 160 रु से बढ़ जाता है। निवेशित की गयी धनराशि (रु में) क्या है?

Options:

1) 2000

2) 3000

3) 3500

4) 4000

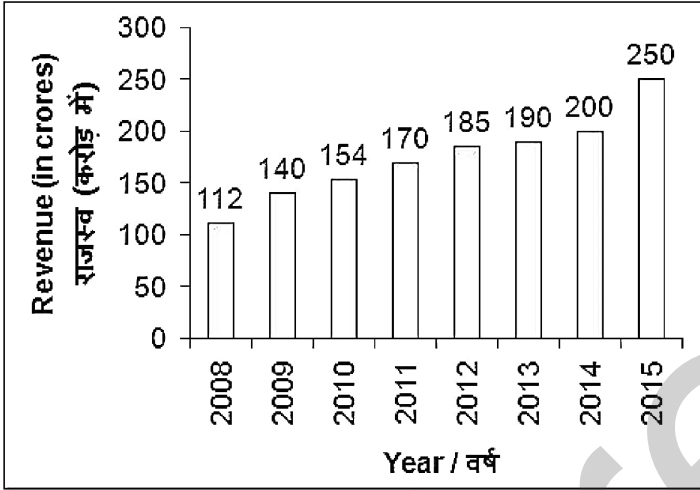
Correct Answer: 2000

Candidate Answer: 2000

QID : 147 -

The bar chart given below shows the revenue (in crores) of company A for the years 2008 to 2015.

नीचे दिए गए दण्ड चित्र में वर्ष 2008 से वर्ष 2015 तक कंपनी A के राजस्व (करोड़ में) को दर्शाया गया है।



In how many years from 2009 to 2015 the increase in revenue is more than 15 crores with respect to previous years?

वर्ष 2009 से वर्ष 2015 तक कितने वर्षों में गत वर्षों की तुलना में राजस्व में वृद्धि 15 करोड़ से अधिक रही है?

Options:

- 1) 3
- 2) 2
- 3) 5
- 4) 1

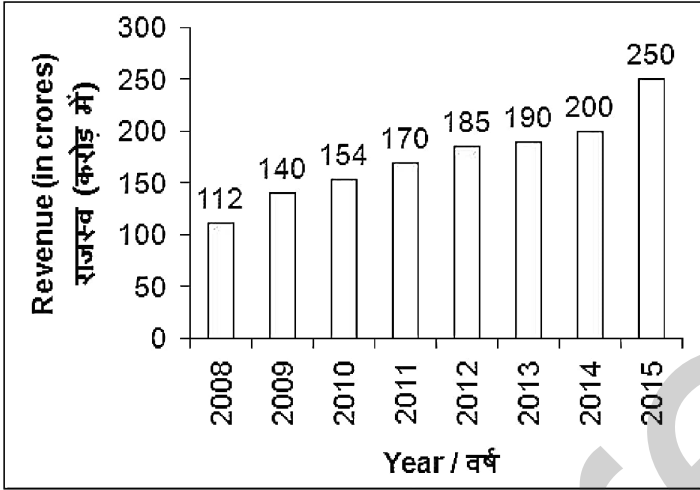
Correct Answer: 3

Candidate Answer: 3

QID : 148 -

The bar chart given below shows the revenue (in crores) of company A for the years 2008 to 2015.

नीचे दिए गए दण्ड चित्र में वर्ष 2008 से वर्ष 2015 तक कंपनी A के राजस्व (करोड़ में) को दर्शाया गया है।



What is the percentage increase in revenue in the year 2010 in comparison to the previous year?

वर्ष 2010 में, गत वर्ष की तुलना में राजस्व में कितने प्रतिशत वृद्धि हुई है?

Options:

- 1) 10
- 2) 12
- 3) 20
- 4) 25

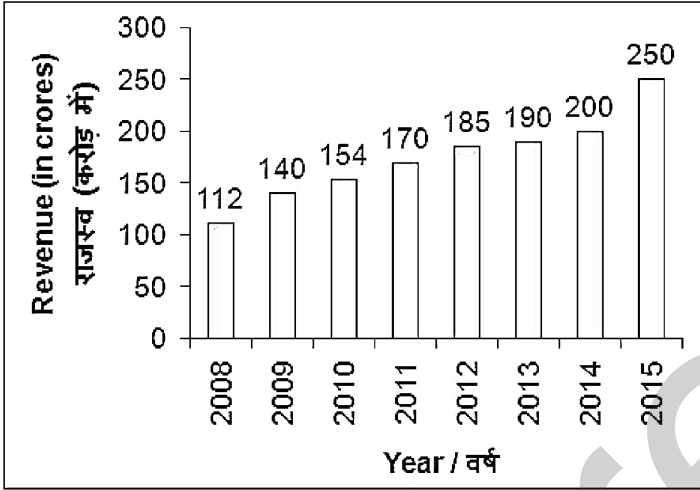
Correct Answer: 10

Candidate Answer: 10

QID : 149 -

The bar chart given below shows the revenue (in crores) of company A for the years 2008 to 2015.

नीचे दिए गए दण्ड चित्र में वर्ष 2008 से वर्ष 2015 तक कंपनी A के राजस्व (करोड़ में) को दर्शाया गया है।



The revenue in 2015 is what percent of the revenue in 2014?

वर्ष 2015 का राजस्व वर्ष 2014 के राजस्व का कितना प्रतिशत है?

Options:

- 1) 75
- 2) 115
- 3) 125
- 4) 135

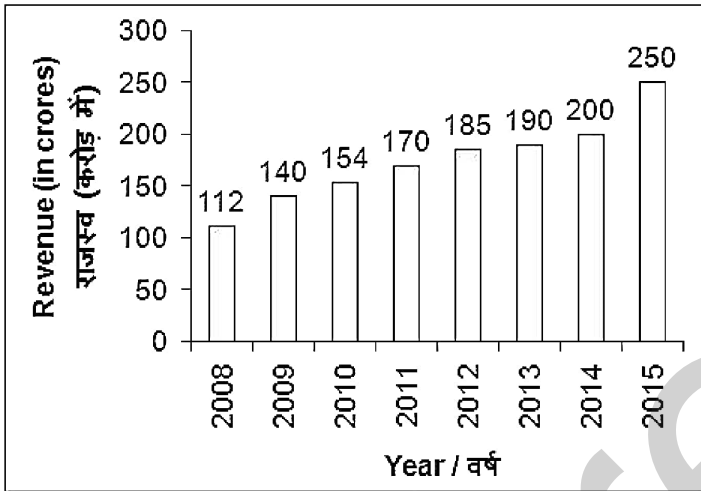
Correct Answer: 125

Candidate Answer: 125

QID : 150 -

The bar chart given below shows the revenue (in crores) of company A for the years 2008 to 2015.

नीचे दिए गए दण्ड चित्र में वर्ष 2008 से वर्ष 2015 तक कंपनी A के राजस्व (करोड़ में) को दर्शाया गया है।



What is the average revenue (in crore Rs) per year from 2011 to 2015?

वर्ष 2011 से वर्ष 2015 तक, प्रति वर्ष औसत राजस्व (करोड़ रुपये में) क्या है?

Options:

- 1) 199
- 2) 203
- 3) 192
- 4) 189

Correct Answer: 199

Candidate Answer: 199

QID : 151 - In the following question, some part of the sentence may have errors. Find out which part of the sentence has an error and select the appropriate option. If a sentence is free from error, select 'No Error'.

Our specialist school is (1)/ home to children with (2)/ different intellectual abilities. (3)/ No Error (4)

Options:

- 1) 1
- 2) 2
- 3) 3
- 4) 4

Correct Answer: 1

Candidate Answer: 2

QID : 152 - In the following question, some part of the sentence may have errors. Find out which part of the sentence has an error and select the appropriate option. If a sentence is free from error, select 'No Error'.

You can control them (1)/ by setting a maximum limit (2)/ for each one bill. (3)/ No Error (4)

Options:

- 1) 1
- 2) 2
- 3) 3
- 4) 4

Correct Answer: 3

Candidate Answer: 3

QID : 153 - In the following question, the sentence given with blank to be filled in with an appropriate word. Select the correct alternative out of the four and indicate it by selecting the appropriate option.

His teacher ____ an explanation of his conduct.

Options:

- 1) called up
- 2) called for
- 3) called off
- 4) on

Correct Answer: called for

Candidate Answer: called off

QID : 154 - In the following question, the sentence given with blank to be filled in with an appropriate word. Select the correct alternative out of the four and indicate it by selecting the appropriate option.

Put your signature ____ red ink.

Options:

- 1) through
- 2) in
- 3) with
- 4) by

Correct Answer: in

Candidate Answer: with

QID : 155 - In the following question, out of the given four alternatives, select the one which best expresses the meaning of the given word.

Extinct

Options:

- 1) Alive
- 2) Living
- 3) Abolished
- 4) Existing

Correct Answer: Abolished

Candidate Answer: Abolished

QID : 156 - In the following question, out of the given four alternatives, select the one which best expresses the meaning of the given word.

Malice

Options:

- 1) Friendly
- 2) Kind
- 3) Bitterness
- 4) Thoughtful

Correct Answer: Bitterness

Candidate Answer: Friendly

QID : 157 - In the following question, out of the given four alternatives, select the one which best expresses the meaning of the given word.

Sustain

Options:

- 1) Halt
- 2) Stop
- 3) Abstain
- 4) Continue

Correct Answer: Continue

Candidate Answer: Abstain

QID : 158 - In the following question, out of the given four alternatives, select the one which is opposite in meaning of the given word.

Options:

- 1) Garnish
- 2) Hinder
- 3) Amplify
- 4) Develop

Correct Answer: Hinder

Candidate Answer: Hinder

QID : 159 - In the following question, out of the given four alternatives, select the one which is opposite in meaning of the given word.

Triumph

Options:

- 1) Joy
- 2) Jubilee
- 3) Pride
- 4) Sorrow

Correct Answer: Sorrow

Candidate Answer: Sorrow

QID : 160 - In the following question, out of the given four alternatives, select the one which is opposite in meaning of the given word.

Elementary

Options:

- 1) Easy
- 2) Fundamental
- 3) Primary
- 4) Complex

Correct Answer: Complex

Candidate Answer: Complex

QID : 161 - In the following question, out of the four given alternatives, select the alternative which best expresses the meaning of the Idiom/Phrase.

Yeoman service

Options:

- 1) Service for short period
- 2) Very costly service
- 3) Useful help in need
- 4) Work without preparation

Correct Answer: Useful help in need

Candidate Answer: Useful help in need

QID : 162 - In the following question, out of the four given alternatives, select the alternative which best expresses the meaning of the Idiom/Phrase.

Once and for all

Options:

- 1) Bring to an end
- 2) Remain alive
- 3) Forever
- 4) Something good for people

Correct Answer: Bring to an end

Candidate Answer: Forever

QID : 163 - Improve the bracketed part of the sentence.

(This market were) crowded with people.

Options:

- 1) This markets were
- 2) These market were
- 3) This market was
- 4) No improvement

Correct Answer: This market was

Candidate Answer: This market was

QID : 164 - Improve the bracketed part of the sentence.

(He have quitted) the organization.

Options:

- 1) He has quit
- 2) He have quit
- 3) He had quitted
- 4) No improvement

Correct Answer: He has quit

Candidate Answer: He had quitted

QID : 165 - In the following question, out of the four given alternatives, select the alternative which is the best substitute of the phrase.

As opposed to reality imagined not real.

Options:

- 1) Ennui
- 2) Heretic
- 3) Fictitious
- 4) Indict

Correct Answer: Fictitious

Candidate Answer: Fictitious

QID : 166 - In the following question, out of the four given alternatives, select the alternative which is the best substitute of the phrase.

A state of sleeplessness

Options:

- 1) Irritable
- 2) Insurgent
- 3) Imputation
- 4) Insomnia

Correct Answer: Insomnia

Candidate Answer: Insomnia

QID : 167 - In the following question, a word has been written in four different ways out of which only one is correctly spelt. Select the correctly spelt word.

Options:

- 1) Quarrel
- 2) Quaarel
- 3) Qurarel
- 4) Quarell

Correct Answer: Quarrel

Candidate Answer: Quarrel

QID : 168 - In the following question, a word has been written in four different ways out of which only one is correctly spelt. Select the correctly spelt word.

Options:

- 1) Recommend
- 2) Reccomend
- 3) Reccommend
- 4) Ricommend

Correct Answer: Recommend

QID : 169 - Rearrange the parts of the sentence in correct order.

It takes
P: to change their
Q: way of thinking
R: time for people

Options:

- 1) RQP
- 2) QPR
- 3) RPQ
- 4) PRQ

Correct Answer: RPQ

Candidate Answer: RPQ

QID : 170 - Rearrange the parts of the sentence in correct order.

Politeness is
P: possessed by only
Q: one nation or race
R: not a quality

Options:

- 1) RPQ
- 2) PRQ
- 3) QPR
- 4) QRP

Correct Answer: RPQ

Candidate Answer: RPQ

QID : 171 - In the following passage some of the words have been left out. Read the passage carefully and select the correct answer for the given blank out of the four alternatives.

Mother Teresa was a _____ woman and famous as "one woman, one mission" who had taken a big step to change the _____. She was born as Agnes Gnocchi Bojaxhin on 26th of August in 1910 in the Macedonia. She came _____ Kolkata when she was just 18 years old and continued _____ life's mission of caring poorest people. She had helped a lot of the poor people of Kolkata _____ from leprosy.

Mother Teresa was a _____ woman and

Options:

- 1) big
- 2) beautiful
- 3) fair
- 4) great

Correct Answer: great

Candidate Answer: great

QID : 172 - In the following passage some of the words have been left out. Read the passage carefully and select the correct answer for the given blank out of the four alternatives.

Mother Teresa was a _____ woman and famous as "one woman, one mission" who had taken a big step to change the _____. She was born as Agnes Gnocchi Bojaxhin on 26th of August in 1910 in the Macedonia. She came _____ Kolkata when she was just 18 years old and continued _____ life's mission of caring poorest people. She had helped a lot of the poor people of Kolkata _____ from leprosy.

Step to change the _____.

Options:

- 1) universe
- 2) globe
- 3) world
- 4) religion

Correct Answer: world

Candidate Answer: world

QID : 173 - In the following passage some of the words have been left out. Read the passage carefully and select the correct answer for the given blank out of the four alternatives.

Mother Teresa was a _____ woman and famous as "one woman, one mission" who had taken a big step to change the _____. She was born as Agnes Gnocchi Bojaxhin on 26th of August in 1910 in the Macedonia. She came _____ Kolkata when she was just 18 years old and continued _____ life's mission of caring poorest people. She had helped a lot of the poor people of Kolkata _____ from leprosy.

She came _____ Kolkata when

Options:

1) to

2) in

3) at

4) on

Correct Answer: to

Candidate Answer: to

QID : 174 - In the following passage some of the words have been left out. Read the passage carefully and select the correct answer for the given blank out of the four alternatives.

Mother Teresa was a _____ woman and famous as "one woman, one mission" who had taken a big step to change the _____. She was born as Agnes Gnocchi Bojaxhin on 26th of August in 1910 in the Macedonia. She came _____ Kolkata when she was just 18 years old and continued _____ life's mission of caring poorest people. She had helped a lot of the poor people of Kolkata _____ from leprosy.

Years old and continued _____

Options:

1) here's

2) her

3) their

4) our

Correct Answer: her

Candidate Answer: her

QID : 175 - In the following passage some of the words have been left out. Read the passage carefully and select the correct answer for the given blank out of the four alternatives.

Mother Teresa was a _____ woman and famous as "one woman, one mission" who had taken a big step to change the _____. She was born as Agnes Gnocchi Bojaxhin on 26th of August in 1910 in the Macedonia. She came _____ Kolkata when she was just 18 years old and continued _____ life's mission of caring poorest people. She had helped a lot of the poor people of Kolkata _____ from leprosy.

Of Kolkata _____ from the leprosy.

Options:

1) enjoying

2) suffering

3) caring

4) containing

Correct Answer: suffering

Candidate Answer: suffering

QID : 176 - Which type of unemployment is generally seen in urban areas?

शहरी क्षेत्रों में आम तौर पर किस प्रकार की बेरोज़गारी दिखाई देती है?

Options:

1) Educated unemployment

शिक्षित बेरोज़गारी

2) Seasonal unemployment

मौसमी बेरोज़गारी

3) Disguised unemployment

प्रच्छन्न बेरोज़गारी

4) None of these

इनमें से कोई नहीं

Correct Answer: Educated unemployment

शिक्षित बेरोज़गारी

Candidate Answer: Educated unemployment

शिक्षित बेरोज़गारी

QID : 177 - Dairy comes under which sector of economic activity?

डेयरी किस आर्थिक गतिविधि के क्षेत्र के अंतर्गत आती है?

Options:

- 1) Tertiary sector
तृतीयक क्षेत्रक
- 2) Primary sector
प्राथमिक क्षेत्रक
- 3) Secondary sector
द्वितीयक क्षेत्रक
- 4) Quaternary sector
चतुर्मागात्मक क्षेत्रक

Correct Answer: Primary sector
प्राथमिक क्षेत्रक

Candidate Answer: Primary sector
प्राथमिक क्षेत्रक

QID : 178 - Who is also known as Panchayat President?

किस पंचायत का मुखिया भी कहा जाता है?

Options:

- 1) Ward Member
वार्ड मेम्बर
- 2) Sarpanch
सरपंच
- 3) Secretary of Gram Sabha
ग्राम सभा का सचिव
- 4) None of these
इनमें से कोई नहीं

Correct Answer: Sarpanch
सरपंच

Candidate Answer: Sarpanch
सरपंच

QID : 179 - Who was the chairman of Drafting Committee?

प्रारूप समिति के अध्यक्ष कौन थे?

Options:

- 1) Dr. Rajendra Prasad
डॉ. राजेन्द्र प्रसाद
- 2) Dr. B. R. Ambedkar
डॉ. बी. आर. अम्बेडकर
- 3) Mahatma Gandhi
महात्मा गाँधी
- 4) M.A. Jinnah
एम. ए. जिन्नाह

Correct Answer: Dr. B. R. Ambedkar
डॉ. बी. आर. अम्बेडकर

Candidate Answer: Dr. B. R. Ambedkar
डॉ. बी. आर. अम्बेडकर

QID : 180 - Where was the first Session of Indian National Congress held at?

भारतीय राष्ट्रीय कांग्रेस का प्रथम अधिवेशन किस शहर में आयोजित किया गया था?

Options:

- 1) Calcutta
कलकत्ता
- 2) Madras
मद्रास
- 3) Lahore
लाहौर
- 4) Bombay
बम्बई

Correct Answer: Bombay
बम्बई

Candidate Answer: Bombay
बम्बई

QID : 181 - Ibn Battuta was a fourteenth-century traveler to India from which place?

Options:

1) China

चीन

2) Tibet

तिब्बत

3) Morocco

मोरक्को

4) Greece

ग्रीस

Correct Answer: Morocco

मोरक्को

Candidate Answer: Morocco

मोरक्को

QID : 182 - Ursa Major or Big bear is an example of _____.

अर्सा मेजर अथवा बिग बियर एक प्रकार का _____ है।

Options:

1) Star

तारा

2) Constellation

नक्षत्रमंडल

3) Planet

ग्रह

4) Satellite

उपग्रह

Correct Answer: Constellation

नक्षत्रमंडल

Candidate Answer: Star

तारा

QID : 183 - What causes day and night cycle on Earth?

पृथ्वी पर दिन तथा रात का चक्र किस कारण होता है?

Options:

1) Rotation

घूर्णन

2) Revolution

परिक्रमण

3) Rotation and Revolution both

घूर्णन तथा परिक्रमण दोनों

4) None of these

इनमें से कोई नहीं

Correct Answer: Rotation

घूर्णन

Candidate Answer: Rotation

घूर्णन

QID : 184 - Which part of plant conducts water in plants?

पौधों का कौन सा भाग पौधों में जल का संवहन करता है?

Options:

1) Leaves

पत्तियाँ

2) Fruits

फल

3) Flowers

फूल

4) Stem

तना

Correct Answer: Stem

तना

Candidate Answer: Stem

तना

QID : 185 - Which type of plants have weak stems and take support on neighbouring structures to climb up?

किस प्रकार के पौधों में तना कमजोर होता है तथा ये आस-पास के ढाँचे की सहायता से ऊपर चढ़ते हैं?

Options:

- 1) Shrubs
झाड़ी
- 2) Climbers
आरोही
- 3) Trees
वृक्ष
- 4) Herbs
शाक

Correct Answer: Climbers
आरोही

Candidate Answer: Climbers
आरोही

QID : 186 - Which type of plants are very tall and have hard and thick brown stem?

किस प्रकार के पौधे बहुत ऊँचे होते हैं तथा इनके तने सुदृढ़ एवं गहरे भूरे होते हैं?

Options:

- 1) Trees
वृक्ष
- 2) Herbs
शाक
- 3) Shrubs
झाड़ी
- 4) None of these
इनमें से कोई नहीं

Correct Answer: Trees
वृक्ष

Candidate Answer: Herbs
शाक

QID : 187 - If the momentum of a body is doubled, the kinetic energy is _____.

यदि एक पिण्ड का संवेग दोगुना कर दिया जाए तो गतिज ऊर्जा _____ हो जाती है।

Options:

- 1) becomes 1/4 times
एक चौथाई
- 2) Unchanged
अपरिवर्तित
- 3) Doubled
दोगुनी
- 4) becomes 4 times
चार गुनी

Correct Answer: becomes 4 times
चार गुनी

Candidate Answer: becomes 4 times
चार गुनी

QID : 188 - If action and reaction were to act on the same body, _____.

यदि क्रिया तथा प्रतिक्रिया एक ही पिण्ड पर कार्य करती हैं तो _____।

Options:

- 1) the resultant would be zero
परिणाम शून्य होगा
- 2) the body would not move at all
पिण्ड गतिशील नहीं होगा
- 3) body will start moving
पिण्ड चलना आरंभ कर देगा
- 4) Only (A) and (B) is correct
केवल (A) तथा (B) सही है

Correct Answer: the resultant would be zero
परिणाम शून्य होगा

Candidate Answer: the body would not move at all
पिण्ड गतिशील नहीं होगा

QID : 189 - Which is the first supercomputer of India?

भारत का पहला सुपरकम्प्यूटर कौन सा है?

Options:

- 1) CDC 8600
सी.डी.सी. 8600
- 2) Cray Titan
क्रय टाइटन
- 3) PARAM 800
परम 800
- 4) Cray Jaguar
क्रय जैगुआर

Correct Answer: PARAM 800
परम 800

Candidate Answer: PARAM 800
परम 800

QID : 190 - Soil is an example of which of the following?

मृदा निम्नलिखित में से किसका एक उदाहरण है?

Options:

- 1) Homogeneous mixture
समांगी मिश्रण
- 2) Molecule
अणु
- 3) Compound
यौगिक
- 4) Heterogeneous mixture
विषमांगी मिश्रण

Correct Answer: Heterogeneous mixture
विषमांगी मिश्रण

Candidate Answer: Heterogeneous mixture
विषमांगी मिश्रण

QID : 191 - An atom is _____.

एक परमाणु _____ होता है।

Options:

- 1) the smallest particle of matter known
पदार्थ का सबसे छोटा ज्ञात कण
- 2) the smallest particle of a gas
एक गैस का सबसे छोटा कण
- 3) the smallest indivisible particle of an element that can take part in a chemical change
एक तत्व का सबसे छोटा अविभाज्य कण जो एक रासायनिक परिवर्तन में भाग ले सकता है
- 4) charged particle
एक आवेशित कण

Correct Answer: the smallest indivisible particle of an element that can take part in a chemical change
एक तत्व का सबसे छोटा अविभाज्य कण जो एक रासायनिक परिवर्तन में भाग ले सकता है

Candidate Answer: the smallest indivisible particle of an element that can take part in a chemical change
एक तत्व का सबसे छोटा अविभाज्य कण जो एक रासायनिक परिवर्तन में भाग ले सकता है

QID : 192 - What is the process of seeping of water into the ground called?

भूमि में जल के रिसाव की प्रक्रिया क्या कहलाती है?

Options:

- 1) Infiltration
अंतः स्पंदन
- 2) Filtration
स्पंदन
- 3) Percolation
टपकन
- 4) Sedimentation
अवसादन

Correct Answer: Infiltration
अंतः स्पंदन

Candidate Answer: Infiltration
अंतः स्पंदन

QID : 193 - When was "Make in India" initiative launched?

"मेक-इन-इंडिया" पहल का शुभआरंभ कब किया गया था?

Options:

1) December 2013

दिसंबर 2013

2) March 2014

मार्च 2014

3) September 2014

सितंबर 2014

4) June 2015

जून 2015

Correct Answer: September 2014

सितंबर 2014

Candidate Answer: September 2014

सितंबर 2014

QID : 194 - Who among the following invented steam engine?

निम्नलिखित में से किसने भाप का इंजन का आविष्कार किया था?

Options:

1) Enrico Fermi

एन्नीको फर्मी

2) James Boyle

जैम्स बॉयल

3) Max Born

मैक्स बॉर्न

4) James Watt

जैम्स वॉट

Correct Answer: James Watt

जैम्स वॉट

Candidate Answer: James Watt

जैम्स वॉट

QID : 195 - Dhyanchand was associated with which sport?

ध्यानचंद किस खेल से जुड़े थे?

Options:

1) Kabbadi

कबड्डी

2) Hockey

हॉकी

3) Cricket

क्रिकेट

4) Football

फुटबॉल

Correct Answer: Hockey

हॉकी

Candidate Answer: Hockey

हॉकी

QID : 196 - Who among the following is famous for playing flute?

निम्नलिखित में से कौन बाँसुरी बजाने के लिए प्रसिद्ध हैं?

Options:

1) Zakir Hussain

ज़ाकिर हुसैन

2) Ravi Shankar

रवि शंकर

3) Bismillah Khan

बिसमिल्लाह खान

4) Hari Prasad Chaurasia

हरि प्रसाद चौरसिया

Correct Answer: Hari Prasad Chaurasia

हरि प्रसाद चौरसिया

Candidate Answer: Hari Prasad Chaurasia

हरि प्रसाद चौरसिया

QID : 197 - Who among the following is not a recipient of the 2017 Ramon Magsaysay Awards?

निम्नलिखित में से कौन 2017 के रेमन मैगसेसे पुरस्कार का प्राप्तकर्ता नहीं है?

Options:

- 1) Ishizawa Yoshiaki
इशिज़ावा योशियाकी
- 2) Nababan Abdon
नबाबन एब्दन
- 3) Tay Toni
टे टोनी
- 4) Sanjiv Chaturvedi
संजीव चतुर्वेदी

Correct Answer: Sanjiv Chaturvedi
संजीव चतुर्वेदी

Candidate Answer: Sanjiv Chaturvedi
संजीव चतुर्वेदी

QID : 198 - Who is the author of the book named "True Colours"?

"टू कलर्स" नामक पुस्तक के लेखक कौन हैं?

Options:

- 1) Bette Dam
बेट्टे डाम
- 2) Alexander Bard
एलेग्ज़ेंडर बार्ड
- 3) Christina Lamb
क्रिस्टिना लैम्ब
- 4) Adam Gilchrist
एडम गिलक्रिस्ट

Correct Answer: Adam Gilchrist
एडम गिलक्रिस्ट

Candidate Answer: Adam Gilchrist
एडम गिलक्रिस्ट

QID : 199 - Minsk protocol is agreement between Ukrain, the Russian Federation, the Donetsk People's Republic and the Lungansk peoples republic to halt the war in the donbass region of _____.

मिन्स्क प्रोटोकॉल, यूक्रेन, रूसी संघ, डोनेट्स्क पीपुल्स रिपब्लिक और लुंगान्स्क लोक गणराज्य के बीच एक समझौता है, जो _____ के डॉनबस क्षेत्र में युद्ध की समाप्ति के लिए किया गया था।

Options:

- 1) Ukraine
यूक्रेन
- 2) Russia
रूस
- 3) The Donetsk people's republic
डोनेट्स्क लोगों का गणतंत्र
- 4) The Lungansk people's republic
लुंगान्स्क लोगों का गणतंत्र

Correct Answer: Ukraine
यूक्रेन

Candidate Answer: The Lungansk people's republic
लुंगान्स्क लोगों का गणतंत्र

QID : 200 - Palk strait separates India with which country?

पाक जलसंधि भारत को किस देश से अलग करती है?

Options:

- 1) Pakistan
पाकिस्तान
- 2) Bangladesh
बांग्लादेश
- 3) Indonesia
इंडोनेशिया
- 4) Sri Lanka
श्रीलंका

Correct Answer: Sri Lanka
श्रीलंका

Candidate Answer: Sri Lanka
श्रीलंका