

QID : 101 -

In the following question, select the number which can be placed at the sign of question mark (?) from the given alternatives.

निम्नलिखित प्रश्न में दिए गए विकल्पों में से प्रश्न चिह्न (?) के स्थान पर आने वाली संख्या को चुनिए।

4	5	6
3	4	2
5	3	3
23	19	?

Options:

1) 14

2) 16

3) 20

4) 24

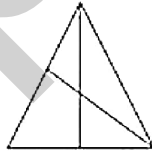
Correct Answer: 20

Candidate Answer: 14

QID : 102 -

How many triangles are there in the given figure?

दी गई आकृति में कितने त्रिभुज हैं?



Options:

1) 6

2) 7

3) 8

4) 10

Correct Answer: 8

Candidate Answer: 8

QID : 103 -

A word is represented by only one set of numbers as given in any one of the alternatives. The sets of numbers given in the alternatives are represented by two classes of alphabets as shown in the given two matrices. The columns and rows of **Matrix-I** are numbered from 0 to 4 and that of **Matrix-II** are numbered from 5 to 9. A letter from these matrices can be represented first by its row and next by its column, for example, 'X' can be represented by 21, 87, etc., and 'H' can be represented by 03, 65, etc. Similarly, you have to identify the set for the word "QUIET".

एक शब्द केवल एक संख्या-समूह द्वारा दर्शाया गया है, जैसा कि विकल्पों में से किसी एक में दिया गया है। विकल्पों में दिए गए संख्या-समूह अक्षरों के दो वर्गों द्वारा दर्शाए गए हैं, जैसा कि दिए गए दो आव्यूहों में है। आव्यूह-I के स्तम्भ और पंक्ति की संख्या 0 से 4 है और आव्यूह-II की 5 से 9। इन आव्यूहों से एक अक्षर को पहले उसकी पंक्ति और बाद में स्तम्भ संख्या द्वारा दर्शाया जा सकता है। उदाहरण के लिए 'X' को 21, 87, आदि द्वारा दर्शाया जा सकता है तथा 'H' को 03, 65, आदि द्वारा दर्शाया जा सकता है। इसी तरह से आपको प्रश्न में दिए शब्द "QUIET" के लिए समूह को पहचानना है।

Matrix-I
आव्यूह-I

	0	1	2	3	4
0	B	D	F	H	J
1	L	N	P	R	T
2	U	X	Z	C	A
3	G	I	K	M	O
4	Q	S	E	W	Y

Matrix-II
आव्यूह-II

	5	6	7	8	9
5	J	L	E	G	Y
6	H	A	C	I	W
7	F	P	Z	K	U
8	D	G	X	M	S
9	B	T	V	O	Q

Options:

1) 99, 20, 30, 42, 14

2) 40, 79, 67, 57, 13

3) 40, 79, 31, 57, 96

4) 99, 20, 69, 42, 13

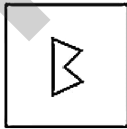
Correct Answer: 40, 79, 31, 57, 96

Candidate Answer: [NOT ANSWERED]

QID : 104 -

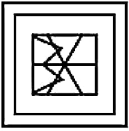
From the given answer figures, select the one in which the question figure is hidden/embedded.

दी गई उत्तर आकृतियों में से उस उत्तर आकृति को चुनिए जिस में प्रश्न आकृति निहित है।

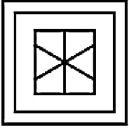


Options:

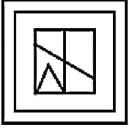
1)



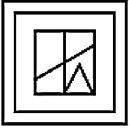
2)



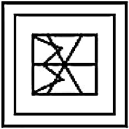
3)



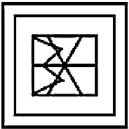
4)



Correct Answer:



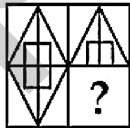
Candidate Answer:



QID : 105 -

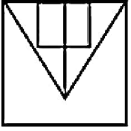
Which answer figure will complete the pattern in the question figure?

कौन सी उत्तर आकृति प्रश्न आकृति के प्रतिरूप को पूरा करेगी?

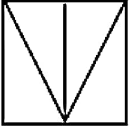


Options:

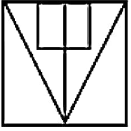
1)



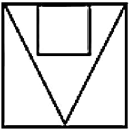
2)



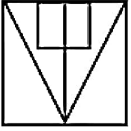
3)



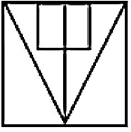
4)



Correct Answer:



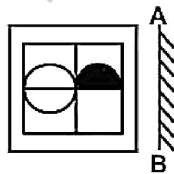
Candidate Answer:



QID : 106 -

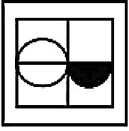
If a mirror is placed on the line AB, then which of the answer figures is the right image of the given figure?

यदि एक दर्पण को AB रेखा पर रखा जाए, तो दी गई उत्तर आकृतियों में से कौन सी आकृति प्रश्न आकृति की सही प्रतिबिम्ब होगी?

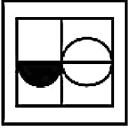


Options:

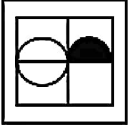
1)



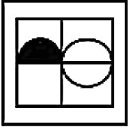
2)



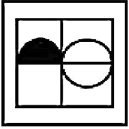
3)



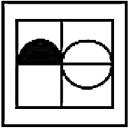
4)



Correct Answer:



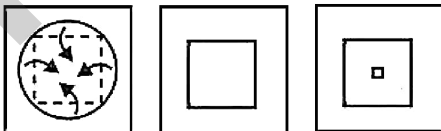
Candidate Answer:



QID : 107 -

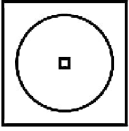
A piece of paper is folded and punched as shown below in the question figures. From the given answer figures, indicate how it will appear when opened?

नीचे के प्रश्न आकृतियों में दिखाए अनुसार कागज को मोड़कर छेदने तथा खोलने के बाद वह किस उत्तर आकृति जैसा दिखाई देगा?

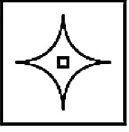


Options:

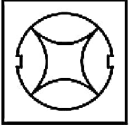
1)



2)



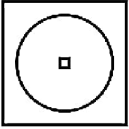
3)



4)



Correct Answer:



Candidate Answer: [NOT ANSWERED]

QID : 108 - By interchanging which two digits the equation will be correct?

$$43 \div 2 \times 26 - 2 = 527$$

किन दो अंकों को आपस में बदलने पर समीकरण सही हो जाएगा?

$$43 \div 2 \times 26 - 2 = 527$$

Options:

1) 6 and 2

6 तथा 2

2) 2 and 3

2 तथा 3

3) 3 and 6

3 तथा 6

4) 2 and 4

2 तथा 4

Correct Answer: 3 and 6

3 तथा 6

Candidate Answer: [NOT ANSWERED]

QID : 109 - If $66 @ 17 @ 53 = 641551$ and $17 @ 9 @ 99 = 15797$, then $41 @ 11 @ 81 = ?$

यदि $66 @ 17 @ 53 = 641551$ तथा $17 @ 9 @ 99 = 15797$ हो, तो $41 @ 11 @ 81 = ?$

Options:

1) 79993

2) 37999

3) 39979

4) 39997

Correct Answer: 39979

Candidate Answer: 39979

QID : 110 - Arrange the given words in the sequence in which they occur in the dictionary.

1. Roasted

2. Reason

3. Roger

4. Rigid

5. Ripple

निम्नलिखित शब्दों को शब्दकोश में आने वाले क्रम के अनुसार लिखें।

1. Roasted

2. Reason

3. Roger

4. Rigid

5. Ripple

Options:

1) 24513

2) 25413

3) 25431

4) 24531

Correct Answer: 24513

Candidate Answer: 24513

QID : 111 - In the following question, select the missing number from the given alternatives.

76, 73, 71, 67, 64, 62, ?

निम्नलिखित प्रश्न में दिए गए विकल्पों में से लुप्त अंक ज्ञात कीजिए।

76, 73, 71, 67, 64, 62, ?

Options:

1) 60

2) 57

3) 58

4) 59

Correct Answer: 58

Candidate Answer: 58

QID : 112 - A series is given with one term missing. Select the correct alternative from the given ones that will complete the series.

C, EF, HIJ, LMNO, ?

एक अनुक्रम दिया गया है, जिसमें से एक पद लुप्त है। दिए गए विकल्पों में से वह सही विकल्प चुनिए, जो अनुक्रम को पूरा करे।

C, EF, HIJ, LMNO, ?

Options:

1) NOPQR

2) RSTUP

3) PQRST

4) QRSTU

Correct Answer: QRSTU

Candidate Answer: QRSTU

QID : 113 - In the following question, select the odd word pair from the given alternatives.

निम्नलिखित प्रश्न में दिए गए विकल्पों में से विषम शब्द युग्म को चुनिए।

Options:

1) Teacher : Education

अध्यापक : शिक्षा

2) Judge : Justice

न्यायाधीश : न्याय

3) Carpenter : Saw

बढ़ई : आरी

4) Doctor : Treatment

चिकित्सक : चिकित्सा

Correct Answer: Carpenter : Saw

बढ़ई : आरी

Candidate Answer: Carpenter : Saw

बढ़ई : आरी

QID : 114 - In the following question, select the odd number pair from the given alternatives.

निम्नलिखित प्रश्न में दिए गए विकल्पों में से विषम संख्या युग्म को चुनिए।

Options:

1) 18 : 37

2) 24 : 47

3) 32 : 65

4) 48 : 97

Correct Answer: 24 : 47

Candidate Answer: [NOT ANSWERED]

QID : 115 - In the following question, select the odd letter pair from the given alternatives.

निम्नलिखित प्रश्न में दिए गए विकल्पों में से विषम अक्षर युग्म को चुनिए।

Options:

1) EI - LM

2) AE - RT

3) IO - WY

4) OU - DF

Correct Answer: EI - LM

QID : 116 - Identify the diagram that best represents the relationship among the given classes.

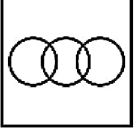
Pen, Ink, Refill

वह आरेख चुनिए जो नीचे दिए गए वर्गों के बीच के संबंध का सही निरूपण करता है।

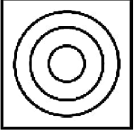
कलम, स्याही, रीफिल

Options:

1)



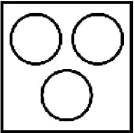
2)



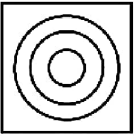
3)



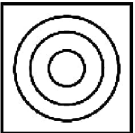
4)



Correct Answer:



Candidate Answer:



QID : 117 - In the following question, select the related word from the given alternatives.

North : South :: South-East : ?

निम्नलिखित प्रश्न में दिए गए विकल्पों में से संबंधित शब्द को चुनिए।

उत्तर : दक्षिण :: दक्षिण-पूर्व : ?

Options:

1) North-West

उत्तर-पश्चिम

2) West

पश्चिम

3) North-East

उत्तर-पूर्व

4) East

पूर्व

Correct Answer: North-West

उत्तर-पश्चिम

Candidate Answer: North-West

उत्तर-पश्चिम

QID : 118 - In the following question, select the related number from the given alternatives.

226 : 213 :: 302 : ?

निम्नलिखित प्रश्न में दिए गए विकल्पों में से संबंधित संख्या को चुनिए।

226 : 213 :: 302 : ?

Options:

1) 294

2) 289

3) 263

4) 243

Correct Answer: 289

Candidate Answer: 289

QID : 119 - In the following question, select the related letters from the given alternatives.

AIR : ZKO :: CAP : ?

निम्नलिखित प्रश्न में दिए गए विकल्पों में से संबंधित अक्षरों को चुनिए।

AIR : ZKO :: CAP : ?

Options:

1) ACM

2) ABN

3) BCM

4) BBN

Correct Answer: BCM

Candidate Answer: [NOT ANSWERED]

QID : 120 - In the following question, select the word which cannot be formed using the letters of the given word.

EXAMINATION

निम्नलिखित विकल्पों में से वह शब्द चुनिए जो दिए गए शब्द के अक्षरों का प्रयोग करके नहीं बनाया जा सकता।

EXAMINATION

Options:

1) MINE

2) TIME

3) SAME

4) NOTE

Correct Answer: SAME

Candidate Answer: SAME

QID : 121 - Keshav walks 15 km towards south. He takes a right turn and walks 25 km. He takes a right turn and walks 10 km. In which direction is he from his starting point?

केशव दक्षिण की ओर 15 कि.मी. चलता है। वह दायीं ओर मुड़ता है तथा 25 कि.मी. चलता है। वह दायीं ओर मुड़ता है तथा 10 कि.मी. चलता है। वह अपने आरंभिक बिन्दु से किस दिशा में है?

Options:

1) South-West

दक्षिण-पश्चिम

2) South

दक्षिण

3) South-East

दक्षिण-पूर्व

4) West

पश्चिम

Correct Answer: South-West

दक्षिण-पश्चिम

Candidate Answer: South-West

दक्षिण-पश्चिम

QID : 122 - A, B, C, D and E are 5 books kept on top of each other. C is kept between A and B. D and E are kept together. E is kept above B. Which book is in the middle?

A, B, C, D तथा E, 5 पुस्तकें एक दूसरे के ऊपर रखी हैं। C, A तथा B के मध्य रखी है। D तथा E एक साथ रखी हैं। E, B के ऊपर रखी है। कौन सी पुस्तक मध्य में रखी है?

Options:

1) B or E

B अथवा E

2) E

3) C

4) B

Correct Answer: B

Candidate Answer: E

QID : 123 - In the following question below are given some statements followed by some conclusions. Taking the given statements to be true even if they seem to be at variance from commonly known facts, read all the conclusions and then decide which of the given conclusion logically follows the given statements.

Statements:

- I. All tables are chairs.
- II. Some tables are cups.

Conclusions:

- I. Some cups are chairs.
- II. Some chairs are tables.

नीचे दिए गए प्रत्येक प्रश्न में कुछ कथन और उनके बाद उन कथनों पर आधारित कुछ निष्कर्ष दिए गए हैं, हालांकि उनमें सामान्य ज्ञात तथ्यों से भिन्नता हो सकती है। सभी निष्कर्ष पढ़ें और फिर निर्धारित करें कि दिए गए कौन से निष्कर्ष, दिए गए कथनों के आधार पर युक्तिसंगत हैं।

कथन:

- I. सभी मेज़ कुर्सियाँ हैं।
- II. कुछ मेज़ कप हैं।

निष्कर्ष:

- I. कुछ कप कुर्सियाँ हैं।
- II. कुछ कुर्सियाँ मेज़ हैं।

Options:

- 1) Only conclusion (I) follows.
केवल निष्कर्ष (I) सही है।
- 2) Only conclusion (II) follows.
केवल निष्कर्ष (II) सही है।
- 3) Both conclusion follow.
दोनों ही निष्कर्ष सही हैं।
- 4) Neither conclusion (I) nor conclusion (II) follows.
न तो निष्कर्ष (I) न ही निष्कर्ष (II) सही है।

Correct Answer: Both conclusion follow.

दोनों ही निष्कर्ष सही हैं।

Candidate Answer: Only conclusion (I) follows.

केवल निष्कर्ष (I) सही है।

QID : 124 - In a certain code language, "PHONE" is written as "NFMLC". How is "POINT" written in that code language?

एक विशिष्ट कोड भाषा में, "PHONE" को "NFMLC" लिखा जाता है। इस कोड भाषा में "POINT" को किस प्रकार लिखा जाएगा?

Options:

- 1) NMGLR
- 2) NMGLS
- 3) NMHLR
- 4) NMHMR

Correct Answer: NMGLR

Candidate Answer: NMGLR

QID : 125 - In a certain code language, "BAD" is written as "412" and "MUD" is written as "42113". How is "RUN" written in that code language?

एक विशिष्ट कोड भाषा में, "BAD" को "412" तथा "MUD" को "42113" लिखा जाता है। इस कोड भाषा में "RUN" को किस प्रकार लिखा जाएगा?

Options:

- 1) 142118
- 2) 181213
- 3) 141218
- 4) 141412

Correct Answer: 142118

Candidate Answer: [NOT ANSWERED]

QID : 126 - What is the unit's digit of $125^{125} + 216^{216}$?

$125^{125} + 216^{216}$ का इकाई अंक क्या है?

Options:

- 1) 5
- 2) 1
- 3) 6
- 4) 7

Correct Answer: 1

Candidate Answer: [NOT ANSWERED]

QID : 127 - Which fraction among $3/7$, $5/11$ and $6/13$ is the largest?

$3/7$, $5/11$ तथा $6/13$ में से कौन सा भिन्न बड़ा है?

Options:

- 1) $3/7$
- 2) $5/11$
- 3) $6/13$
- 4) All are equal
सभी बराबर हैं

Correct Answer: $6/13$

Candidate Answer: $6/13$

QID : 128 - How many positive factors of 160 are there?

Options:

- 1) 6
- 2) 8
- 3) 5
- 4) 12

Correct Answer: 12

Candidate Answer: 8

QID : 129 -

What is the value of $\sqrt{1509 + \sqrt{144}}$?

$\sqrt{1509 + \sqrt{144}}$ का मान क्या है?

Options:

- 1) 39
- 2) 37
- 3) 41
- 4) 49

Correct Answer: 39

Candidate Answer: [NOT ANSWERED]

QID : 130 - What is the value of $4^2 - 3^2 + 6^2 - 5^2 + 8^2 - 7^2$?

$4^2 - 3^2 + 6^2 - 5^2 + 8^2 - 7^2$ का मान क्या है?

Options:

- 1) 30
- 2) 33
- 3) 3
- 4) 27

Correct Answer: 33

Candidate Answer: 33

QID : 131 - What is the smallest two digit perfect cube?

दो अंकों की सबसे छोटी पूर्ण घन क्या है?

Options:

- 1) 25
- 2) 27
- 3) 16
- 4) 64

Correct Answer: 27

Candidate Answer: 64

QID : 132 - Together X and Y can complete a work in 9 days, Y and Z in 12 days and X and Z in 18 days. Who is the most efficient worker among X, Y and Z?

X तथा Y किसी कार्य को मिलकर 9 दिनों में पूरा कर सकते हैं, Y तथा Z, 12 दिनों में तथा X तथा Z, 18 दिनों में पूरा कर सकते हैं। X, Y तथा Z में से सबसे अधिक कार्यकुशल कौन है?

Options:

- 1) X
- 2) Y
- 3) Z
- 4) Cannot be determined
ज्ञात नहीं किया जा सकता

Correct Answer: Y

Candidate Answer: [NOT ANSWERED]

QID : 133 - Pipes P and Q can fill a tank in 12 hours and 36 hours respectively. If both pipes are opened then, how much time (in hours) it will take to fill the tank?

पाइप P तथा Q एक टंकी को क्रमशः 12 घंटे तथा 36 घंटे में भर सकते हैं। यदि दोनों पाइप को खोल दिये जायें, तो टंकी को भरने में कितना समय (घंटों में) लगेगा?

Options:

- 1) 9
- 2) 8
- 3) 10
- 4) 7

Correct Answer: 9

Candidate Answer: [NOT ANSWERED]

QID : 134 - If the curved surface area of a cylinder is 440 cm^2 and the height of the cylinder is 10 cm, then what is the radius (in cm) of the cylinder?

यदि एक बेलन का पार्श्व पृष्ठीय क्षेत्रफल 440 से.मी.^2 है तथा बेलन की ऊँचाई 10 से.मी. है, तो बेलन की त्रिज्या (से.मी. में) क्या है?

Options:

- 1) 7
- 2) 14
- 3) 21
- 4) 3.5

Candidate Answer: [NOT ANSWERED]

QID : 135 - Selling and cost price of an article are Rs 3960 and Rs 3600 respectively. If 12% discount was given, then what is the percentage mark up?

एक वस्तु का विक्रय मूल्य तथा क्रय मूल्य क्रमशः 3960 रु तथा 3600 रु है। यदि 12% की छूट दी गयी हो, तो उसका अंकित मूल्य कितने प्रतिशत से बढ़ाया गया है?

Options:

- 1) 25
- 2) 30
- 3) 35
- 4) 20

Correct Answer: 25

Candidate Answer: [NOT ANSWERED]

QID : 136 - Cost price of an article is Rs 5500. It was sold at a profit of 9.09%. If the article was sold at a discount of 20%, then what is the marked price (in Rs) of the article?

एक वस्तु का क्रय मूल्य 5500 रु है। उसे 9.09% के लाभ पर बेचा गया। यदि वस्तु को 20% की छूट पर बेचा गया, तो वस्तु का अंकित मूल्य (रु में) क्या है?

Options:

- 1) 6000
- 2) 7500
- 3) 6600
- 4) 6800

Correct Answer: 7500

Candidate Answer: [NOT ANSWERED]

QID : 137 - Marks of X and Y are in the ratio 3 : 11 respectively. If the marks of X is 9, then find the marks of Y.

X तथा Y के अंको का अनुपात क्रमशः 3 : 11 है। यदि X के अंक 9 है तो, Y के अंक ज्ञात कीजिए।

Options:

- 1) 55
- 2) 22
- 3) 33
- 4) 44

Correct Answer: 33

Candidate Answer: [NOT ANSWERED]

QID : 138 - If $U : V = 6 : 7$ and $V : W = 21 : 6$, then find $U : V : W$.

यदि $U : V = 6 : 7$ तथा $V : W = 21 : 6$, तो $U : V : W$ ज्ञात कीजिए।

Options:

- 1) 6 : 7 : 6
- 2) 5 : 4 : 3
- 3) 6 : 14 : 12
- 4) 6 : 7 : 2

Correct Answer: 6 : 7 : 2

Candidate Answer: [NOT ANSWERED]

QID : 139 - What is the average of first 10 even numbers?

पहली 10 सम संख्याओं का औसत क्या है?

Options:

- 1) 12
- 2) 10
- 3) 13
- 4) 11

Correct Answer: 11

Candidate Answer: 11

QID : 140 - A man buys 10 oranges for a rupee and selling 8 oranges for a rupee. What is the profit percentage?

एक व्यक्ति एक रुपये में 10 संतरे खरीदता है तथा एक रुपये में 8 संतरे बेचता है। लाभ प्रतिशत क्या है?

Options:

- 1) 10
- 2) 12.5
- 3) 20
- 4) 25

Correct Answer: 25

Candidate Answer: [NOT ANSWERED]

QID : 141 - A fan costing Rs 1200 is being sold for Rs 1500. What is the profit percentage?

एक पंखा जिसका क्रय मूल्य 1200 रु है, को 1500 रु में बेचा जाता है। लाभ प्रतिशत क्या है?

Options:

- 1) 10
- 2) 12.5
- 3) 25
- 4) 20

Correct Answer: 25

Candidate Answer: [NOT ANSWERED]

QID : 142 - If 18% of a number is 720, then what is the 81% of the same number?

यदि किसी संख्या का 18%, 720 है, तो उस संख्या का 81% क्या है?

Options:

- 1) 2280
- 2) 1620
- 3) 3240
- 4) 3160

Correct Answer: 3240

Candidate Answer: [NOT ANSWERED]

QID : 143 - If P is 25% less than Q, then Q is how much percent more than P?

यदि P, Q से 25% कम है, तो Q, P से कितना प्रतिशत अधिक है?

Options:

- 1) 20
- 2) 16.66
- 3) 33.33
- 4) 12.5

Correct Answer: 33.33

Candidate Answer: [NOT ANSWERED]

QID : 144 - A train passes two bridges of length 400 metres and 200 metres in 80 seconds and 60 seconds respectively. What is the length (in metres) of the train?

एक रेलगाड़ी 400 मीटर तथा 200 मीटर लम्बे दो पुलों को क्रमशः 80 सेकण्ड तथा 60 सेकण्ड में पार कर लेती है। रेलगाड़ी की लम्बाई (मीटर में) क्या है?

Options:

- 1) 200
- 2) 400
- 3) 350
- 4) 720

Correct Answer: 400

Candidate Answer: [NOT ANSWERED]

QID : 145 - If y is an integer, then $(y^3 - y)$ is always multiple of ____.

यदि y एक पूर्णांक है, तो $(y^3 - y)$ सदैव ____ का गुणज होगा?

Options:

- 1) 5
- 2) 7
- 3) 9
- 4) 6

Correct Answer: 6

Candidate Answer: 5

QID : 146 - A certain sum becomes k times in 5 years at compound interest. In 30 years it will become how many times?

एक निश्चित राशि, चक्रवृद्धि ब्याज पर 5 वर्ष में k गुना हो जाती है। 30 वर्षों में वह कितने गुना हो जाएगी?

Options:

- 1) 5k
- 2) 6k
- 3) k^6
- 4) k^5

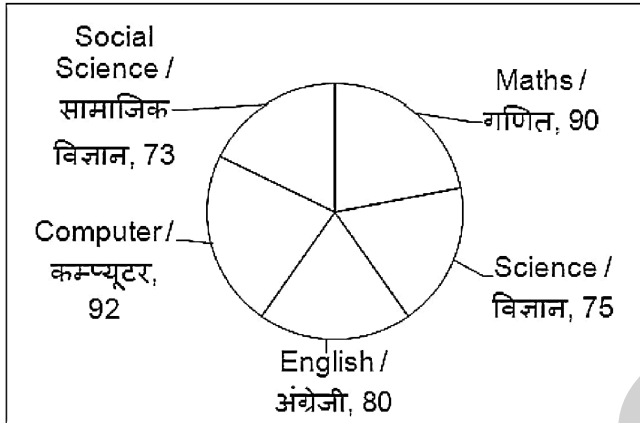
Correct Answer: k^6

Candidate Answer: [NOT ANSWERED]

QID : 147 -

The pie chart given below shows marks obtained by Aman in 5 subjects. Maximum marks is 100 for each subject.

नीचे दिए गए वृत्त चित्र में अमन द्वारा 5 परीक्षाओं में प्राप्त अंकों को दर्शाया गया है। प्रत्येक परीक्षा के लिए अधिकतम अंक 100 है।



What is the total marks obtained by Aman in Maths and Science?

अमन ने गणित तथा विज्ञान में कुल कितने अंक प्राप्त किए हैं?

Options:

- 1) 155
- 2) 165
- 3) 170
- 4) 145

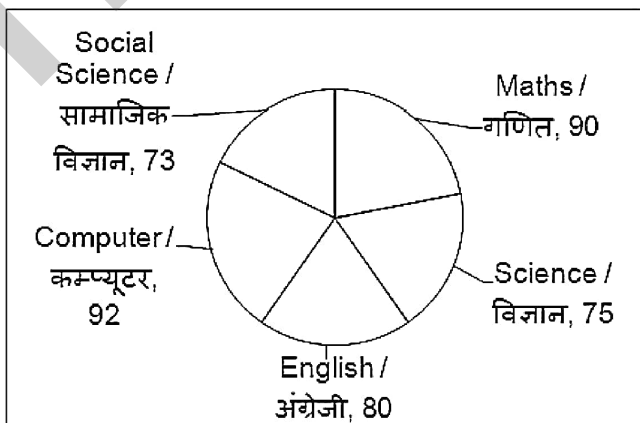
Correct Answer: 165

Candidate Answer: [NOT ANSWERED]

QID : 148 -

The pie chart given below shows marks obtained by Aman in 5 subjects. Maximum marks is 100 for each subject.

नीचे दिए गए वृत्त चित्र में अमन द्वारा 5 परीक्षाओं में प्राप्त अंकों को दर्शाया गया है। प्रत्येक परीक्षा के लिए अधिकतम अंक 100 है।



What is the average marks obtained by Aman in all 5 subjects?

Options:

- 1) 82
- 2) 83
- 3) 81
- 4) 80

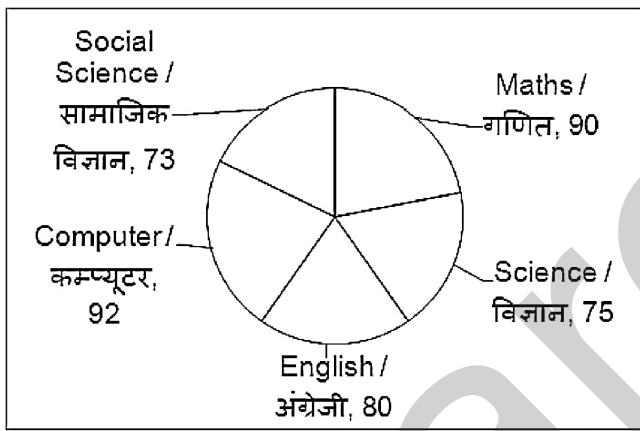
Correct Answer: 82

Candidate Answer: [NOT ANSWERED]

QID : 149 -

The pie chart given below shows marks obtained by Aman in 5 subjects. Maximum marks is 100 for each subject.

नीचे दिए गए वृत्त चित्र में अमन द्वारा 5 परीक्षाओं में प्राप्त अंकों को दर्शाया गया है। प्रत्येक परीक्षा के लिए अधिकतम अंक 100 है।



What is the average marks obtained by Aman in Computer Science, Maths and Social Science?

अमन ने कम्प्यूटर विज्ञान, गणित तथा सामाजिक विज्ञान में कितने औसत अंक प्राप्त किए हैं?

Options:

- 1) 84
- 2) 86
- 3) 87
- 4) 85

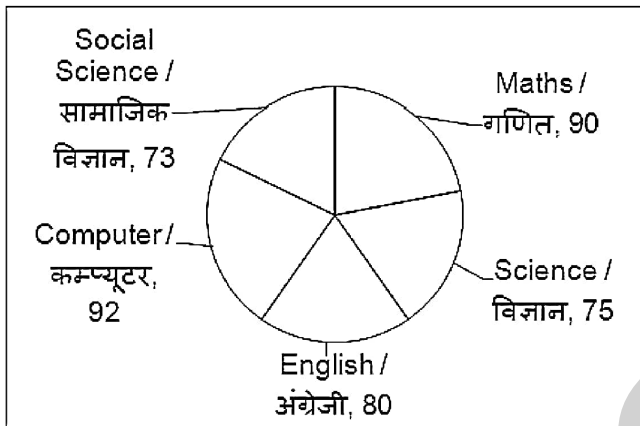
Correct Answer: 85

Candidate Answer: [NOT ANSWERED]

QID : 150 -

The pie chart given below shows marks obtained by Aman in 5 subjects. Maximum marks is 100 for each subject.

नीचे दिए गए वृत्त चित्र में अमन द्वारा 5 परीक्षाओं में प्राप्त अंकों को दर्शाया गया है। प्रत्येक परीक्षा के लिए अधिकतम अंक 100 है।



Marks obtained by Aman in Maths is how much percent more than the marks in Science?

अमन द्वारा गणित में प्राप्त अंक, विज्ञान में प्राप्त अंकों से कितना प्रतिशत अधिक है?

Options:

- 1) 25
- 2) 15
- 3) 20
- 4) 18

Correct Answer: 20

Candidate Answer: [NOT ANSWERED]

QID : 151 - In the following question, some part of the sentence may have errors. Find out which part of the sentence has an error and select the appropriate option. If a sentence is free from error, select 'No Error'.

Everyone attended the (1)/ seminar except (2)/ Raman and I. (3)/ No Error (4)/

Options:

- 1) 1
- 2) 2
- 3) 3
- 4) 4

Correct Answer: 3

Candidate Answer: 3

QID : 152 - In the following question, some part of the sentence may have errors. Find out which part of the sentence has an error and select the appropriate option. If a sentence is free from error, select 'No Error'.

One (1)/ may help (2)/ oneself. (3)/ No Error (4)/

Options:

- 1) 1
- 2) 2
- 3) 3
- 4) 4

Correct Answer: 4

Candidate Answer: 3

QID : 153 - In the following question, the sentence given with blank to be filled in with an appropriate word. Select the correct alternative out of the four and indicate it by selecting the appropriate option.

Kalpana has no paper to write _____.

Options:

- 1) upon
- 2) over
- 3) at
- 4) off

Correct Answer: upon

Candidate Answer: [NOT ANSWERED]

QID : 154 - In the following question, the sentence given with blank to be filled in with an appropriate word. Select the correct alternative out of the four and indicate it by selecting the appropriate option.

She is busy _____ her work.

Options:

- 1) about
- 2) with
- 3) of
- 4) on

Correct Answer: with

Candidate Answer: with

QID : 155 - In the following question, out of the given four alternatives, select the one which best expresses the meaning of the given word.

Envy

Options:

- 1) Comfort
- 2) Hatred
- 3) Pleasure
- 4) Kind

Correct Answer: Hatred

Candidate Answer: [NOT ANSWERED]

QID : 156 - In the following question, out of the given four alternatives, select the one which best expresses the meaning of the given word.

Harmony

Options:

- 1) Clash
- 2) Disagreement
- 3) Consensus
- 4) Fighting

Correct Answer: Consensus

Candidate Answer: [NOT ANSWERED]

QID : 157 - In the following question, out of the given four alternatives, select the one which best expresses the meaning of the given word.

Despair

Options:

- 1) Cheer
- 2) Misery
- 3) Faith
- 4) Trust

Correct Answer: Misery

Candidate Answer: [NOT ANSWERED]

QID : 158 - In the following question, out of the given four alternatives, select the one which is opposite in meaning of the given word.

Mitigate

Options:

- 1) Calm
- 2) Intensity
- 3) Ease
- 4) Pacify

Correct Answer: Intensity

Candidate Answer: [NOT ANSWERED]

QID : 159 - In the following question, out of the given four alternatives, select the one which is opposite in meaning of the given word.

Superfluous

Options:

- 1) Excessive
- 2) Necessary
- 3) Lavish
- 4) Abundant

Correct Answer: Necessary

Candidate Answer: [NOT ANSWERED]

QID : 160 - In the following question, out of the given four alternatives, select the one which is opposite in meaning of the given word.

Humility

Options:

- 1) Meekness
- 2) Reserve
- 3) Arrogance
- 4) Shyness

Correct Answer: Arrogance

Candidate Answer: [NOT ANSWERED]

QID : 161 - In the following question, out of the given four alternatives, select the alternative which best expresses the meaning of the Idiom/Phrase.

Chicken hearted

Options:

- 1) Obedient
- 2) Fearful
- 3) Courageous
- 4) Doubtful

Correct Answer: Fearful

Candidate Answer: Doubtful

QID : 162 - In the following question, out of the given four alternatives, select the alternative which best expresses the meaning of the Idiom/Phrase.

Draw a line

Options:

- 1) To fix a limit
- 2) To be able to read and write
- 3) To make sacrifice
- 4) To deceive

Correct Answer: To fix a limit

Candidate Answer: To fix a limit

QID : 163 - In the following question, out of the four alternatives, select the alternative which will improve the bracketed part of the sentence. In case no improvement is needed, select "no improvement".

Looking back, I realized I (**am**) wrong.

Options:

- 1) was
- 2) were
- 3) would
- 4) No improvement

Correct Answer: was

Candidate Answer: [NOT ANSWERED]

QID : 164 - In the following question, out of the four alternatives, select the alternative which will improve the bracketed part of the sentence. In case no improvement is needed, select "no improvement".

Women candidates are (**exempted to**) paying the application fee.

Options:

- 1) exempted for
- 2) exempted from
- 3) exempted in
- 4) No improvement

Correct Answer: exempted from

Candidate Answer: No improvement

QID : 165 - In the following question, out of the four alternatives, select the alternative which is the best substitute of the phrase.

The study of population

Options:

- 1) Biography
- 2) Orthography
- 3) Demography
- 4) Choreography

Correct Answer: Demography

Candidate Answer: Demography

QID : 166 - In the following question, out of the four alternatives, select the alternative which is the best substitute of the phrase.

Something that is hidden

Options:

- 1) Mystery
- 2) Doubt
- 3) Sermon
- 4) Distort

Correct Answer: Mystery

Candidate Answer: Doubt

QID : 167 - In the following question, a word has been written in four different ways out of which only one is correctly spelt. Select the correctly spelt word.

Options:

- 1) Criminol
- 2) Criminal
- 3) Crimnal
- 4) Criminul

Correct Answer: Criminal

Candidate Answer: Criminal

QID : 168 - In the following question, a word has been written in four different ways out of which only one is correctly spelt. Select the correctly spelt word.

Options:

- 1) Calinder
- 2) Calindur
- 3) Calender
- 4) Calendar

Correct Answer: Calendar

Candidate Answer: Calender

QID : 169 - The question below consists of a set of labelled sentences. Out of the four options given, select the most logical order of the sentences to form a coherent paragraph.

Deforestation is already held to have
P: areas and its continuation would
Q: lead to further ecological disasters
R: caused irreversible damage in some

Options:

- 1) PQR
- 2) RPQ
- 3) PRQ
- 4) RQP

Correct Answer: RPQ

Candidate Answer: [NOT ANSWERED]

QID : 170 - The question below consists of a set of labelled sentences. Out of the four options given, select the most logical order of the sentences to form a coherent paragraph.

A tsunami
P: fallout of an earthquake
Q: on the ocean floor
R: is normally a

Options:

- 1) RPQ
- 2) QPR
- 3) RQP
- 4) QRP

Correct Answer: RPQ

Candidate Answer: [NOT ANSWERED]

QID : 171 - In the following passage some of the words have been left out. Read the passage carefully and select the correct answer for the given blank out of the four alternatives.

United we stand and divided we fall is a famous proverb which signifies that if we are united and stay together, then ____ one can defeat us. But if we constantly fight and have ____ or misunderstandings, we may attract ____ to take advantage of ourselves which may ultimately result in ____ failure. The proverb clearly indicates that unity is the source of strength and people who are united have the capability to ____ any kind of situation as they share each others' burden and hardships.

then ____ one can defeat us

Options:

- 1) no
- 2) all
- 3) most
- 4) many

Correct Answer: no

Candidate Answer: no

QID : 172 - In the following passage some of the words have been left out. Read the passage carefully and select the correct answer for the given blank out of the four alternatives.

United we stand and divided we fall is a famous proverb which signifies that if we are united and stay together, then ____ one can defeat us. But if we constantly fight and have ____ or misunderstandings, we may attract ____ to take advantage of ourselves which may ultimately result in ____ failure. The proverb clearly indicates that unity is the source of strength and people who are united have the capability to ____ any kind of situation as they share each others' burden and hardships.

constantly fight and have ____ or misunderstandings,

Options:

- 1) reflects
- 2) conflicts
- 3) afflicts
- 4) thoughts

Correct Answer: conflicts

Candidate Answer: reflects

QID : 173 - In the following passage some of the words have been left out. Read the passage carefully and select the correct answer for the given blank out of the four alternatives.

United we stand and divided we fall is a famous proverb which signifies that if we are united and stay together, then ____ one can defeat us. But if we constantly fight and have ____ or misunderstandings, we may attract ____ to take advantage of ourselves which may ultimately result in ____ failure. The proverb clearly indicates that unity is the source of strength and people who are united have the capability to ____ any kind of situation as they share each others' burden and hardships.

we may attract ____ to take advantage

Options:

- 1) riders
- 2) animals
- 3) outsider
- 4) insects

Correct Answer: outsider

Candidate Answer: [NOT ANSWERED]

QID : 174 - In the following passage some of the words have been left out. Read the passage carefully and select the correct answer for the given blank out of the four alternatives.

United we stand and divided we fall is a famous proverb which signifies that if we are united and stay together, then ____ one can defeat us. But if we constantly fight and have ____ or misunderstandings, we may attract ____ to take advantage of ourselves which may ultimately result in ____ failure. The proverb clearly indicates that unity is the source of strength and people who are united have the capability to ____ any kind of situation as they share each others' burden and hardships.

ourselves which may ultimately result in ____ failure.

Options:

- 1) one's
- 2) there
- 3) his
- 4) our

Correct Answer: our

Candidate Answer: his

QID : 175 - In the following passage some of the words have been left out. Read the passage carefully and select the correct answer for the given blank out of the four alternatives.

United we stand and divided we fall is a famous proverb which signifies that if we are united and stay together, then _____ one can defeat us. But if we constantly fight and have _____ or misunderstandings, we may attract _____ to take advantage of ourselves which may ultimately result in _____ failure. The proverb clearly indicates that unity is the source of strength and people who are united have the capability to _____ any kind of situation as they share each others' burden and hardships.

are united have the capability to _____ any kind

Options:

- 1) tackle
- 2) crackle
- 3) mingle
- 4) buckle

Correct Answer: tackle

Candidate Answer: [NOT ANSWERED]

QID : 176 - For a country having an inflationary situation, which of the following statements is **INCORRECT**?

किसी देश में मुद्रास्फीति की स्थिति में, निम्नलिखित में से कौन सा कथन सही नहीं है ?

Options:

- 1) Cost of living rises
जीवन निर्वाह लागत बढ़ जाती है
- 2) Profit rise faster than wages
मजदूरी की तुलना में लाभ तेजी से बढ़ते हैं
- 3) Value of money falls
पूँजी का अवमूल्यन होता है
- 4) Country's exports become more competitive
देश के निर्यात अधिक प्रतिस्पर्धी हो जाते हैं

Correct Answer: Value of money falls
पूँजी का अवमूल्यन होता है

Candidate Answer: Cost of living rises
जीवन निर्वाह लागत बढ़ जाती है

QID : 177 - Weaving of clothes by using cotton fiber comes under which sector of Economic activity?

कपास के रेशों का उपयोग कर कपड़े बनाने की आर्थिक गतिविधि किस क्षेत्रक के अंतर्गत आती है?

Options:

- 1) Secondary sector
द्वितीयक क्षेत्रक
- 2) Primary sector
प्राथमिक क्षेत्रक
- 3) Tertiary sector
तृतीयक क्षेत्रक
- 4) Quaternary sector
चतुर्मागात्मक क्षेत्रक

Correct Answer: Secondary sector
द्वितीयक क्षेत्रक

Candidate Answer: Secondary sector
द्वितीयक क्षेत्रक

QID : 178 - Which Act prohibited discrimination on the basis of race, religion (or) national origin?

किस अधिनियम ने नस्ल, धर्म तथा राष्ट्रीय मूल के आधार पर भेदभाव को निषेध कर दिया गया था?

Options:

- 1) Civil Act
नागरिक अधिनियम
- 2) Rights Act
अधिकार अधिनियम
- 3) Civil Rights Act
नागरिक अधिकार अधिनियम
- 4) None of these
इनमेंसे कोई नहीं

Correct Answer: Civil Rights Act
नागरिक अधिकार अधिनियम

Candidate Answer: Civil Rights Act
नागरिक अधिकार अधिनियम

QID : 179 - Which among the following countries does **not** have a documented constitution?

निम्नलिखित में से किस देश के पास प्रलेखित संविधान नहीं है?

Options:

- 1) India
भारत
- 2) Pakistan
पाकिस्तान
- 3) America
अमेरिका
- 4) Britain
ब्रिटेन

Correct Answer: Britain

ब्रिटेन

Candidate Answer: Britain

ब्रिटेन

QID : 180 - Swadeshi Movement was known by which name in deltaic Andhra?

स्वदेशी आंदोलन को आंध्र के डेल्टा इलाकों में किस नाम से जाना जाता था?

Options:

1) National Movement

राष्ट्रीय आंदोलन

2) Freedom Movement

आज़ादी आंदोलन

3) Vande Matram Movement

वंदे मातरम आंदोलन

4) Anti-British Movement

ब्रिटिश विरोधी आंदोलन

Correct Answer: Vande Matram Movement

वंदे मातरम आंदोलन

Candidate Answer: [NOT ANSWERED]

QID : 181 - Which Sultan shifted his capital from Delhi to Daulatabad?

किस सुल्तान ने अपनी राजधानी को दिल्ली से दौलताबाद में बदला था?

Options:

1) Alauddin Khialji

अलाउद्दीन खीलजी

2) Muhammad Tughlaq

मुहम्मद तुगलक़

3) Feroz Shah Tughlaq

फिरोज़ शाह तुगलक़

4) Khizr Khan

खिज़्र खान

Correct Answer: Muhammad Tughlaq

मुहम्मद तुगलक़

Candidate Answer: Muhammad Tughlaq

मुहम्मद तुगलक़

QID : 182 - The pole star indicates which direction?

ध्रुव तारा कौन सी दिशा को दर्शाता है?

Options:

1) North

उत्तर

2) South

दक्षिण

3) East

पूरुब

4) West

पश्चिम

Correct Answer: North

उत्तर

Candidate Answer: East

पूरुब

QID : 183 - Which one of the following pair is **INCORRECT** with respect to Solstice and Equinox?

अयनांत (सोलस्टिस) तथा विषुव (इक्विनॉक्स) के संबंध में दिए गए जोड़ों में से कौन सा सही नहीं है?

Options:

1) 21 March – Equator

21 मार्च - भूमध्य रेखा

2) 21 June – Tropic of Cancer

21 जून - कर्क रेखा

3) 22 December – Tropic of Capricorn

22 दिसंबर - मकर रेखा

4) 23 September – North Pole

23 सितम्बर - उत्तरी ध्रुव

Correct Answer: 23 September – North Pole

23 सितम्बर - उत्तरी ध्रुव

Candidate Answer: [NOT ANSWERED]

QID : 184 - Night blindness is caused due to ____.

रतौंधी (नाइट ब्लाइंडनेस) _____ के कारण होती है।

Options:

- 1) less drinking of water
जल का कम सेवन
- 2) excess secretion of pineal gland
पीनियल ग्रंथि का अति स्रावण
- 3) Vitamin A deficiency
विटामिन ए की कमी
- 4) inheritance by X-chromosome
एक्स गुणसूत्र द्वारा जनित आनुवंशिकता

Correct Answer: Vitamin A deficiency
विटामिन ए की कमी

Candidate Answer: Vitamin A deficiency
विटामिन ए की कमी

QID : 185 - What is thick vein present in the middle of the leaf called?

पत्ती के मध्य में मोटी शिरा को क्या कहते हैं?

Options:

- 1) Midrib
मध्य शिरा
- 2) Leaf venation
शिरा-विन्यास
- 3) Reticulate
जालिका रूपी
- 4) Parallel venation
समांतर शिरा-विन्यास

Correct Answer: Midrib
मध्य शिरा

Candidate Answer: Reticulate
जालिका रूपी

QID : 186 - Which one of the following is connected with transport of water in plants?

निम्नलिखित में से कौन पौधों में पानी के परिवहन से जुड़ा है?

Options:

- 1) Phloem
फ्लोएम
- 2) Xylem
जाइलम
- 3) Epidermis
एपिडर्मिस
- 4) Cambium
कैम्बियम

Correct Answer: Xylem
जाइलम

Candidate Answer: Xylem
जाइलम

QID : 187 - Kilowatt hour (kWh) represents the unit of which of the following?

किलोवाट घण्टा (kWh) निम्नलिखित में से किसका मात्रक है?

Options:

- 1) Electrical Power
विद्युत शक्ति
- 2) Force
बल
- 3) Momentum
संवेग
- 4) Energy
उर्जा

Correct Answer: Energy
उर्जा

Candidate Answer: Electrical Power
विद्युत शक्ति

QID : 188 - A wound watch spring has _____ energy.

एक घड़ी की कमानी में _____ ऊर्जा होती है।

Options:

- 1) Electrical
विद्युत
- 2) Kinetic
गतिज
- 3) Potential
स्थितिज
- 4) both kinetic and potential
दोनों गतिज तथा स्थितिज

Correct Answer: Potential
स्थितिज

Candidate Answer: Potential

QID : 189 - Which of the following **NOT** a web browser?

- I. Mozilla Firefox
- II. Opera
- III. Shalimar

निम्नलिखित में से कौन सा एक वेब ब्राउज़र नहीं है?

- I. मोज़िल्ला फायरफॉक्स
- II. ओपेरा
- III. शालीमार

Options:

- 1) Only I
केवल I
- 2) Only II and III
केवल II तथा III
- 3) Only III
केवल III
- 4) Only II
केवल II

Correct Answer: Only III
केवल III

Candidate Answer: [NOT ANSWERED]

QID : 190 - Soaps are sodium salts of which of the following?

साबुन निम्न में से किसके सोडियम लवण होते हैं?

Options:

- 1) Mineral acids
खनिज अम्ल
- 2) Fatty acids
वसा अम्ल
- 3) Lactic acid
लैक्टिक अम्ल
- 4) Carbonic acid
कार्बोनिक अम्ल

Correct Answer: Fatty acids
वसा अम्ल

Candidate Answer: Carbonic acid
कार्बोनिक अम्ल

QID : 191 - Vitamin C is also known as _____.

विटामिन C को _____ नाम से भी जाना जाता है।

Options:

- 1) Ascorbic acid
एस्कॉर्बिक अम्ल
- 2) Tartaric acid
टारटरिक अम्ल
- 3) Malic acid
मैलिक अम्ल
- 4) Acetic acid
एसीटिक अम्ल

Correct Answer: Ascorbic acid
एस्कॉर्बिक अम्ल

Candidate Answer: Ascorbic acid
एस्कॉर्बिक अम्ल

QID : 192 - Which among the following can be termed as a "dynamic living entity"?

निम्नलिखित में से किसे एक "गतिशील सजीव ईकाई" कहा जा सकता है?

Options:

- 1) Tree
वृक्ष
- 2) Water
जल
- 3) Forest
वन
- 4) Air
वायु

Correct Answer: Forest
वन

Candidate Answer: Air
वायु

QID : 193 - When was "Pradhan Mantri Sukanya Samridhi Yojana" launched?

Options:

- 1) September 2014
सितंबर 2014
- 2) August 2015
अगस्त 2015
- 3) January 2015
जनवरी 2015
- 4) January 2016
जनवरी 2016

Correct Answer: January 2015
जनवरी 2015

Candidate Answer: September 2014
सितंबर 2014

QID : 194 - Who among the following invented Diesel Engine?

निम्नलिखित में से किसने डीज़ल इंजन का आविष्कार किया था?

Options:

- 1) Otis
ओटिस
- 2) Rudolf Diesel
रुडोल्फ डीजल
- 3) Larry Page
लैरी पेज
- 4) Rane Laennec
रेन लेइन्नेक

Correct Answer: Rudolf Diesel
रुडोल्फ डीजल

Candidate Answer: Rudolf Diesel
रुडोल्फ डीजल

QID : 195 - How many players are there in a football team?

फुटबॉल टीम में कितने खिलाड़ी होते हैं?

Options:

- 1) 10
- 2) 12
- 3) 13
- 4) 11

Correct Answer: 11

Candidate Answer: [NOT ANSWERED]

QID : 196 - Which was the first talkie feature film of India?

भारत की प्रथम ध्वनि वैशिष्ट्य फिल्म कौन सी थी?

Options:

- 1) Alam Ara
आलम आरा
- 2) Shree Pundalik
श्री पुंडलिक
- 3) Raja Harischandra
राजा हरीसचंद्र
- 4) Keechaka Vadham
कीचाका वधम

Correct Answer: Alam Ara
आलम आरा

Candidate Answer: Raja Harischandra
राजा हरीसचंद्र

QID : 197 - Which film has won the Best Feature Film award in 64th National Awards?

64वें राष्ट्रीय पुरस्कार में सर्वश्रेष्ठ नाट्यरूपक फिल्म का पुरस्कार किस फिल्म ने जीता है?

Options:

- 1) Pink
पिंक
- 2) Dhanak
धनक
- 3) Kasaav
कसाव
- 4) Mahayodha Rana
महायोधा राना

Correct Answer: Kasaav
कसाव

Candidate Answer: [NOT ANSWERED]

QID : 198 - Who is the co-author of the book named "Playing It My Way"?

"प्लेइंग इट माई वे" नामक पुस्तक के सह-लेखक कौन हैं?

Options:

- 1) Boria Majumdar
बोरिया मजूमदार
- 2) Indu Anand
इंदु आनंद
- 3) Mary Kom
मेरी कोम
- 4) Jaswant Sinha
जसवंत सिंहा

Correct Answer: Boria Majumdar
बोरिया मजूमदार

Candidate Answer: Boria Majumdar
बोरिया मजूमदार

QID : 199 - Which country released 'Asian Century White Paper' with an aim to extend and strengthen its links with Asia?

किस देश ने एशिया के साथ संबंध बढ़ाने और इसे मजबूत करने के उद्देश्य से 'एशियाई शताब्दी श्वेत पत्र' जारी किया?

Options:

- 1) United States of America
संयुक्त राज्य अमेरिका
- 2) Australia
ऑस्ट्रेलिया
- 3) France
फ्रांस
- 4) Germany
जर्मनी

Correct Answer: Australia
ऑस्ट्रेलिया

Candidate Answer: France
फ्रांस

QID : 200 - In which year India-Bhutan Foundation was established?

किस साल भारत-भूटान फाउंडेशन की स्थापना हुई थी?

Options:

- 1) 1993
- 2) 1998
- 3) 2003
- 4) 2010

Correct Answer: 2003

Candidate Answer: [NOT ANSWERED]