

Section : General English

Q.1 Select the most appropriate meaning of the given idiom
Strike while the iron is hot

- Ans
- 1. To act at the right time
 - 2. To do something unimportant
 - 3. To wait for someone
 - 4. To cry all the time

Question ID : 2390874107
Status : Answered
Chosen Option : 1

Q.2 Select the correctly spelt word.

- Ans
- 1. Nocturnal
 - 2. Nocternal
 - 3. Nocturenal
 - 4. Nocturnal

Question ID : 2390874111
Status : Answered
Chosen Option : 4

Q.3 Select the most appropriate option to fill in the blank and make a grammatically correct sentence.

Simran was reading a book ____ waiting for the bus.

- Ans
- 1. while
 - 2. at
 - 3. from
 - 4. during

Question ID : 2390874095
Status : Answered
Chosen Option : 1

Q.4 Select the most appropriate option to fill in the blank and make a grammatically correct sentence.

People tend to turn a blind eye ____ crime against women.

- Ans
- 1. to
 - 2. in

3. on

4. at

Question ID : 2390874094
Status : Answered
Chosen Option : 3

Q.5 Select the most appropriate meaning of the given idiom
Jump on the bandwagon

- Ans
- 1. To take a long ride
 - 2. To join a popular trend
 - 3. To insult someone
 - 4. To trust someone blindly

Question ID : 2390874106
Status : Answered
Chosen Option : 2

Q.6 Select the most appropriate antonym of the word
Fickle

- Ans
- 1. Mild
 - 2. Hasty
 - 3. Constant
 - 4. Feeble

Question ID : 2390874104
Status : Answered
Chosen Option : 3

Q.7 Select the most appropriate word for the given group of words.
A gentle song sung to put a child to sleep.

- Ans
- 1. Lullaby
 - 2. Laurel
 - 3. Lyric
 - 4. Lyre

Question ID : 2390874108
Status : Answered
Chosen Option : 1

Q.8 Select the most appropriate antonym of the word
Vile

- Ans
- 1. decent
 - 2. Crafty
 - 3. Horrid
 - 4. Evil

Question ID : 2390874105
Status : Answered
Chosen Option : 1

Q.9 Select the most appropriate word for the given group of words.
Friendly and welcoming to visitors.

- Ans
- 1. Hostel
 - 2. Hostile
 - 3. Hospitable
 - 4. Hospital

Question ID : 2390874109
Status : Answered
Chosen Option : 3

Q.10 Identify the segment in the sentence which contains the grammatical error.
Jaya asked Sushmita to reminds her about the meeting.

- Ans
- 1. Sushmita to reminds
 - 2. the meeting
 - 3. Jaya asked
 - 4. her about

Question ID : 2390874089
Status : Answered
Chosen Option : 1

Q.11 Select the most appropriate option to substitute the underlined segment in the given sentence. If there is no need to substitute it, select No improvement.

Rashmi is not only smart but very beautiful.

- Ans
- 1. but beautiful
 - 2. No improvement
 - 3. but also very beautiful
 - 4. very beautiful

Question ID : 2390874092
Status : Answered
Chosen Option : 3

Q.12 Select the most appropriate option to substitute the underlined segment in the given sentence. If there is no need to substitute it, select No improvement.

Vivek was astonished at his failure in the exam.

- Ans
- 1. at his failing
 - 2. in his failure
 - 3. No improvement
 - 4. in his failing

Question ID : 2390874093
Status : Answered
Chosen Option : 3

Q.13 Identify the segment in the sentence which contains the grammatical error.
The robbers broke in the house at night.

- Ans
- 1. at night

- 2. broke in
- 3. the house
- 4. The robbers

Question ID : 2390874090
Status : Answered
Chosen Option : 4

Q.14 Select the most appropriate option to substitute the underlined segment in the given sentence. If there is no need to substitute it, select No improvement.

I'll be at the parlour near 5 p.m.

- Ans
- 1. till
 - 2. along
 - 3. unless
 - 4. No improvement

Question ID : 2390874091
Status : Answered
Chosen Option : 1

Q.15 Select the most appropriate option to fill in the blank and make a grammatically correct sentence.

Seema gave her teacher a beautiful _____ of pink roses on Teachers' Day.

- Ans
- 1. reed
 - 2. wreath
 - 3. grove
 - 4. bouquet

Question ID : 2390874113
Status : Answered
Chosen Option : 4

Comprehension:

In the following passage some words have been deleted. Fill in the blanks with the help of the alternatives given. Select the most appropriate option for each blank.

Scarcity is not created by war; (1)_____ is a permanent characteristic of all human (2)_____ and has been faced by the whole human (3)_____. It springs from the fact that the material resources of the world are (4)_____ and that our ability to make use of those resources is even more limited (5)_____ our ignorance.

SubQuestion No : 16

Q.16 Select the most appropriate option to fill in blank No.1.

- Ans
- 1. there
 - 2. those
 - 3. it
 - 4. these

Question ID : 2390874097
Status : Answered
Chosen Option : 3

Comprehension:

In the following passage some words have been deleted. Fill in the blanks with the help of the alternatives given. Select the most appropriate option for each blank.

Scarcity is not created by war; (1)_____ is a permanent characteristic of all human (2)_____ and has been faced by the whole human (3)_____. It springs from the fact that the material resources of the world are (4)_____ and that our ability to make use of those resources is even more limited (5)_____ our ignorance.

SubQuestion No : 17

Q.17 Select the most appropriate option to fill in blank No.2.

- Ans
- 1. behaviour
 - 2. societies
 - 3. cities
 - 4. nations

Question ID : 2390874098

Status : Answered

Chosen Option : 1

Comprehension:

In the following passage some words have been deleted. Fill in the blanks with the help of the alternatives given. Select the most appropriate option for each blank.

Scarcity is not created by war; (1)_____ is a permanent characteristic of all human (2)_____ and has been faced by the whole human (3)_____. It springs from the fact that the material resources of the world are (4)_____ and that our ability to make use of those resources is even more limited (5)_____ our ignorance.

SubQuestion No : 18

Q.18 Select the most appropriate option to fill in blank No.3.

- Ans
- 1. space
 - 2. kingdom
 - 3. beings
 - 4. race

Question ID : 2390874099

Status : Answered

Chosen Option : 4

Comprehension:

In the following passage some words have been deleted. Fill in the blanks with the help of the alternatives given. Select the most appropriate option for each blank.

Scarcity is not created by war; (1)_____ is a permanent characteristic of all human (2)_____ and has been faced by the whole human (3)_____. It springs from the fact that the material resources of the world are (4)_____ and that our ability to make use of those resources is even more limited (5)_____ our ignorance.

SubQuestion No : 19

Q.19 Select the most appropriate option to fill in blank No.4.

- Ans
- 1. restricted
 - 2. limited
 - 3. increased
 - 4. declined

Question ID : 2390874100

Chosen Option : 2

Comprehension:

In the following passage some words have been deleted. Fill in the blanks with the help of the alternatives given. Select the most appropriate option for each blank.

Scarcity is not created by war; (1)_____ is a permanent characteristic of all human (2)_____ and has been faced by the whole human (3)_____. It springs from the fact that the material resources of the world are (4)_____ and that our ability to make use of those resources is even more limited (5)_____ our ignorance.

SubQuestion No : 20

Q.20 Select the most appropriate option to fill in blank No.5.

- Ans
- 1. from
 - 2. for
 - 3. of
 - 4. by

Question ID : 2390874101

Status : Answered

Chosen Option : 2

Q.21 Identify the segment in the sentence which contains the grammatical error.
If I knew about him before I will have recommended him.

- Ans
- 1. I will have
 - 2. recommended him
 - 3. If I knew
 - 4. about him before

Question ID : 2390874088

Status : Answered

Chosen Option : 1

Q.22 Select the most appropriate synonym of the given word
Recently

- Ans
- 1. Usually
 - 2. Lately
 - 3. Immediately
 - 4. Normally

Question ID : 2390874103

Status : Answered

Chosen Option : 3

Q.23 Select the correctly spelt word.

- Ans
- 1. Addres
 - 2. Address
 - 3. Address
 - 4. Adress

Question ID : 2390874110

Status : Answered

Q.24 Select the most appropriate option to fill in the blank and make a grammatically correct sentence.

For many, *The Lion King* is ____ as a childhood memory.

- Ans
- 1. invested
 - 2. inherited
 - 3. deposited
 - 4. treasured

Question ID : 2390874112
Status : Answered
Chosen Option : 2

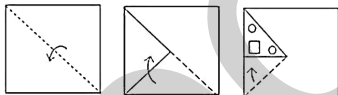
Q.25 Select the most appropriate synonym of the given word
Encumbrance

- Ans
- 1. Despair
 - 2. Stimulant
 - 3. Destroy
 - 4. Obstacle

Question ID : 2390874102
Status : Not Answered
Chosen Option : --

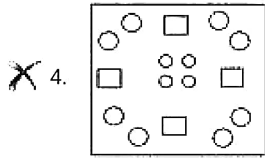
Section : General Intelligence & Reasoning

Q.1 A piece of paper is folded and cut as shown below in the question figures, how it will appear when unfolded.



Ans

- 1.
- 2.
- 3.



Question ID : 2390874616
 Status : Answered
 Chosen Option : 3

Q.2 If 'F' means '+', 'P' means 'x', 'T' means '÷' and 'K' means '-' then

$40 T 8 F 16 P 4 K 13 = ?$

- Ans
- 1. 56
 - 2. 78
 - 3. 75
 - 4. 69

Question ID : 2390874610
 Status : Answered
 Chosen Option : 1

Q.3 If '+' means '÷', '-' means 'x', 'x' means '+' and '÷' means '-', then what will be the value of $7 - 2 x 14 \div 96 + 12 = ?$

- Ans
- 1. -8
 - 2. 8
 - 3. 36
 - 4. 20

Question ID : 2390874611
 Status : Answered
 Chosen Option : 4

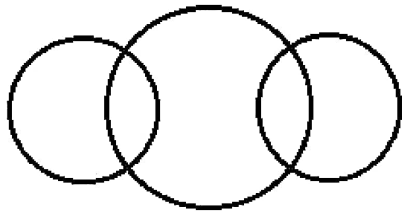
Q.4 In a certain code language 'STAY' is written as '19403100'. How is 'HOUR' written in that code language?

- Ans
- 1. 8306372
 - 2. 8456478
 - 3. 8456372
 - 4. 8306072

Question ID : 2390874599
 Status : Not Attempted and Marked For Review
 Chosen Option : --

Q.5

Select the Venn diagram that best represents the given set of classes.



- Ans
- 1. Water, Salt, Soda
 - 2. Man, Teacher, Tool
 - 3. Principal, Man, Woman
 - 4. Boy, Girl, Groom

Question ID : 2390874617
Status : Answered
Chosen Option : 3

Q.6 If $A = 1$ and $ANT = 105$ then $ASK = ?$

- Ans
- 1. 99
 - 2. 93
 - 3. 96
 - 4. 91

Question ID : 2390874600
Status : Not Attempted and Marked For Review
Chosen Option : --

Q.7 Select the set in which the numbers are related in the same way as are the numbers of the following set.

(4, 9, 37)

- Ans
- 1. (9, 19, 77)
 - 2. (5, 12, 46)
 - 3. (6, 13, 51)
 - 4. (7, 15, 62)

Question ID : 2390874609
Status : Not Attempted and Marked For Review
Chosen Option : --

Q.8 Select the term that will complete the following letter series.

QN, RP, TS, WW, _____, FH

- Ans
- 1. YC
 - 2. XB
 - 3. AC
 - 4. AB

Question ID : 2390874593
Status : Answered
Chosen Option : 4

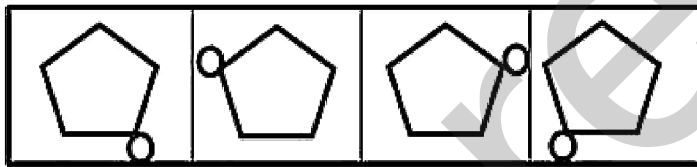
Q.9 In a certain language if 'HAMMER' is coded as '8#66\$*' and 'DISTRICT' is coded as '7&51*&21', then state which the correct code for below word is.

'MERC'

- Ans
- 1. 6#*21
 - 2. 6#*24
 - 3. 6\$*2&
 - 4. 6\$*24

Question ID : 2390874597
Status : Answered
Chosen Option : 3

Q.10 Select the figure that will come next in the following series.



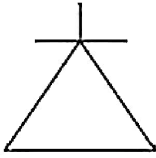
Ans

- 1.
- 2.
- 3.
- 4.

Question ID : 2390874612
Status : Answered
Chosen Option : 2

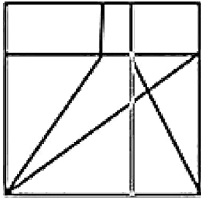
Q.11

Select the option in which the given figure is embedded. (Rotation is not allowed)

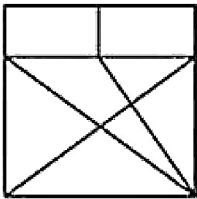


Ans

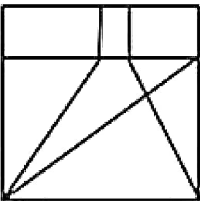
1.



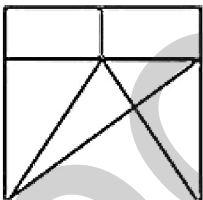
2.



3.



4.



Question ID : 2390874614

Status : Answered

Chosen Option : 4

Q.12 Select the option that is related to the third term in the same way as the second term is related to the first term.

35: 34 :: 76: ?

Ans 1. 42

2. 62

3. 85

4. 80

Question ID : 2390874608

Status : Not Attempted and Marked For Review

Chosen Option : --

Q.13 Select the correct option that will complete the series.

- Ans
- 1. 109
 - 2. 97
 - 3. 127
 - 4. 129

Question ID : 2390874606
Status : Answered
Chosen Option : 4

- Q.14 (i) K, L, M, N, O, P and Q are sitting around a circular table facing the centre.
(ii) L sits between N and O.
(iii) K is third to the left of O.
(iv) Q is second to the left of M who is to the immediate left of P.

Which of the following pairs has the first person sitting to the immediate left of the second person?

- Ans
- 1. LN
 - 2. QN
 - 3. LO
 - 4. MK

Question ID : 2390874601
Status : Not Attempted and Marked For Review
Chosen Option : --

- Q.15 If in a certain language if 'ADETP' is coded as 'DGHWS', and 'GVMN' is written as 'JYPQ', How is 'DTPQUV' written in that code?

- Ans
- 1. GQSTYX
 - 2. GQRTXY
 - 3. GWSTXY
 - 4. GSQTYX

Question ID : 2390874598
Status : Answered
Chosen Option : 3

- Q.16 'Cattle' is related to 'Herd' in the same way as 'Player' is related to ____.

- Ans
- 1. Medal
 - 2. Gang
 - 3. Team
 - 4. Tournament

Question ID : 2390874594
Status : Answered
Chosen Option : 3

- Q.17 The statements below are followed by two conclusions labelled I and II. Assuming that the information in the statements is true, even if it appears to be at variance with generally established facts, decide which conclusion(s) logically and definitely follow(s) from the information given in the statements.

Statements:

II. All trees are fruits.

Conclusions:

I. Some fruits are flowers.

II. All flowers are fruits.

- Ans
- 1. Either conclusion I or II follows.
 - 2. Both conclusions I and II follow.
 - 3. Only conclusion I follows.
 - 4. Only conclusion II follows.

Question ID : 2390874604

Status : Answered

Chosen Option : 2

Q.18 Two statements are given, followed by two conclusions numbered I and II. Assuming the statements to be true, even if they seem to be at variance with commonly known facts, decide which of the conclusions logically follow(s) from the statements.

Statements:

A. Some drivers are racers.

B. Some racers are pilots.

Conclusions:

I. Some pilots are drivers.

II. No pilot is a driver.

- Ans
- 1. Only conclusion II follows.
 - 2. Only conclusion I follows.
 - 3. Neither conclusion I nor II follows.
 - 4. Either conclusion I or II follows.

Question ID : 2390874605

Status : Answered

Chosen Option : 3

Q.19 A is taller than F, who is shorter than three persons. C is shorter than D, who is the tallest. B is taller than E. C is neither shorter than F nor taller than A. Who is the second shortest person among the given?

- Ans
- 1. C
 - 2. A
 - 3. E
 - 4. B

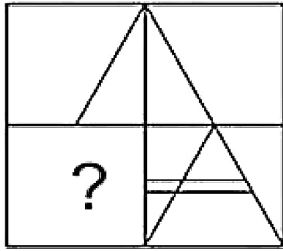
Question ID : 2390874603

Status : Answered

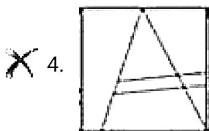
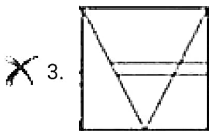
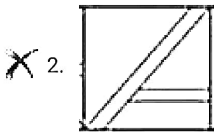
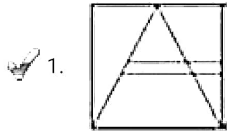
Chosen Option : 4

Q.20

Select the correct option to complete the following pattern.



Ans



Question ID : 2390874613

Status : Answered

Chosen Option : 1

Q.21 P, Q, R, S, T, U are 6 persons sitting in a straight line facing north but not in the same order. There are two persons sitting between the P and T. S is to the immediate right of P. R is at the extreme right. Q is second to the left of P. U is sitting between Q & P. Who is sitting at the left end?

- Ans
- 1. S
 - 2. T
 - 3. Q
 - 4. P

Question ID : 2390874602

Status : Answered

Chosen Option : 2

Q.22 Select the option that is related to the third term in the same way as the second term is related to the first term..

SHOW : OWHS :: FOUL : ?

- Ans 1. ULOF

- 2. UOFL
- 3. ULFO
- 4. UFOL

Question ID : 2390874595
 Status : Answered
 Chosen Option : 1

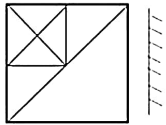
Q.23 Select the number that can replace the question mark (?) in the following series.

4, 2, 2, 3, 6, ?

- Ans
- 1. 3
 - 2. 6
 - 3. 12
 - 4. 15

Question ID : 2390874607
 Status : Not Attempted and Marked For Review
 Chosen Option : --

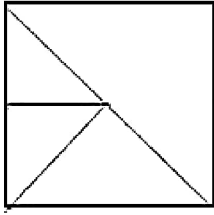
Q.24 Choose the option that most closely resembles the mirror image of the given word when mirror is placed at right side.



Ans

- 1.
- 2.
- 3.

X 4.



Question ID : 2390874615

Status : Answered

Chosen Option : 1

Q.25 Select the option that is related to the third term in the same way as the second term is related to the first term..

Eea : aEE :: Ppb : ?

- Ans
- 1. bPP
 - 2. EEA
 - 3. ppp
 - 4. BBp

Question ID : 2390874596

Status : Answered

Chosen Option : 1

Section : Numerical Aptitude

Q.1 Two trains cross each other in 12 seconds, when they travel in opposite directions and they take 60 seconds when they travel in the same direction. The possible speeds of the trains. (in m/sec), can be:

- Ans
- 1. 15, 45
 - 2. 18, 40
 - 3. 15, 30
 - 4. 20, 30

Question ID : 2390873903

Status : Answered

Chosen Option : 4

Q.2 The monthly incomes of Abhinav and Rekha are in the ratio 6:5 and their monthly expenditures are in the ratio 9:8. If the income of Abhinav is twice the expenditure of Rekha, then the ratio of savings of Abhinav and Rekha is:

- Ans
- 1. 5 : 3
 - 2. 23 : 18
 - 3. 3 : 2
 - 4. 21 : 16

Question ID : 2390873897

Status : Not Attempted and Marked For Review

Chosen Option : --

Q.3 A person loses 20% when he sells an article for ₹230. What percentage will he gain, if he sells it for ₹339.25?

2. 12

3. 20

4. 18

Question ID : 2390873893

Status : Not Attempted and
Marked For Review

Chosen Option : --

Q.4 The value of

$4 \times 2 \div 4$ of $(4 + 4 \div 4$ of $4) - (4 \div 4$ of $2 \times 4)$ is:

Ans 1. -1

2. $6\frac{1}{2}$

3. $-\frac{26}{17}$

4. $4\frac{1}{4}$

Question ID : 2390873886

Status : Not Attempted and
Marked For Review

Chosen Option : --

Q.5 The following table shows the weight of 20 students:

Weight (in kg)	48	51	60	53	56
No. of students	6	3	2	4	5

The mode and median of the above data are, respectively:

Ans 1. 53 and 56

2. 60 and 53

3. 51 and 48

4. 48 and 53

Question ID : 2390873891

Status : Answered

Chosen Option : 4

Q.6 The value of

$\frac{1}{4} \times \frac{3}{4} \div 1\frac{1}{4}$ of $\frac{2}{5} - \left[\frac{1}{6} \div \left\{ \frac{3}{7} \text{ of } \frac{14}{5} \times 1\frac{2}{3} - \left(3\frac{1}{2} - 2\frac{1}{6} \right) \right\} \right]$ is:

Ans 1. $\frac{1}{3}$

2.

3. $\frac{1}{8}$

4. $\frac{3}{8}$

Question ID : 2390873887
Status : Not Answered
Chosen Option : --

Q.7 Sonu decided to donate 12% of her monthly income to a charitable trust. On the day of donation, she changed her decision and donates a sum of ₹2160 which is equal to 125% of what she decided to donate earlier. Her monthly income is:

- Ans**
1. ₹14400
 2. ₹11200
 3. ₹9600
 4. ₹12800

Question ID : 2390873892
Status : Answered
Chosen Option : 1

Q.8 A certain sum invested at compound interest, amounts to ₹19965 at 10% p.a. in 3 years. The same sum will amount to ₹ x at the same rate in $2\frac{2}{5}$ years. If the interest is compounded yearly in both the cases, what is the value of x ?

- Ans**
1. 18867
 2. 18768
 3. 18876
 4. 18855

Question ID : 2390873899
Status : Not Answered
Chosen Option : --

Q.9 The following table presents the number of units of a product produced and sold by a company during six years.

Years	No. of units (in thousands)	
	Produced	Sold
2012	320	220
2013	338	328
2014	432	380
2015	256	242
2016	504	470
2017	680	630

In which year, the production of units of the product is approximately 31.4% less than the sale of units in 2017?

- Ans**
1. 2012
 2. 2014
 3. 2016
 4. 2013

Question ID : 2390873909
Status : Answered

Q.10 A cube of maximum possible volume is removed from a solid wooden sphere of radius 6 cm. The side of the cube is:

- Ans
- 1. $3\sqrt{3}$ cm
 - 2. $4\sqrt{3}$ cm
 - 3. $2\sqrt{3}$ cm
 - 4. $6\sqrt{3}$ cm

Question ID : 2390873906
Status : Answered
Chosen Option : 3

Q.11 Pipes A and B can empty a full tank in 8 and 12 hours, respectively. C is a filling pipe. All the three pipes were opened together at the same time and one-sixth of the tank got emptied in one hour. C alone can fill the tank in:

- Ans
- 1. 20 hours
 - 2. 30 hours
 - 3. 24 hours
 - 4. 25 hours

Question ID : 2390873901
Status : Not Attempted and Marked For Review
Chosen Option : --

Q.12 The average of 21 numbers is 44. The average of first 11 numbers is 48 and that of last 11 numbers is 42. If 11th number is excluded. What is the average of the remaining numbers?

- Ans
- 1. 43.5
 - 2. 43
 - 3. 42
 - 4. 42.9

Question ID : 2390873888
Status : Answered
Chosen Option : 4

Q.13 The marked price of an article is ₹x. After allowing a discount of 20% on the marked price, a shopkeeper gains ₹40. If his profit is $11\frac{1}{9}\%$, then the value of x is:

- Ans
- 1. 450
 - 2. 400
 - 3. 500
 - 4. 360

Question ID : 2390873890
Status : Answered
Chosen Option : 3

Q.14 A, B, and C can do a piece of work in 36 days, 54 days and 108 days, respectively. They started the work together but A left 9 days after the start of the work and B left 3 days before the work was completed. For how many days did C work?

2. 33

3. 30

4. 31

Question ID : 2390873900

Status : Not Answered

Chosen Option : --

Q.15 A person divided a certain sum among his three sons in the ratio 2 : 3 : 8. If he had instead divided it in the ratio $\frac{1}{2} : \frac{1}{3} : \frac{1}{8}$, the son who got the least share would have received ₹2200 more. The sum (in ₹) was:

Ans 1. 5940

2. 6556

3. 5980

4. 6578

Question ID : 2390873895

Status : Not Answered

Chosen Option : --

Q.16 A certain sum is lent at x% p.a. simple interest for $\frac{x}{3}$ years. The simple interest on the sum is equal to one-third of the sum. The value of x is:

Ans 1. 6

2. 12

3. 9

4. 10

Question ID : 2390873898

Status : Answered

Chosen Option : 4

Q.17 The total surface area of a solid cylinder is 1155 cm^2 . Its curved surface area is two-fifth of its total surface area. What is the height (in cm) of the cylinder?

(Take $\pi = \frac{22}{7}$)

Ans 1. 6

2. 5

3. 7

4. 10.5

Question ID : 2390873905

Status : Answered

Chosen Option : 3

Q.18 When 5, 6, 8, 9 and 12 divide the least number x, the remainder each case is 1, but x is divisible by 13. What will be the remainder when x is divided by 31?

Ans 1. 1

2. 0

3. 5

4. 3

Question ID : 2390873885
Status : Not Answered
Chosen Option : --

Q.19 The following table presents the number of units of a product produced and sold by a company during six years.

Years	No. of units (in thousands)	
	Produced	Sold
2012	320	220
2013	338	328
2014	432	380
2015	256	242
2016	504	470
2017	680	630

What is the ratio of the total number of units of the product sold in 2013 and 2015 to that produced in 2015 and 2016?

- Ans
- 1. 3 : 4
 - 2. 7 : 9
 - 3. 29 : 38
 - 4. 14 : 19

Question ID : 2390873907
Status : Answered
Chosen Option : 1

Q.20 The following table presents the number of units of a product produced and sold by a company during six years.

Years	No. of units (in thousands)	
	Produced	Sold
2012	320	220
2013	338	328
2014	432	380
2015	256	242
2016	504	470
2017	680	630

The number of units of the product sold in 2016 is approximately what percent more than the average production of the units in 2012 to 2016?

- Ans
- 1. 24
 - 2. 32
 - 3. 27
 - 4. 21

Question ID : 2390873908
Status : Answered
Chosen Option : 3

Q.21 Twice the speed of A is equal to thrice the speed of B. To travel a certain distance, A takes 42 minutes less than B to travel the same distance. What is the time (in minutes) taken by B to travel the same distance?

- Ans
- 1. 126
 - 2. 135
 - 3. 120
 - 4. 96

Question ID : 2390873902
Status : Answered

Q.22 The length of a rectangle is 6 cm more than its breadth and its perimeter is 100 cm. If the area of the rectangle is very nearly equal to the area of a circle, then what is the circumference of the circle?

(Take $\pi = \frac{22}{7}$)

- Ans**
- 1. 132 cm
 - 2. 66 cm
 - 3. 88 cm
 - 4. 110 cm

Question ID : 2390873904
Status : Answered
Chosen Option : 3

Q.23 If $(2x - y) : (5x + 3y) = 3 : 8$, then $(x^2 + y^2) : (x^2 - y^2) =$

- Ans**
- 1. 145 : 144
 - 2. 144 : 143
 - 3. 133 : 122
 - 4. 257 : 255

Question ID : 2390873896
Status : Not Answered
Chosen Option : --

Q.24 A trader presently earns 17% profit by selling an article. If he increases the price of the article by ₹33.60, his gain percent increases to 29%. What is the cost price of article?

- Ans**
- 1. ₹240
 - 2. ₹300
 - 3. ₹280
 - 4. ₹320

Question ID : 2390873894
Status : Answered
Chosen Option : 3

Q.25 Out of 90 students in a class, 60% are girls and rest are boys. The average score in English of boys is 30% more than that of girls. If the average score in English of all the students is 56, then what is the same for the girls?

- Ans**
- 1. 65
 - 2. 48
 - 3. 62
 - 4. 50

Question ID : 2390873889
Status : Not Answered
Chosen Option : --

Section : General awareness

Q.1 When was the first Home Rule League started by Bal Gangadhar Tilak?

Ans

2. 1916

3. 1920

4. 1922

Question ID : 2390874317
Status : Not Answered
Chosen Option : --

Q.2 Captain Hawkins and Sir Thomas Roe visited India during the reign of _____.

Ans 1. Humayun

2. Jahangir

3. Akbar

4. Babur

Question ID : 2390874316
Status : Answered
Chosen Option : 2

Q.3 Nirmala Sitharaman announced that National Sports Education Board for development of sportspersons to be set up under _____ while presenting the Budget of 2019.

Ans 1. Khelo aur Badho

2. Khel India Khel

3. Khelo India

4. Khelo aur Padho

Question ID : 2390874303
Status : Answered
Chosen Option : 3

Q.4 The Noida-based grocery delivery platform 'Veggie India' has been acquired by another grocery delivery firm. Name the acquiring firm.

Ans 1. Big Basket

2. Godrej Nature's Basket

3. Milkbasket

4. Grofers

Question ID : 2390874301
Status : Answered
Chosen Option : 4

Q.5 What is the ancient name of the river Kosi?

Ans 1. Kanhapenna

2. Karnali

3. Kubha

4. Kausiki

Question ID : 2390874312
Status : Answered
Chosen Option : 4

Q.6 Who built the magnificent cave temples 'Ratha' in Mahabalipuram?

- Ans**
- 1. Maharana Pratap Singh
 - 2. Narsimha
 - 3. Akbar
 - 4. Ashoka

Question ID : 2390874294
Status : Answered
Chosen Option : 2

Q.7 Which among the following is NOT an example of Bryophyta?

- Ans**
- 1. Funaria
 - 2. Marchantia
 - 3. Chara
 - 4. Riccia

Question ID : 2390874310
Status : Not Answered
Chosen Option : --

Q.8 What is the real name of Sister Nivedita?

- Ans**
- 1. Aileen Mathew
 - 2. Margaret Elizabeth Noble
 - 3. Agnes Gonxha Bojaxhiu
 - 4. Madeleine Slade

Question ID : 2390874300
Status : Not Answered
Chosen Option : --

Q.9 Which among the following music is NOT associated with Uttar Pradesh?

- Ans**
- 1. Rasiya
 - 2. Birha
 - 3. Kajari
 - 4. Tappa

Question ID : 2390874293
Status : Not Answered
Chosen Option : --

Q.10 When was the Citizenship Act passed?

- Ans**
- 1. 1955
 - 2. 1960
 - 3. 1965
 - 4. 1952

Question ID : 2390874304

Chosen Option : 1

Q.11 Who is the only Indian Air Force officer to be awarded with Param Vir Chakra?

- Ans
- 1. Karam Singh
 - 2. Somnath Singh
 - 3. Nirmal Jit Singh Sekhon
 - 4. Yogendra Singh Yadav

Question ID : 2390874299
Status : Not Answered
Chosen Option : --

Q.12 The mouth of Mollusca contains a file-like rasping organ for feeding which is called

- Ans
- 1. radula
 - 2. chitinous
 - 3. coelomate
 - 4. parapodia

Question ID : 2390874309
Status : Not Answered
Chosen Option : --

Q.13 Who received the Sportsman of the Year award in the Laureus World Sports Awards 2019?

- Ans
- 1. Tiger Woods
 - 2. Naomi Osaka
 - 3. Novak Djokovic
 - 4. Chloe Kim

Question ID : 2390874297
Status : Not Answered
Chosen Option : --

Q.14 Which among the following is NOT a characteristic of Physisorption?

- Ans
- 1. It usually takes place at a low temperature.
 - 2. It is irreversible.
 - 3. It does not require any activation energy.
 - 4. It forms multi-molecular layers.

Question ID : 2390874308
Status : Not Answered
Chosen Option : --

Q.15 Laterite soil is rich in Iron and _____.

- Ans
- 1. Aluminium
 - 2. Nitrogen
 - 3. Lime
 - 4. Potassium

Question ID : 2390874314
Status : Answered
Chosen Option : 2

Q.16 'Unbreakable' is the autobiography of _____.

- Ans
- 1. Mary Kom
 - 2. Chris Gayle
 - 3. Wasim Akram
 - 4. Sania Mirza

Question ID : 2390874298
Status : Answered
Chosen Option : 1

Q.17 The financial resources of an economy cannot be mobilised by _____.

- Ans
- 1. Inflation
 - 2. Taxation
 - 3. Public Savings
 - 4. Private Savings

Question ID : 2390874302
Status : Not Answered
Chosen Option : --

Q.18 Which among the following is Sri Lanka's highest peak?

- Ans
- 1. Ritigala
 - 2. Pidurutalagala
 - 3. Namunukula
 - 4. Mihinthale

Question ID : 2390874313
Status : Answered
Chosen Option : 4

Q.19 In which of the following dance forms women imitate parrots as part of the performance?

- Ans
- 1. Bhagoria
 - 2. Suwa
 - 3. Jawara
 - 4. Tertali

Question ID : 2390874295
Status : Not Answered
Chosen Option : --

Q.20 Which amendment made the provision for free and compulsory education between 6 to 14 years of age?

- Ans
- 1. 91st
 - 2. 52nd

4. 74th

Question ID : 2390874306
Status : Not Answered
Chosen Option : --

Q.21 A Golden Slam is winning ____ Grand Slam tournaments as well as the Olympics Gold Medal.

- Ans
- 1. four
 - 2. five
 - 3. two
 - 4. three

Question ID : 2390874296
Status : Not Answered
Chosen Option : --

Q.22 When was the Environment Protection Act passed?

- Ans
- 1. 1982
 - 2. 1972
 - 3. 1986
 - 4. 1992

Question ID : 2390874311
Status : Not Answered
Chosen Option : --

Q.23 How many articles were there in the original Constitution of India?

- Ans
- 1. 310
 - 2. 440
 - 3. 442
 - 4. 395

Question ID : 2390874305
Status : Not Answered
Chosen Option : --

Q.24 _____ is considered as the oldest discovered Indus Valley Civilization site.

- Ans
- 1. Mohenjo-daro
 - 2. Bhirrana
 - 3. Allahdino
 - 4. Rakhigarhi

Question ID : 2390874315
Status : Answered
Chosen Option : 1

Q.25 Car moving on a straight road is an example of _____ motion.

- Ans
- 1. rectilinear

- 2. periodic
- 3. curvilinear
- 4. random

Question ID : **2390874307**
Status : **Answered**
Chosen Option : **2**

mpcareer.in