

Section : General English

Q.1 Select the most appropriate synonym of the given word
Artful

- Ans**
- 1. Naïve
 - 2. Crafty
 - 3. Creative
 - 4. Artistic

Question ID : 2390874128
Status : Not Answered
Chosen Option : --

Q.2 Select the most appropriate option to substitute the underlined segment in the given sentence. If there is no need to substitute it, select No improvement.

The student's knowing of the subject astonished the teacher.

- Ans**
- 1. No improvement
 - 2. students knowledge
 - 3. student's knowledge
 - 4. students knowing

Question ID : 2390874119
Status : Answered
Chosen Option : 3

Q.3 Select the most appropriate antonym of the word
Harsh

- Ans**
- 1. Honest
 - 2. Rough
 - 3. Dirty
 - 4. Gentle

Question ID : 2390874130
Status : Answered
Chosen Option : 4

Q.4 Select the correctly spelt word.

- Ans**
- 1. Patrimony
 - 2. Patrimoney

3. Patremoney

4. Patremony

Question ID : 2390874136
Status : Answered
Chosen Option : 1

Q.5 Select the most appropriate antonym of the word
Obstinate

Ans 1. Stern

2. Flexible

3. Stubborn

4. Adamant

Question ID : 2390874131
Status : Answered
Chosen Option : 2

Q.6 Select the most appropriate option to substitute the underlined segment in the given sentence. If there is no need to substitute it, select No improvement.

Pratham will not go the party if he is personally invited.

Ans 1. No improvement

2. unless

3. because

4. even

Question ID : 2390874118
Status : Answered
Chosen Option : 2

Q.7 Identify the segment in the sentence which contains the grammatical error.
To escape floods, a tigress took refuge at a vegetable garden

Ans 1. a tigress

2. at a vegetable garden

3. took refuge

4. To escape floods,

Question ID : 2390874115
Status : Answered
Chosen Option : 2

Q.8 Select the most appropriate synonym of the given word
Morbid

Ans 1. Nasty

2. Lively

3. Pretty

4. Prompt

Question ID : 2390874129
Status : Answered

Chosen Option : --

Q.9 Select the most appropriate word for the given group of words.
An institution for the care of people who are mentally ill

- Ans 1. Asylum
 2. Aviary
 3. Apiary
 4. Arsenal

Question ID : 2390874134
Status : Answered
Chosen Option : 1

Q.10 Select the most appropriate option to fill in the blank and make a grammatically correct sentence.

Your need is certainly greater than ____.

- Ans 1. me
 2. mine
 3. I
 4. my

Question ID : 2390874121
Status : Answered
Chosen Option : 2

Comprehension:

In the following passage some words have been deleted. Fill in the blanks with the help of the alternatives given. Select the most appropriate option for each blank.

Arabia is mostly a desert. It is (1)_____ to walk over it during (2)_____ day. Occasionally, one may (3)_____ a fertile patch called an oasis (4)_____ springs and tall fig and palm trees. The Arabs are nomads (5)_____ live in tents and travel in caravans.

SubQuestion No : 11

Q.11 Select the most appropriate option to fill in blank No.1.

- Ans 1. useless
 2. hopeless
 3. impossible
 4. absurd

Question ID : 2390874123
Status : Answered
Chosen Option : 3

Comprehension:

In the following passage some words have been deleted. Fill in the blanks with the help of the alternatives given. Select the most appropriate option for each blank.

Arabia is mostly a desert. It is (1)_____ to walk over it during (2)_____ day. Occasionally, one may (3)_____ a fertile patch called an oasis (4)_____ springs and tall fig and palm trees. The Arabs are nomads (5)_____ live in tents and travel in caravans.

SubQuestion No : 12

Q.12 Select the most appropriate option to fill in blank No.2.

- Ans 1. the

- 2. a
- 3. one
- 4. an

Question ID : 2390874124
Status : Answered
Chosen Option : 1

Comprehension:

In the following passage some words have been deleted. Fill in the blanks with the help of the alternatives given. Select the most appropriate option for each blank.

Arabia is mostly a desert. It is (1)_____ to walk over it during (2)_____ day. Occasionally, one may (3)_____ a fertile patch called an oasis (4)_____ springs and tall fig and palm trees. The Arabs are nomads (5)_____ live in tents and travel in caravans.

SubQuestion No : 13

Q.13 Select the most appropriate option to fill in blank No.3.

- Ans 1. come across
- 2. come up
 - 3. come away
 - 4. come out

Question ID : 2390874125
Status : Answered
Chosen Option : 1

Comprehension:

In the following passage some words have been deleted. Fill in the blanks with the help of the alternatives given. Select the most appropriate option for each blank.

Arabia is mostly a desert. It is (1)_____ to walk over it during (2)_____ day. Occasionally, one may (3)_____ a fertile patch called an oasis (4)_____ springs and tall fig and palm trees. The Arabs are nomads (5)_____ live in tents and travel in caravans.

SubQuestion No : 14

Q.14 Select the most appropriate option to fill in blank No.4.

- Ans 1. for
- 2. with
 - 3. in
 - 4. on

Question ID : 2390874126
Status : Answered
Chosen Option : 2

Comprehension:

In the following passage some words have been deleted. Fill in the blanks with the help of the alternatives given. Select the most appropriate option for each blank.

Arabia is mostly a desert. It is (1)_____ to walk over it during (2)_____ day. Occasionally, one may (3)_____ a fertile patch called an oasis (4)_____ springs and tall fig and palm trees. The Arabs are nomads (5)_____ live in tents and travel in caravans.

SubQuestion No : 15

Q.15 Select the most appropriate option to fill in blank No.5.

- Ans 1. what

- 2. who
- 3. whom
- 4. which

Question ID : 2390874127
Status : Answered
Chosen Option : 2

Q.16 Identify the segment in the sentence which contains the grammatical error.
One of the friends were doubtful that the plan would work.

- Ans
- 1. were doubtful
 - 2. that the plan
 - 3. would work
 - 4. One of the friends

Question ID : 2390874114
Status : Answered
Chosen Option : 1

Q.17 Select the most appropriate option to fill in the blank and make a grammatically correct sentence.

A word can have a different _____ in different contexts.

- Ans
- 1. connotation
 - 2. contention
 - 3. confrontation
 - 4. constellation

Question ID : 2390874138
Status : Answered
Chosen Option : 1

Q.18 Select the correctly spelt word.

- Ans
- 1. Luminscent
 - 2. Luminascent
 - 3. Lumeniscent
 - 4. Luminescent

Question ID : 2390874137
Status : Answered
Chosen Option : 4

Q.19 Select the most appropriate meaning of the given idiom
Last straw

- Ans
- 1. Final decision
 - 2. Last cookie on the plate
 - 3. Last person in the queue
 - 4. Final problem in the series

Question ID : 2390874132
Status : Answered

Chosen Option : 4

Q.20 Select the most appropriate option to fill in the blank and make a grammatically correct sentence.

Timely alerts about floods in Bhutan _____ a blessing to Indian villages.

- Ans
- 1. have proved
 - 2. is proved
 - 3. has proved
 - 4. are proved

Question ID : 2390874120
Status : Answered
Chosen Option : 1

Q.21 Identify the segment in the sentence which contains the grammatical error.
Nisha rejected the job offer as a salary offered was too low

- Ans
- 1. Nisha rejected
 - 2. the job offer
 - 3. was too low
 - 4. as a salary offered

Question ID : 2390874116
Status : Answered
Chosen Option : 4

Q.22 Select the most appropriate meaning of the given idiom
Cut the mustard

- Ans
- 1. To be angry
 - 2. To be pessimistic
 - 3. To take shortcuts
 - 4. To succeed

Question ID : 2390874133
Status : Not Answered
Chosen Option : --

Q.23 Select the most appropriate option to substitute the underlined segment in the given sentence. If there is no need to substitute it, select No improvement.

Simran is more intelligent than any other girl in the class.

- Ans
- 1. most intelligent
 - 2. No improvement
 - 3. the more intelligent
 - 4. much intelligent

Question ID : 2390874117
Status : Answered
Chosen Option : 2

Q.24 Select the most appropriate word for the given group of words.
A person who is recov

- Ans
- 1. Invalid
 - 2. Convalescent
 - 3. Senator
 - 4. Cartographer

Question ID : 2390874135
Status : Answered
Chosen Option : 2

Q.25 Select the most appropriate option to fill in the blank and make a grammatically correct sentence.

The blind man needed ____ to cross the street.

- Ans
- 1. assistance
 - 2. guards
 - 3. porters
 - 4. cooperation

Question ID : 2390874139
Status : Answered
Chosen Option : 1

Section : General Intelligence & Reasoning

Q.1 In a certain code language, "LANDMARK" is written as "1311811121144". How is "NOTEBOOK" written in that code language?

- Ans
- 1. 21510111415205
 - 2. 21515111415205
 - 3. 21515101415205
 - 4. 14152052151511

Question ID : 2390874474
Status : Answered
Chosen Option : 2

Q.2 Find out the two signs to be interchanged for making following equation correct:

$$96 - 16 \div 4 \times 2 + 8 = 6$$

- Ans
- 1. \times and \div
 - 2. $+$ and \times
 - 3. $+$ and \div
 - 4. $-$ and \div

Question ID : 2390874486
Status : Answered
Chosen Option : 4

Q.3 Select the option that is related to the third term in the same way as the second term is related to the first term.

$$342 : 18 :: 156 : ?$$

- Ans
- 1. 5

- 2. 14
- 3. 11
- 4. 12

Question ID : 2390874483
Status : Answered
Chosen Option : 4

Q.4 Select the term that will come next in the following series.

MN, NOP, PQRS, STUVW, ?

- Ans
- 1. WXYZ
 - 2. WXYZA
 - 3. XYZABC
 - 4. WXYZAB

Question ID : 2390874468
Status : Answered
Chosen Option : 4

Q.5 If PLAIN is coded as NJYGL, then MUG is coded as _____.

- Ans
- 1. LTF
 - 2. JPE
 - 3. JPF
 - 4. KSE

Question ID : 2390874473
Status : Answered
Chosen Option : 2

Q.6 Seven children A, B, C, D, E, F and G are standing in a queue from top to bottom. E is at fifth place. Only C is between A and B. G is at bottom. B is three places after F. What is the position of D from top?

- Ans
- 1. Sixth
 - 2. Fourth
 - 3. Second
 - 4. Last

Question ID : 2390874476
Status : Answered
Chosen Option : 1

Q.7 Select the option that is related to the third term in the same way as the second term is related to the first term.

Letters : Word :: Sentences : ?

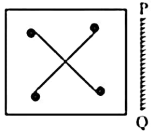
- Ans
- 1. Digits
 - 2. Numbers
 - 3. Paragraph
 - 4. Equations

Question ID : 2390874470

Status : Answered

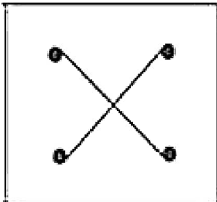
Chosen Option : 3

Q.8 Choose the option that most closely resembles the mirror image of the given figure when mirror is placed at right side.

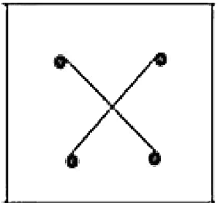


Ans

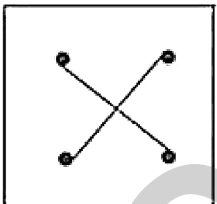
1.



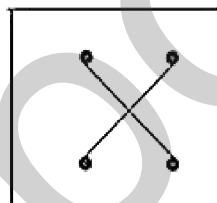
2.



3.



4.



Question ID : 2390874490

Status : Answered

Chosen Option : 3

Q.9 Read the given statement and conclusions carefully and decide which of the conclusions logically follow(s) from the statement.

Statement:

The scientific study of plants is known as Botany.

Conclusions:

I. Botany helps us understand human behaviour.

II. Botany helps us in understanding animal bodies

Ans

1. Either conclusion I or II follows.

2. Only conclusion II follows.

3. Only conclusion I follows.

4. Neither concl

Question ID : 2390874480
Status : Answered
Chosen Option : 4

Q.10 Select the option that is related to the third term in the same way as the second term is related to the first term.

Dictionary : Words :: Atlas : ?

- Ans
- 1. Dates
 - 2. Phone Numbers
 - 3. Food Items
 - 4. Maps

Question ID : 2390874469
Status : Answered
Chosen Option : 4

Q.11 Find the wrong term in the given series.

17, 22, 29, 36, 49, 62

- Ans
- 1. 22
 - 2. 49
 - 3. 29
 - 4. 36

Question ID : 2390874481
Status : Answered
Chosen Option : 4

Q.12 Radhika ranks sixteenth from the top and thirteenth from the bottom in a certain examination. How many students are there in the class?

- Ans
- 1. 27
 - 2. 29
 - 3. 28
 - 4. 30

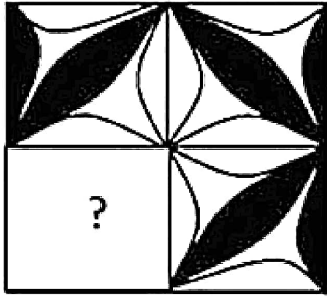
Question ID : 2390874478
Status : Answered
Chosen Option : 3

Q.13 If in a certain code language, BHOPAL is written as DKTWLY, how is MHOW written in that code?

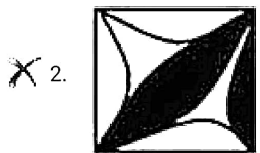
- Ans
- 1. TDKO
 - 2. OKDT
 - 3. OKTD
 - 4. DTOK

Question ID : 2390874472
Status : Answered
Chosen Option : 3

Q.14 Select the correct option to complete the following pattern.



Ans



Question ID : 2390874488

Status : Answered

Chosen Option : 4

Q.15 If RACK = 9; TOP = 5; then, MAPLE = ?

Ans 1. 12

2. 10

3. 28

4. 7

Question ID : 2390874475

Status : Answered

Chosen Option : 3

Q.16 Priya, Dinesh, Mahi, Chetan, Jay, Bravo, Amit and Alok are sitting around a circle facing the centre. Bravo is third to the right of Mahi and second to the left of Alok. Chetan is not an immediate neighbour of Mahi or Alok. Jay is on the immediate right of Priya, who is second to the right of Amit.

Who sits to the immediate left of Priya?


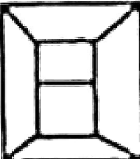


- Ans
- 1. Mahi
 - 2. Chetan
 - 3. Priya
 - 4. Bravo

Question ID : 2390874477
Status : Answered
Chosen Option : 4

Q.17 From the given answer figures, select the one in which question figure is hidden/embedded. (Rotation not allowed)

P

Ans

- 1. 
- 2. 
- 3. 
- 4. 

Question ID : 2390874489
Status : Answered
Chosen Option : 2

Q.18 Study the following pattern and find the missing number from the given options.

8 25 76

5 16 49

7 22 ?

- Ans
- 1. 90
 - 2. 64
 - 3. 67
 - 4. 79

Question ID : 2390874484

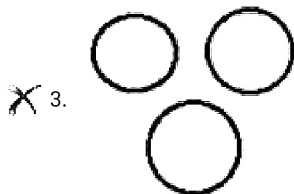
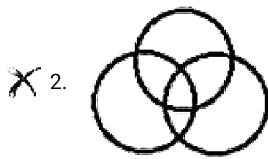
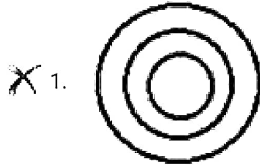
Status : Not Answered

Chosen Option : --

Q.19 Select the Venn diagram that best represents the given set of classes.

Hard bed, Sofa, Furniture

Ans



Question ID : 2390874492

Status : Answered

Chosen Option : 4

Q.20 The statements below are followed by two conclusions labelled I and II. Assuming that the information in the statements is true, even if it appears to be at variance with generally established facts, decide which conclusion(s) logically and definitely follow(s) from the information given in the statements.

Statements:

Some tables are ears.

All ears are spoons.

Some spoons are glasses.

Conclusions:

I. Some glasses are tables.

II. Some glasses are ears.

Ans

1. Only Conclusion II follows

2. Neither Conclusion I nor II follows

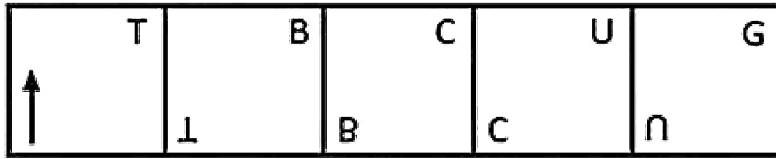
3. Only Conclusion I follows

4. Both Conclusions I and II follow

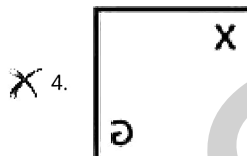
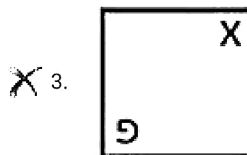
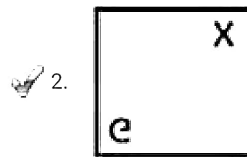
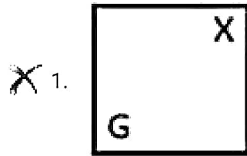
Question ID : 2390874479

Status : Answered

Q.21 Select the figure that will come next in the following series.



Ans



Question ID : 2390874487

Status : Answered

Chosen Option : 2

Q.22 Select the correct option that will complete the series.

7, 22, 52, 97, 157, ?

Ans 1. 232

2. 222

3. 257

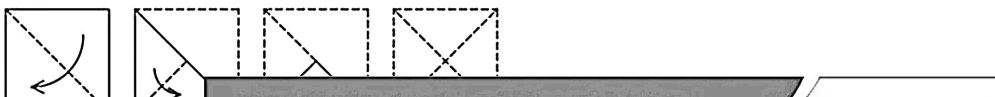
4. 254

Question ID : 2390874482

Status : Answered

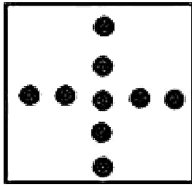
Chosen Option : 1

Q.23 A piece of paper is folded and cut as shown below in the question figures. Select from the given answer figures, how it will appear when unfolded.




Ans

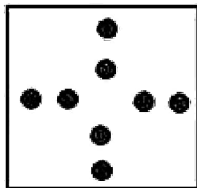
1.




2.



3.



4.



Question ID : 2390874491

Status : Answered

Chosen Option : 3

Q.24 Select the option that is related to the third term in the same way as the second term is related to the first term

BDF : GIK :: MOQ : ?

Ans

1. RTU

2. RSV

3. QPR

4. RTV

Question ID : 2390874471

Status : Answered

Chosen Option : 4

Q.25 If '\$' means 'x', '#' means '/', '*' means '+' and '@' means '-' then find the value of the following equation.

95 # 19 \$ 11 @ 28 * 17 = ?

Ans

1. 34

2. 46

3. 44

4. 35

Question ID : 2390874485
Status : Answered
Chosen Option : 3

Section : Numerical Aptitude

Q.1 6 men can repair a road in 14 hours. How many men are required to repair the road in 4 hours?

- Ans
- 1. 21
 - 2. 14
 - 3. 7
 - 4. 28

Question ID : 2390873925
Status : Answered
Chosen Option : 1

Q.2 If x , 8 and 27 are in continued proportion, then what is the value of x ?

- Ans
- 1. $\frac{8}{3}$
 - 2. $\frac{4}{3}$
 - 3. $\frac{64}{27}$
 - 4. $\frac{2}{3}$

Question ID : 2390873921
Status : Answered
Chosen Option : 3

Q.3 The average marks obtained by Madhu in four papers is 64 and in the fifth paper she scored 69 marks. What is the new average of marks scored by Madhu in five papers?

- Ans
- 1. 65
 - 2. 66
 - 3. 64
 - 4. 67

Question ID : 2390873913
Status : Answered
Chosen Option : 1

Q.4 Mr Abhay sold his car at a loss of 30%. If he had sold it for ₹ 950 more, he would have received a profit of 8%. What is the cost price?

- Ans
- 1. ₹2500
 - 2. ₹2000
 - 3. ₹3500
 - 4. ₹1500

Question ID : 2390873918
Status : Answered
Chosen Option : 1

Q.5 Pankaj invests an amount by dividing it between three different schemes A, B and C with rates of interest, 10% 12% and 15% per annum respectively, and the total interest that accumulates in one year is ₹3200. The amount he invests in schemes A, B and C are in the proportion 8 : 5 : 12, then what is the amount he invests in scheme B?

- Ans
- 1. ₹4500
 - 2. ₹5500
 - 3. ₹5000
 - 4. ₹4000

Question ID : 2390873923
Status : Answered
Chosen Option : 3

Q.6 The volumes of two spheres are in the ratio 64 : 125. Then the ratio of their surface areas is:

- Ans
- 1. 4/5
 - 2. 4/25
 - 3. 16/25
 - 4. 25/16

Question ID : 2390873930
Status : Answered
Chosen Option : 3

Q.7 What is the least number which when divided by 12, 18, 24 and 28 leaves a remainder 5 in each case?

- Ans
- 1. 509
 - 2. 84
 - 3. 89
 - 4. 504

Question ID : 2390873910
Status : Answered
Chosen Option : 1

Q.8 What is the median time of the office hours of a man whose office time is between 9 A.M. to 5 P.M.?

- Ans
- 1. 13:00
 - 2. 13:30
 - 3. 12:30
 - 4. 12:00

Question ID : 2390873916
Status : Answered
Chosen Option : 2

Q.9 An inlet pipe can fill an empty tank in 2 hours and an outlet pipe can empty the full tank in 3 hours. In what time will the empty tank get filled, if

Ans

- 1. $\frac{3}{2} h$
- 2. $3 h$
- 3. $6 h$
- 4. $2 h$

Question ID : 2390873926

Status : Answered

Chosen Option : 3

Q.10 The measure of the central angle of a sector of a circle of radius 30 cm, is 210° . What is the area (in cm^2) of the given sector? (Take $\pi = \frac{22}{7}$)

Ans

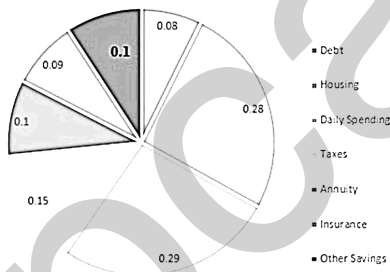
- 1. 1650
- 2. 1647
- 3. 1645
- 4. 1649

Question ID : 2390873931

Status : Answered

Chosen Option : 1

Q.11 The Pie chart given below presents the figures of different heads of expenditure made in a year by Anurag. If his total annual income is ₹1,20,000, then how much did he spend on Housing?



Ans

- 1. ₹31600
- 2. ₹36600
- 3. ₹30600
- 4. ₹33600

Question ID : 2390873932

Status : Answered

Chosen Option : 4

Q.12 What is the value of :

$$26 - [(2 \text{ of } 6 \div 3) - 93 - \{17 - (14 - 2)\}]$$

Ans

- 1. 100
- 2. 120
- 3. 110
- 4. 90

Question ID : 2390873911
Status : Answered
Chosen Option : 2

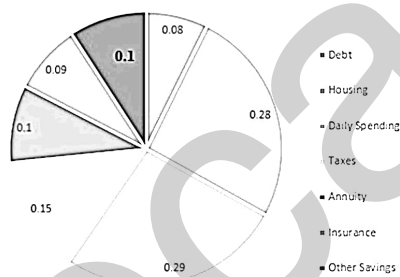
Q.13 If the wheel of a bicycle makes 160 revolutions in travelling 1.8 km, then what is its radius (in m)?

Ans

1. $\frac{4.5}{4\pi}$
2. $\frac{15}{8\pi}$
3. $\frac{45}{4\pi}$
4. $\frac{45}{8\pi}$

Question ID : 2390873927
Status : Answered
Chosen Option : 4

Q.14 The Pie chart given below presents the figures of different heads of expenditure made in a year by Anurag. On how many heads is his expenditure less than what he had spent on taxes?



Ans

1. 4
2. 1
3. 3
4. 2

Question ID : 2390873934
Status : Answered
Chosen Option : 1

Q.15 A train whose average speed is 54km/h, covers a distance in 200 min. At what speed (in km/h) should it run to reduce the journey time to 90 min?

Ans

1. 120
2. 180
3. 60
4. 220

Question ID : 2390873928
swered

Chosen Option : 1

Q.16 The mean weight of a group of 44 employees in an IT company is 55 kg. If the weight of a new recruit be included, then the mean weight is increased by 250 g. What is the weight (in kg) of the new recruit?

- Ans
- 1. 60.25
 - 2. 66.25
 - 3. 62.25
 - 4. 64.25

Question ID : 2390873917

Status : Answered

Chosen Option : 2

Q.17 What is the LCM of the HCF of $\frac{2}{3}, \frac{3}{4}$, and LCM of $\frac{5}{6}, \frac{7}{8}$?

- Ans
- 1. $\frac{35}{12}$
 - 2. $\frac{1}{12}$
 - 3. $\frac{35}{2}$
 - 4. $\frac{1}{2}$

Question ID : 2390873912

Status : Answered

Chosen Option : 4

Q.18 What is the discount rate percentage on a gift whose selling price is ₹420 after a reduction of ₹60 on its marked price?

- Ans
- 1. 14.5
 - 2. 13.5
 - 3. 12.5
 - 4. 10.5

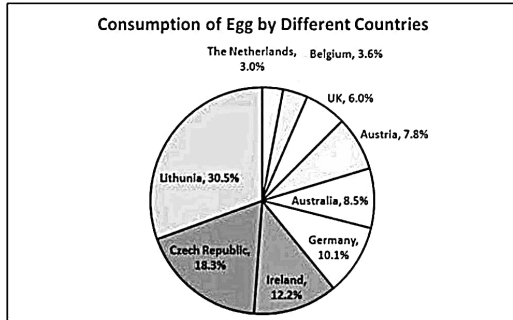
Question ID : 2390873915

Status : Answered

Chosen Option : 3

Q.19

The Pie chart given below presents the percentage figures of consumption of eggs, with reference to the total consumption made by nine different countries. What is the central angle (nearest to 0.1 degree) of the sector for Lithuania?



- Ans
- 1. 109.8
 - 2. 99.8
 - 3. 129.8
 - 4. 119.8

Question ID : 2390873933
 Status : Answered
 Chosen Option : 1

Q.20 What number must be subtracted from each of the numerator and the denominator of the fraction $\frac{4}{9}$ to make it equal to $\frac{1}{6}$?

- Ans
- 1. 5
 - 2. 3
 - 3. 7
 - 4. 2

Question ID : 2390873920
 Status : Answered
 Chosen Option : 2

Q.21 The cost of 21 bicycles is equal to the selling price of 20 bicycles. What is the loss or profit percentage in the selling of one bicycle?

- Ans
- 1. Profit 20%
 - 2. Profit 5%
 - 3. Loss 5%
 - 4. Loss 20%

Question ID : 2390873919
 Status : Answered
 Chosen Option : 2

Q.22 What is the volume (in cm^3) of a sphere of diameter 18 cm (correct up to two decimal places)? (Take $\pi = \frac{22}{7}$)

- Ans
- 1. 3504.58
 - 2. 4503.86
 - 3. 4530.58
 - 4. 3054.86

Question ID : 2390873929
Status : Answered
Chosen Option : 4

Q.23 The first, second and third terms of a proportion are 24, 32, 48. What is the fourth term?

- Ans
- 1. 64
 - 2. 54
 - 3. 72
 - 4. 84

Question ID : 2390873922
Status : Answered
Chosen Option : 1

Q.24 The average of 20 values is 27. If each value is multiplied by 3, then the new average is:

- Ans
- 1. 91
 - 2. 71
 - 3. 61
 - 4. 81

Question ID : 2390873914
Status : Answered
Chosen Option : 4

Q.25 The population of a village one year ago was 72,000. Due to migration it decreases at the rate of 8% per annum. What is its present population?

- Ans
- 1. 66240
 - 2. 68138
 - 3. 61098
 - 4. 60940

Question ID : 2390873924
Status : Answered
Chosen Option : 1

Section : General awareness

Q.1 _____ is highest recognition conferred by International Shooting Sport Federation (ISSF).

- Ans
- 1. Red Cross
 - 2. Blue Cross
 - 3. White Cross
 - 4. Black Cross

Question ID : 2390874322
Status : Not Answered
Chosen Option : --

Q.2 In the Rig vedic period, Aryani is the goddess of _____.

- Ans
- 1. forest

- 2. earth
- 3. wind
- 4. dawn

Question ID : 2390874340
Status : Not Answered
Chosen Option : --

Q.3 Which amendment restricted the size of Council of Minister to 15% of the total size of the house?

- Ans
- 1. 91st
 - 2. 74th
 - 3. 86th
 - 4. 61st

Question ID : 2390874331
Status : Not Answered
Chosen Option : --

Q.4 Baagh Naach of Odisha is performed in the Hindu month of _____.

- Ans
- 1. Chaitra
 - 2. Bhadra
 - 3. Phalgun
 - 4. Baishak

Question ID : 2390874320
Status : Not Answered
Chosen Option : --

Q.5 Who built Badshahi Mosque at Lahore?

- Ans
- 1. Aurangzeb
 - 2. Akbar
 - 3. Shah Jahan
 - 4. Humayun

Question ID : 2390874341
Status : Not Answered
Chosen Option : --

Q.6 Which Schedule of the Indian Constitution deals with Municipalities?

- Ans
- 1. Tenth
 - 2. Twelfth
 - 3. Ninth
 - 4. Eleventh

Question ID : 2390874329
Status : Answered
Chosen Option : 2

Q.7 Kepler's first law is referred to as the law of _____.

- Ans
- 1. ellipses
 - 2. harmonies
 - 3. equal areas
 - 4. motion

Question ID : 2390874332
Status : Answered
Chosen Option : 4

Q.8 Who among the following has been appointed as the head coach of the men's senior national football team by All India Football Federation (AIFF) in May 2019?

- Ans
- 1. Bob Houghton
 - 2. Sukhwinder Singh
 - 3. Igor Stimac
 - 4. Rustam Akramov

Question ID : 2390874321
Status : Not Answered
Chosen Option : --

Q.9 Pines are examples of _____.

- Ans
- 1. Gymnosperm
 - 2. Monocotyledonae
 - 3. Angiosperm
 - 4. Pteridophyta

Question ID : 2390874335
Status : Not Answered
Chosen Option : --

Q.10 Which among the following languages was added to the list of official languages in the Indian Constitution in 1967?

- Ans
- 1. Bengali
 - 2. Tamil
 - 3. Sindhi
 - 4. Telugu

Question ID : 2390874330
Status : Answered
Chosen Option : 3

Q.11 Which among the following rivers of Bangladesh is also known as Barak River?

- Ans
- 1. Raidak
 - 2. Surma
 - 3. Teesta
 - 4. Atrai

Status : Not Answered
Chosen Option : --

Q.12 Khadar and Bhanger are types of _____ soil.

- Ans
- 1. Black
 - 2. Laterite
 - 3. Red
 - 4. Alluvial

Question ID : 2390874339
Status : Answered
Chosen Option : 4

Q.13 Rabindra Sangeet is a set of folk songs sung during festivals and rituals in _____.

- Ans
- 1. Maharashtra
 - 2. Himachal Pradesh
 - 3. Bihar
 - 4. West Bengal

Question ID : 2390874318
Status : Answered
Chosen Option : 4

Q.14 Octopus is an the example of Phylum _____.

- Ans
- 1. Mollusca
 - 2. Arthropoda
 - 3. Echinodermata
 - 4. Hemichordata

Question ID : 2390874334
Status : Answered
Chosen Option : 4

Q.15 In March 2019, Hyundai Motor Company and Kia Motors Corporation agreed to invest _____ in the cab aggregator Ola.

- Ans
- 1. USD 200 million
 - 2. USD 100 million
 - 3. USD 150 million
 - 4. USD 300 million

Question ID : 2390874326
Status : Not Answered
Chosen Option : --

Q.16 'India: The Future is Now' is written by _____.

- Ans
- 1. Arundhati Roy
 - 2. Amish Tripathi
 - 3. Natwar Singh
 - 4. Shekhi Thapa

Question ID : 2390874323
Status : Not Answered
Chosen Option : --

Q.17 When was Satyagraha Sabha founded by Gandhi?

- Ans
- 1. 1922
 - 2. 1925
 - 3. 1912
 - 4. 1919

Question ID : 2390874342
Status : Answered
Chosen Option : 3

Q.18 _____ is a type of direct Tax which is levied at the time of sale/purchase of securities through the Indian Stock Exchanges.

- Ans
- 1. Shares and Securities Tax
 - 2. Securities Transaction Tax
 - 3. Stamp Duty
 - 4. Stamp and Securities Tax

Question ID : 2390874327
Status : Answered
Chosen Option : 2

Q.19 Which of the following substances have a pH value that is closest to 0 (zero)?

- Ans
- 1. Concentrated Hydrochloric Acid [HCL]
 - 2. Ammonia
 - 3. Baking soda
 - 4. Pure water

Question ID : 2390874336
Status : Answered
Chosen Option : 1

Q.20 Who was the youngest person to be awarded the Nobel Prize before Malala Yousafzai?

- Ans
- 1. Frederic Passy
 - 2. Jean Henry Dunant
 - 3. Marie Curie
 - 4. William Lawrence Bragg

Question ID : 2390874324
Status : Not Answered
Chosen Option : --

Q.21 Which mountain of Sri Lanka is named as Bible Rock by Europeans?

- Ans
- 1. Namunukula
 - 2. Hunnasgiriya

3. Batalegala

4. Gongala

Question ID : 2390874338
Status : Not Answered
Chosen Option : --

Q.22 _____ is known as the Iron Man of India.

Ans 1. Vallabhbhai Patel

2. Jawaharlal Nehru

3. Bal Gangadhar Tilak

4. Raja Rammohan Roy

Question ID : 2390874325
Status : Answered
Chosen Option : 1

Q.23 Which among the following elements has the lowest electronegativity?

Ans 1. Hydrogen

2. Tungsten

3. Francium

4. Osmium

Question ID : 2390874333
Status : Answered
Chosen Option : 2

Q.24 According to the Union Budget of 2019, which two cards are interchangeable for electronic tax assessments?

Ans 1. PAN card and Aadhar card

2. Driving License and Aadhar Card

3. Aadhar card and Voter ID card

4. PAN card and Voter ID card

Question ID : 2390874328
Status : Answered
Chosen Option : 1

Q.25 The _____ came to be known as the Dutch Palace.

Ans 1. Hawa Mahal

2. Mattancherry Palace

3. Leh Palace

4. Mysore Palace

Question ID : 2390874319
Status : Answered
Chosen Option : 2