

Section : General English

Q.1 Identify the segment in the sentence which contains the grammatical error.

It is not possible to discuss anything with her because of her angry.

- Ans**
- 1. because of her angry
 - 2. possible to discuss
 - 3. It is not
 - 4. anything with her

Question ID : 2390873231
Status : Answered
Chosen Option : 1

Q.2 Select the most appropriate synonym of the given word

Drowsy

- Ans**
- 1. Alert
 - 2. Active
 - 3. Sleepy
 - 4. Lively

Question ID : 2390873244
Status : Answered
Chosen Option : 3

Q.3 Select the most appropriate word for the given group of words.

The study of stars and planets

- Ans**
- 1. Archeology
 - 2. Anatomy
 - 3. Astronomy
 - 4. Astrology

Question ID : 2390873251
Status : Answered
Chosen Option : 3

Q.4 Select the most appropriate option to substitute the underlined segment in the given sentence. If there is no need to substitute it, select No improvement.

Every book is wrote by Ruskin Bond is a masterpiece.

- 1. has wrote
- 2. have written
- 3. written
- 4. No improvement

Question ID : 2390873234
Status : Answered
Chosen Option : 3

Q.5 Select the most appropriate antonym of the word

Yell

- Ans**
- 1. Whisper
 - 2. Scream
 - 3. Shout
 - 4. Shriek

Question ID : 2390873247
Status : Answered
Chosen Option : 2

Comprehension:

In the following passage some words have been deleted. Fill in the blanks with the help of the alternatives given. Select the most appropriate option for each blank.

Steamships were first (1)_____ to the United States in 1807. By the 1830's dozens of steam vessels were in (2)_____. They offered the traveller (3)_____ transportation in comfortable facilities-a welcome (4)_____ to stagecoach travel, which at best could be described as (5)_____.

SubQuestion No : 6

Q.6 Select the most appropriate option to fill in blank No.1.

- Ans**
- 1. introduced
 - 2. established
 - 3. manufactured
 - 4. built

Question ID : 2390873239
Status : Answered
Chosen Option : 1

Comprehension:

In the following passage some words have been deleted. Fill in the blanks with the help of the alternatives given. Select the most appropriate option for each blank.

Steamships were first (1)_____ to the United States in 1807. By the 1830's dozens of steam vessels were in (2)_____. They offered the traveller (3)_____ transportation in comfortable facilities-a welcome (4)_____ to stagecoach travel, which at best could be described as (5)_____.

SubQuestion No : 7

Q.7 Select the most appropriate option to fill in blank No.2.

- Ans**
- 1. transit
 - 2. stand
 - 3. use

4. move

Question ID : 2390873240

Status : Answered

Chosen Option : 3

Comprehension:

In the following passage some words have been deleted. Fill in the blanks with the help of the alternatives given. Select the most appropriate option for each blank.

Steamships were first (1)_____ to the United States in 1807. By the 1830's dozens of steam vessels were in (2)_____. They offered the traveller (3)_____ transportation in comfortable facilities-a welcome (4)_____ to stagecoach travel, which at best could be described as (5)_____.

SubQuestion No : 8

Q.8 Select the most appropriate option to fill in blank No.3.

Ans

1. light

2. leisurely

3. fast

4. slow

Question ID : 2390873241

Status : Answered

Chosen Option : 3

Comprehension:

In the following passage some words have been deleted. Fill in the blanks with the help of the alternatives given. Select the most appropriate option for each blank.

Steamships were first (1)_____ to the United States in 1807. By the 1830's dozens of steam vessels were in (2)_____. They offered the traveller (3)_____ transportation in comfortable facilities-a welcome (4)_____ to stagecoach travel, which at best could be described as (5)_____.

SubQuestion No : 9

Q.9 Select the most appropriate option to fill in blank No.4.

Ans

1. sign

2. gesture

3. alternative

4. signal

Question ID : 2390873242

Status : Answered

Chosen Option : 1

Comprehension:

In the following passage some words have been deleted. Fill in the blanks with the help of the alternatives given. Select the most appropriate option for each blank.

Steamships were first (1)_____ to the United States in 1807. By the 1830's dozens of steam vessels were in (2)_____. They offered the traveller (3)_____ transportation in comfortable facilities-a welcome (4)_____ to stagecoach travel, which at best could be described as (5)_____.

SubQuestion No : 10

Q.10 Select the most appropriate option to fill in blank No.5.

Ans

1. wretched

- 3. admirable
- 4. fortunate

Question ID : 2390873243
Status : Answered
Chosen Option : 3

Q.11 Select the most appropriate option to substitute the underlined segment in the given sentence. If there is no need to substitute it, select No improvement.

In a recession-hit economy, automobiles is the mostly affected sector.

- Ans
- 1. are the most
 - 2. are the mostly
 - 3. No improvement
 - 4. is the most

Question ID : 2390873233
Status : Answered
Chosen Option : 4

Q.12 Select the most appropriate word to fill in the blank and make a meaningful sentence.

The Middle-East job market has always been a _____ destination for Indians.

- Ans
- 1. costly
 - 2. lucrative
 - 3. wealthy
 - 4. luxury

Question ID : 2390873254
Status : Answered
Chosen Option : 3

Q.13 Identify the segment in the sentence which contains the grammatical error.

Kaira has upset with me since the accident.

- Ans
- 1. me since
 - 2. Kaira has
 - 3. the accident
 - 4. upset with

Question ID : 2390873232
Status : Answered
Chosen Option : 2

Q.14 Select the most appropriate option to fill in the blank and make a grammatically correct sentence.

There is no information _____ the company's profit in the report.

- Ans
- 1. about
 - 2. with
 - 3. along
 - 4. .

Question ID : 2390873237
Status : Answered
Chosen Option : 1

Q.15 Select the most appropriate synonym of the given word

Enormous

- Ans
- 1. Petty
 - 2. Huge
 - 3. Tiny
 - 4. Puny

Question ID : 2390873245
Status : Answered
Chosen Option : 2

Q.16 Select the most appropriate word to fill in the blank and make a meaningful sentence.

The method ____ by the teacher is very tedious.

- Ans
- 1. reminded
 - 2. suggested
 - 3. allowed
 - 4. regarded

Question ID : 2390873255
Status : Answered
Chosen Option : 2

Q.17 Select the most appropriate word for the given group of words.

One who does not express himself freely

- Ans
- 1. Lunatic
 - 2. Extrovert
 - 3. Introvert
 - 4. Narcissist

Question ID : 2390873250
Status : Answered
Chosen Option : 3

Q.18 Select the most appropriate option to fill in the blank and make a grammatically correct sentence.

Planets do not have light ____ their own.

- Ans
- 1. on
 - 2. of
 - 3. for
 - 4. by

Question ID : 2390873236
Status : Answered

Q.19 Select the correctly spelt word.

- Ans
- 1. Nuclere
 - 2. Nuclear
 - 3. Neuclear
 - 4. Newclear

Question ID : 2390873252
Status : Answered
Chosen Option : 2

Q.20 Select the most appropriate meaning of the given idiom.

Be glad to see the back of

- Ans
- 1. To avoid someone
 - 2. To support someone
 - 3. To be happy when a person leaves
 - 4. To be happy to receive guests

Question ID : 2390873249
Status : Not Answered
Chosen Option : --

Q.21 Select the correctly spelt word.

- Ans
- 1. Hygiene
 - 2. Hygene
 - 3. Higiene
 - 4. Hijean

Question ID : 2390873253
Status : Answered
Chosen Option : 1

Q.22 Select the most appropriate antonym of the word

Reluctant

- Ans
- 1. Hesitant
 - 2. Uncertain
 - 3. Eager
 - 4. Unwilling

Question ID : 2390873246
Status : Answered
Chosen Option : 3

Q.23 Select the most appropriate meaning of the given idiom.

Once bitten, twice shy

- Ans
- 1. An unpleasant experience induces caution
 - 2. Someone who doesn't learn from his previous experiences

- 3. Someone who is afraid of taking challenges
- 4. To keep something precious safely

Question ID : 2390873248
Status : Not Answered
Chosen Option : --

Q.24 Select the most appropriate option to substitute the underlined segment in the given sentence. If there is no need to substitute it, select No improvement.

It is not for nothing that Mumbai is talked about as the most cosmopolitan of Indian cities.

- Ans
- 1. are talked
 - 2. No improvement
 - 3. is talking
 - 4. was talking

Question ID : 2390873235
Status : Answered
Chosen Option : 3

Q.25 Identify the segment in the sentence which contains the grammatical error.

Patralekha finished the cake in the blink of a eye.

- Ans
- 1. of a eye
 - 2. the cake
 - 3. in the blink
 - 4. Patralekha finished

Question ID : 2390873230
Status : Not Answered
Chosen Option : --

Section : General Intelligence & Reasoning

Q.1 In a certain code language, '15-78-25-36' is written as '28-154-48-70'. What will be the code for '23-63-42-81' in that code language?

- Ans
- 1. 125-511-152-982
 - 2. 46-126-84-164
 - 3. 44-124-82-160
 - 4. 65-218-362-542

Question ID : 2390873491
Status : Answered
Chosen Option : 3

Q.2 Read the given statements and conclusions carefully. Assuming that the information given in the statements is true, even if it appears to be at variance with commonly known facts, decide which of the given conclusions logically follow(s) from the statements.

Statements:
Some cats are mice.
All mice are dogs.

Conclusion

I: No dogs are cats.

II: All cats are dogs.

- Ans
- 1. Only conclusion II follows
 - 2. Both conclusions I and II follow
 - 3. Only conclusion I follows
 - 4. Neither conclusion I nor II follows

Question ID : 2390873495

Status : Answered

Chosen Option : 4

Q.3 Read the given statements and conclusions carefully. Assuming that the information given in the statements is true, even if it appears to be at variance with commonly known facts, decide which of the given conclusions logically follow(s) from the statements.

Statements:

All nieces are sisters.

Some nieces are brothers.

Conclusion

I : Some brothers are sisters.

II : All sisters are nieces.

III : No brothers are sisters.

- Ans
- 1. Only conclusion II follows
 - 2. Only conclusion I and III follows
 - 3. All conclusions I, II and III follow
 - 4. Only conclusion I follows

Question ID : 2390873496

Status : Answered

Chosen Option : 4

Q.4 Select the option that is related to the third term in the same way as the second term is related to the first term.

Moo : Cow :: neigh : ?

- Ans
- 1. Wolf
 - 2. Bear
 - 3. Owl
 - 4. Horse

Question ID : 2390873485

Status : Answered

Chosen Option : 4

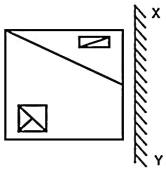
Q.5 Select the correct option that will complete the series

256, 384, 576, 864, ____

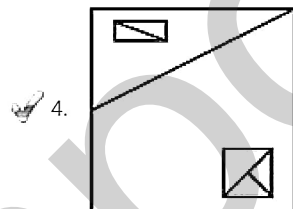
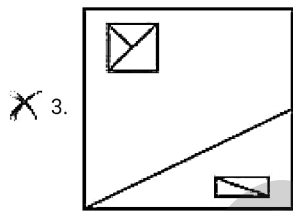
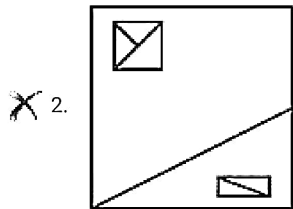
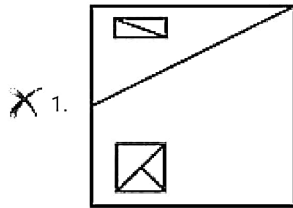
- Ans
- 1. 1312
 - 2. 1450
 - 3. 1054
 - 4. 1296

Question ID : 2390873497

Q.6 If a mirror is placed on the line XY, then which of the answer figures will be the right mirror image of the given figure?



Ans

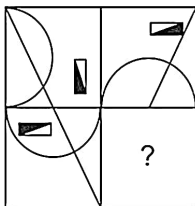


Question ID : 2390873506

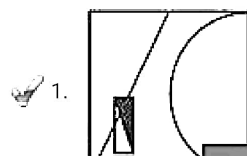
Status : Answered

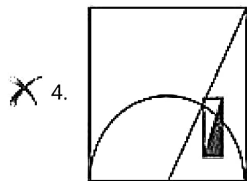
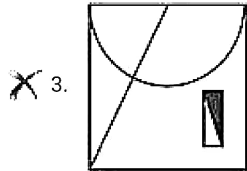
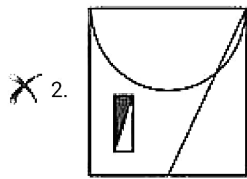
Chosen Option : 4

Q.7 Study the given pattern carefully and select the figure that will complete the pattern given in the question figure.



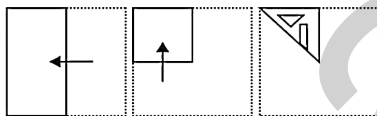
Ans




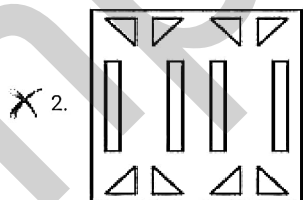



Question ID : 2390873504
 Status : Answered
 Chosen Option : 1


Q.8 A piece of paper is folded and cut as shown below in the question figures, how it will appear when unfolded.



Ans



X 4.



Question ID : 2390873507

Status : Answered

Chosen Option : 1

Q.9 Usha, Damini, Amisha, Manju, Lalita and Harshita are sitting around a round table facing the centre. Usha is opposite Damini, who is to the right of Manju, Usha is between Amisha and Harshita, Harshita is not next to Manju. Who is to the right of Lalita?

- Ans**
- X 1. Damini
 - ✓ 2. Harshita
 - X 3. Manju
 - X 4. Usha

Question ID : 2390873492

Status : Not Answered

Chosen Option : --


Q.10 Which of the following Venn diagrams best represents the relationship between cars, auto-rickshaws and diesel vehicles?

Ans

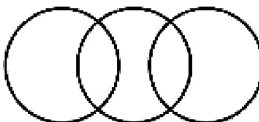
X 1.



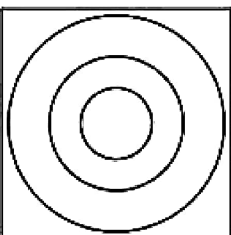
X 2.



✓ 3.



X 4.



Question ID : 2390873508
Status : Answered
Chosen Option : 4

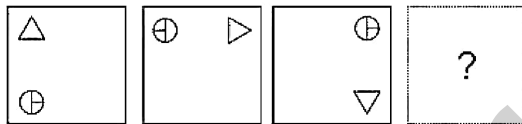
Q.11 Select the correct option that will complete the series

7.5, 4.7, 1.9, -0.9, ___

- Ans
- 1. -1.9
 - 2. -3.7
 - 3. -1.5
 - 4. -2.5

Question ID : 2390873498
Status : Answered
Chosen Option : 2

Q.12 Which of the following answer figure completes the series of the question figure?



Ans

- 1.
- 2.
- 3.
- 4.

Question ID : 2390873503
Status : Answered
Chosen Option : 3

Q.13 Select the term that will come next in the following series.

HM, EJ, BG, ___

- Ans
- 1. YC
 - 2. YD
 - 3. YF

4. SC

Question ID : 2390873484
Status : Answered
Chosen Option : 2

Q.14 In a certain code language, 'BLANCH' is written as 'YIXKZE'. What will be the code for 'DEFAME' in that code language?

- Ans 1. CDEJKL
 2. ABCXJB
 3. BCDXJC
 4. ABDXIB

Question ID : 2390873488
Status : Answered
Chosen Option : 2

Q.15 Five girls took part in a race. Rajni finished before Mahika but behind Garima. Ashmita finished before Sanchali but behind Mahika. Who came second in the race?

- Ans 1. Sanchali
 2. Mahika
 3. Garima
 4. Rajni

Question ID : 2390873494
Status : Answered
Chosen Option : 4

Q.16 Which two numbers need to be interchanged to make the given equation correct?

$$72 \times 9 + 27 \div 3 - 6 = 213$$

- Ans 1. 9, 6
 2. 9, 3
 3. 72, 6
 4. 72, 27

Question ID : 2390873502
Status : Answered
Chosen Option : 2

Q.17 In a certain code language, 'GIBECH' is written as '974356'. What will be the code for 'FHCIAD' in that code language?

- Ans 1. 572803
 2. 965726
 3. 865732
 4. 794125

Question ID : 2390873490
Status : Answered
Chosen Option : 3

Q.18 Select the option that is related to the third term in the same way as the second term is related to the first term.

Scientist : Laboratory :: Teacher : ?

- Ans
- 1. Knowledge
 - 2. Students
 - 3. Education
 - 4. School

Question ID : 2390873486
Status : Answered
Chosen Option : 4

Q.19 Select the option that is related to the third term in the same way as the second term is related to the first term.

841 : 29 :: 484 : ?

- Ans
- 1. 24
 - 2. 28
 - 3. 32
 - 4. 22

Question ID : 2390873499
Status : Answered
Chosen Option : 4

Q.20 Find the missing number from the below options.

3 5 7 7 1

9 2 1 2 9

6 4 1 1 ?

- Ans
- 1. 132
 - 2. 143
 - 3. 123
 - 4. 134

Question ID : 2390873500
Status : Not Answered
Chosen Option : --

Q.21 Which two signs need to be interchanged to make the given equation correct?

$16 + 27 \div 3 - 9 \times 12 = 85$

- Ans
- 1. -, x
 - 2. x, ÷
 - 3. +, ÷
 - 4. -, +

Question ID : 2390873501
Status : Not Answered
Chosen Option : --

Q.22 In a certain code language, 'FRAUD' is written as 'KWFZI'. What will be the code for 'GLAIR' in that code language?

- Ans
- 1. KRHOX
 - 2. LQFNW
 - 3. KQGMX
 - 4. LRHMX

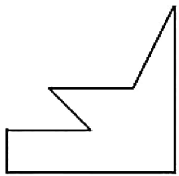
Question ID : 2390873489
Status : Answered
Chosen Option : 2

Q.23 Pratik, Esha, Rashmi, Sakshi and Trisha are sitting on a bench facing North. Trisha & Esha are sitting together, Trisha & Rashmi are sitting together, Pratik is on the extreme left, Esha is second from extreme right. Who is sitting between Pratik & Esha?

- Ans
- 1. Rashmi and Trisha
 - 2. Trisha and Sakshi
 - 3. Rashmi and Sakshi
 - 4. Esha and Trisha

Question ID : 2390873493
Status : Not Answered
Chosen Option : --

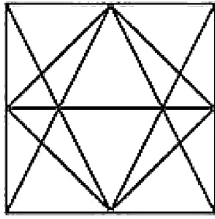
Q.24 Select the option in which the given figure is embedded. (Rotation is not allowed)



Ans

- 1.
- 2.
- 3.

X 4.



Question ID : 2390873505
Status : Answered
Chosen Option : 3

Q.25 Select the option that is related to the third term in the same way as the second term is related to the first term.

LSX : NUZ :: GKQ : ?

- Ans
- 1. IMS
 - 2. JNP
 - 3. INP
 - 4. JMS

Question ID : 2390873487
Status : Not Answered
Chosen Option : --

Section : Numerical Aptitude

Q.1 x is the greatest number by which, when 2460, 2633 and 2806 are divided, the remainder in each case is the same. What is the sum of digits of x ?

- Ans
- 1. 13
 - 2. 10
 - 3. 9
 - 4. 11

Question ID : 2390873584
Status : Answered
Chosen Option : 4

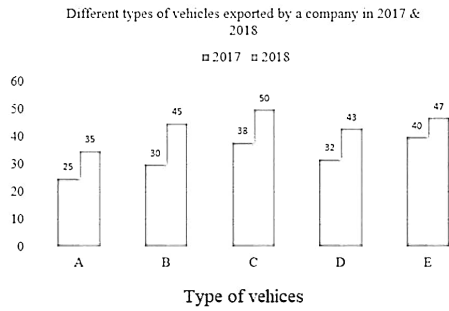
Q.2 If the simple interest on a sum of ₹ x at 6% p.a. for two years is double the simple interest on another sum of ₹ y at 9% per annum for three years, then which of the following is true?

- Ans
- 1. $x = 4.5y$
 - 2. $x = 2y$
 - 3. $2x = 5y$
 - 4. $3x = 7y$

Question ID : 2390873597
Status : Answered
Chosen Option : 1

Q.3

The given Bar Graph presents the number of different types of vehicles exported by a company in 2017 and 2018.



What is the ratio of the total number of vehicles exported in 2017 of types B, C and D to that of vehicles exported in 2018 of the types A, D and E?

- Ans
- 1. 7 : 10
 - 2. 6 : 5
 - 3. 18 : 25
 - 4. 4 : 5

Question ID : 2390873606
 Status : Answered
 Chosen Option : 4

Q.4 A wire encloses an area of 616 cm^2 when it is bent in the form of a circle. If the wire is bent in the form of a square, then its area (in cm^2) is very nearly equal to: (Take $\pi = \frac{22}{7}$)

- Ans
- 1. 576
 - 2. 484
 - 3. 441
 - 4. 400

Question ID : 2390873603
 Status : Answered
 Chosen Option : 2

Q.5 To do a certain work, the ratio of efficiencies of A and B is 3 : 7, working together, they can complete a work in 14 days. B started the work and after working for 8 days, he left and A completed the remaining work. For how many days did A work?

- Ans
- 1. 27
 - 2. 30
 - 3. 28
 - 4. 24

Question ID : 2390873600
 Status : Answered
 Chosen Option : 3

Q.6 The marked price of an article is ₹882. It is sold for ₹806.40. If there is a loss of 4%, then by what percent above the cost was the article marked?

- Ans
- 1. 4
 - 2. 5

- 3. 6
- 4. 8

Question ID : 2390873587
 Status : Answered
 Chosen Option : 2

Q.7 If $(x + 10)\%$ of 200 is $33\frac{1}{3}\%$ more than $x\%$ of 180, then 10% of $(x + 20)$ is what percent less than 40% of x ?

- Ans**
- 1. 70
 - 2. 65
 - 3. 60
 - 4. 55

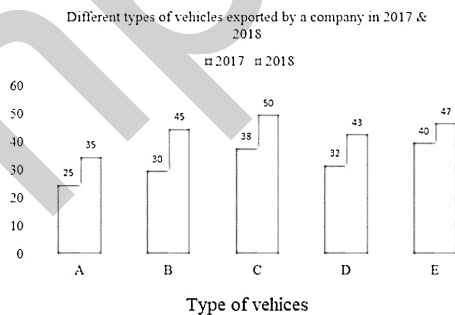
Question ID : 2390873591
 Status : Answered
 Chosen Option : 2

Q.8 The value of $\left(5\frac{1}{4} \div \frac{3}{7} \text{ of } \frac{1}{2}\right) \times \left(5\frac{1}{4} \times \frac{3}{7} \div \frac{1}{2}\right) \div \left(5\frac{1}{4} \div \frac{3}{7} \times \frac{1}{2}\right)$ is:

- Ans**
- 1. $\frac{1}{18}$
 - 2. 18
 - 3. $\frac{8}{9}$
 - 4. $\frac{9}{8}$

Question ID : 2390873586
 Status : Answered
 Chosen Option : 2

Q.9 The given Bar Graph presents the number of different types of vehicles exported by a company in 2017 and 2018.



The increase in the exports in 2018 as compared to that in 2017 is closest to 32 % in case of vehicles of type:

- Ans**
- 1. A
 - 2. D
 - 3. B
 - 4. C

Question ID : 2390873607

Chosen Option : 4

Q.10 The ratio of ages of A and B, four years ago, was 7 : 5. The ratio of their ages, 6 years from now, will be 19 : 15. What is the ratio of the present ages of A and B?

- Ans
- 1. 2 : 1
 - 2. 4 : 3
 - 3. 3 : 2
 - 4. 5 : 2

Question ID : 2390873594

Status : Answered

Chosen Option : 2

Q.11 There are 96 students in a class, out of which the number of girls is 40% more than that of the boys. The average score in mathematics of the boys is 40% more than the average score of girls. If the average score in mathematics of all the students is 63, then what is the average score of the girls in mathematics?

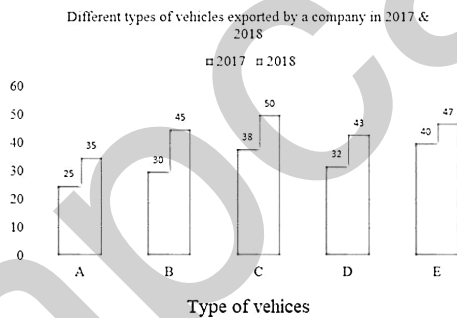
- Ans
- 1. 55
 - 2. 54
 - 3. 51
 - 4. 57

Question ID : 2390873590

Status : Answered

Chosen Option : 2

Q.12 The given Bar Graph presents the number of different types of vehicles exported by a company in 2017 and 2018.



The average export of vehicles in 2018 is what percent more than the export of vehicle A in 2017?

- Ans
- 1. 76
 - 2. $37\frac{1}{2}$
 - 3. $46\frac{2}{3}$
 - 4. 68

Question ID : 2390873608

Status : Answered

Chosen Option : 1

Q.13 A person sold an article at a loss of 12%. Had he sold it for ₹162 more, he would have gained 24%. If the article is sold for ₹360 then loss percent is:

- Ans
- 1. 15

- 2. 20
- 3. 25
- 4. 18

Question ID : 2390873593
 Status : Answered
 Chosen Option : 2

Q.14 A boat goes a distance of 4 km upstream in 2 hours and the same distance downstream in 20 minutes. How long will it take to go $10\frac{1}{2}$ km in still water?

- Ans
- 1. 48 minutes
 - 2. 1 hour
 - 3. $1\frac{1}{4}$ hours
 - 4. $1\frac{1}{2}$ hours

Question ID : 2390873601
 Status : Answered
 Chosen Option : 4

Q.15 A car travels for 6 hours at different speeds. For the first two hours at 60 m/s, for the next 2 hours at 50 m/s and for the remaining time at x m/s. If the average speed for the entire journey is 52 m/s, what is the value of x ?

- Ans
- 1. 46
 - 2. $44\frac{1}{2}$
 - 3. $45\frac{1}{2}$
 - 4. 48

Question ID : 2390873602
 Status : Not Answered
 Chosen Option : --

Q.16 The value of $\frac{5+2 \text{ of } 3-3 \text{ of } 2 \times 3}{9+72 \div 3-2 \times (3-2)-3}$ is $\frac{a}{b}$, where a and b are prime numbers. The value of $(b - a)$ is:

- Ans
- 1. 7
 - 2. 4
 - 3. 3
 - 4. 5

Question ID : 2390873585
 Status : Not Answered
 Chosen Option : --

Q.17 The average of 12 numbers is 18.5. The average of first six numbers is 16.8 and that of the last seven numbers is 17.4. If the 6th number is excluded, then what is the average (correct to one decimal place) of remaining 11 numbers?

- Ans
- 1. 20.1
 - 2. 17.9

4. 18.9

Question ID : 2390873589
Status : Answered
Chosen Option : 1

Q.18 A sum of ₹3200 was to be divided between A, B, C and D in the ratio 4 : 6 : 7 : 3. But by mistake, it was divided in the ratio 3 : 5 : 6 : 2. As a result, who got $16\frac{2}{3}\%$ less than her due?

- Ans
- 1. B
 - 2. C
 - 3. D
 - 4. A

Question ID : 2390873596
Status : Answered
Chosen Option : 3

Q.19 The diameter of the base of a right circular cone is 10 cm and its height is 12 cm. What is the total surface area (in cm^2) of the cone?

- Ans
- 1. 84π
 - 2. 70π
 - 3. 65π
 - 4. 90π

Question ID : 2390873605
Status : Answered
Chosen Option : 4

Q.20 A and B can complete a certain work in 24 days and 42 days, respectively. A started the work and after x days, B joined him and the whole work was completed in 20 days. The value of x is:

- Ans
- 1. 11
 - 2. 9
 - 3. 13
 - 4. 7

Question ID : 2390873599
Status : Answered
Chosen Option : 3

Q.21 What is the ratio of the mean proportional between 4.5 and 0.5, and the third proportional to 4.5 and 9.0?

- Ans
- 1. 2 : 9
 - 2. 3 : 8
 - 3. 1 : 6
 - 4. 1 : 12

Question ID : 2390873595
Status : Answered
Chosen Option : 4

Q.22 What is the sum of median and mode of the data

8, 1, 5, 4, 9, 6, 3, 6, 1, 3, 6, 9, 1, 7, 2, 6, 5?

- Ans
- 1. 11
 - 2. 13
 - 3. 12
 - 4. 14

Question ID : 2390873588
Status : Answered
Chosen Option : 1

Q.23 Amit bought an article for ₹310 and sold it at a loss of 25%. With this money, he bought another article and sold it at a gain of 40%. What was his overall gain or loss percent?

- Ans
- 1. Loss 4%
 - 2. Gain 5%
 - 3. Gain 8%
 - 4. Loss 2.5%

Question ID : 2390873592
Status : Not Answered
Chosen Option : --

Q.24 If the compound interest in the third year at 8% p.a. on a certain sum is ₹3600, then what is the difference between the compound interest in the 4th and 5th year? (nearest to an integer in ₹)

- Ans
- 1. ₹311
 - 2. ₹335
 - 3. ₹304
 - 4. ₹288

Question ID : 2390873598
Status : Not Answered
Chosen Option : --

Q.25 The areas of three adjacent faces of a cuboid are 18 cm², 20 cm² and 40 cm². What is the volume (in cm³) of the cuboid?

- Ans
- 1. 125
 - 2. 120
 - 3. 100
 - 4. 144

Question ID : 2390873604
Status : Not Answered
Chosen Option : --

Section : General awareness

Q.1 The Kaveri river basin falls in how many states of India?

- Ans
- 1. 2

- 2. 4
- 3. 5
- 4. 3

Question ID : 2390873380
Status : Not Answered
Chosen Option : --

Q.2 Military Commanders during the Rule of Akbar were known as _____.

- Ans
- 1. Sadr
 - 2. Bakhshi
 - 3. Kotwal
 - 4. Faujdars

Question ID : 2390873383
Status : Answered
Chosen Option : 2

Q.3 Current Account of Balance of payments does NOT include which of the following?

- Ans
- 1. Trade in Services
 - 2. Transfer Payments
 - 3. Investments
 - 4. Trade in Goods

Question ID : 2390873367
Status : Not Answered
Chosen Option : --

Q.4 Who appoints Judges of Supreme Court and High Court in India?

- Ans
- 1. President
 - 2. Prime Minister
 - 3. Chief Justice of India
 - 4. Law Minister

Question ID : 2390873370
Status : Answered
Chosen Option : 1

Q.5 At which temperature are Fahrenheit and Celsius equal?

- Ans
- 1. -20
 - 2. -30
 - 3. -10
 - 4. -40

Question ID : 2390873377
Status : Answered
Chosen Option : 4

- Ans
- 1. Satpura
 - 2. Vindhya
 - 3. Palconda
 - 4. Nilgiri

Question ID : 2390873379
Status : Answered
Chosen Option : 4

Q.7 What is the reason behind food chains generally having 3-4 Trophic Levels?

- Ans
- 1. Decreasing Organisms at each level
 - 2. Increasing Number of Organism at each level
 - 3. Decreasing Energy at each level
 - 4. Similar Energy at each level

Question ID : 2390873373
Status : Answered
Chosen Option : 3

Q.8 Battle of Plassey was fought between _____.

- Ans
- 1. Marathas and British Army
 - 2. Sirajuddaulah and British Army
 - 3. Alivardi Khan and British Army
 - 4. Mir Qasim and British Army

Question ID : 2390873382
Status : Answered
Chosen Option : 2

Q.9 The President of India has same powers and functions as _____.

- Ans
- 1. President of China
 - 2. President Of Turkey
 - 3. President of USA
 - 4. Queen of Britain

Question ID : 2390873372
Status : Answered
Chosen Option : 4

Q.10 The difference between the value of exports and value of imports of goods of a country in a given period of time is known as _____.

- Ans
- 1. Balance of invisibles
 - 2. Balance of Trade
 - 3. Balance of payment
 - 4. Balance of currency

Question ID : 2390873368
Status : Not Answered

Q.11 Jallikattu-Bull fight takes place in _____.

- Ans
- 1. Maharashtra
 - 2. Andhra Pradesh
 - 3. Tamil Nadu
 - 4. Kerala

Question ID : 2390873360
Status : Not Answered
Chosen Option : --

Q.12 _____ carries oxygenated blood from lungs to heart.

- Ans
- 1. Pulmonary artery
 - 2. Aorta
 - 3. Vena Cava
 - 4. Renal artery

Question ID : 2390873374
Status : Not Answered
Chosen Option : --

Q.13 Which Book won Golden Man Booker Prize 2018?

- Ans
- 1. Moon Tiger
 - 2. Five Point Someone
 - 3. The English Patient
 - 4. Sacred Hunger

Question ID : 2390873366
Status : Answered
Chosen Option : 1

Q.14 Under which Governor General did Britishers adopt "Policy of Paramountcy"?

- Ans
- 1. Lord Clive
 - 2. Lord Cornwallis
 - 3. Lord Dalhousie
 - 4. Lord Hastings

Question ID : 2390873381
Status : Not Answered
Chosen Option : --

Q.15 Which of the following is NOT a Cricket tournament?

- Ans
- 1. Indian Premier League
 - 2. Vijaya Hazare Trophy
 - 3. Syed Mushtaq Ali Trophy
 - 4. Indian Super League

Question ID : 2390873363

Chosen Option : 4

Q.16 Who among the following has been selected for the Vyas Samman 2018 award by the KK Birla Foundation?

- Ans
- 1. Ashok Vajpayi
 - 2. Kunwar Narayan
 - 3. Leeladhar Jagudi
 - 4. Mohan Rana

Question ID : 2390873364
Status : Answered
Chosen Option : 4

Q.17 Who among the following does NOT take part in the election of the President of India?

- Ans
- 1. Elected Member of Rajya Sabha
 - 2. Elected Member of Lok Sabha
 - 3. Elected Member of State Assembly
 - 4. Nominated Member of Parliament

Question ID : 2390873371
Status : Not Answered
Chosen Option : --

Q.18 Lomas Rishi Cave, constructed for Buddhist monks is located in which state?

- Ans
- 1. Jharkhand
 - 2. Bihar
 - 3. Madhya Pradesh
 - 4. Chhattisgarh

Question ID : 2390873359
Status : Not Answered
Chosen Option : --

Q.19 Which of the following newspaper was NOT launched by Lala Lajpat Rai?

- Ans
- 1. Regenerator of Aryavarta
 - 2. Young India
 - 3. The People
 - 4. The Panjabee

Question ID : 2390873365
Status : Answered
Chosen Option : 2

Q.20 Black Soil is NOT found in which State of India?

- Ans
- 1. Punjab
 - 2. Andhra Pradesh
 - 3. Maharashtra
 - 4. Madhya Pradesh

Question ID : 2390873378
Status : Answered
Chosen Option : 1

Q.21 Which plant tissue is responsible for transport of water and minerals from roots to the leaves?

- Ans
- 1. Xylem
 - 2. Pith
 - 3. Phloem
 - 4. Stomata

Question ID : 2390873376
Status : Answered
Chosen Option : 1

Q.22 Which of the following relations is true?

- Ans
- 1. $GNP \equiv GDP / \text{Net factor income from abroad}$
 - 2. $GNP \equiv GDP + \text{Net factor income from abroad}$
 - 3. $GNP \equiv GDP - \text{Net factor income from abroad}$
 - 4. $GNP \equiv GDP \times \text{Net factor income from abroad}$

Question ID : 2390873369
Status : Not Answered
Chosen Option : --

Q.23 Noble gases belong to which of the following groups of the periodic table?

- Ans
- 1. 15
 - 2. 18
 - 3. 13
 - 4. 16

Question ID : 2390873375
Status : Answered
Chosen Option : 2

Q.24 Natyanjali Dance Festival pays tribute to which deity?

- Ans
- 1. Lord Shiva
 - 2. Lord Brahma
 - 3. Lord Ganesh
 - 4. Lord Vishnu

Question ID : 2390873361
Status : Not Answered
Chosen Option : --

Q.25 Which of the following sportsperson is NOT associated to Hockey?

- Ans
- 1. S. V. Sunil
 - 2. P. A. Raphel

X 4. Sardar Singh

Question ID : 2390873362
Status : **Answered**
Chosen Option : 3

mpcareer.in