

Multi Tasking Non Technical Staff and Havaladar CBIC and CBN Examination 2022

Roll Number	
Candidate Name	
Venue Name	Jaipur Engineering College
Exam Date	13/06/2023
Exam Time	3:30 PM - 5:00 PM
Subject	MTS Non Tech Havaladar CBIC and CBN Examination 2022

Section : Numerical and Mathematical Ability

Q.1 The marked price of one pen is Rs. 20. What will be the total selling price of 5 such pens after the discount of 5%?

- Ans**
- 1. Rs. 100
 - 2. Rs. 90
 - 3. Rs. 95
 - 4. Rs. 105

Question Type : **MCQ**

Question ID : **264330140806**

Option 1 ID : **264330551573**

Option 2 ID : **264330551572**

Option 3 ID : **264330551571**

Option 4 ID : **264330551574**

Status : **Answered**

Chosen Option : **3**

Q.2 What is the Highest Common Factor of $\frac{3}{8}$ and $\frac{4}{9}$?

- Ans**
- 1. $\frac{1}{18}$
 - 2. $\frac{1}{108}$
 - 3. $\frac{1}{36}$
 - 4. $\frac{1}{72}$

Question Type : **MCQ**

Question ID : **264330140188**

Option 1 ID : **264330549133**

Option 2 ID : **264330549134**

Option 3 ID : **264330549132**

Option 4 ID : **264330549131**

Status : **Answered**

Chosen Option : **4**

Q.3 If 60 is subtracted from 30 percent of a number, then the result is 120. What is the value of the number?

- Ans**
- 1. 550
 - 2. 600
 - 3. 700
 - 4. 630

Question Type : **MCQ**

Question ID : **264330140588**

Option 1 ID : **264330550704**

Option 2 ID : **264330550703**

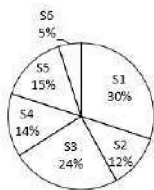
Option 3 ID : **264330550706**

Option 4 ID : **264330550705**

Status : **Answered**

Chosen Option : **2**

Q.4 The pie chart given below shows the marks obtained by a student in 6 different subjects. The total marks obtained by the student is 500. Marks in a particular subject are shown as a percent of total marks obtained in all these 6 subjects.



What is the ratio of marks obtained in S3 to the marks obtained in S4?

- Ans**
- 1. 12 : 5
 - 2. 2 : 1
 - 3. 5 : 6
 - 4. 12 : 7

Question Type : **MCQ**

Question ID : **264330140602**

Option 1 ID : **264330550761**

Option 2 ID : **264330550759**

Option 3 ID : **264330550760**

Option 4 ID : **264330550762**

Status : **Answered**

Chosen Option : **4**

Q.5 Some girls can do a work in 10 days. In how much time twice of such girls will complete four times of the same work?

- Ans**
- 1. 25 days
 - 2. 30 days
 - 3. 10 days
 - 4. 20 days

Question Type : **MCQ**

Question ID : **264330140611**

Option 1 ID : **264330550792**

Option 2 ID : **264330550794**

Option 3 ID : **264330550791**

Option 4 ID : **264330550793**

Status : **Answered**

Chosen Option : **4**

Q.6 Three partners P, Q and R invested a total of Rs. 52,000 in a business. At the end of the year, P got Rs. 1430, Q got Rs. 1870 and R got Rs. 2420 as the share of profit. How much amount did Q invest in the business?

- Ans**
- 1. Rs. 17000
 - 2. Rs. 20400
 - 3. Rs. 15300
 - 4. Rs. 18700

Question Type : **MCQ**
Question ID : **264330139900**
Option 1 ID : **264330547980**
Option 2 ID : **264330547981**
Option 3 ID : **264330547979**
Option 4 ID : **264330547982**
Status : **Answered**
Chosen Option : **1**

Q.7 A man covers half part of a certain distance at 15 km/hr. He covers 40 percent of remaining distance at the speed of 12 km/hr and covers rest of the distance at the speed of 21 km/hr. What is his average speed for the entire journey?

- Ans**
- 1. 140/9 km/hr
 - 2. 15 km/hr
 - 3. 164/9 km/hr
 - 4. 139/9 km/hr

Question Type : **MCQ**
Question ID : **264330140217**
Option 1 ID : **264330549248**
Option 2 ID : **264330549250**
Option 3 ID : **264330549249**
Option 4 ID : **264330549247**
Status : **Answered**
Chosen Option : **1**

Q.8 What is the value of $\frac{99 \div 33 + 44 \div 11 \text{ of } 4}{24 \div 12 - 4 + 3}$?

- Ans**
- 1. 6
 - 2. 4
 - 3. 1
 - 4. 8

Question Type : **MCQ**
Question ID : **264330139907**
Option 1 ID : **264330548009**
Option 2 ID : **264330548008**
Option 3 ID : **264330548007**
Option 4 ID : **264330548010**
Status : **Answered**
Chosen Option : **2**

Q.9 How many spherical balls of radius 6 cm can be made by melting a hemisphere of radius 24 cm?

- Ans**
- 1. 64
 - 2. 96
 - 3. 32
 - 4. 24

Question Type : **MCQ**

Question ID : **264330140166**

Option 1 ID : **264330549046**

Option 2 ID : **264330549043**

Option 3 ID : **264330549045**

Option 4 ID : **264330549044**

Status : **Answered**

Chosen Option : **3**

Q.10 The table given below shows the income and expenditure of five companies.

Companies	Income	Expenditure
A	55	50
B	50	40
C	35	32
D	40	35
E	60	50

What is the difference between average income and average expenditure of all the companies?

- Ans**
- 1. 4.2
 - 2. 6.6
 - 3. 2.6
 - 4. 8.4

Question Type : **MCQ**

Question ID : **264330139949**

Option 1 ID : **264330548175**

Option 2 ID : **264330548176**

Option 3 ID : **264330548178**

Option 4 ID : **264330548177**

Status : **Answered**

Chosen Option : **2**

Q.11 Shivam is 20 percent less efficient than Vivek. If Vivek can make a helmet in 12 days, then in how many days can Shivam make the same helmet?

- Ans**
- 1. 12 days
 - 2. 18 days
 - 3. 15 days
 - 4. 14 days

Question Type : **MCQ**

Question ID : **264330139891**

Option 1 ID : **264330547945**

Option 2 ID : **264330547943**

Option 3 ID : **264330547944**

Option 4 ID : **264330547946**

Status : **Answered**

Chosen Option : **3**

Q.12 If interest is being compounded half yearly and rate of interest is 20 percent per annum, then in how much time Rs. 15000 will become Rs. 19965 at compound interest?

- Ans**
- 1. 12 months
 - 2. 30 months
 - 3. 24 months
 - 4. 18 months

Question Type : **MCQ**
Question ID : **264330140250**
Option 1 ID : **264330549380**
Option 2 ID : **264330549382**
Option 3 ID : **264330549381**
Option 4 ID : **264330549379**
Status : **Answered**
Chosen Option : **4**

Q.13 What is the value of $\sqrt{0.33 \times 0.33 + 0.6 \times 0.6 + 1.2 \times 0.33}$?

- Ans**
- 1. 0.93
 - 2. 0.69
 - 3. 0.39
 - 4. 0.73

Question Type : **MCQ**
Question ID : **264330140230**
Option 1 ID : **264330549302**
Option 2 ID : **264330549301**
Option 3 ID : **264330549299**
Option 4 ID : **264330549300**
Status : **Answered**
Chosen Option : **1**

Q.14 If 80 percent of total articles are sold at a loss of 25 percent and remaining articles are sold at a profit of 20 percent, then what will be the overall loss percentage?

- Ans**
- 1. 20 percent
 - 2. 18 percent
 - 3. 16 percent
 - 4. 22 percent

Question Type : **MCQ**
Question ID : **264330139918**
Option 1 ID : **264330548052**
Option 2 ID : **264330548053**
Option 3 ID : **264330548054**
Option 4 ID : **264330548051**
Status : **Answered**
Chosen Option : **3**

Q.15 The ratio of present ages of Neelam and Rajni is 6 : 5. After six years, their ages will be in the ratio of 13 : 11. What is the present age of Rajni?

- Ans**
- 1. 45 years
 - 2. 75 years
 - 3. 30 years
 - 4. 60 years

Question Type : **MCQ**
Question ID : **264330140201**
Option 1 ID : **264330549185**
Option 2 ID : **264330549186**
Option 3 ID : **264330549183**
Option 4 ID : **264330549184**
Status : **Answered**
Chosen Option : **4**

Q.16 A person lent certain sum of money at the annual rate of 5 percent on simple interest. In 4 years, the interest amounted to Rs. 800. What is the sum lent?

- Ans**
- 1. Rs. 4000
 - 2. Rs. 2000
 - 3. Rs. 1600
 - 4. Rs. 3200

Question Type : **MCQ**
Question ID : **264330140249**
Option 1 ID : **264330549377**
Option 2 ID : **264330549375**
Option 3 ID : **264330549376**
Option 4 ID : **264330549378**
Status : **Answered**
Chosen Option : **1**

Q.17 A merchant sold an article at 20% loss. If he had sold it for Rs. 390 more, 6% would have been gained on the cost price. What is the cost price of the article?

- Ans**
- 1. Rs.1200
 - 2. Rs.2600
 - 3. Rs.1500
 - 4. Rs.1800

Question Type : **MCQ**
Question ID : **264330139042**
Option 1 ID : **264330544778**
Option 2 ID : **264330544775**
Option 3 ID : **264330544777**
Option 4 ID : **264330544776**
Status : **Answered**
Chosen Option : **3**

Q.18 Cost of two types of rice is Rs. 60 per kg and Rs. 84 per kg. If both the rice is mixed together in the ratio 1:1, then what should be the price of mixed variety of rice per kg?

- Ans**
- 1. Rs. 80 per kg
 - 2. Rs. 68 per kg
 - 3. Rs. 76 per kg
 - 4. Rs. 72 per kg

Question Type : **MCQ**

Question ID : **264330134084**

Option 1 ID : **264330525362**

Option 2 ID : **264330525359**

Option 3 ID : **264330525361**

Option 4 ID : **264330525360**

Status : **Answered**

Chosen Option : **4**

Q.19 The length of two parallel sides of a trapezium are 25 metre and 30 metre. If its height is 20 metre, then what is the area of the trapezium?

- Ans**
- 1. 420 metre²
 - 2. 350 metre²
 - 3. 590 metre²
 - 4. 550 metre²

Question Type : **MCQ**

Question ID : **264330140207**

Option 1 ID : **264330549208**

Option 2 ID : **264330549207**

Option 3 ID : **264330549209**

Option 4 ID : **264330549210**

Status : **Answered**

Chosen Option : **4**

Q.20 The speed of a boat in upstream is 8 km/hr and the speed of stream is 4 km/hr. The boat covers a distance of x km in upstream and x km in downstream. If the total time taken by the boat is 9 hours, then what is the value of x?

- Ans**
- 1. 60 km
 - 2. 72 km
 - 3. 48 km
 - 4. 36 km

Question Type : **MCQ**

Question ID : **264330139933**

Option 1 ID : **264330548114**

Option 2 ID : **264330548111**

Option 3 ID : **264330548113**

Option 4 ID : **264330548112**

Status : **Answered**

Chosen Option : **3**

Q.1 Select the option in which the numbers shares the same relationship in set as that shared by the numbers in the given set.
(NOTE: Operations should be performed on the whole numbers, without breaking down the numbers into its constituent digits. E.g.13 – Operations on 13 such as adding /subtracting /multiplying etc. to 13 can be performed. Breaking down 13 into 1 and 3 and then performing mathematical operations on 1 and 3 is not allowed)

(12, 22, 34)

(14, 15, 29)

Ans 1. (10, 20, 24)

2. (16, 17, 33)

3. (8, 9, 15)

4. (14, 15, 19)

Question Type : **MCQ**

Question ID : **264330139562**

Option 1 ID : **264330546666**

Option 2 ID : **264330546664**

Option 3 ID : **264330546665**

Option 4 ID : **264330546663**

Status : **Answered**

Chosen Option : **2**

Q.2 Which two signs should be interchanged to make the given equation correct?

$$2 \div 9 \times 18 + 7 - 4 = 1$$

Ans 1. = and \times

2. = and -

3. - and +

4. \times and +

Question Type : **MCQ**

Question ID : **264330140427**

Option 1 ID : **264330550089**

Option 2 ID : **264330550088**

Option 3 ID : **264330550087**

Option 4 ID : **264330550090**

Status : **Answered**

Chosen Option : **3**

Q.3 U, V, W, X and Y are sitting around a circular table facing away from the centre. U is sitting to the immediate left of W. X sits exactly in between V and Y. W and V are sitting next to each other. Who is sitting to the immediate left of U?

Ans 1. X

2. W

3. Y

4. V

Question Type : **MCQ**

Question ID : **264330135354**

Option 1 ID : **264330530325**

Option 2 ID : **264330530324**

Option 3 ID : **264330530326**

Option 4 ID : **264330530323**

Status : **Answered**

Chosen Option : **3**

Q.4 Which two numbers should be interchanged to make the given equation correct?

$$4 + 40 \times 5 - 16 \div 8 = 79$$

- Ans**
- 1. 16 and 4
 - 2. 4 and 40
 - 3. 5 and 16
 - 4. 40 and 16

Question Type : **MCQ**

Question ID : **264330140049**

Option 1 ID : **264330548578**

Option 2 ID : **264330548575**

Option 3 ID : **264330548576**

Option 4 ID : **264330548577**

Status : **Answered**

Chosen Option : **4**

Q.5 Weight of five bags C1, C2, C3, C4 and C5 is compared. Weight of C4 is more than C1 and less than C2. Weight of C5 is more than C3. Weight of C2 is less than C3. Weight of how many bags is less than C2?

- Ans**
- 1. 3
 - 2. 1
 - 3. 4
 - 4. 2

Question Type : **MCQ**

Question ID : **264330140984**

Option 1 ID : **264330552285**

Option 2 ID : **264330552284**

Option 3 ID : **264330552286**

Option 4 ID : **264330552283**

Status : **Answered**

Chosen Option : **4**

Q.6 Which of the following numbers will replace the question mark (?) in the given series?

89, 170, 219, 244, 253, ?

- Ans**
- 1. 254
 - 2. 257
 - 3. 255
 - 4. 256

Question Type : **MCQ**

Question ID : **264330140125**

Option 1 ID : **264330548879**

Option 2 ID : **264330548882**

Option 3 ID : **264330548880**

Option 4 ID : **264330548881**

Status : **Answered**

Chosen Option : **1**

Q.7 In a certain code language, '231' means 'Flower is Green', '307' means 'A Green Tree' and '781' means 'Tree and flower'.
Find the code for 'is'.

- Ans**
- 1. 1
 - 2. 8
 - 3. 0
 - 4. 2

Question Type : **MCQ**
Question ID : **264330140098**
Option 1 ID : **264330548773**
Option 2 ID : **264330548774**
Option 3 ID : **264330548772**
Option 4 ID : **264330548771**
Status : **Answered**
Chosen Option : **3**

Q.8 Select the option that is related to the third word in the same way as the second word is related to the first word.
Afghanistan : Kabul :: Australia : ?

- Ans**
- 1. Wellington
 - 2. Sydney
 - 3. Melbourne
 - 4. Canberra

Question Type : **MCQ**
Question ID : **264330140115**
Option 1 ID : **264330548839**
Option 2 ID : **264330548840**
Option 3 ID : **264330548841**
Option 4 ID : **264330548842**
Status : **Answered**
Chosen Option : **4**

Q.9 Which of the following letter cluster will replace the question mark (?) in the given series?
DMF, FKG, HIH, JGI, LEJ, ?

- Ans**
- 1. NDJ
 - 2. MDK
 - 3. KDN
 - 4. NCK

Question Type : **MCQ**
Question ID : **264330135346**
Option 1 ID : **264330530294**
Option 2 ID : **264330530293**
Option 3 ID : **264330530291**
Option 4 ID : **264330530292**
Status : **Answered**
Chosen Option : **4**

Q.10 Select the option that is related to the third number in the same way as the second number is related to the first number.

236 : 33 :: 325 : ?

- Ans**
- 1. 27
 - 2. 33
 - 3. 63
 - 4. 30

Question Type : **MCQ**

Question ID : **264330140106**

Option 1 ID : **264330548805**

Option 2 ID : **264330548806**

Option 3 ID : **264330548803**

Option 4 ID : **264330548804**

Status : **Answered**

Chosen Option : **4**

Q.11 Select the option that is related to the third word in the same way as the second word is related to the first word.

Arthritis : Joints :: Asthma : ?

- Ans**
- 1. Heart
 - 2. Lungs
 - 3. Liver
 - 4. Brain

Question Type : **MCQ**

Question ID : **264330140094**

Option 1 ID : **264330548755**

Option 2 ID : **264330548757**

Option 3 ID : **264330548758**

Option 4 ID : **264330548756**

Status : **Answered**

Chosen Option : **2**

Q.12 In a certain code language, 'RAUGHT' is written as 'TYWEJR' and 'DOMINE' is written as 'FMOGPC'. How will

'BACKER' be written in that language?

- Ans**
- 1. DYEJIP
 - 2. DYEKGP
 - 3. DYEIHP
 - 4. DYEIGP

Question Type : **MCQ**

Question ID : **264330140476**

Option 1 ID : **264330550286**

Option 2 ID : **264330550283**

Option 3 ID : **264330550285**

Option 4 ID : **264330550284**

Status : **Answered**

Chosen Option : **4**

Q.13 In the following question below are given some statements followed by some conclusions based on those statements. Taking the given statements to be true even if they seem to be at variance from commonly known facts. Read all the conclusions and then decide which of the given conclusion logically follows the given statements.

Statements:

I. All J are Y.

II. No X is Y.

Conclusions:

I. Some X are not Y.

II. Some J are not X.

- Ans**
- 1. Neither conclusion follows
 - 2. Both conclusions I and II follows
 - 3. Only conclusion I follows
 - 4. Only conclusion II follows

Question Type : **MCQ**

Question ID : **264330140062**

Option 1 ID : **264330548630**

Option 2 ID : **264330548629**

Option 3 ID : **264330548627**

Option 4 ID : **264330548628**

Status : **Answered**

Chosen Option : **1**

Q.14 Which of the following numbers will replace the question mark (?) in the given series?

81, 92, 101, 108, 113, ?

- Ans**
- 1. 118
 - 2. 117
 - 3. 114
 - 4. 116

Question Type : **MCQ**

Question ID : **264330140463**

Option 1 ID : **264330550234**

Option 2 ID : **264330550232**

Option 3 ID : **264330550233**

Option 4 ID : **264330550231**

Status : **Answered**

Chosen Option : **4**

Q.15 Eight boys Anil, Kamal, Ram, Sanjay, Aakash, Vivek, Rahul and Ramu are sitting around a circular table facing towards the centre (not necessarily in the same order). Vivek is third to the right of Kamal. Kamal is second to the right of Sanjay. Ram is second to the right of Anil. Anil is second to the right of Vivek. Rahul is third to the right of Aakash. Who is third to the left of Anil?

- Ans**
- 1. Vivek
 - 2. Kamal
 - 3. Aakash
 - 4. Ramu

Question Type : **MCQ**

Question ID : **264330139978**

Option 1 ID : **264330548294**

Option 2 ID : **264330548291**

Option 3 ID : **264330548293**

Option 4 ID : **264330548292**

Status : **Answered**

Chosen Option : **4**

Q.16 In a certain code language, 'BURN' is written as 'CVS14'. How will 'GOLD' be written in that language?

- Ans
- ✓ 1. HPM4
 - ✗ 2. HP4M
 - ✗ 3. HMP4
 - ✗ 4. PHM4

Question Type : MCQ

Question ID : 264330138770

Option 1 ID : 264330543689

Option 2 ID : 264330543688

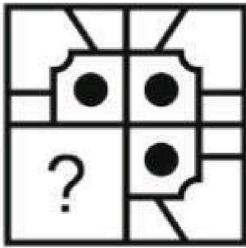
Option 3 ID : 264330543687

Option 4 ID : 264330543690

Status : Answered

Chosen Option : 1

Q.17 Which answer figure will complete the pattern in the question figure?



Ans

- ✓ 1.
- ✗ 2.
- ✗ 3.
- ✗ 4.

Question Type : MCQ

Question ID : 264330140975

Option 1 ID : 264330552249

Option 2 ID : 264330552248

Option 3 ID : 264330552250

Option 4 ID : 264330552247

Status : Answered

Chosen Option : 1

Q.18 If a mirror is placed on the line AB, then out of the option figures which figure will be the right image of the question figure?



Ans

- 1.
- 2.
- 3.
- 4.

Question Type : **MCQ**
 Question ID : **264330140071**
 Option 1 ID : **264330548665**
 Option 2 ID : **264330548666**
 Option 3 ID : **264330548664**
 Option 4 ID : **264330548663**
 Status : **Answered**
 Chosen Option : **4**

Q.19 Two Statements are given followed by two conclusions numbered I and II. Assuming the statements to be true, even if they seem to be at variance with commonly known facts, decide which of the conclusions logically follow(s) from the statements.

Statements:

Some popcorns are Chinese.

All pasta are Chinese.

Conclusions:

I. All Chinese are pasta.

II. Some popcorns are pasta.

- Ans**
- 1. Neither conclusion I nor II follow.
 - 2. Both conclusions I and II follow.
 - 3. Only conclusion II follows.
 - 4. Only conclusion I follows.

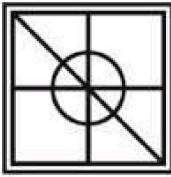
Question Type : **MCQ**
 Question ID : **264330140462**
 Option 1 ID : **264330550230**
 Option 2 ID : **264330550229**
 Option 3 ID : **264330550228**
 Option 4 ID : **264330550227**
 Status : **Answered**
 Chosen Option : **1**

Q.20 Select the option figure in which the given figure is embedded. (rotation is NOT allowed)

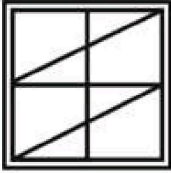


Ans

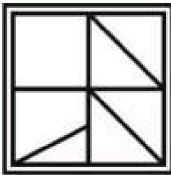
✗ 1.



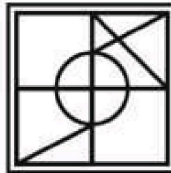
✗ 2.



✗ 3.



✓ 4.



Question Type : MCQ

Question ID : 264330140993

Option 1 ID : 264330552321

Option 2 ID : 264330552320

Option 3 ID : 264330552322

Option 4 ID : 264330552319

Status : Answered

Chosen Option : 4

Section : General Awareness

Q.1 The statement- "We shall die to awaken the nation" was made by _____.

Ans

✓ 1. Bagha Jatin

✗ 2. Pingali Venkayya

✗ 3. Bir Tikendrajit Singh

✗ 4. Surya Sen

Question Type : MCQ

Question ID : 264330140947

Option 1 ID : 264330552137

Option 2 ID : 264330552138

Option 3 ID : 264330552136

Option 4 ID : 264330552135

Status : Answered

Chosen Option : 1

Q.2 Liver gland secretes _____ that is stored in a sac called the gall bladder.

- Ans
- 1. estrogen
 - 2. hydrochloric acid
 - 3. mucous
 - 4. bile juice

Question Type : MCQ
Question ID : 264330138984
Option 1 ID : 264330544543
Option 2 ID : 264330544545
Option 3 ID : 264330544546
Option 4 ID : 264330544544
Status : Answered
Chosen Option : 4

Q.3 Which of the following government official is the ex officio chairman of Rajya Sabha?

- Ans
- 1. President of India
 - 2. Vice President of India
 - 3. Chief Justice of India
 - 4. Prime Minister of India

Question Type : MCQ
Question ID : 264330140388
Option 1 ID : 264330549931
Option 2 ID : 264330549932
Option 3 ID : 264330549934
Option 4 ID : 264330549933
Status : Answered
Chosen Option : 2

Q.4 In 2019, the Government of India honoured Milena Salvini, an Italian-born Kathakali dancer, with which of the following award?

- Ans
- 1. Padma Shri
 - 2. Bharat Ratna
 - 3. Padma Vibhushan
 - 4. Padma Bhushan

Question Type : MCQ
Question ID : 264330140386
Option 1 ID : 264330549924
Option 2 ID : 264330549923
Option 3 ID : 264330549926
Option 4 ID : 264330549925
Status : Not Answered
Chosen Option : --

Q.5 How many laws were repealed under the Farm Laws Repeal Bill, 2021?

- Ans 1. Three
 2. Four
 3. One
 4. Two

Question Type : MCQ
Question ID : 264330140727
Option 1 ID : 264330551257
Option 2 ID : 264330551258
Option 3 ID : 264330551255
Option 4 ID : 264330551256
Status : Answered
Chosen Option : 1

Q.6 Provide a style of architecture belongs to which empire?

- Ans 1. Vijayanagar Empire
 2. Gupta Empire
 3. Mauryan Empire
 4. Bahmani Empire

Question Type : MCQ
Question ID : 264330140296
Option 1 ID : 264330549563
Option 2 ID : 264330549565
Option 3 ID : 264330549564
Option 4 ID : 264330549566
Status : Answered
Chosen Option : 1

Q.7 In January 2022, former RBI Governor, Urjit Patel has been appointed as vice-president for investment operations in _____.

- Ans 1. World Bank
 2. New Development Bank
 3. International Monetary Fund
 4. Asian Infrastructure Investment Bank

Question Type : MCQ
Question ID : 264330139756
Option 1 ID : 264330547439
Option 2 ID : 264330547440
Option 3 ID : 264330547441
Option 4 ID : 264330547442
Status : Not Answered
Chosen Option : --

Q.8 The Great Rann of Kutch falls into ____ region of India.

- Ans
- 1. Eastern Ghats
 - 2. Coastal Plains
 - 3. Thar Desert
 - 4. Northern Plain

Question Type : **MCQ**
Question ID : **264330140916**
Option 1 ID : **264330552012**
Option 2 ID : **264330552014**
Option 3 ID : **264330552013**
Option 4 ID : **264330552011**
Status : **Answered**
Chosen Option : **3**

Q.9 Which among the following states does NOT produce coal in India?

- Ans
- 1. Chhattisgarh
 - 2. Odisha
 - 3. Gujarat
 - 4. Jharkhand

Question Type : **MCQ**
Question ID : **264330140735**
Option 1 ID : **264330551290**
Option 2 ID : **264330551288**
Option 3 ID : **264330551289**
Option 4 ID : **264330551287**
Status : **Answered**
Chosen Option : **3**

Q.10 Mohenjodaro belongs to which of the following civilization?

- Ans
- 1. Maya civilization
 - 2. Indus Valley civilization
 - 3. Mesopotamian civilization
 - 4. Egyptian civilization

Question Type : **MCQ**
Question ID : **264330140305**
Option 1 ID : **264330549602**
Option 2 ID : **264330549599**
Option 3 ID : **264330549600**
Option 4 ID : **264330549601**
Status : **Answered**
Chosen Option : **2**

Q.11 By which process, water soluble inorganic nutrients go down into the soil horizon and get precipitated as unavailable salts?

- Ans
- 1. Fragmentation
 - 2. Leaching
 - 3. Decomposition
 - 4. Humification

Question Type : MCQ
Question ID : 264330140913
Option 1 ID : 264330552001
Option 2 ID : 264330551999
Option 3 ID : 264330552002
Option 4 ID : 264330552000
Status : Answered
Chosen Option : 2

Q.12 Super Bowl, an annual championship game of Football is held in _____ country.

- Ans
- 1. Canada
 - 2. Peru
 - 3. United States of America
 - 4. Mexico

Question Type : MCQ
Question ID : 264330140724
Option 1 ID : 264330551244
Option 2 ID : 264330551246
Option 3 ID : 264330551243
Option 4 ID : 264330551245
Status : Not Answered
Chosen Option : --

Q.13 Which among the following festivals mark the start of Telugu New year?

- Ans
- 1. Onam
 - 2. Gudi Padwa
 - 3. Ugadi
 - 4. Pongal

Question Type : MCQ
Question ID : 264330140704
Option 1 ID : 264330551164
Option 2 ID : 264330551166
Option 3 ID : 264330551163
Option 4 ID : 264330551165
Status : Answered
Chosen Option : 3

Q.14 Which among the following planets rotates in a direction opposite to that of the others?

- Ans**
- 1. Jupiter
 - 2. Saturn
 - 3. Mercury
 - 4. Venus

Question Type : **MCQ**
Question ID : **264330140939**
Option 1 ID : **264330552103**
Option 2 ID : **264330552106**
Option 3 ID : **264330552104**
Option 4 ID : **264330552105**
Status : **Answered**
Chosen Option : **2**

Q.15 Ustad Amjad Ali Khan is best known for which of the following instrument?

- Ans**
- 1. Santoor
 - 2. Shehnai
 - 3. Guitar
 - 4. Sarod

Question Type : **MCQ**
Question ID : **264330140310**
Option 1 ID : **264330549620**
Option 2 ID : **264330549622**
Option 3 ID : **264330549619**
Option 4 ID : **264330549621**
Status : **Not Answered**
Chosen Option : **--**

Q.16 The UMEED Scheme of _____ Rural Livelihoods Mission is providing help to the aspirations of rural women in the Union Territory, who aspire to become economically independent.

- Ans**
- 1. Daman and Diu
 - 2. Lakshadweep
 - 3. Andaman and Nicobar Islands
 - 4. Jammu and Kashmir

Question Type : **MCQ**
Question ID : **264330140931**
Option 1 ID : **264330552073**
Option 2 ID : **264330552072**
Option 3 ID : **264330552074**
Option 4 ID : **264330552071**
Status : **Not Answered**
Chosen Option : **--**

Q.17 Who wrote book named "Gulamgiri" in 1873?

- Ans
- 1. Debendranath Tagore
 - 2. Jyotiba Phule
 - 3. Dayanand Saraswati
 - 4. Ishwarchandra Vidyasagar

Question Type : MCQ

Question ID : 264330139746

Option 1 ID : 264330547402

Option 2 ID : 264330547399

Option 3 ID : 264330547400

Option 4 ID : 264330547401

Status : Answered

Chosen Option : 2

Q.18 The World Games 2022 was held in _____ city of the country, United States of America.

- Ans
- 1. Austin
 - 2. Washington
 - 3. New Orleans
 - 4. Birmingham

Question Type : MCQ

Question ID : 264330140773

Option 1 ID : 264330551440

Option 2 ID : 264330551441

Option 3 ID : 264330551442

Option 4 ID : 264330551439

Status : Answered

Chosen Option : 3

Q.19 The famous movie "3 idiots" is based on the novel "Five Point Someone" which is written by Indian author _____.

- Ans
- 1. Khushwant Singh
 - 2. Novoneel Chakraborty
 - 3. Chetan Bhagat
 - 4. Durjoy Datta

Question Type : MCQ

Question ID : 264330140334

Option 1 ID : 264330549718

Option 2 ID : 264330549716

Option 3 ID : 264330549717

Option 4 ID : 264330549715

Status : Answered

Chosen Option : 3

Q.20 The minimum rate below which banks are not allowed to lend money except in cases specified by the Reserve Bank of India is called _____.

- Ans**
- 1. repo rate
 - 2. reverse repo rate
 - 3. cash rate
 - 4. base rate

Question Type : **MCQ**
Question ID : **264330140366**
Option 1 ID : **264330549844**
Option 2 ID : **264330549845**
Option 3 ID : **264330549846**
Option 4 ID : **264330549843**
Status : **Answered**
Chosen Option : **3**

Q.21 As of November 2022, what is the official language of India's neighbouring country China?

- Ans**
- 1. Mandarin
 - 2. Sinhala
 - 3. Burmese
 - 4. Bengali

Question Type : **MCQ**
Question ID : **264330140763**
Option 1 ID : **264330551401**
Option 2 ID : **264330551399**
Option 3 ID : **264330551400**
Option 4 ID : **264330551402**
Status : **Answered**
Chosen Option : **1**

Q.22 Ananga Pala was a ruler of which dynasty?

- Ans**
- 1. Rajput Dynasty
 - 2. Gurjara-Pratihara Dynasty
 - 3. Pallava Dynasty
 - 4. Khalji Dynasty

Question Type : **MCQ**
Question ID : **264330139720**
Option 1 ID : **264330547297**
Option 2 ID : **264330547296**
Option 3 ID : **264330547298**
Option 4 ID : **264330547295**
Status : **Answered**
Chosen Option : **1**

Q.23 Formula to find unemployment rate is _____.

- Ans
- 1. $(\text{Unemployed male workers} / \text{Total labour force}) \times 1000$
 - 2. $(\text{Unemployed workers} / \text{Total labour force}) \times 100$
 - 3. $(\text{Employed workers} / \text{Total labour force}) \times 100$
 - 4. $(\text{Employed workers} / \text{Male labour force}) \times 100$

Question Type : MCQ

Question ID : 264330140287

Option 1 ID : 264330549529

Option 2 ID : 264330549527

Option 3 ID : 264330549528

Option 4 ID : 264330549530

Status : Answered

Chosen Option : 2

Q.24 Which among the following dance forms of India is associated with Rajasthan?

- Ans
- 1. Bharatanatyam
 - 2. Odissi
 - 3. Charkula
 - 4. Ghoomar

Question Type : MCQ

Question ID : 264330140753

Option 1 ID : 264330551361

Option 2 ID : 264330551359

Option 3 ID : 264330551360

Option 4 ID : 264330551362

Status : Answered

Chosen Option : 4

Q.25 The force exerted by a charged body on another charged or uncharged body is known as _____.

- Ans
- 1. electrostatic force
 - 2. gravitational force
 - 3. frictional force
 - 4. pressure force

Question Type : MCQ

Question ID : 264330139882

Option 1 ID : 264330547907

Option 2 ID : 264330547908

Option 3 ID : 264330547909

Option 4 ID : 264330547910

Status : Answered

Chosen Option : 1

Q.1 Select the most appropriate option to fill in the blank.

Slightly _____ bitter oranges to remove the red color which covers their skins.

- Ans
- 1. grate
 - 2. great
 - 3. grace
 - 4. grade

Question Type : **MCQ**
Question ID : **264330141216**
Option 1 ID : **264330553200**
Option 2 ID : **264330553201**
Option 3 ID : **264330553202**
Option 4 ID : **264330553199**
Status : **Answered**
Chosen Option : **1**

Q.2 Select the wrongly spelt word.

- Ans
- 1. Pausity
 - 2. Phlegmatic
 - 3. Philistine
 - 4. Philanthropy

Question Type : **MCQ**
Question ID : **264330136558**
Option 1 ID : **264330534970**
Option 2 ID : **264330534969**
Option 3 ID : **264330534968**
Option 4 ID : **264330534967**
Status : **Answered**
Chosen Option : **1**

Q.3 Select the most appropriate synonym of the given word.

Wealthy

- Ans
- 1. Depressed
 - 2. Affluent
 - 3. Lacking
 - 4. Poor

Question Type : **MCQ**
Question ID : **264330136151**
Option 1 ID : **264330533406**
Option 2 ID : **264330533404**
Option 3 ID : **264330533405**
Option 4 ID : **264330533403**
Status : **Answered**
Chosen Option : **2**

Q.4 Select the most appropriate word for the given group of words.

A calculated move to gain an advantage

- Ans**
- 1. Grunt
 - 2. Bonsai
 - 3. Gambit
 - 4. Profit

Question Type : **MCQ**
Question ID : **264330136280**
Option 1 ID : **264330533899**
Option 2 ID : **264330533901**
Option 3 ID : **264330533902**
Option 4 ID : **264330533900**
Status : **Answered**
Chosen Option : **3**

Q.5 Select the most appropriate option to substitute the bracketed segment in the given sentence. If there is no need to substitute it, select 'no substitution required'.

If the dog (is allow complete freedom), it can assume that any toy is acceptable for play.

- Ans**
- 1. is allowed complete freedom
 - 2. allowed completely freedom
 - 3. No substitution required
 - 4. are allowed complete free

Question Type : **MCQ**
Question ID : **264330136748**
Option 1 ID : **264330535699**
Option 2 ID : **264330535700**
Option 3 ID : **264330535702**
Option 4 ID : **264330535701**
Status : **Answered**
Chosen Option : **1**

Q.6 A sentence has been given with a blank to be filled with an appropriate option. Choose the correct alternative.

Social media is _____ to market products.

- Ans**
- 1. used
 - 2. uses
 - 3. use
 - 4. using

Question Type : **MCQ**
Question ID : **264330135236**
Option 1 ID : **264330529869**
Option 2 ID : **264330529867**
Option 3 ID : **264330529870**
Option 4 ID : **264330529868**
Status : **Answered**
Chosen Option : **1**

Q.7 Select the most appropriate option to fill in the blank.

What customs officials are asking for are not things that _____ their own personal titles.

Ans ✓ 1. aggrandize

✗ 2. accede

✗ 3. acerbic

✗ 4. advocate

Question Type : **MCQ**

Question ID : **264330135670**

Option 1 ID : **264330531576**

Option 2 ID : **264330531577**

Option 3 ID : **264330531578**

Option 4 ID : **264330531575**

Status : **Answered**

Chosen Option : **1**

Q.8 Choose the incorrectly spelt word.

Ans ✗ 1. Trust

✗ 2. Shopping

✓ 3. Forciing

✗ 4. Wave

Question Type : **MCQ**

Question ID : **264330135557**

Option 1 ID : **264330531130**

Option 2 ID : **264330531129**

Option 3 ID : **264330531127**

Option 4 ID : **264330531128**

Status : **Answered**

Chosen Option : **3**

Q.9 Identify the segment that contains a grammatical error. If there is no error, select 'No error'.

It's good to travel and / work, most beautiful than going / to the same office each day.

Ans ✓ 1. work, most beautiful than going

✗ 2. No error

✗ 3. to the same office each day.

✗ 4. It's good to travel and

Question Type : **MCQ**

Question ID : **264330135742**

Option 1 ID : **264330531852**

Option 2 ID : **264330531854**

Option 3 ID : **264330531853**

Option 4 ID : **264330531851**

Status : **Answered**

Chosen Option : **1**

Q.10 Identify the segment that contains a grammatical error. If there is no error, select 'No error'.

It would be neat and / cleanest, a home worthy of / spending our lives together.

- Ans**
- 1. cleanest, a home worthy of
 - 2. spending our lives together.
 - 3. It would be neat and
 - 4. No error

Question Type : **MCQ**
Question ID : **264330136266**
Option 1 ID : **264330533848**
Option 2 ID : **264330533849**
Option 3 ID : **264330533847**
Option 4 ID : **264330533850**
Status : **Answered**
Chosen Option : **1**

Q.11 Select the word from the options which is similar in meaning to the bracketed word given in the sentence below.
There is widespread (prejudice) against workers over 45.

- Ans**
- 1. Concern
 - 2. Intolerance
 - 3. Temperament
 - 4. Misfortune

Question Type : **MCQ**
Question ID : **264330135758**
Option 1 ID : **264330531911**
Option 2 ID : **264330531912**
Option 3 ID : **264330531914**
Option 4 ID : **264330531913**
Status : **Answered**
Chosen Option : **2**

Q.12 Fill in the blank with the most appropriate option.
Can we reschedule the meeting? I _____.

- Ans**
- 1. have a headache
 - 2. take a headache
 - 3. get a headache
 - 4. give a headache

Question Type : **MCQ**
Question ID : **264330135739**
Option 1 ID : **264330531842**
Option 2 ID : **264330531841**
Option 3 ID : **264330531840**
Option 4 ID : **264330531839**
Status : **Answered**
Chosen Option : **1**

Q.13 Select the word from the options which is exactly opposite in meaning to the bracketed word given in the sentence below.

She relished our (arguments), most of which she won.

- Ans**
- 1. feud
 - 2. negotiations
 - 3. agreements
 - 4. altercation

Question Type : **MCQ**
Question ID : **264330135734**
Option 1 ID : **264330531819**
Option 2 ID : **264330531822**
Option 3 ID : **264330531821**
Option 4 ID : **264330531820**
Status : **Answered**
Chosen Option : **3**

Q.14 Select the most appropriate meaning of the bracketed idiom in the given sentence.

He is (a wolf in sheep's clothing), outwardly kind but inwardly vicious!

- Ans**
- 1. Verbally scold someone
 - 2. A dangerous person pretending harmless
 - 3. A situation involving a narrow escape from danger
 - 4. Angry today about something that occurred in the past

Question Type : **MCQ**
Question ID : **264330136556**
Option 1 ID : **264330534960**
Option 2 ID : **264330534959**
Option 3 ID : **264330534962**
Option 4 ID : **264330534961**
Status : **Answered**
Chosen Option : **2**

Q.15 Improve the underlined part of the sentence. Choose 'No improvement' as an answer if the sentence is grammatically correct.

We was installing wood flooring throughout our house.

- Ans**
- 1. installed wood
 - 2. No improvement
 - 3. installs wood
 - 4. installs wooden

Question Type : **MCQ**
Question ID : **264330135233**
Option 1 ID : **264330529855**
Option 2 ID : **264330529858**
Option 3 ID : **264330529857**
Option 4 ID : **264330529856**
Status : **Answered**
Chosen Option : **1**

Q.16 Identify the segment that contains a grammatical error. If there is no error, select 'No error'.
I had been angry the whole / evening, so she rubs brahmi / oil into my scalp to cool my brain.

- Ans**
- 1. oil into my scalp to cool my brain.
 - 2. No error
 - 3. evening, so she rubs brahmi
 - 4. I had been angry the whole

Question Type : **MCQ**
Question ID : **264330135743**
Option 1 ID : **264330531857**
Option 2 ID : **264330531858**
Option 3 ID : **264330531856**
Option 4 ID : **264330531855**
Status : **Answered**
Chosen Option : **3**

Q.17 Select the most appropriate meaning of the given idiom.
In fits and starts

- Ans**
- 1. Be in difficulty
 - 2. Irregularly
 - 3. Everywhere
 - 4. Summary

Question Type : **MCQ**
Question ID : **264330136763**
Option 1 ID : **264330535756**
Option 2 ID : **264330535757**
Option 3 ID : **264330535758**
Option 4 ID : **264330535755**
Status : **Answered**
Chosen Option : **2**

Q.18 Choose the word that is opposite in meaning to the given word.

Plain

- Ans**
- 1. Stupid
 - 2. Fancy
 - 3. Crazy
 - 4. Mean

Question Type : **MCQ**
Question ID : **264330135527**
Option 1 ID : **264330531014**
Option 2 ID : **264330531012**
Option 3 ID : **264330531011**
Option 4 ID : **264330531013**
Status : **Answered**
Chosen Option : **2**

Q.19 Select the most appropriate word for the given group of words.

Urging or requesting (someone) solemnly or earnestly to do something

- Ans**
- 1. Arrears
 - 2. Adjure
 - 3. Armada
 - 4. Arena

Question Type : **MCQ**

Question ID : **264330136497**

Option 1 ID : **264330534731**

Option 2 ID : **264330534732**

Option 3 ID : **264330534733**

Option 4 ID : **264330534734**

Status : **Not Answered**

Chosen Option : --

Q.20 Select the word segment that substitutes (replaces) the bracketed word segment correctly and completes the sentence meaningfully. Select the option 'no correction required' if the sentence is correct as given.

How (can a book such as) be written before I'd lived the incidents it described?

- Ans**
- 1. No correction required
 - 2. could such a book
 - 3. must so a book
 - 4. may such a book

Question Type : **MCQ**

Question ID : **264330136414**

Option 1 ID : **264330534422**

Option 2 ID : **264330534419**

Option 3 ID : **264330534421**

Option 4 ID : **264330534420**

Status : **Answered**

Chosen Option : **2**

Comprehension:

In the following passage some words have been deleted. Fill in the blanks with the help of the alternatives given. Select the most appropriate option for each number.

At the core of the (1) _____ lies the fierce (2) _____ between two branches of the Kuru dynasty, the Pandavas and the Kauravas. The lifelong struggle (3) _____ the cousins for the throne of Hastinapur culminates (4) _____ bloody battle of Kurukshetra, in which (5) _____ kings of that period participated and perished.

SubQuestion No : 21

Q.21 Select the most appropriate option to fill in the blank No. 1.

- Ans**
- 1. dull
 - 2. exercise
 - 3. bright
 - 4. epic

Question Type : **MCQ**

Question ID : **264330135724**

Option 1 ID : **264330531781**

Option 2 ID : **264330531780**

Option 3 ID : **264330531779**

Option 4 ID : **264330531782**

Status : **Answered**

Chosen Option : **4**

Comprehension:

In the following passage some words have been deleted. Fill in the blanks with the help of the alternatives given. Select the most appropriate option for each number.

At the core of the (1) _____ lies the fierce (2) _____ between two branches of the Kuru dynasty, the Pandavas and the Kauravas. The lifelong struggle (3) _____ the cousins for the throne of Hastinapur culminates (4) _____ bloody battle of Kurukshetra, in which (5) _____ kings of that period participated and perished.

SubQuestion No : 22

Q.22 Select the most appropriate option to fill in the blank No. 2.

- Ans**
- 1. rivalry
 - 2. commute
 - 3. hostile
 - 4. friendship

Question Type : **MCQ**

Question ID : **264330135725**

Option 1 ID : **264330531785**

Option 2 ID : **264330531784**

Option 3 ID : **264330531786**

Option 4 ID : **264330531783**

Status : **Answered**

Chosen Option : **1**

Comprehension:

In the following passage some words have been deleted. Fill in the blanks with the help of the alternatives given. Select the most appropriate option for each number.

At the core of the (1) _____ lies the fierce (2) _____ between two branches of the Kuru dynasty, the Pandavas and the Kauravas. The lifelong struggle (3) _____ the cousins for the throne of Hastinapur culminates (4) _____ bloody battle of Kurukshetra, in which (5) _____ kings of that period participated and perished.

SubQuestion No : 23

Q.23 Select the most appropriate option to fill in the blank No. 3.

- Ans
- 1. amongst
 - 2. inside
 - 3. between
 - 4. along

Question Type : MCQ

Question ID : 264330135726

Option 1 ID : 264330531787

Option 2 ID : 264330531789

Option 3 ID : 264330531788

Option 4 ID : 264330531790

Status : Answered

Chosen Option : 3

Comprehension:

In the following passage some words have been deleted. Fill in the blanks with the help of the alternatives given. Select the most appropriate option for each number.

At the core of the (1) _____ lies the fierce (2) _____ between two branches of the Kuru dynasty, the Pandavas and the Kauravas. The lifelong struggle (3) _____ the cousins for the throne of Hastinapur culminates (4) _____ bloody battle of Kurukshetra, in which (5) _____ kings of that period participated and perished.

SubQuestion No : 24

Q.24 Select the most appropriate option to fill in the blank No. 4.

- Ans
- 1. in that
 - 2. inside
 - 3. in the
 - 4. in to

Question Type : MCQ

Question ID : 264330135727

Option 1 ID : 264330531792

Option 2 ID : 264330531794

Option 3 ID : 264330531791

Option 4 ID : 264330531793

Status : Answered

Chosen Option : 3

Comprehension:

In the following passage some words have been deleted. Fill in the blanks with the help of the alternatives given. Select the most appropriate option for each number.

At the core of the (1) _____ lies the fierce (2) _____ between two branches of the Kuru dynasty, the Pandavas and the Kauravas. The lifelong struggle (3) _____ the cousins for the throne of Hastinapur culminates (4) _____ bloody battle of Kurukshetra, in which (5) _____ kings of that period participated and perished.

SubQuestion No : 25

Q.25 Select the most appropriate option to fill in the blank No. 5.

- Ans**
- 1. total
 - 2. almost
 - 3. most
 - 4. each

Question Type : **MCQ**

Question ID : **264330135728**

Option 1 ID : **264330531798**

Option 2 ID : **264330531795**

Option 3 ID : **264330531796**

Option 4 ID : **264330531797**

Status : **Answered**

Chosen Option : **3**