


Stenographer Grade 'C' & 'D' Examination, 2019 | Shift 24-12-2020

Roll Number	
Candidate Name	
Venue Name	
Exam Date	24/12/2020
Exam Time	10:00 AM - 12:00 PM
Subject	Stenographer Grade C and D Examination 2019

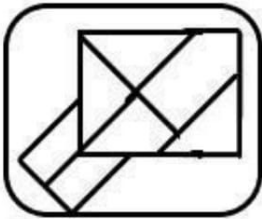
Section : General Intelligence and Reasoning

Q.1 Select the option in which the given figure is embedded (rotation is not allowed).

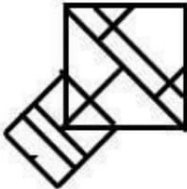


Ans

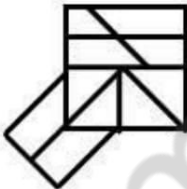
✗ 1.



✗ 2.



✗ 3.



✓ 4.



Question ID : 6549785641

Status : Answered

Chosen Option : 4

Q.2 Six subjects Physics, Chemistry, Biology, Ecology, Hindi and English are taught from Monday to Saturday. Each day, one subject is taught. Hindi is taught just after Ecology and just before English. Biology is taught after English. Physics and Ecology are taught on Tuesday and Wednesday respectively. Which subject is taught on Monday?

- Ans
- 1. Chemistry
 - 2. English
 - 3. Biology
 - 4. Hindi

Question ID : 6549785610
Status : NotAnswered
Chosen Option : --

Q.3 Select the option that is related to the third term in the same way as the second term is related to the first term.

FOSTER : OFTSRE :: LAWYER : ?

- Ans
- 1. AYLWRE
 - 2. ALYRWE
 - 3. ALYWRE
 - 4. ALYREW

Question ID : 6549785604
Status : Answered
Chosen Option : 3

Q.4 Select the letter cluster that will replace the question mark (?) in the following series.

AJQ, ETG, IDW, ONM, ?

- Ans
- 1. UYB
 - 2. UXC
 - 3. ZXB
 - 4. VZC

Question ID : 6549785598
Status : Answered
Chosen Option : 2

Q.5 In a certain code language, 'SCENARIO' is written as '383514118915'. How will 'MONUMENT' be written in that code language?

- Ans
- 1. 261514211351440
 - 2. 131514211351420
 - 3. 261513201351320
 - 4. 261514211351420

Question ID : 6549785609
Status : Answered
Chosen Option : 4

Q.6 If 'A # B' means 'A is the sister of B' and 'A % B' means 'A is the mother of B', then which of the following expressions would mean:

P is Q's mother's sister?

- Ans
- 1. P % R # Q
 - 2. P # R % Q
 - 3. Q % R # P
 - 4. R # Q % P

Question ID : 6549785615
Status : Answered
Chosen Option : 3


Q.7 Study the given pattern carefully and select the number that can replace the question mark (?) in it.

27 30 40
15 14 22
36 64 ?

- Ans
- 1. 100
 - 2. 49
 - 3. 81
 - 4. 121

Question ID : 6549785635
Status : Answered
Chosen Option : 3

Q.8 Select the option figure that will come next in the following figure series.



Ans

- 1.
- 2.
- 3.
- 4.

Question ID : 6549785639

Status : Answered

Chosen Option : 1

Q.9 Which option represents the correct order of the given words as they would appear in an English dictionary?

1. Cattle
2. Catering
3. Category
4. Catatonic
5. Catalysis

- Ans
- 1. 5, 4, 2, 3, 1
 - 2. 4, 5, 3, 2, 1
 - 3. 5, 4, 3, 1, 2
 - 4. 5, 4, 3, 2, 1

Question ID : 6549785601

Status : Answered

Chosen Option : 4

Q. 10 Maheep starts walking from his office and walks 120 m towards south. Then he turns left and walks a certain distance A m. Then he turns right and walks 80 m. Then he turns left and walks another certain distance B m. He there by reaches his home. If the shortest distance between his office and home is 290 m, then what is the sum of the distances A and B that Maheep covered/walked?

- Ans
- 1. 230 m
 - 2. 240 m
 - 3. 200 m
 - 4. 210 m

Question ID : 6549785638

Status : Not Attempted and Marked For Review

Chosen Option : --

Q. 11 Preetam starts walking from Point B and walks 40 m towards west. Then he turns left and walks 35 m. Then he turns right and walks 25 m. Harmeet starts from Point A and walks 45 m towards east. Then he turns right and walks 35 m, and he ends up meeting Preetam there. What is the distance between Point A and Point B?

- Ans
- 1. 70 m
 - 2. 100 m
 - 3. 85 m
 - 4. 110 m

Question ID : 6549785637

Status : Answered

Chosen Option : 4

Q. 12 In a certain code language, 'CANDID' is written as 'HMHREG'. How will 'SENSEX' be written in that code language?

- Ans
- 1. BIVRIV
 - 2. CWISIW
 - 3. DIZRIZ
 - 4. BIWRIW

Question ID : 6549785608

Status : Answered

Chosen Option : 4

Q. 13 Read the given statements and conclusions carefully. Assuming that the information given in the statements is true, even if it appears to be at variance with commonly known facts, decide which of the given conclusions logically follow(s) from the statements.

Statements:

- No boat is ship.
- Some ships are rods.

Conclusions:

- I. No boat is rod.
- II. Some rods are ships.
- III. Some rods are not boats.

- Ans
- 1. Only conclusion III follows.
 - 2. All of the conclusions follow.
 - 3. Only conclusion II follows.
 - 4. Only conclusions II and III follow.

Question ID : 6549785618

Status : Answered

Chosen Option : 3

Q. 14 Select the correct alternative to indicate the arrangement of the following words in a logical and meaningful order.

- 1. Consuming
- 2. Crop cutting
- 3. Seed sowing
- 4. Selling
- 5. Irrigation

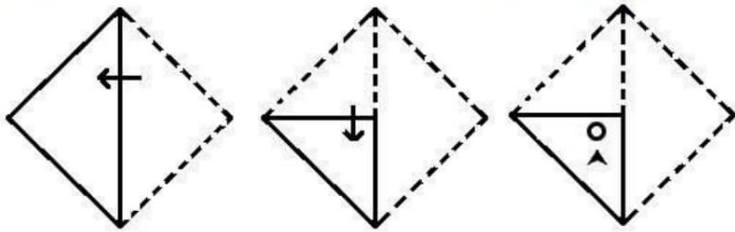
- Ans
- 1. 3, 5, 4, 1, 2
 - 2. 4, 1, 3, 2, 5
 - 3. 3, 2, 5, 4, 1
 - 4. 3, 5, 2, 4, 1

Question ID : 6549785599

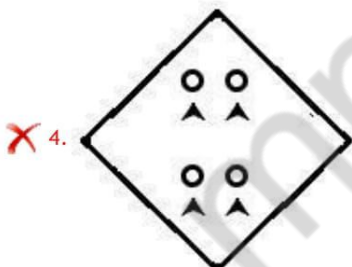
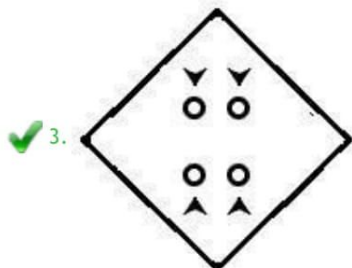
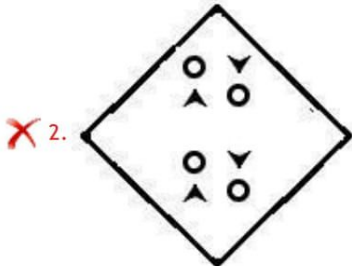
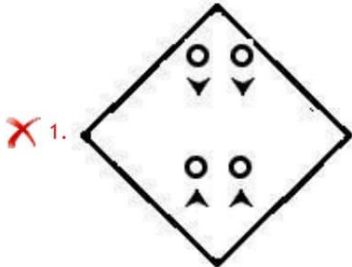
Status : Answered

Chosen Option : 4

Q.15 A paper is folded and cut as shown below. How will it appear when unfolded?



Ans



Question ID : 6549785642
Status : Answered
Chosen Option : 3

Q.16 Select the number that is related to the third number in the same way as the second number is related to the first number.

65 : 30 :: 78 : ?

- Ans
- 1. 56
 - 2. 50
 - 3. 24
 - 4. 51

Question ID : 6549785628

Status : Answered

Chosen Option : 3

Q.17 Select the numbers that will replace the question marks (?) in the following series.

35, 34, 42, 36, 50, 40, ?, ?, 69, 54

- Ans
- 1. 56, 42
 - 2. 59, 46
 - 3. 42, 48
 - 4. 55, 45

Question ID : 6549785622

Status : Answered

Chosen Option : 2

Q.18 Among eight houses A, B, C, D, E, F, G and H, four houses are situated at the corners of a square-shaped garden. The remaining four houses are situated in the middle of each side of the square. All houses face the centre of the square. B is between A and H. F is to the immediate left of G. D is to immediate left of C, which is to the immediate left of F. B and F are in the middle of the two sides facing each other. D is not adjacent to H. Which four houses are situated at the corners?

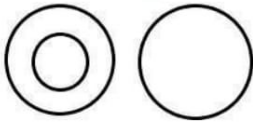
- Ans
- 1. A, D, G and H
 - 2. A, C, G and H
 - 3. C, D, E and G
 - 4. A, C, D and G

Question ID : 6549785613

Status : NotAnswered

Chosen Option : --

Q.19 The venn diagram below best represents the relationship among which of the classes given in options?



- Ans 1.
 2.
 3.
 4.

Question ID : 6549785645
Status : Answered
Chosen Option : 1

Q.20

- Ans 1.
 2.
 3.
 4.

Question ID : 6549785632
Status : Answered
Chosen Option : 2

Q.21

- Ans 1.
 2.
 3.
 4.

Question ID : 6549785629
Status : Answered
Chosen Option : 1

Q.22

- Ans 1.
 2.
 3.
 4.

Question ID : 6549785612
Status : Answered
Chosen Option : 1

Q.23

- Ans
- 1.
 - 2.
 - 3.
 - 4.

Question ID : 6549785596
Status : Answered
Chosen Option : 4

Q.24

- Ans
- 1.
 - 2.
 - 3.
 - 4.

Question ID : 6549785636
Status : Answered
Chosen Option : 4

Q.25

- Ans
- 1.
 - 2.
 - 3.
 - 4.

Question ID : 6549785623
Status : NotAnswered
Chosen Option : --

Q.26

- Ans
- 1.
 - 2.
 - 3.
 - 4.

Question ID : 6549785597
Status : Answered
Chosen Option : 1

Q.27

- Ans
- 1.
 - 2.
 - 3.
 - 4.

Question ID : 6549785616
Status : NotAnswered
Chosen Option :--

Q.28

- Ans
- 1.
 - 2.
 - 3.
 - 4.

Question ID : 6549785611
Status : NotAnswered
Chosen Option :--

Q.29

- Ans
- 1.
 - 2.
 - 3.
 - 4.

Question ID : 6549785627
Status : NotAnswered
Chosen Option :--

Q.30

- Ans
- 1.
 - 2.
 - 3.
 - 4.

Question ID : 6549785631
Status : Answered
Chosen Option : 1

Q.31

- Ans
- 1.
 - 2.
 - 3.
 - 4.

Question ID : 6549785643
Status : Answered
Chosen Option : 2

Q.32

- Ans
- 1.
 - 2.
 - 3.
 - 4.

Question ID : 6549785620
Status : Answered
Chosen Option : 4

Q.33

- Ans
- 1.
 - 2.
 - 3.
 - 4.

Question ID : 6549785630
Status : NotAnswered
Chosen Option : --

Q.34

- Ans
- 1.
 - 2.
 - 3.
 - 4.

Question ID : 6549785625
Status : Answered
Chosen Option : 1

Q.35

- Ans
- 1.
 - 2.
 - 3.
 - 4.

Question ID : 6549785617
Status : Answered
Chosen Option : 2

Q.36

- Ans
- 1.
 - 2.
 - 3.
 - 4.

Question ID : 6549785606
Status : Answered
Chosen Option : 2

Q.37

- Ans
- 1.
 - 2.
 - 3.
 - 4.

Question ID : 6549785619
Status : Answered
Chosen Option : 2

Q.38

- Ans
- 1.
 - 2.
 - 3.
 - 4.

Question ID : 6549785600
Status : Answered
Chosen Option : 1

Q.39

- Ans
- 1.
 - 2.
 - 3.
 - 4.

Question ID : 6549785626
Status : Not Answered
Chosen Option : --

Q.40

- Ans
- 1.
 - 2.
 - 3.
 - 4.

Question ID : 6549785640
Status : Not Answered
Chosen Option : --

Q.41

- Ans
- 1.
 - 2.
 - 3.
 - 4.

Question ID : 6549785602
Status : Answered
Chosen Option : 4

Q.42

- Ans
- 1.
 - 2.
 - 3.
 - 4.

Question ID : 6549785607
Status : Answered
Chosen Option : 1

Q.43

- Ans
- 1.
 - 2.
 - 3.
 - 4.

Question ID : 6549785621
Status : NotAnswered
Chosen Option : --

Q.44

- Ans
- 1.
 - 2.
 - 3.
 - 4.

Question ID : 6549785603
Status : Answered
Chosen Option : 1

Q.45

- Ans
- 1.
 - 2.
 - 3.
 - 4.

Question ID : 6549785605
Status : Answered
Chosen Option : 1

Q.46

- Ans
- 1.
 - 2.
 - 3.
 - 4.

Question ID : 6549785633
Status : NotAnswered
Chosen Option : --

Q.47

- Ans 1.
 2.
 3.
 4.

Question ID : 6549785624
Status : NotAnswered
Chosen Option :--

Q.48

- Ans 1.
 2.
 3.
 4.

Question ID : 6549785634
Status : NotAnswered
Chosen Option :--

Q.49

- Ans 1.
 2.
 3.
 4.

Question ID : 6549785644
Status : Answered
Chosen Option : 2

Q.50

- Ans 1.
 2.
 3.
 4.

Question ID : 6549785614
Status : NotAnswered
Chosen Option :--

1. The longest natural beach in the world, Cox's Bazar, is in _____.

- Ans
- 1. ~~Lanka~~
 - 2. Bangladesh
 - 3. Nepal
 - 4. India

Question ID : 6549785670
Status : Answered
Chosen Option : 1

2. Mughal Emperor _____ permitted the English East India Company to establish their factory in 1613 at Surat.

- Ans
- 1. Jahangir
 - 2. Akbar
 - 3. Babur
 - 4. Aurangzeb

Question ID : 6549785672
Status : Answered
Chosen Option : 1

3. Which of the following films won the Oscar for Best Picture at the 92nd Academy Awards?

- Ans
- 1. Parasite
 - 2. Once Upon a Time in Hollywood
 - 3. Joker
 - 4. Marriage Story

Question ID : 6549785679
Status : Answered
Chosen Option : 1

Q.4 The bones of the _____ include the humerus, radius, ulna, carpals and metacarpals.

- Ans
- 1. forelimb / upper limb
 - 2. pelvic girdle
 - 3. vertebral column
 - 4. hindlimb / lower limb

Question ID : 6549785658
Status : Not Answered
Chosen Option : --

Q.5 In which year did Mahatma Gandhi give a call for a satyagraha against the Rowlatt Act that the British had passed?

- Ans
- 1. 1905
 - 2. 1919
 - 3. 1911
 - 4. 1915

Question ID : 6549785674
Status : Answered
Chosen Option : 2

Q.6 The Shyok, the Gilgit and the Zaskar are major tributaries of the _____.

- Ans
- 1. Brahmaputra River
 - 2. Indus River
 - 3. Mahanadi River
 - 4. Godavari River

Question ID : 6549785667
Status : Answered
Chosen Option : 1

Q.7 Who among the following persons climbed Mount Everest for a record 24th time in May 2019?

- Ans
- 1. Pem Dorjee Sherpa
 - 2. Ang Dorje Sherpa
 - 3. Babu Chiri Sherpa
 - 4. Nepalese Sherpa

Question ID : 6549785680
Status : Not Answered
Chosen Option : --

Q.8 When was the Right to Education Act (RTE) enacted by the Parliament of India?

- Ans
- 1. 2 January 2010
 - 2. 2 August 2005
 - 3. 4 August 2009
 - 4. 20 January 2011

Question ID : 6549785690
Status : Answered
Chosen Option : 2

Q.9 'An Autobiography: Toward Freedom' was written by _____.

- Ans
- 1. Subhas Chandra Bose
 - 2. Anne Besant
 - 3. Jawaharlal Nehru
 - 4. BR Ambedkar

Question ID : 6549785682
Status : Not Answered
Chosen Option : --

Q.10 Octopuses have _____ heart(s).

- Ans
- 1. three
 - 2. four
 - 3. two
 - 4. one

Question ID : 6549785660
Status : Not Attempted and
Marked For Review
Chosen Option : --

Q.11 Present day Kolkata was formed by the amalgamation of three villages – Kalikata, Gobindapur and _____, in 1690.

- Ans
- 1. Samsing
 - 2. Bakkhali
 - 3. Rimick
 - 4. Sutanuti

Question ID : 6549785676
Status : Not Answered
Chosen Option : --

Q.12 The Sudarshana lake in _____ was an artificial reservoir built during the rule of the Mauryas.

- Ans
- 1. Tamil Nadu
 - 2. Gujarat
 - 3. Karnataka
 - 4. Rajasthan

Question ID : 6549785666
Status : Answered
Chosen Option : 4

Q. 13 Part _____ of the Constitution of India deals with Official Language.

- Ans
- 1. XIV
 - 2. XVII
 - 3. X
 - 4. XII

Question ID : 6549785688
Status : Not Answered
Chosen Option : --

Q. 14 Which of the following statements is NOT true regarding capital expenditure(s)?

- Ans
- 1. Capital expenditure is incurred to acquire fixed assets for operation of business.
 - 2. Capital expenditure is transferred to trading and profit and loss account.
 - 3. Capital expenditure benefits more than one accounting year.
 - 4. Capital expenditures are spread over more than one accounting period.

Question ID : 6549785655
Status : Not Answered
Chosen Option : --

Q. 15 'Anything But Khamosh' is a biography of _____.

- Ans
- 1. Shatrughan Sinha
 - 2. Amitabh Bachchan
 - 3. Vivek Oberoi
 - 4. Salman Khan

Question ID : 6549785678
Status : Answered
Chosen Option : 1

Q. 16 _____ won the award for Best Cinematography at the 65th Filmfare Awards, 2020.

- Ans
- 1. Pankaj Kumar
 - 2. Jay Oza
 - 3. Ewan Mulligan
 - 4. Anuj Dhawan

Question ID : 6549785685
Status : Not Answered
Chosen Option : --

Q. 17 The National Dairy Development Board Act came into effect in the year _____.

- Ans
- 1. 1963
 - 2. 1987
 - 3. 1978
 - 4. 1956

Question ID : 6549785687
Status : Not Answered
Chosen Option : --

Q. 18 The chemical formula of _____ is C.

- Ans
- 1. topaz
 - 2. opal
 - 3. agate
 - 4. diamond

Question ID : 6549785669
Status : Not Answered
Chosen Option : --

Q. 19 _____ was the Chairman of the first Finance Commission of India.

- Ans
- 1. YB Chavan
 - 2. PV Rajamannar
 - 3. KC Neogy
 - 4. AK Chanda

Question ID : 6549785691
Status : Answered
Chosen Option : 3

Q. 20 The opening words of the Preamble to the Constitution of India are borrowed from the Constitution of _____.

- Ans
- 1. United States of America
 - 2. Union of Soviet Socialist Republics
 - 3. France
 - 4. Ireland

Question ID : 6549785686
Status : Not Attempted and Marked For Review
Chosen Option : --